

**Constable GD in Central Armed Police Forces CAPFs SSF Rifleman GD in Assam Rifles Examination 2024**

Roll Number	
Candidate Name	
Venue Name	
Exam Date	24/02/2024
Exam Time	2:30 PM - 3:30 PM
Subject	Constable GD Examination 2024

## Section : Part-A-General Intelligence and Reasoning

**Q.1** Select the option that is related to the fifth word in the same way as the fourth word is related to the third word and the second word is related to the first word.

Taj Mahal : Agra :: India Gate : New Delhi :: Gateway Of India : ?

Ans

1. Mumbai  
 2. Chennai  
 3. Amritsar  
 4. Bangalore

Question ID : 264330188043

Option 1 ID : 264330736101

Option 2 ID : 264330736103

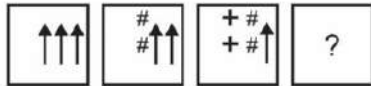
Option 3 ID : 264330736100

Option 4 ID : 264330736102

Status : Answered

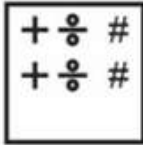
Chosen Option : 1

**Q.2** In the following question, select the figure which can be placed at the sign of question mark (?) from the given alternatives.




**Ans**

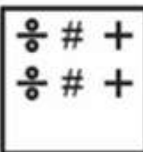
1.



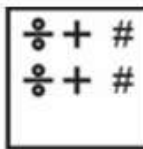
2.



3.



4.



Question ID : 264330191363

Option 1 ID : 264330748806

Option 2 ID : 264330748809

Option 3 ID : 264330748807

Option 4 ID : 264330748808

Status : Answered

Chosen Option : 4

**Q.3** In the following question, select the related letters from the given alternatives.

TWZ : SVY :: GJM : ?

**Ans**

1. FIL

2. ZUY

3. XZX

4. ULM

Question ID : 264330190330

Option 1 ID : 264330744903

Option 2 ID : 264330744904

Option 3 ID : 264330744902

Option 4 ID : 264330744905

Status : Answered

Chosen Option : 1

**Q.4** P, Q, R, S, T, U and V are sitting in a row facing North. U is to the immediate right of T. T is fourth to the right of V. R is the neighbour of Q and S. Person who is third to the left of S is at one of ends. Who is sitting on the immediate left of S?

- Ans**
- 1. R
  - 2. Q
  - 3. V
  - 4. T

Question ID : 264330187447  
 Option 1 ID : 264330733719  
 Option 2 ID : 264330733718  
 Option 3 ID : 264330733716  
 Option 4 ID : 264330733717  
 Status : Answered  
 Chosen Option : 1

**Q.5** If  $15A6B2C10 = 170$  and  $8A5B4C50 = 110$ , then  $4A2B3C5 = ?$

- Ans**
- 1. 35
  - 2. 30
  - 3. 40
  - 4. 19

Question ID : 264330188033  
 Option 1 ID : 264330736063  
 Option 2 ID : 264330736060  
 Option 3 ID : 264330736062  
 Option 4 ID : 264330736061  
 Status : Answered  
 Chosen Option : 2

**Q.6** By interchanging which two signs and two numbers the equation will be correct?

$$8 - 9 \times 4 \div 6 + 7 = 5$$

- Ans**
- 1.  $\times$  and  $\div$ , 6 and 7
  - 2.  $\div$  and  $+$ , 8 and 7
  - 3.  $+$  and  $-$ , 9 and 6
  - 4.  $+$  and  $-$ , 8 and 7

Question ID : 264330190140  
 Option 1 ID : 264330744144  
 Option 2 ID : 264330744145  
 Option 3 ID : 264330744142  
 Option 4 ID : 264330744143  
 Status : Answered  
 Chosen Option : 4

Q.7 Which of the following letter will replace the question mark (?) in the given series?

J, E, A, X, V, ?

Ans  1. U

2. R

3. S

4. T

Question ID : 264330192068

Option 1 ID : 264330751626

Option 2 ID : 264330751629

Option 3 ID : 264330751628

Option 4 ID : 264330751627

Status : Answered

Chosen Option : 1

Q.8 Three Statements are given followed by two conclusions numbered I and II. Assuming the statements to be true, even if they seem to be at variance with commonly known facts, decide which of the conclusions logically follow(s) from the statements.

Statement I: All bicycles are wheels.

Statement II: Some wheels are rubber.

Statement III: No rubber is plastic.

Conclusion I: Some wheels are bicycles.

Conclusion II: Some wheels are plastics.

Ans  1. Both conclusions I and II follow

2. Neither conclusion I nor II follows

3. Only conclusion II follows

4. Only conclusion I follows

Question ID : 264330190717

Option 1 ID : 264330746300

Option 2 ID : 264330746301

Option 3 ID : 264330746299

Option 4 ID : 264330746298

Status : Answered

Chosen Option : 4

- Q.9 'E × F' means 'E is the wife of F'  
'E + F' means 'E is the brother of F'  
'E ÷ F' means 'E is the husband of F'  
'E - F' means 'E is the son of F'  
How is J related to H in the expression 'G × H + I - J ÷ K'?

- Ans  1. Father's father  
 2. Father  
 3. Son  
 4. Husband

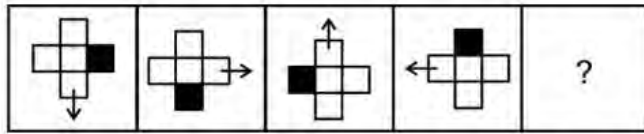
Question ID : 264330191114  
Option 1 ID : 264330747813  
Option 2 ID : 264330747811  
Option 3 ID : 264330747810  
Option 4 ID : 264330747812  
Status : Answered  
Chosen Option : 3

- Q.10 Which of the following numbers will replace the question mark (?) in the given series?  
9, 15, 27, 33, 45, ?

- Ans  1. 51  
 2. 49  
 3. 57  
 4. 63

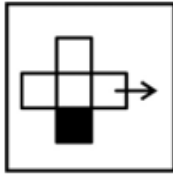
Question ID : 264330192079  
Option 1 ID : 264330751671  
Option 2 ID : 264330751670  
Option 3 ID : 264330751672  
Option 4 ID : 264330751673  
Status : Answered  
Chosen Option : 1

Q.11 Select the figure that will replace the question mark (?) in the following figure series.

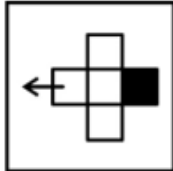


Ans

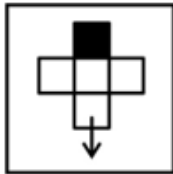
1.



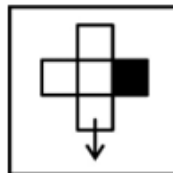
2.



3.



4.



Question ID : 264330192144

Option 1 ID : 264330751932

Option 2 ID : 264330751933

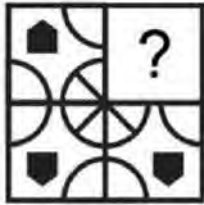
Option 3 ID : 264330751930

Option 4 ID : 264330751931

Status : Answered

Chosen Option : 4

**Q.12** Which answer figure will complete the pattern in the question figure? (rotation is NOT allowed)



**Ans**

1.



2.



3.



4.



Question ID : 264330187137

Option 1 ID : 264330732476

Option 2 ID : 264330732478

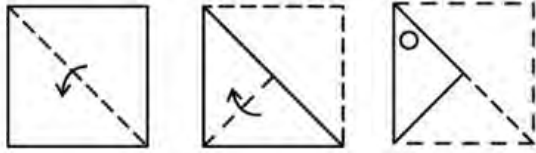
Option 3 ID : 264330732477

Option 4 ID : 264330732479

Status : Answered

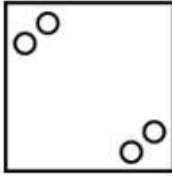
Chosen Option : 3

**Q.13** A paper is folded and cut as shown below. How will it appear when unfolded?

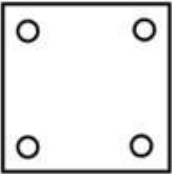


Ans

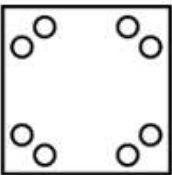
✓ 1.



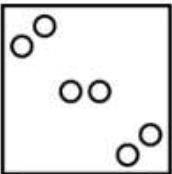
✗ 2.



✗ 3.



✗ 4.



Question ID : 264330188058

Option 1 ID : 264330736162

Option 2 ID : 264330736163

Option 3 ID : 264330736161

Option 4 ID : 264330736160

Status : Answered

Chosen Option : 1

**Q.14** In a certain code language, 'VOCAL' is coded as '90327', 'WAVES' is coded as '31758', 'VOTED' is coded as '42631'. What is the code for 'E' in that code language?

Ans ✗ 1. 7

✗ 2. 3

✓ 3. 1

✗ 4. 5

Question ID : 264330187425

Option 1 ID : 264330733630

Option 2 ID : 264330733629

Option 3 ID : 264330733628

Option 4 ID : 264330733631

Status : Answered

Chosen Option : 2



**Q.15** In a certain code language, if PERJURY is coded as '108', DECEPTION is coded as '86', then what will 'WITNESS' be coded as?

- Ans**
- 1. 104
  - 2. 109
  - 3. 92
  - 4. 85

Question ID : 264330188044

Option 1 ID : 264330736106

Option 2 ID : 264330736107

Option 3 ID : 264330736105

Option 4 ID : 264330736104

Status : Answered

Chosen Option : 1

**Q.16** Arrange the given words in alphabetical order:

1. Tender
2. Thankful
3. Tactful
4. Tablespoon
5. Tasty

- Ans**
- 1. 4,5,2,1,3
  - 2. 4,3,5,2,1
  - 3. 4,3,5,1,2
  - 4. 4,1,5,2,3

Question ID : 264330192370

Option 1 ID : 264330752836

Option 2 ID : 264330752837

Option 3 ID : 264330752835

Option 4 ID : 264330752834

Status : Answered

Chosen Option : 3

**Q.17** In the following question, select the missing number from the given series.

40, 21, 22, 34, 69, ?

- Ans**
- 1. 180
  - 2. 145.5
  - 3. 173
  - 4. 173.5

Question ID : 264330187151

Option 1 ID : 264330732535

Option 2 ID : 264330732534

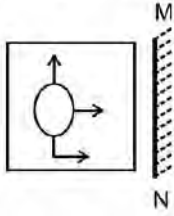
Option 3 ID : 264330732533

Option 4 ID : 264330732532

Status : Answered

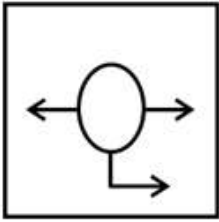
Chosen Option : 4

Q.18 Select the correct mirror image of the given figure when the mirror MN is placed to the right side of the figure.

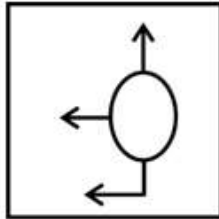


Ans

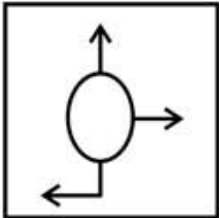
✗ 1.



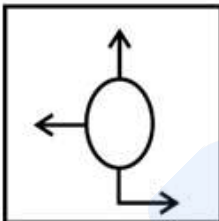
✓ 2.



✗ 3.



✗ 4.



Question ID : 264330192186

Option 1 ID : 264330752101

Option 2 ID : 264330752099

Option 3 ID : 264330752100

Option 4 ID : 264330752098

Status : Answered

Chosen Option : 2

**Q.19** Six students Aarav, Bhavya, Chetan, Diya, Esha, and Farhan are sitting in a circle facing the center.

Bhavya sits to the immediate right of Aarav. Diya is not sitting next to Aarav or Farhan. Esha, who is sitting to the immediate left of Farhan, is also sitting to the immediate right of Chetan. Who is the immediate neighbour of both Diya and Esha?

- Ans**
- 1. Aarav
  - 2. Chetan
  - 3. Bhavya
  - 4. Farhan

Question ID : 264330192117  
Option 1 ID : 264330751822  
Option 2 ID : 264330751823  
Option 3 ID : 264330751824  
Option 4 ID : 264330751825  
Status : Answered  
Chosen Option : 4

**Q.20** Which of the following groups of letters when sequentially placed from left to right will complete the given series?

ghjkg h jkghjkg ijkg hijk hi

- Ans**
- 1. ihgj
  - 2. kijg
  - 3. ihjk
  - 4. ghgh

Question ID : 264330191369  
Option 1 ID : 264330748832  
Option 2 ID : 264330748833  
Option 3 ID : 264330748831  
Option 4 ID : 264330748830  
Status : Answered  
Chosen Option : 1

Section : Part-B-General Knowledge and General awareness

**Q.1** Which of the following dancers of India won the Sangeet Natak Akademi Award for Folk and Tribal dance in the year 2018?

- Ans**
- 1. Arjun Singh Dhurwey
  - 2. Dr. Aruna Mohanty
  - 3. Tapan Kumar Pattanayak
  - 4. Gopika Varma

Question ID : 264330191219  
Option 1 ID : 264330748233  
Option 2 ID : 264330748231  
Option 3 ID : 264330748230  
Option 4 ID : 264330748232  
Status : Answered  
Chosen Option : 2

Q.2 Right to property is a \_\_\_\_\_ under the Constitution of India.

- Ans
- 1. Fundamental Right
  - 2. Directive Principle
  - 3. Constitutional Right
  - 4. Non Constitutional Right

Question ID : 264330191440  
Option 1 ID : 264330749114  
Option 2 ID : 264330749116  
Option 3 ID : 264330749117  
Option 4 ID : 264330749115  
Status : Answered  
Chosen Option : 4

Q.3 Who renounced his knighthood on learning the Jallianwala Bagh massacre?

- Ans
- 1. Lala Lajpat Rai
  - 2. Subhas Chandra Bose
  - 3. Rabindranath Tagore
  - 4. Mahatma Gandhi

Question ID : 264330190636  
Option 1 ID : 264330746128  
Option 2 ID : 264330746129  
Option 3 ID : 264330746127  
Option 4 ID : 264330746126  
Status : Answered  
Chosen Option : 1

Q.4 India's southern neighbours across the sea consist of the \_\_\_\_\_ island countries.

- Ans
- 1. two
  - 2. four
  - 3. five
  - 4. three

Question ID : 264330191455  
Option 1 ID : 264330749174  
Option 2 ID : 264330749177  
Option 3 ID : 264330749176  
Option 4 ID : 264330749175  
Status : Answered  
Chosen Option : 1

Q.5 Which type of expenditure refers to expenses that do not lead to the creation of physical or financial assets?

- Ans
- 1. Development Expenditure
  - 2. Revenue Expenditure
  - 3. Fiscal Expenditure
  - 4. Capital Expenditure

Question ID : 264330191305

Option 1 ID : 264330748577

Option 2 ID : 264330748574

Option 3 ID : 264330748576

Option 4 ID : 264330748575

Status : Answered

Chosen Option : 2

Q.6 Hockey India, under the Ministry of \_\_\_\_\_, is the governing body responsible for planning and implementing all activities related to men's and women's hockey in India.

- Ans
- 1. Child Development
  - 2. Games
  - 3. Education
  - 4. Youth Affairs and Sports

Question ID : 264330191824

Option 1 ID : 264330750652

Option 2 ID : 264330750650

Option 3 ID : 264330750653

Option 4 ID : 264330750651

Status : Answered

Chosen Option : 4

Q.7 \_\_\_\_\_ remained the mainstay of the Green Revolution for years in India.

- Ans
- 1. Pulses
  - 2. Cotton
  - 3. Wheat
  - 4. Leafy Vegetable

Question ID : 264330191866

Option 1 ID : 264330750818

Option 2 ID : 264330750821

Option 3 ID : 264330750820

Option 4 ID : 264330750819

Status : Answered

Chosen Option : 3

Q.8 Kapt Dev lifted the 1983 World Cup (then known as the Prudential Cup '83) in the \_\_\_\_\_ stadium.

- Ans
- 1. Eden Gardens
  - 2. Lord's
  - 3. Holkar
  - 4. Green Park

Question ID : 264330191882  
Option 1 ID : 264330750882  
Option 2 ID : 264330750885  
Option 3 ID : 264330750884  
Option 4 ID : 264330750883  
Status : Answered  
Chosen Option : 2

Q.9 How many horizontal rows are present in the modern periodic table?

- Ans
- 1. 5
  - 2. 9
  - 3. 7
  - 4. 11

Question ID : 264330188877  
Option 1 ID : 264330739310  
Option 2 ID : 264330739312  
Option 3 ID : 264330739311  
Option 4 ID : 264330739313  
Status : Answered  
Chosen Option : 3

Q.10 The Green Revolution significantly increased crop yields and transformed Indian agriculture. What was one of its notable drawbacks?

- Ans
- 1. Environmental degradation
  - 2. Decreased food production
  - 3. Reduced government investment
  - 4. Limited use of chemical fertilizers

Question ID : 264330190986  
Option 1 ID : 264330747301  
Option 2 ID : 264330747298  
Option 3 ID : 264330747300  
Option 4 ID : 264330747299  
Status : Answered  
Chosen Option : 1

Q.11 The Harappans probably got copper from present-day of \_\_\_\_\_.

- Ans
- 1. Tamil Nadu
  - 2. Kerala
  - 3. Odisha
  - 4. Rajasthan

Question ID : 264330191015  
Option 1 ID : 264330747415  
Option 2 ID : 264330747417  
Option 3 ID : 264330747416  
Option 4 ID : 264330747414  
Status : Answered  
Chosen Option : 3

Q.12 Who has been awarded the Global Indian Icon of the Year at the annual UK-India Awards in June, 2023?

- Ans
- 1. M.S. Dhoni
  - 2. Mary Kom
  - 3. Sakshi Malik
  - 4. Sunil Chetri

Question ID : 264330191049  
Option 1 ID : 264330747551  
Option 2 ID : 264330747552  
Option 3 ID : 264330747550  
Option 4 ID : 264330747553  
Status : Answered  
Chosen Option : 2

Q.13 Government in Budget 2023-24 has made announcement of Pradhan Mantri PVTG Development Mission for implementing targeted schemes for socially and economically backward Scheduled tribes. Here PVTGs stands for:

- Ans
- 1. Periodical Vulnerable Tribal Groups
  - 2. Particularly Vulnerable Tribal Groups
  - 3. Periodical Variable Tribal Groups
  - 4. Particularly Variable Tribal Groups

Question ID : 264330191428  
Option 1 ID : 264330749067  
Option 2 ID : 264330749066  
Option 3 ID : 264330749068  
Option 4 ID : 264330749069  
Status : Answered  
Chosen Option : 2

**Q.14** As enshrined in article 168 of Constitution of India, there are two Houses of the Legislature of a State, one shall be known as the \_\_\_\_\_ and the other as the Legislative Assembly.

- Ans**
- 1. Council of States
  - 2. Legislative Council
  - 3. State Council
  - 4. House of the People

Question ID : 264330190900  
Option 1 ID : 264330746957  
Option 2 ID : 264330746955  
Option 3 ID : 264330746956  
Option 4 ID : 264330746954  
Status : Answered  
Chosen Option : 2

**Q.15** Which of the following is capital of People's Republic of China?

- Ans**
- 1. Guangzhou
  - 2. Beijing
  - 3. Shanghai
  - 4. Hangzhou

Question ID : 264330188778  
Option 1 ID : 264330738916  
Option 2 ID : 264330738914  
Option 3 ID : 264330738915  
Option 4 ID : 264330738917  
Status : Answered  
Chosen Option : 2

**Q.16** As on June 2023, the Executive Directors of the World Bank selected Ajay Banga, as the \_\_\_\_\_ President of the World Bank for a five-year term.

- Ans**
- 1. 16th
  - 2. 13th
  - 3. 14th
  - 4. 15th

Question ID : 264330190628  
Option 1 ID : 264330746096  
Option 2 ID : 264330746097  
Option 3 ID : 264330746094  
Option 4 ID : 264330746095  
Status : Answered  
Chosen Option : 1



Q.17 Which city hosted the 2018 Asian games?

- Ans
- 1. Tokyo
  - 2. Hangzhou
  - 3. Jakarta and Palembang
  - 4. Bangkok

Question ID : 264330191041  
Option 1 ID : 264330747520  
Option 2 ID : 264330747518  
Option 3 ID : 264330747519  
Option 4 ID : 264330747521  
Status : Answered  
Chosen Option : 2

Q.18 Which instrument is played by Amjad Ali Khan?

- Ans
- 1. Sarod
  - 2. Sitar
  - 3. Guitar
  - 4. Santoor

Question ID : 264330190837  
Option 1 ID : 264330746702  
Option 2 ID : 264330746703  
Option 3 ID : 264330746704  
Option 4 ID : 264330746705  
Status : Answered  
Chosen Option : 2

Q.19 \_\_\_\_\_ is a storytelling classical dance form from Andhra Pradesh.

- Ans
- 1. Sattriya
  - 2. Kathak
  - 3. Kuchipudi
  - 4. Manipuri

Question ID : 264330190950  
Option 1 ID : 264330747156  
Option 2 ID : 264330747154  
Option 3 ID : 264330747157  
Option 4 ID : 264330747155  
Status : Answered  
Chosen Option : 3

Q.20 Pushkar Camel fair is associated with which of the following states?

- Ans
- 1. Maharashtra
  - 2. Punjab
  - 3. Gujarat
  - 4. Rajasthan

Question ID : 264330188856  
Option 1 ID : 264330739227  
Option 2 ID : 264330739229  
Option 3 ID : 264330739226  
Option 4 ID : 264330739228  
Status : Answered  
Chosen Option : 4

Section : Part-C-Elementary Mathematics

Q.1 In 25 consecutive natural numbers, the average of last 13 numbers is 39. What is the average of all 25 numbers?

- Ans
- 1. 34
  - 2. 37
  - 3. 31
  - 4. 33

Question ID : 264330190092  
Option 1 ID : 264330743953  
Option 2 ID : 264330743950  
Option 3 ID : 264330743952  
Option 4 ID : 264330743951  
Status : Answered  
Chosen Option : 4

Q.2 The length and breadth of a cuboid are increased by 50 percent and 20 percent respectively. If its height is decreased by 30 percent, then what will be percentage increase in the volume of cuboid?

- Ans
- 1. 25 percent
  - 2. 26 percent
  - 3. 20 percent
  - 4. 30 percent

Question ID : 264330187566  
Option 1 ID : 264330734192  
Option 2 ID : 264330734195  
Option 3 ID : 264330734194  
Option 4 ID : 264330734193  
Status : Answered  
Chosen Option : 2

Q.3 What is the Least Common Multiple of 120, 240 and 480?

- Ans
- 1. 240
  - 2. 960
  - 3. 480
  - 4. 1800

Question ID : 264330190089  
Option 1 ID : 264330743938  
Option 2 ID : 264330743941  
Option 3 ID : 264330743939  
Option 4 ID : 264330743940  
Status : Answered  
Chosen Option : 3

Q.4 B1 and B2 together can complete a work in 20 days. B2 alone can complete the same work in 60 days. In how many days B1 alone can complete the same work?

- Ans
- 1. 25 days
  - 2. 10 days
  - 3. 30 days
  - 4. 35 days

Question ID : 264330187496  
Option 1 ID : 264330733914  
Option 2 ID : 264330733912  
Option 3 ID : 264330733913  
Option 4 ID : 264330733915  
Status : Answered  
Chosen Option : 3

Q.5 The difference between cost price and selling price of a watch is Rs. 560. If profit percentage is 35 percent, then what is the selling price?

- Ans
- 1. Rs. 2240
  - 2. Rs. 2200
  - 3. Rs. 2340
  - 4. Rs. 2160

Question ID : 264330187988  
Option 1 ID : 264330735880  
Option 2 ID : 264330735882  
Option 3 ID : 264330735883  
Option 4 ID : 264330735881  
Status : Answered  
Chosen Option : 3

**Q.6** A bus left 60 minutes later than the scheduled time but in order to reach its destination 150 km away in time, it had to increase its usual speed by 5 km/hr. What is the usual speed of the bus?

- Ans**
- 1. 15 km/hr
  - 2. 30 km/hr
  - 3. 25 km/hr
  - 4. 20 km/hr

Question ID : 264330187715  
Option 1 ID : 264330734789  
Option 2 ID : 264330734791  
Option 3 ID : 264330734790  
Option 4 ID : 264330734788  
Status : Answered  
Chosen Option : 2

**Q.7** Find the HCF of  $27/50$ ,  $9/20$ ,  $6/25$  .

- Ans**
- 1.  $68/7$
  - 2.  $47/5$
  - 3.  $56/5$
  - 4.  $3/100$

Question ID : 264330192290  
Option 1 ID : 264330752515  
Option 2 ID : 264330752517  
Option 3 ID : 264330752514  
Option 4 ID : 264330752516  
Status : Answered  
Chosen Option : 3

**Q.8** The average marks of 18 students was 190. But later it was found that the score of one student was wrongly entered as 46 instead of 64. What is the correct average of their score?

- Ans**
- 1. 192.27
  - 2. 191.25
  - 3. 191
  - 4. 193.4

Question ID : 264330187183  
Option 1 ID : 264330732661  
Option 2 ID : 264330732663  
Option 3 ID : 264330732662  
Option 4 ID : 264330732660  
Status : Answered  
Chosen Option : 3

**Q.9** Price of 1 kg of tomato is increased by 120 percent and the increase is of Rs. 720. What is the new price of the tomato per kg?

- Ans**
- 1. Rs. 590
  - 2. Rs. 720
  - 3. Rs. 600
  - 4. Rs. 1320

Question ID : 264330187665  
Option 1 ID : 264330734588  
Option 2 ID : 264330734591  
Option 3 ID : 264330734589  
Option 4 ID : 264330734590  
Status : Answered  
Chosen Option : 4

**Q.10** Find the greatest number which on dividing 60 and 90 leaves remainders 2 and 3 respectively.

- Ans**
- 1. 29
  - 2. 19
  - 3. 17
  - 4. 23

Question ID : 264330191651  
Option 1 ID : 264330749960  
Option 2 ID : 264330749961  
Option 3 ID : 264330749959  
Option 4 ID : 264330749958  
Status : Answered  
Chosen Option : 1

**Q.11** Ramesh earns profit of Rs. 46 by selling an article for Rs. 236. What is the profit percentage?

- Ans**
- 1. 26.66 percent
  - 2. 27.27 percent
  - 3. 24.21 percent
  - 4. 30.03 percent

Question ID : 264330187667  
Option 1 ID : 264330734597  
Option 2 ID : 264330734598  
Option 3 ID : 264330734596  
Option 4 ID : 264330734599  
Status : Answered  
Chosen Option : 3

**Q.12** What is that rate of simple interest at which a sum of money becomes three times of itself in 24 years?

- Ans
- 1. 10.28 percent
  - 2. 8.68 percent
  - 3. 8.33 percent
  - 4. 9.28 percent

Question ID : 264330187853  
Option 1 ID : 264330735342  
Option 2 ID : 264330735343  
Option 3 ID : 264330735340  
Option 4 ID : 264330735341  
Status : Answered  
Chosen Option : 3

**Q.13** The radius of a hemisphere is 2.1 cm. What will be its volume?

- Ans
- 1. 24.6 cm<sup>3</sup>
  - 2. 15.7 cm<sup>3</sup>
  - 3. 19.4 cm<sup>3</sup>
  - 4. 17.5 cm<sup>3</sup>

Question ID : 264330187558  
Option 1 ID : 264330734162  
Option 2 ID : 264330734163  
Option 3 ID : 264330734160  
Option 4 ID : 264330734161  
Status : Answered  
Chosen Option : 3

**Q.14** The marked price of an article is 250 percent of the cost price. If 50 percent discount is given, then what will be the profit percentage?

- Ans
- 1. 10 percent
  - 2. 20 percent
  - 3. 25 percent
  - 4. 15 percent

Question ID : 264330190378  
Option 1 ID : 264330745095  
Option 2 ID : 264330745097  
Option 3 ID : 264330745096  
Option 4 ID : 264330745094  
Status : Answered  
Chosen Option : 3

Q.15

What is the value of  $\frac{2}{1 \times 3} + \frac{2}{3 \times 5} + \frac{2}{5 \times 7} + \dots + \frac{2}{45 \times 47}$  ?

- Ans
- 1. 45/46
  - 2. 46/47
  - 3. 49/50
  - 4. 47/48

Question ID : 264330187542

Option 1 ID : 264330734098

Option 2 ID : 264330734099

Option 3 ID : 264330734096

Option 4 ID : 264330734097

Status : Answered

Chosen Option : 2

Q.16 If  $x : y = 3 : 5$  and  $z : w = 2x : 5y$ , then what is the value of  $xz : yw$ ?

- Ans
- 1. 18 : 75
  - 2. 19 : 75
  - 3. 18 : 125
  - 4. 18 : 65

Question ID : 264330187752

Option 1 ID : 264330734937

Option 2 ID : 264330734939

Option 3 ID : 264330734938

Option 4 ID : 264330734936

Status : Answered

Chosen Option : 3

Q.17 A principal is lent at a certain rate of compound interest (compounding annually). The amount at the end of 3 years is Rs. 13310 and at the end of 4 years is Rs. 14641. What is the principal?

- Ans
- 1. Rs. 10700
  - 2. Rs. 12200
  - 3. Rs. 14500
  - 4. Rs. 10000

Question ID : 264330188547

Option 1 ID : 264330737993

Option 2 ID : 264330737992

Option 3 ID : 264330737990

Option 4 ID : 264330737991

Status : Answered

Chosen Option : 4

**Q.18** The ratio of incomes of Anil and Vikas is 8 : 5. If Vikas gets Rs. 3000 less than Anil, then what is the total income of Anil and Vikas?

- Ans**
- 1. Rs. 5000
  - 2. Rs. 13000
  - 3. Rs. 8000
  - 4. Rs. 14000

Question ID : 264330187611

Option 1 ID : 264330734373

Option 2 ID : 264330734375

Option 3 ID : 264330734372

Option 4 ID : 264330734374

Status : Answered

Chosen Option : 2

**Q.19** After working for 8 days, Payal finds that only 10 percent of the work is completed. She employs Pinky who is 50 percent more efficient than Payal. How many more days will they together take to complete the remaining work?

- Ans**
- 1. 28.8 days
  - 2. 27 days
  - 3. 25 days
  - 4. 30 days

Question ID : 264330188590

Option 1 ID : 264330738162

Option 2 ID : 264330738165

Option 3 ID : 264330738164

Option 4 ID : 264330738163

Status : Answered

Chosen Option : 2

**Q.20** What is the discount percentage offered on a book having marked price Rs. 3800 being sold at Rs. 2128?

- Ans**
- 1. 44 percent
  - 2. 45 percent
  - 3. 50 percent
  - 4. 56 percent

Question ID : 264330187969

Option 1 ID : 264330735804

Option 2 ID : 264330735807

Option 3 ID : 264330735806

Option 4 ID : 264330735805

Status : Answered

Chosen Option : 1



Q.1 Choose the word that is opposite in meaning to the given word.

“Tame”

- Ans
- 1. Wild
  - 2. Revisit
  - 3. Fealty
  - 4. Paradigm

Question ID : 264330185575  
Option 1 ID : 264330726672  
Option 2 ID : 264330726673  
Option 3 ID : 264330726674  
Option 4 ID : 264330726675  
Status : Not Answered  
Chosen Option : --

Q.2 Select the incorrectly spelt word from the given sentence.

Though this is undoubtedly the greatest dictionary ever assembled, it is not designed for lexical analyser.

- Ans
- 1. Though
  - 2. undoubtedly
  - 3. designed
  - 4. dictionary

Question ID : 264330185957  
Option 1 ID : 264330728128  
Option 2 ID : 264330728129  
Option 3 ID : 264330728131  
Option 4 ID : 264330728130  
Status : Not Answered  
Chosen Option : --

Q.3 Select the most appropriate antonym of the given word.

Accusation

- Ans
- 1. Indictment
  - 2. Approval
  - 3. Blast
  - 4. Renumeration

Question ID : 264330186837  
Option 1 ID : 264330731481  
Option 2 ID : 264330731480  
Option 3 ID : 264330731482  
Option 4 ID : 264330731483  
Status : Not Answered  
Chosen Option : --

Q.4 Choose the word that means the same as the given word.

Attack

- Ans
- 1. Assault
  - 2. Perform
  - 3. Bowl
  - 4. Dwindle

Question ID : 264330186057  
Option 1 ID : 264330728509  
Option 2 ID : 264330728511  
Option 3 ID : 264330728508  
Option 4 ID : 264330728510  
Status : Not Answered  
Chosen Option : --

Q.5 Select the most appropriate meaning of the given idiom

Between a rock and a hard place

- Ans
- 1. On the point of achievement
  - 2. Stuck between two very bad options
  - 3. Willing to do anything
  - 4. Avoiding the main topic, not speaking directly about the issue

Question ID : 264330186440  
Option 1 ID : 264330729969  
Option 2 ID : 264330729970  
Option 3 ID : 264330729968  
Option 4 ID : 264330729971  
Status : Not Answered  
Chosen Option : --

Q.6 Select the word segment that substitutes (replaces) the bracketed word segment correctly and completes the sentence meaningfully. Select the option 'no correction required' if the sentence is correct as given.

(On our reach at Denmark), we found the king and queen of that country elevated in two arm-chairs.

- Ans
- 1. On our arrival in Denmark
  - 2. On our approach at Denmark
  - 3. No correction required
  - 4. On our rival in Denmark

Question ID : 264330186573  
Option 1 ID : 264330730476  
Option 2 ID : 264330730478  
Option 3 ID : 264330730479  
Option 4 ID : 264330730477  
Status : Not Answered  
Chosen Option : --

Q.7 Select the sentence with no spelling errors.

- Ans
- 1. This can impact negatively on family baunds.
  - 2. This can impaact negatively on family bonds.
  - 3. This can impact negatively on family bonds.
  - 4. This can impact negatively on family bonds.

Question ID : 264330186694  
Option 1 ID : 264330730939  
Option 2 ID : 264330730937  
Option 3 ID : 264330730938  
Option 4 ID : 264330730936  
Status : Not Answered  
Chosen Option : --

Q.8 Identify the segment that contains a grammatical error. If there is no error, select 'No error'.

Running into Sonya's room and not finding her there, / Natasha ran to the nursery, / but Sonya was not there either.

- Ans
- 1. No error
  - 2. but Sonya was not there either.
  - 3. Running into Sonya's room and not finding her there,
  - 4. Natasha ran to the nursery,

Question ID : 264330186866  
Option 1 ID : 264330731595  
Option 2 ID : 264330731594  
Option 3 ID : 264330731592  
Option 4 ID : 264330731593  
Status : Not Answered  
Chosen Option : --

Q.9 Find the part of the given sentence that has an error in it. If there is no error, choose 'No error'.

No one may deny that Angelina was a devoted wife and mother.

- Ans
- 1. No error
  - 2. devoted wife and mother.
  - 3. that Angelina was a
  - 4. No one may deny

Question ID : 264330185981  
Option 1 ID : 264330728223  
Option 2 ID : 264330728222  
Option 3 ID : 264330728221  
Option 4 ID : 264330728220  
Status : Not Answered  
Chosen Option : --

**Q.10** Find the part of the given sentence that has an error in it. If there is no error, choose 'No error'.

Supriya has much prettier face than Shilpa in our class.

**Ans**  1. Supriya has much prettier

2. No error

3. Shilpa in our class.

4. face than

Question ID : 264330185982

Option 1 ID : 264330728224

Option 2 ID : 264330728227

Option 3 ID : 264330728226

Option 4 ID : 264330728225

Status : Not Answered

Chosen Option : --

**Q.11** Select the most appropriate word to fill in the blank.

The glass broke \_\_\_\_\_ pieces.

**Ans**  1. at

2. into

3. on

4. over

Question ID : 264330186197

Option 1 ID : 264330729047

Option 2 ID : 264330729046

Option 3 ID : 264330729045

Option 4 ID : 264330729044

Status : Not Answered

Chosen Option : --

**Q.12** Fill in the blank with the most appropriate option.

Of course it is. They just set around \_\_\_\_\_, maybe, when there's a war.

**Ans**  1. expect

2. except

3. assent

4. accept

Question ID : 264330186926

Option 1 ID : 264330731821

Option 2 ID : 264330731823

Option 3 ID : 264330731822

Option 4 ID : 264330731820

Status : Not Answered

Chosen Option : --

**Q.13** In the following question, out of the given four alternatives, select the alternative which best expresses the meaning of the Idiom/Phrase.

Once in a blue moon

- Ans**
- 1. Every time
  - 2. Very rarely
  - 3. Out of nowhere
  - 4. To see a moon

Question ID : 264330186670  
Option 1 ID : 264330730846  
Option 2 ID : 264330730844  
Option 3 ID : 264330730845  
Option 4 ID : 264330730847  
Status : Not Answered  
Chosen Option : --

**Q.14** Select the most appropriate word to fill in the blank.

Travel helps you become more broad-minded and you learn something new \_\_\_\_\_ you go.

- Ans**
- 1. whomever
  - 2. another
  - 3. wherever
  - 4. so

Question ID : 264330186113  
Option 1 ID : 264330728725  
Option 2 ID : 264330728726  
Option 3 ID : 264330728727  
Option 4 ID : 264330728724  
Status : Not Answered  
Chosen Option : --

**Q.15** Choose the correct word to complete the sentence:

I think Oka (rind strong-smelling cheese) is a bit too \_\_\_\_\_ for a cheese plate, as it can overpower the other selections.

- Ans**
- 1. insipid
  - 2. bland
  - 3. pungent
  - 4. subtle

Question ID : 264330186471  
Option 1 ID : 264330730090  
Option 2 ID : 264330730089  
Option 3 ID : 264330730088  
Option 4 ID : 264330730091  
Status : Not Answered  
Chosen Option : --

**Comprehension:**

In the following passage some words have been deleted. Fill in the blanks with the help of the alternatives given. Select the most appropriate option for each number.

It was easy for me to find out, and I did soon (1) \_\_\_\_\_ out, that Drummie had begun to follow her (2) \_\_\_\_\_, and that she allowed him to do it. A (3) \_\_\_\_\_ while, and he was always in (4) \_\_\_\_\_ of her, and he and I (5) \_\_\_\_\_ one another every day.

**SubQuestion No : 16**

**Q.16** Select the most appropriate option to fill in the blank No. 1.

- Ans**
- 1. find
  - 2. gaze
  - 3. discover
  - 4. detect

Question ID : 264330186494

Option 1 ID : 264330730172

Option 2 ID : 264330730174

Option 3 ID : 264330730175

Option 4 ID : 264330730173

Status : Not Answered

Chosen Option : --

**Comprehension:**

In the following passage some words have been deleted. Fill in the blanks with the help of the alternatives given. Select the most appropriate option for each number.

It was easy for me to find out, and I did soon (1) \_\_\_\_\_ out, that Drummie had begun to follow her (2) \_\_\_\_\_, and that she allowed him to do it. A (3) \_\_\_\_\_ while, and he was always in (4) \_\_\_\_\_ of her, and he and I (5) \_\_\_\_\_ one another every day.

**SubQuestion No : 17**

**Q.17** Select the most appropriate option to fill in the blank No. 2.

- Ans**
- 1. closely
  - 2. sharpen
  - 3. intended
  - 4. firm

Question ID : 264330186495

Option 1 ID : 264330730177

Option 2 ID : 264330730179

Option 3 ID : 264330730178

Option 4 ID : 264330730176

Status : Not Answered

Chosen Option : --

**Comprehension:**

In the following passage some words have been deleted. Fill in the blanks with the help of the alternatives given. Select the most appropriate option for each number.

It was easy for me to find out, and I did soon (1) \_\_\_\_\_ out, that Drummie had begun to follow her (2) \_\_\_\_\_, and that she allowed him to do it. A (3) \_\_\_\_\_ while, and he was always in (4) \_\_\_\_\_ of her, and he and I (5) \_\_\_\_\_ one another every day.

**SubQuestion No : 18**

**Q.18** Select the most appropriate option to fill in the blank No. 3.

- Ans**
- 1. petty
  - 2. small
  - 3. short
  - 4. little

Question ID : 264330186496

Option 1 ID : 264330730183

Option 2 ID : 264330730180

Option 3 ID : 264330730181

Option 4 ID : 264330730182

Status : Not Answered

Chosen Option : --

**Comprehension:**

In the following passage some words have been deleted. Fill in the blanks with the help of the alternatives given. Select the most appropriate option for each number.

It was easy for me to find out, and I did soon (1) \_\_\_\_\_ out, that Drummie had begun to follow her (2) \_\_\_\_\_, and that she allowed him to do it. A (3) \_\_\_\_\_ while, and he was always in (4) \_\_\_\_\_ of her, and he and I (5) \_\_\_\_\_ one another every day.

**SubQuestion No : 19**

**Q.19** Select the most appropriate option to fill in the blank No. 4.

- Ans**
- 1. perusal
  - 2. quest
  - 3. seeking
  - 4. pursuit

Question ID : 264330186497

Option 1 ID : 264330730184

Option 2 ID : 264330730185

Option 3 ID : 264330730186

Option 4 ID : 264330730187

Status : Not Answered

Chosen Option : --

**Comprehension:**

In the following passage some words have been deleted. Fill in the blanks with the help of the alternatives given. Select the most appropriate option for each number.

It was easy for me to find out, and I did soon (1) \_\_\_\_\_ out, that Drummie had begun to follow her (2) \_\_\_\_\_, and that she allowed him to do it. A (3) \_\_\_\_\_ while, and he was always in (4) \_\_\_\_\_ of her, and he and I (5) \_\_\_\_\_ one another every day.

**SubQuestion No : 20**

**Q.20** Select the most appropriate option to fill in the blank No. 5.

- Ans**
- 1. acrossed
  - 2. crossed
  - 3. meet
  - 4. saw

Question ID : 264330186498

Option 1 ID : 264330730190

Option 2 ID : 264330730188

Option 3 ID : 264330730191

Option 4 ID : 264330730189

Status : Not Answered

Chosen Option : --

Section : Part-D-Hindi

**Q.1** निम्नलिखित प्रश्न में, चार विकल्पों में से, उस विकल्प का चयन करें जो रिक्त स्थान के लिए सही शब्द वाला विकल्प हो।  
मानव एक विवेकशील और \_\_\_\_\_ प्राणी है।

- Ans**
- 1. शील
  - 2. मननशील
  - 3. चिंतनशील
  - 4. मानशील

Question ID : 264330189993

Option 1 ID : 264330743570

Option 2 ID : 264330743571

Option 3 ID : 264330743573

Option 4 ID : 264330743572

Status : Answered

Chosen Option : 4



Q.2 दिए गए वाक्य का वह भाग ज्ञात करें, जिसमें कोई त्रुटि है।  
देवता को एक फूलों की माला अर्पित कर वह वहां से चला गया।

- Ans
- 1. अर्पित कर वह वहां
  - 2. से चला गया।
  - 3. एक फूलों की माला
  - 4. देवता को

Question ID : 264330189142  
Option 1 ID : 264330740332  
Option 2 ID : 264330740333  
Option 3 ID : 264330740331  
Option 4 ID : 264330740330  
Status : Answered  
Chosen Option : 3

Q.3 दिए गए वाक्य में रेखांकित शब्द का विलोम शब्द ज्ञात कीजिए।  
18 से कम उम्र का व्यक्ति बालिग कहलाता है।

- Ans
- 1. जवान
  - 2. नाबालिग
  - 3. बच्चा
  - 4. पुत्री

Question ID : 264330189408  
Option 1 ID : 264330741344  
Option 2 ID : 264330741345  
Option 3 ID : 264330741342  
Option 4 ID : 264330741343  
Status : Answered  
Chosen Option : 2

Q.4 दिए गए वाक्य में रेखांकित शब्दों के लिए सही शब्दों वाले विकल्प का चयन करें।

हत्यारे को मृत्युदंड की सजा मिल गई।

- Ans
- 1. हत्यारे को मृत्युदंडित मिल गया।
  - 2. हत्यारे को दंड की सजा मिल गई।
  - 3. हत्यारे को मृत्युदंड मिल गया।
  - 4. परिवर्तन की आवश्यकता नहीं है।

Question ID : 264330190047  
Option 1 ID : 264330743780  
Option 2 ID : 264330743778  
Option 3 ID : 264330743779  
Option 4 ID : 264330743781  
Status : Answered  
Chosen Option : 3

Q.5 निम्नलिखित प्रश्न में, चार विकल्पों में से, उस विकल्प का चयन करें जो रिक्त स्थान के लिए सही शब्द वाला विकल्प हो।  
अवकाश साल का वो समय है जिसकी \_\_\_\_\_ से पूरे वर्ष प्रतीक्षा की जाती है।

- Ans
- 1. प्रोत्साहन
  - 2. सभी
  - 3. निरुत्साह
  - 4. उत्सुकता

Question ID : 264330188332  
Option 1 ID : 264330737212  
Option 2 ID : 264330737215  
Option 3 ID : 264330737214  
Option 4 ID : 264330737213  
Status : Answered  
Chosen Option : 4

Q.6 दिए गए वाक्य में रेखांकित शब्द के लिए सही वर्तनी ज्ञात कीजिए।

आज ब्याकरण की परीक्षा है।

- Ans
- 1. व्याकरण
  - 2. व्याकरण
  - 3. व्याकरड़
  - 4. व्करण

Question ID : 264330189097  
Option 1 ID : 264330740160  
Option 2 ID : 264330740158  
Option 3 ID : 264330740159  
Option 4 ID : 264330740161  
Status : Answered  
Chosen Option : 1

Q.7 निम्नलिखित प्रश्न में, दिए गए चार विकल्पों में से, उस विकल्प का चयन करें जो दिए गए मुहावरे के अर्थ को सर्वश्रेष्ठ रूप से व्यक्त करता है।

अपनी खिचड़ी अलग पकाना

- Ans
- 1. महामूर्ख होना
  - 2. स्वार्थ सिद्ध करना
  - 3. कुछ समझ न आना
  - 4. किसी की न मानना

Question ID : 264330189031  
Option 1 ID : 264330739907  
Option 2 ID : 264330739908  
Option 3 ID : 264330739909  
Option 4 ID : 264330739906  
Status : Answered  
Chosen Option : 4

Q.8 निम्नलिखित प्रश्न में, चार विकल्पों में से, उस विकल्प का चयन करें जो कोष्ठक में दिए गए शब्द के पर्यायवाची शब्द का सही अर्थ नहीं है।  
सरकार की विभिन्न योजनाओं के कारण कोई भी बच्चा शिक्षा के (अधिकार) \_\_\_\_\_ से वंचित नहीं हो सकता है।

- Ans
- 1. अधिपत्य
  - 2. स्वामित्व
  - 3. पृथक
  - 4. हक

Question ID : 264330189888  
Option 1 ID : 264330743172  
Option 2 ID : 264330743173  
Option 3 ID : 264330743171  
Option 4 ID : 264330743170  
Status : Answered  
Chosen Option : 4

Q.9 दिए गए वाक्य में उचित विदेशी शब्द का चयन करके रिक्त स्थान की पूर्ति कीजिए।

राजू की नौकरी \_\_\_\_\_ पर लगी है।

- Ans
- 1. एतराज
  - 2. हाल
  - 3. अदालत
  - 4. सिफारिश

Question ID : 264330189414  
Option 1 ID : 264330741368  
Option 2 ID : 264330741366  
Option 3 ID : 264330741369  
Option 4 ID : 264330741367  
Status : Answered  
Chosen Option : 4

Q.10 दिए गए वाक्यांश के लिए सार्थक शब्द ज्ञात कीजिए।

जिसे व्याकरण का ज्ञान हो

- Ans
- 1. लेखक
  - 2. वैयाकरण
  - 3. अध्यापक
  - 4. भाष्य

Question ID : 264330192817  
Option 1 ID : 264330754619  
Option 2 ID : 264330754618  
Option 3 ID : 264330754621  
Option 4 ID : 264330754620  
Status : Answered  
Chosen Option : 2

Q.11 दिए गए वाक्य का वह भाग ज्ञात करें, जिसमें कोई त्रुटि है।  
शोक है कि आपने मेरे पत्र का उत्तर नहीं दिया।

- Ans
- 1. उत्तर नहीं दिया
  - 2. शोक है कि
  - 3. पत्र का
  - 4. आपने मेरे

Question ID : 264330188142  
Option 1 ID : 264330736491  
Option 2 ID : 264330736488  
Option 3 ID : 264330736490  
Option 4 ID : 264330736489  
Status : Answered  
Chosen Option : 2

Q.12 निम्नलिखित प्रश्न में, चार विकल्पों में से, उस विकल्प का चयन करें जो कोष्ठक में दिए गए शब्द के विलोम शब्द का सही विकल्प है।  
वह बड़ा ही (निस्तेज) \_\_\_\_\_ बालक है। सभी सदैव उसकी तारीफ करते हैं।

- Ans
- 1. ओजस्वी
  - 2. धीमा
  - 3. कांतिहीन
  - 4. निष्प्रभ

Question ID : 264330189932  
Option 1 ID : 264330743339  
Option 2 ID : 264330743340  
Option 3 ID : 264330743338  
Option 4 ID : 264330743341  
Status : Answered  
Chosen Option : 2

Q.13 दिए गए वाक्य में से निरर्थक शब्द ज्ञात कीजिए।  
हमस नहीं हो जाएगा।

- Ans
- 1. हो
  - 2. नहीं
  - 3. जाएगा
  - 4. हमस

Question ID : 264330190022  
Option 1 ID : 264330743683  
Option 2 ID : 264330743682  
Option 3 ID : 264330743684  
Option 4 ID : 264330743685  
Status : Answered  
Chosen Option : 4

Q.14 निम्नलिखित प्रश्न में, चार विकल्पों में से, उस विकल्प का चयन करें जो दी गई लोकोक्ति का सही अर्थ वाला विकल्प है।  
अस्सी की आमद, चौरासी खर्च

- Ans
- 1. आमदनी से अधिक खर्च
  - 2. मनुष्य को अपने कर्म के अनुसार ही फल मिलता है
  - 3. बेसहारे का सहारा
  - 4. अपनी इज्जत अपने हाथ होती है

Question ID : 264330189998

Option 1 ID : 264330743590

Option 2 ID : 264330743592

Option 3 ID : 264330743593

Option 4 ID : 264330743591

Status : Answered

Chosen Option : 1

Q.15 दिए गए वाक्य में रेखांकित शब्द के लिए सही वर्तनी ज्ञात कीजिए।  
इस कहानी का शीर्षक बताओ।

- Ans
- 1. शीर्षक
  - 2. शीर्षक
  - 3. क्षीर्षक
  - 4. क्षीर्षक

Question ID : 264330188137

Option 1 ID : 264330736471

Option 2 ID : 264330736469

Option 3 ID : 264330736468

Option 4 ID : 264330736470

Status : Answered

Chosen Option : 2

**Comprehension:**

नीचे दिए गए गद्य में कुछ शब्द छोड़ दिए गए हैं और प्रत्येक रिक्त स्थान के चार विकल्प दिए गए हैं। इन चारों में से कौन सा विकल्प रिक्त स्थान की पूर्ति करेगा-

जब हम रोग के कारण के (1)\_\_\_\_\_ में सोचते हैं तब हमें यह याद रखना चाहिए कि इस कारण के बहुत से (2)\_\_\_\_\_ होते हैं। उनमें से एक संक्रमण है जो (3)\_\_\_\_\_ पानी पीने से आता है। बच्चों के लिए साफ पानी (4)\_\_\_\_\_ कराना जरूरी है। (5)\_\_\_\_\_ प्रकार के रोग होने के एक नहीं बल्कि बहुत से कारण होते हैं।

**SubQuestion No : 16**

Q.16 रिक्त 1 के लिए सबसे उपयुक्त विकल्प का चयन कीजिए।

- Ans
- 1. पुस्तक
  - 2. विषय
  - 3. सहायक
  - 4. भूल

Question ID : 264330189377

Option 1 ID : 264330741225

Option 2 ID : 264330741224

Option 3 ID : 264330741222

Option 4 ID : 264330741223

Status : Answered

Chosen Option : 2

**Comprehension:**

नीचे दिए गए गद्य में कुछ शब्द छोड़ दिए गए हैं और प्रत्येक रिक्त स्थान के चार विकल्प दिए गए हैं। इन चारों में से कौन सा विकल्प रिक्त स्थान की पूर्ति करेगा-

जब हम रोग के कारण के (1)\_\_\_\_\_ में सोचते हैं तब हमें यह याद रखना चाहिए कि इस कारण के बहुत से (2)\_\_\_\_\_ होते हैं। उनमें से एक संक्रमण है जो (3)\_\_\_\_\_ पानी पीने से आता है। बच्चों के लिए साफ पानी (4)\_\_\_\_\_ कराना जरूरी है। (5)\_\_\_\_\_ प्रकार के रोग होने के एक नहीं बल्कि बहुत से कारण होते हैं।

**SubQuestion No : 17**

Q.17 रिक्त 2 के लिए सबसे उपयुक्त विकल्प का चयन कीजिए।

- Ans
- 1. स्तर
  - 2. तत्काल
  - 3. विभिन्न
  - 4. गरीबी

Question ID : 264330189378

Option 1 ID : 264330741226

Option 2 ID : 264330741227

Option 3 ID : 264330741228

Option 4 ID : 264330741229

Status : Answered

Chosen Option : 1

**Comprehension:**

नीचे दिए गए गद्य में कुछ शब्द छोड़ दिए गए हैं और प्रत्येक रिक्त स्थान के चार विकल्प दिए गए हैं। इन चारों में से कौन सा विकल्प रिक्त स्थान की पूर्ति करेगा-

जब हम रोग के कारण के (1)\_\_\_\_\_ में सोचते हैं तब हमें यह याद रखना चाहिए कि इस कारण के बहुत से (2)\_\_\_\_\_ होते हैं। उनमें से एक संक्रमण है जो (3)\_\_\_\_\_ पानी पीने से आता है। बच्चों के लिए साफ पानी (4)\_\_\_\_\_ कराना जरूरी है। (5)\_\_\_\_\_ प्रकार के रोग होने के एक नहीं बल्कि बहुत से कारण होते हैं।

**SubQuestion No : 18**

Q.18 रिक्त 3 के लिए सबसे उपयुक्त विकल्प का चयन कीजिए।

- Ans
- 1. साफ
  - 2. एसिड
  - 3. दूषित
  - 4. जीव

Question ID : 264330189379

Option 1 ID : 264330741230

Option 2 ID : 264330741232

Option 3 ID : 264330741231

Option 4 ID : 264330741233

Status : Answered

Chosen Option : 3

**Comprehension:**

नीचे दिए गए गद्य में कुछ शब्द छोड़ दिए गए हैं और प्रत्येक रिक्त स्थान के चार विकल्प दिए गए हैं। इन चारों में से कौन सा विकल्प रिक्त स्थान की पूर्ति करेगा-

जब हम रोग के कारण के (1)\_\_\_\_\_ में सोचते हैं तब हमें यह याद रखना चाहिए कि इस कारण के बहुत से (2)\_\_\_\_\_ होते हैं। उनमें से एक संक्रमण है जो (3)\_\_\_\_\_ पानी पीने से आता है। बच्चों के लिए साफ पानी (4)\_\_\_\_\_ कराना जरूरी है। (5)\_\_\_\_\_ प्रकार के रोग होने के एक नहीं बल्कि बहुत से कारण होते हैं।

**SubQuestion No : 19**

Q.19 रिक्त 4 के लिए सबसे उपयुक्त विकल्प का चयन कीजिए।

- Ans
- 1. गुनगुनाना
  - 2. वजन
  - 3. उपलब्ध
  - 4. पिलाना

Question ID : 264330189380

Option 1 ID : 264330741234

Option 2 ID : 264330741237

Option 3 ID : 264330741236

Option 4 ID : 264330741235

Status : Answered

Chosen Option : 3

**Comprehension:**

नीचे दिए गए गद्य में कुछ शब्द छोड़ दिए गए हैं और प्रत्येक रिक्त स्थान के चार विकल्प दिए गए हैं। इन चारों में से कौन सा विकल्प रिक्त स्थान की पूर्ति करेगा-

जब हम रोग के कारण के (1)\_\_\_\_\_ में सोचते हैं तब हमें यह याद रखना चाहिए कि इस कारण के बहुत से (2)\_\_\_\_\_ होते हैं। उनमें से एक संक्रमण है जो (3)\_\_\_\_\_ पानी पीने से आता है। बच्चों के लिए साफ पानी (4)\_\_\_\_\_ कराना जरूरी है। (5)\_\_\_\_\_ प्रकार के रोग होने के एक नहीं बल्कि बहुत से कारण होते हैं।

**SubQuestion No : 20**

Q.20 रिक्त 5 के लिए सबसे उपयुक्त विकल्प का चयन कीजिए।

- Ans
- 1. उपचार
  - 2. समुदाय
  - 3. पौष्टिक
  - 4. विभिन्न

Question ID : 264330189381

Option 1 ID : 264330741240

Option 2 ID : 264330741239

Option 3 ID : 264330741238

Option 4 ID : 264330741241

Status : Answered

Chosen Option : 4