



STAFF SELECTION COMMISSION  
(Government of India)

### Combined Graduate Level Examination 2024 Tier II

|                |                                    |
|----------------|------------------------------------|
| Roll Number    |                                    |
| Candidate Name |                                    |
| Venue Name     | iON Digital Zone iDZ Kovilambakkam |
| Exam Date      | 18/01/2025                         |
| Exam Time      | 9:00 AM - 12:00 PM                 |
| Subject        | CGLE 2024 Tier II Paper I          |

#### Section : Module I Mathematical Abilities

Q.1  $4^3 - 0^2 + \left(\frac{22}{2}\right)^2 - 8 + 7 \times 6$  का मान ज्ञात कीजिए।

Ans ☒ 1. 219

☒ 2. 218

☒ 3. 229

☒ 4. 224

Question ID : 630680676743

Option 1 ID : 6306802650417

Option 2 ID : 6306802650419

Option 3 ID : 6306802650420

Option 4 ID : 6306802650418

Status : Answered

Chosen Option : 1

Q.2 Using empirical formula, calculate the mode for the following data.  
17, 20, 21, 18, 25, 28, 24, 22, 16, 24, 25, 24

Ans ☒ 1. 25

☒ 2. 25.8

☒ 3. 32

☒ 4. 30.6

Question ID : 630680531333

Option 1 ID : 6306802077143

Option 2 ID : 6306802077141

Option 3 ID : 6306802077142

Option 4 ID : 6306802077144

Status : Marked For Review

Chosen Option : 2

Q.3 यदि  $X - 2Y + 2Z = 16$ ,  $X - Y + Z = 9$  और  $2X - 3Y - Z = 9$  है, तो Y का मान ज्ञात कीजिए।

- Ans
- ☐ 1. 2
  - ☐ 2. -4
  - ☐ 3. 4
  - ☒ 4. -3

Question ID : 630680553687  
 Option 1 ID : 6306802164644  
 Option 2 ID : 6306802164646  
 Option 3 ID : 6306802164647  
 Option 4 ID : 6306802164645

Status : Answered  
 Chosen Option : 2

Q.4  $\sqrt[3]{6859} \times \frac{3}{\sqrt[4]{1296}} \times \frac{42}{57} = ?$

- Ans
- ☐ 1. 17
  - ☐ 2. -3
  - ☐ 3. 16
  - ☒ 4. 7

Question ID : 630680677339  
 Option 1 ID : 6306802652813  
 Option 2 ID : 6306802652812  
 Option 3 ID : 6306802652814  
 Option 4 ID : 6306802652811

Status : Answered  
 Chosen Option : 4

Q.5  $\frac{(a^7 \times b^8 \times c^7)}{(a^9 \times b^5 \times c^4)}$  का सरलीकृत रूप ज्ञात कीजिए।

- Ans
- ☐ 1.  $(a^{-7}) \times (b^2) \times (c^{-4})$
  - ☐ 2.  $(a^0) \times (b^2) \times (c^1)$
  - ☒ 3.  $(a^{-2}) \times (b^3) \times (c^3)$
  - ☐ 4.  $(a^{-5}) \times (b^{-8}) \times (c^0)$

Question ID : 630680677919  
 Option 1 ID : 6306802655133  
 Option 2 ID : 6306802655134  
 Option 3 ID : 6306802655131  
 Option 4 ID : 6306802655132

Status : Answered  
 Chosen Option : 3

Q.6 एक त्रिभुज HJK में, HJ = HK है G, HJ पर एक बिंदु इस प्रकार है कि HG = GK = JK है। ( $\angle HGK + \angle GKJ$ ) के दो-तिहाई की डिग्री माप क्या है?

- Ans
- ☒ 1.  $136^\circ$
  - ☒ 2.  $90^\circ$
  - ☒ 3.  $96^\circ$
  - ☒ 4.  $84^\circ$

Question ID : 630680399584  
 Option 1 ID : 6306801558213  
 Option 2 ID : 6306801558212  
 Option 3 ID : 6306801558211  
 Option 4 ID : 6306801558214  
 Status : Answered  
 Chosen Option : 3

Q.7 12 cm व्यास और 5 cm ऊंचाई वाले एक लंब वृत्तीय शंकु का आयतन ( $\text{cm}^3$  में, 2 दशमलव स्थान तक पूर्णांकित) ज्ञात कीजिए। [ $\pi = \frac{22}{7}$  का प्रयोग करें]

- Ans
- ☒ 1. 147.23
  - ☒ 2. 197.25
  - ☒ 3. 156.39
  - ☒ 4. 188.57

Question ID : 630680594735  
 Option 1 ID : 6306802327013  
 Option 2 ID : 6306802327016  
 Option 3 ID : 6306802327014  
 Option 4 ID : 6306802327015  
 Status : Answered  
 Chosen Option : 4

Q.8 यदि  $x = 8 + \sqrt{5}$  और  $y = 8 - \sqrt{5}$  है, तो  $x^2 + y^2$  का मान क्या है?

- Ans
- ☒ 1. 138
  - ☒ 2. 140
  - ☒ 3. 124
  - ☒ 4. 143

Question ID : 630680677629  
 Option 1 ID : 6306802653971  
 Option 2 ID : 6306802653973  
 Option 3 ID : 6306802653974  
 Option 4 ID : 6306802653972  
 Status : Answered  
 Chosen Option : 1

Q.9 यदि तीन व्यक्तियों की औसत आयु 56 वर्ष है और उनकी आयु का अनुपात 2 : 5 : 7 है, तो सबसे छोटे व्यक्ति की आयु ज्ञात कीजिए।

- Ans
- ☒ 1. 26 वर्ष
  - ☒ 2. 20 वर्ष
  - ☒ 3. 24 वर्ष
  - ☒ 4. 22 वर्ष

Question ID : 630680630972

Option 1 ID : 6306802469839

Option 2 ID : 6306802469836

Option 3 ID : 6306802469838

Option 4 ID : 6306802469837

Status : Answered

Chosen Option : 3

Q.10 2200 m लंबे वृत्ताकार ट्रैक पर, सरिता और कविता ने अपनी साइकिलें एक ही बिंदु से लेकिन विपरीत दिशा में क्रमशः 20 km/h और 16 km/h की चाल से चलाई। वे कितने समय बाद पहली बार पुनः मिलेंगी?

- Ans
- ☒ 1. 2 मिनट 50 सेकंड
  - ☒ 2. 2 मिनट 20 सेकंड
  - ☒ 3. 3 मिनट 20 सेकंड
  - ☒ 4. 3 मिनट 40 सेकंड

Question ID : 630680595186

Option 1 ID : 6306802328946

Option 2 ID : 6306802328945

Option 3 ID : 6306802328947

Option 4 ID : 6306802328948

Status : Answered

Chosen Option : 4

Q.11 यदि दो समरूप त्रिभुजों के क्षेत्रफलों का अनुपात 121 : 225 है, तो संगत भुजाओं का अनुपात ज्ञात कीजिए।

- Ans
- ☒ 1. 11 : 13
  - ☒ 2. 15 : 13
  - ☒ 3. 9 : 11
  - ☒ 4. 11 : 15

Question ID : 630680674294

Option 1 ID : 6306802640688

Option 2 ID : 6306802640690

Option 3 ID : 6306802640687

Option 4 ID : 6306802640689

Status : Answered

Chosen Option : 4

Q.12 गणतंत्र दिवस के अवसर पर एक खुदरा स्टोर एक स्कीम देता है, जहाँ ग्राहक अपनी कुल खरीद पर 26% की छूट का लाभ उठा सकते हैं। यदि मनीष ₹2,050 की वस्तुएँ खरीदता है, तो वह स्कीम छूट के द्वारा कितनी राशि (₹ में) बचाएगा?

Ans ☒ 1. 544

☒ 2. 522

☒ 3. 533

☒ 4. 511

Question ID : 630680653713

Option 1 ID : 6306802559269

Option 2 ID : 6306802559267

Option 3 ID : 6306802559268

Option 4 ID : 6306802559266

Status : Answered

Chosen Option : 3

Q.13 एक व्यक्ति कुल ₹15 में 10 एकसमान वस्तुएँ खरीदता है। यदि वह उनमें से प्रत्येक वस्तु को ₹1.7 में बेचता है, तो उसका लाभ प्रतिशत \_\_\_\_\_% होगा (दो दशमलव स्थानों तक पूर्णांकित मान दीजिए)।

Ans ☒ 1. 11.76

☒ 2. 12.76

☒ 3. 14.33

☒ 4. 13.33

Question ID : 630680661950

Option 1 ID : 6306802591744

Option 2 ID : 6306802591745

Option 3 ID : 6306802591743

Option 4 ID : 6306802591742

Status : Answered

Chosen Option : 4

Q.14 निम्नलिखित आँकड़ों की माधिका ज्ञात कीजिए। (दो दशमलव स्थान तक पूर्णांकित।)

वर्ग-अंतराल 0-5 5-10 10-15 15-20 20-25 25-30 30-35  
बारंबारता 3 5 4 2 7 6 5

Ans ☒ 1. 18.64

☒ 2. 23.40

☒ 3. 20.53

☒ 4. 21.43

Question ID : 630680541168

Option 1 ID : 6306802115702

Option 2 ID : 6306802115705

Option 3 ID : 6306802115703

Option 4 ID : 6306802115704

Status : Answered

Chosen Option : 1

Q.15 किसी धनराशि को 3 दोस्त P, Q और R के बीच 5 : 3 : 4 के अनुपात में बाँटना है। यदि P को R से ₹1,500 अधिक मिलते हैं, तो Q का हिस्सा कितना है?

- Ans
- ☒ 1. ₹4,950
  - ☒ 2. ₹5,100
  - ☒ 3. ₹4,680
  - ☒ 4. ₹4,500

Question ID : 630680543904  
 Option 1 ID : 6306802126404  
 Option 2 ID : 6306802126403  
 Option 3 ID : 6306802126405  
 Option 4 ID : 6306802126406  
 Status : Answered  
 Chosen Option : 4

Q.16 मान लीजिए ABC एक समकोण त्रिभुज है जो B पर समकोण है। यदि  $\tan A = \sqrt{3}$  है, तो  $\sin A \cos C + \cos A \sin C$  और  $\cos A \cos C - \sin A \sin C$  का मान ज्ञात कीजिए।

- Ans
- ☒ 1. 1, 0
  - ☒ 2.  $\frac{1}{2}, \frac{1}{2}$
  - ☒ 3.  $\frac{\sqrt{3}}{2}, \frac{\sqrt{3}}{2}$
  - ☒ 4.  $\frac{\sqrt{3}}{2}, \frac{1}{2}$

Question ID : 630680526624  
 Option 1 ID : 6306802058565  
 Option 2 ID : 6306802058564  
 Option 3 ID : 6306802058562  
 Option 4 ID : 6306802058563  
 Status : Answered  
 Chosen Option : 1

Q.17 ₹2000 पर, 6.5% वार्षिक ब्याज दर पर, 14 फरवरी 2023 से 28 अप्रैल 2023 की अवधि के लिए साधारण ब्याज (₹ में) की गणना करें।

- Ans
- ☒ 1. 26
  - ☒ 2. 24
  - ☒ 3. 27
  - ☒ 4. 25

Question ID : 630680666476  
 Option 1 ID : 6306802609464  
 Option 2 ID : 6306802609467  
 Option 3 ID : 6306802609466  
 Option 4 ID : 6306802609465  
 Status : Answered  
 Chosen Option : 2

Q.18 केंद्र O वाले एक वृत्त में  $\triangle ABC$  उत्कीर्णित किया गया है। यदि  $AB = 21$  cm,  $BC = 20$  cm और  $AC = 29$  cm है, तो त्रिभुज के परिवृत्त की त्रिज्या (circumradius) की लंबाई कितनी है?

- Ans
- ☒ 1. 32.5 cm
  - ☒ 2. 21.5 cm
  - ☒ 3. 14.5 cm
  - ☒ 4. 13.5 cm

Question ID : 630680526633  
Option 1 ID : 6306802058599  
Option 2 ID : 6306802058598  
Option 3 ID : 6306802058600  
Option 4 ID : 6306802058601  
Status : Answered  
Chosen Option : 3

Q.19 अनिल और बीना मित्र हैं और उनकी आयु के बीच 5 वर्ष का अंतर है। अनिल के पिता दिनेश की आयु, अनिल की आयु की तीन गुनी है, और बीना की आयु, उसकी बहन चारू की आयु की दोगुनी है। दिनेश और चारू की आयु में 45 वर्ष का अंतर है। यदि बीना, अनिल से बड़ी है, तो दिनेश और चारू दोनों की वर्तमान आयु का योग ज्ञात कीजिए।

- Ans
- ☒ 1. 100 वर्ष
  - ☒ 2. 69 वर्ष
  - ☒ 3. 78 वर्ष
  - ☒ 4. 91 वर्ष

Question ID : 630680545553  
Option 1 ID : 6306802132812  
Option 2 ID : 6306802132815  
Option 3 ID : 6306802132814  
Option 4 ID : 6306802132813  
Status : Answered  
Chosen Option : 2

Q.20  $(5z - 12y)^2 + (12z + 5y)^2 - 114z^2$  को सरल कीजिए।

- Ans
- ☒ 1.  $25z^2 + 169y^2$
  - ☒ 2.  $23z^2 + 177y^2$
  - ☒ 3.  $23z^2 + 174y^2$
  - ☒ 4.  $30z^2 + 170y^2$

Question ID : 630680674736  
Option 1 ID : 6306802642389  
Option 2 ID : 6306802642390  
Option 3 ID : 6306802642392  
Option 4 ID : 6306802642391  
Status : Marked For Review  
Chosen Option : 1

Q.21 प्रथम 91 सम संख्याओं का औसत कितना है?

- Ans ☒ 1. 93  
☒ 2. 92  
☒ 3. 91  
☒ 4. 90

Question ID : 630680657226  
Option 1 ID : 6306802572849  
Option 2 ID : 6306802572846  
Option 3 ID : 6306802572847  
Option 4 ID : 6306802572848  
Status : Marked For Review  
Chosen Option : 2

Q.22 75 का 60%, 25 के  $\frac{1}{5}$  से कितना अधिक है?

- Ans ☒ 1. 34  
☒ 2. 38  
☒ 3. 37  
☒ 4. 40

Question ID : 630680668031  
Option 1 ID : 6306802615670  
Option 2 ID : 6306802615671  
Option 3 ID : 6306802615669  
Option 4 ID : 6306802615668  
Status : Answered  
Chosen Option : 4

Q.23 बर्तन A में दूध और पानी 4 : 5 के अनुपात में है। बर्तन B में दूध और पानी 2 : 1 के अनुपात में है। यदि A का x लीटर मिश्रण B के y लीटर मिश्रण के साथ मिलाया जाता है, तो नए मिश्रण में दूध और पानी का अनुपात 8 : 5 हो जाता है। अनुपात x : y ज्ञात कीजिए।

- Ans ☒ 1. 2 : 5  
☒ 2. 3 : 10  
☒ 3. 3 : 4  
☒ 4. 5 : 6

Question ID : 630680654960  
Option 1 ID : 6306802563984  
Option 2 ID : 6306802563985  
Option 3 ID : 6306802563983  
Option 4 ID : 6306802563982  
Status : Answered  
Chosen Option : 2



Q.24 यदि  $\tan(x+y)\tan(x-y)=1$  है, तो  $\tan x$  का मान बताइये।

Ans

- ☒ 1.  $\frac{1}{\sqrt{3}}$   
☒ 2.  $\frac{1}{2\sqrt{3}}$   
☒ 3.  $\sqrt{3}$   
☒ 4. 1

Question ID : 630680764495

Option 1 ID : 6306802996520

Option 2 ID : 6306802996521

Option 3 ID : 6306802996518

Option 4 ID : 6306802996519

Status : Marked For Review

Chosen Option : 4

Q.25 मान लीजिए A और B दो खिलाड़ी हैं जो टार्गेट को हिट करने के लिए खेल रहे हैं। A और B द्वारा टार्गेट को हिट किये जाने की प्रायिकताएं क्रमशः  $\frac{2}{3}$  और  $\frac{3}{4}$  हैं। उनमें से किसी भी एक द्वारा टार्गेट को सटीकता से हिट किये जाने की क्या प्रायिकता है?

Ans

- ☒ 1.  $\frac{1}{12}$   
☒ 2.  $\frac{1}{4}$   
☒ 3.  $\frac{7}{12}$   
☒ 4.  $\frac{5}{12}$

Question ID : 630680543956

Option 1 ID : 6306802126611

Option 2 ID : 6306802126612

Option 3 ID : 6306802126613

Option 4 ID : 6306802126614

Status : Answered

Chosen Option : 4

Q.26 यदि  $\frac{\sec\theta - \tan\theta}{\sec\theta + \tan\theta} = \frac{1}{9}$  है,  $\theta$  प्रथम चतुर्थांश में है, तो  $\frac{\sin\theta - \tan^2\theta}{\sin\theta + \tan^2\theta}$  का मान ज्ञात कीजिए।

Ans

- ☒ 1.  $-\frac{13}{27}$   
☒ 2.  $-\frac{11}{29}$   
☒ 3.  $\frac{13}{27}$   
☒ 4.  $\frac{11}{29}$

Question ID : 630680671702

Option 1 ID : 6306802630351

Option 2 ID : 6306802630350

Option 3 ID : 6306802630352

Option 4 ID : 6306802630349

Status : Marked For Review

Chosen Option : 1

Q.27 एक लंब वृत्तीय शंकु की ऊंचाई 63 cm है और इसके वक्र पृष्ठ का क्षेत्रफल, इसके आधार के क्षेत्रफल का पांच गुना है। शंकु का आयतन ( $\text{cm}^3$  में) कितना होगा? ( $\pi = 22/7$  का उपयोग कीजिए)

- Ans
- ☒ 1. 11234.65
  - ☒ 2. 13540.25
  - ☒ 3. 10914.75
  - ☒ 4. 12589.10

Question ID : 630680671173  
 Option 1 ID : 6306802628254  
 Option 2 ID : 6306802628256  
 Option 3 ID : 6306802628253  
 Option 4 ID : 6306802628255  
 Status : Answered  
 Chosen Option : 4

Q.28 रानी और आद्या अलग-अलग काम करते हुए एक काम को क्रमशः 12 दिन और 16 घंटे में पूरा कर सकती हैं। वे बारी-बारी से एक-एक दिन काम करती हैं। यदि रानी पहले काम करना शुरू करती है, तो काम कितने दिनों में पूरा हो जाएगा?

- Ans
- ☒ 1.  $13\frac{2}{3}$  दिन
  - ☒ 2.  $12\frac{2}{3}$  दिन
  - ☒ 3.  $13\frac{1}{3}$  दिन
  - ☒ 4.  $12\frac{1}{3}$  दिन

Question ID : 630680262118  
 Option 1 ID : 6306801018122  
 Option 2 ID : 6306801018119  
 Option 3 ID : 6306801018121  
 Option 4 ID : 6306801018120  
 Status : Answered  
 Chosen Option : 1

Q.29 किसी स्थान की जनसंख्या 2016 से 2018 तक 6% वार्षिक दर से बढ़कर 50,000 हो गई, और अगले 3 वर्षों तक वृद्धि इसी तरह जारी रही। यदि A, 2016 की जनसंख्या है और B, 2020 की जनसंख्या है, दोनों अगले संभावित पूर्णांकों के सन्निकट किए गए हैं, तो B - A का मान ज्ञात कीजिए।

- Ans
- ☒ 1. 12850
  - ☒ 2. 16270
  - ☒ 3. 11680
  - ☒ 4. 13220

Question ID : 630680464555  
 Option 1 ID : 6306801814255  
 Option 2 ID : 6306801814258  
 Option 3 ID : 6306801814256  
 Option 4 ID : 6306801814257  
 Status : Answered  
 Chosen Option : 2

Q.30 एक खिलौना शंकाकार है, जो एक अर्धगोले पर लगा (mounted) हुआ है। अर्धगोले और शंकु की त्रिज्या 36 cm है तथा शंकु की ऊँचाई 105 cm है। खिलौने का संपूर्ण पृष्ठीय क्षेत्रफल ( $\text{cm}^2$  में) ज्ञात कीजिए।

Ans ☒ 1.  $6588\pi$

☒ 2.  $5240\pi$

☒ 3.  $5799\pi$

☒ 4.  $6025\pi$

Question ID : 630680671333

Option 1 ID : 6306802628885

Option 2 ID : 6306802628888

Option 3 ID : 6306802628887

Option 4 ID : 6306802628886

Status : Answered

Chosen Option : 4

Section : Module II Reasoning and General Intelligence

Q.1 दिए गए विकल्पों में से उस संख्या का चयन कीजिए, जो निम्नलिखित श्रृंखला में प्र - चिह्न (?) को प्रतिस्थापित कर सके।  
9, 5, 6, 10.5, 23, ?

Ans ☒ 1. 60

☒ 2. 50

☒ 3. 90

☒ 4. 80

Question ID : 630680182831

Option 1 ID : 630680708432

Option 2 ID : 630680708431

Option 3 ID : 630680708430

Option 4 ID : 630680708429

Status : Answered

Chosen Option : 1

Q.2 उस समुच्चय का चयन करें जिसमें संख्याएँ उसी प्रकार संबंधित हैं जिस प्रकार निम्नलिखित समुच्चय की संख्याएँ संबंधित हैं।  
(नोट: संख्याओं को उनके घटक अंकों में तोड़े बिना, संक्रियाएँ पूर्ण संख्याओं पर की जानी चाहिए। उदाहरण के लिए 13 लीजिए - 13 पर संक्रियाएँ जैसे कि 13 में जोड़ना/ घटाना/ गुणा करना आदि की जा सकती है। 13 को 1 और 3 में तोड़ना तथा फिर 1 और 3 पर गणितीय संक्रियाएँ करने की अनुमति नहीं है।)

(215, 185, 135)

(276, 246, 196)

Ans ☒ 1. (294, 264, 224)

☒ 2. (255, 235, 205)

☒ 3. (238, 208, 158)

☒ 4. (269, 229, 199)

Question ID : 630680817143

Option 1 ID : 6306803200659

Option 2 ID : 6306803200661

Option 3 ID : 6306803200660

Option 4 ID : 6306803200658

Status : Answered

Chosen Option : 3

Q.3 O, P, Q, R, S and T are sitting around a circular table facing the centre (but not necessarily in the same order). P sits second to the left of T. S sits third to the right of Q. Q is not an immediate neighbour of P. O sits second to the right of S. Which of the following represents the position of O with respect of R?

- Ans
- ☒ 1. Immediate right
  - ☒ 2. Third to the left
  - ☒ 3. Second to the left
  - ☒ 4. Third to the right

Question ID : 630680416782  
 Option 1 ID : 6306801625893  
 Option 2 ID : 6306801625892  
 Option 3 ID : 6306801625891  
 Option 4 ID : 6306801625894  
 Status : Answered  
 Chosen Option : 3

Q.4 किसी निश्चित कूट भाषा में, 'she gardens daily' को 'ak jb mp' के रूप में कूटबद्ध किया जाता है और 'where is she' को 'mp pt kt' के रूप में कूटबद्ध किया जाता है। दी गई भाषा में 'she' को किस प्रकार कूटबद्ध किया गया है?

- Ans
- ☒ 1. kt
  - ☒ 2. pt
  - ☒ 3. mp
  - ☒ 4. ak

Question ID : 630680644318  
 Option 1 ID : 6306802522581  
 Option 2 ID : 6306802522582  
 Option 3 ID : 6306802522579  
 Option 4 ID : 6306802522580  
 Status : Answered  
 Chosen Option : 3

Q.5 निम्नलिखित में शब्दों के दो युग्म हैं जो एक-दूसरे से किसी निश्चित तरीके से संबंधित हैं। निम्नलिखित चार शब्द-युग्मों में से तीन एक समान हैं क्योंकि इनमें समान संबंध हैं और इस प्रकार एक समूह बनाते हैं। कौन-सा शब्द-युग्म उस समूह से संबंधित नहीं है? (शब्दों को सार्थक हिन्दी शब्दों के रूप में माना जाना चाहिए और शब्द में उन्हें अक्षरों की संख्या/व्यंजनों/स्वरों की संख्या के आधार पर समूहित (grouped) नहीं किया जाना चाहिए)

- Ans
- ☒ 1. मंदिर - पूजा
  - ☒ 2. थिएटर - मूवी
  - ☒ 3. रेस्तरां - डिनर
  - ☒ 4. पार्क - तैरना

Question ID : 630680523459  
 Option 1 ID : 6306802046017  
 Option 2 ID : 6306802046015  
 Option 3 ID : 6306802046016  
 Option 4 ID : 6306802046014  
 Status : Answered  
 Chosen Option : 4

Q.6 P, Q, R, S, T, U और V में से प्रत्येक की परीक्षा, सोमवार से शुरू होकर रविवार को समाप्त होने वाले सप्ताह के अलग-अलग दिन है।  
Q की परीक्षा शनिवार को है। S और Q की परीक्षाओं के बीच केवल दो व्यक्तियों की परीक्षा है। R की परीक्षा, S की परीक्षा से पहले है, लेकिन P की परीक्षा के बाद है। U की परीक्षा, T की परीक्षा के ठीक बाद है।  
V की परीक्षा निम्नलिखित में से किस दिन है?

- Ans
- ☒ 1. शुक्रवार
  - ☒ 2. रविवार
  - ☒ 3. गुरुवार
  - ☒ 4. शनिवार

Question ID : 630680595099  
Option 1 ID : 6306802328600  
Option 2 ID : 6306802328598  
Option 3 ID : 6306802328597  
Option 4 ID : 6306802328599  
Status : Answered  
Chosen Option : 2

Q.7 इस प्रश्न में, दो कथनों के बाद विकल्प के रूप में चार निष्कर्ष दिए गए हैं। दिए गए कथनों के आधार पर निर्धारित करें कि कौन सा निष्कर्ष निश्चित रूप से सत्य है।

कथन:

$A < B \geq C > D$   
 $C > E \geq F = G$

- Ans
- ☒ 1.  $D < F$
  - ☒ 2.  $G > C$
  - ☒ 3.  $A < E$
  - ☒ 4.  $B > G$

Question ID : 630680416388  
Option 1 ID : 6306801624316  
Option 2 ID : 6306801624317  
Option 3 ID : 6306801624315  
Option 4 ID : 6306801624318  
Status : Answered  
Chosen Option : 4

Q.8 एक प्रश्न दिया गया है, जिसके बाद I और II क्रमांकित दो कथन दिए गए हैं। पहचान कीजिए कि कौन-सा/कौन-से कथन इस प्रश्न का उत्तर देने के लिए पर्याप्त/आवश्यक है/हैं।

प्रश्न:

अरविंद के पास नीले, हरे और सफेद कंचे हैं। उसके पास मौजूद सभी कंचों में से सफेद कंचों का प्रतिशत कितना है?

कथन:

(I) उसके पास नीले और हरे कंचों का योग 7 है।  
(II) उसके पास 10 कंचों में से 3 सफेद कंचे हैं।

- Ans
- ☒ 1. कथन I और II में दिया गया डेटा एक साथ मिलकर प्रश्न का उत्तर देने के लिए पर्याप्त है
  - ☒ 2. कथन I में दिया गया डेटा अकेले ही प्रश्न का उत्तर देने के लिए पर्याप्त है जबकि कथन II में दिया गया डेटा अकेले प्रश्न का उत्तर देने के लिए पर्याप्त नहीं है
  - ☒ 3. कथन I और II में दिया गया डेटा एक साथ मिलकर प्रश्न का उत्तर देने के लिए पर्याप्त नहीं है
  - ☒ 4. कथन II में दिया गया डेटा अकेले ही प्रश्न का उत्तर देने के लिए पर्याप्त है जबकि कथन I में दिया गया डेटा अकेले प्रश्न का उत्तर देने के लिए पर्याप्त नहीं है

Question ID : 630680561104  
Option 1 ID : 6306802193431  
Option 2 ID : 6306802193429  
Option 3 ID : 6306802193432  
Option 4 ID : 6306802193430  
Status : Answered  
Chosen Option : 4

Q.9 यदि 'A' का अर्थ '+' है, 'B' का अर्थ 'x' है, 'C' का अर्थ '-' है और 'D' का अर्थ '÷' है, तो निम्नलिखित समीकरण में प्रश्न-चिह्न (?) के स्थान पर क्या आएगा?

$$55 B 5 D 13 B 2 C 14 A 7 D 15 B 5 C 102 A 2 C 15 = ?$$

Ans ☒ 1. 242

☐ 2. 291

☐ 3. 177

☐ 4. 203

Question ID : 6306801081427

Option 1 ID : 6306804247263

Option 2 ID : 6306804247264

Option 3 ID : 6306804247265

Option 4 ID : 6306804247262

Status : Answered

Chosen Option : 1

Q.10 उस सही विकल्प का चयन कीजिए जो निम्नलिखित शब्दों की व्यवस्था को तार्किक और सार्थक क्रम में दर्शाता है।

1. डिज़ाइन (Design) 2. परीक्षण (Test) 3. संकल्पना (Conceptualize) 4. विकास (Develop) 5. कार्यान्वयन (Implement)

Ans ☒ 1. 3, 1, 4, 2, 5

☐ 2. 3, 1, 5, 4, 2

☐ 3. 3, 5, 2, 4, 1

☐ 4. 1, 4, 5, 3, 2

Question ID : 630680522653

Option 1 ID : 6306802042909

Option 2 ID : 6306802042910

Option 3 ID : 6306802042912

Option 4 ID : 6306802042911

Status : Answered

Chosen Option : 1

Q.11 Each of the digits in the number 5238641 is arranged in ascending order from left to right. The position(s) of how many digits will remain unchanged as compared to that/those in the original number ?

Ans ☐ 1. One

☒ 2. Two

☐ 3. None

☐ 4. Three

Question ID : 630680674151

Option 1 ID : 6306802640132

Option 2 ID : 6306802640133

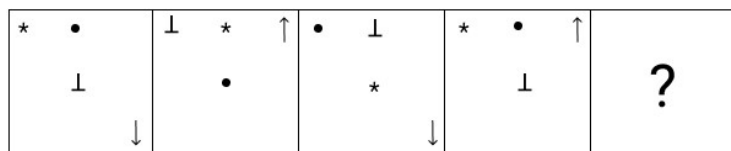
Option 3 ID : 6306802640131

Option 4 ID : 6306802640134

Status : Answered

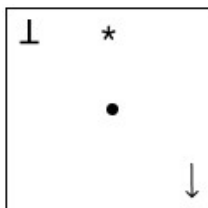
Chosen Option : 2

Q.12 विकल्पों में दी गई उस आकृति की पहचान कीजिए जिसे प्रश्न चिह्न (?) के स्थान पर रखने पर श्रृंखला तार्किक रूप से पूर्ण हो जाएगी।

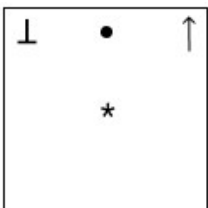


Ans

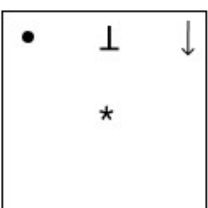
✓ 1.



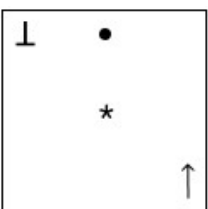
✗ 2.



✗ 3.



✗ 4.



Question ID : 630680542590

Option 1 ID : 6306802121289

Option 2 ID : 6306802121292

Option 3 ID : 6306802121291

Option 4 ID : 6306802121290

Status : Answered

Chosen Option : 1

Q.13 U, N का पिता है। N, T की बहन है। T, I की पत्नी है। I, L का पुत्र है। U का L से क्या संबंध है?

Ans

✗ 1. पुत्रवधू की बहन

✗ 2. पुत्रवधू

✓ 3. पुत्रवधू के पिता

✗ 4. पुत्रवधू की माता

Question ID : 630680585641

Option 1 ID : 6306802291323

Option 2 ID : 6306802291322

Option 3 ID : 6306802291325

Option 4 ID : 6306802291324

Status : Answered

Chosen Option : 3

Q.14 Read the following information and answer the question which follows.

"Similar to expert puzzle solvers, Solver S employs systematic problem-solving approaches, ensuring efficient and accurate resolutions to complex challenges."

Which of the following can be inferred from the given statement? (An inference is something which is not directly stated but can be derived from the given facts/information in the statement)

1. The efficiency and accuracy of Solver S in resolving complex challenges may be attributed to their systematic problem-solving methods.
2. Solver S utilizes systematic problem-solving approaches, similar to expert puzzle solvers.

Ans ☒ 1. Both (I) and (II) can be inferred.

☐ 2. Only (II) can be inferred.

☐ 3. Only (I) can be inferred.

☐ 4. Neither (I) nor (II) can be inferred.

Question ID : 630680557216

Option 1 ID : 6306802177843

Option 2 ID : 6306802177845

Option 3 ID : 6306802177846

Option 4 ID : 6306802177844

Status : Answered

Chosen Option : 1

Q.15 निम्नलिखित संख्या-युग्मों में, पहली संख्या पर निश्चित गणितीय संक्रियाएँ करके दूसरी संख्या प्राप्त की जाती है। निम्नलिखित चार संख्या-युग्मों में से तीन में, समान पैटर्न लागू किया जाता है और इसलिए वे एक समूह बनाते हैं। उस संख्या-युग्म का चयन कीजिए जो इस समूह से संबंधित नहीं है।

(नोट: संख्याओं को उनके घटक अंकों में तोड़े बिना पूर्ण संख्याओं पर संक्रियाएँ की जानी चाहिए। उदाहरण के लिए 13 को लीजिए - 13 पर संक्रियाएं, जैसे कि 13 में जोड़ना/घटाना/गुणा करना आदि, की जा सकती हैं। 13 को 1 और 3 में तोड़ने और फिर 1 और 3 पर गणितीय संक्रियाएँ करने की अनुमति नहीं है।)

Ans ☐ 1. 22 - 242

☒ 2. 13 - 144

☐ 3. 18 - 198

☐ 4. 31 - 341

Question ID : 630680570363

Option 1 ID : 6306802231911

Option 2 ID : 6306802231909

Option 3 ID : 6306802231910

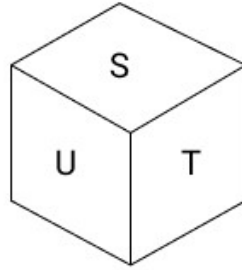
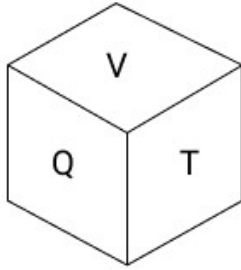
Option 4 ID : 6306802231912

Status : Answered

Chosen Option : 2



Q.16 एक पासे के विभिन्न फलकों पर छह अक्षर P, Q, S, T, U और V अंकित हैं। चित्र में इस पासे की दो स्थितियाँ दिखाई गई हैं। T अक्षर वाले फलक के विपरीत फलक पर अंकित अक्षर ज्ञात कीजिए।



Ans ☒ 1. P  
☒ 2. U  
☒ 3. S  
☒ 4. V

Question ID : 630680616879  
 Option 1 ID : 6306802413763  
 Option 2 ID : 6306802413761  
 Option 3 ID : 6306802413762  
 Option 4 ID : 6306802413760  
 Status : Answered  
 Chosen Option : 1

Q.17 नीचे एक कथन (कारण) दिया गया है, जिसके बाद संभावित प्रभाव संख्या I, II और III दिए गए हैं। 'कारण' को ध्यानपूर्वक से पढ़िए और निश्चय कीजिए कि तीनों में से कौन-सा/ कौन-से संभावित प्रभाव हो सकता/सकते हैं/हैं।

कारण - शहर X में कई लोगों ने इस महीने एक के बजाय दो बिजली बिल आने की सूचना दी है।

प्रभाव I - बिजली बोर्ड ने शहर X में उन क्षेत्रों का विवरण प्रकाशित किया है, जहाँ कल बिजली बंद होने की संभावना है।

प्रभाव II - शहर X के नगर निगम आयुक्त ने स्पष्ट किया है कि जिस तकनीकी खराबी के कारण कई बिजली बिल उत्पन्न हुए थे, उसे 48 घंटों के भीतर हल कर दिया जाएगा।

प्रभाव III - कई इलाकों में बिजली बोर्ड कार्यालयों के बाहर लंबी कतारें देखी गईं।

Ans ☒ 1. I और II दोनों संभावित प्रभाव हैं।  
☒ 2. केवल I एक संभावित प्रभाव है।  
☒ 3. II और III दोनों संभावित प्रभाव हैं।  
☒ 4. केवल II एक संभावित प्रभाव है।

Question ID : 630680568507  
 Option 1 ID : 630680222848  
 Option 2 ID : 630680222845  
 Option 3 ID : 630680222847  
 Option 4 ID : 630680222846  
 Status : Answered  
 Chosen Option : 3

Q.18 दिए गए कथनों और निष्कर्षों का ध्यानपूर्वक अध्ययन कीजिए। कथन(नों) में दी गई जानकारी को सत्य मानते हुए, भले ही यह सामान्य रूप से ज्ञात तथ्यों से भिन्न प्रतीत होती हो, निर्धारित कीजिए कि दिए गए निष्कर्षों में से कौन-सा/से निष्कर्ष कथन(नों) का तर्कसंगत रूप से अनुसरण करता है/करते हैं।

कथन:

सभी भेड़ें गायें हैं।  
कुछ गायें घोड़े हैं।  
सभी घोड़े सियार हैं।

निष्कर्ष:

(I) कुछ सियार गायें हैं।  
(II) कुछ घोड़े भेड़ें हैं।

Ans ☒ 1. न तो निष्कर्ष (I) और न ही निष्कर्ष (II) अनुसरण करता है।

☒ 2. केवल निष्कर्ष (II) अनुसरण करता है।

☒ 3. केवल निष्कर्ष (I) अनुसरण करता है।

☒ 4. निष्कर्ष (I) और (II) दोनों अनुसरण करते हैं।

Question ID : 630680571371

Option 1 ID : 6306802234520

Option 2 ID : 6306802234517

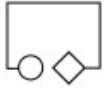
Option 3 ID : 6306802234519

Option 4 ID : 6306802234518

Status : Answered

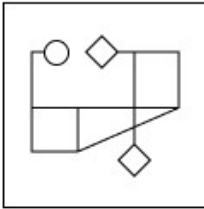
Chosen Option : 3

Q.19 उस विकल्प आकृति का चयन कीजिए, जिसमें दी गई आकृति उसके भाग के रूप में अंतर्निहित है। (घूर्णन की अनुमति नहीं है।)

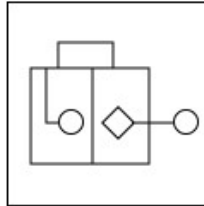


Ans

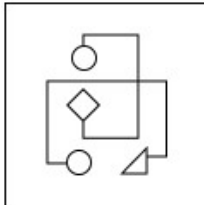
✗ 1.



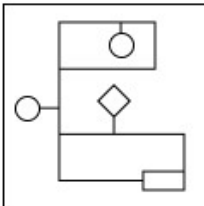
✓ 2.



✗ 3.



✗ 4.



Question ID : 630680629191

Option 1 ID : 6306802462847

Option 2 ID : 6306802462846

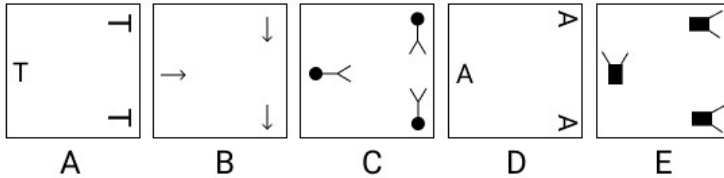
Option 3 ID : 6306802462848

Option 4 ID : 6306802462849

Status : Answered

Chosen Option : 2

Q.20 निम्नलिखित पाँच आकृतियों में से चार आकृतियाँ एक निश्चित तरीके से समान हैं और इस प्रकार एक समूह बनाती हैं। वह कौन-सी आकृति है जो उस समूह से संबंधित नहीं है?



Ans ✓ 1. C

✗ 2. D

✗ 3. A

✗ 4. B

Question ID : 630680653544

Option 1 ID : 6306802558592

Option 2 ID : 6306802558593

Option 3 ID : 6306802558590

Option 4 ID : 6306802558591

Status : Answered

Chosen Option : 1

Q.21 उस विकल्प आकृति का चयन कीजिए जो नीचे दिए गए चित्र में पैटर्न को पूर्ण करने के लिए प्रश्न-चिह्न (?) को प्रतिस्थापित करेगी।



Ans

✓ 1.

✗ 2.

✗ 3.

✗ 4.

Question ID : 630680684116

Option 1 ID : 6306802679224

Option 2 ID : 6306802679225

Option 3 ID : 6306802679223

Option 4 ID : 6306802679222

Status : Answered

Chosen Option : 1

Q.22 एक निश्चित कूट भाषा में 'POSE' को '3517' के रूप में कूटबद्ध किया जाता है और 'SILK' को '4638' के रूप में कूटबद्ध किया जाता है। दी गई कूट भाषा में 'S' के लिए कूट क्या है?

- Ans
- ☐ 1. 4
  - ☐ 2. 8
  - ☐ 3. 1
  - ☒ 4. 3

Question ID : 630680681050

Option 1 ID : 6306802667415

Option 2 ID : 6306802667416

Option 3 ID : 6306802667414

Option 4 ID : 6306802667413

Status : Answered

Chosen Option : 4

Q.23 एक निश्चित कूट भाषा में,  
 $A + B$  का अर्थ है कि 'A, B की माता है',  
 $A - B$  का अर्थ है कि 'A, B का भाई है',  
 $A \times B$  का अर्थ है कि 'A, B की पत्नी है' और  
 $A \div B$  का अर्थ है कि 'A, B का पिता है'।  
उक्त के आधार पर, यदि ' $U + V \div W - Y \times Z$ ' है, तो U का Z से क्या संबंध है?

- Ans
- ☐ 1. पत्नी की मौसी
  - ☐ 2. पत्नी की नानी
  - ☐ 3. पत्नी की बुआ
  - ☒ 4. पत्नी की दादी

Question ID : 630680681069

Option 1 ID : 6306802667492

Option 2 ID : 6306802667491

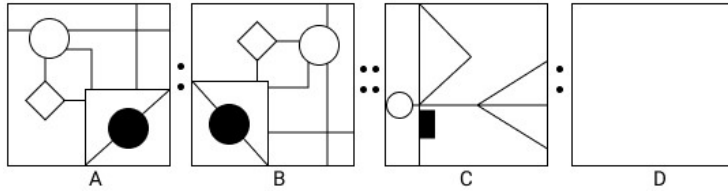
Option 3 ID : 6306802667490

Option 4 ID : 6306802667489

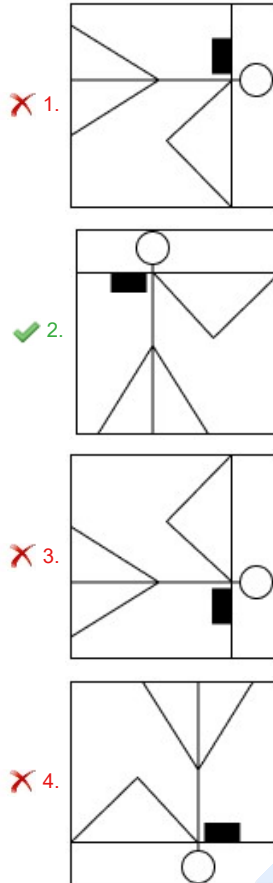
Status : Answered

Chosen Option : 4

Q.24 चित्र A एक निश्चित पैटर्न में B से संबंधित है। उसी पैटर्न का अनुसरण करते हुए, आकृति C, D से संबंधित है। उस पैटर्न का अध्ययन कीजिए और उस आकृति का चयन कीजिए, जो D के स्थान पर होनी चाहिए।



Ans



Question ID : 630680564855

Option 1 ID : 6306802208354

Option 2 ID : 6306802208355

Option 3 ID : 6306802208356

Option 4 ID : 6306802208357

Status : Answered

Chosen Option : 2

**Q.25** A statement is followed by two arguments I and II. Read the statement and the arguments carefully and select the appropriate answer from the given options.

**Statement:**

Hydroelectricity is a cleaner and greener energy than other forms of power generation.

**Arguments:**

(I) Hydroelectric plants almost have nil CO<sub>2</sub> emissions.

(II) Hydroelectric power projects submerge huge amounts under water thereby affecting local flora and fauna.

- Ans**
- ☒ 1. Both I and II strengthen the statement.
  - ☒ 2. I weakens while II strengthens the statement.
  - ☒ 3. II weakens while I strengthens the statement.
  - ☒ 4. Both I and II weaken the statement.

Question ID : 630680564142

Option 1 ID : 6306802205528

Option 2 ID : 6306802205525

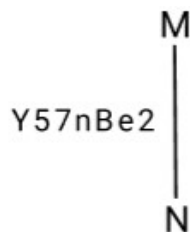
Option 3 ID : 6306802205526

Option 4 ID : 6306802205527

Status : Answered

Chosen Option : 3

**Q.26** जब दर्पण को नीचे दर्शाए अनुसार रेखा MN पर रखा जाए, तो दिए गए संयोजन के सही दर्पण प्रतिबिंब का चयन कीजिए।



- Ans**
- ☒ 1.  $Y57nBe2$
  - ☒ 2.  $Y57nBe2$
  - ☒ 3.  $Y57nBe2$
  - ☒ 4.  $Y57nBe2$

Question ID : 630680619807

Option 1 ID : 6306802425361

Option 2 ID : 6306802425362

Option 3 ID : 6306802425364

Option 4 ID : 6306802425363

Status : Answered

Chosen Option : 4

Q.27 एक प्रश्न दिया गया है, जिसके बाद I और II क्रमांकित दो कथन दिए गए हैं। पहचान कीजिए कि कौन-सा/कौन-से कथन इस प्रश्न का उत्तर देने के लिए पर्याप्त/आवश्यक है/हैं।

प्रश्न:

एक निश्चित कूट भाषा में, 'fire in mountain' को 'si ph bo' के रूप में कूटबद्ध किया जाता है। 'fire' के लिए कूट क्या है?

कथन:

(I) 'mountain' को 'bo' के रूप में कूटबद्ध किया जाता है।

(II) 'ice and fire' को 'si yu ca' के रूप में कूटबद्ध किया जाता है।

- Ans ☒ 1. कथन I में दिया गया डेटा अकेले ही प्रश्न का उत्तर देने के लिए पर्याप्त है जबकि कथन II में दिया गया डेटा अकेले प्रश्न का उत्तर देने के लिए पर्याप्त नहीं है
- ☒ 2. कथन I और II में दिया गया डेटा एक साथ मिलकर प्रश्न का उत्तर देने के लिए पर्याप्त है
- ☒ 3. कथन I और II में दिया गया डेटा एक साथ मिलकर प्रश्न का उत्तर देने के लिए पर्याप्त नहीं है
- ☒ 4. कथन II में दिया गया डेटा अकेले ही प्रश्न का उत्तर देने के लिए पर्याप्त है जबकि कथन I में दिया गया डेटा अकेले प्रश्न का उत्तर देने के लिए पर्याप्त नहीं है

Question ID : 630680561062  
Option 1 ID : 6306802193197  
Option 2 ID : 6306802193199  
Option 3 ID : 6306802193200  
Option 4 ID : 6306802193198  
Status : Answered  
Chosen Option : 2

Q.28 शब्द RECOGNIZE के पहले, तीसरे, छठे और सातवें अक्षरों (बाएँ से दाएँ गिने जाने पर) का उपयोग करके अंग्रेजी के कितने अर्थपूर्ण शब्द बनाए जा सकते हैं यदि प्रत्येक शब्द में प्रत्येक अक्षर का केवल एक बार उपयोग किया जाए?

- Ans ☒ 1. एक
- ☒ 2. कोई नहीं
- ☒ 3. दो
- ☒ 4. तीन

Question ID : 630680522658  
Option 1 ID : 6306802042930  
Option 2 ID : 6306802042929  
Option 3 ID : 6306802042931  
Option 4 ID : 6306802042932  
Status : Marked For Review  
Chosen Option : 1

Q.29 निम्नलिखित में से किस अक्षर-समूह द्वारा # और % को प्रतिस्थापित किया जाना चाहिए ताकि :: के बाईं ओर के अक्षर-समूह युग्म के बीच का पैटर्न और संबंध, :: के दाईं ओर के अक्षर-समूह युग्म के पैटर्न और संबंध के समान हो?

# : XAF :: SVA : %

- Ans ☒ 1. # = BEJ % = ORP
- ☒ 2. # = BEJ % = QRW
- ☒ 3. # = BBJ % = ORW
- ☒ 4. # = BEJ % = ORW

Question ID : 630680731372  
Option 1 ID : 6306802866180  
Option 2 ID : 6306802866182  
Option 3 ID : 6306802866181  
Option 4 ID : 6306802866183  
Status : Answered  
Chosen Option : 4



**Q.30** Select the correct option that indicates the arrangement of the following words in a logical and meaningful order.

1. Delivery
2. Finished Paper
3. Dry
4. Pulp
5. Press

**Ans** ☒ 1. 5, 4, 2, 3, 1  
☒ 2. 4, 1, 2, 5, 3  
☒ 3. 2, 5, 4, 3, 1  
☒ 4. 4, 5, 3, 2, 1

Question ID : 630680523401  
Option 1 ID : 6306802045785  
Option 2 ID : 6306802045784  
Option 3 ID : 6306802045783  
Option 4 ID : 6306802045782  
Status : Answered  
Chosen Option : 4

Section : **Module I English Language and Comprehension**

**Q.1** Select the option that can be used as a one-word substitute for the given group of words.

One who cannot make a mistake

**Ans** ☒ 1. Inevitable  
☒ 2. Infallible  
☒ 3. Inimitable  
☒ 4. Impregnable

Question ID : 63068069344  
Option 1 ID : 630680268054  
Option 2 ID : 630680268056  
Option 3 ID : 630680268057  
Option 4 ID : 630680268055  
Status : Answered  
Chosen Option : 2

**Q.2** Select the most appropriate option to fill in the blank.  
Luck does not always favour us, so we must always depend \_\_\_\_\_ our own efforts for success.

**Ans** ☒ 1. upon  
☒ 2. for  
☒ 3. in  
☒ 4. at

Question ID : 630680145368  
Option 1 ID : 630680562448  
Option 2 ID : 630680562447  
Option 3 ID : 630680562446  
Option 4 ID : 630680562449  
Status : Answered  
Chosen Option : 1

**Q.3** Select the most appropriate meaning of the underlined word.

He walked leisurely towards the entrance.

- Ans**
- ☒ 1. reassuringly
  - ☒ 2. hastily
  - ☒ 3. with a kickstart
  - ☒ 4. without haste

Question ID : 630680112405

Option 1 ID : 630680435333

Option 2 ID : 630680435330

Option 3 ID : 630680435332

Option 4 ID : 630680435331

Status : Marked For Review

Chosen Option : 4

**Q.4** Select the most appropriate ANTONYM of the given word.

Accumulated

- Ans**
- ☒ 1. Scattered
  - ☒ 2. Spared
  - ☒ 3. Bunched
  - ☒ 4. Garnered

Question ID : 630680182486

Option 1 ID : 630680707099

Option 2 ID : 630680707096

Option 3 ID : 630680707097

Option 4 ID : 630680707098

Status : Answered

Chosen Option : 1

**Q.5** Select the option that expresses the given sentence in passive voice.

Everyone was surprised at his speech.

- Ans**
- ☒ 1. His speech surprise everyone.
  - ☒ 2. His speech was surprising to everyone.
  - ☒ 3. His speech is surprising everyone.
  - ☒ 4. His speech surprised everyone.

Question ID : 630680616655

Option 1 ID : 6306802412880

Option 2 ID : 6306802412883

Option 3 ID : 6306802412882

Option 4 ID : 6306802412881

Status : Answered

Chosen Option : 4

**Q.6** Parts of a sentence are given below in jumbled order. Arrange the parts in the correct order to form a meaningful sentence.

- a. beginning in the 19th century,
- b. was long a mystery, and
- c. the origin of the Moon
- d. three competing theories emerged to solve it

**Ans** ✓ 1. cbad

✗ 2. dcab

✗ 3. bdca

✗ 4. abdc

Question ID : **630680730505**  
 Option 1 ID : **6306802862697**  
 Option 2 ID : **6306802862698**  
 Option 3 ID : **6306802862699**  
 Option 4 ID : **6306802862700**  
 Status : **Answered**  
 Chosen Option : 1

**Q.7** A sentence has been split up into segments and given below in jumbled order. While the first and the last segments of the sentence (1 and 6) are in the correct order, the segments in between are jumbled up. Arrange the segments in the correct order to form a meaningful and coherent sentence.

- 1) India has been a land
- P) and the learned man has been held in higher esteem
- Q) of learning through the ages
- R) but in the sense that learning has always been very highly valued
- S) not indeed in the sense that education has been universal
- 6) than the warrior or the administrator.

**Ans** ✗ 1. R, Q, S, P

✗ 2. S, R, Q, P

✓ 3. Q, S, R, P

✗ 4. P, S, Q, R

Question ID : **630680295269**  
 Option 1 ID : **6306801148803**  
 Option 2 ID : **6306801148800**  
 Option 3 ID : **6306801148801**  
 Option 4 ID : **6306801148802**  
 Status : **Answered**  
 Chosen Option : 3

**Q.8** Select the most appropriate option to fill in the blank.

The mango is \_\_\_\_\_ fruit.

**Ans** ✗ 1. sweetly

✗ 2. sweeter

✓ 3. sweetest

✗ 4. sweet

Question ID : **630680617611**  
 Option 1 ID : **6306802416676**  
 Option 2 ID : **6306802416675**  
 Option 3 ID : **6306802416674**  
 Option 4 ID : **6306802416673**  
 Status : **Answered**  
 Chosen Option : 4

**Q.9** Parts of a sentence are given below in jumbled order. Select the option that gives their correct logical sequence to form a meaningful sentence.

- a. it requires constant sustenance
- b. in order for life to be liveable,
- c. that enable it to grow and develop
- d. and favourable circumstances

**Ans** ☒ 1. b, d, a, c  
☒ 2. a, b, c, d  
☒ 3. d, c, b, a  
☒ 4. b, a, d, c

Question ID : 630680171759

Option 1 ID : 630680665474

Option 2 ID : 630680665471

Option 3 ID : 630680665472

Option 4 ID : 630680665473

Status : Answered

Chosen Option : 4

**Q.10** Sentences of a paragraph are given below in jumbled order. Arrange the sentences in the correct order to form a meaningful and coherent paragraph.

- A. As cost of raw materials cannot be reduced, exporters try to cut labour costs.
- B. Large MNCs in the garment industry in Europe and America order their products from Indian exporters.
- C. These large MNCs with worldwide network look for the cheapest goods in order to maximise their profits.
- D. To get these large orders, Indian garment exporters try hard to cut their own costs.
- E. Where earlier a factory used to employ workers on a permanent basis, now they employ workers only on a temporary basis so that they do not have to pay workers for the whole year.

**Ans** ☒ 1. BCDAE  
☒ 2. ADECB  
☒ 3. DCABE  
☒ 4. CDAEB

Question ID : 630680628235

Option 1 ID : 6306802458957

Option 2 ID : 6306802458958

Option 3 ID : 6306802458955

Option 4 ID : 6306802458956

Status : Answered

Chosen Option : 1

**Q.11** Select the most appropriate pronoun to fill in the blank.

Mr. Amit Kumar, Proprietor of Xyling Pens is known for \_\_\_\_\_ honesty and decent behaviour in the business arena.

**Ans** ☒ 1. they  
☒ 2. it  
☒ 3. his  
☒ 4. her

Question ID : 630680158944

Option 1 ID : 630680615245

Option 2 ID : 630680615246

Option 3 ID : 630680615247

Option 4 ID : 630680615244

Status : Answered

Chosen Option : 3

**Q.12** Select the most appropriate homophone from the options to fill in the blank.

We should \_\_\_\_\_ away all prejudices to live in harmony.

- Ans**   ☒ 1. cost  
          ☒ 2. cast  
          ☒ 3. coast  
          ☒ 4. caste

Question ID : 630680168552

Option 1 ID : 630680652820

Option 2 ID : 630680652822

Option 3 ID : 630680652823

Option 4 ID : 630680652821

Status : Answered

Chosen Option : 2

**Q.13** Select the most appropriate **ANTONYM** of the word given below.  
**Enhance**

- Ans**   ☒ 1. Impair  
          ☒ 2. Enrich  
          ☒ 3. Relevance  
          ☒ 4. Miracle

Question ID : 630680166476

Option 1 ID : 630680644826

Option 2 ID : 630680644827

Option 3 ID : 630680644824

Option 4 ID : 630680644825

Status : Answered

Chosen Option : 1

**Q.14** Parts of the following sentence have been given as options. Select the option that contains an error.

It takes me an hour to get to work at the moment, but when the new road is finished it be much quicker.

- Ans**   ☒ 1. it be much quicker  
          ☒ 2. at the moment  
          ☒ 3. but when the new road is finished  
          ☒ 4. It takes me an hour to get to work

Question ID : 630680751153

Option 1 ID : 6306802944041

Option 2 ID : 6306802944039

Option 3 ID : 6306802944040

Option 4 ID : 6306802944038

Status : Answered

Chosen Option : 1

**Q.15** Sentences of a paragraph are given below in jumbled order. Arrange the sentences in the correct order to form a meaningful and coherent paragraph.

- A. It consists of a terracotta army of approximately 8000 life-sized men and horses.
- B. Each of the horses and men is individually sculpted by a 3-inch-thick terracotta clay and looks unique.
- C. Shi Huangdi was the founder of Qin Dynasty and was the first ruler of unified China in 221 BC.
- D. His mausoleum was recently discovered in 1974 by Chinese peasants who were drilling a well.

**Ans** ✓ 1. CDAB

✗ 2. CBAD

✗ 3. CADB

✗ 4. CABD

Question ID : 630680617332

Option 1 ID : 6306802415570

Option 2 ID : 6306802415573

Option 3 ID : 6306802415571

Option 4 ID : 6306802415572

Status : Answered

Chosen Option : 1

**Q.16** Select the most appropriate **ANTONYM** of the given word.

**Generous**

**Ans** ✓ 1. Selfish

✗ 2. Magnanimous

✗ 3. Benevolent

✗ 4. Altruistic

Question ID : 630680570739

Option 1 ID : 6306802231977

Option 2 ID : 6306802231980

Option 3 ID : 6306802231978

Option 4 ID : 6306802231979

Status : Answered

Chosen Option : 1

**Q.17** Select the most appropriate meaning of the underlined idiom.  
The team decided to pull out all the stops for their upcoming presentation.

**Ans** ✗ 1. Give up easily and without thinking much

✗ 2. Keep things simple and straightforward

✗ 3. Wait patiently for a more favourable time

✓ 4. To do everything to make something successful

Question ID : 630680639283

Option 1 ID : 6306802502856

Option 2 ID : 6306802502857

Option 3 ID : 6306802502854

Option 4 ID : 6306802502855

Status : Answered

Chosen Option : 4

**Q.18** Sentences of a paragraph are given below in jumbled order. Arrange the sentences in the correct order to form a meaningful and coherent paragraph.

- A. Psychotherapy is a voluntary relationship between the one seeking treatment or the client and the one who treats or the therapist.  
B. The relationship is conducive for building the trust of the client so that problems may be freely discussed.  
C. The purpose of the relationship is to help the client to solve the psychological problems being faced by her or him.  
D. Psychotherapies aim at changing the maladaptive behaviours, decreasing the sense of personal distress and helping the client to adapt better to her/his environment.  
E. Inadequate marital, occupational and social adjustment also requires that major changes be made in an individual's personal environment.

Ans ☒ 1. EDACB  
☒ 2. DCABE  
☒ 3. CDEBA  
☒ 4. ACBDE

Question ID : 630680628213  
Option 1 ID : 6306802458864  
Option 2 ID : 6306802458863  
Option 3 ID : 6306802458865  
Option 4 ID : 6306802458866

Status : Answered  
Chosen Option : 4

**Q.19** Select the option that expresses the given sentence in direct speech.

The District Magistrate ordered the police to work all night and put an end to those riots.

Ans ☒ 1. The District Magistrate told the police, "Work all night and put to end these riots."  
☒ 2. The District Magistrate told the police, "Work all night and put an end to these riots."  
☒ 3. The District Magistrate told the police, "Work all night to put an end these riots."  
☒ 4. The District Magistrate told the police, "Work all night and put an end to their riots."

Question ID : 630680627823  
Option 1 ID : 6306802457393  
Option 2 ID : 6306802457391  
Option 3 ID : 6306802457394  
Option 4 ID : 6306802457392

Status : Answered  
Chosen Option : 2

**Q.20** Select the option that expresses the given sentence in passive voice.

Did you hear that noise?

Ans ☒ 1. Was that noise heard by you?  
☒ 2. Wasn't that noise heard by you?  
☒ 3. Has that noise been heard by you?  
☒ 4. Is that noise heard by you?

Question ID : 630680627559  
Option 1 ID : 6306802456338  
Option 2 ID : 6306802456341  
Option 3 ID : 6306802456339  
Option 4 ID : 6306802456340

Status : Answered  
Chosen Option : 1

**Q.21** Select the option that expresses the given sentence in direct speech.

The teacher informed that the exam had been postponed.

- Ans** ✓ 1. The teacher informed, "The exam has been postponed."  
✗ 2. The teacher informs, "The exam had been postponed."  
✗ 3. The teacher informed, "The exam was being postponed."  
✗ 4. The teacher informs, "The exam has been postponed."

Question ID : 630680628022

Option 1 ID : 6306802458146

Option 2 ID : 6306802458144

Option 3 ID : 6306802458145

Option 4 ID : 6306802458143

Status : Answered

Chosen Option : 1

**Q.22** Select the option that expresses the given sentence in reported speech.

'I am determined to publish my findings,' the scientist asserted confidently.

- Ans** ✗ 1. The scientist confidently asserted that she had determined to publish her findings.  
✓ 2. The scientist confidently asserted that she was determined to publish her findings.  
✗ 3. The scientist confidently asserted that she would be determined to publish her findings.  
✗ 4. The scientist confidently asserted that she is determined to publish her findings.

Question ID : 630680607922

Option 1 ID : 6306802378871

Option 2 ID : 6306802378869

Option 3 ID : 6306802378872

Option 4 ID : 6306802378870

Status : Answered

Chosen Option : 2

**Q.23** Select the correct spelling of the incorrectly spelt word in the given sentence.

The trainer tried to guage the learners' understanding of the subject by asking several new questions.

- Ans** ✓ 1. Gauge  
✗ 2. Gaage  
✗ 3. Gaugg  
✗ 4. Gaaug

Question ID : 6306801320360

Option 1 ID : 6306805195995

Option 2 ID : 6306805195998

Option 3 ID : 6306805195996

Option 4 ID : 6306805195997

Status : Answered

Chosen Option : 1



**Q.24** Complete the dialogue for Person B using the correct idiom.

**Person A:** I am so nervous. I don't think I should make the speech tomorrow.

**Person B:** No. You are just getting \_\_\_\_\_. You have prepared for this.

**Ans** ✓ 1. cold feet

✗ 2. hot feet

✗ 3. cold foot

✗ 4. cold hand

Question ID : 630680333139

Option 1 ID : 6306801295830

Option 2 ID : 6306801295829

Option 3 ID : 6306801295831

Option 4 ID : 6306801295832

Status : Answered

Chosen Option : 1

**Q.25** Select the correct spelling of the incorrectly spelt word in the given sentence.

All criminal attitudes must be niped at the bud.

**Ans** ✗ 1. Nipeed

✗ 2. Nipedd

✗ 3. Niiped

✓ 4. Nipped

Question ID : 6306801309320

Option 1 ID : 6306805152123

Option 2 ID : 6306805152124

Option 3 ID : 6306805152121

Option 4 ID : 6306805152122

Status : Answered

Chosen Option : 4

**Q.26** Select the option that expresses the given sentence in passive voice.  
The explosion caused serious damage in Ukraine.

**Ans** ✗ 1. Serious damage in Ukraine has been caused by the explosion.

✗ 2. Serious damage has been caused by the explosion in Ukraine.

✓ 3. Serious damage was caused by the explosion in Ukraine.

✗ 4. In Ukraine, serious damage had been caused by the explosion.

Question ID : 630680182484

Option 1 ID : 630680707090

Option 2 ID : 630680707088

Option 3 ID : 630680707089

Option 4 ID : 630680707091

Status : Answered

Chosen Option : 3

**Q.27** Select the most appropriate option to fill in the blank.

Rashid was not able to \_\_\_\_\_ the pain after the accident.

- Ans**    ☒ 1. bear  
          ☒ 2. bare  
          ☒ 3. buyer  
          ☒ 4. beer

Question ID : 630680674113

Option 1 ID : 6306802639981

Option 2 ID : 6306802639979

Option 3 ID : 6306802639982

Option 4 ID : 6306802639980

Status : Answered

Chosen Option : 1

**Q.28** Select the option that can be used as a one-word substitute for the given group of words.

A sudden and violent change or upheaval

- Ans**    ☒ 1. Equanimity  
          ☒ 2. Turbulence  
          ☒ 3. Tranquility  
          ☒ 4. Serenity

Question ID : 6306801047562

Option 1 ID : 6306804112308

Option 2 ID : 6306804112305

Option 3 ID : 6306804112307

Option 4 ID : 6306804112306

Status : Marked For Review

Chosen Option : 2

**Q.29** Select the most appropriate option to fill in the blank.

No other book in the series captivated readers as \_\_\_\_\_ as the final installment.

- Ans**    ☒ 1. many  
          ☒ 2. most  
          ☒ 3. more  
          ☒ 4. much

Question ID : 630680596018

Option 1 ID : 6306802332257

Option 2 ID : 6306802332258

Option 3 ID : 6306802332256

Option 4 ID : 6306802332259

Status : Answered

Chosen Option : 4

**Comprehension:**

In the following passage, some words have been deleted. Read the passage carefully and select the most appropriate option to fill in each blank.

Climate change (1)\_\_\_\_\_ an imminent threat to our planet, demanding urgent global action. The rise in greenhouse gas emissions, deforestation and unsustainable practices contribute to extreme weather events, rising sea levels and disruptions in ecosystems. To (2)\_\_\_\_\_ these effects, a collaborative international effort is essential. Nations (3)\_\_\_\_\_ commit to reducing carbon emissions, transitioning to renewable energy sources and implementing sustainable practices. Cooperation on technological advancements and sharing resources will foster a collective resilience against the impacts of climate change. The urgency of this issue calls for a united front, where governments, businesses and individuals work together to create a sustainable and resilient future for the (4)\_\_\_\_\_ to come.

**SubQuestion No : 30**

**Q.30** Select the most appropriate option to fill in blank number 1.

- Ans ☒ 1. will be posing  
☒ 2. will pose  
☒ 3. poses  
☒ 4. posed

Question ID : **630680530551**  
Option 1 ID : **6306802074096**  
Option 2 ID : **6306802074095**  
Option 3 ID : **6306802074094**  
Option 4 ID : **6306802074093**  
Status : **Answered**  
Chosen Option : **3**

**Comprehension:**

In the following passage, some words have been deleted. Read the passage carefully and select the most appropriate option to fill in each blank.

Climate change (1)\_\_\_\_\_ an imminent threat to our planet, demanding urgent global action. The rise in greenhouse gas emissions, deforestation and unsustainable practices contribute to extreme weather events, rising sea levels and disruptions in ecosystems. To (2)\_\_\_\_\_ these effects, a collaborative international effort is essential. Nations (3)\_\_\_\_\_ commit to reducing carbon emissions, transitioning to renewable energy sources and implementing sustainable practices. Cooperation on technological advancements and sharing resources will foster a collective resilience against the impacts of climate change. The urgency of this issue calls for a united front, where governments, businesses and individuals work together to create a sustainable and resilient future for the (4)\_\_\_\_\_ to come.

**SubQuestion No : 31**

**Q.31** Select the most appropriate option to fill in blank number 2.

- Ans ☒ 1. maximise  
☒ 2. mitigate  
☒ 3. inflate  
☒ 4. widen

Question ID : **630680530552**  
Option 1 ID : **6306802074097**  
Option 2 ID : **6306802074099**  
Option 3 ID : **6306802074098**  
Option 4 ID : **6306802074100**  
Status : **Answered**  
Chosen Option : **2**

**Comprehension:**

In the following passage, some words have been deleted. Read the passage carefully and select the most appropriate option to fill in each blank.

Climate change (1)\_\_\_\_\_ an imminent threat to our planet, demanding urgent global action. The rise in greenhouse gas emissions, deforestation and unsustainable practices contribute to extreme weather events, rising sea levels and disruptions in ecosystems. To (2)\_\_\_\_\_ these effects, a collaborative international effort is essential. Nations (3)\_\_\_\_\_ commit to reducing carbon emissions, transitioning to renewable energy sources and implementing sustainable practices. Cooperation on technological advancements and sharing resources will foster a collective resilience against the impacts of climate change. The urgency of this issue calls for a united front, where governments, businesses and individuals work together to create a sustainable and resilient future for the (4)\_\_\_\_\_ to come.

**SubQuestion No : 32**

**Q.32** Select the most appropriate option to fill in blank number 3.

- Ans**   ☒ 1. could  
         ☒ 2. would  
         ☒ 3. might  
         ☒ 4. must

Question ID : **630680530553**  
Option 1 ID : **6306802074101**  
Option 2 ID : **6306802074102**  
Option 3 ID : **6306802074103**  
Option 4 ID : **6306802074104**  
Status : **Answered**  
Chosen Option : **4**

**Comprehension:**

In the following passage, some words have been deleted. Read the passage carefully and select the most appropriate option to fill in each blank.

Climate change (1)\_\_\_\_\_ an imminent threat to our planet, demanding urgent global action. The rise in greenhouse gas emissions, deforestation and unsustainable practices contribute to extreme weather events, rising sea levels and disruptions in ecosystems. To (2)\_\_\_\_\_ these effects, a collaborative international effort is essential. Nations (3)\_\_\_\_\_ commit to reducing carbon emissions, transitioning to renewable energy sources and implementing sustainable practices. Cooperation on technological advancements and sharing resources will foster a collective resilience against the impacts of climate change. The urgency of this issue calls for a united front, where governments, businesses and individuals work together to create a sustainable and resilient future for the (4)\_\_\_\_\_ to come.

**SubQuestion No : 33**

**Q.33** Select the most appropriate option to fill in blank number 4.

- Ans**   ☒ 1. generations  
         ☒ 2. businessmen  
         ☒ 3. poor people  
         ☒ 4. backward nations

Question ID : **630680530554**  
Option 1 ID : **6306802074105**  
Option 2 ID : **6306802074106**  
Option 3 ID : **6306802074107**  
Option 4 ID : **6306802074108**  
Status : **Answered**  
Chosen Option : **1**

**Comprehension:**

Read the given passage and answer the questions that follow.

Subhas Chandra Bose, a prominent Indian nationalist leader, was convinced that India could not achieve independence without the use of force, and he believed that a military campaign was necessary to achieve this goal. In 1942, Bose formed the Indian National Army (INA) with the help of the Japanese.

Bose travelled to Japan in 1941 to seek their support in the struggle against British rule in India. The Japanese were interested in having Bose's help in their own efforts to expand their influence in Southeast Asia. Bose's vision was to create a military force to fight against the British in India with the help of Japanese weapons and training. The INA was formed in Singapore in September 1942 with the slogan 'Jai Hind' (Victory to India). The INA consisted of soldiers who were primarily from the Indian community in Southeast Asia. They were trained by Japanese officers and were equipped with Japanese weapons. The INA fought alongside Japanese forces in Burma and other parts of Southeast Asia during World War II. Bose's leadership of the INA and his military campaigns against the British in India made him a popular figure among many Indians. The consequences of the formation of the INA were significant. The INA's campaigns against the British in India and the Indian soldiers' role in the Burma campaign had a psychological impact on the British forces. The British were shocked that Indian soldiers had turned against them, undermining their confidence in maintaining control over India. The INA also had a significant impact on the Indian independence movement. Bose's vision of a socialist India with equal rights for all citizens inspired many Indians. The INA became a symbol of the struggle against British colonialism, and Bose's slogan of 'Jai Hind' became a rallying cry for the independence movement.

However, the INA's military campaigns were not successful in achieving their goal of freeing India from British rule. The INA suffered significant losses in battles, and their efforts were undermined by the Japanese surrender in 1945.

**SubQuestion No : 34**

**Q.34 What was the primary reason for the Japanese to support Subhas Chandra Bose and the formation of the INA?**

- Ans**
- ☒ 1. They were looking for allies in their fight against the British Empire.
  - ☒ 2. They wanted to expand their influence in Southeast Asia.
  - ☒ 3. They believed in Bose's vision of a communist India.
  - ☒ 4. They believed in India's right to self-determination.

Question ID : **630680513127**  
Option 1 ID : **6306802005337**  
Option 2 ID : **6306802005335**  
Option 3 ID : **6306802005334**  
Option 4 ID : **6306802005336**

Status : **Answered**

Chosen Option : **2**

**Comprehension:**

Read the given passage and answer the questions that follow.

Subhas Chandra Bose, a prominent Indian nationalist leader, was convinced that India could not achieve independence without the use of force, and he believed that a military campaign was necessary to achieve this goal. In 1942, Bose formed the Indian National Army (INA) with the help of the Japanese.

Bose travelled to Japan in 1941 to seek their support in the struggle against British rule in India. The Japanese were interested in having Bose's help in their own efforts to expand their influence in Southeast Asia. Bose's vision was to create a military force to fight against the British in India with the help of Japanese weapons and training. The INA was formed in Singapore in September 1942 with the slogan 'Jai Hind' (Victory to India). The INA consisted of soldiers who were primarily from the Indian community in Southeast Asia. They were trained by Japanese officers and were equipped with Japanese weapons. The INA fought alongside Japanese forces in Burma and other parts of Southeast Asia during World War II. Bose's leadership of the INA and his military campaigns against the British in India made him a popular figure among many Indians. The consequences of the formation of the INA were significant. The INA's campaigns against the British in India and the Indian soldiers' role in the Burma campaign had a psychological impact on the British forces. The British were shocked that Indian soldiers had turned against them, undermining their confidence in maintaining control over India. The INA also had a significant impact on the Indian independence movement. Bose's vision of a socialist India with equal rights for all citizens inspired many Indians. The INA became a symbol of the struggle against British colonialism, and Bose's slogan of 'Jai Hind' became a rallying cry for the independence movement.

However, the INA's military campaigns were not successful in achieving their goal of freeing India from British rule. The INA suffered significant losses in battles, and their efforts were undermined by the Japanese surrender in 1945.

**SubQuestion No : 35**

**Q.35** How did Subhas Chandra Bose view India's fight for independence?

- Ans**
- ☒ 1. Through economic sanctions
  - ☒ 2. Through non-violent means
  - ☒ 3. Through military campaigns
  - ☒ 4. Through political negotiations

Question ID : **630680513124**  
Option 1 ID : **6306802005325**  
Option 2 ID : **6306802005322**  
Option 3 ID : **6306802005323**  
Option 4 ID : **6306802005324**

Status : **Answered**

Chosen Option : **3**

**Comprehension:**

Read the given passage and answer the questions that follow.

Subhas Chandra Bose, a prominent Indian nationalist leader, was convinced that India could not achieve independence without the use of force, and he believed that a military campaign was necessary to achieve this goal. In 1942, Bose formed the Indian National Army (INA) with the help of the Japanese.

Bose travelled to Japan in 1941 to seek their support in the struggle against British rule in India. The Japanese were interested in having Bose's help in their own efforts to expand their influence in Southeast Asia. Bose's vision was to create a military force to fight against the British in India with the help of Japanese weapons and training. The INA was formed in Singapore in September 1942 with the slogan 'Jai Hind' (Victory to India). The INA consisted of soldiers who were primarily from the Indian community in Southeast Asia. They were trained by Japanese officers and were equipped with Japanese weapons. The INA fought alongside Japanese forces in Burma and other parts of Southeast Asia during World War II. Bose's leadership of the INA and his military campaigns against the British in India made him a popular figure among many Indians. The consequences of the formation of the INA were significant. The INA's campaigns against the British in India and the Indian soldiers' role in the Burma campaign had a psychological impact on the British forces. The British were shocked that Indian soldiers had turned against them, undermining their confidence in maintaining control over India. The INA also had a significant impact on the Indian independence movement. Bose's vision of a socialist India with equal rights for all citizens inspired many Indians. The INA became a symbol of the struggle against British colonialism, and Bose's slogan of 'Jai Hind' became a rallying cry for the independence movement.

However, the INA's military campaigns were not successful in achieving their goal of freeing India from British rule. The INA suffered significant losses in battles, and their efforts were undermined by the Japanese surrender in 1945.

**SubQuestion No : 36**

**Q.36 What was the significance of Bose's slogan 'Jai Hind'?**

- Ans**
- ☒ 1. It manifests the vision of selected communities.
  - ☒ 2. It was a call to arms for the Indian and British Army.
  - ☒ 3. It symbolised the struggle against British colonialism.
  - ☒ 4. It represented Bose's vision of a capitalist India.

Question ID : **630680513125**

Option 1 ID : **6306802005329**

Option 2 ID : **6306802005326**

Option 3 ID : **6306802005327**

Option 4 ID : **6306802005328**

Status : **Answered**

Chosen Option : **3**

**Comprehension:**

Read the given passage and answer the questions that follow.

Subhas Chandra Bose, a prominent Indian nationalist leader, was convinced that India could not achieve independence without the use of force, and he believed that a military campaign was necessary to achieve this goal. In 1942, Bose formed the Indian National Army (INA) with the help of the Japanese.

Bose travelled to Japan in 1941 to seek their support in the struggle against British rule in India. The Japanese were interested in having Bose's help in their own efforts to expand their influence in Southeast Asia. Bose's vision was to create a military force to fight against the British in India with the help of Japanese weapons and training. The INA was formed in Singapore in September 1942 with the slogan 'Jai Hind' (Victory to India). The INA consisted of soldiers who were primarily from the Indian community in Southeast Asia. They were trained by Japanese officers and were equipped with Japanese weapons. The INA fought alongside Japanese forces in Burma and other parts of Southeast Asia during World War II. Bose's leadership of the INA and his military campaigns against the British in India made him a popular figure among many Indians. The consequences of the formation of the INA were significant. The INA's campaigns against the British in India and the Indian soldiers' role in the Burma campaign had a psychological impact on the British forces. The British were shocked that Indian soldiers had turned against them, undermining their confidence in maintaining control over India. The INA also had a significant impact on the Indian independence movement. Bose's vision of a socialist India with equal rights for all citizens inspired many Indians. The INA became a symbol of the struggle against British colonialism, and Bose's slogan of 'Jai Hind' became a rallying cry for the independence movement.

However, the INA's military campaigns were not successful in achieving their goal of freeing India from British rule. The INA suffered significant losses in battles, and their efforts were undermined by the Japanese surrender in 1945.

**SubQuestion No : 37**

**Q.37 What ultimately undermined the INA's efforts to free India from British rule?**

- Ans** ☒ 1. The lack of support from the Indian and British people
- ☒ 2. The Japanese surrender in 1945
- ☒ 3. Gandhi's death
- ☒ 4. The inferior military tactics of the British forces

Question ID : **630680513126**  
 Option 1 ID : **6306802005330**  
 Option 2 ID : **6306802005331**  
 Option 3 ID : **6306802005332**  
 Option 4 ID : **6306802005333**  
 Status : **Answered**  
 Chosen Option : **2**

**Comprehension:**

Read the given passage and answer the questions that follow.

The French Revolution is a revolutionary movement that occurred in France between 1787 and 1799 and reached to its (1) \_\_\_\_\_ in 1789. This revolution had many causes but the most important of all was (2) \_\_\_\_\_ of bourgeoisie, who were merchants, manufacturers and professionals. The peasants, many of them landowners, wanted to get rid of the practices of absolute monarchy and feudalism. Another factor was an increase in population due to decreased mortality rates. It was followed by economic predicament and minor revolts were common. This led to a clarion call for social reforms. Intellectuals like Rene Descartes wrote about new things about political, social and economic matters. A fundamental political and societal change was to occur. The French Revolution played a critical role in shaping modern nations by showing the world the power inherent in the will of the people.

**SubQuestion No : 38**

**Q.38 What is the meaning of the phrase 'a clarion call' in the passage?**

- Ans** ☒ 1. Declaration of war
- ☒ 2. A call for forces
- ☒ 3. Beginning of a new phase
- ☒ 4. A strongly expressed demand

Question ID : **630680405735**  
 Option 1 ID : **6306801582069**  
 Option 2 ID : **6306801582071**  
 Option 3 ID : **6306801582070**  
 Option 4 ID : **6306801582068**  
 Status : **Answered**  
 Chosen Option : **4**



**Comprehension:**

Read the given passage and answer the questions that follow.

The French Revolution is a revolutionary movement that occurred in France between 1787 and 1799 and reached to its (1)\_\_\_\_\_ in 1789. This revolution had many causes but the most important of all was (2)\_\_\_\_\_ of bourgeoisie, who were merchants, manufacturers and professionals. The peasants, many of them landowners, wanted to get rid of the practices of absolute monarchy and feudalism. Another factor was an increase in population due to decreased mortality rates. It was followed by economic predicament and minor revolts were common. This led to a clarion call for social reforms. Intellectuals like Rene Descartes wrote about new things about political, social and economic matters. A fundamental political and societal change was to occur. The French Revolution played a critical role in shaping modern nations by showing the world the power inherent in the will of the people.

**SubQuestion No : 39**

**Q.39** Select the most appropriate option to fill in blank no. 1.

Ans ☒ 1. foundation

☒ 2. pinnacle

☒ 3. middle

☒ 4. fall

Question ID : **630680405733**

Option 1 ID : **6306801582061**

Option 2 ID : **6306801582060**

Option 3 ID : **6306801582063**

Option 4 ID : **6306801582062**

Status : **Answered**

Chosen Option : **2**

**Comprehension:**

Read the given passage and answer the questions that follow.

The French Revolution is a revolutionary movement that occurred in France between 1787 and 1799 and reached to its (1)\_\_\_\_\_ in 1789. This revolution had many causes but the most important of all was (2)\_\_\_\_\_ of bourgeoisie, who were merchants, manufacturers and professionals. The peasants, many of them landowners, wanted to get rid of the practices of absolute monarchy and feudalism. Another factor was an increase in population due to decreased mortality rates. It was followed by economic predicament and minor revolts were common. This led to a clarion call for social reforms. Intellectuals like Rene Descartes wrote about new things about political, social and economic matters. A fundamental political and societal change was to occur. The French Revolution played a critical role in shaping modern nations by showing the world the power inherent in the will of the people.

**SubQuestion No : 40**

**Q.40** Select the most appropriate synonym of the word 'Inherent'.

Ans ☒ 1. Natural

☒ 2. Artificial

☒ 3. Incited

☒ 4. Borrowed

Question ID : **630680405736**

Option 1 ID : **6306801582072**

Option 2 ID : **6306801582073**

Option 3 ID : **6306801582074**

Option 4 ID : **6306801582075**

Status : **Answered**

Chosen Option : **3**

**Comprehension:**

Read the given passage and answer the questions that follow.

The French Revolution is a revolutionary movement that occurred in France between 1787 and 1799 and reached to its (1)\_\_\_\_\_ in 1789. This revolution had many causes but the most important of all was (2)\_\_\_\_\_ of bourgeoisie, who were merchants, manufacturers and professionals. The peasants, many of them landowners, wanted to get rid of the practices of absolute monarchy and feudalism. Another factor was an increase in population due to decreased mortality rates. It was followed by economic predicament and minor revolts were common. This led to a clarion call for social reforms. Intellectuals like Rene Descartes wrote about new things about political, social and economic matters. A fundamental political and societal change was to occur. The French Revolution played a critical role in shaping modern nations by showing the world the power inherent in the will of the people.

**SubQuestion No : 41**

**Q.41** Select the most appropriate option to fill in blank no. 2.

- Ans ☒ 1. sorrow  
☒ 2. joy  
☒ 3. killing  
☒ 4. hankering

Question ID : 630680405734

Option 1 ID : 6306801582066

Option 2 ID : 6306801582065

Option 3 ID : 6306801582067

Option 4 ID : 6306801582064

Status : Answered

Chosen Option : 4

**Comprehension:**

Read the given passage and answer the questions that follow.

Algae are photosynthetic creatures that have pigments that aid in photosynthesis, such as chlorophyll. They do not, however, have the actual stems, roots or leaves found in vascular plants. While some of them have many cells, others are unicellular. They might establish colonies as well. The majority of algae are aquatic. Some are terrestrial, and they can be found on rocks, trees and moist soil. Certain algae species coexist well with other living things. For instance, lichens are a symbiotic relationship between green (and often blue-green) algae and fungi. Algae are members of a multiphyletic group. This indicates that there is no common ancestor and that the species in this category are not necessarily closely related. They do not have other morphoanatomical characteristics typical of vascular plants, but they do have one thing in common: they are eukaryotes with the principal pigment being chlorophyll, which allows them to perform photosynthesis. Phycology is the scientific name for the study of algae. The blue-green algae is one example of a reference. But some sources do not classify them as algae because they are prokaryotes.

**SubQuestion No : 42**

**Q.42** What is the central theme of the passage?

- Ans ☒ 1. The anatomy of vascular plants  
☒ 2. The diversity and characteristics of algae  
☒ 3. The prokaryotic nature of blue-green algae  
☒ 4. The symbiotic relationship between algae and fungi

Question ID : 630680545638

Option 1 ID : 6306802133144

Option 2 ID : 6306802133146

Option 3 ID : 6306802133147

Option 4 ID : 6306802133145

Status : Answered

Chosen Option : 2

**Comprehension:**

Read the given passage and answer the questions that follow.

Algae are photosynthetic creatures that have pigments that aid in photosynthesis, such as chlorophyll. They do not, however, have the actual stems, roots or leaves found in vascular plants. While some of them have many cells, others are unicellular. They might establish colonies as well. The majority of algae are aquatic. Some are terrestrial, and they can be found on rocks, trees and moist soil. Certain algae species coexist well with other living things. For instance, lichens are a symbiotic relationship between green (and often blue-green) algae and fungi. Algae are members of a multiphyletic group. This indicates that there is no common ancestor and that the species in this category are not necessarily closely related. They do not have other morphoanatomical characteristics typical of vascular plants, but they do have one thing in common: they are eukaryotes with the principal pigment being chlorophyll, which allows them to perform photosynthesis. Phycology is the scientific name for the study of algae. The blue-green algae is one example of a reference. But some sources do not classify them as algae because they are prokaryotes.

**SubQuestion No : 43**

**Q.43 What does the term 'multiphyletic group' mean in the context of algae?**

- Ans** ☒ 1. Being closely related species
- ☒ 2. No common ancestor, not closely related
- ☒ 3. Having diverse morphoanatomical characteristics
- ☒ 4. Having a common ancestor

Question ID : **630680545647**  
 Option 1 ID : **6306802133181**  
 Option 2 ID : **6306802133182**  
 Option 3 ID : **6306802133183**  
 Option 4 ID : **6306802133180**  
 Status : **Answered**  
 Chosen Option : **2**

**Comprehension:**

Read the given passage and answer the questions that follow.

Algae are photosynthetic creatures that have pigments that aid in photosynthesis, such as chlorophyll. They do not, however, have the actual stems, roots or leaves found in vascular plants. While some of them have many cells, others are unicellular. They might establish colonies as well. The majority of algae are aquatic. Some are terrestrial, and they can be found on rocks, trees and moist soil. Certain algae species coexist well with other living things. For instance, lichens are a symbiotic relationship between green (and often blue-green) algae and fungi. Algae are members of a multiphyletic group. This indicates that there is no common ancestor and that the species in this category are not necessarily closely related. They do not have other morphoanatomical characteristics typical of vascular plants, but they do have one thing in common: they are eukaryotes with the principal pigment being chlorophyll, which allows them to perform photosynthesis. Phycology is the scientific name for the study of algae. The blue-green algae is one example of a reference. But some sources do not classify them as algae because they are prokaryotes.

**SubQuestion No : 44**

**Q.44 Which statement accurately describes vascular plants based on the information in the passage?**

- Ans** ☒ 1. Vascular plants are unicellular in structure.
- ☒ 2. Algae and vascular plants share the same morphoanatomical characteristics.
- ☒ 3. Vascular plants have true stems, roots and leaves, unlike algae.
- ☒ 4. Vascular plants lack stems, roots and leaves.

Question ID : **630680545646**  
 Option 1 ID : **6306802133177**  
 Option 2 ID : **6306802133178**  
 Option 3 ID : **6306802133179**  
 Option 4 ID : **6306802133176**  
 Status : **Answered**  
 Chosen Option : **3**

**Comprehension:**

Read the given passage and answer the questions that follow.

Algae are photosynthetic creatures that have pigments that aid in photosynthesis, such as chlorophyll. They do not, however, have the actual stems, roots or leaves found in vascular plants. While some of them have many cells, others are unicellular. They might establish colonies as well. The majority of algae are aquatic. Some are terrestrial, and they can be found on rocks, trees and moist soil. Certain algae species coexist well with other living things. For instance, lichens are a symbiotic relationship between green (and often blue-green) algae and fungi. Algae are members of a multiphyletic group. This indicates that there is no common ancestor and that the species in this category are not necessarily closely related. They do not have other morphoanatomical characteristics typical of vascular plants, but they do have one thing in common: they are eukaryotes with the principal pigment being chlorophyll, which allows them to perform photosynthesis. Phycology is the scientific name for the study of algae. The blue-green algae is one example of a reference. But some sources do not classify them as algae because they are prokaryotes.

**SubQuestion No : 45**

**Q.45 According to the passage, which is the main pigment in algae for photosynthesis?**

- Ans** ☒ 1. Melanin  
☒ 2. Xanthophyll  
☒ 3. Chlorophyll  
☒ 4. Carotenoid

Question ID : **630680545645**  
Option 1 ID : **6306802133172**  
Option 2 ID : **6306802133173**  
Option 3 ID : **6306802133174**  
Option 4 ID : **6306802133175**  
Status : **Answered**  
Chosen Option : **3**

**Section : Module II General Awareness**

**Q.1 सूची 1 की पुस्तकों का सूची 2 में उनके लेखकों से मिलान कीजिए।**

**सूची 1 सूची 2**

- A. द फिलासफी ऑफ द बॉम्ब (The Philosophy of the Bomb) 1. सचिंद्रनाथ सान्याल**  
**B. बंदी जीवन (Bandi Jiwan) 2. बंकिम चंद्र चट्टोपाध्याय**  
**C. पाथेर दबी (Pather Dabi) 3. भगवतीचरण वोहरा**  
**D. आनंदमठ (Anandmath) 4. शरत चंद्र चट्टोपाध्याय**

- Ans** ☒ 1. A-3, B-1, C-4, D-2  
☒ 2. A-4, B-3, C-2, D-1  
☒ 3. A-1, B-3, C-4, D-2  
☒ 4. A-3, B-1, C-2, D-4

Question ID : **6306801102055**  
Option 1 ID : **6306804329458**  
Option 2 ID : **6306804329460**  
Option 3 ID : **6306804329459**  
Option 4 ID : **6306804329457**  
Status : **Marked For Review**  
Chosen Option : **1**

Q.2 चारकोट-मैरी-टूथ रोग किस गुणसूत्र पर पेरिफेरल माइलिन प्रोटीन-22 (PMP22) जीन के द्विगुणन के कारण होता है?

- Ans ☒ 1. क्रोमोसोम 21  
☒ 2. क्रोमोसोम 17  
☒ 3. क्रोमोसोम 8  
☒ 4. क्रोमोसोम 15

Question ID : 630680618495  
Option 1 ID : 6306802420310  
Option 2 ID : 6306802420312  
Option 3 ID : 6306802420309  
Option 4 ID : 6306802420311

Status : Answered  
Chosen Option : 1

Q.3 निम्नलिखित में से कौन-सी एकपरमाणुक गैस है?

- Ans ☒ 1. क्लोरीन  
☒ 2. जेनॉन  
☒ 3. ऑक्सीजन  
☒ 4. हाइड्रोजन

Question ID : 630680607661  
Option 1 ID : 6306802377751  
Option 2 ID : 6306802377752  
Option 3 ID : 6306802377749  
Option 4 ID : 6306802377750

Status : Answered  
Chosen Option : 2

Q.4 1956 में पारिस्थितिकी तंत्र का उल्लेख 'पारिस्थितिकी में बुनियादी इकाई' के रूप में किसने किया था?

- Ans ☒ 1. एल्डो लियोपोल्ड  
☒ 2. जॉन हार्वर  
☒ 3. रेचल कार्सन  
☒ 4. फ्रांसिस इवान्स

Question ID : 630680618937  
Option 1 ID : 6306802422026  
Option 2 ID : 6306802422025  
Option 3 ID : 6306802422027  
Option 4 ID : 6306802422024

Status : Marked For Review  
Chosen Option : 2

Q.5 निम्नलिखित में से किस मामले में सर्वोच्च न्यायालय ने निर्देश दिया था कि, 'संसद निदेशक सिद्धांतों के कार्यान्वयन के लिए किसी भी मौलिक अधिकार को नहीं छीन सकती या कम नहीं कर सकती'?

- Ans
- ☐ 1. इंदिरा साहनी केस, 1992
  - ☐ 2. केशवानंद भारती केस, 1973
  - ☐ 3. मिनर्वा मिल्स केस, 1980
  - ☒ 4. गोलक नाथ केस, 1967

Question ID : 630680723420  
Option 1 ID : 6306802834878  
Option 2 ID : 6306802834881  
Option 3 ID : 6306802834880  
Option 4 ID : 6306802834879  
Status : Answered  
Chosen Option : 3

Q.6 Select the most appropriate answer from the options given below regarding Census 2011.  
Statement 1. The population of India has increased by more than 181 million during the decade 2001-2011.  
Statement 2. The percentage decadal growth during 2001-2011 has registered the sharpest decline since Independence.

- Ans
- ☐ 1. Only statement 1 is correct.
  - ☐ 2. Both statements 1 and 2 are not correct.
  - ☒ 3. Both statements 1 and 2 are correct.
  - ☐ 4. Only statement 2 is correct.

Question ID : 630680590848  
Option 1 ID : 6306802311859  
Option 2 ID : 6306802311862  
Option 3 ID : 6306802311861  
Option 4 ID : 6306802311860  
Status : Answered  
Chosen Option : 1

Q.7 Which theory, independently introduced in 1923, led to the concept of acid-base conjugate pairs?

- Ans
- ☐ 1. Davy's theory
  - ☐ 2. Arrhenius theory
  - ☐ 3. Lewi's theory
  - ☒ 4. Brønsted-Lowry theory

Question ID : 630680618182  
Option 1 ID : 6306802419071  
Option 2 ID : 6306802419070  
Option 3 ID : 6306802419072  
Option 4 ID : 6306802419069  
Status : Answered  
Chosen Option : 4

Q.8 कौन-सा भारतीय शहर अपने सबसे गर्म और सबसे ठंडे महीनों के बीच औसत तापमान में सबसे कम अंतर का अनुभव करता है?

- Ans ☒ 1. मुंबई  
☒ 2. भोपाल  
☒ 3. श्रीनगर  
☒ 4. दिल्ली

Question ID : 630680635912  
 Option 1 ID : 6306802489520  
 Option 2 ID : 6306802489521  
 Option 3 ID : 6306802489519  
 Option 4 ID : 6306802489518  
 Status : Answered  
 Chosen Option : 3

Q.9 निम्नलिखित में से किस संवैधानिक संशोधन अधिनियम ने राष्ट्रपति को प्रधानमंत्री की अध्यक्षता वाली मंत्रिपरिषद की सलाह से बाध्य कर दिया?

- Ans ☒ 1. 40<sup>वें</sup>  
☒ 2. 46<sup>वें</sup>  
☒ 3. 48<sup>वें</sup>  
☒ 4. 42<sup>वें</sup>

Question ID : 630680615237  
 Option 1 ID : 6306802407622  
 Option 2 ID : 6306802407624  
 Option 3 ID : 6306802407625  
 Option 4 ID : 6306802407623  
 Status : Answered  
 Chosen Option : 2

Q.10 निम्नलिखित में से किस अवसर पर वर्ष 2020 में राष्ट्रीय डिजिटल स्वास्थ्य मिशन (National Digital Health Mission) की शुरुआत की गई?

- Ans ☒ 1. दिवाली  
☒ 2. गणतंत्र दिवस  
☒ 3. स्वतंत्रता दिवस  
☒ 4. गांधी जयंती

Question ID : 630680580485  
 Option 1 ID : 6306802270829  
 Option 2 ID : 6306802270826  
 Option 3 ID : 6306802270827  
 Option 4 ID : 6306802270828  
 Status : Answered  
 Chosen Option : 4

Q.11 मथुरा \_\_\_\_\_ राजवंश की दूसरी राजधानी थी।

- Ans ☒ 1. कुषाण  
☒ 2. गुप्त  
☒ 3. मौखरी  
☒ 4. मौर्य

Question ID : 630680511491  
 Option 1 ID : 6306801999088  
 Option 2 ID : 6306801999087  
 Option 3 ID : 6306801999089  
 Option 4 ID : 6306801999086  
 Status : Marked For Review  
 Chosen Option : 1

**Q.12** Which portal allowed stakeholders seamless access to information related to funding, documentation, project monitoring, and approval through four efficient ways of logging in for monitoring the implementation of Centrally Sponsored Schemes in 2023?

- Ans**
- ☒ 1. Digital India Portal
  - ☒ 2. Nyaya Vikas Portal
  - ☒ 3. Viksit Bharat Portal
  - ☒ 4. Pradhan Mantri Jan bhagidari Yojana Portal

Question ID : 630680579878  
Option 1 ID : 6306802268402  
Option 2 ID : 6306802268404  
Option 3 ID : 6306802268403  
Option 4 ID : 6306802268405  
Status : Answered  
Chosen Option : 4

**Q.13** In December 1991, which act was amended to bring public enterprises under the purview of the Board for Industrial and Financial Reconstruction (BIFR) as part of the country's economic reforms program?

- Ans**
- ☒ 1. Industries Act
  - ☒ 2. Companies Act
  - ☒ 3. Sick Industrial Companies Act
  - ☒ 4. Financial Rehabilitation Act

Question ID : 630680618155  
Option 1 ID : 6306802418962  
Option 2 ID : 6306802418961  
Option 3 ID : 6306802418963  
Option 4 ID : 6306802418964  
Status : Answered  
Chosen Option : 1

**Q.14** भारत सरकार की भारतमाला परियोजना, भारत के निम्नलिखित में से किस मंत्रालय के अंतर्गत आती है?

- Ans**
- ☒ 1. सड़क परिवहन एवं राजमार्ग मंत्रालय
  - ☒ 2. गृह मंत्रालय
  - ☒ 3. पर्यावरण, वन एवं जलवायु परिवर्तन मंत्रालय
  - ☒ 4. बंदरगाह, नौवहन एवं जलमार्ग मंत्रालय

Question ID : 630680656502  
Option 1 ID : 6306802569952  
Option 2 ID : 6306802569953  
Option 3 ID : 6306802569950  
Option 4 ID : 6306802569951  
Status : Answered  
Chosen Option : 1



Q.15 स्वतंत्र भारत के प्रथम गृहमंत्री कौन थे?

- Ans
- ☒ 1. मौलाना अब्दुल कलाम आज़ाद
  - ☒ 2. हुमायूँ कबीर
  - ☒ 3. सरदार वल्लभ भाई पटेल
  - ☒ 4. बलदेव सिंह

Question ID : 630680695139  
Option 1 ID : 6306802722796  
Option 2 ID : 6306802722798  
Option 3 ID : 6306802722797  
Option 4 ID : 6306802722795  
Status : Answered  
Chosen Option : 3

Q.16 हरित क्रांति से पहले भारत में कृषि क्षेत्र की स्थिति क्या थी?

- Ans
- ☒ 1. उन्नत प्रौद्योगिकी का प्रयोग एवं वर्षा पर निर्भरता
  - ☒ 2. पुरानी तकनीक का उपयोग और आवश्यक बुनियादी ढाँचे का अभाव
  - ☒ 3. उन्नत प्रौद्योगिकी और उच्च उत्पादकता का उपयोग
  - ☒ 4. पारंपरिक प्रौद्योगिकी का उपयोग और आवश्यक बुनियादी ढाँचे की प्रचुरता

Question ID : 630680607902  
Option 1 ID : 6306802378790  
Option 2 ID : 6306802378789  
Option 3 ID : 6306802378792  
Option 4 ID : 6306802378791  
Status : Answered  
Chosen Option : 2

Q.17 अप्रैल, 2023 में विश्व शतरंज आर्मागेडन एशिया और ओशिनिया प्रतियोगिता में खिताब किसने जीता?

- Ans
- ☒ 1. पी. हरिकृष्णा
  - ☒ 2. डी. गुकेश
  - ☒ 3. कोनेरू हम्पी
  - ☒ 4. विश्वनाथन आनंद

Question ID : 630680576300  
Option 1 ID : 6306802254033  
Option 2 ID : 6306802254035  
Option 3 ID : 6306802254034  
Option 4 ID : 6306802254032  
Status : Marked For Review  
Chosen Option : 2

Q.18 वाल्टर फ्लेमिंग ने किस वर्ष में गुणसूत्रों को स्पष्ट रूप से देखने और समसूत्रन (माइटोसिस) की पूरी प्रक्रिया का वर्णन करने के लिए गुणसूत्रों का अभिरंजन किया?

- Ans
- ☒ 1. 1956
  - ☒ 2. 1780
  - ☒ 3. 1901
  - ☒ 4. 1882

Question ID : 630680618499  
Option 1 ID : 6306802420328  
Option 2 ID : 6306802420325  
Option 3 ID : 6306802420327  
Option 4 ID : 6306802420326  
Status : Marked For Review  
Chosen Option : 4

Q.19 प्राकृतिक रूप से पाए जाने वाले एल्यूमीनियम ऑक्साइड खनिज की पहचान कीजिए, जो आमतौर पर हेक्सागोनल बैरल-आकृति (hexagonal barrel-shaped) के प्रिज्म बनाते हैं।

- Ans
- ☒ 1. कैल्कोपाइराइट
  - ☒ 2. कोरन्डम
  - ☒ 3. ओलीवाइन
  - ☒ 4. डोलोमाइट

Question ID : 630680618207  
Option 1 ID : 6306802419169  
Option 2 ID : 6306802419170  
Option 3 ID : 6306802419172  
Option 4 ID : 6306802419171

Status : Answered  
Chosen Option : 1

Q.20 हवा के घूमने वाले ऐसे स्तंभ जो जल निकायों के ऊपर होते हैं और सामान्यतः भूमि-बवंडरों की तुलना में कम खतरनाक होते हैं, \_\_\_\_\_ कहलाते हैं।

- Ans
- ☒ 1. जल बवंडर (waterspouts)
  - ☒ 2. हरीकेन (hurricanes)
  - ☒ 3. स्कैल (squalls)
  - ☒ 4. टाइफून (typhoons)

Question ID : 630680616023  
Option 1 ID : 6306802410794  
Option 2 ID : 6306802410796  
Option 3 ID : 6306802410795  
Option 4 ID : 6306802410797

Status : Answered  
Chosen Option : 1

Q.21 What is the name of the ion with a charge of  $-1$ ?

- Ans
- ☒ 1. Cation
  - ☒ 2. Anion
  - ☒ 3. Monovalent ion
  - ☒ 4. Polyvalent ion

Question ID : 630680572265  
Option 1 ID : 6306802237917  
Option 2 ID : 6306802237916  
Option 3 ID : 6306802237918  
Option 4 ID : 6306802237919

Status : Answered  
Chosen Option : 3

**Q.22 Which of the following sentences is/are true?**

- i. All isoclines are expansion paths but all expansion paths are not isoclines.
- ii. Short-run production functions involve adjusting all inputs, including fixed inputs like land or capital, to affect output.
- iii. Stock resources are the resources which are not used in one period of production but can be stored for a later period.

- Ans**
- ☒ 1. Only ii
  - ☒ 2. Only ii and iii
  - ☒ 3. Only iii
  - ☒ 4. Only i

Question ID : 630680618707

Option 1 ID : 6306802421106

Option 2 ID : 6306802421108

Option 3 ID : 6306802421107

Option 4 ID : 6306802421105

Status : Answered

Chosen Option : 2

**Q.23 Who urged political parties to engage in discussions that inspire unity rather than division and promote ideas instead of personal attacks in the address on the eve of National Voters Day in January 2024?**

- Ans**
- ☒ 1. Prime Minister Narendra Modi
  - ☒ 2. Union Home Minister Amit Shah
  - ☒ 3. Chief Election Commissioner Rajiv Kumar
  - ☒ 4. President Droupadi Murmu

Question ID : 630680574510

Option 1 ID : 6306802246904

Option 2 ID : 6306802246907

Option 3 ID : 6306802246905

Option 4 ID : 6306802246906

Status : Answered

Chosen Option : 3

**Q.24 Select the option that is true regarding the following two statements labelled Assertion (A) and Reason (R).**

- A.** The first battle of Panipat was one of the decisive battles of India.  
**R.** It brought into power a new band of invaders called Mughals.

- Ans**
- ☒ 1. Statements A and R are true, but R is not the correct explanation of A.
  - ☒ 2. Statements A and R are true, and R is the correct explanation of A.
  - ☒ 3. R is true, but A is false.
  - ☒ 4. A is true, but R is false.

Question ID : 630680570879

Option 1 ID : 6306802232578

Option 2 ID : 6306802232577

Option 3 ID : 6306802232580

Option 4 ID : 6306802232579

Status : Answered

Chosen Option : 2

Q.25 Which of the following statements is/are correct?

**Statements:**

- 1) Ampere's Law describes the relationship between electric current and the magnetic field it produces.
- 2) Maxwell's equations are a set of four fundamental equations governing electric and magnetic fields in the absence of charges and currents.

- Ans
- ☒ 1. Both Statements 1 and 2
  - ☒ 2. Neither Statement 1 nor 2
  - ☒ 3. Only Statement 2
  - ☒ 4. Only Statement 1

Question ID : 630680593999

Option 1 ID : 6306802324250

Option 2 ID : 6306802324251

Option 3 ID : 6306802324249

Option 4 ID : 6306802324248

Status : Answered

Chosen Option : 1

Section : Module I Computer Knowledge Module

Q.1 एमएस एक्सेल में, कॉलम की चौड़ाई को एडजस्ट करने के लिए सही कीबोर्ड शॉर्टकट क्या है?

- Ans
- ☒ 1. Alt + H + O + W
  - ☒ 2. Shift + H + O + W
  - ☒ 3. Ctrl + H + O + W
  - ☒ 4. Ctrl + O + W + H

Question ID : 630680994785

Option 1 ID : 6306803903169

Option 2 ID : 6306803903167

Option 3 ID : 6306803903168

Option 4 ID : 6306803903170

Status : Not Answered

Chosen Option : --

Q.2 कंप्यूटर मेमोरी के संबंध में, निम्नलिखित में से कौन-सा/से कथन सही है/हैं?

RAM अस्थिर मेमोरी होती है, जिसका अर्थ है कि जब बिजली बंद हो जाती है तो डेटा नष्ट हो जाता है।

ROM का उपयोग कंप्यूटर को बूट करने हेतु आवश्यक अनुदेशों (Instructions) को स्टोर करने के लिए किया जाता है।

- Ans
- ☒ 1. केवल 1
  - ☒ 2. न तो 1 और न ही 2
  - ☒ 3. केवल 2
  - ☒ 4. 1 और 2 दोनों

Question ID : 6306801312631

Option 1 ID : 6306805165326

Option 2 ID : 6306805165329

Option 3 ID : 6306805165327

Option 4 ID : 6306805165328

Status : Answered

Chosen Option : 4

**Q.3** What is the primary advantage of being able to insert and delete slides in an MS PowerPoint presentation?

- Ans** ✓ 1. To allow for dynamic content adjustment and organisation
- ✗ 2. To apply different templates to individual slides
- ✗ 3. To enhance slide transitions
- ✗ 4. To enable the addition of multimedia content

Question ID : 630680990672  
 Option 1 ID : 6306803887025  
 Option 2 ID : 6306803887026  
 Option 3 ID : 6306803887027  
 Option 4 ID : 6306803887024  
 Status : Answered  
 Chosen Option : 1

**Q.4** What is the main purpose of using a template when creating a presentation in MS PowerPoint?

- Ans** ✓ 1. To ensure consistency and professionalism
- ✗ 2. To create interactive quizzes within slides
- ✗ 3. To automatically insert multimedia content
- ✗ 4. To add complex animations easily

Question ID : 630680990668  
 Option 1 ID : 6306803887009  
 Option 2 ID : 6306803887011  
 Option 3 ID : 6306803887010  
 Option 4 ID : 6306803887008  
 Status : Not Answered  
 Chosen Option : --

**Q.5** किस प्रकार का वायरस, फ्लॉपी डिस्क के बूट सेक्टर या हार्ड डिस्क के मास्टर बूट रिकॉर्ड (MBR) को संक्रमित (infect) करता है?

- Ans** ✓ 1. बूट सेक्टर वायरस (Boot Sector Virus)
- ✗ 2. मैक्रो वायरस (Macro Virus)
- ✗ 3. डायरेक्ट एक्शन वायरस (Direct Action Virus)
- ✗ 4. रेजिडेंट वायरस (Resident Virus)

Question ID : 630680994654  
 Option 1 ID : 6306803902665  
 Option 2 ID : 6306803902666  
 Option 3 ID : 6306803902663  
 Option 4 ID : 6306803902664  
 Status : Answered  
 Chosen Option : 1

**Q.6** LAN में कंप्यूटर को कनेक्ट करने के लिए सामान्यतः किस डिवाइस का उपयोग किया जाता है?

- Ans** ✗ 1. राउटर (Router)
- ✓ 2. स्विच (Switch)
- ✗ 3. रिपीटर (Repeater)
- ✗ 4. मॉडेम (Modem)

Question ID : 630680994538  
 Option 1 ID : 6306803902226  
 Option 2 ID : 6306803902225  
 Option 3 ID : 6306803902228  
 Option 4 ID : 6306803902227  
 Status : Marked For Review  
 Chosen Option : 1

**Q.7 Which of the following best describes Electronic Mail (E-mail)?**

- Ans** ✓ 1. A method of sending messages electronically over a computer network.
- ✗ 2. A system for storing digital files on the cloud.
- ✗ 3. A service used to make phone calls over the internet.
- ✗ 4. A type of secure online transaction system.

Question ID : 6306801301628

Option 1 ID : 6306805121417

Option 2 ID : 6306805121418

Option 3 ID : 6306805121416

Option 4 ID : 6306805121419

Status : Answered

Chosen Option : 1

**Q.8 Match the Task Manager tabs in column A with their respective functionalities in column B.**

**Column A Column B**

1. Processes a) Monitors overall CPU, memory, disk, and network usage
2. Performance b) Displays active applications and background processes
3. Startup c) Manages programs that run during system startup
4. App History d) Shows resource usage for Windows Store apps

- Ans** ✗ 1. 1-a, 2-c, 3-b, 4-d
- ✗ 2. 1-c, 2-b, 3-d, 4-a
- ✗ 3. 1-d, 2-b, 3-a, 4-c
- ✓ 4. 1-b, 2-a, 3-c, 4-d

Question ID : 6306801316628

Option 1 ID : 6306805181050

Option 2 ID : 6306805181049

Option 3 ID : 6306805181051

Option 4 ID : 6306805181048

Status : Marked For Review

Chosen Option : 4

**Q.9 निम्नलिखित में से कौन-सा, ROM के एक प्रकार का उदाहरण है जिसे इलेक्ट्रॉनिक रूप से कई बार इरेस (erase) किया जा सकता है और पुनः प्रोग्राम किया जा सकता है?**

- Ans** ✗ 1. PROM
- ✗ 2. Mask ROM
- ✗ 3. EPROM
- ✓ 4. EEPROM

Question ID : 630680990676

Option 1 ID : 6306803887043

Option 2 ID : 6306803887040

Option 3 ID : 6306803887042

Option 4 ID : 6306803887041

Status : Answered

Chosen Option : 3

**Q.10 कॉलम A में फ़ाइल लोकेटिंग फीचर का कॉलम B में उनकी संगत कार्यक्षमताओं से मिलान कीजिए।**

**कॉलम A****कॉलम B**

- |                                  |   |
|----------------------------------|---|
| 1. सर्च बार (Search Bar)         | a) हाल ही में एक्सेस की गई फ़ाइलों और फ़ोल्डरों को प्रदर्शित करता है  |
| 2. क्विक एक्सेस (Quick Access)   | b) एट्रिब्यूट (attributes) के द्वारा फ़ाइलों को ग्रुपिंग (grouping) करने और सॉर्टिंग (sorting) करने की सुविधा देता है |
| 3. वाइल्डकार्ड्स (Wildcards)     | c) आंशिक नामों वाली फ़ाइलों के लिए सर्च को रिफाइन करता है   |
| 4. फ़ाइल सॉर्टिंग (File Sorting) | d) कीवर्ड टाइप करके फ़ाइलों और फ़ोल्डरों को लोकेट करता है   |

- Ans**
- ☒ 1. 1-a, 2-c, 3-b, 4-d
  - ☒ 2. 1-b, 2-d, 3-a, 4-c
  - ☒ 3. 1-c, 2-b, 3-a, 4-d
  - ☒ 4. 1-d, 2-a, 3-c, 4-b

Question ID : **6306801316608**  
 Option 1 ID : **6306805180973**  
 Option 2 ID : **6306805180972**  
 Option 3 ID : **6306805180971**  
 Option 4 ID : **6306805180970**

Status : **Answered**

Chosen Option : **4**

**Q.11 Which method is used to protect sensitive information during data transmission?**

- Ans**
- ☒ 1. Hashing
  - ☒ 2. Decryption
  - ☒ 3. Compression
  - ☒ 4. Secure Socket Layer (SSL)

Question ID : **6306801305925**  
 Option 1 ID : **6306805138610**  
 Option 2 ID : **6306805138608**  
 Option 3 ID : **6306805138609**  
 Option 4 ID : **6306805138611**

Status : **Answered**

Chosen Option : **2**

**Q.12 Which operation can one directly perform using File Explorer in Windows?**

- Ans**
- ☒ 1. Manage user accounts
  - ☒ 2. Run diagnostic tests
  - ☒ 3. Modify system settings
  - ☒ 4. Move, copy, or delete files

Question ID : **6306801313359**  
 Option 1 ID : **6306805168186**  
 Option 2 ID : **6306805168185**  
 Option 3 ID : **6306805168184**  
 Option 4 ID : **6306805168187**

Status : **Answered**

Chosen Option : **4**

**Q.13** Select which of the given statement(s) is/are True or False for the Central Processing Unit (CPU) of the Computer Systems.

- (i) The CPU's clock speed controls the timing and execution speed of instructions.  
(ii) The CPU's cache memory provides high-speed access to frequently used instructions and data.

**Ans** ☒ 1. (i) True, (ii) True  
☒ 2. (i) False, (ii) False  
☒ 3. (i) False, (ii) True  
☒ 4. (i) True, (ii) False

Question ID : 630680986233

Option 1 ID : 6306803868913

Option 2 ID : 6306803868916

Option 3 ID : 6306803868915

Option 4 ID : 6306803868914

Status : Answered

Chosen Option : 1

**Q.14** एमएस वर्ड 2010 में, बुलेट्स ऐड (add) करने के लिए किस कीबोर्ड शॉर्टकट का उपयोग किया जाता है?

**Ans** ☒ 1. Shift + L  
☒ 2. Ctrl + Alt + L  
☒ 3. Ctrl + L  
☒ 4. Ctrl + Shift + L

Question ID : 630680995342

Option 1 ID : 6306803905387

Option 2 ID : 6306803905389

Option 3 ID : 6306803905388

Option 4 ID : 6306803905390

Status : Answered

Chosen Option : 3

**Q.15** DRAM को समय-समय पर रीफ्रेश करने की आवश्यकता का मुख्य कारण क्या है?

**Ans** ☒ 1. अप्रयुक्त डेटा को क्लियर करना  
☒ 2. डेटा बिट्स को स्टोर करने वाले कैपेसिटर (capacitors) को रिचार्ज करना  
☒ 3. चुंबकीय क्षेत्रों के कारण होने वाले डेटा कorrupशन को रोकना  
☒ 4. CPU को नए डेटा को एक्सेस करने की अनुमति देना

Question ID : 6306801292136

Option 1 ID : 6306805082746

Option 2 ID : 6306805082748

Option 3 ID : 6306805082747

Option 4 ID : 6306805082749

Status : Answered

Chosen Option : 1



Q.16 एमएस वर्ड में कौन-सा फीचर, यूजर को हेडिंग, टाइटल और सब-टाइटल जैसे टेक्स्ट एलिमेंट में एक कंसिस्टेंट लुक अप्लाय करने की सुविधा देता है?

- Ans
- ☒ 1. Macros
  - ☒ 2. Template
  - ☒ 3. Table
  - ☒ 4. Styles

Question ID : 630680994687  
Option 1 ID : 6306803902790  
Option 2 ID : 6306803902788  
Option 3 ID : 6306803902787  
Option 4 ID : 6306803902789

Status : Answered  
Chosen Option : 2

Q.17 निम्नलिखित में से कौन-सी सुरक्षा युक्ति (security mechanism) यह सुनिश्चित करती है कि सिस्टम अपडेट्स, उपयोगकर्ता के हस्तक्षेप के बिना इस्टॉल हो जाएं?

- Ans
- ☒ 1. फायरवॉल (Firewall)
  - ☒ 2. इन्वैज़न डिटेक्शन सिस्टम (Intrusion Detection System)
  - ☒ 3. सिक्योर बूट (Secure Boot)
  - ☒ 4. पैच मैनेजमेंट सॉफ्टवेयर (Patch management software)

Question ID : 6306801261653  
Option 1 ID : 6306804961198  
Option 2 ID : 6306804961196  
Option 3 ID : 6306804961197  
Option 4 ID : 6306804961195

Status : Answered  
Chosen Option : 1

Q.18 एमएस एक्सेल 2003 में, एक कॉलम में अधिकतम कितने कैरेक्टर समायोजित किए जा सकते हैं?

- Ans
- ☒ 1. 1064 कैरेक्टर
  - ☒ 2. 255 कैरेक्टर
  - ☒ 3. 65536 कैरेक्टर
  - ☒ 4. 512 कैरेक्टर

Question ID : 630680994662  
Option 1 ID : 6306803902697  
Option 2 ID : 6306803902695  
Option 3 ID : 6306803902698  
Option 4 ID : 6306803902696

Status : Not Answered  
Chosen Option : --

**Q.19** Which of the following technologies allows real-time communication over the Internet, such as voice and video calls, without requiring additional software or hardware beyond a web browser?

**Ans** ✓ 1. WebRTC

✗ 2. Email

✗ 3. VoIP

✗ 4. FTP

Question ID : 6306801301495

Option 1 ID : 6306805120874

Option 2 ID : 6306805120872

Option 3 ID : 6306805120873

Option 4 ID : 6306805120875

Status : Answered

Chosen Option : 3

**Q.20** माइक्रोसॉफ्ट आउटलुक में, मूल संदेश को अपने रिकॉर्ड के लिए रखते हुए, प्राप्त ईमेल को किसी अन्य व्यक्ति को भेजने के लिए कौन-सी क्रिया की जानी चाहिए?

**Ans** ✓ 1. ईमेल ओपन करें, 'Forward' पर क्लिक करें और प्राप्तकर्ता का ईमेल पता दर्ज करें।

✗ 2. 'Reply All' पर क्लिक करें और ऑप्शनों में से 'Forward' को सेलेक्ट करें।

✗ 3. 'Archive' ऑप्शन का उपयोग करें और एक नया ईमेल क्रिएट करें।

✗ 4. 'Reply' पर क्लिक करें और नए प्राप्तकर्ता का ईमेल पता ऐड (add) करें।

Question ID : 630680996276

Option 1 ID : 6306803908845

Option 2 ID : 6306803908844

Option 3 ID : 6306803908846

Option 4 ID : 6306803908847

Status : Answered

Chosen Option : 1