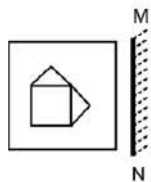


**Constable GD in Central Armed Police Forces CAPFs SSF Rifleman GD in Assam
Rifles Examination 2024**

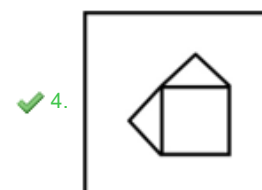
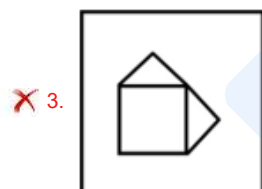
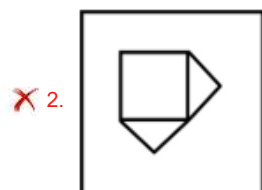
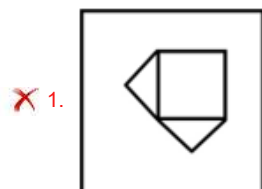
Roll Number	
Candidate Name	
Venue Name	
Exam Date	01/03/2024
Exam Time	9:00 AM - 10:00 AM
Subject	Constable GD Examination 2024

Section : Part-A-General Intelligence and Reasoning

Q.1 Select the correct mirror image of the given figure when the mirror MN is placed to the right side of the figure.



Ans



Question ID : 264330188057

Option 1 ID : 264330736156

Option 2 ID : 264330736157

Option 3 ID : 264330736158

Option 4 ID : 264330736159

Status : Answered

Chosen Option : 4

Q.2 Which of the following letter cluster will replace the blank (___) in the given series?

CADI, EAFI, GAHI, _____, KALI

- Ans**
- 1. JAKI
 - 2. HAIH
 - 3. AAII
 - 4. IAJI

Question ID : 264330190408

Option 1 ID : 264330745216

Option 2 ID : 264330745215

Option 3 ID : 264330745217

Option 4 ID : 264330745214

Status : Answered

Chosen Option : 4

Q.3 Seven girls P, Q, R, S, T, U and V are sitting around a circular table facing opposite to the centre (not necessarily in the same order). P is the immediate neighbour of both Q and R. S is not the immediate neighbour of either R or T. V is immediate neighbour of both T and U. V is second to the right of S. S is the immediate neighbour of U. Who is sitting on the immediate left of R?

- Ans**
- 1. Q
 - 2. S
 - 3. P
 - 4. T

Question ID : 264330191537

Option 1 ID : 264330749502

Option 2 ID : 264330749505

Option 3 ID : 264330749503

Option 4 ID : 264330749504

Status : Answered

Chosen Option : 3

Q.4 In the following question, select the related letters from the given alternatives.

SWA : UYC :: FJN : ?

- Ans**
- 1. WXK
 - 2. ZUV
 - 3. XUV
 - 4. HLP

Question ID : 264330190130

Option 1 ID : 264330744105

Option 2 ID : 264330744103

Option 3 ID : 264330744104

Option 4 ID : 264330744102

Status : Answered

Chosen Option : 4

Q.5 In a certain code language, if DESK is coded as 'CEDFRTJL' and CHAIR is coded as 'BDGIZBHJQS', then what will TABLE be coded as?

- Ans**
- 1. SUZBACKMDF
 - 2. SUZBCAKMDF
 - 3. SUZBAMCKDF
 - 4. SUZBACMKDF

Question ID : 264330192133

Option 1 ID : 264330751888

Option 2 ID : 264330751887

Option 3 ID : 264330751889

Option 4 ID : 264330751886

Status : Answered

Chosen Option : 1

Q.6 In the following question below are given some statements followed by some conclusions based on those statements. Taking the given statements to be true even if they seem to be at variance from commonly known facts. Read all the conclusions and then decide which of the given conclusion(s) logically follows the given statements.

Statements:

I. All wheel are cycle.

II. Some cycle are tub.

Conclusions:

I. All tub are wheel.

II. All cycle are tub.

III. All cycle are wheel.

- Ans**
- 1. Neither conclusion follows
 - 2. All conclusion follows
 - 3. Only conclusion II follows
 - 4. Both conclusions I and II follows

Question ID : 264330190117

Option 1 ID : 264330744053

Option 2 ID : 264330744052

Option 3 ID : 264330744051

Option 4 ID : 264330744050

Status : Answered

Chosen Option : 1

Q.7 In the following question, select the related letter pair from the given alternatives.

CP : ES :: ?

- Ans**
- 1. AN : CQ
 - 2. KX : FS
 - 3. BN : WL
 - 4. JR : EM

Question ID : 264330192052

Option 1 ID : 264330751564

Option 2 ID : 264330751563

Option 3 ID : 264330751565

Option 4 ID : 264330751562

Status : Answered

Chosen Option : 1

Q.8 By interchanging which two signs and two numbers (not digits) the equation will be correct?

$$5 - 7 \times 4 + 8 \div 2 = 17$$

- Ans**
- 1. \times and $+$, 4 and 5
 - 2. \div and $-$, 7 and 8
 - 3. $-$ and \div , 5 and 4
 - 4. $+$ and $-$, 2 and 5

Question ID : 264330190180

Option 1 ID : 264330744302

Option 2 ID : 264330744304

Option 3 ID : 264330744305

Option 4 ID : 264330744303

Status : Answered

Chosen Option : 1

Q.9 In a certain code language, 'GIVES' is coded as '124', 'STEPS' is coded as '158'. What is the code for 'VIEWS' in that code language?

- Ans**
- 1. 144
 - 2. 164
 - 3. 156
 - 4. 152

Question ID : 264330191314

Option 1 ID : 264330748610

Option 2 ID : 264330748613

Option 3 ID : 264330748612

Option 4 ID : 264330748611

Status : Answered

Chosen Option : 3

Q.10 In the following question, select the figure which can be placed at the sign of question mark (?) from the given alternatives.



Ans

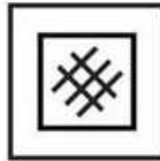
✗ 1.



✗ 2.



✓ 3.



✗ 4.



Question ID : 264330190562

Option 1 ID : 264330745832

Option 2 ID : 264330745833

Option 3 ID : 264330745830

Option 4 ID : 264330745831

Status : Answered

Chosen Option : 3

Q.11 Which two numbers (not digits) should be interchanged to make the given equation correct?

$$12 \times 3 - 4 \div 2 + 41 = 7$$

Ans ✗ 1. 12 and 41

✗ 2. 3 and 2

✗ 3. 7 and 4

✓ 4. 7 and 41

Question ID : 264330192122

Option 1 ID : 264330751844

Option 2 ID : 264330751842

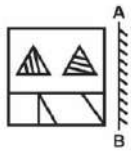
Option 3 ID : 264330751843

Option 4 ID : 264330751845

Status : Answered

Chosen Option : 4

Q.12 If a mirror is placed on the line AB, then out of the option figures which figure will be the right image of the question figure?

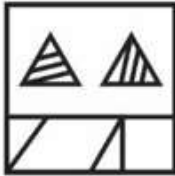


Ans

✗ 1.



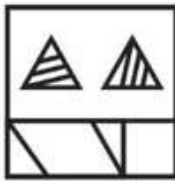
✓ 2.



✗ 3.



✗ 4.



Question ID : 264330190186

Option 1 ID : 264330744327

Option 2 ID : 264330744326

Option 3 ID : 264330744329

Option 4 ID : 264330744328

Status : Answered

Chosen Option : 2

Q.13 A series is given with one term missing. Select the correct alternative from the given ones that will complete the series.

RVNL, OSKI, LPHF, IMEC, ?

Ans ✗ 1. FJAQ

✗ 2. FRNC

✓ 3. FJBZ

✗ 4. MNRQ

Question ID : 264330190487

Option 1 ID : 264330745531

Option 2 ID : 264330745533

Option 3 ID : 264330745532

Option 4 ID : 264330745530

Status : Answered

Chosen Option : 3

Q.14 Arrange the given words in the sequence in which they occur in the dictionary.

1. Decant
2. Decamp
3. Decade
4. Decagon
5. Decay

- Ans**
- 1. 4,3,2,1,5
 - 2. 4,3,2,5,1
 - 3. 3,4,2,1,5
 - 4. 3,4,2,5,1

Question ID : 264330187361

Option 1 ID : 264330733375

Option 2 ID : 264330733374

Option 3 ID : 264330733372

Option 4 ID : 264330733373

Status : Answered

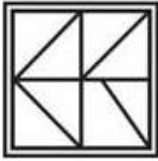
Chosen Option : 3

Q.15 From the given option figures, select the one in which the question figure is hidden/embedded. (rotation is NOT allowed)



Ans

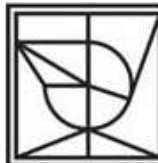
1.



2.



3.



4.



Question ID : 264330190464

Option 1 ID : 264330745438

Option 2 ID : 264330745439

Option 3 ID : 264330745441

Option 4 ID : 264330745440

Status : Answered

Chosen Option : 3

Q.16 'A × B' means 'A is the husband of B'

'A + B' means 'A is the brother of B'

'A ÷ B' means 'A is the son of B'

'A - B' means 'A is the father of B'

How is T related to S in the expression 'T ÷ R + S - M'?

Ans 1. Brother's son

2. Father

3. Son

4. Husband

Question ID : 264330191575

Option 1 ID : 264330749655

Option 2 ID : 264330749656

Option 3 ID : 264330749654

Option 4 ID : 264330749657

Status : Answered

Chosen Option : 1

Q.17 In the following question, select the figure which can be placed at the sign of question mark (?) from the given alternatives.



Ans

1.



2.



3.



4.



Question ID : 264330188035

Option 1 ID : 264330736068

Option 2 ID : 264330736070

Option 3 ID : 264330736071

Option 4 ID : 264330736069

Status : Answered

Chosen Option : 4

Q.18 Which of the following numbers will replace the question mark (?) in the given series?

242, 264, ?, 308, 330, 352

Ans 1. 286

2. 292

3. 300

4. 272

Question ID : 264330192219

Option 1 ID : 264330752231

Option 2 ID : 264330752232

Option 3 ID : 264330752233

Option 4 ID : 264330752230

Status : Answered

Chosen Option : 1

Q.19 Which of the following numbers will replace the question mark (?) in the given series?

1076, ?, 882, 785, 688, 591

- Ans**
- ✓ 1. 979
 - ✗ 2. 989
 - ✗ 3. 1001
 - ✗ 4. 898

Question ID : 264330190299
Option 1 ID : 264330744780
Option 2 ID : 264330744779
Option 3 ID : 264330744778
Option 4 ID : 264330744781
Status : Answered
Chosen Option : 1

Q.20 Six friends P, Q, R, S, T, and U are sitting around a circular table facing away from the center. P is sitting to the immediate right of Q. U sits exactly between R and S. S sits to the immediate left of T. Who sits to the opposite of T?

- Ans**
- ✓ 1. R
 - ✗ 2. P
 - ✗ 3. Q
 - ✗ 4. S

Question ID : 264330192076
Option 1 ID : 264330751659
Option 2 ID : 264330751660
Option 3 ID : 264330751661
Option 4 ID : 264330751658
Status : Answered
Chosen Option : 1

Section : Part-B-General Knowledge and General awareness

Q.1 In which of the following Schedule of the Indian Constitution the 'Concurrent List' is given?

- Ans**
- ✗ 1. 8th
 - ✗ 2. 6th
 - ✗ 3. 5th
 - ✓ 4. 7th

Question ID : 264330191781
Option 1 ID : 264330750481
Option 2 ID : 264330750479
Option 3 ID : 264330750478
Option 4 ID : 264330750480
Status : Marked For Review
Chosen Option : 4

Q.2 National Sport of Pakistan is:

- Ans 1. Field Hockey
 2. Polo
 3. Cricket
 4. Football

Question ID : 264330191904
Option 1 ID : 264330750971
Option 2 ID : 264330750972
Option 3 ID : 264330750970
Option 4 ID : 264330750973
Status : Answered
Chosen Option : 1

Q.3 What is the meaning of term 'Kathak'?

- Ans 1. Love of literature
 2. Love and music
 3. Story translator
 4. Story-tellers

Question ID : 264330191745
Option 1 ID : 264330750337
Option 2 ID : 264330750334
Option 3 ID : 264330750335
Option 4 ID : 264330750336
Status : Marked For Review
Chosen Option : 2

Q.4 Which government department is responsible for implementing the VAIBHAV Fellowship Scheme?

- Ans 1. Ministry of Science and Technology
 2. Ministry of Education
 3. Ministry of Home Affairs
 4. Ministry of Agriculture and Farmers Welfare

Question ID : 264330190847
Option 1 ID : 264330746745
Option 2 ID : 264330746744
Option 3 ID : 264330746743
Option 4 ID : 264330746742
Status : Not Answered
Chosen Option : --

Q.5 Where was the first Asian Games held in 1951?

- Ans
- 1. Bangkok, Thailand
 - 2. Manila, Philippines
 - 3. New Delhi, India
 - 4. Tokyo, Japan

Question ID : 264330191502
Option 1 ID : 264330749364
Option 2 ID : 264330749362
Option 3 ID : 264330749365
Option 4 ID : 264330749363
Status : Answered
Chosen Option : 3

Q.6 Which of the following is NOT a Directive Principles of State Policy mentioned in the Indian Constitution?

- Ans
- 1. Uniform civil code for the citizens
 - 2. Organisation of agriculture and animal husbandry
 - 3. Separation of legislature from executive
 - 4. Promotion of international peace and security

Question ID : 264330188744
Option 1 ID : 264330738781
Option 2 ID : 264330738780
Option 3 ID : 264330738778
Option 4 ID : 264330738779
Status : Answered
Chosen Option : 3

Q.7 Which dancing form is classified as Ekaharya?

- Ans
- 1. Bharatnatyam
 - 2. Kathak
 - 3. Oddissi
 - 4. Sattriya

Question ID : 264330191050
Option 1 ID : 264330747554
Option 2 ID : 264330747555
Option 3 ID : 264330747557
Option 4 ID : 264330747556
Status : Marked For Review
Chosen Option : 1

Q.8 Union Minister _____ announces India's first indigenously developed vaccine, "CERVAVAC" for the prevention of cervical cancer. (September 2022)

- Ans
- 1. Shri Raj Nath Singh
 - 2. Dr. Bharati Pravin Pawar
 - 3. Shri Mansukh L. Mandaviya
 - 4. Dr. Jitendra Singh

Question ID : 264330190908
Option 1 ID : 264330746986
Option 2 ID : 264330746989
Option 3 ID : 264330746988
Option 4 ID : 264330746987
Status : Not Answered
Chosen Option : --

Q.9 With respect to economic planning in India, the Bombay Plan was published in how many parts ?

- Ans
- 1. Three
 - 2. Five
 - 3. Two
 - 4. Four

Question ID : 264330191967
Option 1 ID : 264330751223
Option 2 ID : 264330751225
Option 3 ID : 264330751222
Option 4 ID : 264330751224
Status : Answered
Chosen Option : 2

Q.10 Who was the founder of the Khudai Khidmatgars?

- Ans
- 1. Khan Abdul Ghaffar Khan
 - 2. Mohammad Ali Jinnah
 - 3. Maulana Azad
 - 4. Sayyid Ahmed Khan

Question ID : 264330190656
Option 1 ID : 264330746209
Option 2 ID : 264330746207
Option 3 ID : 264330746206
Option 4 ID : 264330746208
Status : Answered
Chosen Option : 1

Q.11 The _____ five year plan of India could not take off in 1990 due to the fast changing political situation at the Centre.

- Ans
- 1. Seventh
 - 2. Sixth
 - 3. Eighth
 - 4. Ninth

Question ID : 264330191065
Option 1 ID : 264330747615
Option 2 ID : 264330747614
Option 3 ID : 264330747616
Option 4 ID : 264330747617
Status : Answered
Chosen Option : 3

Q.12 In the context of the Indian census, what is the definition of the literacy percentage?

- Ans
- 1. The percentage of people aged seven and above, who can read and write in any language
 - 2. The percentage of people with a college degree
 - 3. The percentage of people who can read and write in English
 - 4. The percentage of people who can perform basic arithmetic calculations

Question ID : 264330191714
Option 1 ID : 264330750210
Option 2 ID : 264330750212
Option 3 ID : 264330750211
Option 4 ID : 264330750213
Status : Answered
Chosen Option : 1

Q.13 Which of the following pair is correctly matched in context of person and related to their musical instrument?

- I. Totaram Sharma – Pakhawaj
- II. Zakir Hussain – Flute

- Ans
- 1. Only I
 - 2. Neither I nor II
 - 3. Only II
 - 4. Both I and II

Question ID : 264330188782
Option 1 ID : 264330738930
Option 2 ID : 264330738933
Option 3 ID : 264330738931
Option 4 ID : 264330738932
Status : Answered
Chosen Option : 1

Q.14 Basketball has two teams, consist of _____ players on each team.

- Ans
- 1. Nine
 - 2. Seven
 - 3. Eleven
 - 4. Five

Question ID : 264330191823
Option 1 ID : 264330750648
Option 2 ID : 264330750647
Option 3 ID : 264330750649
Option 4 ID : 264330750646
Status : Marked For Review
Chosen Option : 4

Q.15 Viksit Bharat Sankalp Yatra campaign was flagged off by Prime Minister Shri Narendra Modi on November 15, 2023, at _____.

- Ans
- 1. Aligarh, Uttar Pradesh
 - 2. Dausa, Rajasthan
 - 3. Hisar, Haryana
 - 4. Khunti, Jharkhand

Question ID : 264330188754
Option 1 ID : 264330738821
Option 2 ID : 264330738819
Option 3 ID : 264330738820
Option 4 ID : 264330738818
Status : Not Answered
Chosen Option : --

Q.16 Which dance style does Geeta Mahlik have a reputation for?

- Ans
- 1. Kuchipudi
 - 2. Odissi
 - 3. Bharatnatyam
 - 4. Kathak

Question ID : 264330188843
Option 1 ID : 264330739176
Option 2 ID : 264330739174
Option 3 ID : 264330739177
Option 4 ID : 264330739175
Status : Not Answered
Chosen Option : --

Q.17 Which of the following is the SI unit of velocity?

- Ans
- 1. s/m
 - 2. m/s
 - 3. kg/m
 - 4. kg/s

Question ID : 264330191233
Option 1 ID : 264330748286
Option 2 ID : 264330748287
Option 3 ID : 264330748289
Option 4 ID : 264330748288
Status : Answered
Chosen Option : 2

Q.18 In which of the following state, Hornbill Festival is celebrated?

- Ans
- 1. Nagaland
 - 2. Madhya Pradesh
 - 3. Manipur
 - 4. Assam

Question ID : 264330191752
Option 1 ID : 264330750365
Option 2 ID : 264330750364
Option 3 ID : 264330750362
Option 4 ID : 264330750363
Status : Answered
Chosen Option : 1

Q.19 Which Mauryan ruler was the grandson of Chandragupta Maurya?

- Ans
- 1. Pushyamitra Shunga
 - 2. Brihadratha
 - 3. Ashoka
 - 4. Bindusara

Question ID : 264330192016
Option 1 ID : 264330751421
Option 2 ID : 264330751420
Option 3 ID : 264330751418
Option 4 ID : 264330751419
Status : Answered
Chosen Option : 3

Q.20 According to the data of 2011-12, which of the following is the poverty rate of bihar? (approximate)

- Ans**
- 1. 63.7%
 - 2. 33.7%
 - 3. 43.7%
 - 4. 53.7%

Question ID : 264330191935
Option 1 ID : 264330751097
Option 2 ID : 264330751094
Option 3 ID : 264330751095
Option 4 ID : 264330751096
Status : **Marked For Review**
Chosen Option : 4

Section : **Part-C-Elementary Mathematics**

Q.1 If 75 percent of total mobiles are sold at a loss of 20 percent and remaining mobiles are sold at a profit of 30 percent, then what will be the overall loss percentage?

- Ans**
- 1. 9.09 percent
 - 2. 8 percent
 - 3. 7.5 percent
 - 4. 8.5 percent

Question ID : 264330187568
Option 1 ID : 264330734201
Option 2 ID : 264330734200
Option 3 ID : 264330734202
Option 4 ID : 264330734203
Status : **Answered**
Chosen Option : 3

Q.2 A mixture contains acid and water in the ratio of 4 : 7. If 10 litres of water is added to it, then the ratio of acid and water becomes 8 : 19. What is the quantity of acid in the mixture?

- Ans**
- 1. 12 litres
 - 2. 8 litres
 - 3. 4 litres
 - 4. 16 litres

Question ID : 264330190360
Option 1 ID : 264330745022
Option 2 ID : 264330745023
Option 3 ID : 264330745025
Option 4 ID : 264330745024
Status : **Answered**
Chosen Option : 4

Q.3 If the radius of sphere is decreased by 80 percent, then volume of sphere will be decreased by what percentage?

- Ans**
- 1. 99.2 percent
 - 2. 98.2 percent
 - 3. 95.2 percent
 - 4. 94.2 percent

Question ID : 264330187946
Option 1 ID : 264330735714
Option 2 ID : 264330735715
Option 3 ID : 264330735712
Option 4 ID : 264330735713
Status : Answered
Chosen Option : 1

Q.4 An article is sold at a discount of 20 percent. What will be the ratio of the marked price and selling price of the article?

- Ans**
- 1. 5 : 3
 - 2. 4 : 3
 - 3. 5 : 4
 - 4. 4 : 1

Question ID : 264330187850
Option 1 ID : 264330735329
Option 2 ID : 264330735330
Option 3 ID : 264330735328
Option 4 ID : 264330735331
Status : Answered
Chosen Option : 3

Q.5 Average age of a group of 15 boys is 24 years. A boy having age 13 years leaves the group. A new boy joins the group and the average increases by 1 year. What is the age of the new boy?

- Ans**
- 1. 25 years
 - 2. 22 years
 - 3. 20 years
 - 4. 28 years

Question ID : 264330187843
Option 1 ID : 264330735301
Option 2 ID : 264330735302
Option 3 ID : 264330735303
Option 4 ID : 264330735300
Status : Answered
Chosen Option : 4

Q.6 What is the value of $1495 \div 23 + 44 \times 9 - 21 \div 3$?

- Ans
- 1. 454
 - 2. 484
 - 3. 464
 - 4. 474

Question ID : 264330188612
Option 1 ID : 264330738250
Option 2 ID : 264330738253
Option 3 ID : 264330738251
Option 4 ID : 264330738252
Status : Answered
Chosen Option : 1

Q.7 What is the value of 2 of $40 - (44 + 2 - 96)$?

- Ans
- 1. 100
 - 2. 30
 - 3. 50
 - 4. 130

Question ID : 264330187640
Option 1 ID : 264330734490
Option 2 ID : 264330734488
Option 3 ID : 264330734489
Option 4 ID : 264330734491
Status : Answered
Chosen Option : 4

Q.8 X and Y together can complete a work in 20 days. Y alone can complete the same work in 25 days. In how many days will X alone complete the same work?

- Ans
- 1. 120 days
 - 2. 100 days
 - 3. 110 days
 - 4. 150 days

Question ID : 264330188609
Option 1 ID : 264330738240
Option 2 ID : 264330738239
Option 3 ID : 264330738238
Option 4 ID : 264330738241
Status : Answered
Chosen Option : 2

Q.9 If $m = 1500$ and $n = 2000$, then m is how much percentage less than n ?

- Ans
- 1. 10 percent
 - 2. 25 percent
 - 3. 12.5 percent
 - 4. 50 percent

Question ID : 264330187805
Option 1 ID : 264330735151
Option 2 ID : 264330735148
Option 3 ID : 264330735150
Option 4 ID : 264330735149
Status : Answered
Chosen Option : 2

Q.10 The average age of 12 players and their coach is 32 years. The average age of first 5 players is 28 years and average age of the remaining 7 players is 26 years. What is the age of the coach?

- Ans
- 1. 91 years
 - 2. 93 years
 - 3. 99 years
 - 4. 94 years

Question ID : 264330187684
Option 1 ID : 264330734666
Option 2 ID : 264330734667
Option 3 ID : 264330734664
Option 4 ID : 264330734665
Status : Answered
Chosen Option : 4

Q.11 For what value of N , $28537N$ is divisible by 8?

- Ans
- 1. 4
 - 2. 8
 - 3. 6
 - 4. 2

Question ID : 264330187822
Option 1 ID : 264330735217
Option 2 ID : 264330735216
Option 3 ID : 264330735218
Option 4 ID : 264330735219
Status : Answered
Chosen Option : 3

Q.12 Find the height of a triangle where the base corresponding to that height is half of the height, and the area is 144 cm².

- Ans**
- 1. 24 cm
 - 2. 23.8 cm
 - 3. 27 cm
 - 4. 29.4 cm

Question ID : 264330191206
Option 1 ID : 264330748181
Option 2 ID : 264330748179
Option 3 ID : 264330748180
Option 4 ID : 264330748178
Status : Answered
Chosen Option : 1

Q.13 A work was finished by Amit, Sumit and Vinit together. Amit and Sumit together finished 70 percent part of the work and Sumit and Vinit together finished 50 percent part of the work. Who among the three is most efficient?

- Ans**
- 1. Amit
 - 2. All are equal
 - 3. Sumit
 - 4. Vinit

Question ID : 264330187217
Option 1 ID : 264330732796
Option 2 ID : 264330732799
Option 3 ID : 264330732798
Option 4 ID : 264330732797
Status : Answered
Chosen Option : 1

Q.14 Rs. 10000 is lent at the annual rate of 20 percent for 3 years. Which of the following is statement(s) is/are correct?

- I. Simple interest to be received on this sum is Rs. 6000.
- II. Compound Interest (compounding annually) to be received on this sum is Rs. 7200.

- Ans**
- 1. Only II
 - 2. Both I and II
 - 3. Neither I nor II
 - 4. Only I

Question ID : 264330187874
Option 1 ID : 264330735425
Option 2 ID : 264330735426
Option 3 ID : 264330735427
Option 4 ID : 264330735424
Status : Answered
Chosen Option : 4

Q.15 After a discount of 33 percent an article is sold for Rs. 2546. What is the marked price of the article?

- Ans**
- 1. Rs. 3600
 - 2. Rs. 4000
 - 3. Rs. 3800
 - 4. Rs. 3500

Question ID : 264330187589
Option 1 ID : 264330734285
Option 2 ID : 264330734284
Option 3 ID : 264330734287
Option 4 ID : 264330734286
Status : Answered
Chosen Option : 3

Q.16 What is the value of $5400 \div 2 - 55 \times 11 + 44 \times 3$?

- Ans**
- 1. 1119
 - 2. 1928
 - 3. 2227
 - 4. 2178

Question ID : 264330187599
Option 1 ID : 264330734325
Option 2 ID : 264330734326
Option 3 ID : 264330734324
Option 4 ID : 264330734327
Status : Answered
Chosen Option : 3

Q.17 A sum of Rs. 1000 becomes Rs. 2210 when invested in a scheme of simple interest. If the annual rate of interest and the number of years for which the sum was invested are same, then what is the annual rate of interest?

- Ans**
- 1. 15 percent
 - 2. 20 percent
 - 3. 8 percent
 - 4. 11 percent

Question ID : 264330187933
Option 1 ID : 264330735661
Option 2 ID : 264330735662
Option 3 ID : 264330735663
Option 4 ID : 264330735660
Status : Answered
Chosen Option : 4

Q.18 If $3T = 10U$ and $5U = 7V$, then what is the value of $T : U : V$?

- Ans
- 1. 70 : 21 : 15
 - 2. 10 : 3 : 2
 - 3. 70 : 31 : 14
 - 4. 21 : 15 : 70

Question ID : 264330187171

Option 1 ID : 264330732612

Option 2 ID : 264330732613

Option 3 ID : 264330732615

Option 4 ID : 264330732614

Status : Answered

Chosen Option : 1

Q.19 A truck left 30 minutes early than the scheduled time but in order to reach its destination 270 km away in time, it had to slow its usual speed by 6 km/hr. What is the usual speed of the truck?

- Ans
- 1. 50 km/hr
 - 2. 64 km/hr
 - 3. 56 km/hr
 - 4. 60 km/hr

Question ID : 264330187735

Option 1 ID : 264330734871

Option 2 ID : 264330734870

Option 3 ID : 264330734869

Option 4 ID : 264330734868

Status : Answered

Chosen Option : 1

Q.20 Cost price of an article is Rs. 4600. If the loss percentage is 12 percent, then what is the selling price of the article?

- Ans
- 1. Rs. 4048
 - 2. Rs. 3962
 - 3. Rs. 3888
 - 4. Rs. 3562

Question ID : 264330187227

Option 1 ID : 264330732839

Option 2 ID : 264330732836

Option 3 ID : 264330732837

Option 4 ID : 264330732838

Status : Answered

Chosen Option : 1

Q.1 Improve the underlined part of the sentence. Choose 'No improvement' as an answer if the sentence is grammatically correct.

The doctor is accepts new patients.

- Ans**
- 1. accepting newly
 - 2. No improvement
 - 3. accepting new
 - 4. accept new

Question ID : 264330186741

Option 1 ID : 264330731116

Option 2 ID : 264330731119

Option 3 ID : 264330731117

Option 4 ID : 264330731118

Status : Answered

Chosen Option : 3

Q.2 Choose the most appropriate antonym of the underlined word.

Despite the ridicule, China looks set to carry out the three-child policy in the hope of addressing its rapidly aging population and plunging birth and marriage rates.

- Ans**
- 1. Commend
 - 2. Taunt
 - 3. Scorn
 - 4. Contempt

Question ID : 264330185828

Option 1 ID : 264330727637

Option 2 ID : 264330727639

Option 3 ID : 264330727638

Option 4 ID : 264330727636

Status : Answered

Chosen Option : 1

Q.3 Choose the word that is opposite in meaning to the given word.

Appearance

- Ans**
- 1. Commencement
 - 2. Exit
 - 3. Ingress
 - 4. Masquerade

Question ID : 264330186668

Option 1 ID : 264330730838

Option 2 ID : 264330730839

Option 3 ID : 264330730837

Option 4 ID : 264330730836

Status : Not Answered

Chosen Option : --

Q.4 Find the part of the given sentence that has an error in it. If there is no error, choose 'No error'.

I am now getting best job opportunities after this internship.

- Ans**
- 1. after this internship
 - 2. getting best job opportunities
 - 3. I am now
 - 4. No error

Question ID : 264330186718
Option 1 ID : 264330731030
Option 2 ID : 264330731029
Option 3 ID : 264330731028
Option 4 ID : 264330731031
Status : Answered
Chosen Option : 4

Q.5 Select the most appropriate option for the given blank.

I want you to _____ an investigation into this matter.

- Ans**
- 1. take
 - 2. open
 - 3. free
 - 4. set

Question ID : 264330186296
Option 1 ID : 264330729422
Option 2 ID : 264330729420
Option 3 ID : 264330729421
Option 4 ID : 264330729423
Status : Answered
Chosen Option : 2

Q.6 Improve the underlined part of the sentence. Choose 'No improvement' as an answer if the sentence is grammatically correct.

The bag is made from jean fabric.

- Ans**
- 1. making from
 - 2. No improvement
 - 3. makes from
 - 4. make from

Question ID : 264330186068
Option 1 ID : 264330728554
Option 2 ID : 264330728555
Option 3 ID : 264330728553
Option 4 ID : 264330728552
Status : Answered
Chosen Option : 2

Q.7 Find the part of the given sentence that has an error in it. If there is no error, choose 'No error'.

We did found that less capable drivers tend to choose safer cars.

- Ans 1. We did found that
 2. to choose safer cars.
 3. No error
 4. less capable drivers tend

Question ID : 264330185773

Option 1 ID : 264330727428

Option 2 ID : 264330727430

Option 3 ID : 264330727431

Option 4 ID : 264330727429

Status : Answered

Chosen Option : 1

Q.8 Correct the underlined part of the sentence. Choose 'No correct' as an answer if the sentence is grammatically correct.

Life would be a burdened without good companionship.

- Ans 1. burdening without
 2. No correct
 3. burdens without
 4. burden without

Question ID : 264330185565

Option 1 ID : 264330726637

Option 2 ID : 264330726639

Option 3 ID : 264330726636

Option 4 ID : 264330726638

Status : Answered

Chosen Option : 4

Q.9 Select the most appropriate synonym of the given word.

Scale

- Ans 1. Magnitude
 2. Lethargy
 3. Slide
 4. Chips

Question ID : 264330186877

Option 1 ID : 264330731632

Option 2 ID : 264330731634

Option 3 ID : 264330731633

Option 4 ID : 264330731635

Status : Answered

Chosen Option : 1

Q.10 Find the part of the given sentence that has an error in it. If there is no error, choose 'No error'.

Either of them have started the protest outside my house.

- Ans**
- 1. started the protest
 - 2. Either of them have
 - 3. No error
 - 4. outside my house.

Question ID : 264330185582
Option 1 ID : 264330726701
Option 2 ID : 264330726700
Option 3 ID : 264330726703
Option 4 ID : 264330726702
Status : Answered
Chosen Option : 2

Q.11 Select the most appropriate option for the given blank.

He writes essays on various topics _____ science and politics.

- Ans**
- 1. into
 - 2. including
 - 3. following
 - 4. after

Question ID : 264330185588
Option 1 ID : 264330726726
Option 2 ID : 264330726727
Option 3 ID : 264330726724
Option 4 ID : 264330726725
Status : Answered
Chosen Option : 2

Q.12 Choose the idiom/phrase that can substitute the highlighted group of words meaningfully.

You must keep it **in mind because it's important to remember** that living in cities is very expensive.

- Ans**
- 1. Bear something in mind
 - 2. Beat the brains
 - 3. In seventh heaven
 - 4. In the dark

Question ID : 264330186251
Option 1 ID : 264330729250
Option 2 ID : 264330729249
Option 3 ID : 264330729248
Option 4 ID : 264330729251
Status : Answered
Chosen Option : 2

Q.13 Select the incorrectly spelt word from the given sentence.

She was one of the wealthiest women in the world and certainly the most eccentric noble of her time.

- Ans**
- 1. noble
 - 2. wealthiest
 - 3. eccentric
 - 4. certainly

Question ID : 264330186104
 Option 1 ID : 264330728691
 Option 2 ID : 264330728688
 Option 3 ID : 264330728690
 Option 4 ID : 264330728689
 Status : Answered
 Chosen Option : 3

Q.14 In the following question, out of the given four alternatives, select the alternative which best expresses the meaning of the Idiom/Phrase.

Back to basics

- Ans**
- 1. To love someone with whole heart
 - 2. Covering all the possibilities
 - 3. Back to where one started
 - 4. Returning to the simple and most important things

Question ID : 264330185997
 Option 1 ID : 264330728281
 Option 2 ID : 264330728280
 Option 3 ID : 264330728282
 Option 4 ID : 264330728283
 Status : Answered
 Chosen Option : 3

Q.15 Four sentences are given, out of which three have all correct spellings. Choose the sentence with the incorrect spelt word/ words.

Ans 1.

In the instant they passed it they herd a blur of voices from behind the reticence of the limousine.

2.

When Doctor Kimble gave physic, it was natural that it should have an effect.

3.

But after ten minutes it came into sight again, drawn up at the side of the road.

4.

He seemed to weave, like the spider, from pure impulse, without reflection.

Question ID : 264330186925
 Option 1 ID : 264330731816
 Option 2 ID : 264330731819
 Option 3 ID : 264330731817
 Option 4 ID : 264330731818
 Status : Answered
 Chosen Option : 1

Comprehension:

Read the passage carefully and select the correct answer for the given blanks out of the four alternatives.

When you start a new job, you want to make a good impression (1) _____ your colleagues and supervisors. Behaving professionally, being punctual, and following company (2) _____ and procedures can help you establish a positive (3) _____ in the workplace.

Behaving appropriately and professionally can help (4) _____ trust with your colleagues and supervisors. When you demonstrate that you are reliable and can be trusted, your colleagues are more (5) _____ to support you and help you succeed.

SubQuestion No : 16

Q.16 Select the most appropriate option for blank(1)

- Ans
- 1. in
 - 2. on
 - 3. by
 - 4. for

Question ID : 264330186599

Option 1 ID : 264330730573

Option 2 ID : 264330730572

Option 3 ID : 264330730575

Option 4 ID : 264330730574

Status : Answered

Chosen Option : 2

Comprehension:

Read the passage carefully and select the correct answer for the given blanks out of the four alternatives.

When you start a new job, you want to make a good impression (1) _____ your colleagues and supervisors. Behaving professionally, being punctual, and following company (2) _____ and procedures can help you establish a positive (3) _____ in the workplace.

Behaving appropriately and professionally can help (4) _____ trust with your colleagues and supervisors. When you demonstrate that you are reliable and can be trusted, your colleagues are more (5) _____ to support you and help you succeed.

SubQuestion No : 17

Q.17 Select the most appropriate option for blank(2)

- Ans
- 1. types
 - 2. divisions
 - 3. sets
 - 4. policies

Question ID : 264330186600

Option 1 ID : 264330730579

Option 2 ID : 264330730577

Option 3 ID : 264330730576

Option 4 ID : 264330730578

Status : Answered

Chosen Option : 4

Comprehension:

Read the passage carefully and select the correct answer for the given blanks out of the four alternatives.

When you start a new job, you want to make a good impression (1) _____ your colleagues and supervisors. Behaving professionally, being punctual, and following company (2) _____ and procedures can help you establish a positive (3) _____ in the workplace.

Behaving appropriately and professionally can help (4) _____ trust with your colleagues and supervisors. When you demonstrate that you are reliable and can be trusted, your colleagues are more (5) _____ to support you and help you succeed.

SubQuestion No : 18

Q.18 Select the most appropriate option for blank(3)

- Ans**
- 1. face
 - 2. mask
 - 3. image
 - 4. firework

Question ID : 264330186601

Option 1 ID : 264330730581

Option 2 ID : 264330730582

Option 3 ID : 264330730580

Option 4 ID : 264330730583

Status : Answered

Chosen Option : 3

Comprehension:

Read the passage carefully and select the correct answer for the given blanks out of the four alternatives.

When you start a new job, you want to make a good impression (1) _____ your colleagues and supervisors. Behaving professionally, being punctual, and following company (2) _____ and procedures can help you establish a positive (3) _____ in the workplace.

Behaving appropriately and professionally can help (4) _____ trust with your colleagues and supervisors. When you demonstrate that you are reliable and can be trusted, your colleagues are more (5) _____ to support you and help you succeed.

SubQuestion No : 19

Q.19 Select the most appropriate option for blank(4)

- Ans**
- 1. depth
 - 2. demolish
 - 3. select
 - 4. build

Question ID : 264330186602

Option 1 ID : 264330730587

Option 2 ID : 264330730586

Option 3 ID : 264330730584

Option 4 ID : 264330730585

Status : Answered

Chosen Option : 4

Comprehension:

Read the passage carefully and select the correct answer for the given blanks out of the four alternatives.

When you start a new job, you want to make a good impression (1) _____ your colleagues and supervisors. Behaving professionally, being punctual, and following company (2) _____ and procedures can help you establish a positive (3) _____ in the workplace.

Behaving appropriately and professionally can help (4) _____ trust with your colleagues and supervisors. When you demonstrate that you are reliable and can be trusted, your colleagues are more (5) _____ to support you and help you succeed.

SubQuestion No : 20

Q.20 Select the most appropriate option for blank(5)

- Ans**
- 1. suddenly
 - 2. like
 - 3. vaguely
 - 4. likely

Question ID : 264330186603

Option 1 ID : 264330730590

Option 2 ID : 264330730589

Option 3 ID : 264330730591

Option 4 ID : 264330730588

Status : Answered

Chosen Option : 4

Section : Part-D-Hindi

Q.1 निम्नलिखित प्रश्न में, चार विकल्पों में से, उस विकल्प का चयन करें जो कोष्ठक में दिए गए शब्द के तद्भव रूप का सही विकल्प है। नेता जी ने अपनी सुरक्षा के लिए कई (अंगरखा) _____ रखे हैं।

- Ans**
- 1. अगुवा
 - 2. अगम
 - 3. अहेर
 - 4. अंगरक्षक

Question ID : 264330189938

Option 1 ID : 264330743362

Option 2 ID : 264330743363

Option 3 ID : 264330743365

Option 4 ID : 264330743364

Status : Not Answered

Chosen Option : --

Q.2 दिए गए वाक्य में से गलत वर्तनी ज्ञात कीजिए।

मानव का कल्याण ही मनुष्य का धर्म है।

- Ans
- 1. धर्म
 - 2. मानव
 - 3. कल्याण
 - 4. मनुष्य

Question ID : 264330190063

Option 1 ID : 264330743838

Option 2 ID : 264330743840

Option 3 ID : 264330743841

Option 4 ID : 264330743839

Status : Not Answered

Chosen Option : --

Q.3 दिए गए वाक्य में उचित पर्यायवाची शब्द का चयन करके रिक्त स्थान की पूर्ति करें।

_____ (पतिहीन) होते ही उसे घर से निकाल दिया गया।

- Ans
- 1. खग
 - 2. ब्रह्मा
 - 3. विधवा
 - 4. आजाद

Question ID : 264330189238

Option 1 ID : 264330740694

Option 2 ID : 264330740695

Option 3 ID : 264330740697

Option 4 ID : 264330740696

Status : Not Answered

Chosen Option : --

Q.4 निम्नलिखित प्रश्न में, चार विकल्पों में से, उस विकल्प का चयन करें जो कोष्ठक में दिए गए शब्द के विलोम शब्द का सही विकल्प है।

जो कुछ वे जानते हैं, उसे दूसरे तक पहुंचाने में वे स्वभाव से ही (कृपण) _____ हैं

- Ans
- 1. कर्मठ
 - 2. कठोर
 - 3. कंजूस
 - 4. उदार

Question ID : 264330189996

Option 1 ID : 264330743584

Option 2 ID : 264330743583

Option 3 ID : 264330743582

Option 4 ID : 264330743585

Status : Not Answered

Chosen Option : --

Q.5 निम्नलिखित वाक्य में, उस वाक्यांश को पहचानिए जिसमें माताओं से संबंधित अशुद्धियाँ हैं। यदि कोई गलती नहीं है तो 'कोई त्रुटि नहीं है' का चुनाव कीजिए।
हर माता पिता चाहते हैं कि उनका बच्चा/ एक आदर्श छात्र बना जो दूसरों से लिए/ प्रेरणा स्रोत बन सके।

- Ans
- 1. हर माता पिता चाहते हैं कि उनका बच्चा
 - 2. प्रेरणा स्रोत बन सके
 - 3. एक आदर्श छात्र बना जो दूसरों से लिए
 - 4. कोई त्रुटि नहीं है

Question ID : 264330188368
Option 1 ID : 264330737348
Option 2 ID : 264330737350
Option 3 ID : 264330737349
Option 4 ID : 264330737351
Status : Not Answered
Chosen Option : --

Q.6 दिए गए शब्द का विलोम शब्द ज्ञात कीजिए।

जलमार्ग

- Ans
- 1. गुलमार्ग
 - 2. थलमार्ग
 - 3. कुमार्ग
 - 4. सुमार्ग

Question ID : 264330188238
Option 1 ID : 264330736854
Option 2 ID : 264330736853
Option 3 ID : 264330736855
Option 4 ID : 264330736852
Status : Not Answered
Chosen Option : --

Q.7 निम्नलिखित प्रश्न में, चार विकल्पों में से, उस विकल्प का चयन करें जो कोष्ठक में दिए गए शब्द के तत्सम रूप का सही विकल्प है।
उसके मन में न जाने कितनी वेदना थी कि वह जोर-जोर से (उसास) _____ ले रहा था।

- Ans
- 1. उपरि
 - 2. उत्तिष्ठ
 - 3. इयत
 - 4. उच्छवास

Question ID : 264330189750
Option 1 ID : 264330742647
Option 2 ID : 264330742646
Option 3 ID : 264330742649
Option 4 ID : 264330742648
Status : Not Answered
Chosen Option : --

Q.8 निम्नलिखित वाक्य में रेखांकित भाग के लिए एक सार्थक शब्द ज्ञात कीजिए।

उसने दूर से फेककर ही हथियार चलाया।

- Ans
- 1. शस्त्र
 - 2. चाकू
 - 3. तलवार
 - 4. अस्त्र

Question ID : 264330189340
 Option 1 ID : 264330741082
 Option 2 ID : 264330741085
 Option 3 ID : 264330741083
 Option 4 ID : 264330741084
 Status : Not Answered
 Chosen Option : --

Q.9 निम्नलिखित वाक्य में रेखांकित भाग के लिए एक सार्थक शब्द ज्ञात कीजिए।

ये कभी न निष्फल होने वाला काम है।

- Ans
- 1. सटीक
 - 2. विफल
 - 3. अमोघ
 - 4. निश्चित

Question ID : 264330189214
 Option 1 ID : 264330740602
 Option 2 ID : 264330740605
 Option 3 ID : 264330740603
 Option 4 ID : 264330740604
 Status : Not Answered
 Chosen Option : --

Q.10 दिए गए वाक्य में रेखांकित शब्दों के लिए सही शब्दों वाले विकल्प का चयन करें।

उसे परीक्षा में अनुत्तीर्ण होने की आशा है।

- Ans
- 1. परिवर्तन की आवश्यकता नहीं है।
 - 2. उसे परीक्षा में अनुत्तीर्ण होने की सफलता है।
 - 3. उसे परीक्षा में अनुत्तीर्ण होने की कोमलता है।
 - 4. उसे परीक्षा में अनुत्तीर्ण होने की आशंका है।

Question ID : 264330192810
 Option 1 ID : 264330754597
 Option 2 ID : 264330754596
 Option 3 ID : 264330754595
 Option 4 ID : 264330754594
 Status : Not Answered
 Chosen Option : --

Q.11 निम्नलिखित प्रश्न में, चार विकल्पों में से, उस विकल्प का चयन करें जो रिक्त स्थान के लिए सही भाववाचक संज्ञा वाला विकल्प हो।
सीमा ने रोहिणी से कहा कि, _____ के नाते तुम्हें उसकी मदद करनी चाहिए।

- Ans
- ✓ 1. इंसानियत
 - ✗ 2. गुस्सा
 - ✗ 3. बचपन
 - ✗ 4. थकान

Question ID : 264330188330
Option 1 ID : 264330737207
Option 2 ID : 264330737206
Option 3 ID : 264330737204
Option 4 ID : 264330737205
Status : Not Answered
Chosen Option : --

Q.12 निम्नलिखित प्रश्न में, चार विकल्पों में से, उस विकल्प का चयन करें जो रिक्त स्थान के लिए सही पुल्लिंग रूप वाला विकल्प हो।
आज लगता है पूरे घर की सफाई हुई है क्योंकि _____ भी साफ नज़र आ रहा है।

- Ans
- ✗ 1. घड़ी
 - ✗ 2. दीवारें
 - ✗ 3. किताब
 - ✓ 4. आईना

Question ID : 264330189731
Option 1 ID : 264330742575
Option 2 ID : 264330742576
Option 3 ID : 264330742574
Option 4 ID : 264330742577
Status : Not Answered
Chosen Option : --

Q.13 निम्नलिखित प्रश्न में, चार विकल्पों में से, उस विकल्प का चयन करें जो दिए गए मुहावरे का सही अर्थ वाला विकल्प है।
आसमान से गिरा खजूर में अटका

- Ans
- ✗ 1. बुरे काम करने का बुरा फल ही मिलता है
 - ✗ 2. किसी के साथ साझा करना अच्छा नहीं होता
 - ✗ 3. अकेला व्यक्ति बड़ा काम नहीं कर सकता
 - ✓ 4. एक विपत्ति से छूटकर दूसरी में उलझ जाना

Question ID : 264330189808
Option 1 ID : 264330742868
Option 2 ID : 264330742867
Option 3 ID : 264330742869
Option 4 ID : 264330742866
Status : Not Answered
Chosen Option : --

Q.14 दिए गए शब्द का पर्यायवाची ज्ञात कीजिए।

सेना

- Ans
- 1. सिंधु
 - 2. दल
 - 3. ललित
 - 4. मंद

Question ID : 264330189048

Option 1 ID : 264330739970

Option 2 ID : 264330739972

Option 3 ID : 264330739973

Option 4 ID : 264330739971

Status : Not Answered

Chosen Option : --

Q.15 निम्नलिखित प्रश्न में, दिए गए चार विकल्पों में से, उस विकल्प का चयन करें जो दिए गए मुहावरे के अर्थ को सर्वश्रेष्ठ रूप से व्यक्त करता है।

युग युगान्तर से

- Ans
- 1. दादी के काल से
 - 2. आधुनिक काल से
 - 3. प्राचीन काल से
 - 4. तकनीकी जमाने से

Question ID : 264330189410

Option 1 ID : 264330741351

Option 2 ID : 264330741353

Option 3 ID : 264330741352

Option 4 ID : 264330741350

Status : Not Answered

Chosen Option : --

Comprehension:

नीचे दिए गए गद्य में कुछ शब्द छोड़ दिए गए हैं और प्रत्येक रिक्त स्थान के चार विकल्प दिए गए हैं। इन चारों में से कौन सा विकल्प रिक्त स्थान की पूर्ति करेगा-

प्रतियोगिता परिक्षाओं में गड़बड़ी और (1)_____ नई बात नहीं है। कई परीक्षा देने वाले (2)_____ का कहना है कि (3)_____ के सील टूटे हुए थे। वे इनके विरोध में (4)_____ भी कर रहे हैं। यही कारण है की परीक्षा (5)_____ कर दी गयी है।

SubQuestion No : 16

Q.16 रिक्त 1 के लिए सबसे उपयुक्त विकल्प का चयन कीजिए।

- Ans
- 1. रहस्यमय
 - 2. विवाद
 - 3. मूर्ख
 - 4. समूह

Question ID : 264330188166

Option 1 ID : 264330736578

Option 2 ID : 264330736577

Option 3 ID : 264330736576

Option 4 ID : 264330736579

Status : Not Answered

Chosen Option : --

Comprehension:

नीचे दिए गए गद्य में कुछ शब्द छोड़ दिए गए हैं और प्रत्येक रिक्त स्थान के चार विकल्प दिए गए हैं। इन चारों में से कौन सा विकल्प रिक्त स्थान की पूर्ति करेगा-

प्रतियोगिता परिक्षाओं में गड़बड़ी और (1)_____ नई बात नहीं है। कई परीक्षा देने वाले (2)_____ का कहना है कि (3)_____ के सील टूटे हुए थे। वे इनके विरोध में (4)_____ भी कर रहे हैं। यही कारण है की परीक्षा (5)_____ कर दी गयी है।

SubQuestion No : 17

Q.17 रिक्त 2 के लिए सबसे उपयुक्त विकल्प का चयन कीजिए।

- Ans
- 1. थानेदार
 - 2. अभ्यर्थियों
 - 3. कर्मचारी
 - 4. दुकानदार

Question ID : 264330188167

Option 1 ID : 264330736582

Option 2 ID : 264330736580

Option 3 ID : 264330736581

Option 4 ID : 264330736583

Status : Not Answered

Chosen Option : --

Comprehension:

नीचे दिए गए गद्य में कुछ शब्द छोड़ दिए गए हैं और प्रत्येक रिक्त स्थान के चार विकल्प दिए गए हैं। इन चारों में से कौन सा विकल्प रिक्त स्थान की पूर्ति करेगा-

प्रतियोगिता परिक्षाओं में गड़बड़ी और (1)_____ नई बात नहीं है। कई परीक्षा देने वाले (2)_____ का कहना है कि (3)_____ के सील टूटे हुए थे। वे इनके विरोध में (4)_____ भी कर रहे हैं। यही कारण है की परीक्षा (5)_____ कर दी गयी है।

SubQuestion No : 18

Q.18 रिक्त 3 के लिए सबसे उपयुक्त विकल्प का चयन कीजिए।

- Ans
- 1. विचार
 - 2. प्रश्नपत्रों
 - 3. कारतूस
 - 4. बन्दूक

Question ID : 264330188168

Option 1 ID : 264330736587

Option 2 ID : 264330736586

Option 3 ID : 264330736584

Option 4 ID : 264330736585

Status : Not Answered

Chosen Option : --

Comprehension:

नीचे दिए गए गद्य में कुछ शब्द छोड़ दिए गए हैं और प्रत्येक रिक्त स्थान के चार विकल्प दिए गए हैं। इन चारों में से कौन सा विकल्प रिक्त स्थान की पूर्ति करेगा-

प्रतियोगिता परिक्षाओं में गड़बड़ी और (1)_____ नई बात नहीं है। कई परीक्षा देने वाले (2)_____ का कहना है कि (3)_____ के सील टूटे हुए थे। वे इनके विरोध में (4)_____ भी कर रहे हैं। यही कारण है की परीक्षा (5)_____ कर दी गयी है।

SubQuestion No : 19

Q.19 रिक्त 4 के लिए सबसे उपयुक्त विकल्प का चयन कीजिए।

- Ans
- 1. प्रदर्शन
 - 2. उत्साह
 - 3. प्रतिशोध
 - 4. शोध

Question ID : 264330188169

Option 1 ID : 264330736591

Option 2 ID : 264330736588

Option 3 ID : 264330736589

Option 4 ID : 264330736590

Status : Not Answered

Chosen Option : --

Comprehension:

नीचे दिए गए गद्य में कुछ शब्द छोड़ दिए गए हैं और प्रत्येक रिक्त स्थान के चार विकल्प दिए गए हैं। इन चारों में से कौन सा विकल्प रिक्त स्थान की पूर्ति करेगा-

प्रतियोगिता परिक्षाओं में गड़बड़ी और (1)_____ नई बात नहीं है। कई परीक्षा देने वाले (2)_____ का कहना है कि (3)_____ के सील टूटे हुए थे। वे इनके विरोध में (4)_____ भी कर रहे हैं। यही कारण है की परीक्षा (5)_____ कर दी गयी है।

SubQuestion No : 20

Q.20 रिक्त 5 के लिए सबसे उपयुक्त विकल्प का चयन कीजिए।

- Ans
- ✓ 1. रद्द
 - ✗ 2. खटास
 - ✗ 3. मिठास
 - ✗ 4. धैर्य

Question ID : 264330188170

Option 1 ID : 264330736592

Option 2 ID : 264330736594

Option 3 ID : 264330736593

Option 4 ID : 264330736595

Status : Not Answered

Chosen Option : --