

Constable GD in Central Armed Police Forces CAPFs SSF Rifleman GD in Assam Rifles Examination 2024

Roll Number	
Candidate Name	
Venue Name	
Exam Date	01/03/2024
Exam Time	11:30 AM - 12:30 PM
Subject	Constable GD Examination 2024

Section : Part-A-General Intelligence and Reasoning

Q.1 Eight persons from Reena, Kavita, Raman, Umesh, Rohit, Vikas, Monika and Priya sit around a square table such that two persons sit in the each of the sides. All the persons are sitting facing the centre of the table. Reena sits on the immediate right of Rohit and they both sit on the same side. Monika faces the one who is second to the left of Kavita. Monika is sitting fourth to the right of Reena. Two persons sit between Vikas and Umesh (when counted from one side only) and Umesh is adjacent to Rohit. Only one person sits between Monika and Raman (when counted from one side only). Who is sitting second to the right of Umesh?

- Ans**
- 1. Rohit
 - 2. Monika
 - 3. Kavita
 - 4. Reena

Question ID : 264330190216
 Option 1 ID : 264330744449
 Option 2 ID : 264330744447
 Option 3 ID : 264330744448
 Option 4 ID : 264330744446

Status : Answered
 Chosen Option : 4

Q.2 In the following question, select the missing number from the given series.

21, 66, 204, 621, 1875, ?

- Ans**
- 1. 6008
 - 2. 5700
 - 3. 5640
 - 4. 6005

Question ID : 264330187111
 Option 1 ID : 264330732374
 Option 2 ID : 264330732372
 Option 3 ID : 264330732375
 Option 4 ID : 264330732373

Status : Not Attempted and Marked For Review
 Chosen Option : --

Q.3 Pointing to a man in a photo, Raman says, "He is the only son of the only daughter in law of my only son's father".
How is the man related to the Raman?

- Ans**
- 1. Father's father
 - 2. Son
 - 3. Father
 - 4. Son's son

Question ID : 264330190154
Option 1 ID : 264330744200
Option 2 ID : 264330744199
Option 3 ID : 264330744198
Option 4 ID : 264330744201
Status : Answered
Chosen Option : 1

Q.4 By interchanging which two signs and two numbers the equation will be correct?

$$7 - 6 \div 4 \times 2 + 5 = 3$$

- Ans**
- 1. - and \div , 4 and 2
 - 2. + and \times , 4 and 5
 - 3. - and +, 7 and 5
 - 4. \div and \times , 6 and 5

Question ID : 264330190540
Option 1 ID : 264330745743
Option 2 ID : 264330745745
Option 3 ID : 264330745742
Option 4 ID : 264330745744
Status : Answered
Chosen Option : 4

Q.5 In a certain code language, if PERJURY is coded as '113' and DECEPTION is coded as '91', then what will WITNESS be coded as?

- Ans**
- 1. 96
 - 2. 85
 - 3. 109
 - 4. 91

Question ID : 264330192114
Option 1 ID : 264330751812
Option 2 ID : 264330751810
Option 3 ID : 264330751811
Option 4 ID : 264330751813
Status : Answered
Chosen Option : 3

Q.6 Select the option that is related to the fifth word in the same way as the fourth word is related to the third word, and the second word is related to the first word.

Vadodara : Banyan City :: Cuttack : Silver City :: Dhanbad :

Ans ✗ 1. Ruby City

✓ 2. Coal City

✗ 3. Pearl City

✗ 4. Diamond City

Question ID : **264330192231**

Option 1 ID : **264330752278**

Option 2 ID : **264330752281**

Option 3 ID : **264330752280**

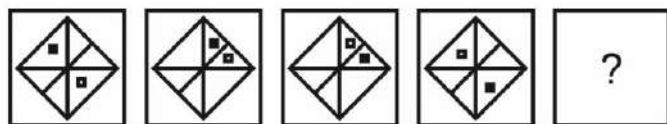
Option 4 ID : **264330752279**

Status : **Not Answered**

Chosen Option : --

prepp
Your Personal Exam Guide

Q.7 In the following question, select the figure which can be placed at the sign of question mark (?) from the given alternatives.



Ans

✗ 1.



✗ 2.



✗ 3.



✓ 4.



Question ID : 264330187135

Option 1 ID : 264330732469

Option 2 ID : 264330732470

Option 3 ID : 264330732471

Option 4 ID : 264330732468

Status : Answered

Chosen Option : 4

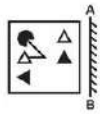
Q.8 Arrange the given words in the sequence in which they occur in the dictionary.

1. Biter
2. Bit
3. Bitcoin
4. Bite
5. Birth

- Ans**
- 1. 3,2,4,5,1
 - 2. 5,2,3,4,1
 - 3. 5,2,3,1,4
 - 4. 3,2,4,1,5

Question ID : 264330187081
 Option 1 ID : 264330732254
 Option 2 ID : 264330732255
 Option 3 ID : 264330732252
 Option 4 ID : 264330732253
 Status : Answered
 Chosen Option : 2

Q.9 If a mirror is placed on the line AB, then out of the option figures which figure will be the right image of the question figure?



- Ans**
- 1.
 - 2.
 - 3.
 - 4.

Question ID : 264330187397
 Option 1 ID : 264330733518
 Option 2 ID : 264330733516
 Option 3 ID : 264330733517
 Option 4 ID : 264330733519
 Status : Answered
 Chosen Option : 3

Q.10 In a certain code language, 'FBI' is coded as '324', 'HFG' is coded as '1008'. What is the code for 'TBD' in that code language?

- Ans**
- 1. 440
 - 2. 420
 - 3. 480
 - 4. 510

Question ID : 264330187344
 Option 1 ID : 264330733307
 Option 2 ID : 264330733305
 Option 3 ID : 264330733304
 Option 4 ID : 264330733306
 Status : **Marked For Review**
 Chosen Option : 2

Q.11 Select the option that is related to the fifth number-letter cluster in the same way as the fourth number-letter cluster is related to the third number-letter cluster, and the second number-letter cluster is related to the first number-letter cluster.
 FAMILY : EBLJKZ :: GATHER : FBSIDS :: DINNER : ?

- Ans**
- 1. CJMDSO
 - 2. CJODMS
 - 3. CMJODS
 - 4. CJMODS

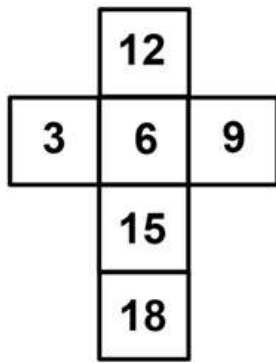
Question ID : 264330192232
 Option 1 ID : 264330752284
 Option 2 ID : 264330752285
 Option 3 ID : 264330752282
 Option 4 ID : 264330752283
 Status : **Answered**
 Chosen Option : 4

Q.12 Seven girls A, B, C, X, Y, W and Z are sitting around a circular table facing opposite to the centre (not necessarily in the same order). W is second to the left of X. W is the immediate neighbour of both B and C. Z is fourth to the left of B. Y is not the immediate neighbour of C. Who is sitting on the immediate right of B?

- Ans**
- 1. W
 - 2. Y
 - 3. A
 - 4. X

Question ID : 264330192056
 Option 1 ID : 264330751579
 Option 2 ID : 264330751580
 Option 3 ID : 264330751581
 Option 4 ID : 264330751578
 Status : **Answered**
 Chosen Option : 4

Q.13 On folding the given die, which number will be opposite to the number 12?



- Ans**
- 1. 18
 - 2. 9
 - 3. 15
 - 4. 6

Question ID : 264330192285

Option 1 ID : 264330752494

Option 2 ID : 264330752497

Option 3 ID : 264330752496

Option 4 ID : 264330752495

Status : Answered

Chosen Option : 3

Q.14 In the following question below are given some statements followed by some conclusions based on those statements.

Taking the given statements to be true even if they seem to be at variance from commonly known facts. Read all the conclusions and then decide which of the given conclusion(s) logically follows the given statements.

Statements:

I. All F are S.

II. Some S are R.

Conclusions:

I. Some R are not F.

II. No S is F.

III. Some S are not R.

- Ans**
- 1. Neither conclusion follows
 - 2. All conclusion follows
 - 3. Both conclusions I and III follows
 - 4. Only conclusion II follows

Question ID : 264330190217

Option 1 ID : 264330744451

Option 2 ID : 264330744452

Option 3 ID : 264330744450

Option 4 ID : 264330744453

Status : Answered

Chosen Option : 1

Q.15 A series is given with one term missing. Select the correct alternative from the given ones that will complete the series.

AQM, ZPL, YOK, XNI, ?

- Ans**
- 1. MNR
 - 2. WRQ
 - 3. NRQ
 - 4. WMI

Question ID : 264330190267
Option 1 ID : 264330744651
Option 2 ID : 264330744650
Option 3 ID : 264330744653
Option 4 ID : 264330744652
Status : Answered
Chosen Option : 4

Q.16 Which of the following groups of letters when sequentially placed from left to right will complete the given series?

abb_dabbc_abb_dab_cd_bbcd

- Ans**
- 1. cdcba
 - 2. ddbca
 - 3. cbcd
 - 4. abcd

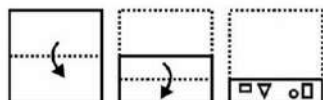
Question ID : 264330191549
Option 1 ID : 264330749550
Option 2 ID : 264330749551
Option 3 ID : 264330749553
Option 4 ID : 264330749552
Status : Answered
Chosen Option : 1

Q.17 If $20A + 25B + 70C + 7 = 5$ and $30A + 40B + 75C + 15 = -5$, then $4A + 10B + 8C + 2 = ?$

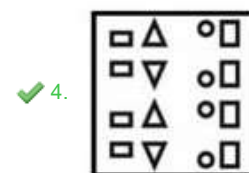
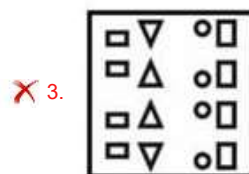
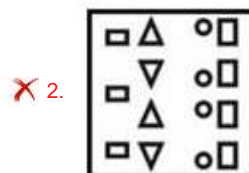
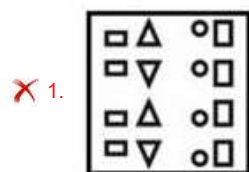
- Ans**
- 1. 0
 - 2. 3
 - 3. -2
 - 4. 1

Question ID : 264330190461
Option 1 ID : 264330745426
Option 2 ID : 264330745429
Option 3 ID : 264330745427
Option 4 ID : 264330745428
Status : Answered
Chosen Option : 3

Q.18 A piece of paper is folded and punched as shown below in the question figures. From the given option figures, indicate how it will appear when opened?



Ans



Question ID : 264330190446

Option 1 ID : 264330745368

Option 2 ID : 264330745369

Option 3 ID : 264330745366

Option 4 ID : 264330745367

Status : Answered

Chosen Option : 1

Q.19 In the following question, select the figure which can be placed at the sign of question mark (?) from the given alternatives.

#	A	B	#	C	B	A	C	?
B	C	C	A	A	#	#	B	

Ans

✗ 1.

#	A
C	B

✗ 2.

A	#
B	C

✗ 3.

#	C
B	A

✓ 4.

#	A
B	C

Question ID : 264330190182

Option 1 ID : 264330744310

Option 2 ID : 264330744312

Option 3 ID : 264330744313

Option 4 ID : 264330744311

Status : Answered

Chosen Option : 4

Q.20 In the following question, select the missing number from the given series.

113, 115, 119, ?, 133, 143

Ans ✗ 1. 128

✗ 2. 126

✗ 3. 130

✓ 4. 125

Question ID : 264330187430

Option 1 ID : 264330733649

Option 2 ID : 264330733648

Option 3 ID : 264330733650

Option 4 ID : 264330733651

Status : Answered

Chosen Option : 4

Q.1 _____ is an asset that the borrower owns (such as land, building, vehicle, livestock, deposits with banks) and uses this as a guarantee to a lender until the loan is repaid.

- Ans
- 1. Collateral
 - 2. Debts
 - 3. Fixed Assets
 - 4. Liability

Question ID : 264330191465
Option 1 ID : 264330749217
Option 2 ID : 264330749215
Option 3 ID : 264330749214
Option 4 ID : 264330749216
Status : Answered
Chosen Option : 3

Q.2 Aga Khan Cup' is associated with the game of _____

- Ans
- 1. Football
 - 2. Hockey
 - 3. Motor Race
 - 4. Horse Race

Question ID : 264330190922
Option 1 ID : 264330747045
Option 2 ID : 264330747042
Option 3 ID : 264330747044
Option 4 ID : 264330747043
Status : Answered
Chosen Option : 1

Q.3 Pandit Hariprasad Chaurasia, is a world-renowned exponent of the _____.

- Ans
- 1. sitar
 - 2. bansuri
 - 3. guitar
 - 4. tabla

Question ID : 264330190897
Option 1 ID : 264330746942
Option 2 ID : 264330746944
Option 3 ID : 264330746945
Option 4 ID : 264330746943
Status : Answered
Chosen Option : 2

Q.4 Dr. Norman Borlaug, a Nobel laureate, is known for his contributions to:

- Ans
- 1. Renewable energy
 - 2. Space exploration
 - 3. Agriculture and food production
 - 4. Environmental conservation

Question ID : 264330190945
Option 1 ID : 264330747137
Option 2 ID : 264330747136
Option 3 ID : 264330747135
Option 4 ID : 264330747134
Status : Answered
Chosen Option : 3

Q.5 निम्नलिखित में से किस तैराकी शैली में तैराक पूल की दीवार की ओर मुंह करके पानी में उतरना शुरू करते हैं?

- Ans
- 1. ब्रेस्टस्ट्रोक (Breaststroke)
 - 2. फ्री स्टाइल (Freestyle)
 - 3. बेकस्ट्रोक (Backstroke)
 - 4. बटरफ्लाय (Butterfly)

Question ID : 264330188688
Option 1 ID : 264330738556
Option 2 ID : 264330738554
Option 3 ID : 264330738555
Option 4 ID : 264330738557
Status : Answered
Chosen Option : 3

Q.6 The Doctrine of Lapse was devised by Governor General _____.

- Ans
- 1. Lord Wellesley
 - 2. Lord Hastings
 - 3. Lord Clive
 - 4. Lord Dalhousie

Question ID : 264330191076
Option 1 ID : 264330747660
Option 2 ID : 264330747661
Option 3 ID : 264330747658
Option 4 ID : 264330747659
Status : Answered
Chosen Option : 4

Q.7 The number of oscillations per second is called _____ of oscillation.

- Ans
- 1. frequency
 - 2. amplitude
 - 3. pitch
 - 4. hertz

Question ID : 264330188817
 Option 1 ID : 264330739071
 Option 2 ID : 264330739072
 Option 3 ID : 264330739073
 Option 4 ID : 264330739070
 Status : Answered
 Chosen Option : 1

Q.8 _____, जो कि भारत का संवैधानिक प्रमुख होता है, को सलाह देने के लिए एक मंत्रिपरिषद होती है, जिसका प्रमुख प्रधानमंत्री होता है।

- Ans
- 1. राजा
 - 2. राष्ट्रपति
 - 3. न्यायाधीश
 - 4. गृहमंत्री

Question ID : 264330191861
 Option 1 ID : 264330750799
 Option 2 ID : 264330750801
 Option 3 ID : 264330750798
 Option 4 ID : 264330750800
 Status : Answered
 Chosen Option : 2

Q.9 "संविधान का पालन करें और उसके आदर्शों, संस्थाओं, राष्ट्र ध्वज और राष्ट्रगान का आदर करें" यह भारतीय संविधान में उल्लिखित एक _____ है।

- Ans
- 1. मौलिक कर्तव्य
 - 2. मौलिक अधिकार
 - 3. आर्थिक कर्तव्य
 - 4. निर्देशक सिद्धांत

Question ID : 264330191860
 Option 1 ID : 264330750795
 Option 2 ID : 264330750794
 Option 3 ID : 264330750797
 Option 4 ID : 264330750796
 Status : Answered
 Chosen Option : 1

Q.10 How many Vande Bharat trains were flagged off by Prime Minister Narendra Modi via video conferencing on September 24, 2023?

- Ans**
- 1. Seven
 - 2. Nine
 - 3. Five
 - 4. Three

Question ID : 264330188774
Option 1 ID : 264330738900
Option 2 ID : 264330738901
Option 3 ID : 264330738899
Option 4 ID : 264330738898
Status : Answered
Chosen Option : 1

Q.11 In India, the dependency ratio of children is a measure of the number of dependents aged _____.

- Ans**
- 1. 0 to 21
 - 2. 0 to 14
 - 3. 0 to 16
 - 4. 0 to 18

Question ID : 264330190594
Option 1 ID : 264330745961
Option 2 ID : 264330745958
Option 3 ID : 264330745959
Option 4 ID : 264330745960
Status : Not Answered
Chosen Option : --

Q.12 Tulip festival is related to which of the following state/UTs?

- Ans**
- 1. Jammu & Kashmir
 - 2. Kerala
 - 3. Tripura
 - 4. Tamil Nadu

Question ID : 264330188736
Option 1 ID : 264330738746
Option 2 ID : 264330738747
Option 3 ID : 264330738749
Option 4 ID : 264330738748
Status : Answered
Chosen Option : 1

Q.13 Jatin Goswami received several awards for his contribution to which dance style?

- Ans
- 1. Sattriya
 - 2. Kathak
 - 3. Bharatnatyam
 - 4. Kathakali

Question ID : 264330190618
Option 1 ID : 264330746057
Option 2 ID : 264330746055
Option 3 ID : 264330746054
Option 4 ID : 264330746056
Status : Answered
Chosen Option : 3

Q.14 The Ministry of Finance has recently launched the Mahila Samman Savings Certificate, _____.

- Ans
- 1. 2020
 - 2. 2023
 - 3. 2021
 - 4. 2022

Question ID : 264330191087
Option 1 ID : 264330747702
Option 2 ID : 264330747705
Option 3 ID : 264330747703
Option 4 ID : 264330747704
Status : Answered
Chosen Option : 2

Q.15 Which sector of the economy focuses on intellectual activities and innovation?

- Ans
- 1. Secondary Sector
 - 2. Unorganised Sector
 - 3. Quaternary Sector
 - 4. Primary Sector

Question ID : 264330191307
Option 1 ID : 264330748583
Option 2 ID : 264330748585
Option 3 ID : 264330748584
Option 4 ID : 264330748582
Status : Not Answered
Chosen Option : --

Q.16 क्रिकेट में गली (Gully) _____ स्थिति होती है।

- Ans
- 1. कवर के पीछे की (behind covers)
 - 2. स्लिप की स्थिति के समान एक (same as slip)
 - 3. पॉइंट और स्लिप के बीच की (between point and slip)
 - 4. पॉइंट की स्थिति के समान एक (same as point)

Question ID : 264330191442
Option 1 ID : 264330749125
Option 2 ID : 264330749124
Option 3 ID : 264330749122
Option 4 ID : 264330749123
Status : Not Answered
Chosen Option : --

Q.17 Who has been selected as the new World Bank President in May 2023?

- Ans
- 1. David Malpass
 - 2. Robert E Lucas
 - 3. Ajay Banga
 - 4. Miguel Diaz-Canel

Question ID : 264330191729
Option 1 ID : 264330750271
Option 2 ID : 264330750270
Option 3 ID : 264330750272
Option 4 ID : 264330750273
Status : Answered
Chosen Option : 3

Q.18 Which Gupta ruler was known for defeating the Sakas in western regions, assuming the title of 'Vikramaditya' ?

- Ans
- 1. Kumaragupta I
 - 2. Chandragupta-II
 - 3. Samudragupta
 - 4. Chandragupta-I

Question ID : 264330190855
Option 1 ID : 264330746774
Option 2 ID : 264330746777
Option 3 ID : 264330746775
Option 4 ID : 264330746776
Status : Answered
Chosen Option : 2

Q.19 According to the 2011 census, which of the following states is the least populated state in India?

- Ans**
- 1. Himachal Pradesh
 - 2. Sikkim
 - 3. Kerala
 - 4. Madhya Pradesh

Question ID : 264330191754
Option 1 ID : 264330750372
Option 2 ID : 264330750373
Option 3 ID : 264330750371
Option 4 ID : 264330750370
Status : Answered
Chosen Option : 2

Q.20 Which dance style is incorporated with both the Tandava and Lasya?

- Ans**
- 1. Odissi
 - 2. Kathak
 - 3. Manipuri
 - 4. Bharatnatyam

Question ID : 264330190630
Option 1 ID : 264330746103
Option 2 ID : 264330746104
Option 3 ID : 264330746105
Option 4 ID : 264330746102
Status : Not Answered
Chosen Option : --

Section : Part-C-Elementary Mathematics

Q.1 The selling price of a car is Rs. 11440. If the car is sold at a discount of 45 percent, then what will be the marked price of the car?

- Ans**
- 1. Rs. 20300
 - 2. Rs. 21050
 - 3. Rs. 20800
 - 4. Rs. 19850

Question ID : 264330187809
Option 1 ID : 264330735164
Option 2 ID : 264330735166
Option 3 ID : 264330735165
Option 4 ID : 264330735167
Status : Answered
Chosen Option : 3

Q.2 The ratio of two numbers is 3: 1. The sum of their squares is 810. What is the sum of the numbers?

- Ans**
- 1. 27
 - 2. 36
 - 3. 24
 - 4. 60

Question ID : 264330188092
Option 1 ID : 264330736299
Option 2 ID : 264330736297
Option 3 ID : 264330736296
Option 4 ID : 264330736298
Status : Answered
Chosen Option : 2

Q.3 The radius of a sphere is 4.2 cm. What is the total surface area of the sphere?

- Ans**
- 1. 248.36 cm²
 - 2. 176.98 cm²
 - 3. 196.52 cm²
 - 4. 221.76 cm²

Question ID : 264330187258
Option 1 ID : 264330732963
Option 2 ID : 264330732960
Option 3 ID : 264330732962
Option 4 ID : 264330732961
Status : Answered
Chosen Option : 4

Q.4 Income of A is 20 percent more than the income of B and income of B is 30 percent more than the income of C. The income of C is (approximately) how much percentage less than the income of A?

- Ans**
- 1. 40 percent
 - 2. 36 percent
 - 3. 32 percent
 - 4. 30 percent

Question ID : 264330187686
Option 1 ID : 264330734673
Option 2 ID : 264330734672
Option 3 ID : 264330734674
Option 4 ID : 264330734675
Status : Answered
Chosen Option : 2

Q.5 What is the value of $540 - 270 \div 5 + 34 \times 2$?

- Ans
- 1. 554
 - 2. 518
 - 3. 496
 - 4. 532

Question ID : 264330188552
Option 1 ID : 264330738013
Option 2 ID : 264330738011
Option 3 ID : 264330738010
Option 4 ID : 264330738012
Status : Answered
Chosen Option : 1

Q.6 A man earns a profit of 10 percent by selling a mobile for a certain price. If he sells that mobile at double the price, then what will be the profit percentage?

- Ans
- 1. 120 percent
 - 2. 140 percent
 - 3. 130 percent
 - 4. 100 percent

Question ID : 264330187687
Option 1 ID : 264330734678
Option 2 ID : 264330734677
Option 3 ID : 264330734679
Option 4 ID : 264330734676
Status : Answered
Chosen Option : 1

Q.7 A, B and C alone can do a work in 10, 12 and 15 days respectively. All three of them began the work together but B left 3 days before completion of the work. In how many days was the work completed?

- Ans
- 1. 3 days
 - 2. 5 days
 - 3. 4 days
 - 4. 2 days

Question ID : 264330187857
Option 1 ID : 264330735359
Option 2 ID : 264330735356
Option 3 ID : 264330735357
Option 4 ID : 264330735358
Status : Marked For Review
Chosen Option : 1

Q.8 Hiten marks his pen at Rs. 28875 and after allowing discount of 20 percent, he still earns 40 percent profit. What is the cost price of the pen?

- Ans**
- 1. Rs. 17000
 - 2. Rs. 16800
 - 3. Rs. 16500
 - 4. Rs. 16000

Question ID : 264330187950
Option 1 ID : 264330735730
Option 2 ID : 264330735731
Option 3 ID : 264330735728
Option 4 ID : 264330735729
Status : Answered
Chosen Option : 3

Q.9 What is the compound interest for 1 year on a sum of Rs. 7000 at the annual rate of 36 percent compounding half yearly?

- Ans**
- 1. Rs. 2746.8
 - 2. Rs. 3088.8
 - 3. Rs. 2878.8
 - 4. Rs. 2928.8

Question ID : 264330190382
Option 1 ID : 264330745112
Option 2 ID : 264330745110
Option 3 ID : 264330745113
Option 4 ID : 264330745111
Status : Answered
Chosen Option : 1

Q.10 Sohan alone can do a work in 18 days and Mohan alone can do the same work in 36 days. In how many days will they together complete the same work?

- Ans**
- 1. 12 days
 - 2. 11 days
 - 3. 15 days
 - 4. 14 days

Question ID : 264330187736
Option 1 ID : 264330734873
Option 2 ID : 264330734874
Option 3 ID : 264330734872
Option 4 ID : 264330734875
Status : Answered
Chosen Option : 1

Q.11 Which of the following number is divisible by 9?

- Ans
- 1. 2254
 - 2. 4248
 - 3. 4848
 - 4. 5848

Question ID : 264330187301
Option 1 ID : 264330733133
Option 2 ID : 264330733132
Option 3 ID : 264330733134
Option 4 ID : 264330733135
Status : Answered
Chosen Option : 2

Q.12 The average of 15 numbers is 33 and the average of 33 numbers is 15. Find the average of all the numbers.

- Ans
- 1. 27.25
 - 2. 15.55
 - 3. 20.625
 - 4. 22.55

Question ID : 264330191653
Option 1 ID : 264330749968
Option 2 ID : 264330749966
Option 3 ID : 264330749967
Option 4 ID : 264330749969
Status : Marked For Review
Chosen Option : 3

Q.13 If Sundar borrows Rs. 45000 from Jethalal at rate of interest 8% per annum simple interest.
How much interest Sundar has to pay at the end of five years ?

- Ans
- 1. Rs. 21000
 - 2. Rs. 24000
 - 3. Rs.15000
 - 4. Rs. 18000

Question ID : 264330192302
Option 1 ID : 264330752564
Option 2 ID : 264330752565
Option 3 ID : 264330752562
Option 4 ID : 264330752563
Status : Answered
Chosen Option : 4

Q.14 By selling an article for Rs. 1600 a dealer loses 20 percent. At what price should he sell the article to earn a profit of 25 percent?

- Ans**
- 1. Rs. 3000
 - 2. Rs. 2400
 - 3. Rs. 2000
 - 4. Rs. 2500

Question ID : 264330188621
Option 1 ID : 264330738289
Option 2 ID : 264330738286
Option 3 ID : 264330738287
Option 4 ID : 264330738288
Status : Answered
Chosen Option : 4

Q.15 What should be subtracted from 980 so that the number obtained will become equal to 40 percent of 1350?

- Ans**
- 1. 440
 - 2. 460
 - 3. 430
 - 4. 450

Question ID : 264330187305
Option 1 ID : 264330733148
Option 2 ID : 264330733150
Option 3 ID : 264330733151
Option 4 ID : 264330733149
Status : Answered
Chosen Option : 1

Q.16 In an exam, Ramesh got 85, 123, 54, 98, 63 and 45 marks in as many subjects. Which of the following is the average marks of Ramesh in those subjects?

- Ans**
- 1. 82
 - 2. 78
 - 3. 68
 - 4. 76

Question ID : 264330192472
Option 1 ID : 264330753243
Option 2 ID : 264330753242
Option 3 ID : 264330753244
Option 4 ID : 264330753245
Status : Answered
Chosen Option : 2

Q.17 Find the largest number that divides 68, 102, and 136 to leave the same remainder in each case.

- Ans
- 1. 33
 - 2. 34
 - 3. 51
 - 4. 17

Question ID : 264330191671
Option 1 ID : 264330750038
Option 2 ID : 264330750039
Option 3 ID : 264330750041
Option 4 ID : 264330750040
Status : Answered
Chosen Option : 2

Q.18 What will be the ratio of the Least Common Multiple and Highest Common Factor of 110, 11 and 220?

- Ans
- 1. 80:1
 - 2. 6:1
 - 3. 40:1
 - 4. 20:1

Question ID : 264330187862
Option 1 ID : 264330735379
Option 2 ID : 264330735378
Option 3 ID : 264330735377
Option 4 ID : 264330735376
Status : Answered
Chosen Option : 4

Q.19 If $4T = 3V = 12S$, then what is the value of $T : V : S$?

- Ans
- 1. 5 : 3 : 1
 - 2. 3 : 4 : 1
 - 3. 4 : 3 : 1
 - 4. 3 : 1 : 4

Question ID : 264330187711
Option 1 ID : 264330734774
Option 2 ID : 264330734775
Option 3 ID : 264330734772
Option 4 ID : 264330734773
Status : Answered
Chosen Option : 2

Q.20 A train of length 640 metres crosses a another train of length 920 metres in 24 seconds. Both the trains are running in opposite directions. If the speed of both the trains is same, then what is the speed?

- Ans**
- 1. 129 km/hr
 - 2. 117 km/hr
 - 3. 136 km/hr
 - 4. 105 km/hr

Question ID : 264330187875
Option 1 ID : 264330735429
Option 2 ID : 264330735428
Option 3 ID : 264330735431
Option 4 ID : 264330735430
Status : Answered
Chosen Option : 2

Section : Part-D-English

Q.1 The sentence has been divided into three parts, identify the segment which contains a spelling error in the sentence given below. Choose no error if there is no error in the sentence.

The proffessor noticed a misspelled word in/ the student's essay and pointed out the/ error during the class discussion.

- Ans**
- 1. no error
 - 2. the student's essay and pointed out the
 - 3. The professor noticed a misspelled word in
 - 4. error during the class discussion.

Question ID : 264330186399
Option 1 ID : 264330729815
Option 2 ID : 264330729813
Option 3 ID : 264330729812
Option 4 ID : 264330729814
Status : Answered
Chosen Option : 4

Q.2 Choose the word that is opposite in meaning to the given word.

Anonymity

- Ans**
- 1. Cachet
 - 2. Silence
 - 3. Importance
 - 4. Bareness

Question ID : 264330186794
Option 1 ID : 264330731317
Option 2 ID : 264330731316
Option 3 ID : 264330731318
Option 4 ID : 264330731319
Status : Answered
Chosen Option : 3

Q.3 Choose the most appropriate antonym of the underlined word.

Many of these losses were due to the utter incompetence of the higher command.

- Ans
- 1. Inability
 - 2. Boredom
 - 3. Lacuna
 - 4. Adept

Question ID : 264330185576
Option 1 ID : 264330726676
Option 2 ID : 264330726678
Option 3 ID : 264330726677
Option 4 ID : 264330726679
Status : Answered
Chosen Option : 4

Q.4 Find the part of the given sentence that has an error in it. If there is no error, choose 'No error'.

In many ways, this is the best time in history to be alive.

- Ans
- 1. No error
 - 2. history to be alive
 - 3. is the best time in
 - 4. In many ways, this

Question ID : 264330186298
Option 1 ID : 264330729431
Option 2 ID : 264330729430
Option 3 ID : 264330729429
Option 4 ID : 264330729428
Status : Answered
Chosen Option : 2

Q.5 Find the part of the given sentence that has an error in it. If there is no error, choose 'No error'.

People are acting the way evolution have wired them.

- Ans
- 1. No error
 - 2. the way evolution
 - 3. have wired them
 - 4. People are acting

Question ID : 264330186067
Option 1 ID : 264330728551
Option 2 ID : 264330728549
Option 3 ID : 264330728550
Option 4 ID : 264330728548
Status : Answered
Chosen Option : 1

Q.6 Four sentences are given, out of which three have all correct spellings. Choose the sentence with the incorrect spelt word/ words.

Ans 1.

Beyond the inky sea and far up that high, black shadow of a hill lived the Divers.

2.

This preparation for bonds, and the additional igneminy it inferred, took a little of the excitement out of me.

3.

Marnar wanted the heaps of ten to grow into a square, and then into a larger square.

4.

The judge said he could hug him for them words; so he cried, and his wife she cried again.

Question ID : 264330186946

Option 1 ID : 264330731897

Option 2 ID : 264330731896

Option 3 ID : 264330731899

Option 4 ID : 264330731898

Status : Answered

Chosen Option : 2

Q.7 The sentence has been divided into three parts, identify the error segment in the sentence given below. Choose no error if there is no error in the sentence.

Despite facing numerous challenges, she worked hardly/ to achieve her goals and ultimately/ earned the well-deserved promotion.

Ans 1. earned the well-deserved promotion.

2. no error

3. Despite facing numerous challenges, she worked hardly

4. to achieve her goals and ultimately

Question ID : 264330186444

Option 1 ID : 264330729986

Option 2 ID : 264330729987

Option 3 ID : 264330729984

Option 4 ID : 264330729985

Status : Answered

Chosen Option : 1

Q.8 Select the most appropriate synonym of the given word.

Bait

Ans 1. Greed

2. Food

3. Repulsion

4. Allurement

Question ID : 264330186499

Option 1 ID : 264330730194

Option 2 ID : 264330730195

Option 3 ID : 264330730192

Option 4 ID : 264330730193

Status : Answered

Chosen Option : 1

Q.9 Improve the underlined part of the sentence. Choose 'No improvement' as an answer if the sentence is grammatically correct.

It will none rained in the West this summer.

- Ans**
- 1. no rained
 - 2. not have raining
 - 3. not rain
 - 4. No improvement

Question ID : 264330186175
Option 1 ID : 264330728962
Option 2 ID : 264330728960
Option 3 ID : 264330728961
Option 4 ID : 264330728963
Status : Answered
Chosen Option : 2

Q.10 Select the most appropriate word to fill in the blank.

She is the _____ dancer in the competition

- Ans**
- 1. bad
 - 2. baddest
 - 3. worse
 - 4. worst

Question ID : 264330186764
Option 1 ID : 264330731207
Option 2 ID : 264330731206
Option 3 ID : 264330731205
Option 4 ID : 264330731204
Status : Answered
Chosen Option : 4

Q.11 Choose the idiom/phrase that can substitute the highlighted group of words meaningfully.

They are **working very hard in less time** to make the presentation on time.

- Ans**
- 1. Scapegoat
 - 2. Off on the wrong foot
 - 3. Working against the clock
 - 4. Til the cows come home

Question ID : 264330186019
Option 1 ID : 264330728365
Option 2 ID : 264330728366
Option 3 ID : 264330728367
Option 4 ID : 264330728364
Status : Answered
Chosen Option : 3

Q.12 In the following question, out of the given four alternatives, select the alternative which best expresses the meaning of the Idiom/Phrase.
To pop the question

- Ans**
- 1. To propose marriage
 - 2. To ask a nonsense question
 - 3. To mark important details
 - 4. To give a wrong answer

Question ID : 264330185724
Option 1 ID : 264330727240
Option 2 ID : 264330727241
Option 3 ID : 264330727243
Option 4 ID : 264330727242
Status : Answered
Chosen Option : 2

Q.13 Improve the underlined part of the sentence. Choose 'No improvement' as an answer if the sentence is grammatically correct.

The scientists have so far focussed on improve cropped yields.

- Ans**
- 1. improves crop
 - 2. No improvement
 - 3. improving crop
 - 4. improved cropping

Question ID : 264330186069
Option 1 ID : 264330728556
Option 2 ID : 264330728559
Option 3 ID : 264330728557
Option 4 ID : 264330728558
Status : Answered
Chosen Option : 3

Q.14 Improve the underlined part of the sentence. Choose 'No improvement' as an answer if the sentence is grammatically correct.

I'm not going to work today.

- Ans**
- 1. No improvement
 - 2. go to work
 - 3. goes to work
 - 4. going to working

Question ID : 264330186195
Option 1 ID : 264330729039
Option 2 ID : 264330729036
Option 3 ID : 264330729037
Option 4 ID : 264330729038
Status : Answered
Chosen Option : 2

Q.15 Select the most appropriate option for the given blank.

Your sister is _____ advantage of my situation.

- Ans
- 1. pulling
 - 2. taking
 - 3. parting
 - 4. returning

Question ID : 264330185791

Option 1 ID : 264330727496

Option 2 ID : 264330727498

Option 3 ID : 264330727499

Option 4 ID : 264330727497

Status : Answered

Chosen Option : 2

Comprehension:

In the following passage some words have been deleted. Fill in the blanks with the help of the alternatives given. Select the most appropriate option for each number.

His back was (1) _____ me, and he had his arms folded, and was nodding forward, heavy with sleep. I thought he would be (2) _____ if I came upon him with his breakfast, in that unexpected manner, so I went (3) _____ softly and touched him on the shoulder. He (4) _____ jumped up, and it was not the same man, but another man! And there he was, looking bewildered and disoriented, as if he had (5) _____ awakened from a deep dream. In his eyes, I saw a mix of fear and confusion, as if he was struggling to recognize the world around him, or perhaps, struggling to remember who he was.

SubQuestion No : 16

Q.16 Select the most appropriate option to fill in the blank No. 1.

- Ans
- 1. below
 - 2. beyond
 - 3. towards
 - 4. above

Question ID : 264330186893

Option 1 ID : 264330731694

Option 2 ID : 264330731692

Option 3 ID : 264330731693

Option 4 ID : 264330731695

Status : Answered

Chosen Option : 3

Comprehension:

In the following passage some words have been deleted. Fill in the blanks with the help of the alternatives given. Select the most appropriate option for each number.

His back was (1) _____ me, and he had his arms folded, and was nodding forward, heavy with sleep. I thought he would be (2) _____ if I came upon him with his breakfast, in that unexpected manner, so I went (3) _____ softly and touched him on the shoulder. He (4) _____ jumped up, and it was not the same man, but another man! And there he was, looking bewildered and disoriented, as if he had (5) _____ awakened from a deep dream. In his eyes, I saw a mix of fear and confusion, as if he was struggling to recognize the world around him, or perhaps, struggling to remember who he was.

SubQuestion No : 17

Q.17 Select the most appropriate option to fill in the blank No. 2.

- Ans**
- 1. most glad
 - 2. gladdest
 - 3. more gladder
 - 4. glad

Question ID : 264330186894

Option 1 ID : 264330731699

Option 2 ID : 264330731696

Option 3 ID : 264330731697

Option 4 ID : 264330731698

Status : Answered

Chosen Option : 4

Comprehension:

In the following passage some words have been deleted. Fill in the blanks with the help of the alternatives given. Select the most appropriate option for each number.

His back was (1) _____ me, and he had his arms folded, and was nodding forward, heavy with sleep. I thought he would be (2) _____ if I came upon him with his breakfast, in that unexpected manner, so I went (3) _____ softly and touched him on the shoulder. He (4) _____ jumped up, and it was not the same man, but another man! And there he was, looking bewildered and disoriented, as if he had (5) _____ awakened from a deep dream. In his eyes, I saw a mix of fear and confusion, as if he was struggling to recognize the world around him, or perhaps, struggling to remember who he was.

SubQuestion No : 18

Q.18 Select the most appropriate option to fill in the blank No. 3.

- Ans**
- 1. onward
 - 2. forward
 - 3. before
 - 4. forth

Question ID : 264330186895

Option 1 ID : 264330731701

Option 2 ID : 264330731703

Option 3 ID : 264330731702

Option 4 ID : 264330731700

Status : Answered

Chosen Option : 2

Comprehension:

In the following passage some words have been deleted. Fill in the blanks with the help of the alternatives given. Select the most appropriate option for each number.

His back was (1) _____ me, and he had his arms folded, and was nodding forward, heavy with sleep. I thought he would be (2) _____ if I came upon him with his breakfast, in that unexpected manner, so I went (3) _____ softly and touched him on the shoulder. He (4) _____ jumped up, and it was not the same man, but another man! And there he was, looking bewildered and disoriented, as if he had (5) _____ awakened from a deep dream. In his eyes, I saw a mix of fear and confusion, as if he was struggling to recognize the world around him, or perhaps, struggling to remember who he was.

SubQuestion No : 19

Q.19 Select the most appropriate option to fill in the blank No. 4.

- Ans**
- 1. gracefully
 - 2. tardily
 - 3. constantly
 - 4. instantly

Question ID : 264330186896

Option 1 ID : 264330731707

Option 2 ID : 264330731706

Option 3 ID : 264330731705

Option 4 ID : 264330731704

Status : Answered

Chosen Option : 4

Comprehension:

In the following passage some words have been deleted. Fill in the blanks with the help of the alternatives given. Select the most appropriate option for each number.

His back was (1) _____ me, and he had his arms folded, and was nodding forward, heavy with sleep. I thought he would be (2) _____ if I came upon him with his breakfast, in that unexpected manner, so I went (3) _____ softly and touched him on the shoulder. He (4) _____ jumped up, and it was not the same man, but another man! And there he was, looking bewildered and disoriented, as if he had (5) _____ awakened from a deep dream. In his eyes, I saw a mix of fear and confusion, as if he was struggling to recognize the world around him, or perhaps, struggling to remember who he was.

SubQuestion No : 20

Q.20 Select the most appropriate option to fill in the blank No. 5.

- Ans**
- 1. so
 - 2. just
 - 3. after
 - 4. therefore

Question ID : 264330186897

Option 1 ID : 264330731708

Option 2 ID : 264330731710

Option 3 ID : 264330731709

Option 4 ID : 264330731711

Status : Answered

Chosen Option : 2

Q.1 दिए गए वाक्य में रेखांकित शब्द के लिए सही वर्तनी ज्ञात कीजिए।

यह परंपरा तो रितिकाल से चली आ रही है।

- Ans
- 1. रितीकाल
 - 2. रीतीकाल
 - 3. रतीकाल
 - 4. रीतिकाल

Question ID : 264330189013
 Option 1 ID : 264330739840
 Option 2 ID : 264330739838
 Option 3 ID : 264330739841
 Option 4 ID : 264330739839
 Status : Not Answered
 Chosen Option : --

Q.2 निम्नलिखित प्रश्न में, चार विकल्पों में से, उस सही विकल्प का चयन करें जो वाक्यांशों के लिए एक शब्द का विकल्प हो।
 जो बीत गया हो

- Ans
- 1. अथाह
 - 2. अद्यतन
 - 3. अतिक्रमण
 - 4. अतीत

Question ID : 264330189739
 Option 1 ID : 264330742602
 Option 2 ID : 264330742605
 Option 3 ID : 264330742603
 Option 4 ID : 264330742604
 Status : Not Answered
 Chosen Option : --

Q.3 दिए गए वाक्य में उचित देशज-विदेशज शब्द का चयन करके रिक्त स्थान की पूर्ति कीजिए।

कोमल के _____ काफी सुंदर है।

- Ans
- 1. कंपनी
 - 2. कमीशन
 - 3. इंटर
 - 4. इयरिंग

Question ID : 264330190023
 Option 1 ID : 264330743686
 Option 2 ID : 264330743689
 Option 3 ID : 264330743687
 Option 4 ID : 264330743688
 Status : Not Answered
 Chosen Option : --

Q.4 दिए गए वाक्य का वह भाग ज्ञात करें, जिसमें कोई त्रुटि है।

जब मैं जाऊँ तब तीन लड़कियाँ और दो बालकों का ध्यान रखना।

- Ans
- ✗ 1. जब मैं जाऊँ
 - ✗ 2. और दो बालकों
 - ✗ 3. का ध्यान रखना।
 - ✓ 4. तब तीन लड़कियाँ

Question ID : 264330189059
 Option 1 ID : 264330740014
 Option 2 ID : 264330740016
 Option 3 ID : 264330740017
 Option 4 ID : 264330740015
 Status : Not Answered
 Chosen Option : --

Q.5 निम्नलिखित प्रश्न में, चार विकल्पों में से, उस विकल्प का चयन करें जो रिक्त स्थान के लिए सही भाववाचक संज्ञा वाला विकल्प हो।
 सुरेश की बात की _____ को समझना बहुत ज़रूरी है।

- Ans
- ✓ 1. गंभीरता
 - ✗ 2. कटु
 - ✗ 3. गड़गड़ाहट
 - ✗ 4. चपल

Question ID : 264330189919
 Option 1 ID : 264330743293
 Option 2 ID : 264330743290
 Option 3 ID : 264330743291
 Option 4 ID : 264330743292
 Status : Not Answered
 Chosen Option : --

Q.6 दिए गए शब्द का पर्यायवाची ज्ञात कीजिए।

तालाब

- Ans
- ✓ 1. सर
 - ✗ 2. सूर
 - ✗ 3. सुर
 - ✗ 4. सिर

Question ID : 264330190014
 Option 1 ID : 264330743651
 Option 2 ID : 264330743652
 Option 3 ID : 264330743653
 Option 4 ID : 264330743650
 Status : Not Answered
 Chosen Option : --

Q.7 दिए गए वाक्य में उचित पर्यायवाची शब्द का चयन करके रिक्त स्थान की पूर्ति करें।

हर कोई अपने _____ (भाग्य) का खाता है।

- Ans
- ✗ 1. कुरूप
 - ✗ 2. वजन
 - ✗ 3. विदूषक
 - ✓ 4. नसीब

Question ID : 264330189469

Option 1 ID : 264330741577

Option 2 ID : 264330741576

Option 3 ID : 264330741574

Option 4 ID : 264330741575

Status : Not Answered

Chosen Option : --

Q.8 निम्नलिखित प्रश्न में, चार विकल्पों में से, उस विकल्प का चयन करें जो रिक्त स्थान के लिए सही शब्द वाला विकल्प हो। किसी बीमारी में पड़कर फिर उसके इलाज के लिए इधर उधर भागना और बहुत खर्चा करना, इससे _____ है, आज से ही योग के लिए वक्त निकालना।

- Ans
- ✗ 1. विकास
 - ✗ 2. मुताबिक
 - ✗ 3. हिसाब
 - ✓ 4. बेहतर

Question ID : 264330189921

Option 1 ID : 264330743298

Option 2 ID : 264330743301

Option 3 ID : 264330743300

Option 4 ID : 264330743299

Status : Not Answered

Chosen Option : --

Q.9 निम्नलिखित प्रश्न में, चार विकल्पों में से, उस विकल्प का चयन करें जो कोष्ठक में दिए गए शब्द के विलोम शब्द का सही विकल्प है।

किसी-किसी को देख कर ही समझ में आ जाता है कि वह कितना (सादगी) _____ से भरा हुआ है।

- Ans
- ✗ 1. अवज्ञा
 - ✗ 2. अनार्य
 - ✗ 3. सिधाई
 - ✓ 4. आडंबर

Question ID : 264330189785

Option 1 ID : 264330742780

Option 2 ID : 264330742779

Option 3 ID : 264330742778

Option 4 ID : 264330742781

Status : Not Answered

Chosen Option : --

Q.10 दिए गए वाक्य में रेखांकित शब्द का विलोम शब्द ज्ञात कीजिए।

मित्रता ही तुम्हें आगे ले जाएगी।

- Ans
- ✓ 1. शत्रुता
 - ✗ 2. निर्मलता
 - ✗ 3. बंधन
 - ✗ 4. रंजिश

Question ID : 264330189471
 Option 1 ID : 264330741582
 Option 2 ID : 264330741584
 Option 3 ID : 264330741585
 Option 4 ID : 264330741583
 Status : Not Answered
 Chosen Option : --

Q.11 निम्नलिखित वाक्य में, उस वाक्यांश को पहचानिए जिसमें मात्राओं से संबंधित अशुद्धियाँ हैं। यदि कोई गलती नहीं है तो 'कोई त्रुटि नहीं है' का चुनाव कीजिए।
 राष्ट्र केवल ज़मीन का टुकड़ा ही नहीं बल्कि हमारी/ सांस्कृतिक विरासत होती है जो हमें अपने/ पूर्वजों से परंपरा के रूप में प्राप्त होती है।

- Ans
- ✗ 1. पूर्वजों से परंपरा के रूप में प्राप्त होती है
 - ✗ 2. सांस्कृतिक विरासत होती है जो हमें अपने
 - ✗ 3. राष्ट्र केवल ज़मीन का टुकड़ा ही नहीं बल्कि हमारी
 - ✓ 4. कोई त्रुटि नहीं है

Question ID : 264330189810
 Option 1 ID : 264330742876
 Option 2 ID : 264330742875
 Option 3 ID : 264330742874
 Option 4 ID : 264330742877
 Status : Not Answered
 Chosen Option : --

Q.12 निम्नलिखित प्रश्न में, दिए गए चार विकल्पों में से, उस विकल्प का चयन करें जो दिए गए मुहावरे के अर्थ को सर्वश्रेष्ठ रूप से व्यक्त करता है।

ऐसी-तैसी करना

- Ans
- ✓ 1. बुरी दुर्दशा करना
 - ✗ 2. भेद खुल जाना
 - ✗ 3. अपना नुकसान स्वयं ही करना
 - ✗ 4. अपने-आप में संतुष्ट रहना

Question ID : 264330189221
 Option 1 ID : 264330740630
 Option 2 ID : 264330740632
 Option 3 ID : 264330740633
 Option 4 ID : 264330740631
 Status : Not Answered
 Chosen Option : --

Q.13 दिए गए वाक्य में रेखांकित शब्दों के लिए सही शब्दों वाले विकल्प का चयन करें।

उसे शक मत करो।

- Ans
- ✗ 1. परिवर्तन की आवश्यकता नहीं है।
 - ✗ 2. उसमें पर शक मत करो।
 - ✗ 3. उससे शक मत करो।
 - ✓ 4. उस पर शक मत करो।

Question ID : 264330189375

Option 1 ID : 264330741221

Option 2 ID : 264330741220

Option 3 ID : 264330741218

Option 4 ID : 264330741219

Status : Not Answered

Chosen Option : --

Q.14 दिए गए वाक्य में उचित देशज-विदेशज शब्द का चयन करके रिक्त स्थान की पूर्ति कीजिए।

कितने _____ हो तुम जो इसका दर्द भी नहीं समझ पाए।

- Ans
- ✗ 1. जागीर
 - ✗ 2. मलीदा
 - ✗ 3. पेशा
 - ✓ 4. बेरहम

Question ID : 264330189224

Option 1 ID : 264330740642

Option 2 ID : 264330740644

Option 3 ID : 264330740643

Option 4 ID : 264330740645

Status : Not Answered

Chosen Option : --

Q.15 निम्नलिखित प्रश्न में, दिए गए चार विकल्पों में से, उस विकल्प का चयन करें जो दिए गए मुहावरे के अर्थ को सर्वश्रेष्ठ रूप से व्यक्त करता है।

गीदड़ भभकी

- Ans
- ✗ 1. निश्चित रहना
 - ✗ 2. चालाकी दिखाना
 - ✗ 3. महामूर्ख
 - ✓ 4. कमजोर द्वारा धमकाना

Question ID : 264330190018

Option 1 ID : 264330743669

Option 2 ID : 264330743667

Option 3 ID : 264330743666

Option 4 ID : 264330743668

Status : Not Answered

Chosen Option : --

Comprehension:

नीचे दिए गए गद्य में कुछ शब्द छोड़ दिए गए हैं और प्रत्येक रिक्त स्थान के चार विकल्प दिए गए हैं। इन चारों में से कौन सा विकल्प रिक्त स्थान की पूर्ति करेगा-

एक्सप्रेसवे के जरिए प्रदेश की (1)_____ को बेहतर बनाने के साथ ही अब इनके (2)_____ औद्योगिक केंद्रों की (3)_____ के लिए औद्योगिक गलियारे विकसित किए जाने की (4)_____ पर (5)_____ शुरू किया गया है। इस बारे में आज ही मुख्यमंत्री जी के साथ चर्चा होगी।

SubQuestion No : 16

Q.16 रिक्त (1) के लिए सबसे उपयुक्त विकल्प का चयन कीजिए।

- Ans
- 1. टैंक
 - 2. कनेक्टिविटी
 - 3. समन
 - 4. ऑफिस

Question ID : 264330189104

Option 1 ID : 264330740182

Option 2 ID : 264330740183

Option 3 ID : 264330740185

Option 4 ID : 264330740184

Status : Not Answered

Chosen Option : --

Comprehension:

नीचे दिए गए गद्य में कुछ शब्द छोड़ दिए गए हैं और प्रत्येक रिक्त स्थान के चार विकल्प दिए गए हैं। इन चारों में से कौन सा विकल्प रिक्त स्थान की पूर्ति करेगा-

एक्सप्रेसवे के जरिए प्रदेश की (1)_____ को बेहतर बनाने के साथ ही अब इनके (2)_____ औद्योगिक केंद्रों की (3)_____ के लिए औद्योगिक गलियारे विकसित किए जाने की (4)_____ पर (5)_____ शुरू किया गया है। इस बारे में आज ही मुख्यमंत्री जी के साथ चर्चा होगी।

SubQuestion No : 17

Q.17 रिक्त (2) के लिए सबसे उपयुक्त विकल्प का चयन कीजिए।

- Ans
- 1. बाँ
 - 2. किनारे
 - 3. सीधे
 - 4. गोलाकार

Question ID : 264330189105

Option 1 ID : 264330740188

Option 2 ID : 264330740186

Option 3 ID : 264330740187

Option 4 ID : 264330740189

Status : Not Answered

Chosen Option : --

Comprehension:

नीचे दिए गए गद्य में कुछ शब्द छोड़ दिए गए हैं और प्रत्येक रिक्त स्थान के चार विकल्प दिए गए हैं। इन चारों में से कौन सा विकल्प रिक्त स्थान की पूर्ति करेगा-

एक्सप्रेसवे के जरिए प्रदेश की (1)_____ को बेहतर बनाने के साथ ही अब इनके (2)_____ औद्योगिक केंद्रों की (3)_____ के लिए औद्योगिक गलियारे विकसित किए जाने की (4)_____ पर (5)_____ शुरू किया गया है। इस बारे में आज ही मुख्यमंत्री जी के साथ चर्चा होगी।

SubQuestion No : 18

Q.18 रिक्त (3) के लिए सबसे उपयुक्त विकल्प का चयन कीजिए।

- Ans
- 1. बंद
 - 2. नाटक
 - 3. प्रभाव
 - 4. स्थापना

Question ID : 264330189106

Option 1 ID : 264330740191

Option 2 ID : 264330740192

Option 3 ID : 264330740190

Option 4 ID : 264330740193

Status : Not Answered

Chosen Option : --

Comprehension:

नीचे दिए गए गद्य में कुछ शब्द छोड़ दिए गए हैं और प्रत्येक रिक्त स्थान के चार विकल्प दिए गए हैं। इन चारों में से कौन सा विकल्प रिक्त स्थान की पूर्ति करेगा-

एक्सप्रेसवे के जरिए प्रदेश की (1)_____ को बेहतर बनाने के साथ ही अब इनके (2)_____ औद्योगिक केंद्रों की (3)_____ के लिए औद्योगिक गलियारे विकसित किए जाने की (4)_____ पर (5)_____ शुरू किया गया है। इस बारे में आज ही मुख्यमंत्री जी के साथ चर्चा होगी।

SubQuestion No : 19

Q.19 रिक्त (4) के लिए सबसे उपयुक्त विकल्प का चयन कीजिए।

- Ans
- 1. दान
 - 2. वर्तमान
 - 3. योजना
 - 4. षड्यंत्र

Question ID : 264330189107

Option 1 ID : 264330740197

Option 2 ID : 264330740194

Option 3 ID : 264330740196

Option 4 ID : 264330740195

Status : Not Answered

Chosen Option : --

Comprehension:

नीचे दिए गए गद्य में कुछ शब्द छोड़ दिए गए हैं और प्रत्येक रिक्त स्थान के चार विकल्प दिए गए हैं। इन चारों में से कौन सा विकल्प रिक्त स्थान की पूर्ति करेगा-

एक्सप्रेसवे के जरिए प्रदेश की (1)_____ को बेहतर बनाने के साथ ही अब इनके (2)_____ औद्योगिक केंद्रों की (3)_____ के लिए औद्योगिक गलियारे विकसित किए जाने की (4)_____ पर (5)_____ शुरू किया गया है। इस बारे में आज ही मुख्यमंत्री जी के साथ चर्चा होगी।

SubQuestion No : 20

Q.20 रिक्त (5) के लिए सबसे उपयुक्त विकल्प का चयन कीजिए।

- Ans
- ✓ 1. अमल
 - ✗ 2. पीड़ा
 - ✗ 3. प्रेम
 - ✗ 4. दुख

Question ID : 264330189108

Option 1 ID : 264330740199

Option 2 ID : 264330740201

Option 3 ID : 264330740198

Option 4 ID : 264330740200

Status : Not Answered

Chosen Option : --