

## Constable GD in Central Armed Police Forces CAPFs SSF Rifleman GD in Assam Rifles Examination 2024

Roll Number	
Candidate Name	
Venue Name	
Exam Date	01/03/2024
Exam Time	2:30 PM - 3:30 PM
Subject	Constable GD Examination 2024

### Section : Part-A-General Intelligence and Reasoning

**Q.1** Which answer figure will complete the pattern in the question figure? (rotation is not allowed)



**Ans**

✓ 1.



✗ 2.



✗ 3.



✗ 4.



Question ID : 264330192066

Option 1 ID : 264330751619

Option 2 ID : 264330751621

Option 3 ID : 264330751620

Option 4 ID : 264330751618

Status : Answered

Chosen Option : 1

**Q.2** In a certain code language, if BRINJAL is coded as ZPKLHCl, TOMATO is coded as RQKCRQ, then what will STRAWBERRY be coded as?

**Ans**

✓ 1.

QRPCUZGPPW

✗ 2.

QWTEYRUIOK

✗ 3.

KOIURYETWQ

✗ 4.

WPPGZUCPRQ

Question ID : 264330192073

Option 1 ID : 264330751646

Option 2 ID : 264330751647

Option 3 ID : 264330751649

Option 4 ID : 264330751648

Status : Answered

Chosen Option : 1

**Q.3** After interchanging the given two signs what will be the values of expression (I) and (II) respectively?

× and ÷

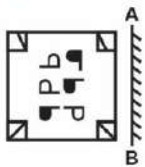
I.  $8 + 4 - 6 \times 3 \div 5$

II.  $20 + 15 \times 30 \div 10$

- Ans**
- 1. 18 and 14
  - 2. 6 and 17
  - 3. 2 and 25
  - 4. 2 and 30

Question ID : 264330191401  
 Option 1 ID : 264330748960  
 Option 2 ID : 264330748959  
 Option 3 ID : 264330748958  
 Option 4 ID : 264330748961  
 Status : Answered  
 Chosen Option : 3

**Q.4** If a mirror is placed on the line AB, then out of the option figures which figure will be the right image of the question figure?



- Ans**
- 1.
  - 2.
  - 3.
  - 4.

Question ID : 264330187098  
 Option 1 ID : 264330732320  
 Option 2 ID : 264330732321  
 Option 3 ID : 264330732322  
 Option 4 ID : 264330732323  
 Status : Answered  
 Chosen Option : 4

**Q.5** Arrange the given words in the sequence in which they occur in the dictionary.

1. Cigar
2. Cinema
3. CIPHER
4. Cider
5. Cinnabar

- Ans**
- 1. 21345
  - 2. 21354
  - 3. 41253
  - 4. 41235

Question ID : 264330187121

Option 1 ID : 264330732414

Option 2 ID : 264330732415

Option 3 ID : 264330732412

Option 4 ID : 264330732413

Status : Answered

Chosen Option : 3

**Q.6** In the following question below are given some statements followed by some conclusions based on those statements.

Taking the given statements to be true even if they seem to be at variance from commonly known facts. Read all the conclusions and then decide which of the given conclusion(s) logically follows the given statements.

Statements:

- I. Some L are S.
- II. All T are S.

Conclusions:

- I. No T is L.
- II. No S is T.

- Ans**
- 1. Only conclusion II follows.
  - 2. Neither conclusion follows.
  - 3. Only conclusion I follows.
  - 4. Both conclusions I and II follows.

Question ID : 264330187149

Option 1 ID : 264330732525

Option 2 ID : 264330732527

Option 3 ID : 264330732524

Option 4 ID : 264330732526

Status : Answered

Chosen Option : 3

Q.7 'A × B' means 'A is the wife of B'  
'A + B' means 'A is the brother of B'  
'A ÷ B' means 'A is the sister of B'  
'A - B' means 'A is the son of B'  
How is T related to R in the expression 'T × S + P - R'?

- Ans
- 1. Daughter
  - 2. Sister
  - 3. Wife
  - 4. Son's wife

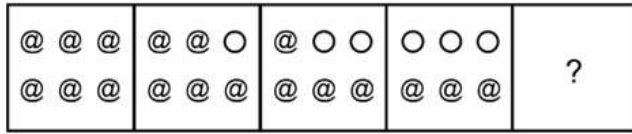
Question ID : 264330192175  
Option 1 ID : 264330752056  
Option 2 ID : 264330752057  
Option 3 ID : 264330752054  
Option 4 ID : 264330752055  
Status : Answered  
Chosen Option : 4

Q.8 Six colleagues Oscar, Paul, Quinn, Rachel, Sophie, and Tyler are sitting in a circle facing away from the center. Oscar is sitting to the immediate right of Paul. Rachel is not sitting next to Oscar. Sophie, who is sitting to the immediate left of Paul, is also sitting to the immediate right of Tyler. Who is sitting to the exact opposite of Oscar?

- Ans
- 1. Tyler
  - 2. Paul
  - 3. Quinn
  - 4. Rachel


Question ID : 264330192097  
Option 1 ID : 264330751743  
Option 2 ID : 264330751744  
Option 3 ID : 264330751742  
Option 4 ID : 264330751745  
Status : Answered  
Chosen Option : 1

**Q.9** Select the figure that will replace the question mark (?) in the following figure series.




**Ans**

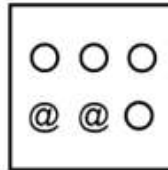
✗ 1.




✗ 2.



✓ 3.



✗ 4.



Question ID : 264330188054  
 Option 1 ID : 264330736146  
 Option 2 ID : 264330736145  
 Option 3 ID : 264330736144  
 Option 4 ID : 264330736147  
 Status : Answered  
 Chosen Option : 3

**Q.10** Six people Mia, Alexander, Sophia, Liam, Olivia, and Ethan are sitting on a circular table facing towards the centre. Mia sits to the immediate right of Ethan. Sophia sits opposite to Ethan. Alexander and Olivia sit opposite to each other and Alexander is not a neighbour of Liam. Who sits to the immediate right of Olivia?

**Ans**

✗ 1. Liam

✗ 2. Alexander

✓ 3. Ethan

✗ 4. Sophia

Question ID : 264330192156  
 Option 1 ID : 264330751980  
 Option 2 ID : 264330751978  
 Option 3 ID : 264330751979  
 Option 4 ID : 264330751981  
 Status : Answered  
 Chosen Option : 3

Q.11 If  $30A + 30B + 7C + 40 = 280$  and  $38A + 40B + 20C + 100 = 938$ , then  $6A + 8B + 4C + 5 = ?$

- Ans
- 1. 51
  - 2. 49
  - 3. 43
  - 4. 45

Question ID : 264330191362  
Option 1 ID : 264330748805  
Option 2 ID : 264330748804  
Option 3 ID : 264330748803  
Option 4 ID : 264330748802  
Status : Answered  
Chosen Option : 3

Q.12 In the following question, select the missing number from the given series.

500, 512, 498, ?, 496, 516, 494, 518

- Ans
- 1. 514
  - 2. 515
  - 3. 520
  - 4. 500

Question ID : 264330190179  
Option 1 ID : 264330744298  
Option 2 ID : 264330744299  
Option 3 ID : 264330744301  
Option 4 ID : 264330744300  
Status : Answered  
Chosen Option : 1

Q.13 Which letter should be in place of the question mark (?) in the following series?

H, E, ?, F, N, G, Q, H

- Ans
- 1. I
  - 2. K
  - 3. J
  - 4. H

Question ID : 264330191588  
Option 1 ID : 264330749709  
Option 2 ID : 264330749708  
Option 3 ID : 264330749706  
Option 4 ID : 264330749707  
Status : Answered  
Chosen Option : 2

**Q.14** Select the option that is related to the third word in the same way as the second word is related to the first word.

Rome : Italy :: Madrid : ?

- Ans**
- ✓ 1. Spain
  - ✗ 2. Portugal
  - ✗ 3. Germany
  - ✗ 4. France

Question ID : 264330191592

Option 1 ID : 264330749724

Option 2 ID : 264330749723

Option 3 ID : 264330749725

Option 4 ID : 264330749722

Status : Answered

Chosen Option : 1

**Q.15** In a certain code language, 'PARTY' is coded as '81', 'PLACE' is coded as '38'. What is the code for 'PRIME' in that code language?

- Ans**
- ✓ 1. 62
  - ✗ 2. 64
  - ✗ 3. 63
  - ✗ 4. 65

Question ID : 264330190433

Option 1 ID : 264330745315

Option 2 ID : 264330745314

Option 3 ID : 264330745317

Option 4 ID : 264330745316


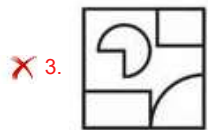
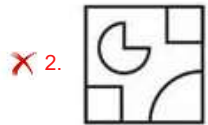
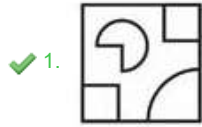
Status : Answered

Chosen Option : 1

Q.16 Which answer figure will complete the pattern in the question figure? (rotation is NOT allowed)



Ans



Question ID : 264330190465

Option 1 ID : 264330745442

Option 2 ID : 264330745443

Option 3 ID : 264330745444

Option 4 ID : 264330745445

Status : Answered

Chosen Option : 1

Q.17 In the following question, select the missing number from the given series.

211, 179, 146, 112, 77, ?

Ans ✓ 1. 41

✗ 2. 43

✗ 3. 44

✗ 4. 40

Question ID : 264330188030

Option 1 ID : 264330736050

Option 2 ID : 264330736049

Option 3 ID : 264330736051

Option 4 ID : 264330736048

Status : Answered

Chosen Option : 1



**Q.18** Select the option that is related to the fifth word in the same way as the fourth word is related to the third word and the second word is related to the first word.

COMMAND : DICTATE :: ADVICE : GUIDANCE :: RUMOUR : ?

- Ans**
- 1. HARD FACT
  - 2. ANNOUNCED
  - 3. SPEECH
  - 4. GOSSIP

Question ID : 264330190290  
Option 1 ID : 264330744745  
Option 2 ID : 264330744742  
Option 3 ID : 264330744743  
Option 4 ID : 264330744744  
Status : Answered  
Chosen Option : 4

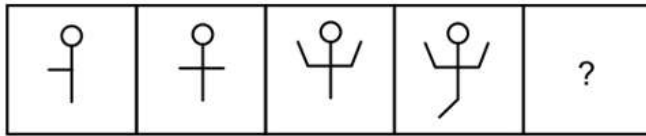
**Q.19** Which of the following letter clusters will replace the blank ( ) in the given series?

UHI, \_\_\_\_\_, WLM, XNO, YPQ, ZRS

- Ans**
- 1. WHI
  - 2. WJK
  - 3. VJK
  - 4. VHI

Question ID : 264330192069  
Option 1 ID : 264330751630  
Option 2 ID : 264330751631  
Option 3 ID : 264330751632  
Option 4 ID : 264330751633  
Status : Answered  
Chosen Option : 3

**Q.20** Select the figure that will replace the question mark (?) in the following figure series.




Ans


✗ 1.



✓ 2.



✗ 3.



✗ 4.



Question ID : 264330191584

Option 1 ID : 264330749693

Option 2 ID : 264330749690

Option 3 ID : 264330749692

Option 4 ID : 264330749691

Status : Answered

Chosen Option : 2

Section : Part-B-General Knowledge and General awareness

**Q.1** The X-ring on the archery target is the \_\_\_ inner ring.

Ans ✗ 1. 5th

✗ 2. 7th

✗ 3. 9th

✓ 4. 10th

Question ID : 264330191724

Option 1 ID : 264330750251

Option 2 ID : 264330750253

Option 3 ID : 264330750250

Option 4 ID : 264330750252

Status : Not Answered

Chosen Option : --

**Q.2** The Jallianwala Bagh Massacre took place in Amritsar in 1919, during which policy or act that allowed the British to arrest and imprison Indians without trial?

- Ans**
- 1. Montagu-Chelmsford Reforms
  - 2. Simon Commission
  - 3. Government of India Act
  - 4. Rowlatt Act

Question ID : 264330191477  
Option 1 ID : 264330749264  
Option 2 ID : 264330749265  
Option 3 ID : 264330749263  
Option 4 ID : 264330749262  
Status : Answered  
Chosen Option : 4

**Q.3** Read the following about the Green Revolution in India.

A. The Green Revolution in India is largely the Wheat Revolution as the wheat production increased by more than three times between 1967-68 and 2003-04, while the overall increase in the production of cereals was only two times

B. It resulted in a grain output of 131 million tonnes in the year 1978-79 and established India as one of the world's biggest agricultural producers.

Identify the CORRECT statement/statements.

- Ans**
- 1. Only B
  - 2. Both A and B
  - 3. Only A
  - 4. Neither A nor B

Question ID : 264330190845  
Option 1 ID : 264330746735  
Option 2 ID : 264330746736  
Option 3 ID : 264330746734  
Option 4 ID : 264330746737  
Status : Not Answered  
Chosen Option : --

**Q.4** With what musical instrument is Ustad Binda Khan associated?

- Ans**
- 1. Sitar
  - 2. Sarod
  - 3. Sarangi
  - 4. Been

Question ID : 264330188682  
Option 1 ID : 264330738531  
Option 2 ID : 264330738530  
Option 3 ID : 264330738533  
Option 4 ID : 264330738532  
Status : Not Answered  
Chosen Option : --

Q.5 How are the representatives of the Union Territories (UTs) in the Rajya Sabha elected?

- Ans
- 1. Indirectly elected by members of an electoral college
  - 2. By members of state legislative assemblies
  - 3. By nomination from the President
  - 4. By direct election

Question ID : 264330188925  
Option 1 ID : 264330739505  
Option 2 ID : 264330739504  
Option 3 ID : 264330739503  
Option 4 ID : 264330739502  
Status : Not Answered  
Chosen Option : --

Q.6 Which of the following Indian stadium is renowned as a major venue for hockey matches?

- Ans
- 1. M. A. Chidambaram Stadium
  - 2. Wankhede Stadium
  - 3. Kalinga Stadium
  - 4. Chinnaswamy Stadium

Question ID : 264330191302  
Option 1 ID : 264330748565  
Option 2 ID : 264330748563  
Option 3 ID : 264330748562  
Option 4 ID : 264330748564  
Status : Answered  
Chosen Option : 3

Q.7 Sex ratio is used to describe the number of females per \_\_\_\_\_ males.

- Ans
- 1. 10
  - 2. 10000
  - 3. 100
  - 4. 1000

Question ID : 264330191894  
Option 1 ID : 264330750932  
Option 2 ID : 264330750933  
Option 3 ID : 264330750930  
Option 4 ID : 264330750931  
Status : Answered  
Chosen Option : 4

Q.8 A fast and low shot in badminton that makes a horizontal flight over the net is known as \_\_\_\_\_

- Ans
- 1. flick
  - 2. drop
  - 3. drive
  - 4. array

Question ID : 264330191443  
Option 1 ID : 264330749128  
Option 2 ID : 264330749126  
Option 3 ID : 264330749127  
Option 4 ID : 264330749129  
Status : Answered  
Chosen Option : 4

Q.9 The Iron Age in India is associated with the \_\_\_\_\_ period, which lasted from about 1500 to 500 BCE.

- Ans
- 1. Mauryan
  - 2. Vedic
  - 3. Mughal
  - 4. British

Question ID : 264330191816  
Option 1 ID : 264330750620  
Option 2 ID : 264330750621  
Option 3 ID : 264330750619  
Option 4 ID : 264330750618  
Status : Not Answered  
Chosen Option : --

Q.10 India's population pyramid, with a wide base and narrower top, suggests what type of population structure?

- Ans
- 1. Stable
  - 2. Expansive
  - 3. Stationary
  - 4. Constrictive

Question ID : 264330190954  
Option 1 ID : 264330747173  
Option 2 ID : 264330747171  
Option 3 ID : 264330747170  
Option 4 ID : 264330747172  
Status : Not Answered  
Chosen Option : --

Q.11 Which state has introduced an upgraded version of its poverty alleviation scheme called Orunodoi 2.0?

- Ans
- 1. Assam
  - 2. Kerala
  - 3. Madhya Pradesh
  - 4. West Bengal

Question ID : 264330191248  
Option 1 ID : 264330748346  
Option 2 ID : 264330748349  
Option 3 ID : 264330748348  
Option 4 ID : 264330748347  
Status : Not Answered  
Chosen Option : --

Q.12 Fundamental Rights are contained in \_\_\_\_\_ of the Constitution of India.

- Ans
- 1. Part X
  - 2. Part XI
  - 3. Part III
  - 4. Part IX

Question ID : 264330190899  
Option 1 ID : 264330746952  
Option 2 ID : 264330746953  
Option 3 ID : 264330746950  
Option 4 ID : 264330746951  
Status : Not Answered  
Chosen Option : --

Q.13 'Matho Nagrang' is associated with which of the following states/UTs?

- Ans
- 1. Ladakh
  - 2. Nagaland
  - 3. Chandigarh
  - 4. Sikkim

Question ID : 264330188836  
Option 1 ID : 264330739146  
Option 2 ID : 264330739149  
Option 3 ID : 264330739147  
Option 4 ID : 264330739148  
Status : Not Answered  
Chosen Option : --

**Q.14** Who has been nominated as Ambassador for War Against Waste in Jammu and Kashmir, in September 2023?

- Ans**
- 1. Narendra Modi
  - 2. Bana Singh
  - 3. Amit Shah
  - 4. Vidya Balan

Question ID : 264330191889  
Option 1 ID : 264330750911  
Option 2 ID : 264330750910  
Option 3 ID : 264330750912  
Option 4 ID : 264330750913  
Status : Not Answered  
Chosen Option : --

**Q.15** Who of the following received Sangeet Natak Akademi Award for his contribution to Sattriya dance?

- Ans**
- 1. Radha Sridhar
  - 2. Akham Lakshmi Devi
  - 3. Maulik Shah
  - 4. Tankeswar Hazarika Borbayan

Question ID : 264330188663  
Option 1 ID : 264330738456  
Option 2 ID : 264330738455  
Option 3 ID : 264330738454  
Option 4 ID : 264330738457  
Status : Not Answered  
Chosen Option : --

**Q.16** In India, the \_\_\_\_\_ may create and dissolve any of the union territories, whose powers are more limited than those of the states.

- Ans**
- 1. Chief Justice of India
  - 2. State Government
  - 3. Union Government
  - 4. President

Question ID : 264330191771  
Option 1 ID : 264330750440  
Option 2 ID : 264330750438  
Option 3 ID : 264330750439  
Option 4 ID : 264330750441  
Status : Not Answered  
Chosen Option : --

**Q.17** Consider the following statements :

- A) A gas that follows Boyle's law, Charles' law and Avogadro law is called an ideal gas.  
B) As per Gay Lussac's law, at constant volume, pressure of a fixed amount of a gas varies directly with the temperature.  
C) Silicon is present in group 14 and period 3 of the periodic table.

- Ans**
- 1. Only B and C is true
  - 2. Both A and C is true
  - 3. Both A and B is true
  - 4. A, B, C are true

Question ID : 264330191973

Option 1 ID : 264330751246

Option 2 ID : 264330751248

Option 3 ID : 264330751247

Option 4 ID : 264330751249

Status : Not Answered

Chosen Option : --

**Q.18** With respect to the Anusandhan National Research Foundation Bill, 2023, who will audit the accounts of the Anusandhan National Research Foundation annually?

- Ans**
- 1. External Affairs Minister
  - 2. Finance Commissioner
  - 3. CAG
  - 4. Central Vigilance Commissioner

Question ID : 264330191009

Option 1 ID : 264330747392

Option 2 ID : 264330747390

Option 3 ID : 264330747391

Option 4 ID : 264330747393

Status : Answered

Chosen Option : 3

**Q.19** In the first phase of the Green Revolution, which states primarily benefited from the use of HYV seeds?

- Ans**
- 1. Punjab, Uttar Pradesh and Bihar
  - 2. Tamil Nadu, Kerala and Karnataka
  - 3. Punjab, Andhra Pradesh, and Tamil Nadu
  - 4. Rajasthan, Gujarat and Maharashtra

Question ID : 264330188931

Option 1 ID : 264330739527

Option 2 ID : 264330739529

Option 3 ID : 264330739528

Option 4 ID : 264330739526

Status : Not Answered

Chosen Option : --



**Q.20** What is the primary purpose of a government budget in a country's economy?

- Ans**
- 1. Finding Inflation Rate
  - 2. Allocating resources efficiently
  - 3. Finding the Gross Domestic Product
  - 4. Promoting international trade

Question ID : 264330191485  
Option 1 ID : 264330749296  
Option 2 ID : 264330749297  
Option 3 ID : 264330749295  
Option 4 ID : 264330749294  
Status : Answered  
Chosen Option : 2

Section : Part-C-Elementary Mathematics

**Q.1** Deepak bought product A and marked them at 22% higher price than the cost price. Finally he sold the product at 15% discount. What will be the profit or loss percentage?

- Ans**
- 1. 3.7 % profit
  - 2. 5.7% profit
  - 3. 5.8% loss
  - 4. 3.7% loss

Question ID : 264330192479  
Option 1 ID : 264330753272  
Option 2 ID : 264330753271  
Option 3 ID : 264330753273  
Option 4 ID : 264330753270  
Status : Answered  
Chosen Option : 1

**Q.2** The selling price of an article is Rs. 1482. If discount of 22 percent is given, then what will be the marked price of the article?

- Ans**
- 1. Rs. 2000
  - 2. Rs. 1900
  - 3. Rs. 2100
  - 4. Rs. 1800

Question ID : 264330187889  
Option 1 ID : 264330735485  
Option 2 ID : 264330735486  
Option 3 ID : 264330735484  
Option 4 ID : 264330735487  
Status : Answered  
Chosen Option : 2

**Q.3** John can complete a task in 6 hours, and Mark can complete the same task in 8 hours. How long will it take for both of them working together to finish the task?

- Ans**
- 1. 21/11 hours
  - 2. 24/7 hours
  - 3. 40/7 hours
  - 4. 31/5 hours

Question ID : 264330191184  
Option 1 ID : 264330748093  
Option 2 ID : 264330748090  
Option 3 ID : 264330748092  
Option 4 ID : 264330748091  
Status : Answered  
Chosen Option : 2

**Q.4** The simple interest received on a sum at the rate of 4 percent per annum is  $\frac{3}{5}$  of the sum. What is the time period?

- Ans**
- 1. 20 years
  - 2. 12 years
  - 3. 10 years
  - 4. 15 years

Question ID : 264330187473  
Option 1 ID : 264330733820  
Option 2 ID : 264330733823  
Option 3 ID : 264330733822  
Option 4 ID : 264330733821  
Status : Answered  
Chosen Option : 4

**Q.5** The cost price of 90 tables is same as the selling price of  $x$  tables. If there is a profit of 50 percent, then what is the value of  $x$ ?

- Ans**
- 1. 65
  - 2. 75
  - 3. 50
  - 4. 60

Question ID : 264330187768  
Option 1 ID : 264330735002  
Option 2 ID : 264330735003  
Option 3 ID : 264330735000  
Option 4 ID : 264330735001  
Status : Answered  
Chosen Option : 4

Q.6 What is the value of  $96 \div 8 \times (4 \text{ of } (14 + 2 \times 7) - 10 \times 10)$ ?

- Ans
- 1. 72
  - 2. 144
  - 3. 1
  - 4. 16

Question ID : 264330187860  
Option 1 ID : 264330735369  
Option 2 ID : 264330735371  
Option 3 ID : 264330735368  
Option 4 ID : 264330735370  
Status : Answered  
Chosen Option : 2

Q.7 How much amount will be received on a principal of Rs. 21500 at the rate of 35 percent per annum compounded annually for 2 years?

- Ans
- 1. Rs. 41878.50
  - 2. Rs. 39183.75
  - 3. Rs. 42823.75
  - 4. Rs. 40187.50

Question ID : 264330187194  
Option 1 ID : 264330732707  
Option 2 ID : 264330732705  
Option 3 ID : 264330732706  
Option 4 ID : 264330732704  
Status : Not Attempted and Marked For Review  
Chosen Option : --

Q.8 What is the value of  $15 \text{ of } 15 - 6 \text{ of } 11 \times 12 + 25 \times 25 + 21 \times 4$ ?

- Ans
- 1. 152
  - 2. 132
  - 3. 142
  - 4. 162

Question ID : 264330187180  
Option 1 ID : 264330732648  
Option 2 ID : 264330732649  
Option 3 ID : 264330732651  
Option 4 ID : 264330732650  
Status : Answered  
Chosen Option : 4

**Q.9** A man travelled four equal distances of 10 km at the speeds of 7 km/hr, 14 km/hr, 21 km/hr and 28 km/hr respectively. What is his average speed?

- Ans**
- 1. 392/25 km/hr
  - 2. 296/25 km/hr
  - 3. 336/25 km/hr
  - 4. 348/25 km/hr

Question ID : 264330187495

Option 1 ID : 264330733910

Option 2 ID : 264330733909

Option 3 ID : 264330733911

Option 4 ID : 264330733908

Status : **Not Attempted and Marked For Review**

Chosen Option : --

**Q.10** How many composite numbers are there from 1 to 19?

- Ans**
- 1. 11
  - 2. 10
  - 3. 9
  - 4. 13

Question ID : 264330188001

Option 1 ID : 264330735932

Option 2 ID : 264330735934

Option 3 ID : 264330735935

Option 4 ID : 264330735933

Status : **Answered**

Chosen Option : 1

**Q.11** The ratio of P, Q and R is 3 : 5 : 8 respectively. If their sum is 400, then what is the difference between P and R?

- Ans**
- 1. 100
  - 2. 50
  - 3. 125
  - 4. 75

Question ID : 264330187651

Option 1 ID : 264330734534

Option 2 ID : 264330734535

Option 3 ID : 264330734532

Option 4 ID : 264330734533

Status : **Answered**

Chosen Option : 3

**Q.12** If  $a : b : c = 2 : 5 : 3$  and  $c : d = 5 : 2$ , then what is the value of  $a : b : c : d$ ?

- Ans**
- 1.  $10 : 25 : 5 : 3$
  - 2.  $9 : 25 : 15 : 4$
  - 3.  $10 : 25 : 5 : 2$
  - 4.  $10 : 25 : 15 : 6$

Question ID : 264330187972  
Option 1 ID : 264330735817  
Option 2 ID : 264330735819  
Option 3 ID : 264330735818  
Option 4 ID : 264330735816  
Status : Answered  
Chosen Option : 4

**Q.13** What is the curved surface area of a cylinder having radius of base as 63 cm and height as 20 cm?

- Ans**
- 1.  $8620 \text{ cm}^2$
  - 2.  $7640 \text{ cm}^2$
  - 3.  $7920 \text{ cm}^2$
  - 4.  $8340 \text{ cm}^2$

Question ID : 264330187298  
Option 1 ID : 264330733121  
Option 2 ID : 264330733120  
Option 3 ID : 264330733123  
Option 4 ID : 264330733122  
Status : Answered  
Chosen Option : 3

**Q.14** In a match, average runs scored by 4 batsmen is 61. If the runs scored by 3 batsmen are 68, 31 and 27 respectively, then how many runs did the fourth player score?

- Ans**
- 1. 121
  - 2. 118
  - 3. 112
  - 4. 130

Question ID : 264330187664  
Option 1 ID : 264330734587  
Option 2 ID : 264330734586  
Option 3 ID : 264330734584  
Option 4 ID : 264330734585  
Status : Answered  
Chosen Option : 2

**Q.15** A person sold a watch for \$450, incurring a loss of 10%. Find the cost price.

- Ans**
- 1. \$595
  - 2. \$520
  - 3. \$565
  - 4. \$500

Question ID : 264330188500  
Option 1 ID : 264330737804  
Option 2 ID : 264330737802  
Option 3 ID : 264330737803  
Option 4 ID : 264330737805  
Status : Answered  
Chosen Option : 4

**Q.16** The average of five consecutive odd numbers is 19. What is the largest number out of these five numbers?

- Ans**
- 1. 25
  - 2. 27
  - 3. 21
  - 4. 23

Question ID : 264330187583  
Option 1 ID : 264330734261  
Option 2 ID : 264330734262  
Option 3 ID : 264330734263  
Option 4 ID : 264330734260  
Status : Answered  
Chosen Option : 4

**Q.17** Two numbers are in the ratio 3:4, and their HCF is 5. Find their LCM.

- Ans**
- 1. 60
  - 2. 58
  - 3. 62
  - 4. 48

Question ID : 264330188514  
Option 1 ID : 264330737861  
Option 2 ID : 264330737859  
Option 3 ID : 264330737860  
Option 4 ID : 264330737858  
Status : Answered  
Chosen Option : 1

**Q.18** If 50 percent of 750 is 25 percent more than M, then what is the value of M?

- Ans**
- 1. 300
  - 2. 310
  - 3. 395
  - 4. 305

Question ID : 264330187605  
Option 1 ID : 264330734348  
Option 2 ID : 264330734350  
Option 3 ID : 264330734351  
Option 4 ID : 264330734349  
Status : Answered  
Chosen Option : 1

**Q.19** X and Y together can complete a work in 60 days. They started the work together but after 30 days X left the work. If the remaining work is completed by Y in 75 more days, then X alone can complete the entire work in how many days?

- Ans**
- 1. 100 days
  - 2. 90 days
  - 3. 80 days
  - 4. 70 days

Question ID : 264330187657  
Option 1 ID : 264330734558  
Option 2 ID : 264330734556  
Option 3 ID : 264330734557  
Option 4 ID : 264330734559  
Status : Answered  
Chosen Option : 1

**Q.20** A number is increased by 25% and then again increase by 25%. By what percent should the increased number be reduced so as to get back the original number?

- Ans**
- 1. 55%
  - 2. 24%
  - 3. 44%
  - 4. 36%

Question ID : 264330191655  
Option 1 ID : 264330749977  
Option 2 ID : 264330749974  
Option 3 ID : 264330749976  
Option 4 ID : 264330749975  
Status : Answered  
Chosen Option : 4

Q.1 Fill in the blank with the correct homophone:

She wanted \_\_\_\_\_ join the hiking trip too, as the mountains held a special place in her heart.

- Ans
- 1. two
  - 2. too
  - 3. toon
  - 4. to

Question ID : 264330186443  
Option 1 ID : 264330729982  
Option 2 ID : 264330729981  
Option 3 ID : 264330729983  
Option 4 ID : 264330729980  
Status : Answered  
Chosen Option : 4

Q.2 Select the most appropriate option for the given blank.

They need to \_\_\_\_\_ their own business; my life is not their concern.

- Ans
- 1. mind
  - 2. mend
  - 3. hit
  - 4. hint

Question ID : 264330186674  
Option 1 ID : 264330730861  
Option 2 ID : 264330730860  
Option 3 ID : 264330730863  
Option 4 ID : 264330730862  
Status : Answered  
Chosen Option : 1

Q.3 Find the part of the given sentence that has an error in it. If there is no error, choose 'No error'.

I know Rohan has been going through a tough time latter.

- Ans
- 1. I know Rohan has
  - 2. a tough time latter.
  - 3. No error
  - 4. been going through

Question ID : 264330186065  
Option 1 ID : 264330728540  
Option 2 ID : 264330728542  
Option 3 ID : 264330728543  
Option 4 ID : 264330728541  
Status : Answered  
Chosen Option : 2



**Q.4** Improve the underlined part of the sentence. Choose 'No improvement' as an answer if the sentence is grammatically correct.

The creek flooding every spring.

- Ans**
- 1. creek floods
  - 2. creeks floods
  - 3. No improvement
  - 4. creek has been floods

Question ID : 264330185858

Option 1 ID : 264330727754

Option 2 ID : 264330727752

Option 3 ID : 264330727755

Option 4 ID : 264330727753

Status : Answered

Chosen Option : 1

**Q.5** Choose the most appropriate synonym of the underlined word.

Russia uses the prospect of a gas cutoff to put pressure on Kiev and compel Europe.

- Ans**
- 1. Dissuade
  - 2. Discourage
  - 3. Coerce
  - 4. Assist

Question ID : 264330185658

Option 1 ID : 264330726989

Option 2 ID : 264330726988

Option 3 ID : 264330726991

Option 4 ID : 264330726990

Status : Answered

Chosen Option : 3

**Q.6** The sentence has been divided into three parts, identify the error segment in the sentence given below. Choose no error if there is no error in the sentence.

Neither of them have shown any/ interest in taking on the challenging/ project that was assigned to the team.

- Ans**
- 1. interest in taking on the challenging
  - 2. no error
  - 3. Neither of them have shown any
  - 4. project that was assigned to the team.

Question ID : 264330186467

Option 1 ID : 264330730073

Option 2 ID : 264330730075

Option 3 ID : 264330730072

Option 4 ID : 264330730074

Status : Answered

Chosen Option : 3

Q.7 Select the sentence with no spelling errors.

Ans ✓ 1.

Each religion claims that its own holy book is the direct concealment of God.

✗ 2.

Each religion claims that its own holi book is the direct concealment of God.

✗ 3.

Each religion claims that its own holy book is the direct conceelment of God.

✗ 4.

Each religon claims that its own holy book is the direct concealment of God.

Question ID : 264330185685

Option 1 ID : 264330727093

Option 2 ID : 264330727092

Option 3 ID : 264330727095

Option 4 ID : 264330727094

Status : Answered

Chosen Option : 1

Q.8 Choose the most appropriate antonym of the underlined word.

She began to think more about the origins of his views.

Ans ✗ 1. influence

✓ 2. inheritors

✗ 3. author

✗ 4. destiny

Question ID : 264330185975

Option 1 ID : 264330728197

Option 2 ID : 264330728199

Option 3 ID : 264330728198

Option 4 ID : 264330728196

Status : Answered

Chosen Option : 4

Q.9 Find the part of the given sentence that has an error in it. If there is no error, choose 'No error'.

My colleague thinks that I am inferior than her.

Ans ✗ 1. My colleague thinks

✓ 2. inferior than her.

✗ 3. that I am

✗ 4. No error

Question ID : 264330185793

Option 1 ID : 264330727504

Option 2 ID : 264330727506

Option 3 ID : 264330727505

Option 4 ID : 264330727507

Status : Answered

Chosen Option : 2

Q.10 Select the most appropriate word to fill in the blank.

Are you \_\_\_\_\_ aware of what may happen?

- Ans
- 1. freely
  - 2. fully
  - 3. full
  - 4. firm

Question ID : 264330186324  
Option 1 ID : 264330729530  
Option 2 ID : 264330729529  
Option 3 ID : 264330729528  
Option 4 ID : 264330729531  
Status : Answered  
Chosen Option : 2

Q.11 Choose the idiom/phrase that can substitute the highlighted group of words meaningfully.

People were **very angry** over the demolition of the old theatre.

- Ans
- 1. Break a leg
  - 2. Armchair critic
  - 3. Up in arms
  - 4. Run out of steam

Question ID : 264330186145  
Option 1 ID : 264330728844  
Option 2 ID : 264330728846  
Option 3 ID : 264330728845  
Option 4 ID : 264330728847  
Status : Answered  
Chosen Option : 4

Q.12 Select the most appropriate meaning of the given idiom.

Let your hair down

- Ans
- 1. Forget everything.
  - 2. The power of the mind is stranger than the body.
  - 3. To behave freely
  - 4. Financially ruined

Question ID : 264330186544  
Option 1 ID : 264330730367  
Option 2 ID : 264330730366  
Option 3 ID : 264330730364  
Option 4 ID : 264330730365  
Status : Answered  
Chosen Option : 1

**Q.13** Choose the correct words to complete the sentence:

Despite the (1) \_\_\_\_\_ challenges they faced during their (2) \_\_\_\_\_ journey, the explorers remained determined to reach the (3) \_\_\_\_\_ of their expedition

- Ans**
- 1. numerous, perilous, end
  - 2. trivial, pleasant, destination
  - 3. extraordinary, swift, midpoint
  - 4. tedious, brief, beginning

Question ID : 264330186387

Option 1 ID : 264330729768

Option 2 ID : 264330729769

Option 3 ID : 264330729770

Option 4 ID : 264330729771

Status : Answered

Chosen Option : 1

**Q.14** Select the incorrectly spelt word from the given sentence.

The most notorious serial killer of the 19th century remains known only by the psudonym of Jack the Ripper.

- Ans**
- 1. notorious
  - 2. century
  - 3. serial
  - 4. psudonym

Question ID : 264330186315

Option 1 ID : 264330729492

Option 2 ID : 264330729494

Option 3 ID : 264330729493

Option 4 ID : 264330729495

Status : Answered

Chosen Option : 4

**Q.15** Select the most appropriate word to fill in the blank.

As a child, he was tender and warm-hearted towards \_\_\_\_\_.

- Ans**
- 1. whomever
  - 2. one
  - 3. everybody
  - 4. everywhere

Question ID : 264330186070

Option 1 ID : 264330728562

Option 2 ID : 264330728563

Option 3 ID : 264330728560

Option 4 ID : 264330728561

Status : Answered

Chosen Option : 3

**Comprehension:**

Read the passage carefully and select the correct answer for the given blanks out of the four alternatives.

Whole grains contain antioxidants that (1) \_\_\_\_\_ your tissues from harmful inflammation. Plus, they're loaded (2) \_\_\_\_\_ minerals like calcium, potassium, magnesium, zinc and iron — important building (3) \_\_\_\_\_ for a strong immune system and healthy heart. The B vitamins (4) \_\_\_\_\_ in whole grains also help your body convert food (5) \_\_\_\_\_ energy.

**SubQuestion No : 16**

Q.16 Select the most appropriate option for blank(1)

- Ans
- 1. pertain
  - 2. correct
  - 3. simplify
  - 4. protect

Question ID : 264330185674

Option 1 ID : 264330727049

Option 2 ID : 264330727051

Option 3 ID : 264330727050

Option 4 ID : 264330727048

Status : Answered

Chosen Option : 4

**Comprehension:**

Read the passage carefully and select the correct answer for the given blanks out of the four alternatives.

Whole grains contain antioxidants that (1) \_\_\_\_\_ your tissues from harmful inflammation. Plus, they're loaded (2) \_\_\_\_\_ minerals like calcium, potassium, magnesium, zinc and iron — important building (3) \_\_\_\_\_ for a strong immune system and healthy heart. The B vitamins (4) \_\_\_\_\_ in whole grains also help your body convert food (5) \_\_\_\_\_ energy.

**SubQuestion No : 17**

Q.17 Select the most appropriate option for blank(2)

- Ans
- 1. over
  - 2. from
  - 3. with
  - 4. of

Question ID : 264330185675

Option 1 ID : 264330727052

Option 2 ID : 264330727055

Option 3 ID : 264330727053

Option 4 ID : 264330727054

Status : Answered

Chosen Option : 3

**Comprehension:**

Read the passage carefully and select the correct answer for the given blanks out of the four alternatives.

Whole grains contain antioxidants that (1) \_\_\_\_\_ your tissues from harmful inflammation. Plus, they're loaded (2) \_\_\_\_\_ minerals like calcium, potassium, magnesium, zinc and iron — important building (3) \_\_\_\_\_ for a strong immune system and healthy heart. The B vitamins (4) \_\_\_\_\_ in whole grains also help your body convert food (5) \_\_\_\_\_ energy.

**SubQuestion No : 18**

**Q.18** Select the most appropriate option for blank(3)

- Ans**
- 1. stacks
  - 2. chains
  - 3. steps
  - 4. blocks

Question ID : 264330185676

Option 1 ID : 264330727057

Option 2 ID : 264330727059

Option 3 ID : 264330727056

Option 4 ID : 264330727058

Status : Answered

Chosen Option : 1

**Comprehension:**

Read the passage carefully and select the correct answer for the given blanks out of the four alternatives.

Whole grains contain antioxidants that (1) \_\_\_\_\_ your tissues from harmful inflammation. Plus, they're loaded (2) \_\_\_\_\_ minerals like calcium, potassium, magnesium, zinc and iron — important building (3) \_\_\_\_\_ for a strong immune system and healthy heart. The B vitamins (4) \_\_\_\_\_ in whole grains also help your body convert food (5) \_\_\_\_\_ energy.

**SubQuestion No : 19**

**Q.19** Select the most appropriate option for blank(4)

- Ans**
- 1. find
  - 2. finding
  - 3. founded
  - 4. found

Question ID : 264330185677

Option 1 ID : 264330727060

Option 2 ID : 264330727061

Option 3 ID : 264330727062

Option 4 ID : 264330727063

Status : Answered

Chosen Option : 4

**Comprehension:**

Read the passage carefully and select the correct answer for the given blanks out of the four alternatives.

Whole grains contain antioxidants that (1) \_\_\_\_\_ your tissues from harmful inflammation. Plus, they're loaded (2) \_\_\_\_\_ minerals like calcium, potassium, magnesium, zinc and iron — important building (3) \_\_\_\_\_ for a strong immune system and healthy heart. The B vitamins (4) \_\_\_\_\_ in whole grains also help your body convert food (5) \_\_\_\_\_ energy.

**SubQuestion No : 20**

**Q.20** Select the most appropriate option for blank(5)

- Ans**
- 1. in
  - 2. on
  - 3. onto
  - 4. into

Question ID : 264330185678

Option 1 ID : 264330727065

Option 2 ID : 264330727064

Option 3 ID : 264330727067

Option 4 ID : 264330727066

Status : Answered

Chosen Option : 4

## Section : Part-D-Hindi

**Q.1** निम्नलिखित प्रश्न में, दिए गए चार विकल्पों में से, उस विकल्प का चयन करें जो दिए गए मुहावरे के अर्थ को सर्वश्रेष्ठ रूप से व्यक्त करता है।

दबे पैर

- Ans**
- 1. चोरी करना
  - 2. बहुत तेज़ चलना
  - 3. अहिस्ता काम करना
  - 4. असफल होना

Question ID : 264330189473

Option 1 ID : 264330741590

Option 2 ID : 264330741591

Option 3 ID : 264330741592

Option 4 ID : 264330741593

Status : Not Answered

Chosen Option : --

Q.2 निम्नलिखित प्रश्न में, चार विकल्पों में से, उस विकल्प का चयन करें जो रिक्त स्थान के लिए सही शब्द वाला विकल्प हो।

किसी अच्छी वस्तु की वास्तविकता से परिचय पाना आज के \_\_\_\_\_ संसार में विज्ञापन के बिना नितांत असंभव है।

- Ans
- ✓ 1. विशाल
  - ✗ 2. छोटे से
  - ✗ 3. बेरोजगार
  - ✗ 4. संकुचित

Question ID : 264330189984  
 Option 1 ID : 264330743541  
 Option 2 ID : 264330743539  
 Option 3 ID : 264330743540  
 Option 4 ID : 264330743538  
 Status : Not Answered  
 Chosen Option : --

Q.3 दिए गए वाक्य में उचित पर्यायवाची शब्द का चयन करके रिक्त स्थान की पूर्ति करें।

गर्मी से मनोज \_\_\_\_\_ (बेसुध) हो गया।

- Ans
- ✗ 1. जानकार
  - ✗ 2. भाग्यवान
  - ✓ 3. मूर्च्छित
  - ✗ 4. ज्ञान

Question ID : 264330189406  
 Option 1 ID : 264330741334  
 Option 2 ID : 264330741336  
 Option 3 ID : 264330741337  
 Option 4 ID : 264330741335  
 Status : Not Answered  
 Chosen Option : --

Q.4 दिए गए वाक्य में उचित देशज-विदेशज शब्द का चयन करके रिक्त स्थान की पूर्ति कीजिए।

आपसे यही \_\_\_\_\_ है कि आप हमारी बात सुनें।

- Ans
- ✗ 1. डिगरी
  - ✓ 2. अपील
  - ✗ 3. फंड
  - ✗ 4. मील

Question ID : 264330188952  
 Option 1 ID : 264330739609  
 Option 2 ID : 264330739606  
 Option 3 ID : 264330739607  
 Option 4 ID : 264330739608  
 Status : Not Answered  
 Chosen Option : --



Q.5 निम्नलिखित वाक्य में, उस वाक्यांश को पहचानिए जिसमें मात्राओं या व्याकरण से संबंधित अशुद्धियाँ हैं। यदि कोई गलती नहीं है तो 'कोई त्रुटि नहीं है' का चुनाव कीजिए।

भारत दुनिया के सबसे तेजी में बढ़ते/ देशों में से एक है और यह सब 1991 में/ किए गए सुधारों के कारण है।

- Ans
- 1. किए गए सुधारों के कारण है
  - 2. भारत दुनिया के सबसे तेजी में बढ़ते
  - 3. कोई त्रुटि नहीं है
  - 4. देशों में से एक है और यह सब 1991 में

Question ID : 264330189790  
 Option 1 ID : 264330742800  
 Option 2 ID : 264330742798  
 Option 3 ID : 264330742801  
 Option 4 ID : 264330742799  
 Status : Not Answered  
 Chosen Option : --

Q.6 निम्नलिखित प्रश्न में, चार विकल्पों में से, उस विकल्प का चयन करें जो रिक्त स्थान के लिए सही पुल्लिंग रूप वाला विकल्प हो।

कभी-कभी सबके साथ ज्यादा \_\_\_\_\_ भारी पड़ जाता है।

- Ans
- 1. जमाव
  - 2. रुकाव
  - 3. लगाव
  - 4. चुनाव

Question ID : 264330189521  
 Option 1 ID : 264330741777  
 Option 2 ID : 264330741776  
 Option 3 ID : 264330741774  
 Option 4 ID : 264330741775  
 Status : Not Answered  
 Chosen Option : --

Q.7 दिए गए वाक्य में तत्सम शब्द का चयन करके रिक्त स्थान की पूर्ति करें।

\_\_\_\_\_ न जाने कब से भिनभिना रही है।

- Ans
- 1. मातुल
  - 2. मकर
  - 3. मक्षिका
  - 4. मशक

Question ID : 264330188951  
 Option 1 ID : 264330739602  
 Option 2 ID : 264330739603  
 Option 3 ID : 264330739605  
 Option 4 ID : 264330739604  
 Status : Not Answered  
 Chosen Option : --

**Q.8** निम्नलिखित प्रश्न में, दिए गए चार विकल्पों में से, उस विकल्प का चयन करें जो दिए गए मुहावरे के अर्थ को सर्वश्रेष्ठ रूप से व्यक्त करता है।

गाढ़े का साथी

- Ans**
- ✗ 1. बिना काम इधर-उधर घूमनेवाला व्यक्ति
  - ✗ 2. बुराई करने वाले वाला व्यक्ति
  - ✓ 3. बुरे समय में सहायता करने वाला
  - ✗ 4. धनी व्यक्ति

Question ID : 264330188947

Option 1 ID : 264330739587

Option 2 ID : 264330739588

Option 3 ID : 264330739586

Option 4 ID : 264330739589

Status : Not Answered

Chosen Option : --

**Q.9** निम्नलिखित प्रश्न में, चार विकल्पों में से, उस विकल्प का चयन करें जो कोष्ठक में दिए गए शब्द के विलोम शब्द का सही विकल्प है।

उसने बड़े ही (आग्रह) \_\_\_\_\_ से मेरे साथ बातचीत की।

- Ans**
- ✗ 1. अनादृत
  - ✓ 2. दुराग्रह
  - ✗ 3. विकीर्ण
  - ✗ 4. अवरोहण

Question ID : 264330189786

Option 1 ID : 264330742784

Option 2 ID : 264330742782

Option 3 ID : 264330742785

Option 4 ID : 264330742783

Status : Not Answered

Chosen Option : --

**Q.10** दिए गए वाक्य का वह भाग ज्ञात करें, जिसमें कोई त्रुटि है।

मैंने एक लोहे की एक बाल्टी खरीदी और उसे पानी से भर दिया।

- Ans**
- ✓ 1. मैंने एक लोहे
  - ✗ 2. की एक बाल्टी खरीदी
  - ✗ 3. से भर दिया।
  - ✗ 4. और उसे पानी

Question ID : 264330188974

Option 1 ID : 264330739690

Option 2 ID : 264330739691

Option 3 ID : 264330739693

Option 4 ID : 264330739692

Status : Not Answered

Chosen Option : --

**Q.11** निम्नलिखित वाक्य में, उस वाक्यांश को पहचानिए जिसमें मात्राओं से संबंधित अशुद्धियाँ हैं। यदि कोई गलती नहीं है तो 'कोई त्रुटि नहीं है' का चुनाव कीजिए।  
अब महिलाएं जीवन के सभी क्षेत्रों में पुरुषों के/ साथ प्रतिस्पर्धा कर रही हैं लेकिन फिर भी/ कुछ ऐसे लोग पर जो लड़कियों का शिक्षा को विरोध करते हैं।

- Ans**
- 1. अब महिलाएं जीवन के सभी क्षेत्रों में पुरुषों के
  - 2. कुछ ऐसे लोग पर जो लड़कियों का शिक्षा को विरोध करते हैं
  - 3. कोई त्रुटि नहीं है
  - 4. साथ प्रतिस्पर्धा कर रही हैं लेकिन फिर भी

Question ID : 264330189726  
Option 1 ID : 264330742554  
Option 2 ID : 264330742556  
Option 3 ID : 264330742557  
Option 4 ID : 264330742555  
Status : Not Answered  
Chosen Option : --

**Q.12** दिए गए वाक्यांश के लिए सार्थक शब्द ज्ञात कीजिए।  
जिसका दमन न किया जा सके

- Ans**
- 1. अदम्य
  - 2. निदम्य
  - 3. दमित
  - 4. पिछड़ा

Question ID : 264330188150  
Option 1 ID : 264330736516  
Option 2 ID : 264330736517  
Option 3 ID : 264330736518  
Option 4 ID : 264330736519  
Status : Not Answered  
Chosen Option : --

**Q.13** दिए गए वाक्य में रेखांकित शब्द का विलोम शब्द ज्ञात कीजिए।

हिमालय बर्फ से ढका हुआ है।

- Ans**
- 1. पत्थर
  - 2. नेकी
  - 3. भाप
  - 4. पानी

Question ID : 264330189386  
Option 1 ID : 264330741261  
Option 2 ID : 264330741260  
Option 3 ID : 264330741259  
Option 4 ID : 264330741258  
Status : Not Answered  
Chosen Option : --

Q.14 दिए गए वाक्य में उचित पर्यायवाची शब्द का चयन करके रिक्त स्थान की पूर्ति करें।

तुम अपनी \_\_\_\_\_ (सुविधा) के अनुसार काम करो।

- Ans
- 1. मजा
  - 2. केशरी
  - 3. मर्यादा
  - 4. सहूलियत

Question ID : 264330190015

Option 1 ID : 264330743657

Option 2 ID : 264330743655

Option 3 ID : 264330743656

Option 4 ID : 264330743654

Status : Not Answered

Chosen Option : --

Q.15 दिए गए वाक्यांश के लिए सार्थक शब्द ज्ञात कीजिए।

जिसके आने की तिथि निश्चित न हो

- Ans
- 1. अनादि
  - 2. देवता
  - 3. अतिथि
  - 4. रिश्तेदार

Question ID : 264330188277

Option 1 ID : 264330737003

Option 2 ID : 264330737002

Option 3 ID : 264330737001

Option 4 ID : 264330737000

Status : Not Answered

Chosen Option : --

**Comprehension:**

नीचे दिए गए पद्यों में कुछ शब्द छोड़ दिए गए हैं और प्रत्येक रिक्त स्थान के चार विकल्प दिए गए हैं। इन चारों में से कौन सा विकल्प रिक्त स्थान की पूर्ति करेगा-

इस पर कोई दो राय नहीं हो सकती कि अंग्रेजों के बनाए हुए आपराधिक (1)\_\_\_\_\_ अब एक बड़ी हद तक (2)\_\_\_\_\_ हो चुके हैं और वे (3)\_\_\_\_\_ बदलाव की मांग कर रहे हैं। इन कानूनों में (4)\_\_\_\_\_ पर थोड़े बहुत परिवर्तन किए गए परंतु वर्तमान में वे भी (5)\_\_\_\_\_ सिद्ध हो रहे हैं।

SubQuestion No : 16

Q.16 रिक्त 1 के लिए सबसे उपयुक्त विकल्प का चयन कीजिए।

- Ans
- 1. वाक्य
  - 2. कानून
  - 3. योजना
  - 4. संदेह

Question ID : 264330188187

Option 1 ID : 264330736657

Option 2 ID : 264330736656

Option 3 ID : 264330736658

Option 4 ID : 264330736659

Status : Not Answered

Chosen Option : --

**Comprehension:**

नीचे दिए गए पद्यों में कुछ शब्द छोड़ दिए गए हैं और प्रत्येक रिक्त स्थान के चार विकल्प दिए गए हैं। इन चारों में से कौन सा विकल्प रिक्त स्थान की पूर्ति करेगा-

इस पर कोई दो राय नहीं हो सकती कि अंग्रेजों के बनाए हुए आपराधिक (1)\_\_\_\_\_ अब एक बड़ी हद तक (2)\_\_\_\_\_ हो चुके हैं और वे (3)\_\_\_\_\_ बदलाव की मांग कर रहे हैं। इन कानूनों में (4)\_\_\_\_\_ पर थोड़े बहुत परिवर्तन किए गए परंतु वर्तमान में वे भी (5)\_\_\_\_\_ सिद्ध हो रहे हैं।

SubQuestion No : 17

Q.17 रिक्त 2 के लिए सबसे उपयुक्त विकल्प का चयन कीजिए।

- Ans
- 1. अँधेरा
  - 2. अप्रासंगिक
  - 3. प्रधान
  - 4. नीच

Question ID : 264330188188

Option 1 ID : 264330736663

Option 2 ID : 264330736662

Option 3 ID : 264330736660

Option 4 ID : 264330736661

Status : Not Answered

Chosen Option : --

**Comprehension:**

नीचे दिए गए पद्यों में कुछ शब्द छोड़ दिए गए हैं और प्रत्येक रिक्त स्थान के चार विकल्प दिए गए हैं। इन चारों में से कौन सा विकल्प रिक्त स्थान की पूर्ति करेगा-

इस पर कोई दो राय नहीं हो सकती कि अंग्रेजों के बनाए हुए आपराधिक (1)\_\_\_\_\_ अब एक बड़ी हद तक (2)\_\_\_\_\_ हो चुके हैं और वे (3)\_\_\_\_\_ बदलाव की मांग कर रहे हैं। इन कानूनों में (4)\_\_\_\_\_ पर थोड़े बहुत परिवर्तन किए गए परंतु वर्तमान में वे भी (5)\_\_\_\_\_ सिद्ध हो रहे हैं।

SubQuestion No : 18

Q.18 रिक्त 3 के लिए सबसे उपयुक्त विकल्प का चयन कीजिए।

- Ans
- 1. व्यक्त
  - 2. व्यक्ति
  - 3. व्यापक
  - 4. अर्थ

Question ID : 264330188189

Option 1 ID : 264330736667

Option 2 ID : 264330736666

Option 3 ID : 264330736665

Option 4 ID : 264330736664

Status : Not Answered

Chosen Option : --

**Comprehension:**

नीचे दिए गए पद्यों में कुछ शब्द छोड़ दिए गए हैं और प्रत्येक रिक्त स्थान के चार विकल्प दिए गए हैं। इन चारों में से कौन सा विकल्प रिक्त स्थान की पूर्ति करेगा-

इस पर कोई दो राय नहीं हो सकती कि अंग्रेजों के बनाए हुए आपराधिक (1)\_\_\_\_\_ अब एक बड़ी हद तक (2)\_\_\_\_\_ हो चुके हैं और वे (3)\_\_\_\_\_ बदलाव की मांग कर रहे हैं। इन कानूनों में (4)\_\_\_\_\_ पर थोड़े बहुत परिवर्तन किए गए परंतु वर्तमान में वे भी (5)\_\_\_\_\_ सिद्ध हो रहे हैं।

SubQuestion No : 19

Q.19 रिक्त 4 के लिए सबसे उपयुक्त विकल्प का चयन कीजिए।

- Ans
- 1. घर-घर
  - 2. इधर-उधर
  - 3. नगर-नगर
  - 4. समय-समय

Question ID : 264330188190

Option 1 ID : 264330736668

Option 2 ID : 264330736670

Option 3 ID : 264330736669

Option 4 ID : 264330736671

Status : Not Answered

Chosen Option : --

**Comprehension:**

नीचे दिए गए पदय में कुछ शब्द छोड़ दिए गए हैं और प्रत्येक रिक्त स्थान के चार विकल्प दिए गए हैं। इन चारों में से कौन सा विकल्प रिक्त स्थान की पूर्ति करेगा-

इस पर कोई दो राय नहीं हो सकती कि अंग्रेजों के बनाए हुए आपराधिक (1)\_\_\_\_\_ अब एक बड़ी हद तक (2)\_\_\_\_\_ हो चुके हैं और वे (3)\_\_\_\_\_ बदलाव की मांग कर रहे हैं। इन कानूनों में (4)\_\_\_\_\_ पर थोड़े बहुत परिवर्तन किए गए परंतु वर्तमान में वे भी (5)\_\_\_\_\_ सिद्ध हो रहे हैं।

**SubQuestion No : 20**

Q.20 रिक्त 5 के लिए सबसे उपयुक्त विकल्प का चयन कीजिए।

- Ans
- 1. प्रकाश
  - 2. असमंजस
  - 3. हताश
  - 4. अपर्याप्त

Question ID : 264330188191

Option 1 ID : 264330736674

Option 2 ID : 264330736673

Option 3 ID : 264330736675

Option 4 ID : 264330736672

Status : Not Answered

Chosen Option : --