

## Combined Graduate Level Examination-2019 (Tier-I)

Roll Number	
Candidate Name	
Venue Name	Sun Computer Lab
Exam Date	03/03/2020
Exam Time	10:00 AM - 11:00 AM
Subject	CGLE Tier I

### Section : General Intelligence and Reasoning

**Q.1** Select the set of letters that when sequentially placed in the blanks of the given letter series will complete the series.

k \_lmm\_l\_mk\_mmk\_lkkl\_m

- Ans**
- ☒ 1. k, m, m, k, l
  - ☒ 2. l, k, m, k, k
  - ☒ 3. k, l, m, k, k
  - ☒ 4. k, l, k, l, m

Question ID : 1235689

Status : **Answered**

Chosen Option : 1

**Q.2** Arrange the following words in the order in which they appear in an English dictionary.

1. Rightly
2. Rigidly
3. Righteous
4. Rigour
5. Rights

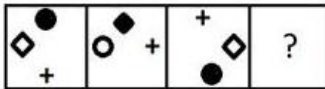
- Ans**
- ☒ 1. 1, 3, 5, 2, 4
  - ☒ 2. 3, 5, 1, 4, 2
  - ☒ 3. 3, 1, 5, 4, 2
  - ☒ 4. 3, 1, 5, 2, 4

Question ID : 1235682

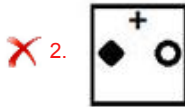
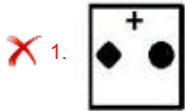
Status : **Answered**

Chosen Option : 4

**Q.3** Select the figure that can replace the question mark (?) in the following series.



Ans



Question ID : 12356819

Status : Answered

Chosen Option : 3

**Q.4** Study the given pattern carefully and select the number that can replace the question mark (?) in it.

6	21	14
40	500	?
8	25	7

Ans ✓ 1. 91

✗ 2. 84

✗ 3. 98

✗ 4. 78

Question ID : 12356816

Status : Answered

Chosen Option : 1

**Q.5** Four words have been given, out of which three are alike in some manner, while one is different. Select the odd word.

Ans ✗ 1. Ferry

✗ 2. Ship

✗ 3. Yacht

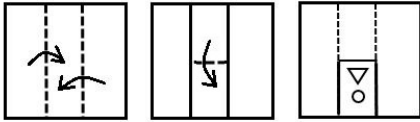
✓ 4. Submarine

Question ID : 1235684

Status : Answered

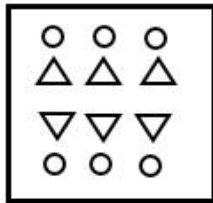
Chosen Option : 1

**Q.6** The sequence of folding a piece of paper and the manner in which the folded paper has been cut is shown in the following figures. How would this paper look when unfolded?

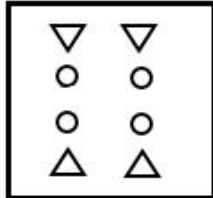


Ans

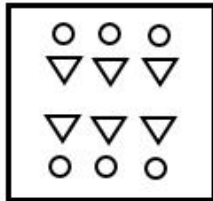
✓ 1.



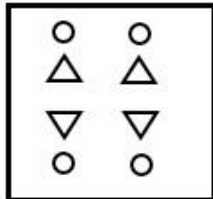
✗ 2.



✗ 3.



✗ 4.



Question ID : 12356824

Status : Answered

Chosen Option : 1

**Q.7** Select the option that is related to the third number in the same way as the second number is related to the first number and the sixth number is related to the fifth number.

12 : 72 :: 18 : ? :: 22 : 242

Ans ✗ 1. 164

✗ 2. 140

✓ 3. 162

✗ 4. 160

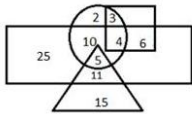
Question ID : 12356813

Status : Answered

Chosen Option : 3

**Q.8** The given Venn diagram represents employees in an organisation:

The triangle represents executives, the circle represents females, the rectangle represents MBAs and the square represents technical staff. The numbers given in the diagram represent the number of persons in that particular category.



How many female executives are there in the organisation?

- Ans**
- ☒ 1. 5
  - ☐ 2. 11
  - ☐ 3. 15
  - ☐ 4. 10

Question ID : 12356825

Status : **Answered**

Chosen Option : 1

**Q.9** Which two numbers should be interchanged to make the given equation correct?

$$9 + 7 \times 5 - 18 \div 2 = 3 \times 4 - 10 + 45 \div 5$$

- Ans**
- ☐ 1. 9 and 3
  - ☐ 2. 18 and 45
  - ☒ 3. 7 and 4
  - ☐ 4. 2 and 5

Question ID : 12356814

Status : **Answered**

Chosen Option : 3

**Q.10** Which of the option figures is the exact mirror image of the given figure when the mirror is held at the right side?

RST2PK9LOX

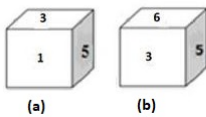
- Ans**
- ☐ 1. XOJεK9ZT2Я
  - ☐ 2. B2TZPKεLOX
  - ☐ 3. ЯZTZPKεLOX
  - ☒ 4. XOJεK9ZT2Я

Question ID : 12356823

Status : **Answered**

Chosen Option : 4

**Q.11** Two positions of the same dice are shown. Select the number that will be on the face opposite to the one showing 6.



- Ans**
- ☒ 1. 3
  - ☒ 2. 5
  - ☒ 3. 4
  - ☒ 4. 1

Question ID : 12356821  
 Status : Answered  
 Chosen Option : 3

**Q.12** The ratio of the present ages of Asha and Lata is 5 : 6. If the difference between their ages is 6 years, then what will be Lata's age will be after 5 years?

- Ans**
- ☒ 1. 41
  - ☒ 2. 35
  - ☒ 3. 40
  - ☒ 4. 45

Question ID : 12356818  
 Status : Answered  
 Chosen Option : 1

**Q.13** Read the given statements and conclusions carefully. Assuming that the information given in the statements is true, even if it appears to be at variance with commonly known facts, decide which of the given conclusions logically follow(s) from the statements.

**Statements:**

1. Some animals are elephants.
2. Some elephants are tigers.

**Conclusions:**

- I. Some animals are tigers.
- II. No tiger is an animal.

- Ans**
- ☒ 1. Neither conclusion I nor II follows.
  - ☒ 2. Only conclusion II follows.
  - ☒ 3. Only conclusion I follows.
  - ☒ 4. Either conclusion I or II follows.

Question ID : 12356811  
 Status : Answered  
 Chosen Option : 4

**Q.14** In a certain code language, 'HARVEST' is coded as '22-21-7-24-20-3-10'. How will 'FARMER' be coded as in that language?

- Ans**
- ☒ 1. 19-7-15-19-3-8
  - ☒ 2. 19-7-15-20-3-7
  - ☒ 3. 20-7-15-20-3-8
  - ☒ 4. 20-7-14-21-3-8

Question ID : 1235688  
 Status : Answered  
 Chosen Option : 3

**Q.15** In the following equations, if '+' is interchanged with '-' and '6' is interchanged with '7', then which equation would be correct?

- Ans
- ☒ 1.  $78 - 68 + 66 = 59$
  - ☒ 2.  $76 - 75 + 77 = 56$
  - ☒ 3.  $62 - 67 + 76 = 83$
  - ☒ 4.  $67 - 76 + 43 = 100$

Question ID : 12356817

Status : Answered

Chosen Option : 4

**Q.16** Select the number that can replace the question mark (?) in the following series.

17, 21, 30, 46, 71, ?

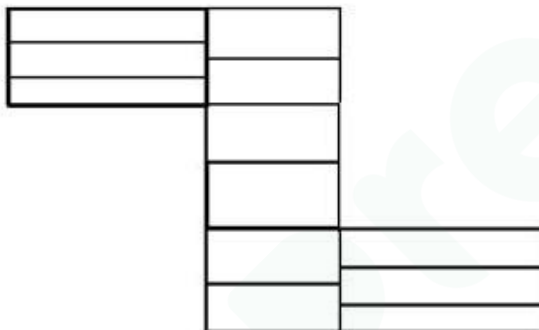
- Ans
- ☒ 1. 96
  - ☒ 2. 105
  - ☒ 3. 107
  - ☒ 4. 101

Question ID : 12356812

Status : Answered

Chosen Option : 3

**Q.17** How many rectangles are there in the given figure?



- Ans
- ☒ 1. 30
  - ☒ 2. 32
  - ☒ 3. 33
  - ☒ 4. 34

Question ID : 12356820

Status : Not Answered

Chosen Option : --

**Q.18** Select the option in which the numbers are related in the same way as are the numbers in the given set.  
(269, 278, 296)

- Ans**
- ☒ 1. (313, 322, 340)
  - ☐ 2. (109, 118, 128)
  - ☐ 3. (419, 430, 448)
  - ☐ 4. (577, 586, 598)

Question ID : **12356815**  
Status : **Answered**  
Chosen Option : **1**

**Q.19** Select the option that is related to the third word in the same way as the second word is related to the first word.  
Medicine : Disease :: Food : ?

- Ans**
- ☐ 1. Energy
  - ☐ 2. Nutrition
  - ☒ 3. Hunger
  - ☐ 4. Thirst

Question ID : **1235685**  
Status : **Answered**  
Chosen Option : **3**

**Q.20** Amit is the brother of Sonia. Jyoti is the sister of Nikita. Sonia is the daughter of Satish's father. Nikita is the daughter of Kavinder. Jyoti is the mother of Amit. Mukesh is Nikita's only sister's husband. How is Satish related to Kavinder?

- Ans**
- ☐ 1. Brother
  - ☐ 2. Son-in-law
  - ☒ 3. Grandson
  - ☐ 4. Son

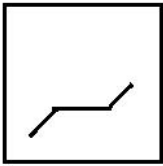
Question ID : **12356810**  
Status : **Answered**  
Chosen Option : **3**

**Q.21** Select the option in which the words share the same relationship as that shared by the given pair of words.  
Clock : Time

- Ans**
- ☐ 1. Anemometer : Strains
  - ☐ 2. Taseometer : Wind
  - ☐ 3. Balance : Scale
  - ☒ 4. Ammeter : Current


Question ID : **1235686**  
Status : **Answered**  
Chosen Option : **4**

**Q.22** Select the option figure in which the given figure is embedded (rotation is NOT allowed).




Ans

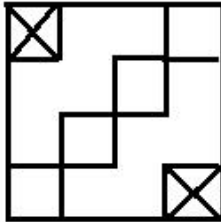
✗ 1.



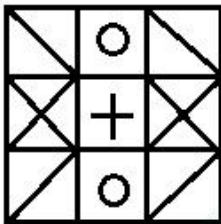
✗ 2.



✗ 3.



✓ 4.



Question ID : 12356822

Status : Answered

Chosen Option : 4

**Q.23** Four letter-clusters have been given, out of which three are alike in some manner, while one is different. Select the odd letter-cluster.

Ans

✗ 1. DWIR

✗ 2. NMSH

✓ 3. FVKO

✗ 4. BYGT

Question ID : 1235683

Status : Answered

Chosen Option : 3

**Q.24** In a certain code language, WARDROBE is written as YXVYXHJV. How will ACCURATE be written as in that language?

- Ans
- ☒ 1. BZHPXTBV
  - ☒ 2. CZHPYTBV
  - ☒ 3. CZGPXTBV
  - ☒ 4. DZGPXTBV

Question ID : 1235687  
Status : Answered  
Chosen Option : 3

**Q.25** Select the letter-cluster that can replace the question mark (?) in the following series.  
CXB, HUI, MRP, ROW, ?

- Ans
- ☒ 1. WLD
  - ☒ 2. VKD
  - ☒ 3. WLZ
  - ☒ 4. VKC

Question ID : 1235681  
Status : Answered  
Chosen Option : 1

Section : General Awareness

**Q.1** As of February 2020, who is the President of Sri Lanka?

- Ans
- ☒ 1. D.M. Jayaratne
  - ☒ 2. Chandrika Kumaratunga
  - ☒ 3. Maithripala Sirisena
  - ☒ 4. Gotabaya Rajapaksa

Question ID : 12356844  
Status : Answered  
Chosen Option : 4

**Q.2** As on January 2020, Shri Bhupesh Baghel is the Chief Minister of which of the following states?

- Ans
- ☒ 1. Odisha
  - ☒ 2. Haryana
  - ☒ 3. Chhattisgarh
  - ☒ 4. Jharkhand

Question ID : 12356845  
Status : Answered  
Chosen Option : 1

Q.3 Name the physicist who is credited with the discovery of the Neutron. This 1932 discovery led to his winning the Nobel Prize.

- Ans
- ☒ 1. Max Plank
  - ☒ 2. James Chadwick
  - ☒ 3. Enrico Fermi
  - ☒ 4. J.S. Fleming

Question ID : 12356833  
Status : Answered  
Chosen Option : 2

Q.4 For which of the following sports was Dronavalli Harika, conferred with the prestigious Padma Shri award?

- Ans
- ☒ 1. Cricket
  - ☒ 2. Chess
  - ☒ 3. Archery
  - ☒ 4. Badminton

Question ID : 12356847  
Status : Not Answered  
Chosen Option : --

Q.5 Who is the first and currently the only batsman to score double hundreds in four consecutive test series?

- Ans
- ☒ 1. Brian Lara
  - ☒ 2. Virat Kohli
  - ☒ 3. A.B. de Villiers
  - ☒ 4. Rohit Sharma

Question ID : 12356846  
Status : Answered  
Chosen Option : 4

Q.6 Kolathunadu, Valluvanad and Thekkumkoor were ancient small-time kingdoms in which state of India?

- Ans
- ☒ 1. Bihar
  - ☒ 2. Kerala
  - ☒ 3. Gujarat
  - ☒ 4. Karnataka

Question ID : 12356840  
Status : Answered  
Chosen Option : 4

Q.7 Sir Thomas Roe came as an official ambassador from King James I of England to which Mughal emperor's court?

- Ans
- ☒ 1. Shah Jahan
  - ☒ 2. Akbar
  - ☒ 3. Jahangir
  - ☒ 4. Aurangzeb

Question ID : 12356838

**Q.8** Name the media company that purchased the legendary studio of 21st Century Fox.

- Ans
- ☒ 1. Disney
  - ☐ 2. Time Warner
  - ☐ 3. Sony
  - ☐ 4. Viacom

Question ID : 12356828  
Status : Answered  
Chosen Option : 1

**Q.9** What is the more common name for solid carbon dioxide?

- Ans
- ☒ 1. Dry Ice
  - ☐ 2. Quick Silver
  - ☐ 3. Epsom
  - ☐ 4. Potash

Question ID : 12356830  
Status : Answered  
Chosen Option : 1

**Q.10** Which of these bones is NOT a part of the human ear?

- Ans
- ☐ 1. Malleus
  - ☐ 2. Incus
  - ☒ 3. Femur
  - ☐ 4. Stapes

Question ID : 12356832  
Status : Answered  
Chosen Option : 3

**Q.11** Which of the following books is NOT written by Salman Rushdie?

- Ans
- ☐ 1. Midnight's Children
  - ☒ 2. An Area of Darkness
  - ☐ 3. The Satanic Verses
  - ☐ 4. Shame

Question ID : 12356843  
Status : Answered  
Chosen Option : 4

**Q.12** The World Food Program (WFP) is the food assistance branch of the United Nations.  
Where is it headquartered?

- Ans
- ☐ 1. New York
  - ☐ 2. Brussels
  - ☒ 3. Rome
  - ☐ 4. Paris

Question ID : 12356836  
Status : Answered  
Chosen Option : 1

Q.13 What is the uniform GST rate that has been fixed up for lottery prizes by the GST Council?

- Ans
- ☒ 1. 32 %
  - ☒ 2. 28 %
  - ☒ 3. 18 %
  - ☒ 4. 10 %

Question ID : 12356849  
Status : Answered  
Chosen Option : 1

Q.14 From India, who inaugurated the Kartarpur Corridor and flagged off the first set of pilgrims to the final resting place of Sikhism founder Guru Nanak Dev?

- Ans
- ☒ 1. Ram Nath Kovind
  - ☒ 2. Manmohan Singh
  - ☒ 3. Narendra Modi
  - ☒ 4. Amarinder Singh

Question ID : 12356848  
Status : Answered  
Chosen Option : 1

Q.15 In which year Sanchi was discovered after being abandoned for nearly 600 Years?

- Ans
- ☒ 1. 1816
  - ☒ 2. 1820
  - ☒ 3. 1818
  - ☒ 4. 1814

Question ID : 12356841  
Status : Not Answered  
Chosen Option : --

Q.16 Which of these words refers to the scientific study of domestic dogs?

- Ans
- ☒ 1. Chromatistics
  - ☒ 2. Cynology
  - ☒ 3. Craniology
  - ☒ 4. Carpology

Question ID : 12356834  
Status : Not Answered  
Chosen Option : --

Q.17 The Araku Valley, a tourist resort, is located near which of these cities of South India?

- Ans
- ☒ 1. Visakhapatnam
  - ☒ 2. Madurai
  - ☒ 3. Mangalore
  - ☒ 4. Kochi

Question ID : 12356837  
Status : Not Answered  
Chosen Option : --

Q.18 Prolific Indian painter Maqbool Fida Husain predominantly used which of these animals to depict a lively and free spirit in his paintings?

- Ans
- ☐ 1. Tigers
  - ☒ 2. Horses
  - ☐ 3. Elephants
  - ☐ 4. Cows

Question ID : 12356827  
Status : Not Answered  
Chosen Option : --

Q.19 The ruins of the ancient city of Hampi - capital of Vijayanagara - is located in which present day Indian state?

- Ans
- ☐ 1. Bihar
  - ☐ 2. Telangana
  - ☐ 3. Haryana
  - ☒ 4. Karnataka

Question ID : 12356835  
Status : Answered  
Chosen Option : 1

Q.20 Who among the following played the leading lady in the film 'Mission Mangal' that tells the dramatic true story of the women behind India's first mission to Mars?

- Ans
- ☐ 1. Kareena Kapoor
  - ☐ 2. Deepika Padukone
  - ☐ 3. Kajol
  - ☒ 4. Vidya Balan

Question ID : 12356826  
Status : Answered  
Chosen Option : 4

Q.21 Which of these institutions fixes the Repo Rate and the Reverse Repo Rate in India?

- Ans
- ☐ 1. Ministry of Finance
  - ☐ 2. State Bank of India
  - ☐ 3. Comptroller and Auditor General of India
  - ☒ 4. Reserve Bank of India

Question ID : 12356829  
Status : Answered  
Chosen Option : 4

Q.22 Red worms have a structure named \_\_\_\_\_ which helps them in grinding their food.

- Ans
- ☐ 1. Crop
  - ☒ 2. Gizzard
  - ☐ 3. Esophagus
  - ☐ 4. Intestine

Question ID : 12356831  
Status : Answered  
Chosen Option : 2

**Q.23** Name the author who won the Sahitya Akademi Award 2019 for his book - An Era of Darkness: The British Empire in India.

- Ans**
- ☒ 1. Shashi Tharoor
  - ☐ 2. Romila Thapar
  - ☐ 3. Vikram Seth
  - ☐ 4. Ramchandra Guha

Question ID : 12356842  
Status : Answered  
Chosen Option : 4

**Q.24** Veteran freedom fighter, social reformer and feminist Savithribai Phule hailed from which of the following states of India?

- Ans**
- ☐ 1. Odisha
  - ☐ 2. Rajasthan
  - ☒ 3. Maharashtra
  - ☐ 4. Gujarat

Question ID : 12356839  
Status : Answered  
Chosen Option : 3

**Q.25** Sultan Qaboos bin Said of \_\_\_\_\_, the Arab world's longest-serving ruler and with a reputation for quiet diplomacy passed away recently (2020).

- Ans**
- ☐ 1. Abu Dhabi
  - ☐ 2. Kuwait
  - ☐ 3. Dubai
  - ☒ 4. Oman

Question ID : 12356850  
Status : Not Answered  
Chosen Option : --

Section : Quantitative Aptitude

**Q.1** The area of  $\triangle ABC$  is  $44 \text{ cm}^2$ . If D is the midpoint of BC and E is the midpoint of AB, then the area (in  $\text{cm}^2$ ) of  $\triangle BDE$  is:

- Ans**
- ☐ 1. 5.5
  - ☒ 2. 11
  - ☐ 3. 44
  - ☐ 4. 22

Question ID : 12356867  
Status : Answered  
Chosen Option : 2

**Q.2** If the number  $1005x4$  is completely divisible by 8, then the smallest integer in place of  $x$  will be:

- Ans**
- ☒ 1. 0
  - ☐ 2. 1
  - ☐ 3. 4
  - ☐ 4. 2

Question ID : 12356851  
 Status : Answered  
 Chosen Option : 1

**Q.3** If the base radius of 2 cylinders are in the ratio 3 : 4 and their heights are in the ratio 4 : 9, then the ratio of their volumes is:

- Ans**
- ☐ 1. 1 : 2
  - ☐ 2. 2 : 1
  - ☒ 3. 1 : 4
  - ☐ 4. 4 : 1

Question ID : 12356861  
 Status : Answered  
 Chosen Option : 3

**Q.4** If  $x, y, z$  are three integers such that  $x + y = 8$ ,  $y + z = 13$  and  $z + x = 17$ , then the value of  $\frac{x^2}{yz}$  is:

- Ans**
- ☐ 1.  $\frac{7}{5}$
  - ☒ 2.  $\frac{18}{11}$
  - ☐ 3. 0
  - ☐ 4. 1

Question ID : 12356863  
 Status : Answered  
 Chosen Option : 2

**Q.5** The given table shows the number (in thousands) of cars of five different models A, B, C, D and E produced during Years 2012-2017. Study the table and answer the question that follow.

	A	B	C	D	E	Total
2012	18	26	22	23	31	120
2013	22	18	32	40	18	130
2014	32	43	26	35	34	170
2015	18	22	26	14	20	100
2016	36	12	44	38	50	180
2017	12	48	40	22	28	150

The percentage decrease in the production of which type of car in 2017, with reference to 2016, was the maximum?

- Ans**
- ☐ 1. D
  - ☒ 2. A
  - ☐ 3. C
  - ☐ 4. E

Question ID : 12356875  
 Status : Answered  
 Chosen Option : 2

**Q.6** The given table shows the number (in thousands) of cars of five different models A, B, C, D and E produced during Years 2012-2017. Study the table and answer the question that follow.

	A	B	C	D	E	Total
2012	18	26	22	23	31	120
2013	22	18	32	40	18	130
2014	32	43	26	35	34	170
2015	18	22	26	14	20	100
2016	36	12	44	38	50	180
2017	12	48	40	22	28	150

If 2013 and 2014 are put together, which type of cars constitute exactly 25% of the total number of cars produced in those 2 years?

- Ans
- ☒ 1. C
  - ☒ 2. B
  - ☒ 3. E
  - ☒ 4. D

Question ID : 12356874  
 Status : Answered  
 Chosen Option : 4

**Q.7** If  $x = 4\cos A + 5\sin A$  and  $y = 4\sin A - 5\cos A$ , then the value of  $x^2 + y^2$  is:

- Ans
- ☒ 1. 41
  - ☒ 2. 16
  - ☒ 3. 25
  - ☒ 4. 0

Question ID : 12356871  
 Status : Answered  
 Chosen Option : 1

**Q.8** Out of 6 numbers, the sum of the first 5 numbers is 7 times the 6<sup>th</sup> number. If their average is 136, then the 6<sup>th</sup> number is:

- Ans
- ☒ 1. 102
  - ☒ 2. 96
  - ☒ 3. 84
  - ☒ 4. 116

Question ID : 12356853  
 Status : Answered  
 Chosen Option : 1

**Q.9** The given table shows the number (in thousands) of cars of five different models A, B, C, D and E produced during Years 2012-2017. Study the table and answer the question that follow.

	A	B	C	D	E	Total
2012	18	26	22	23	31	120
2013	22	18	32	40	18	130
2014	32	43	26	35	34	170
2015	18	22	26	14	20	100
2016	36	12	44	38	50	180
2017	12	48	40	22	28	150

The percentage increase in the total cars in 2016 over 2012, is:

- Ans**
- ☒ 1. 33.33%
  - ☒ 2. 62.33%
  - ☒ 3. 50%
  - ☒ 4. 45%

Question ID : 12356872

Status : Answered

Chosen Option : 3

**Q.10** If  $x^{2a} = y^{2b} = z^{2c} \neq 0$  and  $x^2 = yz$ , then the value of  $\frac{ab+bc+ca}{bc}$  is:

- Ans**
- ☒ 1. 3ac
  - ☒ 2. 3bc
  - ☒ 3. 3ab
  - ☒ 4. 3

Question ID : 12356864

Status : Answered

Chosen Option : 4

**Q.11** If  $x - y = 4$  and  $xy = 45$ , then the value of  $x^3 - y^3$  is:

- Ans**
- ☒ 1. 82
  - ☒ 2. 604
  - ☒ 3. 151
  - ☒ 4. 822

Question ID : 12356862

Status : Answered

Chosen Option : 2

**Q.12** ₹4,300 becomes ₹4,644 in 2 years at simple interest. Find the principle amount that will become ₹10,104 in 5 years at the same rate of interest.

- Ans**
- ☒ 1. ₹7,200
  - ☒ 2. ₹9,260
  - ☒ 3. ₹8,420
  - ☒ 4. ₹5,710

Question ID : 12356858

Status : Not Answered

**Q.13** The given table shows the number (in thousands) of cars of five different models A, B, C, D and E produced during Years 2012-2017. Study the table and answer the question that follow.

	A	B	C	D	E	Total
2012	18	26	22	23	31	120
2013	22	18	32	40	18	130
2014	32	43	26	35	34	170
2015	18	22	26	14	20	100
2016	36	12	44	38	50	180
2017	12	48	40	22	28	150

In the year 2015, which type of car constitutes exactly 20% of the total number of cars produced that year?

- Ans
- ☒ 1. A
  - ☒ 2. D
  - ☒ 3. B
  - ☒ 4. E

Question ID : 12356873

Status : Answered

Chosen Option : 4

**Q.14** If '+' means '-', '-' means '+', '×' means '÷' and '÷' means '×', then the value of  $\frac{42-12 \times 3+8 \div 2+15}{8 \times 2-4+9 \div 3}$  is:

- Ans
- ☒ 1.  $-\frac{5}{3}$
  - ☒ 2.  $\frac{15}{19}$
  - ☒ 3.  $-\frac{15}{19}$
  - ☒ 4.  $\frac{5}{3}$

Question ID : 12356852

Status : Answered

Chosen Option : 4

**Q.15** A person sells an article at 10% below its cost price. Had he sold it for ₹332 more, he would have made a profit of 20%. What is the original selling price (in ₹) of the article?

- Ans
- ☒ 1. 1,328
  - ☒ 2. 1,028
  - ☒ 3. 896
  - ☒ 4. 996

Question ID : 12356856

Status : Not Answered

Chosen Option : --

Q.16 If  $A + B = 45^\circ$ , then the value of  $2(1 + \tan A)(1 + \tan B)$  is:

- Ans
- ☒ 1. 2
  - ☒ 2. 0
  - ☒ 3. 4
  - ☒ 4. 1

Question ID : 12356869

Status : Answered

Chosen Option : 1

Q.17 A train crosses a pole in 12 sec, and a bridge of length 170 m in 36 sec. Then the speed of the train is:

- Ans
- ☒ 1. 30.75 km/h
  - ☒ 2. 10.8 km/h
  - ☒ 3. 25.5 km/h
  - ☒ 4. 32.45 km/h

Question ID : 12356860

Status : Not Answered

Chosen Option : --

Q.18 The ratio of the number of boys to the number of girls in a school of 640 students, is 5 : 3. If 30 more girls are admitted in the school, then how many more boys should be admitted so that the ratio of boys to that of the girls, becomes 14 : 9.

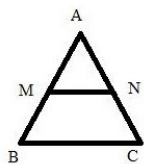
- Ans
- ☒ 1. 20
  - ☒ 2. 25
  - ☒ 3. 30
  - ☒ 4. 15

Question ID : 12356857

Status : Not Answered

Chosen Option : --

Q.19 In  $\triangle ABC$ ,  $MN \parallel BC$ , the area of quadrilateral  $MBCN = 130 \text{ sqcm}$ . If  $AN : NC = 4 : 5$ , then the area of  $\triangle MAN$  is:



- Ans
- ☒ 1.  $45 \text{ cm}^2$
  - ☒ 2.  $32 \text{ cm}^2$
  - ☒ 3.  $65 \text{ cm}^2$
  - ☒ 4.  $40 \text{ cm}^2$

Question ID : 12356868

Status : Not Answered

Chosen Option : --

Q.20

If A lies in the first quadrant and  $6 \tan A = 5$ , then the value of  $\frac{8 \sin A - 4 \cos A}{\cos A + 2 \sin A}$  is:

Ans

- ☒ 1. 1  
☒ 2. -2  
☒ 3. 4  
☒ 4. 16

Question ID : 12356870

Status : Not Answered

Chosen Option : --

Q.21 If the length of a rectangle is increased by 40%, and the breadth is decreased by 20%, then the area of the rectangle increases by x%. Then the value of x is:

Ans

- ☒ 1. 20  
☒ 2. 8  
☒ 3. 16  
☒ 4. 12

Question ID : 12356855

Status : Answered

Chosen Option : 4

Q.22 A shopkeeper marks the price of the article in such a way that after allowing 28% discount, he wants a gain of 12%. If the marked price is ₹224, then the cost price of the article is:

Ans

- ☒ 1. ₹168  
☒ 2. ₹120  
☒ 3. ₹196  
☒ 4. ₹144

Question ID : 12356854

Status : Not Answered

Chosen Option : --

Q.23 The radius of a circular garden is 42 m. The distance (in m) covered by running 8 rounds around it, is:

(Take  $\pi = \frac{22}{7}$ )

Ans

- ☒ 1. 3248  
☒ 2. 4262  
☒ 3. 1124  
☒ 4. 2112

Question ID : 12356866

Status : Answered

Chosen Option : 4

**Q.24** A, B and C are three points on a circle such that the angles subtended by the chord AB and AC at the centre O are  $110^\circ$  and  $130^\circ$ , respectively. Then the value of  $\angle BAC$  is:

- Ans
- ☒ 1.  $65^\circ$
  - ☒ 2.  $75^\circ$
  - ☒ 3.  $60^\circ$
  - ☒ 4.  $70^\circ$

Question ID : 12356865  
Status : Not Answered  
Chosen Option : --

**Q.25** A, B and C can individually complete a piece of work in 24 days, 15 days and 12 days, respectively. B and C started the work and worked for 3 days and left. The number of days required by A alone to complete the remaining work, is:

- Ans
- ☒ 1. 18
  - ☒ 2.  $15\frac{1}{2}$
  - ☒ 3.  $13\frac{1}{5}$
  - ☒ 4. 11

Question ID : 12356859  
Status : Answered  
Chosen Option : 3

Section : English Comprehension

**Q.1** Fill in the blank with the most appropriate word.

We must \_\_\_\_\_ help to the homeless and physically disabled people.

- Ans
- ☒ 1. render
  - ☒ 2. donate
  - ☒ 3. exert
  - ☒ 4. contribute

Question ID : 123568100  
Status : Answered  
Chosen Option : 3

**Q.2** Given below are four jumbled sentences. Select the option that gives their correct order

- A. However, the rate of population increase is another important factor to consider.
- B. This change can be expressed in two ways.
- C. Growth of population refers to the change in the number of inhabitants of a country.
- D. First, in terms of absolute numbers and second, in terms of percentage change.

- Ans
- ☒ 1. BADC
  - ☒ 2. BDCA
  - ☒ 3. CBDA
  - ☒ 4. CADB

Question ID : 12356889  
Status : Answered  
Chosen Option : 3

**Q.3** Select the passive form of the given sentence.

The manager keeps the work pending.

- Ans
- ☒ 1. The work has been kept pending by the manager
  - ☒ 2. The work was kept pending by the manager.
  - ☒ 3. The work is kept pending by the manager.
  - ☒ 4. The work are being kept pending by the manager.

Question ID : 12356878

Status : Answered

Chosen Option : 3

**Q.4** In the sentence identify the segment which contains the grammatical error.

One of the boys from our school have been selected for National Badminton Championship.

- Ans
- ☒ 1. have been selected
  - ☒ 2. from our school
  - ☒ 3. for National Badminton Championship
  - ☒ 4. One of the boys

Question ID : 12356877

Status : Answered

Chosen Option : 1

**Q.5** Select the correct synonym of the given word.

Obligatory

- Ans
- ☒ 1. Mandatory
  - ☒ 2. Reckless
  - ☒ 3. Useless
  - ☒ 4. Aggressive

Question ID : 12356890

Status : Answered

Chosen Option : 1

**Q.6** Select the most appropriate option to substitute the underlined segment in the given sentence. If no substitution is required, select No improvement

The Director will agree with the proposal if we do not exceed the budget.

- Ans
- ☒ 1. agreed by the proposal
  - ☒ 2. agree on a proposal
  - ☒ 3. No Improvement
  - ☒ 4. agree to the proposal

Question ID : 12356881

Status : Answered

Chosen Option : 4

**Comprehension:**

In the following passage some words have been deleted. Fill in the blanks with the help of the alternatives given. Select the most appropriate option for each blank.

Communication plays a (1)\_\_\_\_\_ role in the overall development of man. It can be learnt by our (2)\_\_\_\_\_ efforts. Today, success in our professional life depends on our (3)\_\_\_\_\_ to read, write and speak well which results in effective communication. Barriers (4)\_\_\_\_\_ communication hinder the communication process. It is very important to (5)\_\_\_\_\_ these barriers so that the transmission of the message can be smooth.

**SubQuestion No : 7****Q.7 Select the most appropriate option for blank No. 1**

- Ans
- ☒ 1. better
  - ☒ 2. vital
  - ☒ 3. total
  - ☒ 4. lifeless

Question ID : 12356883

Status : **Answered**

Chosen Option : 2

**Comprehension:**

In the following passage some words have been deleted. Fill in the blanks with the help of the alternatives given. Select the most appropriate option for each blank.

Communication plays a (1)\_\_\_\_\_ role in the overall development of man. It can be learnt by our (2)\_\_\_\_\_ efforts. Today, success in our professional life depends on our (3)\_\_\_\_\_ to read, write and speak well which results in effective communication. Barriers (4)\_\_\_\_\_ communication hinder the communication process. It is very important to (5)\_\_\_\_\_ these barriers so that the transmission of the message can be smooth.

**SubQuestion No : 8****Q.8 Select the most appropriate option for blank No. 2**

- Ans
- ☒ 1. contradictory
  - ☒ 2. unclear
  - ☒ 3. important
  - ☒ 4. conscious

Question ID : 12356884

Status : **Answered**

Chosen Option : 4

**Comprehension:**

In the following passage some words have been deleted. Fill in the blanks with the help of the alternatives given. Select the most appropriate option for each blank.

Communication plays a (1)\_\_\_\_\_ role in the overall development of man. It can be learnt by our (2)\_\_\_\_\_ efforts. Today, success in our professional life depends on our (3)\_\_\_\_\_ to read, write and speak well which results in effective communication. Barriers (4)\_\_\_\_\_ communication hinder the communication process. It is very important to (5)\_\_\_\_\_ these barriers so that the transmission of the message can be smooth.

**SubQuestion No : 9****Q.9 Select the most appropriate option for blank No. 3**

- Ans
- ☒ 1. variety
  - ☒ 2. agility
  - ☒ 3. ability
  - ☒ 4. facility

Question ID : 12356885

Status : **Answered**

Chosen Option : 3

**Comprehension:**

In the following passage some words have been deleted. Fill in the blanks with the help of the alternatives given. Select the most appropriate option for each blank.

Communication plays a (1)\_\_\_\_\_ role in the overall development of man. It can be learnt by our (2)\_\_\_\_\_ efforts. Today, success in our professional life depends on our (3)\_\_\_\_\_ to read, write and speak well which results in effective communication. Barriers (4)\_\_\_\_\_ communication hinder the communication process. It is very important to (5)\_\_\_\_\_ these barriers so that the transmission of the message can be smooth.

**SubQuestion No : 10****Q.10 Select the most appropriate option for blank No. 4**

- Ans  1. to  
 2. against  
 3. by  
 4. from

Question ID : 12356886  
Status : **Answered**  
Chosen Option : 1

**Comprehension:**

In the following passage some words have been deleted. Fill in the blanks with the help of the alternatives given. Select the most appropriate option for each blank.





Communication plays a (1)\_\_\_\_\_ role in the overall development of man. It can be learnt by our (2)\_\_\_\_\_ efforts. Today, success in our professional life depends on our (3)\_\_\_\_\_ to read, write and speak well which results in effective communication. Barriers (4)\_\_\_\_\_ communication hinder the communication process. It is very important to (5)\_\_\_\_\_ these barriers so that the transmission of the message can be smooth.

**SubQuestion No : 11****Q.11 Select the most appropriate option for blank No. 5**

- Ans  1. strengthen  
 2. create  
 3. overcome  
 4. succeed

Question ID : 12356887  
Status : **Answered**  
Chosen Option : 3

**Q.12 Select the correct synonym of the given word.****Scintillating**

- Ans  1. Stinging  
 2. Glittering  
 3. Flattering  
 4. Boring

Question ID : 12356891  
Status : **Answered**  
Chosen Option : 2

Q.13 Select the word, which means the same as the given group of words.

Something that cannot be heard

- Ans
- ☒ 1. infallible
  - ☒ 2. audible
  - ☒ 3. inaudible
  - ☒ 4. irrevocable

Question ID : 12356896

Status : Answered

Chosen Option : 3

Q.14 Select the most appropriate option to substitute the underlined segment in the given sentence. If no substitution is required, select No improvement

The captain as well the players were responsible for winning the trophy.

- Ans
- ☒ 1. The captain also the players were
  - ☒ 2. The captain as well as the players was
  - ☒ 3. As The captain with the players were
  - ☒ 4. No Improvement

Question ID : 12356880

Status : Answered

Chosen Option : 4

Q.15 Select the appropriate meaning of the given idiom.

To take French leave

- Ans
- ☒ 1. Welcome the host
  - ☒ 2. Acknowledge the host
  - ☒ 3. Leave with written permission
  - ☒ 4. Leave without any intimation

Question ID : 12356895

Status : Answered

Chosen Option : 4

Q.16 Given below are four jumbled sentences. Select the option that gives their correct order

- A. However, they ignore the truth that progress and success are proportional to the labor they put in.
- B. The general human tendency is to find faults in the policies framed by the government.
- C. They blame the government for their slow progress, expecting miracles and magical transformation in their life.
- D. So people openly criticize and condemn the policy makers.

- Ans
- ☒ 1. CDAB
  - ☒ 2. DBAC
  - ☒ 3. BDCA
  - ☒ 4. ABCD

Question ID : 12356888

Status : Answered

Chosen Option : 3

**Q.17** Select the word, which means the same as the groups of words given.

**A song sung at a burial**

- Ans
- ☒ 1. Sonnet
  - ☒ 2. Dirge
  - ☒ 3. Hymn
  - ☒ 4. Ballad

Question ID : 12356897

Status : **Answered**

Chosen Option : 1

**Q.18** Select the appropriate meaning of the given idiom.

**A hard nut to crack**

- Ans
- ☒ 1. Easily disappointed
  - ☒ 2. A difficult problem
  - ☒ 3. Not restrained
  - ☒ 4. Easily encouraged

Question ID : 12356894

Status : **Answered**

Chosen Option : 2

**Q.19** Fill in the blank with the most appropriate word.

**Handle this glass table with care because it is \_\_\_\_\_.**

- Ans
- ☒ 1. frugal
  - ☒ 2. ductile
  - ☒ 3. fragile
  - ☒ 4. volatile

Question ID : 123568101

Status : **Answered**

Chosen Option : 3

**Q.20** Select the correctly spelt word.

- Ans
- ☒ 1. Bouquette
  - ☒ 2. Humilliation
  - ☒ 3. Sarcasm
  - ☒ 4. Retalaite

Question ID : 12356899

Status : **Answered**

Chosen Option : 3

**Q.21** Select the indirect narration of the given sentence.

He said to the hotel receptionist, "Can you tell me the tariff of rooms?"

- Ans
- ☒ 1. He asked the hotel receptionist that if he can tell him the tariff of rooms.
  - ☒ 2. He asked the hotel receptionist to tell him the tariff of rooms.
  - ☒ 3. He enquired the hotel receptionist if he can tell him the tariff of rooms.
  - ☒ 4. He asked the hotel receptionist if he could tell him the tariff of rooms.

Question ID : 12356879

Status : **Answered**

Chosen Option : 3

**Q.22** In the sentence identify the segment which contains the grammatical error.

I can swim very fast when I was only five.

- Ans
- ☒ 1. I can swim
  - ☒ 2. when I was
  - ☒ 3. very fast
  - ☒ 4. only five

Question ID : 12356876

Status : **Answered**

Chosen Option : 1

**Q.23** Select the correctly spelt word.

- Ans
- ☒ 1. exhibit
  - ☒ 2. extract
  - ☒ 3. exhout
  - ☒ 4. exhail

Question ID : 12356898

Status : **Answered**

Chosen Option : 1

**Q.24** Select the correct antonym of the given word.

Exodus

- Ans
- ☒ 1. Departure
  - ☒ 2. Refund
  - ☒ 3. Exit
  - ☒ 4. Arrival

Question ID : 12356892

Status : **Answered**

Chosen Option : 4

Q.25 Select the correct antonym of the given word.

Quiescent

Ans

-  1. Peaceful
-  2. Dejected
-  3. Indifferent
-  4. Active

Question ID : 12356893

Status : **Not Answered**

Chosen Option : --