

Constable GD in Central Armed Police Forces CAPFs SSF Rifleman GD in Assam Rifles Examination 2024

Roll Number	
Candidate Name	
Venue Name	
Exam Date	26/02/2024
Exam Time	9:00 AM - 10:00 AM
Subject	Constable GD Examination 2024

Section : Part-A-General Intelligence and Reasoning

Q.1 If a mirror is placed on the line AB, then out of the option figures which figure will be the right image of the question figure?



Ans

✓ 1.



✗ 2.



✗ 3.



✗ 4.



Question ID : 264330190166

Option 1 ID : 264330744248

Option 2 ID : 264330744249

Option 3 ID : 264330744247

Option 4 ID : 264330744246

Status : Answered

Chosen Option : 1

Q.2 Which of the following numbers will replace the question mark (?) in the given series?

2, 5, 11, 23, 47, ?, 191

Ans ✓ 1. 95

✗ 2. 80

✗ 3. 90

✗ 4. 85

Question ID : 264330191600

Option 1 ID : 264330749754

Option 2 ID : 264330749757

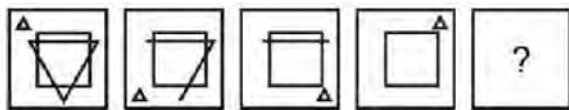
Option 3 ID : 264330749755

Option 4 ID : 264330749756

Status : Answered

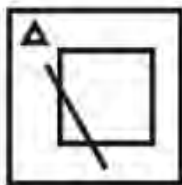
Chosen Option : 1

Q.3 In the following question, select the figure which can be placed at the sign of question mark (?) from the given alternatives.

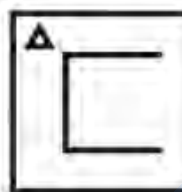


Ans

✗ 1.



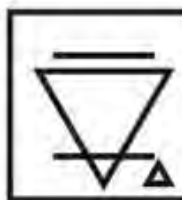
✓ 2.



✗ 3.



✗ 4.



Question ID : 264330190143

Option 1 ID : 264330744155

Option 2 ID : 264330744156

Option 3 ID : 264330744154

Option 4 ID : 264330744157

Status : Answered

Chosen Option : 2

Q.4 Which two signs should be interchanged to make the given equation correct?

$$18 + 2 + 6 - 8 \times 24 = 22$$

Ans 1. \times and $+$

2. $+$ and $+$

3. \times and $+$

4. \times and $-$

Question ID : 264330188052

Option 1 ID : 264330736136

Option 2 ID : 264330736139

Option 3 ID : 264330736138

Option 4 ID : 264330736137

Status : Answered

Chosen Option : 1

Q.5 Arrange the given words in alphabetical order:

1. PINK

2. PING

3. PICK

4. PULL

5. PUSH

Ans 1. 3, 2, 1, 4, 5

2. 3, 4, 1, 2, 5

3. 3, 1, 2, 4, 5

4. 3, 5, 4, 2, 1

Question ID : 264330192210

Option 1 ID : 264330752197

Option 2 ID : 264330752194

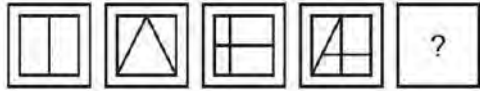
Option 3 ID : 264330752195

Option 4 ID : 264330752196

Status : Answered

Chosen Option : 1

Q.6 In the following question, select the figure which can be placed at the sign of question mark (?) from the given alternatives.




Ans


✗ 1.



✗ 2.



✓ 3.



✗ 4.



Question ID : 264330191563

Option 1 ID : 264330749609

Option 2 ID : 264330749607

Option 3 ID : 264330749606

Option 4 ID : 264330749608

Status : Answered

Chosen Option : 3

Q.7 From the given option figures, select the one in which the question figure is hidden/embedded. (rotation is NOT allowed)

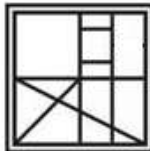


Ans

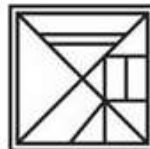
1.



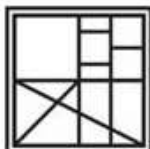
2.



3.



4.



Question ID : 264330187056

Option 1 ID : 264330732152

Option 2 ID : 264330732154

Option 3 ID : 264330732155

Option 4 ID : 264330732153

Status : Answered

Chosen Option : 3

Q.8 Five friends P, B, C, G and H are sitting around a circular table facing towards the centre. H is sitting to the immediate right of C. B sitting third to the left of H. P is not an immediate neighbour of C. Who is sitting on the immediate right of G?

Ans 1. B

2. H

3. C

4. P

Question ID : 264330190555

Option 1 ID : 264330745804

Option 2 ID : 264330745803

Option 3 ID : 264330745805

Option 4 ID : 264330745802

Status : Answered

Chosen Option : 3

Q.9 A series is given with one term missing. Select the correct alternative from the given ones that will complete the series.

SW, UQ, OS, QM, ?

- Ans**
- 1. KR
 - 2. KO
 - 3. KM
 - 4. RS

Question ID : 264330191328

Option 1 ID : 264330748669

Option 2 ID : 264330748667

Option 3 ID : 264330748668

Option 4 ID : 264330748666

Status : Answered

Chosen Option : 2

Q.10 If $100R + 50S + 18T + 9 = 152$ and $84R + 30S + 80T + 4 = 134$, then $75R + 125S + 200T + 40 = ?$

- Ans**
- 1. 200
 - 2. 180
 - 3. 185
 - 4. 205

Question ID : 264330190121

Option 1 ID : 264330744066

Option 2 ID : 264330744069

Option 3 ID : 264330744067

Option 4 ID : 264330744068

Status : Not Answered

Chosen Option : --

Q.11 In the following question below are given some statements followed by some conclusions based on those statements.

Taking the given statements to be true even if they seem to be at variance from commonly known facts. Read all the conclusions and then decide which of the given conclusion logically follows the given statements.

Statements:

I. No S is T.

II. Some U are S.

Conclusions:

I. Some U are not T.

II. All T are U.

- Ans**
- 1. Only conclusion II follows
 - 2. Only conclusion I follows
 - 3. Neither conclusion follows
 - 4. Both conclusions I and II follows

Question ID : 264330190137

Option 1 ID : 264330744131

Option 2 ID : 264330744130

Option 3 ID : 264330744133

Option 4 ID : 264330744132

Status : Answered

Chosen Option : 2

Q.12 In the following question, select the related letter pair from the given alternatives.

BHL : YEI :: ?

- Ans**
- 1. AMG : XJD
 - 2. ABC : DQR
 - 3. LOB : WZA
 - 4. OLM : NOP

Question ID : 264330190431

Option 1 ID : 264330745308

Option 2 ID : 264330745307

Option 3 ID : 264330745306

Option 4 ID : 264330745309

Status : Answered

Chosen Option : 1

Q.13 Eight persons Reena, Kiran, Rahul, Deepak, Amit, Vikas, Preeti and Priya sit around a square table such that two persons sit in each of the sides. All the persons are sitting facing the centre of the table. Reena sits on the immediate right of Amit and they both sit on the same side. Preeti faces the one who is second to the left of Kiran. Preeti is sitting fourth to the right of Reena. Two persons sit between Vikas and Deepak (when counted from one side only) and Deepak is adjacent to Amit. Only one person sits between Preeti and Rahul (when counted from one side only). Who is sitting to the immediate left of Deepak?

- Ans**
- 1. Priya
 - 2. Rahul
 - 3. Reena
 - 4. Vikas

Question ID : 264330190556

Option 1 ID : 264330745806

Option 2 ID : 264330745809

Option 3 ID : 264330745808

Option 4 ID : 264330745807

Status : Answered

Chosen Option : 1

Q.14 Select the option that is related to the third word in the same way as the second word is related to the first word.

Garden : Flowers :: Library : ?

- Ans**
- 1. Books
 - 2. Helmets
 - 3. Tables
 - 4. Songs

Question ID : 264330192091

Option 1 ID : 264330751720

Option 2 ID : 264330751718

Option 3 ID : 264330751719

Option 4 ID : 264330751721

Status : Answered

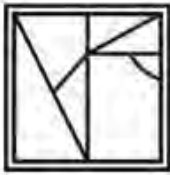
Chosen Option : 1

Q.15 From the given option figures, select the one in which the question figure is hidden/embedded. (rotation is NOT allowed)



Ans

✓ 1.



✗ 2.



✗ 3.



✗ 4.



Question ID : 264330187116
 Option 1 ID : 264330732395
 Option 2 ID : 264330732392
 Option 3 ID : 264330732394
 Option 4 ID : 264330732393
 Status : Answered
 Chosen Option : 1

Q.16 Which of the following groups of letters when sequentially placed from left to right will complete the given series?

defghd_fghd_fghdef_hdefgh_efgh

Ans

✗ 1. fdgh

✓ 2. eegd

✗ 3. efgh

✗ 4. eged

Question ID : 264330191529
 Option 1 ID : 264330749470
 Option 2 ID : 264330749472
 Option 3 ID : 264330749471
 Option 4 ID : 264330749473
 Status : Answered
 Chosen Option : 2

Q.17 If $P + Q$ means P is the brother of Q , $P \times Q$ means P is the mother of Q , $P - Q$ means P is the father of Q and $P \div Q$ means P is the sister of Q . If $A \times B = C - D + E - F$, then how is E related to A ?

- Ans**
- 1. Sister
 - 2. Son's daughter
 - 3. Daughter
 - 4. Mother

Question ID : 264330187126
Option 1 ID : 264330732434
Option 2 ID : 264330732433
Option 3 ID : 264330732432
Option 4 ID : 264330732435
Status : Answered
Chosen Option : 2

Q.18 Pointing towards a photo of a man, Ram said, "He is the father of my mother's husband". How is the man related to Ram?

- Ans**
- 1. Brother
 - 2. Father
 - 3. Uncle
 - 4. Father's father

Question ID : 264330190552
Option 1 ID : 264330745792
Option 2 ID : 264330745791
Option 3 ID : 264330745793
Option 4 ID : 264330745790
Status : Answered
Chosen Option : 4

Q.19 In a certain code language, if BHUTAN is coded as UHBVCP, GREECE is coded as ERGGEG, then what will FRANCE be coded as?

- Ans**
- 1. GSBODF
 - 2. ARFECN
 - 3. GSBECN
 - 4. ARFPEG

Question ID : 264330192334
Option 1 ID : 264330752693
Option 2 ID : 264330752690
Option 3 ID : 264330752692
Option 4 ID : 264330752691
Status : Answered
Chosen Option : 4

Q.20 Which of the following numbers will replace the question mark (?) in the given series?

99, 91, ?, 74, 65, 57

- Ans**
- 1. 89
 - 2. 86
 - 3. 78
 - 4. 82

Question ID : **264330190418**
Option 1 ID : **264330745254**
Option 2 ID : **264330745255**
Option 3 ID : **264330745257**
Option 4 ID : **264330745256**
Status : **Answered**
Chosen Option : **4**

Section : **Part-B-General Knowledge and General awareness**

Q.1 In which year did Abhinav Bindra create history by becoming the first Indian to win an individual gold medal at the Olympic Games in the 10-meter Air Rifle event?

- Ans**
- 1. 2010
 - 2. 2005
 - 3. 2008
 - 4. 2000

Question ID : **264330190981**
Option 1 ID : **264330747280**
Option 2 ID : **264330747278**
Option 3 ID : **264330747281**
Option 4 ID : **264330747279**
Status : **Not Answered**
Chosen Option : **--**

Q.2 Read the following about Revenue Receipts.

A. Revenue receipts are those receipts that do not lead to a claim on the government.

B. Revenue receipts are divided into tax and non-tax revenues.

Identify the CORRECT statement/statements.

- Ans**
- 1. Both A and B
 - 2. Neither A nor B
 - 3. Only A
 - 4. Only B

Question ID : **264330191225**
Option 1 ID : **264330748256**
Option 2 ID : **264330748257**
Option 3 ID : **264330748254**
Option 4 ID : **264330748255**
Status : **Not Answered**
Chosen Option : **--**

Q.3 Folk dance of 'Jatra' is originated from the state of:

- Ans
- 1. Haryana
 - 2. West Bengal
 - 3. Punjab
 - 4. Tamil Nadu

Question ID : 264330191779
Option 1 ID : 264330750470
Option 2 ID : 264330750472
Option 3 ID : 264330750471
Option 4 ID : 264330750473
Status : Answered
Chosen Option : 2

Q.4 In which year did the Father of India's Green Revolution pass away?

- Ans
- 1. 2013
 - 2. 2023
 - 3. 2003
 - 4. 1993

Question ID : 264330192026
Option 1 ID : 264330751460
Option 2 ID : 264330751461
Option 3 ID : 264330751459
Option 4 ID : 264330751458
Status : Not Answered
Chosen Option : --

Q.5 Shiv Kumar Sharma's name is synonymous with _____ Indian classical music instrument.

- Ans
- 1. Tabla
 - 2. Shehnai
 - 3. Santoor
 - 4. Sitar

Question ID : 264330191818
Option 1 ID : 264330750627
Option 2 ID : 264330750629
Option 3 ID : 264330750628
Option 4 ID : 264330750626
Status : Answered
Chosen Option : 3

Q.6 Who has been appointed as the Executive Director of Reserve Bank of India in October 2023?

- Ans
- 1. Rabi N. Mishra
 - 2. Janak Raj
 - 3. Mridul Kumar Sagar
 - 4. Muneesh Kapur

Question ID : 264330191929
Option 1 ID : 264330751073
Option 2 ID : 264330751072
Option 3 ID : 264330751071
Option 4 ID : 264330751070
Status : Not Answered
Chosen Option : --

Q.7 The unemployment rate is calculated as the ratio of:

- Ans
- 1. Employed workers to the labour force
 - 2. Unemployed workers to the labour force
 - 3. Total population to the labour force
 - 4. Unemployed workers to the total population

Question ID : 264330190874
Option 1 ID : 264330746853
Option 2 ID : 264330746851
Option 3 ID : 264330746852
Option 4 ID : 264330746850
Status : Not Answered
Chosen Option : --

Q.8 Which Indian has been recognized on the Carnegie Corporation of New York's annual "Great Immigrants" list in June, 2023?

- Ans
- 1. Sam Pitroda
 - 2. Salman Rushdie
 - 3. Vikram Doraiswami
 - 4. Ajay Banga

Question ID : 264330188634
Option 1 ID : 264330738339
Option 2 ID : 264330738340
Option 3 ID : 264330738341
Option 4 ID : 264330738338
Status : Not Answered
Chosen Option : --

Q.9 Mendeleev's Periodic Law was modified, and _____ was adopted as the basis of the Modern Periodic Table.

- Ans
- 1. Atomic mass
 - 2. Similar properties
 - 3. Atomic number
 - 4. Molar mass

Question ID : 264330190632
Option 1 ID : 264330746110
Option 2 ID : 264330746113
Option 3 ID : 264330746111
Option 4 ID : 264330746112
Status : Not Answered
Chosen Option : --

Q.10 On 8 April, 1929, Bhagat Singh and B.K. Dutt threw a bomb in the _____. The aim of the event as their leaflet explained, was not to kill but "to make the deaf hear".

- Ans
- 1. Central Legislative Assembly
 - 2. Central Legislative Council
 - 3. State Legislative Assembly
 - 4. Central Executive Assembly

Question ID : 264330191437
Option 1 ID : 264330749104
Option 2 ID : 264330749103
Option 3 ID : 264330749102
Option 4 ID : 264330749105
Status : Not Answered
Chosen Option : --

Q.11 As of November 2023, how many Fundamental Duties are in the Constitution of India?

- Ans
- 1. 11
 - 2. 8
 - 3. 10
 - 4. 9

Question ID : 264330191480
Option 1 ID : 264330749277
Option 2 ID : 264330749274
Option 3 ID : 264330749276
Option 4 ID : 264330749275
Status : Answered
Chosen Option : 1

Q.12 Which sport is played by the Indian sportsperson Sandeep Kumar?

- Ans
- 1. Cricket
 - 2. Boxing
 - 3. Archery
 - 4. Wrestling

Question ID : 264330191224
Option 1 ID : 264330748253
Option 2 ID : 264330748251
Option 3 ID : 264330748250
Option 4 ID : 264330748252
Status : Answered
Chosen Option : 3

Q.13 Which of the following festival is celebrated by Khamtis tribe of Arunachal Pradesh?

- Ans
- 1. Tam ladu
 - 2. Sangken
 - 3. Mopin
 - 4. Reh

Question ID : 264330191031
Option 1 ID : 264330747479
Option 2 ID : 264330747480
Option 3 ID : 264330747481
Option 4 ID : 264330747478
Status : Answered
Chosen Option : 3

Q.14 What is the rank of India in terms of the World's area among the countries of the world?

- Ans
- 1. 7th
 - 2. 6th
 - 3. 8th
 - 4. 5th

Question ID : 264330192014
Option 1 ID : 264330751412
Option 2 ID : 264330751411
Option 3 ID : 264330751413
Option 4 ID : 264330751410
Status : Answered
Chosen Option : 1

Q.15 Which state's government launched Gruha Lakshmi Scheme 2023?

- Ans
- 1. Kerala
 - 2. Tamil Nadu
 - 3. Haryana
 - 4. Telangana

Question ID : 264330192028
Option 1 ID : 264330751469
Option 2 ID : 264330751468
Option 3 ID : 264330751467
Option 4 ID : 264330751466
Status : Not Answered
Chosen Option : --

Q.16 The Attorney-General for India shall hold office during the pleasure of the _____.

- Ans
- 1. Prime Minister
 - 2. Law Minister of India
 - 3. President of India
 - 4. Chief Justice of India

Question ID : 264330191040
Option 1 ID : 264330747515
Option 2 ID : 264330747517
Option 3 ID : 264330747514
Option 4 ID : 264330747516
Status : Answered
Chosen Option : 3

Q.17

Varahamihira's work Panchasiddhantika deals with _____ astronomical systems.

- Ans
- 1. Three
 - 2. Four
 - 3. Five
 - 4. Two

Question ID : 264330191236
Option 1 ID : 264330748299
Option 2 ID : 264330748300
Option 3 ID : 264330748301
Option 4 ID : 264330748298
Status : Not Answered
Chosen Option : --

Q.18 According to Ministry of Commerce & Industry, during the financial year April 2022 – January 2023, the agricultural exports have amounted to USD _____ billion.

- Ans**
- 1. 23.37
 - 2. 43.37
 - 3. 13.37
 - 4. 33.37

Question ID : **264330188691**
Option 1 ID : **264330738567**
Option 2 ID : **264330738569**
Option 3 ID : **264330738566**
Option 4 ID : **264330738568**
Status : **Not Answered**
Chosen Option : --

Q.19 Which sport is the Durand cup is associated with?

- Ans**
- 1. Badminton
 - 2. Hockey
 - 3. Football
 - 4. Cricket

Question ID : **264330190881**
Option 1 ID : **264330746879**
Option 2 ID : **264330746878**
Option 3 ID : **264330746881**
Option 4 ID : **264330746880**
Status : **Answered**
Chosen Option : 2

Q.20 _____, which belongs to Kerala in southern India, takes its name from the mythic enchantress Mohini.

- Ans**
- 1. Mohiniattam
 - 2. Bihu Dance
 - 3. Manipuri Dance
 - 4. Bharatanatyam

Question ID : **264330191811**
Option 1 ID : **264330750600**
Option 2 ID : **264330750601**
Option 3 ID : **264330750599**
Option 4 ID : **264330750598**
Status : **Answered**
Chosen Option : 1

Q.1 The Least Common Multiple of three different numbers is 120. Which of the following cannot be their Highest Common Factor?

- Ans**
- 1. 15
 - 2. 40
 - 3. 20
 - 4. 16

Question ID : 264330188615
Option 1 ID : 264330738264
Option 2 ID : 264330738263
Option 3 ID : 264330738262
Option 4 ID : 264330738265
Status : Answered
Chosen Option : 4

Q.2 Find a single discount equivalent to two successive discounts of 15% and 10%.

- Ans**
- 1. 21.8%
 - 2. 23.5%
 - 3. 22.5%
 - 4. 24.5%

Question ID : 264330188521
Option 1 ID : 264330737888
Option 2 ID : 264330737887
Option 3 ID : 264330737886
Option 4 ID : 264330737889
Status : Answered
Chosen Option : 2

Q.3 Marked price and selling price of an article are Rs. 2450 and Rs. 1960 respectively. What is the discount percentage?

- Ans**
- 1. 20 percent
 - 2. 25 percent
 - 3. 15 percent
 - 4. 24 percent

Question ID : 264330188622
Option 1 ID : 264330738292
Option 2 ID : 264330738293
Option 3 ID : 264330738290
Option 4 ID : 264330738291
Status : Answered
Chosen Option : 1

Q.4 Find the numbers if the HCF of two numbers is 47 and their sum is 188.

- Ans
- 1. 141 and 138
 - 2. 47 and 141
 - 3. 215 and 211
 - 4. 47 and 51

Question ID : 264330191670
Option 1 ID : 264330750036
Option 2 ID : 264330750035
Option 3 ID : 264330750037
Option 4 ID : 264330750034
Status : Answered
Chosen Option : 2

Q.5 Mohan and Rohan undertook a work for Rs. 3300. Mohan alone can do that work in 10 days and Rohan alone can do the same work in 12 days. If they work together, then what will be the difference in the amount they receive?

- Ans
- 1. Rs. 300
 - 2. Rs. 370
 - 3. Rs. 350
 - 4. Rs. 400

Question ID : 264330187876
Option 1 ID : 264330735433
Option 2 ID : 264330735434
Option 3 ID : 264330735432
Option 4 ID : 264330735435
Status : Answered
Chosen Option : 1

Q.6 Income of L is 30 percent more than the income of M and income of M is 20 percent more than the income of N. The income of N is (approximately) how much percentage less than the income of L?

- Ans
- 1. 36 percent
 - 2. 39 percent
 - 3. 32 percent
 - 4. 44 percent

Question ID : 264330187586
Option 1 ID : 264330734275
Option 2 ID : 264330734274
Option 3 ID : 264330734273
Option 4 ID : 264330734272
Status : Answered
Chosen Option : 1

Q.7 A sum becomes Rs. 1320 in 2 years and Rs. 1380 in 3 years at simple interest. What is the annual rate of interest?

- Ans
- 1. 4 percent
 - 2. 5 percent
 - 3. 10 percent
 - 4. 8 percent

Question ID : 264330187873
Option 1 ID : 264330735422
Option 2 ID : 264330735420
Option 3 ID : 264330735423
Option 4 ID : 264330735421
Status : Not Answered
Chosen Option : --

Q.8 What is the value of $750 - 350 \div 7 + 43 \times 5$?

- Ans
- 1. 812
 - 2. 915
 - 3. 935
 - 4. 795

Question ID : 264330187679
Option 1 ID : 264330734645
Option 2 ID : 264330734646
Option 3 ID : 264330734647
Option 4 ID : 264330734644
Status : Answered
Chosen Option : 2

Q.9 A man covers half part of a certain distance at 45 km/hr. He covers 40 percent of remaining distance at the speed of 8 km/hr and covers rest of the distance at the speed of 24 km/hr. What is his average speed for the entire journey?

- Ans
- 1. $164/7$ km/hr
 - 2. $144/7$ km/hr
 - 3. $156/7$ km/hr
 - 4. $128/7$ km/hr

Question ID : 264330187535
Option 1 ID : 264330734071
Option 2 ID : 264330734068
Option 3 ID : 264330734069
Option 4 ID : 264330734070
Status : Not Answered
Chosen Option : --

Q.10 The average of 25 numbers is 150. One more number is added and the new average became 160. What is that new number?

- Ans**
- 1. 400
 - 2. 410
 - 3. 415
 - 4. 420

Question ID : 264330187943
Option 1 ID : 264330735703
Option 2 ID : 264330735702
Option 3 ID : 264330735700
Option 4 ID : 264330735701
Status : Answered
Chosen Option : 2

Q.11 A principal is lent at a certain rate of compound interest (compounding annually). The amount at the end of 1 years is Rs. 1150 and at the end of 2 years is Rs. 1322.5. What is the principal?

- Ans**
- 1. Rs. 1450
 - 2. Rs. 1600
 - 3. Rs. 1750
 - 4. Rs. 1000

Question ID : 264330188587
Option 1 ID : 264330738150
Option 2 ID : 264330738151
Option 3 ID : 264330738152
Option 4 ID : 264330738153
Status : Not Answered
Chosen Option : --

Q.12 Find the LCM of 18, 24, and 36.

- Ans**
- 1. 24
 - 2. 36
 - 3. 64
 - 4. 72

Question ID : 264330191170
Option 1 ID : 264330748034
Option 2 ID : 264330748035
Option 3 ID : 264330748036
Option 4 ID : 264330748037
Status : Answered
Chosen Option : 4

Q.13 If A1 is 19 times more than A2, then A2 is what percentage less than A1?

- Ans
- 1. 85 percent
 - 2. 105 percent
 - 3. 100 percent
 - 4. 95 percent

Question ID : 264330187565
Option 1 ID : 264330734188
Option 2 ID : 264330734190
Option 3 ID : 264330734191
Option 4 ID : 264330734189
Status : Answered
Chosen Option : 4

Q.14 If the cost price of an article is $\frac{5}{8}$ of its selling price, then what is the profit percentage?

- Ans
- 1. 45 percent
 - 2. 75 percent
 - 3. 30 percent
 - 4. 60 percent

Question ID : 264330187947
Option 1 ID : 264330735717
Option 2 ID : 264330735719
Option 3 ID : 264330735716
Option 4 ID : 264330735718
Status : Answered
Chosen Option : 4

Q.15 C alone can complete a work in 50 days and D alone can complete the same work in half of the time taken by C. In how many days will both together complete $\frac{3}{10}$ part of the total work?

- Ans
- 1. 6.5 days
 - 2. 5 days
 - 3. 6 days
 - 4. 4 days

Question ID : 264330187717
Option 1 ID : 264330734796
Option 2 ID : 264330734798
Option 3 ID : 264330734797
Option 4 ID : 264330734799
Status : Answered
Chosen Option : 2

Q.16 A merchant marks the price of his article 40 percent above the cost price. He gives some discount on it and earns a profit of 10 percent. What is the discount percentage?

- Ans**
- 1. 14.28 percent
 - 2. 25 percent
 - 3. 21.42 percent
 - 4. 20 percent

Question ID : 264330187810
Option 1 ID : 264330735169
Option 2 ID : 264330735168
Option 3 ID : 264330735170
Option 4 ID : 264330735171
Status : Answered
Chosen Option : 3

Q.17 Height of a cone is 24 cm and radius of its base is 10.5 cm. What is the volume of the cone?

- Ans**
- 1. 2772 cm³
 - 2. 2546 cm³
 - 3. 2398 cm³
 - 4. 2984 cm³

Question ID : 264330187498
Option 1 ID : 264330733923
Option 2 ID : 264330733921
Option 3 ID : 264330733920
Option 4 ID : 264330733922
Status : Answered
Chosen Option : 1

Q.18 Rs. 7400 is divided among A, B and C in the ratio of 9 : 12 : 16 respectively. What is the share of B?

- Ans**
- 1. Rs. 2400
 - 2. Rs. 1800
 - 3. Rs. 9200
 - 4. Rs. 2600

Question ID : 264330187871
Option 1 ID : 264330735414
Option 2 ID : 264330735415
Option 3 ID : 264330735412
Option 4 ID : 264330735413
Status : Answered
Chosen Option : 1

Q.19 Average of 28 observations is 53. Average of first 11 observations is 54. Average of last 18 observations is 52.5. What is the value of 11th observation?

- Ans**
- 1. 59
 - 2. 63
 - 3. 57
 - 4. 55

Question ID : 264330188557
Option 1 ID : 264330738031
Option 2 ID : 264330738030
Option 3 ID : 264330738033
Option 4 ID : 264330738032
Status : Answered
Chosen Option : 4

Q.20 The ratio of two numbers is 3 : 5. If their product is 3375, then what is the sum of both the numbers?

- Ans**
- 1. 75
 - 2. 120
 - 3. 90
 - 4. 135

Question ID : 264330187952
Option 1 ID : 264330735739
Option 2 ID : 264330735737
Option 3 ID : 264330735736
Option 4 ID : 264330735738
Status : Answered
Chosen Option : 2

Section : Part-D-English

Q.1 In the following question, out of the given four alternatives, select the alternative which best expresses the meaning of the Idiom/Phrase.

On the ball

- Ans**
- 1. To be very excited or joyful
 - 2. Alert and aware about something
 - 3. On a new journey
 - 4. On the contrary

Question ID : 264330186102
Option 1 ID : 264330728681
Option 2 ID : 264330728682
Option 3 ID : 264330728683
Option 4 ID : 264330728680
Status : Not Answered
Chosen Option : --

Q.2 Improve the underlined part of the sentence. Choose 'No improvement' as an answer if the sentence is grammatically correct.

An ant can carry up to 50 times it's body weight.

- Ans**
- 1. times its'
 - 2. times its
 - 3. No improvement
 - 4. time it's

Question ID : 264330185817

Option 1 ID : 264330727597

Option 2 ID : 264330727598

Option 3 ID : 264330727599

Option 4 ID : 264330727596

Status : Answered

Chosen Option : 2

Q.3 Find the part of the given sentence that has an error in it. If there is no error, choose 'No error'.

Sham is trying to study hardest for his upcoming exams.

- Ans**
- 1. to study hardest for
 - 2. No error
 - 3. Sham is trying
 - 4. his upcoming exams

Question ID : 264330186655

Option 1 ID : 264330730789

Option 2 ID : 264330730791

Option 3 ID : 264330730788

Option 4 ID : 264330730790

Status : Answered

Chosen Option : 1

Q.4 Select the most appropriate antonym of the given word.

Maleficent

- Ans**
- 1. Delightful
 - 2. Obedient
 - 3. Thorough
 - 4. Bad

Question ID : 264330186563

Option 1 ID : 264330730438

Option 2 ID : 264330730436

Option 3 ID : 264330730437

Option 4 ID : 264330730439

Status : Answered

Chosen Option : 4

Q.5 Choose the word that is opposite in meaning to the given word.

Appoint

- Ans 1. Dismiss
 2. Instate
 3. Declare
 4. Avail

Question ID : 264330186605
Option 1 ID : 264330730599
Option 2 ID : 264330730596
Option 3 ID : 264330730597
Option 4 ID : 264330730598
Status : Answered
Chosen Option : 1

Q.6 Select the most appropriate word to fill in the blank.

Religion is _____ matter of indifference to many of today's youth.

- Ans 1. a
 2. No article
 3. an
 4. the

Question ID : 264330185860
Option 1 ID : 264330727760
Option 2 ID : 264330727763
Option 3 ID : 264330727761
Option 4 ID : 264330727762
Status : Answered
Chosen Option : 4

Q.7 Find the part of the given sentence that has an error in it. If there is no error, choose 'No error'.
She works hardly to pay his younger sister's school fee.

- Ans 1. She works hardly
 2. No error
 3. sister's school fee.
 4. to pay his younger

Question ID : 264330185939
Option 1 ID : 264330728060
Option 2 ID : 264330728063
Option 3 ID : 264330728062
Option 4 ID : 264330728061
Status : Answered
Chosen Option : 3

Q.8 Choose the word that means the same as the given word.

Fatigued

- Ans**
- 1. Activated
 - 2. Jaded
 - 3. Beguiled
 - 4. Unwearied

Question ID : 264330186751
 Option 1 ID : 264330731152
 Option 2 ID : 264330731155
 Option 3 ID : 264330731153
 Option 4 ID : 264330731154
 Status : Not Answered
 Chosen Option : --

Q.9 Improve the underlined part of the sentence. Choose 'No improvement' as an answer if the sentence is grammatically correct.

The monkey hung from the tree by its tail.

- Ans**
- 1. by its tails
 - 2. by it's tailed
 - 3. by it's tail
 - 4. No improvement

Question ID : 264330186721
 Option 1 ID : 264330731040
 Option 2 ID : 264330731042
 Option 3 ID : 264330731041
 Option 4 ID : 264330731043
 Status : Answered
 Chosen Option : 4

Q.10 Four sentences are given, out of which three have all correct spellings. Choose the sentence with the incorrect spelt word/ words.

- Ans**
- 1. His hat was laying on the floor—an old black slouch with the top caved in, like a lid.
 - 2. His hair was long and tangled and gressy, and hung down, and you could see his eyes shinning.
 - 3. His face was repulsive in the quickening light.
 - 4. Rosemary dozed for three hours and then lay awake, suspended in the moonshine.

Question ID : 264330186924
 Option 1 ID : 264330731812
 Option 2 ID : 264330731813
 Option 3 ID : 264330731815
 Option 4 ID : 264330731814
 Status : Answered
 Chosen Option : 4

Q.11 The sentence has been divided into three parts, identify the error segment in the sentence given below. Choose no error if there is no error in the sentence.

Before the meeting/ began, he will have already/ left for his lunch break.

- Ans**
- 1. Before the meeting
 - 2. no error
 - 3. began, he will have already
 - 4. left for his lunch break.

Question ID : 264330186404

Option 1 ID : 264330729832

Option 2 ID : 264330729835

Option 3 ID : 264330729833

Option 4 ID : 264330729834

Status : Answered

Chosen Option : 3

Q.12 Select the sentence with no spelling errors.

- Ans**
- 1. Don't feel guilty for feeling disengaged from the news.
 - 2. Don't feel guilty for feeling disengajed from the news.
 - 3. Don't feel guilty for feeling disengaged from the news.
 - 4. Don't feel guilty for feling disengaged from the news.

Question ID : 264330186358

Option 1 ID : 264330729657

Option 2 ID : 264330729659

Option 3 ID : 264330729656

Option 4 ID : 264330729658

Status : Answered

Chosen Option : 1

Q.13 Select the word segment that substitutes (replaces) the bracketed word segment correctly and completes the sentence meaningfully. Select the option 'no correction required' if the sentence is correct as given.

The driver cracked his whip and called to his horses, (and off they swept on their way) to Bukovina.

- Ans**
- 1. No correction required
 - 2. and of they swept on their way
 - 3. and off they swept on there way
 - 4. and off they sweep on their way

Question ID : 264330186804

Option 1 ID : 264330731359

Option 2 ID : 264330731358

Option 3 ID : 264330731357

Option 4 ID : 264330731356

Status : Answered

Chosen Option : 2

Q.14 Choose the most appropriate antonym of the underlined word.

The speech came to an abrupt end when, losing her balance, she fell to the ground and lay there in drunken contentment.

- Ans**
- 1. Gratification
 - 2. Discomfort
 - 3. Complacency
 - 4. Pleasure

Question ID : 264330186270
Option 1 ID : 264330729323
Option 2 ID : 264330729322
Option 3 ID : 264330729320
Option 4 ID : 264330729321
Status : Not Answered
Chosen Option : --

Q.15 Choose the idiom/phrase that can substitute the highlighted group of words meaningfully.

The look in his eyes shocks and scares me a lot.

- Ans**
- 1. In seventh heaven
 - 2. Sixth sense
 - 3. Makes one's blood run cold
 - 4. Sugar rush

Question ID : 264330186314
Option 1 ID : 264330729488
Option 2 ID : 264330729489
Option 3 ID : 264330729490
Option 4 ID : 264330729491
Status : Answered
Chosen Option : 3

Comprehension:

In the given passage, four options are given for each blank. Select the most appropriate option to complete the given passage, which also fits contextually as per the word given in the bracket.

Climate change is a pressing global issue that demands immediate attention and action. The (1. seriousness) _____ of this problem can no longer be denied, as we witness more frequent and severe weather events. It is crucial to (2. discuss) _____ the causes of climate change, which primarily result from human activities such as the burning of fossil fuels, deforestation, and industrial processes. To combat climate change, we must reduce our carbon (3. impression) _____ by transitioning to renewable energy sources, conserving forests, and adopting sustainable practices in (4. whole) _____ the sectors of the economy. Additionally, individual actions, such as reducing energy consumption and supporting environmentally-friendly policies, play a vital role in addressing this global crisis. As the consequences of climate change become more evident, it is imperative that we (5. joint efforts) _____ as a society to protect our planet for future generations.

SubQuestion No : 16

Q.16 Fill in the blank (1) with the appropriate word from the options below:

- Ans
- 1. complexity
 - 2. absurdity
 - 3. gravity
 - 4. amenity

Question ID : 264330186389
 Option 1 ID : 264330729775
 Option 2 ID : 264330729773
 Option 3 ID : 264330729772
 Option 4 ID : 264330729774
 Status : Answered
 Chosen Option : 1

Comprehension:

In the given passage, four options are given for each blank. Select the most appropriate option to complete the given passage, which also fits contextually as per the word given in the bracket.

Climate change is a pressing global issue that demands immediate attention and action. The (1. seriousness) _____ of this problem can no longer be denied, as we witness more frequent and severe weather events. It is crucial to (2. discuss) _____ the causes of climate change, which primarily result from human activities such as the burning of fossil fuels, deforestation, and industrial processes. To combat climate change, we must reduce our carbon (3. impression) _____ by transitioning to renewable energy sources, conserving forests, and adopting sustainable practices in (4. whole) _____ the sectors of the economy. Additionally, individual actions, such as reducing energy consumption and supporting environmentally-friendly policies, play a vital role in addressing this global crisis. As the consequences of climate change become more evident, it is imperative that we (5. joint efforts) _____ as a society to protect our planet for future generations.

SubQuestion No : 17

Q.17 Fill in the blank (2) with the appropriate word from the options below:

- Ans
- 1. evade
 - 2. elaborate
 - 3. address
 - 4. overlook

Question ID : 264330186390
 Option 1 ID : 264330729777
 Option 2 ID : 264330729778
 Option 3 ID : 264330729776
 Option 4 ID : 264330729779
 Status : Answered
 Chosen Option : 2

Comprehension:

In the given passage, four options are given for each blank. Select the most appropriate option to complete the given passage, which also fits contextually as per the word given in the bracket.

Climate change is a pressing global issue that demands immediate attention and action. The (1. seriousness) _____ of this problem can no longer be denied, as we witness more frequent and severe weather events. It is crucial to (2. discuss) _____ the causes of climate change, which primarily result from human activities such as the burning of fossil fuels, deforestation, and industrial processes. To combat climate change, we must reduce our carbon (3. impression) _____ by transitioning to renewable energy sources, conserving forests, and adopting sustainable practices in (4. whole) _____ the sectors of the economy. Additionally, individual actions, such as reducing energy consumption and supporting environmentally-friendly policies, play a vital role in addressing this global crisis. As the consequences of climate change become more evident, it is imperative that we (5. joint efforts) _____ as a society to protect our planet for future generations.

SubQuestion No : 18

Q.18 Fill in the blank (3) with the appropriate word from the options below:

- Ans
- 1. emission
 - 2. footprint
 - 3. steps
 - 4. di-oxide

Question ID : 264330186391
 Option 1 ID : 264330729783
 Option 2 ID : 264330729780
 Option 3 ID : 264330729781
 Option 4 ID : 264330729782
 Status : Answered
 Chosen Option : 4

Comprehension:

In the given passage, four options are given for each blank. Select the most appropriate option to complete the given passage, which also fits contextually as per the word given in the bracket.

Climate change is a pressing global issue that demands immediate attention and action. The (1. seriousness) _____ of this problem can no longer be denied, as we witness more frequent and severe weather events. It is crucial to (2. discuss) _____ the causes of climate change, which primarily result from human activities such as the burning of fossil fuels, deforestation, and industrial processes. To combat climate change, we must reduce our carbon (3. impression) _____ by transitioning to renewable energy sources, conserving forests, and adopting sustainable practices in (4. whole) _____ the sectors of the economy. Additionally, individual actions, such as reducing energy consumption and supporting environmentally-friendly policies, play a vital role in addressing this global crisis. As the consequences of climate change become more evident, it is imperative that we (5. joint efforts) _____ as a society to protect our planet for future generations.

SubQuestion No : 19

Q.19 Fill in the blank (4) with the appropriate word from the options below:

- Ans
- 1. all
 - 2. every
 - 3. some
 - 4. any

Question ID : 264330186392
 Option 1 ID : 264330729784
 Option 2 ID : 264330729785
 Option 3 ID : 264330729786
 Option 4 ID : 264330729787
 Status : Answered
 Chosen Option : 1

Comprehension:

In the given passage, four options are given for each blank. Select the most appropriate option to complete the given passage, which also fits contextually as per the word given in the bracket.

Climate change is a pressing global issue that demands immediate attention and action. The (1. seriousness) _____ of this problem can no longer be denied, as we witness more frequent and severe weather events. It is crucial to (2. discuss) _____ the causes of climate change, which primarily result from human activities such as the burning of fossil fuels, deforestation, and industrial processes. To combat climate change, we must reduce our carbon (3. impression) _____ by transitioning to renewable energy sources, conserving forests, and adopting sustainable practices in (4. whole) _____ the sectors of the economy. Additionally, individual actions, such as reducing energy consumption and supporting environmentally-friendly policies, play a vital role in addressing this global crisis. As the consequences of climate change become more evident, it is imperative that we (5. joint efforts) _____ as a society to protect our planet for future generations.

SubQuestion No : 20

Q.20 Fill in the blank (5) with the appropriate word from the options below:

- Ans
- 1. colonize
 - 2. congregate
 - 3. collaborate
 - 4. commemorate

Question ID : 264330186393

Option 1 ID : 264330729791

Option 2 ID : 264330729789

Option 3 ID : 264330729788

Option 4 ID : 264330729790

Status : Answered

Chosen Option : 2

Section : Part-D-Hindi

Q.1 निम्नलिखित प्रश्न में, चार विकल्पों में से, उस विकल्प का चयन करें जो कोष्ठक में दिए गए शब्द के पर्यायवाची शब्द का सही विकल्प है।
मेरी माताजी ने गरमी में पहनने के लिए मेरे लिए बहुत ही सुंदर (वस्त्र) _____ खरीदा है।

- Ans
- 1. दुकूल
 - 2. कुशेशय
 - 3. भुज
 - 4. कोरक

Question ID : 264330189678

Option 1 ID : 264330742373

Option 2 ID : 264330742370

Option 3 ID : 264330742371

Option 4 ID : 264330742372

Status : Not Answered

Chosen Option : --

Q.2 निम्नलिखित प्रश्न में, चार विकल्पों में से, उस विकल्प का चयन करें जो दिए गए मुहावरे का सही अर्थ वाला विकल्प है।
आपे से बाहर होना

- Ans
- 1. स्वावलंबी होना
 - 2. सामर्थ्य से अधिक क्रोध प्रकट करना
 - 3. बचने का बहाना ढूँढना
 - 4. मूर्खतापूर्ण कार्य करना

Question ID : 264330189829
Option 1 ID : 264330742947
Option 2 ID : 264330742949
Option 3 ID : 264330742948
Option 4 ID : 264330742946
Status : Not Answered
Chosen Option : --

Q.3 दिए गए वाक्य में से गलत वर्तनी ज्ञात कीजिए।

इसके अंतर्गत भिन्न प्रकार के प्रांत आते हैं।

- Ans
- 1. प्रांत
 - 2. अंतर्गत
 - 3. भिन्न
 - 4. प्रकार

Question ID : 264330189160
Option 1 ID : 264330740400
Option 2 ID : 264330740401
Option 3 ID : 264330740398
Option 4 ID : 264330740399
Status : Not Answered
Chosen Option : --

Q.4 दिए गए शब्द का पर्यायवाची ज्ञात कीजिए।

पवन

- Ans
- 1. मंजूरी
 - 2. प्रार्थना
 - 3. अनोखा
 - 4. हवा

Question ID : 264330188131
Option 1 ID : 264330736444
Option 2 ID : 264330736447
Option 3 ID : 264330736445
Option 4 ID : 264330736446
Status : Not Answered
Chosen Option : --

Q.5 दिए गए वाक्य में रेखांकित शब्द के लिए सही वर्तनी ज्ञात कीजिए।

मैहनत कर के जीवन व्यतीत करो।

- Ans
- 1. मोहनत
 - 2. महनत
 - 3. मैहनात
 - 4. मेहनत

Question ID : 264330188263

Option 1 ID : 264330736948

Option 2 ID : 264330736951

Option 3 ID : 264330736950

Option 4 ID : 264330736949

Status : Not Answered

Chosen Option : --

Q.6 दिए गए वाक्य का वह भाग ज्ञात करें, जिसमें कोई त्रुटि है।

उसके पास पचास ग्राम सोने है जिसका हार बनवाना है।

- Ans
- 1. बनवाना है।
 - 2. पचास ग्राम सोने
 - 3. उसके पास
 - 4. है जिसका हार

Question ID : 264330189205

Option 1 ID : 264330740573

Option 2 ID : 264330740571

Option 3 ID : 264330740570

Option 4 ID : 264330740572

Status : Not Answered

Chosen Option : --

Q.7 दिए गए वाक्य में रेखांकित शब्दों के लिए सही शब्दों वाले विकल्प का चयन करें।

तुम्हारी घड़ी में कै बजा है।

- Ans
- 1. तुम्हारी घड़ी में कैसा बजा है।
 - 2. परिवर्तन की आवश्यकता नहीं है।
 - 3. तुम्हारी घड़ी में कितना बजा है।
 - 4. तुम्हारी घड़ी में क्या बजा है।

Question ID : 264330189081

Option 1 ID : 264330740099

Option 2 ID : 264330740101

Option 3 ID : 264330740100

Option 4 ID : 264330740098

Status : Not Answered

Chosen Option : --

Q.8 निम्नलिखित प्रश्न में, चार विकल्पों में से, उस सही विकल्प का चयन करें जो वाक्यांशों के लिए एक शब्द का विकल्प हो।

जिसपर हमला किया गया हो

- Ans
- 1. आक्रांता
 - 2. आक्रांत
 - 3. आत्मघाती
 - 4. आघेय

Question ID : 264330189782

Option 1 ID : 264330742769

Option 2 ID : 264330742767

Option 3 ID : 264330742768

Option 4 ID : 264330742766

Status : Not Answered

Chosen Option : --

Q.9 दिए गए वाक्य में रेखांकित शब्दों के लिए सही शब्दों वाले विकल्प का चयन करें।

आपने ही तो मुझको कहा था।

- Ans
- 1. आपने ही तो मुझमें कहा था।
 - 2. आपने ही तो मुझे कहा था।
 - 3. परिवर्तन की आवश्यकता नहीं है।
 - 4. आपने ही तो मुझ कहा था।

Question ID : 264330189312

Option 1 ID : 264330740979

Option 2 ID : 264330740978

Option 3 ID : 264330740981

Option 4 ID : 264330740980

Status : Not Answered

Chosen Option : --

Q.10 निम्नलिखित प्रश्न में, दिए गए चार विकल्पों में से, उस विकल्प का चयन करें जो दिए गए मुहावरे के अर्थ को सर्वश्रेष्ठ रूप से व्यक्त करता है।

खिलियाँ उड़ाना

- Ans
- 1. उपहास करना
 - 2. हर बात मजाक में लेना
 - 3. खूब हँसना
 - 4. कोई राज की बात खोलना

Question ID : 264330188178

Option 1 ID : 264330736625

Option 2 ID : 264330736627

Option 3 ID : 264330736624

Option 4 ID : 264330736626

Status : Not Answered

Chosen Option : --

Q.11 निम्नलिखित प्रश्न में, चार विकल्पों में से, उस विकल्प का चयन करें जो कोष्ठक में दिए गए शब्द के विलोम शब्द का सही विकल्प है।
क्या वह दूसरों से जुड़ी ऐसी (जटिल) _____ बात को समझने के काबिल है?

- Ans**
- 1. कुटिल
 - 2. मुश्किल
 - 3. सरल
 - 4. कठिन

Question ID : 264330189933
Option 1 ID : 264330743344
Option 2 ID : 264330743345
Option 3 ID : 264330743342
Option 4 ID : 264330743343
Status : Not Answered
Chosen Option : --

Q.12 निम्नलिखित प्रश्न में, चार विकल्पों में से, उस विकल्प का चयन करें जो कोष्ठक में दिए गए शब्द के तद्भव रूप का सही विकल्प है।
मेरी माताजी एक (गृहिणी) _____ हैं वह पूरे घर का बहुत अच्छे से ख्याल रखती हैं।

- Ans**
- 1. जयेष्ट
 - 2. सुंदर महिला
 - 3. घरनी
 - 4. मेहनती

Question ID : 264330190001
Option 1 ID : 264330743604
Option 2 ID : 264330743605
Option 3 ID : 264330743603
Option 4 ID : 264330743602
Status : Not Answered
Chosen Option : --

Q.13 दिए गए शब्द का विलोम शब्द ज्ञात कीजिए।

संगठन

- Ans**
- 1. विघटन
 - 2. समागम
 - 3. संयुक्त
 - 4. विद्युत

Question ID : 264330189974
Option 1 ID : 264330743500
Option 2 ID : 264330743498
Option 3 ID : 264330743499
Option 4 ID : 264330743501
Status : Not Answered
Chosen Option : --

Q.14 दिए गए वाक्य में से निरर्थक शब्द ज्ञात कीजिए।
ताबकि उठाओ और पढ़ना शुरू करो।

- Ans
- 1. उठाओ
 - 2. ताबकि
 - 3. और
 - 4. शुरू

Question ID : 264330190086
Option 1 ID : 264330743926
Option 2 ID : 264330743928
Option 3 ID : 264330743927
Option 4 ID : 264330743929
Status : Not Answered
Chosen Option : --

Q.15 दिए गए वाक्य का वह भाग ज्ञात करें, जिसमें कोई त्रुटि है।
यद्यपि वह पढ़ा लिखा है परन्तु मूर्खता के कार्य करता है।

- Ans
- 1. यद्यपि वह
 - 2. पढ़ा लिखा है
 - 3. कार्य करता है।
 - 4. परन्तु मूर्खता के

Question ID : 264330188996
Option 1 ID : 264330739774
Option 2 ID : 264330739775
Option 3 ID : 264330739777
Option 4 ID : 264330739776
Status : Not Answered
Chosen Option : --

Comprehension:

नीचे दिए गए गद्य में कुछ शब्द छोड़ दिए गए हैं और प्रत्येक रिक्त स्थान के चार विकल्प दिए गए हैं। इन चारों में से कौन सा विकल्प रिक्त स्थान की पूर्ति करेगा-

मोबाइल फोन टेलीविजन या टैबलेट जैसे (1) _____ के स्क्रीन पर बच्चों के ज्यादा समय देने को लेकर हाल के वर्षों में (2) _____ अध्ययन हुए हैं। इनके (3) _____ इस बात का इशारा करते हैं कि (4) _____ स्क्रीन टाइम तंत्रिका संबंधी विकास और आपसी मेलजोल बढ़ाने में (5) _____ बनते हैं।

SubQuestion No : 16

Q.16 रिक्त 1 के लिए सबसे उपयुक्त विकल्प का चयन कीजिए।

Ans

1. भूमि
 2. उपकरणों
 3. कार्यलय
 4. किताबों

Question ID : 264330189167

Option 1 ID : 264330740424

Option 2 ID : 264330740422

Option 3 ID : 264330740425

Option 4 ID : 264330740423

Status : Not Answered

Chosen Option : --

Comprehension:

नीचे दिए गए गद्य में कुछ शब्द छोड़ दिए गए हैं और प्रत्येक रिक्त स्थान के चार विकल्प दिए गए हैं। इन चारों में से कौन सा विकल्प रिक्त स्थान की पूर्ति करेगा-

मोबाइल फोन टेलीविजन या टैबलेट जैसे (1) _____ के स्क्रीन पर बच्चों के ज्यादा समय देने को लेकर हाल के वर्षों में (2) _____ अध्ययन हुए हैं। इनके (3) _____ इस बात का इशारा करते हैं कि (4) _____ स्क्रीन टाइम तंत्रिका संबंधी विकास और आपसी मेलजोल बढ़ाने में (5) _____ बनते हैं।

SubQuestion No : 17

Q.17 रिक्त 2 के लिए सबसे उपयुक्त विकल्प का चयन कीजिए।

Ans

1. कोमल
 2. गतिविधि
 3. व्यापक
 4. दुष्ट

Question ID : 264330189168

Option 1 ID : 264330740426

Option 2 ID : 264330740428

Option 3 ID : 264330740429

Option 4 ID : 264330740427

Status : Not Answered

Chosen Option : --

Comprehension:

नीचे दिए गए गद्य में कुछ शब्द छोड़ दिए गए हैं और प्रत्येक रिक्त स्थान के चार विकल्प दिए गए हैं। इन चारों में से कौन सा विकल्प रिक्त स्थान की पूर्ति करेगा-

मोबाइल फोन टेलीविजन या टैबलेट जैसे (1)_____ के स्क्रीन पर बच्चों के ज्यादा समय देने को लेकर हाल के वर्षों में (2)_____ अध्ययन हुए हैं। इनके (3)_____ इस बात का इशारा करते हैं कि (4)_____ स्क्रीन टाइम तंत्रिका संबंधी विकास और आपसी मेलजोल बढ़ाने में (5)_____ बनते हैं।

SubQuestion No : 18

Q.18 रिक्त 3 के लिए सबसे उपयुक्त विकल्प का चयन कीजिए।

- Ans
- 1. अतिरिक्त
 - 2. निष्कर्ष
 - 3. पैदा
 - 4. स्मार्ट

Question ID : 264330189169

Option 1 ID : 264330740430

Option 2 ID : 264330740431

Option 3 ID : 264330740433

Option 4 ID : 264330740432

Status : Not Answered

Chosen Option : --

Comprehension:

नीचे दिए गए गद्य में कुछ शब्द छोड़ दिए गए हैं और प्रत्येक रिक्त स्थान के चार विकल्प दिए गए हैं। इन चारों में से कौन सा विकल्प रिक्त स्थान की पूर्ति करेगा-

मोबाइल फोन टेलीविजन या टैबलेट जैसे (1)_____ के स्क्रीन पर बच्चों के ज्यादा समय देने को लेकर हाल के वर्षों में (2)_____ अध्ययन हुए हैं। इनके (3)_____ इस बात का इशारा करते हैं कि (4)_____ स्क्रीन टाइम तंत्रिका संबंधी विकास और आपसी मेलजोल बढ़ाने में (5)_____ बनते हैं।

SubQuestion No : 19

Q.19 रिक्त 4 के लिए सबसे उपयुक्त विकल्प का चयन कीजिए।

- Ans
- 1. अत्यधिक
 - 2. स्वास्थ्य
 - 3. इशारा
 - 4. बचपन

Question ID : 264330189170

Option 1 ID : 264330740436

Option 2 ID : 264330740434

Option 3 ID : 264330740437

Option 4 ID : 264330740435

Status : Not Answered

Chosen Option : --

Comprehension:

नीचे दिए गए गद्य में कुछ शब्द छोड़ दिए गए हैं और प्रत्येक रिक्त स्थान के चार विकल्प दिए गए हैं। इन चारों में से कौन सा विकल्प रिक्त स्थान की पूर्ति करेगा-

मोबाइल फोन टेलीविजन या टैबलेट जैसे (1) _____ के स्क्रीन पर बच्चों के ज्यादा समय देने को लेकर हाल के वर्षों में (2) _____ अध्ययन हुए हैं। इनके (3) _____ इस बात का इशारा करते हैं कि (4) _____ स्क्रीन टाइम तंत्रिका संबंधी विकास और आपसी मेलजोल बढ़ाने में (5) _____ बनते हैं।

SubQuestion No : 20

Q.20 रिक्त 5 के लिए सबसे उपयुक्त विकल्प का चयन कीजिए।

- Ans
- 1. छुटकारा
 - 2. हताश
 - 3. बाधक
 - 4. सलाह

Question ID : 264330189171

Option 1 ID : 264330740439

Option 2 ID : 264330740441

Option 3 ID : 264330740438

Option 4 ID : 264330740440

Status : Not Answered

Chosen Option : --