

Constable GD in Central Armed Police Forces CAPFs SSF Rifleman GD in Assam Rifles Examination 2024

Roll Number	
Candidate Name	
Venue Name	
Exam Date	26/02/2024
Exam Time	2:30 PM - 3:30 PM
Subject	Constable GD Examination 2024

Section : Part-A-General Intelligence and Reasoning

Q.1 Select the option that is related to the fifth letter cluster in the same way as the fourth letter cluster is related to the third letter cluster and the second letter cluster is related to the first letter cluster.

NICE : MOHJBDFF :: KIND : JLHJMOCE :: LAZY : ?

- Ans**
- 1. KMZBYAXZ
 - 2. MKBZAYZX
 - 3. KMZBZXAY
 - 4. AYZXMKBZ

Question ID : 264330192271

Option 1 ID : 264330752441

Option 2 ID : 264330752438

Option 3 ID : 264330752439

Option 4 ID : 264330752440

Status : Answered

Chosen Option : 1

Q.2 Three Statements are given followed by two conclusions numbered I and II. Assuming the statements to be true, even if they seem to be at variance with commonly known facts, decide which of the conclusions logically follow(s) from the statements.

Statement I: No land is water.

Statement II: No water is air.

Statement III: No air is forest.

Conclusion I: No land is forest.

Conclusion II: Some air are water.

- Ans**
- 1. Neither conclusion I nor II follows
 - 2. Only conclusion II follows
 - 3. Only conclusion I follows
 - 4. Both conclusions I and II follow

Question ID : 264330190297

Option 1 ID : 264330744773

Option 2 ID : 264330744771

Option 3 ID : 264330744770

Option 4 ID : 264330744772

Status : Answered

Chosen Option : 3

Q.3 In a certain code language, 'FEAR' is coded as 'JJEW'. What is the code for 'FLAI' in that code language?

- Ans**
- 1. JQEY
 - 2. JREZ
 - 3. JQDY
 - 4. JQEZ

Question ID : 264330187064

Option 1 ID : 264330732187

Option 2 ID : 264330732184

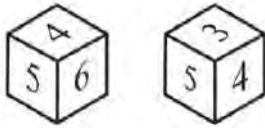
Option 3 ID : 264330732185

Option 4 ID : 264330732186

Status : Answered

Chosen Option : 1

Q.4 Two positions of a dice are given below. What will come on the face opposite to the face containing '3' on it?



- Ans**
- 1. 1
 - 2. 4
 - 3. 6
 - 4. 2

Question ID : 264330190345

Option 1 ID : 264330744964

Option 2 ID : 264330744965

Option 3 ID : 264330744962

Option 4 ID : 264330744963

Status : Answered

Chosen Option : 3

Q.5 In the following question, select the related letter pair from the given alternatives.

TYC : WBF :: ?

- Ans**
- 1. POL : ZXU
 - 2. CDF : FGI
 - 3. LSU : MLL
 - 4. AMV : VMJ

Question ID : 264330187143

Option 1 ID : 264330732501

Option 2 ID : 264330732503

Option 3 ID : 264330732500

Option 4 ID : 264330732502

Status : Answered

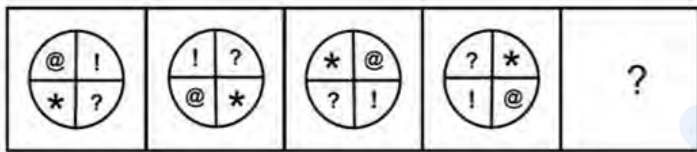
Chosen Option : 2

Q.6 P, Q, R, S, T, U and V are seven friends sitting in a single row facing North. S is to the immediate right of R. T and P are neighbours of U. Q is to the immediate left of R and on second place from left most end. P is at the right most end. Who is sitting on the immediate right of T?

- Ans**
- 1. U
 - 2. Q
 - 3. R
 - 4. P

Question ID : 264330191356
 Option 1 ID : 264330748778
 Option 2 ID : 264330748780
 Option 3 ID : 264330748781
 Option 4 ID : 264330748779
 Status : Answered
 Chosen Option : 1

Q.7 Select the figure that will replace the question mark (?) in the following figure series.



Ans

- 1.
- 2.
- 3.
- 4.

Question ID : 264330192384
 Option 1 ID : 264330752890
 Option 2 ID : 264330752892
 Option 3 ID : 264330752893
 Option 4 ID : 264330752891
 Status : Answered
 Chosen Option : 2

Q.8 Eight athletes Sunil, Abhishek, Mohit, Cheenu, Rahul, Tanu, Koyal and Ankit are sitting around a circular table facing opposite to the centre (not necessarily in the same order). Koyal is third to the left of Rahul. Tanu is third to the right of Cheenu. Mohit is second to the right of Sunil. Abhishek is second to the left of Cheenu. Tanu is second to the left of Sunil. Who is sitting second to the right of Rahul?

- Ans**
- 1. Tanu
 - 2. Abhishek
 - 3. Koyal
 - 4. Ankit

Question ID : 264330190156
Option 1 ID : 264330744209
Option 2 ID : 264330744208
Option 3 ID : 264330744207
Option 4 ID : 264330744206
Status : Answered
Chosen Option : 2

Q.9 Pointing towards a picture of a girl, Raman said, "She is the sister of my mother's husband". How that girl is related to Raman?

- Ans**
- 1. Mother
 - 2. Father's Mother
 - 3. Sister
 - 4. Father's sister

Question ID : 264330190434
Option 1 ID : 264330745320
Option 2 ID : 264330745321
Option 3 ID : 264330745318
Option 4 ID : 264330745319
Status : Answered
Chosen Option : 4

Q.10 After arranging the given words according to dictionary order, which word will come at 'Third' position?

- 1. Sloven
- 2. Slow
- 3. Slough
- 4. Slobber
- 5. Slouch

- Ans**
- 1. Sloven
 - 2. Slouch
 - 3. Slow
 - 4. Slough

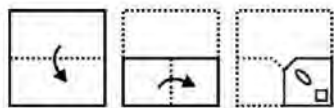
Question ID : 264330187381
Option 1 ID : 264330733455
Option 2 ID : 264330733452
Option 3 ID : 264330733453
Option 4 ID : 264330733454
Status : Answered
Chosen Option : 4

Q.14 In a certain code language, 'CASKM' is coded as '69271', 'CHARM' is coded as '13576', 'CLAOS' is coded as '74682'. What can be the code for 'H' in that code language?

- Ans
- 1. 3
 - 2. 7
 - 3. 6
 - 4. 1

Question ID : 264330191514
 Option 1 ID : 264330749410
 Option 2 ID : 264330749412
 Option 3 ID : 264330749413
 Option 4 ID : 264330749411
 Status : Not Answered
 Chosen Option : --

Q.15 A piece of paper is folded and punched as shown below in the question figures. From the given option figures, indicate how it will appear when opened?



Ans

- 1.
- 2.
- 3.
- 4.

Question ID : 264330190504
 Option 1 ID : 264330745600
 Option 2 ID : 264330745598
 Option 3 ID : 264330745601
 Option 4 ID : 264330745599
 Status : Answered
 Chosen Option : 3

Q.16 In the following question, select the missing number from the given series.

111, 122, 133, ?, 155, 166

- Ans
- 1. 145
 - 2. 143
 - 3. 144
 - 4. 148

Question ID : 264330191559
 Option 1 ID : 264330749592
 Option 2 ID : 264330749590
 Option 3 ID : 264330749591
 Option 4 ID : 264330749593
 Status : Answered
 Chosen Option : 3

Q.17 By Interchanging the given two numbers which of the following equation will be NOT correct?

3 and 5

- Ans
- 1. $7 \times 4 - 5 + 3 = 30$
 - 2. $5 \times 4 + 3 - 2 = 18$
 - 3. $5 - 3 + 6 = 4$
 - 4. $5 + 3 \times 2 - 1 = 12$

Question ID : 264330187112
 Option 1 ID : 264330732377
 Option 2 ID : 264330732376
 Option 3 ID : 264330732378
 Option 4 ID : 264330732379
 Status : Answered
 Chosen Option : 1

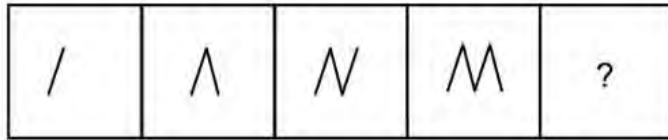
Q.18 A series is given with one term missing. Select the correct alternative from the given ones that will complete the series.

RQ, NO, LK, HI, ?

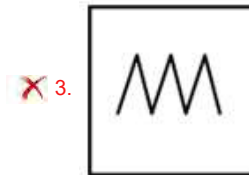
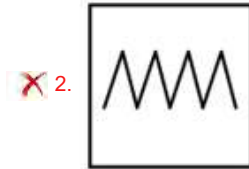
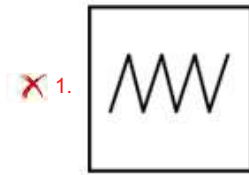
- Ans
- 1. FH
 - 2. FE
 - 3. TQ
 - 4. FX

Question ID : 264330191308
 Option 1 ID : 264330748587
 Option 2 ID : 264330748588
 Option 3 ID : 264330748589
 Option 4 ID : 264330748586
 Status : Answered
 Chosen Option : 2

Q.19 Select the figure that will replace the question mark (?) in the following figure series.



Ans



Question ID : 264330190302

Option 1 ID : 264330744793

Option 2 ID : 264330744791

Option 3 ID : 264330744790

Option 4 ID : 264330744792

Status : Answered

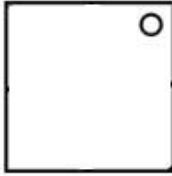
Chosen Option : 4

Q.20 A paper is folded and cut as shown below. How will it appear when unfolded?

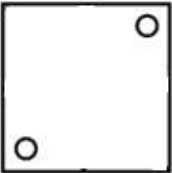


Ans

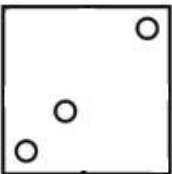
✓ 1.



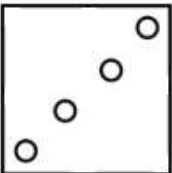
✗ 2.



✗ 3.



✗ 4.



Question ID : 264330192287

Option 1 ID : 264330752502

Option 2 ID : 264330752505

Option 3 ID : 264330752504

Option 4 ID : 264330752503

Status : Answered

Chosen Option : 4

Section : Part-B-General Knowledge and General awareness

Q.1 Which iconic playback singer, known for his mesmerizing voice and classic hits like "Mere Sapno Ki Rani Kab Aayegi Tu," was also a music director and composer?

Ans

✗ 1. Mukesh

✓ 2. Kishore Kumar

✗ 3. Mohammed Rafi

✗ 4. Talat Mahmood

Question ID : 264330190977

Option 1 ID : 264330747264

Option 2 ID : 264330747262

Option 3 ID : 264330747263

Option 4 ID : 264330747265

Status : Not Answered

Chosen Option : --

Q.2 The nineteenth century saw the golden age of _____ under the patronage of Wajid Ali Shah.

- Ans
- 1. Kuchipudi
 - 2. Odissi
 - 3. Manipuri
 - 4. Kathak

Question ID : 264330191431
Option 1 ID : 264330749080
Option 2 ID : 264330749078
Option 3 ID : 264330749081
Option 4 ID : 264330749079
Status : Answered
Chosen Option : 3

Q.3 In _____ 2023, the Union Cabinet of India approved the National Green Hydrogen Mission.

- Ans
- 1. March
 - 2. July
 - 3. June
 - 4. January

Question ID : 264330188672
Option 1 ID : 264330738491
Option 2 ID : 264330738493
Option 3 ID : 264330738492
Option 4 ID : 264330738490
Status : Answered
Chosen Option : 1

Q.4 The Government _____ is a statement of expected receipts and expected expenditures of the Government (for the coming fiscal year) that reveals the budgetary policy of the Government to achieve the twin objective of growth and stability.

- Ans
- 1. Plan
 - 2. Budget
 - 3. Revenue
 - 4. Policy

Question ID : 264330191805
Option 1 ID : 264330750575
Option 2 ID : 264330750576
Option 3 ID : 264330750577
Option 4 ID : 264330750574
Status : Answered
Chosen Option : 2

Q.5 According to the Indian Constitution, the Right to protection of life and personal liberty is a:

- Ans
- 1. Non enforceable rights
 - 2. Fundamental Right of an Individual
 - 3. Directive Principle of state policy
 - 4. Fundamental Duty of State

Question ID : 264330191760
Option 1 ID : 264330750397
Option 2 ID : 264330750395
Option 3 ID : 264330750396
Option 4 ID : 264330750394
Status : Answered
Chosen Option : 2

Q.6 In Volleyball, if the game is tied at _____ in any set (except fifth set), the set continues till one team builds a two-point lead over the other.

- Ans
- 1. 24 – 24
 - 2. 14 – 14
 - 3. 18 – 18
 - 4. 11 – 11

Question ID : 264330190803
Option 1 ID : 264330746568
Option 2 ID : 264330746567
Option 3 ID : 264330746566
Option 4 ID : 264330746569
Status : Not Answered
Chosen Option : --

Q.7 The script used by the Sunga was a variant of Brahmi, and was used to write the _____ language.

- Ans
- 1. Hindi
 - 2. Urdu
 - 3. English
 - 4. Sanskrit

Question ID : 264330191876
Option 1 ID : 264330750859
Option 2 ID : 264330750860
Option 3 ID : 264330750861
Option 4 ID : 264330750858
Status : Answered
Chosen Option : 4

Q.8 In which state of India is the 'Flamingo Festival' organized?

- Ans
- 1. Mizoram
 - 2. Nagaland
 - 3. Andhra Pradesh
 - 4. Sikkim

Question ID : 264330190851
Option 1 ID : 264330746761
Option 2 ID : 264330746758
Option 3 ID : 264330746760
Option 4 ID : 264330746759
Status : Answered
Chosen Option : 2

Q.9 As of October 2023, who among the following is the governor of Odisha?

- Ans
- 1. S.C. Jamir
 - 2. Ganeshi Lal
 - 3. Raghubar Das
 - 4. Hemant Soren

Question ID : 264330191989
Option 1 ID : 264330751313
Option 2 ID : 264330751310
Option 3 ID : 264330751312
Option 4 ID : 264330751311
Status : Not Answered
Chosen Option : --

Q.10 Average density of population in India is _____ persons per square km, according to 2011 census of India.

- Ans
- 1. 342
 - 2. 362
 - 3. 322
 - 4. 382

Question ID : 264330191074
Option 1 ID : 264330747651
Option 2 ID : 264330747652
Option 3 ID : 264330747650
Option 4 ID : 264330747653
Status : Not Answered
Chosen Option : --

Q.11 Which of the following articles of the Indian Constitution mentions abolition or creation of Legislative Councils in States?

- Ans
- 1. Article 165
 - 2. Article 169
 - 3. Article 173
 - 4. Article 161

Question ID : 264330190780
Option 1 ID : 264330746476
Option 2 ID : 264330746475
Option 3 ID : 264330746474
Option 4 ID : 264330746477
Status : Not Answered
Chosen Option : --

Q.12 Which of the following is a 's' block element?

- Ans
- 1. Rubidium
 - 2. Titanium
 - 3. Vanadium
 - 4. Scandium

Question ID : 264330192013
Option 1 ID : 264330751406
Option 2 ID : 264330751409
Option 3 ID : 264330751408
Option 4 ID : 264330751407
Status : Not Answered
Chosen Option : --

Q.13 _____ was the founder of the Widow Remarriage Association (1861)

- Ans
- 1. Mahadev Govind Ranade
 - 2. Keshub Chandra Sen
 - 3. Dr. Atma Ram Pandurang
 - 4. Debendra Nath Tagore

Question ID : 264330191737
Option 1 ID : 264330750302
Option 2 ID : 264330750305
Option 3 ID : 264330750304
Option 4 ID : 264330750303
Status : Not Answered
Chosen Option : --

Q.14 National Nritya Shiromani Award 2022 was won by _____.

- Ans
- 1. Raj Bisaria
 - 2. Anuradha Pandey
 - 3. N. Rajam
 - 4. Aparna Satheesan

Question ID : 264330191279
Option 1 ID : 264330748473
Option 2 ID : 264330748471
Option 3 ID : 264330748472
Option 4 ID : 264330748470
Status : Not Answered
Chosen Option : --

Q.15 The first five year plan of India was based on _____.

- Ans
- 1. Gadgil Yojna
 - 2. Mahalanobis Plan
 - 3. Nehru Model
 - 4. Harrod-Domar Model

Question ID : 264330191986
Option 1 ID : 264330751300
Option 2 ID : 264330751299
Option 3 ID : 264330751301
Option 4 ID : 264330751298
Status : Answered
Chosen Option : 4

Q.16 Who among the following won the ICC U19 Women's T20 World Cup 2023?

- Ans
- 1. Australia
 - 2. New Zealand
 - 3. India
 - 4. England

Question ID : 264330190641
Option 1 ID : 264330746147
Option 2 ID : 264330746146
Option 3 ID : 264330746148
Option 4 ID : 264330746149
Status : Not Answered
Chosen Option : --

Q.17 The MRTP Act of 1969 aimed at:

- Ans
- 1. Encouraging foreign direct investment
 - 2. Promoting monopolies in key industries
 - 3. Regulating and controlling monopolistic and restrictive trade practices
 - 4. Promoting free trade agreements

Question ID : 264330190946
Option 1 ID : 264330747139
Option 2 ID : 264330747138
Option 3 ID : 264330747140
Option 4 ID : 264330747141
Status : Not Answered
Chosen Option : --

Q.18 According to the 2011 census of India, the literacy rate in India is _____ percent.

- Ans
- 1. 54.04
 - 2. 72.99
 - 3. 94.04
 - 4. 62.99

Question ID : 264330190893
Option 1 ID : 264330746928
Option 2 ID : 264330746926
Option 3 ID : 264330746927
Option 4 ID : 264330746929
Status : Answered
Chosen Option : 2

Q.19 Which sport is played by the Indian sportsperson Aruna Mishra?

- Ans
- 1. Table Tennis
 - 2. Boxing
 - 3. Hockey
 - 4. Cricket

Question ID : 264330190841
Option 1 ID : 264330746719
Option 2 ID : 264330746720
Option 3 ID : 264330746718
Option 4 ID : 264330746721
Status : Not Answered
Chosen Option : --

Q.20 Prime Minister Narendra Modi inaugurated the priority section of Delhi-Ghaziabad-Meerut RRTS Corridor at Sahibabad RapidX Station, Uttar Pradesh on October 20, 2023. What does 'T' stand for in RRTS?

- Ans**
- 1. Transform
 - 2. Transit
 - 3. Telecom
 - 4. Traffic

Question ID : 264330188854
Option 1 ID : 264330739219
Option 2 ID : 264330739218
Option 3 ID : 264330739220
Option 4 ID : 264330739221
Status : Not Answered
Chosen Option : --

Section : Part-C-Elementary Mathematics

Q.1 What is the value of $810 \div 5 - 25 \times 13 + 2 \times 12$?

- Ans**
- 1. -139
 - 2. -39
 - 3. -47
 - 4. -147

Question ID : 264330187519
Option 1 ID : 264330734006
Option 2 ID : 264330734005
Option 3 ID : 264330734007
Option 4 ID : 264330734004
Status : Answered
Chosen Option : 1

Q.2 Sneha alone can complete a work in 30 days and Anju alone can complete the same work in 45 days. Anju alone worked for first 15 days and then left the work. In how many days will Sneha alone complete the remaining work?

- Ans**
- 1. 27 days
 - 2. 21 days
 - 3. 28 days
 - 4. 20 days

Question ID : 264330187177
Option 1 ID : 264330732638
Option 2 ID : 264330732636
Option 3 ID : 264330732639
Option 4 ID : 264330732637
Status : Answered
Chosen Option : 4

Q.3 A bicycle was bought for \$120 and sold at a profit of 15%. Find the selling price.

- Ans
- 1. \$142
 - 2. \$138
 - 3. \$111
 - 4. \$127

Question ID : 264330191176
Option 1 ID : 264330748061
Option 2 ID : 264330748058
Option 3 ID : 264330748060
Option 4 ID : 264330748059
Status : Answered
Chosen Option : 2

Q.4 If $4P = 5Q$ and $3Q = 4R$, then what is the value of $P : Q : R$?

- Ans
- 1. 7 : 6 : 2
 - 2. 10 : 8 : 3
 - 3. 5 : 4 : 3
 - 4. 25 : 16 : 10

Question ID : 264330187191
Option 1 ID : 264330732695
Option 2 ID : 264330732692
Option 3 ID : 264330732694
Option 4 ID : 264330732693
Status : Answered
Chosen Option : 3

Q.5 Successive discounts of 15% and 12% are equivalent to a single discount of :

- Ans
- 1. 27%
 - 2. 25.2%
 - 3. 18.5%
 - 4. 20%

Question ID : 264330192298
Option 1 ID : 264330752548
Option 2 ID : 264330752549
Option 3 ID : 264330752546
Option 4 ID : 264330752547
Status : Answered
Chosen Option : 2

Q.6 A sum of Rs. 7000 is invested in a scheme of simple interest. The rate of interest in this scheme is 20 percent per annum. If Rs. 1750 interest is obtained, then for how many months is the sum invested?

- Ans**
- 1. 15 months
 - 2. 24 months
 - 3. 18 months
 - 4. 21 months

Question ID : 264330187693
Option 1 ID : 264330734702
Option 2 ID : 264330734700
Option 3 ID : 264330734703
Option 4 ID : 264330734701
Status : Not Answered
Chosen Option : --

Q.7 A new student having weight 47 kg join a class of 41 students and the average weight of the class reduces by 1.5 kg. What is the new average weight of the class?

- Ans**
- 1. 109 kg
 - 2. 110 kg
 - 3. 107.4 kg
 - 4. 108.5 kg

Question ID : 264330187883
Option 1 ID : 264330735462
Option 2 ID : 264330735463
Option 3 ID : 264330735460
Option 4 ID : 264330735461
Status : Not Answered
Chosen Option : --

Q.8 Average age of a group of 27 boys is 21 years. If a boy leaves the group, then the average age becomes 21.7 years. What is the age of the boy who left the group?

- Ans**
- 1. 2 years
 - 2. 2.5 years
 - 3. 3.4 years
 - 4. 2.8 years

Question ID : 264330188537
Option 1 ID : 264330737953
Option 2 ID : 264330737952
Option 3 ID : 264330737950
Option 4 ID : 264330737951
Status : Not Answered
Chosen Option : --

Q.9 Find the value of $1573 \div 13 \{(12 - 6) + (48 - 53)\}$

- Ans
- 1. 153
 - 2. 121
 - 3. 155
 - 4. 130

Question ID : 264330191669
Option 1 ID : 264330750032
Option 2 ID : 264330750031
Option 3 ID : 264330750030
Option 4 ID : 264330750033
Status : Answered
Chosen Option : 2

Q.10 If 70 percent of $X_1 = (6/7)$ of X_2 , then what is $X_1 : X_2$?

- Ans
- 1. 60 : 49
 - 2. 30 : 7
 - 3. 30 : 49
 - 4. 7 : 30

Question ID : 264330187205
Option 1 ID : 264330732750
Option 2 ID : 264330732749
Option 3 ID : 264330732748
Option 4 ID : 264330732751
Status : Answered
Chosen Option : 1

Q.11 A alone can do a work in 40 days and B alone can do the same work in 60 days. In how many days will they together complete the same work?

- Ans
- 1. 29 days
 - 2. 25 days
 - 3. 32 days
 - 4. 24 days

Question ID : 264330187756
Option 1 ID : 264330734953
Option 2 ID : 264330734955
Option 3 ID : 264330734952
Option 4 ID : 264330734954
Status : Answered
Chosen Option : 4

Q.12 In an exam, Sandeep got 55 percent less marks than the passing marks. He got 223.2 marks. If the passing percentage is 62 percent, then what are the maximum marks of the exam?

- Ans**
- 1. 800
 - 2. 400
 - 3. 200
 - 4. 600

Question ID : 264330187466
Option 1 ID : 264330733793
Option 2 ID : 264330733792
Option 3 ID : 264330733794
Option 4 ID : 264330733795
Status : Answered
Chosen Option : 2

Q.13 If the cost of 5 apples and 8 mangoes is same as the cost of 9 apples and 4 mangoes, then what is the ratio of the price of a mango and the price of an apple?

- Ans**
- 1. 1 : 3
 - 2. 1 : 2
 - 3. 4 : 1
 - 4. 1 : 1

Question ID : 264330187232
Option 1 ID : 264330732857
Option 2 ID : 264330732856
Option 3 ID : 264330732858
Option 4 ID : 264330732859
Status : Not Answered
Chosen Option : --

Q.14 Two trains are moving in the same direction at the speed of 40 km/hr and 90 km/hr, their lengths are 275 metres and 350 metres respectively. What will be the time taken by faster train to cross the slower train?

- Ans**
- 1. 36 seconds
 - 2. 45 seconds
 - 3. 54 seconds
 - 4. 60 seconds

Question ID : 264330188588
Option 1 ID : 264330738154
Option 2 ID : 264330738156
Option 3 ID : 264330738157
Option 4 ID : 264330738155
Status : Not Answered
Chosen Option : --

Q.15 Rs. 20000 is lent at compound interest at an annual rate of 18 percent for 1 year (compounding annually). If the compounding of interest is done half yearly, then how much more interest will be obtained?

- Ans**
- 1. Rs. 150
 - 2. Rs. 190
 - 3. Rs. 142
 - 4. Rs. 162

Question ID : 264330188014
Option 1 ID : 264330735985
Option 2 ID : 264330735984
Option 3 ID : 264330735986
Option 4 ID : 264330735987
Status : Not Answered
Chosen Option : --

Q.16 What is the total surface area of a cylinder having radius of base as 4.2 cm and height as 8 cm?

- Ans**
- 1. 284.92 cm²
 - 2. 322.08 cm²
 - 3. 346.04 cm²
 - 4. 246.58 cm²

Question ID : 264330188018
Option 1 ID : 264330736001
Option 2 ID : 264330736003
Option 3 ID : 264330736002
Option 4 ID : 264330736000
Status : Not Answered
Chosen Option : --

Q.17 Three numbers are in the ratio 3 : 9 : 11 and their HCF is 29. Find the numbers.

- Ans**
- 1. 58, 88, and 319
 - 2. 87, 261, and 319
 - 3. 144, 261, and 320
 - 4. 84, 240, and 300

Question ID : 264330188416
Option 1 ID : 264330737533
Option 2 ID : 264330737532
Option 3 ID : 264330737534
Option 4 ID : 264330737535
Status : Not Answered
Chosen Option : --

Q.18 What is the value of $143 \times 13 \div 11 + 156 \div 13 \times 12 - 210 \times 15 \div 14$?

- Ans
- 1. 178
 - 2. 88
 - 3. 78
 - 4. 168

Question ID : 264330187700
Option 1 ID : 264330734731
Option 2 ID : 264330734730
Option 3 ID : 264330734728
Option 4 ID : 264330734729
Status : Not Answered
Chosen Option : --

Q.19 Ritu sold a camera for ₹24000, earning a profit of 20%. If she wanted to earn a profit of 25%, at what price should she have sold the camera?

- Ans
- 1. Rs. 22000
 - 2. Rs. 27000
 - 3. Rs. 24000
 - 4. Rs. 25000

Question ID : 264330191195
Option 1 ID : 264330748135
Option 2 ID : 264330748137
Option 3 ID : 264330748136
Option 4 ID : 264330748134
Status : Not Answered
Chosen Option : --

Q.20 Dinesh purchases 12 dozens of apples at the rate of Rs. 300 per dozen. He sells each apple at the rate of Rs. 30. What is the profit of Dinesh?

- Ans
- 1. 25 percent
 - 2. 20 percent
 - 3. 15 percent
 - 4. 10 percent

Question ID : 264330188543
Option 1 ID : 264330737975
Option 2 ID : 264330737976
Option 3 ID : 264330737974
Option 4 ID : 264330737977
Status : Answered
Chosen Option : 2

Q.1 Choose the idiom/phrase that can substitute the highlighted group of words meaningfully.

For certain, this is the best pizza in town.

- Ans
- 1. Beyond a shadow of a doubt
 - 2. Through thick and thin
 - 3. Off on the wrong foot
 - 4. Benefit of doubt

Question ID : 264330185935
Option 1 ID : 264330728044
Option 2 ID : 264330728045
Option 3 ID : 264330728046
Option 4 ID : 264330728047
Status : Not Answered
Chosen Option : --

Q.2 Select the most appropriate word to fill in the blank.

Colossal sums have _____ wasted on this project.

- Ans
- 1. being
 - 2. to
 - 3. been
 - 4. be

Question ID : 264330186240
Option 1 ID : 264330729208
Option 2 ID : 264330729211
Option 3 ID : 264330729210
Option 4 ID : 264330729209
Status : Answered
Chosen Option : 3

Q.3 Select the incorrectly spelt word from the given sentence.

More than once in the course of my questionnaire, I have questioned about your love for the country and culture.

- Ans
- 1. questioned
 - 2. questionnaire
 - 3. culture
 - 4. course

Question ID : 264330185999
Option 1 ID : 264330728290
Option 2 ID : 264330728289
Option 3 ID : 264330728291
Option 4 ID : 264330728288
Status : Answered
Chosen Option : 2

Q.4 Select the most appropriate antonym of the given word.

Morose

- Ans
- 1. Cranky
 - 2. Glum
 - 3. Uplifted
 - 4. Gloomy

Question ID : 264330186500
Option 1 ID : 264330730196
Option 2 ID : 264330730199
Option 3 ID : 264330730198
Option 4 ID : 264330730197
Status : Answered
Chosen Option : 3

Q.5 Fill in the blank with the most appropriate option.

I have taken care that the door is locked and the window _____ fastened.

- Ans
- 1. securely
 - 2. safely
 - 3. unfixed
 - 4. deeply

Question ID : 264330186807
Option 1 ID : 264330731370
Option 2 ID : 264330731368
Option 3 ID : 264330731371
Option 4 ID : 264330731369
Status : Answered
Chosen Option : 2

Q.6 Select the sentence with no spelling errors.

- Ans
- 1. We need to strike a balance between creating false alarms and letting any urgent medical matters fall through the cracks.
 - 2. We need to strike a balance between creating false alarms and letting any egent medical matters fall through the cracks.
 - 3. We need to strike a balance between creating false alarms and letting any urgent medical matters fall through the cracks.
 - 4. We need to strike a balance between creating false alarms and leting any urgent medical matters fall through the cracks.

Question ID : 264330185916
Option 1 ID : 264330727975
Option 2 ID : 264330727974
Option 3 ID : 264330727972
Option 4 ID : 264330727973
Status : Answered
Chosen Option : 3

Q.7 Choose the most appropriate antonym of the underlined word.

Davie would be well away, for he would fret about his grandmother, and that would do neither of them any good.

- Ans
- 1. Delight
 - 2. Carp
 - 3. Bother
 - 4. Agonize

Question ID : 264330186795
Option 1 ID : 264330731321
Option 2 ID : 264330731323
Option 3 ID : 264330731322
Option 4 ID : 264330731320
Status : Answered
Chosen Option : 4

Q.8 Find the part of the given sentence that has an error in it. If there is no error, choose 'No error'.

Tracing the origin of horse domestication in the prehistoric era have proven to be an exceedingly difficult task.

- Ans
- 1. No error
 - 2. Tracing the origin of horse domestication
 - 3. to be an exceedingly difficult task.
 - 4. in the prehistoric era have proven

Question ID : 264330186761
Option 1 ID : 264330731195
Option 2 ID : 264330731192
Option 3 ID : 264330731194
Option 4 ID : 264330731193
Status : Answered
Chosen Option : 4

Q.9 Select the most appropriate word to fill in the blank.

_____ she was partly deaf, she was a gifted pianist.

- Ans
- 1. although
 - 2. until
 - 3. because
 - 4. yet

Question ID : 264330186281
Option 1 ID : 264330729367
Option 2 ID : 264330729366
Option 3 ID : 264330729364
Option 4 ID : 264330729365
Status : Answered
Chosen Option : 2

Q.10 Fill in the blank with the most appropriate antonym of the bracketed word.

We've learned that (calmness) spreads faster online than joy.

- Ans
- 1. sweetness
 - 2. rage
 - 3. calamity
 - 4. cumbersome

Question ID : 264330186569
Option 1 ID : 264330730461
Option 2 ID : 264330730460
Option 3 ID : 264330730462
Option 4 ID : 264330730463
Status : Answered
Chosen Option : 2

Q.11 Identify the segment that contains a grammatical error. If there is no error, select 'No error'.

We decided that it would be / too good for you to have / some feminine influence.

- Ans
- 1. No error
 - 2. too good for you to have
 - 3. We decided that it would be
 - 4. some feminine influence.

Question ID : 264330186844
Option 1 ID : 264330731511
Option 2 ID : 264330731509
Option 3 ID : 264330731508
Option 4 ID : 264330731510
Status : Answered
Chosen Option : 2

Q.12 From the options given below choose the synonym (similar meaning) of the word:

Ossified

- Ans
- 1. Harden
 - 2. Amenable
 - 3. Docile
 - 4. Pliant

Question ID : 264330186478
Option 1 ID : 264330730114
Option 2 ID : 264330730113
Option 3 ID : 264330730115
Option 4 ID : 264330730112
Status : Not Answered
Chosen Option : --

Q.13 Select the most appropriate word to fill in the blank.

Napoleon was one of the most capable generals in _____ history.

- Ans
- 1. the
 - 2. an
 - 3. No article
 - 4. a

Question ID : 264330186365
Option 1 ID : 264330729686
Option 2 ID : 264330729685
Option 3 ID : 264330729687
Option 4 ID : 264330729684
Status : Answered
Chosen Option : 4

Q.14 Identify the segment that contains a grammatical error. If there is no error, select 'No error'.

You have never loved me; / you have either heart / nor honourable feeling!

- Ans
- 1. You have never loved me;
 - 2. nor honourable feeling!
 - 3. you have either heart
 - 4. No error

Question ID : 264330186486
Option 1 ID : 264330730144
Option 2 ID : 264330730146
Option 3 ID : 264330730145
Option 4 ID : 264330730147
Status : Answered
Chosen Option : 2

Q.15 In the following question, out of the given four alternatives, select the alternative which best expresses the meaning of the Idiom/Phrase.

To pick/take up the gauntlet

- Ans
- 1. To reduce one's worth
 - 2. To share the responsibility
 - 3. To accept a challenge
 - 4. To take a small task

Question ID : 264330185598
Option 1 ID : 264330726762
Option 2 ID : 264330726760
Option 3 ID : 264330726761
Option 4 ID : 264330726763
Status : Answered
Chosen Option : 4

Comprehension:

In the following passage some words have been deleted. Fill in the blanks with the help of the alternatives given. Select the most appropriate option for each number.

His speech had begun to (1) _____, and he passed abruptly from one subject to (2) _____ Konstantin with the help of Masha (3) _____ him not to go out anywhere, and got him to bed (4) _____ drunk. Masha promised to write to Konstantin in case of need, and to persuade Nikolay Levin to go and (5) _____ with his brother.

SubQuestion No : 16

Q.16 Select the most appropriate option to fill in the blank No. 1.

- Ans**
- 1. falter
 - 2. prompt
 - 3. malfunction
 - 4. default

Question ID : 264330186557

Option 1 ID : 264330730412

Option 2 ID : 264330730415

Option 3 ID : 264330730414

Option 4 ID : 264330730413

Status : Answered

Chosen Option : 1

Comprehension:

In the following passage some words have been deleted. Fill in the blanks with the help of the alternatives given. Select the most appropriate option for each number.

His speech had begun to (1) _____, and he passed abruptly from one subject to (2) _____ Konstantin with the help of Masha (3) _____ him not to go out anywhere, and got him to bed (4) _____ drunk. Masha promised to write to Konstantin in case of need, and to persuade Nikolay Levin to go and (5) _____ with his brother.

SubQuestion No : 17

Q.17 Select the most appropriate option to fill in the blank No. 2.

- Ans**
- 1. on other
 - 2. another
 - 3. one other
 - 4. an other

Question ID : 264330186558

Option 1 ID : 264330730416

Option 2 ID : 264330730417

Option 3 ID : 264330730418

Option 4 ID : 264330730419

Status : Answered

Chosen Option : 2

Comprehension:

In the following passage some words have been deleted. Fill in the blanks with the help of the alternatives given. Select the most appropriate option for each number.

His speech had begun to (1) _____, and he passed abruptly from one subject to (2) _____ Konstantin with the help of Masha (3) _____ him not to go out anywhere, and got him to bed (4) _____ drunk. Masha promised to write to Konstantin in case of need, and to persuade Nikolay Levin to go and (5) _____ with his brother.

SubQuestion No : 18

Q.18 Select the most appropriate option to fill in the blank No. 3.

- Ans
- 1. retreated
 - 2. preached
 - 3. persuaded
 - 4. acrossed

Question ID : 264330186559

Option 1 ID : 264330730421

Option 2 ID : 264330730420

Option 3 ID : 264330730422

Option 4 ID : 264330730423

Status : Answered

Chosen Option : 1

Comprehension:

In the following passage some words have been deleted. Fill in the blanks with the help of the alternatives given. Select the most appropriate option for each number.

His speech had begun to (1) _____, and he passed abruptly from one subject to (2) _____ Konstantin with the help of Masha (3) _____ him not to go out anywhere, and got him to bed (4) _____ drunk. Masha promised to write to Konstantin in case of need, and to persuade Nikolay Levin to go and (5) _____ with his brother.

SubQuestion No : 19

Q.19 Select the most appropriate option to fill in the blank No. 4.

- Ans
- 1. sky
 - 2. desperately
 - 3. floor
 - 4. uniquely

Question ID : 264330186560

Option 1 ID : 264330730427

Option 2 ID : 264330730424

Option 3 ID : 264330730425

Option 4 ID : 264330730426

Status : Answered

Chosen Option : 3

Comprehension:

In the following passage some words have been deleted. Fill in the blanks with the help of the alternatives given. Select the most appropriate option for each number.

His speech had begun to (1) _____, and he passed abruptly from one subject to (2) _____ Konstantin with the help of Masha (3) _____ him not to go out anywhere, and got him to bed (4) _____ drunk. Masha promised to write to Konstantin in case of need, and to persuade Nikolay Levin to go and (5) _____ with his brother.

SubQuestion No : 20

Q.20 Select the most appropriate option to fill in the blank No. 5.

- Ans**
- 1. outside
 - 2. stay
 - 3. inside
 - 4. commerce

Question ID : 264330186561

Option 1 ID : 264330730430

Option 2 ID : 264330730428

Option 3 ID : 264330730431

Option 4 ID : 264330730429

Status : Answered

Chosen Option : 1

Section : Part-D-Hindi

Q.1 निम्नलिखित प्रश्न में, चार विकल्पों में से, उस विकल्प का चयन करें जो दी गई लोकोक्ति का सही अर्थ वाला है।

बीमार की रात पहाड़ बराबर

- Ans**
- 1. मूर्खतापूर्ण कार्य करना
 - 2. डर खत्म होते ही मौज मनाना
 - 3. खराब समय मुश्किल से कटता है
 - 4. गंदी लिखावट

Question ID : 264330189914

Option 1 ID : 264330743272

Option 2 ID : 264330743271

Option 3 ID : 264330743270

Option 4 ID : 264330743273

Status : Not Answered

Chosen Option : --

Q.2 निम्नलिखित वाक्य में, उस वाक्यांश को पहचानिए जिसमें मात्राओं से संबंधित अशुद्धियाँ हैं। यदि कोई गलती नहीं है तो 'कोई त्रुटि नहीं है' का चुनाव कीजिए।
हर व्यक्ति का कुछ महत्वाकांक्षा पर इच्छा/ होती है जैसे जब हम बच्चे थे तो हम कई/ चीजों को देखकर रोमांचित हो उठते थे।

- Ans
- 1. हर व्यक्ति का कुछ महत्वाकांक्षा पर इच्छा
 - 2. कोई त्रुटि नहीं है
 - 3. चीजों को देखकर रोमांचित हो उठते थे
 - 4. होती है जैसे जब हम बच्चे थे तो हम कई

Question ID : 264330188348

Option 1 ID : 264330737272

Option 2 ID : 264330737275

Option 3 ID : 264330737274

Option 4 ID : 264330737273

Status : Not Answered

Chosen Option : --

Q.3 निम्नलिखित प्रश्न में, दिए गए चार विकल्पों में से, उस विकल्प का चयन करें जो दिए गए मुहावरे के अर्थ को सर्वश्रेष्ठ रूप से व्यक्त करता है।

छिपा/छुपा रुस्तम होना

- Ans
- 1. शर्मिला होना
 - 2. देखने में साधारण पर वस्तुतः असाधारण
 - 3. चालक आदमी
 - 4. अपने ही घर में चोरी करना

Question ID : 264330192823

Option 1 ID : 264330754645

Option 2 ID : 264330754642

Option 3 ID : 264330754643

Option 4 ID : 264330754644

Status : Not Answered

Chosen Option : --

Q.4 दिए गए वाक्य में उचित पर्यायवाची शब्द का चयन करके रिक्त स्थान की पूर्ति करें।

यह संसार एक _____ (माया) है।

- Ans
- 1. छल
 - 2. खून
 - 3. सुरक्षा
 - 4. जड़

Question ID : 264330189343

Option 1 ID : 264330741097

Option 2 ID : 264330741095

Option 3 ID : 264330741096

Option 4 ID : 264330741094

Status : Not Answered

Chosen Option : --

Q.5 निम्नलिखित प्रश्न में, चार विकल्पों में से, उस सही विकल्प का चयन करें जो वाक्यांश के लिए एक शब्द का विकल्प हो।

जो सबके मन की बात जानता हो

- Ans 1. अनागत
 2. अंतर्दामी
 3. अनार्य
 4. अनभिज्ञ

Question ID : 264330189845

Option 1 ID : 264330743009

Option 2 ID : 264330743008

Option 3 ID : 264330743007

Option 4 ID : 264330743006

Status : Not Answered

Chosen Option : --

Q.6 दिए गए वाक्य में रेखांकित शब्द के लिए सही वर्तनी ज्ञात कीजिए।

भव्या लाल रँग की शर्ट ढूँढ़ रही है।

- Ans 1. रग
 2. रग
 3. रंग
 4. रगं

Question ID : 264330189075

Option 1 ID : 264330740075

Option 2 ID : 264330740076

Option 3 ID : 264330740074

Option 4 ID : 264330740077

Status : Not Answered

Chosen Option : --

Q.7 दिए गए वाक्य में रेखांकित शब्द का विलोम शब्द ज्ञात कीजिए।

वह बेसब्री से आपका इंतजार कर रहा है।

- Ans 1. सब्र
 2. सहज
 3. तीव्रता
 4. बेस्वाद

Question ID : 264330189239

Option 1 ID : 264330740700

Option 2 ID : 264330740698

Option 3 ID : 264330740701

Option 4 ID : 264330740699

Status : Not Answered

Chosen Option : --

Q.8 दिए गए वाक्यांश के लिए सार्थक शब्द ज्ञात कीजिए।

जिसकी पत्नी मर गई हो

- Ans
- 1. दुराचारी
 - 2. अभागा
 - 3. विधवा
 - 4. विधुर

Question ID : 264330190055

Option 1 ID : 264330743809

Option 2 ID : 264330743807

Option 3 ID : 264330743806

Option 4 ID : 264330743808

Status : Not Answered

Chosen Option : --

Q.9 निम्नलिखित प्रश्न में, चार विकल्पों में से, उस विकल्प का चयन करें जो कोष्ठक में दिए गए शब्द के तद्भव रूप का सही विकल्प है।
मेरे मन की (विधा) _____ कोई भी नहीं समझता है।

- Ans
- 1. विशेषता
 - 2. कड़वाहट
 - 3. व्यथा
 - 4. जलन

Question ID : 264330189854

Option 1 ID : 264330743042

Option 2 ID : 264330743044

Option 3 ID : 264330743045

Option 4 ID : 264330743043

Status : Not Answered

Chosen Option : --

Q.10 दिए गए वाक्य का वह भाग ज्ञात करें, जिसमें कोई त्रुटि है।

मेरे को जब कुछ याद आएगा तभी मैं तुम्हें कुछ बता पाऊँगा।

- Ans
- 1. तभी मैं तुम्हें
 - 2. कुछ याद आएगा
 - 3. कुछ बना पाऊँगा।
 - 4. मेरे को जब

Question ID : 264330189961

Option 1 ID : 264330743452

Option 2 ID : 264330743451

Option 3 ID : 264330743453

Option 4 ID : 264330743450

Status : Not Answered

Chosen Option : --

Q.11 निम्नलिखित प्रश्न में, चार विकल्पों में से, उस विकल्प का चयन करें जो कोष्ठक में दिए गए शब्द के विलोम शब्द का सही विकल्प है।
कई कवियों ने इस महान भूमि की (निंदा) _____ के गीत गाए हैं।

- Ans
- 1. कुत्सा
 - 2. भर्त्सना
 - 3. बुराई
 - 4. प्रशंसा

Question ID : 264330189912
Option 1 ID : 264330743265
Option 2 ID : 264330743262
Option 3 ID : 264330743263
Option 4 ID : 264330743264
Status : Not Answered
Chosen Option : --

Q.12 दिए गए वाक्य में उचित पर्यायवाची शब्द का चयन करके रिक्त स्थान की पूर्ति करें।
_____ (खाली) स्थान भरीए।

- Ans
- 1. सैना
 - 2. नस
 - 3. सुगम
 - 4. रिक्त

Question ID : 264330188300
Option 1 ID : 264330737090
Option 2 ID : 264330737091
Option 3 ID : 264330737088
Option 4 ID : 264330737089
Status : Not Answered
Chosen Option : --

Q.13 निम्नलिखित प्रश्न में, चार विकल्पों में से, उस विकल्प का चयन करें जो रिक्त स्थान के लिए सही स्त्रीलिंग रूप वाला विकल्प हो।
सभी को ईश्वर की _____ करनी चाहिए।

- Ans
- 1. अग्नि
 - 2. देखरेख
 - 3. शक्ति
 - 4. भक्ति

Question ID : 264330189983
Option 1 ID : 264330743535
Option 2 ID : 264330743537
Option 3 ID : 264330743536
Option 4 ID : 264330743534
Status : Not Answered
Chosen Option : --

Q.14 निम्नलिखित प्रश्न में, चार विकल्पों में से, उस सही विकल्प का चयन करें जो वाक्यांशों के लिए एक शब्द का विकल्प हो।
जो किसी भी गुट में नहीं हो

- Ans
- 1. तटस्थ
 - 2. तल्लीन
 - 3. तटवर्ती
 - 4. तस्कर

Question ID : 264330189677
Option 1 ID : 264330742368
Option 2 ID : 264330742367
Option 3 ID : 264330742366
Option 4 ID : 264330742369
Status : Not Answered
Chosen Option : --

Q.15 निम्नलिखित प्रश्न में, चार विकल्पों में से, उस विकल्प का चयन करें जो कोष्ठक में दिए गए शब्द के तत्सम रूप का सही विकल्प है।
जब हम गाँव जाते हैं तब हम वहाँ (खाट) _____ पर ही सोते हैं।

- Ans
- 1. खर्जू
 - 2. खर्पर
 - 3. खंडगृह
 - 4. खटवा

Question ID : 264330189708
Option 1 ID : 264330742487
Option 2 ID : 264330742489
Option 3 ID : 264330742486
Option 4 ID : 264330742488
Status : Not Answered
Chosen Option : --

Comprehension:

नीचे दिए गए गद्य में कुछ शब्द छोड़ दिए गए हैं और प्रत्येक रिक्त स्थान के चार विकल्प दिए गए हैं। इन चारों में से कौन सा विकल्प रिक्त स्थान की पूर्ति करेगा-

साक्षरता तो एक (1)_____ है जिसमें कच्चे आटे को तपा कर ज्ञान का हलवा निकला जाता है। यह ज्ञान अगर पूर्ण है तो सतत (2)_____ और उन्नति का मार्ग खोल देता है। अगर यह अपूर्ण रह जाए तो मनुष्य को (3)_____ बना देता है। अपूर्ण ज्ञान कलिंग (4)_____ के विष से भी ज्यादा प्राणघातक माना जाता है। ठीक वैसे ही जैसे (5)_____ को भेदने के लिए अभिमन्यु उसमें घुस जरूर गया परंतु उससे बाहर नहीं आ पाया।

SubQuestion No : 16

Q.16 रिक्त 1 के लिए सबसे उपयुक्त विकल्प का चयन कीजिए।

- Ans
- 1. शरीर
 - 2. प्रश्न
 - 3. प्रकोप
 - 4. कड़ाही

Question ID : 264330188229
Option 1 ID : 264330736816
Option 2 ID : 264330736818
Option 3 ID : 264330736819
Option 4 ID : 264330736817
Status : Not Answered
Chosen Option : --

Comprehension:

नीचे दिए गए गद्य में कुछ शब्द छोड़ दिए गए हैं और प्रत्येक रिक्त स्थान के चार विकल्प दिए गए हैं। इन चारों में से कौन सा विकल्प रिक्त स्थान की पूर्ति करेगा-

साक्षरता तो एक (1)_____ है जिसमें कच्चे आटे को तपा कर ज्ञान का हलवा निकला जाता है। यह ज्ञान अगर पूर्ण है तो सतत (2)_____ और उन्नति का मार्ग खोल देता है। अगर यह अपूर्ण रह जाए तो मनुष्य को (3)_____ बना देता है। अपूर्ण ज्ञान कलिंग (4)_____ के विष से भी ज्यादा प्राणघातक माना जाता है। ठीक वैसे ही जैसे (5)_____ को भेदने के लिए अभिमन्यु उसमें घुस जरूर गया परंतु उससे बाहर नहीं आ पाया।

SubQuestion No : 17

Q.17 रिक्त 2 के लिए सबसे उपयुक्त विकल्प का चयन कीजिए।

- Ans
- 1. दयाहीन
 - 2. विकास
 - 3. कमज़ोर
 - 4. बल

Question ID : 264330188230

Option 1 ID : 264330736821

Option 2 ID : 264330736820

Option 3 ID : 264330736822

Option 4 ID : 264330736823

Status : Not Answered

Chosen Option : --

Comprehension:

नीचे दिए गए गद्य में कुछ शब्द छोड़ दिए गए हैं और प्रत्येक रिक्त स्थान के चार विकल्प दिए गए हैं। इन चारों में से कौन सा विकल्प रिक्त स्थान की पूर्ति करेगा-

साक्षरता तो एक (1)_____ है जिसमें कच्चे आटे को तपा कर ज्ञान का हलवा निकला जाता है। यह ज्ञान अगर पूर्ण है तो सतत (2)_____ और उन्नति का मार्ग खोल देता है। अगर यह अपूर्ण रह जाए तो मनुष्य को (3)_____ बना देता है। अपूर्ण ज्ञान कलिंग (4)_____ के विष से भी ज्यादा प्राणघातक माना जाता है। ठीक वैसे ही जैसे (5)_____ को भेदने के लिए अभिमन्यु उसमें घुस जरूर गया परंतु उससे बाहर नहीं आ पाया।

SubQuestion No : 18

Q.18 रिक्त 3 के लिए सबसे उपयुक्त विकल्प का चयन कीजिए।

- Ans
- 1. बलवान
 - 2. योग्य
 - 3. पंगु
 - 4. बलवती

Question ID : 264330188231

Option 1 ID : 264330736824

Option 2 ID : 264330736826

Option 3 ID : 264330736827

Option 4 ID : 264330736825

Status : Not Answered

Chosen Option : --

Comprehension:

नीचे दिए गए गद्य में कुछ शब्द छोड़ दिए गए हैं और प्रत्येक रिक्त स्थान के चार विकल्प दिए गए हैं। इन चारों में से कौन सा विकल्प रिक्त स्थान की पूर्ति करेगा-

साक्षरता तो एक (1)_____ है जिसमें कच्चे आटे को तपा कर ज्ञान का हलवा निकला जाता है। यह ज्ञान अगर पूर्ण है तो सतत (2)_____ और उन्नति का मार्ग खोल देता है। अगर यह अपूर्ण रह जाए तो मनुष्य को (3)_____ बना देता है। अपूर्ण ज्ञान कलिंग (4)_____ के विष से भी ज्यादा प्राणघातक माना जाता है। ठीक वैसे ही जैसे (5)_____ को भेदने के लिए अभिमन्यु उसमें घुस जरूर गया परंतु उससे बाहर नहीं आ पाया।

SubQuestion No : 19

Q.19 रिक्त 4 के लिए सबसे उपयुक्त विकल्प का चयन कीजिए।

- Ans
- 1. गाय
 - 2. सगुण
 - 3. सर्प
 - 4. साध्य

Question ID : 264330188232

Option 1 ID : 264330736830

Option 2 ID : 264330736829

Option 3 ID : 264330736831

Option 4 ID : 264330736828

Status : Not Answered

Chosen Option : --

Comprehension:

नीचे दिए गए गद्य में कुछ शब्द छोड़ दिए गए हैं और प्रत्येक रिक्त स्थान के चार विकल्प दिए गए हैं। इन चारों में से कौन सा विकल्प रिक्त स्थान की पूर्ति करेगा-

साक्षरता तो एक (1)_____ है जिसमें कच्चे आटे को तपा कर ज्ञान का हलवा निकला जाता है। यह ज्ञान अगर पूर्ण है तो सतत (2)_____ और उन्नति का मार्ग खोल देता है। अगर यह अपूर्ण रह जाए तो मनुष्य को (3)_____ बना देता है। अपूर्ण ज्ञान कलिंग (4)_____ के विष से भी ज्यादा प्राणघातक माना जाता है। ठीक वैसे ही जैसे (5)_____ को भेदने के लिए अभिमन्यु उसमें घुस जरूर गया परंतु उससे बाहर नहीं आ पाया।

SubQuestion No : 20

Q.20 रिक्त 5 के लिए सबसे उपयुक्त विकल्प का चयन कीजिए।

- Ans
- 1. चक्रधारी
 - 2. चक्रव्यूह
 - 3. चक्रवर्ती
 - 4. चक्र

Question ID : 264330188233

Option 1 ID : 264330736833

Option 2 ID : 264330736834

Option 3 ID : 264330736835

Option 4 ID : 264330736832

Status : Not Answered

Chosen Option : --