

**Constable GD in Central Armed Police Forces CAPFs SSF Rifleman GD in Assam
Rifles Examination 2024**

Roll Number	
Candidate Name	
Venue Name	
Exam Date	26/02/2024
Exam Time	5:00 PM - 6:00 PM
Subject	Constable GD Examination 2024

Section : Part-A-General Intelligence and Reasoning

Q.1 Which two numbers should be interchanged to make the given equation correct?

$$18 \times 3 - 2 + 4 + 7 = 59$$

- Ans
- 1. 7 and 3
 - 2. 18 and 4
 - 3. 3 and 2
 - 4. 2 and 4

Question ID : 264330190721
Option 1 ID : 264330746316
Option 2 ID : 264330746314
Option 3 ID : 264330746317
Option 4 ID : 264330746315

Status : Answered

Chosen Option : 4

Q.2 In a certain code language, 'STOP' is coded as 'VXRT'. What is the code for 'WALK' in that code language?

- Ans
- 1. ZFOO
 - 2. ZEEO
 - 3.
 - 4. ZEOP

Question ID : 264330191333
Option 1 ID : 264330748686
Option 2 ID : 264330748689
Option 3 ID : 264330748687
Option 4 ID : 264330748688

Status : Answered

Chosen Option : 2

Q.3 Which of the following numbers will replace the question mark (?) in the given series?

176, 188, 200, 212, ?, 236

- Ans
- 1. 210
 - 2. 232
 - 3. 224
 - 4. 242

Question ID : 264330191579

Option 1 ID : 264330749671

Option 2 ID : 264330749673

Option 3 ID : 264330749672

Option 4 ID : 264330749670

Status : Answered

Chosen Option : 3

Q.4 Eight persons from Reena, Kavita, Raman, Umesh, Rohit, Vikas, Monika and Priya sit around a square table such that two persons sit in each of the sides. All the persons are sitting facing the centre of the table. Reena sits on the immediate right of Rohit and they both sit on the same side. Monika faces the one who is second to the left of Kavita. Monika is sitting fourth to the right of Reena. Two persons sit between Vikas and Umesh (when counted from one side only) and Umesh is adjacent to Rohit. Only one person sits between Monika and Raman (when counted from one side only). Who is sitting second to the left of Umesh?

- Ans
- 1. Vikas
 - 2. Raman
 - 3. Reena
 - 4. Monika

Question ID : 264330190116

Option 1 ID : 264330744046

Option 2 ID : 264330744048

Option 3 ID : 264330744047

Option 4 ID : 264330744049

Status : Answered

Chosen Option : 1

Q.5 If 'K × L' means 'K is the son of L'.
If 'K + L' means 'K is the daughter of L'.
If 'K ÷ L' means 'K is the sister of L'.
If 'K - L' means 'K is the wife of L'.
How is P related to M in the expression 'M ÷ N × O - P' ?

- Ans
- 1. Son
 - 2. Husband
 - 3. Father
 - 4. Brother

Question ID : 264330190294

Option 1 ID : 264330744760

Option 2 ID : 264330744761

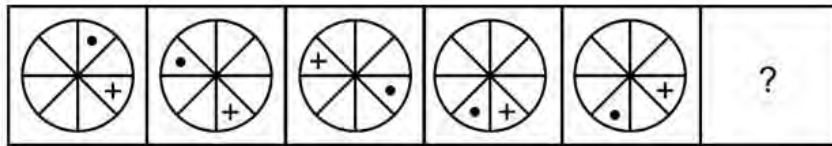
Option 3 ID : 264330744758

Option 4 ID : 264330744759

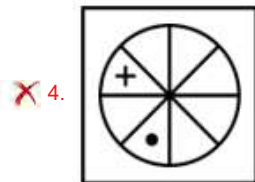
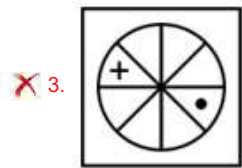
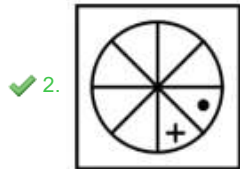
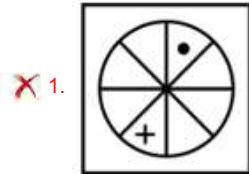
Status : Answered

Chosen Option : 1

Q.6 Select the figure that will replace the question mark (?) in the following figure series.



Ans



Question ID : 264330192344
 Option 1 ID : 264330752731
 Option 2 ID : 264330752732
 Option 3 ID : 264330752733
 Option 4 ID : 264330752730
 Status : Answered
 Chosen Option : 3

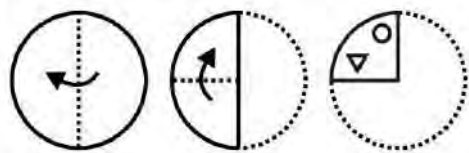
Q.7 Which one set of letters when sequentially placed at the gaps in the given letter series shall complete it?

pq_s_ _rsp_rspq

- Ans
- ✗ 1. pqrp
 - ✓ 2. rpqq
 - ✗ 3. rprr
 - ✗ 4. rrpq


Question ID : 264330191569
 Option 1 ID : 264330749632
 Option 2 ID : 264330749631
 Option 3 ID : 264330749630
 Option 4 ID : 264330749633
 Status : Answered
 Chosen Option : 2

Q.8 A piece of paper is folded and punched as shown below in the question figures. From the given option figures, indicate how it will appear when opened?




Ans


✗ 1.



✗ 2.



✓ 3.



✗ 4.



Question ID : 264330192065

Option 1 ID : 264330751614

Option 2 ID : 264330751616

Option 3 ID : 264330751617

Option 4 ID : 264330751615

Status : Answered

Chosen Option : 3

Q.9 Arrange the following words in alphabetical order:

1. CELEBRATE
2. CELESTIAL
3. CELLO
4. CELEBRITY
5. CELLULOID

- Ans**
- 1. 1, 2, 3, 4, 5
 - 2. 1, 4, 5, 2, 3
 - 3. 1, 4, 2, 3, 5
 - 4. 1, 4, 3, 2, 5

Question ID : 264330192090

Option 1 ID : 264330751716

Option 2 ID : 264330751715

Option 3 ID : 264330751714

Option 4 ID : 264330751717




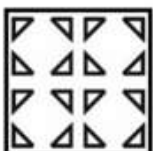
Status : Answered

Chosen Option : 3

Q.10 A piece of paper is folded and punched as shown below in the question figures, indicate how it will appear when opened?



Ans

- 1. 
- 2. 
- 3. 
- 4. 

Question ID : 264330190264

Option 1 ID : 264330744639

Option 2 ID : 264330744640

Option 3 ID : 264330744638

Option 4 ID : 264330744641

Status : Answered

Chosen Option : 1

Q.11 Which of the following numbers will replace the question mark (?) in the given series?

21, 15, 9, 3, -3, ?

Ans 1. -9

2. -6

3. 6

4. 9

Question ID : 264330192160

Option 1 ID : 264330751996

Option 2 ID : 264330751995

Option 3 ID : 264330751994

Option 4 ID : 264330751997

Status : Answered

Chosen Option : 1

Q.12 In the following question, select the related letter pair from the given alternatives.

BO : DR :: ?

Ans 1. AI : DV

2. FS : HV

3. OT : OJ

4. CZ : UX

Question ID : 264330190531

Option 1 ID : 264330745707

Option 2 ID : 264330745706

Option 3 ID : 264330745709

Option 4 ID : 264330745708

Status : Answered

Chosen Option : 2

Q.13 A series is given with one term missing. Select the correct alternative from the given ones that will complete the series.

AQM, CSO, EUQ, GWS, ?

Ans 1. IWV

2. JKU

3. JWU

4. IYU

Question ID : 264330190547

Option 1 ID : 264330745770

Option 2 ID : 264330745772

Option 3 ID : 264330745773

Option 4 ID : 264330745771

Status : Answered

Chosen Option : 4

Q.14 Select the option that is related to the third word in the same way as the second word is related to the first word.

Tiger : Cub :: Elephant : ?

- Ans**
- 1. Foal
 - 2. Calf
 - 3. Puppy
 - 4. Lamb

Question ID : 264330191571

Option 1 ID : 264330749638

Option 2 ID : 264330749639

Option 3 ID : 264330749640

Option 4 ID : 264330749641

Status : Answered

Chosen Option : 1

Q.15 Three Statements are given followed by two conclusions numbered I and II. Assuming the statements to be true, even if they seem to be at variance with commonly known facts, decide which of the conclusions logically follow(s) from the statements.

Statement I: All reptiles are amphibians.

Statement II: Some amphibians are frogs.

Statement III: Some frogs are turtles.

Conclusion I: Some amphibians are not reptiles.

Conclusion II: Some turtles are amphibians.

- Ans**
- 1. Only conclusion II follows
 - 2. Neither conclusion I nor II follows
 - 3. Only conclusion I follows
 - 4. Both conclusions I and II follow

Question ID : 264330192098

Option 1 ID : 264330751747

Option 2 ID : 264330751749

Option 3 ID : 264330751746

Option 4 ID : 264330751748

Status : Answered

Chosen Option : 1

Q.16 In a certain code language, 'JUMPS' is coded as '72196', 'MASKS' is coded as '16315', 'PUTE' is coded as '2849'. What can be the code for 'K' in that code language?

- Ans**
- 1. 1
 - 2. 4
 - 3. 6
 - 4. 3

Question ID : 264330187405

Option 1 ID : 264330733548

Option 2 ID : 264330733551

Option 3 ID : 264330733549

Option 4 ID : 264330733550

Status : Answered

Chosen Option : 1

Q.17 Six people R, S, T, U, V, and W are sitting on a circular table facing outward. V is to the immediate left of T. Only one person sits between T and R. R is not sitting next to V. Only S is in between R and U. Who is sitting to the immediate left of R?

- Ans**
- 1. S
 - 2. W
 - 3. V
 - 4. U

Question ID : 264330191115
Option 1 ID : 264330747817
Option 2 ID : 264330747816
Option 3 ID : 264330747814
Option 4 ID : 264330747815
Status : Answered
Chosen Option : 3

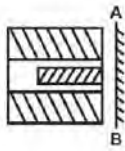
Q.18 Which two signs should be interchanged to make the given equation correct?

$$18 \times 3 + 15 \div 4 - 44 = 22$$

- Ans**
- 1. \times and $-$
 - 2. \times and $+$
 - 3. $+$ and \div
 - 4. \times and \div

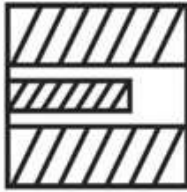
Question ID : 264330192321
Option 1 ID : 264330752639
Option 2 ID : 264330752638
Option 3 ID : 264330752641
Option 4 ID : 264330752640
Status : Answered
Chosen Option : 4

Q.19 If a mirror is placed on the line AB, then out of the option figures which figure will be the right image of the question figure?

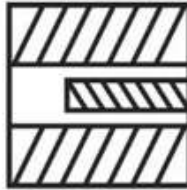


Ans

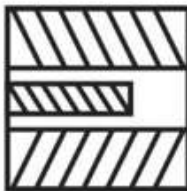
1.



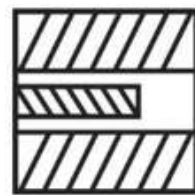
2.



3.



4.



Question ID : 264330190506

Option 1 ID : 264330745608

Option 2 ID : 264330745606

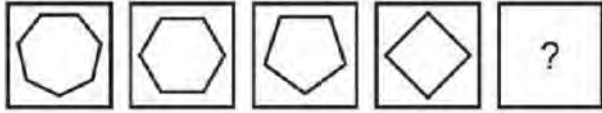
Option 3 ID : 264330745609

Option 4 ID : 264330745607

Status : Answered


Chosen Option : 4

Q.20 In the following question, select the figure which can be placed at the sign of question mark (?) from the given alternatives.



Ans

✗ 1.



✓ 2.



✗ 3.



✗ 4.



Question ID : 264330191383

Option 1 ID : 264330748887

Option 2 ID : 264330748889

Option 3 ID : 264330748886

Option 4 ID : 264330748888

Status : Answered

Chosen Option : 1

Section : Part-B-General Knowledge and General awareness

Q.1 Which of the following text is a main source for the study of the technique and grammar of body movement in Bharatnatyam dance?

Ans

✗ 1. Sangeet natak

✗ 2. Nrityasaurabh

✗ 3. Natya yoga

✓ 4. Abhinaya darpana

Question ID : 264330190650

Option 1 ID : 264330746182

Option 2 ID : 264330746183

Option 3 ID : 264330746185

Option 4 ID : 264330746184

Status : Answered

Chosen Option : 1

Q.2 Based on the Saxena Committee's recommendations, in _____, the Ministry of Rural Development under the government of India launched the Socio-Economic and Caste Census (SECC).

- Ans
- 1. 2014
 - 2. 2005
 - 3. 2009
 - 4. 2011

Question ID : 264330188739
Option 1 ID : 264330738761
Option 2 ID : 264330738758
Option 3 ID : 264330738759
Option 4 ID : 264330738760
Status : Answered
Chosen Option : 3

Q.3 In which month is the harvest festival Lohri celebrated?

- Ans
- 1. January
 - 2. October
 - 3. March
 - 4. December

Question ID : 264330191212
Option 1 ID : 264330748203
Option 2 ID : 264330748204
Option 3 ID : 264330748202
Option 4 ID : 264330748205
Status : Answered
Chosen Option : 2

Q.4 James Augustus Hickey is also known as father of _____.

- Ans
- 1. Indian Television
 - 2. Indian media
 - 3. Photography
 - 4. Indian Journalism

Question ID : 264330191917
Option 1 ID : 264330751024
Option 2 ID : 264330751022
Option 3 ID : 264330751025
Option 4 ID : 264330751023
Status : Answered
Chosen Option : 3

Q.5 Who is famous for playing the musical instrument shehnai?

- Ans
- 1. N Ramani
 - 2. Ali Ahmad Hussain
 - 3. Rajaratanam Pillai
 - 4. Hari Prasad Chaurasia

Question ID : 264330191478
Option 1 ID : 264330749267
Option 2 ID : 264330749269
Option 3 ID : 264330749268
Option 4 ID : 264330749266
Status : Answered
Chosen Option : 2

Q.6 Washing soda, sodium carbonate decahydrate, efflorescent crystals used for washing, especially textiles, is a compound of _____.

- Ans
- 1. carbon
 - 2. oxygen
 - 3. hydrogen
 - 4. sodium

Question ID : 264330190892
Option 1 ID : 264330746922
Option 2 ID : 264330746925
Option 3 ID : 264330746923
Option 4 ID : 264330746924
Status : Answered
Chosen Option : 4

Q.7 Which state is connected to the Bastar Dussehra festival?

- Ans
- 1. Chhattisgarh
 - 2. West Bengal
 - 3. Punjab
 - 4. Uttar Pradesh

Question ID : 264330190918
Option 1 ID : 264330747027
Option 2 ID : 264330747026
Option 3 ID : 264330747029
Option 4 ID : 264330747028
Status : Answered
Chosen Option : 2

Q.8 Which five year plan's objective is 'establishment of a self-reliant and self-generating economy'?

- Ans 1. Fifth
 2. Third
 3. Sixth
 4. First

Question ID : 264330191247
Option 1 ID : 264330748344
Option 2 ID : 264330748343
Option 3 ID : 264330748345
Option 4 ID : 264330748342
Status : Answered
Chosen Option : 1

Q.9 The first Indian to win the All England Badminton Championship in 1980 _____.

- Ans 1. Kiran Bedi
 2. Sachin Tendulkar
 3. Dhyan Chand
 4. Prakash Padukone

Question ID : 264330191883
Option 1 ID : 264330750886
Option 2 ID : 264330750889
Option 3 ID : 264330750887
Option 4 ID : 264330750888
Status : Answered
Chosen Option : 4

Q.10 Who has been crowned Femina Miss India World 2023?

- Ans 1. Nandini Gupta
 2. Thounaojam Strela Luwang
 3. Zarin Daruwala
 4. Shikha Sharma

Question ID : 264330190789
Option 1 ID : 264330746512
Option 2 ID : 264330746513
Option 3 ID : 264330746510
Option 4 ID : 264330746511
Status : Answered
Chosen Option : 4

Q.11 India beat _____ in the final of the Asian Kabaddi Championship 2023 at the Dong-Eul Institute of Technology

Seokdang Cultural center in Busan, Republic of Korea, in July 2023

- Ans
- 1. China
 - 2. Pakistan
 - 3. Iran
 - 4. Afghanistan

Question ID : 264330191849
Option 1 ID : 264330750753
Option 2 ID : 264330750750
Option 3 ID : 264330750752
Option 4 ID : 264330750751
Status : Answered
Chosen Option : 2

Q.12 When calculating Net National Product (NNP), what is deducted from Gross National Product (GNP)?

- Ans
- 1. Subsidies
 - 2. Indirect taxes
 - 3. Personal income
 - 4. Depreciation

Question ID : 264330190864
Option 1 ID : 264330746810
Option 2 ID : 264330746812
Option 3 ID : 264330746811
Option 4 ID : 264330746813
Status : Answered
Chosen Option : 3

Q.13 What is the minimum age to become a member of Rajya Sabha?

- Ans
- 1. 25
 - 2. 30
 - 3. 35
 - 4. 40

Question ID : 264330190840
Option 1 ID : 264330746714
Option 2 ID : 264330746715
Option 3 ID : 264330746716
Option 4 ID : 264330746717
Status : Answered
Chosen Option : 1

Q.14 How many major theories have been established on the origin of iron in India?

- Ans
- 1. Five
 - 2. Four
 - 3. Three
 - 4. Two

Question ID : 264330191936
Option 1 ID : 264330751098
Option 2 ID : 264330751099
Option 3 ID : 264330751100
Option 4 ID : 264330751101
Status : Answered
Chosen Option : 2

Q.15 The National Dental Commission Bill, 2023 introduced by _____ ministry.

- Ans
- 1. Finance
 - 2. Health and Family Welfare
 - 3. Commerce and Industry
 - 4. Social Justice and Empowerment

Question ID : 264330191808
Option 1 ID : 264330750587
Option 2 ID : 264330750589
Option 3 ID : 264330750586
Option 4 ID : 264330750588
Status : Answered
Chosen Option : 1

Q.16 The establishment of the Industrial Development Bank of India (IDBI) in 1964 was a significant step toward:

- Ans
- 1. Supporting agricultural cooperatives
 - 2. Promoting heavy industries
 - 3. Encouraging small-scale industries
 - 4. Providing housing loans

Question ID : 264330190985
Option 1 ID : 264330747297
Option 2 ID : 264330747296
Option 3 ID : 264330747294
Option 4 ID : 264330747295
Status : Answered
Chosen Option : 3

Q.17 Which Hockey team was the winner of first Men Hockey world cup in 1971?

- Ans
- 1. England
 - 2. Pakistan
 - 3. India
 - 4. Spain

Question ID : 264330191924
Option 1 ID : 264330751052
Option 2 ID : 264330751051
Option 3 ID : 264330751050
Option 4 ID : 264330751053
Status : Answered
Chosen Option : 1

Q.18 As of 2023, when was the last fundamental duty added to Article 51 A?

- Ans
- 1. 2000
 - 2. 2022
 - 3. 2002
 - 4. 2012

Question ID : 264330191500
Option 1 ID : 264330749357
Option 2 ID : 264330749355
Option 3 ID : 264330749354
Option 4 ID : 264330749356
Status : Answered
Chosen Option : 4

Q.19 Which of the following countries shares longest land border with India?

- Ans
- 1. Bangladesh
 - 2. China
 - 3. Nepal
 - 4. Pakistan

Question ID : 264330188818
Option 1 ID : 264330739076
Option 2 ID : 264330739074
Option 3 ID : 264330739077
Option 4 ID : 264330739075
Status : Answered
Chosen Option : 2

Q.20 Which sport is played by the Indian sportsperson Vikas Krishan Yadav?

- Ans
- 1. Tennis
 - 2. Hockey
 - 3. Boxing
 - 4. Badminton

Question ID : 264330191223
Option 1 ID : 264330748246
Option 2 ID : 264330748249
Option 3 ID : 264330748247
Option 4 ID : 264330748248
Status : Answered
Chosen Option : 1

Section : Part-C-Elementary Mathematics

Q.1 E, F and G together can complete a work in 20 days. E and F together can complete the same work in 50 days. G alone can finish the same work in how many days?

- Ans
- 1. 35 days
 - 2. $100/3$ days
 - 3. 32 days
 - 4. $110/3$ days

Question ID : 264330187176
Option 1 ID : 264330732635
Option 2 ID : 264330732632
Option 3 ID : 264330732634
Option 4 ID : 264330732633
Status : Answered
Chosen Option : 4

Q.2 The present population of a town is 91260. It increases every year at the rate of 30 percent. What was the population of the town 2 years ago?

- Ans
- 1. 65000
 - 2. 60000
 - 3. 54000
 - 4. 70200

Question ID : 264330188579
Option 1 ID : 264330738119
Option 2 ID : 264330738120
Option 3 ID : 264330738118
Option 4 ID : 264330738121
Status : Answered
Chosen Option : 2

Q.3 A is thrice as fast as B and B is twice as fast as C. If the journey is covered by C in 66 minutes, then find the time taken by A.

- Ans**
- 1. 15 minutes
 - 2. 14 minutes
 - 3. 11 minutes
 - 4. 10 minutes

Question ID : 264330191684
Option 1 ID : 264330750092
Option 2 ID : 264330750090
Option 3 ID : 264330750091
Option 4 ID : 264330750093
Status : Answered
Chosen Option : 3

Q.4 Two numbers are in the ratio of 8 : 9. If the sum of the two numbers is 102, then what is the difference between the two numbers?

- Ans**
- 1. 9
 - 2. 17
 - 3. 8
 - 4. 6

Question ID : 264330187931
Option 1 ID : 264330735654
Option 2 ID : 264330735655
Option 3 ID : 264330735653
Option 4 ID : 264330735652
Status : Answered
Chosen Option : 3

Q.5 What is the value of $\frac{81}{13} \div \left(\frac{176}{16} - \frac{98}{49} \right) \times \frac{2197}{169}$?

- Ans**
- 1. 117
 - 2. 9
 - 3. 13
 - 4. 81

Question ID : 264330187220
Option 1 ID : 264330732811
Option 2 ID : 264330732808
Option 3 ID : 264330732809
Option 4 ID : 264330732810
Status : Answered
Chosen Option : 3

Q.6 What is the value of $14 \times 8 + 42 \times 9 - 111 \div 3$?

- Ans
- 1. 463
 - 2. 443
 - 3. 433
 - 4. 453

Question ID : 264330187879
Option 1 ID : 264330735447
Option 2 ID : 264330735445
Option 3 ID : 264330735444
Option 4 ID : 264330735446
Status : Answered
Chosen Option : 1

Q.7 X alone can complete a work in 20 days and Y alone can complete the same work in 50 days. They start the work together but after 5 days X leaves the work. How much time will Y take to finish the remaining work?

- Ans
- 1. 37 days
 - 2. 36 days
 - 3. 32.5 days
 - 4. 35 days

Question ID : 264330187677
Option 1 ID : 264330734639
Option 2 ID : 264330734638
Option 3 ID : 264330734637
Option 4 ID : 264330734636
Status : Answered
Chosen Option : 2

Q.8 The compound interest (compounding half yearly) received on Rs. 24000 for 2 years is Rs. 25766.4. What is the rate of interest per annum?

- Ans
- 1. 60 percent
 - 2. 20 percent
 - 3. 40 percent
 - 4. 55 percent

Question ID : 264330187234
Option 1 ID : 264330732866
Option 2 ID : 264330732867
Option 3 ID : 264330732865
Option 4 ID : 264330732864
Status : Answered
Chosen Option : 3

Q.9 There are 17 consecutive odd numbers. If the average of first 11 numbers is X, then what is the average of last 6 numbers?

- Ans
- 1. $X + 15$
 - 2. $X + 13$
 - 3. $X + 12$
 - 4. $X + 17$

Question ID : 264330187763
Option 1 ID : 264330734982
Option 2 ID : 264330734980
Option 3 ID : 264330734981
Option 4 ID : 264330734983
Status : Answered
Chosen Option : 2

Q.10 If L is 3 times more than M, then M is what percentage less than L?

- Ans
- 1. 81 percent
 - 2. 75 percent
 - 3. 78 percent
 - 4. 72 percent

Question ID : 264330190093
Option 1 ID : 264330743956
Option 2 ID : 264330743954
Option 3 ID : 264330743955
Option 4 ID : 264330743957
Status : Answered
Chosen Option : 4

Q.11 Find the result of $15 - (2 \times 4) + 7$.

- Ans
- 1. -10
 - 2. -6
 - 3. 17
 - 4. 14

Question ID : 264330190727
Option 1 ID : 264330746341
Option 2 ID : 264330746338
Option 3 ID : 264330746340
Option 4 ID : 264330746339
Status : Marked For Review
Chosen Option : 2

Q.12 The marked price of an article is 160 percent of the cost price. If 35 percent discount is given, then what will be the profit percentage?

- Ans**
- 1. 5 percent
 - 2. 4 percent
 - 3. 6 percent
 - 4. 4.5 percent

Question ID : **264330187170**
Option 1 ID : **264330732611**
Option 2 ID : **264330732610**
Option 3 ID : **264330732608**
Option 4 ID : **264330732609**
Status : **Marked For Review**
Chosen Option : **1**

Q.13 The marked price of an article is Rs. 1960. If a discount of 30 percent is given, then what will be the selling price of the article?

- Ans**
- 1. Rs. 1522
 - 2. Rs. 1372
 - 3. Rs. 1342
 - 4. Rs. 1442

Question ID : **264330188582**
Option 1 ID : **264330738132**
Option 2 ID : **264330738131**
Option 3 ID : **264330738133**
Option 4 ID : **264330738130**
Status : **Not Answered**
Chosen Option : **--**

Q.14 On a mobile the profit earned is 250 percent of the cost price. If the cost price increases by 50 percent but the selling price remains same, then what is the new profit percentage?

- Ans**
- 1. 120 percent
 - 2. 100 percent
 - 3. 133.33 percent
 - 4. 150 percent

Question ID : **264330188561**
Option 1 ID : **264330738048**
Option 2 ID : **264330738049**
Option 3 ID : **264330738046**
Option 4 ID : **264330738047**
Status : **Not Answered**
Chosen Option : **--**

Q.15 Renson has three pieces of wood of length 91 m, 112 m, and 49 m. If he wants to cut the wood into equal planks, what is the greatest possible length (in m) of each plank?

- Ans**
- 1. 19
 - 2. 7
 - 3. 21
 - 4. 3

Question ID : 264330192391
Option 1 ID : 264330752920
Option 2 ID : 264330752919
Option 3 ID : 264330752921
Option 4 ID : 264330752918
Status : Not Answered
Chosen Option : --

Q.16 A principal amount is invested at a simple interest rate of 8% per annum. After 2 years, the interest earned is \$320. Find the principal amount.

- Ans**
- 1. \$1800
 - 2. \$2150
 - 3. \$2100
 - 4. \$2000

Question ID : 264330188506
Option 1 ID : 264330737826
Option 2 ID : 264330737829
Option 3 ID : 264330737828
Option 4 ID : 264330737827
Status : Not Answered
Chosen Option : --

Q.17 If $P : Q = 5 : 3$ and $Q : R = 2 : 5$, then what is the value of $Q : (P + R)$?

- Ans**
- 1. 5 : 21
 - 2. 6 : 25
 - 3. 4 : 17
 - 4. 2 : 13

Question ID : 264330187712
Option 1 ID : 264330734777
Option 2 ID : 264330734779
Option 3 ID : 264330734778
Option 4 ID : 264330734776
Status : Not Answered
Chosen Option : --

Q.18 If selling price of a shirt is 35 percent of its cost price, then what is the loss percentage?

- Ans
- 1. 55 percent
 - 2. 60 percent
 - 3. 65 percent
 - 4. 70 percent

Question ID : 264330187847
Option 1 ID : 264330735317
Option 2 ID : 264330735318
Option 3 ID : 264330735316
Option 4 ID : 264330735319
Status : Not Answered
Chosen Option : --

Q.19 The perimeter of the top of a rectangular table is 70 metre and its area is 300 metre². What is the length of its diagonal?

- Ans
- 1. 15 metre
 - 2. 35 metre
 - 3. 20 metre
 - 4. 25 metre

Question ID : 264330187658
Option 1 ID : 264330734560
Option 2 ID : 264330734561
Option 3 ID : 264330734563
Option 4 ID : 264330734562
Status : Not Answered
Chosen Option : --

Q.20 The average age of Seeta and Geeta is 40 years. If Reetu replaces Seeta, then the average age will become 38 years and if Reetu replaces Geeta, then the average age will become 42 years. What are the respective ages of Seeta, Geeta and Reetu?

- Ans
- 1. 36 years, 42 years and 38 years
 - 2. 42 years, 36 years and 38 years
 - 3. 44 years, 36 years and 40 years
 - 4. 39 years, 42 years and 45 years

Question ID : 264330187204
Option 1 ID : 264330732744
Option 2 ID : 264330732746
Option 3 ID : 264330732747
Option 4 ID : 264330732745
Status : Answered
Chosen Option : 4

Q.1 Select the incorrectly spelt word from the given sentence.

A strong business acumen and entrepreneurial fire have always separated him from his peers.

- Ans**
- 1. acumen
 - 2. peers
 - 3. entrepreneurial
 - 4. business

Question ID : 264330186020
Option 1 ID : 264330728369
Option 2 ID : 264330728371
Option 3 ID : 264330728370
Option 4 ID : 264330728368
Status : Answered
Chosen Option : 3

Q.2 Select the word segment that substitutes (replaces) the bracketed word segment correctly and completes the sentence meaningfully. Select the option 'no correction required' if the sentence is correct as given.

It was interesting to be in the (quite old town one more).

- Ans**
- 1. quiet old town once much more
 - 2. quite vintage town once more
 - 3. quiet old town once more
 - 4. No correction required

Question ID : 264330186552
Option 1 ID : 264330730398
Option 2 ID : 264330730397
Option 3 ID : 264330730396
Option 4 ID : 264330730399
Status : Answered
Chosen Option : 3

Q.3 Fill in the blank with the most appropriate option.

In the morning we were up at _____ of day, and down to the nigger cabins to pet the dogs.

- Ans**
- 1. break
 - 2. breach
 - 3. brake
 - 4. breech

Question ID : 264330186968
Option 1 ID : 264330731983
Option 2 ID : 264330731980
Option 3 ID : 264330731981
Option 4 ID : 264330731982
Status : Answered
Chosen Option : 1

Q.4 Improve the underlined part of the sentence. Choose 'No improvement' as an answer if the sentence is grammatically correct.

I can make fresh coffee if you'd like some.

- Ans
- 1. should makes freshest
 - 2. No improvement
 - 3. can made fresher
 - 4. can made freshest

Question ID : 264330186258

Option 1 ID : 264330729277

Option 2 ID : 264330729279

Option 3 ID : 264330729276

Option 4 ID : 264330729278

Status : Answered

Chosen Option : 2

Q.5 Select the most appropriate synonym of the given word.

Purview

- Ans
- 1. Depth
 - 2. Limitation
 - 3. Domain
 - 4. Extreme

Question ID : 264330186982

Option 1 ID : 264330732035

Option 2 ID : 264330732033

Option 3 ID : 264330732034

Option 4 ID : 264330732032

Status : Answered

Chosen Option : 1

Q.6 Select the most appropriate meaning of the given idiom.

Pull a fast one.

- Ans
- 1. To help someone urgently.
 - 2. To produce something that is needed.
 - 3. To adjust in a difficult situation.
 - 4. To deceive someone.

Question ID : 264330186818

Option 1 ID : 264330731411

Option 2 ID : 264330731410

Option 3 ID : 264330731408

Option 4 ID : 264330731409

Status : Answered

Chosen Option : 4

Q.7 Select the most appropriate option for the given blank.

_____ a bite and tell me how it is.

- Ans
- 1. Make
 - 2. Gain
 - 3. Take
 - 4. Keep

Question ID : 264330185770
Option 1 ID : 264330727417
Option 2 ID : 264330727419
Option 3 ID : 264330727416
Option 4 ID : 264330727418
Status : Answered
Chosen Option : 3

Q.8 Select the most appropriate word to fill in the blank.

A large _____ of elderly people live alone.

- Ans
- 1. value
 - 2. quantity
 - 3. number
 - 4. capacity

Question ID : 264330185987
Option 1 ID : 264330728244
Option 2 ID : 264330728245
Option 3 ID : 264330728247
Option 4 ID : 264330728246
Status : Answered
Chosen Option : 4

Q.9 Find the part of the given sentence that has an error in it. If there is no error, choose 'No error'.

If acid drainage will reaches groundwater, it may persist for decades or centuries.

- Ans
- 1. groundwater, it may persist
 - 2. If acid drainage will reaches
 - 3. No error
 - 4. for decades or centuries

Question ID : 264330185626
Option 1 ID : 264330726869
Option 2 ID : 264330726868
Option 3 ID : 264330726871
Option 4 ID : 264330726870
Status : Answered
Chosen Option : 4

Q.10 Find the part of the given sentence that has an error in it. If there is no error, choose 'No error'.

My cousin's watch is more elegant than your old watch.

- Ans**
- 1. your old watch.
 - 2. more elegant than
 - 3. My cousin's watch is
 - 4. No error

Question ID : 264330186150
Option 1 ID : 264330728866
Option 2 ID : 264330728865
Option 3 ID : 264330728864
Option 4 ID : 264330728867
Status : Answered
Chosen Option : 3

Q.11 Fill in the blank with the most appropriate option.

He _____ pardon, and was getting into the carriage, but felt he must glance at her once more.

- Ans**
- 1. said
 - 2. asked
 - 3. adjured
 - 4. begged

Question ID : 264330186492
Option 1 ID : 264330730171
Option 2 ID : 264330730168
Option 3 ID : 264330730169
Option 4 ID : 264330730170
Status : Answered
Chosen Option : 1

Q.12 Select the sentence with no spelling errors.

- Ans**
- 1. Intangible cultural heritage cuts across political, historical, community and culturel spheres.
 - 2. Intangible cultural heritage cuts across political, historical, community and cultural spheres.
 - 3. Intangible cultural heritage cuts across political, historical, community and cultural spheres.
 - 4. Intangible cultural heritage cuts across polatical, historical, community and cultural spheres.

Question ID : 264330186736
Option 1 ID : 264330731099
Option 2 ID : 264330731096
Option 3 ID : 264330731098
Option 4 ID : 264330731097
Status : Answered
Chosen Option : 4

Q.13 Choose the most appropriate antonym of the underlined word.

Venus was the quiet one: pensive and observant of everything around her.

- Ans
- 1. Thoughtful
 - 2. Reflective
 - 3. Pondering
 - 4. Ignorant

Question ID : 264330186291
Option 1 ID : 264330729400
Option 2 ID : 264330729402
Option 3 ID : 264330729403
Option 4 ID : 264330729401
Status : Answered
Chosen Option : 1

Q.14 Select the most appropriate meaning of the given idiom.

See eye to eye.

- Ans
- 1. To be spontaneous.
 - 2. To fight with someone.
 - 3. To share the same opinion as someone.
 - 4. To speak aggressively.

Question ID : 264330186838
Option 1 ID : 264330731484
Option 2 ID : 264330731487
Option 3 ID : 264330731485
Option 4 ID : 264330731486
Status : Answered
Chosen Option : 3

Q.15 Find the part of the given sentence that has an error in it. If there is no error, choose 'No error'.

The rabbit lead the boy towards the outskirts of the city.

- Ans
- 1. outskirts of the city.
 - 2. boy towards the
 - 3. No error
 - 4. The rabbit lead the

Question ID : 264330186318
Option 1 ID : 264330729506
Option 2 ID : 264330729505
Option 3 ID : 264330729507
Option 4 ID : 264330729504
Status : Answered
Chosen Option : 2

Comprehension:

Read the passage carefully and select the correct answer for the given blanks out of the four alternatives.

Lions are carnivores, which means they only (1) _____ meat. They will eat almost any animal they can catch, however the most of the time it is buffalo, zebra, giraffe, warthog, and antelope species. If the (2) _____ arises, they will also prey on the young of larger mammal species (3) _____ as rhinos and elephants. The majority of the preys will weigh between 50 and 300kg. Male lions can eat approximately 7 kg of meat per day, (4) _____ females eat approximately 4.5 kg. Both are (5) _____ of consuming up to 15% of their body weight in a single meal!

SubQuestion No : 16

Q.16 Select the most appropriate option for blank (1)

- Ans
- 1. abduct
 - 2. tolerate
 - 3. consume
 - 4. churn

Question ID : 264330185884

Option 1 ID : 264330727850

Option 2 ID : 264330727849

Option 3 ID : 264330727848

Option 4 ID : 264330727851

Status : Answered

Chosen Option : 2

Comprehension:

Read the passage carefully and select the correct answer for the given blanks out of the four alternatives.

Lions are carnivores, which means they only (1) _____ meat. They will eat almost any animal they can catch, however the most of the time it is buffalo, zebra, giraffe, warthog, and antelope species. If the (2) _____ arises, they will also prey on the young of larger mammal species (3) _____ as rhinos and elephants. The majority of the preys will weigh between 50 and 300kg. Male lions can eat approximately 7 kg of meat per day, (4) _____ females eat approximately 4.5 kg. Both are (5) _____ of consuming up to 15% of their body weight in a single meal!

SubQuestion No : 17

Q.17 Select the most appropriate option for blank (2)

- Ans
- 1. state
 - 2. condition
 - 3. capacity
 - 4. opportunity

Question ID : 264330185885

Option 1 ID : 264330727853

Option 2 ID : 264330727852

Option 3 ID : 264330727855

Option 4 ID : 264330727854

Status : Answered

Chosen Option : 1

Comprehension:

Read the passage carefully and select the correct answer for the given blanks out of the four alternatives.

Lions are carnivores, which means they only (1) _____ meat. They will eat almost any animal they can catch, however the most of the time it is buffalo, zebra, giraffe, warthog, and antelope species. If the (2) _____ arises, they will also prey on the young of larger mammal species (3) _____ as rhinos and elephants. The majority of the preys will weigh between 50 and 300kg. Male lions can eat approximately 7 kg of meat per day, (4) _____ females eat approximately 4.5 kg. Both are (5) _____ of consuming up to 15% of their body weight in a single meal!

SubQuestion No : 18

Q.18 Select the most appropriate option for blank (3)

- Ans
- 1. like
 - 2. that
 - 3. such
 - 4. so

Question ID : 264330185886

Option 1 ID : 264330727857

Option 2 ID : 264330727859

Option 3 ID : 264330727856

Option 4 ID : 264330727858

Status : Answered

Chosen Option : 3

Comprehension:

Read the passage carefully and select the correct answer for the given blanks out of the four alternatives.

Lions are carnivores, which means they only (1) _____ meat. They will eat almost any animal they can catch, however the most of the time it is buffalo, zebra, giraffe, warthog, and antelope species. If the (2) _____ arises, they will also prey on the young of larger mammal species (3) _____ as rhinos and elephants. The majority of the preys will weigh between 50 and 300kg. Male lions can eat approximately 7 kg of meat per day, (4) _____ females eat approximately 4.5 kg. Both are (5) _____ of consuming up to 15% of their body weight in a single meal!

SubQuestion No : 19

Q.19 Select the most appropriate option for blank (4)

- Ans
- 1. Yet
 - 2. Rather
 - 3. While
 - 4. As

Question ID : 264330185887

Option 1 ID : 264330727863

Option 2 ID : 264330727862

Option 3 ID : 264330727861

Option 4 ID : 264330727860

Status : Answered

Chosen Option : 4

Comprehension:

Read the passage carefully and select the correct answer for the given blanks out of the four alternatives.

Lions are carnivores, which means they only (1) _____ meat. They will eat almost any animal they can catch, however the most of the time it is buffalo, zebra, giraffe, warthog, and antelope species. If the (2) _____ arises, they will also prey on the young of larger mammal species (3) _____ as rhinos and elephants. The majority of the preys will weigh between 50 and 300kg. Male lions can eat approximately 7 kg of meat per day, (4) _____ females eat approximately 4.5 kg. Both are (5) _____ of consuming up to 15% of their body weight in a single meal!

SubQuestion No : 20

Q.20 Select the most appropriate option for blank (5)

- Ans 1. susceptible
 2. capable
 3. veteran
 4. trained

Question ID : 264330185888

Option 1 ID : 264330727867

Option 2 ID : 264330727866

Option 3 ID : 264330727864

Option 4 ID : 264330727865

Status : Answered

Chosen Option : 2

Section : Part-D-Hindi

Q.1 दिए गए वाक्य में रेखांकित शब्द का विलोम शब्द ज्ञात कीजिए।

नदी कलकल करती हुई बहती है।

- Ans 1. सामान्य
 2. शिष्ट
 3. शांत
 4. ढीला

Question ID : 264330188281

Option 1 ID : 264330737019

Option 2 ID : 264330737017

Option 3 ID : 264330737016

Option 4 ID : 264330737018

Status : Not Answered

Chosen Option : --

Q.2 दिए गए वाक्य में रेखांकित शब्द के लिए सही वर्तनी जात कीजिए।

श्यामा दफ़्तर के लिए निकल गई।

- Ans
- 1. दफ़्तर
 - 2. दफ्तर
 - 3. दफ्तर
 - 4. द्फ़तर

Question ID : 264330188305

Option 1 ID : 264330737108

Option 2 ID : 264330737109

Option 3 ID : 264330737110

Option 4 ID : 264330737111

Status : Not Answered

Chosen Option : --

Q.3 निम्नलिखित प्रश्न में, चार विकल्पों में से, उस विकल्प का चयन करें जो कोष्ठक में दिए गए शब्द के तद्भव रूप का सही विकल्प है।
शादी-विवाह के कार्यक्रम में बहुत से लोग (गोत्र) _____ जाने बिना आगे का कार्यक्रम नहीं करते हैं।

- Ans
- 1. गोत्र
 - 2. गर्दभ
 - 3. गौ
 - 4. गृह

Question ID : 264330188328

Option 1 ID : 264330737197

Option 2 ID : 264330737196

Option 3 ID : 264330737198

Option 4 ID : 264330737199

Status : Not Answered

Chosen Option : --

Q.4 निम्नलिखित प्रश्न में, चार विकल्पों में से, उस विकल्प का चयन करें जो रिक्त स्थान के लिए सही स्त्रीलिंग रूप वाला विकल्प हो।
तुम्हारे ठीक न होने की _____ मुझे बहुत देरी से मिली।

- Ans
- 1. खबर
 - 2. अवस्था
 - 3. स्वास्थ्य
 - 4. कहानी

Question ID : 264330189710

Option 1 ID : 264330742494

Option 2 ID : 264330742495

Option 3 ID : 264330742496

Option 4 ID : 264330742497

Status : Not Answered

Chosen Option : --

Q.5 दिए गए वाक्य में उचित पर्यायवाची शब्द का चयन करके रिक्त स्थान की पूर्ति करें।

दुख के वक्त में उसे _____ (दिलासा) दो।

- Ans
- 1. सांत्वना
 - 2. निचोड़
 - 3. मनभावना
 - 4. परिमंल

Question ID : 264330189133

Option 1 ID : 264330740296

Option 2 ID : 264330740294

Option 3 ID : 264330740295

Option 4 ID : 264330740297

Status : Not Answered

Chosen Option : --

Q.6 दिए गए वाक्य में रेखांकित शब्द का विलोम शब्द ज्ञात कीजिए।

शिष्य का दर्जा सर्वोपरि होता है।

- Ans
- 1. गृहमंत्री
 - 2. बालिका
 - 3. बालक
 - 4. गुरू

Question ID : 264330189134

Option 1 ID : 264330740301

Option 2 ID : 264330740300

Option 3 ID : 264330740298

Option 4 ID : 264330740299

Status : Not Answered

Chosen Option : --

Q.7 दिए गए विकल्पों में से तीन विकल्प त्रुटियुक्त हैं, जबकि एक सही है। उस सही विकल्प का चयन करें।

- Ans
- 1. उसने मेरा गाना और घर देखा।
 - 2. उसने मेरा घर सुना और गाना देखा।
 - 3. उसने मेरा गाना देखा और घर देखा।
 - 4. उसने मेरा गाना सुना और घर देखा।

Question ID : 264330189478

Option 1 ID : 264330741610

Option 2 ID : 264330741613

Option 3 ID : 264330741611

Option 4 ID : 264330741612

Status : Not Answered

Chosen Option : --

Q.8 निम्नलिखित वाक्य में रेखांकित भाग के लिए एक सार्थक शब्द ज्ञात कीजिए।
कातिल का अपराध माफ़ करने योग्य नहीं है।

- Ans
- 1. अनैतिक
 - 2. क्षम्य
 - 3. अदम्य
 - 4. अक्षम्य

Question ID : 264330190075
Option 1 ID : 264330743885
Option 2 ID : 264330743882
Option 3 ID : 264330743884
Option 4 ID : 264330743883
Status : Not Answered
Chosen Option : --

Q.9 निम्नलिखित प्रश्न में, दिए गए चार विकल्पों में से, उस विकल्प का चयन करें जो दिए गए मुहावरे के अर्थ को सर्वश्रेष्ठ रूप से व्यक्त करता है।

गर्भे लड़ाना

- Ans
- 1. बड़ी-बड़ी बातें बनाना
 - 2. परेशान करना
 - 3. अत्यंत प्रिय होना
 - 4. बेकार की बातें करना

Question ID : 264330189388
Option 1 ID : 264330741267
Option 2 ID : 264330741268
Option 3 ID : 264330741269
Option 4 ID : 264330741266
Status : Not Answered
Chosen Option : --

Q.10 निम्नलिखित प्रश्न में, चार विकल्प में से, उस विकल्प का चयन करें जो दिए गये मुहावरे का सही अर्थ वाला विकल्प हो।
चेहरे पर हवाईयां उड़ना -

- Ans
- 1. घबरा जाना
 - 2. खुशामद करना
 - 3. भाग जाना
 - 4. चालाकी करना

Question ID : 264330189067
Option 1 ID : 264330740044
Option 2 ID : 264330740045
Option 3 ID : 264330740043
Option 4 ID : 264330740042
Status : Not Answered
Chosen Option : --

Q.11 दिए गए वाक्य में रेखांकित भाग के लिए उचित सार्थक शब्द का चयन कीजिए।

श्यामू टाना है।

- Ans 1. नाटा
 2. टाका
 3. काटा
 4. नाटक

Question ID : 264330189267

Option 1 ID : 264330740806

Option 2 ID : 264330740809

Option 3 ID : 264330740808

Option 4 ID : 264330740807

Status : Not Answered

Chosen Option : --

Q.12 निम्नलिखित प्रश्न में, चार विकल्पों में से, उस विकल्प का चयन करें जो कोष्ठक में दिए गए शब्द के पर्यायवाची शब्द का सही विकल्प है।
जो हमारी (नियति) _____ में होगा वही हमें मिलता है।

- Ans 1. प्रारब्ध
 2. वनिता
 3. योषिता
 4. निदाघ

Question ID : 264330189741

Option 1 ID : 264330742612

Option 2 ID : 264330742611

Option 3 ID : 264330742613

Option 4 ID : 264330742610

Status : Not Answered

Chosen Option : --

Q.13 निम्नलिखित प्रश्न में, चार विकल्पों में से, उस विकल्प का चयन करें जो दी गई लोकोक्ति का सही अर्थ वाला विकल्प है।
अकेला चना भाड़ नहीं फोड़ सकता

- Ans 1. सिर्फ चना नहीं खाना चाहिए
 2. अकेला व्यक्ति कुछ नहीं कर सकता
 3. किसी भी कार्य को स्वयं ही करना चाहिए
 4. किसी भी चीज़ का नुकसान होना

Question ID : 264330189788

Option 1 ID : 264330742790

Option 2 ID : 264330742792

Option 3 ID : 264330742791

Option 4 ID : 264330742793

Status : Not Answered

Chosen Option : --

Q.14 दिए गए वाक्य में रेखांकित शब्दों के लिए सही शब्दों वाले विकल्प का चयन करें।

काव्य के क्षेत्र में अनेकों वाद चल चुके हैं।

- Ans
- 1. परिवर्तन की आवश्यकता नहीं है।
 - 2. काव्य के क्षेत्र में अनेके वाद चल चुके हैं।
 - 3. काव्य के क्षेत्र में अनेकी वाद चल चुका है।
 - 4. काव्य के क्षेत्र में अनेक वाद चल चुके हैं।

Question ID : 264330189459

Option 1 ID : 264330741541

Option 2 ID : 264330741539

Option 3 ID : 264330741540

Option 4 ID : 264330741538

Status : Not Answered

Chosen Option : --

Q.15 दिए गए विकल्पों में से शुद्ध वर्तनी वाले विकल्प का चयन करें।

- Ans
- 1. मैं आयकर वीभाग में काम करती हूँ।
 - 2. आवश्यक चीजों पर ही ध्यान दीजिए।
 - 3. बूरे समय को जाते देर नहीं लगती।
 - 4. इन्हें यह सूचना दो घंटे बाद मिली।

Question ID : 264330189475

Option 1 ID : 264330741599

Option 2 ID : 264330741600

Option 3 ID : 264330741598

Option 4 ID : 264330741601

Status : Not Answered

Chosen Option : --

Comprehension:

नीचे दिए गए गद्य में कुछ शब्द छोड़ दिए गए हैं और प्रत्येक रिक्त स्थान के चार विकल्प दिए गए हैं। इन चारों में से कौन सा विकल्प रिक्त स्थान की पूर्ति करेगा-

फसलों का (1)_____ अच्छा हो, यह प्रयास फसलों की (2)_____ के चयन पर निर्भर करता है। किसानों को अच्छी (3)_____ वाले विशेष बीज उपलब्ध होने चाहिए (4)_____ बीज उसी किस्म के होने चाहिए जो (5)_____ परिस्थिति में अंकुरित हो सकें।

SubQuestion No : 16

Q.16 रिक्त 1 के लिए सबसे उपयुक्त विकल्प का चयन कीजिए।

- Ans
- 1. कीमत
 - 2. परिवर्तन
 - 3. उत्पादन
 - 4. गुणगान

Question ID : 264330189398

Option 1 ID : 264330741302

Option 2 ID : 264330741303

Option 3 ID : 264330741304

Option 4 ID : 264330741305

Status : Not Answered

Chosen Option : --

Comprehension:

नीचे दिए गए गद्य में कुछ शब्द छोड़ दिए गए हैं और प्रत्येक रिक्त स्थान के चार विकल्प दिए गए हैं। इन चारों में से कौन सा विकल्प रिक्त स्थान की पूर्ति करेगा-

फसलों का (1)_____ अच्छा हो, यह प्रयास फसलों की (2)_____ के चयन पर निर्भर करता है। किसानों को अच्छी (3)_____ वाले विशेष बीज उपलब्ध होने चाहिए (4)_____ बीज उसी किस्म के होने चाहिए जो (5)_____ परिस्थिति में अंकुरित हो सकें।

SubQuestion No : 17

Q.17 रिक्त 2 के लिए सबसे उपयुक्त विकल्प का चयन कीजिए।

- Ans
- 1. जलवायु
 - 2. किस्मों
 - 3. विज्ञान
 - 4. उच्च

Question ID : 264330189399

Option 1 ID : 264330741309

Option 2 ID : 264330741306

Option 3 ID : 264330741308

Option 4 ID : 264330741307

Status : Not Answered

Chosen Option : --

Comprehension:

नीचे दिए गए गद्य में कुछ शब्द छोड़ दिए गए हैं और प्रत्येक रिक्त स्थान के चार विकल्प दिए गए हैं। इन चारों में से कौन सा विकल्प रिक्त स्थान की पूर्ति करेगा-

फसलों का (1) _____ अच्छा हो, यह प्रयास फसलों की (2) _____ के चयन पर निर्भर करता है। किसानों को अच्छी (3) _____ वाले विशेष बीज उपलब्ध होने चाहिए (4) _____ बीज उसी किस्म के होने चाहिए जो (5) _____ परिस्थिति में अंकुरित हो सकें।

SubQuestion No : 18

Q.18 रिक्त 3 के लिए सबसे उपयुक्त विकल्प का चयन कीजिए।

- Ans**
- 1. महत्वपूर्ण
 - 2. गुणवत्ता
 - 3. विशेषकर
 - 4. सुधार

Question ID : 264330189400

Option 1 ID : 264330741312

Option 2 ID : 264330741311

Option 3 ID : 264330741310

Option 4 ID : 264330741313

Status : Not Answered

Chosen Option : --

Comprehension:

नीचे दिए गए गद्य में कुछ शब्द छोड़ दिए गए हैं और प्रत्येक रिक्त स्थान के चार विकल्प दिए गए हैं। इन चारों में से कौन सा विकल्प रिक्त स्थान की पूर्ति करेगा-

फसलों का (1) _____ अच्छा हो, यह प्रयास फसलों की (2) _____ के चयन पर निर्भर करता है। किसानों को अच्छी (3) _____ वाले विशेष बीज उपलब्ध होने चाहिए (4) _____ बीज उसी किस्म के होने चाहिए जो (5) _____ परिस्थिति में अंकुरित हो सकें।

SubQuestion No : 19

Q.19 रिक्त 4 के लिए सबसे उपयुक्त विकल्प का चयन कीजिए।

- Ans**
- 1. केवल
 - 2. अर्थात्
 - 3. या
 - 4. उल्टा

Question ID : 264330189401

Option 1 ID : 264330741315

Option 2 ID : 264330741317

Option 3 ID : 264330741314

Option 4 ID : 264330741316

Status : Not Answered

Chosen Option : --

Comprehension:

नीचे दिए गए गद्य में कुछ शब्द छोड़ दिए गए हैं और प्रत्येक रिक्त स्थान के चार विकल्प दिए गए हैं। इन चारों में से कौन सा विकल्प रिक्त स्थान की पूर्ति करेगा-

फसलों का (1)_____ अच्छा हो, यह प्रयास फसलों की (2)_____ के चयन पर निर्भर करता है। किसानों को अच्छी (3)_____ वाले विशेष बीज उपलब्ध होने चाहिए (4)_____ बीज उसी किस्म के होने चाहिए जो (5)_____ परिस्थिति में अंकुरित हो सकें।

SubQuestion No : 20

Q.20 रिक्त 5 के लिए सबसे उपयुक्त विकल्प का चयन कीजिए।

- Ans**
- 1. शताब्दी
 - 2. प्रतिवर्ष
 - 3. अनुकूल
 - 4. वार्षिक

Question ID : 264330189402

Option 1 ID : 264330741321

Option 2 ID : 264330741319

Option 3 ID : 264330741318

Option 4 ID : 264330741320

Status : Not Answered

Chosen Option : --