

Constable GD in Central Armed Police Forces CAPFs SSF Rifleman GD in Assam Rifles Examination 2024

| | |
|----------------|-------------------------------|
| Roll Number | |
| Candidate Name | |
| Venue Name | |
| Exam Date | 27/02/2024 |
| Exam Time | 11:30 AM - 12:30 PM |
| Subject | Constable GD Examination 2024 |

Section : Part-A-General Intelligence and Reasoning

Q.1 'T × U' means 'T is the mother of U'

'T + U' means 'T is the sister of U'

'T ÷ U' means 'T is the daughter of U'

'T - U' means 'T is the wife of U'

How is D related to A in the expression 'A × B + C ÷ D'?

- Ans
- 1. Father
 - 2. Son
 - 3. Husband
 - 4. Brother

Question ID : 264330192335

Option 1 ID : 264330752694

Option 2 ID : 264330752697

Option 3 ID : 264330752696

Option 4 ID : 264330752695

Status : Answered

Chosen Option : 3

Q.2 In a certain code language, 'MBTSA' is coded as '26095', 'TDAN' is coded as '5328', 'YZBN' is coded as '0713'.
What can be the code for 'M' in that code language?

- Ans
- 1. 5
 - 2. 0
 - 3. 2
 - 4. 6

Question ID : 264330190493

Option 1 ID : 264330745555

Option 2 ID : 264330745557

Option 3 ID : 264330745554

Option 4 ID : 264330745556

Status : Answered

Chosen Option : 4

Q.3 Eight boys A, B, C, D, E, F, G and H are sitting around a circular table facing opposite to the centre (not necessarily in the same order). B is fourth to the left of H. Only two boys sit between F and B. E is second to the left of D. F is second to the left of C. C is an immediate neighbour of G. C is not an immediate neighbour of B. Who is sitting on the immediate left of E?

- Ans**
- 1. B
 - 2. H
 - 3. A
 - 4. G

Question ID : 264330187428

Option 1 ID : 264330733641

Option 2 ID : 264330733642

Option 3 ID : 264330733643

Option 4 ID : 264330733640

Status : Answered

Chosen Option : 4

Q.4 In the following question, select the related letter pair from the given alternatives.

BP : BO :: ?

- Ans**
- 1.
 - 2. EZ : BV
 - 3. LY : LX
 - 4. OG : KB

Question ID : 264330190331

Option 1 ID : 264330744909

Option 2 ID : 264330744908

Option 3 ID : 264330744907

Option 4 ID : 264330744906

Status : Answered

Chosen Option : 3

Q.5 Arrange the following words in alphabetical order:

1. FRAGRANCE
2. FRUITFUL
3. FRUGAL
4. FRIGHTEN
5. FROSTY

- Ans**
- 1. 1,4,5,3,2
 - 2. 1,5,4,3,2
 - 3. 1,4,5,2,3
 - 4. 1,4,3,5,2

Question ID : 264330192230

Option 1 ID : 264330752275

Option 2 ID : 264330752276

Option 3 ID : 264330752274

Option 4 ID : 264330752277

Status : Answered

Chosen Option : 3

Q.6 Three Statements are given followed by two conclusions numbered I and II. Assuming the statements to be true, even if they seem to be at variance with commonly known facts, decide which of the conclusions logically follow(s) from the statements.

Statement I: Some shirts are cotton.

Statement II: All cotton are clothes.

Statement III: Some clothes are not trousers.

Conclusion I: Some shirts are trousers.

Conclusion II: Some cotton are not shirts.

- Ans**
- 1. Only conclusion I follows
 - 2. Neither conclusion I nor II follows
 - 3. Both conclusions I and II follow
 - 4. Only conclusion II follows

Question ID : 264330192138

Option 1 ID : 264330751906

Option 2 ID : 264330751909

Option 3 ID : 264330751908

Option 4 ID : 264330751907

Status : Answered

Chosen Option : 4

Q.7 Five friends P, Q, R, S, and T are sitting around a circular table facing away from the centre. S is sitting to the immediate right of R. P sits exactly between Q and T. Q sits to the immediate left of R. Who sits to the immediate right of P?

- Ans**
- 1. T
 - 2. S
 - 3. Q
 - 4. R

Question ID : 264330191576

Option 1 ID : 264330749659

Option 2 ID : 264330749658

Option 3 ID : 264330749660

Option 4 ID : 264330749661

Status : Answered

Chosen Option : 3

Q.8 Which of the following groups of letters when sequentially placed from left to right will complete the given series?

dddeeff_dddeeff_dddeefffddee_ff_

- Ans**
- 1. fdef
 - 2. edfd
 - 3. fded
 - 4. ffeff

Question ID : 264330187100

Option 1 ID : 264330732329

Option 2 ID : 264330732330

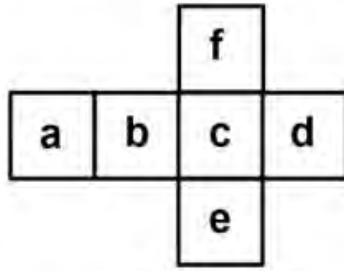
Option 3 ID : 264330732328

Option 4 ID : 264330732331

Status : Answered

Chosen Option : 4

Q.9 On folding the given die, which letter will be opposite to the letter 'c'?



- Ans
- 1. b
 - 2. d
 - 3. a
 - 4. e

Question ID : 264330192205

Option 1 ID : 264330752175

Option 2 ID : 264330752176


Option 3 ID : 264330752174

Option 4 ID : 264330752177

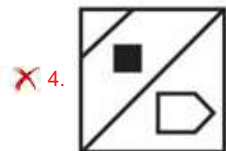
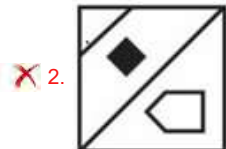
Status : Answered

Chosen Option : 3

Q.10 Which answer figure will complete the pattern in the question figure? (rotation is not allowed)



Ans



Question ID : 264330190224
 Option 1 ID : 264330744479
 Option 2 ID : 264330744478
 Option 3 ID : 264330744480
 Option 4 ID : 264330744481
 Status : Answered
 Chosen Option : 1

Q.11 In a certain code language, if AMBER is coded as 36, MAGENTA is coded as 57, then what will PURPLE be coded as?

Ans ✓ 1. 84

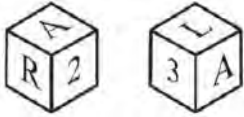
✗ 2. 67

✗ 3. 76

✗ 4. 89

Question ID : 264330192273
 Option 1 ID : 264330752448
 Option 2 ID : 264330752446
 Option 3 ID : 264330752447
 Option 4 ID : 264330752449
 Status : Answered
 Chosen Option : 1

Q.12 Two positions of a dice are given below. What will come on the face opposite to the face containing 'L' on it?



- Ans**
- 1. 3
 - 2. A
 - 3. 2
 - 4. R

Question ID : 264330187438

Option 1 ID : 264330733683

Option 2 ID : 264330733680

Option 3 ID : 264330733681

Option 4 ID : 264330733682

Status : Answered

Chosen Option : 4

Q.13 Which two numbers should be interchanged to make the given equation correct?

$$8 \times 4 - 18 \div 2 + 16 = 63$$

- Ans**
- 1. 16 and 8
 - 2. 16 and 18
 - 3. 8 and 4
 - 4. 2 and 4

Question ID : 264330192262

Option 1 ID : 264330752405

Option 2 ID : 264330752403

Option 3 ID : 264330752402

Option 4 ID : 264330752404

Status : Answered

Chosen Option : 1

Q.14 In the following question, select the related letters from the given alternatives.

OTYJ : QVAL :: DGKX : ?

- Ans**
- 1. SUTL
 - 2. FIMZ
 - 3. JKMP
 - 4. JJDK

Question ID : 264330187442

Option 1 ID : 264330733697

Option 2 ID : 264330733696

Option 3 ID : 264330733699

Option 4 ID : 264330733698

Status : Answered

Chosen Option : 2

Q.15 Which of the following numbers will replace the question mark (?) in the given series?

45, 54, 63, ?, 81, 90

- Ans**
- 1. 58
 - 2. 68
 - 3. 70
 - 4. 72

Question ID : **264330191118**
Option 1 ID : **264330747827**
Option 2 ID : **264330747826**
Option 3 ID : **264330747828**
Option 4 ID : **264330747829**
Status : **Answered**
Chosen Option : **4**

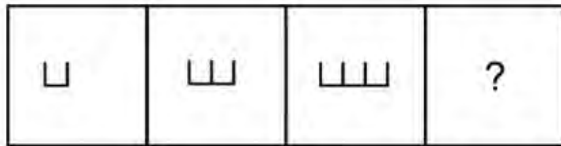
Q.16 In the following question, select the missing number from the given series.

344, 348, 357, ?, 398, 434

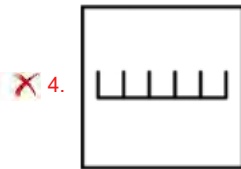
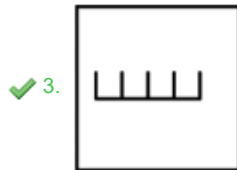
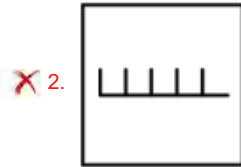
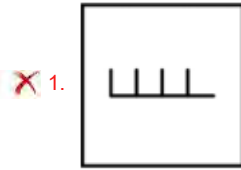
- Ans**
- 1. 371
 - 2. 370
 - 3. 380
 - 4. 373

Question ID : **264330187091**
Option 1 ID : **264330732293**
Option 2 ID : **264330732292**
Option 3 ID : **264330732295**
Option 4 ID : **264330732294**
Status : **Answered**
Chosen Option : **4**

Q.17 Select the figure that will replace the question mark (?) in the following figure series.



Ans



Question ID : 264330190722

Option 1 ID : 264330746321

Option 2 ID : 264330746320

Option 3 ID : 264330746318

Option 4 ID : 264330746319

Status : Answered

Chosen Option : 3

Q.18 By Interchanging the given two numbers (not digits) which of the following equation will be NOT correct?

5 and 8

1. $5 + 8 \times 3 - 9 = 14$

2. $5 - 8 + 7 = 10$

3. $8 - 5 \times 2 + 6 = -3$

4. $5 \times 7 + 8 - 3 = 58$

Question ID : 264330187072

Option 1 ID : 264330732219

Option 2 ID : 264330732216

Option 3 ID : 264330732217

Option 4 ID : 264330732218

Status : Answered

Chosen Option : 3

Q.19 Which of the following letter will replace the question mark (?) in the given series?

H, J, L, N, P, ?

- Ans
- 1. Q
 - 2. T
 - 3. R
 - 4. O

Question ID : 264330192228
 Option 1 ID : 264330752266
 Option 2 ID : 264330752269
 Option 3 ID : 264330752267
 Option 4 ID : 264330752268
 Status : Answered
 Chosen Option : 3

Q.20 In the following question, select the figure which can be placed at the sign of question mark (?) from the given alternatives.



Ans

- 1.
- 2.
- 3.
- 4.

Question ID : 264330187415
 Option 1 ID : 264330733589
 Option 2 ID : 264330733591
 Option 3 ID : 264330733590
 Option 4 ID : 264330733588
 Status : Answered
 Chosen Option : 3

Section : Part-B-General Knowledge and General awareness

Q.1 What is the total literacy rate of Bihar according to the 2011 census of India?

- Ans**
- 1. 65.8 percent
 - 2. 61.8 percent
 - 3. 66.8 percent
 - 4. 63.8 percent

Question ID : 264330188658
Option 1 ID : 264330738436
Option 2 ID : 264330738434
Option 3 ID : 264330738437
Option 4 ID : 264330738435
Status : Answered
Chosen Option : 2

Q.2 Which of the following sports is played by Mithali Raj?

- Ans**
- 1. Badminton
 - 2. Hockey
 - 3. Cricket
 - 4. Volleyball

Question ID : 264330192042
Option 1 ID : 264330751524
Option 2 ID : 264330751523
Option 3 ID : 264330751525
Option 4 ID : 264330751522
Status : Answered
Chosen Option : 3

Q.3 In humans sound is produced by voice box. What is the other name used for voice box?

- Ans**
- 1. Lymph Nodes
 - 2. Pharynx
 - 3. Wind pipe
 - 4. Larynx

Question ID : 264330190812
Option 1 ID : 264330746605
Option 2 ID : 264330746604
Option 3 ID : 264330746603
Option 4 ID : 264330746602
Status : Answered
Chosen Option : 4

Q.4 Which of following tribes celebrates the Rongker festival?

- Ans
- 1. Khasi
 - 2. Dimsa
 - 3. Karbi
 - 4. Tiwa

Question ID : 264330192032
Option 1 ID : 264330751483
Option 2 ID : 264330751482
Option 3 ID : 264330751484
Option 4 ID : 264330751485
Status : Answered
Chosen Option : 1

Q.5 Ministry of Labour & Employment, Government of India launched e-Shram portal (eshram.gov.in) on 26th August

- Ans
- 1. 2021
 - 2. 2022
 - 3. 2020
 - 4. 2023

Question ID : 264330188772
Option 1 ID : 264330738891
Option 2 ID : 264330738892
Option 3 ID : 264330738890
Option 4 ID : 264330738893
Status : Answered
Chosen Option : 2

Q.6 The election of the Constituent Assembly of India was held in _____.

- Ans
- 1. April 1946
 - 2. March 1946
 - 3. May 1946
 - 4. July 1946

Question ID : 264330188844
Option 1 ID : 264330739178
Option 2 ID : 264330739180
Option 3 ID : 264330739179
Option 4 ID : 264330739181
Status : Answered
Chosen Option : 1

Q.7 Read the following about Liabilities.

A. Liabilities for any firm are its debts or what it owes to others.

B. For a bank, the main liability is the deposits which people keep with it.

Identify the CORRECT statement/statements.

- Ans
- 1. Only B
 - 2. Neither A nor B
 - 3. Both A and B
 - 4. Only A

Question ID : 264330190844
Option 1 ID : 264330746731
Option 2 ID : 264330746733
Option 3 ID : 264330746732
Option 4 ID : 264330746730
Status : Answered
Chosen Option : 3

Q.8 The Palaeolithic period extends from 2 million years ago to about 12,000 years ago. This long stretch of time is divided into the Lower, Middle and Upper Palaeolithic. This long span of time covers _____ percent of human history.

- Ans
- 1. 89
 - 2. 59
 - 3. 79
 - 4. 99

Question ID : 264330190575
Option 1 ID : 264330745884
Option 2 ID : 264330745882
Option 3 ID : 264330745883
Option 4 ID : 264330745885
Status : Answered
Chosen Option : 3

Q.9 Each game in table tennis consists of how many points?

- Ans
- 1. 11
 - 2. 14
 - 3. 21
 - 4. 12

Question ID : 264330192004
Option 1 ID : 264330751371
Option 2 ID : 264330751372
Option 3 ID : 264330751373
Option 4 ID : 264330751370
Status : Answered
Chosen Option : 3

Q.10 _____ choreographed famous song 'Kahe Chhed Mohe' from the movie Devdas and 'Mohe Rang Do Laal' from Bajirao Mastani.

- Ans
- 1. Kelucharan Mohapatra
 - 2. Pandit Birju Maharaj
 - 3. Rukmini Devi
 - 4. Uday Shankar

Question ID : 264330191871
Option 1 ID : 264330750840
Option 2 ID : 264330750839
Option 3 ID : 264330750838
Option 4 ID : 264330750841
Status : Answered
Chosen Option : 3

Q.11 How is the poverty line in India typically determined?

- Ans
- 1. Levels of income and consumption
 - 2. Quality of education
 - 3. Religious affiliation
 - 4. Access to healthcare facilities

Question ID : 264330188919
Option 1 ID : 264330739481
Option 2 ID : 264330739478
Option 3 ID : 264330739479
Option 4 ID : 264330739480
Status : Answered
Chosen Option : 1

Q.12 Which of the following articles of the Indian Constitution mentions oath or affirmation by the Governor?

- Ans
- 1. Article 161
 - 2. Article 157
 - 3. Article 155
 - 4. Article 159

Question ID : 264330188745
Option 1 ID : 264330738785
Option 2 ID : 264330738783
Option 3 ID : 264330738782
Option 4 ID : 264330738784
Status : Answered
Chosen Option : 2

Q.13 Under the Deen Dayal Upadhyaya Grameen Kaushalya Yojana (DDU-GKY), in Chhattisgarh, how many candidates have been trained as on August 01, 2023?

- Ans**
- 1. 45,825
 - 2. 61,199
 - 3. 85,208
 - 4. 30,502

Question ID : 264330190809
Option 1 ID : 264330746591
Option 2 ID : 264330746592
Option 3 ID : 264330746593
Option 4 ID : 264330746590
Status : Answered
Chosen Option : 2

Q.14 Which Indian has won two Oscars in the same year?

- Ans**
- 1. Gulzar
 - 2. Resul Pookutty
 - 3. A R Rahman
 - 4. MM Keeravani

Question ID : 264330191978
Option 1 ID : 264330751266
Option 2 ID : 264330751267
Option 3 ID : 264330751268
Option 4 ID : 264330751269
Status : Answered
Chosen Option : 3

Q.15 Read the following about the Green Revolution in India.

- A. The revolution was launched to address India's hunger crisis during the second Five Year Plan.
B. The long term objectives included overall agriculture modernization based on rural development, industrial development; infrastructure, raw material etc.
Identify the CORRECT statement/statements.

- Ans**
- 1. Only B
 - 2. Neither A nor B
 - 3. Only A
 - 4. Both A and B

Question ID : 264330191246
Option 1 ID : 264330748339
Option 2 ID : 264330748341
Option 3 ID : 264330748338
Option 4 ID : 264330748340
Status : Answered
Chosen Option : 1

Q.16 Which state is famous for Dandiya-ras dance?

- Ans
- 1. Odisha
 - 2. Gujarat
 - 3. Kerala
 - 4. Bihar

Question ID : 264330191899
Option 1 ID : 264330750953
Option 2 ID : 264330750951
Option 3 ID : 264330750952
Option 4 ID : 264330750950
Status : Answered
Chosen Option : 2

Q.17 The Rowlatt Act of 1919 granted the British colonial government the power to arrest and detains Indians without trial.
Who was the British Viceroy of India at that time?

- Ans
- 1. Lord Dalhousie
 - 2. Lord Irwin
 - 3. Lord Curzon
 - 4. Lord Chelmsford

Question ID : 264330190976
Option 1 ID : 264330747260
Option 2 ID : 264330747258
Option 3 ID : 264330747261
Option 4 ID : 264330747259
Status : Answered
Chosen Option : 2

Q.18 Which sport is played by the Indian sportsperson Jasprit Bumrah?

- Ans
- 1. Football
 - 2. Cricket
 - 3. Volleyball
 - 4. Hockey

Question ID : 264330191262
Option 1 ID : 264330748404
Option 2 ID : 264330748402
Option 3 ID : 264330748405
Option 4 ID : 264330748403
Status : Answered
Chosen Option : 2

Q.19 In 2023, which Indian-origin scientist won the Spinoza Prize, also known as the Dutch Nobel Prize?

- Ans**
- 1. Joyeeta Gupta
 - 2. D. Sivananda Pai
 - 3. Usha Barwale-Zehr
 - 4. Partha Pratim Majumder

Question ID : 264330191769

Option 1 ID : 264330750433

Option 2 ID : 264330750430

Option 3 ID : 264330750432

Option 4 ID : 264330750431

Status : Answered

Chosen Option : 3

Q.20 Which of the following five year plan of India aimed at accelerating food grain production, increasing employment opportunities & raising productivity with focus on 'food, work & productivity'?

- Ans**
- 1. Seventh Five year Plan
 - 2. Sixth Five year Plan
 - 3. Ninth Five year Plan
 - 4. Eighth Five year Plan

Question ID : 264330188651

Option 1 ID : 264330738406

Option 2 ID : 264330738408

Option 3 ID : 264330738409

Option 4 ID : 264330738407

Status : Answered

Chosen Option : 2

Section : Part-C-Elementary Mathematics

Q.1 The average of 36 numbers is 50. If we subtract a number 'T' from each number, then the average becomes 27. What is the value of T?

- Ans**
- 1. 27
 - 2. 22
 - 3. 24
 - 4. 23

Question ID : 264330188536

Option 1 ID : 264330737946

Option 2 ID : 264330737947

Option 3 ID : 264330737948

Option 4 ID : 264330737949

Status : Answered

Chosen Option : 1

Q.2 Find the LCM of 1.2, 1.8, 2, 2.5.

- Ans
- 1. 120
 - 2. 90
 - 3. 25
 - 4. 30

Question ID : 264330192470
Option 1 ID : 264330753237
Option 2 ID : 264330753236
Option 3 ID : 264330753234
Option 4 ID : 264330753235
Status : Answered
Chosen Option : 4

Q.3 What is the value of 9 of $21 \times (3 + 4)$?

- Ans
- 1. 1533
 - 2. 1423
 - 3. 1763
 - 4. 1323

Question ID : 264330188573
Option 1 ID : 264330738096
Option 2 ID : 264330738095
Option 3 ID : 264330738094
Option 4 ID : 264330738097
Status : Answered
Chosen Option : 4

Q.4 If the number 34564A is divisible by 11, then what is the value of A?

- Ans
- 1. 2
 - 2. 6
 - 3. 7
 - 4. 3

Question ID : 264330187982
Option 1 ID : 264330735856
Option 2 ID : 264330735859
Option 3 ID : 264330735857
Option 4 ID : 264330735858
Status : Answered
Chosen Option : 1

Q.5 If price is decreased by 24 percent, then by how much percentage consumption should be increased, so that the expenditure remains the same?

- Ans
- 1. 25.5 percent
 - 2. 28.5 percent
 - 3. 31.5 percent
 - 4. 26.5 percent

Question ID : 264330188005
Option 1 ID : 264330735950
Option 2 ID : 264330735949
Option 3 ID : 264330735948
Option 4 ID : 264330735951
Status : Answered
Chosen Option : 3

Q.6 A shirt was sold for \$40, incurring a loss of 20%. Find the cost price.

- Ans
- 1. \$35
 - 2. \$50
 - 3. \$55
 - 4. \$30

Question ID : 264330191175
Option 1 ID : 264330748055
Option 2 ID : 264330748056
Option 3 ID : 264330748057
Option 4 ID : 264330748054
Status : Answered
Chosen Option : 2

Q.7 Find the area of an equilateral triangle with a side length of 10 cm.

- Ans
- 1. $25\sqrt{3}$ cm²
 - 2. $28\sqrt{3}$ cm²
 - 3. $22\sqrt{3}$ cm²
 - 4. $18\sqrt{3}$ cm²

Question ID : 264330191186
Option 1 ID : 264330748098
Option 2 ID : 264330748101
Option 3 ID : 264330748100
Option 4 ID : 264330748099
Status : Answered
Chosen Option : 1

Q.8 M and N together can complete a work in 40 days. M is 50 percent more efficient than N. M alone can complete the same work in how many days?

- Ans**
- 1. 200/3 days
 - 2. 100/9 days
 - 3. 100/7 days
 - 4. 210/11 days

Question ID : 264330187856
Option 1 ID : 264330735354
Option 2 ID : 264330735353
Option 3 ID : 264330735352
Option 4 ID : 264330735355
Status : Answered
Chosen Option : 1

Q.9 If a certain sum of money becomes thrice of itself in 7 years 3 months at simple interest, then what will be the annual rate of interest?

- Ans**
- 1. 30.23 percent
 - 2. 29.27 percent
 - 3. 27.58 percent
 - 4. 25.68 percent

Question ID : 264330187773
Option 1 ID : 264330735023
Option 2 ID : 264330735021
Option 3 ID : 264330735022
Option 4 ID : 264330735020
Status : Answered
Chosen Option : 3

Q.10 The price of a bike is firstly decreased by 25 percent and then increased by 50 percent. What is the percentage increase in the price of bike?

- Ans**
- 1. 20 percent
 - 2. 10 percent
 - 3. 12.5 percent
 - 4. 25 percent

Question ID : 264330187746
Option 1 ID : 264330734915
Option 2 ID : 264330734914
Option 3 ID : 264330734913
Option 4 ID : 264330734912
Status : Answered
Chosen Option : 3

Q.11 The marked price of an article is 60 percent more than its cost price. If the article is sold for Rs. 300 after offering a discount of Rs. 20, then what will be the profit percentage?

- Ans**
- 1. 45 percent
 - 2. 60 percent
 - 3. 40 percent
 - 4. 50 percent

Question ID : 264330187550
Option 1 ID : 264330734130
Option 2 ID : 264330734131
Option 3 ID : 264330734128
Option 4 ID : 264330734129
Status : Answered
Chosen Option : 2

Q.12 Three numbers are in the ratio of 3 : 5 : 8. If the sum of the largest and the smallest number is 8800, then what is the difference of the largest and the smallest number?

- Ans**
- 1. 1600
 - 2. 4000
 - 3. 800
 - 4. 2400

Question ID : 264330188545
Option 1 ID : 264330737982
Option 2 ID : 264330737985
Option 3 ID : 264330737984
Option 4 ID : 264330737983
Status : Answered
Chosen Option : 2

Q.13 Prince is thrice as good a workman as Raman and therefore is able to finish a work in 28 days less than Raman. In how many days can they together complete the same work?

- Ans**
- 1. 42 days
 - 2. 10.5 days
 - 3. 30 days
 - 4. 35 days

Question ID : 264330187957
Option 1 ID : 264330735759
Option 2 ID : 264330735758
Option 3 ID : 264330735757
Option 4 ID : 264330735756
Status : Answered
Chosen Option : 1

Q.14 A bike moving at a speed of 45 km/hr covers certain distance in 4 hours. If its speed is reduced by 20 km/hr, in what time it will cover the same distance?

- Ans**
- 1. 478 minutes
 - 2. 432 minutes
 - 3. 446 minutes
 - 4. 460 minutes

Question ID : 264330192404
Option 1 ID : 264330752973
Option 2 ID : 264330752970
Option 3 ID : 264330752971
Option 4 ID : 264330752972
Status : Answered
Chosen Option : 2

Q.15 A pair of shoes is sold for ₹960 after a discount of 25%. Find the marked price.

- Ans**
- 1. Rs. 1220
 - 2. Rs. 1200
 - 3. Rs. 1240
 - 4. Rs. 1280

Question ID : 264330188522
Option 1 ID : 264330737893
Option 2 ID : 264330737890
Option 3 ID : 264330737892
Option 4 ID : 264330737891
Status : Answered
Chosen Option : 4

Q.16 What is the value of $444 \div 2 + 41 \times 8 - 26 \times 3$?

- Ans**
- 1. 472
 - 2. 482
 - 3. 452
 - 4. 462

Question ID : 264330187659
Option 1 ID : 264330734566
Option 2 ID : 264330734567
Option 3 ID : 264330734564
Option 4 ID : 264330734565
Status : Answered
Chosen Option : 1

Q.17 Three numbers A, B and C are in the ratio of 5 : 4 : 3 respectively. If C is 18 less than the sum of A and B, then what is the value of B?

- Ans**
- 1. 9
 - 2. 15
 - 3. 18
 - 4. 12

Question ID : 264330188624

Option 1 ID : 264330738300

Option 2 ID : 264330738299

Option 3 ID : 264330738301

Option 4 ID : 264330738298

Status : Answered

Chosen Option : 4

Q.18 Average of five numbers is 75. The average of first two numbers is 6 times of the average of last three numbers, What is the sum of first two numbers?

- Ans**
- 1. 300
 - 2. 260
 - 3. 315
 - 4. 340

Question ID : 264330187844

Option 1 ID : 264330735306

Option 2 ID : 264330735304

Option 3 ID : 264330735307

Option 4 ID : 264330735305

Status : Answered

Chosen Option : 3

Q.19 A person loses 35 percent on selling a book for Rs. 2860. At what price should he sell the book to earn a profit of 20 percent?

- Ans**
- 1. Rs. 5460
 - 2. Rs. 5540
 - 3. Rs. 5280
 - 4. Rs. 6460

Question ID : 264330187968

Option 1 ID : 264330735803

Option 2 ID : 264330735802

Option 3 ID : 264330735801

Option 4 ID : 264330735800

Status : Answered

Chosen Option : 3

Q.20 At what rate per annum will ₹ 33,000 yield a compound interest of ₹ 31,680 in 2 years interest being compounded yearly?

- Ans**
- 1. 50%
 - 2. 55%
 - 3. 30%
 - 4. 40%

Question ID : 264330191683
Option 1 ID : 264330750088
Option 2 ID : 264330750089
Option 3 ID : 264330750086
Option 4 ID : 264330750087
Status : Answered
Chosen Option : 4

Section : Part-D-English

Q.1 Improve the underlined part of the sentence. Choose 'No improvement' as an answer if the sentence is grammatically correct.

I can't getting my wife to go swimming.

- Ans**
- 1. No improvement
 - 2. get I
 - 3. gets my
 - 4. get my

Question ID : 264330186616
Option 1 ID : 264330730643
Option 2 ID : 264330730641
Option 3 ID : 264330730642
Option 4 ID : 264330730640
Status : Not Answered
Chosen Option : --

Q.2 Choose the word that is opposite in meaning to the given word.

Arrival

- Ans**
- 1. Inception
 - 2. Amass
 - 3. Departure
 - 4. Genesis

Question ID : 264330185974
Option 1 ID : 264330728194
Option 2 ID : 264330728195
Option 3 ID : 264330728192
Option 4 ID : 264330728193
Status : Not Answered
Chosen Option : --

Q.3 Choose the most appropriate antonym of the underlined word.

Many of her students live in two- or three-bedroom apartments with families of up to eight people, creating an environment rife with distractions.

- Ans**
- 1. void
 - 2. alive
 - 3. thick
 - 4. replete

Question ID : 264330186017
Option 1 ID : 264330728358
Option 2 ID : 264330728356
Option 3 ID : 264330728359
Option 4 ID : 264330728357
Status : Not Answered
Chosen Option : --

Q.4 Improve the underlined part of the sentence. Choose 'No improvement' as an answer if the sentence is grammatically correct.

Their dog chewed in the furniture.

- Ans**
- 1. chew on
 - 2. chewing on
 - 3. No improvement
 - 4. chewed on

Question ID : 264330185795
Option 1 ID : 264330727513
Option 2 ID : 264330727512
Option 3 ID : 264330727515
Option 4 ID : 264330727514
Status : Not Answered
Chosen Option : --

Q.5 Find the part of the given sentence that has an error in it. If there is no error, choose 'No error'.

To prevent boredom and keep it away, we need to find solutions at home that will provides lasting meaning and challenge to our lives.

- Ans**
- 1. No error
 - 2. we need to find solutions at home that will provides
 - 3. To prevent boredom and keep it away,
 - 4. lasting meaning and challenge to our lives.

Question ID : 264330186215
Option 1 ID : 264330729115
Option 2 ID : 264330729113
Option 3 ID : 264330729112
Option 4 ID : 264330729114
Status : Not Answered
Chosen Option : --

Q.6 Four words are given, out of which only one word is spelt correct. Choose the correct spelt word.

- Ans**
- 1. PLAGERIZE
 - 2. PERCIEVE
 - 3. OUTRAGOUS
 - 4. MEMENTO

Question ID : 264330186904
Option 1 ID : 264330731738
Option 2 ID : 264330731736
Option 3 ID : 264330731737
Option 4 ID : 264330731739
Status : Not Answered
Chosen Option : --

Q.7 Select the most appropriate meaning of the given idiom.

Lend an ear

- Ans**
- 1. To lend something important.
 - 2. Impossible task
 - 3. To go to remote places.
 - 4. To listen closely.

Question ID : 264330186565
Option 1 ID : 264330730445
Option 2 ID : 264330730446
Option 3 ID : 264330730447
Option 4 ID : 264330730444
Status : Not Answered
Chosen Option : --

Q.8 Improve the underlined part of the sentence. Choose 'No improvement' as an answer if the sentence is grammatically correct.

I wheeled a recycles bin to the curb.

- Ans**
- 1. recycling bins
 - 2. recycled bins
 - 3. No improvement
 - 4. recycling bin

Question ID : 264330186784
Option 1 ID : 264330731281
Option 2 ID : 264330731280
Option 3 ID : 264330731283
Option 4 ID : 264330731282
Status : Not Answered
Chosen Option : --

Q.9 Select the most appropriate word to fill in the blank.

The Internet is an _____ resource for teachers.

- Ans
- 1. antique
 - 2. invaluable
 - 3. inimical
 - 4. auspicious

Question ID : 264330186007
Option 1 ID : 264330728323
Option 2 ID : 264330728320
Option 3 ID : 264330728322
Option 4 ID : 264330728321
Status : Not Answered
Chosen Option : --

Q.10 Choose the most appropriate synonym of the underlined word.

Some depended on small donations, others on the benevolence of wealthy patrons.

- Ans
- 1. Divinity
 - 2. Harshness
 - 3. Cruelty
 - 4. Kindness

Question ID : 264330185952
Option 1 ID : 264330728111
Option 2 ID : 264330728108
Option 3 ID : 264330728109
Option 4 ID : 264330728110
Status : Not Answered
Chosen Option : --

Q.11 Find the part of the given sentence that has an error in it. If there is no error, choose 'No error'.

Visitors to Chernobyl are advised not to touching the dogs.

- Ans
- 1. are advised not to
 - 2. touching the dogs.
 - 3. Visitors to Chernobyl
 - 4. No error

Question ID : 264330186612
Option 1 ID : 264330730625
Option 2 ID : 264330730626
Option 3 ID : 264330730624
Option 4 ID : 264330730627
Status : Not Answered
Chosen Option : --

Q.12 Choose the idiom/phrase that can substitute the highlighted group of words meaningfully.

He is the director's **favourite boy**.

- Ans**
- 1. Break a leg
 - 2. Blue eyed boy
 - 3. Good old boy
 - 4. Above board

Question ID : 264330186335

Option 1 ID : 264330729568

Option 2 ID : 264330729569

Option 3 ID : 264330729571

Option 4 ID : 264330729570

Status : Not Answered

Chosen Option : --

Q.13 Select the incorrectly spelt word from the given sentence.

I am studying about insects in zoology, and I have learned many things about butterflies.

- Ans**
- 1. butterflys
 - 2. studying
 - 3. insects
 - 4. learned

Question ID : 264330185915

Option 1 ID : 264330727971

Option 2 ID : 264330727968

Option 3 ID : 264330727969

Option 4 ID : 264330727970

Status : Not Answered

Chosen Option : --

Q.14 Find the part of the given sentence that has an error in it. If there is no error, choose 'No error'.

You can learn about the well ways to make money.

- Ans**
- 1. You can learn
 - 2. ways to make money.
 - 3. No error
 - 4. about the well

Question ID : 264330185583

Option 1 ID : 264330726704

Option 2 ID : 264330726706

Option 3 ID : 264330726707

Option 4 ID : 264330726705

Status : Not Answered

Chosen Option : --

Q.15 Select the most appropriate option for the given blank.

Please _____ quiet, everyone; the principal will be here anytime.

- Ans
- 1. keep
 - 2. have
 - 3. make
 - 4. set

Question ID : 264330186043
Option 1 ID : 264330728456
Option 2 ID : 264330728458
Option 3 ID : 264330728459
Option 4 ID : 264330728457
Status : Not Answered
Chosen Option : --

Comprehension:

Read the passage carefully and select the correct answer for the given blanks out of the four alternatives.

The deep depression over the west-central Bay of Bengal is likely to (1) _____ into a cyclonic storm by November 17 morning, said Uma Shankar Das, senior scientist in India Meteorological Department's Bhubaneswar regional centre. Under the (2) _____ of the system, heavy to moderate rain may occur in some parts of Odisha. (3) _____ to sources, Paddy farmers in Odisha have already been suffering from moisture stress due to (4) _____ rainfall in Ganjam and Gajapati districts, while pest attacks have been reported in western Odisha districts. Unseasonal rains at the time of the harvest will (5) _____ all hopes of a successful crop, said a farmer.

SubQuestion No : 16

Q.16 Select the most appropriate option for blank (1)

- Ans
- 1. intensify
 - 2. plus
 - 3. manipulate
 - 4. derive

Question ID : 264330186010
Option 1 ID : 264330728328
Option 2 ID : 264330728331
Option 3 ID : 264330728329
Option 4 ID : 264330728330
Status : Not Answered
Chosen Option : --

Comprehension:

Read the passage carefully and select the correct answer for the given blanks out of the four alternatives.

The deep depression over the west-central Bay of Bengal is likely to (1) _____ into a cyclonic storm by November 17 morning, said Uma Shankar Das, senior scientist in India Meteorological Department's Bhubaneswar regional centre. Under the (2) _____ of the system, heavy to moderate rain may occur in some parts of Odisha, (3) _____ to sources. Paddy farmers in Odisha have already been suffering from moisture stress due to (4) _____ rainfall in Ganjam and Gajapati districts, while pest attacks have been reported in western Odisha districts. Unseasonal rains at the time of the harvest will (5) _____ all hopes of a successful crop, said a farmer.

SubQuestion No : 17

Q.17 Select the most appropriate option for blank (2)

- Ans
- 1. guidance
 - 2. influence
 - 3. toll
 - 4. hospitality

Question ID : 264330186011

Option 1 ID : 264330728335

Option 2 ID : 264330728334

Option 3 ID : 264330728332

Option 4 ID : 264330728333

Status : Not Answered

Chosen Option : --

Comprehension:

Read the passage carefully and select the correct answer for the given blanks out of the four alternatives.

The deep depression over the west-central Bay of Bengal is likely to (1) _____ into a cyclonic storm by November 17 morning, said Uma Shankar Das, senior scientist in India Meteorological Department's Bhubaneswar regional centre. Under the (2) _____ of the system, heavy to moderate rain may occur in some parts of Odisha, (3) _____ to sources. Paddy farmers in Odisha have already been suffering from moisture stress due to (4) _____ rainfall in Ganjam and Gajapati districts, while pest attacks have been reported in western Odisha districts. Unseasonal rains at the time of the harvest will (5) _____ all hopes of a successful crop, said a farmer.

SubQuestion No : 18

Q.18 Select the most appropriate option for blank (3)

- Ans
- 1. congruent
 - 2. stated
 - 3. alike
 - 4. according

Question ID : 264330186012

Option 1 ID : 264330728337

Option 2 ID : 264330728336

Option 3 ID : 264330728338

Option 4 ID : 264330728339

Status : Not Answered

Chosen Option : --

Comprehension:

Read the passage carefully and select the correct answer for the given blanks out of the four alternatives.

The deep depression over the west-central Bay of Bengal is likely to (1) _____ into a cyclonic storm by November 17 morning, said Uma Shankar Das, senior scientist in India Meteorological Department's Bhubaneswar regional centre. Under the (2) _____ of the system, heavy to moderate rain may occur in some parts of Odisha, (3) _____ to sources. Paddy farmers in Odisha have already been suffering from moisture stress due to (4) _____ rainfall in Ganjam and Gajapati districts, while pest attacks have been reported in western Odisha districts. Unseasonal rains at the time of the harvest will (5) _____ all hopes of a successful crop, said a farmer.

SubQuestion No : 19

Q.19 Select the most appropriate option for blank (4)

- Ans
- 1. round
 - 2. plenty
 - 3. inadequate
 - 4. adept

Question ID : 264330186013

Option 1 ID : 264330728340

Option 2 ID : 264330728343

Option 3 ID : 264330728342

Option 4 ID : 264330728341

Status : Not Answered

Chosen Option : --

Comprehension:

Read the passage carefully and select the correct answer for the given blanks out of the four alternatives.

The deep depression over the west-central Bay of Bengal is likely to (1) _____ into a cyclonic storm by November 17 morning, said Uma Shankar Das, senior scientist in India Meteorological Department's Bhubaneswar regional centre. Under the (2) _____ of the system, heavy to moderate rain may occur in some parts of Odisha, (3) _____ to sources. Paddy farmers in Odisha have already been suffering from moisture stress due to (4) _____ rainfall in Ganjam and Gajapati districts, while pest attacks have been reported in western Odisha districts. Unseasonal rains at the time of the harvest will (5) _____ all hopes of a successful crop, said a farmer.

SubQuestion No : 20

Q.20 Select the most appropriate option for blank (5)

- Ans
- 1. clasp
 - 2. shatter
 - 3. piece
 - 4. form

Question ID : 264330186014

Option 1 ID : 264330728344

Option 2 ID : 264330728345

Option 3 ID : 264330728347

Option 4 ID : 264330728346

Status : Not Answered

Chosen Option : --

Q.1 निम्नलिखित प्रश्न में, चार विकल्पों में से, उस विकल्प का चयन करें जो कोष्ठक में दिए गए शब्द के पर्यायवाची शब्द का सही विकल्प नहीं है।
कुछ ही दिनों में, ईश्वर की कृपा से मेरा शरीर तुम लोगों की दृष्टि से (ओझल) _____ हो जायेगा।

- Ans**
- 1. अदृश्य
 - 2. विलुप्त
 - 3. बिनौरा
 - 4. अंतर्धान

Question ID : 264330189931
Option 1 ID : 264330743334
Option 2 ID : 264330743335
Option 3 ID : 264330743336
Option 4 ID : 264330743337
Status : Answered
Chosen Option : 2

Q.2 दिए गए वाक्य में उचित पर्यायवाची शब्द का चयन करके रिक्त स्थान की पूर्ति करें।

इस पाठ का _____ (सारांश) निकालें।

- Ans**
- 1. दिवाकर
 - 2. निचोड़
 - 3. मनोज
 - 4. निश्चित

Question ID : 264330189091
Option 1 ID : 264330740137
Option 2 ID : 264330740134
Option 3 ID : 264330740136
Option 4 ID : 264330740135
Status : Answered
Chosen Option : 2

Q.3 निम्नलिखित वाक्य में, उस वाक्यांश को पहचानिए जिसमें मात्राओं से संबंधित अशुद्धियाँ हैं। यदि कोई गलती नहीं है तो 'कोई त्रुटि नहीं है' का चुनाव कीजिए।
विश्व जनसंख्या दिवस मनाने का मुख्य उद्देश्य वर्तमान में/ बढ़ती आबादी के कारण होने वाले दुष्प्रभावों और इससे जुड़े/ अन्य मुद्दों और इसके महत्व पर ध्यान केंद्रित करना है।

- Ans**
- 1. अन्य मुद्दों और इसके महत्व पर ध्यान केंद्रित करना है
 - 2. कोई त्रुटि नहीं है
 - 3. विश्व जनसंख्या दिवस मनाने का मुख्य उद्देश्य वर्तमान में
 - 4. बढ़ती आबादी के कारण होने वाले दुष्प्रभावों और इससे जुड़े

Question ID : 264330189936
Option 1 ID : 264330743356
Option 2 ID : 264330743357
Option 3 ID : 264330743354
Option 4 ID : 264330743355
Status : Answered
Chosen Option : 2

Q.4 निम्नलिखित प्रश्न में, चार विकल्पों में से, उस विकल्प का चयन करें जो रिक्त स्थान के लिए सही भाववाचक संज्ञा वाला विकल्प हो।
मेरा भाई इतना _____ है कि सामान कहीं भी रखकर भूल जाता है।

- Ans
- 1. बेकार
 - 2. भुलक्कड़
 - 3. लुटेरा
 - 4. बुद्ध

Question ID : 264330189772
Option 1 ID : 264330742733
Option 2 ID : 264330742732
Option 3 ID : 264330742730
Option 4 ID : 264330742731
Status : Answered
Chosen Option : 2

Q.5 निम्नलिखित प्रश्न में, चार विकल्पों में से, उस विकल्प का चयन करें जो रिक्त स्थान के लिए सही पुल्लिंग रूप वाला विकल्प हो।
मैंने आज ही एक बहुत सुंदर _____ देखा।

- Ans
- 1. कुर्सी
 - 2. किताब
 - 3. नक्शा
 - 4. मंजिल

Question ID : 264330189668
Option 1 ID : 264330742337
Option 2 ID : 264330742335
Option 3 ID : 264330742334
Option 4 ID : 264330742336
Status : Answered
Chosen Option : 3

Q.6 दिए गए वाक्य में रेखांकित शब्द के लिए सही वर्तनी जात कीजिए।

भारत के बहुत से वैग्यानिक विदेश गए हैं।

- Ans
- 1. वैज्ञानिक
 - 2. वैज्ञानीक
 - 3. वेज्ञानिक
 - 4. वेज्ञानीक

Question ID : 264330188306
Option 1 ID : 264330737112
Option 2 ID : 264330737114
Option 3 ID : 264330737113
Option 4 ID : 264330737115
Status : Answered
Chosen Option : 1

Q.7 दिए गए वाक्य में से निरर्थक शब्द ज्ञात कीजिए।

तुम रुको। मैं घूमते-घामते सामान ले आऊँगा।

- Ans
- 1. रुको
 - 2. सामान
 - 3. घूमते-घामते
 - 4. आऊँगा

Question ID : 264330189141

Option 1 ID : 264330740326

Option 2 ID : 264330740328

Option 3 ID : 264330740329

Option 4 ID : 264330740327

Status : Answered

Chosen Option : 3

Q.8 दिए गए वाक्य में रेखांकित शब्द का विलोम शब्द ज्ञात कीजिए।

आपको उनसे औपचारिकता से मिलना चाहिए था।

- Ans
- 1. अनौपचारिकता
 - 2. मर्यादा
 - 3. अनौद्योगिक
 - 4. अनौचित्य

Question ID : 264330188946

Option 1 ID : 264330739583

Option 2 ID : 264330739585

Option 3 ID : 264330739582

Option 4 ID : 264330739584

Status : Answered

Chosen Option : 1

Q.9 दिए गए वाक्यांश के लिए सार्थक शब्द ज्ञात कीजिए।

ऊपर कहा गया

- Ans
- 1. खंड
 - 2. निम्नलिखित
 - 3. उपरोक्त
 - 4. उपर्युक्त

Question ID : 264330188256

Option 1 ID : 264330736921

Option 2 ID : 264330736920

Option 3 ID : 264330736923

Option 4 ID : 264330736922

Status : Answered

Chosen Option : 4

Q.10 निम्नलिखित प्रश्न में, दिए गए चार विकल्पों में से, उस विकल्प का चयन करें जो दिए गए मुहावरे के अर्थ को सर्वश्रेष्ठ रूप से व्यक्त करता है।

उड़ती चिड़िया पहचानना

- Ans**
- 1. बड़ी-बड़ी बातें करना
 - 2. बहुत अनुभवी होना
 - 3. बिलकुल धूर्त होना
 - 4. प्रकृति प्रेमी होना

Question ID : 264330189095

Option 1 ID : 264330740153

Option 2 ID : 264330740152

Option 3 ID : 264330740150

Option 4 ID : 264330740151

Status : Answered

Chosen Option : 2

Q.11 दिए गए वाक्य में रेखांकित शब्द का विलोम शब्द ज्ञात कीजिए।

पक्षपात करना अच्छी बात नहीं है।

- Ans**
- 1. विग्रय
 - 2. खण्ड
 - 3. निष्पक्षता
 - 4. अलग

Question ID : 264330189260

Option 1 ID : 264330740779

Option 2 ID : 264330740780

Option 3 ID : 264330740781

Option 4 ID : 264330740778

Status : Answered

Chosen Option : 3

Q.12 निम्नलिखित प्रश्न में, दिए गए चार विकल्पों में से, उस विकल्प का चयन करें जो दिए गए मुहावरे के अर्थ को सर्वश्रेष्ठ रूप से व्यक्त करता है।

सीधे मुँह बात न करना

- Ans**
- 1. अत्यंत बीमार होना
 - 2. हर समय मजाक करना
 - 3. अभिमान से बात करना
 - 4. मुझे की बात न करना

Question ID : 264330188261

Option 1 ID : 264330736940

Option 2 ID : 264330736941

Option 3 ID : 264330736943

Option 4 ID : 264330736942

Status : Answered

Chosen Option : 4

Q.13 निम्नलिखित प्रश्न में, चार विकल्पों में से, उस विकल्प का चयन करें जो रिक्त स्थान के लिए सही शब्द वाला विकल्प हो।
पिछले कुछ वर्षों में विज्ञान और टेक्नोलॉजी के कारण कृषि क्षेत्र में नवीन _____ का इस्तेमाल होने लगा है।

- Ans
- 1. मवेशियों
 - 2. व्यक्तियों
 - 3. प्रकरणों
 - 4. उपकरणों

Question ID : 264330188311
 Option 1 ID : 264330737133
 Option 2 ID : 264330737132
 Option 3 ID : 264330737134
 Option 4 ID : 264330737135
 Status : Answered
 Chosen Option : 4

Q.14 निम्नलिखित वाक्य में रेखांकित भाग के लिए एक शब्द ज्ञात कीजिए।

उस साधु का कोई शत्रु नहीं था।

- Ans
- 1. सर्वप्रिय
 - 2. अशत्रु
 - 3. सर्वमित्र
 - 4. अजातशत्रु

Question ID : 264330188193
 Option 1 ID : 264330736680
 Option 2 ID : 264330736682
 Option 3 ID : 264330736683
 Option 4 ID : 264330736681
 Status : Answered
 Chosen Option : 4

Q.15 दिए गए वाक्य में रेखांकित शब्द का तद्भव शब्द ज्ञात कीजिए।

ढाई आखर प्रेम के मानव को बदल सकते हैं।

- Ans
- 1. अक्षर
 - 2. अगर
 - 3. सक्षम
 - 4. अजगर

Question ID : 264330188265
 Option 1 ID : 264330736957
 Option 2 ID : 264330736958
 Option 3 ID : 264330736956
 Option 4 ID : 264330736959
 Status : Answered
 Chosen Option : 1

Comprehension:

नीचे दिए गए गद्य में कुछ शब्द छोड़ दिए गए हैं और प्रत्येक रिक्त स्थान के चार विकल्प दिए गए हैं। इन चारों में से कौन सा विकल्प रिक्त स्थान की पूर्ति करेगा-

वित्त मंत्रालय ने देश के सभी सरकारी बैंको को अपनी साइबर (1)_____ की समीक्षा और उसे (2)_____ करने की जो सलाह दी, उस पर अमल भी (3)_____ किया जाना चाहिए। यह इसलिए आवश्यक है, क्योंकि बैंको की साइबर सुरक्षा में (4)_____ लगती ही रहती है। साइबर हमलों में भारत के भी विभिन्न (5)_____ हैं।

SubQuestion No : 16

Q.16 रिक्त (1) के लिए सबसे उपयुक्त विकल्प का चयन कीजिए।

- Ans 1. सुरक्षा
 2. वसूली
 3. निराशा
 4. आरक्षण

Question ID : 264330189146

Option 1 ID : 264330740343

Option 2 ID : 264330740345

Option 3 ID : 264330740344

Option 4 ID : 264330740342

Status : Answered

Chosen Option : 1

Comprehension:

नीचे दिए गए गद्य में कुछ शब्द छोड़ दिए गए हैं और प्रत्येक रिक्त स्थान के चार विकल्प दिए गए हैं। इन चारों में से कौन सा विकल्प रिक्त स्थान की पूर्ति करेगा-

वित्त मंत्रालय ने देश के सभी सरकारी बैंको को अपनी साइबर (1)_____ की समीक्षा और उसे (2)_____ करने की जो सलाह दी, उस पर अमल भी (3)_____ किया जाना चाहिए। यह इसलिए आवश्यक है, क्योंकि बैंको की साइबर सुरक्षा में (4)_____ लगती ही रहती है। साइबर हमलों में भारत के भी विभिन्न (5)_____ हैं।

SubQuestion No : 17

Q.17 रिक्त (2) के लिए सबसे उपयुक्त विकल्प का चयन कीजिए।

- Ans 1. लंबी
 2. ढीली
 3. छोटी
 4. मजबूत

Question ID : 264330189147

Option 1 ID : 264330740347

Option 2 ID : 264330740346

Option 3 ID : 264330740349

Option 4 ID : 264330740348

Status : Answered

Chosen Option : 4

Comprehension:

नीचे दिए गए गद्य में कुछ शब्द छोड़ दिए गए हैं और प्रत्येक रिक्त स्थान के चार विकल्प दिए गए हैं। इन चारों में से कौन सा विकल्प रिक्त स्थान की पूर्ति करेगा-

वित्त मंत्रालय ने देश के सभी सरकारी बैंको को अपनी साइबर (1)_____ की समीक्षा और उसे (2)_____ करने की जो सलाह दी, उस पर अमल भी (3)_____ किया जाना चाहिए। यह इसलिए आवश्यक है, क्योंकि बैंको की साइबर सुरक्षा में (4)_____ लगती ही रहती है। साइबर हमलों में भारत के भी विभिन्न (5)_____ हैं।

SubQuestion No : 18

Q.18 रिक्त (3) के लिए सबसे उपयुक्त विकल्प का चयन कीजिए।

Ans 1. सुनिश्चित

2. दुर्जन

3. दुर्गम

4. अनर्थ

Question ID : 264330189148

Option 1 ID : 264330740350

Option 2 ID : 264330740351

Option 3 ID : 264330740352

Option 4 ID : 264330740353

Status : Answered

Chosen Option : 1

Comprehension:

नीचे दिए गए गद्य में कुछ शब्द छोड़ दिए गए हैं और प्रत्येक रिक्त स्थान के चार विकल्प दिए गए हैं। इन चारों में से कौन सा विकल्प रिक्त स्थान की पूर्ति करेगा-

वित्त मंत्रालय ने देश के सभी सरकारी बैंको को अपनी साइबर (1)_____ की समीक्षा और उसे (2)_____ करने की जो सलाह दी, उस पर अमल भी (3)_____ किया जाना चाहिए। यह इसलिए आवश्यक है, क्योंकि बैंको की साइबर सुरक्षा में (4)_____ लगती ही रहती है। साइबर हमलों में भारत के भी विभिन्न (5)_____ हैं।

SubQuestion No : 19

Q.19 रिक्त (4) के लिए सबसे उपयुक्त विकल्प का चयन कीजिए।

Ans 1. प्राथना

2. चमकीला

3. सैध

4. चमचम

Question ID : 264330189149

Option 1 ID : 264330740356

Option 2 ID : 264330740355

Option 3 ID : 264330740357

Option 4 ID : 264330740354

Status : Answered

Chosen Option : 3

Comprehension:

नीचे दिए गए गद्य में कुछ शब्द छोड़ दिए गए हैं और प्रत्येक रिक्त स्थान के चार विकल्प दिए गए हैं। इन चारों में से कौन सा विकल्प रिक्त स्थान की पूर्ति करेगा-

वित्त मंत्रालय ने देश के सभी सरकारी बैंको को अपनी साइबर (1)_____ की समीक्षा और उसे (2)_____ करने की जो सलाह दी, उस पर अमल भी (3)_____ किया जाना चाहिए। यह इसलिए आवश्यक है, क्योंकि बैंको की साइबर सुरक्षा में (4)_____ लगती ही रहती है। साइबर हमलों में भारत के भी विभिन्न (5)_____ हैं।

SubQuestion No : 20

Q.20 रिक्त (5) के लिए सबसे उपयुक्त विकल्प का चयन कीजिए।

- Ans 1. संस्थान
 2. प्रदेश
 3. स्वदेश
 4. विदेश

Question ID : 264330189150

Option 1 ID : 264330740359

Option 2 ID : 264330740358

Option 3 ID : 264330740361

Option 4 ID : 264330740360

Status : Answered

Chosen Option : 1