

## Constable GD in Central Armed Police Forces CAPFs SSF Rifleman GD in Assam Rifles Examination 2024

Roll Number	
Candidate Name	
Venue Name	
Exam Date	27/02/2024
Exam Time	2:30 PM - 3:30 PM
Subject	Constable GD Examination 2024

Section : Part-A-General Intelligence and Reasoning

**Q.1** In the following question, select the figure which can be placed at the sign of question mark (?) from the given alternatives.



Ans

- ✗ 1.
- ✗ 2.
- ✗ 3.
- ✓ 4.

Question ID : 264330190122

Option 1 ID : 264330744072

Option 2 ID : 264330744071

Option 3 ID : 264330744070

Option 4 ID : 264330744073

Status : Answered

Chosen Option : 4

**Q.2** By interchanging the given two signs which of the following equation will be correct?

× and +

I.  $4 \times 3 + 6 - 7 \div 1 = 15$

II.  $7 + 5 \times 2 - 8 \div 4 = 33$

- Ans**
- 1. Neither I nor II
  - 2. Both I and II
  - 3. Only I
  - 4. Only II

Question ID : 264330187132

Option 1 ID : 264330732459

Option 2 ID : 264330732458

Option 3 ID : 264330732456

Option 4 ID : 264330732457

Status : Answered

Chosen Option : 3

**Q.3** In the following question below are given some statements followed by some conclusions based on those statements.

Taking the given statements to be true even if they seem to be at variance from commonly known facts. Read all the conclusions and then decide which of the given conclusion logically follows the given statements.

Statements:

I. Some mobile are watch.

II. No watch is laptop.

Conclusions:

I. No laptop is mobile.

II. Some laptop are not watch.

- Ans**
- 1. Both conclusions I and II follows
  - 2. Only conclusion II follows
  - 3. Only conclusion I follows
  - 4. Neither conclusion follows

Question ID : 264330190457

Option 1 ID : 264330745412

Option 2 ID : 264330745411

Option 3 ID : 264330745410

Option 4 ID : 264330745413

Status : Answered

Chosen Option : 2

Q.4 If a mirror is placed on the line AB, then out of the option figures which figure will be the right image of the question figure?



Ans

1.



2.



3.



4.



Question ID : 264330191526

Option 1 ID : 264330749458

Option 2 ID : 264330749459

Option 3 ID : 264330749460

Option 4 ID : 264330749461

Status : Answered

Chosen Option : 2

**Q.5** In a certain code language, 'MORAL' is coded as '57638', 'RIAL' is coded as '3859', 'METRE' is coded as '52172'. What may be the code for 'L' in that code language?

- Ans**
- 1. 3
  - 2. 7
  - 3. 6
  - 4. 5

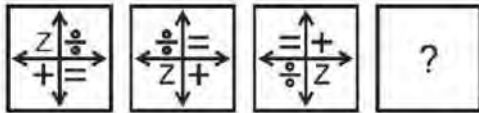
Question ID : **264330187125**  
Option 1 ID : **264330732430**  
Option 2 ID : **264330732429**  
Option 3 ID : **264330732431**  
Option 4 ID : **264330732428**  
Status : **Answered**  
Chosen Option : **1**

**Q.6** Seven boys P, Q, R, S, T, U and V are sitting around a circular table facing towards the centre (not necessarily in the same order). V is second to the right of R. U is to immediate left of R. P is third to the right of T. S and T are the immediate neighbour of Q. Who is sitting on the immediate right of R?

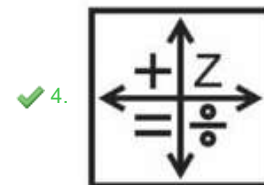
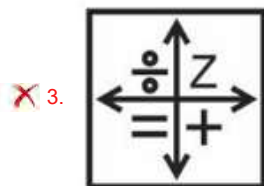
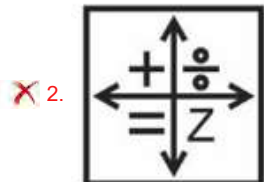
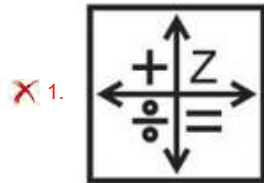
- Ans**
- 1. U
  - 2. P
  - 3. Q
  - 4. T

Question ID : **264330190276**  
Option 1 ID : **264330744687**  
Option 2 ID : **264330744688**  
Option 3 ID : **264330744689**  
Option 4 ID : **264330744686**  
Status : **Answered**  
Chosen Option : **2**

**Q.7** In the following question, select the figure which can be placed at the sign of question mark (?) from the given alternatives.



**Ans**



Question ID : 264330191384

Option 1 ID : 264330748893

Option 2 ID : 264330748892

Option 3 ID : 264330748890

Option 4 ID : 264330748891

Status : Answered

Chosen Option : 4

**Q.8** Which of the following numbers will replace the question mark (?) in the given series?

?, 36, 54, 72, 90, 108

**Ans** ✓ 1. 18

✗ 2. 24

✗ 3. 16

✗ 4. 12

Question ID : 264330192379

Option 1 ID : 264330752872

Option 2 ID : 264330752873

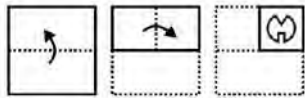
Option 3 ID : 264330752871

Option 4 ID : 264330752870

Status : Answered

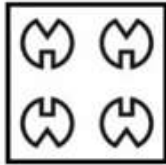
Chosen Option : 1

**Q.9** A piece of paper is folded and punched as shown below in the question figures. From the given option figures, indicate how it will appear when opened.



**Ans**

✓ 1.



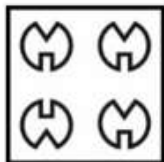
✗ 2.



✗ 3.



✗ 4.



Question ID : 264330187436

Option 1 ID : 264330733672

Option 2 ID : 264330733673

Option 3 ID : 264330733674

Option 4 ID : 264330733675

Status : Answered

Chosen Option : 1

**Q.10** In the following question, select the related letters from the given alternatives.

GHL : LMQ :: YXM : ?

✗ 1. XVU

✗ 2. MJY

✗ 3. PON

✓ 4. DCR

Question ID : 264330190490

Option 1 ID : 264330745543

Option 2 ID : 264330745542

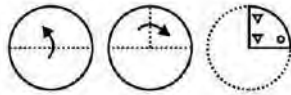
Option 3 ID : 264330745545

Option 4 ID : 264330745544

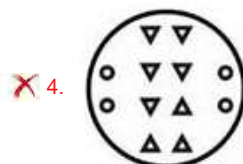
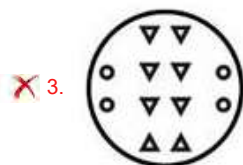
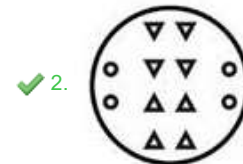
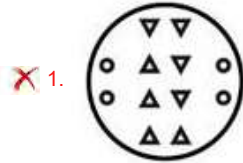
Status : Answered

Chosen Option : 4

**Q.11** A piece of paper is folded and punched as shown below in the question figures. From the given option figures, indicate how it will appear when opened.



Ans



Question ID : 264330187398  
 Option 1 ID : 264330733520  
 Option 2 ID : 264330733522  
 Option 3 ID : 264330733521  
 Option 4 ID : 264330733523  
 Status : Answered  
 Chosen Option : 2

**Q.12** After arranging the given words according to dictionary order, which word will come at 'Third' position?

1. Principal
2. Prince
3. Principle
4. Princess
5. Princely

- Ans
- 1. Principal
  - 2. Princely
  - 3. Principle
  - 4. Princess

Question ID : 264330190109  
 Option 1 ID : 264330744021  
 Option 2 ID : 264330744018  
 Option 3 ID : 264330744020  
 Option 4 ID : 264330744019  
 Status : Answered  
 Chosen Option : 4

**Q.13** Five friends P, B, C, G and H are sitting around a circular table facing towards the centre. H is sitting to the immediate right of C. B sitting third to the left of H. P is not an immediate neighbour of C. Who is sitting on the immediate left of C?

- Ans**
- 1. H
  - 2. B
  - 3. P
  - 4. G

Question ID : 264330190535  
 Option 1 ID : 264330745723  
 Option 2 ID : 264330745725  
 Option 3 ID : 264330745722  
 Option 4 ID : 264330745724  
 Status : Answered  
 Chosen Option : 4

**Q.14** Which of the following groups of letters when sequentially placed from left to right will complete the given series?

efgeifge ge gef ef efg

- Ans**
- 1. fege
  - 2. gefe
  - 3. ffgg
  - 4. efeg

Question ID : 264330187140  
 Option 1 ID : 264330732490  
 Option 2 ID : 264330732491  
 Option 3 ID : 264330732488  
 Option 4 ID : 264330732489  
 Status : Answered  
 Chosen Option : 3

**Q.15** If  $40 * 30 \# 20 @ 10 = 1230$  and  $70 * 6 \# 10 @ 3 = 433$ , then

$8 * 4 \# 5 @ 9 = ?$

- Ans**
- 1. 46
  - 2. 40
  - 3. 60
  - 4. 50

Question ID : 264330187113  
 Option 1 ID : 264330732381  
 Option 2 ID : 264330732380  
 Option 3 ID : 264330732383  
 Option 4 ID : 264330732382  
 Status : Answered  
 Chosen Option : 1



**Q.16** Which of the following letter-number cluster will replace the question mark (?) in the given series?

POL15, ?, RSR19, SUU21, TWX23, UYA25

- Ans**
- 1. QQO16
  - 2. QPM17
  - 3. QQO17
  - 4. QPM16

Question ID : 264330192368  
Option 1 ID : 264330752829  
Option 2 ID : 264330752826  
Option 3 ID : 264330752827  
Option 4 ID : 264330752828  
Status : Answered  
Chosen Option : 3

**Q.17** In a certain code language, 'LATEST' is coded as 'RQCRYJ'. What is the code for 'GOLDEN' in that code language?

- Ans**
- 1. LCAJME
  - 2. LCBJME
  - 3. LCBIME
  - 4. LCBJNE

Question ID : 264330191373  
Option 1 ID : 264330748847  
Option 2 ID : 264330748848  
Option 3 ID : 264330748846  
Option 4 ID : 264330748849  
Status : Answered  
Chosen Option : 2

**Q.18** In the following question, select the related letter pair from the given alternatives.

IGTW : JHUX :: ?

- Ans**
- 1. FXQN : GYRO
  - 2. RSHP : NDLM
  - 3. NTUV : DXKU
  - 4. ULDX : RUXT

Question ID : 264330190491  
Option 1 ID : 264330745546  
Option 2 ID : 264330745549  
Option 3 ID : 264330745548  
Option 4 ID : 264330745547  
Status : Answered  
Chosen Option : 1

Q.19 In the following question, select the missing number from the given series.

44, 13, 50, 9, 52, ?

- Ans
- 1. 6
  - 2. 4
  - 3. 9
  - 4. 7

Question ID : 264330187351  
Option 1 ID : 264330733335  
Option 2 ID : 264330733334  
Option 3 ID : 264330733332  
Option 4 ID : 264330733333  
Status : Answered  
Chosen Option : 3

Q.20 Pointing towards a photo of a lady, Ram said, "She is the sister of my mother's daughter". How lady is related to Ram?

- Ans
- 1. Daughter
  - 2. Wife
  - 3. Sister
  - 4. Mother

Question ID : 264330190174  
Option 1 ID : 264330744278  
Option 2 ID : 264330744280  
Option 3 ID : 264330744279  
Option 4 ID : 264330744281  
Status : Answered  
Chosen Option : 3

Section : Part-B-General Knowledge and General awareness

Q.1 Which of the following ground hosted the final of the Ranji Trophy 2022/23?

- Ans
- 1. Eden Gardens
  - 2. Arun Jaitley Stadium
  - 3. M. A. Chidambaram Stadium
  - 4. Wankhede Stadium

Question ID : 264330188826  
Option 1 ID : 264330739108  
Option 2 ID : 264330739109  
Option 3 ID : 264330739106  
Option 4 ID : 264330739107  
Status : Answered  
Chosen Option : 1

Q.2 In which year was the Vernacular Press Act passed in India?

- Ans
- 1. 1872
  - 2. 1868
  - 3. 1878
  - 4. 1862

Question ID : 264330188841  
Option 1 ID : 264330739168  
Option 2 ID : 264330739167  
Option 3 ID : 264330739169  
Option 4 ID : 264330739166  
Status : Answered  
Chosen Option : 3

Q.3 In the secondary sector, what kinds of activities are typically carried out?

- Ans
- 1. Growing crops and raising livestock
  - 2. Extracting natural resources
  - 3. Providing support services to industries
  - 4. Producing finished products from raw materials

Question ID : 264330188930  
Option 1 ID : 264330739524  
Option 2 ID : 264330739522  
Option 3 ID : 264330739523  
Option 4 ID : 264330739525  
Status : Answered  
Chosen Option : 4

Q.4 What is the term for the playing area in a game of basketball?

- Ans
- 1. Field
  - 2. Rink
  - 3. Court
  - 4. Pitch

Question ID : 264330190961  
Option 1 ID : 264330747201  
Option 2 ID : 264330747200  
Option 3 ID : 264330747198  
Option 4 ID : 264330747199  
Status : Answered  
Chosen Option : 3

**Q.5** Which government has announced the launch of the Mukhya Mantri Shramik Kalyan Yojana (MMSKY) as part of the National Labour Day celebrations?

- Ans**
- 1. Assam
  - 2. Madhya Pradesh
  - 3. West Bengal
  - 4. Arunachal Pradesh

Question ID : 264330188872  
Option 1 ID : 264330739291  
Option 2 ID : 264330739293  
Option 3 ID : 264330739292  
Option 4 ID : 264330739290  
Status : Answered  
Chosen Option : 1

**Q.6** India became self-sufficient in food-grains and had sufficient stock in the central pool, even, at times, India was in a position to export food-grains, because of \_\_\_\_\_ Revolution.

- Ans**
- 1. Industrial
  - 2. Green
  - 3. Oil
  - 4. White

Question ID : 264330191867  
Option 1 ID : 264330750824  
Option 2 ID : 264330750825  
Option 3 ID : 264330750822  
Option 4 ID : 264330750823  
Status : Answered  
Chosen Option : 2

**Q.7** The Pharmacy (Amendment) Bill, 2023 was passed in Lok Sabha in August, 2023. It amends the Pharmacy Act, \_\_\_\_\_.

- Ans**
- 1. 1948
  - 2. 1983
  - 3. 1955
  - 4. 1965

Question ID : 264330191029  
Option 1 ID : 264330747470  
Option 2 ID : 264330747473  
Option 3 ID : 264330747471  
Option 4 ID : 264330747472  
Status : Answered  
Chosen Option : 3

**Q.8** Which of the following Union Territories of India has the highest sex ratio as per the 2011 census of India?

- Ans**
- 1. Puducherry
  - 2. Dadra & Nagar Haveli
  - 3. Chandigarh
  - 4. Andaman & Nicobar Islands

Question ID : 264330190614  
Option 1 ID : 264330746041  
Option 2 ID : 264330746040  
Option 3 ID : 264330746039  
Option 4 ID : 264330746038  
Status : Answered  
Chosen Option : 2

**Q.9** Who has achieved a historic milestone by becoming the second woman officer from the medical branch of the Indian Air Force (IAF) to attain the esteemed rank of Air Marshal, in October 2023?

- Ans**
- 1. Air Marshal Sadhna S Nair
  - 2. Shaliza Dhani
  - 3. Wing Commander Deepika Misra
  - 4. Air Marshal Padma

Question ID : 264330191909  
Option 1 ID : 264330750993  
Option 2 ID : 264330750991  
Option 3 ID : 264330750992  
Option 4 ID : 264330750990  
Status : Answered  
Chosen Option : 3

**Q.10** In badminton, a quick wrist and forearm rotation that surprises an opponent by changing an apparently soft shot into a faster passing one; used primarily on the serve and at the net is known as \_\_\_\_\_

- Ans**
- 1. kill
  - 2. fault
  - 3. flick
  - 4. drop

Question ID : 264330191444  
Option 1 ID : 264330749131  
Option 2 ID : 264330749133  
Option 3 ID : 264330749130  
Option 4 ID : 264330749132  
Status : Answered  
Chosen Option : 4

Q.11 Which festival is traditionally associated with the practice of Jallikattu?

- Ans
- 1. Shivaratri
  - 2. Vishu
  - 3. Pongal
  - 4. Onam

Question ID : 264330188916  
Option 1 ID : 264330739466  
Option 2 ID : 264330739467  
Option 3 ID : 264330739469  
Option 4 ID : 264330739468  
Status : Answered  
Chosen Option : 3

Q.12 Which classical dance-drama from Kerala is renowned for its vibrant makeup, elaborate costumes, and exaggerated facial expressions, often depicting stories from the Ramayana?

- Ans
- 1. Kathak
  - 2. Kathakali
  - 3. Bharatanatyam
  - 4. Manipuri

Question ID : 264330191291  
Option 1 ID : 264330748519  
Option 2 ID : 264330748521  
Option 3 ID : 264330748520  
Option 4 ID : 264330748518  
Status : Answered  
Chosen Option : 2

Q.13 \_\_\_\_\_ refers to buying and selling of bonds issued by the Government.

- Ans
- 1. Marginal requirement
  - 2. Closed Market Operations
  - 3. Moral suasion
  - 4. Open Market Operations

Question ID : 264330190664  
Option 1 ID : 264330746240  
Option 2 ID : 264330746239  
Option 3 ID : 264330746241  
Option 4 ID : 264330746238  
Status : Answered  
Chosen Option : 4

Q.14 Which of the following parts of the Indian Constitution deals with Amendment of the Constitution?

- Ans
- 1. Part XIX
  - 2. Part XXI
  - 3. Part XX
  - 4. Part XXII

Question ID : 264330192040  
Option 1 ID : 264330751514  
Option 2 ID : 264330751516  
Option 3 ID : 264330751515  
Option 4 ID : 264330751517  
Status : Answered  
Chosen Option : 3

Q.15 In Charles Law:

- A) Pressure is kept constant
- B) Number of moles of gas is constant
- C) Volume is directly proportional to temperature

- Ans
- 1. Both A and B is true
  - 2. A, B, C are true
  - 3. Both A and C is true
  - 4. Only B and C is true

Question ID : 264330191993  
Option 1 ID : 264330751327  
Option 2 ID : 264330751329  
Option 3 ID : 264330751328  
Option 4 ID : 264330751326  
Status : Answered  
Chosen Option : 2

Q.16 Who among the following had written the National anthem of Bangladesh 'Amar Sonar Bangla'?

- Ans
- 1. Swami Yogananda Paramhansa
  - 2. Hasrat Mohani
  - 3. Rabindranath Tagore
  - 4. Shyamlal Gupta

Question ID : 264330191778  
Option 1 ID : 264330750466  
Option 2 ID : 264330750467  
Option 3 ID : 264330750468  
Option 4 ID : 264330750469  
Status : Answered  
Chosen Option : 3



**Q.17** Which is the highest civilian award in the state of Tamil Nadu, India, to recognize artists in the state for their achievements?

- Ans**
- 1. Kalashree
  - 2. Balasaraswathi
  - 3. Sangeet Natak Akademi Award
  - 4. Kalaimamani

Question ID : 264330190978  
Option 1 ID : 264330747266  
Option 2 ID : 264330747267  
Option 3 ID : 264330747268  
Option 4 ID : 264330747269  
Status : Answered  
Chosen Option : 4

**Q.18** The decennial Census is conducted by the Office of the Registrar General and Census Commissioner belonging to which ministry?

- Ans**
- 1. Ministry of Rural Development
  - 2. Ministry of Finance
  - 3. Ministry of Home Affairs
  - 4. Ministry of Statistics and Program Implementation

Question ID : 264330190953  
Option 1 ID : 264330747167  
Option 2 ID : 264330747168  
Option 3 ID : 264330747169  
Option 4 ID : 264330747166  
Status : Answered  
Chosen Option : 4

**Q.19** The Indian political system is often described as a federal system with a strong unitary bias. Which feature gives it this unitary bias?

- Ans**
- 1. Dual citizenship
  - 2. Single citizenship
  - 3. Concurrent list
  - 4. States list

Question ID : 264330190940  
Option 1 ID : 264330747115  
Option 2 ID : 264330747114  
Option 3 ID : 264330747116  
Option 4 ID : 264330747117  
Status : Answered  
Chosen Option : 2



Q.20 Who among the following was the second ruler of the Mauryan empire?

- Ans  1. Chandragupta Maurya  
 2. Bindusara  
 3. Brihadratha  
 4. Ashoka

Question ID : 264330192036  
Option 1 ID : 264330751498  
Option 2 ID : 264330751499  
Option 3 ID : 264330751501  
Option 4 ID : 264330751500  
Status : Answered  
Chosen Option : 2

Section : Part-C-Elementary Mathematics

Q.1 The selling price of a car is Rs. 3675. If the car is sold at a discount of 65 percent, then what will be the marked price of the car?

- Ans  1. Rs. 11200  
 2. Rs. 10500  
 3. Rs. 9800  
 4. Rs. 10800

Question ID : 264330190357  
Option 1 ID : 264330745013  
Option 2 ID : 264330745011  
Option 3 ID : 264330745010  
Option 4 ID : 264330745012  
Status : Answered  
Chosen Option : 2

Q.2 What is the value of  $12 \div 3$  of  $4 - 88 + 75 + 6 \times 2$  of 15?

- Ans  1. 198  
 2. 118  
 3. 228  
 4. 168

Question ID : 264330187160  
Option 1 ID : 264330732571  
Option 2 ID : 264330732570  
Option 3 ID : 264330732568  
Option 4 ID : 264330732569  
Status : Answered  
Chosen Option : 4

**Q.3** When the price of an article was reduced by 40% its sale increased by 60%. What was the net effect on the sale?

- Ans**
- 1. 6% increase
  - 2. 4% decrease
  - 3. 4% increase
  - 4. 7% decrease

Question ID : 264330191153  
Option 1 ID : 264330747969  
Option 2 ID : 264330747966  
Option 3 ID : 264330747967  
Option 4 ID : 264330747968  
Status : Answered  
Chosen Option : 2

**Q.4** If selling price and cost price of a shirt is Rs. 1050 and Rs. 900 respectively, then what is the profit percentage?

- Ans**
- 1. 16.66 percent
  - 2. 20 percent
  - 3. 25 percent
  - 4. 18.5 percent

Question ID : 264330187487  
Option 1 ID : 264330733877  
Option 2 ID : 264330733876  
Option 3 ID : 264330733879  
Option 4 ID : 264330733878  
Status : Answered  
Chosen Option : 1

**Q.5** If the compound interest (compounding annually) for the first and second years on a sum of Rs. 8,000 is Rs. 800 and Rs. 880 respectively, find the rate of interest per annum.

- Ans**
- 1. 8%
  - 2. 10%
  - 3. 12%
  - 4. 15%

Question ID : 264330188527  
Option 1 ID : 264330737912  
Option 2 ID : 264330737910  
Option 3 ID : 264330737913  
Option 4 ID : 264330737911  
Status : Answered  
Chosen Option : 2

Q.6 Which of the following number is divisible by 11?

- Ans  1. 1442  
 2. 9196  
 3. 4320  
 4. 8487

Question ID : 264330187241  
Option 1 ID : 264330732894  
Option 2 ID : 264330732895  
Option 3 ID : 264330732892  
Option 4 ID : 264330732893  
Status : Answered  
Chosen Option : 2

Q.7 Arun got 20 percent less marks than Varun. Raju got 30 percent less marks than Varun. If Raju got 140 marks, then what are the marks of Arun?

- Ans  1. 150  
 2. 160  
 3. 200  
 4. 180

Question ID : 264330187926  
Option 1 ID : 264330735634  
Option 2 ID : 264330735633  
Option 3 ID : 264330735635  
Option 4 ID : 264330735632  
Status : Answered  
Chosen Option : 2

Q.8 Find the area of a triangle with a base of 12 cm and the height corresponding to that base is  $\frac{1}{3}$ rd the length of the base.

- Ans  1. 24 cm<sup>2</sup>  
 2. 20 cm<sup>2</sup>  
 3. 18 cm<sup>2</sup>  
 4. 16 cm<sup>2</sup>

Question ID : 264330188531  
Option 1 ID : 264330737929  
Option 2 ID : 264330737928  
Option 3 ID : 264330737926  
Option 4 ID : 264330737927  
Status : Answered  
Chosen Option : 1

**Q.9** If 80 percent of total articles are sold at a profit of 20 percent and remaining articles are sold at a loss of 30 percent, then what will be the overall profit percentage?

- Ans**
- 1. 12 percent
  - 2. 15 percent
  - 3. 14 percent
  - 4. 10 percent

Question ID : 264330187528

Option 1 ID : 264330734040

Option 2 ID : 264330734042

Option 3 ID : 264330734041

Option 4 ID : 264330734043

Status : Answered

Chosen Option : 4

**Q.10** A shopkeeper marked the selling price of his goods in such a way that after giving a discount of 20% he gains 28%. How much percent above the cost price is the marked price?

- Ans**
- 1. 66%
  - 2. 55%
  - 3. 60%
  - 4. 44%

Question ID : 264330188425

Option 1 ID : 264330737568

Option 2 ID : 264330737570

Option 3 ID : 264330737571

Option 4 ID : 264330737569

Status : Answered

Chosen Option : 3

**Q.11** A certain sum of money amounts to Rs. 900 in 2 years and Rs. 1080 in 4 years at simple interest. What is the annual rate of interest?

- Ans**
- 1. 12.5 percent
  - 2. 14.28 percent
  - 3. 14 percent
  - 4. 15 percent

Question ID : 264330187573

Option 1 ID : 264330734220

Option 2 ID : 264330734222

Option 3 ID : 264330734221

Option 4 ID : 264330734223

Status : Answered

Chosen Option : 1

**Q.12** A mixture contains acid and water in the ratio of 5 : 3. If 12 litres of water is added to it, then the ratio of acid and water becomes 5 : 6. What is the quantity of acid in the mixture?

- Ans**
- 1. 4 litres
  - 2. 16 litres
  - 3. 20 litres
  - 4. 8 litres

Question ID : 264330187892  
Option 1 ID : 264330735499  
Option 2 ID : 264330735496  
Option 3 ID : 264330735498  
Option 4 ID : 264330735497  
Status : Answered  
Chosen Option : 3

**Q.13** Raman and Raju undertook a work for Rs. 5500. Raman alone can do that work in 5 days and Raju alone can do the same work in 6 days. If they work together, then what will be the difference in the amount they receive?

- Ans**
- 1. Rs. 500
  - 2. Rs. 700
  - 3. Rs. 600
  - 4. Rs. 550

Question ID : 264330187896  
Option 1 ID : 264330735513  
Option 2 ID : 264330735515  
Option 3 ID : 264330735514  
Option 4 ID : 264330735512  
Status : Answered  
Chosen Option : 1

**Q.14** The average weight of a group of 8 friends is 70 kg. If one person with a weight of 70 kg joins the group, what is the new average weight?

- Ans**
- 1. 68 kg
  - 2. 73 kg
  - 3. 70 kg
  - 4. 54 kg

Question ID : 264330191191  
Option 1 ID : 264330748121  
Option 2 ID : 264330748118  
Option 3 ID : 264330748119  
Option 4 ID : 264330748120  
Status : Answered  
Chosen Option : 3

**Q.15** Amar, Akram and Vaibhav together can complete a work in 20 days. If Amar can work thrice as faster than Akram and Akram can work twice as faster than Vaibhav, then in how many days Vaibhav alone can complete the same work?

- Ans**
- 1. 210 days
  - 2. 180 days
  - 3. 200 days
  - 4. 190 days

Question ID : 264330187577  
Option 1 ID : 264330734239  
Option 2 ID : 264330734236  
Option 3 ID : 264330734237  
Option 4 ID : 264330734238  
Status : Answered  
Chosen Option : 2

**Q.16** Two trains are running in opposite direction with the same speed. If the length of each train is 255 metres and they cross each other in 17 seconds, then what is the speed of each train?

- Ans**
- 1. 21 m/s
  - 2. 18 m/s
  - 3. 15 m/s
  - 4. 12 m/s

Question ID : 264330187555  
Option 1 ID : 264330734151  
Option 2 ID : 264330734150  
Option 3 ID : 264330734148  
Option 4 ID : 264330734149  
Status : Answered  
Chosen Option : 3

**Q.17** The average age of 9 sons in a family is 13 years. The average age of mother, father and sons together is 20 years. If mother is 9 years younger than father, then what is the age of father?

- Ans**
- 1. 61 years
  - 2. 63 years
  - 3. 56 years
  - 4. 62 years

Question ID : 264330187964  
Option 1 ID : 264330735786  
Option 2 ID : 264330735784  
Option 3 ID : 264330735787  
Option 4 ID : 264330735785  
Status : Answered  
Chosen Option : 3

Q.18 What will be the remainder when  $31 \times 32 \times 33$  is divided by 5?

- Ans
- 1. 0
  - 2. 1
  - 3. 3
  - 4. 2

Question ID : 264330187662  
Option 1 ID : 264330734576  
Option 2 ID : 264330734577  
Option 3 ID : 264330734579  
Option 4 ID : 264330734578  
Status : Answered  
Chosen Option : 2

Q.19 Convert  $0.\overline{427}$  into fraction.

- Ans
- 1.  $\frac{420}{999}$
  - 2.  $\frac{400}{999}$
  - 3.  $\frac{423}{999}$
  - 4.  $\frac{423}{990}$

Question ID : 264330187581  
Option 1 ID : 264330734253  
Option 2 ID : 264330734255  
Option 3 ID : 264330734254  
Option 4 ID : 264330734252  
Status : Answered  
Chosen Option : 4

Q.20 Marks of two candidates M and N are the in ratio of 10 : 11. If the marks of M are 200, then what will be the marks of N?

- Ans
- 1. 200
  - 2. 260
  - 3. 240
  - 4. 220

Question ID : 264330187531  
Option 1 ID : 264330734052  
Option 2 ID : 264330734055  
Option 3 ID : 264330734054  
Option 4 ID : 264330734053  
Status : Answered  
Chosen Option : 4

Q.1 Find the part of the given sentence that has an error in it. If there is no error, choose 'No error'.

The greatly truths in life are usually the most unpleasant to hear.

- Ans
- 1. are usually the
  - 2. most unpleasant to hear.
  - 3. The greatly truths in life
  - 4. No error

Question ID : 264330185730  
Option 1 ID : 264330727265  
Option 2 ID : 264330727266  
Option 3 ID : 264330727264  
Option 4 ID : 264330727267  
Status : Answered  
Chosen Option : 3

Q.2 Select the most appropriate meaning of the given idiom

It's a small world

- Ans
- 1. Eventually, after a long period of time
  - 2. A competition where the outcome is difficult to judge or predict
  - 3. An aggressive and bold confrontation
  - 4. You frequently see the same people in different places

Question ID : 264330186481  
Option 1 ID : 264330730124  
Option 2 ID : 264330730126  
Option 3 ID : 264330730127  
Option 4 ID : 264330730125  
Status : Answered  
Chosen Option : 4

Q.3 Improve the underlined part of the sentence. Choose 'No improvement' as an answer if the sentence is grammatically correct.

Computers are a common commodity in every homely.

- Ans
- 1. every home
  - 2. No improvement
  - 3. every homes
  - 4. all homely

Question ID : 264330186322  
Option 1 ID : 264330729521  
Option 2 ID : 264330729523  
Option 3 ID : 264330729520  
Option 4 ID : 264330729522  
Status : Answered  
Chosen Option : 1



Q.4 Choose the word that is opposite in meaning to the given word.

Aroma

- Ans
- 1. Brazen
  - 2. Essence
  - 3. Stink
  - 4. Scent

Question ID : 264330186058

Option 1 ID : 264330728515

Option 2 ID : 264330728514

Option 3 ID : 264330728512

Option 4 ID : 264330728513

Status : Answered

Chosen Option : 1

Q.5 Improve the underlined part of the sentence. Choose 'No improvement' as an answer if the sentence is grammatically correct.

I buy most of my books online.

- Ans
- 1. buys most
  - 2. No improvement
  - 3. by most
  - 4. buy much

Question ID : 264330185669

Option 1 ID : 264330727033

Option 2 ID : 264330727035

Option 3 ID : 264330727032

Option 4 ID : 264330727034

Status : Answered

Chosen Option : 2

Q.6 Select the sentence with no spelling errors.

- Ans
- 1.  
We should be cautious about the accuracy of polls in this case.
  - 2.  
We should be cautious about the accuracy of palus in this case.
  - 3.  
We should be cuatious about the accuracy of polls in this case.
  - 4.  
We should be cautious about the acuracy of polls in this case.

Question ID : 264330186652

Option 1 ID : 264330730778

Option 2 ID : 264330730777

Option 3 ID : 264330730779

Option 4 ID : 264330730776

Status : Answered

Chosen Option : 1

Q.7 Select the most appropriate word to fill in the blank.

\_\_\_\_\_ small businesses shifted within a year.

- Ans
- 1. Little
  - 2. Many
  - 3. Very
  - 4. Quite

Question ID : 264330185924  
Option 1 ID : 264330728006  
Option 2 ID : 264330728004  
Option 3 ID : 264330728007  
Option 4 ID : 264330728005  
Status : Answered  
Chosen Option : 2

Q.8 Select the incorrectly spelt word from the given sentence.

After seventeen surgeries, a life-threatening infection, a lost season and months of arduos rehab, Smith returned to the field in October.

- Ans
- 1. surgeries
  - 2. arduos
  - 3. threatening
  - 4. season

Question ID : 264330186125  
Option 1 ID : 264330728768  
Option 2 ID : 264330728771  
Option 3 ID : 264330728769  
Option 4 ID : 264330728770  
Status : Answered  
Chosen Option : 2

Q.9 Find the part of the given sentence that has an error in it. If there is no error, choose 'No error'.

Hearing a love one's voice can convey emotions without the constant visual reminders of separation.

- Ans
- 1. constant visual reminders of separation
  - 2. No error
  - 3. can convey emotions without the
  - 4. Hearing a love one's voice

Question ID : 264330186130  
Option 1 ID : 264330728790  
Option 2 ID : 264330728791  
Option 3 ID : 264330728789  
Option 4 ID : 264330728788  
Status : Answered  
Chosen Option : 4

**Q.10** Improve the underlined part of the sentence. Choose 'No improvement' as an answer if the sentence is grammatically correct.

You get only one chanced to pass the test.

- Ans**
- 1. chance to passed
  - 2. chance to pass
  - 3. No improvement
  - 4. chances to pass

Question ID : 264330185774  
Option 1 ID : 264330727433  
Option 2 ID : 264330727432  
Option 3 ID : 264330727435  
Option 4 ID : 264330727434  
Status : Answered  
Chosen Option : 2

**Q.11** Choose the most appropriate antonym of the underlined word.

Much to our collective astonishment, Chris ended up joining the military.

- Ans**
- 1. Shock
  - 2. Composure
  - 3. Awe
  - 4. Wonder

Question ID : 264330185765  
Option 1 ID : 264330727399  
Option 2 ID : 264330727396  
Option 3 ID : 264330727398  
Option 4 ID : 264330727397  
Status : Answered  
Chosen Option : 1

**Q.12** Choose the word that is opposite in meaning to the given word.

Absurd

- Ans**
- 1. Salient
  - 2. Asinine
  - 3. Realistic
  - 4. Inept

Question ID : 264330185743  
Option 1 ID : 264330727315  
Option 2 ID : 264330727312  
Option 3 ID : 264330727314  
Option 4 ID : 264330727313  
Status : Answered  
Chosen Option : 1

**Q.13** Choose the idiom/phrase that can substitute the highlighted group of words meaningfully.

Her wedding is **occurring soon**, and she is so nervous about it.

- Ans**
- 1. In hot water
  - 2. Just around the corner
  - 3. Through thick and thin
  - 4. In the dark

Question ID : 264330186061  
Option 1 ID : 264330728525  
Option 2 ID : 264330728524  
Option 3 ID : 264330728527  
Option 4 ID : 264330728526  
Status : Answered  
Chosen Option : 2

**Q.14** From the options given below choose the synonym (similar meaning) of the word:

Alienate

- Ans**
- 1. Secure
  - 2. Vacate
  - 3. Sever
  - 4. Estrange

Question ID : 264330186394  
Option 1 ID : 264330729795  
Option 2 ID : 264330729793  
Option 3 ID : 264330729794  
Option 4 ID : 264330729792  
Status : Answered  
Chosen Option : 1

**Q.15** Find the part of the given sentence that has an error in it. If there is no error, choose 'No error'.

Many people prefers a heavy breakfast to a heavy lunch.

- Ans**
- 1. Many people
  - 2. to a heavy lunch.
  - 3. prefers a heavy breakfast
  - 4. No error

Question ID : 264330186843  
Option 1 ID : 264330731504  
Option 2 ID : 264330731506  
Option 3 ID : 264330731505  
Option 4 ID : 264330731507  
Status : Answered  
Chosen Option : 2

**Comprehension:**

In the given passage, four options are given for each blank. Select the most appropriate option to complete the given passage, which also fits contextually as per the word given in the bracket

Education is a powerful tool for (1. growth) \_\_\_\_\_ and personal growth. It equips individuals with knowledge and skills, enabling them to (2. capture) \_\_\_\_\_ opportunities and contribute to society. A well-rounded education not only fosters academic excellence but also encourages (3. out-of-the box) \_\_\_\_\_ thinking and creativity. Moreover, education instills (4. virtuous) \_\_\_\_\_ values and ethical principles in individuals, promoting social harmony and responsible citizenship. To ensure the benefits of education are accessible to all, it is essential to eliminate barriers, such as (5. isolation) \_\_\_\_\_ and discrimination, that hinder equal access to quality learning opportunities.

**SubQuestion No : 16**

**Q.16** Fill in the blank (1) with the appropriate word from the options below:

- Ans**
- 1. deterrent
  - 2. development
  - 3. desolation
  - 4. depravation

Question ID : 264330186410

Option 1 ID : 264330729853

Option 2 ID : 264330729852

Option 3 ID : 264330729855

Option 4 ID : 264330729854

Status : Answered

Chosen Option : 2

**Comprehension:**

In the given passage, four options are given for each blank. Select the most appropriate option to complete the given passage, which also fits contextually as per the word given in the bracket

Education is a powerful tool for (1. growth) \_\_\_\_\_ and personal growth. It equips individuals with knowledge and skills, enabling them to (2. capture) \_\_\_\_\_ opportunities and contribute to society. A well-rounded education not only fosters academic excellence but also encourages (3. out-of-the box) \_\_\_\_\_ thinking and creativity. Moreover, education instills (4. virtuous) \_\_\_\_\_ values and ethical principles in individuals, promoting social harmony and responsible citizenship. To ensure the benefits of education are accessible to all, it is essential to eliminate barriers, such as (5. isolation) \_\_\_\_\_ and discrimination, that hinder equal access to quality learning opportunities.

**SubQuestion No : 17**

**Q.17** Fill in the blank (2) with the appropriate word from the options below:

- Ans**
- 1. seize
  - 2. endure
  - 3. exploit
  - 4. afflict

Question ID : 264330186411

Option 1 ID : 264330729856

Option 2 ID : 264330729858

Option 3 ID : 264330729857

Option 4 ID : 264330729859

Status : Answered

Chosen Option : 1

**Comprehension:**

In the given passage, four options are given for each blank. Select the most appropriate option to complete the given passage, which also fits contextually as per the word given in the bracket

Education is a powerful tool for (1. growth) \_\_\_\_\_ and personal growth. It equips individuals with knowledge and skills, enabling them to (2. capture) \_\_\_\_\_ opportunities and contribute to society. A well-rounded education not only fosters academic excellence but also encourages (3. out-of-the box) \_\_\_\_\_ thinking and creativity. Moreover, education instills (4. virtuous) \_\_\_\_\_ values and ethical principles in individuals, promoting social harmony and responsible citizenship. To ensure the benefits of education are accessible to all, it is essential to eliminate barriers, such as (5. isolation) \_\_\_\_\_ and discrimination, that hinder equal access to quality learning opportunities.

**SubQuestion No : 18**

Q.18 Fill in the blank (3) with the appropriate word from the options below:

- Ans
- 1. orthodox
  - 2. conventional
  - 3. uniform
  - 4. innovative

Question ID : 264330186412

Option 1 ID : 264330729861

Option 2 ID : 264330729862

Option 3 ID : 264330729863

Option 4 ID : 264330729860

Status : Answered

Chosen Option : 4

**Comprehension:**

In the given passage, four options are given for each blank. Select the most appropriate option to complete the given passage, which also fits contextually as per the word given in the bracket

Education is a powerful tool for (1. growth) \_\_\_\_\_ and personal growth. It equips individuals with knowledge and skills, enabling them to (2. capture) \_\_\_\_\_ opportunities and contribute to society. A well-rounded education not only fosters academic excellence but also encourages (3. out-of-the box) \_\_\_\_\_ thinking and creativity. Moreover, education instills (4. virtuous) \_\_\_\_\_ values and ethical principles in individuals, promoting social harmony and responsible citizenship. To ensure the benefits of education are accessible to all, it is essential to eliminate barriers, such as (5. isolation) \_\_\_\_\_ and discrimination, that hinder equal access to quality learning opportunities.

**SubQuestion No : 19**

Q.19 Fill in the blank (4) with the appropriate word from the options below:

- Ans
- 1. arbitrary
  - 2. moral
  - 3. volatile
  - 4. obsolete

Question ID : 264330186413

Option 1 ID : 264330729865

Option 2 ID : 264330729864

Option 3 ID : 264330729867

Option 4 ID : 264330729866

Status : Answered

Chosen Option : 2



**Comprehension:**

In the given passage, four options are given for each blank. Select the most appropriate option to complete the given passage, which also fits contextually as per the word given in the bracket

Education is a powerful tool for (1. growth) \_\_\_\_\_ and personal growth. It equips individuals with knowledge and skills, enabling them to (2. capture) \_\_\_\_\_ opportunities and contribute to society. A well-rounded education not only fosters academic excellence but also encourages (3. out-of-the box) \_\_\_\_\_ thinking and creativity. Moreover, education instills (4. virtuous) \_\_\_\_\_ values and ethical principles in individuals, promoting social harmony and responsible citizenship. To ensure the benefits of education are accessible to all, it is essential to eliminate barriers, such as (5. isolation) \_\_\_\_\_ and discrimination, that hinder equal access to quality learning opportunities.

**SubQuestion No : 20**

Q.20 Fill in the blank (5) with the appropriate word from the options below:

- Ans
- 1. illusion
  - 2. accessibility
  - 3. privilege
  - 4. seclusion

Question ID : 264330186414

Option 1 ID : 264330729871

Option 2 ID : 264330729869

Option 3 ID : 264330729870

Option 4 ID : 264330729868

Status : Answered

Chosen Option : 4

## Section : Part-D-Hindi

Q.1 दिए गए वाक्य में रेखांकित शब्दों के लिए सही शब्दों वाले विकल्प का चयन करें।  
कई रेलवे कर्मचारियों की गिरफ्तारी हुई।

- Ans
- 1. रेलवे के कई कर्मचारियों की गिरफ्तारी हुई।
  - 2. कही रेलवे कर्मचारियों की गिरफ्तारी हुई।
  - 3. परिवर्तन की आवश्यकता नहीं है।
  - 4. कई रेलवे कर्मचारियों की गिरफ्तारी हुई।

Question ID : 264330188143

Option 1 ID : 264330736494

Option 2 ID : 264330736492

Option 3 ID : 264330736495

Option 4 ID : 264330736493

Status : Not Answered

Chosen Option : --

Q.2 निम्नलिखित वाक्य में रेखांकित भाग के लिए एक सार्थक शब्द ज्ञात कीजिए।

कुएँ की गहराई मापी नहीं जा सकती।

- Ans
- 1. अपरिग्रह
  - 2. अतुल्य
  - 3. मापक
  - 4. अपरिमेय

Question ID : 264330189319

Option 1 ID : 264330741005

Option 2 ID : 264330741003

Option 3 ID : 264330741002

Option 4 ID : 264330741004

Status : Not Answered

Chosen Option : --

Q.3 दिए गए वाक्य का वह भाग ज्ञात करें, जिसमें कोई त्रुटि है।

लगभग 200 वर्षों तक भारत के गले में गुलामी की बेड़ियाँ पड़ी रहीं।

- Ans
- 1. बेड़ियाँ पड़ी रहीं।
  - 2. तक भारत के गले
  - 3. लगभग 200 वर्षों
  - 4. में गुलामी की

Question ID : 264330189163

Option 1 ID : 264330740413

Option 2 ID : 264330740411

Option 3 ID : 264330740410

Option 4 ID : 264330740412

Status : Not Answered

Chosen Option : --

Q.4 निम्नलिखित प्रश्न में, चार विकल्पों में से, उस विकल्प का चयन करें जो रिक्त स्थान के लिए सही शब्द वाला विकल्प हो।  
सकारात्मक सोच के जरिए आप अपने जीवन में आसानी से कुछ भी \_\_\_\_\_ कर सकते हैं।

- Ans
- 1. मतलब
  - 2. हासिल
  - 3. कोशिश
  - 4. प्रोत्साहन

Question ID : 264330189879

Option 1 ID : 264330743138

Option 2 ID : 264330743141

Option 3 ID : 264330743139

Option 4 ID : 264330743140

Status : Not Answered

Chosen Option : --



Q.5 निम्नलिखित प्रश्न में, चार विकल्पों में से, उस विकल्प का चयन करें जो कोष्ठक में दिए गए शब्द के विलोम शब्द का सही विकल्प है।  
हमारे गाँव का तालाब बहुत ही (गहरा) \_\_\_\_\_ है।

- Ans
- 1. छिछला
  - 2. अपार
  - 3. दुर्बोध
  - 4. असीम

Question ID : 264330189806  
Option 1 ID : 264330742859  
Option 2 ID : 264330742861  
Option 3 ID : 264330742858  
Option 4 ID : 264330742860  
Status : Not Answered  
Chosen Option : --

Q.6 दिए गए विकल्पों में से सार्थक शब्द ज्ञात कीजिए।

- Ans
- 1. जबिली
  - 2. मोबाइल
  - 3. साविन
  - 4. रंजाबा

Question ID : 264330189183  
Option 1 ID : 264330740489  
Option 2 ID : 264330740487  
Option 3 ID : 264330740486  
Option 4 ID : 264330740488  
Status : Not Answered  
Chosen Option : --

Q.7 निम्नलिखित प्रश्न में, चार विकल्पों में से, उस विकल्प का चयन करें जो दी गई लोकोक्ति का सही अर्थ वाला विकल्प है।  
खरी मजूरी, चौखा काम

- Ans
- 1. दुष्ट व्यक्ति का प्रेम अस्थिर होता है
  - 2. लाभ के स्थान पर हानि होना
  - 3. तुरन्त मजदूरी मिलने पर कार्य भी अच्छा होता है
  - 4. अस्थिरता के कारण कहीं का न रहना

Question ID : 264330189683  
Option 1 ID : 264330742391  
Option 2 ID : 264330742393  
Option 3 ID : 264330742392  
Option 4 ID : 264330742390  
Status : Not Answered  
Chosen Option : --

Q.8 निम्नलिखित प्रश्न में, दिए गए चार विकल्पों में से, उस विकल्प का चयन करें जो दिए गए मुहावरे के अर्थ को सर्वश्रेष्ठ रूप से व्यक्त करता है।

वकालत करना

- Ans
- 1. सहायता करना
  - 2. आरोप लगाना
  - 3. विरोध करना
  - 4. समर्थन करना

Question ID : 264330189451

Option 1 ID : 264330741506

Option 2 ID : 264330741507

Option 3 ID : 264330741508

Option 4 ID : 264330741509

Status : Not Answered

Chosen Option : --

Q.9 निम्नलिखित प्रश्न में, चार विकल्पों में से, उस विकल्प का चयन करें जो कोष्ठक में दिए गए शब्द के पर्यायवाची शब्द का सही विकल्प है।

मेरे विद्यालय में विभिन्न प्रकार के (खेल) \_\_\_\_\_ सिखाएँ जाते हैं।

- Ans
- 1. बारी
  - 2. केलि
  - 3. सूम
  - 4. धूसर

Question ID : 264330189699

Option 1 ID : 264330742451

Option 2 ID : 264330742450

Option 3 ID : 264330742453

Option 4 ID : 264330742452

Status : Not Answered

Chosen Option : --

Q.10 दिए गए वाक्य में रेखांकित शब्द के लिए सही वर्तनी ज्ञात कीजिए।

तुझे समझ नहीं आया, है न?

- Ans
- 1. समछ
  - 2. समझ
  - 3. समस
  - 4. समज़

Question ID : 264330188284

Option 1 ID : 264330737029

Option 2 ID : 264330737030

Option 3 ID : 264330737031

Option 4 ID : 264330737028

Status : Not Answered

Chosen Option : --

Q.11 निम्नलिखित प्रश्न में, चार विकल्पों में से, उस विकल्प का चयन करें जो कोष्ठक में दिए गए शब्द के तद्रूप रूप का सही विकल्प है।  
बहुत से ऐसे पौधे हैं जिनसे प्राकृतिक रूप से (खर्ज) \_\_\_\_\_ दूर किया जा सकता है।

- Ans
- 1. बुखार
  - 2. बीमारी
  - 3. खाँसी
  - 4. खुजली

Question ID : 264330188349  
Option 1 ID : 264330737277  
Option 2 ID : 264330737276  
Option 3 ID : 264330737278  
Option 4 ID : 264330737279  
Status : Not Answered  
Chosen Option : --

Q.12 दिए गए वाक्य में रेखांकित शब्द का विलोम शब्द ज्ञात कीजिए।

तुम कितने तुच्छ व्यक्ति हो।

- Ans
- 1. लघु
  - 2. नालायक
  - 3. महान
  - 4. छोटे

Question ID : 264330189177  
Option 1 ID : 264330740463  
Option 2 ID : 264330740465  
Option 3 ID : 264330740464  
Option 4 ID : 264330740462  
Status : Not Answered  
Chosen Option : --

Q.13 निम्नलिखित प्रश्न में, चार विकल्पों में से, उस विकल्प का चयन करें जो रिक्त स्थान के लिए सही पुल्लिंग रूप वाला विकल्प हो।  
\_\_\_\_\_ करना हमारे स्वास्थ्य के लिए हानिकारक है।

- Ans
- 1. खेल
  - 2. बातें
  - 3. हँसी-मजाक
  - 4. क्रोध

Question ID : 264330188331  
Option 1 ID : 264330737210  
Option 2 ID : 264330737211  
Option 3 ID : 264330737209  
Option 4 ID : 264330737208  
Status : Not Answered  
Chosen Option : --

Q.14 दिए गए शब्द का पर्यायवाची ज्ञात कीजिए।

किरण

- Ans
- 1. कूश
  - 2. यत्न
  - 3. रश्मि
  - 4. बाल

Question ID : 264330188278  
Option 1 ID : 264330737006  
Option 2 ID : 264330737005  
Option 3 ID : 264330737007  
Option 4 ID : 264330737004  
Status : Not Answered  
Chosen Option : --

Q.15 दिए गए विकल्पों में से अशुद्ध वर्तनी वाले विकल्प का चयन करें।

- Ans
- 1. तुम मेरी बात सुनो।
  - 2. माफ कीजिए, मुझसे गलती हो गई।
  - 3. कैसे शिष्य हो तुम जो अपने गुरु की बात नहीं मानते?
  - 4. क्या तुमने संख्या याद कर लीं?

Question ID : 264330189328  
Option 1 ID : 264330741039  
Option 2 ID : 264330741041  
Option 3 ID : 264330741038  
Option 4 ID : 264330741040  
Status : Not Answered  
Chosen Option : --

**Comprehension:**

नीचे दिए गए गद्य में कुछ शब्द छोड़ दिए गए हैं और प्रत्येक रिक्त स्थान के चार विकल्प दिए गए हैं। इन चारों में से कौन सा विकल्प रिक्त स्थान की पूर्ति करेगा-

‘गोदान’ प्रेमचंद की सबसे मशहूर (1)\_\_\_\_\_ है। यह भारतीय किसानों पर लिखा गया महान (2)\_\_\_\_\_ है। इस उपन्यास में किसान होरी और उसकी बीवी धनिया की (3)\_\_\_\_\_ है। समाज में (4)\_\_\_\_\_ के मालिक लोग उन्हें अपने दमन के (5)\_\_\_\_\_ में ऐसा फाँसते हैं कि वे भूमिहीन मजदूर बन जाते हैं।

**SubQuestion No : 16**

Q.16 रिक्त 1 के लिए सबसे उपयुक्त विकल्प का चयन कीजिए।

- Ans
- 1. निष्कर्ष
  - 2. कृति
  - 3. परिकर
  - 4. धात्री

Question ID : 264330189440

Option 1 ID : 264330741463

Option 2 ID : 264330741462

Option 3 ID : 264330741465

Option 4 ID : 264330741464

Status : Not Answered

Chosen Option : --

**Comprehension:**

नीचे दिए गए गद्य में कुछ शब्द छोड़ दिए गए हैं और प्रत्येक रिक्त स्थान के चार विकल्प दिए गए हैं। इन चारों में से कौन सा विकल्प रिक्त स्थान की पूर्ति करेगा-

‘गोदान’ प्रेमचंद की सबसे मशहूर (1)\_\_\_\_\_ है। यह भारतीय किसानों पर लिखा गया महान (2)\_\_\_\_\_ है। इस उपन्यास में किसान होरी और उसकी बीवी धनिया की (3)\_\_\_\_\_ है। समाज में (4)\_\_\_\_\_ के मालिक लोग उन्हें अपने दमन के (5)\_\_\_\_\_ में ऐसा फाँसते हैं कि वे भूमिहीन मजदूर बन जाते हैं।

**SubQuestion No : 17**

Q.17 रिक्त 2 के लिए सबसे उपयुक्त विकल्प का चयन कीजिए।

- Ans
- 1. उपन्यास
  - 2. भेंट
  - 3. कार्यकर
  - 4. पक्ष

Question ID : 264330189441

Option 1 ID : 264330741467

Option 2 ID : 264330741469

Option 3 ID : 264330741466

Option 4 ID : 264330741468

Status : Not Answered

Chosen Option : --

**Comprehension:**

नीचे दिए गए गद्य में कुछ शब्द छोड़ दिए गए हैं और प्रत्येक रिक्त स्थान के चार विकल्प दिए गए हैं। इन चारों में से कौन सा विकल्प रिक्त स्थान की पूर्ति करेगा-

'गोदान' प्रेमचंद की सबसे मशहूर (1)\_\_\_\_\_ है। यह भारतीय किसानों पर लिखा गया महान (2)\_\_\_\_\_ है। इस उपन्यास में किसान होरी और उसकी बीवी धनिया की (3)\_\_\_\_\_ है। समाज में (4)\_\_\_\_\_ के मालिक लोग उन्हें अपने दमन के (5)\_\_\_\_\_ में ऐसा फाँसते हैं कि वे भूमिहीन मजदूर बन जाते हैं।

**SubQuestion No : 18**

Q.18 रिक्त 3 के लिए सबसे उपयुक्त विकल्प का चयन कीजिए।

- Ans
- 1. चरित्र
  - 2. प्रेम
  - 3. रंगरूप
  - 4. कहानी

Question ID : 264330189442

Option 1 ID : 264330741470

Option 2 ID : 264330741471

Option 3 ID : 264330741473

Option 4 ID : 264330741472

Status : Not Answered

Chosen Option : --

**Comprehension:**

नीचे दिए गए गद्य में कुछ शब्द छोड़ दिए गए हैं और प्रत्येक रिक्त स्थान के चार विकल्प दिए गए हैं। इन चारों में से कौन सा विकल्प रिक्त स्थान की पूर्ति करेगा-

'गोदान' प्रेमचंद की सबसे मशहूर (1)\_\_\_\_\_ है। यह भारतीय किसानों पर लिखा गया महान (2)\_\_\_\_\_ है। इस उपन्यास में किसान होरी और उसकी बीवी धनिया की (3)\_\_\_\_\_ है। समाज में (4)\_\_\_\_\_ के मालिक लोग उन्हें अपने दमन के (5)\_\_\_\_\_ में ऐसा फाँसते हैं कि वे भूमिहीन मजदूर बन जाते हैं।

**SubQuestion No : 19**

Q.19 रिक्त 4 के लिए सबसे उपयुक्त विकल्प का चयन कीजिए।

- Ans
- 1. युग
  - 2. पर्यटक
  - 3. सत्ता
  - 4. विज्ञापन

Question ID : 264330189443

Option 1 ID : 264330741475

Option 2 ID : 264330741476

Option 3 ID : 264330741477

Option 4 ID : 264330741474

Status : Not Answered

Chosen Option : --

**Comprehension:**

नीचे दिए गए गद्य में कुछ शब्द छोड़ दिए गए हैं और प्रत्येक रिक्त स्थान के चार विकल्प दिए गए हैं। इन चारों में से कौन सा विकल्प रिक्त स्थान की पूर्ति करेगा-

गोदान प्रेमचंद की सबसे मशहूर (1)\_\_\_\_\_ है। यह भारतीय किसानों पर लिखा गया महान (2)\_\_\_\_\_ है। इस उपन्यास में किसान होरी और उसकी बीवी धनिया की (3)\_\_\_\_\_ है। समाज में (4)\_\_\_\_\_ के मालिक लोग उन्हें अपने दमन के (5)\_\_\_\_\_ में ऐसा फाँसते हैं कि वे भूमिहीन मजदूर बन जाते हैं।

**SubQuestion No : 20**

Q.20 रिक्त 5 के लिए सबसे उपयुक्त विकल्प का चयन कीजिए।

- Ans
- 1. पहलवानी
  - 2. प्रभावशाली
  - 3. दुष्चक्र
  - 4. कृतियाँ

Question ID : 264330189444

Option 1 ID : 264330741481

Option 2 ID : 264330741479

Option 3 ID : 264330741478

Option 4 ID : 264330741480

Status : Not Answered

Chosen Option : --