

**Constable GD in Central Armed Police Forces CAPFs SSF Rifleman GD in Assam
Rifles Examination 2024**

Roll Number	
Candidate Name	
Venue Name	
Exam Date	27/02/2024
Exam Time	5:00 PM - 6:00 PM
Subject	Constable GD Examination 2024

Section : Part-A-General Intelligence and Reasoning

Q.1 Which of the following numbers will replace the question mark (?) in the given series?
85, 95, ?, 96, 83, 97

- Ans**
- 1. 86
 - 2. 94
 - 3. 93
 - 4. 84

Question ID : 264330192199

Option 1 ID : 264330752151

Option 2 ID : 264330752153

Option 3 ID : 264330752152

Option 4 ID : 264330752150

Status : Marked For Review

Chosen Option : 4

Q.2 In a certain code language, if TOGETHER is coded as 95, FUTURE is coded as 88, then what will FOREVER be coded as?

- Ans**
- 1. 102
 - 2. 89
 - 3. 86
 - 4. 96

Question ID : 264330192373

Option 1 ID : 264330752849

Option 2 ID : 264330752847

Option 3 ID : 264330752846

Option 4 ID : 264330752848

Status : Answered

Chosen Option : 4

Q.3 A piece of paper is folded and punched as shown below in the question figures, indicate how it will appear when opened?



Ans

- 1.
- 2.
- 3.
- 4.

Question ID : 264330191326

Option 1 ID : 264330748658

Option 2 ID : 264330748660

Option 3 ID : 264330748659

Option 4 ID : 264330748661

Status : Answered

Chosen Option : 3

Q.4 Which of the following letter clusters will replace the blank () in the given series?

QLM, _____, SPQ, TRS, UTU, VVW

- 1. RMQ
- 2. ONO
- 3. MNO
- 4. RNO

Question ID : 264330192169

Option 1 ID : 264330752032

Option 2 ID : 264330752033

Option 3 ID : 264330752031

Option 4 ID : 264330752030

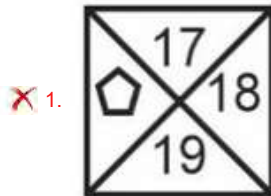
Status : Answered

Chosen Option : 4

Q.5 In the following question, select the figure which can be placed at the sign of question mark (?) from the given alternatives.



Ans



Question ID : 264330190343

Option 1 ID : 264330744954

Option 2 ID : 264330744957

Option 3 ID : 264330744956

Option 4 ID : 264330744955

Status : Answered

Chosen Option : 3

Q.6 Seven friends P, Q, R, S, T, U, and V are sitting in a circle facing the center. R is sitting third to the right of S and is in between U and T. S is not a neighbour to P. Q and T are neighbours. Who is sitting to the immediate left of Q?

Ans ✗ 1. U

✗ 2. P

✓ 3. S

✗ 4. R

Question ID : 264330192176

Option 1 ID : 264330752058

Option 2 ID : 264330752059

Option 3 ID : 264330752061

Option 4 ID : 264330752060

Status : Answered

Chosen Option : 3

Q.7 In the following question, select the related letters from the given alternatives.

HSQ : FQO :: ZDF : ?

- Ans
- 1. SON
 - 2. XBD
 - 3. IAK
 - 4. ALE

Question ID : 264330190230
 Option 1 ID : 264330744502
 Option 2 ID : 264330744503
 Option 3 ID : 264330744504
 Option 4 ID : 264330744505
 Status : Answered
 Chosen Option : 2

Q.8 Select the option that is related to the fifth word in the same way as the fourth word is related to the third word and the second word is related to the first word.

OMAN : RIAL :: INDIA : INDIAN RUPEE :: USA : ?

- Ans
- 1. DOLLAR
 - 2. DIRHAM
 - 3. EURO
 - 4. POUND

Question ID : 264330192072
 Option 1 ID : 264330751644
 Option 2 ID : 264330751645
 Option 3 ID : 264330751642
 Option 4 ID : 264330751643
 Status : Answered
 Chosen Option : 1

Q.9 In the following question below are given some statements followed by some conclusions based on those statements. Taking the given statements to be true even if they seem to be at variance from commonly known facts. Read all the conclusions and then decide which of the given conclusion(s) logically follows the given statements.

Statements:

- I. No G are M.
- II. Some A are M.

Conclusions:

- I. Some M are A.
- II. Some M are G.

- Ans
- 1. Only conclusion II follows
 - 2. Only conclusion I follows
 - 3. Both conclusions I and II follows
 - 4. Neither conclusion follows

Question ID : 264330187069
 Option 1 ID : 264330732205
 Option 2 ID : 264330732204
 Option 3 ID : 264330732206
 Option 4 ID : 264330732207
 Status : Answered
 Chosen Option : 2

Q.10 Which of the following numbers will replace the question mark (?) in the given series?

24, 12, 36, 18, ?, 27

- Ans**
- 1. 42
 - 2. 68
 - 3. 48
 - 4. 54

Question ID : 264330192200
 Option 1 ID : 264330752154
 Option 2 ID : 264330752157
 Option 3 ID : 264330752155
 Option 4 ID : 264330752156
 Status : Answered
 Chosen Option : 4

Q.11 From the given option figures, select the one in which the question figure is hidden/embedded. (rotation is not allowed)



Ans

- 1.
- 2.
- 3.
- 4.

Question ID : 264330191386
 Option 1 ID : 264330748899
 Option 2 ID : 264330748901
 Option 3 ID : 264330748898
 Option 4 ID : 264330748900
 Status : Answered
 Chosen Option : 2

Q.12 In a certain code language, 'TUMOR' is coded as '27564', 'VAPOR' is coded as '12345', 'VOTER' is coded as '86215'. What can be the code for 'O' in that code language?

- Ans
- 1. 3
 - 2. 4
 - 3. 2
 - 4. 1

Question ID : 264330190113
Option 1 ID : 264330744036
Option 2 ID : 264330744037
Option 3 ID : 264330744035
Option 4 ID : 264330744034
Status : Answered
Chosen Option : 2

Q.13 By Interchanging the given two numbers which of the following equation will be not correct?

3 and 7

- Ans
- 1. $7 \times 8 - 3 + 2 = 19$
 - 2. $7 + 3 \times 4 - 6 = 25$
 - 3. $7 \times 2 + 3 - 4 = 11$
 - 4. $8 + 7 - 3 = 4$

Question ID : 264330188032
Option 1 ID : 264330736058
Option 2 ID : 264330736057
Option 3 ID : 264330736056
Option 4 ID : 264330736059
Status : Answered
Chosen Option : 3

Q.14 A is the husband of B. B is the sister of C. C is the mother of D. D is the brother of E. E is the wife of F. F is the father of G. How is D related to F?

- Ans
- 1. Father
 - 2. Mother
 - 3. Brother
 - 4. Wife's brother

Question ID : 264330191395
Option 1 ID : 264330748937
Option 2 ID : 264330748936
Option 3 ID : 264330748934
Option 4 ID : 264330748935
Status : Answered
Chosen Option : 4

Q.15 After arranging the given words according to dictionary order, which word will come at 'Third' position?

1. Shrink
2. Shrug
3. Shriek
4. Shrimp
5. Shred

Ans 1. Shrink
 2. Shrug
 3. Shrimp
 4. Shriek

Question ID : 264330191510

Option 1 ID : 264330749396

Option 2 ID : 264330749394

Option 3 ID : 264330749395

Option 4 ID : 264330749397

Status : Answered

Chosen Option : 3

Q.16 A series is given with one term missing. Select the correct alternative from the given ones that will complete the series.

AB, DC, EF, HG, ?

Ans 1. IJ
 2. IM
 3. IQ
 4. IT

Question ID : 264330191368

Option 1 ID : 264330748828

Option 2 ID : 264330748827

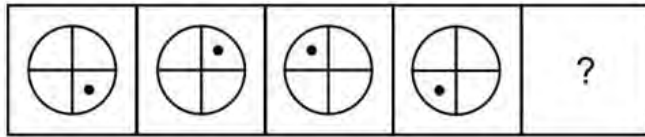
Option 3 ID : 264330748829

Option 4 ID : 264330748826

Status : Answered

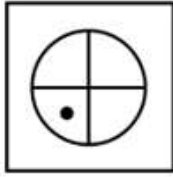
Chosen Option : 1

Q.17 Select the figure that will replace the question mark (?) in the following figure series.

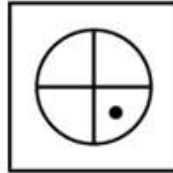


Ans

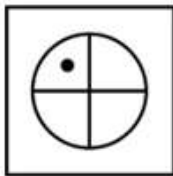
1.



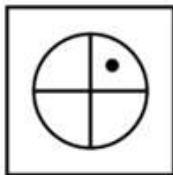
2.



3.



4.



Question ID : 264330192103

Option 1 ID : 264330751769

Option 2 ID : 264330751766

Option 3 ID : 264330751767

Option 4 ID : 264330751768

Status : Answered

Chosen Option : 2

Q.18 Three positions of a dice are given below. What will come on the face opposite to the face containing 'B' on it?



Ans 1. A

2. D

3. E

4. F

Question ID : 264330190566

Option 1 ID : 264330745846

Option 2 ID : 264330745849

Option 3 ID : 264330745847

Option 4 ID : 264330745848

Status : Answered

Chosen Option : 4

Q.19 Eight boys A, B, C, D, E, F, G and H are sitting in a row facing towards the south (not necessarily in the same order). A and H are at extreme ends of the row. E and F are immediate neighbours of B. C is fourth to the left of B. F is to the immediate left of A. D is not the immediate neighbour of C. Who is sitting on the immediate left of F?

- Ans**
- 1. C
 - 2. E
 - 3. B
 - 4. A

Question ID : 264330190536
Option 1 ID : 264330745726
Option 2 ID : 264330745729
Option 3 ID : 264330745727
Option 4 ID : 264330745728
Status : Answered
Chosen Option : 3

Q.20 If $49R 15S 18T 8 = -80$ and $99R 80S 17T 5 = 94$, then $85R 30S 15T 4 = ?$

- Ans**
- 1. 70
 - 2. 58
 - 3. 64
 - 4. 55

Question ID : 264330190281
Option 1 ID : 264330744707
Option 2 ID : 264330744708
Option 3 ID : 264330744709
Option 4 ID : 264330744706
Status : Not Answered
Chosen Option : --

Section : Part-B-General Knowledge and General awareness

Q.1 What is a "maiden over" in cricket?

- Ans**
- 1. An over with no runs scored by the batsman
 - 2. An over bowled by a spin bowler
 - 3. An over with six deliveries
 - 4. An over where the bowler takes a wicket

Question ID : 264330190862
Option 1 ID : 264330746805
Option 2 ID : 264330746803
Option 3 ID : 264330746802
Option 4 ID : 264330746804
Status : Answered
Chosen Option : 1

Q.2 A _____ government governs within the bounds established by constitutional law and citizen rights.

- Ans 1. democratic
 2. dictatorship
 3. autocracy
 4. monarchy

Question ID : 264330191821
Option 1 ID : 264330750638
Option 2 ID : 264330750639
Option 3 ID : 264330750640
Option 4 ID : 264330750641
Status : Answered
Chosen Option : 1

Q.3 'Bathukammas' is associated with which of the following states?

- Ans 1. Assam
 2. Telangana
 3. Bihar
 4. Punjab

Question ID : 264330190771
Option 1 ID : 264330746441
Option 2 ID : 264330746438
Option 3 ID : 264330746440
Option 4 ID : 264330746439
Status : Not Answered
Chosen Option : --

Q.4 Right to freedom of speech and expression is given under:

- Ans 1. Article 19
 2. Article 20
 3. Article 30
 4. Article 32

Question ID : 264330191900
Option 1 ID : 264330750956
Option 2 ID : 264330750955
Option 3 ID : 264330750954
Option 4 ID : 264330750957
Status : Marked For Review
Chosen Option : 3

Q.5 In _____, the Planning Commission was set up with the Prime Minister as its Chairperson.

- Ans 1. 1970
 2. 1950
 3. 1890
 4. 1850

Question ID : 264330191426
Option 1 ID : 264330749060
Option 2 ID : 264330749058
Option 3 ID : 264330749059
Option 4 ID : 264330749061
Status : Answered
Chosen Option : 2

Q.6 Which of the following device is used to measure the distance travelled by the vehicle?

- Ans 1. Tachometer
 2. Fuel gauge
 3. Speedometer
 4. Odometer

Question ID : 264330188777
Option 1 ID : 264330738912
Option 2 ID : 264330738913
Option 3 ID : 264330738910
Option 4 ID : 264330738911
Status : Answered
Chosen Option : 4

Q.7 Failure of Third Plan that of the devaluation of rupee (to boost exports) along with inflationary recession led to postponement of Fourth FYP and therefore _____ Annual Plans were introduced instead.

- Ans 1. two
 2. three
 3. one
 4. four

Question ID : 264330190666
Option 1 ID : 264330746246
Option 2 ID : 264330746247
Option 3 ID : 264330746249
Option 4 ID : 264330746248
Status : Answered
Chosen Option : 2

Q.8 As per 2011 Census Hindus form 79.80% with a population of _____.

- Ans
- 1. over 110 crores
 - 2. over 100 crores
 - 3. less than 80 crores
 - 4. over 90 crores

Question ID : 264330190913
Option 1 ID : 264330747008
Option 2 ID : 264330747006
Option 3 ID : 264330747009
Option 4 ID : 264330747007
Status : Answered
Chosen Option : 2

Q.9 Who has written the book 'The philosophy of the bomb?'

- Ans
- 1. Bhagwati charan Vohra
 - 2. Bhagat Singh
 - 3. Surya Sen
 - 4. Alpana Dutt

Question ID : 264330191777
Option 1 ID : 264330750462
Option 2 ID : 264330750463
Option 3 ID : 264330750464
Option 4 ID : 264330750465
Status : Answered
Chosen Option : 2

Q.10 Namo Shetkari Mahasanman Yojana was launched by the state of _____.

- Ans
- 1. Gujarat
 - 2. Madhya Pradesh
 - 3. Jharkhand
 - 4. Maharashtra

Question ID : 264330191968
Option 1 ID : 264330751227
Option 2 ID : 264330751226
Option 3 ID : 264330751228
Option 4 ID : 264330751229
Status : Answered
Chosen Option : 4

Q.11 According to the National Sample Survey Office (NSSO), the unemployment rate for individuals aged 15 years and above in urban areas decreased to _____ during January-March 2023 from 8.2 percent a year ago.

- Ans**
- 1. 5.1%
 - 2. 6.8%
 - 3. 9.2%
 - 4. 2.4 %

Question ID : 264330191735
Option 1 ID : 264330750295
Option 2 ID : 264330750296
Option 3 ID : 264330750297
Option 4 ID : 264330750294
Status : Not Answered
Chosen Option : --

Q.12 In November 2023, which Indian skydiver jumped from a helicopter from a height of 21,500 feet in front of the world's highest peak Mount Everest?

- Ans**
- 1. Anamika Sharma
 - 2. Shital Mahajan
 - 3. Lance Naik Manju
 - 4. Shweta Parmar

Question ID : 264330191008
Option 1 ID : 264330747389
Option 2 ID : 264330747386
Option 3 ID : 264330747388
Option 4 ID : 264330747387
Status : Not Answered
Chosen Option : --

Q.13 Which country did Indian football team defeat to win the Intercontinental Cup 2023?

- Ans**
- 1. Lebanon
 - 2. Vanuatu
 - 3. Maldives
 - 4. Mangolia

Question ID : 264330190801
Option 1 ID : 264330746561
Option 2 ID : 264330746560
Option 3 ID : 264330746558
Option 4 ID : 264330746559
Status : Not Answered
Chosen Option : --

Q.14 The term "CRR" in the context of Indian banking stands for:

- Ans
- 1. Credit Rating Regulation
 - 2. Cash Reserve Ratio
 - 3. Capital Recovery Rate
 - 4. Consumer Rights and Responsibilities

Question ID : 264330191505
Option 1 ID : 264330749375
Option 2 ID : 264330749377
Option 3 ID : 264330749376
Option 4 ID : 264330749374
Status : Marked For Review
Chosen Option : 2

Q.15 Who unveiled the statue of the late Nathuram Mirdha in Nagaur, Rajasthan?

- Ans
- 1. Prime Minister
 - 2. President
 - 3. Governor of Rajasthan
 - 4. Vice President

Question ID : 264330191210
Option 1 ID : 264330748197
Option 2 ID : 264330748194
Option 3 ID : 264330748196
Option 4 ID : 264330748195
Status : Answered
Chosen Option : 1

Q.16 In _____, the All India Kabaddi Federation came into existence and compiled standard rules.

- Ans
- 1. 1951
 - 2. 1950
 - 3. 1952
 - 4. 1953

Question ID : 264330188748
Option 1 ID : 264330738795
Option 2 ID : 264330738794
Option 3 ID : 264330738796
Option 4 ID : 264330738797
Status : Not Answered
Chosen Option : --

Q.17 Who was founder of the Agra Gharana?

- Ans
- 1. Hassu Khan
 - 2. Nathan Peerbaksh
 - 3. Khuda Baksh
 - 4. Haddu Khan

Question ID : 264330190577
Option 1 ID : 264330745892
Option 2 ID : 264330745893
Option 3 ID : 264330745891
Option 4 ID : 264330745890
Status : Not Answered
Chosen Option : --

Q.18 Pasumarthy Ramalinga Sastry is associated with which of the following dance style?

- Ans
- 1. Sattriya
 - 2. Bharatnatyam
 - 3. Kuchipudi
 - 4. Kathak

Question ID : 264330188683
Option 1 ID : 264330738536
Option 2 ID : 264330738535
Option 3 ID : 264330738537
Option 4 ID : 264330738534
Status : Answered
Chosen Option : 3

Q.19 Jawara dance is a popular folk dance of _____.

- Ans
- 1. Madhya Pradesh
 - 2. Kerala
 - 3. Himachal Pradesh
 - 4. Gujarat

Question ID : 264330190910
Option 1 ID : 264330746994
Option 2 ID : 264330746996
Option 3 ID : 264330746995
Option 4 ID : 264330746997
Status : Not Answered
Chosen Option : --

Q.20 The languages spoken in Jharkhand and parts of central India mainly belong to which of the following language family?

- Ans**
- 1. Indo-European family
 - 2. Austro-Asiatic family
 - 3. Tibeto-Burman family
 - 4. Dravidian family

Question ID : 264330190615
Option 1 ID : 264330746042
Option 2 ID : 264330746045
Option 3 ID : 264330746043
Option 4 ID : 264330746044
Status : Not Answered
Chosen Option : --

Section : Part-C-Elementary Mathematics

Q.1 Student Raju got 30 marks more than the student Raman and the marks of Raju were equal to the 60 percent of the sum of their marks. What are the marks obtained by Raju and Raman respectively?

- Ans**
- 1. 60, 30
 - 2. 100, 70
 - 3. 50, 20
 - 4. 90, 60

Question ID : 264330187306
Option 1 ID : 264330733154
Option 2 ID : 264330733153
Option 3 ID : 264330733155
Option 4 ID : 264330733152
Status : Answered
Chosen Option : 4

Q.2 If 35% of the marked price is equal to 45% of the cost price. Find the profit percentage if no discount is given.

- Ans**
- 1. 28.57%
 - 2. 22.5%
 - 3. 33.5%
 - 4. 27.56%

Question ID : 264330188090
Option 1 ID : 264330736290
Option 2 ID : 264330736288
Option 3 ID : 264330736291
Option 4 ID : 264330736289
Status : Answered
Chosen Option : 1

Q.3 What is that rate of simple interest at which a sum of money becomes three times of itself in 36 years?

- Ans
- 1. 6.28 percent
 - 2. 5.20 percent
 - 3. 5.80 percent
 - 4. 5.55 percent

Question ID : 264330188606
Option 1 ID : 264330738227
Option 2 ID : 264330738229
Option 3 ID : 264330738226
Option 4 ID : 264330738228
Status : Answered
Chosen Option : 4

Q.4 What is the total surface area of a cone whose radius is 15 cm and height is 8 cm?

- Ans
- 1. 1413.27 cm²
 - 2. 1508.57 cm²
 - 3. 1396.71 cm²
 - 4. 1624.37 cm²

Question ID : 264330187958
Option 1 ID : 264330735761
Option 2 ID : 264330735762
Option 3 ID : 264330735760
Option 4 ID : 264330735763
Status : Answered
Chosen Option : 2

Q.5 Evaluate: $14 \div (2 \times 2) + 5$

- Ans
- 1. 8.5
 - 2. 5.8
 - 3. 6.3
 - 4. 7.4

Question ID : 264330191187
Option 1 ID : 264330748103
Option 2 ID : 264330748104
Option 3 ID : 264330748105
Option 4 ID : 264330748102
Status : Answered
Chosen Option : 1

Q.6 If selling price and cost price of a shirt is Rs. 1430 and Rs. 1000 respectively, then what is the profit percentage?

- Ans**
- 1. 44 percent
 - 2. 43 percent
 - 3. 40 percent
 - 4. 37 percent

Question ID : 264330187607
Option 1 ID : 264330734356
Option 2 ID : 264330734358
Option 3 ID : 264330734359
Option 4 ID : 264330734357
Status : Answered
Chosen Option : 2

Q.7 Least Common Multiple of 6 and 29 is X, Highest Common Factor of 6 and 29 is Y. Then what is the value of $(X + 4Y)$?

- Ans**
- 1. 180
 - 2. 190
 - 3. 178
 - 4. 244

Question ID : 264330187182
Option 1 ID : 264330732659
Option 2 ID : 264330732657
Option 3 ID : 264330732658
Option 4 ID : 264330732656
Status : Answered
Chosen Option : 3

Q.8 The product of two numbers is 3375, and their HCF is 15. Find their LCM.

- Ans**
- 1. 220
 - 2. 250
 - 3. 225
 - 4. 215

Question ID : 264330188494
Option 1 ID : 264330737779
Option 2 ID : 264330737780
Option 3 ID : 264330737781
Option 4 ID : 264330737778
Status : Answered
Chosen Option : 3

Q.9 If $A : B = 7 : 4$, then what is the value of $(A + B) : (A - B)$?

- Ans 1. 11 : 3
 2. 11 : 5
 3. 11 : 4
 4. 11 : 6

Question ID : 264330187771
Option 1 ID : 264330735014
Option 2 ID : 264330735013
Option 3 ID : 264330735012
Option 4 ID : 264330735015
Status : Answered
Chosen Option : 1

Q.10 If 60 tables are bought for Rs. 14800, then how many tables must be sold for Rs. 14800 to earn a profit of 20 percent?

- Ans 1. 54
 2. 40
 3. 50
 4. 48

Question ID : 264330187668
Option 1 ID : 264330734602
Option 2 ID : 264330734600
Option 3 ID : 264330734603
Option 4 ID : 264330734601
Status : Answered
Chosen Option : 3

Q.11 One third part of a certain journey is covered at the speed of 22 km/hr, one fourth part at the speed of 33 km/hr and the rest part at the speed of 55 km/hr. What will be the average speed for the whole journey?

- Ans 1. 36 km/hr
 2. 33 km/hr
 3. 27 km/hr
 4. 39 km/hr

Question ID : 264330188015
Option 1 ID : 264330735990
Option 2 ID : 264330735989
Option 3 ID : 264330735988
Option 4 ID : 264330735991
Status : Not Answered
Chosen Option : --

Q.12 R and S can complete a work in 15 days and 60 days respectively. They work on alternate days one at a time and R works on the first day. In how many days the whole work will be completed?

- Ans**
- 1. 25 days
 - 2. 48 days
 - 3. 24 days
 - 4. 47 days

Question ID : 264330187937
Option 1 ID : 264330735677
Option 2 ID : 264330735678
Option 3 ID : 264330735676
Option 4 ID : 264330735679
Status : Answered
Chosen Option : 3

Q.13 Out of four numbers, the average of the first three is 24 and that of the last three is 29. If the last number is 33, then find the first number.

- Ans**
- 1. 15
 - 2. 18
 - 3. 17
 - 4. 16

Question ID : 264330188418
Option 1 ID : 264330737542
Option 2 ID : 264330737541
Option 3 ID : 264330737543
Option 4 ID : 264330737540
Status : Answered
Chosen Option : 2

Q.14 The marked price of an article is Rs. 2280. If a discount of 40 percent is given, then what will be the selling price of the article?

- Ans**
- 1. Rs. 1272
 - 2. Rs. 1368
 - 3. Rs. 1342
 - 4. Rs. 1248

Question ID : 264330187929
Option 1 ID : 264330735644
Option 2 ID : 264330735646
Option 3 ID : 264330735647
Option 4 ID : 264330735645
Status : Answered
Chosen Option : 2

Q.15 A sum becomes 3.24 times of itself in 2 years when invested at compound interest (compounding annually). What is the annual rate of interest?

- Ans**
- 1. 90 percent
 - 2. 80 percent
 - 3. 60 percent
 - 4. 75 percent

Question ID : 264330187254
Option 1 ID : 264330732945
Option 2 ID : 264330732944
Option 3 ID : 264330732946
Option 4 ID : 264330732947
Status : Answered
Chosen Option : 2

Q.16 The average of A and B is 30. The average of B and C is 60. What is the difference between C and A?

- Ans**
- 1. 48
 - 2. 50
 - 3. 62
 - 4. 60

Question ID : 264330191693
Option 1 ID : 264330750127
Option 2 ID : 264330750128
Option 3 ID : 264330750129
Option 4 ID : 264330750126
Status : Answered
Chosen Option : 4

Q.17 Simplify: $18 \div (3 + 5) - 2$.

- Ans**
- 1. 4
 - 2. 1.9
 - 3. 0.25
 - 4. 3.5

Question ID : 264330191168
Option 1 ID : 264330748028
Option 2 ID : 264330748029
Option 3 ID : 264330748026
Option 4 ID : 264330748027
Status : Answered
Chosen Option : 3

Q.18 If 60 is subtracted from a number, then number becomes 85 percent of itself. What is the number?

- Ans**
- 1. 300
 - 2. 200
 - 3. 500
 - 4. 400

Question ID : 264330188598
Option 1 ID : 264330738195
Option 2 ID : 264330738194
Option 3 ID : 264330738197
Option 4 ID : 264330738196
Status : Answered
Chosen Option : 4

Q.19 Two numbers are in the ratio 49 : 64. If both numbers are increased by 10, then their ratio becomes 54 : 69. What is the difference between the two numbers?

- Ans**
- 1. 95
 - 2. 60
 - 3. 15
 - 4. 30

Question ID : 264330187812
Option 1 ID : 264330735178
Option 2 ID : 264330735179
Option 3 ID : 264330735176
Option 4 ID : 264330735177
Status : Answered
Chosen Option : 4

Q.20 Three friends can build a wall in 5 days. If two more friends join, how many days will it take to complete the same wall?

- Ans**
- 1. 4 days
 - 2. 3 days
 - 3. 4.5 days
 - 4. 3.5 days

Question ID : 264330188509
Option 1 ID : 264330737838
Option 2 ID : 264330737840
Option 3 ID : 264330737839
Option 4 ID : 264330737841
Status : Answered
Chosen Option : 2

Q.1 Select the word segment that substitutes (replaces) the bracketed word segment correctly and completes the sentence meaningfully. Select the option 'no correction required' if the sentence is correct as given.

(We are used of being) happy together every day, and I can't think of happiness without him.

- Ans**
- 1. We were use to being
 - 2. No correction required
 - 3. We have used to been
 - 4. We are used to being

Question ID : 264330186910
Option 1 ID : 264330731761
Option 2 ID : 264330731763
Option 3 ID : 264330731760
Option 4 ID : 264330731762
Status : Answered
Chosen Option : 4

Q.2 Select the sentence with no spelling errors.

- Ans**
- 1. Volunteering is linked to better mental and physical welbeing.
 - 2. Volunteering is linked to beter mental and physical wellbeing.
 - 3. Voluntering is linked to better mental and physical wellbeing.
 - 4. Volunteering is linked to better mental and physical wellbeing.

Question ID : 264330186253
Option 1 ID : 264330729259
Option 2 ID : 264330729257
Option 3 ID : 264330729256
Option 4 ID : 264330729258
Status : Answered
Chosen Option : 4

Q.3 Choose the word that means the same as the given word.

Denizen

- Ans**
- 1. Habitat
 - 2. Exile
 - 3. Visitor
 - 4. Transient

Question ID : 264330186730
Option 1 ID : 264330731075
Option 2 ID : 264330731072
Option 3 ID : 264330731073
Option 4 ID : 264330731074
Status : Not Answered
Chosen Option : --

Q.4 Choose the option which is antonym of (opposite of) the word "abase" in the sentence given below:

She couldn't help but smile when he gave her a sincere compliment on her artwork.

- Ans
- 1. smile
 - 2. help
 - 3. compliment
 - 4. sincere

Question ID : 264330186416
Option 1 ID : 264330729877
Option 2 ID : 264330729876
Option 3 ID : 264330729879
Option 4 ID : 264330729878
Status : **Marked For Review**
Chosen Option : 4

Q.5 Find the part of the given sentence that has an error in it. If there is no error, choose 'No error'.

I waited for so more years to be with you.

- Ans
- 1. No error
 - 2. years to be
 - 3. I waited for so more
 - 4. with you

Question ID : 264330186760
Option 1 ID : 264330731191
Option 2 ID : 264330731189
Option 3 ID : 264330731188
Option 4 ID : 264330731190
Status : **Answered**
Chosen Option : 3

Q.6 Choose the most appropriate antonym of the underlined word.

Russia brandishes the threat of a gas cutoff to squeeze Kiev and coerce Europe.

- Ans
- 1. Intimidate
 - 2. Force
 - 3. Bully
 - 4. Assist

Question ID : 264330186249
Option 1 ID : 264330729241
Option 2 ID : 264330729242
Option 3 ID : 264330729240
Option 4 ID : 264330729243
Status : **Answered**
Chosen Option : 2

Q.7 Select the most appropriate option for the given blank.

Choose the right resolution _____ your project.

- Ans
- 1. by
 - 2. in
 - 3. to
 - 4. for

Question ID : 264330185650
Option 1 ID : 264330726962
Option 2 ID : 264330726961
Option 3 ID : 264330726963
Option 4 ID : 264330726960
Status : Answered
Chosen Option : 4

Q.8 Four sentences are given, out of which three have all correct spellings. Choose the sentence with the incorrect spelt word/ words.

Ans 1.

The old man said that what a man wanted was sympathy, and the judge said it was so.

2.

Tommy telephoned a man in Cannes to act as second and McKisco said he wasn't going to be seconded by Campion.

3.

That was still the state of things when the car got to the hotel.

4.

Silas might have driven a profitable trade in charms as well as in his small list of drugs.

Question ID : 264330186420
Option 1 ID : 264330729892
Option 2 ID : 264330729895
Option 3 ID : 264330729894
Option 4 ID : 264330729893
Status : Answered
Chosen Option : 4

Q.9 Find the part of the given sentence that has an error in it. If there is no error, choose 'No error'.

I saw so much of those peasant carts in your yard.

Ans 1. of those peasant

2. No error

3. I saw so much

4. carts in your yard.

Question ID : 264330185813
Option 1 ID : 264330727581
Option 2 ID : 264330727583
Option 3 ID : 264330727580
Option 4 ID : 264330727582
Status : Marked For Review
Chosen Option : 3

Q.10 Select the most appropriate option for the given blank.

Don't _____ your voice at me.

- Ans
- 1. keep
 - 2. erupt
 - 3. pull
 - 4. raise

Question ID : 264330185728
Option 1 ID : 264330727258
Option 2 ID : 264330727259
Option 3 ID : 264330727257
Option 4 ID : 264330727256
Status : Answered
Chosen Option : 4

Q.11 In the following question, out of the given four alternatives, select the alternative which best expresses the meaning of the Idiom/Phrase.
Full of beans

- Ans
- 1. Bad drinking habits
 - 2. Very dramatic
 - 3. Full of energy and life
 - 4. Full of secrets

Question ID : 264330185976
Option 1 ID : 264330728203
Option 2 ID : 264330728201
Option 3 ID : 264330728202
Option 4 ID : 264330728200
Status : Answered
Chosen Option : 4

Q.12 Select the most appropriate word to fill in the blank.

He has to look after his _____ aunt.

- Ans
- 1. age old
 - 2. aged
 - 3. ages
 - 4. edge

Question ID : 264330185923
Option 1 ID : 264330728000
Option 2 ID : 264330728003
Option 3 ID : 264330728002
Option 4 ID : 264330728001
Status : Answered
Chosen Option : 2

Q.13 Choose the idiom/phrase that can substitute the highlighted group of words meaningfully.

I felt nervous all through the interview, but I replied **as well as was possible** for anyone in the situation.

- Ans**
- 1. Run out of steam
 - 2. To the best of one's ability
 - 3. Through thick and thin
 - 4. Eats like a bird

Question ID : 264330185977
Option 1 ID : 264330728204
Option 2 ID : 264330728206
Option 3 ID : 264330728207
Option 4 ID : 264330728205
Status : Answered
Chosen Option : 2

Q.14 Improve the underlined part of the sentence. Choose 'No improvement' as an answer if the sentence is grammatically correct.

We saw a yellow coloured bus full of excited children.

- Ans**
- 1. No improvement
 - 2. yellow colouring
 - 3. yellowing coloured
 - 4. yellower coloured

Question ID : 264330185630
Option 1 ID : 264330726887
Option 2 ID : 264330726885
Option 3 ID : 264330726886
Option 4 ID : 264330726884
Status : Answered
Chosen Option : 1

Q.15 Find the part of the given sentence that has an error in it. If there is no error, choose 'No error'.

Governments around the world need to took dramatic action towards massive investments in health, sanitation, and basic income.

- Ans**
- 1. Governments around the world need to
 - 2. investments in health, sanitation, and basic income
 - 3. No error
 - 4. took dramatic action towards massive

Question ID : 264330186257
Option 1 ID : 264330729272
Option 2 ID : 264330729274
Option 3 ID : 264330729275
Option 4 ID : 264330729273
Status : Answered
Chosen Option : 4

Comprehension:

Read the passage carefully and select the correct answer for the given blanks out of the four alternatives.

Don't (1) _____ guilty for feeling disengaged from the news. It's normal to find it distressing when (2) _____ traumatic news stories, or seeing distressing images. This (3) _____ technique is called avoidance and explains why so many of us want to switch (4) _____ from troubling things. Knowing and accepting that this is a normal (5) _____ given the circumstances is the initial step to overcoming compassion fatigue.

SubQuestion No : 16

Q.16 Select the most appropriate option for blank(1)

- Ans
- 1. sense
 - 2. say
 - 3. bear
 - 4. feel

Question ID : 264330186683

Option 1 ID : 264330730892

Option 2 ID : 264330730894

Option 3 ID : 264330730895

Option 4 ID : 264330730893

Status : Answered

Chosen Option : 4

Comprehension:

Read the passage carefully and select the correct answer for the given blanks out of the four alternatives.

Don't (1) _____ guilty for feeling disengaged from the news. It's normal to find it distressing when (2) _____ traumatic news stories, or seeing distressing images. This (3) _____ technique is called avoidance and explains why so many of us want to switch (4) _____ from troubling things. Knowing and accepting that this is a normal (5) _____ given the circumstances is the initial step to overcoming compassion fatigue.

SubQuestion No : 17

Q.17 Select the most appropriate option for blank(2)

- Ans
- 1. taunting
 - 2. hearing
 - 3. trapping
 - 4. liberating

Question ID : 264330186684

Option 1 ID : 264330730899

Option 2 ID : 264330730896

Option 3 ID : 264330730897

Option 4 ID : 264330730898

Status : Answered

Chosen Option : 2

Comprehension:

Read the passage carefully and select the correct answer for the given blanks out of the four alternatives.

Don't (1) _____ guilty for feeling disengaged from the news. It's normal to find it distressing when (2) _____ traumatic news stories, or seeing distressing images. This (3) _____ technique is called avoidance and explains why so many of us want to switch (4) _____ from troubling things. Knowing and accepting that this is a normal (5) _____ given the circumstances is the initial step to overcoming compassion fatigue.

SubQuestion No : 18

Q.18 Select the most appropriate option for blank(3)

- Ans**
- 1. principal
 - 2. coping
 - 3. condemn
 - 4. hoping

Question ID : 264330186685

Option 1 ID : 264330730901

Option 2 ID : 264330730903

Option 3 ID : 264330730900

Option 4 ID : 264330730902

Status : Answered

Chosen Option : 2

Comprehension:

Read the passage carefully and select the correct answer for the given blanks out of the four alternatives.

Don't (1) _____ guilty for feeling disengaged from the news. It's normal to find it distressing when (2) _____ traumatic news stories, or seeing distressing images. This (3) _____ technique is called avoidance and explains why so many of us want to switch (4) _____ from troubling things. Knowing and accepting that this is a normal (5) _____ given the circumstances is the initial step to overcoming compassion fatigue.

SubQuestion No : 19

Q.19 Select the most appropriate option for blank(4)

- Ans**
- 1. about
 - 2. along
 - 3. away
 - 4. by

Question ID : 264330186686

Option 1 ID : 264330730904

Option 2 ID : 264330730907

Option 3 ID : 264330730905

Option 4 ID : 264330730906

Status : Answered

Chosen Option : 3

Comprehension:

Read the passage carefully and select the correct answer for the given blanks out of the four alternatives.

Don't (1) _____ guilty for feeling disengaged from the news. It's normal to find it distressing when (2) _____ traumatic news stories, or seeing distressing images. This (3) _____ technique is called avoidance and explains why so many of us want to switch (4) _____ from troubling things. Knowing and accepting that this is a normal (5) _____ given the circumstances is the initial step to overcoming compassion fatigue.

SubQuestion No : 20

Q.20 Select the most appropriate option for blank(5)

- Ans**
- 1. caustic
 - 2. comeback
 - 3. perseverance
 - 4. response

Question ID : 264330186687

Option 1 ID : 264330730911

Option 2 ID : 264330730909

Option 3 ID : 264330730910

Option 4 ID : 264330730908

Status : Answered

Chosen Option : 3

Section : Part-D-Hindi

Q.1 दिए गए शब्द का पर्यायवाची ज्ञात कीजिए।

हिम

- Ans**
- 1. बर्फ
 - 2. पहाड़
 - 3. पर्वत
 - 4. शैलेन्द्र

Question ID : 264330189447

Option 1 ID : 264330741490

Option 2 ID : 264330741492

Option 3 ID : 264330741493

Option 4 ID : 264330741491

Status : Not Answered

Chosen Option : --

Q.2 निम्नलिखित प्रश्न में, दिए गए चार विकल्पों में से, उस विकल्प का चयन करें जो दिए गए मुहावरे के अर्थ को सर्वश्रेष्ठ रूप से व्यक्त करता है।

आटा गीला होना

Ans

- 1. बुरा सोचना
- 2. बहकाना
- 3. संकट में और संकट का आ जाना
- 4. स्वार्थ सिद्ध करना

Question ID : 264330189032

Option 1 ID : 264330739912

Option 2 ID : 264330739913

Option 3 ID : 264330739910

Option 4 ID : 264330739911

Status : Not Answered

Chosen Option : --

Q.3 दिए गए वाक्य में रेखांकित शब्द का तत्सम शब्द ज्ञात कीजिए।

भगवान को फूल अर्पित करो।

Ans

- 1. पक्षु
- 2. प्रिय
- 3. पुष्प
- 4. पक्ष

Question ID : 264330189476

Option 1 ID : 264330741603

Option 2 ID : 264330741605

Option 3 ID : 264330741604

Option 4 ID : 264330741602

Status : Not Answered

Chosen Option : --

Q.4 निम्नलिखित प्रश्न में, चार विकल्पों में से, उस विकल्प का चयन करें जो कोष्ठक में दिए गए शब्द के पर्यायवाची शब्द का सही विकल्प है।

मेरे घर में सिर्फ एक ही (देवता) _____ की पूजा की जाती है।

Ans

- 1. लक्ष्य
- 2. याज्ञसेनी
- 3. कार्मुक
- 4. विबुध

Question ID : 264330189784

Option 1 ID : 264330742776

Option 2 ID : 264330742775

Option 3 ID : 264330742777

Option 4 ID : 264330742774

Status : Not Answered

Chosen Option : --

Q.5 निम्नलिखित प्रश्न में, चार विकल्पों में से, उस विकल्प का चयन करें जो रिक्त स्थान के लिए सही स्त्रीलिंग रूप वाला विकल्प हो।
हमें किसी भी अधिकारी को _____ नहीं देनी चाहिए।

- Ans
- 1. घूस
 - 2. तीर
 - 3. आईना
 - 4. क्रोध

Question ID : 264330188373
Option 1 ID : 264330737368
Option 2 ID : 264330737369
Option 3 ID : 264330737371
Option 4 ID : 264330737370
Status : Not Answered
Chosen Option : --

Q.6 निम्नलिखित प्रश्न में, दिए गए चार विकल्पों में से, उस विकल्प का चयन करें जो दिए गए मुहावरे के अर्थ को सर्वश्रेष्ठ रूप से व्यक्त करता है।

हाथ-पाँव मारना

- Ans
- 1. लड़ाई करना
 - 2. असन्तुष्ट होना
 - 3. लालच दिखाना
 - 4. प्रयत्न करना

Question ID : 264330190060
Option 1 ID : 264330743826
Option 2 ID : 264330743827
Option 3 ID : 264330743829
Option 4 ID : 264330743828
Status : Not Answered
Chosen Option : --

Q.7 दिए गए वाक्य में से निरर्थक शब्द ज्ञात कीजिए।

लाइब्रेरी से फिताब लाकर दीजिए।

- Ans
- 1. दीजिए
 - 2. लाइब्रेरी
 - 3. फिताब
 - 4. किताब

Question ID : 264330189099
Option 1 ID : 264330740166
Option 2 ID : 264330740167
Option 3 ID : 264330740169
Option 4 ID : 264330740168
Status : Not Answered
Chosen Option : --

Q.8 निम्नलिखित प्रश्न में, चार विकल्पों में से, उस विकल्प का चयन करें जो कोष्ठक में दिए गए शब्द के विलोम शब्द का सही विकल्प है।
मैंने कल ही एक (उपन्यास) _____ पढ़ी।

- Ans
- 1. जानकारी
 - 2. रचना
 - 3. काव्य
 - 4. एकांकी

Question ID : 264330189597

Option 1 ID : 264330742063

Option 2 ID : 264330742065

Option 3 ID : 264330742064

Option 4 ID : 264330742062

Status : Not Answered

Chosen Option : --

Q.9 दिए गए वाक्य में रेखांकित शब्द का विलोम शब्द ज्ञात कीजिए।

भारी वस्तु पानी में तैरती है।

- Ans
- 1. चलना
 - 2. दौड़ना
 - 3. डुबती
 - 4. ऊपरी

Question ID : 264330189176

Option 1 ID : 264330740458

Option 2 ID : 264330740459

Option 3 ID : 264330740460

Option 4 ID : 264330740461

Status : Not Answered

Chosen Option : --

Q.10 दिए गए वाक्य में रेखांकित शब्दों के लिए सही शब्दों वाले विकल्प का चयन करें।

हमारा संपर्क अनेकों व्यक्तियों से नित्य होता है।

- Ans
- 1. हमारा संपर्क अनेक व्यक्ति से नित्य होता है।
 - 2. हमारा संपर्क अनेकों व्यक्ति से नित्य होता है।
 - 3. परिवर्तन की आवश्यकता नहीं है।
 - 4. हमारा संपर्क अनेक व्यक्तियों से नित्य होता है।

Question ID : 264330189333

Option 1 ID : 264330741058

Option 2 ID : 264330741059

Option 3 ID : 264330741061

Option 4 ID : 264330741060

Status : Not Answered

Chosen Option : --

Q.11 दिए गए वाक्यांश के लिए सार्थक शब्द ज्ञात कीजिए।

स्त्री जो कविता लिखती है

- Ans
- 1. कवियित्री
 - 2. कवयित्री
 - 3. कवियीत्री
 - 4. कवियत्री

Question ID : 264330189341

Option 1 ID : 264330741086

Option 2 ID : 264330741087

Option 3 ID : 264330741088

Option 4 ID : 264330741089

Status : Not Answered

Chosen Option : --

Q.12 दिए गए वाक्य का वह भाग ज्ञात करें, जिसमें कोई त्रुटि है।

दोनों चोटियों में से जो चोटी उच्चतम होगी मैं उसी की चढ़ाई करूँगा।

- Ans
- 1. की चढ़ाई करूँगा।
 - 2. जो चोटी उच्चतम
 - 3. होगी मैं उसी
 - 4. दोनो चोटियों में से

Question ID : 264330189037

Option 1 ID : 264330739933

Option 2 ID : 264330739931

Option 3 ID : 264330739932

Option 4 ID : 264330739930

Status : Not Answered

Chosen Option : --

Q.13 निम्नलिखित प्रश्न में, चार विकल्पों में से, उस सही विकल्प का चयन करें जो वाक्यांशों के लिए एक शब्द का विकल्प हो।

जो सहनशील न हो

- Ans
- 1. अशोक्य
 - 2. अशक्य
 - 3. सहिष्णु
 - 4. असहिष्णु

Question ID : 264330189802

Option 1 ID : 264330742844

Option 2 ID : 264330742842

Option 3 ID : 264330742845

Option 4 ID : 264330742843

Status : Not Answered

Chosen Option : --

Q.14 दिए गए वाक्य में रेखांकित शब्द के लिए सही वर्तनी ज्ञात कीजिए।

मृतक के घर वाले वहीं मौजूद थे।

- Ans 1. मृतक
 2. मत्रक
 3. मरतक
 4. मरितक

Question ID : 264330188992

Option 1 ID : 264330739759

Option 2 ID : 264330739758

Option 3 ID : 264330739761

Option 4 ID : 264330739760

Status : Not Answered

Chosen Option : --

Q.15 निम्नलिखित वाक्य में, उस वाक्यांश को पहचानिए जिसमें मात्राओं या व्याकरण से संबंधित अशुद्धियाँ हैं। यदि कोई गलती नहीं है तो 'कोई त्रुटि नहीं है' का चुनाव कीजिए।
 लोगों को गंदगी के गंभीर परिणामों के बारे में बताना होगा, जिससे कि उनको पता चले कि उनके गंदगी फैलाने से/ उनके साथ-साथ पूरे वातावरण ही पर कितना नुकसान होता है।

- Ans 1.
 उनके साथ-साथ पूरे वातावरण ही पर कितना नुकसान होता है
 2. कोई त्रुटि नहीं है
 3.
 बताना होगा, जिससे की उनको पता चले कि उनके गंदगी फैलाने से
 4. लोगों को गंदगी के गंभीर परिणामों के बारे में

Question ID : 264330189768

Option 1 ID : 264330742716

Option 2 ID : 264330742717

Option 3 ID : 264330742715

Option 4 ID : 264330742714

Status : Not Answered

Chosen Option : --

Comprehension:

नीचे दिए गए गद्य में कुछ शब्द छोड़ दिए गए हैं और प्रत्येक रिक्त स्थान के चार विकल्प दिए गए हैं। इन चारों में से कौन सा विकल्प रिक्त स्थान की पूर्ति करेगा-

शहरी इलाकों में आबादी का अधिक (1)____, वाहनों की ज्यादा संख्या और अधिक आवाजाही के (2)____ सड़क हादसों का सबसे अधिक (3)____ ग्रामीण इलाकों में है। एक रिपोर्ट के अनुसार, 2022 में शहरी क्षेत्रों में 54000 लोगों को (4)____ में जान (5)____ पड़ी।

SubQuestion No : 16

Q.16 रिक्त 1 के लिए सबसे उपयुक्त विकल्प का चयन कीजिए।

- Ans 1. घनत्व
 2. घोर
 3. घना
 4. घटना

Question ID : 264330190007

Option 1 ID : 264330743623

Option 2 ID : 264330743625

Option 3 ID : 264330743622

Option 4 ID : 264330743624

Status : Not Answered

Chosen Option : --

Comprehension:

नीचे दिए गए गद्य में कुछ शब्द छोड़ दिए गए हैं और प्रत्येक रिक्त स्थान के चार विकल्प दिए गए हैं। इन चारों में से कौन सा विकल्प रिक्त स्थान की पूर्ति करेगा-

शहरी इलाकों में आबादी का अधिक (1)____, वाहनों की ज्यादा संख्या और अधिक आवाजाही के (2)____ सड़क हादसों का सबसे अधिक (3)____ ग्रामीण इलाकों में है। एक रिपोर्ट के अनुसार, 2022 में शहरी क्षेत्रों में 54000 लोगों को (4)____ में जान (5)____ पड़ी।

SubQuestion No : 17

Q.17 रिक्त 2 के लिए सबसे उपयुक्त विकल्प का चयन कीजिए।

- Ans 1. बावजूद
 2. लिए
 3. वजह
 4. परस्पर

Question ID : 264330190008

Option 1 ID : 264330743628

Option 2 ID : 264330743626

Option 3 ID : 264330743627

Option 4 ID : 264330743629

Status : Not Answered

Chosen Option : --

Comprehension:

नीचे दिए गए गद्य में कुछ शब्द छोड़ दिए गए हैं और प्रत्येक रिक्त स्थान के चार विकल्प दिए गए हैं। इन चारों में से कौन सा विकल्प रिक्त स्थान की पूर्ति करेगा-

शहरी इलाकों में आबादी का अधिक (1)____, वाहनों की ज्यादा संख्या और अधिक आवाजाही के (2)____ सड़क हादसों का सबसे अधिक (3)____ ग्रामीण इलाकों में है। एक रिपोर्ट के अनुसार, 2022 में शहरी क्षेत्रों में 54000 लोगों को (4)____ में जान (5)____ पड़ी।

SubQuestion No : 18

Q.18 रिक्त 3 के लिए सबसे उपयुक्त विकल्प का चयन कीजिए।

- Ans
- 1. इज्जत
 - 2. कारोबार
 - 3. जोखिम
 - 4. परिणाम

Question ID : 264330190009

Option 1 ID : 264330743632

Option 2 ID : 264330743633

Option 3 ID : 264330743630

Option 4 ID : 264330743631

Status : Not Answered

Chosen Option : --

Comprehension:

नीचे दिए गए गद्य में कुछ शब्द छोड़ दिए गए हैं और प्रत्येक रिक्त स्थान के चार विकल्प दिए गए हैं। इन चारों में से कौन सा विकल्प रिक्त स्थान की पूर्ति करेगा-

शहरी इलाकों में आबादी का अधिक (1)____, वाहनों की ज्यादा संख्या और अधिक आवाजाही के (2)____ सड़क हादसों का सबसे अधिक (3)____ ग्रामीण इलाकों में है। एक रिपोर्ट के अनुसार, 2022 में शहरी क्षेत्रों में 54000 लोगों को (4)____ में जान (5)____ पड़ी।

SubQuestion No : 19

Q.19 रिक्त 4 के लिए सबसे उपयुक्त विकल्प का चयन कीजिए।

- Ans
- 1. सुविचार
 - 2. मंत्रालय
 - 3. दुर्घनाओं
 - 4. सुविधा

Question ID : 264330190010

Option 1 ID : 264330743636

Option 2 ID : 264330743635

Option 3 ID : 264330743637

Option 4 ID : 264330743634

Status : Not Answered

Chosen Option : --

Comprehension:

नीचे दिए गए गद्य में कुछ शब्द छोड़ दिए गए हैं और प्रत्येक रिक्त स्थान के चार विकल्प दिए गए हैं। इन चारों में से कौन सा विकल्प रिक्त स्थान की पूर्ति करेगा-

शहरी इलाकों में आबादी का अधिक (1)____, वाहनों की ज्यादा संख्या और अधिक आवाजाही के (2)____ सड़क हादसों का सबसे अधिक (3)____ ग्रामीण इलाकों में है। एक रिपोर्ट के अनुसार, 2022 में शहरी क्षेत्रों में 54000 लोगों को (4)____ में जान (5)____ पड़ी।

SubQuestion No : 20

Q.20 रिक्त 5 के लिए सबसे उपयुक्त विकल्प का चयन कीजिए।

- Ans
- 1. चलाकी
 - 2. हालात
 - 3. बचानी
 - 4. गंवानी

Question ID : 264330190011

Option 1 ID : 264330743640

Option 2 ID : 264330743641

Option 3 ID : 264330743638

Option 4 ID : 264330743639

Status : Not Answered

Chosen Option : --