

**Constable GD in Central Armed Police Forces CAPFs SSF Rifleman GD in Assam  
Rifles Examination 2024**

Roll Number	
Candidate Name	
Venue Name	
Exam Date	28/02/2024
Exam Time	9:00 AM - 10:00 AM
Subject	Constable GD Examination 2024

Section : Part-A-General Intelligence and Reasoning

Q.1 Which of the following letter cluster will replace the blank (\_\_\_) in the given series?

BMM, DOO, \_\_\_\_, HSS, JUU

- Ans
- 1. EQQ
  - 2. ERR
  - 3. FQQ
  - 4. FPP

Question ID : 264330192209

Option 1 ID : 264330752190

Option 2 ID : 264330752192

Option 3 ID : 264330752193

Option 4 ID : 264330752191

Status : Answered

Chosen Option : 3

Q.2 Which answer figure will complete the pattern in the question figure? (rotation is NOT allowed)



Ans

1.



2.



3.



4.



Question ID : 264330187077

Option 1 ID : 264330732238

Option 2 ID : 264330732237

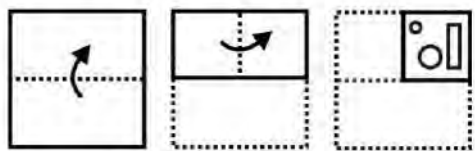
Option 3 ID : 264330732239

Option 4 ID : 264330732236

Status : Answered

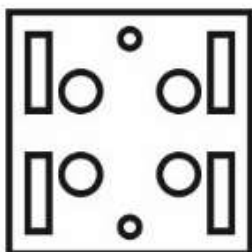
Chosen Option : 2

**Q.3** A piece of paper is folded and punched as shown below in the question figures, indicate how it will appear when opened.

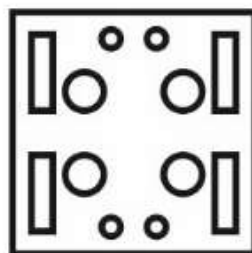


Ans

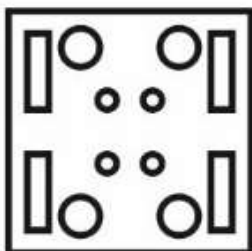
1.



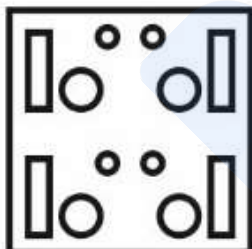
2.



3.



4.



Question ID : 264330187418

Option 1 ID : 264330733600

Option 2 ID : 264330733601

Option 3 ID : 264330733603

Option 4 ID : 264330733602

Status : Answered

Chosen Option : 2

Q.4 Which two signs should be interchanged to make the given equation correct?

$$12 \times 3 + 11 \div 4 - 32 = 16$$

- Ans
- 1.  $\times$  and  $+$
  - 2.  $\times$  and  $-$
  - 3.  $\times$  and  $\div$
  - 4.  $+$  and  $\div$

Question ID : 264330192201

Option 1 ID : 264330752158

Option 2 ID : 264330752159

Option 3 ID : 264330752160

Option 4 ID : 264330752161

Status : Answered

Chosen Option : 3

Q.5 Arrange the given words in the sequence in which they occur in the dictionary.

1. Award
2. Await
3. Away
4. Awake
5. Aware

- Ans
- 1. 3,2,1,4,5
  - 2. 2,4,1,3,5
  - 3. 3,2,1,5,4
  - 4. 2,4,1,5,3

Question ID : 264330187041

Option 1 ID : 264330732094

Option 2 ID : 264330732092

Option 3 ID : 264330732095

Option 4 ID : 264330732093

Status : Answered

Chosen Option : 4

Q.6 In a certain code language, if PANTRY is coded as '274365', STEADY is coded as '931785', then what will 'DATES' be coded as?

- Ans
- 1. 23915
  - 2. 83974
  - 3. 87319
  - 4. 03847

Question ID : 264330192194

Option 1 ID : 264330752133

Option 2 ID : 264330752131

Option 3 ID : 264330752130

Option 4 ID : 264330752132

Status : Answered

Chosen Option : 3

**Q.7** Five colleagues Alok, Bhavana, Chetan, Divya, and Ekta are seated at a circular table facing the center. Chetan, who is sitting to the immediate left of Ekta, is also second to the right of Divya. Bhavana is not sitting next to Chetan. Who is sitting second to the right of Bhavana?

- Ans**
- 1. Divya
  - 2. Alok
  - 3. Chetan
  - 4. Ekta

Question ID : 264330192337  
Option 1 ID : 264330752705  
Option 2 ID : 264330752704  
Option 3 ID : 264330752702  
Option 4 ID : 264330752703  
Status : Answered  
Chosen Option : 2

**Q.8** In the following question, select the related letters from the given alternatives.

AZC : VUX :: SUS : ?

- Ans**
- 1. BAX
  - 2. DCQ
  - 3. NPN
  - 4. CKM

Question ID : 264330187062  
Option 1 ID : 264330732178  
Option 2 ID : 264330732179  
Option 3 ID : 264330732176  
Option 4 ID : 264330732177  
Status : Answered  
Chosen Option : 3

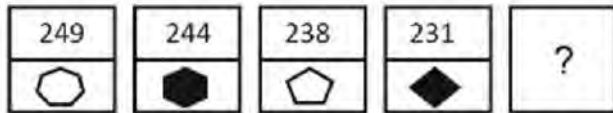
**Q.9** Which two numbers should be interchanged to make the given equation correct?

$$25 - 28 + 21 \times 10 \div 5 = 43$$

- Ans**
- 1. 5 and 28
  - 2. 21 and 25
  - 3. 10 and 43
  - 4. 21 and 28

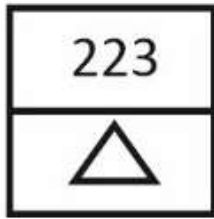
Question ID : 264330192222  
Option 1 ID : 264330752244  
Option 2 ID : 264330752242  
Option 3 ID : 264330752243  
Option 4 ID : 264330752245  
Status : Answered  
Chosen Option : 2

**Q.10** In the following question, select the figure which can be placed at the sign of question mark (?) from the given alternatives.



Ans

✓ 1.



✗ 2.



✗ 3.



✗ 4.



Question ID : 264330187095

Option 1 ID : 264330732310

Option 2 ID : 264330732308

Option 3 ID : 264330732309

Option 4 ID : 264330732311

Status : Answered

Chosen Option : 1

**Q.11** In the following question, select the missing number from the given series.

625, 600, 575, 550, 525, ?

Ans ✓ 1. 500

✗ 2. 518

✗ 3. 490

✗ 4. 510

Question ID : 264330191379

Option 1 ID : 264330748870

Option 2 ID : 264330748873

Option 3 ID : 264330748872

Option 4 ID : 264330748871

Status : Answered

Chosen Option : 1

**Q.12** Five persons A, B, C, D and E are sitting around a circular table facing towards the centre (not necessarily in the same order). Only one person is sitting between C and D (when counted from one side only). B is sitting second to the left of D. A is sitting to the immediate right of B. Who is sitting on the immediate right of C?

- Ans**
- 1. B
  - 2. E
  - 3. D
  - 4. A

Question ID : 264330191396  
 Option 1 ID : 264330748938  
 Option 2 ID : 264330748940  
 Option 3 ID : 264330748939  
 Option 4 ID : 264330748941  
 Status : Answered  
 Chosen Option : 1

**Q.13** "If ' $R \times S$ ' means ' $R$  is the mother of  $S$ ',  
 If ' $R + S$ ' means ' $R$  is the son of  $S$ ',  
 If ' $R \div S$ ' means ' $R$  is the daughter of  $S$ ',  
 If ' $R - S$ ' means ' $R$  is the husband of  $S$ ',  
 How is A related to B in the expression ' $A + D - C \times B$ '?"

- Ans**
- 1. Husband
  - 2. Father
  - 3. Brother
  - 4. Son

Question ID : 264330192195  
 Option 1 ID : 264330752136  
 Option 2 ID : 264330752137  
 Option 3 ID : 264330752135  
 Option 4 ID : 264330752134  
 Status : Answered  
 Chosen Option : 3

**Q.14** In the following question, select the related letter pair from the given alternatives.

KX : LZ :: ?

- Ans**
- 1. MO : AZ
  - 2. TU : AA
  - 3. CB : AA
  - 4. PS : QU

Question ID : 264330187383  
 Option 1 ID : 264330733463  
 Option 2 ID : 264330733460  
 Option 3 ID : 264330733461  
 Option 4 ID : 264330733462  
 Status : Answered  
 Chosen Option : 4

**Q.15** Which of the following numbers will replace the question mark (?) in the given series?

83, 79, 74, 68, 61, 53, ?

- Ans**
- 1. 46
  - 2. 48
  - 3. 44
  - 4. 42

Question ID : 264330190719  
Option 1 ID : 264330746308  
Option 2 ID : 264330746309  
Option 3 ID : 264330746306  
Option 4 ID : 264330746307  
Status : Answered  
Chosen Option : 3

**Q.16** Which of the following letter cluster will replace the question mark (?) in the given series?

YT, ?, AR, BQ, CP, DO

- Ans**
- 1. XU
  - 2. ZU
  - 3. XS
  - 4. ZS

Question ID : 264330192188  
Option 1 ID : 264330752109  
Option 2 ID : 264330752106  
Option 3 ID : 264330752108  
Option 4 ID : 264330752107  
Status : Answered  
Chosen Option : 4



**Q.17** From the given option figures, select the one in which the question figure is hidden/embedded. (rotation is NOT allowed)



Ans

1.



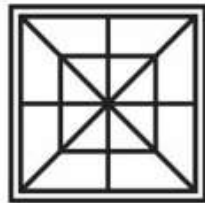
2.



3.



4.



Question ID : 264330190265

Option 1 ID : 264330744645

Option 2 ID : 264330744643

Option 3 ID : 264330744644

Option 4 ID : 264330744642

Status : Answered

Chosen Option : 4

**Q.18** Three Statements are given followed by two conclusions numbered I and II. Assuming the statements to be true, even if they seem to be at variance with commonly known facts, decide which of the conclusions logically follow(s) from the statements.

Statement I: Some phones are laptops.

Statement II: Some laptops are tablets.

Statement III: Some tablets are desktops.

Conclusion I: Some phones are desktops.

Conclusion II: All tablets are phones.

Ans

1. Only conclusion II follows

2. Both conclusions I and II follow

3. Neither conclusion I nor II follows

4. Only conclusion I follows

Question ID : 264330188049

Option 1 ID : 264330736125

Option 2 ID : 264330736126

Option 3 ID : 264330736127

Option 4 ID : 264330736124

Status : Answered

Chosen Option : 3

**Q.19** In the following question, select the figure which can be placed at the sign of question mark (?) from the given alternatives.

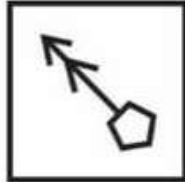


Ans

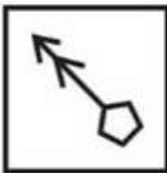
1.



2.



3.



4.



Question ID : 264330190542

Option 1 ID : 264330745751

Option 2 ID : 264330745753

Option 3 ID : 264330745750

Option 4 ID : 264330745752

Status : Answered

Chosen Option : 2

**Q.20** In a certain code language, 'SLOT' is coded as 'PHLP'. What is the code for 'YOGA' in that code language?

Ans  1. VKEW

2. VKDW

3. VKCW

4. VKDV

Question ID : 264330187084

Option 1 ID : 264330732264

Option 2 ID : 264330732266

Option 3 ID : 264330732267

Option 4 ID : 264330732265

Status : Answered

Chosen Option : 2

Q.1 Article 163 of the Indian Constitution is related to which of the following?

- Ans
- 1. Constitution of Legislatures in States
  - 2. Advocate-General for the State
  - 3. Conduct of Business of the Government of a State
  - 4. Council of Ministers to aid and advise Governor

Question ID : 264330191100

Option 1 ID : 264330747757

Option 2 ID : 264330747755

Option 3 ID : 264330747756

Option 4 ID : 264330747754

Status : Answered

Chosen Option : 4

Q.2 As of July 2023, who has become the second longest serving Chief Minister of an Indian states?

- Ans
- 1. Shivraj Singh Chauhan
  - 2. Yogi Adityanath
  - 3. Pawan Kumar Chamling
  - 4. Naveen Patnaik

Question ID : 264330190608

Option 1 ID : 264330746017

Option 2 ID : 264330746016

Option 3 ID : 264330746014

Option 4 ID : 264330746015

Status : Answered

Chosen Option : 4

Q.3 Which of the following Acts allowed detention of political prisoners without trial for two years?

- Ans
- 1. Vernacular Press Act
  - 2. Government of India Act 1935
  - 3. Arms Act
  - 4. Rowlatt Act

Question ID : 264330191096

Option 1 ID : 264330747740

Option 2 ID : 264330747739

Option 3 ID : 264330747738

Option 4 ID : 264330747741

Status : Answered

Chosen Option : 4

- Q.4** Read the following about the impact of Green Revolution in India.
- A. India became self-sufficient in food-grains and had sufficient stock in the central pool, even, at times, India was in a position to export food-grains.
- B. The per capita net availability of food-grains has also increased.
- Identify the CORRECT statement/statements.

- Ans**
- 1. Both A and B
  - 2. Only A
  - 3. Neither A nor B
  - 4. Only B

Question ID : 264330188890  
Option 1 ID : 264330739364  
Option 2 ID : 264330739362  
Option 3 ID : 264330739365  
Option 4 ID : 264330739363  
Status : Answered  
Chosen Option : 1

- Q.5** Every year the Flamingo festival is celebrated at the Pulicat Lake near the Nellapattu Bird Sanctuary located in \_\_\_\_\_.

- Ans**
- 1. Kerala
  - 2. Andhra Pradesh
  - 3. Goa
  - 4. Maharashtra

Question ID : 264330190887  
Option 1 ID : 264330746904  
Option 2 ID : 264330746905  
Option 3 ID : 264330746903  
Option 4 ID : 264330746902  
Status : Answered  
Chosen Option : 2

- Q.6** \_\_\_\_\_ is the first Indian dancer, a transgender, to be honoured with Padma Shri.

- Ans**
- 1. Yamini Krishnamurthy
  - 2. Alarmel Valli
  - 3. Narthaki Nataraj
  - 4. Protima Bedi

Question ID : 264330188923  
Option 1 ID : 264330739495  
Option 2 ID : 264330739497  
Option 3 ID : 264330739494  
Option 4 ID : 264330739496  
Status : Answered  
Chosen Option : 3

Q.7 In table tennis, a serve that hits the net but still goes over and lands in the opponent's service area is called a:

- Ans
- 1. Stroke
  - 2. Let
  - 3. Net ball
  - 4. Fault

Question ID : 264330190983  
Option 1 ID : 264330747288  
Option 2 ID : 264330747286  
Option 3 ID : 264330747289  
Option 4 ID : 264330747287  
Status : Answered  
Chosen Option : 2

Q.8 \_\_\_\_\_ has been invited as the chief guest for India's Republic Day celebrations 2023, marking the first time for this nation's President to receive this honour.

- Ans
- 1. Abdel Fattah El-Sisi
  - 2. Vladimir Putin
  - 3. Angela Merkel
  - 4. Xi Jinping

Question ID : 264330190869  
Option 1 ID : 264330746833  
Option 2 ID : 264330746830  
Option 3 ID : 264330746831  
Option 4 ID : 264330746832  
Status : Answered  
Chosen Option : 1

Q.9 Which Law of Newton states that for every action (force) in nature there is an equal and opposite reaction?

- Ans
- 1. 2nd
  - 2. 4th
  - 3. 1st
  - 4. 3rd

Question ID : 264330191893  
Option 1 ID : 264330750927  
Option 2 ID : 264330750929  
Option 3 ID : 264330750926  
Option 4 ID : 264330750928  
Status : Answered  
Chosen Option : 4

**Q.10** Gautama Buddha decided to find his own path to realisation, and meditated for days on end under a \_\_\_\_\_ tree at Bodh Gaya in Bihar.

- Ans**
- 1. Sal
  - 2. Teak
  - 3. Peepal
  - 4. Neem

Question ID : 264330188640  
Option 1 ID : 264330738363  
Option 2 ID : 264330738365  
Option 3 ID : 264330738362  
Option 4 ID : 264330738364  
Status : Answered  
Chosen Option : 1

**Q.11** In India, "APEDA" is related to which of the following?

- Ans**
- 1. Agriculture
  - 2. Highways
  - 3. IT Services
  - 4. Arms and ammunition

Question ID : 264330190646  
Option 1 ID : 264330746167  
Option 2 ID : 264330746166  
Option 3 ID : 264330746168  
Option 4 ID : 264330746169  
Status : Answered  
Chosen Option : 1

**Q.12** Which measure captures the difference between the government's total expenditure and total receipts, excluding borrowing?

- Ans**
- 1. Gross Fiscal Deficit
  - 2. Fiscal Deficit
  - 3. Revenue Deficit
  - 4. Primary Deficit

Question ID : 264330188929  
Option 1 ID : 264330739521  
Option 2 ID : 264330739519  
Option 3 ID : 264330739520  
Option 4 ID : 264330739518  
Status : Answered  
Chosen Option : 2

**Q.13** The spring festival of Holi is celebrated as Yaoshang by the Meitei tribe in the state of \_\_\_\_\_, lasting about six days.

- Ans**
- 1. West Bengal
  - 2. Maharashtra
  - 3. Manipur
  - 4. Goa

Question ID : 264330190911  
Option 1 ID : 264330747001  
Option 2 ID : 264330746998  
Option 3 ID : 264330747000  
Option 4 ID : 264330746999  
Status : Answered  
Chosen Option : 3

**Q.14** The Constituent Assembly of India was set up in which year?

- Ans**
- 1. 1946
  - 2. 1948
  - 3. 1947
  - 4. 1945

Question ID : 264330190779  
Option 1 ID : 264330746471  
Option 2 ID : 264330746473  
Option 3 ID : 264330746472  
Option 4 ID : 264330746470  
Status : Answered  
Chosen Option : 1

**Q.15** What was India's literacy rate at the time of independence in 1947?

- Ans**
- 1. 34%
  - 2. 25%
  - 3. 23%
  - 4. 12%

Question ID : 264330191294  
Option 1 ID : 264330748533  
Option 2 ID : 264330748532  
Option 3 ID : 264330748531  
Option 4 ID : 264330748530  
Status : Answered  
Chosen Option : 4

**Q.16** Who was the renowned Indian Carnatic singer and the first artist to receive both the Bharat Ratna and the Ramon Magsaysay Award?

- Ans**
- 1. MS Subbulakshmi
  - 2. Asha Bhosle
  - 3. Lata Mangeshkar
  - 4. M. Balamuralikrishna

Question ID : 264330190857  
Option 1 ID : 264330746782  
Option 2 ID : 264330746783  
Option 3 ID : 264330746784  
Option 4 ID : 264330746785  
Status : Answered  
Chosen Option : 1

**Q.17** Which of the following won the maximum number of total medals in the National Games 2023?

- Ans**
- 1. Maharashtra
  - 2. Kerala
  - 3. Services
  - 4. Delhi

Question ID : 264330188766  
Option 1 ID : 264330738868  
Option 2 ID : 264330738867  
Option 3 ID : 264330738869  
Option 4 ID : 264330738866  
Status : Answered  
Chosen Option : 3

**Q.18** Ghoomar dance is associated with which of the following states?

- Ans**
- 1. Rajasthan
  - 2. Madhya Pradesh
  - 3. Maharashtra
  - 4. Punjab

Question ID : 264330188855  
Option 1 ID : 264330739225  
Option 2 ID : 264330739224  
Option 3 ID : 264330739222  
Option 4 ID : 264330739223  
Status : Answered  
Chosen Option : 1



Q.19 Which sport is the Wimbledon trophy associated with?

- Ans  1. Lawn Tennis  
 2. Polo  
 3. Cricket  
 4. Hockey

Question ID : 264330190861  
Option 1 ID : 264330746800  
Option 2 ID : 264330746801  
Option 3 ID : 264330746798  
Option 4 ID : 264330746799  
Status : Answered  
Chosen Option : 1

Q.20 The Sixth Economic Census of India was conducted in which of the following years?

- Ans  1. 2013  
 2. 2019  
 3. 2017  
 4. 2009

Question ID : 264330191014  
Option 1 ID : 264330747411  
Option 2 ID : 264330747413  
Option 3 ID : 264330747412  
Option 4 ID : 264330747410  
Status : Not Answered  
Chosen Option : --

Section : Part-C-Elementary Mathematics

Q.1 The income of Sunny is 15 percent more than Somu's income and the income of Somu is 30 percent more than Monu's income. Sunny's income is how much percentage more than Monu's income?

- Ans  1. 60 percent  
 2. 49.5 percent  
 3. 50 percent  
 4. 59.5 percent

Question ID : 264330187826  
Option 1 ID : 264330735235  
Option 2 ID : 264330735233  
Option 3 ID : 264330735232  
Option 4 ID : 264330735234  
Status : Answered  
Chosen Option : 2

Q.2 The average age of a group of 9 members is 42 years. The age of the eldest member is 58 years. If we exclude that eldest member from the group, then what will be the average age of the remaining members?

- Ans
- 1. 43 years
  - 2. 40 years
  - 3. 49 years
  - 4. 47 years

Question ID : 264330187244  
Option 1 ID : 264330732905  
Option 2 ID : 264330732907  
Option 3 ID : 264330732906  
Option 4 ID : 264330732904  
Status : Answered  
Chosen Option : 2

Q.3 Find the average of the first five odd multiples of 9.

- Ans
- 1. 35
  - 2. 50
  - 3. 55
  - 4. 45

Question ID : 264330188083  
Option 1 ID : 264330736263  
Option 2 ID : 264330736262  
Option 3 ID : 264330736261  
Option 4 ID : 264330736260  
Status : Answered  
Chosen Option : 4

Q.4 What is the value of  $6.5 \times 6.5 - 2.5 \times 2.5$ ?

- Ans
- 1. 25
  - 2. 35
  - 3. 36
  - 4. 24

Question ID : 264330187961  
Option 1 ID : 264330735774  
Option 2 ID : 264330735775  
Option 3 ID : 264330735772  
Option 4 ID : 264330735773  
Status : Answered  
Chosen Option : 3

Q.5 Find the area of the triangle whose height is 35.7 cm and the base is  $\frac{1}{7}$ th of the height.

- Ans
- 1. 85.35 cm<sup>2</sup>
  - 2. 81.055 cm<sup>2</sup>
  - 3. 80.055 cm<sup>2</sup>
  - 4. 91.035 cm<sup>2</sup>

Question ID : 264330191667  
Option 1 ID : 264330750025  
Option 2 ID : 264330750024  
Option 3 ID : 264330750023  
Option 4 ID : 264330750022  
Status : Answered  
Chosen Option : 4

Q.6 What number should be added to each of 12, 46, 11 and 43 so that the resulting numbers will be in proportion?

- Ans
- 1. 5
  - 2. 4
  - 3. 2
  - 4. 3

Question ID : 264330187472  
Option 1 ID : 264330733816  
Option 2 ID : 264330733818  
Option 3 ID : 264330733819  
Option 4 ID : 264330733817  
Status : Answered  
Chosen Option : 1

Q.7 If  $(5m + n) : (5m - n) = 5 : 2$ , then what is the value of  $m : n$ ?

- Ans
- 1. 5 : 9
  - 2. 7 : 15
  - 3. 8 : 9
  - 4. 9 : 17

Question ID : 264330187291  
Option 1 ID : 264330733093  
Option 2 ID : 264330733094  
Option 3 ID : 264330733095  
Option 4 ID : 264330733092  
Status : Answered  
Chosen Option : 2

Q.8 Find the value of 13  $[45 + 4 \{257 - 3 (29 + 33)\}]$ .

- Ans  1. 3266  
 2. 6288  
 3. 4277  
 4. 5244

Question ID : 264330191649  
Option 1 ID : 264330749953  
Option 2 ID : 264330749952  
Option 3 ID : 264330749950  
Option 4 ID : 264330749951  
Status : Answered  
Chosen Option : 3

Q.9 A sum of money becomes  $\frac{69}{50}$  of itself in  $\frac{19}{5}$  years when invested at simple interest. What is the rate of interest per annum?

- Ans  1. 20 percent  
 2. 10 percent  
 3. 5 percent  
 4. 15 percent

Question ID : 264330187993  
Option 1 ID : 264330735901  
Option 2 ID : 264330735903  
Option 3 ID : 264330735900  
Option 4 ID : 264330735902  
Status : Answered  
Chosen Option : 2

Q.10 An electronic gadget is sold for ₹25,500 at a discount of 15%. What was its marked price?

- Ans  1. Rs. 29,000  
 2. Rs. 30,000  
 3. Rs. 28,000  
 4. Rs. 33,000

Question ID : 264330191698  
Option 1 ID : 264330750148  
Option 2 ID : 264330750149  
Option 3 ID : 264330750147  
Option 4 ID : 264330750146  
Status : Answered  
Chosen Option : 2

**Q.11** The radius of a circle is increased by 35 percent. What will be the percentage increase in its area?

- Ans**
- 1. 75 percent
  - 2. 70 percent
  - 3. 82.25 percent
  - 4. 92.5 percent

Question ID : 264330187885  
Option 1 ID : 264330735471  
Option 2 ID : 264330735468  
Option 3 ID : 264330735469  
Option 4 ID : 264330735470  
Status : Answered  
Chosen Option : 3

**Q.12** Evaluate:  $20 - 3 \times (4 + 1) \div 2$ .

- Ans**
- 1. 12.5
  - 2. 13.5
  - 3. 17.5
  - 4. 14.5

Question ID : 264330188512  
Option 1 ID : 264330737852  
Option 2 ID : 264330737853  
Option 3 ID : 264330737850  
Option 4 ID : 264330737851  
Status : Answered  
Chosen Option : 1

**Q.13** The marked price of a crockery was Rs 15400/- and was offering a discount of 12%. Harsh bargained with the shopkeeper to get a successive discount and brought the crockery for Rs 10164/- What was the second discount offered by the shopkeeper?

- Ans**
- 1. 30%
  - 2. 10%
  - 3. 25%
  - 4. 15 %

Question ID : 264330192399  
Option 1 ID : 264330752953  
Option 2 ID : 264330752950  
Option 3 ID : 264330752952  
Option 4 ID : 264330752951  
Status : Answered  
Chosen Option : 3

**Q.14** If Manish can complete  $\frac{3}{5}$  of a work in 48 days, then Manish will complete  $\frac{1}{5}$  of the same work in how many days?

- Ans
- 1. 12 days
  - 2. 16 days
  - 3. 14 days
  - 4. 20 days

Question ID : 264330187956  
Option 1 ID : 264330735755  
Option 2 ID : 264330735752  
Option 3 ID : 264330735754  
Option 4 ID : 264330735753  
Status : Answered  
Chosen Option : 2

**Q.15** What is the value of  $42 \div 3 \times [7 + (42 \div 6)] \div 2$  of 7?

- Ans
- 1. 196
  - 2. 14
  - 3. 56
  - 4. 28

Question ID : 264330187600  
Option 1 ID : 264330734331  
Option 2 ID : 264330734328  
Option 3 ID : 264330734330  
Option 4 ID : 264330734329  
Status : Answered  
Chosen Option : 2

**Q.16** 40 percent of the cost price of an article is equal to the 30 percent of its selling price. What is the profit percentage?

- Ans
- 1. 33.33 percent
  - 2. 30 percent
  - 3. 66.66 percent
  - 4. 50 percent

Question ID : 264330187167  
Option 1 ID : 264330732596  
Option 2 ID : 264330732599  
Option 3 ID : 264330732597  
Option 4 ID : 264330732598  
Status : Answered  
Chosen Option : 1

**Q.17** A shirt is bought for \$30 and sold for \$40. Find the profit percentage.

- Ans**
- 1. 11.11%
  - 2. 33.33%
  - 3. 30%
  - 4. 25%

Question ID : 264330188501  
Option 1 ID : 264330737806  
Option 2 ID : 264330737807  
Option 3 ID : 264330737809  
Option 4 ID : 264330737808  
Status : Answered  
Chosen Option : 2

**Q.18** One third part of a certain journey is covered at the speed of 24 km/hr, one fourth part at the speed of 36 km/hr and the rest part at the speed of 60 km/hr. What will be the average speed for the whole journey?

- Ans**
- 1. 38 km/hr
  - 2. 42 km/hr
  - 3. 28 km/hr
  - 4. 36 km/hr

Question ID : 264330191143  
Option 1 ID : 264330747927  
Option 2 ID : 264330747929  
Option 3 ID : 264330747928  
Option 4 ID : 264330747926  
Status : Answered  
Chosen Option : 2

**Q.19** M is two times as efficient as N. M can complete a work in 66 days less than N. If both of them work together, then in how many days will the same work be completed?

- Ans**
- 1. 132 days
  - 2. 123 days
  - 3. 44 days
  - 4. 46 days

Question ID : 264330187297  
Option 1 ID : 264330733117  
Option 2 ID : 264330733116  
Option 3 ID : 264330733118  
Option 4 ID : 264330733119  
Status : Answered  
Chosen Option : 3

**Q.20** The compound interest (compounding annually) on a sum of money for the first year is Rs. 600, and for the second year, it is Rs. 660. Find the rate of interest per annum.

- Ans**
- 1. 8%
  - 2. 12%
  - 3. 11%
  - 4. 10%

Question ID : 264330188507  
Option 1 ID : 264330737832  
Option 2 ID : 264330737833  
Option 3 ID : 264330737830  
Option 4 ID : 264330737831  
Status : Answered  
Chosen Option : 4

Section : Part-D-English

**Q.1** Find the part of the given sentence that has an error in it. If there is no error, choose 'No error'.  
Mountain biking have always attracted non-conformists and strong personalities.

- Ans**
- 1. No error
  - 2. and strong personalities.
  - 3. Mountain biking have
  - 4. always attracted non-conformists

Question ID : 264330185666  
Option 1 ID : 264330727023  
Option 2 ID : 264330727022  
Option 3 ID : 264330727020  
Option 4 ID : 264330727021  
Status : Answered  
Chosen Option : 3

**Q.2** Identify the segment that contains a grammatical error. If there is no error, select 'No error'.

I told him I must go, / but he took no notice, / so I thought the better thing I could do was to slip off.

- Ans**
- 1. so I thought the better thing I could do was to slip off.
  - 2. No error
  - 3. I told him I must go,
  - 4. but he took no notice,

Question ID : 264330186508  
Option 1 ID : 264330730230  
Option 2 ID : 264330730231  
Option 3 ID : 264330730228  
Option 4 ID : 264330730229  
Status : Answered  
Chosen Option : 4



Q.3 Select the sentence with no spelling errors.

Ans  1.

At the end of my five-day experiment, I created a spreadsheet of my results, with each group getting its own column.

2.

At the end of my five-day experiment, I created a spreadsheet of my results, with each group getting its own column.

3.

At the end of my five-day experement, I created a spreadsheet of my results, with each group getting its own column.

4.

At the end of my five-day experiment, I created a spreadsheet of my results, with each group getting its own column.

Question ID : 264330185727

Option 1 ID : 264330727254

Option 2 ID : 264330727255

Option 3 ID : 264330727253

Option 4 ID : 264330727252

Status : Answered

Chosen Option : 1

Q.4 Choose the word that is opposite in meaning to the given word.

Abrasive

Ans  1. Delightful

2. Mourn

3. Slavish

4. Reprimand

Question ID : 264330185701

Option 1 ID : 264330727153

Option 2 ID : 264330727152

Option 3 ID : 264330727154

Option 4 ID : 264330727155

Status : Answered

Chosen Option : 1

Q.5 Improve the underlined part of the sentence. Choose 'No improvement' as an answer if the sentence is grammatically correct.

The flower had bright red petals.

Ans  1. has brighter red

2. No improvement

3. have bright red

4. has bright redder

Question ID : 264330186005

Option 1 ID : 264330728313

Option 2 ID : 264330728315

Option 3 ID : 264330728312

Option 4 ID : 264330728314

Status : Answered

Chosen Option : 3

Q.6 Select the most appropriate option for the given blank.

I am well aware \_\_\_\_\_ all the mishaps.

- Ans
- 1. from
  - 2. by
  - 3. with
  - 4. of

Question ID : 264330186022  
Option 1 ID : 264330728378  
Option 2 ID : 264330728377  
Option 3 ID : 264330728379  
Option 4 ID : 264330728376  
Status : Answered  
Chosen Option : 4

Q.7 Choose the word that means the same as the given word.

Clashed

- Ans
- 1. Conflicted
  - 2. Calculative
  - 3. Consented
  - 4. Concurred

Question ID : 264330186793  
Option 1 ID : 264330731315  
Option 2 ID : 264330731312  
Option 3 ID : 264330731313  
Option 4 ID : 264330731314  
Status : Answered  
Chosen Option : 1

Q.8 Improve the underlined part of the sentence. Choose 'No improvement' as an answer if the sentence is grammatically correct.

Remember to insure your vehicle before you drive it.

- Ans
- 1. drove it
  - 2. driven it
  - 3. driving it
  - 4. No improvement

Question ID : 264330186700  
Option 1 ID : 264330730962  
Option 2 ID : 264330730960  
Option 3 ID : 264330730961  
Option 4 ID : 264330730963  
Status : Answered  
Chosen Option : 3

Q.9 Select the most appropriate word to fill in the blank.

\_\_\_\_\_ studies show that students who are not given adequate preparation are prone to failure.

- Ans
- 1. A
  - 2. An
  - 3. Them
  - 4. The

Question ID : 264330185882  
Option 1 ID : 264330727844  
Option 2 ID : 264330727845  
Option 3 ID : 264330727846  
Option 4 ID : 264330727847  
Status : Answered  
Chosen Option : 4

Q.10 Improve the underlined part of the sentence. Choose 'No improvement' as an answer if the sentence is grammatically correct.

There's no waters in the swimming pool.

- Ans
- 1. no watering
  - 2. none water
  - 3. No improvement
  - 4. no water

Question ID : 264330186237  
Option 1 ID : 264330729197  
Option 2 ID : 264330729196  
Option 3 ID : 264330729199  
Option 4 ID : 264330729198  
Status : Answered  
Chosen Option : 4

Q.11 Select the most appropriate meaning of the given idiom.

On the rocks

- Ans
- 1. Totally unexpected
  - 2. Past one's prime
  - 3. Financially Ruined
  - 4. The specific matter of heart

Question ID : 264330186566  
Option 1 ID : 264330730448  
Option 2 ID : 264330730450  
Option 3 ID : 264330730449  
Option 4 ID : 264330730451  
Status : Answered  
Chosen Option : 3

**Q.12** Find the part of the given sentence that has an error in it. If there is no error, choose 'No error'.  
One of the most common causes of anosmia and hyposmia is a virus that producing upper respiratory infections.

- Ans**
- 1. that producing upper respiratory infections.
  - 2. anosmia and hyposmia is a virus
  - 3. No error
  - 4. One of the most common causes of

Question ID : 264330186025  
Option 1 ID : 264330728390  
Option 2 ID : 264330728389  
Option 3 ID : 264330728391  
Option 4 ID : 264330728388  
Status : Answered  
Chosen Option : 1

**Q.13** In the following question, out of the given four alternatives, select the alternative which best expresses the meaning of the Idiom/Phrase.

Smell blood

- Ans**
- 1. To sense malpractice
  - 2. To sense a weakness in your opponent
  - 3. Restart a work
  - 4. To be suspicious about something

Question ID : 264330186144  
Option 1 ID : 264330728841  
Option 2 ID : 264330728843  
Option 3 ID : 264330728840  
Option 4 ID : 264330728842  
Status : Answered  
Chosen Option : 4

**Q.14** Select the incorrectly spelt word from the given sentence.

The German advance that ended in this dibacle has been the costliest defeat in point of materials that they have yet suffered.

- Ans**
- 1. dibacle
  - 2. costliest
  - 3. advance
  - 4. materials

Question ID : 264330186378  
Option 1 ID : 264330729733  
Option 2 ID : 264330729734  
Option 3 ID : 264330729732  
Option 4 ID : 264330729735  
Status : Answered  
Chosen Option : 1

Q.15 Choose the most appropriate antonym of the underlined word.

In all cases, they bestow credits on manufacturers that exceed the standards.

- Ans
- 1. Confer
  - 2. Preserve
  - 3. Grant
  - 4. Award

Question ID : 264330186207

Option 1 ID : 264330729081

Option 2 ID : 264330729080

Option 3 ID : 264330729082

Option 4 ID : 264330729083

Status : Answered

Chosen Option : 2

### Comprehension:

In the following passage some of the words have been left out. Read the passage carefully and select the correct answer for the given blank out of the four alternatives.

Concerned (1)\_\_\_\_\_ the pollution levels and the role firecrackers played in (2)\_\_\_\_\_ it, the Supreme Court last October banned the sale, use and manufacture of crackers that (3)\_\_\_\_\_ not 'green'. This meant that these crackers couldn't be loud (4)\_\_\_\_\_ a certain limit and had to be (5)\_\_\_\_\_ by the Petroleum and Explosives Safety Organisation (PESO).

SubQuestion No : 16

Q.16 Select the most appropriate option for blank (1)

- Ans
- 1. at
  - 2. over
  - 3. about
  - 4. on

Question ID : 264330186725

Option 1 ID : 264330731055

Option 2 ID : 264330731054

Option 3 ID : 264330731053

Option 4 ID : 264330731052

Status : Answered

Chosen Option : 2

**Comprehension:**

In the following passage some of the words have been left out. Read the passage carefully and select the correct answer for the given blank out of the four alternatives.

Concerned (1) \_\_\_\_\_ the pollution levels and the role firecrackers played in (2) \_\_\_\_\_ it, the Supreme Court last October banned the sale, use and manufacture of crackers that (3) \_\_\_\_\_ not 'green'. This meant that these crackers couldn't be loud (4) \_\_\_\_\_ a certain limit and had to be (5) \_\_\_\_\_ by the Petroleum and Explosives Safety Organisation (PESO).

**SubQuestion No : 17**

**Q.17** Select the most appropriate option for blank (2)

- Ans**
- 1. destroy
  - 2. reducing
  - 3. augmenting
  - 4. exacerbating

Question ID : 264330186726

Option 1 ID : 264330731057

Option 2 ID : 264330731056

Option 3 ID : 264330731058

Option 4 ID : 264330731059

Status : Answered

Chosen Option : 3

**Comprehension:**

In the following passage some of the words have been left out. Read the passage carefully and select the correct answer for the given blank out of the four alternatives.

Concerned (1) \_\_\_\_\_ the pollution levels and the role firecrackers played in (2) \_\_\_\_\_ it, the Supreme Court last October banned the sale, use and manufacture of crackers that (3) \_\_\_\_\_ not 'green'. This meant that these crackers couldn't be loud (4) \_\_\_\_\_ a certain limit and had to be (5) \_\_\_\_\_ by the Petroleum and Explosives Safety Organisation (PESO).

**SubQuestion No : 18**

**Q.18** Select the most appropriate option for blank (3)

- Ans**
- 1. was
  - 2. were
  - 3. are
  - 4. is

Question ID : 264330186727

Option 1 ID : 264330731061

Option 2 ID : 264330731060

Option 3 ID : 264330731063

Option 4 ID : 264330731062

Status : Answered

Chosen Option : 2

**Comprehension:**

In the following passage some of the words have been left out. Read the passage carefully and select the correct answer for the given blank out of the four alternatives.

Concerned (1) \_\_\_\_\_ the pollution levels and the role firecrackers played in (2) \_\_\_\_\_ it, the Supreme Court last October banned the sale, use and manufacture of crackers that (3) \_\_\_\_\_ not 'green'. This meant that these crackers couldn't be loud (4) \_\_\_\_\_ a certain limit and had to be (5) \_\_\_\_\_ by the Petroleum and Explosives Safety Organisation (PESO).

**SubQuestion No : 19**

**Q.19** Select the most appropriate option for blank (4)

- Ans
- 1. beside
  - 2. beneath
  - 3. beyond
  - 4. behind

Question ID : 264330186728

Option 1 ID : 264330731065

Option 2 ID : 264330731067

Option 3 ID : 264330731066

Option 4 ID : 264330731064

Status : Answered

Chosen Option : 3

**Comprehension:**

In the following passage some of the words have been left out. Read the passage carefully and select the correct answer for the given blank out of the four alternatives.

Concerned (1) \_\_\_\_\_ the pollution levels and the role firecrackers played in (2) \_\_\_\_\_ it, the Supreme Court last October banned the sale, use and manufacture of crackers that (3) \_\_\_\_\_ not 'green'. This meant that these crackers couldn't be loud (4) \_\_\_\_\_ a certain limit and had to be (5) \_\_\_\_\_ by the Petroleum and Explosives Safety Organisation (PESO).

**SubQuestion No : 20**

**Q.20** Select the most appropriate option for blank (5)

- Ans
- 1. resumed
  - 2. endorsed
  - 3. added
  - 4. approved

Question ID : 264330186729

Option 1 ID : 264330731069

Option 2 ID : 264330731070

Option 3 ID : 264330731071

Option 4 ID : 264330731068

Status : Answered

Chosen Option : 4

**Q.1** निम्नलिखित प्रश्न में, चार विकल्पों में से, उस विकल्प का चयन करें जो कोष्ठक में दिए गए शब्द के विलोम शब्द का सही विकल्प है।  
 मेरे मकान का जो कार्य (आगामी) \_\_\_\_\_ समय में चल रहा है वह सही नहीं लग रहा है।

- Ans**
- 1. आगत
  - 2. द्रुतगामी
  - 3. विगत
  - 4. विगामी

Question ID : **264330189702**  
 Option 1 ID : **264330742465**  
 Option 2 ID : **264330742462**  
 Option 3 ID : **264330742464**  
 Option 4 ID : **264330742463**  
 Status : **Not Answered**  
 Chosen Option : --

**Q.2** दिए गए विकल्पों में से तीन विकल्प त्रुटियुक्त हैं, जबकि एक सही है। उस सही विकल्प का चयन करें।

- Ans**
- 1. वह तो खाना खाके और दूध पीकर सो गया।
  - 2. वह तो खाना खाकर और दूध पीके सो गया।
  - 3. वह वो खाना खाके और दूध पीकर सो गया।
  - 4. वह तो खाना खाकर और दूध पीकर सो गया।

Question ID : **264330189479**  
 Option 1 ID : **264330741615**  
 Option 2 ID : **264330741617**  
 Option 3 ID : **264330741616**  
 Option 4 ID : **264330741614**  
 Status : **Not Answered**  
 Chosen Option : --

**Q.3** निम्नलिखित प्रश्न में, चार विकल्पों में से, उस विकल्प का चयन करें जो रिक्त स्थान के लिए सही शब्द वाला विकल्प हो।  
 श्रम के उपरांत थकान होना \_\_\_\_\_ है।

- Ans**
- 1. गलत
  - 2. स्वाभाविक
  - 3. कैसे
  - 4. निष्ठां

Question ID : **264330189711**  
 Option 1 ID : **264330742498**  
 Option 2 ID : **264330742500**  
 Option 3 ID : **264330742501**  
 Option 4 ID : **264330742499**  
 Status : **Not Answered**  
 Chosen Option : --



Q.4 निम्नलिखित प्रश्न में, चार विकल्पों में से, उस विकल्प का चयन करें जो रिक्त स्थान के लिए सही भाववाचक संज्ञा वाला विकल्प हो।

\_\_\_\_\_ में इंसान एकदम बच्चा बन जाता है।

- Ans
- 1. दिन
  - 2. घर
  - 3. परिवार
  - 4. बुढ़ापे

Question ID : 264330189541

Option 1 ID : 264330741852

Option 2 ID : 264330741851

Option 3 ID : 264330741850

Option 4 ID : 264330741853

Status : Not Answered

Chosen Option : --

Q.5 दिए गए शब्द का पर्यायवाची ज्ञात कीजिए।

बहुत

- Ans
- 1. रूकावट
  - 2. बंधु
  - 3. क्षय
  - 4. अति

Question ID : 264330189132

Option 1 ID : 264330740290

Option 2 ID : 264330740291

Option 3 ID : 264330740293

Option 4 ID : 264330740292

Status : Not Answered

Chosen Option : --

Q.6 निम्नलिखित प्रश्न में, दिए गए चार विकल्पों में से, उस विकल्प का चयन करें जो दिए गए मुहावरे के अर्थ को सर्वश्रेष्ठ रूप से व्यक्त करता है।  
नाम कमाना

- Ans
- 1. बहुत अमीर हो जाना
  - 2. बहुत कुख्यात होना
  - 3. वंश चलाना
  - 4. यश प्राप्त करना

Question ID : 264330188157

Option 1 ID : 264330736546

Option 2 ID : 264330736545

Option 3 ID : 264330736547

Option 4 ID : 264330736544

Status : Not Answered

Chosen Option : --

Q.7 निम्नलिखित वाक्यों में, चार विकल्प में, कोष्ठक में दिए गये शब्द का सही तद्भव वाला विकल्प चुनें।  
(श्यामल) सा आदमी था, जिसके चेहरे पर भदे दाग थे।

- Ans
- 1. कालिमा
  - 2. अँधेरा
  - 3. साँवला
  - 4. काला

Question ID : 264330189727  
Option 1 ID : 264330742561  
Option 2 ID : 264330742560  
Option 3 ID : 264330742559  
Option 4 ID : 264330742558  
Status : Not Answered  
Chosen Option : --

Q.8 दिए गए विकल्पों में से अशुद्ध वर्तनी वाले विकल्प का चयन करें।

- Ans
- 1. साहसी मनुष्य ही सेना में भर्ती होते हैं।
  - 2. किशोर तो गुरुकुल में पढ़ता है।
  - 3. अपनी प्रतिभा से ही तुम आगे जा सकते हो।
  - 4. हमारे लिए सत्रप्रथमच हमारे माता-पिता आते हैं।

Question ID : 264330189327  
Option 1 ID : 264330741036  
Option 2 ID : 264330741034  
Option 3 ID : 264330741035  
Option 4 ID : 264330741037  
Status : Not Answered  
Chosen Option : --

Q.9 निम्नलिखित प्रश्न में, चार विकल्पों में से, उस विकल्प का चयन करें जो दिए गए मुहावरे का सही अर्थ वाला विकल्प है।  
तौबा करना

- Ans
- 1. भविष्य में किसी काम को न करने की प्रतिज्ञा करना
  - 2. निरर्थक व्यक्ति
  - 3. संदेह होना
  - 4. नुकसान पहुँचाना

Question ID : 264330188387  
Option 1 ID : 264330737423  
Option 2 ID : 264330737421  
Option 3 ID : 264330737420  
Option 4 ID : 264330737422  
Status : Not Answered  
Chosen Option : --

Q.10 दिए गए वाक्यांश के लिए सार्थक शब्द ज्ञात कीजिए।

जिस पर आक्रमण किया गया हो

- Ans
- 1. आत्मघाती
  - 2. आक्रमण
  - 3. आक्रामक
  - 4. आक्रांत

Question ID : 264330189152

Option 1 ID : 264330740369

Option 2 ID : 264330740366

Option 3 ID : 264330740367

Option 4 ID : 264330740368

Status : Not Answered

Chosen Option : --

Q.11 दिए गए वाक्य में रेखांकित शब्द का तत्सम शब्द ज्ञात कीजिए।

पेड़ से पत्ते गिर रहे हैं।

- Ans
- 1. पौत्र
  - 2. प्राण
  - 3. पत्र
  - 4. पुत्र

Question ID : 264330189456

Option 1 ID : 264330741529

Option 2 ID : 264330741526

Option 3 ID : 264330741527

Option 4 ID : 264330741528

Status : Not Answered

Chosen Option : --

Q.12 दिए गए वाक्य में रेखांकित शब्द का विलोम शब्द ज्ञात कीजिए।

बच्चे ग्रीष्मावकाश में घूमने जाएँगे।

- Ans
- 1. वर्षावकाश
  - 2. शीतावकाश
  - 3. फालगुन
  - 4. गर्मी

Question ID : 264330189113

Option 1 ID : 264330740219

Option 2 ID : 264330740218

Option 3 ID : 264330740220

Option 4 ID : 264330740221

Status : Not Answered

Chosen Option : --

Q.13 निम्नलिखित प्रश्न में, चार विकल्पों में से, उस विकल्प का चयन करें जो कोष्ठक में दिए गए शब्द के पर्यायवाची शब्द का सही विकल्प है।  
मेरे पड़ोसी की हरकतें ऐसी हैं कि मुझे उससे (घृणा) \_\_\_\_\_ होने लगी है।

- Ans
- 1. आज्य
  - 2. तृण
  - 3. जुगुप्सा
  - 4. कुट

Question ID : 264330189721  
Option 1 ID : 264330742537  
Option 2 ID : 264330742534  
Option 3 ID : 264330742535  
Option 4 ID : 264330742536  
Status : Not Answered  
Chosen Option : --

Q.14 दिए गए वाक्य में रेखांकित शब्द का तद्भव शब्द ज्ञात कीजिए।

डॉक्टर ने उसे जिह्वा दिखाने को कहा।

- Ans
- 1. मुँह
  - 2. दाँत
  - 3. जीभ
  - 4. हाथ

Question ID : 264330188244  
Option 1 ID : 264330736878  
Option 2 ID : 264330736879  
Option 3 ID : 264330736876  
Option 4 ID : 264330736877  
Status : Not Answered  
Chosen Option : --

Q.15 दिए गए वाक्य में रेखांकित शब्दों के लिए सही शब्दों वाले विकल्प का चयन करें।

अमन अपनी स्वेच्छा से सेवानिवृत्त हो रहा है।

- Ans
- 1. अमन स्वेच्छा से सेवानिवृत्त हो रहा है।
  - 2. अमन अपने स्वेच्छा से सेवानिवृत्त हो रहा है।
  - 3. अमन अपना स्वेच्छा से सेवानिवृत्त हो रहा है।
  - 4. परिवर्तन की आवश्यकता नहीं है।

Question ID : 264330189963  
Option 1 ID : 264330743460  
Option 2 ID : 264330743458  
Option 3 ID : 264330743459  
Option 4 ID : 264330743461  
Status : Not Answered  
Chosen Option : --

**Comprehension:**

नीचे दिए गए गद्य में कुछ शब्द छोड़ दिए गए हैं और प्रत्येक रिक्त स्थान के चार विकल्प दिए गए हैं। इन चारों में इन चारों में से कौन सा विकल्प रिक्त स्थान की पूर्ति करेगा-

निःसंदेह भारत के लोग विराट (1)\_\_\_\_\_ वाले हैं। वे सबको अपना लेते हैं। (2)\_\_\_\_\_ संस्कृतियों के पश्चात भी सब आपस में (3)\_\_\_\_\_ सहयोग भाव बनाए रखते हैं। एक-दूसरे के साथ (4)\_\_\_\_\_ कर रहते हैं। यही हमारी भारतीय संस्कृति की (5)\_\_\_\_\_ है।

**SubQuestion No : 16**

Q.16 रिक्त 1 के लिए सबसे उपयुक्त विकल्प का चयन कीजिए।

- Ans
- 1. पादुका
  - 2. हृदय
  - 3. ग्रीवा
  - 4. हर्ष

Question ID : 264330189062

Option 1 ID : 264330740023

Option 2 ID : 264330740024

Option 3 ID : 264330740022

Option 4 ID : 264330740025

Status : Not Answered

Chosen Option : --

**Comprehension:**

नीचे दिए गए गद्य में कुछ शब्द छोड़ दिए गए हैं और प्रत्येक रिक्त स्थान के चार विकल्प दिए गए हैं। इन चारों में इन चारों में से कौन सा विकल्प रिक्त स्थान की पूर्ति करेगा-

निःसंदेह भारत के लोग विराट (1)\_\_\_\_\_ वाले हैं। वे सबको अपना लेते हैं। (2)\_\_\_\_\_ संस्कृतियों के पश्चात भी सब आपस में (3)\_\_\_\_\_ सहयोग भाव बनाए रखते हैं। एक-दूसरे के साथ (4)\_\_\_\_\_ कर रहते हैं। यही हमारी भारतीय संस्कृति की (5)\_\_\_\_\_ है।

**SubQuestion No : 17**

Q.17 रिक्त 2 के लिए सबसे उपयुक्त विकल्प का चयन कीजिए।

- Ans
- 1. बेकार
  - 2. विभिन्न
  - 3. अध्ययन
  - 4. अजीबोगरीब

Question ID : 264330189063

Option 1 ID : 264330740028

Option 2 ID : 264330740026

Option 3 ID : 264330740029

Option 4 ID : 264330740027

Status : Not Answered

Chosen Option : --

**Comprehension:**

नीचे दिए गए गद्य में कुछ शब्द छोड़ दिए गए हैं और प्रत्येक रिक्त स्थान के चार विकल्प दिए गए हैं। इन चारों में इन चारों में से कौन सा विकल्प रिक्त स्थान की पूर्ति करेगा-

निःसंदेह भारत के लोग विराट (1)\_\_\_\_\_ वाले हैं। वे सबको अपना लेते हैं। (2)\_\_\_\_\_ संस्कृतियों के पश्चात भी सब आपस में (3)\_\_\_\_\_ सहयोग भाव बनाए रखते हैं। एक-दूसरे के साथ (4)\_\_\_\_\_ कर रहते हैं। यही हमारी भारतीय संस्कृति की (5)\_\_\_\_\_ है।

**SubQuestion No : 18**

Q.18 रिक्त 3 के लिए सबसे उपयुक्त विकल्प का चयन कीजिए।

- Ans
- 1. भेदभाव
  - 2. हीन
  - 3. परस्पर
  - 4. सम्मान

Question ID : 264330189064

Option 1 ID : 264330740030

Option 2 ID : 264330740032

Option 3 ID : 264330740031

Option 4 ID : 264330740033

Status : Not Answered

Chosen Option : --

**Comprehension:**

नीचे दिए गए गद्य में कुछ शब्द छोड़ दिए गए हैं और प्रत्येक रिक्त स्थान के चार विकल्प दिए गए हैं। इन चारों में इन चारों में से कौन सा विकल्प रिक्त स्थान की पूर्ति करेगा-

निःसंदेह भारत के लोग विराट (1)\_\_\_\_\_ वाले हैं। वे सबको अपना लेते हैं। (2)\_\_\_\_\_ संस्कृतियों के पश्चात भी सब आपस में (3)\_\_\_\_\_ सहयोग भाव बनाए रखते हैं। एक-दूसरे के साथ (4)\_\_\_\_\_ कर रहते हैं। यही हमारी भारतीय संस्कृति की (5)\_\_\_\_\_ है।

**SubQuestion No : 19**

Q.19 रिक्त 4 के लिए सबसे उपयुक्त विकल्प का चयन कीजिए।

- Ans
- 1. बड़बोले
  - 2. मिलजुल
  - 3. तू तड़ाक
  - 4. मारपीट

Question ID : 264330189065

Option 1 ID : 264330740037

Option 2 ID : 264330740036

Option 3 ID : 264330740034

Option 4 ID : 264330740035

Status : Not Answered

Chosen Option : --

**Comprehension:**

नीचे दिए गए गद्य में कुछ शब्द छोड़ दिए गए हैं और प्रत्येक रिक्त स्थान के चार विकल्प दिए गए हैं। इन चारों में चारों में से कौन सा विकल्प रिक्त स्थान की पूर्ति करेगा-

निःसंदेह भारत के लोग विराट (1)\_\_\_\_\_ वाले हैं। वे सबको अपना लेते हैं। (2)\_\_\_\_\_ संस्कृतियों के पश्चात भी सब आपस में (3)\_\_\_\_\_ सहयोग भाव बनाए रखते हैं। एक-दूसरे के साथ (4)\_\_\_\_\_ कर रहते हैं। यही हमारी भारतीय संस्कृति की (5)\_\_\_\_\_ है।

**SubQuestion No : 20**

Q.20 रिक्त 5 के लिए सबसे उपयुक्त विकल्प का चयन कीजिए।

- Ans
- 1. बढ़ोतरी
  - 2. महानता
  - 3. दुःख दर्दनाक
  - 4. उदासी

Question ID : 264330189066

Option 1 ID : 264330740041

Option 2 ID : 264330740038

Option 3 ID : 264330740040

Option 4 ID : 264330740039

Status : Not Answered

Chosen Option : --