

## Constable GD in Central Armed Police Forces CAPFs SSF Rifleman GD in Assam Rifles Examination 2024

Roll Number	
Candidate Name	
Venue Name	
Exam Date	28/02/2024
Exam Time	11:30 AM - 12:30 PM
Subject	Constable GD Examination 2024

### Section : Part-A-General Intelligence and Reasoning

**Q.1** After arranging the given words according to dictionary order, which word will come at 'Fourth' position?

1. Slur
2. Suit
3. Slug
4. Slung
5. Slump

**Ans**  1. Slung  
 2. Slug  
 3. Slur  
 4. Suit

Question ID : 264330187401  
 Option 1 ID : 264330733534  
 Option 2 ID : 264330733535  
 Option 3 ID : 264330733532  
 Option 4 ID : 264330733533

Status : Answered  
 Chosen Option : 3

**Q.2** Five persons A, B, C, D and E are sitting around a circular table facing towards the centre (not necessarily in the same order). C is not an immediate neighbour of D and A. B is sitting second to the left of E, A is sitting second to the right of E. Who is sitting on the immediate right of D?

**Ans**  1. C  
 2. B  
 3. E  
 4. A

Question ID : 264330190115  
 Option 1 ID : 264330744044  
 Option 2 ID : 264330744045  
 Option 3 ID : 264330744042  
 Option 4 ID : 264330744043

Status : Answered  
 Chosen Option : 4

**Q.3** By Interchanging the given two numbers (not digits) which of the following equation will be not correct?

9 and 2

**Ans** ✓ 1.  $9 \div 3 + 2 - 4 = 6$

✗ 2.  $9 - 2 + 7 = 0$

✗ 3.  $2 + 9 \times 3 - 4 = 11$

✗ 4.  $9 + 4 \times 2 - 6 = 32$

Question ID : 264330187412

Option 1 ID : 264330733578

Option 2 ID : 264330733576

Option 3 ID : 264330733579

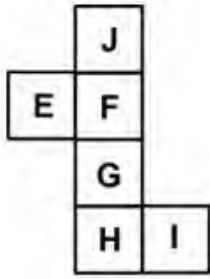
Option 4 ID : 264330733577

Status : Not Answered

Chosen Option : --

prepp  
Your Personal Exam Guide

Q.4 Select the dice which can be formed on folding the given sheet.



Ans

✓ 1.



✗ 2.



✗ 3.



✗ 4.



Question ID : 264330192125

Option 1 ID : 264330751856

Option 2 ID : 264330751855

Option 3 ID : 264330751854

Option 4 ID : 264330751857

Status : Answered

Chosen Option : 3

**Q.5** In the following question below are given some statements followed by some conclusions based on those statements. Taking the given statements to be true even if they seem to be at variance from commonly known facts. Read all the conclusions and then decide which of the given conclusion(s) logically follows the given statements.

Statements:

- I. Some T are S.
- II. No R is S.

Conclusions:

- I. No S is R.
- II. No R is T.
- III. No S is T.

- Ans**
- 1. Both conclusions II and III follows
  - 2. Neither conclusion follows
  - 3. All conclusions follows
  - 4. Only conclusion I follows

Question ID : 264330191358  
 Option 1 ID : 264330748787  
 Option 2 ID : 264330748789  
 Option 3 ID : 264330748788  
 Option 4 ID : 264330748786  
 Status : Answered  
 Chosen Option : 4

**Q.6** From the given option figures, select the one in which the question figure is hidden/embedded. (rotation is NOT allowed)



**Ans**

- 1.
- 2.
- 3.
- 4.

Question ID : 264330190184  
 Option 1 ID : 264330744320  
 Option 2 ID : 264330744319  
 Option 3 ID : 264330744321  
 Option 4 ID : 264330744318  
 Status : Not Answered  
 Chosen Option : --

Q.7 In the following question, select the missing number from the given series.

863, 860, 869, 842, 923, ?

- Ans  1. 680  
 2. 550  
 3. 570  
 4. 580

Question ID : 264330187451  
Option 1 ID : 264330733732  
Option 2 ID : 264330733734  
Option 3 ID : 264330733733  
Option 4 ID : 264330733735  
Status : Answered  
Chosen Option : 1

Q.8 If  $30A10B30C10 = 37$  and  $45A15B18C9 = 58$ , then  $64A34B50C5 = ?$

- Ans  1. 90  
 2. 80  
 3. 88  
 4. 87

Question ID : 264330190201  
Option 1 ID : 264330744389  
Option 2 ID : 264330744386  
Option 3 ID : 264330744388  
Option 4 ID : 264330744387  
Status : Not Answered  
Chosen Option : --

Q.9 In the following question, select the related letters from the given alternatives.

GE : HH :: BA : ?

- Ans  1. RJ  
 2. KL  
 3. IM  
 4. CD

Question ID : 264330188022  
Option 1 ID : 264330736017  
Option 2 ID : 264330736019  
Option 3 ID : 264330736016  
Option 4 ID : 264330736018  
Status : Answered  
Chosen Option : 2

**Q.10** In the following question, select the related letter pair from the given alternatives.

QRN : UVR :: ?

- Ans**
- 1. XUN : LOD
  - 2. NUP : BBO
  - 3. SWL : WAP
  - 4. KJH : ZOW

Question ID : 264330191352

Option 1 ID : 264330748764

Option 2 ID : 264330748763

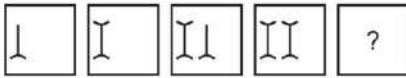
Option 3 ID : 264330748762

Option 4 ID : 264330748765

Status : Not Answered

Chosen Option : --

**Q.11** In the following question, select the figure which can be placed at the sign of question mark (?) from the given alternatives.



**Ans**

- 1.
- 2.
- 3.
- 4.

Question ID : 264330191323

Option 1 ID : 264330748649

Option 2 ID : 264330748647

Option 3 ID : 264330748646

Option 4 ID : 264330748648

Status : Answered

Chosen Option : 2

**Q.12** In a certain code language, 'DRAGON' is coded as 'CQZEML'. What is the code for 'WHEELS' in that code language?

- Ans**
- 1. VGDDJQ
  - 2. VGDCJQ
  - 3. VGDDKR
  - 4. VGDCJR

Question ID : 264330191533  
Option 1 ID : 264330749486  
Option 2 ID : 264330749489  
Option 3 ID : 264330749488  
Option 4 ID : 264330749487  
Status : Answered  
Chosen Option : 2

**Q.13** In a certain code language, 'WHOM' is coded as 'SCKH'. What is the code for 'BAKE' in that code language?

- Ans**
- 1. XVHA
  - 2. XVGZ
  - 3. XVGA
  - 4. XVHZ

Question ID : 264330190212  
Option 1 ID : 264330744430  
Option 2 ID : 264330744433  
Option 3 ID : 264330744432  
Option 4 ID : 264330744431  
Status : Answered  
Chosen Option : 3

**Q.14** Eight athletes Sunil, Abhishek, Mohit, Cheenu, Rahul, Tanu, Koyal and Ankit are sitting around a circular table facing opposite to the centre (not necessarily in the same order). Koyal is third to the left of Rahul. Tanu is third to the right of Cheenu. Mohit is second to the right of Sunil. Abhishek is second to the left of Cheenu. Tanu is second to the left of Sunil. Who is sitting second to the right of Ankit?

- Ans**
- 1. Sunil
  - 2. Cheenu
  - 3. Mohit
  - 4. Rahul

Question ID : 264330187128  
Option 1 ID : 264330732442  
Option 2 ID : 264330732440  
Option 3 ID : 264330732441  
Option 4 ID : 264330732443  
Status : Not Answered  
Chosen Option : --

Q.15 'E × F' means 'E is the wife of F'

'E + F' means 'E is the brother of F'

'E ÷ F' means 'E is the husband of F'

'E - F' means 'E is the son of F'

How is P related to R in the expression 'P × Q + I - R ÷ S'?

- Ans
- 1. Sister
  - 2. Son's wife
  - 3. Wife's sister
  - 4. Wife

Question ID : 264330191595

Option 1 ID : 264330749734

Option 2 ID : 264330749737

Option 3 ID : 264330749736


Option 4 ID : 264330749735

Status : Not Answered

Chosen Option : --

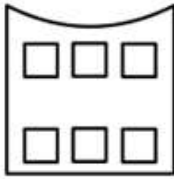


**Q.16** A paper is folded and cut as shown below. How will it appear when unfolded?

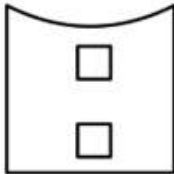


**Ans**

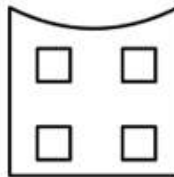
1.



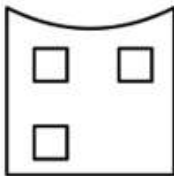
2.



3.



4.



Question ID : 264330192267

Option 1 ID : 264330752423

Option 2 ID : 264330752425

Option 3 ID : 264330752424

Option 4 ID : 264330752422

Status : Not Answered

Chosen Option : --

**Q.17** Which of the following letter clusters will replace the question mark (?) in the given series?

U, X, A, D, G, J, M, ?

**Ans**

1. Q

2. P

3. R

4. S

Question ID : 264330192148

Option 1 ID : 264330751947

Option 2 ID : 264330751946

Option 3 ID : 264330751948

Option 4 ID : 264330751949

Status : Answered

Chosen Option : 2

Q.18 Which one set of letters when sequentially placed at the gaps in the given letter series shall complete it?

cddfcd \_ \_ c\_df\_ddfcd

- Ans
- 1. dfcd
  - 2. ddc d
  - 3. ddfc
  - 4. dfdc

Question ID : 264330192129

Option 1 ID : 264330751870

Option 2 ID : 264330751873

Option 3 ID : 264330751871

Option 4 ID : 264330751872

Status : Answered

Chosen Option : 4

Q.19 In the following question, select the missing number from the given series.

5, 37, 70, 104, ?, 175

- Ans
- 1. 139
  - 2. 140
  - 3. 148
  - 4. 144

Question ID : 264330187070

Option 1 ID : 264330732211

Option 2 ID : 264330732208

Option 3 ID : 264330732210

Option 4 ID : 264330732209

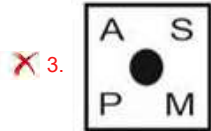
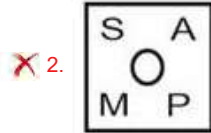
Status : Not Answered

Chosen Option : --

**Q.20** In the following question, select the figure which can be placed at the sign of question mark (?) from the given alternatives.



**Ans**



Question ID : 264330187055

Option 1 ID : 264330732148

Option 2 ID : 264330732151

Option 3 ID : 264330732149

Option 4 ID : 264330732150

Status : Not Answered

Chosen Option : --

Section : Part-B-General Knowledge and General awareness

**Q.1** Who has been appointed as the new Vice Chief of the Indian Air Force on January 30, 2023?

✗ 1. Harjit Singh Arora

✗ 2. Sandeep Singh

✗ 3. Vivek Ram Chaudhari

✓ 4. Amarpreet Singh

Question ID : 264330191949

Option 1 ID : 264330751150

Option 2 ID : 264330751151

Option 3 ID : 264330751153

Option 4 ID : 264330751152

Status : Answered

Chosen Option : 4

Q.2 The Government of India recently renamed the Rajiv Gandhi Khel Ratna Award as the \_\_\_\_\_ Khel Ratna Award.

- Ans
- 1. Major Dhyan Chand
  - 2. Mary Kom
  - 3. Indira Gandhi
  - 4. Gavaskar

Question ID : 264330191804  
Option 1 ID : 264330750572  
Option 2 ID : 264330750571  
Option 3 ID : 264330750570  
Option 4 ID : 264330750573  
Status : Not Answered  
Chosen Option : --

Q.3 Ashoka's dhamma \_\_\_\_\_ worship of a god, or performance of a sacrifice.

- Ans
- 1. supports certain form
  - 2. is a part of
  - 3. primarily involves
  - 4. did not involve

Question ID : 264330190915  
Option 1 ID : 264330747016  
Option 2 ID : 264330747017  
Option 3 ID : 264330747014  
Option 4 ID : 264330747015  
Status : Answered  
Chosen Option : 1

Q.4 Which of the following was the 14th Census of India?

- Ans
- 1. 1991
  - 2. 2011
  - 3. 2021
  - 4. 2001

Question ID : 264330191254  
Option 1 ID : 264330748370  
Option 2 ID : 264330748372  
Option 3 ID : 264330748373  
Option 4 ID : 264330748371  
Status : Not Answered  
Chosen Option : --

Q.5 What dancing style was M.K. Saroja, who passed away in June 2022, well known for?

- Ans
- 1. Kuchipudi
  - 2. Kathak
  - 3. Sattriya
  - 4. Bharatanatyam

Question ID : 264330190818  
Option 1 ID : 264330746628  
Option 2 ID : 264330746626  
Option 3 ID : 264330746629  
Option 4 ID : 264330746627  
Status : Not Answered  
Chosen Option : --

Q.6 What is the sex ratio of early childhood (0–6 years) according to the 2011 census of India (Females per Thousand Males)?

- Ans
- 1. 928
  - 2. 918
  - 3. 938
  - 4. 908

Question ID : 264330188639  
Option 1 ID : 264330738360  
Option 2 ID : 264330738359  
Option 3 ID : 264330738361  
Option 4 ID : 264330738358  
Status : Not Answered  
Chosen Option : --

Q.7 'Tippani Nritya' is associated with which of the following states?

- Ans
- 1. Andhra Pradesh
  - 2. Gujarat
  - 3. Karnataka
  - 4. Uttar Pradesh

Question ID : 264330190770  
Option 1 ID : 264330746434  
Option 2 ID : 264330746435  
Option 3 ID : 264330746437  
Option 4 ID : 264330746436  
Status : Answered  
Chosen Option : 1

**Q.8** Elements in the Modern Periodic Table are arranged in \_\_\_\_\_ vertical columns called groups and \_\_\_\_\_ horizontal rows called periods.

- Ans**
- 1. 18, 9
  - 2. 18, 7
  - 3. 16, 9
  - 4. 16, 7

Question ID : **264330188637**  
Option 1 ID : **264330738351**  
Option 2 ID : **264330738353**  
Option 3 ID : **264330738350**  
Option 4 ID : **264330738352**  
Status : **Answered**  
Chosen Option : **2**

**Q.9** ATM booths come under which sector of the economic activity?

- Ans**
- 1. Secondary sector
  - 2. Tertiary Sector
  - 3. Quaternary sector
  - 4. Primary sector

Question ID : **264330191281**  
Option 1 ID : **264330748479**  
Option 2 ID : **264330748480**  
Option 3 ID : **264330748481**  
Option 4 ID : **264330748478**  
Status : **Not Answered**  
Chosen Option : **--**

**Q.10** The Green revolution started in the year 1965 and the \_\_\_\_\_ five-year plan of India was between 1961-66.

- Ans**
- 1. third
  - 2. fourth
  - 3. first
  - 4. second

Question ID : **264330191425**  
Option 1 ID : **264330749056**  
Option 2 ID : **264330749057**  
Option 3 ID : **264330749054**  
Option 4 ID : **264330749055**  
Status : **Not Answered**  
Chosen Option : **--**

**Q.11** The Board of Control of Cricket (BCCI) has appointed \_\_\_\_\_ as the chairman of the Senior Men's Cricket Selection Committee in 2023

- Ans**
- 1. Sachin Tendulkar
  - 2. Kapil Dev
  - 3. M.S. Dhoni
  - 4. Ajit Agarkar

Question ID : 264330191730  
Option 1 ID : 264330750276  
Option 2 ID : 264330750275  
Option 3 ID : 264330750277  
Option 4 ID : 264330750274  
Status : Not Answered  
Chosen Option : --

**Q.12** Under the Industrial Policy Resolution 1956, industries in India have been classified into how many categories?

- Ans**
- 1. Three
  - 2. Five
  - 3. Two
  - 4. Four

Question ID : 264330190805  
Option 1 ID : 264330746575  
Option 2 ID : 264330746577  
Option 3 ID : 264330746574  
Option 4 ID : 264330746576  
Status : Not Answered  
Chosen Option : --

**Q.13** Which of the following statements is correct regarding Green Revolution?

- I. Green Revolution made India self-reliant in foodgrain production.
- II. Post Green Revolution, there is decrease in the use of chemical fertilizers.

- Ans**
- 1. Only II
  - 2. Neither I nor II
  - 3. Both I and II
  - 4. Only I

Question ID : 264330190806  
Option 1 ID : 264330746579  
Option 2 ID : 264330746581  
Option 3 ID : 264330746580  
Option 4 ID : 264330746578  
Status : Answered  
Chosen Option : 3

Q.14 According to the Indian Constitution, how many organs are there in the government of India?

- Ans  1. Two  
 2. Five  
 3. Three  
 4. Four

Question ID : 264330188784  
Option 1 ID : 264330738938  
Option 2 ID : 264330738941  
Option 3 ID : 264330738939  
Option 4 ID : 264330738940  
Status : Answered  
Chosen Option : 3

Q.15 Decathlon which is organised for men includes \_\_\_\_\_ events.

- Ans  1. 10  
 2. 15  
 3. 8  
 4. 12

Question ID : 264330190822  
Option 1 ID : 264330746642  
Option 2 ID : 264330746645  
Option 3 ID : 264330746643  
Option 4 ID : 264330746644  
Status : Not Answered  
Chosen Option : --

Q.16 Independence Day is celebrated at the national level at \_\_\_\_\_ in Delhi.

- Ans  1. Red Fort  
 2. India Gate  
 3. Taj Mahal  
 4. Gateway of India

Question ID : 264330191812  
Option 1 ID : 264330750602  
Option 2 ID : 264330750603  
Option 3 ID : 264330750605  
Option 4 ID : 264330750604  
Status : Answered  
Chosen Option : 1



Q.17 Which country won the FIFA U-17 Women's World Cup 2022?

- Ans  1. Spain  
 2. Colombia  
 3. USA  
 4. Japan

Question ID : 264330188646  
Option 1 ID : 264330738389  
Option 2 ID : 264330738387  
Option 3 ID : 264330738388  
Option 4 ID : 264330738386  
Status : Not Answered  
Chosen Option : --

Q.18 Who among the following social reformers founded the Self Respect Movement?

- Ans  1. Ghasidas  
 2. Jyotirao Phule  
 3. Narayana Guru  
 4. Periyar

Question ID : 264330188861  
Option 1 ID : 264330739246  
Option 2 ID : 264330739247  
Option 3 ID : 264330739249  
Option 4 ID : 264330739248  
Status : Not Answered  
Chosen Option : --

Q.19 Which instrument is played by the famous music personality Pt. Shiv Kumar Sharma?

- Ans  1. Guitar  
 2. Santoor  
 3. Sitar  
 4. Piano

Question ID : 264330191218  
Option 1 ID : 264330748226  
Option 2 ID : 264330748227  
Option 3 ID : 264330748229  
Option 4 ID : 264330748228  
Status : Not Answered  
Chosen Option : --

**Q.20** Which state government launched the Mukhyamantri Nishulk Aannapurna Food Packet Scheme on Independence Day in 2023?

- Ans**
- 1. Rajasthan
  - 2. Maharashtra
  - 3. Uttar Pradesh
  - 4. Kerala

Question ID : 264330190867  
Option 1 ID : 264330746823  
Option 2 ID : 264330746824  
Option 3 ID : 264330746822  
Option 4 ID : 264330746825  
Status : Not Answered  
Chosen Option : --

Section : Part-C-Elementary Mathematics

**Q.1** What is the value of  $13[216 \div 3 \text{ of } \{48 \div 24 \times (42 - 38)\}]?$

- Ans**
- 1. 130
  - 2. 143
  - 3. 117
  - 4. 91

Question ID : 264330187680  
Option 1 ID : 264330734650  
Option 2 ID : 264330734651  
Option 3 ID : 264330734649  
Option 4 ID : 264330734648  
Status : Not Answered  
Chosen Option : --

**Q.2** Two numbers are in the ratio of 6 : 5. If their sum is 22, then what is the sum of the squares of the two numbers?

- Ans**
- 1. 234
  - 2. 256
  - 3. 244
  - 4. 196

Question ID : 264330187631  
Option 1 ID : 264330734453  
Option 2 ID : 264330734452  
Option 3 ID : 264330734454  
Option 4 ID : 264330734455  
Status : Not Answered  
Chosen Option : --

**Q.3** T can complete a work in 20 days and U can complete the same work in 10 days. If both of them work together, then in 4 days what percent work of the total work will be completed?

- Ans**
- 1. 80 percent
  - 2. 75 percent
  - 3. 65 percent
  - 4. 60 percent

Question ID : 264330190384

Option 1 ID : 264330745120

Option 2 ID : 264330745119

Option 3 ID : 264330745121

Option 4 ID : 264330745118

Status : Answered

Chosen Option : 3

**Q.4** An item costing ₹ 500 is being sold at a 17% loss. If the price is further reduced by 20%, then find the selling price.

- Ans**
- 1. ₹ 452
  - 2. ₹ 290
  - 3. ₹ 302
  - 4. ₹ 332

Question ID : 264330188087

Option 1 ID : 264330736276

Option 2 ID : 264330736279

Option 3 ID : 264330736278

Option 4 ID : 264330736277

Status : Not Answered

Chosen Option : --

**Q.5** Convert  $0.5\overline{16}$  into fraction.

- Ans**
- 1.  $\frac{30}{61}$
  - 2.  $\frac{31}{60}$
  - 3.  $\frac{31}{70}$
  - 4.  $\frac{31}{63}$

Question ID : 264330187821

Option 1 ID : 264330735213

Option 2 ID : 264330735212

Option 3 ID : 264330735215

Option 4 ID : 264330735214

Status : Answered

Chosen Option : 4

**Q.6** A company's revenue increased by 10% in the first quarter and decreased by 5% in the second quarter. What is the net percentage increase or decrease in revenue over these two quarters?

- Ans**
- 1. 3.5% increase
  - 2. 4.5% decrease
  - 3. 3.5 decrease
  - 4. 4.5% increase

Question ID : 264330190734

Option 1 ID : 264330746368

Option 2 ID : 264330746366

Option 3 ID : 264330746369

Option 4 ID : 264330746367

Status : Not Answered

Chosen Option : --

**Q.7** If  $A : B : C = 2 : 3 : 5$ , then what is the value of  $(A + B) : (B + C) : (C + A)$ ?

- Ans**
- 1. 5 : 8 : 7
  - 2. 7 : 6 : 5
  - 3. 7 : 8 : 7
  - 4. 5 : 8 : 8

Question ID : 264330190380

Option 1 ID : 264330745103

Option 2 ID : 264330745105

Option 3 ID : 264330745104

Option 4 ID : 264330745102

Status : Answered

Chosen Option : 2

**Q.8** Deepak marks the price of his table 50 percent above the cost price. He gives some discount on it and earns profit of 10 percent. What is the discount percentage?

- Ans**
- 1. 26.67 percent
  - 2. 33.33 percent
  - 3. 16.67 percent
  - 4. 20 percent

Question ID : 264330188583

Option 1 ID : 264330738136

Option 2 ID : 264330738137

Option 3 ID : 264330738135

Option 4 ID : 264330738134

Status : Not Answered

Chosen Option : --

**Q.9** Mohan, Aman and Sohan together can complete a work in 18 days. If Mohan can work thrice as faster than Aman and Aman can work twice as faster than Sohan, then in how many days Sohan alone can complete the same work?

- Ans**
- 1. 172 days
  - 2. 162 days
  - 3. 180 days
  - 4. 195 days

Question ID : 264330187537

Option 1 ID : 264330734077

Option 2 ID : 264330734078

Option 3 ID : 264330734079

Option 4 ID : 264330734076

Status : Answered

Chosen Option : 3

**Q.10** A ring is sold at three successive discounts of 10%, 20% and 30%. If the marked price of the ring is ₹20,000, find its net selling price.

- Ans**
- 1. Rs. 10000
  - 2. Rs. 9000
  - 3. Rs. 10020
  - 4. Rs. 10080

Question ID : 264330192398

Option 1 ID : 264330752947

Option 2 ID : 264330752946

Option 3 ID : 264330752948

Option 4 ID : 264330752949

Status : Not Answered

Chosen Option : --

**Q.11** A train of length 442 metres crosses an electric pole in 13 seconds and crosses another train of the same length travelling in opposite direction in 17 seconds. What is the speed of the second train?

- Ans**
- 1. 24 m/s
  - 2. 18 m/s
  - 3. 12 m/s
  - 4. 32 m/s

Question ID : 264330187855

Option 1 ID : 264330735350

Option 2 ID : 264330735349

Option 3 ID : 264330735348

Option 4 ID : 264330735351

Status : Not Answered

Chosen Option : --

**Q.12** A person borrows some money for 5 years at a certain rate of simple interest. If the ratio of principal and total interest is 5 : 1, then what is the annual rate of interest?

- Ans**
- 1. 7 percent
  - 2. 2 percent
  - 3. 4 percent
  - 4. 3.5 percent

Question ID : **264330187813**  
Option 1 ID : **264330735183**  
Option 2 ID : **264330735181**  
Option 3 ID : **264330735180**  
Option 4 ID : **264330735182**  
Status : **Not Answered**  
Chosen Option : --

**Q.13** What is the total surface area of a cone whose radius is 24 cm and height is 10 cm?

- Ans**
- 1.  $3771.43 \text{ cm}^2$
  - 2.  $3924.61 \text{ cm}^2$
  - 3.  $3249.76 \text{ cm}^2$
  - 4.  $4261.23 \text{ cm}^2$

Question ID : **264330187518**  
Option 1 ID : **264330734003**  
Option 2 ID : **264330734002**  
Option 3 ID : **264330734001**  
Option 4 ID : **264330734000**  
Status : **Answered**  
Chosen Option : **3**

**Q.14** What is the sum of all prime numbers between 30 and 50?

- Ans**
- 1. 202
  - 2. 199
  - 3. 173
  - 4. 187

Question ID : **264330191129**  
Option 1 ID : **264330747873**  
Option 2 ID : **264330747870**  
Option 3 ID : **264330747871**  
Option 4 ID : **264330747872**  
Status : **Not Answered**  
Chosen Option : --

Q.15 What is the smallest number that is a multiple of 5, 8 and 15?

- Ans
- 1. 40
  - 2. 230
  - 3. 120
  - 4. 60

Question ID : 264330187722  
Option 1 ID : 264330734816  
Option 2 ID : 264330734819  
Option 3 ID : 264330734817  
Option 4 ID : 264330734818  
Status : Not Answered  
Chosen Option : --

Q.16 A sells a bottle to B at the profit of 30 percent and B sells it to C at a loss of 20 percent. If C pays Rs. 3744 for the bottle, then what is the cost price of bottle for A?

- Ans
- 1. Rs. 3200
  - 2. Rs. 3600
  - 3. Rs. 3000
  - 4. Rs. 3500

Question ID : 264330191637  
Option 1 ID : 264330749904  
Option 2 ID : 264330749905  
Option 3 ID : 264330749902  
Option 4 ID : 264330749903  
Status : Not Answered  
Chosen Option : --

Q.17 The difference between compound interest (compounding annually) and simple interest on a sum of Rs.80,000 for 2 years is Rs. 288. Find the rate of interest per annum.

- Ans
- 1. 8%
  - 2. 5.5%
  - 3. 6%
  - 4. 4%

Question ID : 264330191182  
Option 1 ID : 264330748084  
Option 2 ID : 264330748083  
Option 3 ID : 264330748085  
Option 4 ID : 264330748082  
Status : Not Answered  
Chosen Option : --

**Q.18** Average of 8 numbers is 47. The average of first three numbers is 53 and the average of next two numbers is 55. If the sixth number is 7 and 10 less than seventh and eighth number respectively, then what is the value of eighth number?

- Ans**
- 1. 52
  - 2. 42
  - 3. 40
  - 4. 47

Question ID : 264330188004  
Option 1 ID : 264330735944  
Option 2 ID : 264330735947  
Option 3 ID : 264330735946  
Option 4 ID : 264330735945  
Status : Not Answered  
Chosen Option : --

**Q.19** The average age of 17 students of a class is 20 years. If a new student of age 38 years joins the class, then what will be the average age of these 18 students?

- Ans**
- 1. 24 years
  - 2. 21 years
  - 3. 23 years
  - 4. 26 years

Question ID : 264330188556  
Option 1 ID : 264330738027  
Option 2 ID : 264330738029  
Option 3 ID : 264330738028  
Option 4 ID : 264330738026  
Status : Not Answered  
Chosen Option : --

**Q.20** A student scores 60% in an exam and gets 24 marks less than another student who scored 80%. What is the maximum marks in the exam?

- Ans**
- 1. 150
  - 2. 130
  - 3. 140
  - 4. 120

Question ID : 264330188518  
Option 1 ID : 264330737876  
Option 2 ID : 264330737877  
Option 3 ID : 264330737875  
Option 4 ID : 264330737874  
Status : Not Answered  
Chosen Option : --



**Q.1** Find the part of the given sentence that has an error in it. If there is no error, choose 'No error'.

Neither Prerna nor Vishaka understand the meaning of friendship.

- Ans**
- 1. Neither Prerna nor
  - 2. meaning of friendship.
  - 3. Vishaka understand the
  - 4. No error

Question ID : 264330186002

Option 1 ID : 264330728300

Option 2 ID : 264330728302

Option 3 ID : 264330728301

Option 4 ID : 264330728303

Status : Answered

Chosen Option : 4

**Q.2** Select the most appropriate word to fill in the blank.

The Liberal Party is cracking under the pressure of these \_\_\_\_\_.

- Ans**
- 1. corrosion
  - 2. allegation
  - 3. allegations
  - 4. allegedly

Question ID : 264330185798

Option 1 ID : 264330727526

Option 2 ID : 264330727527

Option 3 ID : 264330727524

Option 4 ID : 264330727525

Status : Answered

Chosen Option : 2

**Q.3** Find the part of the given sentence that has an error in it. If there is no error, choose 'No error'.

I'm unable to contact my friend, who deceived me when I was more weaker.

- Ans**
- 1. I'm unable to contact my friend
  - 2. No error
  - 3. I was more weaker.
  - 4. who deceived me when

Question ID : 264330186066

Option 1 ID : 264330728544

Option 2 ID : 264330728547

Option 3 ID : 264330728546

Option 4 ID : 264330728545

Status : Answered

Chosen Option : 3

Q.4 Fill in the blank with the most appropriate option.

\_\_\_\_\_ your clothes, it is high time you clean up the mess in your room.

- Ans
- 1. Fold
  - 2. Faux
  - 3. Foaled
  - 4. Fouled

Question ID : 264330186590  
Option 1 ID : 264330730540  
Option 2 ID : 264330730543  
Option 3 ID : 264330730541  
Option 4 ID : 264330730542  
Status : Answered  
Chosen Option : 1

Q.5 Improve the underlined part of the sentence. Choose "No improvement" as an answer if the sentence is grammatically correct.

The software revolution is at its peaks in India.

- Ans
- 1. its peaked
  - 2. it's peaking
  - 3. No improvement
  - 4. its peak

Question ID : 264330186364  
Option 1 ID : 264330729682  
Option 2 ID : 264330729680  
Option 3 ID : 264330729683  
Option 4 ID : 264330729681  
Status : Answered  
Chosen Option : 4

Q.6 Improve the underlined part of the sentence. Choose "No improvement" as an answer if the sentence is grammatically correct.

The house is a pear tree in the backyard.

- Ans
- 1. have a pears
  - 2. has a pears
  - 3. No improvement
  - 4. has a pear

Question ID : 264330186699  
Option 1 ID : 264330730957  
Option 2 ID : 264330730956  
Option 3 ID : 264330730959  
Option 4 ID : 264330730958  
Status : Answered  
Chosen Option : 4

Q.7 Choose the option which is antonym of (opposite of) the word "construe" in the sentence given below:

His silence was misunderstood by many as a lack of interest, when in reality, he was deeply engrossed in thought.

- Ans  1. misunderstood  
 2. interest  
 3. engrossed  
 4. silence

Question ID : 264330186437  
Option 1 ID : 264330729957  
Option 2 ID : 264330729958  
Option 3 ID : 264330729959  
Option 4 ID : 264330729956  
Status : Not Answered  
Chosen Option : --

Q.8 Find the part of the given sentence that has an error in it.

Studies suggest that well-designed e-books can support early literacy in kids.

- Ans  1. No error  
 2. Studies suggest that well-designed  
 3. literacy in kids.  
 4. e-books can support early

Question ID : 264330186194  
Option 1 ID : 264330729035  
Option 2 ID : 264330729032  
Option 3 ID : 264330729034  
Option 4 ID : 264330729033  
Status : Answered  
Chosen Option : 4

Q.9 Select the sentence with no spelling errors.

- Ans  1.  
Marine ecosystems were comparatively more resistant to extreme weather events.  
 2.  
Marine ecosystemas were comparatively more resistant to extreme weather events.  
 3.  
Marine ecosystems were comparitively more resistant to extreme weather events.  
 4.  
Marine ecosystems were comparatively more resistaent to extreme weather events.

Question ID : 264330185832  
Option 1 ID : 264330727653  
Option 2 ID : 264330727654  
Option 3 ID : 264330727652  
Option 4 ID : 264330727655  
Status : Answered  
Chosen Option : 1

Q.10 Select the incorrectly spelt word from the given sentence.

He made several excrsions in the tribal habitats there.

- Ans
- 1. tribal
  - 2. habitats
  - 3. excrsions
  - 4. several

Question ID : 264330185705  
Option 1 ID : 264330727170  
Option 2 ID : 264330727171  
Option 3 ID : 264330727169  
Option 4 ID : 264330727168  
Status : Answered  
Chosen Option : 3

Q.11 Select the most appropriate meaning of the given idiom

Drastic times call for drastic measures

- Ans
- 1. Something that ends at the last minute or last few seconds
  - 2. When you are extremely desperate you need to take extremely desperate actions
  - 3. Do not pull all your resources in one possibility
  - 4. Don't rely on it until you sure of it

Question ID : 264330186439  
Option 1 ID : 264330729967  
Option 2 ID : 264330729966  
Option 3 ID : 264330729964  
Option 4 ID : 264330729965  
Status : Answered  
Chosen Option : 1

Q.12 Choose the most appropriate synonym of the underlined word.

My coworkers' loud, endless conversations irritated me.

- Ans
- 1. Obligated
  - 2. Pacified
  - 3. Appeased
  - 4. Displeased

Question ID : 264330185679  
Option 1 ID : 264330727070  
Option 2 ID : 264330727068  
Option 3 ID : 264330727071  
Option 4 ID : 264330727069  
Status : Answered  
Chosen Option : 4

Q.13 Choose the idiom/phrase that can substitute the highlighted group of words meaningfully.

The party was great and we **thoroughly enjoyed**.

- Ans
- 1. Beat around the bush
  - 2. In the dark
  - 3. Had a ball
  - 4. Cut corners

Question ID : 264330186209  
Option 1 ID : 264330729088  
Option 2 ID : 264330729091  
Option 3 ID : 264330729090  
Option 4 ID : 264330729089  
Status : Answered  
Chosen Option : 3

Q.14 Improve the underlined part of the sentence. Choose 'No improvement' as an answer if the sentence is grammatically correct.

He sand the wooden with coarse sandpaper.

- Ans
- 1. sand the wood
  - 2. No improvement
  - 3. had sand the wood
  - 4. sanded the wood

Question ID : 264330185816  
Option 1 ID : 264330727594  
Option 2 ID : 264330727595  
Option 3 ID : 264330727592  
Option 4 ID : 264330727593  
Status : Answered  
Chosen Option : 3

Q.15 Select the most appropriate antonym of the given word.

Facade

- Ans
- 1. Hidden
  - 2. Truth
  - 3. Opening
  - 4. Closure

Question ID : 264330186900  
Option 1 ID : 264330731720  
Option 2 ID : 264330731723  
Option 3 ID : 264330731721  
Option 4 ID : 264330731722  
Status : Not Answered  
Chosen Option : --

**Comprehension:**

In the following passage some of the words have been left out. Read the passage carefully and select the correct answer for the given blank out of the four alternatives.

The initial two Russian PWR types at the Kudankulam site (1) \_\_\_\_\_ apart from India's three-stage plan (2) \_\_\_\_\_ nuclear power and were simply to increase generating capacity (3) \_\_\_\_\_ rapidly. Now there are (4) \_\_\_\_\_ for eight 1000 MWe units at that site, and in January 2007 a memorandum of understanding was (5) \_\_\_\_\_ for Russia.

**SubQuestion No : 16**

Q.16 Select the most appropriate option for blank (1)

- Ans  1. was  
 2. were  
 3. is  
 4. are

Question ID : 264330186704

Option 1 ID : 264330730972

Option 2 ID : 264330730973

Option 3 ID : 264330730975

Option 4 ID : 264330730974

Status : Answered

Chosen Option : 2

**Comprehension:**

In the following passage some of the words have been left out. Read the passage carefully and select the correct answer for the given blank out of the four alternatives.

The initial two Russian PWR types at the Kudankulam site (1) \_\_\_\_\_ apart from India's three-stage plan (2) \_\_\_\_\_ nuclear power and were simply to increase generating capacity (3) \_\_\_\_\_ rapidly. Now there are (4) \_\_\_\_\_ for eight 1000 MWe units at that site, and in January 2007 a memorandum of understanding was (5) \_\_\_\_\_ for Russia.

**SubQuestion No : 17**

Q.17 Select the most appropriate option for blank (2)

- Ans  1. from  
 2. to  
 3. for  
 4. with

Question ID : 264330186705

Option 1 ID : 264330730978

Option 2 ID : 264330730979

Option 3 ID : 264330730976

Option 4 ID : 264330730977

Status : Answered

Chosen Option : 3

**Comprehension:**

In the following passage some of the words have been left out. Read the passage carefully and select the correct answer for the given blank out of the four alternatives.

The initial two Russian PWR types at the Kudankulam site (1) \_\_\_\_\_ apart from India's three-stage plan (2) \_\_\_\_\_ nuclear power and were simply to increase generating capacity (3) \_\_\_\_\_ rapidly. Now there are (4) \_\_\_\_\_ for eight 1000 MWe units at that site, and in January 2007 a memorandum of understanding was (5) \_\_\_\_\_ for Russia.

**SubQuestion No : 18**

Q.18 Select the most appropriate option for blank (3)

- Ans  1. more  
 2. most  
 3. enough  
 4. so

Question ID : 264330186706

Option 1 ID : 264330730982

Option 2 ID : 264330730983

Option 3 ID : 264330730980

Option 4 ID : 264330730981

Status : Answered

Chosen Option : 1

**Comprehension:**

In the following passage some of the words have been left out. Read the passage carefully and select the correct answer for the given blank out of the four alternatives.

The initial two Russian PWR types at the Kudankulam site (1) \_\_\_\_\_ apart from India's three-stage plan (2) \_\_\_\_\_ nuclear power and were simply to increase generating capacity (3) \_\_\_\_\_ rapidly. Now there are (4) \_\_\_\_\_ for eight 1000 MWe units at that site, and in January 2007 a memorandum of understanding was (5) \_\_\_\_\_ for Russia.

**SubQuestion No : 19**

Q.19 Select the most appropriate option for blank (4)

- Ans  1. plans  
 2. idea  
 3. amends  
 4. structures

Question ID : 264330186707

Option 1 ID : 264330730987

Option 2 ID : 264330730986

Option 3 ID : 264330730984

Option 4 ID : 264330730985

Status : Answered

Chosen Option : 1

**Comprehension:**

In the following passage some of the words have been left out. Read the passage carefully and select the correct answer for the given blank out of the four alternatives.

The initial two Russian PWR types at the Kudankulam site (1) \_\_\_\_\_ apart from India's three-stage plan (2) \_\_\_\_\_ nuclear power and were simply to increase generating capacity (3) \_\_\_\_\_ rapidly. Now there are (4) \_\_\_\_\_ for eight 1000 MWe units at that site, and in January 2007 a memorandum of understanding was (5) \_\_\_\_\_ for Russia.

**SubQuestion No : 20**

**Q.20** Select the most appropriate option for blank (5)

- Ans
- 1. placed
  - 2. marked
  - 3. draft
  - 4. signed

Question ID : 264330186708

Option 1 ID : 264330730991

Option 2 ID : 264330730990

Option 3 ID : 264330730989

Option 4 ID : 264330730988

Status : Answered

Chosen Option : 4

## Section : Part-D-Hindi

**Q.1** निम्नलिखित वाक्य में, उस वाक्यांश को पहचानिए जिसमें मात्राओं से संबंधित अशुद्धियाँ हैं। यदि कोई गलती नहीं है तो 'कोई त्रुटि नहीं है' का चुनाव कीजिए।  
राष्ट्र के महानतम व्यक्ति से देश का/ लघुतम व्यक्ती समभाव को मील सकता था तो/ यह इनके हृदय की विशालता थी।

- Ans
- 1. राष्ट्र के महानतम व्यक्ति से देश का
  - 2. यह इनके हृदय की विशालता थी
  - 3. लघुतम व्यक्ती समभाव को मील सकता था तो
  - 4. कोई त्रुटि नहीं है

Question ID : 264330189852

Option 1 ID : 264330743034

Option 2 ID : 264330743036

Option 3 ID : 264330743035

Option 4 ID : 264330743037

Status : Not Answered

Chosen Option : --



**Q.2** निम्नलिखित प्रश्न में, दिए गए चार विकल्पों में से, उस विकल्प का चयन करें जो दिए गए मुहावरे के अर्थ को सर्वश्रेष्ठ रूप से व्यक्त करता है।

घर की खेती

**Ans**

- 1. मुसीबत का एहसास होना
- 2. ज़ोरों की भूख लगना
- 3. बहुत कष्ट झेलना
- 4. अपनी चीज़

Question ID : 264330189263

Option 1 ID : 264330740791

Option 2 ID : 264330740793

Option 3 ID : 264330740792

Option 4 ID : 264330740790

Status : Not Answered

Chosen Option : --

**Q.3** निम्नलिखित प्रश्न में, चार विकल्पों में से, उस सही विकल्प का चयन करें जो वाक्यांशों के लिए एक शब्द का विकल्प हो।  
खाने से बचा हुआ जूठा भोजन

**Ans**

- 1. उच्छिष्ट
- 2. खाद्य
- 3. बुभुक्षा
- 4. बारानी

Question ID : 264330189719

Option 1 ID : 264330742528

Option 2 ID : 264330742526

Option 3 ID : 264330742527

Option 4 ID : 264330742529

Status : Not Answered

Chosen Option : --

**Q.4** दिए गए शब्द का विलोम शब्द ज्ञात कीजिए।

सपूत

**Ans**

- 1. कुमार
- 2. कपूत
- 3. कुपित
- 4. कुटीर

Question ID : 264330188987

Option 1 ID : 264330739738

Option 2 ID : 264330739740

Option 3 ID : 264330739739

Option 4 ID : 264330739741

Status : Not Answered

Chosen Option : --

Q.5 दिए गए वाक्य में उचित पर्यायवाची शब्द का चयन करके रिक्त स्थान की पूर्ति करें।

\_\_\_\_\_ (नेक) व्यक्ति के साथ ही रहना चाहिए।

- Ans
- 1. दुर्जन
  - 2. सज्जन
  - 3. जंगल
  - 4. दीठ

Question ID : 264330189490  
 Option 1 ID : 264330741655  
 Option 2 ID : 264330741654  
 Option 3 ID : 264330741657  
 Option 4 ID : 264330741656  
 Status : Not Answered  
 Chosen Option : --

Q.6 दिए गए शब्द का पर्यायवाची ज्ञात कीजिए।

कृष्ण

- Ans
- 1. ममता
  - 2. स्वर्ण
  - 3. रजत
  - 4. गिरिधर

Question ID : 264330189258  
 Option 1 ID : 264330740771  
 Option 2 ID : 264330740772  
 Option 3 ID : 264330740770  
 Option 4 ID : 264330740773  
 Status : Not Answered  
 Chosen Option : --

Q.7 दिए गए वाक्य में से गलत वर्तनी ज्ञात कीजिए।

इस बात पर टिप्पड़ी करना क्षमा योग्य नहीं होगा।

- Ans
- 1. बात
  - 2. योग्य
  - 3. टिप्पड़ी
  - 4. क्षमा

Question ID : 264330190021  
 Option 1 ID : 264330743681  
 Option 2 ID : 264330743678  
 Option 3 ID : 264330743679  
 Option 4 ID : 264330743680  
 Status : Not Answered  
 Chosen Option : --

Q.8 दिए गए विकल्पों में से तीन विकल्प त्रुटियुक्त हैं, जबकि एक सही है। उस सही विकल्प का चयन करें।

- Ans
- 1. उनकी महिला भी उनके साथ आए है।
  - 2. उनकी पत्नी भी उनके साथ आई है।
  - 3. उनकी भ्राता भी उनके साथ आया है।
  - 4. उनकी मात्र भी उनके साथ आई है।

Question ID : 264330189332

Option 1 ID : 264330741054

Option 2 ID : 264330741056

Option 3 ID : 264330741055

Option 4 ID : 264330741057

Status : Not Answered

Chosen Option : --

Q.9 दिए गए वाक्य में उचित देशज-विदेशज शब्द का चयन करके रिक्त स्थान की पूर्ति कीजिए।

कंपनीबाग में \_\_\_\_\_ आज धूल खा रही है।

- Ans
- 1. नीलम
  - 2. चकमक
  - 3. कमरा
  - 4. तोप

Question ID : 264330189098

Option 1 ID : 264330740164

Option 2 ID : 264330740163

Option 3 ID : 264330740165

Option 4 ID : 264330740162

Status : Not Answered

Chosen Option : --

Q.10 दिए गए वाक्य में उचित विदेशज शब्द का चयन करके रिक्त स्थान की पूर्ति कीजिए।

स्कूल को टाटा फाउंडेशन से \_\_\_\_\_ मिला है।

- Ans
- 1. पादरी
  - 2. कोम्ल
  - 3. फंड
  - 4. टिकट

Question ID : 264330189393

Option 1 ID : 264330741287

Option 2 ID : 264330741289

Option 3 ID : 264330741288

Option 4 ID : 264330741286

Status : Not Answered

Chosen Option : --

Q.11 दिए गए वाक्य में रेखांकित शब्दों के लिए सही शब्दों वाले विकल्प का चयन करें।

यह आँखो से देखी घटना है।

Ans

- ✓ 1. यह आँखो देखी घटना है।
- ✗ 2. यह आँखो घटना है।
- ✗ 3. परिवर्तन की आवश्यकता नहीं है।
- ✗ 4. यह आँख से देखी घटना है।

Question ID : 264330188934

Option 1 ID : 264330739539

Option 2 ID : 264330739540

Option 3 ID : 264330739541

Option 4 ID : 264330739538

Status : Not Answered

Chosen Option : --

Q.12 निम्नलिखित प्रश्न में, चार विकल्पों में से, उस विकल्प का चयन करें जो कोष्ठक में दिए गए शब्द के विलोम शब्द का सही विकल्प है।

मेरे इलाके में मेरे पड़ोसी से ज्यादा (अधम) \_\_\_\_\_ कोई नहीं है।

Ans

- ✓ 1. उत्तम
- ✗ 2. सूक्ष्म
- ✗ 3. असली
- ✗ 4. अथ

Question ID : 264330188344

Option 1 ID : 264330737256

Option 2 ID : 264330737259

Option 3 ID : 264330737257

Option 4 ID : 264330737258

Status : Not Answered

Chosen Option : --

Q.13 दिए गए वाक्य का वह भाग ज्ञात करें, जिसमें कोई त्रुटि है। यदि कोई त्रुटि नहीं है, तो 'कोई त्रुटि नहीं है' चुनें।

राम, लक्ष्मण और सीता वन को चली गईं।

Ans

- ✗ 1. कोई त्रुटि नहीं है
- ✗ 2. सीता वन को
- ✗ 3. राम, लक्ष्मण और
- ✓ 4. चली गईं।

Question ID : 264330188267

Option 1 ID : 264330736967

Option 2 ID : 264330736965

Option 3 ID : 264330736964

Option 4 ID : 264330736966

Status : Not Answered

Chosen Option : --

Q.14 निम्नलिखित वाक्य में रेखांकित भाग के लिए एक सार्थक शब्द ज्ञात कीजिए।

इन सारी बातों का कोई अर्थ नहीं है।

- Ans
- 1. बेकार
  - 2. निरर्थक
  - 3. सार्थक
  - 4. व्यर्थ

Question ID : 264330189382  
 Option 1 ID : 264330741244  
 Option 2 ID : 264330741243  
 Option 3 ID : 264330741245  
 Option 4 ID : 264330741242  
 Status : Not Answered  
 Chosen Option : --

Q.15 निम्नलिखित प्रश्न में, चार विकल्पों में से, उस विकल्प का चयन करें जो दिए गए मुहावरे का सही अर्थ वाला विकल्प है।

अकल चलने जाना

- Ans
- 1. बुद्धि भ्रष्ट हो जाना
  - 2. संकोच न करना
  - 3. बहुत शोर करना
  - 4. किसी बात की जानकारी देना

Question ID : 264330189850  
 Option 1 ID : 264330743027  
 Option 2 ID : 264330743028  
 Option 3 ID : 264330743029  
 Option 4 ID : 264330743026  
 Status : Not Answered  
 Chosen Option : --

**Comprehension:**

नीचे दिए गए गद्य में कुछ शब्द छोड़ दिए गए हैं और प्रत्येक रिक्त स्थान के चार विकल्प दिए गए हैं। इन चारों में से कौन सा विकल्प रिक्त स्थान की पूर्ति करेगा-

हर युग का अपना-अपना प्रिय (1)\_\_\_\_\_ होता है। इन दिनों यह उद्योग बना है, देश की नई (2)\_\_\_\_\_ को विदेश का रास्ता दिखाने का। (3)\_\_\_\_\_ यह रास्ता खुल रहा है, त्यों-त्यों लगता है मुंबई का विरार का इलाका और दूसरे महानगरों के पीछे या भूख से सूखती हुई अंधेरी गलियां विदेश (4)\_\_\_\_\_ का रास्ता तलाश रही हैं। गांव (5)\_\_\_\_\_ हो रहे हैं।

**SubQuestion No : 16**

Q.16 रिक्त 1 के लिए सबसे उपयुक्त विकल्प का चयन कीजिए।

- Ans
- 1. दाव
  - 2. उद्योग
  - 3. नवीन
  - 4. गारंटी

Question ID : 264330189230

Option 1 ID : 264330740665

Option 2 ID : 264330740663

Option 3 ID : 264330740662

Option 4 ID : 264330740664

Status : Not Answered

Chosen Option : --

**Comprehension:**

नीचे दिए गए गद्य में कुछ शब्द छोड़ दिए गए हैं और प्रत्येक रिक्त स्थान के चार विकल्प दिए गए हैं। इन चारों में से कौन सा विकल्प रिक्त स्थान की पूर्ति करेगा-

हर युग का अपना-अपना प्रिय (1)\_\_\_\_\_ होता है। इन दिनों यह उद्योग बना है, देश की नई (2)\_\_\_\_\_ को विदेश का रास्ता दिखाने का। (3)\_\_\_\_\_ यह रास्ता खुल रहा है, त्यों-त्यों लगता है मुंबई का विरार का इलाका और दूसरे महानगरों के पीछे या भूख से सूखती हुई अंधेरी गलियां विदेश (4)\_\_\_\_\_ का रास्ता तलाश रही हैं। गांव (5)\_\_\_\_\_ हो रहे हैं।

**SubQuestion No : 17**

Q.17 रिक्त 2 के लिए सबसे उपयुक्त विकल्प का चयन कीजिए।

- Ans
- 1. लोग
  - 2. विषय
  - 3. पीढ़ी
  - 4. रास्ता

Question ID : 264330189231

Option 1 ID : 264330740667

Option 2 ID : 264330740669

Option 3 ID : 264330740668

Option 4 ID : 264330740666

Status : Not Answered

Chosen Option : --

**Comprehension:**

नीचे दिए गए गद्य में कुछ शब्द छोड़ दिए गए हैं और प्रत्येक रिक्त स्थान के चार विकल्प दिए गए हैं। इन चारों में से कौन सा विकल्प रिक्त स्थान की पूर्ति करेगा-

हर युग का अपना-अपना प्रिय (1)\_\_\_\_\_ होता है। इन दिनों यह उद्योग बना है, देश की नई (2)\_\_\_\_\_ को विदेश का रास्ता दिखाने का। (3)\_\_\_\_\_ यह रास्ता खुल रहा है, त्यों-त्यों लगता है मुंबई का विरार का इलाका और दूसरे महानगरों के पीछे या भूख से सूखती हुई अंधेरी गलियां विदेश (4)\_\_\_\_\_ का रास्ता तलाश रही हैं। गांव (5)\_\_\_\_\_ हो रहे हैं।

**SubQuestion No : 18**

Q.18 रिक्त 3 के लिए सबसे उपयुक्त विकल्प का चयन कीजिए।

- Ans
- 1. जो
  - 2. जब
  - 3. जिन्हे
  - 4. ज्यों-ज्यों

Question ID : 264330189232

Option 1 ID : 264330740670

Option 2 ID : 264330740671

Option 3 ID : 264330740672

Option 4 ID : 264330740673

Status : Not Answered

Chosen Option : --

**Comprehension:**

नीचे दिए गए गद्य में कुछ शब्द छोड़ दिए गए हैं और प्रत्येक रिक्त स्थान के चार विकल्प दिए गए हैं। इन चारों में से कौन सा विकल्प रिक्त स्थान की पूर्ति करेगा-

हर युग का अपना-अपना प्रिय (1)\_\_\_\_\_ होता है। इन दिनों यह उद्योग बना है, देश की नई (2)\_\_\_\_\_ को विदेश का रास्ता दिखाने का। (3)\_\_\_\_\_ यह रास्ता खुल रहा है, त्यों-त्यों लगता है मुंबई का विरार का इलाका और दूसरे महानगरों के पीछे या भूख से सूखती हुई अंधेरी गलियां विदेश (4)\_\_\_\_\_ का रास्ता तलाश रही हैं। गांव (5)\_\_\_\_\_ हो रहे हैं।

**SubQuestion No : 19**

Q.19 रिक्त 4 के लिए सबसे उपयुक्त विकल्प का चयन कीजिए।

- Ans
- 1. युवक
  - 2. प्राण
  - 3. प्रवास
  - 4. प्राणी

Question ID : 264330189233

Option 1 ID : 264330740674

Option 2 ID : 264330740676

Option 3 ID : 264330740675

Option 4 ID : 264330740677

Status : Not Answered

Chosen Option : --

**Comprehension:**

नीचे दिए गए गद्य में कुछ शब्द छोड़ दिए गए हैं और प्रत्येक रिक्त स्थान के चार विकल्प दिए गए हैं। इन चारों में से कौन सा विकल्प रिक्त स्थान की पूर्ति करेगा-

हर युग का अपना-अपना प्रिय (1)\_\_\_\_\_ होता है। इन दिनों यह उद्योग बना है, देश की नई (2)\_\_\_\_\_ को विदेश का रास्ता दिखाने का। (3)\_\_\_\_\_ यह रास्ता खुल रहा है, ल्यों-ल्यों लगता है मुंबई का विरार का इलाका और दूसरे महानगरों के पीछे या भूख से सूखती हुई अंधेरी गलियां विदेश (4)\_\_\_\_\_ का रास्ता तलाश रही हैं। गांव (5)\_\_\_\_\_ हो रहे हैं।

**SubQuestion No : 20**

Q.20 रिक्त 5 के लिए सबसे उपयुक्त विकल्प का चयन कीजिए।

- Ans
- 1. खाली
  - 2. भ्रमित
  - 3. भारी
  - 4. भर

Question ID : 264330189234

Option 1 ID : 264330740679

Option 2 ID : 264330740681

Option 3 ID : 264330740680

Option 4 ID : 264330740678

Status : Not Answered

Chosen Option : --