

**Constable GD in Central Armed Police Forces CAPFs SSF Rifleman GD in Assam
Rifles Examination 2024**

Roll Number	
Candidate Name	
Venue Name	
Exam Date	05/03/2024
Exam Time	9:00 AM - 10:00 AM
Subject	Constable GD Examination 2024

Section : Part-A-General Intelligence and Reasoning

Q.1 Arrange the given words in the sequence in which they occur in the dictionary.

1. Clamp
2. Clan
3. Clank
4. Clang
5. Clap

Ans ✓ 1. 1,2,4,3,5
✗ 2. 1,2,3,4,5
✗ 3. 1,2,4,5,3
✗ 4. 1,2,3,5,4

Question ID : 264330190129

Option 1 ID : 264330744100

Option 2 ID : 264330744101

Option 3 ID : 264330744099

Option 4 ID : 264330744098

Status : Answered

Chosen Option : 1

Q.2 A is the father of B. B is the brother of C. C is the sister of D. D is the wife of E. F is the mother of E. G is the husband of F. How is E related to A?

Ans ✓ 1. Daughter's husband
✗ 2. Father
✗ 3. Mother
✗ 4. Sister

Question ID : 264330190214

Option 1 ID : 264330744438

Option 2 ID : 264330744439

Option 3 ID : 264330744440

Option 4 ID : 264330744441

Status : Answered

Chosen Option : 1

Q.3 After interchanging the given two signs what will be the values of equation (I) and (II) respectively?

\times and \div

I. $7 + 8 \div 2 \times 4 - 6$

II. $16 \times 4 + 13 \div 2 - 3$

- Ans**
- 1. 5 and 6
 - 2. 8 and 9
 - 3. 6 and 15
 - 4. 5 and 27

Question ID : 264330191381

Option 1 ID : 264330748878

Option 2 ID : 264330748879

Option 3 ID : 264330748880

Option 4 ID : 264330748881

Status : Answered

Chosen Option : 4

Q.4 Select the option that is related to the fifth word in the same way as the fourth word is related to the third word and the second word is related to the first word.

BEE : BEEHIVE :: DOG : KENNEL :: BAT : ?

- Ans**
- 1. AQUARIUM
 - 2. NEST
 - 3. CAVE
 - 4. LEAF

Question ID : 264330192192

Option 1 ID : 264330752125

Option 2 ID : 264330752123

Option 3 ID : 264330752122

Option 4 ID : 264330752124

Status : Answered

Chosen Option : 3

Q.5 Which answer figure will complete the pattern in the question figure? (rotation is NOT allowed)



Ans



Question ID : 264330187117

Option 1 ID : 264330732399

Option 2 ID : 264330732396

Option 3 ID : 264330732398

Option 4 ID : 264330732397

Status : Answered

Chosen Option : 3

Q.6 Which of the following numbers will replace the question mark (?) in the given series?

16, 8, 24, ?, 36, 18

Ans ✗ 1. 14

✓ 2. 12

✗ 3. 10

✗ 4. 6

Question ID : 264330192320

Option 1 ID : 264330752637

Option 2 ID : 264330752636

Option 3 ID : 264330752635

Option 4 ID : 264330752634

Status : Answered

Chosen Option : 2

Q.7 In the following question, select the related letters from the given alternatives.

AM : VH :: YK : ?

- Ans**
- 1. TF
 - 2. TU
 - 3. PQ
 - 4. RS

Question ID : 264330190530
 Option 1 ID : 264330745704
 Option 2 ID : 264330745705
 Option 3 ID : 264330745702
 Option 4 ID : 264330745703
 Status : Answered
 Chosen Option : 1

Q.8 Eight girls A, B, C, D, E, F, G and H are sitting around a circular table facing towards the centre (not necessarily in the same order). A is second to the left of D. D is third to the left of E. C is third to the right of G. G is not the immediate neighbour of E. H is third to the right of B. B is second to the right of G. Who is sitting on the immediate left of G?

- Ans**
- 1. A
 - 2. E
 - 3. C
 - 4. F

Question ID : 264330190256
 Option 1 ID : 264330744607
 Option 2 ID : 264330744608
 Option 3 ID : 264330744609
 Option 4 ID : 264330744606
 Status : Answered
 Chosen Option : 1

Q.9 Which of the following groups of letters when sequentially placed from left to right will complete the given series?

uvvwwwuvv_www_vww_vvww

- Ans**
- 1. vvuu
 - 2. uvvv
 - 3. wwww
 - 4. vvww

Question ID : 264330187060
 Option 1 ID : 264330732168
 Option 2 ID : 264330732171
 Option 3 ID : 264330732169
 Option 4 ID : 264330732170
 Status : Answered
 Chosen Option : 1

Q.10 Which of the following letter will replace the question mark (?) in the given series?

B, W, S, ?, N, M

- Ans
- 1. S
 - 2. R
 - 3. O
 - 4. P

Question ID : 264330191107
 Option 1 ID : 264330747784
 Option 2 ID : 264330747782
 Option 3 ID : 264330747785
 Option 4 ID : 264330747783
 Status : Answered
 Chosen Option : 4

Q.11 In the following question, select the figure which can be placed at the sign of question mark (?) from the given alternatives.



Ans

- 1.
- 2.
- 3.
- 4.

Question ID : 264330191364
 Option 1 ID : 264330748812
 Option 2 ID : 264330748813
 Option 3 ID : 264330748811
 Option 4 ID : 264330748810
 Status : Answered
 Chosen Option : 3

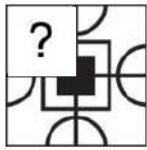
Q.12 In the following question, select the missing number from the given series.

8, 24, 40, 56, ?, 88

- Ans
- 1. 70
 - 2. 77
 - 3. 72
 - 4. 74

Question ID : 264330190238
 Option 1 ID : 264330744534
 Option 2 ID : 264330744537
 Option 3 ID : 264330744536
 Option 4 ID : 264330744535
 Status : Answered
 Chosen Option : 2

Q.13 Which answer figure will complete the pattern in the question figure? (rotation is NOT allowed)

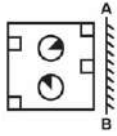


Ans

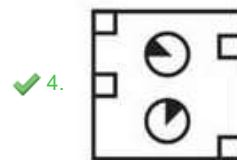
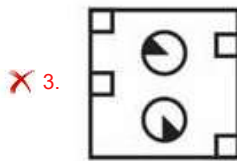
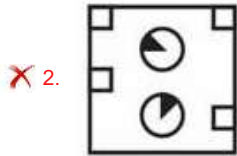
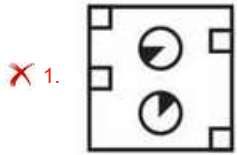
- 1.
- 2.
- 3.
- 4.

Question ID : 264330190185
 Option 1 ID : 264330744322
 Option 2 ID : 264330744323
 Option 3 ID : 264330744325
 Option 4 ID : 264330744324
 Status : Answered
 Chosen Option : 4

Q.14 If a mirror is placed on the line AB, then out of the option figures which figure will be the right image of the question figure?



Ans



Question ID : 264330190466

Option 1 ID : 264330745448

Option 2 ID : 264330745447

Option 3 ID : 264330745449

Option 4 ID : 264330745446

Status : Answered

Chosen Option : 4

Q.15 In a certain code language, if PANTRY is coded as '715297' and STEADY is coded as '125147', then what will DATES be coded as?

Ans ✓ 1. 41251

✗ 2. 41215

✗ 3. 42151

✗ 4. 41241

Question ID : 264330192254

Option 1 ID : 264330752371

Option 2 ID : 264330752373

Option 3 ID : 264330752370

Option 4 ID : 264330752372

Status : Answered

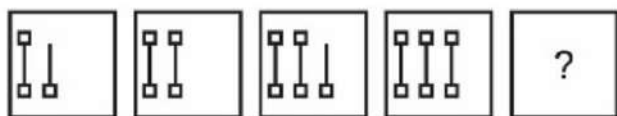
Chosen Option : 1

Q.16 In a certain code language, if WINTER is coded as 595259, AUTUMN is coded as 132345, then what will SPRING be coded as?

- Ans**
- 1. 188757
 - 2. 179955
 - 3. 179957
 - 4. 154995

Question ID : 264330191574
 Option 1 ID : 264330749650
 Option 2 ID : 264330749651
 Option 3 ID : 264330749652
 Option 4 ID : 264330749653
 Status : Answered
 Chosen Option : 3

Q.17 In the following question, select the figure which can be placed at the sign of question mark (?) from the given alternatives.



Ans

- 1.
- 2.
- 3.
- 4.

Question ID : 264330191403
 Option 1 ID : 264330748968
 Option 2 ID : 264330748969
 Option 3 ID : 264330748966
 Option 4 ID : 264330748967
 Status : Answered
 Chosen Option : 1

Q.18 Six persons P1, P2, P3, P4, P5 and P6 are sitting around a circular table facing towards the centre (not necessarily in the same order). Only two persons are sitting between P2 and P6. Only one person is sitting between P2 and P4. P5 is sitting to the immediate right of P3. P1 is sitting second to the right of P6. Who is sitting on the immediate left of P4?

- Ans**
- 1. P6
 - 2. P5
 - 3. P1
 - 4. P2

Question ID : 264330190435

Option 1 ID : 264330745325

Option 2 ID : 264330745322

Option 3 ID : 264330745324

Option 4 ID : 264330745323

Status : Answered

Chosen Option : 1

Q.19 Which two signs should be interchanged to make the given equation correct?

$$14 \div 2 - 15 + 3 \times 6 = 4$$

- Ans**
- 1. = and +
 - 2. \div and \times
 - 3. - and +
 - 4. \times and +

Question ID : 264330191121

Option 1 ID : 264330747840

Option 2 ID : 264330747838

Option 3 ID : 264330747839

Option 4 ID : 264330747841

Status : Answered

Chosen Option : 3

Q.20 In the following question below are given some statements followed by some conclusions based on those statements. Taking the given statements to be true even if they seem to be at variance from commonly known facts. Read all the conclusions and then decide which of the given conclusion logically follows the given statements.

Statements:

I. All R are T.

II. Some X are R.

Conclusions:

I. No T are R.

II. Some R are X.

III. No X are T.

- Ans**
- 1. Both conclusions II and III follows
 - 2. All conclusion follows
 - 3. Both conclusions I and III follows
 - 4. Only conclusion II follows

Question ID : 264330190257

Option 1 ID : 264330744610

Option 2 ID : 264330744613

Option 3 ID : 264330744612

Option 4 ID : 264330744611

Status : Answered

Chosen Option : 4

Section : Part-B-General Knowledge and General awareness

Q.1 Swami Dayanand Saraswati was the founder of which of the following reform association?

- Ans
- 1. Veda Samaj
 - 2. Prarthana Samaj
 - 3. Arya Samaj
 - 4. Brahmo Samaj

Question ID : 264330190596
Option 1 ID : 264330745966
Option 2 ID : 264330745968
Option 3 ID : 264330745969
Option 4 ID : 264330745967
Status : Answered
Chosen Option : 4

Q.2 Which of the following is NOT a p block element of the periodic table?

- Ans
- 1. Magnesium
 - 2. Silicon
 - 3. Iodine
 - 4. Phosphorous

Question ID : 264330192033
Option 1 ID : 264330751489
Option 2 ID : 264330751486
Option 3 ID : 264330751488
Option 4 ID : 264330751487
Status : Answered
Chosen Option : 2

Q.3 Article 39A of the Indian Constitution deals with:

- Ans
- 1. Panchayati Raj
 - 2. Right to freedom
 - 3. Free legal aid
 - 4. Right to life

Question ID : 264330191920
Option 1 ID : 264330751037
Option 2 ID : 264330751034
Option 3 ID : 264330751036
Option 4 ID : 264330751035
Status : Answered
Chosen Option : 2

Q.4 Which of the following is the time period of the Sixth five year plan?

- Ans 1. 1992-1997
 2. 1980-1985
 3. 1974-1979
 4. 1985-1990

Question ID : 264330190846
Option 1 ID : 264330746741
Option 2 ID : 264330746739
Option 3 ID : 264330746738
Option 4 ID : 264330746740
Status : Answered
Chosen Option : 2

Q.5 Who is appointed as the new DGCA Chief in January 2023?

- Ans 1. D.C Sharma
 2. Vikram Dev Dutt
 3. Ravi Krishna
 4. Bir Singh Rai

Question ID : 264330191969
Option 1 ID : 264330751233
Option 2 ID : 264330751231
Option 3 ID : 264330751230
Option 4 ID : 264330751232
Status : Answered
Chosen Option : 2

Q.6 The National Savings (Monthly Income Account) Scheme, 2019 has been amended through _____.

- Ans 1.
National Savings (Monthly Income Account) (Amendment) Scheme, 2023
 2.
National Savings (Monthly Income Account) (Amendment) Scheme, 2020
 3.
National Savings (Monthly Income Account) (Amendment) Scheme, 2021
 4.
National Savings (Monthly Income Account) (Amendment) Scheme, 2019

Question ID : 264330190567
Option 1 ID : 264330745851
Option 2 ID : 264330745850
Option 3 ID : 264330745852
Option 4 ID : 264330745853
Status : Answered
Chosen Option : 2

Q.7 On which date, Major Dhyanchand's birthday is celebrated as National Sports Day in India?

- Ans
- 1. 30th November
 - 2. 29th August
 - 3. 1st March
 - 4. 2nd October

Question ID : 264330191923
Option 1 ID : 264330751048
Option 2 ID : 264330751046
Option 3 ID : 264330751049
Option 4 ID : 264330751047
Status : Answered
Chosen Option : 2

Q.8 From the _____ budget, the practice of showing budget deficit has been discontinued in India.

- Ans
- 1. 1995-96
 - 2. 1997-98
 - 3. 1996-97
 - 4. 1992-93

Question ID : 264330188789
Option 1 ID : 264330738959
Option 2 ID : 264330738961
Option 3 ID : 264330738960
Option 4 ID : 264330738958
Status : Answered
Chosen Option : 2

Q.9 As per 2011 Census, which of the following religions has the least population?

- Ans
- 1. Sikhism
 - 2. Buddhism
 - 3. Jainism
 - 4. Christianity

Question ID : 264330190833
Option 1 ID : 264330746687
Option 2 ID : 264330746686
Option 3 ID : 264330746689
Option 4 ID : 264330746688
Status : Answered
Chosen Option : 2

Q.10 The actor's performance in a _____ plays is completely speechless, the story is enacted using a vocabulary of facial expressions and hand-gestures.

- Ans**
- 1. Manipuri Dance
 - 2. Odissi Dance
 - 3. Bharatanatyam
 - 4. Kathakali

Question ID : 264330191791
Option 1 ID : 264330750521
Option 2 ID : 264330750519
Option 3 ID : 264330750520
Option 4 ID : 264330750518
Status : Answered
Chosen Option : 4

Q.11 Which of the following Indian cities is associated with the Sangam literature?

- Ans**
- 1. Sarnath
 - 2. Bodh Gaya
 - 3. Ujjain
 - 4. Madurai

Question ID : 264330191075
Option 1 ID : 264330747656
Option 2 ID : 264330747655
Option 3 ID : 264330747657
Option 4 ID : 264330747654
Status : Answered
Chosen Option : 1

Q.12 Who among the following received Sangeet Natak Akademi Award for his contribution to tribal dance Baiga?

- Ans**
- 1. Som Datt Battu
 - 2. Arjun Singh Dhurwey
 - 3. Hem Chandra Goswami
 - 4. Tankeswar Hazarika Borbayan

Question ID : 264330190638
Option 1 ID : 264330746135
Option 2 ID : 264330746136
Option 3 ID : 264330746137
Option 4 ID : 264330746134
Status : Answered
Chosen Option : 2

Q.13 Which island exists between India and Srilanka?

- Ans
- 1. Divar
 - 2. Latur
 - 3. Jangan
 - 4. Kachchatheevu

Question ID : 264330191915
Option 1 ID : 264330751015
Option 2 ID : 264330751017
Option 3 ID : 264330751016
Option 4 ID : 264330751014
Status : Answered
Chosen Option : 2

Q.14 Which of the following pair of sports persons – sports associated with is correct?

- I. Shefali Verma – Cricket
- II. Sushil Kumar – Wrestling

- Ans
- 1. Only I
 - 2. Only II
 - 3. Both I and II
 - 4. Neither I nor II

Question ID : 264330191102
Option 1 ID : 264330747762
Option 2 ID : 264330747763
Option 3 ID : 264330747764
Option 4 ID : 264330747765
Status : Answered
Chosen Option : 2

Q.15 “Ambubachi Mela” is associated with which of the following state?

- Ans
- 1. Kerala
 - 2. Tamilnadu
 - 3. Nagaland
 - 4. Assam

Question ID : 264330191011
Option 1 ID : 264330747400
Option 2 ID : 264330747401
Option 3 ID : 264330747398
Option 4 ID : 264330747399
Status : Answered
Chosen Option : 4

Q.16 Who was the father of green revolution in India?

- Ans
- 1. Sunderlal Bahuguna
 - 2. Panduranga Hegde
 - 3. C Subramanian
 - 4. MS Swaminathan

Question ID : 264330188750
Option 1 ID : 264330738804
Option 2 ID : 264330738805
Option 3 ID : 264330738803
Option 4 ID : 264330738802
Status : Answered
Chosen Option : 4

Q.17 The finance commission of India consist of a chairman and _____.

- Ans
- 1. 4 members
 - 2. 10 members
 - 3. 3 members
 - 4. 6 members

Question ID : 264330191961
Option 1 ID : 264330751199
Option 2 ID : 264330751201
Option 3 ID : 264330751198
Option 4 ID : 264330751200
Status : Answered
Chosen Option : 1

Q.18 Name the 2023 Padma Vibhushan awardee who has served as an External Affairs Minister and Karnataka Chief Minister.

- Ans
- 1. Somanahalli Mallaiah Krishna
 - 2. Kumar Mangalam Birla
 - 3. Mulayam Singh Yadav
 - 4. Dilip Mahalanabis

Question ID : 264330190949
Option 1 ID : 264330747150
Option 2 ID : 264330747151
Option 3 ID : 264330747152
Option 4 ID : 264330747153
Status : Answered
Chosen Option : 2

Q.19 Shakoor Khan and Pt. Ram Narayan are associated with which musical instrument?

- Ans
- 1. Been
 - 2. Sarod
 - 3. Sarangi
 - 4. Sitar

Question ID : 264330190657
Option 1 ID : 264330746211
Option 2 ID : 264330746212
Option 3 ID : 264330746210
Option 4 ID : 264330746213
Status : Answered
Chosen Option : 2

Q.20 If the ball, delivered by the bowler, not being a Wide, passes the striker without touching his/her bat or person, any runs completed by the batters from that delivery, or a boundary allowance, shall be credited as _____.

- Ans
- 1. Byes
 - 2. No ball
 - 3. Leg before wicket
 - 4. Leg runs

Question ID : 264330190923
Option 1 ID : 264330747047
Option 2 ID : 264330747048
Option 3 ID : 264330747049
Option 4 ID : 264330747046
Status : Answered
Chosen Option : 1

Section : Part-C-Elementary Mathematics

Q.1 By increasing 250 by 40%, the value obtained is

- Ans
- 1. 275
 - 2. 300
 - 3. 250
 - 4. 350

Question ID : 264330192394
Option 1 ID : 264330752931
Option 2 ID : 264330752932
Option 3 ID : 264330752930
Option 4 ID : 264330752933
Status : Answered
Chosen Option : 4

Q.2 A solid metallic sphere of radius 9 cm is melted and recast into a cone having diameter of the base as 9 cm. What is the height of the cone?

- Ans**
- 1. 100 cm
 - 2. 121 cm
 - 3. 144 cm
 - 4. 196 cm

Question ID : 264330188571
Option 1 ID : 264330738086
Option 2 ID : 264330738087
Option 3 ID : 264330738089
Option 4 ID : 264330738088
Status : Answered
Chosen Option : 2

Q.3 If Asha borrows Rs. 52000 from Lakshmi for a period of four years. What will be the rate of simple interest per annum if Asha has to pay an interest of Rs. 20800 at the end of four years?

- Ans**
- 1. 14%
 - 2. 12%
 - 3. 10%
 - 4. 16%

Question ID : 264330192482
Option 1 ID : 264330753284
Option 2 ID : 264330753283
Option 3 ID : 264330753282
Option 4 ID : 264330753285
Status : Answered
Chosen Option : 3

Q.4 A dealer sold a sofa set at a profit of 39%. Had he sold it for ₹ 1565 less, he would have gained 29%. For what value should he sell it in order to gain 27%?

- Ans**
- 1. ₹ 16,526.4
 - 2. ₹ 20,140.5
 - 3. ₹ 11,576.4
 - 4. ₹ 19,875.5

Question ID : 264330188423
Option 1 ID : 264330737562
Option 2 ID : 264330737560
Option 3 ID : 264330737563
Option 4 ID : 264330737561
Status : Answered
Chosen Option : 4

Q.5 Which of the following is not divisible by 33?

- Ans
- 1. 2145
 - 2. 2156
 - 3. 1914
 - 4. 2013

Question ID : 264330187922
Option 1 ID : 264330735618
Option 2 ID : 264330735619
Option 3 ID : 264330735616
Option 4 ID : 264330735617
Status : Answered
Chosen Option : 1

Q.6 Cost price of an article is Rs. 2500. If the loss percentage is 24 percent, then what is the selling price of the article?

- Ans
- 1. Rs. 1800
 - 2. Rs. 2000
 - 3. Rs. 1900
 - 4. Rs. 2200

Question ID : 264330187247
Option 1 ID : 264330732916
Option 2 ID : 264330732917
Option 3 ID : 264330732919
Option 4 ID : 264330732918
Status : Answered
Chosen Option : 3

Q.7 Pankaj is 40 percent less efficient than Rahul. If Rahul can make a computer in 16 days, then Pankaj can make the same computer in how many days?

- Ans
- 1. 80/9 days
 - 2. 40/7 days
 - 3. 80/3 days
 - 4. 80/7 days

Question ID : 264330191145
Option 1 ID : 264330747937
Option 2 ID : 264330747935
Option 3 ID : 264330747934
Option 4 ID : 264330747936
Status : Answered
Chosen Option : 3

Q.8 What is the value of $95 - 111 \times 21 \div 3 + 44 \times 6$?

- Ans
- 1. - 418
 - 2. - 416
 - 3. - 424
 - 4. - 412

Question ID : 264330187819
Option 1 ID : 264330735204
Option 2 ID : 264330735206
Option 3 ID : 264330735205
Option 4 ID : 264330735207
Status : Answered
Chosen Option : 1

Q.9 A dining table is listed at Rs.1500 is sold to a retailer at successive discounts of 18% and 15% by the wholesaler. Then the cost price of the dining table for retailer is :

- Ans
- 1. Rs. 1156.6
 - 2. Rs. 1045.5
 - 3. Rs. 1384.1
 - 4. Rs. 1256.7

Question ID : 264330192478
Option 1 ID : 264330753267
Option 2 ID : 264330753266
Option 3 ID : 264330753269
Option 4 ID : 264330753268
Status : Answered
Chosen Option : 2

Q.10 Marked price of a computer is Rs. 28000 and discount percentage is 5 percent. If the selling price of computer is Rs.26068, then what is the additional discount percentage?

- Ans
- 1. 3 percent
 - 2. 5 percent
 - 3. 2 percent
 - 4. 1 percent

Question ID : 264330187230
Option 1 ID : 264330732850
Option 2 ID : 264330732849
Option 3 ID : 264330732848
Option 4 ID : 264330732851
Status : Answered
Chosen Option : 3

Q.11 E alone can complete a work in 15 days. F and G together can complete the same work in 10 days. E, F and G together will complete the same work in how many days?

- Ans**
- 1. 12 days
 - 2. 6 days
 - 3. 8 days
 - 4. 10 days

Question ID : 264330187676
Option 1 ID : 264330734632
Option 2 ID : 264330734634
Option 3 ID : 264330734635
Option 4 ID : 264330734633
Status : Answered
Chosen Option : 2

Q.12 In a company there are 42 employees. The average salary of 27 employees is Rs. 4100 per month and average salary of 13 employees is Rs. 6100 per month. If the average salary of all employees is Rs. 7200 per month, then what is the per month average salary of the remaining 2 employees?

- Ans**
- 1. Rs. 54000
 - 2. Rs. 57800
 - 3. Rs. 44800
 - 4. Rs. 56200

Question ID : 264330187704
Option 1 ID : 264330734747
Option 2 ID : 264330734746
Option 3 ID : 264330734745
Option 4 ID : 264330734744
Status : Answered
Chosen Option : 4

Q.13 A wire of length 36 meters is cut into equal pieces, each measuring 4 meters. Determine the number of pieces.

- Ans**
- 1. 5
 - 2. 8
 - 3. 7
 - 4. 9

Question ID : 264330191691
Option 1 ID : 264330750118
Option 2 ID : 264330750121
Option 3 ID : 264330750120
Option 4 ID : 264330750119
Status : Answered
Chosen Option : 4

Q.14 Four numbers are in the ratio of 7 : 5 : 3 : 2. Sum of these number is 68. What will be the sum of the first and fourth number?

- Ans**
- 1. 24
 - 2. 32
 - 3. 48
 - 4. 36

Question ID : 264330188584
Option 1 ID : 264330738141
Option 2 ID : 264330738140
Option 3 ID : 264330738139
Option 4 ID : 264330738138
Status : Answered
Chosen Option : 4

Q.15 If 44 percent rate of compound interest compounded yearly is equivalent to the x percent rate of compound interest compounded half yearly, then what is the value of x?

- Ans**
- 1. 20 percent
 - 2. 18 percent
 - 3. 24 percent
 - 4. 22 percent

Question ID : 264330188627
Option 1 ID : 264330738311
Option 2 ID : 264330738312
Option 3 ID : 264330738313
Option 4 ID : 264330738310
Status : Answered
Chosen Option : 2

Q.16 The ratio of three numbers is 6 : 7 : 8. If the sum of the three numbers is 420, then what is the smallest number among the three numbers?

- Ans**
- 1. 190
 - 2. 120
 - 3. 140
 - 4. 180

Question ID : 264330187492
Option 1 ID : 264330733899
Option 2 ID : 264330733896
Option 3 ID : 264330733897
Option 4 ID : 264330733898
Status : Answered
Chosen Option : 2

Q.17 Few students standing in a row have weights of 85 kg, 86 kg, 53 kg, 65 kg, 78 kg, 93 kg, 75 kg and 73 kg. What is the average weight of those students?

- Ans**
- 1. 76 kg
 - 2. 68 kg
 - 3. 82 kg
 - 4. 78 kg

Question ID : 264330192392
Option 1 ID : 264330752925
Option 2 ID : 264330752924
Option 3 ID : 264330752923
Option 4 ID : 264330752922
Status : Answered
Chosen Option : 1

Q.18 What is the value of $2.5 \times 0.7 + 3.5 \times 0.6 + 4.5 \times 0.8$?

- Ans**
- 1. 5.35
 - 2. 9.25
 - 3. 6.55
 - 4. 7.45

Question ID : 264330187741
Option 1 ID : 264330734895
Option 2 ID : 264330734892
Option 3 ID : 264330734893
Option 4 ID : 264330734894
Status : Answered
Chosen Option : 4

Q.19 Ramesh walks at the speed of 16 km/hr and reaches his school 4 minutes late. If he walks at 20 km/hr, then he reaches 12 minutes before the scheduled time. What is the distance of his school from his house?

- Ans**
- 1. 8 km
 - 2. $64/3$ km
 - 3. 12 km
 - 4. 20 km

Question ID : 264330188568
Option 1 ID : 264330738077
Option 2 ID : 264330738075
Option 3 ID : 264330738074
Option 4 ID : 264330738076
Status : Answered
Chosen Option : 2

Q.20 A, B and C are three students. A got 25 percent more marks than B and 10 percent less marks than C. If B got 324 marks, then what are the marks got by C?

- Ans** 1. 450
 2. 360
 3. 420
 4. 480

Question ID : 264330187546
Option 1 ID : 264330734112
Option 2 ID : 264330734114
Option 3 ID : 264330734115
Option 4 ID : 264330734113
Status : Answered
Chosen Option : 1

Section : Part-D-English

Q.1 Select the sentence with no spelling errors.

- Ans** 1.
We believe that many of the lawsuits they have initiated would destroy the integrity of our elections.
 2.
We believe that many of the lawsuits they have initiated would destroy the integrity of our elections.
 3.
We believe that many of the lawsuits they have initiated would destroy the integrity of our elections.
 4.
We believe that many of the lawsuits they have initiated would destroy the integrity of our elections.

Question ID : 264330186168
Option 1 ID : 264330728932
Option 2 ID : 264330728933
Option 3 ID : 264330728934
Option 4 ID : 264330728935
Status : Not Answered
Chosen Option : --

Q.2 Select the most appropriate antonym of the given word.

Enigmatic

- Ans** 1. Puzzling
 2. Obvious
 3. Stumping
 4. Pretentious

Question ID : 264330186879
Option 1 ID : 264330731641
Option 2 ID : 264330731642
Option 3 ID : 264330731643
Option 4 ID : 264330731640
Status : Not Answered
Chosen Option : --

Q.3 Select the most appropriate word to fill in the blank.

_____ a child, he was tender and warm-hearted.

- Ans
- 1. Be
 - 2. Us
 - 3. As
 - 4. So

Question ID : 264330186155
Option 1 ID : 264330728886
Option 2 ID : 264330728884
Option 3 ID : 264330728885
Option 4 ID : 264330728887
Status : Not Answered
Chosen Option : --

Q.4 Identify the segment that contains a grammatical error. If there is no error, select 'No error'.

He had glittering eyes / - small, keen, and black - / and thinnest wide mottled lips.

- Ans
- 1. No error
 - 2. He had glittering eyes
 - 3. and thinnest wide mottled lips.
 - 4. - small, keen, and black -

Question ID : 264330186550
Option 1 ID : 264330730391
Option 2 ID : 264330730388
Option 3 ID : 264330730390
Option 4 ID : 264330730389
Status : Not Answered
Chosen Option : --

Q.5 Select the most appropriate word to fill in the blank.

There will _____ be handsome profits to be made.

- Ans
- 1. until
 - 2. still
 - 3. yet
 - 4. unto

Question ID : 264330186260
Option 1 ID : 264330729285
Option 2 ID : 264330729287
Option 3 ID : 264330729284
Option 4 ID : 264330729286
Status : Not Answered
Chosen Option : --

Q.6 Choose the idiom/phrase that can substitute the highlighted group of words meaningfully.

My sister wants everybody to **always do what she tells them to do.**

- Ans**
- 1. Make it big
 - 2. Dance to the tunes
 - 3. Hands are tied
 - 4. Till the cows come home

Question ID : 264330186713
Option 1 ID : 264330731010
Option 2 ID : 264330731011
Option 3 ID : 264330731009
Option 4 ID : 264330731008
Status : Not Answered
Chosen Option : --

Q.7 Find the part of the given sentence that has an error in it. If there is no error, choose 'No error'.

My partner and I has become increasingly alienated from each other.

- Ans**
- 1. alienated from each other.
 - 2. My partner and I
 - 3. No error
 - 4. has become increasingly

Question ID : 264330186591
Option 1 ID : 264330730546
Option 2 ID : 264330730544
Option 3 ID : 264330730547
Option 4 ID : 264330730545
Status : Not Answered
Chosen Option : --

Q.8 Select the most appropriate meaning of the given idiom.

Off the Beaten Track

- Ans**
- 1. Adventurous
 - 2. On a Strict budget
 - 3. Little-known
 - 4. Contagious

Question ID : 264330186523
Option 1 ID : 264330730285
Option 2 ID : 264330730287
Option 3 ID : 264330730284
Option 4 ID : 264330730286
Status : Not Answered
Chosen Option : --

Q.9 Select the word segment that substitutes (replaces) the bracketed word segment correctly and completes the sentence meaningfully. Select the option 'no correction required' if the sentence is correct as given.

She was even more dreadfully fond of Estella (than she had been when) I last saw them together.

- Ans**
- 1. than she has been where
 - 2. No correction required
 - 3. then she have been when
 - 4. than she has been when

Question ID : 264330186489
Option 1 ID : 264330730158
Option 2 ID : 264330730159
Option 3 ID : 264330730157
Option 4 ID : 264330730156
Status : Not Answered
Chosen Option : --

Q.10 Choose the word that is opposite in meaning to the given word.

Disputable

- Ans**
- 1. Indisputable
 - 2. Salubrious
 - 3. Dubious
 - 4. Negotiable

Question ID : 264330186142
Option 1 ID : 264330728835
Option 2 ID : 264330728833
Option 3 ID : 264330728834
Option 4 ID : 264330728832
Status : Not Answered
Chosen Option : --

Q.11 Select the most appropriate option for the given blank.

I _____ such an incredible opportunity because of you.

- Ans**
- 1. blanked
 - 2. kicked
 - 3. missed
 - 4. loosed

Question ID : 264330185665
Option 1 ID : 264330727018
Option 2 ID : 264330727019
Option 3 ID : 264330727017
Option 4 ID : 264330727016
Status : Not Answered
Chosen Option : --

Q.12 Choose the word that means the same as the given word.

Villain

- Ans 1. Antagonist
 2. Famous
 3. Clear
 4. Master

Question ID : 264330186036
Option 1 ID : 264330728428
Option 2 ID : 264330728429
Option 3 ID : 264330728430
Option 4 ID : 264330728431
Status : Not Answered
Chosen Option : --

Q.13 The sentence has been divided into three parts, identify the segment which contains a spelling error in the sentence given below. Choose no error if there is no error in the sentence.

The mysterious aura of the old bookstore/ held an irresistibel alure, drawing book lovers from/ far and wide to explore its hidden literary treasures.

- Ans 1. no error
 2. The mysterious aura of the old bookstore
 3. held an irresistibel alure, drawing book lovers from
 4. far and wide to explore its hidden literary treasures.

Question ID : 264330186441
Option 1 ID : 264330729975
Option 2 ID : 264330729972
Option 3 ID : 264330729973
Option 4 ID : 264330729974
Status : Not Answered
Chosen Option : --

Q.14 Fill in the blank with the most appropriate option.

So, I _____ out my 10 thousand dollars and I said, 'If I didn't get it, I'd start a bank by myself.'

- Ans 1. stuck
 2. stucked
 3. sticked
 4. stick

Question ID : 264330186908
Option 1 ID : 264330731752
Option 2 ID : 264330731754
Option 3 ID : 264330731755
Option 4 ID : 264330731753
Status : Not Answered
Chosen Option : --

Q.15 Improve the underlined part of the sentence. Choose 'No improvement' as an answer if the sentence is grammatically correct.

They often drinks wine with their meals.

- Ans**
- 1. often drunken
 - 2. No improvement
 - 3. often drunk
 - 4. often drink

Question ID : 264330186763

Option 1 ID : 264330731201

Option 2 ID : 264330731203

Option 3 ID : 264330731200

Option 4 ID : 264330731202

Status : Not Answered

Chosen Option : --

Comprehension:

Read the passage carefully and select the correct answer for the given blanks out of the four alternatives.

Coal and natural gas-fired power plants (1) _____ electricity. Oil-based products such as gasoline, diesel fuel, and aviation fuel provide most of the energy (2) _____ in transportation. The industry also uses fossil fuels to (3) _____ power and heat needed by industrial processes. Residential and (4) _____ buildings use electricity for air-conditioning and lighting and oil and natural gas (5) _____ heating.

SubQuestion No : 16

Q.16 Select the most appropriate option for blank (1)

- Ans**
- 1. curtail
 - 2. impede
 - 3. prompt
 - 4. generate

Question ID : 264330185590

Option 1 ID : 264330726728

Option 2 ID : 264330726731

Option 3 ID : 264330726730

Option 4 ID : 264330726729

Status : Not Answered

Chosen Option : --

Comprehension:

Read the passage carefully and select the correct answer for the given blanks out of the four alternatives.

Coal and natural gas-fired power plants (1) _____ electricity. Oil-based products such as gasoline, diesel fuel, and aviation fuel provide most of the energy (2) _____ in transportation. The industry also uses fossil fuels to (3) _____ power and heat needed by industrial processes. Residential and (4) _____ buildings use electricity for air-conditioning and lighting and oil and natural gas (5) _____ heating.

SubQuestion No : 17

Q.17 Select the most appropriate option for blank (2)

- Ans
- 1. is using
 - 2. useless
 - 3. used
 - 4. until

Question ID : 264330185591

Option 1 ID : 264330726733

Option 2 ID : 264330726732

Option 3 ID : 264330726734

Option 4 ID : 264330726735

Status : Not Answered

Chosen Option : --

Comprehension:

Read the passage carefully and select the correct answer for the given blanks out of the four alternatives.

Coal and natural gas-fired power plants (1) _____ electricity. Oil-based products such as gasoline, diesel fuel, and aviation fuel provide most of the energy (2) _____ in transportation. The industry also uses fossil fuels to (3) _____ power and heat needed by industrial processes. Residential and (4) _____ buildings use electricity for air-conditioning and lighting and oil and natural gas (5) _____ heating.

SubQuestion No : 18

Q.18 Select the most appropriate option for blank (3)

- Ans
- 1. permit
 - 2. probate
 - 3. peruse
 - 4. produce

Question ID : 264330185592

Option 1 ID : 264330726738

Option 2 ID : 264330726739

Option 3 ID : 264330726736

Option 4 ID : 264330726737

Status : Not Answered

Chosen Option : --

Comprehension:

Read the passage carefully and select the correct answer for the given blanks out of the four alternatives.

Coal and natural gas-fired power plants (1)_____ electricity. Oil-based products such as gasoline, diesel fuel, and aviation fuel provide most of the energy (2)_____ in transportation. The industry also uses fossil fuels to (3)_____ power and heat needed by industrial processes. Residential and (4)_____ buildings use electricity for air-conditioning and lighting and oil and natural gas (5)_____ heating.

SubQuestion No : 19

Q.19 Select the most appropriate option for blank (4)

- Ans
- 1. Privately
 - 2. Commercial
 - 3. Natural
 - 4. Demarcate

Question ID : 264330185593

Option 1 ID : 264330726741

Option 2 ID : 264330726742

Option 3 ID : 264330726743

Option 4 ID : 264330726740

Status : Not Answered

Chosen Option : --

Comprehension:

Read the passage carefully and select the correct answer for the given blanks out of the four alternatives.

Coal and natural gas-fired power plants (1)_____ electricity. Oil-based products such as gasoline, diesel fuel, and aviation fuel provide most of the energy (2)_____ in transportation. The industry also uses fossil fuels to (3)_____ power and heat needed by industrial processes. Residential and (4)_____ buildings use electricity for air-conditioning and lighting and oil and natural gas (5)_____ heating.

SubQuestion No : 20

Q.20 Select the most appropriate option for blank (5)

- Ans
- 1. for
 - 2. in
 - 3. to
 - 4. of

Question ID : 264330185594

Option 1 ID : 264330726747

Option 2 ID : 264330726745

Option 3 ID : 264330726746

Option 4 ID : 264330726744

Status : Not Answered

Chosen Option : --

Q.1 निम्नलिखित वाक्य में, उस वाक्यांश को पहचानिए जिसमें मात्राओं से संबंधित अशुद्धियाँ हैं। यदि कोई गलती नहीं है तो 'कोई त्रुटि नहीं है' का चुनाव कीजिए।

मोबाइल फ़ोन हमारे जीवन का अभिन्न अंग/ हो गया हो, इसके अभाव को हमारे/ अनेको महत्वपूर्ण काम रुक जाते हैं।

Ans

- ✓ 1. हो गया हो, इसके अभाव को हमारे
- ✗ 2. अनेकों महत्वपूर्ण काम रुक जाते हैं
- ✗ 3. मोबाइल फ़ोन हमारे जीवन का अभिन्न अंग
- ✗ 4. कोई त्रुटि नहीं है

Question ID : 264330189705

Option 1 ID : 264330742475

Option 2 ID : 264330742476

Option 3 ID : 264330742474

Option 4 ID : 264330742477

Status : Answered

Chosen Option : 1

Q.2 दिए गए वाक्यांश के लिए सार्थक शब्द ज्ञात कीजिए।

वह सूचना जो सरकार की तरफ से जारी हो

Ans

- ✗ 1. अधिनियम
- ✗ 2. अध्यादेश
- ✓ 3. अधिसूचना
- ✗ 4. अधिकृत

Question ID : 264330188297

Option 1 ID : 264330737077

Option 2 ID : 264330737076

Option 3 ID : 264330737079

Option 4 ID : 264330737078

Status : Answered

Chosen Option : 2

Q.3 निम्नलिखित प्रश्न में, चार विकल्पों में से, उस विकल्प का चयन करें जो रिक्त स्थान के लिए सही भाववाचक संज्ञा वाला

विकल्प हो।

वह बड़ा ही शांत लड़का है, _____ से उसका दूर-दूर से कोई नाता नहीं।

Ans

- ✓ 1. लड़ाई
- ✗ 2. थकना
- ✗ 3. लड़ना
- ✗ 4. खेलना

Question ID : 264330189835

Option 1 ID : 264330742971

Option 2 ID : 264330742970

Option 3 ID : 264330742973

Option 4 ID : 264330742972

Status : Answered

Chosen Option : 1

Q.4 दिए गए शब्द का विलोम शब्द ज्ञात कीजिए।

विद्वान

- Ans
- ✗ 1. मर्मज्ञ
 - ✗ 2. महात्मा
 - ✗ 3. परम
 - ✓ 4. मूर्ख

Question ID : 264330189008

Option 1 ID : 264330739819

Option 2 ID : 264330739821

Option 3 ID : 264330739820

Option 4 ID : 264330739818

Status : Answered

Chosen Option : 4

Q.5 निम्नलिखित प्रश्न में, चार विकल्पों में से, उस विकल्प का चयन करें जो दी गई लोकोक्ति का सही अर्थ वाला विकल्प है।

छप्पर पर फूस नहीं, इयोढ़ी पर नाच

- Ans
- ✓ 1. दिखावटी ठाट-बाट परन्तु वास्तविकता में कुछ भी नहीं
 - ✗ 2. अयोग्य के पास योग्य वस्तु का होना
 - ✗ 3. खुली आँखों से सपने देखकर खुशी व्यक्त करना
 - ✗ 4. धनी व्यक्ति के सब मित्र होते हैं

Question ID : 264330188367

Option 1 ID : 264330737347

Option 2 ID : 264330737344

Option 3 ID : 264330737346

Option 4 ID : 264330737345

Status : Answered

Chosen Option : 1

Q.6 निम्नलिखित प्रश्न में, चार विकल्पों में से, उस विकल्प का चयन करें जो कोष्ठक में दिए गए शब्द के तत्सम रूप का सही विकल्प है।

पूजा पाठ से संबंधित कार्य को (नेम) _____ से करना चाहिए।

- Ans
- ✓ 1. नियम
 - ✗ 2. मन
 - ✗ 3. हमेशा
 - ✗ 4. प्रतिदिन

Question ID : 264330189603

Option 1 ID : 264330742086

Option 2 ID : 264330742088

Option 3 ID : 264330742089

Option 4 ID : 264330742087

Status : Answered

Chosen Option : 2

Q.7 दिए गए वाक्य में उचित पर्यायवाची शब्द का चयन करके रिक्त स्थान की पूर्ति करें।

_____ (शुभ) काम करने में देरी कैसी।

Ans

- ✓ 1. मंगल
- ✗ 2. उजला
- ✗ 3. ज्ञान
- ✗ 4. महाराजा

Question ID : 264330190057

Option 1 ID : 264330743816

Option 2 ID : 264330743815

Option 3 ID : 264330743817

Option 4 ID : 264330743814

Status : Answered

Chosen Option : 1

Q.8 दिए गए वाक्य में उचित पर्यायवाची शब्द का चयन करके रिक्त स्थान की पूर्ति करें।

_____ (सौम्य) व्यवहार ही मनुष्य को आगे लेकर जाता है।

Ans

- ✗ 1. झुरभि
- ✗ 2. व्यक्त
- ✓ 3. नम्र
- ✗ 4. अर्चना

Question ID : 264330189112

Option 1 ID : 264330740217

Option 2 ID : 264330740216

Option 3 ID : 264330740215

Option 4 ID : 264330740214

Status : Answered

Chosen Option : 3

Q.9 दिए गए वाक्य में रेखांकित शब्दों के लिए सही शब्दों वाले विकल्प का चयन करें।

उच्चारण शुद्ध रखना भाषा की पहली आवश्यकता है।

Ans

- ✓ 1. उच्चारण शुद्ध रखना भाषा की पहली आवश्यकता है।
- ✗ 2. उच्चारण शुद्ध रखना भाषा की पहली आवश्यकता है।
- ✗ 3. उच्चर्ण शुद्ध रखना भाषा की पहली आवश्यकता है।
- ✗ 4. परिवर्तन की आवश्यकता नहीं है।

Question ID : 264330188185

Option 1 ID : 264330736653

Option 2 ID : 264330736652

Option 3 ID : 264330736654

Option 4 ID : 264330736655

Status : Answered

Chosen Option : 2

Q.10 निम्नलिखित प्रश्न में, चार विकल्पों में से, उस विकल्प का चयन करें जो कोष्ठक में दिए गए शब्द के विलोम शब्द का सही विकल्प है।
मेरे पड़ोसी बड़े ही (दुर्जन) _____ व्यक्ति हैं।

- Ans
- 1. खल
 - 2. सज्जन
 - 3. कुराज
 - 4. असफल

Question ID : 264330189555
Option 1 ID : 264330741902
Option 2 ID : 264330741903
Option 3 ID : 264330741905
Option 4 ID : 264330741904
Status : Answered
Chosen Option : 2

Q.11 दिए गए वाक्य में रेखांकित शब्दों के लिए सही शब्दों वाले विकल्प का चयन करें।
खेती का आधुनिकीकरण करना जरूरी है।

- Ans
- 1. खेती का आधुनिकीकरण जरूरी है।
 - 2. परिवर्तन की आवश्यकता नहीं है।
 - 3. खेती का आधुनिकीकरण करने जरूरी है।
 - 4. खेती का आधुनिकीकरण करनी जरूरी है।

Question ID : 264330190068
Option 1 ID : 264330743860
Option 2 ID : 264330743861
Option 3 ID : 264330743859
Option 4 ID : 264330743858
Status : Answered
Chosen Option : 1

Q.12 निम्नलिखित वाक्य में, उस वाक्यांश को पहचानिए जिसमें मात्राओं से संबंधित अशुद्धियाँ हैं। यदि कोई गलती नहीं है तो 'कोई त्रुटि नहीं है' का चुनाव कीजिए।
प्रदूषण और ग्लोबल वार्मिंग से युक्त वातावरण में/ सकारात्मक बदलावों को लाने के लिए विद्यार्थियों के रूप में/ किसी पर देश से युवा सबसे बड़ी उम्मीद है।

- Ans
- 1. कोई त्रुटि नहीं है
 - 2. किसी पर देश से युवा सबसे बड़ी उम्मीद है
 - 3. प्रदूषण और ग्लोबल वार्मिंग से युक्त वातावरण में
 - 4. सकारात्मक बदलावों को लाने के लिए विद्यार्थियों के रूप में

Question ID : 264330189685
Option 1 ID : 264330742401
Option 2 ID : 264330742400
Option 3 ID : 264330742398
Option 4 ID : 264330742399
Status : Answered
Chosen Option : 2

Q.13 निम्नलिखित प्रश्न में, दिए गए चार विकल्पों में से, उस विकल्प का चयन करें जो दिए गए मुहावरे के अर्थ को सर्वश्रेष्ठ रूप से व्यक्त करता है।

मुट्टी गरम होना

- Ans**
- 1. सुख का अनुभव
 - 2. पिटाई करना
 - 3. ठंड से बचना
 - 4. धन की प्राप्ति

Question ID : 264330189136

Option 1 ID : 264330740307

Option 2 ID : 264330740309

Option 3 ID : 264330740306

Option 4 ID : 264330740308

Status : Answered

Chosen Option : 4

Q.14 दिए गए वाक्य का वह भाग ज्ञात करें, जिसमें कोई त्रुटि है।

चाहे तुम अब कुछ भी कहो पर मेरे को यह काम नहीं करना।

- Ans**
- 1. चाहे तुम कुछ
 - 2. कहो अब
 - 3. मेरे को यह
 - 4. काम नहीं करना

Question ID : 264330188226

Option 1 ID : 264330736808

Option 2 ID : 264330736809

Option 3 ID : 264330736810

Option 4 ID : 264330736811

Status : Answered

Chosen Option : 3

Q.15 दिए गए वाक्य में उचित देशज-विदेशज शब्द का चयन करके रिक्त स्थान की पूर्ति कीजिए।

तुम्हारा _____ कल आ जाएगा।

- Ans**
- 1. ऑर्डर
 - 2. अपील
 - 3. इंच
 - 4. मिल

Question ID : 264330189119

Option 1 ID : 264330740245

Option 2 ID : 264330740243

Option 3 ID : 264330740242

Option 4 ID : 264330740244

Status : Answered

Chosen Option : 1

Comprehension:

नीचे दिए गए गद्य में कुछ शब्द छोड़ दिए गए हैं और प्रत्येक रिक्त स्थान के चार विकल्प दिए गए हैं। इन चारों में से कौन सा विकल्प रिक्त स्थान की पूर्ति करेगा-

जैसे ही हम (1)_____ के आगरा शहर का नाम सुनते हैं, सबसे पहले हमारे (2)_____ में ताजमहल ही आता है। सफेद (3)_____ से बना यह महल, (4)_____ प्रेम की निशानी है। ताजमहल का निर्माण मुगल (5)_____ शाहजहाँ ने करवाया था। यह दुनिया के सात अजूबों में से एक है।

SubQuestion No : 16

Q.16 रिक्त 1 के लिए सबसे उपयुक्त विकल्प का चयन कीजिए।

- Ans
- ✓ 1. भारत
 - ✗ 2. दुनिया
 - ✗ 3. विश्राम
 - ✗ 4. अनोखा

Question ID : 264330192812

Option 1 ID : 264330754599

Option 2 ID : 264330754598

Option 3 ID : 264330754601

Option 4 ID : 264330754600

Status : Answered

Chosen Option : 1

Comprehension:

नीचे दिए गए गद्य में कुछ शब्द छोड़ दिए गए हैं और प्रत्येक रिक्त स्थान के चार विकल्प दिए गए हैं। इन चारों में से कौन सा विकल्प रिक्त स्थान की पूर्ति करेगा-

जैसे ही हम (1)_____ के आगरा शहर का नाम सुनते हैं, सबसे पहले हमारे (2)_____ में ताजमहल ही आता है। सफेद (3)_____ से बना यह महल, (4)_____ प्रेम की निशानी है। ताजमहल का निर्माण मुगल (5)_____ शाहजहाँ ने करवाया था। यह दुनिया के सात अजूबों में से एक है।

SubQuestion No : 17

Q.17 रिक्त 2 के लिए सबसे उपयुक्त विकल्प का चयन कीजिए।

- Ans
- ✗ 1. गर्दन
 - ✗ 2. परीक्षा
 - ✗ 3. अंकुश
 - ✓ 4. ज़हन

Question ID : 264330192813

Option 1 ID : 264330754603

Option 2 ID : 264330754604

Option 3 ID : 264330754605

Option 4 ID : 264330754602

Status : Answered

Chosen Option : 4

Comprehension:

नीचे दिए गए गद्य में कुछ शब्द छोड़ दिए गए हैं और प्रत्येक रिक्त स्थान के चार विकल्प दिए गए हैं। इन चारों में से कौन सा विकल्प रिक्त स्थान की पूर्ति करेगा-

जैसे ही हम (1)_____ के आगरा शहर का नाम सुनते हैं, सबसे पहले हमारे (2)_____ में ताजमहल ही आता है। सफेद (3)_____ से बना यह महल, (4)_____ प्रेम की निशानी है। ताजमहल का निर्माण मुगल (5)_____ शाहजहाँ ने करवाया था। यह दुनिया के सात अजूबों में से एक है।

SubQuestion No : 18

Q.18 रिक्त 3 के लिए सबसे उपयुक्त विकल्प का चयन कीजिए।

Ans

- ✓ 1. संगमरमर
 ✗ 2. आकाश
 ✗ 3. कुमकुम
 ✗ 4. प्रकाश

Question ID : 264330192814

Option 1 ID : 264330754608

Option 2 ID : 264330754607

Option 3 ID : 264330754609

Option 4 ID : 264330754606

Status : Answered

Chosen Option : 1

Comprehension:

नीचे दिए गए गद्य में कुछ शब्द छोड़ दिए गए हैं और प्रत्येक रिक्त स्थान के चार विकल्प दिए गए हैं। इन चारों में से कौन सा विकल्प रिक्त स्थान की पूर्ति करेगा-

जैसे ही हम (1)_____ के आगरा शहर का नाम सुनते हैं, सबसे पहले हमारे (2)_____ में ताजमहल ही आता है। सफेद (3)_____ से बना यह महल, (4)_____ प्रेम की निशानी है। ताजमहल का निर्माण मुगल (5)_____ शाहजहाँ ने करवाया था। यह दुनिया के सात अजूबों में से एक है।

SubQuestion No : 19

Q.19 रिक्त 4 के लिए सबसे उपयुक्त विकल्प का चयन कीजिए।

Ans

- ✗ 1. कम
 ✗ 2. कवल
 ✗ 3. अनेक
 ✓ 4. असीम

Question ID : 264330192815

Option 1 ID : 264330754610

Option 2 ID : 264330754611

Option 3 ID : 264330754612

Option 4 ID : 264330754613

Status : Answered

Chosen Option : 4

Comprehension:

नीचे दिए गए गद्य में कुछ शब्द छोड़ दिए गए हैं और प्रत्येक रिक्त स्थान के चार विकल्प दिए गए हैं। इन चारों में से कौन सा विकल्प रिक्त स्थान की पूर्ति करेगा-

जैसे ही हम (1)_____ के आगरा शहर का नाम सुनते हैं, सबसे पहले हमारे (2)_____ में ताजमहल ही आता है। सफेद (3)_____ से बना यह महल, (4)_____ प्रेम की निशानी है। ताजमहल का निर्माण मुगल (5)_____ शाहजहाँ ने करवाया था। यह दुनिया के सात अजूबों में से एक है।

SubQuestion No : 20**Q.20 रिक्त 5 के लिए सबसे उपयुक्त विकल्प का चयन कीजिए।**

- Ans**
- 1. शासन
 - 2. सज़ा
 - 3. शासित
 - 4. शासक

Question ID : 264330192816

Option 1 ID : 264330754614

Option 2 ID : 264330754617

Option 3 ID : 264330754616

Option 4 ID : 264330754615

Status : Answered

Chosen Option : 4

Prepp
Your Personal Exam Guide