

**Constable GD in Central Armed Police Forces CAPFs SSF Rifleman GD in Assam  
Rifles Examination 2024**

Roll Number	
Candidate Name	
Venue Name	
Exam Date	05/03/2024
Exam Time	11:30 AM - 12:30 PM
Subject	Constable GD Examination 2024

## Section : Part-A-General Intelligence and Reasoning

**Q.1** In the following question, select the missing number from the given series.

483, 498, ?, 528, 543, 558

- Ans**
- 1. 513
  - 2. 510
  - 3. 508
  - 4. 520

Question ID : 264330191339

Option 1 ID : 264330748712

Option 2 ID : 264330748710

Option 3 ID : 264330748711

Option 4 ID : 264330748713

Status : Answered

Chosen Option : 1

**Q.2** If  $A \times B$  means A is the brother of B,  $A + B$  means A is the father of B,  $A - B$  means A is the sister of B and  $A \div B$  means A is the wife of B. If  $P \times Q + H + D - B + M$ , then how is B related to P?

- Ans**
- 1. Brother's son
  - 2. Daughter
  - 3. Sister's son
  - 4. Son

Question ID : 264330187046

Option 1 ID : 264330732113

Option 2 ID : 264330732115

Option 3 ID : 264330732112

Option 4 ID : 264330732114

Status : Answered

Chosen Option : 3

Q.3 In a certain code language, 'SOLD' is coded as 'OJHY'. What is the code for 'TEST' in that code language?

- Ans
- 1. PZPP
  - 2. PZOO
  - 3. PZOP
  - 4. PZNO

Question ID : 264330190532  
Option 1 ID : 264330745712  
Option 2 ID : 264330745711  
Option 3 ID : 264330745710  
Option 4 ID : 264330745713  
Status : Answered  
Chosen Option : 2

Q.4 In the following question, select the missing number from the given series.

84, 55, 86, 49, 90, ?

- Ans
- 1. 13
  - 2. 50
  - 3. 47
  - 4. 54

Question ID : 264330190119  
Option 1 ID : 264330744060  
Option 2 ID : 264330744059  
Option 3 ID : 264330744058  
Option 4 ID : 264330744061  
Status : Answered  
Chosen Option : 1

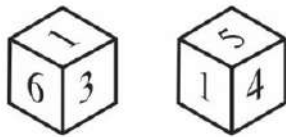
Q.5 Which of the following letter cluster will replace the blank (\_\_\_) in the given series?

BMM, DOO, \_\_\_\_, HSS, JUU

- Ans
- 1. FQQ
  - 2. FQP
  - 3. EQQ
  - 4. EQM

Question ID : 264330190708  
Option 1 ID : 264330746265  
Option 2 ID : 264330746262  
Option 3 ID : 264330746264  
Option 4 ID : 264330746263  
Status : Answered  
Chosen Option : 1

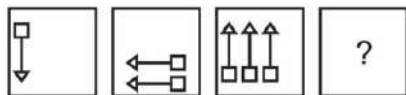
**Q.6** Two positions of a dice are given below. What will come on the face opposite to the face containing '6' on it?



- Ans**
- ✓ 1. 4
  - ✗ 2. 3
  - ✗ 3. 5
  - ✗ 4. 1

Question ID : 264330190505  
 Option 1 ID : 264330745604  
 Option 2 ID : 264330745603  
 Option 3 ID : 264330745605  
 Option 4 ID : 264330745602  
 Status : Answered  
 Chosen Option : 1

**Q.7** In the following question, select the figure which can be placed at the sign of question mark (?) from the given alternatives.



- Ans**
- ✗ 1.
  - ✓ 2.
  - ✗ 3.
  - ✗ 4.

Question ID : 264330190243  
 Option 1 ID : 264330744557  
 Option 2 ID : 264330744556  
 Option 3 ID : 264330744555  
 Option 4 ID : 264330744554  
 Status : Answered  
 Chosen Option : 2

**Q.8** Which two numbers should be interchanged to make the given equation correct?

$$7 - 8 \times 0 + 9 = 2$$

- Ans**
- 1. 7 and 2
  - 2. 8 and 9
  - 3. 2 and 0
  - 4. 8 and 7

Question ID : 264330192202

Option 1 ID : 264330752164

Option 2 ID : 264330752165

Option 3 ID : 264330752163

Option 4 ID : 264330752162

Status : Answered

Chosen Option : 3

**Q.9** A series is given with one term missing. Select the correct alternative from the given ones that will complete the series.

AQM, DTP, GWS, JZV, ?

- Ans**
- 1. MDW
  - 2. NCW
  - 3. NCX
  - 4. MCY

Question ID : 264330191348

Option 1 ID : 264330748748

Option 2 ID : 264330748749

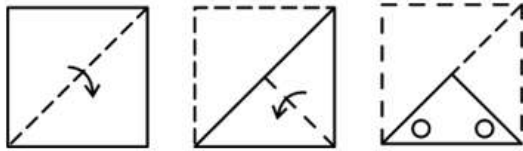
Option 3 ID : 264330748746

Option 4 ID : 264330748747

Status : Answered

Chosen Option : 4

**Q.10** A paper is folded and cut as shown below. How will it appear when unfolded?



Ans

- ✗ 1.
- ✓ 2.
- ✗ 3.
- ✗ 4.

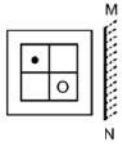
Question ID : 264330190426  
 Option 1 ID : 264330745287  
 Option 2 ID : 264330745286  
 Option 3 ID : 264330745288  
 Option 4 ID : 264330745289  
 Status : Answered  
 Chosen Option : 2

**Q.11** In a certain code language, 'HOTELS' is coded as 'INUDMR'. What is the code for 'INVEST' in that code language?

- ✗ 1. JNXDSR
- ✗ 2. JMWDSR
- ✓ 3. JMWDT S
- ✗ 4. JMWETR

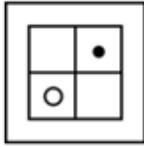
Question ID : 264330191553  
 Option 1 ID : 264330749566  
 Option 2 ID : 264330749567  
 Option 3 ID : 264330749569  
 Option 4 ID : 264330749568  
 Status : Answered  
 Chosen Option : 3

**Q.12** Select the correct mirror image of the given figure when the mirror MN is placed to the right side of the figure.

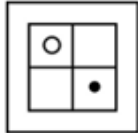


**Ans**

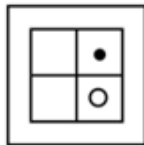
✓ 1.



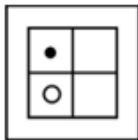
✗ 2.



✗ 3.



✗ 4.



Question ID : 264330191125

Option 1 ID : 264330747857

Option 2 ID : 264330747854

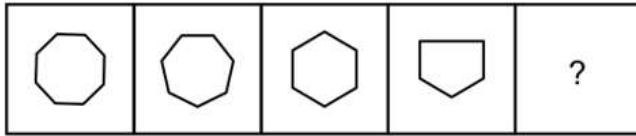
Option 3 ID : 264330747855

Option 4 ID : 264330747856

Status : Answered

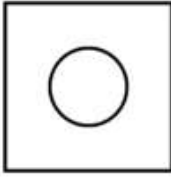
Chosen Option : 1

**Q.13** Select the figure that will replace the question mark (?) in the following figure series.

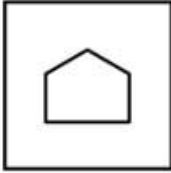


**Ans**

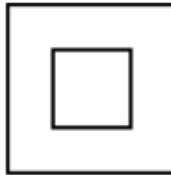
1.




2.



3.



4.



Question ID : 264330191583

Option 1 ID : 264330749687

Option 2 ID : 264330749689

Option 3 ID : 264330749688

Option 4 ID : 264330749686

Status : Answered

Chosen Option : 3

**Q.14** In the following question, select the related letter pair from the given alternatives.

RE : WJ :: ?

1. RE : NB

2. VI : RF

3. QD : VI

4. MZ : IT

Question ID : 264330187043

Option 1 ID : 264330732102

Option 2 ID : 264330732103

Option 3 ID : 264330732100

Option 4 ID : 264330732101

Status : Answered

Chosen Option : 3

**Q.15** Eight athletes Sunil, Abhishek, Mohit, Cheenu, Rahul, Tanu, Koyal and Ankit are sitting around a circular table facing opposite to the centre (not necessarily in the same order). Koyal is third to the left of Rahul. Tanu is third to the right of Cheenu. Mohit is second to the right of Sunil. Abhishek is second to the left of Cheenu. Tanu is second to the left of Sunil. Who is sitting second to the right of Cheenu?

- Ans**
- 1. Ankit
  - 2. Abhishek
  - 3. Sunil
  - 4. Tanu

Question ID : 264330190136

Option 1 ID : 264330744129

Option 2 ID : 264330744127

Option 3 ID : 264330744128

Option 4 ID : 264330744126

Status : Answered

Chosen Option : 1

**Q.16** In the following question below are given some statements followed by some conclusions based on those statements. Taking the given statements to be true even if they seem to be at variance from commonly known facts. Read all the conclusions and then decide which of the given conclusion(s) logically follows the given statements.

Statements:

I. Some T are Y.

II. All Y are Z.

Conclusions:

I. Some Z are not Y.

II. Some Z are T.

- Ans**
- 1. Neither conclusion follows
  - 2. Only conclusion II follows
  - 3. Both conclusions I and II follows
  - 4. Only conclusion I follows

Question ID : 264330191538

Option 1 ID : 264330749509

Option 2 ID : 264330749507

Option 3 ID : 264330749508

Option 4 ID : 264330749506

Status : Answered

Chosen Option : 3



**Q.17** Arrange the given words in the sequence in which they occur in the dictionary.

1. Context
2. Content
3. Contest
4. Contend
5. Contempt

- Ans**
- 1. 5,4,3,2,1
  - 2. 5,4,3,1,2
  - 3. 5,4,2,3,1
  - 4. 5,4,2,1,3

Question ID : 264330190249

Option 1 ID : 264330744579

Option 2 ID : 264330744581

Option 3 ID : 264330744578

Option 4 ID : 264330744580

Status : Answered

Chosen Option : 3

**Q.18** Five friends P, B, C, G and H are sitting around a circular table facing towards the centre. H is sitting to the immediate right of C. B sitting third to the left of H. P is not an immediate neighbour of C. Who is sitting on the immediate left of G?

- Ans**
- 1. B
  - 2. P
  - 3. H
  - 4. C

Question ID : 264330190335

Option 1 ID : 264330744922

Option 2 ID : 264330744924

Option 3 ID : 264330744923

Option 4 ID : 264330744925

Status : Answered

Chosen Option : 1

**Q.19** Select the option that is related to the fifth word in the same way as the fourth word is related to the third word, and the second word is related to the first word.

KASHMIR : PARADISE ON EARTH :: KULLU : VALLEY OF GODS :: DARJEELING : ?

- Ans**
- 1. CITY OF LAKES
  - 2. CITY OF HILLS
  - 3. CITY OF TEMPLES
  - 4. CITY OF BEACHES

Question ID : 264330190710

Option 1 ID : 264330746270

Option 2 ID : 264330746272

Option 3 ID : 264330746273

Option 4 ID : 264330746271

Status : Answered

Chosen Option : 2

**Q.20** Which two numbers should be interchanged to make the given equation correct?

$$20 - 5 \times 2 + 10 \div 4 = 14$$

- Ans**
- 1. 4 and 5
  - 2. 10 and 5
  - 3. 20 and 14
  - 4. 4 and 2

Question ID : 264330191601

Option 1 ID : 264330749761

Option 2 ID : 264330749760

Option 3 ID : 264330749759

Option 4 ID : 264330749758

Status : Answered

Chosen Option : 1

Section : Part-B-General Knowledge and General awareness

**Q.1** Pongal is a four-day-long harvest festival, which is celebrated at the harvest of crops like sugarcane and \_\_\_\_\_.

- Ans**
- 1. Rice
  - 2. Wheat
  - 3. Gram
  - 4. Mustard

Question ID : 264330190891

Option 1 ID : 264330746919

Option 2 ID : 264330746918

Option 3 ID : 264330746920

Option 4 ID : 264330746921

Status : Answered

Chosen Option : 1

**Q.2** Newlands law of octaves was only applicable upto which element?

- Ans**
- 1. Na
  - 2. K
  - 3. Mg
  - 4. Ca

Question ID : 264330188657

Option 1 ID : 264330738430

Option 2 ID : 264330738431

Option 3 ID : 264330738433

Option 4 ID : 264330738432

Status : Answered

Chosen Option : 4

Q.3 Who was the flag bearer for the opening ceremony of the Asian Games 2018?

- Ans
- 1. Sanjeev Rajput
  - 2. Neeraj Chopra
  - 3. Rani Rampal
  - 4. Deepak Kumar

Question ID : 264330191962  
Option 1 ID : 264330751205  
Option 2 ID : 264330751202  
Option 3 ID : 264330751203  
Option 4 ID : 264330751204  
Status : Answered  
Chosen Option : 1

Q.4 Who among the following is the Deputy National Security advisor appointed in January 2023?

- Ans
- 1. Ajit Doval
  - 2. Nehchal Sandhu
  - 3. Rajiv Gauba
  - 4. Pankaj Kumar Singh

Question ID : 264330191950  
Option 1 ID : 264330751154  
Option 2 ID : 264330751155  
Option 3 ID : 264330751156  
Option 4 ID : 264330751157  
Status : Answered  
Chosen Option : 2

Q.5 Which was the first bank established in India in 1770?

- Ans
- 1. Punjab National Bank
  - 2. Bank Of Hindustan
  - 3. Oudh commercial Bank
  - 4. State Bank of India

Question ID : 264330191785  
Option 1 ID : 264330750495  
Option 2 ID : 264330750497  
Option 3 ID : 264330750494  
Option 4 ID : 264330750496  
Status : Answered  
Chosen Option : 2

**Q.6** Rapid industrialization was the main objective of which of the following five-year plans of India?

- Ans**
- 1. Fourth five-year Plan
  - 2. Third five-year Plan
  - 3. Second five-year Plan
  - 4. First five-year Plan

Question ID : 264330190645  
Option 1 ID : 264330746165  
Option 2 ID : 264330746164  
Option 3 ID : 264330746163  
Option 4 ID : 264330746162  
Status : Answered  
Chosen Option : 3

**Q.7** According to the 2011 Census of India, the growth rate of population of Hindus was \_\_\_\_\_.

- Ans**
- 1. 19.8 percent
  - 2. 16.8 percent
  - 3. 22.8 percent
  - 4. 11.8 percent

Question ID : 264330190593  
Option 1 ID : 264330745956  
Option 2 ID : 264330745955  
Option 3 ID : 264330745957  
Option 4 ID : 264330745954  
Status : Answered  
Chosen Option : 3

**Q.8** Who was the social reformer and political leader who championed women's rights and played a significant role in the Widow Remarriage Act of 1856?

- Ans**
- 1. Bhagat Singh
  - 2. Ishwar Chandra Vidyasagar
  - 3. Dayananda Saraswati
  - 4. Swami Vivekananda

Question ID : 264330190956  
Option 1 ID : 264330747178  
Option 2 ID : 264330747180  
Option 3 ID : 264330747181  
Option 4 ID : 264330747179  
Status : Answered  
Chosen Option : 2

Q.9 The \_\_\_\_\_ Empire was established in 322/321 B.C. by the great king Chandragupta.

- Ans  1. Mauryan  
 2. Pala  
 3. Mughal  
 4. Nanda

Question ID : 264330191736  
Option 1 ID : 264330750299  
Option 2 ID : 264330750301  
Option 3 ID : 264330750298  
Option 4 ID : 264330750300  
Status : Answered  
Chosen Option : 1

Q.10 Who is the second woman officer from the medical branch of the Indian Air Force (IAF) to attain the esteemed rank of Air Marshal?

- Ans  1. Air Marshal Sadhna S Nair  
 2. Air Vice Marshal Punita Arora  
 3. Air Marshal Padma Bandopadhyay  
 4. Air Chief Marshal Rani Mishra

Question ID : 264330191469  
Option 1 ID : 264330749231  
Option 2 ID : 264330749232  
Option 3 ID : 264330749233  
Option 4 ID : 264330749230  
Status : Answered  
Chosen Option : 1

Q.11 What was the target growth rate of the first five-year plan in India?

- Ans  1. 3.1 percent  
 2. 1.1 percent  
 3. 4.1 percent  
 4. 2.1 percent

Question ID : 264330190586  
Option 1 ID : 264330745928  
Option 2 ID : 264330745926  
Option 3 ID : 264330745929  
Option 4 ID : 264330745927  
Status : Answered  
Chosen Option : 4

Q.12 Which of the following Indian Classical dancers was the youngest to receive the Padma Bhushan?

- Ans
- 1. Mallika Sarabhai
  - 2. Sonal Mansingh
  - 3. Rukmini Devi Arundale
  - 4. Mrinalini Sarabhai

Question ID : 264330190958  
Option 1 ID : 264330747186  
Option 2 ID : 264330747188  
Option 3 ID : 264330747189  
Option 4 ID : 264330747187  
Status : Answered  
Chosen Option : 3

Q.13 Which of the following Indian states has launched LAccMI scheme in 2023?

- Ans
- 1. Gujarat
  - 2. Madhya Pradesh
  - 3. Odisha
  - 4. Uttarakhand

Question ID : 264330190607  
Option 1 ID : 264330746011  
Option 2 ID : 264330746012  
Option 3 ID : 264330746010  
Option 4 ID : 264330746013  
Status : Not Answered  
Chosen Option : --

Q.14 Generally, the sex ratios have been calculated as the proportion of females to \_\_\_\_\_ males.

- Ans
- 1. 200
  - 2. 1000
  - 3. 100
  - 4. 500

Question ID : 264330190654  
Option 1 ID : 264330746200  
Option 2 ID : 264330746201  
Option 3 ID : 264330746198  
Option 4 ID : 264330746199  
Status : Answered  
Chosen Option : 2

Q.15 Asad Ali Khan is associated with which of the following musical instruments?

- Ans
- 1. Veena
  - 2. Rudra Veena
  - 3. Sitar
  - 4. Mohan Veena

Question ID : 264330190637  
Option 1 ID : 264330746133  
Option 2 ID : 264330746130  
Option 3 ID : 264330746132  
Option 4 ID : 264330746131  
Status : Answered  
Chosen Option : 3

Q.16 In freestyle wrestling, in which of the following situation does a wrestler is provided with 3 points?

Ans  1. Bringing the opponent into immediate danger

2. Holding of opponent on the ground

3.

Exceeding a throw of great height losing contact of the other opponent from the ground.

4. Placing the opponent in danger

Question ID : 264330188768  
Option 1 ID : 264330738875  
Option 2 ID : 264330738877  
Option 3 ID : 264330738876  
Option 4 ID : 264330738874  
Status : Answered  
Chosen Option : 3

Q.17 Which of the following won the Raja Bhalindra Singh Trophy in the National Games 2023?

- Ans
- 1. Haryana
  - 2. Services
  - 3. Maharashtra
  - 4. Kerala

Question ID : 264330190781  
Option 1 ID : 264330746480  
Option 2 ID : 264330746479  
Option 3 ID : 264330746481  
Option 4 ID : 264330746478  
Status : Not Answered  
Chosen Option : --

Q.18 From which state, the performing art 'Ottamthullal' belongs?

- Ans  1. Kerala  
 2. Jharkhand  
 3. Bihar  
 4. Assam

Question ID : 264330191751  
Option 1 ID : 264330750360  
Option 2 ID : 264330750358  
Option 3 ID : 264330750361  
Option 4 ID : 264330750359  
Status : Answered  
Chosen Option : 1

Q.19 The Right against self-incrimination fundamental right ensures that:

- Ans  1. No person can be compelled to provide evidence in court.  
 2.  
no person can be compelled to be a witness against themselves.  
 3. No person can be compelled to confess to a crime.  
 4.  
No person can be compelled to testify against someone else.

Question ID : 264330190939  
Option 1 ID : 264330747112  
Option 2 ID : 264330747110  
Option 3 ID : 264330747111  
Option 4 ID : 264330747113  
Status : Answered  
Chosen Option : 3

Q.20 Election Commission of India is a \_\_\_\_\_.

- Ans  1. constitutional body  
 2. Judicial Body  
 3. executive body  
 4. Statutory Body

Question ID : 264330191241  
Option 1 ID : 264330748318  
Option 2 ID : 264330748321  
Option 3 ID : 264330748319  
Option 4 ID : 264330748320  
Status : Answered  
Chosen Option : 4



**Q.1** The average of 31 results is 204. If the average of first 16 results is 219 and that of the last 16 results is 185, then what will be the 16th result?

- Ans**
- ✓ 1. 140
  - ✗ 2. 135
  - ✗ 3. 142
  - ✗ 4. 138

Question ID : 264330187884  
Option 1 ID : 264330735466  
Option 2 ID : 264330735467  
Option 3 ID : 264330735464  
Option 4 ID : 264330735465  
Status : Answered  
Chosen Option : 1

**Q.2** The ratio of incomes of Manoj and Paras is 12 : 7. If Paras gets Rs. 4000 less than Manoj, then what is the total income of Manoj and Paras?

- Ans**
- ✗ 1. Rs. 4000
  - ✓ 2. Rs. 15200
  - ✗ 3. Rs. 5600
  - ✗ 4. Rs. 9600

Question ID : 264330187831  
Option 1 ID : 264330735255  
Option 2 ID : 264330735252  
Option 3 ID : 264330735254  
Option 4 ID : 264330735253  
Status : Answered  
Chosen Option : 2

**Q.3** What is the value of  $5852 \div 11 - 41 \times 3 + 57$ ?

- Ans**
- ✓ 1. 466
  - ✗ 2. 458
  - ✗ 3. 452
  - ✗ 4. 462

Question ID : 264330187859  
Option 1 ID : 264330735367  
Option 2 ID : 264330735365  
Option 3 ID : 264330735364  
Option 4 ID : 264330735366  
Status : Answered  
Chosen Option : 1

Q.4 What is the value of  $1440 \div 4 - 1555 \div 5 + 21 \times 3$ ?

Ans  1. 112

2. 84

3. 92

4. 78

Question ID : 264330187579

Option 1 ID : 264330734247

Option 2 ID : 264330734245

Option 3 ID : 264330734246

Option 4 ID : 264330734244

Status : Answered

Chosen Option : 1

Q.5 If the number 4563A8 is divisible by 11, then what is the value of A?

Ans  1. 3

2. 7

3. 6

4. 5

Question ID : 264330187842

Option 1 ID : 264330735298

Option 2 ID : 264330735297

Option 3 ID : 264330735299

Option 4 ID : 264330735296

Status : Answered

Chosen Option : 4

Q.6 A number is decreased by 18% and the resulting number is again decreased by 50%. What is the final percentage of decrease?

Ans  1. 55%

2. 59%

3. 62%

4. 66%

Question ID : 264330191674

Option 1 ID : 264330750050

Option 2 ID : 264330750052

Option 3 ID : 264330750051

Option 4 ID : 264330750053

Status : Answered

Chosen Option : 2

**Q.7** The cost of diamond is directly proportional to the square of its weight. The cost of diamond is Rs. 69660. It break into two pieces whose weight are in the ratio of 4 : 5. What is the loss incurred because of the breakage?

- Ans**
- 1. Rs. 40000
  - 2. Rs. 24600
  - 3. Rs. 32200
  - 4. Rs. 34400

Question ID : 264330187612  
Option 1 ID : 264330734377  
Option 2 ID : 264330734379  
Option 3 ID : 264330734376  
Option 4 ID : 264330734378  
Status : Not Answered  
Chosen Option : --

**Q.8** If A has 155 pencils, B has 195 pencils and C has 175 pencils, then find the average number of pencils with A, B, and C.

- Ans**
- 1. 160
  - 2. 150
  - 3. 145
  - 4. 175

Question ID : 264330191652  
Option 1 ID : 264330749962  
Option 2 ID : 264330749963  
Option 3 ID : 264330749964  
Option 4 ID : 264330749965  
Status : Answered  
Chosen Option : 4

**Q.9** Umesh scored 15 percent marks in an exam and failed by 30 marks. If he scores 60 percent marks, then he gets 15 marks more than passing marks. What should be the passing marks for the exam?

- Ans**
- 1. 45
  - 2. 44
  - 3. 40
  - 4. 50

Question ID : 264330187246  
Option 1 ID : 264330732912  
Option 2 ID : 264330732913  
Option 3 ID : 264330732914  
Option 4 ID : 264330732915  
Status : Answered  
Chosen Option : 1

**Q.10** Y can complete a work in 20 days and Z can complete the same work in 10 days. If both of them work together, then in 2 days what percent work of the total work will be completed?

- Ans**
- 1. 35 percent
  - 2. 33.3 percent
  - 3. 45 percent
  - 4. 30 percent

Question ID : 264330190104  
Option 1 ID : 264330743998  
Option 2 ID : 264330744000  
Option 3 ID : 264330744001  
Option 4 ID : 264330743999  
Status : Answered  
Chosen Option : 4

**Q.11** Deepak alone can do a work in 64 hours. Deepak and Rahul together can do the same work in 32 hours. Rahul and Karan together can do the same work in 4 hours. In how many hours can Karan alone do the same work?

- Ans**
- 1. 64/15 hours
  - 2. 63/8 hours
  - 3. 3.5 hours
  - 4. 64/17 hours

Question ID : 264330187757  
Option 1 ID : 264330734957  
Option 2 ID : 264330734959  
Option 3 ID : 264330734956  
Option 4 ID : 264330734958  
Status : Answered  
Chosen Option : 1

**Q.12** A sum invested at the same rate of compound interest (compounding annually) becomes Rs. 10800 in 4 years and Rs. 32400 in 8 years. What is the sum?

- Ans**
- 1. Rs. 3800
  - 2. Rs. 4200
  - 3. Rs. 3600
  - 4. Rs. 4100

Question ID : 264330187534  
Option 1 ID : 264330734066  
Option 2 ID : 264330734064  
Option 3 ID : 264330734065  
Option 4 ID : 264330734067  
Status : Answered  
Chosen Option : 3

**Q.13** A certain sum of money amounts to ₹ 2700 in 2 years and to ₹ 3150 in 3 years at a certain rate of simple interest. Find the rate of interest per annum.

- Ans**
- 1. 35%
  - 2. 22%
  - 3. 25%
  - 4. 30%

Question ID : 264330191662  
Option 1 ID : 264330750005  
Option 2 ID : 264330750003  
Option 3 ID : 264330750004  
Option 4 ID : 264330750002  
Status : Not Answered  
Chosen Option : --

**Q.14** A train of length 810 metres crosses a another train of length 1220 metres in 29 seconds. Both the trains are running in the opposite directions. If the speed of both the trains is same, then what is the speed?

- Ans**
- 1. 118 km/hr
  - 2. 126 km/hr
  - 3. 145 km/hr
  - 4. 137 km/hr

Question ID : 264330187895  
Option 1 ID : 264330735508  
Option 2 ID : 264330735509  
Option 3 ID : 264330735510  
Option 4 ID : 264330735511  
Status : Answered  
Chosen Option : 2

**Q.15** The perimeter of the top of a rectangular table is 84 metre and its area is 432 metre<sup>2</sup>. What is the length of its diagonal?

- Ans**
- 1. 24 metre
  - 2. 18 metre
  - 3. 35 metre
  - 4. 30 metre

Question ID : 264330187678  
Option 1 ID : 264330734643  
Option 2 ID : 264330734640  
Option 3 ID : 264330734641  
Option 4 ID : 264330734642  
Status : Not Answered  
Chosen Option : --

**Q.16** The cost price of 44 jars is equal to the selling price of 24 jars. What is the profit percentage in this transaction?

- Ans**
- 1. 47.5%
  - 2. 83.3%
  - 3. 75.4%
  - 4. 85.6%

Question ID : 264330192397  
Option 1 ID : 264330752945  
Option 2 ID : 264330752943  
Option 3 ID : 264330752942  
Option 4 ID : 264330752944  
Status : Answered  
Chosen Option : 2

**Q.17** A table is sold at a discount of 35 percent. If the marked price of the table is Rs. 2400, then what is the selling price of the table?

- Ans**
- 1. Rs. 1420
  - 2. Rs. 1250
  - 3. Rs. 840
  - 4. Rs. 1560

Question ID : 264330188009  
Option 1 ID : 264330735966  
Option 2 ID : 264330735965  
Option 3 ID : 264330735964  
Option 4 ID : 264330735967  
Status : Answered  
Chosen Option : 4

**Q.18** Aakash buys a mobile for ₹15000 and sells it to Neha at a 20% profit. Neha then sells the same mobile to Rohit at a 15% profit. Rohit broke the mobile and then sold it to Karan at a 25% loss. Find the amount paid by Karan.

- Ans**
- 1. Rs. 15055
  - 2. Rs. 15025
  - 3. Rs. 15525
  - 4. Rs. 15255

Question ID : 264330188520  
Option 1 ID : 264330737883  
Option 2 ID : 264330737884  
Option 3 ID : 264330737882  
Option 4 ID : 264330737885  
Status : Answered  
Chosen Option : 3

**Q.19** Two successive discounts of 20 percent and 30 percent are given by Rajat on a shirt. If the marked price of the shirt is Rs. 800, then what is the value of discount?

- Ans**
- 1. Rs. 366
  - 2. Rs. 360
  - 3. Rs. 352
  - 4. Rs. 358

Question ID : 264330187650  
 Option 1 ID : 264330734529  
 Option 2 ID : 264330734528  
 Option 3 ID : 264330734530  
 Option 4 ID : 264330734531  
 Status : Answered  
 Chosen Option : 3

**Q.20**

What is the value of  $\left(\frac{143}{11} + \frac{225}{15} - \frac{39}{13}\right) \times \left(\frac{784}{56} + \frac{96}{24} - \frac{81}{27}\right)$  ?

- Ans**
- 1. 375
  - 2. 475
  - 3. 625
  - 4. 725

Question ID : 264330187300  
 Option 1 ID : 264330733131  
 Option 2 ID : 264330733130  
 Option 3 ID : 264330733129  
 Option 4 ID : 264330733128  
 Status : Answered  
 Chosen Option : 1

Section : Part-D-English

**Q.1** Choose the correct words to complete the sentence:

In the midst of the (1) \_\_\_\_\_ forest, the hiker suddenly realized that he had lost his (2) \_\_\_\_\_ and had no sense of (3) \_\_\_\_\_.

- Ans**
- 1. dense, map, direction
  - 2. deep, flashlight, altitude
  - 3. thick, compass, velocity
  - 4. shrewd, gun, dangers

Question ID : 264330186386  
 Option 1 ID : 264330729764  
 Option 2 ID : 264330729766  
 Option 3 ID : 264330729765  
 Option 4 ID : 264330729767  
 Status : Answered  
 Chosen Option : 1

Q.2 Select the most appropriate meaning of the given idiom.

Mad as a hatter

- Ans
- 1. To cause trouble.
  - 2. Completely Crazy
  - 3. To be alert
  - 4. Fast asleep

Question ID : 264330186524  
Option 1 ID : 264330730291  
Option 2 ID : 264330730289  
Option 3 ID : 264330730290  
Option 4 ID : 264330730288  
Status : Answered  
Chosen Option : 2

Q.3 Select the most appropriate word to fill in the blank.

She gave me \_\_\_\_\_ antique bed cover.

- Ans
- 1. than
  - 2. enough
  - 3. a
  - 4. an

Question ID : 264330186198  
Option 1 ID : 264330729050  
Option 2 ID : 264330729051  
Option 3 ID : 264330729049  
Option 4 ID : 264330729048  
Status : Answered  
Chosen Option : 4

Q.4 Improve the underlined part of the sentence. Choose 'No improvement' as an answer if the sentence is grammatically correct.

They'll be here tomorrow.

- Ans
- 1. is here
  - 2. are here
  - 3. being here
  - 4. No improvement

Question ID : 264330186152  
Option 1 ID : 264330728874  
Option 2 ID : 264330728873  
Option 3 ID : 264330728872  
Option 4 ID : 264330728875  
Status : Answered  
Chosen Option : 4



Q.5 Select the most appropriate synonym of the given bracketed word.  
She (woke up) and realized she had no recollection of the past several hours.

- Ans
- 1. Activated
  - 2. Challenged
  - 3. Awakened
  - 4. Moved

Question ID : 264330186583  
Option 1 ID : 264330730512  
Option 2 ID : 264330730514  
Option 3 ID : 264330730513  
Option 4 ID : 264330730515  
Status : Answered  
Chosen Option : 3

Q.6 Select the most appropriate option for the given blank.

Don't you ever \_\_\_\_\_ your voice at me.

- Ans
- 1. raise
  - 2. put
  - 3. push
  - 4. erupt

Question ID : 264330186148  
Option 1 ID : 264330728856  
Option 2 ID : 264330728858  
Option 3 ID : 264330728857  
Option 4 ID : 264330728859  
Status : Answered  
Chosen Option : 1

Q.7 Select the most appropriate option for the given blank.

Changing his tactics he tried to \_\_\_\_\_ him and offered him money.

- Ans
- 1. bribed
  - 2. bribing
  - 3. be bribe
  - 4. bribe

Question ID : 264330185714  
Option 1 ID : 264330727206  
Option 2 ID : 264330727207  
Option 3 ID : 264330727204  
Option 4 ID : 264330727205  
Status : Answered  
Chosen Option : 4

**Q.8** Find the part of the given sentence that has an error in it. If there is no error, choose 'No error'.

The official agencies often struggle to contain the spreading of fake news.

- Ans**
- 1. The official agencies
  - 2. the spreading of fake news.
  - 3. No error
  - 4. often struggle to contain

Question ID : 264330185624  
Option 1 ID : 264330726860  
Option 2 ID : 264330726862  
Option 3 ID : 264330726863  
Option 4 ID : 264330726861  
Status : Answered  
Chosen Option : 4

**Q.9** Fill in the blank with the most appropriate option.

I thought till I wore my head \_\_\_\_\_, but I couldn't see any way out of the trouble.

- Ans**
- 1. sore
  - 2. soar
  - 3. bore
  - 4. boar

Question ID : 264330186947  
Option 1 ID : 264330731903  
Option 2 ID : 264330731901  
Option 3 ID : 264330731900  
Option 4 ID : 264330731902  
Status : Answered  
Chosen Option : 4

**Q.10** Find the part of the given sentence that has an error in it. If there is no error, choose 'No error'.

In comparison to them, I require far superior staff for my organisation.

- Ans**
- 1. for my organisation
  - 2. No error
  - 3. In comparison to them
  - 4. I require far superior staff

Question ID : 264330186739  
Option 1 ID : 264330731110  
Option 2 ID : 264330731111  
Option 3 ID : 264330731108  
Option 4 ID : 264330731109  
Status : Answered  
Chosen Option : 4

**Q.11** In the following question, out of the given four alternatives, select the alternative which best expresses the meaning of the Idiom/Phrase.  
Jump on the bandwagon

- Ans**
- 1. To join an activity that has become very popular
  - 2. To support a wrong person
  - 3. To reach to a decision without any discussion
  - 4. To take on a task that is very hard

Question ID : 264330186060  
Option 1 ID : 264330728521  
Option 2 ID : 264330728523  
Option 3 ID : 264330728520  
Option 4 ID : 264330728522  
Status : Answered  
Chosen Option : 1

**Q.12** Select the sentence with no spelling errors.

- Ans**
- 1. She's handled her transetion from reality TV star to the real world with grace and poise.
  - 2. She's handled her transition from reality TV star to the real world with grace and puoise.
  - 3. She's handled her transition from reality TV star to the real world with grace and poise.
  - 4. She's handled her transition from reality TV star to the real world with grase and poise.

Question ID : 264330185706  
Option 1 ID : 264330727174  
Option 2 ID : 264330727173  
Option 3 ID : 264330727172  
Option 4 ID : 264330727175  
Status : Answered  
Chosen Option : 3

**Q.13** Choose the most appropriate antonym of the underlined word.

If the riots have any comparable antecedent, it's the violence that took over French towns and cities in the fall of 2005.

- Ans**
- 1. previous
  - 2. past
  - 3. lateral
  - 4. subsequent

Question ID : 264330185996  
Option 1 ID : 264330728277  
Option 2 ID : 264330728279  
Option 3 ID : 264330728278  
Option 4 ID : 264330728276  
Status : Answered  
Chosen Option : 3

**Q.14** Find the part of the given sentence that has an error in it. If there is no error, choose 'No error'.  
While white blood cells are powerful people protectors, they has been not enough on their own.

- Ans**
- 1. not enough on their own.
  - 2. No error
  - 3. While white blood cells are
  - 4. powerful people protectors, they has been

Question ID : 264330185731  
Option 1 ID : 264330727270  
Option 2 ID : 264330727271  
Option 3 ID : 264330727268  
Option 4 ID : 264330727269  
Status : Answered  
Chosen Option : 4

**Q.15** Select the incorrectly spelt word from the given sentence.

Marie was stunned by this horrible misfortune and endured heartbreaking anguersh.

- Ans**
- 1. anguersh
  - 2. endured
  - 3. stunned
  - 4. misfortune

Question ID : 264330185600  
Option 1 ID : 264330726771  
Option 2 ID : 264330726770  
Option 3 ID : 264330726768  
Option 4 ID : 264330726769  
Status : Answered  
Chosen Option : 1

### Comprehension:

Read the passage carefully and select the correct answer for the given blanks out of the four alternatives.

We all travel for different (1)\_\_\_\_\_: wanderlust, a (2)\_\_\_\_\_ to experience a different culture, a desire to forget, or a desire to (3)\_\_\_\_\_ new people. Traveling becomes a means for people to deal with different situations, try new things, and find their (4)\_\_\_\_\_ of self. Budget travel, at its core, is a tool for personal development. It allows us to grow, learn, and (5)\_\_\_\_\_.

**SubQuestion No : 16**

**Q.16** Select the most appropriate option for blank (1)

- Ans**
- 1. cases
  - 2. reasons
  - 3. pretexts
  - 4. measures

Question ID : 264330185863  
Option 1 ID : 264330727770  
Option 2 ID : 264330727768  
Option 3 ID : 264330727771  
Option 4 ID : 264330727769  
Status : Answered  
Chosen Option : 2

**Comprehension:**

Read the passage carefully and select the correct answer for the given blanks out of the four alternatives.

We all travel for different (1) \_\_\_\_\_: wanderlust, a (2) \_\_\_\_\_ to experience a different culture, a desire to forget, or a desire to (3) \_\_\_\_\_ new people. Traveling becomes a means for people to deal with different situations, try new things, and find their (4) \_\_\_\_\_ of self. Budget travel, at its core, is a tool for personal development. It allows us to grow, learn, and (5) \_\_\_\_\_.

**SubQuestion No : 17**

**Q.17** Select the most appropriate option for blank (2)

- Ans
- 1. energy
  - 2. fraction
  - 3. count
  - 4. want

Question ID : 264330185864

Option 1 ID : 264330727775

Option 2 ID : 264330727772

Option 3 ID : 264330727774

Option 4 ID : 264330727773

Status : Answered

Chosen Option : 3

**Comprehension:**

Read the passage carefully and select the correct answer for the given blanks out of the four alternatives.

We all travel for different (1) \_\_\_\_\_: wanderlust, a (2) \_\_\_\_\_ to experience a different culture, a desire to forget, or a desire to (3) \_\_\_\_\_ new people. Traveling becomes a means for people to deal with different situations, try new things, and find their (4) \_\_\_\_\_ of self. Budget travel, at its core, is a tool for personal development. It allows us to grow, learn, and (5) \_\_\_\_\_.

**SubQuestion No : 18**

**Q.18** Select the most appropriate option for blank (3)

- Ans
- 1. hold
  - 2. reflect
  - 3. greet
  - 4. meet

Question ID : 264330185865

Option 1 ID : 264330727778

Option 2 ID : 264330727776

Option 3 ID : 264330727777

Option 4 ID : 264330727779

Status : Answered

Chosen Option : 4

**Comprehension:**

Read the passage carefully and select the correct answer for the given blanks out of the four alternatives.

We all travel for different (1) \_\_\_\_\_ : wanderlust, a (2) \_\_\_\_\_ to experience a different culture, a desire to forget, or a desire to (3) \_\_\_\_\_ new people. Traveling becomes a means for people to deal with different situations, try new things, and find their (4) \_\_\_\_\_ of self. Budget travel, at its core, is a tool for personal development. It allows us to grow, learn, and (5) \_\_\_\_\_.

**SubQuestion No : 19**

**Q.19** Select the most appropriate option for blank (4)

- Ans
- 1. place
  - 2. scene
  - 3. mean
  - 4. sense

Question ID : 264330185866

Option 1 ID : 264330727781

Option 2 ID : 264330727783

Option 3 ID : 264330727782

Option 4 ID : 264330727780

Status : Answered

Chosen Option : 1

**Comprehension:**

Read the passage carefully and select the correct answer for the given blanks out of the four alternatives.

We all travel for different (1) \_\_\_\_\_ : wanderlust, a (2) \_\_\_\_\_ to experience a different culture, a desire to forget, or a desire to (3) \_\_\_\_\_ new people. Traveling becomes a means for people to deal with different situations, try new things, and find their (4) \_\_\_\_\_ of self. Budget travel, at its core, is a tool for personal development. It allows us to grow, learn, and (5) \_\_\_\_\_.

**SubQuestion No : 20**

**Q.20** Select the most appropriate option for blank (5)

- Ans
- 1. portend
  - 2. connect
  - 3. affiliate
  - 4. differ

Question ID : 264330185867

Option 1 ID : 264330727786

Option 2 ID : 264330727785

Option 3 ID : 264330727784

Option 4 ID : 264330727787

Status : Answered

Chosen Option : 3

Q.1 दिए गए शब्द का पर्यायवाची ज्ञात कीजिए।

घर

- Ans
- 1. वानर
  - 2. ईश्वर
  - 3. सदन
  - 4. गौ

Question ID : 264330188257

Option 1 ID : 264330736924

Option 2 ID : 264330736925

Option 3 ID : 264330736926

Option 4 ID : 264330736927

Status : Not Answered

Chosen Option : --

Q.2 दिए गए शब्द का पर्यायवाची ज्ञात कीजिए।

चपला

- Ans
- 1. शिखर
  - 2. प्रेम
  - 3. शशि
  - 4. बिजली

Question ID : 264330189237

Option 1 ID : 264330740691

Option 2 ID : 264330740692

Option 3 ID : 264330740693

Option 4 ID : 264330740690

Status : Not Answered

Chosen Option : --

Q.3 निम्नलिखित प्रश्न में, चार विकल्पों में से, उस विकल्प का चयन करें जो दिए गए मुहावरे का सही अर्थ वाला विकल्प है।

घाट-घाट का पानी पीना

- Ans
- 1. खूब परिश्रम करना
  - 2. हर प्रकार का अनुभव होना
  - 3. बुरा-भला कहना
  - 4. थोड़े में बहुत कहना

Question ID : 264330188366

Option 1 ID : 264330737341

Option 2 ID : 264330737340

Option 3 ID : 264330737342

Option 4 ID : 264330737343

Status : Not Answered

Chosen Option : --

Q.4 निम्नलिखित प्रश्न में, चार विकल्पों में से, उस विकल्प का चयन करें जो कोष्ठक में दिए गए शब्द के तद्वत रूप का सही विकल्प है।  
मुझे (इक्षु) \_\_\_\_\_ का रस पीना बहुत पसंद है।

Ans

- ✓ 1. ईख  
✗ 2. संतरा  
✗ 3. सेब  
✗ 4. कोकम

Question ID : 264330189749

Option 1 ID : 264330742642

Option 2 ID : 264330742644

Option 3 ID : 264330742645

Option 4 ID : 264330742643

Status : Not Answered

Chosen Option : --

Q.5 दिए गए वाक्य में रेखांकित शब्द के लिए सही वर्तनी ज्ञात कीजिए।

तुम ज़बरदस्ती रूपसे नहीं ले सकते।

Ans

- ✓ 1. ज़बरदस्ती  
✗ 2. ज़ब्रदस्ती  
✗ 3. ज़बरदसती  
✗ 4. ज़र्बदस्ती

Question ID : 264330188242

Option 1 ID : 264330736870

Option 2 ID : 264330736868

Option 3 ID : 264330736871

Option 4 ID : 264330736869

Status : Not Answered

Chosen Option : --

Q.6 दिए गए वाक्य में रेखांकित शब्द का विलोम शब्द ज्ञात कीजिए।

बैठिए! आज हम मेजबान है।

Ans

- ✓ 1. मेहमान  
✗ 2. मंदबुद्धि  
✗ 3. शहरी  
✗ 4. ग्रामीण

Question ID : 264330189470

Option 1 ID : 264330741580

Option 2 ID : 264330741581

Option 3 ID : 264330741578

Option 4 ID : 264330741579

Status : Not Answered

Chosen Option : --



Q.7 निम्नलिखित वाक्य में रेखांकित भाग के लिए एक सार्थक शब्द ज्ञात कीजिए।

योगी महाराज ने मृत्यु को जीत लिया है।

- Ans
- 1. शक्तिशाली
  - 2. अजर
  - 3. मृत्युंजय
  - 4. अविनाशी

Question ID : 264330189172

Option 1 ID : 264330740445

Option 2 ID : 264330740443

Option 3 ID : 264330740444

Option 4 ID : 264330740442

Status : Not Answered

Chosen Option : --

Q.8 निम्नलिखित वाक्य में रेखांकित भाग के लिए एक शब्द ज्ञात कीजिए।

शिव घोर तप करते हैं।

- Ans
- 1. वैरागी
  - 2. तपस्वी
  - 3. योगी
  - 4. ताप

Question ID : 264330188298

Option 1 ID : 264330737082

Option 2 ID : 264330737081

Option 3 ID : 264330737080

Option 4 ID : 264330737083

Status : Not Answered

Chosen Option : --

Q.9 दिए गए वाक्य में से निरर्थक शब्द ज्ञात कीजिए।

मुझे तमार से काम है।

- Ans
- 1. कुछ
  - 2. मुझे
  - 3. तमार
  - 4. काम

Question ID : 264330188994

Option 1 ID : 264330739766

Option 2 ID : 264330739768

Option 3 ID : 264330739769

Option 4 ID : 264330739767

Status : Not Answered

Chosen Option : --

**Q.10** निम्नलिखित प्रश्न में, चार विकल्पों में से, उस विकल्प का चयन करें जो दी गई लोकोक्ति का सही अर्थ वाला है।

बिंध गया सो मोती, रह गया सो सीप

**Ans**

- ✓ 1. जो वस्तु काम आ जाए वही अच्छी
- ✗ 2. छोटे का बड़े से बढ़ जाना
- ✗ 3. जरूरत के अनुसार ही सामान बनाना
- ✗ 4. मूर्खतापूर्ण कार्य करना

Question ID : 264330189893

Option 1 ID : 264330743191

Option 2 ID : 264330743192

Option 3 ID : 264330743190

Option 4 ID : 264330743193

Status : Not Answered

Chosen Option : --

**Q.11** निम्नलिखित वाक्य में, उस वाक्यांश को पहचानिए जिसमें मात्राओं या व्याकरण से संबंधित अशुद्धियाँ हैं। यदि कोई गलती नहीं है तो 'कोई त्रुटि नहीं है' का चुनाव कीजिए।  
हमारी सांस्कृतिक और ऐतिहासिक धरोहर आज भी/ सबसे कुलीन या पवित्र है और शायद यही वजह है पर आज भी/ हमारे देश में अतिथियों को देवताओं की तरह पूजा जाता है।

**Ans**

✓ 1.

सबसे कुलीन या पवित्र है और शायद यही वजह है पर आज भी

- ✗ 2. हमारी सांस्कृतिक और ऐतिहासिक धरोहर आज भी
- ✗ 3. कोई त्रुटि नहीं है
- ✗ 4.

हमारे देश में अतिथियों को देवताओं की तरह पूजा जाता है

Question ID : 264330189769

Option 1 ID : 264330742719

Option 2 ID : 264330742718

Option 3 ID : 264330742721

Option 4 ID : 264330742720

Status : Not Answered

Chosen Option : --

Q.12 दिए गए वाक्य में रेखांकित शब्द का विलोम शब्द ज्ञात कीजिए।

मोहिनी अपने पितृदेश गई है।

Ans

- ✓ 1. मातृदेश
- ✗ 2. भ्रातृदेश
- ✗ 3. स्वदेश
- ✗ 4. भगिनीदेश

Question ID : 264330189324

Option 1 ID : 264330741024

Option 2 ID : 264330741022

Option 3 ID : 264330741025

Option 4 ID : 264330741023

Status : Not Answered

Chosen Option : --

Q.13 निम्नलिखित प्रश्न में, चार विकल्प में से, उस विकल्प का चयन करें जो रिक्त स्थान के लिए सही संज्ञा वाला विकल्प हो।  
राम के वियोग में सीता अत्यंत \_\_\_\_\_ थीं।

Ans

- ✗ 1. संतुष्ट
- ✓ 2. दुखी
- ✗ 3. आनंदित
- ✗ 4. हर्षित

Question ID : 264330189815

Option 1 ID : 264330742897

Option 2 ID : 264330742895

Option 3 ID : 264330742896

Option 4 ID : 264330742894

Status : Not Answered

Chosen Option : --

Q.14 निम्नलिखित पत्र में, चार विकल्पों में से, उस सही विकल्प का चयन करें जो वाक्यांश के लिए एक शब्द का उचित विकल्प हो।  
जिसकी आशा न की गई हो

Ans

- ✗ 1. अल्पज्ञ
- ✗ 2. अनिर्वचनीय
- ✗ 3. अगोचर
- ✓ 4. अप्रत्याशित

Question ID : 264330189887

Option 1 ID : 264330743168

Option 2 ID : 264330743167

Option 3 ID : 264330743166

Option 4 ID : 264330743169

Status : Not Answered

Chosen Option : --

**Q.15** दिए गए वाक्य का वह भाग ज्ञात करें, जिसमें कोई त्रुटि है। यदि कोई त्रुटि नहीं है, तो 'कोई त्रुटि नहीं है' चुनें।

अभ्यास के बिना जीवन में असफलता नहीं मिल सकती।

**Ans**

- ✓ 1. असफलता नहीं मिल सकती।
- ✗ 2. जीवन में
- ✗ 3. अभ्यास के बिना
- ✗ 4. कोई त्रुटि नहीं है

Question ID : 264330190024

Option 1 ID : 264330743692

Option 2 ID : 264330743691

Option 3 ID : 264330743690

Option 4 ID : 264330743693

Status : Not Answered

Chosen Option : --

**Comprehension:**

नीचे दिए गए गद्य में कुछ शब्द छोड़ दिए गए हैं और प्रत्येक रिक्त स्थान के चार विकल्प दिए गए हैं। इन चारों में से कौन सा विकल्प रिक्त स्थान की पूर्ति करेगा-

भला कौन होगा जो बंबई का जिक्र करे पर उसके फिल्म (1)\_\_\_\_\_ की चर्चा न करे। यहाँ की (2)\_\_\_\_\_ भीड़ और कठिन (3)\_\_\_\_\_ के बावजूद बहुतों के लिए बंबई 'मायापुरी' ही है- रूपहले (4)\_\_\_\_\_ का शहर। वहाँ की बहुत सारी फिल्में शहर में आने वाले (5)\_\_\_\_\_ और उनके दैनिक जीवन में आने वाली मुश्किलों के बारे में ही हैं।

**SubQuestion No : 16**

**Q.16** रिक्त 1 के लिए सबसे उपयुक्त विकल्प का चयन कीजिए।

**Ans**

- ✗ 1. मशहूर
- ✗ 2. ड्राइव
- ✓ 3. उद्योग
- ✗ 4. शहर

Question ID : 264330189482

Option 1 ID : 264330741625

Option 2 ID : 264330741624

Option 3 ID : 264330741622

Option 4 ID : 264330741623

Status : Not Answered

Chosen Option : --

**Comprehension:**

नीचे दिए गए गद्य में कुछ शब्द छोड़ दिए गए हैं और प्रत्येक रिक्त स्थान के चार विकल्प दिए गए हैं। इन चारों में से कौन सा विकल्प रिक्त स्थान की पूर्ति करेगा-

भला कौन होगा जो बंबई का जिक्र करे पर उसके फिल्म (1)\_\_\_\_\_ की चर्चा न करे। यहाँ की (2)\_\_\_\_\_ भीड़ और कठिन (3)\_\_\_\_\_ के बावजूद बहुतों के लिए बंबई 'मायापुरी' ही है- रूपहले (4)\_\_\_\_\_ का शहर। वहाँ की बहुत सारी फिल्में शहर में आने वाले (5)\_\_\_\_\_ और उनके दैनिक जीवन में आने वाली मुश्किलों के बारे में ही हैं।

**SubQuestion No : 17**

Q.17 रिक्त 2 के लिए सबसे उपयुक्त विकल्प का चयन कीजिए।

- Ans
- 1. कश्मकश
  - 2. बेहिसाब
  - 3. प्यारी
  - 4. लुभावनी

Question ID : 264330189483

Option 1 ID : 264330741629

Option 2 ID : 264330741628

Option 3 ID : 264330741627

Option 4 ID : 264330741626

Status : Not Answered

Chosen Option : --

**Comprehension:**

नीचे दिए गए गद्य में कुछ शब्द छोड़ दिए गए हैं और प्रत्येक रिक्त स्थान के चार विकल्प दिए गए हैं। इन चारों में से कौन सा विकल्प रिक्त स्थान की पूर्ति करेगा-

भला कौन होगा जो बंबई का जिक्र करे पर उसके फिल्म (1)\_\_\_\_\_ की चर्चा न करे। यहाँ की (2)\_\_\_\_\_ भीड़ और कठिन (3)\_\_\_\_\_ के बावजूद बहुतों के लिए बंबई 'मायापुरी' ही है- रूपहले (4)\_\_\_\_\_ का शहर। वहाँ की बहुत सारी फिल्में शहर में आने वाले (5)\_\_\_\_\_ और उनके दैनिक जीवन में आने वाली मुश्किलों के बारे में ही हैं।

**SubQuestion No : 18**

Q.18 रिक्त 3 के लिए सबसे उपयुक्त विकल्प का चयन कीजिए।

- Ans
- 1. जीवनस्थितियों
  - 2. विकास
  - 3. टुकड़े
  - 4. इस्तेमाल

Question ID : 264330189484

Option 1 ID : 264330741631

Option 2 ID : 264330741633

Option 3 ID : 264330741632

Option 4 ID : 264330741630

Status : Not Answered

Chosen Option : --

**Comprehension:**

नीचे दिए गए गद्य में कुछ शब्द छोड़ दिए गए हैं और प्रत्येक रिक्त स्थान के चार विकल्प दिए गए हैं। इन चारों में से कौन सा विकल्प रिक्त स्थान की पूर्ति करेगा-

भला कौन होगा जो बंबई का जिक्र करे पर उसके फिल्म (1)\_\_\_\_\_ की चर्चा न करे। यहाँ की (2)\_\_\_\_\_ भीड़ और कठिन (3)\_\_\_\_\_ के बावजूद बहुतों के लिए बंबई 'मायापुरी' ही है- रूपहले (4)\_\_\_\_\_ का शहर। वहाँ की बहुत सारी फिल्मों शहर में आने वाले (5)\_\_\_\_\_ और उनके दैनिक जीवन में आने वाली मुश्किलों के बारे में ही हैं।

**SubQuestion No : 19**

Q.19 रिक्त 4 के लिए सबसे उपयुक्त विकल्प का चयन कीजिए।

Ans

- ✓ 1. सपनों
- ✗ 2. कपड़ों
- ✗ 3. जूतों
- ✗ 4. सूखी

Question ID : 264330189485

Option 1 ID : 264330741637

Option 2 ID : 264330741635

Option 3 ID : 264330741634

Option 4 ID : 264330741636

Status : Not Answered

Chosen Option : --

**Comprehension:**

नीचे दिए गए गद्य में कुछ शब्द छोड़ दिए गए हैं और प्रत्येक रिक्त स्थान के चार विकल्प दिए गए हैं। इन चारों में से कौन सा विकल्प रिक्त स्थान की पूर्ति करेगा-

भला कौन होगा जो बंबई का जिक्र करे पर उसके फिल्म (1)\_\_\_\_\_ की चर्चा न करे। यहाँ की (2)\_\_\_\_\_ भीड़ और कठिन (3)\_\_\_\_\_ के बावजूद बहुतों के लिए बंबई 'मायापुरी' ही है- रूपहले (4)\_\_\_\_\_ का शहर। वहाँ की बहुत सारी फिल्मों शहर में आने वाले (5)\_\_\_\_\_ और उनके दैनिक जीवन में आने वाली मुश्किलों के बारे में ही हैं।

**SubQuestion No : 20**

Q.20 रिक्त 5 के लिए सबसे उपयुक्त विकल्प का चयन कीजिए।

Ans

- ✗ 1. योजना
- ✗ 2. मिट्टी
- ✗ 3. कभी
- ✓ 4. आप्रवासियों

Question ID : 264330189486

Option 1 ID : 264330741640

Option 2 ID : 264330741638

Option 3 ID : 264330741641

Option 4 ID : 264330741639

Status : Not Answered

Chosen Option : --