

**Constable GD in Central Armed Police Forces CAPFs SSF Rifleman GD in Assam
Rifles Examination 2024**

Roll Number	
Candidate Name	
Venue Name	
Exam Date	05/03/2024
Exam Time	5:00 PM - 6:00 PM
Subject	Constable GD Examination 2024

Section : Part-A-General Intelligence and Reasoning

Q.1 In a certain code language, if DEFINITE is coded as 'EUJOJGFD', DRIZZLING is coded as 'GOJMAAJSD', then what will 'ATTACHED' be coded as?

- Ans** 1. DFIDBUUA
 2. AUUBDIFD
 3. BUUBDIFE
 4. EFIDBUUB

Question ID : 264330192214

Option 1 ID : 264330752211

Option 2 ID : 264330752210

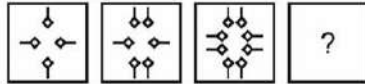
Option 3 ID : 264330752212

Option 4 ID : 264330752213

Status : Answered

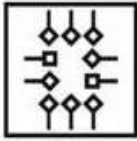
Chosen Option : 1

Q.2 In the following question, select the figure which can be placed at the sign of question mark (?) from the given alternatives.

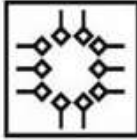


Ans

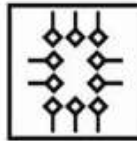
✗ 1.



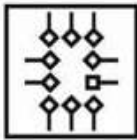
✗ 2.



✓ 3.



✗ 4.



Question ID : 264330187114

Option 1 ID : 264330732387

Option 2 ID : 264330732385

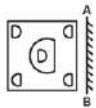
Option 3 ID : 264330732386

Option 4 ID : 264330732384

Status : Answered

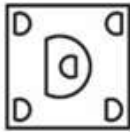
Chosen Option : 3

Q.3 If a mirror is placed on the line AB, then out of the option figures which figure will be the right image of the question figure?

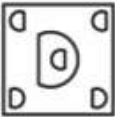


Ans

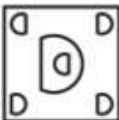
✓ 1.



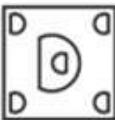
✗ 2.



✗ 3.



✗ 4.



Question ID : 264330191347

Option 1 ID : 264330748742

Option 2 ID : 264330748745

Option 3 ID : 264330748743

Option 4 ID : 264330748744

Status : Answered

Chosen Option : 1

Q.4 Which of the following groups of letters when sequentially placed from left to right will complete the given series?

wwxxyywwx_yywwxy_ww_xywwxy_y

Ans ✗ 1. wxyy

✓ 2. xyxy

✗ 3. ywyy

✗ 4. xwxw

Question ID : 264330187040

Option 1 ID : 264330732089

Option 2 ID : 264330732091

Option 3 ID : 264330732088

Option 4 ID : 264330732090

Status : Answered

Chosen Option : 2

Q.5 In the following question, select the related letters from the given alternatives.

BHL : DJN :: OSW : ?

- Ans
- 1. ZUX
 - 2. QUY
 - 3. AOB
 - 4. NOP

Question ID : 264330190110

Option 1 ID : 264330744023

Option 2 ID : 264330744022

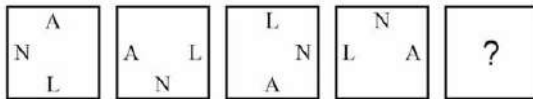
Option 3 ID : 264330744024

Option 4 ID : 264330744025

Status : Answered

Chosen Option : 2

Q.6 In the following question, select the figure which can be placed at the sign of question mark (?) from the given alternatives.




Ans

1.




2.



3.



4.



Question ID : 264330190163

Option 1 ID : 264330744237

Option 2 ID : 264330744236

Option 3 ID : 264330744235

Option 4 ID : 264330744234

Status : Answered

Chosen Option : 1

Q.7 Six persons P1, P2, P3, P4, P5 and P6 are sitting around a circular table facing towards the centre (not necessarily in the same order). Only two persons are sitting between P2 and P6. P2 and P4 are the immediate neighbour of P1. P5 is sitting to the immediate right of P3. P1 is sitting second to the right of P6. Who is sitting on the immediate right of P3?

- Ans**
- 1. P5
 - 2. P4
 - 3. P2
 - 4. P3

Question ID : 264330187367
 Option 1 ID : 264330733398
 Option 2 ID : 264330733397
 Option 3 ID : 264330733396
 Option 4 ID : 264330733399
 Status : Answered
 Chosen Option : 1

Q.8 Which of the following numbers will replace the question mark (?) in the given series?
 ?, 37, 35, 27, 25, 17

- Ans**
- 1. 38
 - 2. 42
 - 3. 40
 - 4. 45

Question ID : 264330192339
 Option 1 ID : 264330752710
 Option 2 ID : 264330752712
 Option 3 ID : 264330752711
 Option 4 ID : 264330752713
 Status : Answered
 Chosen Option : 4

Q.9 If ' $M \times N$ ' means 'M is the father of N'.
 If ' $M + N$ ' means 'M is the wife of N'.
 If ' $M \div N$ ' means 'M is the son of N'.
 If ' $M - N$ ' means 'M is the husband of N'.
 How is W related to T in the expression ' $T \div V + W \times U$ '?

- Ans**
- 1. Father's father
 - 2. Husband
 - 3. Father
 - 4. Daughter's husband

Question ID : 264330190414
 Option 1 ID : 264330745238
 Option 2 ID : 264330745240
 Option 3 ID : 264330745241
 Option 4 ID : 264330745239
 Status : Answered
 Chosen Option : 3

Q.10 If $10A + 8B + 4C + 3 = 23$ and $20A + 4B + 10C + 5 = 13$, then

$8A + 12B + 6C + 4 = ?$

- Ans
- 1. 24
 - 2. 23
 - 3. 20
 - 4. 30

Question ID : 264330187433

Option 1 ID : 264330733661

Option 2 ID : 264330733662

Option 3 ID : 264330733660

Option 4 ID : 264330733663

Status : Answered

Chosen Option : 3

Q.11 In the following question below are given some statements followed by some conclusions based on those statements.

Taking the given statements to be true even if they seem to be at variance from commonly known facts. Read all the conclusions and then decide which of the given conclusion(s) logically follows the given statements.

Statements:

I. No X are W.

II. Some Y are X.

Conclusions:

I. Some Y are not W.

II. All W are Y.

- Ans
- 1. Only conclusion I follows
 - 2. Only conclusion II follows
 - 3. Both conclusions I and II follows
 - 4. Neither conclusion follows

Question ID : 264330187049

Option 1 ID : 264330732124

Option 2 ID : 264330732125

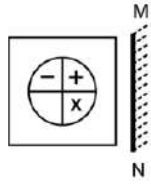
Option 3 ID : 264330732126

Option 4 ID : 264330732127

Status : Answered

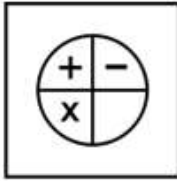
Chosen Option : 1

Q.12 Select the correct mirror image of the given figure when the mirror MN is placed to the right side of the figure.



Ans

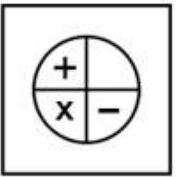
✓ 1.



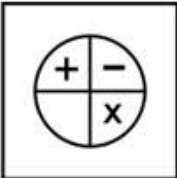
✗ 2.



✗ 3.



✗ 4.



Question ID : 264330190305

Option 1 ID : 264330744803

Option 2 ID : 264330744802

Option 3 ID : 264330744804

Option 4 ID : 264330744805

Status : Answered

Chosen Option : 1

Q.13 Arrange the given words in the sequence in which they occur in the dictionary.

1. Construction
2. Constitution
3. Constant
4. Constable
5. Constrain

- Ans**
- 1. 1,3,2,5,4
 - 2. 4,3,2,5,1
 - 3. 4,3,2,1,5
 - 4. 1,3,5,2,4

Question ID : 264330190449
 Option 1 ID : 264330745379
 Option 2 ID : 264330745380
 Option 3 ID : 264330745378
 Option 4 ID : 264330745381
 Status : Answered
 Chosen Option : 2

Q.14 In the following question, select the missing number from the given series.

1067, 1068, 1072, 1088, ?, 1408

- Ans**
- 1. 491
 - 2. 1100
 - 3. 1089
 - 4. 1152

Question ID : 264330191540
 Option 1 ID : 264330749516
 Option 2 ID : 264330749515
 Option 3 ID : 264330749517
 Option 4 ID : 264330749514
 Status : Answered
 Chosen Option : 4

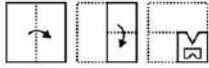
Q.15 A series is given with one term missing. Select the correct alternative from the given ones that will complete the series.

TRS, UST, VTU, WUV, ?

- Ans**
- 1. XYN
 - 2. NRC
 - 3. XMR
 - 4. XVW

Question ID : 264330187139
 Option 1 ID : 264330732487
 Option 2 ID : 264330732486
 Option 3 ID : 264330732484
 Option 4 ID : 264330732485
 Status : Answered
 Chosen Option : 4

Q.16 A piece of paper is folded and punched as shown below in the question figures. From the given option figures, indicate how it will appear when opened?



Ans

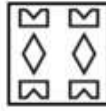
1.



2.



3.



4.



Question ID : 264330191546

Option 1 ID : 264330749541

Option 2 ID : 264330749538

Option 3 ID : 264330749540

Option 4 ID : 264330749539

Status : Answered

Chosen Option : 3

Q.17 By interchanging which two signs and two numbers (not digits) the equation will be correct?

$$5 \times 4 + 8 \div 2 - 7 = 35$$

Ans

1. + and \div , 5 and 7

2. \times and $-$, 4 and 2

3. + and $-$, 4 and 2

4. + and $-$, 4 and 7

Question ID : 264330187372

Option 1 ID : 264330733416

Option 2 ID : 264330733418

Option 3 ID : 264330733417

Option 4 ID : 264330733419

Status : Answered

Chosen Option : 4

Q.18 In a certain code language, if TOGETHER is coded as 'TOERGETH' and TOMORROW is coded as 'TOOWMORR', then what will BATHROOM be coded as?

- Ans**
- 1. BAOMTHRO
 - 2. BAOMTRHO
 - 3. BAOTHROM
 - 4. BAMOTHRO

Question ID : 264330192233

Option 1 ID : 264330752288

Option 2 ID : 264330752286

Option 3 ID : 264330752287

Option 4 ID : 264330752289

Status : Answered

Chosen Option : 1

Q.19 In the following question, select the related letter pair from the given alternatives.

ML : NO :: ?

- Ans**
- 1. BN : WI
 - 2. KX : SS
 - 3. GE : HH
 - 4. OT : JO

Question ID : 264330191332

Option 1 ID : 264330748685

Option 2 ID : 264330748683

Option 3 ID : 264330748684

Option 4 ID : 264330748682

Status : Answered

Chosen Option : 3

Q.20 Six people X, Y, Z, P, Q, and R are sitting in a circle facing towards the centre. X and Z are sitting exactly opposite to each other. Y, who is sitting to the immediate left of X, is also exactly opposite to P. R is not sitting next to X. Who is the immediate neighbour of both Y and Z?

- Ans**
- 1. P
 - 2. X
 - 3. Q
 - 4. R

Question ID : 264330191116

Option 1 ID : 264330747820

Option 2 ID : 264330747819

Option 3 ID : 264330747818

Option 4 ID : 264330747821

Status : Answered

Chosen Option : 2

Q.1 Certain fielding restrictions in cricket during few overs are known as _____.

- Ans
- 1. power over
 - 2. power pitch
 - 3. power play
 - 4. power batting

Question ID : 264330190901
Option 1 ID : 264330746959
Option 2 ID : 264330746961
Option 3 ID : 264330746958
Option 4 ID : 264330746960
Status : Answered
Chosen Option : 2

Q.2 Which sport is played by the Indian sportsperson Bhakti Sharma?

- Ans
- 1. Squash
 - 2. Cricket
 - 3. Swimming
 - 4. Hockey

Question ID : 264330191244
Option 1 ID : 264330748330
Option 2 ID : 264330748332
Option 3 ID : 264330748331
Option 4 ID : 264330748333
Status : Answered
Chosen Option : 3

Q.3 In which of the following years was the Bombay High Court of India established?

- Ans
- 1. 1863
 - 2. 1862
 - 3. 1861
 - 4. 1864

Question ID : 264330188645
Option 1 ID : 264330738384
Option 2 ID : 264330738383
Option 3 ID : 264330738382
Option 4 ID : 264330738385
Status : Not Answered
Chosen Option : --

Q.4 Various Industrialists came together in 1944 and drafted a joint proposal for setting up a planned economy in India. It is famously known as the _____ Plan.

- Ans**
- 1. Pune
 - 2. New Delhi
 - 3. Bombay
 - 4. Agra

Question ID : 264330191887
Option 1 ID : 264330750904
Option 2 ID : 264330750902
Option 3 ID : 264330750905
Option 4 ID : 264330750903
Status : Answered
Chosen Option : 3

Q.5 India got its central bank in which year?

- Ans**
- 1. 1933
 - 2. 1935
 - 3. 1931
 - 4. 1937

Question ID : 264330191980
Option 1 ID : 264330751275
Option 2 ID : 264330751276
Option 3 ID : 264330751274
Option 4 ID : 264330751277
Status : Answered
Chosen Option : 2

Q.6 Who among the following won the ICC Men's T20 World Cup 2022?

- Ans**
- 1. Australia
 - 2. England
 - 3. India
 - 4. Pakistan

Question ID : 264330188686
Option 1 ID : 264330738546
Option 2 ID : 264330738547
Option 3 ID : 264330738548
Option 4 ID : 264330738549
Status : Answered
Chosen Option : 1

Q.7 Which state of India has the highest population density as per 2011 census?

- Ans
- 1. Orissa
 - 2. Maharashtra
 - 3. Tamil Nadu
 - 4. Bihar

Question ID : 264330191494
Option 1 ID : 264330749332
Option 2 ID : 264330749330
Option 3 ID : 264330749333
Option 4 ID : 264330749331
Status : Answered
Chosen Option : 4

Q.8 Praveen Kumar Srivastava sworn in as the _____ in May, 2023

- Ans
- 1. Central Vigilance Commissioner
 - 2. Chief Justice of india
 - 3. Vice President of India
 - 4. Attorney-General for India

Question ID : 264330191230
Option 1 ID : 264330748275
Option 2 ID : 264330748277
Option 3 ID : 264330748276
Option 4 ID : 264330748274
Status : Answered
Chosen Option : 1

Q.9 Who is Maharashtra's second deputy chief minister as on October 2023?

- Ans
- 1. Ajit Pawar
 - 2. Sharad Pawar
 - 3. Eknath Shinde
 - 4. Aaditya Thackeray

Question ID : 264330190928
Option 1 ID : 264330747068
Option 2 ID : 264330747067
Option 3 ID : 264330747066
Option 4 ID : 264330747069
Status : Answered
Chosen Option : 2

Q.10 Bangladesh does not share land border with:

- Ans
- 1. Mizoram
 - 2. Meghalaya
 - 3. Sikkim
 - 4. Tripura

Question ID : 264330191419
Option 1 ID : 264330749031
Option 2 ID : 264330749030
Option 3 ID : 264330749032
Option 4 ID : 264330749033
Status : Answered
Chosen Option : 3

Q.11 Who was the founder of the Brahmo Samaj?

- Ans
- 1. Swami Dayanand Saraswati
 - 2. Swami Vivekananda
 - 3. Ishwarchandra Vidyasagar
 - 4. Raja Rammohun Roy

Question ID : 264330188641
Option 1 ID : 264330738369
Option 2 ID : 264330738368
Option 3 ID : 264330738366
Option 4 ID : 264330738367
Status : Answered
Chosen Option : 1

Q.12 Which of the following statements is correct regarding the ninth five-year plan of India?

- I. The plan focused on growth with social justice and equality.
- II. The time period of the ninth-five-year plan is 1997–2002.

- Ans
- 1. Both I and II
 - 2. Only II
 - 3. Only I
 - 4. Neither I nor II

Question ID : 264330188690
Option 1 ID : 264330738564
Option 2 ID : 264330738563
Option 3 ID : 264330738562
Option 4 ID : 264330738565
Status : Answered
Chosen Option : 1

Q.13 Which physical law states that the pressure and temperature of a gas are inversely proportional, provided the volume and the number of gas molecules remain constant?

- Ans**
- 1. Charles's law
 - 2. Boyle's law
 - 3. Gay-Lussac's law
 - 4. Avogadro's law

Question ID : 264330190872

Option 1 ID : 264330746842

Option 2 ID : 264330746843

Option 3 ID : 264330746845

Option 4 ID : 264330746844

Status : Answered

Chosen Option : 2

Q.14 Read the following about the supply of Money.

A. In a modern economy, money comprises cash and bank deposits.

B. These are created by a system comprising two types of institutions: central bank of the economy and the commercial banking system.

Identify the CORRECT statement/statements.

- Ans**
- 1. Only A
 - 2. Both A and B
 - 3. Only B
 - 4. Neither A nor B

Question ID : 264330191945

Option 1 ID : 264330751134

Option 2 ID : 264330751136

Option 3 ID : 264330751135

Option 4 ID : 264330751137

Status : Answered

Chosen Option : 3

Q.15 'Kuchipudi' classical dance form is associated with which of the following states?

- Ans**
- 1. Uttar Pradesh
 - 2. Andhra Pradesh
 - 3. Assam
 - 4. Tamilnadu

Question ID : 264330191010

Option 1 ID : 264330747395

Option 2 ID : 264330747397

Option 3 ID : 264330747394

Option 4 ID : 264330747396

Status : Answered

Chosen Option : 2

Q.16 In the Population Census of 2011, the sex ratio in India is _____ females per 1000 males.

- Ans
- 1. 890
 - 2. 1020
 - 3. 899
 - 4. 943

Question ID : 264330191895
Option 1 ID : 264330750934
Option 2 ID : 264330750936
Option 3 ID : 264330750937
Option 4 ID : 264330750935
Status : Answered
Chosen Option : 4

Q.17 Haddu Khan and Hassu Khan were regarded as great masters of which style?

- Ans
- 1. Dhrupad
 - 2. Tappa
 - 3. Thumri
 - 4. Khyal

Question ID : 264330190597
Option 1 ID : 264330745970
Option 2 ID : 264330745972
Option 3 ID : 264330745971
Option 4 ID : 264330745973
Status : Answered
Chosen Option : 4

Q.18 _____ is the main festival of Karnataka, which marks the Kannada new year.

- Ans
- 1. Sri vitappa
 - 2. Hampi
 - 3. Basava jayanti
 - 4. Ugadi

Question ID : 264330190631
Option 1 ID : 264330746106
Option 2 ID : 264330746109
Option 3 ID : 264330746107
Option 4 ID : 264330746108
Status : Answered
Chosen Option : 1

Q.19 In the Indian subcontinent, the beginning of settlement at Mehrgarh started about _____ years ago.

- Ans**
- 1. 2000
 - 2. 8000
 - 3. 4000
 - 4. 6000

Question ID : 264330190595
Option 1 ID : 264330745962
Option 2 ID : 264330745965
Option 3 ID : 264330745963
Option 4 ID : 264330745964
Status : Not Answered
Chosen Option : --

Q.20 Which Indian state has launched Abua Awas Yojana 2023?

- Ans**
- 1. Jharkhand
 - 2. Andhra Pradesh
 - 3. Madhya Pradesh
 - 4. Uttar Pradesh

Question ID : 264330190587
Option 1 ID : 264330745933
Option 2 ID : 264330745932
Option 3 ID : 264330745931
Option 4 ID : 264330745930
Status : Answered
Chosen Option : 2

Section : Part-C-Elementary Mathematics

Q.1 A person loses 30 percent on selling 54 chairs for Rs. 70. What should be the selling price of 54 chairs to earn a profit of 15 percent?

- Ans**
- 1. Rs. 140
 - 2. Rs. 135
 - 3. Rs. 120
 - 4. Rs. 115

Question ID : 264330187748
Option 1 ID : 264330734923
Option 2 ID : 264330734922
Option 3 ID : 264330734920
Option 4 ID : 264330734921
Status : Answered
Chosen Option : 4

Q.2 What is the value of 15 percent of 110 + 50 percent of 125?

- Ans
- 1. 75
 - 2. 78
 - 3. 76
 - 4. 79

Question ID : 264330191614
Option 1 ID : 264330749810
Option 2 ID : 264330749812
Option 3 ID : 264330749811
Option 4 ID : 264330749813
Status : Answered
Chosen Option : 4

Q.3 Selling price of a chair is Rs. 7790. If loss percentage is 18 percent, then what is the cost price of chair?

- Ans
- 1. Rs. 8800
 - 2. Rs. 9000
 - 3. Rs. 9500
 - 4. Rs. 9200

Question ID : 264330188560
Option 1 ID : 264330738043
Option 2 ID : 264330738042
Option 3 ID : 264330738044
Option 4 ID : 264330738045
Status : Answered
Chosen Option : 3

Q.4 If Marked price of an article is Rs. 3000 and selling price is Rs. 2400. What is the discount percentage?

- Ans
- 1. 20
 - 2. 10
 - 3. 30
 - 4. 15

Question ID : 264330190377
Option 1 ID : 264330745092
Option 2 ID : 264330745090
Option 3 ID : 264330745093
Option 4 ID : 264330745091
Status : Answered
Chosen Option : 1

Q.5 If 27 men take 15 days to mow 225 hectares of grass, how long will 33 men take to mow 165 hectares?

- Ans**
- 1. 11 days
 - 2. 9 days
 - 3. 12 days
 - 4. 14 days

Question ID : 264330191185
Option 1 ID : 264330748095
Option 2 ID : 264330748096
Option 3 ID : 264330748094
Option 4 ID : 264330748097
Status : Answered
Chosen Option : 2

Q.6 Initial value of a car is Rs. 500000. The value of car depreciated by 10 percent of its initial value each year. What will be its value after 3 years?

- Ans**
- 1. Rs. 378200
 - 2. Rs. 354500
 - 3. Rs. 454500
 - 4. Rs. 364500

Question ID : 264330187654
Option 1 ID : 264330734547
Option 2 ID : 264330734544
Option 3 ID : 264330734545
Option 4 ID : 264330734546
Status : Answered
Chosen Option : 4

Q.7 The average of 56 numbers is 72. If we add a number 'B' in each number, then the average becomes 144. What is the value of B?

- Ans**
- 1. 72
 - 2. 76
 - 3. 79
 - 4. 81

Question ID : 264330187543
Option 1 ID : 264330734101
Option 2 ID : 264330734102
Option 3 ID : 264330734103
Option 4 ID : 264330734100
Status : Answered
Chosen Option : 2

Q.8 An item is sold for Rs. 2240 after two successive discounts of 30 percent and 50 percent. What is the marked price of the article?

- Ans**
- 1. Rs. 6000
 - 2. Rs. 6600
 - 3. Rs. 6400
 - 4. Rs. 6500

Question ID : **264330187190**
Option 1 ID : **264330732690**
Option 2 ID : **264330732691**
Option 3 ID : **264330732688**
Option 4 ID : **264330732689**
Status : **Answered**
Chosen Option : **3**

Q.9 Which of the following number is not divisible by 25?

- Ans**
- 1. 1625
 - 2. 1885
 - 3. 6275
 - 4. 5675

Question ID : **264330187562**
Option 1 ID : **264330734176**
Option 2 ID : **264330734178**
Option 3 ID : **264330734177**
Option 4 ID : **264330734179**
Status : **Answered**
Chosen Option : **2**

Q.10 If Y can complete $\frac{3}{5}$ of a work in 60 days, then Y will complete $\frac{1}{10}$ of the same work in how many days?

- Ans**
- 1. 12 days
 - 2. 15 days
 - 3. 10 days
 - 4. 11 days

Question ID : **264330187516**
Option 1 ID : **264330733995**
Option 2 ID : **264330733992**
Option 3 ID : **264330733994**
Option 4 ID : **264330733993**
Status : **Answered**
Chosen Option : **3**

Q.11 If $G : H : J = 5 : 3 : 2$ and $J : K = 2 : 5$, then what is the value of $G : K$?

- Ans**
- 1. 2 : 1
 - 2. 1 : 2
 - 3. 3 : 1
 - 4. 1 : 1

Question ID : 264330187172
Option 1 ID : 264330732617
Option 2 ID : 264330732618
Option 3 ID : 264330732619
Option 4 ID : 264330732616
Status : Answered
Chosen Option : 4

Q.12 Of the three numbers, the average of the first number and the second number is 20 more than the average of second number and third number. What is the difference between the first and the third number?

- Ans**
- 1. 37
 - 2. 40
 - 3. 44
 - 4. 38

Question ID : 264330187224
Option 1 ID : 264330732824
Option 2 ID : 264330732825
Option 3 ID : 264330732827
Option 4 ID : 264330732826
Status : Answered
Chosen Option : 2

Q.13 A train left 4 hours early than the scheduled time and in order to reach its destination 960 km away on time, it had to decrease its usual speed by 40 km/hr. What is the usual speed of the train?

- Ans**
- 1. 150 km/hr
 - 2. 80 km/hr
 - 3. 100 km/hr
 - 4. 120 km/hr

Question ID : 264330187215
Option 1 ID : 264330732791
Option 2 ID : 264330732790
Option 3 ID : 264330732788
Option 4 ID : 264330732789
Status : Answered
Chosen Option : 4

Q.14 What is the value of $\frac{46}{7}$ of $\frac{21}{2} - \frac{92}{14} \div \frac{23}{56}$?

- Ans
- 1. 43
 - 2. 53
 - 3. 13
 - 4. 23

Question ID : 264330188553
Option 1 ID : 264330738017
Option 2 ID : 264330738014
Option 3 ID : 264330738016
Option 4 ID : 264330738015
Status : Answered
Chosen Option : 2

Q.15 What is the value of $1.5 \times 0.6 + 2.4 \times 0.5 + 7.5 \times 0.4$?

- Ans
- 1. 4.1
 - 2. 6.1
 - 3. 7.1
 - 4. 5.1

Question ID : 264330187721
Option 1 ID : 264330734812
Option 2 ID : 264330734814
Option 3 ID : 264330734815
Option 4 ID : 264330734813
Status : Answered
Chosen Option : 4

Q.16 If a certain sum of money becomes double of itself in 11 years 6 months at simple interest, then what will be the annual rate of interest?

- Ans
- 1. 9.68 percent
 - 2. 8.69 percent
 - 3. 12.72 percent
 - 4. 8.44 percent

Question ID : 264330187613
Option 1 ID : 264330734380
Option 2 ID : 264330734382
Option 3 ID : 264330734383
Option 4 ID : 264330734381
Status : Answered
Chosen Option : 2

Q.17 If the length of a rectangle is increased by 11.11 percent, then by how much percentage its breadth should be reduced to keep the area same?

- Ans**
- 1. 11.11 percent
 - 2. 10 percent
 - 3. 9.09 percent
 - 4. 20 percent

Question ID : 264330187858

Option 1 ID : 264330735360

Option 2 ID : 264330735363

Option 3 ID : 264330735361

Option 4 ID : 264330735362

Status : Answered

Chosen Option : 2

Q.18 What is the value of $100 - 40 \div 5 \times 2 + 2$?

- Ans**
- 1. 82
 - 2. 78
 - 3. 86
 - 4. 84

Question ID : 264330190087

Option 1 ID : 264330743932

Option 2 ID : 264330743933

Option 3 ID : 264330743931

Option 4 ID : 264330743930

Status : Answered

Chosen Option : 3

Q.19 If 60% of a quantity is 120, what is the quantity?

- Ans**
- 1. 200
 - 2. 250
 - 3. 240
 - 4. 220

Question ID : 264330188499

Option 1 ID : 264330737800

Option 2 ID : 264330737801

Option 3 ID : 264330737798

Option 4 ID : 264330737799

Status : Answered

Chosen Option : 1

Q.20 Which of the following ratio is smallest?

- A) 8:9
- B) 2:5
- C) 7:11

Ans ✓ 1. B

- ✗ 2. Both A and C
- ✗ 3. C
- ✗ 4. A

Question ID : 264330192400

Option 1 ID : 264330752955

Option 2 ID : 264330752957

Option 3 ID : 264330752956

Option 4 ID : 264330752954

Status : Answered

Chosen Option : 1

Section : Part-D-English

Q.1 Select the sentence with no spelling errors.

Ans ✓ 1. He made several excursions in the tribal habitats there.

- ✗ 2. He made several excursions in the tribel habitats there.
- ✗ 3. He made several excursions in the tribal habitats there.
- ✗ 4. He made several excursions in the tribal habetats there.

Question ID : 264330185622

Option 1 ID : 264330726855

Option 2 ID : 264330726852

Option 3 ID : 264330726854

Option 4 ID : 264330726853

Status : Answered

Chosen Option : 1

Q.2 Select the most appropriate option for the given blank.

Don't _____ your energy on random things, and try to focus.

- Ans
- ✗ 1. kick
 - ✗ 2. hold
 - ✗ 3. haste
 - ✓ 4. waste

Question ID : 264330186779

Option 1 ID : 264330731260

Option 2 ID : 264330731263

Option 3 ID : 264330731261

Option 4 ID : 264330731262

Status : Answered

Chosen Option : 4

Q.3 Select the most appropriate synonym of the given word.

Circumstance

- Ans
- 1. Superficial
 - 2. Plan
 - 3. Whole
 - 4. Accident

Question ID : 264330186814
Option 1 ID : 264330731392
Option 2 ID : 264330731394
Option 3 ID : 264330731395
Option 4 ID : 264330731393
Status : Answered
Chosen Option : 4

Q.4 Find the part of the given sentence that has an error in it. If there is no error, choose 'No error'.

I want you to enrol in the well college.

- Ans
- 1. to enrol in
 - 2. I want you
 - 3. the well college
 - 4. No error

Question ID : 264330186613
Option 1 ID : 264330730629
Option 2 ID : 264330730628
Option 3 ID : 264330730630
Option 4 ID : 264330730631
Status : Answered
Chosen Option : 3

Q.5 Identify the segment that contains a grammatical error. If there is no error, select 'No error'.

Since you are so kind, / I would not run contrary / to your opinions.

- Ans
- 1. Since you are so kind,
 - 2. I would not run contrary
 - 3. to your opinions.
 - 4. No error

Question ID : 264330186572
Option 1 ID : 264330730472
Option 2 ID : 264330730473
Option 3 ID : 264330730474
Option 4 ID : 264330730475
Status : Answered
Chosen Option : 2

Q.6 Four words are given, out of which only one word is spelt correct. Choose the correct spelt word.

- Ans**
- 1. RECCOMMEND
 - 2. SIEZE
 - 3. PUBLICLY
 - 4. SECRETERY

Question ID : 264330186882
Option 1 ID : 264330731655
Option 2 ID : 264330731654
Option 3 ID : 264330731653
Option 4 ID : 264330731652
Status : Answered
Chosen Option : 2

Q.7 Find the part of the given sentence that has an error in it. If there is no error, choose 'No error'.

I didn't knew that she was coming to your house.

- Ans**
- 1. coming to your house.
 - 2. that she was
 - 3. I didn't knew
 - 4. No error

Question ID : 264330186023
Option 1 ID : 264330728382
Option 2 ID : 264330728381
Option 3 ID : 264330728380
Option 4 ID : 264330728383
Status : Answered
Chosen Option : 3

Q.8 In the following question, out of the given four alternatives, select the alternative which best expresses the meaning of the Idiom/Phrase.

To turn one's coat

- Ans**
- 1. A person who changes from one opinion to an opposite one
 - 2. To leave without informing
 - 3. To sell old clothes
 - 4. To lose one's humanity

Question ID : 264330185829
Option 1 ID : 264330727642
Option 2 ID : 264330727640
Option 3 ID : 264330727641
Option 4 ID : 264330727643
Status : Answered
Chosen Option : 1

Q.9 Select the most appropriate meaning of the given idiom

Go down like a lead balloon

Ans 1.

Put yourself in a tough position in order to support someone/ something

2. Surrender

3. To gamble everything you have

4. To be received badly by an audience

Question ID : 264330186419

Option 1 ID : 264330729890

Option 2 ID : 264330729891

Option 3 ID : 264330729889

Option 4 ID : 264330729888

Status : Answered

Chosen Option : 1

Q.10 Improve the underlined part of the sentence. Choose 'No improvement' as an answer if the sentence is grammatically correct.

I don't think they knows what they're doing.

Ans 1. had knew what

2. know what

3. No improvement

4. known what

Question ID : 264330186048

Option 1 ID : 264330728478

Option 2 ID : 264330728477

Option 3 ID : 264330728479

Option 4 ID : 264330728476

Status : Answered

Chosen Option : 2

Q.11 Select the most appropriate word to fill in the blank.

Leave now; _____ you'll be late.

Ans 1. otherwise

2. until

3. if

4. unless

Question ID : 264330186323

Option 1 ID : 264330729526

Option 2 ID : 264330729525

Option 3 ID : 264330729527

Option 4 ID : 264330729524

Status : Answered

Chosen Option : 1

Q.12 Choose the most appropriate antonym of the underlined word,

I shirked duty in pursuit of a good sleep, incurring my mom's wrath this morning.

- Ans
- 1. Hate
 - 2. Indolence
 - 3. Ease
 - 4. Fury

Question ID : 264330186732
Option 1 ID : 264330731083
Option 2 ID : 264330731081
Option 3 ID : 264330731082
Option 4 ID : 264330731080
Status : Answered
Chosen Option : 1

Q.13 Select the most appropriate word to fill in the blank.

I called your name wrong _____ mistake.

- Ans
- 1. on
 - 2. with
 - 3. by
 - 4. at

Question ID : 264330186133
Option 1 ID : 264330728802
Option 2 ID : 264330728801
Option 3 ID : 264330728803
Option 4 ID : 264330728800
Status : Answered
Chosen Option : 3

Q.14 Select the most appropriate word to fill in the blank.

A shiver of fear ran _____ me when the lights went out.

- Ans
- 1. through
 - 2. above
 - 3. about
 - 4. to

Question ID : 264330186134
Option 1 ID : 264330728804
Option 2 ID : 264330728806
Option 3 ID : 264330728805
Option 4 ID : 264330728807
Status : Answered
Chosen Option : 4

Q.15 Select the most appropriate antonym of the given word.

Seasonable

- Ans
- 1. Timeous
 - 2. Towardly
 - 3. Inappropriate
 - 4. Kind

Question ID : 264330186521

Option 1 ID : 264330730276

Option 2 ID : 264330730277

Option 3 ID : 264330730278

Option 4 ID : 264330730279

Status : Answered

Chosen Option : 3

Comprehension:

Read the passage carefully and select the correct answer for the given blanks out of the four alternatives.

Psychology is an exciting field and the history of psychology (1) _____ the opportunity to make sense of how it has grown and (2) _____. The history of psychology also provides perspective. Rather than a dry collection of names and dates, the history of psychology tells us about the important intersection of time and place that (3) _____ who we are. Consider what happens when you meet someone for the first time. The conversation usually begins with a (4) _____ of questions such as, "Where did you grow up?" "How long have you lived here?" "Where did you go to school?" The importance of history in defining (5) _____ we are cannot be overstated.

SubQuestion No : 16

Q.16 Select the most appropriate option for blank(1)

- Ans
- 1. pieces
 - 2. makes
 - 3. offers
 - 4. talks

Question ID : 264330186620

Option 1 ID : 264330730652

Option 2 ID : 264330730653

Option 3 ID : 264330730655

Option 4 ID : 264330730654

Status : Answered

Chosen Option : 3

Comprehension:

Read the passage carefully and select the correct answer for the given blanks out of the four alternatives.

Psychology is an exciting field and the history of psychology (1) _____ the opportunity to make sense of how it has grown and (2) _____. The history of psychology also provides perspective. Rather than a dry collection of names and dates, the history of psychology tells us about the important intersection of time and place that (3) _____ who we are. Consider what happens when you meet someone for the first time. The conversation usually begins with a (4) _____ of questions such as, "Where did you grow up?" "How long have you lived here?" "Where did you go to school?" The importance of history in defining (5) _____ we are cannot be overstated.

SubQuestion No : 17

Q.17 Select the most appropriate option for blank(2)

- Ans**
- 1. solved
 - 2. juggled
 - 3. developed
 - 4. erupted

Question ID : 264330186621

Option 1 ID : 264330730656

Option 2 ID : 264330730659

Option 3 ID : 264330730657

Option 4 ID : 264330730658

Status : Answered

Chosen Option : 3

Comprehension:

Read the passage carefully and select the correct answer for the given blanks out of the four alternatives.

Psychology is an exciting field and the history of psychology (1) _____ the opportunity to make sense of how it has grown and (2) _____. The history of psychology also provides perspective. Rather than a dry collection of names and dates, the history of psychology tells us about the important intersection of time and place that (3) _____ who we are. Consider what happens when you meet someone for the first time. The conversation usually begins with a (4) _____ of questions such as, "Where did you grow up?" "How long have you lived here?" "Where did you go to school?" The importance of history in defining (5) _____ we are cannot be overstated.

SubQuestion No : 18

Q.18 Select the most appropriate option for blank(3)

- Ans**
- 1. defines
 - 2. mends
 - 3. conceals
 - 4. transports

Question ID : 264330186622

Option 1 ID : 264330730662

Option 2 ID : 264330730663

Option 3 ID : 264330730661

Option 4 ID : 264330730660

Status : Answered

Chosen Option : 1

Comprehension:

Read the passage carefully and select the correct answer for the given blanks out of the four alternatives.

Psychology is an exciting field and the history of psychology (1) _____ the opportunity to make sense of how it has grown and (2) _____. The history of psychology also provides perspective. Rather than a dry collection of names and dates, the history of psychology tells us about the important intersection of time and place that (3) _____ who we are. Consider what happens when you meet someone for the first time. The conversation usually begins with a (4) _____ of questions such as, "Where did you grow up?" "How long have you lived here?" "Where did you go to school?" The importance of history in defining (5) _____ we are cannot be overstated.

SubQuestion No : 19

Q.19 Select the most appropriate option for blank(4)

- Ans**
- 1. pairs
 - 2. classes
 - 3. series
 - 4. parts

Question ID : 264330186623

Option 1 ID : 264330730667

Option 2 ID : 264330730665

Option 3 ID : 264330730664

Option 4 ID : 264330730666

Status : Answered

Chosen Option : 3

Comprehension:

Read the passage carefully and select the correct answer for the given blanks out of the four alternatives.

Psychology is an exciting field and the history of psychology (1) _____ the opportunity to make sense of how it has grown and (2) _____. The history of psychology also provides perspective. Rather than a dry collection of names and dates, the history of psychology tells us about the important intersection of time and place that (3) _____ who we are. Consider what happens when you meet someone for the first time. The conversation usually begins with a (4) _____ of questions such as, "Where did you grow up?" "How long have you lived here?" "Where did you go to school?" The importance of history in defining (5) _____ we are cannot be overstated.

SubQuestion No : 20

Q.20 Select the most appropriate option for blank(5)

- Ans**
- 1. whom
 - 2. that
 - 3. who
 - 4. which

Question ID : 264330186624

Option 1 ID : 264330730668

Option 2 ID : 264330730671

Option 3 ID : 264330730669

Option 4 ID : 264330730670

Status : Answered

Chosen Option : 2

Q.1 निम्नलिखित प्रश्न में, चार विकल्पों में से, उस विकल्प का चयन करें जो रिक्त स्थान के लिए सही भाववाचक संज्ञा वाला विकल्प हो।
विकास की आवाज़ में बहुत _____ है।

- Ans
- ✓ 1. मिठास
 - ✗ 2. खटास
 - ✗ 3. प्यास
 - ✗ 4. दर्दनाक

Question ID : 264330188372
Option 1 ID : 264330737367
Option 2 ID : 264330737364
Option 3 ID : 264330737365
Option 4 ID : 264330737366
Status : Not Answered
Chosen Option : --

Q.2 निम्नलिखित प्रश्न में, चार विकल्पों में से, उस विकल्प का चयन करें जो दिए गए मुहावरे का सही अर्थ वाला विकल्प है।
दाम लगाना

- Ans
- ✗ 1. मोलभाव करना
 - ✗ 2. कुछ पैसे देना
 - ✓ 3. मूल्य आँकना
 - ✗ 4. पैसे देने में आनाकानी करना

Question ID : 264330189871
Option 1 ID : 264330743108
Option 2 ID : 264330743107
Option 3 ID : 264330743106
Option 4 ID : 264330743109
Status : Not Answered
Chosen Option : --

Q.3 निम्नलिखित प्रश्न में, चार विकल्पों में से, उस विकल्प का चयन करें जो कोष्ठक में दिए गए शब्द के विलोम शब्द का सही विकल्प है।
मेरे (अग्रज) _____ बहुत ही जानकार व्यक्ति हैं।

- Ans
- ✗ 1. अनजान
 - ✓ 2. अनुज
 - ✗ 3. संकेत
 - ✗ 4. भाई

Question ID : 264330189870
Option 1 ID : 264330743104
Option 2 ID : 264330743103
Option 3 ID : 264330743105
Option 4 ID : 264330743102
Status : Not Answered
Chosen Option : --

Q.4 दिए गए शब्द का पर्यायवाची ज्ञात कीजिए।

अनाथ

- Ans
- 1. आज्ञा
 - 2. नाथहीन
 - 3. समान
 - 4. सम्मान

Question ID : 264330188173

Option 1 ID : 264330736604

Option 2 ID : 264330736605

Option 3 ID : 264330736606

Option 4 ID : 264330736607

Status : Not Answered

Chosen Option : --

Q.5 दिए गए वाक्यांश के लिए सार्थक शब्द ज्ञात कीजिए।

समुद्र में लगने वाली आग

- Ans
- 1. समिधा
 - 2. जठराग्नि
 - 3. दावाग्नि
 - 4. बड़वाग्नि

Question ID : 264330189068

Option 1 ID : 264330740048

Option 2 ID : 264330740049

Option 3 ID : 264330740047

Option 4 ID : 264330740046

Status : Not Answered

Chosen Option : --

Q.6 निम्नलिखित प्रश्न में, दिए गए चार विकल्पों में से, उस विकल्प का चयन करें जो दिए गए मुहावरे के अर्थ को सर्वश्रेष्ठ रूप से व्यक्त करता है।

नेकी और पूछ-पूछ

- Ans
- 1. गलत काम कर के सफाई देना
 - 2. पूछ के ही कोई काम करना
 - 3. भलाई करने में क्या पूछना
 - 4. काम करने के लिए स्वयं समर्थ न होना

Question ID : 264330190019

Option 1 ID : 264330743670

Option 2 ID : 264330743672

Option 3 ID : 264330743671

Option 4 ID : 264330743673

Status : Not Answered

Chosen Option : --

Q.7 निम्नलिखित वाक्य में, उस वाक्यांश को पहचानिए जिसमें मात्राओं से संबंधित अशुद्धियाँ हैं। यदि कोई गलती नहीं है तो 'कोई त्रुटि नहीं है' का चुनाव कीजिए।
पर्यावरण के प्रति लोगों को उसका महत्व समझाने/ और जागरूकता लाने के लिए हर साल 5 जून का दिन/ 'विश्व पर्यावरण दिवस' के रूप में मनाया जाता है।

- Ans
- ✗ 1. पर्यावरण के प्रति लोगों को उसका महत्व समझाने
 - ✗ 2. और जागरूकता लाने के लिए हर साल 5 जून का दिन
 - ✗ 3. 'विश्व पर्यावरण दिवस' के रूप में मनाया जाता है
 - ✓ 4. कोई त्रुटि नहीं है

Question ID : 264330189538
Option 1 ID : 264330741838
Option 2 ID : 264330741839
Option 3 ID : 264330741840
Option 4 ID : 264330741841
Status : Not Answered
Chosen Option : --

Q.8 निम्नलिखित प्रश्न में, चार विकल्पों में से, उस सही विकल्प का चयन करें जो वाक्यांश के लिए एक शब्द का विकल्प हो।
पत्थर को गढ़ने वाला औज़ार

- Ans
- ✓ 1. छेनी
 - ✗ 2. छावनी
 - ✗ 3. जंगम
 - ✗ 4. चम्पू

Question ID : 264330188360
Option 1 ID : 264330737316
Option 2 ID : 264330737318
Option 3 ID : 264330737317
Option 4 ID : 264330737319
Status : Not Answered
Chosen Option : --

Q.9 निम्नलिखित प्रश्न में, चार विकल्पों में से, उस विकल्प का चयन करें जो कोष्ठक में दिए गए शब्द के तद्भव रूप का सही विकल्प है।
आज बहुत दिनों बाद बाहर (अर्द्ध) _____ चाँद दिखाई दे रहा है।

- Ans
- ✗ 1. गोत
 - ✗ 2. अक्षवाट
 - ✗ 3. गीध
 - ✓ 4. आधा

Question ID : 264330189686
Option 1 ID : 264330742404
Option 2 ID : 264330742405
Option 3 ID : 264330742402
Option 4 ID : 264330742403
Status : Not Answered
Chosen Option : --

Q.10 दिए गए वाक्य का वह भाग ज्ञात करें, जिसमें कोई त्रुटि है।
आज नई शिक्षा नीति के ऊपर चर्चा होगी और फैसला लिया जाएगा।

- Ans
- ✗ 1. फैसला लिया जाएगा।
 - ✗ 2. आज नई शिक्षा
 - ✗ 3. चर्चा होगी और
 - ✓ 4. नीति के ऊपर

Question ID : 264330189101
Option 1 ID : 264330740177
Option 2 ID : 264330740174
Option 3 ID : 264330740176
Option 4 ID : 264330740175
Status : Not Answered
Chosen Option : --

Q.11 दिए गए वाक्य में उचित पर्यायवाची शब्द का चयन करके रिक्त स्थान की पूर्ति करें।
_____ (बुद्धिमान) वही है जो दूसरों को माफ कर दें।

- Ans
- ✓ 1. ज्ञानी
 - ✗ 2. कुल
 - ✗ 3. घर
 - ✗ 4. दोषी

Question ID : 264330188153
Option 1 ID : 264330736530
Option 2 ID : 264330736531
Option 3 ID : 264330736528
Option 4 ID : 264330736529
Status : Not Answered
Chosen Option : --

Q.12 दिए गए वाक्य में से निरर्थक शब्द ज्ञात कीजिए।

तूफान की वजह से अनेक पेड़-वेड़ गिर गए हैं।

- Ans
- ✓ 1. -वेड़
 - ✗ 2. वजह
 - ✗ 3. तूफान
 - ✗ 4. अनेक

Question ID : 264330189078
Option 1 ID : 264330740089
Option 2 ID : 264330740087
Option 3 ID : 264330740086
Option 4 ID : 264330740088
Status : Not Answered
Chosen Option : --

Q.13 दिए गए शब्द का विलोम शब्द ज्ञात कीजिए।

कटु

- Ans
- 1. नरम
 - 2. सुख
 - 3. शब्दहीन
 - 4. मृदु

Question ID : 264330188196

Option 1 ID : 264330736692

Option 2 ID : 264330736693

Option 3 ID : 264330736694

Option 4 ID : 264330736695

Status : Not Answered

Chosen Option : --

Q.14 निम्नलिखित वाक्य में, उस वाक्यांश को पहचानिए जिसमें मात्राओं से संबंधित अशुद्धियाँ हैं। यदि कोई गलती नहीं है तो 'कोई त्रुटि नहीं है' का चुनाव कीजिए।
राष्ट्रीय ध्वज ही किसी भी देश का प्रतीक होता है, जिससे यह पता लगा जा पाता है कि उस देश का अतीत क्यों है, उस देश का वर्तमान क्या है और देश का भविष्य क्या है।

Ans 1.

जिससे यह पता लगा जा पाता है कि उस देश का अतीत क्यों है

- 2. राष्ट्रीय ध्वज ही किसी भी देश का प्रतीक होता है
- 3. कोई त्रुटि नहीं है
- 4. उस देश का वर्तमान क्या है और देश का भविष्य क्या है

Question ID : 264330189537

Option 1 ID : 264330741835

Option 2 ID : 264330741834

Option 3 ID : 264330741837

Option 4 ID : 264330741836

Status : Not Answered

Chosen Option : --

Q.15 निम्नलिखित वाक्य में रेखांकित भाग के लिए एक सार्थक शब्द ज्ञात कीजिए।

यहाँ आकाश को चूमने वाली कई इमारतें हैं।

- Ans
- 1. बेमिसाल
 - 2. गगनचुम्बी
 - 3. ऊंची
 - 4. विशाल

Question ID : 264330189488

Option 1 ID : 264330741649

Option 2 ID : 264330741648

Option 3 ID : 264330741646

Option 4 ID : 264330741647

Status : Not Answered

Chosen Option : --

Comprehension:

नीचे दिए गए गद्य में कुछ शब्द छोड़ दिए गए हैं और प्रत्येक रिक्त स्थान के चार विकल्प दिए गए हैं। इन चारों में से कौन सा विकल्प रिक्त स्थान की पूर्ति करेगा-

तकनीक के (1)_____ को लेकर प्रधानमंत्री नरेंद्र मोदी ने जो (2)_____ जताई वह यह बताती है कि उसके गलत (3)_____ की प्रवृत्ति बढ़ती जा रही है। दिल्ली में मुख्यालय में दीपावली मिलन (4)_____ को संबोधित करते हुए प्रधानमंत्री ने यह (5)_____ दी कि उनका भी डीपफेक वीडियो सामने आया है।

SubQuestion No : 16

Q.16 रिक्त (1) के लिए सबसे उपयुक्त विकल्प का चयन कीजिए।

- Ans
- 1. उपयोग
 - 2. पकड़
 - 3. इच्छा
 - 4. दुरूपयोग

Question ID : 264330189083

Option 1 ID : 264330740103

Option 2 ID : 264330740104

Option 3 ID : 264330740105

Option 4 ID : 264330740102

Status : Not Answered

Chosen Option : --

Comprehension:

नीचे दिए गए गद्य में कुछ शब्द छोड़ दिए गए हैं और प्रत्येक रिक्त स्थान के चार विकल्प दिए गए हैं। इन चारों में से कौन सा विकल्प रिक्त स्थान की पूर्ति करेगा-

तकनीक के (1)_____ को लेकर प्रधानमंत्री नरेंद्र मोदी ने जो (2)_____ जताई वह यह बताती है कि उसके गलत (3)_____ की प्रवृत्ति बढ़ती जा रही है। दिल्ली में मुख्यालय में दीपावली मिलन (4)_____ को संबोधित करते हुए प्रधानमंत्री ने यह (5)_____ दी कि उनका भी डीपफेक वीडियो सामने आया है।

SubQuestion No : 17

Q.17 रिक्त (2) के लिए सबसे उपयुक्त विकल्प का चयन कीजिए।

- Ans
- 1. आवश्यकता
 - 2. बधाई
 - 3. गलत
 - 4. चिंता

Question ID : 264330189084

Option 1 ID : 264330740106

Option 2 ID : 264330740108

Option 3 ID : 264330740109

Option 4 ID : 264330740107

Status : Not Answered

Chosen Option : --

Comprehension:

नीचे दिए गए गद्य में कुछ शब्द छोड़ दिए गए हैं और प्रत्येक रिक्त स्थान के चार विकल्प दिए गए हैं। इन चारों में से कौन सा विकल्प रिक्त स्थान की पूर्ति करेगा-

तकनीक के (1)_____ को लेकर प्रधानमंत्री नरेंद्र मोदी ने जो (2)_____ जताई वह यह बताती है कि उसके गलत (3)_____ की प्रवृत्ति बढ़ती जा रही है। दिल्ली में मुख्यालय में दीपावली मिलन (4)_____ को संबोधित करते हुए प्रधानमंत्री ने यह (5)_____ दी कि उनका भी डीपफेक वीडियो सामने आया है।

SubQuestion No : 18

Q.18 रिक्त (3) के लिए सबसे उपयुक्त विकल्प का चयन कीजिए।

- Ans
- 1. प्रकाश
 - 2. अधिकारी
 - 3. सुशील
 - 4. इस्तेमाल

Question ID : 264330189085

Option 1 ID : 264330740112

Option 2 ID : 264330740110

Option 3 ID : 264330740111

Option 4 ID : 264330740113

Status : Not Answered

Chosen Option : --

Comprehension:

नीचे दिए गए गद्य में कुछ शब्द छोड़ दिए गए हैं और प्रत्येक रिक्त स्थान के चार विकल्प दिए गए हैं। इन चारों में से कौन सा विकल्प रिक्त स्थान की पूर्ति करेगा-

तकनीक के (1)_____ को लेकर प्रधानमंत्री नरेंद्र मोदी ने जो (2)_____ जताई वह यह बताती है कि उसके गलत (3)_____ की प्रवृत्ति बढ़ती जा रही है। दिल्ली में मुख्यालय में दीपावली मिलन (4)_____ को संबोधित करते हुए प्रधानमंत्री ने यह (5)_____ दी कि उनका भी डीपफेक वीडियो सामने आया है।

SubQuestion No : 19

Q.19 रिक्त (4) के लिए सबसे उपयुक्त विकल्प का चयन कीजिए।

- Ans
- 1. घटना
 - 2. शोक
 - 3. समारोह
 - 4. कार्यालय

Question ID : 264330189086

Option 1 ID : 264330740115

Option 2 ID : 264330740114

Option 3 ID : 264330740116

Option 4 ID : 264330740117

Status : Not Answered

Chosen Option : --

Comprehension:

नीचे दिए गए गद्य में कुछ शब्द छोड़ दिए गए हैं और प्रत्येक रिक्त स्थान के चार विकल्प दिए गए हैं। इन चारों में से कौन सा विकल्प रिक्त स्थान की पूर्ति करेगा-

तकनीक के (1)_____ को लेकर प्रधानमंत्री नरेंद्र मोदी ने जो (2)_____ जताई वह यह बताती है कि उसके गलत (3)_____ की प्रवृत्ति बढ़ती जा रही है। दिल्ली में मुख्यालय में दीपावली मिलन (4)_____ को संबोधित करते हुए प्रधानमंत्री ने यह (5)_____ दी कि उनका भी डीपफेक वीडियो सामने आया है।

SubQuestion No : 20

Q.20 रिक्त (5) के लिए सबसे उपयुक्त विकल्प का चयन कीजिए।

- Ans
- 1. उत्साह
 - 2. जानकारी
 - 3. बताया
 - 4. समझाया

Question ID : 264330189087

Option 1 ID : 264330740121

Option 2 ID : 264330740119

Option 3 ID : 264330740118

Option 4 ID : 264330740120

Status : Not Answered

Chosen Option : --