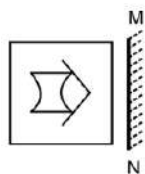


Constable GD in Central Armed Police Forces CAPFs SSF Rifleman GD in Assam Rifles Examination 2024

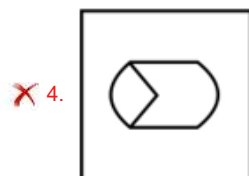
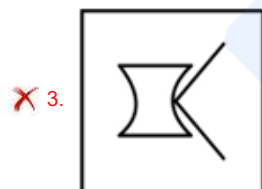
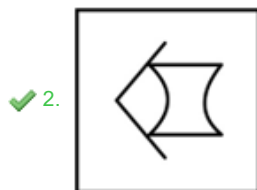
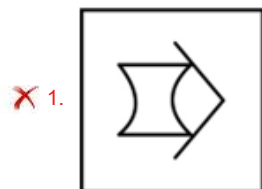
Roll Number	
Candidate Name	
Venue Name	
Exam Date	06/03/2024
Exam Time	5:00 PM - 6:00 PM
Subject	Constable GD Examination 2024

Section : Part-A-General Intelligence and Reasoning

Q.1 Select the correct mirror image of the given figure when the mirror MN is placed to the right side of the figure.



Ans



Question ID : 264330192226

Option 1 ID : 264330752260

Option 2 ID : 264330752259

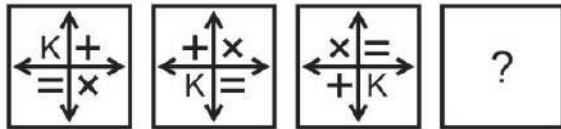
Option 3 ID : 264330752261

Option 4 ID : 264330752258

Status : Answered

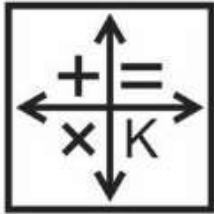
Chosen Option : 2

Q.2 In the following question, select the figure which can be placed at the sign of question mark (?) from the given alternatives.

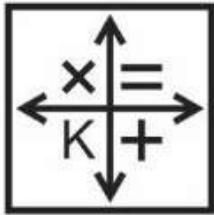


Ans

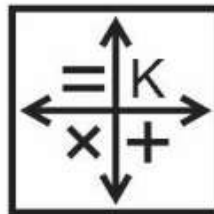
✗ 1.



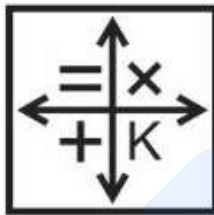
✗ 2.



✓ 3.



✗ 4.



Question ID : 264330190222

Option 1 ID : 264330744472

Option 2 ID : 264330744473

Option 3 ID : 264330744471

Option 4 ID : 264330744470

Status : Answered

Chosen Option : 3

Q.3 Which of the following letter clusters will replace the question mark (?) in the given series?

T, R, ?, N, L, J

Ans ✗ 1. T

✗ 2. R

✗ 3. S

✓ 4. P

Question ID : 264330191568

Option 1 ID : 264330749629

Option 2 ID : 264330749626

Option 3 ID : 264330749627

Option 4 ID : 264330749628

Status : Answered

Chosen Option : 4

Q.4 In the following question below are given some statements followed by some conclusions based on those statements. Taking the given statements to be true even if they seem to be at variance from commonly known facts. Read all the conclusions and then decide which of the given conclusion logically follows the given statements.

Statements:

- I. Some fan are table.
- II. All fan are kite.

Conclusions:

- I. Some kite are table.
- II. All table are fan.
- III. All kite are fan.

- Ans**
- 1. Both conclusions I and III follows
 - 2. Only conclusion I follows
 - 3. Neither conclusion follows
 - 4. Only conclusion II follows

Question ID : 264330190177

Option 1 ID : 264330744291

Option 2 ID : 264330744292

Option 3 ID : 264330744293

Option 4 ID : 264330744290

Status : Answered

Chosen Option : 2

Q.5 Five friends P, B, C, G and H are sitting around a circular table facing towards the centre. B is sitting to the immediate left of C. G and H are not the immediate neighbour of C. H is sitting second to the right of P. Who is sitting on the immediate left of G?

- Ans**
- 1. B
 - 2. H
 - 3. P
 - 4. C

Question ID : 264330188027

Option 1 ID : 264330736038

Option 2 ID : 264330736039

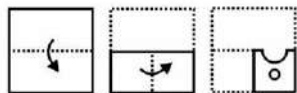
Option 3 ID : 264330736037

Option 4 ID : 264330736036

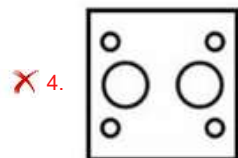
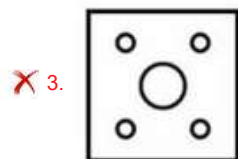
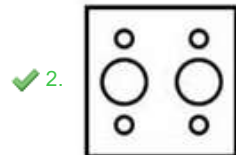
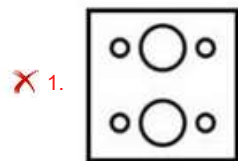
Status : Answered

Chosen Option : 3

Q.6 A piece of paper is folded and punched as shown below in the question figures, indicate how it will appear when opened?



Ans



Question ID : 264330190564
 Option 1 ID : 264330745840
 Option 2 ID : 264330745841
 Option 3 ID : 264330745838
 Option 4 ID : 264330745839
 Status : Answered
 Chosen Option : 2

Q.7 In the following question, select the missing number from the given series.

10, 12, 14, 16, 18, ?

- Ans**
- ✓ 1. 20
 - ✗ 2. 19
 - ✗ 3. 24
 - ✗ 4. 22

Question ID : 264330187390
 Option 1 ID : 264330733488
 Option 2 ID : 264330733490
 Option 3 ID : 264330733491
 Option 4 ID : 264330733489
 Status : Answered
 Chosen Option : 1

Q.8 If $10A6B8C14 = 22$ and $8A3B9C7 = 9$, then $65A30B20C10 = ?$

- Ans
- 1. 85
 - 2. 80
 - 3. 95
 - 4. 100

Question ID : 264330191342
Option 1 ID : 264330748723
Option 2 ID : 264330748722
Option 3 ID : 264330748724
Option 4 ID : 264330748725
Status : Not Answered
Chosen Option : --

Q.9 Which of the following groups of letters when sequentially placed from left to right will complete the given series?

tu_wtuvwvtuvvt_vwtuvvt_v_

- Ans
- 1. tutu
 - 2. wvvt
 - 3. vuuw
 - 4. wwuv

Question ID : 264330190128
Option 1 ID : 264330744095
Option 2 ID : 264330744094
Option 3 ID : 264330744096
Option 4 ID : 264330744097
Status : Answered
Chosen Option : 3

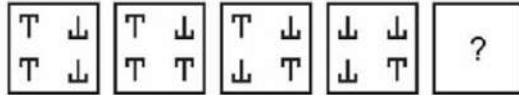
Q.10 In the following question, select the missing number from the given series.

0, 5, -8, 13, ?, 21

- Ans
- 1. -16
 - 2. -10
 - 3. -9
 - 4. 0


Question ID : 264330190259
Option 1 ID : 264330744618
Option 2 ID : 264330744621
Option 3 ID : 264330744620
Option 4 ID : 264330744619
Status : Answered
Chosen Option : 3

Q.11 In the following question, select the figure which can be placed at the sign of question mark (?) from the given alternatives.



Ans

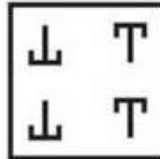
✗ 1.



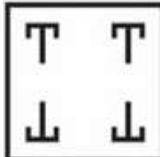
✗ 2.



✓ 3.



✗ 4.



Question ID : 264330190443

Option 1 ID : 264330745356

Option 2 ID : 264330745355

Option 3 ID : 264330745357

Option 4 ID : 264330745354

Status : Answered

Chosen Option : 3

Q.12 Arrange the given words in the sequence in which they occur in the dictionary.

1. Exceed

2. Excise

3. Excite

4. Excess

5. Excel

Ans ✓ 1. 1, 5, 4, 2, 3

✗ 2. 1, 5, 2, 4, 3

✗ 3. 5, 3, 4, 1, 2

✗ 4. 5, 3, 4, 2, 1

Question ID : 264330190189

Option 1 ID : 264330744339

Option 2 ID : 264330744338

Option 3 ID : 264330744341

Option 4 ID : 264330744340

Status : Answered

Chosen Option : 1

Q.13 Eight teachers Kamal, Abhi, Gopal, Hemlata, Rachit, Palak, Kajal and Luna are sitting around a circular table facing opposite to the centre (not necessarily in the same order). Abhi is second to the left of Hemlata. Palak is third to the right of Hemlata. Gopal is second to the right of Kamal. Palak is second to the left of Kamal. Kajal is third to the left of Rachit. Who is sitting second to the left of Hemlata?

- Ans**
- 1. Rachit
 - 2. Abhi
 - 3. Luna
 - 4. Palak

Question ID : 264330187148

Option 1 ID : 264330732521

Option 2 ID : 264330732523

Option 3 ID : 264330732520

Option 4 ID : 264330732522

Status : Answered

Chosen Option : 2

Q.14 In a certain code language, if SCARF is coded as CRFSA, SHIRT is coded as HRTSI, then what will SHOES be coded as?

- Ans**
- 1. HEOSS
 - 2. ESHSO
 - 3. HESSO
 - 4. HSESO

Question ID : 264330192154

Option 1 ID : 264330751972

Option 2 ID : 264330751973

Option 3 ID : 264330751970

Option 4 ID : 264330751971

Status : Answered

Chosen Option : 3

Q.15 Select the option that is related to the fifth letter cluster in the same way as the fourth letter cluster is related to the third letter cluster and the second letter cluster is related to the first letter cluster.

YEN : XZDFMO :: KIT : JIHISU :: JET : ?

- Ans**
- 1. KIFDUS
 - 2. DKIUFS
 - 3. IKDFSU
 - 4. USFDKI

Question ID : 264330192371

Option 1 ID : 264330752838

Option 2 ID : 264330752839

Option 3 ID : 264330752841

Option 4 ID : 264330752840

Status : Answered

Chosen Option : 3

Q.16 'Q × R' means 'Q is the mother of R'
 'Q + R' means 'Q is the husband of R'
 'Q ÷ R' means 'Q is the daughter of R'
 'Q - R' means 'Q is the brother of R'
 How is S related to J in the expression 'S × Z - W ÷ J'?

- Ans
- 1. Grandmother
 - 2. Wife
 - 3. Sister's daughter
 - 4. Wife's sister

Question ID : 264330192115

Option 1 ID : 264330751817

Option 2 ID : 264330751816

Option 3 ID : 264330751815

Option 4 ID : 264330751814

Status : Answered

Chosen Option : 2

Q.17 In the following question, select the related letter pair from the given alternatives.

MO : MN :: ?

- Ans
- 1. JR : EN
 - 2. UT : RQ
 - 3. KW : GT
 - 4. DF : DE

Question ID : 264330191372

Option 1 ID : 264330748844

Option 2 ID : 264330748843

Option 3 ID : 264330748842

Option 4 ID : 264330748845

Status : Answered

Chosen Option : 4

Q.18 By interchanging which two signs and two numbers (not digits) the equation will be correct?

$$5 + 9 - 3 \times 8 \div 2 = 10$$

- Ans
- 1. ÷ and ×, 9 and 3
 - 2. + and -, 5 and 3
 - 3. × and ÷, 5 and 3
 - 4. × and +, 9 and 3

Question ID : 264330190500

Option 1 ID : 264330745584

Option 2 ID : 264330745583

Option 3 ID : 264330745585

Option 4 ID : 264330745582

Status : Answered

Chosen Option : 4

Q.19 In a certain code language, if CHOSEN is coded as BGNNES, CLIENT is coded as BKHINE, then what will DEALER be coded as?

- Ans**
- 1. CDZKDQ
 - 2. RELCDZ
 - 3. CDZREL
 - 4. QDKZDC

Question ID : 264330192374
 Option 1 ID : 264330752850
 Option 2 ID : 264330752853
 Option 3 ID : 264330752851
 Option 4 ID : 264330752852
 Status : Answered
 Chosen Option : 1

Q.20 If a mirror is placed on the line AB, then out of the option figures which figure will be the right image of the question figure?



Ans

- 1.
- 2.
- 3.
- 4.

Question ID : 264330190266
 Option 1 ID : 264330744648
 Option 2 ID : 264330744646
 Option 3 ID : 264330744649
 Option 4 ID : 264330744647
 Status : Answered
 Chosen Option : 3

Q.1 With respect to trade and industry, what is 'SCOMET'?

- Ans
- 1. New special economic zone
 - 2. Framework for new trade policy in India
 - 3. India's National Export Control List
 - 4. Portal to list manufacturing items in e-market

Question ID : 264330188851

Option 1 ID : 264330739207

Option 2 ID : 264330739209

Option 3 ID : 264330739206

Option 4 ID : 264330739208

Status : Not Answered

Chosen Option : --

Q.2 In India, the Legal Services Authorities Act, _____ provides statutory status to the legal aid movement and it also provides for setting up of Legal Services Authorities at the Central, State and District levels.

- Ans
- 1. 1987
 - 2. 1985
 - 3. 1983
 - 4. 1981

Question ID : 264330190640

Option 1 ID : 264330746145

Option 2 ID : 264330746144

Option 3 ID : 264330746143

Option 4 ID : 264330746142

Status : Not Answered

Chosen Option : --

Q.3 According to the Indian Constitution, Right against exploitation, prohibiting all forms of _____ and traffic in human beings.

- Ans
- 1. Work
 - 2. Labour
 - 3. Services
 - 4. Forced Labour

Question ID : 264330191800

Option 1 ID : 264330750555

Option 2 ID : 264330750554

Option 3 ID : 264330750557

Option 4 ID : 264330750556

Status : Answered

Chosen Option : 4

Q.4 This famous classical dancer and choreographer is known for popularizing the Odissi dance form and founding the Nrityagram dance village. Who is she?

- Ans**
- 1. Rukmini Devi Arundale
 - 2. Sonal Mansingh
 - 3. Protima Gauri
 - 4. Sanjukta Panigrahi

Question ID : 264330191491
Option 1 ID : 264330749320
Option 2 ID : 264330749319
Option 3 ID : 264330749318
Option 4 ID : 264330749321
Status : Not Answered
Chosen Option : --

Q.5 Indian Space Policy, 2023 sets the stage for _____ participation in space industry.

- Ans**
- 1. private sector
 - 2. public sector
 - 3. Non-government Organisations
 - 4. joint sector

Question ID : 264330190927
Option 1 ID : 264330747063
Option 2 ID : 264330747062
Option 3 ID : 264330747065
Option 4 ID : 264330747064
Status : Answered
Chosen Option : 4

Q.6 _____, (born c. 350 BC—died c. 290), ancient Greek historian and diplomat, is author of Indica.

- Ans**
- 1. Seleucus I
 - 2. Xuanzang
 - 3. Megasthenes
 - 4. James Legge

Question ID : 264330190895
Option 1 ID : 264330746935
Option 2 ID : 264330746937
Option 3 ID : 264330746934
Option 4 ID : 264330746936
Status : Answered
Chosen Option : 3

Q.7 Rukmini Devi Arundale was associated with dance style?

- Ans
- 1. Kuchipudi
 - 2. Sattriya
 - 3. Bharatnatyam
 - 4. Kathak

Question ID : 264330191078
Option 1 ID : 264330747668
Option 2 ID : 264330747669
Option 3 ID : 264330747667
Option 4 ID : 264330747666
Status : Answered
Chosen Option : 4

Q.8 In any tennis game, first point is _____.

- Ans
- 1. 40
 - 2. 30
 - 3. 15
 - 4. 60

Question ID : 264330190663
Option 1 ID : 264330746236
Option 2 ID : 264330746234
Option 3 ID : 264330746235
Option 4 ID : 264330746237
Status : Not Answered
Chosen Option : --

Q.9 Which crops were primarily involved in the Green Revolution in India through the use of high-yielding variety (HYV) seeds?

- Ans
- 1. Cotton and jute
 - 2. Pulses and oilseeds
 - 3. Wheat and rice
 - 4. Fruits and vegetables

Question ID : 264330190865
Option 1 ID : 264330746815
Option 2 ID : 264330746816
Option 3 ID : 264330746814
Option 4 ID : 264330746817
Status : Answered
Chosen Option : 3

Q.10 Who of the following was famous for Punjabi folk song and for singing a long breathless alaap?

- Ans
- 1. Sheenam Katholic
 - 2. Nimrat Khaira
 - 3. Pranjal Dahiya
 - 4. Gurmeet Bawa

Question ID : 264330188862
Option 1 ID : 264330739253
Option 2 ID : 264330739251
Option 3 ID : 264330739252
Option 4 ID : 264330739250
Status : Not Answered
Chosen Option : --

Q.11 How many medals did India win in the ISSF World Championships 2023 at Baku?

- Ans
- 1. 10
 - 2. 18
 - 3. 14
 - 4. 22

Question ID : 264330190642
Option 1 ID : 264330746152
Option 2 ID : 264330746151
Option 3 ID : 264330746150
Option 4 ID : 264330746153
Status : Not Answered
Chosen Option : --

Q.12 Which one is not the cause of Poverty?

- Ans
- 1. Low level of productivity
 - 2. State Policies
 - 3. Slow growth of population
 - 4. Underdeveloped nature of economy

Question ID : 264330191855
Option 1 ID : 264330750775
Option 2 ID : 264330750776
Option 3 ID : 264330750777
Option 4 ID : 264330750774
Status : Answered
Chosen Option : 3

Q.13 Who among the following is the Director of the Ayushman Bharat Digital Mission appointed in January 2023?

- Ans
- 1. Rohit Kumar Sharma
 - 2. Praveen Sharma
 - 3. R S Sharma
 - 4. Sudhansh Pant

Question ID : 264330191970
Option 1 ID : 264330751236
Option 2 ID : 264330751234
Option 3 ID : 264330751235
Option 4 ID : 264330751237
Status : Answered
Chosen Option : 1

Q.14 Watt is the unit of _____.

- Ans
- 1. Power
 - 2. Energy
 - 3. Resistance
 - 4. Momentum

Question ID : 264330191773
Option 1 ID : 264330750449
Option 2 ID : 264330750447
Option 3 ID : 264330750448
Option 4 ID : 264330750446
Status : Answered
Chosen Option : 1

Q.15 Which city hosted the 2023 Asian games?

- Ans
- 1. Bangkok
 - 2. Jakarta
 - 3. Hangzhou
 - 4. Tokyo

Question ID : 264330191021
Option 1 ID : 264330747441
Option 2 ID : 264330747439
Option 3 ID : 264330747438
Option 4 ID : 264330747440
Status : Answered
Chosen Option : 4

Q.16 What is the function of the Reserve Bank of India (RBI), with respect to monetary policy?

- Ans
- 1. Issuing currency notes
 - 2. Regulating foreign trade
 - 3. Managing fiscal policy
 - 4. Collecting income taxes

Question ID : 264330191725
Option 1 ID : 264330750255
Option 2 ID : 264330750257
Option 3 ID : 264330750256
Option 4 ID : 264330750254
Status : Answered
Chosen Option : 3

Q.17 Who launched the 'Ayushman Bhava' campaign in 2023?

- Ans
- 1. Amit Shah
 - 2. Narendra Modi
 - 3. Rahul Gandhi
 - 4. Droupadi Murmu

Question ID : 264330190948
Option 1 ID : 264330747149
Option 2 ID : 264330747147
Option 3 ID : 264330747148
Option 4 ID : 264330747146
Status : Answered
Chosen Option : 2

Q.18 India shares its land border with how many countries?

- Ans
- 1. Eight
 - 2. Seven
 - 3. Five
 - 4. Six

Question ID : 264330188858
Option 1 ID : 264330739237
Option 2 ID : 264330739236
Option 3 ID : 264330739234
Option 4 ID : 264330739235
Status : Answered
Chosen Option : 2

Q.19 The Nuakhai festival is mainly seen in which state?

- Ans
- 1. Rajasthan
 - 2. Haryana
 - 3. Himachal Pradesh
 - 4. Odisha

Question ID : 264330191892
Option 1 ID : 264330750924
Option 2 ID : 264330750923
Option 3 ID : 264330750922
Option 4 ID : 264330750925
Status : Not Answered
Chosen Option : --

Q.20 _____ founded the Satyashodhak Samaj (Truth Seekers' Society) in 1873.

- Ans
- 1. Jyotiba Phule
 - 2. Mahadev Govind Ranade
 - 3. Debendra Nath Tagore
 - 4. Dr. Atma Ram Pandurang

Question ID : 264330191797
Option 1 ID : 264330750543
Option 2 ID : 264330750542
Option 3 ID : 264330750544
Option 4 ID : 264330750545
Status : Answered
Chosen Option : 1

Section : Part-C-Elementary Mathematics

Q.1 Average age of 16 teachers is 58 years. After involving a new teacher in that group the average rises by 2 year. What is the age of the new teacher?

- Ans
- 1. 88 years
 - 2. 92 years
 - 3. 90 years
 - 4. 96 years

Question ID : 264330187623
Option 1 ID : 264330734421
Option 2 ID : 264330734423
Option 3 ID : 264330734422
Option 4 ID : 264330734420
Status : Answered
Chosen Option : 2

Q.2 Rs. 7700 is divided among A, B and C such that 4 times of A's share is equal to 2 times of B's share which is equal to 6 times of C's share. What is the share of B?

- Ans**
- 1. Rs. 5600
 - 2. Rs. 2100
 - 3. Rs. 1400
 - 4. Rs. 4200

Question ID : 264330187692

Option 1 ID : 264330734696

Option 2 ID : 264330734697

Option 3 ID : 264330734699

Option 4 ID : 264330734698

Status : Answered

Chosen Option : 4

Q.3 What is the value of $\frac{23}{64}$ of $\frac{32}{46} \times \frac{44}{220} \div \frac{4}{80}$?

- Ans**
- 1. 16
 - 2. 4
 - 3. 8
 - 4. 1

Question ID : 264330188593

Option 1 ID : 264330738177

Option 2 ID : 264330738175

Option 3 ID : 264330738176

Option 4 ID : 264330738174

Status : Answered

Chosen Option : 4

Q.4 The price of a camera decreases by 30%, and the new price is Rs. 2,100. What was the original price?

- Ans**
- 1. Rs. 3000
 - 2. Rs. 3100
 - 3. Rs. 3300
 - 4. Rs. 3700

Question ID : 264330191194

Option 1 ID : 264330748133

Option 2 ID : 264330748131

Option 3 ID : 264330748132

Option 4 ID : 264330748130

Status : Answered

Chosen Option : 1

Q.5 A person borrowed Rs. 10000 on compound interest at the rate of 20 percent per annum. If the interest is compounded half yearly, then what will be the amount to be paid after 1 year?

- Ans**
- 1. Rs. 15600
 - 2. Rs. 14100
 - 3. Rs. 12100
 - 4. Rs. 14400

Question ID : 264330187854
Option 1 ID : 264330735344
Option 2 ID : 264330735346
Option 3 ID : 264330735347
Option 4 ID : 264330735345
Status : Answered
Chosen Option : 3

Q.6 The difference between cost price and selling price is Rs. 204. If loss percentage is 24 percent, then what is the selling price?

- Ans**
- 1. Rs. 646
 - 2. Rs. 608
 - 3. Rs. 650
 - 4. Rs. 716

Question ID : 264330188008
Option 1 ID : 264330735963
Option 2 ID : 264330735962
Option 3 ID : 264330735961
Option 4 ID : 264330735960
Status : Answered
Chosen Option : 1

Q.7 The ratio of cost price and selling price of a fan is 8:9 respectively. What is the profit percentage?

- Ans**
- 1. 18.5 percent
 - 2. 10 percent
 - 3. 12.5 percent
 - 4. 35 percent

Question ID : 264330187307
Option 1 ID : 264330733159
Option 2 ID : 264330733158
Option 3 ID : 264330733156
Option 4 ID : 264330733157
Status : Answered
Chosen Option : 3

Q.8 If the radius of a circle is decreased by 80 percent, then what will be the percentage decrease in the area of circle?

- Ans**
- 1. 150 percent
 - 2. 92 percent
 - 3. 160 percent
 - 4. 96 percent

Question ID : 264330187505
Option 1 ID : 264330733951
Option 2 ID : 264330733949
Option 3 ID : 264330733948
Option 4 ID : 264330733950
Status : Answered
Chosen Option : 4

Q.9 Umesh's efficiency is 250 percent of Vikas's efficiency. If Umesh can complete a work in 70 days, then how many days will they together take to complete the same work?

- Ans**
- 1. 50 days
 - 2. 62 days
 - 3. 53 days
 - 4. 45 days

Question ID : 264330187616
Option 1 ID : 264330734393
Option 2 ID : 264330734395
Option 3 ID : 264330734394
Option 4 ID : 264330734392
Status : Answered
Chosen Option : 3

Q.10 W and X can complete a work in 25 days and 75 days respectively. They began the work together but W left the work after some days and X completed the remaining work in 15 days. After how many days from the beginning W left the work?

- Ans**
- 1. 25 days
 - 2. 20 days
 - 3. 17 days
 - 4. 15 days

Question ID : 264330190365
Option 1 ID : 264330745043
Option 2 ID : 264330745045
Option 3 ID : 264330745044
Option 4 ID : 264330745042
Status : Answered
Chosen Option : 2

Q.11 Find the value of $758 - [524 - \{156 - (127 - 65 - 7)\}]$.

- Ans
- 1. 445
 - 2. 355
 - 3. 425
 - 4. 335

Question ID : 264330191648
Option 1 ID : 264330749949
Option 2 ID : 264330749947
Option 3 ID : 264330749946
Option 4 ID : 264330749948
Status : Answered
Chosen Option : 4

Q.12 If $X:Y = 8:5$ and $X - Y = 18$, find the value of $X + Y$.

- Ans
- 1. 74
 - 2. 70
 - 3. 72
 - 4. 78

Question ID : 264330191179
Option 1 ID : 264330748073
Option 2 ID : 264330748070
Option 3 ID : 264330748072
Option 4 ID : 264330748071
Status : Answered
Chosen Option : 4

Q.13 A sum of Rs. 8000 becomes Rs. 21520 when invested in a scheme of simple interest. If the annual rate of interest and the number of years for which the sum was invested are same, then what is the annual rate of interest?

- Ans
- 1. 17 percent
 - 2. 15 percent
 - 3. 13 percent
 - 4. 14 percent

Question ID : 264330188586
Option 1 ID : 264330738149
Option 2 ID : 264330738148
Option 3 ID : 264330738147
Option 4 ID : 264330738146
Status : Answered
Chosen Option : 3

Q.14 What is the value of $(119 + 114 - 17) \div \{6 \times (12 + 3 \text{ of } 2)\}$?

- Ans
- 1. 2
 - 2. 4
 - 3. 1
 - 4. 8

Question ID : 264330187620
Option 1 ID : 264330734409
Option 2 ID : 264330734410
Option 3 ID : 264330734408
Option 4 ID : 264330734411
Status : Answered
Chosen Option : 1

Q.15 What is the difference between a discount of 60% on ₹ 1000 and two successive discounts of 30% and 40% on the same amount?

- Ans
- 1. ₹ 32
 - 2. ₹ 30
 - 3. ₹ 20
 - 4. ₹ 25

Question ID : 264330188424
Option 1 ID : 264330737564
Option 2 ID : 264330737566
Option 3 ID : 264330737565
Option 4 ID : 264330737567
Status : Answered
Chosen Option : 3

Q.16 In a 50 over game of cricket, the team A scored only 3.6 runs per over in the first 15 overs. What should be the runs per over in the remaining 35 overs to reach the target of 299 runs?

- Ans
- 1. 7.5
 - 2. 6.75
 - 3. 6.5
 - 4. 7

Question ID : 264330192393
Option 1 ID : 264330752929
Option 2 ID : 264330752927
Option 3 ID : 264330752926
Option 4 ID : 264330752928
Status : Answered
Chosen Option : 4

Q.17 What is the value of $5200 \div 13 - 420 \times 2 + 1300$?

- Ans
- 1. 1260
 - 2. 1140
 - 3. 860
 - 4. 1420

Question ID : 264330191608
Option 1 ID : 264330749788
Option 2 ID : 264330749786
Option 3 ID : 264330749787
Option 4 ID : 264330749789
Status : Answered
Chosen Option : 3

Q.18 Ramesh walks at a speed of 6 km/hr covers a certain distance in 1 hour 30 minutes. If he runs at a speed of 8 km/hr, in what time he will cover the same distance?

- Ans
- 1. 74.5 minutes
 - 2. 84 minutes
 - 3. 62.4 minutes
 - 4. 67.5 minutes

Question ID : 264330192304
Option 1 ID : 264330752571
Option 2 ID : 264330752570
Option 3 ID : 264330752573
Option 4 ID : 264330752572
Status : Answered
Chosen Option : 4

Q.19 $\frac{2}{5}$ of marked price is equal to $\frac{3}{4}$ of selling price. What is the discount percent?

- Ans
- 1. 46.66 percent
 - 2. 50 percent
 - 3. 25 percent
 - 4. 66.67 percent

Question ID : 264330191619
Option 1 ID : 264330749830
Option 2 ID : 264330749832
Option 3 ID : 264330749833
Option 4 ID : 264330749831
Status : Answered
Chosen Option : 1

Q.20 If the ratio of volume of two cubes is 64 : 343, then what is the ratio of the sides of the two cubes?

- Ans**
- 1. 7 : 9
 - 2. 3 : 5
 - 3. 5 : 7
 - 4. 4 : 7

Question ID : 264330190386
Option 1 ID : 264330745129
Option 2 ID : 264330745126
Option 3 ID : 264330745127
Option 4 ID : 264330745128
Status : Answered
Chosen Option : 4

Section : Part-D-English

Q.1 Select the most appropriate option for the given blank.

We all need to _____ electricity in order to build a better life for tomorrow.

- Ans**
- 1. Put
 - 2. Lay
 - 3. Save
 - 4. Keep

Question ID : 264330185917
Option 1 ID : 264330727976
Option 2 ID : 264330727978
Option 3 ID : 264330727977
Option 4 ID : 264330727979
Status : Answered
Chosen Option : 3

Q.2 Select the incorrectly spelt word from the given sentence.

Wet winters and hot, dry sumers tend to create better quality wine.

- Ans**
- 1. create
 - 2. sumers
 - 3. winters
 - 4. quality

Question ID : 264330186231
Option 1 ID : 264330729174
Option 2 ID : 264330729173
Option 3 ID : 264330729172
Option 4 ID : 264330729175
Status : Answered
Chosen Option : 2

Q.3 Improve the underlined part of the sentence. Choose 'No improvement' as an answer if the sentence is grammatically correct.

After the earthquake, the pavement was crack with deep fissures.

- Ans**
- 1. has cracking
 - 2. was cracked
 - 3. was cracks
 - 4. No improvement

Question ID : 264330185880

Option 1 ID : 264330727838

Option 2 ID : 264330727837

Option 3 ID : 264330727836

Option 4 ID : 264330727839

Status : Answered

Chosen Option : 2

Q.4 Find the part of the given sentence that has an error in it. If there is no error, choose 'No error'.

Posts on social media that did riddled with spelling and grammatical errors are prime suspects for inaccuracies.

- Ans**
- 1. No error
 - 2. Posts on social media that did riddled
 - 3. are prime suspects for inaccuracies.
 - 4. with spelling and grammatical errors

Question ID : 264330186173

Option 1 ID : 264330728955

Option 2 ID : 264330728952

Option 3 ID : 264330728954

Option 4 ID : 264330728953

Status : Answered

Chosen Option : 3

Q.5 Select the most appropriate word to fill in the blank.

He tried to sing the anthem, but it was _____ epic fail.

- Ans**
- 1. No article
 - 2. an
 - 3. the
 - 4. a

Question ID : 264330185881

Option 1 ID : 264330727843

Option 2 ID : 264330727841

Option 3 ID : 264330727842

Option 4 ID : 264330727840

Status : Answered

Chosen Option : 2

Q.6 Improve the underlined part of the sentence. Choose 'No improvement' as an answer if the sentence is grammatically correct.

I have to does my taxes this weekend.

Ans 1. No improvement

2. have to do

3. has to does

4. have to done

Question ID : 264330185942

Option 1 ID : 264330728075

Option 2 ID : 264330728074

Option 3 ID : 264330728072

Option 4 ID : 264330728073

Status : Answered

Chosen Option : 2

Q.7 Select the most appropriate antonym of the given word.

Impelled

Ans 1. Agape

2. Limelight

3. Irresolute

4. Allure

Question ID : 264330186564

Option 1 ID : 264330730442

Option 2 ID : 264330730440

Option 3 ID : 264330730443

Option 4 ID : 264330730441

Status : Not Answered

Chosen Option : --

Q.8 Select the most appropriate option for the given blank.

Your brother is _____ so many talents.

Ans 1. parted by

2. adorned with

3. sticked with

4. blessed with

Question ID : 264330185875

Option 1 ID : 264330727819

Option 2 ID : 264330727817

Option 3 ID : 264330727818

Option 4 ID : 264330727816

Status : Answered

Chosen Option : 4

Q.9 Improve the underlined part of the sentence. Choose 'No improvement' as an answer if the sentence is grammatically correct.

When I was a student, I used to visit the library frequent.

- Ans**
- 1. No improvement
 - 2. library more frequent
 - 3. library frequently
 - 4. library frequenter

Question ID : 264330186153

Option 1 ID : 264330728879

Option 2 ID : 264330728876

Option 3 ID : 264330728878

Option 4 ID : 264330728877

Status : Answered

Chosen Option : 3

Q.10 Select the most appropriate synonym of the given word.

Analytical

- Ans**
- 1. Chaotic
 - 2. Cursory
 - 3. Examining
 - 4. Pretending

Question ID : 264330186940

Option 1 ID : 264330731875

Option 2 ID : 264330731873

Option 3 ID : 264330731874

Option 4 ID : 264330731872

Status : Answered

Chosen Option : 3

Q.11 The sentence has been divided into three parts, identify the segment which contains a spelling error in the sentence given below. Choose no error if there is no error in the sentence.

Her impeccable spelling and attention to detail in/ her writing made it clear that she had a/ strong grasp of proper spelling and grammar.

- Ans**
- 1. her writing made it clear that she had a
 - 2. strong grasp of proper spelling and grammar.
 - 3. Her impeccable spelling and attention to detail in
 - 4. no error

Question ID : 264330186400

Option 1 ID : 264330729817

Option 2 ID : 264330729818

Option 3 ID : 264330729816

Option 4 ID : 264330729819

Status : Answered

Chosen Option : 3

Q.12 Find the part of the given sentence that has an error in it. If there is no error, choose 'No error'.

I feel nothing but sadly in his absence.

- Ans**
- 1. but sadly
 - 2. I feel nothing
 - 3. in his absence.
 - 4. No error

Question ID : 264330185709
Option 1 ID : 264330727185
Option 2 ID : 264330727184
Option 3 ID : 264330727186
Option 4 ID : 264330727187
Status : Answered
Chosen Option : 1

Q.13 Find the part of the given sentence that has an error in it. If there is no error, choose 'No error'.

He straightened up in the seat and taken a sip of his cold coffee.

- Ans**
- 1. of his cold coffee.
 - 2. No error
 - 3. the seat and taken a sip
 - 4. He straightened up in

Question ID : 264330186276
Option 1 ID : 264330729346
Option 2 ID : 264330729347
Option 3 ID : 264330729345
Option 4 ID : 264330729344
Status : Answered
Chosen Option : 3

Q.14 In the following question, out of the given four alternatives, select the alternative which best expresses the meaning of the Idiom/Phrase.

A slap on the wrist

- Ans**
- 1. A disorganised person
 - 2. A real awakening
 - 3. A humble request
 - 4. A very mild punishment

Question ID : 264330186081
Option 1 ID : 264330728601
Option 2 ID : 264330728602
Option 3 ID : 264330728603
Option 4 ID : 264330728600
Status : Answered
Chosen Option : 2

Q.15 What does the idiom "the ball is in your court" mean?

Ans 1.

A sceptic who needs physical or personal evidence in order to believe something.

2. The situation or decision is now up to you

3. Anything that is common and easy to get.

4. A very small part of something big or whole

Question ID : 264330186398

Option 1 ID : 264330729809

Option 2 ID : 264330729811

Option 3 ID : 264330729810

Option 4 ID : 264330729808

Status : Answered

Chosen Option : 2

Comprehension:

Read the passage carefully and select the correct answer for the given blanks out of the four alternatives.

Beekeepers are also (1) _____ bee farmers or apiarists. The term beekeeper refers to a person (2) _____ keeps honey bees in bee hives (bee boxes) and has (3) _____ in beekeeping or acquired skills in the maintenance of bee colonies and extracting hive (4) _____. Beekeeper may be landless and can be a literate or (5) _____ person.

SubQuestion No : 16

Q.16 Select the most appropriate option for blank (1)

Ans 1. called

2. call

3. calls

4. calling

Question ID : 264330185569

Option 1 ID : 264330726648

Option 2 ID : 264330726651

Option 3 ID : 264330726649

Option 4 ID : 264330726650

Status : Answered

Chosen Option : 1

Comprehension:

Read the passage carefully and select the correct answer for the given blanks out of the four alternatives.

Beekeepers are also (1) _____ bee farmers or apiarists. The term beekeeper refers to a person (2) _____ keeps honey bees in bee hives (bee boxes) and has (3) _____ in beekeeping or acquired skills in the maintenance of bee colonies and extracting hive (4) _____. Beekeeper may be landless and can be a literate or (5) _____ person.

SubQuestion No : 17

Q.17 Select the most appropriate option for blank (2)

- Ans
- 1. whom
 - 2. who
 - 3. that
 - 4. which

Question ID : 264330185570

Option 1 ID : 264330726655

Option 2 ID : 264330726653

Option 3 ID : 264330726654

Option 4 ID : 264330726652

Status : Answered

Chosen Option : 2

Comprehension:

Read the passage carefully and select the correct answer for the given blanks out of the four alternatives.

Beekeepers are also (1) _____ bee farmers or apiarists. The term beekeeper refers to a person (2) _____ keeps honey bees in bee hives (bee boxes) and has (3) _____ in beekeeping or acquired skills in the maintenance of bee colonies and extracting hive (4) _____. Beekeeper may be landless and can be a literate or (5) _____ person.

SubQuestion No : 18

Q.18 Select the most appropriate option for blank (3)

- Ans
- 1. knowledge
 - 2. sedition
 - 3. suspicion
 - 4. partake

Question ID : 264330185571

Option 1 ID : 264330726658

Option 2 ID : 264330726659

Option 3 ID : 264330726657

Option 4 ID : 264330726656

Status : Answered

Chosen Option : 1

Comprehension:

Read the passage carefully and select the correct answer for the given blanks out of the four alternatives.

Beekeepers are also (1) _____ bee farmers or apiarists. The term beekeeper refers to a person (2) _____ keeps honey bees in bee hives (bee boxes) and has (3) _____ in beekeeping or acquired skills in the maintenance of bee colonies and extracting hive (4) _____. Beekeeper may be landless and can be a literate or (5) _____ person.

SubQuestion No : 19

Q.19 Select the most appropriate option for blank (4)

- Ans**
- 1. products
 - 2. information
 - 3. features
 - 4. data

Question ID : 264330185572

Option 1 ID : 264330726661

Option 2 ID : 264330726663

Option 3 ID : 264330726662

Option 4 ID : 264330726660

Status : Answered

Chosen Option : 1

Comprehension:

Read the passage carefully and select the correct answer for the given blanks out of the four alternatives.

Beekeepers are also (1) _____ bee farmers or apiarists. The term beekeeper refers to a person (2) _____ keeps honey bees in bee hives (bee boxes) and has (3) _____ in beekeeping or acquired skills in the maintenance of bee colonies and extracting hive (4) _____. Beekeeper may be landless and can be a literate or (5) _____ person.

SubQuestion No : 20

Q.20 Select the most appropriate option for blank (5)

- Ans**
- 1. illiterate
 - 2. whimsical
 - 3. surgical
 - 4. dynamite

Question ID : 264330185573

Option 1 ID : 264330726666

Option 2 ID : 264330726667

Option 3 ID : 264330726664

Option 4 ID : 264330726665

Status : Answered

Chosen Option : 1

Q.1 निम्नलिखित प्रश्न में, चार विकल्पों में से, उस सही विकल्प का चयन करें जो वाक्यांश के लिए एक शब्द का विकल्प हो।

किसी संप्रदाय या सिद्धांत का समर्थन करने वाला

- Ans
- 1. अनादि
 - 2. अनुयायी
 - 3. अनुवाद
 - 4. अनुमोदन

Question ID : 264330189866

Option 1 ID : 264330743086

Option 2 ID : 264330743087

Option 3 ID : 264330743088

Option 4 ID : 264330743089

Status : Not Answered

Chosen Option : --

Q.2 निम्नलिखित वाक्य में, उस वाक्यांश को पहचानिए जिसमें मात्राओं से संबंधित अशुद्धियाँ हैं। यदि कोई गलती नहीं है तो 'कोई त्रुटि नहीं है' का चुनाव कीजिए।

हम लोग कंप्यूटर में इंटरनेट का इस्तेमाल/ कर सकते हैं जो बेहद कम समय में/ जरूरी जानकारी उपलब्ध कराता है।

- Ans
- 1. जरूरी जानकारी उपलब्ध कराता है
 - 2. हम लोग कंप्यूटर में इंटरनेट का इस्तेमाल
 - 3. कोई त्रुटि नहीं है
 - 4. कर सकते हैं जो बेहद कम समय में

Question ID : 264330188390

Option 1 ID : 264330737434

Option 2 ID : 264330737432

Option 3 ID : 264330737435

Option 4 ID : 264330737433

Status : Not Answered

Chosen Option : --

Q.3 दिए गए विकल्पों में से तीन विकल्प शुद्ध वर्तनी वाले हैं, जबकि एक अशुद्ध वर्तनी वाला है। उस अशुद्ध वर्तनी वाले विकल्प का चयन करें।

- Ans
- 1. देशभक्त वहीं है जो देश के लिए जान दे।
 - 2. अध्यापक रमेश जी को बुला रहे हैं।
 - 3. तत्कालीन स्थिति को ठीक करो।
 - 4. यह एक क्रांतिकारी घटना है।

Question ID : 264330189390

Option 1 ID : 264330741276

Option 2 ID : 264330741277

Option 3 ID : 264330741275

Option 4 ID : 264330741274

Status : Not Answered

Chosen Option : --

Q.4 दिए गए वाक्य का वह भाग ज्ञात करें, जिसमें कोई त्रुटि है।
पैदल चलकर आने में देर होनी स्वाभाविक था इसीलिए मुझे देर हो गई।

- Ans
- 1. में देर होनी
 - 2. मुझे देर हो गई।
 - 3. स्वाभाविक था इसीलिए
 - 4. पैदल चलकर आने

Question ID : 264330189080
 Option 1 ID : 264330740095
 Option 2 ID : 264330740097
 Option 3 ID : 264330740096
 Option 4 ID : 264330740094
 Status : Not Answered
 Chosen Option : --

Q.5 निम्नलिखित प्रश्न में, दिए गए चार विकल्पों में से, उस विकल्प का चयन करें जो दिए गए मुहावरे के अर्थ को सर्वश्रेष्ठ रूप से व्यक्त करता है।
नाक भौं सिकोड़ना

- Ans
- 1. असंतोष प्रकट करना
 - 2. सम्मान न मिलना
 - 3. अजनबीपन महसूस करना
 - 4. दुख को मन में रखना

Question ID : 264330188136
 Option 1 ID : 264330736467
 Option 2 ID : 264330736464
 Option 3 ID : 264330736466
 Option 4 ID : 264330736465
 Status : Not Answered
 Chosen Option : --

Q.6 निम्नलिखित वाक्य में रेखांकित भाग के लिए एक सार्थक शब्द ज्ञात कीजिए।

विज्ञान समस्त पृथ्वी से संबंध रखता है।

- Ans
- 1. सार्वभौमिक
 - 2. सर्वकालिक
 - 3. सर्वज्ञ
 - 4. सार्वदेशिक

Question ID : 264330189235
 Option 1 ID : 264330740685
 Option 2 ID : 264330740684
 Option 3 ID : 264330740683
 Option 4 ID : 264330740682
 Status : Not Answered
 Chosen Option : --

Q.7 निम्नलिखित प्रश्न में, चार विकल्पों में से, उस विकल्प का चयन करें जो कोष्ठक में दिए गए शब्द के विलोम शब्द का सही विकल्प है।
बड़ों के अनुसार (संध्या) _____ की सैर सेहत के लिए लाभदायक होती है।

- Ans
- 1. सौम्य
 - 2. उषा
 - 3. रात
 - 4. शाम

Question ID : 264330188323
Option 1 ID : 264330737178
Option 2 ID : 264330737177
Option 3 ID : 264330737176
Option 4 ID : 264330737179
Status : Not Answered
Chosen Option : --

Q.8 दिए गए वाक्य में उचित देशज-विदेशज शब्द का चयन करके रिक्त स्थान की पूर्ति कीजिए।
अगर तुम्हें कोई _____ न हो, तो एक बात बोलूँ?

- Ans
- 1. एतराज
 - 2. दांग
 - 3. खर्च
 - 4. कोतल

Question ID : 264330189014
Option 1 ID : 264330739842
Option 2 ID : 264330739843
Option 3 ID : 264330739844
Option 4 ID : 264330739845
Status : Not Answered
Chosen Option : --

Q.9 दिए गए शब्द का पर्यायवाची ज्ञात कीजिए।

लालसा

- Ans
- 1. मनोबल
 - 2. विराट
 - 3. चंचला
 - 4. तृष्णा

Question ID : 264330189111
Option 1 ID : 264330740212
Option 2 ID : 264330740210
Option 3 ID : 264330740213
Option 4 ID : 264330740211
Status : Not Answered
Chosen Option : --

Q.10 दिए गए वाक्य में से निरर्थक शब्द ज्ञात कीजिए।

आकाश में रेंता छाए हुए है।

- Ans
- 1. आकाश
 - 2. रेंता
 - 3. छाए
 - 4. हुए

Question ID : 264330189162
 Option 1 ID : 264330740407
 Option 2 ID : 264330740406
 Option 3 ID : 264330740408
 Option 4 ID : 264330740409
 Status : Not Answered
 Chosen Option : --

Q.11 दिए गए वाक्य का वह भाग ज्ञात करें, जिसमें कोई त्रुटि है। यदि कोई त्रुटि नहीं है, तो 'कोई त्रुटि नहीं है' चुनें।

साहित्य और जीवन का घोर संबंध है।

- Ans
- 1. संबंध है।
 - 2. का घोर
 - 3. साहित्य और जीवन
 - 4. कोई त्रुटि नहीं है

Question ID : 264330188246
 Option 1 ID : 264330736886
 Option 2 ID : 264330736885
 Option 3 ID : 264330736884
 Option 4 ID : 264330736887
 Status : Not Answered
 Chosen Option : --

Q.12 निम्नलिखित प्रश्न में, चार विकल्पों में से, उस विकल्प का चयन करें जो कोष्ठक में दिए गए शब्द के पर्यायवाची शब्द का सही विकल्प है।

किसी-किसी का व्यवहार बहुत ही (अगाह्य) _____ हो जाता है।

- Ans
- 1. अचानक
 - 2. अनिश्चित
 - 3. अस्वीकार्य
 - 4. असमंजस

Question ID : 264330189762
 Option 1 ID : 264330742691
 Option 2 ID : 264330742693
 Option 3 ID : 264330742692
 Option 4 ID : 264330742690
 Status : Not Answered
 Chosen Option : --

Q.13 निम्नलिखित प्रश्न में, चार विकल्पों में से, उस सही विकल्प का चयन करें जो वाक्यांश के लिए एक शब्द का विकल्प हो।
जो मापा नहीं जा सके

- Ans**
- ✓ 1. अपरिमेय
 - ✗ 2. अनाद्यत
 - ✗ 3. अपूर्व
 - ✗ 4. अपूर्ण

Question ID : 264330189991
Option 1 ID : 264330743565
Option 2 ID : 264330743563
Option 3 ID : 264330743564
Option 4 ID : 264330743562
Status : Not Answered
Chosen Option : --

Q.14 दिए गए वाक्य में रेखांकित शब्द का विलोम शब्द ज्ञात कीजिए।

मैं इसके विरोध में हूँ।

- Ans**
- ✗ 1. अलगाव
 - ✓ 2. पक्ष
 - ✗ 3. विशेषण
 - ✗ 4. समान्य

Question ID : 264330189491
Option 1 ID : 264330741658
Option 2 ID : 264330741661
Option 3 ID : 264330741660
Option 4 ID : 264330741659
Status : Not Answered
Chosen Option : --

Q.15 निम्नलिखित प्रश्न में, दिए गए चार विकल्पों में से, उस विकल्प का चयन करें जो दिए गए मुहावरे के अर्थ को सर्वश्रेष्ठ रूप से व्यक्त करता है।

हातिम होना

- Ans**
- ✗ 1. खास होना
 - ✗ 2. धूर्त होना
 - ✗ 3. चालाक होना
 - ✓ 4. उपकारी होना

Question ID : 264330189346
Option 1 ID : 264330741108
Option 2 ID : 264330741106
Option 3 ID : 264330741107
Option 4 ID : 264330741109
Status : Not Answered
Chosen Option : --

Comprehension:

नीचे दिए गए गद्य में कुछ शब्द छोड़ दिए गए हैं और प्रत्येक रिक्त स्थान के चार विकल्प दिए गए हैं। इन चारों में से कौन सा विकल्प रिक्त स्थान की पूर्ति करेगा-

हर कल्याणकारी सरकार का (1)_____ है कि वह अपने (2)_____ को रोजगार के बेहतर अवसर (3)_____ कराए। मगर इसके लिए संविधान में दिए गए समानता और जीवन जीने के (4)_____ को (5)_____ नहीं किया जा सकता। दूसरों के अधिकारों का हनन नहीं किया जा सकता।

SubQuestion No : 16

Q.16 रिक्त 1 के लिए सबसे उपयुक्त विकल्प का चयन कीजिए।

Ans

- ✓ 1. कर्तव्य
- ✗ 2. मत
- ✗ 3. कीर्तन
- ✗ 4. कल्याण

Question ID : 264330188271

Option 1 ID : 264330736977

Option 2 ID : 264330736976

Option 3 ID : 264330736978

Option 4 ID : 264330736979

Status : Not Answered

Chosen Option : --

Comprehension:

नीचे दिए गए गद्य में कुछ शब्द छोड़ दिए गए हैं और प्रत्येक रिक्त स्थान के चार विकल्प दिए गए हैं। इन चारों में से कौन सा विकल्प रिक्त स्थान की पूर्ति करेगा-

हर कल्याणकारी सरकार का (1)_____ है कि वह अपने (2)_____ को रोजगार के बेहतर अवसर (3)_____ कराए। मगर इसके लिए संविधान में दिए गए समानता और जीवन जीने के (4)_____ को (5)_____ नहीं किया जा सकता। दूसरों के अधिकारों का हनन नहीं किया जा सकता।

SubQuestion No : 17

Q.17 रिक्त 2 के लिए सबसे उपयुक्त विकल्प का चयन कीजिए।

Ans

- ✗ 1. भूमि
- ✗ 2. दोस्त
- ✓ 3. नागरिकों
- ✗ 4. ग्रंथों

Question ID : 264330188272

Option 1 ID : 264330736982

Option 2 ID : 264330736980

Option 3 ID : 264330736981

Option 4 ID : 264330736983

Status : Not Answered

Chosen Option : --

Comprehension:

नीचे दिए गए गद्य में कुछ शब्द छोड़ दिए गए हैं और प्रत्येक रिक्त स्थान के चार विकल्प दिए गए हैं। इन चारों में से कौन सा विकल्प रिक्त स्थान की पूर्ति करेगा-

हर कल्याणकारी सरकार का (1)_____ है कि वह अपने (2)_____ को रोजगार के बेहतर अवसर (3)_____ कराए। मगर इसके लिए संविधान में दिए गए समानता और जीवन जीने के (4)_____ को (5)_____ नहीं किया जा सकता। दूसरों के अधिकारों का हनन नहीं किया जा सकता।

SubQuestion No : 18

Q.18 रिक्त 3 के लिए सबसे उपयुक्त विकल्प का चयन कीजिए।

- Ans
- 1. ग्रहण
 - 2. उचित
 - 3. अवगत
 - 4. उपलब्ध

Question ID : 264330188273

Option 1 ID : 264330736985

Option 2 ID : 264330736986

Option 3 ID : 264330736984

Option 4 ID : 264330736987

Status : Not Answered

Chosen Option : --

Comprehension:

नीचे दिए गए गद्य में कुछ शब्द छोड़ दिए गए हैं और प्रत्येक रिक्त स्थान के चार विकल्प दिए गए हैं। इन चारों में से कौन सा विकल्प रिक्त स्थान की पूर्ति करेगा-

हर कल्याणकारी सरकार का (1)_____ है कि वह अपने (2)_____ को रोजगार के बेहतर अवसर (3)_____ कराए। मगर इसके लिए संविधान में दिए गए समानता और जीवन जीने के (4)_____ को (5)_____ नहीं किया जा सकता। दूसरों के अधिकारों का हनन नहीं किया जा सकता।

SubQuestion No : 19

Q.19 रिक्त 4 के लिए सबसे उपयुक्त विकल्प का चयन कीजिए।

- Ans
- 1. दस्तूर
 - 2. नियम
 - 3. अधिकार
 - 4. देहलीज़

Question ID : 264330188274

Option 1 ID : 264330736990

Option 2 ID : 264330736989

Option 3 ID : 264330736988

Option 4 ID : 264330736991

Status : Not Answered

Chosen Option : --

Comprehension:

नीचे दिए गए गद्य में कुछ शब्द छोड़ दिए गए हैं और प्रत्येक रिक्त स्थान के चार विकल्प दिए गए हैं। इन चारों में से कौन सा विकल्प रिक्त स्थान की पूर्ति करेगा-

हर कल्याणकारी सरकार का (1)_____ है कि वह अपने (2)_____ को रोजगार के बेहतर अवसर (3)_____ कराए। मगर इसके लिए संविधान में दिए गए समानता और जीवन जीने के (4)_____ को (5)_____ नहीं किया जा सकता। दूसरों के अधिकारों का हनन नहीं किया जा सकता।

SubQuestion No : 20

Q.20 रिक्त 5 के लिए सबसे उपयुक्त विकल्प का चयन कीजिए।

- Ans
- 1. ग़लतफहमी
 - 2. नज़रंदाज़
 - 3. खुशमिजाज़
 - 4. दुखी

Question ID : 264330188275

Option 1 ID : 264330736992

Option 2 ID : 264330736993

Option 3 ID : 264330736994

Option 4 ID : 264330736995

Status : Not Answered

Chosen Option : --