

## Constable GD in Central Armed Police Forces CAPFs SSF Rifleman GD in Assam Rifles Examination 2024

Roll Number	
Candidate Name	
Venue Name	
Exam Date	07/03/2024
Exam Time	9:00 AM - 10:00 AM
Subject	Constable GD Examination 2024

### Section : Part-A-General Intelligence and Reasoning

**Q.1** Six colleagues Victor, Wendy, Xander, Yara, Zoe, and Aaron are sitting in a circle facing away from the center. Victor is sitting to the immediate right of Wendy. Yara is not sitting next to Victor. Zoe, who is sitting to the immediate left of Wendy, is also sitting to the immediate right of Aaron. Who is the immediate neighbour of both Xander and Wendy?

- Ans**
- 1. Yara
  - 2. Victor
  - 3. Aaron
  - 4. Zoe

Question ID : 264330192077  
 Option 1 ID : 264330751665  
 Option 2 ID : 264330751664  
 Option 3 ID : 264330751663  
 Option 4 ID : 264330751662  
 Status : Answered  
 Chosen Option : 2

**Q.2** Two Statements are given followed by two conclusions numbered I and II. Assuming the statements to be true, even if they seem to be at variance with commonly known facts, decide which of the conclusions logically follow(s) from the statements.

Statement I: Some musicians are guitarists.

Statement II: All guitarists are performers.

Conclusion I: Some performers are guitarists.

Conclusion II: Some musicians are not performers.

- Ans**
- 1. Only conclusion II follows
  - 2. Only conclusion I follows
  - 3. Both conclusions I and II follow
  - 4. Neither conclusion I nor II follows

Question ID : 264330192258  
 Option 1 ID : 264330752387  
 Option 2 ID : 264330752386  
 Option 3 ID : 264330752388  
 Option 4 ID : 264330752389  
 Status : Answered  
 Chosen Option : 3

**Q.3** In a certain code language, 'TOPIC' is coded as 'WRSFL'. What is the code for 'VIDEO' in that code language?

- Ans**
- ✓ 1. YLGHR
  - ✗ 2. YLGIS
  - ✗ 3. YLGIR
  - ✗ 4. YLGHS

Question ID : 264330190152  
Option 1 ID : 264330744191  
Option 2 ID : 264330744193  
Option 3 ID : 264330744192  
Option 4 ID : 264330744190  
Status : Answered  
Chosen Option : 1

**Q.4** In a certain code language, if 'NATURE' is coded as 'MASUQE', 'CIRCLE' is coded as 'BIQCCKE', then what will 'DANGER' be coded as?

- Ans**
- ✓ 1. CAMGDR
  - ✗ 2. HSDGKA
  - ✗ 3. BALGCR
  - ✗ 4. DBNHES

Question ID : 264330192213  
Option 1 ID : 264330752207  
Option 2 ID : 264330752209  
Option 3 ID : 264330752206  
Option 4 ID : 264330752208  
Status : Answered  
Chosen Option : 1

**Q.5** Six friends Olivia, Peter, Rachel, Sam, Toby, and Victoria are sitting around a circular table facing the center. Olivia is sitting to the immediate right of Peter. Peter and Toby are neighbours. Sam is not sitting next to Rachel or Toby. Victoria is sitting to the immediate right of Sam. Who is the immediate neighbour of both Sam and Rachel?

- Ans**
- ✗ 1. Peter
  - ✗ 2. Olivia
  - ✓ 3. Victoria
  - ✗ 4. Toby

Question ID : 264330192236  
Option 1 ID : 264330752301  
Option 2 ID : 264330752300  
Option 3 ID : 264330752299  
Option 4 ID : 264330752298  
Status : Answered  
Chosen Option : 3

Q.6 In the following question, select the missing number from the given series.

712, 726, 740, 754, 768, ?

- Ans
- 1. 790
  - 2. 782
  - 3. 788
  - 4. 785

Question ID : 264330190498  
 Option 1 ID : 264330745576  
 Option 2 ID : 264330745574  
 Option 3 ID : 264330745575  
 Option 4 ID : 264330745577  
 Status : Answered  
 Chosen Option : 2

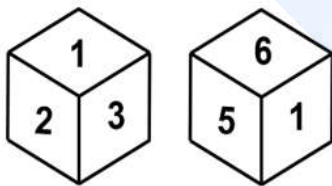
Q.7 If  $10 @ 5 \# 15 * 5 = 2$  and  $25 @ 6 \# 4 * 2 = 17$ , then

$30 @ 10 \# 20 * 4 = ?$

- Ans
- 1. 30
  - 2. 25
  - 3. 15
  - 4. 40

Question ID : 264330187073  
 Option 1 ID : 264330732221  
 Option 2 ID : 264330732222  
 Option 3 ID : 264330732220  
 Option 4 ID : 264330732223  
 Status : Answered  
 Chosen Option : 2

Q.8 Two different positions of the same dice are given below. Find the number opposite of 2.



- Ans
- 1. 1
  - 2. 3
  - 3. 5
  - 4. 6

Question ID : 264330190424  
 Option 1 ID : 264330745281  
 Option 2 ID : 264330745278  
 Option 3 ID : 264330745279  
 Option 4 ID : 264330745280  
 Status : Answered  
 Chosen Option : 4

**Q.9** Arrange the given words in the sequence in which they occur in the dictionary.

1. Bandit
2. Banana
3. Bangle
4. Band
5. Bank

- Ans**
- 1. 5,4,3,2,1
  - 2. 5,4,3,1,2
  - 3. 2,4,1,5,3
  - 4. 2,4,1,3,5

Question ID : 264330187061

Option 1 ID : 264330732174

Option 2 ID : 264330732173

Option 3 ID : 264330732172

Option 4 ID : 264330732175

Status : Answered

Chosen Option : 4

**Q.10** In the following question, select the related letters from the given alternatives.

PTY : TYP :: CGK : ?

- Ans**
- 1. GKC
  - 2. ZAB
  - 3. LMN
  - 4. BCD

Question ID : 264330190430

Option 1 ID : 264330745302

Option 2 ID : 264330745303

Option 3 ID : 264330745305

Option 4 ID : 264330745304

Status : Answered

Chosen Option : 1

**Q.11** In the following question, select the figure which can be placed at the sign of question mark (?) from the given alternatives.



Ans

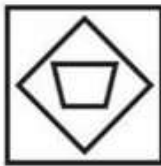
✗ 1.



✗ 2.



✗ 3.



✓ 4.



Question ID : 264330190543

Option 1 ID : 264330745756

Option 2 ID : 264330745757

Option 3 ID : 264330745754

Option 4 ID : 264330745755

Status : Answered

Chosen Option : 4

**Q.12** After interchanging the given two signs what will be the values of equation (I) and (II) respectively?

× and ÷

I.  $16 \div 4 - 8 \times 2 + 7$

II.  $8 \div 4 - 9 \times 3 + 8$

Ans ✓ 1. 67 and 37

✗ 2. 8 and 9

✗ 3. 40 and 50

✗ 4. 16 and 18

Question ID : 264330190120

Option 1 ID : 264330744063

Option 2 ID : 264330744062

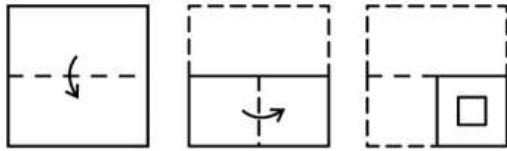
Option 3 ID : 264330744065

Option 4 ID : 264330744064

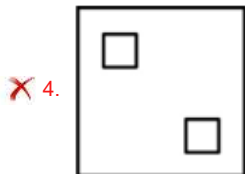
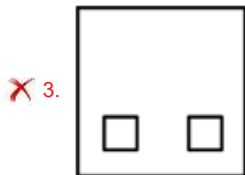
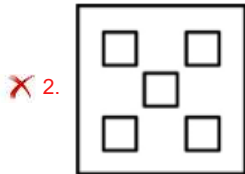
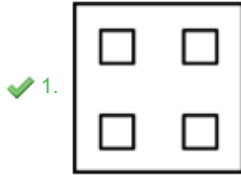
Status : Answered

Chosen Option : 1

Q.13 A paper is folded and cut as shown below. How will it appear when unfolded?



Ans



Question ID : 264330191587

Option 1 ID : 264330749703

Option 2 ID : 264330749705

Option 3 ID : 264330749702

Option 4 ID : 264330749704

Status : Answered

Chosen Option : 1

Q.14 In the following question, select the related letter pair from the given alternatives.

BF : BG :: ?

Ans ✓ 1. UW : UX

✗ 2. AB : NC

✗ 3. AC : NO

✗ 4. BQ : QS

Question ID : 264330191512

Option 1 ID : 264330749404

Option 2 ID : 264330749402

Option 3 ID : 264330749403

Option 4 ID : 264330749405

Status : Answered

Chosen Option : 1

Q.15  $I \times J$  means 'I is the wife of J'

$I + J$  means 'I is the husband of J'

$I \div J$  means 'I is the sister of J'

$I - J$  means 'I is the brother of J'

How is K related to M in the expression ' $K - L \div M + N$ '?

- Ans
- 1. Husband
  - 2. Son
  - 3. Father
  - 4. Brother

Question ID : 264330192255

Option 1 ID : 264330752374

Option 2 ID : 264330752377

Option 3 ID : 264330752375

Option 4 ID : 264330752376

Status : Answered

Chosen Option : 4

Q.16 From the given option figures, select the one in which the question figure is hidden/embedded. (rotation is NOT allowed)

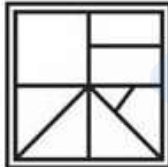


Ans

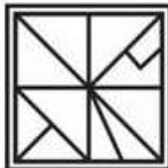
1.



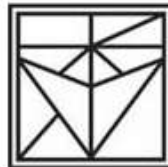
2.



3.



4.



Question ID : 264330190164

Option 1 ID : 264330744239

Option 2 ID : 264330744238

Option 3 ID : 264330744241

Option 4 ID : 264330744240

Status : Answered

Chosen Option : 4

**Q.17** Which of the following letter clusters will replace the question mark (?) in the given series?

VD, TF, RH, PJ, ?

- Ans**
- 1. NO
  - 2. MK
  - 3. MN
  - 4. NL

Question ID : 264330192128

Option 1 ID : 264330751868

Option 2 ID : 264330751866

Option 3 ID : 264330751869

Option 4 ID : 264330751867

Status : Answered

Chosen Option : 4

**Q.18** Which of the following numbers will replace the question mark (?) in the given series?

15,17, 21, 29, 45, ?

- Ans**
- 1. 58
  - 2. 64
  - 3. 84
  - 4. 77

Question ID : 264330192180

Option 1 ID : 264330752074

Option 2 ID : 264330752075

Option 3 ID : 264330752077

Option 4 ID : 264330752076

Status : Answered

Chosen Option : 4



**Q.19** In the following question, select the figure which can be placed at the sign of question mark (?) from the given alternatives.



Ans

✓ 1.



✗ 2.



✗ 3.



✗ 4.



Question ID : 264330187414

Option 1 ID : 264330733584

Option 2 ID : 264330733587

Option 3 ID : 264330733586

Option 4 ID : 264330733585

Status : Answered

Chosen Option : 1

**Q.20** Which of the following groups of letters when sequentially placed from left to right will complete the given series?

d\_eeffggddeeffggdde\_ffggddeeffggddeef\_g\_

- Ans**
- 1. deff
  - 2. degf
  - 3. defg
  - 4. ddee

Question ID : 264330190488  
Option 1 ID : 264330745536  
Option 2 ID : 264330745537  
Option 3 ID : 264330745534  
Option 4 ID : 264330745535  
Status : Answered  
Chosen Option : 3

Section : Part-B-General Knowledge and General awareness

**Q.1** The planned economic development in India began in which of the following years?

- Ans**
- 1. 1978
  - 2. 1961
  - 3. 1951
  - 4. 1991

Question ID : 264330191045  
Option 1 ID : 264330747535  
Option 2 ID : 264330747537  
Option 3 ID : 264330747534  
Option 4 ID : 264330747536  
Status : Answered  
Chosen Option : 3

**Q.2** Which body in India is responsible for safeguarding and promoting the rights of consumers and ensuring consumer protection?

- Ans**
- 1. Central Bureau of Investigation (CBI)
  - 2. National Consumer Disputes Redressal Commission (NCDRC)
  - 3. National Human Rights Commission (NHRC)
  - 4. National Commission for Women (NCW)

Question ID : 264330191501  
Option 1 ID : 264330749360  
Option 2 ID : 264330749359  
Option 3 ID : 264330749358  
Option 4 ID : 264330749361  
Status : Answered  
Chosen Option : 2

Q.3 In 2022, Indian-born entrepreneur \_\_\_\_\_ has been elected as the first representative of the Indian community in Germany

- Ans
- 1. Ruchira Kamboj
  - 2. Rajveer Singh Randhawa
  - 3. T.S.Tirumurti
  - 4. Gurdeep Singh Randhawa

Question ID : 264330191299  
Option 1 ID : 264330748553  
Option 2 ID : 264330748551  
Option 3 ID : 264330748552  
Option 4 ID : 264330748550  
Status : Answered  
Chosen Option : 2

Q.4 The theme of the Twelfth five year plan of India was \_\_\_\_\_.

- Ans
- 1. Growth with social justice and equality
  - 2. Faster, Sustainable, and More Inclusive Growth
  - 3. Economic liberalization
  - 4. Towards Faster and More Inclusive Growth

Question ID : 264330191987  
Option 1 ID : 264330751304  
Option 2 ID : 264330751303  
Option 3 ID : 264330751305  
Option 4 ID : 264330751302  
Status : Answered  
Chosen Option : 4

Q.5 How many questions were asked in the 2011 Census of India?

- Ans
- 1. 33 Questions
  - 2. 29 Questions
  - 3. 21 Questions
  - 4. 25 Questions

Question ID : 264330188758  
Option 1 ID : 264330738837  
Option 2 ID : 264330738836  
Option 3 ID : 264330738834  
Option 4 ID : 264330738835  
Status : Answered  
Chosen Option : 1

Q.6 In the periodic table, which group consists of elements known as the noble gases?

- Ans
- 1. Group 1
  - 2. Group 17
  - 3. Group 7
  - 4. Group 18

Question ID : 264330191293

Option 1 ID : 264330748526

Option 2 ID : 264330748529

Option 3 ID : 264330748527

Option 4 ID : 264330748528

Status : Answered

Chosen Option : 4

Q.7 The Grand Cross of the Order of Honor was conferred on \_\_\_\_\_ in August 2023.

- Ans
- 1. Foreign Minister S.Jayshankar
  - 2. Prime Minister Narendra Modi
  - 3. Home Minister Amit Shah
  - 4. President Draupadi Murmu

Question ID : 264330191449

Option 1 ID : 264330749152

Option 2 ID : 264330749150

Option 3 ID : 264330749153

Option 4 ID : 264330749151

Status : Answered

Chosen Option : 2

Q.8 In October 2023, who did 24-year-old Indian grandmaster Karthikeyan Murali defeat in a chess match?

- Ans
- 1. Viswanathan Anand
  - 2. Magnus Carlsen
  - 3. Levon Aronian
  - 4. Vladimir Kramnik

Question ID : 264330191470

Option 1 ID : 264330749235

Option 2 ID : 264330749237

Option 3 ID : 264330749236

Option 4 ID : 264330749234

Status : Answered

Chosen Option : 2

Q.9 Identify the ancient site from the information given below:

This is an old site with caves and rock shelters. People chose these natural caves because they provided shelter from the rain, heat and wind. These rock shelters are close to the Narmada valley.

- Ans
- 1. Bhramagiri
  - 2. Bhimbetka
  - 3. Inamgaon
  - 4. Mehrgarh

Question ID : 264330191035  
Option 1 ID : 264330747497  
Option 2 ID : 264330747494  
Option 3 ID : 264330747496  
Option 4 ID : 264330747495  
Status : Answered  
Chosen Option : 2

Q.10 From which state, 'Pongal' festival belongs?

- Ans
- 1. Tamil Nadu
  - 2. Assam
  - 3. Bihar
  - 4. Haryana

Question ID : 264330191772  
Option 1 ID : 264330750443  
Option 2 ID : 264330750444  
Option 3 ID : 264330750445  
Option 4 ID : 264330750442  
Status : Answered  
Chosen Option : 2

Q.11 Which team has won the Ranji Trophy maximum number of times?

- Ans
- 1. Karnataka
  - 2. Tamil Nadu
  - 3. Delhi
  - 4. Mumbai (Bombay)

Question ID : 264330191022  
Option 1 ID : 264330747444  
Option 2 ID : 264330747442  
Option 3 ID : 264330747445  
Option 4 ID : 264330747443  
Status : Answered  
Chosen Option : 4

**Q.12** In Volleyball, if the game is tied at \_\_\_\_\_ in the fifth set, the set continues till one team builds a two-point lead over the other.

- Ans**
- 1. 14 – 14
  - 2. 20 – 20
  - 3. 11 – 11
  - 4. 24 – 24

Question ID : 264330191083

Option 1 ID : 264330747689

Option 2 ID : 264330747686

Option 3 ID : 264330747688

Option 4 ID : 264330747687

Status : Answered

Chosen Option : 4

**Q.13** Which of the following statements is correct is regarding measures of money supply?

I. M1 and M2 are known as narrow money.

II. M3 and M4 are known as broad money.

- Ans**
- 1. Only II
  - 2. Only I
  - 3. Neither I nor II
  - 4. Both I and II

Question ID : 264330188669

Option 1 ID : 264330738479

Option 2 ID : 264330738478

Option 3 ID : 264330738481

Option 4 ID : 264330738480

Status : Answered

Chosen Option : 4

**Q.14** Mukhyamantri Gramin Gaadi Yojna was launched by which state of India?

- Ans**
- 1. Delhi
  - 2. West Bengal
  - 3. Jharkhand
  - 4. Odisha

Question ID : 264330191948

Option 1 ID : 264330751147

Option 2 ID : 264330751146

Option 3 ID : 264330751148

Option 4 ID : 264330751149

Status : Answered

Chosen Option : 4

Q.15 Which of the following musicians have won the Dada Saheb Phalke Award?

- Ans
- 1. Kishore Kumar
  - 2. Md. Rafi
  - 3. Gulzar
  - 4. A.R Rahman

Question ID : 264330191998  
Option 1 ID : 264330751348  
Option 2 ID : 264330751349  
Option 3 ID : 264330751346  
Option 4 ID : 264330751347  
Status : Answered  
Chosen Option : 2

Q.16 Which of the following parts of the Indian Constitution deals with Official language?

- Ans
- 1. Part XVIII
  - 2. Part XIX
  - 3. Part XVII
  - 4. Part XVI

Question ID : 264330192020  
Option 1 ID : 264330751436  
Option 2 ID : 264330751437  
Option 3 ID : 264330751435  
Option 4 ID : 264330751434  
Status : Answered  
Chosen Option : 2

Q.17 The Veda Samaj was established in \_\_\_\_\_.

- Ans
- 1. Bombay
  - 2. Punjab
  - 3. Madras
  - 4. Calcutta

Question ID : 264330190796  
Option 1 ID : 264330746538  
Option 2 ID : 264330746541  
Option 3 ID : 264330746539  
Option 4 ID : 264330746540  
Status : Answered  
Chosen Option : 4

Q.18 First Asian Games were held in New Delhi, India in the year of:

- Ans  1. 1951  
 2. 1982  
 3. 1970  
 4. 1999

Question ID : 264330191763  
Option 1 ID : 264330750407  
Option 2 ID : 264330750408  
Option 3 ID : 264330750406  
Option 4 ID : 264330750409  
Status : Answered  
Chosen Option : 2

Q.19 India shares longest land border with \_\_\_\_\_.

- Ans  1. Nepal  
 2. Pakistan  
 3. Bangladesh  
 4. Sri Lanka

Question ID : 264330190894  
Option 1 ID : 264330746933  
Option 2 ID : 264330746930  
Option 3 ID : 264330746931  
Option 4 ID : 264330746932  
Status : Answered  
Chosen Option : 3

Q.20 Which of the following dance form is wedded with Hindustani music school?

- Ans  1. Kathakali  
 2. Bharatnatyam  
 3. Sattriya  
 4. Kathak

Question ID : 264330188735  
Option 1 ID : 264330738742  
Option 2 ID : 264330738743  
Option 3 ID : 264330738744  
Option 4 ID : 264330738745  
Status : Answered  
Chosen Option : 4



**Q.1** A retailer marks his products at 25% more than the cost price. If a customer receives a discount of 20%, what is the profit percentage for the retailer?

- Ans**
- 1. 1%
  - 2. 3%
  - 3. 5%
  - 4. 0%

Question ID : 264330188523  
Option 1 ID : 264330737894  
Option 2 ID : 264330737895  
Option 3 ID : 264330737896  
Option 4 ID : 264330737897  
Status : Answered  
Chosen Option : 4

**Q.2** Average weight of 18 students is 54 kg. After including a new student in that group the average weight rises by 1 kg. What is the weight of the new student?

- Ans**
- 1. 76 kg
  - 2. 70 kg
  - 3. 75 kg
  - 4. 73 kg

Question ID : 264330187863  
Option 1 ID : 264330735381  
Option 2 ID : 264330735380  
Option 3 ID : 264330735383  
Option 4 ID : 264330735382  
Status : Answered  
Chosen Option : 4

**Q.3** The traffic lights at three different crossings change after 30 seconds, 40 seconds, and 60 seconds respectively. Then in 30 min how many times will they change simultaneously?

- Ans**
- 1. 19
  - 2. 15
  - 3. 18
  - 4. 13

Question ID : 264330187242  
Option 1 ID : 264330732896  
Option 2 ID : 264330732897  
Option 3 ID : 264330732898  
Option 4 ID : 264330732899  
Status : Answered  
Chosen Option : 2

**Q.4** Sahil bought toffees at 12 for a rupee. How many toffees for a rupee he should sell to gain 20%?

- Ans**
- 1. 18
  - 2. 14
  - 3. 15
  - 4. 10

Question ID : 264330191676  
Option 1 ID : 264330750059  
Option 2 ID : 264330750060  
Option 3 ID : 264330750058  
Option 4 ID : 264330750061  
Status : Answered  
Chosen Option : 4

**Q.5** M can do a piece of work in  $\frac{39}{2}$  days and N in  $\frac{13}{2}$  days. How many days will both take together to complete the work?

- Ans**
- 1. 22 days
  - 2.  $\frac{39}{8}$  days
  - 3.  $\frac{47}{5}$  days
  - 4.  $\frac{20}{3}$  days

Question ID : 264330188096  
Option 1 ID : 264330736315  
Option 2 ID : 264330736313  
Option 3 ID : 264330736314  
Option 4 ID : 264330736312  
Status : Answered  
Chosen Option : 2

**Q.6** P got 20 percent less marks than Q. R got 20 percent less marks than Q. If R got 160 marks, then what are the marks of P?

- Ans**
- 1. 150
  - 2. 160
  - 3. 120
  - 4. 180

Question ID : 264330188006  
Option 1 ID : 264330735953  
Option 2 ID : 264330735955  
Option 3 ID : 264330735952  
Option 4 ID : 264330735954  
Status : Answered  
Chosen Option : 2

Q.7 What will be the average of all the odd numbers between 8 and 28?

- Ans
- 1. 17
  - 2. 21
  - 3. 18
  - 4. 19

Question ID : 264330187504  
Option 1 ID : 264330733944  
Option 2 ID : 264330733947  
Option 3 ID : 264330733945  
Option 4 ID : 264330733946  
Status : Answered  
Chosen Option : 3

Q.8 Rahul earns an interest of ₹ 2996 for the third year and ₹ 1400 for the second year on the same sum. Find the rate of interest per annum if it is lent at compound interest (compounding annually).

- Ans
- 1. 112%
  - 2. 110%
  - 3. 114%
  - 4. 113%

Question ID : 264330188429  
Option 1 ID : 264330737587  
Option 2 ID : 264330737584  
Option 3 ID : 264330737585  
Option 4 ID : 264330737586  
Status : Answered  
Chosen Option : 3

Q.9 If a certain sum of money becomes double of itself in 8 years 6 months at simple interest, then what will be the annual rate of interest?

- Ans
- 1. 14.28 percent
  - 2. 12.84 percent
  - 3. 11.76 percent
  - 4. 13.92 percent

Question ID : 264330191622  
Option 1 ID : 264330749842  
Option 2 ID : 264330749845  
Option 3 ID : 264330749844  
Option 4 ID : 264330749843  
Status : Answered  
Chosen Option : 3

Q.10 What is the Highest Common Factor of  $4/11$  and  $16/33$ ?

- Ans
- 1.  $4/77$
  - 2.  $2/33$
  - 3.  $4/33$
  - 4.  $2/11$

Question ID : 264330187801  
Option 1 ID : 264330735134  
Option 2 ID : 264330735133  
Option 3 ID : 264330735132  
Option 4 ID : 264330735135  
Status : Answered  
Chosen Option : 3

Q.11 If the side of a square is increased by 5 percent, then what will be the percentage increase in its perimeter?

- Ans
- 1. 20 percent
  - 2. 10 percent
  - 3. 5 percent
  - 4. 40 percent

Question ID : 264330187865  
Option 1 ID : 264330735391  
Option 2 ID : 264330735389  
Option 3 ID : 264330735388  
Option 4 ID : 264330735390  
Status : Answered  
Chosen Option : 3

Q.12 In an alloy of 240 gram copper and iron are in the ratio of 7 : 5. How much quantity of iron should be added so that the ratio of copper and iron become 7 : 13?

- Ans
- 1. 200 grams
  - 2. 120 grams
  - 3. 180 grams
  - 4. 160 grams

Question ID : 264330187932  
Option 1 ID : 264330735657  
Option 2 ID : 264330735659  
Option 3 ID : 264330735656  
Option 4 ID : 264330735658  
Status : Answered  
Chosen Option : 4

**Q.13** If Selling price of an article is Rs. 2800 and Marked price is Rs. 4000. What is the discount percentage?

- Ans**
- 1. 20
  - 2. 15
  - 3. 25
  - 4. 30

Question ID : 264330191618  
Option 1 ID : 264330749826  
Option 2 ID : 264330749829  
Option 3 ID : 264330749827  
Option 4 ID : 264330749828  
Status : Answered  
Chosen Option : 4

**Q.14** Find the length of the plank which can be used to measure exactly the lengths 6 m 50 cm, 3 m 50 cm, and 7 m 50 cm in the least time.

- Ans**
- 1. 50 cm
  - 2. 15 cm
  - 3. 100 cm
  - 4. 25 cm

Question ID : 264330188082  
Option 1 ID : 264330736259  
Option 2 ID : 264330736258  
Option 3 ID : 264330736256  
Option 4 ID : 264330736257  
Status : Answered  
Chosen Option : 1

**Q.15** If  $a:b = 4:5$  and  $b:c = 3:8$ , then find  $a:b:c$ .

- Ans**
- 1. 10 : 15 : 22
  - 2. 12 : 10 : 25
  - 3. 12 : 15 : 40
  - 4. 12 : 15 : 28

Question ID : 264330188504  
Option 1 ID : 264330737819  
Option 2 ID : 264330737818  
Option 3 ID : 264330737821  
Option 4 ID : 264330737820  
Status : Answered  
Chosen Option : 3

Q.16 Find the value of  $413 \div 7 (20 + 8 \times 5 - 59)$ .

- Ans
- 1. 44
  - 2. 66
  - 3. 55
  - 4. 59

Question ID : 264330188414  
Option 1 ID : 264330737524  
Option 2 ID : 264330737527  
Option 3 ID : 264330737525  
Option 4 ID : 264330737526  
Status : Answered  
Chosen Option : 4

Q.17 Selling price of a table is Rs. 1972 and loss percentage is 32 percent. If selling price is Rs. 3000, then what will be the profit percentage?

- Ans
- 1. 5.66 percent
  - 2. 4.25 percent
  - 3. 6.66 percent
  - 4. 3.44 percent

Question ID : 264330187468  
Option 1 ID : 264330733802  
Option 2 ID : 264330733800  
Option 3 ID : 264330733803  
Option 4 ID : 264330733801  
Status : Answered  
Chosen Option : 4

Q.18 What is the area of an equilateral triangle having sides equal to 0.2 cm?

- Ans
- 1.  $\sqrt{3}/100 \text{ cm}^2$
  - 2.  $4\sqrt{3}/100 \text{ cm}^2$
  - 3.  $7\sqrt{3}/100 \text{ cm}^2$
  - 4.  $\sqrt{3}/200 \text{ cm}^2$

Question ID : 264330191687  
Option 1 ID : 264330750102  
Option 2 ID : 264330750103  
Option 3 ID : 264330750104  
Option 4 ID : 264330750105  
Status : Answered  
Chosen Option : 1

**Q.19** C is four times as efficient as D. C takes 63 days less than D to complete a work. If both of them work together, then in how many days will the same work be completed?

- Ans**
- 1. 16.8 days
  - 2. 75.5 days
  - 3. 80 days
  - 4. 50.8 days

Question ID : 264330187477  
Option 1 ID : 264330733836  
Option 2 ID : 264330733838  
Option 3 ID : 264330733837  
Option 4 ID : 264330733839  
Status : Answered  
Chosen Option : 1

**Q.20** Two cars start from the same point and travel in the same direction. If one car travels at 55 km/h and the other at 75 km/h, after 3 hours, how far apart are they?

- Ans**
- 1. 70 km
  - 2. 65 km
  - 3. 60 km
  - 4. 55 km

Question ID : 264330188508  
Option 1 ID : 264330737834  
Option 2 ID : 264330737836  
Option 3 ID : 264330737835  
Option 4 ID : 264330737837  
Status : Answered  
Chosen Option : 3

Section : Part-D-English

**Q.1** Improve the underlined part of the sentence. Choose 'No improvement' as an answer if the sentence is grammatically correct.

She heard the front door creak open as he returned home.

- Ans**
- 1. opening as
  - 2. No improvement
  - 3. opened as
  - 4. open is

Question ID : 264330185964  
Option 1 ID : 264330728158  
Option 2 ID : 264330728159  
Option 3 ID : 264330728157  
Option 4 ID : 264330728156  
Status : Answered  
Chosen Option : 1

Q.2 Select the most appropriate word to fill in the blank.

\_\_\_\_\_ and neglect resulted in a government that was weakened enough to be overthrown.

Ans  1. Corruption

2. Corrupted

3. Corrupt

4. Corrupting

Question ID : 264330185839

Option 1 ID : 264330727682

Option 2 ID : 264330727680

Option 3 ID : 264330727683

Option 4 ID : 264330727681

Status : Answered

Chosen Option : 1

Q.3 Select the incorrectly spelt word from the given sentence.

Soon he was literally a fugetive, in the midst of both an internecine fight among the Timurids and a struggle between them and the rising Uzbek.

Ans  1. fugetive

2. literally

3. midst

4. struggle

Question ID : 264330186167

Option 1 ID : 264330728929

Option 2 ID : 264330728928

Option 3 ID : 264330728930

Option 4 ID : 264330728931

Status : Answered

Chosen Option : 1

Q.4 Select the most appropriate antonym of the given word.

Gobble

Ans  1. Nibble

2. Grab

3. Small

4. Guzzle

Question ID : 264330186501

Option 1 ID : 264330730203

Option 2 ID : 264330730200

Option 3 ID : 264330730202

Option 4 ID : 264330730201

Status : Answered

Chosen Option : 1



Q.5 From the options given below choose the synonym (similar meaning) of the word:

Equivocal

- Ans
- 1. Protection
  - 2. Ambiguous
  - 3. Unshielded
  - 4. Inactivity

Question ID : 264330186457  
Option 1 ID : 264330730033  
Option 2 ID : 264330730032  
Option 3 ID : 264330730034  
Option 4 ID : 264330730035  
Status : Answered  
Chosen Option : 1

Q.6 Find the part of the given sentence that has an error in it. If there is no error, choose 'No error'.

She is a best girl with a good sense of humour.

- Ans
- 1. with a good sense
  - 2. No error
  - 3. of humour.
  - 4. She is a best girl

Question ID : 264330185604  
Option 1 ID : 264330726785  
Option 2 ID : 264330726787  
Option 3 ID : 264330726786  
Option 4 ID : 264330726784  
Status : Answered  
Chosen Option : 4

Q.7 Choose the most appropriate antonym of the underlined word.

We are witnessing a resurgence of devilry that is perfectly appalling.

- Ans
- 1. Return
  - 2. Rebirth
  - 3. Triumph
  - 4. Failure

Question ID : 264330185638  
Option 1 ID : 264330726914  
Option 2 ID : 264330726913  
Option 3 ID : 264330726915  
Option 4 ID : 264330726912  
Status : Answered  
Chosen Option : 3

**Q.8** Find the part of the given sentence that has an error in it. If there is no error, choose 'No error'.

This metal oxidizes very slow in dry air at ordinary temperatures.

**Ans**  1. at ordinary temperatures.

2. very slow in dry air

3. This metal oxidizes

4. No error

Question ID : 264330186696

Option 1 ID : 264330730946

Option 2 ID : 264330730945

Option 3 ID : 264330730944

Option 4 ID : 264330730947

Status : Answered

Chosen Option : 2

**Q.9** Select the most appropriate word to fill in the blank.

The movie was late in starting \_\_\_\_\_ of projection difficulties.

**Ans**  1. account

2. though

3. still

4. because

Question ID : 264330186261

Option 1 ID : 264330729291

Option 2 ID : 264330729289

Option 3 ID : 264330729288

Option 4 ID : 264330729290

Status : Answered

Chosen Option : 4

**Q.10** Find the part of the given sentence that has an error in it. If there is no error, choose 'No error'.

If you don't know who had have a disease, it's impossible to predict its spread.

**Ans**  1. impossible to predict its spread

2. If you don't know

3. who had have a disease, it's

4. No error

Question ID : 264330185689

Option 1 ID : 264330727110

Option 2 ID : 264330727108

Option 3 ID : 264330727109

Option 4 ID : 264330727111

Status : Answered

Chosen Option : 3

**Q.11** Improve the underlined part of the sentence. Choose 'No improvement' as an answer if the sentence is grammatically correct.

The doctor sending his patient to a specialist.

- Ans**
- 1. sent his patient
  - 2. sent his patiently
  - 3. No improvement
  - 4. send his patient

Question ID : 264330185753  
Option 1 ID : 264330727352  
Option 2 ID : 264330727354  
Option 3 ID : 264330727355  
Option 4 ID : 264330727353  
Status : Answered  
Chosen Option : 1

**Q.12** Choose the idiom/phrase that can substitute the highlighted group of words meaningfully.

Don't be silly. Nobody is trying to harm you. It's **only your imagination**.

- Ans**
- 1. Break a leg
  - 2. Spill the beans
  - 3. All in your head
  - 4. Cut corners

Question ID : 264330186040  
Option 1 ID : 264330728445  
Option 2 ID : 264330728446  
Option 3 ID : 264330728447  
Option 4 ID : 264330728444  
Status : Answered  
Chosen Option : 3

**Q.13** Choose the word that is opposite in meaning to the given word.

Guilty

- Ans**
- 1. Contrite
  - 2. culpable
  - 3. remorseful
  - 4. Innocent

Question ID : 264330186079  
Option 1 ID : 264330728593  
Option 2 ID : 264330728592  
Option 3 ID : 264330728595  
Option 4 ID : 264330728594  
Status : Answered  
Chosen Option : 4

Q.14 Select the most appropriate meaning of the given idiom.

To beat the band

- Ans
- 1. To procrastinate.
  - 2. To resign from one's job.
  - 3. To a huge or the greatest possible extent.
  - 4. To refuse to talk.

Question ID : 264330186502

Option 1 ID : 264330730205

Option 2 ID : 264330730207

Option 3 ID : 264330730204

Option 4 ID : 264330730206

Status : Answered

Chosen Option : 3

Q.15 Select the sentence with no spelling errors.

- Ans
- 1. The question of protecting folklore was less urgent.
  - 2. The question of protecting folklore was les urgent.
  - 3. The question of protacting folklore was less urgent.
  - 4. The question of protecting foklore was less urgent.

Question ID : 264330186715

Option 1 ID : 264330731019

Option 2 ID : 264330731016

Option 3 ID : 264330731017

Option 4 ID : 264330731018

Status : Answered

Chosen Option : 1

### Comprehension:

In the following passage some words have been deleted. Fill in the blanks with the help of the alternatives given. Select the most appropriate option for each number.

The time seemed (1) \_\_\_\_\_ as we swept on our way, now in almost complete darkness, for the rolling clouds obscured the moon. (2) \_\_\_\_\_ kept on ascending, with occasional (3) \_\_\_\_\_ of quick descent, but in the main always ascending. Suddenly, I became conscious of the fact that the driver was in the (4) \_\_\_\_\_ of pulling up the horses in the courtyard of a vast ruined castle, from whose tall black windows came no ray of (5) \_\_\_\_\_, and whose broken battlements showed a jagged line against the sky.

SubQuestion No : 16

Q.16 Select the most appropriate option to fill in the blank No. 1.

- Ans
- 1. interminable
  - 2. limited
  - 3. confined
  - 4. bordered

Question ID : 264330186914

Option 1 ID : 264330731775

Option 2 ID : 264330731772

Option 3 ID : 264330731773

Option 4 ID : 264330731774

Status : Answered

Chosen Option : 3

**Comprehension:**

In the following passage some words have been deleted. Fill in the blanks with the help of the alternatives given. Select the most appropriate option for each number.

The time seemed (1) \_\_\_\_\_ as we swept on our way, now in almost complete darkness, for the rolling clouds obscured the moon. (2) \_\_\_\_\_ kept on ascending, with occasional (3) \_\_\_\_\_ of quick descent, but in the main always ascending. Suddenly, I became conscious of the fact that the driver was in the (4) \_\_\_\_\_ of pulling up the horses in the courtyard of a vast ruined castle, from whose tall black windows came no ray of (5) \_\_\_\_\_, and whose broken battlements showed a jagged line against the sky.

**SubQuestion No : 17**

Q.17 Select the most appropriate option to fill in the blank No. 2.

- Ans
- 1. We
  - 2. Us
  - 3. I
  - 4. They

Question ID : 264330186915

Option 1 ID : 264330731778

Option 2 ID : 264330731776

Option 3 ID : 264330731777

Option 4 ID : 264330731779

Status : Answered

Chosen Option : 1

**Comprehension:**

In the following passage some words have been deleted. Fill in the blanks with the help of the alternatives given. Select the most appropriate option for each number.

The time seemed (1) \_\_\_\_\_ as we swept on our way, now in almost complete darkness, for the rolling clouds obscured the moon. (2) \_\_\_\_\_ kept on ascending, with occasional (3) \_\_\_\_\_ of quick descent, but in the main always ascending. Suddenly, I became conscious of the fact that the driver was in the (4) \_\_\_\_\_ of pulling up the horses in the courtyard of a vast ruined castle, from whose tall black windows came no ray of (5) \_\_\_\_\_, and whose broken battlements showed a jagged line against the sky.

**SubQuestion No : 18**

Q.18 Select the most appropriate option to fill in the blank No. 3.

- Ans
- 1. junctures
  - 2. season
  - 3. periods
  - 4. times

Question ID : 264330186916

Option 1 ID : 264330731783

Option 2 ID : 264330731782

Option 3 ID : 264330731781

Option 4 ID : 264330731780

Status : Answered

Chosen Option : 3

**Comprehension:**

In the following passage some words have been deleted. Fill in the blanks with the help of the alternatives given. Select the most appropriate option for each number.

The time seemed (1) \_\_\_\_\_ as we swept on our way, now in almost complete darkness, for the rolling clouds obscured the moon. (2) \_\_\_\_\_ kept on ascending, with occasional (3) \_\_\_\_\_ of quick descent, but in the main always ascending. Suddenly, I became conscious of the fact that the driver was in the (4) \_\_\_\_\_ of pulling up the horses in the courtyard of a vast ruined castle, from whose tall black windows came no ray of (5) \_\_\_\_\_, and whose broken battlements showed a jagged line against the sky.

**SubQuestion No : 19**

**Q.19** Select the most appropriate option to fill in the blank No. 4.

- Ans**
- 1. play
  - 2. drama
  - 3. act
  - 4. theatre

Question ID : 264330186917

Option 1 ID : 264330731786

Option 2 ID : 264330731785

Option 3 ID : 264330731784

Option 4 ID : 264330731787

Status : Answered

Chosen Option : 3

**Comprehension:**

In the following passage some words have been deleted. Fill in the blanks with the help of the alternatives given. Select the most appropriate option for each number.

The time seemed (1) \_\_\_\_\_ as we swept on our way, now in almost complete darkness, for the rolling clouds obscured the moon. (2) \_\_\_\_\_ kept on ascending, with occasional (3) \_\_\_\_\_ of quick descent, but in the main always ascending. Suddenly, I became conscious of the fact that the driver was in the (4) \_\_\_\_\_ of pulling up the horses in the courtyard of a vast ruined castle, from whose tall black windows came no ray of (5) \_\_\_\_\_, and whose broken battlements showed a jagged line against the sky.

**SubQuestion No : 20**

**Q.20** Select the most appropriate option to fill in the blank No. 5.

- Ans**
- 1. light
  - 2. time
  - 3. electricity
  - 4. hopeless

Question ID : 264330186918

Option 1 ID : 264330731791

Option 2 ID : 264330731789

Option 3 ID : 264330731790

Option 4 ID : 264330731788

Status : Answered

Chosen Option : 1

Q.1 दिए गए वाक्य में रेखांकित शब्द के लिए सही वर्तनी ज्ञात कीजिए।

मैंने यह काम स्वयं किया है।

- Ans
- ✗ 1. सवयं
  - ✗ 2. सत्यं
  - ✗ 3. स्वय
  - ✓ 4. स्वयं

Question ID : 264330189138  
 Option 1 ID : 264330740314  
 Option 2 ID : 264330740316  
 Option 3 ID : 264330740317  
 Option 4 ID : 264330740315  
 Status : Not Answered  
 Chosen Option : --

Q.2 दिए गए वाक्य का वह भाग ज्ञात करें, जिसमें कोई त्रुटि है। यदि कोई त्रुटि नहीं है, तो 'कोई त्रुटि नहीं है' चुनें।  
 यह मेरा मित्र है, वह मेरे साथ रहता है।

- Ans
- ✗ 1. यह मेरा
  - ✓ 2. मित्र है, वह
  - ✗ 3. कोई त्रुटि नहीं है
  - ✗ 4. मेरे साथ रहता है।

Question ID : 264330188141  
 Option 1 ID : 264330736484  
 Option 2 ID : 264330736485  
 Option 3 ID : 264330736487  
 Option 4 ID : 264330736486  
 Status : Not Answered  
 Chosen Option : --

Q.3 निम्नलिखित प्रश्न में, दिए गए चार विकल्पों में से, उस विकल्प का चयन करें जो दिए गए मुहावरे के अर्थ को सर्वश्रेष्ठ रूप से व्यक्त करता है।

विष उगलना

- Ans
- ✓ 1. बुरे वचन कहना
  - ✗ 2. हानि पहुंचाना
  - ✗ 3. अत्याचार करना
  - ✗ 4. अच्छाई करना

Question ID : 264330189157  
 Option 1 ID : 264330740387  
 Option 2 ID : 264330740388  
 Option 3 ID : 264330740389  
 Option 4 ID : 264330740386  
 Status : Not Answered  
 Chosen Option : --

Q.4 निम्नलिखित प्रश्न में, चार विकल्पों में से, उस विकल्प का चयन करें जो कोष्ठक में दिए गए शब्द के पर्यायवाची शब्द का सही विकल्प नहीं है।  
मुझे ऊँचे स्थान पर जाने का बहुत ही (खौफ) \_\_\_\_\_ है।

- Ans
- 1. भय
  - 2. भीति
  - 3. त्रास
  - 4. पामर

Question ID : 264330189867  
Option 1 ID : 264330743090  
Option 2 ID : 264330743091  
Option 3 ID : 264330743093  
Option 4 ID : 264330743092  
Status : Not Answered  
Chosen Option : --

Q.5 दिए गए वाक्य में रेखांकित शब्द का विलोम शब्द ज्ञात कीजिए।

पहाड़ी का रास्ता दुर्गम है।

- Ans
- 1. दुर्गम
  - 2. अगम
  - 3. सुचक्र
  - 4. सुगम

Question ID : 264330189198  
Option 1 ID : 264330740543  
Option 2 ID : 264330740542  
Option 3 ID : 264330740545  
Option 4 ID : 264330740544  
Status : Not Answered  
Chosen Option : --

Q.6 निम्नलिखित प्रश्न में, चार विकल्पों में से, उस विकल्प का चयन करें जो कोष्ठक में दिए गए शब्द के तत्सम रूप का सही विकल्प है।  
हमारे यहाँ का (बनिया) \_\_\_\_\_ हमेशा शुद्ध वस्तुएँ ही बेचता है।

- Ans
- 1. ऐन्द्री
  - 2. दर्प
  - 3. वणिक
  - 4. चैतन्य

Question ID : 264330190002  
Option 1 ID : 264330743606  
Option 2 ID : 264330743609  
Option 3 ID : 264330743608  
Option 4 ID : 264330743607  
Status : Not Answered  
Chosen Option : --



Q.7 दिए गए वाक्य का वह भाग ज्ञात करें, जिसमें कोई त्रुटि है।  
सर टॉमसरो ने जहाँगीर को उपहार भेंट दिया जो उनके पास आज भी है।

- Ans
- 1. दिया जो उनके
  - 2. सर टॉमसरो ने
  - 3. पास आज भी है।
  - 4. जहाँगीर को उपहार भेंट

Question ID : 264330190067  
Option 1 ID : 264330743856  
Option 2 ID : 264330743854  
Option 3 ID : 264330743857  
Option 4 ID : 264330743855  
Status : Not Answered  
Chosen Option : --

Q.8 दिए गए वाक्य में रेखांकित शब्द का तद्भव शब्द ज्ञात कीजिए।

आज सोनू का व्याह है।

- Ans
- 1. वंश
  - 2. वाणी
  - 3. विवाह
  - 4. वृश्चिक

Question ID : 264330188307  
Option 1 ID : 264330737119  
Option 2 ID : 264330737117  
Option 3 ID : 264330737116  
Option 4 ID : 264330737118  
Status : Not Answered  
Chosen Option : --

Q.9 निम्नलिखित प्रश्न में, चार विकल्पों में से, उस विकल्प का चयन करें जो कोष्ठक में दिए गए शब्द के विलोम शब्द का सही विकल्प है।  
वास्तविक महानता की (उत्पत्ति) \_\_\_\_\_ स्वयं पर खामोश विजय से होती है।

- Ans
- 1. जन्म
  - 2. उत्थान
  - 3. उत्कर्ष
  - 4. विनाश

Question ID : 264330189995  
Option 1 ID : 264330743579  
Option 2 ID : 264330743581  
Option 3 ID : 264330743580  
Option 4 ID : 264330743578  
Status : Not Answered  
Chosen Option : --

Q.10 निम्नलिखित प्रश्न में, चार विकल्पों में से, उस सही विकल्प का चयन करें जो वाक्यांश के लिए एक शब्द का विकल्प हो।

सर्वाधिक अधिकार प्राप्त शासक

- Ans
- ✓ 1. अधिनायक
  - ✗ 2. अधित्यका
  - ✗ 3. अधिनियम
  - ✗ 4. अध्यक्ष

Question ID : 264330189865

Option 1 ID : 264330743082

Option 2 ID : 264330743084

Option 3 ID : 264330743085

Option 4 ID : 264330743083

Status : Not Answered

Chosen Option : --

Q.11 दिए गए वाक्यांश के लिए सार्थक शब्द ज्ञात कीजिए।  
विरह से उत्पन्न अग्नि

- Ans
- ✓ 1. विरहाग्नि
  - ✗ 2. दावाग्नि
  - ✗ 3. बड़वाग्नि
  - ✗ 4. जठराग्नि

Question ID : 264330188129

Option 1 ID : 264330736437

Option 2 ID : 264330736439

Option 3 ID : 264330736438

Option 4 ID : 264330736436

Status : Not Answered

Chosen Option : --

Q.12 निम्नलिखित प्रश्न में, चार विकल्पों में से, उस विकल्प का चयन करें जो कोष्ठक में दिए गए शब्द के पर्यायवाची शब्द का सही विकल्प है।

साँप के काटने पर उसका (ज़हर) \_\_\_\_\_ फैलने में बहुत कम समय लगता है।

- Ans
- ✗ 1. घातक
  - ✗ 2. कृपण
  - ✓ 3. कालकूट
  - ✗ 4. घट

Question ID : 264330188363

Option 1 ID : 264330737328

Option 2 ID : 264330737330

Option 3 ID : 264330737329

Option 4 ID : 264330737331

Status : Not Answered

Chosen Option : --

Q.13 दिए गए वाक्य में से गलत वर्तनी ज्ञात कीजिए।

दोनों भाईयों में घनिष्ट संबंध है।

- Ans
- 1. दोनों
  - 2. घनिष्ट
  - 3. भाईयों
  - 4. संबंध

Question ID : 264330189223

Option 1 ID : 264330740641

Option 2 ID : 264330740639

Option 3 ID : 264330740638

Option 4 ID : 264330740640

Status : Not Answered

Chosen Option : --

Q.14 निम्नलिखित प्रश्न में, दिए गए चार विकल्पों में से, उस विकल्प का चयन करें जो दिए गए मुहावरे के अर्थ को सर्वश्रेष्ठ रूप से व्यक्त करता है।

उन्नीस-बीस होना

- Ans
- 1. बहुत फर्क होना
  - 2. समय बदल जाना
  - 3. करीब-करीब एक समान होना
  - 4. रुपया-पैसा न होना

Question ID : 264330188304

Option 1 ID : 264330737105

Option 2 ID : 264330737107

Option 3 ID : 264330737104

Option 4 ID : 264330737106

Status : Not Answered

Chosen Option : --

Q.15 निम्नलिखित प्रश्न में, चार विकल्पों में से, उस सही विकल्प का चयन करें जो वाक्यांशों के लिए एक शब्द का विकल्प हो।

इन्द्रियों को जीतने वाला

- Ans
- 1. जितेन्द्रिय
  - 2. अतीन्द्रिय
  - 3. इन्द्रियाविग्रह
  - 4. वैजयंत

Question ID : 264330189530

Option 1 ID : 264330741809

Option 2 ID : 264330741807

Option 3 ID : 264330741806

Option 4 ID : 264330741808

Status : Not Answered

Chosen Option : --

**Comprehension:**

नीचे दिए गए गद्य में कुछ शब्द छोड़ दिए गए हैं और प्रत्येक रिक्त स्थान के चार विकल्प दिए गए हैं। इन चारों में से कौन सा विकल्प रिक्त स्थान की पूर्ति करेगा-

जब कोई समस्या बढ़ कर (1)\_\_\_\_\_ में बदलने वाली हो तो उसका सामना करने और उसे रोकने के लिए सरकार और (2)\_\_\_\_\_ को हर स्तर पर (3)\_\_\_\_\_ हो जाना चाहिए। प्रदूषण एक (4)\_\_\_\_\_ संकट के रूप में (5)\_\_\_\_\_ हो गया है।

**SubQuestion No : 16**

Q.16 रिक्त 1 के लिए सबसे उपयुक्त विकल्प का चयन कीजिए।

- Ans
- ✓ 1. संकट
  - ✗ 2. उत्साह
  - ✗ 3. उल्लास
  - ✗ 4. हर्ष

Question ID : 264330189335

Option 1 ID : 264330741062

Option 2 ID : 264330741063

Option 3 ID : 264330741065

Option 4 ID : 264330741064

Status : Not Answered

Chosen Option : --

**Comprehension:**

नीचे दिए गए गद्य में कुछ शब्द छोड़ दिए गए हैं और प्रत्येक रिक्त स्थान के चार विकल्प दिए गए हैं। इन चारों में से कौन सा विकल्प रिक्त स्थान की पूर्ति करेगा-

जब कोई समस्या बढ़ कर (1)\_\_\_\_\_ में बदलने वाली हो तो उसका सामना करने और उसे रोकने के लिए सरकार और (2)\_\_\_\_\_ को हर स्तर पर (3)\_\_\_\_\_ हो जाना चाहिए। प्रदूषण एक (4)\_\_\_\_\_ संकट के रूप में (5)\_\_\_\_\_ हो गया है।

**SubQuestion No : 17**

Q.17 रिक्त 2 के लिए सबसे उपयुक्त विकल्प का चयन कीजिए।

- Ans
- ✗ 1. पशु
  - ✗ 2. राक्षस
  - ✓ 3. समाज
  - ✗ 4. देवगण

Question ID : 264330189336

Option 1 ID : 264330741069

Option 2 ID : 264330741066

Option 3 ID : 264330741068

Option 4 ID : 264330741067

Status : Not Answered

Chosen Option : --

**Comprehension:**

नीचे दिए गए गद्य में कुछ शब्द छोड़ दिए गए हैं और प्रत्येक रिक्त स्थान के चार विकल्प दिए गए हैं। इन चारों में से कौन सा विकल्प रिक्त स्थान की पूर्ति करेगा-

जब कोई समस्या बढ़ कर (1)\_\_\_\_\_ में बदलने वाली हो तो उसका सामना करने और उसे रोकने के लिए सरकार और (2)\_\_\_\_\_ को हर स्तर पर (3)\_\_\_\_\_ हो जाना चाहिए। प्रदूषण एक (4)\_\_\_\_\_ संकट के रूप में (5)\_\_\_\_\_ हो गया है।

**SubQuestion No : 18**

Q.18 रिक्त 3 के लिए सबसे उपयुक्त विकल्प का चयन कीजिए।

- Ans
- 1. तस्वीर
  - 2. संभालना
  - 3. गुणवती
  - 4. सक्रिय

Question ID : 264330189337

Option 1 ID : 264330741073

Option 2 ID : 264330741070

Option 3 ID : 264330741072

Option 4 ID : 264330741071

Status : Not Answered

Chosen Option : --

**Comprehension:**

नीचे दिए गए गद्य में कुछ शब्द छोड़ दिए गए हैं और प्रत्येक रिक्त स्थान के चार विकल्प दिए गए हैं। इन चारों में से कौन सा विकल्प रिक्त स्थान की पूर्ति करेगा-

जब कोई समस्या बढ़ कर (1)\_\_\_\_\_ में बदलने वाली हो तो उसका सामना करने और उसे रोकने के लिए सरकार और (2)\_\_\_\_\_ को हर स्तर पर (3)\_\_\_\_\_ हो जाना चाहिए। प्रदूषण एक (4)\_\_\_\_\_ संकट के रूप में (5)\_\_\_\_\_ हो गया है।

**SubQuestion No : 19**

Q.19 रिक्त 4 के लिए सबसे उपयुक्त विकल्प का चयन कीजिए।

- Ans
- 1. मानवता
  - 2. आसान
  - 3. गंभीर
  - 4. गौतमी

Question ID : 264330189338

Option 1 ID : 264330741076

Option 2 ID : 264330741074

Option 3 ID : 264330741077

Option 4 ID : 264330741075

Status : Not Answered

Chosen Option : --

**Comprehension:**

नीचे दिए गए गद्य में कुछ शब्द छोड़ दिए गए हैं और प्रत्येक रिक्त स्थान के चार विकल्प दिए गए हैं। इन चारों में से कौन सा विकल्प रिक्त स्थान की पूर्ति करेगा-

जब कोई समस्या बढ़ कर (1)\_\_\_\_\_ में बदलने वाली हो तो उसका सामना करने और उसे रोकने के लिए सरकार और (2)\_\_\_\_\_ को हर स्तर पर (3)\_\_\_\_\_ हो जाना चाहिए। प्रदूषण एक (4)\_\_\_\_\_ संकट के रूप में (5)\_\_\_\_\_ हो गया है।

**SubQuestion No : 20**

**Q.20** रिक्त 5 के लिए सबसे उपयुक्त विकल्प का चयन कीजिए।

- Ans**
- 1. अनादर
  - 2. उपस्थित
  - 3. अनुपस्थित
  - 4. निडर

Question ID : 264330189339

Option 1 ID : 264330741079

Option 2 ID : 264330741080

Option 3 ID : 264330741078

Option 4 ID : 264330741081

Status : Not Answered

Chosen Option : --