

**Constable GD in Central Armed Police Forces CAPFs SSF Rifleman GD in Assam
Rifles Examination 2024**

Roll Number	
Candidate Name	
Venue Name	
Exam Date	07/03/2024
Exam Time	11:30 AM - 12:30 PM
Subject	Constable GD Examination 2024

Section : **Part-A-General Intelligence and Reasoning**

Q.1 A series is given with one term missing. Select the correct alternative from the given ones that will complete the series.

NR, UQ, TX, AW, ?

- Ans**
- ✓ 1. ZD
 - ✗ 2. ZM
 - ✗ 3. ZT
 - ✗ 4. ZQ

Question ID : 264330190227
Option 1 ID : 264330744491
Option 2 ID : 264330744492
Option 3 ID : 264330744493
Option 4 ID : 264330744490

Status : Answered

Chosen Option : 1

Q.2 Six family members Mia, Noah, Olivia, Ethan, Grace, and Henry are seated at a circular table facing each other. Grace is second to the left of Ethan. Noah is to the immediate left of Henry, and Mia is second to the left of Noah. Who is the immediate neighbour of both Olivia and Noah?

- Ans**
- ✓ 1. Henry
 - ✗ 2. Ethan
 - ✗ 3. Grace
 - ✗ 4. Mia

Question ID : 264330192116
Option 1 ID : 264330751821
Option 2 ID : 264330751820
Option 3 ID : 264330751818
Option 4 ID : 264330751819

Status : Answered

Chosen Option : 3

Q.3 Which of the following groups of letters when sequentially placed from left to right will complete the given series?

llmmnnool_mmmnooll_mnnoolllmm_no_llmmnnoo

- Ans**
- 1. llmm
 - 2. mnol
 - 3. onml
 - 4. lmno

Question ID : 264330190428

Option 1 ID : 264330745294

Option 2 ID : 264330745297

Option 3 ID : 264330745296

Option 4 ID : 264330745295

Status : Answered

Chosen Option : 4

Q.4 In the following question below are given some statements followed by some conclusions based on those statements.

Taking the given statements to be true even if they seem to be at variance from commonly known facts. Read all the conclusions and then decide which of the given conclusion(s) logically follows the given statements.

Statements:

I. Some yellow are green.

II. All white are green.

Conclusions:

I. Some green are yellow.

II. Some green are white.

- Ans**
- 1. Only conclusion II follows
 - 2. Both conclusions I and II follows
 - 3. Only conclusion I follows
 - 4. Neither conclusion follows

Question ID : 264330191558

Option 1 ID : 264330749587

Option 2 ID : 264330749588

Option 3 ID : 264330749586

Option 4 ID : 264330749589

Status : Answered

Chosen Option : 2

Q.5 In the following question, select the related letters from the given alternatives.

ZIB : DMF :: COM : ?

- Ans**
- 1. GSQ
 - 2. WXX
 - 3. ZOV
 - 4. STU

Question ID : 264330190550

Option 1 ID : 264330745783

Option 2 ID : 264330745782

Option 3 ID : 264330745785

Option 4 ID : 264330745784

Status : Answered

Chosen Option : 1

Q.6 In a certain code language, 'PERSONT' is coded as '2495870', 'RAISED' is coded as '963541'. What is the code for 'STAREN' in that code language?

- Ans**
- 1. 546976
 - 2. 506347
 - 3. 609746
 - 4. 506947

Question ID : 264330187345

Option 1 ID : 264330733310

Option 2 ID : 264330733309

Option 3 ID : 264330733311

Option 4 ID : 264330733308

Status : Answered

Chosen Option : 4

Q.7 Seven girls P, Q, R, S, T, U and V are sitting around a circular table facing opposite to the centre (not necessarily in the same order). P is to the immediate neighbour of both Q and R. S is not the immediate neighbour of either R or T. V is immediate neighbour of both T and U. V is second to the right of S. Who is sitting on the immediate right of R?

- Ans**
- 1. V
 - 2. T
 - 3. P
 - 4. Q

Question ID : 264330190236

Option 1 ID : 264330744528

Option 2 ID : 264330744527

Option 3 ID : 264330744526

Option 4 ID : 264330744529

Status : Not Answered

Chosen Option : --

Q.8 By interchanging which two signs and two numbers (not digits) the expression will be correct?

$$3 \div 1 + 5 \times 2 - 6 = 1$$

- Ans**
- 1. \times and \div , 6 and 5
 - 2. \times and \div , 5 and 2
 - 3. $+$ and \times , 3 and 6
 - 4. $+$ and $-$, 3 and 6

Question ID : 264330191521

Option 1 ID : 264330749440

Option 2 ID : 264330749441

Option 3 ID : 264330749439

Option 4 ID : 264330749438

Status : Answered

Chosen Option : 1

Q.9 Arrange the given words in the sequence in which they occur in the dictionary.

1. Box
2. Boy
3. Bow
4. Bowl
5. Bower

- Ans**
- 1. 3, 5, 4, 2, 1
 - 2. 5, 4, 2, 3, 1
 - 3. 5, 4, 2, 1, 3
 - 4. 3, 5, 4, 1, 2

Question ID : 264330187101

Option 1 ID : 264330732332

Option 2 ID : 264330732333

Option 3 ID : 264330732335

Option 4 ID : 264330732334

Status : Answered

Chosen Option : 4

Q.10 If $A + B$ means A is the wife of B, $A \times B$ means A is the father of B, $A \div B$ means A is the mother of B, $A \$ B$ means A is the brother of B and $A - B$ means A is the sister of B.

If $Z - T + S \times Y + H \$ B$, then how is S related to H?

- Ans**
- 1. Wife's sister
 - 2. Wife's father
 - 3. Wife's mother
 - 4. Wife's brother

Question ID : 264330187446

Option 1 ID : 264330733713

Option 2 ID : 264330733714

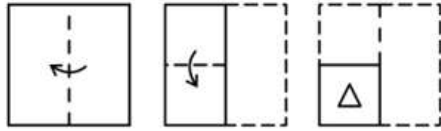
Option 3 ID : 264330733712

Option 4 ID : 264330733715

Status : Answered

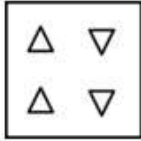
Chosen Option : 2

Q.11 A paper is folded and cut as shown below. How will it appear when unfolded?

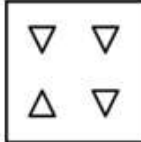


Ans

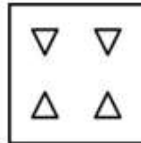
✗ 1.



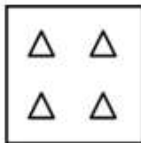
✗ 2.



✓ 3.



✗ 4.



Question ID : 264330192247

Option 1 ID : 264330752344

Option 2 ID : 264330752342

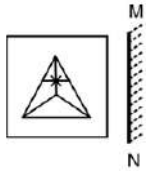
Option 3 ID : 264330752343

Option 4 ID : 264330752345

Status : Answered

Chosen Option : 3

Q.12 Select the correct mirror image of the given figure when the mirror MN is placed to the right side of the figure.



Ans

1.



2.



3.



4.



Question ID : 264330192346

Option 1 ID : 264330752739

Option 2 ID : 264330752741

Option 3 ID : 264330752738

Option 4 ID : 264330752740

Status : Answered

Chosen Option : 4

Q.13 In the following question, select the related letter pair from the given alternatives.

JIR : FEN :: ?

1. VIK : TTL

2. FIH : THI

3. BCL : XYH

4. UME : ESU

Question ID : 264330187343

Option 1 ID : 264330733303

Option 2 ID : 264330733300

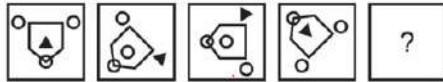
Option 3 ID : 264330733301

Option 4 ID : 264330733302

Status : Answered

Chosen Option : 3

Q.14 In the following question, select the figure which can be placed at the sign of question mark (?) from the given alternatives.

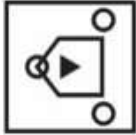


Ans

✓ 1.



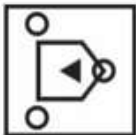
✗ 2.



✗ 3.



✗ 4.



Question ID : 264330187435

Option 1 ID : 264330733669

Option 2 ID : 264330733670

Option 3 ID : 264330733668

Option 4 ID : 264330733671

Status : Answered

Chosen Option : 1

Q.15 In a certain code language, 'REFUGE' is coded as 'CGSFCR'. What is the code for 'SAFARI' in that code language?

Ans ✗ 1. GRZFYs

✓ 2. GRYFYs

✗ 3. GRYGYS

✗ 4. GRYYFS

Question ID : 264330190132

Option 1 ID : 264330744110

Option 2 ID : 264330744112

Option 3 ID : 264330744111

Option 4 ID : 264330744113

Status : Answered

Chosen Option : 2

Q.16 Which of the following numbers will replace the question mark (?) in the given series?

9, 18, 33, 42, 57, ?

Ans ✓ 1. 66

✗ 2. 65

✗ 3. 72

✗ 4. 71

Question ID : 264330192179

Option 1 ID : 264330752071

Option 2 ID : 264330752070

Option 3 ID : 264330752073

Option 4 ID : 264330752072

Status : Answered

Chosen Option : 3

Q.17 Which of the following numbers will replace the question mark (?) in the given series?

8, 13, 21, 34, 55, ?

Ans ✗ 1. 72

✗ 2. 68

✗ 3. 74

✓ 4. 89

Question ID : 264330191580

Option 1 ID : 264330749676

Option 2 ID : 264330749675

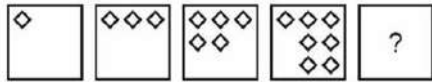
Option 3 ID : 264330749674

Option 4 ID : 264330749677

Status : Answered

Chosen Option : 4

Q.18 In the following question, select the figure which can be placed at the sign of question mark (?) from the given alternatives.



Ans


1.




2.



3.



4.



Question ID : 264330187054

Option 1 ID : 264330732145

Option 2 ID : 264330732144

Option 3 ID : 264330732147

Option 4 ID : 264330732146

Status : Answered

Chosen Option : 3

Q.19 If $8 R 10 S 7 T 12 = 75$ and $18 R 6 S 8 T 30 = 86$, then
 $24 R 15 S 9 T 35 = ?$

Ans 1. 330

2. 318

3. 334

4. 300

Question ID : 264330190181

Option 1 ID : 264330744309

Option 2 ID : 264330744308

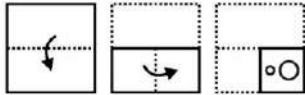
Option 3 ID : 264330744307

Option 4 ID : 264330744306

Status : Not Answered

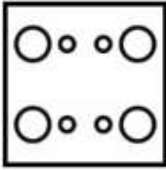
Chosen Option : --

Q.20 A piece of paper is folded and punched as shown below in the question figures. From the given option figures, indicate how it will appear when opened.

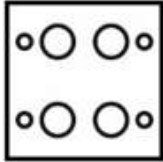


Ans

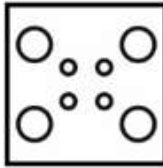
✓ 1.



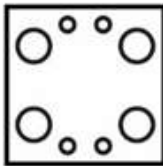
✗ 2.



✗ 3.



✗ 4.



Question ID : 264330188036

Option 1 ID : 264330736072

Option 2 ID : 264330736074

Option 3 ID : 264330736073

Option 4 ID : 264330736075

Status : Answered

Chosen Option : 1

Section : Part-B-General Knowledge and General awareness

Q.1 As of October 2023, Savitri Jindal, the richest woman in India, has now become the _____ wealthiest person in the country.

Ans ✗ 1. fourth

✗ 2. tenth

✗ 3. fifth

✓ 4. seventh

Question ID : 264330190568

Option 1 ID : 264330745856

Option 2 ID : 264330745854

Option 3 ID : 264330745857

Option 4 ID : 264330745855

Status : Answered

Chosen Option : 3

Q.2 Which folk dance is related with state of Uttar Pradesh?

- Ans
- 1. Ghumar
 - 2. Lavani
 - 3. Kajri
 - 4. Kuchipudi

Question ID : 264330191919
Option 1 ID : 264330751030
Option 2 ID : 264330751031
Option 3 ID : 264330751033
Option 4 ID : 264330751032
Status : Answered
Chosen Option : 3

Q.3 National defence, roads, government administration are examples of which types of goods?

- Ans
- 1. Complementary goods
 - 2. Public goods
 - 3. Private goods
 - 4. Supplementary goods

Question ID : 264330191024
Option 1 ID : 264330747452
Option 2 ID : 264330747450
Option 3 ID : 264330747451
Option 4 ID : 264330747453
Status : Answered
Chosen Option : 2

Q.4 In which year did Rangrajan Committee for estimating poverty line submit its report?

- Ans
- 1. 2016
 - 2. 2012
 - 3. 2014
 - 4. 2010

Question ID : 264330190814
Option 1 ID : 264330746612
Option 2 ID : 264330746611
Option 3 ID : 264330746610
Option 4 ID : 264330746613
Status : Answered
Chosen Option : 1

Q.5 The Supreme Court has special advisory jurisdiction in matters which may specifically be referred to it by the President of India under Article _____ of the Constitution.

- Ans**
- 1. 143
 - 2. 141
 - 3. 144
 - 4. 142

Question ID : 264330188685
Option 1 ID : 264330738544
Option 2 ID : 264330738542
Option 3 ID : 264330738545
Option 4 ID : 264330738543
Status : Answered
Chosen Option : 1

Q.6 The literacy rate is defined by the percentage of the population of a given age group that can _____.

- Ans**
- 1. Speak
 - 2. Read and Write
 - 3. Read only
 - 4. Write only

Question ID : 264330191854
Option 1 ID : 264330750773
Option 2 ID : 264330750772
Option 3 ID : 264330750770
Option 4 ID : 264330750771
Status : Answered
Chosen Option : 2

Q.7 _____ are organized institutions that accept deposits from depositors and advance loans to borrowers.

- Ans**
- 1. Hospitals
 - 2. Schools
 - 3. Hotels
 - 4. Banks

Question ID : 264330191806
Option 1 ID : 264330750579
Option 2 ID : 264330750578
Option 3 ID : 264330750581
Option 4 ID : 264330750580
Status : Answered
Chosen Option : 4

Q.8 The system of the mahalwari settlement was devised by _____.

- Ans
- 1. Alexander Read
 - 2. Richard Wellesley
 - 3. Holt Mackenzie
 - 4. Thomas Munro

Question ID : 264330188781
Option 1 ID : 264330738928
Option 2 ID : 264330738927
Option 3 ID : 264330738926
Option 4 ID : 264330738929
Status : Answered
Chosen Option : 4

Q.9 _____ virtuoso, Pandit Shiv Kumar Sharma, has revolutionized the role of the instrument in Hindustani music.

- Ans
- 1. Sarod
 - 2. Flute
 - 3. Sitar
 - 4. Santoor

Question ID : 264330191438
Option 1 ID : 264330749108
Option 2 ID : 264330749109
Option 3 ID : 264330749107
Option 4 ID : 264330749106
Status : Answered
Chosen Option : 3

Q.10 How many sanskrit plays were written by Harshavardhana?

- Ans
- 1. Three
 - 2. Two
 - 3. Five
 - 4. Four

Question ID : 264330190835
Option 1 ID : 264330746695
Option 2 ID : 264330746694
Option 3 ID : 264330746697
Option 4 ID : 264330746696
Status : Answered
Chosen Option : 3

Q.11 Which of the following sports is played by Anthony Amalraj?

- Ans
- 1. Golf
 - 2. Badminton
 - 3. Table Tennis
 - 4. Squash

Question ID : 264330192024
Option 1 ID : 264330751453
Option 2 ID : 264330751451
Option 3 ID : 264330751450
Option 4 ID : 264330751452
Status : Answered
Chosen Option : 1

Q.12 The Prime Minister of India has launched the PM PVTG Mission in November 2023. In this context, there are how many PVTGs in 18 states & UTs?

- Ans
- 1. 80
 - 2. 70
 - 3. 85
 - 4. 75

Question ID : 264330191027
Option 1 ID : 264330747464
Option 2 ID : 264330747462
Option 3 ID : 264330747465
Option 4 ID : 264330747463
Status : Answered
Chosen Option : 4

Q.13 In which sport would you perform a "smash" shot?

- Ans
- 1. Cricket
 - 2. Golf
 - 3. Badminton
 - 4. Chess

Question ID : 264330191722
Option 1 ID : 264330750243
Option 2 ID : 264330750245
Option 3 ID : 264330750242
Option 4 ID : 264330750244
Status : Answered
Chosen Option : 3

Q.14 Which of the following folk dance is associated with Goa?

- Ans
- 1. Lava
 - 2. Kolkali
 - 3. Dekhni
 - 4. Lama

Question ID : 264330188755

Option 1 ID : 264330738823

Option 2 ID : 264330738824

Option 3 ID : 264330738822

Option 4 ID : 264330738825

Status : Answered

Chosen Option : 2

Q.15 This festival belongs to Sambalpur (Western Odisha), the new harvest crops are worshipped and people celebrate it by eating the first rice of the harvest together with their family:

- Ans
- 1. Vishu
 - 2. Nuakhai
 - 3. Baisakhi
 - 4. Bohag Bihu

Question ID : 264330191412

Option 1 ID : 264330749005

Option 2 ID : 264330749004

Option 3 ID : 264330749002

Option 4 ID : 264330749003

Status : Answered

Chosen Option : 3

Q.16 The India-UAE Comprehensive Economic Partnership Agreement (CEPA) was signed on 18th February 2022 by the Minister of _____ and the Minister of Economy of the UAE.

- Ans
- 1. Finance
 - 2. External Affairs
 - 3. Commerce & Industry
 - 4. Home Affairs

Question ID : 264330188871

Option 1 ID : 264330739287

Option 2 ID : 264330739288

Option 3 ID : 264330739286

Option 4 ID : 264330739289

Status : Answered

Chosen Option : 2

Q.17 How many fundamental duties does a citizen have according to the article 51 A of the Indian constitution?

- Ans 1. 11
 2. 15
 3. 5
 4. 10

Question ID : 264330191260
Option 1 ID : 264330748396
Option 2 ID : 264330748397
Option 3 ID : 264330748394
Option 4 ID : 264330748395
Status : Answered
Chosen Option : 4

Q.18 Who became the first Indian to win a bronze medal at the Asian Fencing Championships in China in June, 2023?

- Ans 1. Avneet Kaur
 2. Bhavani Devi
 3. Atanu Das
 4. Bhajan Kumar

Question ID : 264330190609
Option 1 ID : 264330746021
Option 2 ID : 264330746018
Option 3 ID : 264330746019
Option 4 ID : 264330746020
Status : Answered
Chosen Option : 1

Q.19 _____ is associated with Badminton.

- Ans 1. Mithali Raj
 2. Saina Nehwal
 3. Marry Kom
 4. Sakshi Malik

Question ID : 264330191822
Option 1 ID : 264330750644
Option 2 ID : 264330750642
Option 3 ID : 264330750643
Option 4 ID : 264330750645
Status : Answered
Chosen Option : 2

- Q.20** Consider the following statements:
- A) Calcium is present in S-block of the periodic table.
 - B) Metals comprise more than 78% of all known elements and appear on the left side of the Periodic Table.
 - C) d-Block elements are also known as inner-transition elements.

- Ans**
- 1. Only B and C is true
 - 2. Both A and B is true
 - 3. Both A and C is true
 - 4. A, B, C are true

Question ID : 264330191953
Option 1 ID : 264330751167
Option 2 ID : 264330751166
Option 3 ID : 264330751168
Option 4 ID : 264330751169
Status : Answered
Chosen Option : 3

Section : Part-C-Elementary Mathematics

- Q.1** The simple interest received on a sum for 10 years is $\frac{2}{5}$ of the sum. What is the annual rate of interest?

- Ans**
- 1. 5 percent
 - 2. 4 percent
 - 3. 6 percent
 - 4. 9 percent

Question ID : 264330187293
Option 1 ID : 264330733100
Option 2 ID : 264330733101
Option 3 ID : 264330733102
Option 4 ID : 264330733103
Status : Not Answered
Chosen Option : --

- Q.2** Two trains are moving in the same direction at the speed of 60 km/hr and 95 km/hr. The time taken by faster train to cross a man sitting in the slower train is 36 seconds. What will be the length of the faster train?

- Ans**
- 1. 310 metres
 - 2. 350 metres
 - 3. 420 metres
 - 4. 270 metres

Question ID : 264330187835
Option 1 ID : 264330735270
Option 2 ID : 264330735269
Option 3 ID : 264330735271
Option 4 ID : 264330735268
Status : Not Answered
Chosen Option : --

Q.3 If $L1 = 243$ and $L2 = 729$, then $L1$ is how much percentage less than $L2$?

- Ans
- 1. 66.66 percent
 - 2. 33.33 percent
 - 3. 48.75 percent
 - 4. 99.99 percent

Question ID : 264330187185
Option 1 ID : 264330732670
Option 2 ID : 264330732668
Option 3 ID : 264330732669
Option 4 ID : 264330732671
Status : Answered
Chosen Option : 1

Q.4 Marked price of an article is Rs. 10500 and its selling price is Rs. 8820. What is the discount percentage?

- Ans
- 1. 25 percent
 - 2. 12 percent
 - 3. 16 percent
 - 4. 22 percent

Question ID : 264330187669
Option 1 ID : 264330734605
Option 2 ID : 264330734604
Option 3 ID : 264330734606
Option 4 ID : 264330734607
Status : Answered
Chosen Option : 3

Q.5 Evaluate: $5 + 3 \times 2 - 4$.

- Ans
- 1. -1
 - 2. 7
 - 3. 5
 - 4. 3

Question ID : 264330191167
Option 1 ID : 264330748025
Option 2 ID : 264330748024
Option 3 ID : 264330748022
Option 4 ID : 264330748023
Status : Answered
Chosen Option : 2

Q.6 There are total 36 hats of blue and red colours. The average cost of blue colour hats is Rs. 54 and the average cost of red colour hats is Rs. 36. If the average cost of all the hats is Rs. 46, then what is the number of red colour hats?

- Ans**
- 1. 16
 - 2. 24
 - 3. 12
 - 4. 20

Question ID : 264330187164
Option 1 ID : 264330732584
Option 2 ID : 264330732587
Option 3 ID : 264330732585
Option 4 ID : 264330732586
Status : Not Answered
Chosen Option : --

Q.7 If $5P = 4Q$, then what is the value of $(P + Q)/P$?

- Ans**
- 1. $7/5$
 - 2. $9/4$
 - 3. $11/4$
 - 4. $4/9$

Question ID : 264330190379
Option 1 ID : 264330745101
Option 2 ID : 264330745098
Option 3 ID : 264330745100
Option 4 ID : 264330745099
Status : Answered
Chosen Option : 2

Q.8 What is the remainder when 36^{29} is divided by 10?

- Ans**
- 1. 2
 - 2. 6
 - 3. 4
 - 4. 0

Question ID : 264330188575
Option 1 ID : 264330738102
Option 2 ID : 264330738104
Option 3 ID : 264330738103
Option 4 ID : 264330738105
Status : Answered
Chosen Option : 3

Q.9 The value of a cycle depreciates at the rate of 10% after every year. If at the end of 3 years, its value is Rs. 10,935, then find its purchase price.

- Ans**
- 1. Rs. 5000
 - 2. Rs. 10000
 - 3. Rs. 15000
 - 4. Rs. 20000

Question ID : 264330192403
Option 1 ID : 264330752966
Option 2 ID : 264330752967
Option 3 ID : 264330752968
Option 4 ID : 264330752969
Status : Not Answered
Chosen Option : --

Q.10 What is the value of $444 \div 3 + 1400 \div 7 - 51$?

- Ans**
- 1. 287
 - 2. 267
 - 3. 277
 - 4. 297

Question ID : 264330187979
Option 1 ID : 264330735846
Option 2 ID : 264330735844
Option 3 ID : 264330735845
Option 4 ID : 264330735847
Status : Not Answered
Chosen Option : --

Q.11 Which is that largest two digit number which when increased by 5 becomes divisible by both 4 and 5?

- Ans**
- 1. 75
 - 2. 85
 - 3. 88
 - 4. 94

Question ID : 264330187882
Option 1 ID : 264330735456
Option 2 ID : 264330735457
Option 3 ID : 264330735459
Option 4 ID : 264330735458
Status : Not Answered
Chosen Option : --

Q.12 A merchant marks the price of his article 10 percent above the cost price. If he allows 5 percent discount, then what is the profit or loss percentage?

- Ans**
- 1. 4.5 percent profit
 - 2. 10 percent loss
 - 3. 4 percent loss
 - 4. 5 percent profit

Question ID : 264330187310
Option 1 ID : 264330733169
Option 2 ID : 264330733171
Option 3 ID : 264330733170
Option 4 ID : 264330733168
Status : Not Answered
Chosen Option : --

Q.13 The profit earned on selling an article for Rs. 3300 is 10 times of the loss incurred on selling the same article for Rs. 2970. What will be the selling price of the article to earn a profit of 30 percent?

- Ans**
- 1. Rs. 4200
 - 2. Rs. 3900
 - 3. Rs. 3500
 - 4. Rs. 4000

Question ID : 264330190096
Option 1 ID : 264330743966
Option 2 ID : 264330743968
Option 3 ID : 264330743967
Option 4 ID : 264330743969
Status : Not Answered
Chosen Option : --

Q.14 If the diameter of a hemisphere is 84 cm, then what is the volume of hemisphere?

- Ans**
- 1. 155232 cm^3
 - 2. 162462 cm^3
 - 3. 141274 cm^3
 - 4. 149336 cm^3

Question ID : 264330187578
Option 1 ID : 264330734243
Option 2 ID : 264330734242
Option 3 ID : 264330734241
Option 4 ID : 264330734240
Status : Not Answered
Chosen Option : --

Q.15 If $p : q : r = 2 : 3 : 5$, then what is the value of $(p/2) : (q/6) : (r/5)$?

- Ans
- 1. 2 : 1 : 2
 - 2. 3 : 1 : 3
 - 3. 1 : 1 : 1
 - 4. 4 : 2 : 5

Question ID : 264330187212
Option 1 ID : 264330732779
Option 2 ID : 264330732776
Option 3 ID : 264330732777
Option 4 ID : 264330732778
Status : Not Answered
Chosen Option : --

Q.16 Ramita alone can do a work in 100 days, Suman alone can do the same work in 120 days and Neetu alone can do the same work in 150 days. If they do that work together and they are paid Rs. 6000, then what is the share of Suman?

- Ans
- 1. Rs. 3000
 - 2. Rs. 2000
 - 3. Rs. 2700
 - 4. Rs. 2400

Question ID : 264330188629
Option 1 ID : 264330738321
Option 2 ID : 264330738318
Option 3 ID : 264330738320
Option 4 ID : 264330738319
Status : Not Answered
Chosen Option : --

Q.17 To complete a wall, Vijay takes 40 percent more time than Ramesh. If together they complete the wall in 25 days, then how much time will Vijay alone take to complete it?

- Ans
- 1. 60 days
 - 2. 45 days
 - 3. $\frac{300}{7}$ days
 - 4. 40 days

Question ID : 264330188570
Option 1 ID : 264330738083
Option 2 ID : 264330738084
Option 3 ID : 264330738085
Option 4 ID : 264330738082
Status : Not Answered
Chosen Option : --

Q.18 If a mobile is sold at a loss of 25 percent, then what is the respective ratio of cost price and selling price of the mobile?

- Ans
- 1. 5 : 4
 - 2. 4 : 3
 - 3. 7 : 5
 - 4. 3 : 4

Question ID : 264330187807
Option 1 ID : 264330735157
Option 2 ID : 264330735156
Option 3 ID : 264330735159
Option 4 ID : 264330735158
Status : Not Answered
Chosen Option : --

Q.19 Rupesh scored 20 percent marks in an exam and failed by 20 marks. If he scores 70 percent marks, then he gets 5 marks more than passing marks. What should be the passing marks for the exam?

- Ans
- 1. 50
 - 2. 40
 - 3. 60
 - 4. 30

Question ID : 264330187286
Option 1 ID : 264330733072
Option 2 ID : 264330733073
Option 3 ID : 264330733075
Option 4 ID : 264330733074
Status : Not Answered
Chosen Option : --

Q.20 The average weight of two players W and X of a football team is 42 kg. The average weight of W, X and their coach Y is 55 kg. What is the weight of coach?

- Ans
- 1. 81 kg
 - 2. 88 kg
 - 3. 87 kg
 - 4. 85 kg

Question ID : 264330187523
Option 1 ID : 264330734020
Option 2 ID : 264330734021
Option 3 ID : 264330734023
Option 4 ID : 264330734022
Status : Not Answered
Chosen Option : --

Q.1 Find the part of the given sentence that has an error in it. If there is no error, choose 'No error'.

The deeper the pain, the much helpless we feel in dealing with our difficulties.

- Ans**
- 1. No error
 - 2. dealing with our difficulties
 - 3. the much helpless we feel in
 - 4. The deeper the pain

Question ID : 264330186235
Option 1 ID : 264330729191
Option 2 ID : 264330729190
Option 3 ID : 264330729189
Option 4 ID : 264330729188
Status : Not Answered
Chosen Option : --

Q.2 Improve the underlined part of the sentence. Choose 'No improvement' as an answer if the sentence is grammatically correct.

Don't forget to greasy the cake pan.

- Ans**
- 1. No improvement
 - 2. forgets to grease
 - 3. forgot to grease
 - 4. forget to grease

Question ID : 264330186089
Option 1 ID : 264330728635
Option 2 ID : 264330728633
Option 3 ID : 264330728632
Option 4 ID : 264330728634
Status : Not Answered
Chosen Option : --

Q.3 Improve the underlined part of the sentence. Choose 'No improvement' as an answer if the sentence is grammatically correct.

The capitol building was building in 1878.

- Ans**
- 1. was built
 - 2. was build
 - 3. were built
 - 4. No improvement

Question ID : 264330185711
Option 1 ID : 264330727192
Option 2 ID : 264330727194
Option 3 ID : 264330727193
Option 4 ID : 264330727195
Status : Not Answered
Chosen Option : --

Q.4 Choose the word that means the same as the given word.

Carnival

- Ans
- 1. Heavily
 - 2. Funeral
 - 3. Sedate
 - 4. Fest

Question ID : 264330186688
Option 1 ID : 264330730915
Option 2 ID : 264330730913
Option 3 ID : 264330730914
Option 4 ID : 264330730912
Status : Not Answered
Chosen Option : --

Q.5 Find the part of the given sentence that has an error in it. If there is no error, choose 'No error'.
You have been ignoring me since the past three days.

- Ans
- 1. No error
 - 2. ignoring me since
 - 3. You have been
 - 4. the past three days.

Question ID : 264330186360
Option 1 ID : 264330729667
Option 2 ID : 264330729665
Option 3 ID : 264330729664
Option 4 ID : 264330729666
Status : Not Answered
Chosen Option : --

Q.6 The sentence has been divided into three parts, identify the segment which contains a spelling error in the sentence given below. Choose no error if there is no error in the sentence.

Their dismay was as/ distinctly visible as light/ passed through crystals.

- Ans
- 1. no error
 - 2. distinctly visible as light
 - 3. passed through crystals.
 - 4. Their dismay was as

Question ID : 264330186483
Option 1 ID : 264330730135
Option 2 ID : 264330730133
Option 3 ID : 264330730134
Option 4 ID : 264330730132
Status : Not Answered
Chosen Option : --

Q.7 Select the most appropriate meaning of the given idiom

In the heat of the moment

- Ans
- 1. Hurried
 - 2. Overwhelmed by what is happening in the moment
 - 3. Under firm control, well managed
 - 4. To have something secured

Question ID : 264330186482

Option 1 ID : 264330730128

Option 2 ID : 264330730129

Option 3 ID : 264330730131

Option 4 ID : 264330730130

Status : Not Answered

Chosen Option : --

Q.8 Find the part of the given sentence that has an error in it. If there is no error, choose 'No error'.

Younger workers typically has more trouble finding and maintaining employment in a recession.

- Ans
- 1. No error
 - 2. maintaining employment in a recession.
 - 3. Younger workers typically has
 - 4. more trouble finding and

Question ID : 264330186635

Option 1 ID : 264330730715

Option 2 ID : 264330730714

Option 3 ID : 264330730712

Option 4 ID : 264330730713

Status : Not Answered

Chosen Option : --

Q.9 Select the most appropriate option for the given blank.

You appear healthy, although you have _____ some weight.

- Ans
- 1. build
 - 2. gained
 - 3. win
 - 4. pick

Question ID : 264330186275

Option 1 ID : 264330729343

Option 2 ID : 264330729342

Option 3 ID : 264330729340

Option 4 ID : 264330729341

Status : Not Answered

Chosen Option : --

Q.10 Choose the most appropriate antonym of the underlined word.

If children are not in schools, they are yet subject to influences that are formative of character.

- Ans**
- 1. Developmental
 - 2. Shaping
 - 3. Pliant
 - 4. Non-influential

Question ID : 264330186354
 Option 1 ID : 264330729640
 Option 2 ID : 264330729641
 Option 3 ID : 264330729642
 Option 4 ID : 264330729643
 Status : Not Answered
 Chosen Option : --

Q.11 Select the sentence with no spelling errors.

- Ans**
- 1. Men and women balance each other out, and we have to get to a point where we are comfortable with appreciating each other.
 - 2. Men and women balance each other out, and we have to get to a point where we are comfortable with appreciating each other.
 - 3. Men and women balance each other out, and we have to get to a point where we are comfortable with appreciating each other.
 - 4. Men and women balance each other out, and we have to get to a point where we are comfortable with appreciating each other.

Question ID : 264330186232
 Option 1 ID : 264330729176
 Option 2 ID : 264330729177
 Option 3 ID : 264330729178
 Option 4 ID : 264330729179
 Status : Not Answered
 Chosen Option : --

Q.12 Select the word segment that substitutes (replaces) the bracketed word segment correctly and completes the sentence meaningfully. Select the option 'no correction required' if the sentence is correct as given.

He had a natural mistrust of the inhabitants; and (also he was not disposed off to be quick friends) with anyone who had beaten his master.

- Ans**
- 1. No correction required
 - 2. also he was not at all disposed off to be quick friends
 - 3. also he was not disposed to be quick friends
 - 4. also he was not all disposed of to be quick friends

Question ID : 264330186847
 Option 1 ID : 264330731523
 Option 2 ID : 264330731521
 Option 3 ID : 264330731522
 Option 4 ID : 264330731520
 Status : Not Answered
 Chosen Option : --

Q.13 Improve the underlined part of the sentence. Choose 'No improvement' as an answer if the sentence is grammatically correct.

The attention has shifts to make crops 'climate-proof'.

Ans 1. No improvement

2. shifted to

3. shift too

4. shifting to

Question ID : 264330186090

Option 1 ID : 264330728639

Option 2 ID : 264330728638

Option 3 ID : 264330728636

Option 4 ID : 264330728637

Status : Not Answered

Chosen Option : --

Q.14 In the following question, out of the given four alternatives, select the alternative which best expresses the meaning of the Idiom/Phrase.

To pass the hat round

Ans 1. To delay a plan

2. To ask for contributions

3. To oppose someone

4. To share the responsibilities

Question ID : 264330185619

Option 1 ID : 264330726841

Option 2 ID : 264330726843

Option 3 ID : 264330726840

Option 4 ID : 264330726842

Status : Not Answered

Chosen Option : --

Q.15 Select the most appropriate antonym of the given word.

Doomed

Ans 1. Blessed

2. Ill- fated

3. Irresponsible

4. Glowing

Question ID : 264330186584

Option 1 ID : 264330730518

Option 2 ID : 264330730517

Option 3 ID : 264330730519

Option 4 ID : 264330730516

Status : Not Answered

Chosen Option : --

Comprehension:

In the given passage, four options are given for each blank. Select the most appropriate option to complete the given passage, which also fits contextually as per the word given in the bracket

Literature, in all its forms, has the power to (1. indoctrinate) _____ the human spirit and expand our horizons. Whether through classic novels, contemporary poetry, or insightful essays, literature has the ability to (2. widen) _____ our perspectives and evoke a wide range of emotions. It can serve as a mirror to reflect the (3. inequity) _____ of society, addressing important issues and fostering empathy. Moreover, reading is a transformative experience that can transport readers to different (4. realms) _____, enabling them to explore everything the human mind can concoct. To fully (5. understand) _____ the benefits of literature, it's essential to encourage a love for reading and make it accessible to all.

SubQuestion No : 16

Q.16 Fill in the blank (1) with the appropriate word from the options below:

- Ans**
- 1. amaze
 - 2. enlighten
 - 3. affluent
 - 4. eject

Question ID : 264330186473

Option 1 ID : 264330730095

Option 2 ID : 264330730092

Option 3 ID : 264330730094

Option 4 ID : 264330730093

Status : Not Answered

Chosen Option : --

Comprehension:

In the given passage, four options are given for each blank. Select the most appropriate option to complete the given passage, which also fits contextually as per the word given in the bracket

Literature, in all its forms, has the power to (1. indoctrinate) _____ the human spirit and expand our horizons. Whether through classic novels, contemporary poetry, or insightful essays, literature has the ability to (2. widen) _____ our perspectives and evoke a wide range of emotions. It can serve as a mirror to reflect the (3. inequity) _____ of society, addressing important issues and fostering empathy. Moreover, reading is a transformative experience that can transport readers to different (4. realms) _____, enabling them to explore everything the human mind can concoct. To fully (5. understand) _____ the benefits of literature, it's essential to encourage a love for reading and make it accessible to all.

SubQuestion No : 17

Q.17 Fill in the blank (2) with the appropriate word from the options below:

- Ans**
- 1. disregard
 - 2. constrict
 - 3. broaden
 - 4. collude

Question ID : 264330186474

Option 1 ID : 264330730097

Option 2 ID : 264330730098

Option 3 ID : 264330730096

Option 4 ID : 264330730099

Status : Not Answered

Chosen Option : --

Comprehension:

In the given passage, four options are given for each blank. Select the most appropriate option to complete the given passage, which also fits contextually as per the word given in the bracket

Literature, in all its forms, has the power to (1. indoctrinate) _____ the human spirit and expand our horizons. Whether through classic novels, contemporary poetry, or insightful essays, literature has the ability to (2. widen) _____ our perspectives and evoke a wide range of emotions. It can serve as a mirror to reflect the (3. inequity) _____ of society, addressing important issues and fostering empathy. Moreover, reading is a transformative experience that can transport readers to different (4. realms) _____, enabling them to explore everything the human mind can concoct. To fully (5. understand) _____ the benefits of literature, it's essential to encourage a love for reading and make it accessible to all.

SubQuestion No : 18

Q.18 Fill in the blank (3) with the appropriate word from the options below:

- Ans
- 1. unity
 - 2. incompetence
 - 3. progress
 - 4. injustice

Question ID : 264330186475

Option 1 ID : 264330730102

Option 2 ID : 264330730103

Option 3 ID : 264330730101

Option 4 ID : 264330730100

Status : Not Answered

Chosen Option : --

Comprehension:

In the given passage, four options are given for each blank. Select the most appropriate option to complete the given passage, which also fits contextually as per the word given in the bracket

Literature, in all its forms, has the power to (1. indoctrinate) _____ the human spirit and expand our horizons. Whether through classic novels, contemporary poetry, or insightful essays, literature has the ability to (2. widen) _____ our perspectives and evoke a wide range of emotions. It can serve as a mirror to reflect the (3. inequity) _____ of society, addressing important issues and fostering empathy. Moreover, reading is a transformative experience that can transport readers to different (4. realms) _____, enabling them to explore everything the human mind can concoct. To fully (5. understand) _____ the benefits of literature, it's essential to encourage a love for reading and make it accessible to all.

SubQuestion No : 19

Q.19 Fill in the blank (4) with the appropriate word from the options below:

- Ans
- 1. fantasies
 - 2. floor
 - 3. worlds
 - 4. sky

Question ID : 264330186476

Option 1 ID : 264330730106

Option 2 ID : 264330730105

Option 3 ID : 264330730104

Option 4 ID : 264330730107

Status : Not Answered

Chosen Option : --

Comprehension:

In the given passage, four options are given for each blank. Select the most appropriate option to complete the given passage, which also fits contextually as per the word given in the bracket

Literature, in all its forms, has the power to (1. indoctrinate) _____ the human spirit and expand our horizons. Whether through classic novels, contemporary poetry, or insightful essays, literature has the ability to (2. widen) _____ our perspectives and evoke a wide range of emotions. It can serve as a mirror to reflect the (3. inequity) _____ of society, addressing important issues and fostering empathy. Moreover, reading is a transformative experience that can transport readers to different (4. realms) _____, enabling them to explore everything the human mind can concoct. To fully (5. understand) _____ the benefits of literature, it's essential to encourage a love for reading and make it accessible to all.

SubQuestion No : 20

Q.20 Fill in the blank (5) with the appropriate word from the options below:

- Ans**
- 1. realize
 - 2. minimize
 - 3. estimate
 - 4. overarch

Question ID : 264330186477

Option 1 ID : 264330730108

Option 2 ID : 264330730109

Option 3 ID : 264330730111

Option 4 ID : 264330730110

Status : Not Answered

Chosen Option : --

Section : Part-D-Hindi

Q.1 निम्नलिखित प्रश्न में, चार विकल्पों में से, उस विकल्प का चयन करें जो कोष्ठक में दिए गए शब्द के पर्यायवाची शब्द का सही विकल्प है।
किसी भी लेख का (समाप्ति) _____ सकारात्मक होना चाहिए।

- Ans**
- 1. उपसंहार
 - 2. पिछला
 - 3. वर्णन
 - 4. शेषतः

Question ID : 264330189531

Option 1 ID : 264330741811

Option 2 ID : 264330741810

Option 3 ID : 264330741813

Option 4 ID : 264330741812

Status : Answered

Chosen Option : 1

Q.2 निम्नलिखित प्रश्न में, चार विकल्पों में से, उस विकल्प का चयन करें जो कोष्ठक में दिए गए शब्द के तद्भव रूप का सही अर्थ है। हम रास्ते से जा रहे थे कि (अकस्मात्) _____ ही एक शेर बीच में आ गया।

- Ans**
- ✓ 1. अचानक
 - ✗ 2. आगे
 - ✗ 3. आँच
 - ✗ 4. अमावस

Question ID : 264330189917
 Option 1 ID : 264330743284
 Option 2 ID : 264330743283
 Option 3 ID : 264330743285
 Option 4 ID : 264330743282
 Status : Answered
 Chosen Option : 1

Q.3 निम्नलिखित प्रश्न में, चार विकल्पों में से, उस विकल्प का चयन करें जो रिक्त स्थान के लिए सही भाववाचक संज्ञा वाला विकल्प हो। आज भी लोग जय और वीरु की _____ का उदाहरण देते हैं।

- Ans**
- ✗ 1. सेवक
 - ✗ 2. माता
 - ✗ 3. अध्यापक
 - ✓ 4. दोस्ती

Question ID : 264330188351
 Option 1 ID : 264330737286
 Option 2 ID : 264330737287
 Option 3 ID : 264330737284
 Option 4 ID : 264330737285
 Status : Answered
 Chosen Option : 4

Q.4 दिए गए वाक्य का वह भाग ज्ञात करें, जिसमें कोई त्रुटि है। यदि कोई त्रुटि नहीं है, तो 'कोई त्रुटि नहीं है' चुनें। मनुष्य को चाहिए कि वह ऐसे कर्म करे जिससे दूसरों का भी भला हो और स्वयम को भी सुख-शांति मिले।

- Ans**
- ✗ 1. मनुष्य को चाहिए कि
 - ✓ 2. और स्वयम को भी सुख-शांति मिले।
 - ✗ 3. वह ऐसे कर्म करे जिससे दूसरों का भी भला हो
 - ✗ 4. कोई त्रुटि नहीं है

Question ID : 264330190004
 Option 1 ID : 264330743614
 Option 2 ID : 264330743616
 Option 3 ID : 264330743615
 Option 4 ID : 264330743617
 Status : Answered
 Chosen Option : 2

Q.5 निम्नलिखित प्रश्न में, चार विकल्पों में से, उस विकल्प का चयन करें जो कोष्ठक में दिए गए शब्द के विलोम शब्द का सही विकल्प है।
देश को (गुलामी) _____ तो मिली पर भारत माता के दो टुकड़े हो गए।

- Ans
- 1. योगदान
 - 2. आज़ादी
 - 3. अमंगल
 - 4. महानता

Question ID : 264330189533
Option 1 ID : 264330741820
Option 2 ID : 264330741819
Option 3 ID : 264330741818
Option 4 ID : 264330741821
Status : Answered
Chosen Option : 2

Q.6 दिए गए वाक्यांश के लिए सार्थक शब्द ज्ञात कीजिए।

जो कभी बूढ़ा न हो

- Ans
- 1. तरुण
 - 2. अजर
 - 3. सदाबहार
 - 4. अमर

Question ID : 264330190013
Option 1 ID : 264330743648
Option 2 ID : 264330743647
Option 3 ID : 264330743649
Option 4 ID : 264330743646
Status : Answered
Chosen Option : 2

Q.7 निम्नलिखित प्रश्न में, चार विकल्पों में से, उस सही विकल्प का चयन करें जो वाक्यांशों के लिए एक शब्द का विकल्प हो।
दूसरे के हित में अपने आप को संकट में डालना

- Ans
- 1. द्विज
 - 2. अपराह्न
 - 3. दिनानुदिन
 - 4. आत्मोत्सर्ग

Question ID : 264330189698
Option 1 ID : 264330742449
Option 2 ID : 264330742446
Option 3 ID : 264330742448
Option 4 ID : 264330742447
Status : Answered
Chosen Option : 4

Q.8 निम्नलिखित प्रश्न में, चार विकल्पों में से, उस विकल्प का चयन करें जो दी गई लोकोक्ति का सही अर्थ वाला विकल्प है।
तोते की तरह आँखें फेरना

- Ans
- 1. कमजोर से लाभ उठाना
 - 2. पुराने सम्बन्धों को एकदम भुला देना
 - 3. अनुभवी नहीं होना
 - 4. भेदभाव नहीं करना

Question ID : 264330189557
Option 1 ID : 264330741912
Option 2 ID : 264330741911
Option 3 ID : 264330741913
Option 4 ID : 264330741910
Status : Answered
Chosen Option : 2

Q.9 दिए गए वाक्य में रेखांकित शब्द के लिए सही वर्तनी ज्ञात कीजिए।

यामा की रचियता को ज्ञानपीठ पुरस्कार मिला।

- Ans
- 1. रचियता
 - 2. रचयिता
 - 3. रचियता
 - 4. रच्यता

Question ID : 264330188285
Option 1 ID : 264330737034
Option 2 ID : 264330737035
Option 3 ID : 264330737032
Option 4 ID : 264330737033
Status : Answered
Chosen Option : 2

Q.10 निम्नलिखित प्रश्न में, दिए गए चार विकल्पों में से, उस विकल्प का चयन करें जो दिए गए मुहावरे के अर्थ को सर्वश्रेष्ठ रूप से व्यक्त करता है।

दूध से कुल्लियाँ करना

- Ans
- 1. परिवार की पूर्णता चाहना
 - 2. बड़प्पन दिखाना
 - 3. संपन्नता में पलना
 - 4. धन की बर्बादी करना

Question ID : 264330188282
Option 1 ID : 264330737022
Option 2 ID : 264330737023
Option 3 ID : 264330737020
Option 4 ID : 264330737021
Status : Answered
Chosen Option : 4

Q.11 दिए गए वाक्य में रेखांकित शब्द के लिए सही वर्तनी ज्ञात कीजिए।

हमें सबसे मैतृ भाव से पेश आना चाहिए।

- Ans
- ✗ 1. मेत्र
 - ✓ 2. मैत्री
 - ✗ 3. मातृ
 - ✗ 4. मेतरि

Question ID : 264330188991
 Option 1 ID : 264330739755
 Option 2 ID : 264330739757
 Option 3 ID : 264330739754
 Option 4 ID : 264330739756
 Status : Answered
 Chosen Option : 3

Q.12 निम्नलिखित प्रश्न में, चार विकल्पों में से, उस विकल्प का चयन करें जो कोष्ठक में दिए गए शब्द के तत्सम रूप का सही विकल्प है।

हमारे पास के बगीचे में आज बहुत से (कबूतर) _____ आए थे।

- Ans
- ✗ 1. अंकुसी
 - ✓ 2. कपोत
 - ✗ 3. इंगित
 - ✗ 4. हय

Question ID : 264330189834
 Option 1 ID : 264330742966
 Option 2 ID : 264330742968
 Option 3 ID : 264330742969
 Option 4 ID : 264330742967
 Status : Answered
 Chosen Option : 2

Q.13 निम्नलिखित प्रश्न में, चार विकल्पों में से, उस सही विकल्प का चयन करें जो वाक्यांश के लिए एक शब्द का विकल्प हो।

किसी एक में ही आस्था रखने वाला

- Ans
- ✗ 1. अनिकेत
 - ✓ 2. अनन्य
 - ✗ 3. अनुपम
 - ✗ 4. अनुभूत

Question ID : 264330189844
 Option 1 ID : 264330743002
 Option 2 ID : 264330743003
 Option 3 ID : 264330743005
 Option 4 ID : 264330743004
 Status : Answered
 Chosen Option : 3

Q.14 निम्नलिखित प्रश्न में, चार विकल्प में से, उस विकल्प का चयन करें जो रिक्त स्थान के लिए सही स्त्रीलिंग वाला विकल्प हो।

_____ एक प्रकार की जंगली जानवर होती है।

Ans 1. लोमड़ी

2. भेस

3. भेड़

4. शेर

Question ID : 264330189825

Option 1 ID : 264330742932

Option 2 ID : 264330742931

Option 3 ID : 264330742933

Option 4 ID : 264330742930

Status : Answered

Chosen Option : 1

Q.15 दिए गए वाक्य में रेखांकित शब्द का विलोम शब्द ज्ञात कीजिए।

हमें भूतकाल की न सोचकर आगे बढ़ना चाहिए।

Ans 1. अभेद

2. एकांत

3. भविष्यकाल

4. आकाल

Question ID : 264330189240

Option 1 ID : 264330740705

Option 2 ID : 264330740704

Option 3 ID : 264330740702

Option 4 ID : 264330740703

Status : Answered

Chosen Option : 3

Comprehension:

नीचे दिए गए गद्य में कुछ शब्द छोड़ दिए गए हैं और प्रत्येक रिक्त स्थान के चार विकल्प दिए गए हैं। इन चारों में से कौन सा विकल्प रिक्त स्थान की पूर्ति करेगा-

कोरोना काल में आयुर्वेद को अत्याधुनिक वैज्ञानिक मापदंडों पर (1)_____ की शुरू हुई मुहिम का असर दिखने लगा है। एक शोध के (2)_____ आयुर्वेदिक दवाओं खान-पान और जीवन (3)_____ में बदलाव से (4)_____ 14 दिन के भीतर डायबिटीज को (5)_____ किया जा सकता है।

SubQuestion No : 16

Q.16 रिक्त 1 के लिए सबसे उपयुक्त विकल्प का चयन कीजिए।

- Ans
- 1. कारवाही
 - 2. कचहरी
 - 3. परखने
 - 4. परोसने

Question ID : 264330190070

Option 1 ID : 264330743862

Option 2 ID : 264330743863

Option 3 ID : 264330743864

Option 4 ID : 264330743865

Status : Not Answered

Chosen Option : --

Comprehension:

नीचे दिए गए गद्य में कुछ शब्द छोड़ दिए गए हैं और प्रत्येक रिक्त स्थान के चार विकल्प दिए गए हैं। इन चारों में से कौन सा विकल्प रिक्त स्थान की पूर्ति करेगा-

कोरोना काल में आयुर्वेद को अत्याधुनिक वैज्ञानिक मापदंडों पर (1)_____ की शुरू हुई मुहिम का असर दिखने लगा है। एक शोध के (2)_____ आयुर्वेदिक दवाओं खान-पान और जीवन (3)_____ में बदलाव से (4)_____ 14 दिन के भीतर डायबिटीज को (5)_____ किया जा सकता है।

SubQuestion No : 17

Q.17 रिक्त 2 के लिए सबसे उपयुक्त विकल्प का चयन कीजिए।

- Ans
- 1. रंग
 - 2. अनुसार
 - 3. भूमिका
 - 4. संभव

Question ID : 264330190071

Option 1 ID : 264330743869

Option 2 ID : 264330743866

Option 3 ID : 264330743868

Option 4 ID : 264330743867

Status : Answered

Chosen Option : 2

Comprehension:

नीचे दिए गए गद्य में कुछ शब्द छोड़ दिए गए हैं और प्रत्येक रिक्त स्थान के चार विकल्प दिए गए हैं। इन चारों में से कौन सा विकल्प रिक्त स्थान की पूर्ति करेगा-

कोरोना काल में आयुर्वेद को अत्याधुनिक वैज्ञानिक मापदंडों पर (1)_____ की शुरू हुई मुहिम का असर दिखने लगा है। एक शोध के (2)_____ आयुर्वेदिक दवाओं खान-पान और जीवन (3)_____ में बदलाव से (4)_____ 14 दिन के भीतर डायबिटीज को (5)_____ किया जा सकता है।

SubQuestion No : 18

Q.18 रिक्त 3 के लिए सबसे उपयुक्त विकल्प का चयन कीजिए।

- Ans**
- 1. रूप
 - 2. अनुसार
 - 3. जर्नल
 - 4. शैली

Question ID : 264330190072

Option 1 ID : 264330743870

Option 2 ID : 264330743873

Option 3 ID : 264330743872

Option 4 ID : 264330743871

Status : Answered

Chosen Option : 4

Comprehension:

नीचे दिए गए गद्य में कुछ शब्द छोड़ दिए गए हैं और प्रत्येक रिक्त स्थान के चार विकल्प दिए गए हैं। इन चारों में से कौन सा विकल्प रिक्त स्थान की पूर्ति करेगा-

कोरोना काल में आयुर्वेद को अत्याधुनिक वैज्ञानिक मापदंडों पर (1)_____ की शुरू हुई मुहिम का असर दिखने लगा है। एक शोध के (2)_____ आयुर्वेदिक दवाओं खान-पान और जीवन (3)_____ में बदलाव से (4)_____ 14 दिन के भीतर डायबिटीज को (5)_____ किया जा सकता है।

SubQuestion No : 19

Q.19 रिक्त 4 के लिए सबसे उपयुक्त विकल्प का चयन कीजिए।

- Ans**
- 1. महज
 - 2. मौजूदगी
 - 3. मौज
 - 4. मंदिर

Question ID : 264330190073

Option 1 ID : 264330743877

Option 2 ID : 264330743874

Option 3 ID : 264330743875

Option 4 ID : 264330743876

Status : Answered

Chosen Option : 1

Comprehension:

नीचे दिए गए गद्य में कुछ शब्द छोड़ दिए गए हैं और प्रत्येक रिक्त स्थान के चार विकल्प दिए गए हैं। इन चारों में से कौन सा विकल्प रिक्त स्थान की पूर्ति करेगा-

कोरोना काल में आयुर्वेद को अत्याधुनिक वैज्ञानिक मापदंडों पर (1)_____ की शुरू हुई मुहिम का असर दिखने लगा है। एक शोध के (2)_____ आयुर्वेदिक दवाओं खान-पान और जीवन (3)_____ में बदलाव से (4)_____ 14 दिन के भीतर डायबिटीज को (5)_____ किया जा सकता है।

SubQuestion No : 20

Q.20 रिक्त 5 के लिए सबसे उपयुक्त विकल्प का चयन कीजिए।

- Ans**
- ✓ 1. नियंत्रित
 - ✗ 2. सहायता
 - ✗ 3. नियंत्रण
 - ✗ 4. नैना

Question ID : 264330190074

Option 1 ID : 264330743880

Option 2 ID : 264330743881

Option 3 ID : 264330743878

Option 4 ID : 264330743879

Status : Answered

Chosen Option : 1