

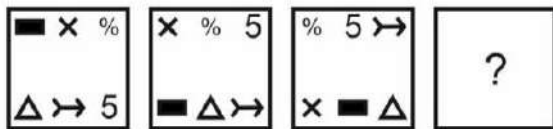
**Constable GD in Central Armed Police Forces CAPFs SSF Rifleman GD in Assam
Rifles Examination 2024**

Roll Number	
Candidate Name	
Venue Name	
Exam Date	07/03/2024
Exam Time	5:00 PM - 6:00 PM
Subject	Constable GD Examination 2024

Section : **Part-A-General Intelligence and Reasoning**

Prepp
Your Personal Exam Guide

Q.1 In the following question, select the figure which can be placed at the sign of question mark (?) from the given alternatives.

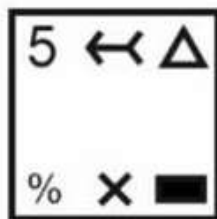


Ans

✓ 1.



✗ 2.



✗ 3.



✗ 4.



Question ID : 264330191524

Option 1 ID : 264330749453

Option 2 ID : 264330749452

Option 3 ID : 264330749451

Option 4 ID : 264330749450

Status : Answered

Chosen Option : 1

Q.2 A is the mother of B. B is the sister of C. C is the wife of D. D is the son of E. E is the wife of F. F is the brother of G.
How is E related to C?

- Ans**
- 1. Father
 - 2. Husband's mother
 - 3. Husband's father
 - 4. Mother

Question ID : 264330187386
Option 1 ID : 264330733475
Option 2 ID : 264330733472
Option 3 ID : 264330733473
Option 4 ID : 264330733474
Status : Answered
Chosen Option : 2

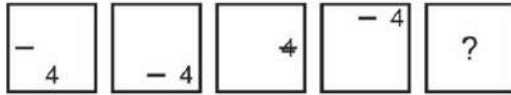
Q.3 Arrange the given words in the sequence in which they occur in the dictionary.

1. Dire
2. Dirt
3. Dirk
4. Direct
5. Dirge

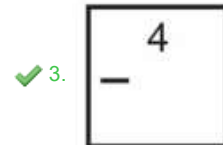
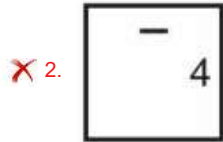
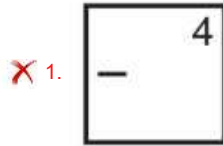
- Ans**
- 1. 3,2,5,4,1
 - 2. 1,4,5,3,2
 - 3. 1,4,5,2,3
 - 4. 3,2,5,1,4

Question ID : 264330191350
Option 1 ID : 264330748757
Option 2 ID : 264330748755
Option 3 ID : 264330748754
Option 4 ID : 264330748756
Status : Answered
Chosen Option : 2

Q.4 In the following question, select the figure which can be placed at the sign of question mark (?) from the given alternatives.



Ans



Question ID : 264330190262

Option 1 ID : 264330744632

Option 2 ID : 264330744633

Option 3 ID : 264330744631

Option 4 ID : 264330744630

Status : Answered

Chosen Option : 3

Q.5 Eight girls A, B, C, D, E, F, G and H are sitting around a circular table facing towards the centre (not necessarily in the same order). A is second to the left of D. D is third to the left of E. C is third to the right of G. G is not the immediate neighbour of E. H is third to the right of B. B is second to the right of G. Who is sitting on the immediate right of F?

Ans ✗ 1. C

✓ 2. A

✗ 3. E

✗ 4. D

Question ID : 264330190436

Option 1 ID : 264330745329

Option 2 ID : 264330745328

Option 3 ID : 264330745326

Option 4 ID : 264330745327

Status : Answered

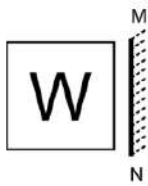
Chosen Option : 2

Q.6 Six friends A, B, C, D, E, and F are sitting around a circular table facing away from the center. A is sitting to the immediate right of B. F sits exactly between C and D. D sits to the immediate left of E. Who sits to the immediate right of E?

- Ans**
- 1. D
 - 2. B
 - 3. A
 - 4. C

Question ID : 264330192316
 Option 1 ID : 264330752620
 Option 2 ID : 264330752621
 Option 3 ID : 264330752618
 Option 4 ID : 264330752619
 Status : Answered
 Chosen Option : 2

Q.7 Select the correct mirror image of the given figure when the mirror MN is placed to the right side of the figure.

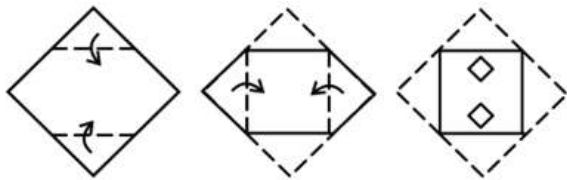


Ans

- 1.
- 2.
- 3.
- 4.

Question ID : 264330191586
 Option 1 ID : 264330749701
 Option 2 ID : 264330749700
 Option 3 ID : 264330749699
 Option 4 ID : 264330749698
 Status : Answered
 Chosen Option : 3

Q.8 A paper is folded and cut as shown below. How will it appear when unfolded?




Ans

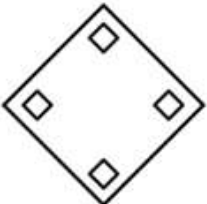
✓ 1.



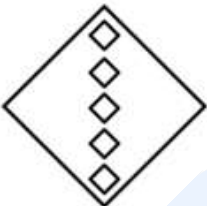
✗ 2.



✗ 3.



✗ 4.



Question ID : 264330192387

Option 1 ID : 264330752903

Option 2 ID : 264330752905

Option 3 ID : 264330752902

Option 4 ID : 264330752904

Status : Answered

Chosen Option : 1

Q.9 A series is given with one term missing. Select the correct alternative from the given ones that will complete the series.

TM, JQ, NG, DK, ?

Ans

✓ 1. HA

✗ 2. HM

✗ 3. HX

✗ 4. HB

Question ID : 264330188019

Option 1 ID : 264330736006

Option 2 ID : 264330736005

Option 3 ID : 264330736004

Option 4 ID : 264330736007

Status : Answered

Chosen Option : 1

Q.10 By Interchanging the given two numbers which of the following equation will be not correct?

4 and 6

- Ans** 1. $6 \div 2 + 4 \times 3 = 24$
 2. $4 - 6 + 8 = 10$
 3. $6 + 4 \times 2 - 5 = 11$
 4. $6 + 4 \times 8 - 7 = 45$

Question ID : 264330191561

Option 1 ID : 264330749601

Option 2 ID : 264330749600

Option 3 ID : 264330749599

Option 4 ID : 264330749598

Status : Answered

Chosen Option : 4

Q.11 In a certain code language, if NATURE is coded as 'ERUTAN' and CIRCLE is coded as 'ELCRIC', then what will DANGER be coded as?

- Ans** 1. REGNAD
 2. RENGAD
 3. RENAGD
 4. REGNDA

Question ID : 264330192234

Option 1 ID : 264330752293

Option 2 ID : 264330752290

Option 3 ID : 264330752291

Option 4 ID : 264330752292

Status : Answered

Chosen Option : 1

Q.12 Which of the following groups of letters when sequentially placed from left to right will complete the given series?

s_ttuuvvsssttuuvvsst_u_vvssttuuvvssttu_v

- Ans** 1. uvst
 2. ssuu
 3. sutv
 4. stuv

Question ID : 264330190208

Option 1 ID : 264330744415

Option 2 ID : 264330744416

Option 3 ID : 264330744417

Option 4 ID : 264330744414

Status : Answered

Chosen Option : 4

Q.13 In the following question, select the missing number from the given series.

1000, 968, 935, 901, 866, ?

- Ans**
- 1. 830
 - 2. 832
 - 3. 835
 - 4. 840

Question ID : 264330187410
Option 1 ID : 264330733568
Option 2 ID : 264330733570
Option 3 ID : 264330733571
Option 4 ID : 264330733569
Status : Answered
Chosen Option : 1

Q.14 In a certain code language, if ADDITION is coded as 84, SUBTRACTION is coded as 153, then what will DIVISION be coded as?

- Ans**
- 1. 122
 - 2. 96
 - 3. 109
 - 4. 147

Question ID : 264330192074
Option 1 ID : 264330751652
Option 2 ID : 264330751650
Option 3 ID : 264330751651
Option 4 ID : 264330751653
Status : Answered
Chosen Option : 3

Q.15 In the following question below are given some statements followed by some conclusions based on those statements. Taking the given statements to be true even if they seem to be at variance from commonly known facts. Read all the conclusions and then decide which of the given conclusion (s) logically follows the given statements.

Statements:

- I. Some M are Z.
- II. No Z is R.

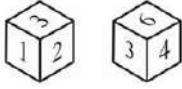
Conclusions:

- I. All M are R.
- II. All R are Z.
- III. Some M are not R.

- Ans**
- 1. Only conclusion III follows
 - 2. Only conclusion II follows
 - 3. Both conclusions II and III follows
 - 4. All conclusion follows

Question ID : 264330188029
Option 1 ID : 264330736047
Option 2 ID : 264330736044
Option 3 ID : 264330736046
Option 4 ID : 264330736045
Status : Answered
Chosen Option : 1

Q.16 Two positions of a dice are given below. What will come on the face opposite to the face containing '1' on it?



- Ans**
- 1. 6
 - 2. 4
 - 3. 5
 - 4. 3

Question ID : 264330191565
 Option 1 ID : 264330749617
 Option 2 ID : 264330749616
 Option 3 ID : 264330749614
 Option 4 ID : 264330749615
 Status : Answered
 Chosen Option : 3

Q.17 In the following question, select the related letters from the given alternatives.

JX : IU :: AB : ?

- Ans**
- 1. MF
 - 2. ZY
 - 3. ON
 - 4. OI

Question ID : 264330187382
 Option 1 ID : 264330733459
 Option 2 ID : 264330733456
 Option 3 ID : 264330733457
 Option 4 ID : 264330733458
 Status : Answered
 Chosen Option : 2

Q.18 In the following question, select the related letter pair from the given alternatives.

SUS : NPN :: ?

- Ans**
- 1. ZQY : ULT
 - 2. VZA : ZXV
 - 3. AAG : JWD
 - 4. OPQ : ZAA

Question ID : 264330187083
 Option 1 ID : 264330732260
 Option 2 ID : 264330732263
 Option 3 ID : 264330732262
 Option 4 ID : 264330732261
 Status : Not Attempted and Marked For Review
 Chosen Option : --

Q.19 In the following question, select the missing number from the given series.

50, 53, 62, 89, ?, 413

- Ans 1. 170
 2. 180
 3. 175
 4. 184

Question ID : 264330190559
Option 1 ID : 264330745818
Option 2 ID : 264330745819
Option 3 ID : 264330745821
Option 4 ID : 264330745820
Status : Answered
Chosen Option : 1

Q.20 If $75A30B50C10 = 40$ and $60A20B80C16 = 35$, then $60A15B45C5 = ?$

- Ans 1. 36
 2. 40
 3. 35
 4. 37

Question ID : 264330187153
Option 1 ID : 264330732543
Option 2 ID : 264330732542
Option 3 ID : 264330732540
Option 4 ID : 264330732541
Status : Answered
Chosen Option : 1

Section : Part-B-General Knowledge and General awareness

Q.1 Which of the following personalities is associated with the Sarvodaya Plan of 1950?

- Ans 1. G.D. Birla
 2. Jayaprakash Narayan
 3. Jawaharlal Nehru
 4. P C Mahalanobis

Question ID : 264330191025
Option 1 ID : 264330747457
Option 2 ID : 264330747454
Option 3 ID : 264330747456
Option 4 ID : 264330747455
Status : Not Answered
Chosen Option : --

Q.2 In which year was the Lucknow Pact signed between Congress and Muslim League?

- Ans
- 1. 1936
 - 2. 1926
 - 3. 1916
 - 4. 1906

Question ID : 264330191217
Option 1 ID : 264330748225
Option 2 ID : 264330748224
Option 3 ID : 264330748223
Option 4 ID : 264330748222
Status : Answered
Chosen Option : 4

Q.3 Which sport is associated with “Allan Border Medal”?

- Ans
- 1. Cricket
 - 2. Polo
 - 3. Hockey
 - 4. Football

Question ID : 264330191902
Option 1 ID : 264330750963
Option 2 ID : 264330750964
Option 3 ID : 264330750965
Option 4 ID : 264330750962
Status : Answered
Chosen Option : 2

Q.4 Which of the following is the tenure of the Comptroller and Auditor General (CAG) of India?

- Ans
- 1. 6 years
 - 2. 7 years
 - 3. 5 years
 - 4. 4 years

Question ID : 264330191941
Option 1 ID : 264330751120
Option 2 ID : 264330751121
Option 3 ID : 264330751119
Option 4 ID : 264330751118
Status : Answered
Chosen Option : 1

Q.5 In May 2023, Justice Prashant Kumar Mishra and senior advocate KV Viswanathan were be sworn in as _____ judges.

- Ans
- 1. Civil court
 - 2. Supreme Court
 - 3. High Court
 - 4. Consumer Court

Question ID : 264330191875
Option 1 ID : 264330750856
Option 2 ID : 264330750854
Option 3 ID : 264330750855
Option 4 ID : 264330750857
Status : Not Answered
Chosen Option : --

Q.6 Who was appointed as the Chairman of Senior Men's Selection Committee by the Board of Control for Cricket in India (BCCI) in July 2023?

- Ans
- 1. Ramesh Powar
 - 2. Rahul Dravid
 - 3. Ajit Agarkar
 - 4. V.V.S. Laxman

Question ID : 264330190768
Option 1 ID : 264330746428
Option 2 ID : 264330746427
Option 3 ID : 264330746429
Option 4 ID : 264330746426
Status : Not Answered
Chosen Option : --

Q.7 Which age group is typically considered as the working-age population in India?

- Ans
- 1. 20-64 years
 - 2. 16-65 years
 - 3. 18-64 years
 - 4. 15-59 years

Question ID : 264330190873
Option 1 ID : 264330746848
Option 2 ID : 264330746849
Option 3 ID : 264330746847
Option 4 ID : 264330746846
Status : Not Attempted and Marked For Review
Chosen Option : --

Q.8 Who of the following popularize folk dances 'Rai'?

- Ans
- 1. Maharaj Bindadin
 - 2. Ram Sahay Pandey
 - 3. Kalkaprasad
 - 4. Achhan Maharaj

Question ID : 264330190798
Option 1 ID : 264330746547
Option 2 ID : 264330746549
Option 3 ID : 264330746548
Option 4 ID : 264330746546
Status : Not Answered
Chosen Option : --

Q.9 The Government of India aims to offer affordable housing to urban residents by 2022 through _____ program, which was first introduced on June 25, 2015.

- Ans
- 1. Jal Jeevan Yojana
 - 2. Meri Policy Mere Hath
 - 3. Pradhan Mantri Awas Yojana (PMAY)
 - 4. Rashtriya Uchcharat Shiksha Abhiyan

Question ID : 264330191813
Option 1 ID : 264330750609
Option 2 ID : 264330750607
Option 3 ID : 264330750606
Option 4 ID : 264330750608
Status : Answered
Chosen Option : 3

Q.10 Which of the following festivals is mainly associated with Assam?

- Ans
- 1. Teej
 - 2. Bihu
 - 3. Chhath
 - 4. Onam

Question ID : 264330190571
Option 1 ID : 264330745866
Option 2 ID : 264330745869
Option 3 ID : 264330745867
Option 4 ID : 264330745868
Status : Answered
Chosen Option : 2

Q.11 On July 27, 2023, Prime Minister Narendra Modi released _____ installment of PM-KISAN of about Rs. 17,000 crores to more than 8.5 crore beneficiaries.

- Ans**
- 1. 14th
 - 2. 12th
 - 3. 16th
 - 4. 18th

Question ID : 264330188834
Option 1 ID : 264330739139
Option 2 ID : 264330739138
Option 3 ID : 264330739140
Option 4 ID : 264330739141
Status : Not Answered
Chosen Option : --

Q.12 Which sport is played by the Indian sportsperson P. R. Sreejesh?

- Ans**
- 1. Hockey
 - 2. Badminton
 - 3. Football
 - 4. Cricket

Question ID : 264330188887
Option 1 ID : 264330739352
Option 2 ID : 264330739353
Option 3 ID : 264330739351
Option 4 ID : 264330739350
Status : Not Answered
Chosen Option : --

Q.13 In India, APEDA stands for:

- Ans**
- 1. Agricultural and Processed Food Products Import Development Authority
 - 2. Agricultural and Processed Food material Export Development Authority
 - 3. Agricultural and Pure Food Products Export Development Authority
 - 4. Agricultural and Processed Food Products Export Development Authority

Question ID : 264330191767
Option 1 ID : 264330750424
Option 2 ID : 264330750425
Option 3 ID : 264330750422
Option 4 ID : 264330750423
Status : Answered
Chosen Option : 2

Q.14 Which of the following statements given below are correct?

Statement 1: Directive Principles of State Policy (DPSP) is not enforceable by law.

Statement 2: Directive Principles of State Policy (DPSP) is non-justiciable.

- Ans**
- 1. Statement 1 is not correct and Statement 2 is correct.
 - 2. Statement 1 is correct and Statement 2 is not correct.
 - 3. Statement 1 and Statement 2 both are correct.
 - 4. Statement 1 and Statement 2 both are not correct.

Question ID : 264330191880

Option 1 ID : 264330750876

Option 2 ID : 264330750875

Option 3 ID : 264330750874

Option 4 ID : 264330750877

Status : Not Answered

Chosen Option : --

Q.15 The Gupta Empire is often referred to as the "Golden Age of India." Which field of knowledge saw significant advancements during this period?

- Ans**
- 1. Matriarchy
 - 2. Gender equality
 - 3. Science, art, literature
 - 4. Feminism

Question ID : 264330191716

Option 1 ID : 264330750218

Option 2 ID : 264330750221

Option 3 ID : 264330750220

Option 4 ID : 264330750219

Status : Not Answered

Chosen Option : --

Q.16 Which state's government introduced the Gyan Sahayak Scheme in July, aiming at addressing teacher vacancies in government schools through contractual appointments?

- Ans**
- 1. Andhra Pradesh
 - 2. Maharashtra
 - 3. Gujarat
 - 4. Assam

Question ID : 264330191208

Option 1 ID : 264330748187

Option 2 ID : 264330748186

Option 3 ID : 264330748189

Option 4 ID : 264330748188

Status : Not Answered

Chosen Option : --

Q.17 The concept of microfinance is primarily aimed at providing financial services to:

- Ans
- 1. Foreign investors
 - 2. Low-income individuals and small businesses
 - 3. Government agencies
 - 4. Large corporations

Question ID : 264330190944
Option 1 ID : 264330747131
Option 2 ID : 264330747130
Option 3 ID : 264330747132
Option 4 ID : 264330747133
Status : Not Answered
Chosen Option : --

Q.18 The Santosh Trophy is named after Sir _____, a legendary figure in Indian football.

- Ans
- 1. Santosh Nath Roy Chowdhury
 - 2. Devendru Roy Chowdhury
 - 3. Manmatha Nath Roy Chowdhury
 - 4. Manek Nath Roy Chowdhury

Question ID : 264330191464
Option 1 ID : 264330749211
Option 2 ID : 264330749213
Option 3 ID : 264330749210
Option 4 ID : 264330749212
Status : Answered
Chosen Option : 1

Q.19 To which of the following states of India does the dance form Mahasu belong?

- Ans
- 1. Tamil Nadu
 - 2. West Bengal
 - 3. Himachal Pradesh
 - 4. Karnataka

Question ID : 264330192031
Option 1 ID : 264330751479
Option 2 ID : 264330751481
Option 3 ID : 264330751480
Option 4 ID : 264330751478
Status : Answered
Chosen Option : 3

Q.20 _____ is a legendary sitar player and one of India's most esteemed classical musicians.

- Ans
- 1. Ustad Zakir Hussain
 - 2. Pandit Ravi Shankar
 - 3. Ustad Bismillah Khan
 - 4. Pandit Bhimsen Joshi

Question ID : 264330191798
Option 1 ID : 264330750548
Option 2 ID : 264330750546
Option 3 ID : 264330750549
Option 4 ID : 264330750547
Status : Answered
Chosen Option : 3

Section : Part-C-Elementary Mathematics

Q.1 The price of a table is firstly decreased by 30 percent and then increased by 80 percent. What is the percentage increase in the price of table?

- Ans
- 1. 24 percent
 - 2. 50 percent
 - 3. 25 percent
 - 4. 26 percent

Question ID : 264330190354
Option 1 ID : 264330744999
Option 2 ID : 264330745001
Option 3 ID : 264330745000
Option 4 ID : 264330744998
Status : Answered
Chosen Option : 4

Q.2 Sakshi can do a piece of work in 20 days. Tanya is 25% more efficient than Sakshi. The number of days taken by Tanya to do the same piece of work is

- Ans
- 1. 13 days
 - 2. 18 days
 - 3. 11 days
 - 4. 16 days

Question ID : 264330188529
Option 1 ID : 264330737920
Option 2 ID : 264330737919
Option 3 ID : 264330737918
Option 4 ID : 264330737921
Status : Answered
Chosen Option : 4

Q.3 If a: b = 12: 5, b: c = 15: 16, and c: d = 4: 7 then find a: c.

- Ans 1. 9: 4
 2. 4: 7
 3. 7: 3
 4. 4: 9

Question ID : 264330191660
Option 1 ID : 264330749995
Option 2 ID : 264330749994
Option 3 ID : 264330749996
Option 4 ID : 264330749997
Status : Answered
Chosen Option : 1

Q.4 What is the value of $24 + (23 \times 32 \div 4) - 5 \times 8$?

- Ans 1. 168
 2. 132
 3. 114
 4. 176

Question ID : 264330187179
Option 1 ID : 264330732646
Option 2 ID : 264330732645
Option 3 ID : 264330732644
Option 4 ID : 264330732647
Status : Answered
Chosen Option : 1

Q.5 A sum amounts to Rs. 2700 in 1 years and amounts to Rs. 3645 in 2 years on compound interest (compounding annually) at the same rate of interest. What is the annual rate of interest?

- Ans 1. 48 percent
 2. 45 percent
 3. 40 percent
 4. 35 percent

Question ID : 264330187574
Option 1 ID : 264330734227
Option 2 ID : 264330734226
Option 3 ID : 264330734224
Option 4 ID : 264330734225
Status : Not Answered
Chosen Option : --

Q.6 Average age of a group of 27 boys is 27 years. A boy having age 20 years leaves the group. A new boy joins the group and the average increases by 1 year. What is the age of the new boy?

- Ans**
- 1. 42 years
 - 2. 46 years
 - 3. 45 years
 - 4. 47 years

Question ID : 264330187963

Option 1 ID : 264330735780

Option 2 ID : 264330735781

Option 3 ID : 264330735783

Option 4 ID : 264330735782

Status : Answered

Chosen Option : 4

Q.7 The ratio of three numbers is 3 : 5 : 7 and the sum of their square is 1328. What is the value of the largest of the three numbers?

- Ans**
- 1. 12
 - 2. 28
 - 3. 20
 - 4. 16

Question ID : 264330187532

Option 1 ID : 264330734058

Option 2 ID : 264330734056

Option 3 ID : 264330734057

Option 4 ID : 264330734059

Status : Answered

Chosen Option : 2

Q.8 What will be the greatest four digit number which can be completely divided by 15, 20, 25 and 30?

- Ans**
- 1. 9900
 - 2. 9300
 - 3. 9930
 - 4. 9700

Question ID : 264330192471

Option 1 ID : 264330753238

Option 2 ID : 264330753239

Option 3 ID : 264330753240

Option 4 ID : 264330753241

Status : Answered

Chosen Option : 2

Q.9 Average of 30 observations is 58. Average of first 14 observations is 59. Average of last 17 observations is 55. What is the value of 14th observation?

- Ans**
- 1. 29
 - 2. 22
 - 3. 25
 - 4. 21

Question ID : 264330187604
Option 1 ID : 264330734345
Option 2 ID : 264330734347
Option 3 ID : 264330734344
Option 4 ID : 264330734346
Status : Answered
Chosen Option : 4

Q.10 A is 20 percent more than B. B is how much percentage less than A (approximately)?

- Ans**
- 1. 18.5 percent
 - 2. 16.6 percent
 - 3. 12.5 percent
 - 4. 15 percent

Question ID : 264330187925
Option 1 ID : 264330735631
Option 2 ID : 264330735630
Option 3 ID : 264330735628
Option 4 ID : 264330735629
Status : Answered
Chosen Option : 2

Q.11 Aman and Raman together can do a work in 7.5 days. Raman and Gagan together can do the same work in 10 days. Gagan and Aman together can do the same work in 20 days. In how many days can Gagan alone do the same work?

- Ans**
- 1. 190 days
 - 2. 150 days
 - 3. 240 days
 - 4. 120 days

Question ID : 264330187697
Option 1 ID : 264330734718
Option 2 ID : 264330734716
Option 3 ID : 264330734719
Option 4 ID : 264330734717
Status : Not Answered
Chosen Option : --

Q.12 What is the value of $100 - 9$ of $(4 \times 3 + 17 - 25)$?

- Ans
- 1. 36
 - 2. 64
 - 3. 54
 - 4. 76

Question ID : 264330187920
Option 1 ID : 264330735608
Option 2 ID : 264330735610
Option 3 ID : 264330735609
Option 4 ID : 264330735611
Status : Answered
Chosen Option : 2

Q.13 A person walks at a speed of 4 km/h for the first 3 hours and then at 6 km/h for the next 2 hours. What is the total distance covered?

- Ans
- 1. 24 km
 - 2. 20 km
 - 3. 18 km
 - 4. 22 km

Question ID : 264330191183
Option 1 ID : 264330748086
Option 2 ID : 264330748089
Option 3 ID : 264330748088
Option 4 ID : 264330748087
Status : Answered
Chosen Option : 2

Q.14 Two successive discounts of 25 percent and 20 percent are given by Raman on a pen. If the marked price of the pen is Rs. 880, then what is the value of discount?

- Ans
- 1. Rs. 380
 - 2. Rs. 376
 - 3. Rs. 352
 - 4. Rs. 362

Question ID : 264330187670
Option 1 ID : 264330734611
Option 2 ID : 264330734610
Option 3 ID : 264330734608
Option 4 ID : 264330734609
Status : Not Answered
Chosen Option : --

Q.15 A sells a bicycle to B at a profit of 30 percent and B sells it to C at a profit of 10 percent. If C pays Rs. 1287 for the bicycle, then what was the cost price of bicycle for A?

- Ans**
- 1. Rs. 900
 - 2. Rs. 800
 - 3. Rs. 850
 - 4. Rs. 950

Question ID : 264330188541
Option 1 ID : 264330737967
Option 2 ID : 264330737969
Option 3 ID : 264330737966
Option 4 ID : 264330737968
Status : Not Answered
Chosen Option : --

Q.16 Selling price of a chair is Rs. 5709. If loss percentage is 34 percent, then what is the cost price of chair?

- Ans**
- 1. Rs. 8500
 - 2. Rs. 8230
 - 3. Rs. 8650
 - 4. Rs. 9560

Question ID : 264330187767
Option 1 ID : 264330734996
Option 2 ID : 264330734999
Option 3 ID : 264330734997
Option 4 ID : 264330734998
Status : Not Answered
Chosen Option : --

Q.17 If a certain sum of money becomes double of itself in 9 years 5 months at simple interest, then what will be the annual rate of interest?

- Ans**
- 1. 10.62 percent
 - 2. 9.84 percent
 - 3. 11.78 percent
 - 4. 9.88 percent

Question ID : 264330187733
Option 1 ID : 264330734862
Option 2 ID : 264330734863
Option 3 ID : 264330734860
Option 4 ID : 264330734861
Status : Not Answered
Chosen Option : --

Q.18 Selling price of an article is Rs. 1184 and discount of 26 percent is offered. What is the marked price of the article?

- Ans
- 1. Rs. 1200
 - 2. Rs. 1600
 - 3. Rs. 1800
 - 4. Rs. 1500

Question ID : 264330187309
Option 1 ID : 264330733166
Option 2 ID : 264330733164
Option 3 ID : 264330733167
Option 4 ID : 264330733165
Status : Not Answered
Chosen Option : --

Q.19 What is the value of $(0.3)^2 + (0.1)^3$?

- Ans
- 1. 0.087
 - 2. 0.072
 - 3. 0.082
 - 4. 0.091

Question ID : 264330188614
Option 1 ID : 264330738260
Option 2 ID : 264330738261
Option 3 ID : 264330738259
Option 4 ID : 264330738258
Status : Answered
Chosen Option : 4

Q.20 If the ratio of volume of two cubes is 125 : 216, then what is the ratio of the sides of the two cubes?

- Ans
- 1. 9 : 11
 - 2. 4 : 7
 - 3. 7 : 9
 - 4. 5 : 6

Question ID : 264330190106
Option 1 ID : 264330744008
Option 2 ID : 264330744007
Option 3 ID : 264330744006
Option 4 ID : 264330744009
Status : Not Answered
Chosen Option : --

Q.1 Select the incorrectly spelt word from the given sentence.

It's one thing to adress, and another thing to inundate students with information.

- Ans
- 1. inundate
 - 2. adress
 - 3. students
 - 4. information

Question ID : 264330186336
Option 1 ID : 264330729573
Option 2 ID : 264330729572
Option 3 ID : 264330729574
Option 4 ID : 264330729575
Status : Not Answered
Chosen Option : --

Q.2 Select the most appropriate option for the given blank.

Sunaina, please _____ the door.

- Ans
- 1. do
 - 2. answer
 - 3. awaken
 - 4. have

Question ID : 264330186106
Option 1 ID : 264330728696
Option 2 ID : 264330728698
Option 3 ID : 264330728697
Option 4 ID : 264330728699
Status : Not Answered
Chosen Option : --

Q.3 Find the part of the given sentence that has an error in it. If there is no error, choose 'No error'.

Students in class B are much quiet than students in class C.

- Ans
- 1. much quiet than
 - 2. students in class C.
 - 3. No error
 - 4. Students in class B are

Question ID : 264330186045
Option 1 ID : 264330728465
Option 2 ID : 264330728466
Option 3 ID : 264330728467
Option 4 ID : 264330728464
Status : Not Answered
Chosen Option : --

Q.4 Improve the underlined part of the sentence. Choose 'No improvement' as an answer if the sentence is grammatically correct.

The cat is sitting at the window, gaze at the mouse.

- Ans**
- 1. gazes at
 - 2. gazing at
 - 3. No improvement
 - 4. gazed at

Question ID : 264330185585

Option 1 ID : 264330726712

Option 2 ID : 264330726713

Option 3 ID : 264330726715

Option 4 ID : 264330726714

Status : Not Answered

Chosen Option : --

Q.5 Improve the underlined part of the sentence. Choose 'No improvement' as an answer if the sentence is grammatically correct.

After the sale, the store's shelves is almost bare.

- Ans**
- 1. No improvement
 - 2. shelves were
 - 3. shelf were
 - 4. shelves was

Question ID : 264330185648

Option 1 ID : 264330726955

Option 2 ID : 264330726953

Option 3 ID : 264330726952

Option 4 ID : 264330726954

Status : Not Answered

Chosen Option : --

Q.6 Find the part of the given sentence that has an error in it. If there is no error, choose 'No error'.

She were very happy that soon she would be very rich.

- Ans**
- 1. No error
 - 2. She were very
 - 3. happy that soon she
 - 4. would be very rich.

Question ID : 264330185771

Option 1 ID : 264330727423

Option 2 ID : 264330727420

Option 3 ID : 264330727421

Option 4 ID : 264330727422

Status : Not Answered

Chosen Option : --

Q.7 Select the sentence with no spelling errors.

Ans ✗ 1.

This protocol opens meriad opportunities for novel dignostic tools and practical applications.

✓ 2.

This protocol opens myriad opportunities for novel diagnostic tools and practical applications.

✗ 3.

This protocol opens myriad opportunities for novel diegnostic tools and practical applications.

✗ 4.

This protocol opens myriad oportuniteis for novel diagnostic tools and practical applications.

Question ID : **264330185853**

Option 1 ID : **264330727734**

Option 2 ID : **264330727732**

Option 3 ID : **264330727735**

Option 4 ID : **264330727733**

Status : **Not Answered**

Chosen Option : --

Q.8 Identify the segment that contains a grammatical error. If there is no error, select 'No error'.

I had sadly broken sleep when I gotten to bed, / through thinking of the strange man / taking aim at me with his invisible gun.

Ans ✓ 1. I had sadly broken sleep when I gotten to bed,

✗ 2. No error

✗ 3. taking aim at me with his invisible gun.

✗ 4. through thinking of the strange man

Question ID : **264330186530**

Option 1 ID : **264330730312**

Option 2 ID : **264330730315**

Option 3 ID : **264330730314**

Option 4 ID : **264330730313**

Status : **Not Answered**

Chosen Option : --

Q.9 In the following question, out of the given four alternatives, select the alternative which best expresses the meaning of the Idiom/Phrase.

An Achilles heel

Ans ✗ 1. A difficult task

✗ 2. A person who tasted failure for the first time

✓ 3. A weak point or fault in someone's character

✗ 4. An old ankle pain

Question ID : **264330186733**

Option 1 ID : **264330731084**

Option 2 ID : **264330731086**

Option 3 ID : **264330731087**

Option 4 ID : **264330731085**

Status : **Not Answered**

Chosen Option : --

Q.10 Choose the idiom/phrase that can substitute the highlighted group of words meaningfully.

Raghu cannot decide whether to divorce his wife or not. He is at a **point in life where his decisions will have long term consequences.**

- Ans
- 1. Tongue And Cheek
 - 2. At a crossroads
 - 3. Make No Bones About
 - 4. Spill the beans

Question ID : 264330185851
Option 1 ID : 264330727724
Option 2 ID : 264330727727
Option 3 ID : 264330727726
Option 4 ID : 264330727725
Status : Not Answered
Chosen Option : --

Q.11 Choose the word that is opposite in meaning to the given word.

Armed

- Ans
- 1. Delayed
 - 2. Deprived
 - 3. Denied
 - 4. Distorted

Question ID : 264330186163
Option 1 ID : 264330728915
Option 2 ID : 264330728912
Option 3 ID : 264330728913
Option 4 ID : 264330728914
Status : Not Answered
Chosen Option : --

Q.12 Choose the word that means the same as the given word.

Validate

- Ans
- 1. Conjoin
 - 2. Collision
 - 3. Confirm
 - 4. Corrupt

Question ID : 264330186226
Option 1 ID : 264330729152
Option 2 ID : 264330729155
Option 3 ID : 264330729153
Option 4 ID : 264330729154
Status : Not Answered
Chosen Option : --

Q.13 Select the word segment that substitutes (replaces) the bracketed word segment correctly and completes the sentence meaningfully. Select the option 'no correction required' if the sentence is correct as given.

(Several curious small) circumstances transpired as the action proceeded.

- Ans**
- 1. Many some curious small
 - 2. Several curious little
 - 3. No correction required
 - 4. Definite curious small

Question ID : 264330186574
Option 1 ID : 264330730480
Option 2 ID : 264330730481
Option 3 ID : 264330730483
Option 4 ID : 264330730482
Status : Not Answered
Chosen Option : --

Q.14 Choose the option which is antonym of (opposite of) the word "contrite" in the sentence given below:

She was taken aback by his hurtful words, wondering why he would choose to speak so unkindly.

- Ans**
- 1. unkindly
 - 2. wondering
 - 3. aback
 - 4. hurtful

Question ID : 264330186438
Option 1 ID : 264330729963
Option 2 ID : 264330729962
Option 3 ID : 264330729960
Option 4 ID : 264330729961
Status : Not Answered
Chosen Option : --

Q.15 Improve the underlined part of the sentence. Choose 'No improvement' as an answer if the sentence is grammatically correct.

Earlier I was very pored in these subjects.

- Ans**
- 1. very pored
 - 2. No improvement
 - 3. very poor
 - 4. few poorer

Question ID : 264330185649
Option 1 ID : 264330726958
Option 2 ID : 264330726959
Option 3 ID : 264330726957
Option 4 ID : 264330726956
Status : Not Answered
Chosen Option : --

Comprehension:

Read the passage carefully and select the correct answer for the given blanks out of the four alternatives.

The history of silk manufacturing can be (1) _____ back to the Neolithic Age when people discovered that silk was (2) _____ by insects. However, it is not certain exactly when this discovery was (3) _____. Silkworm eggs were first discovered in China about 5,000 years ago. The Chinese emperor Huang Ti ordered (4) _____ to plant mulberry trees so that the larvae could feed (5) _____ them and produce silkworms. In 2000 B.C., silk was already being used for making clothing.

SubQuestion No : 16

Q.16 Select the most appropriate option for blank(1)

- Ans
- 1. hauled
 - 2. traced
 - 3. saw
 - 4. raced

Question ID : 264330186073

Option 1 ID : 264330728570

Option 2 ID : 264330728569

Option 3 ID : 264330728568

Option 4 ID : 264330728571

Status : Not Answered

Chosen Option : --

Comprehension:

Read the passage carefully and select the correct answer for the given blanks out of the four alternatives.

The history of silk manufacturing can be (1) _____ back to the Neolithic Age when people discovered that silk was (2) _____ by insects. However, it is not certain exactly when this discovery was (3) _____. Silkworm eggs were first discovered in China about 5,000 years ago. The Chinese emperor Huang Ti ordered (4) _____ to plant mulberry trees so that the larvae could feed (5) _____ them and produce silkworms. In 2000 B.C., silk was already being used for making clothing.

SubQuestion No : 17

Q.17 Select the most appropriate option for blank(2)

- Ans
- 1. planted
 - 2. abandoned
 - 3. turned
 - 4. produced

Question ID : 264330186074

Option 1 ID : 264330728573

Option 2 ID : 264330728575

Option 3 ID : 264330728572

Option 4 ID : 264330728574

Status : Not Answered

Chosen Option : --

Comprehension:

Read the passage carefully and select the correct answer for the given blanks out of the four alternatives.

The history of silk manufacturing can be (1) _____ back to the Neolithic Age when people discovered that silk was (2) _____ by insects. However, it is not certain exactly when this discovery was (3) _____, Silkworm eggs were first discovered in China about 5,000 years ago. The Chinese emperor Huang Ti ordered (4) _____ to plant mulberry trees so that the larvae could feed (5) _____ them and produce silkworms. In 2000 B.C., silk was already being used for making clothing.

SubQuestion No : 18

Q.18 Select the most appropriate option for blank(3)

- Ans
- 1. coerced
 - 2. made
 - 3. baked
 - 4. tailed

Question ID : 264330186075

Option 1 ID : 264330728578

Option 2 ID : 264330728577

Option 3 ID : 264330728576

Option 4 ID : 264330728579

Status : Not Answered

Chosen Option : --

Comprehension:

Read the passage carefully and select the correct answer for the given blanks out of the four alternatives.

The history of silk manufacturing can be (1) _____ back to the Neolithic Age when people discovered that silk was (2) _____ by insects. However, it is not certain exactly when this discovery was (3) _____, Silkworm eggs were first discovered in China about 5,000 years ago. The Chinese emperor Huang Ti ordered (4) _____ to plant mulberry trees so that the larvae could feed (5) _____ them and produce silkworms. In 2000 B.C., silk was already being used for making clothing.

SubQuestion No : 19

Q.19 Select the most appropriate option for blank(4)

- Ans
- 1. nurses
 - 2. soldiers
 - 3. teachers
 - 4. farmers

Question ID : 264330186076

Option 1 ID : 264330728580

Option 2 ID : 264330728583

Option 3 ID : 264330728581

Option 4 ID : 264330728582

Status : Not Answered

Chosen Option : --

Comprehension:

Read the passage carefully and select the correct answer for the given blanks out of the four alternatives.

The history of silk manufacturing can be (1) _____ back to the Neolithic Age when people discovered that silk was (2) _____ by insects. However, it is not certain exactly when this discovery was (3) _____, Silkworm eggs were first discovered in China about 5,000 years ago. The Chinese emperor Huang Ti ordered (4) _____ to plant mulberry trees so that the larvae could feed (5) _____ them and produce silkworms. In 2000 B.C., silk was already being used for making clothing.

SubQuestion No : 20

Q.20 Select the most appropriate option for blank(5)

- Ans
- 1. by
 - 2. in
 - 3. at
 - 4. on

Question ID : 264330186077

Option 1 ID : 264330728587

Option 2 ID : 264330728585

Option 3 ID : 264330728586

Option 4 ID : 264330728584

Status : Not Answered

Chosen Option : --

Section : Part-D-Hindi

Q.1 निम्नलिखित प्रश्न में, दिए गए चार विकल्पों में से, उस विकल्प का चयन करें जो दिए गए मुहावरे के अर्थ को सर्वश्रेष्ठ रूप से व्यक्त करता है।

आँच आना

- Ans
- 1. रिश्वत देना
 - 2. खुद मुसीबत बुलाना
 - 3. हानि पहुँचना
 - 4. पुष्टि करना

Question ID : 264330192824

Option 1 ID : 264330754648

Option 2 ID : 264330754647

Option 3 ID : 264330754646

Option 4 ID : 264330754649

Status : Answered

Chosen Option : 3

Q.2 दिए गए शब्द का पर्यायवाची ज्ञात कीजिए।

तलवार

- Ans
- ✓ 1. खड्ग
 - ✗ 2. बरतन
 - ✗ 3. भू
 - ✗ 4. कपास

Question ID : 264330189006

Option 1 ID : 264330739811

Option 2 ID : 264330739812

Option 3 ID : 264330739810

Option 4 ID : 264330739813

Status : Answered

Chosen Option : 1

Q.3 निम्नलिखित प्रश्न में, चार विकल्पों में से, उस सही विकल्प का चयन करें जो वाक्यांशों के लिए एक शब्द का विकल्प हो।

शिव का उपासक

- Ans
- ✓ 1. शैव
 - ✗ 2. प्रदोष
 - ✗ 3. वैध
 - ✗ 4. शाक्त

Question ID : 264330189592

Option 1 ID : 264330742045

Option 2 ID : 264330742044

Option 3 ID : 264330742043

Option 4 ID : 264330742042

Status : Answered

Chosen Option : 1

Q.4 निम्नलिखित प्रश्न में, चार विकल्पों में से, उस विकल्प का चयन करें जो दिए गए मुहावरे का उचित अर्थ वाला है।
प्राणों की बाजी लगाना

- Ans
- ✗ 1. कलंकित करना
 - ✗ 2. खुल्लमखुल्ला
 - ✓ 3. जान की परवाह न करना
 - ✗ 4. प्रतिष्ठा, मर्यादा आदि खोना

Question ID : 264330189934

Option 1 ID : 264330743346

Option 2 ID : 264330743349

Option 3 ID : 264330743347

Option 4 ID : 264330743348

Status : Answered

Chosen Option : 3

Q.5 दिए गए वाक्य में रेखांकित शब्दों के लिए सही शब्दों वाले विकल्प का चयन करें।

राजन से दस हजार के टिकट गायब हो गया।

- Ans
- 1. राजन से दस हजार के टिकट गायब हो लिए।
 - 2. राजन से दस हजार के टिकट गायब हो गई।
 - 3. राजन से दस हजार के टिकट गायब हो गए।
 - 4. परिवर्तन की आवश्यकता नहीं है।

Question ID : 264330188290

Option 1 ID : 264330737054

Option 2 ID : 264330737052

Option 3 ID : 264330737053

Option 4 ID : 264330737055

Status : Answered

Chosen Option : 3

Q.6 दिए गए वाक्य का वह भाग ज्ञात करें, जिसमें कोई त्रुटि है।

मैं किसन और अशरफ दोनों उसके पीछे भागे परंतु गिर गए।

- Ans
- 1. मैं किसन और
 - 2. पीछे भागे परंतु
 - 3. गिर गए
 - 4. अशरफ दोनों उसके

Question ID : 264330192809

Option 1 ID : 264330754590

Option 2 ID : 264330754592

Option 3 ID : 264330754593

Option 4 ID : 264330754591

Status : Answered

Chosen Option : 1

Q.7 दिए गए वाक्य में रेखांकित शब्द का विलोम शब्द ज्ञात कीजिए।

पृथ्वी अनंत है।

- Ans
- 1. जल
 - 2. आकाश
 - 3. वायु
 - 4. अग्नि

Question ID : 264330189323

Option 1 ID : 264330741020

Option 2 ID : 264330741021

Option 3 ID : 264330741019

Option 4 ID : 264330741018

Status : Answered

Chosen Option : 2

Q.8 निम्नलिखित प्रश्न में, चार विकल्पों में से, उस विकल्प का चयन करें जो कोष्ठक में दिए गए शब्द के विलोम शब्द का सही विकल्प है।
उसके चेहरे पर बहुत ज्यादा (तिमिर) _____ दिखाई दे रहा था।

- Ans
- ✗ 1. आघात
 - ✗ 2. आरोही
 - ✓ 3. आलोक
 - ✗ 4. आशंका

Question ID : 264330189744
Option 1 ID : 264330742625
Option 2 ID : 264330742622
Option 3 ID : 264330742623
Option 4 ID : 264330742624
Status : Not Answered
Chosen Option : --

Q.9 दिए गए विकल्पों में से अशुद्ध वर्तनी वाले विकल्प का चयन करें।

- Ans
- ✗ 1. दूसरे लोग किसे कह रहे हो?
 - ✗ 2. तुच्छ प्राणी का जीवन दयनीय है।
 - ✗ 3. मैं पराये लोगों से बात नहीं करता।
 - ✓ 4. शिक्षा पर हर बच्चे का अधिकार है।

Question ID : 264330189411
Option 1 ID : 264330741355
Option 2 ID : 264330741356
Option 3 ID : 264330741354
Option 4 ID : 264330741357
Status : Answered
Chosen Option : 4

Q.10 निम्नलिखित प्रश्न में, चार विकल्पों में से, उस विकल्प का चयन करें जो रिक्त स्थान के लिए सही भाववाचक संज्ञा वाला विकल्प हो।
आज दीपक ने जो _____ किया ऐसा उसने पहले कभी नहीं किया था।

- Ans
- ✓ 1. पागलपन
 - ✗ 2. नृत्य
 - ✗ 3. खेल
 - ✗ 4. पगला

Question ID : 264330189709
Option 1 ID : 264330742491
Option 2 ID : 264330742490
Option 3 ID : 264330742492
Option 4 ID : 264330742493
Status : Answered
Chosen Option : 1

Q.11 दिए गए शब्द का पर्यायवाची ज्ञात कीजिए।

युद्ध

- Ans
- 1. स्वच्छ
 - 2. रण
 - 3. योगी
 - 4. कमला

Question ID : 264330189090

Option 1 ID : 264330740133

Option 2 ID : 264330740130

Option 3 ID : 264330740132

Option 4 ID : 264330740131

Status : Answered

Chosen Option : 2

Q.12 दिए गए विकल्पों में से तीन विकल्प शुद्ध वर्तनी वाले हैं, जबकि एक अशुद्ध वर्तनी वाला है। उस अशुद्ध वर्तनी वाले विकल्प का चयन करें।

- Ans
- 1. दर्पण में अपने आपको कितना निहारोगी?
 - 2. मुझे अखबार दे दो।
 - 3. गौरव के आँखों की रोशनी चली गई।
 - 4. इसका यही अर्थ सही है।

Question ID : 264330189349

Option 1 ID : 264330741118

Option 2 ID : 264330741121

Option 3 ID : 264330741119

Option 4 ID : 264330741120

Status : Answered

Chosen Option : 4

Q.13 निम्नलिखित वाक्य में रेखांकित भाग के लिए एक सार्थक शब्द ज्ञात कीजिए।

शायद पहले कभी यह घटना घटी होगी।

- Ans
- 1. भूतपूर्व
 - 2. वर्तमान
 - 3. अभूतपूर्व
 - 4. पूर्वाह्न

Question ID : 264330190012

Option 1 ID : 264330743643

Option 2 ID : 264330743644

Option 3 ID : 264330743642

Option 4 ID : 264330743645

Status : Answered

Chosen Option : 3

Q.14 दिए गए वाक्य में उचित देशज-विदेशज शब्द का चयन करके रिक्त स्थान की पूर्ति कीजिए।

गलती करने पर माँ ने ज़ोर का _____ मारा।

- Ans
- 1. मिग
 - 2. थप्पड़
 - 3. रिक्शा
 - 4. चीनी

Question ID : 264330189140

Option 1 ID : 264330740325

Option 2 ID : 264330740324

Option 3 ID : 264330740323

Option 4 ID : 264330740322

Status : Answered

Chosen Option : 2

Q.15 दिए गए वाक्य में रेखांकित शब्द का तत्सम शब्द ज्ञात कीजिए।

उठो और दाँत साफ करो।

- Ans
- 1. द्रत
 - 2. दौंत
 - 3. द्रंत
 - 4. दंत

Question ID : 264330188266

Option 1 ID : 264330736961

Option 2 ID : 264330736962

Option 3 ID : 264330736960

Option 4 ID : 264330736963

Status : Answered

Chosen Option : 4

Comprehension:

नीचे दिए गए गद्य में कुछ शब्द छोड़ दिए गए हैं और प्रत्येक रिक्त स्थान के चार विकल्प दिए गए हैं। इन चारों में से कौन सा विकल्प रिक्त स्थान की पूर्ति करेगा-

भारत दुनिया में अपने संबंधों की (1)_____ और गरिमा के लिए जाना जाता है। व्यक्ति अपना (2)_____ यौवन अपने बच्चों के लिए न्योछावर कर देता है, किंतु एक दिन वही बच्चे उसे त्याग देते हैं या उसकी (3)_____ करने लगते हैं। जीवन की इससे बड़ी (4)_____ और क्या हो सकती है। (5)_____ की अंधी दौड़ में हम बेतहाशा भाग रहे हैं।

SubQuestion No : 16

Q.16 रिक्त 1 के लिए सबसे उपयुक्त विकल्प का चयन कीजिए।

- Ans
- 1. व्यक्ति
 - 2. आत्मीयता
 - 3. बेकार
 - 4. करीब

Question ID : 264330189209

Option 1 ID : 264330740585

Option 2 ID : 264330740582

Option 3 ID : 264330740583

Option 4 ID : 264330740584

Status : Answered

Chosen Option : 2

Comprehension:

नीचे दिए गए गद्य में कुछ शब्द छोड़ दिए गए हैं और प्रत्येक रिक्त स्थान के चार विकल्प दिए गए हैं। इन चारों में से कौन सा विकल्प रिक्त स्थान की पूर्ति करेगा-

भारत दुनिया में अपने संबंधों की (1)_____ और गरिमा के लिए जाना जाता है। व्यक्ति अपना (2)_____ यौवन अपने बच्चों के लिए न्योछावर कर देता है, किंतु एक दिन वही बच्चे उसे त्याग देते हैं या उसकी (3)_____ करने लगते हैं। जीवन की इससे बड़ी (4)_____ और क्या हो सकती है। (5)_____ की अंधी दौड़ में हम बेतहाशा भाग रहे हैं।

SubQuestion No : 17

Q.17 रिक्त2 के लिए सबसे उपयुक्त विकल्प का चयन कीजिए।

- Ans
- 1. संपूर्ण
 - 2. खराब
 - 3. केवल
 - 4. शून्य

Question ID : 264330189210

Option 1 ID : 264330740587

Option 2 ID : 264330740589

Option 3 ID : 264330740588

Option 4 ID : 264330740586

Status : Answered

Chosen Option : 1

Comprehension:

नीचे दिए गए गद्य में कुछ शब्द छोड़ दिए गए हैं और प्रत्येक रिक्त स्थान के चार विकल्प दिए गए हैं। इन चारों में से कौन सा विकल्प रिक्त स्थान की पूर्ति करेगा-

भारत दुनिया में अपने संबंधों की (1)_____ और गरिमा के लिए जाना जाता है। व्यक्ति अपना (2)_____ यौवन अपने बच्चों के लिए न्योछावर कर देता है, किंतु एक दिन वही बच्चे उसे त्याग देते हैं या उसकी (3)_____ करने लगते हैं। जीवन की इससे बड़ी (4)_____ और क्या हो सकती है। (5)_____ की अंधी दौड़ में हम बेतहाशा भाग रहे हैं।

SubQuestion No : 18

Q.18 रिक्त3 के लिए सबसे उपयुक्त विकल्प का चयन कीजिए।

- Ans
- 1. खिलाने
 - 2. संपत्ति
 - 3. सुखी
 - 4. उपेक्षा

Question ID : 264330189211

Option 1 ID : 264330740590

Option 2 ID : 264330740592

Option 3 ID : 264330740591

Option 4 ID : 264330740593

Status : Answered

Chosen Option : 4

Comprehension:

नीचे दिए गए गद्य में कुछ शब्द छोड़ दिए गए हैं और प्रत्येक रिक्त स्थान के चार विकल्प दिए गए हैं। इन चारों में से कौन सा विकल्प रिक्त स्थान की पूर्ति करेगा-

भारत दुनिया में अपने संबंधों की (1)_____ और गरिमा के लिए जाना जाता है। व्यक्ति अपना (2)_____ यौवन अपने बच्चों के लिए न्योछावर कर देता है, किंतु एक दिन वही बच्चे उसे त्याग देते हैं या उसकी (3)_____ करने लगते हैं। जीवन की इससे बड़ी (4)_____ और क्या हो सकती है। (5)_____ की अंधी दौड़ में हम बेतहाशा भाग रहे हैं।

SubQuestion No : 19

Q.19 रिक्त4 के लिए सबसे उपयुक्त विकल्प का चयन कीजिए।

- Ans
- 1. त्रासदी
 - 2. लगाव
 - 3. सुविधा
 - 4. व्यर्थ

Question ID : 264330189212

Option 1 ID : 264330740595

Option 2 ID : 264330740597

Option 3 ID : 264330740596

Option 4 ID : 264330740594

Status : Answered

Chosen Option : 1

Comprehension:

नीचे दिए गए गद्य में कुछ शब्द छोड़ दिए गए हैं और प्रत्येक रिक्त स्थान के चार विकल्प दिए गए हैं। इन चारों में से कौन सा विकल्प रिक्त स्थान को पूर्ति करेगा-

भारत दुनिया में अपने संबंधों की (1)_____ और गरिमा के लिए जाना जाता है। व्यक्ति अपना (2)_____ यौवन अपने बच्चों के लिए न्योछावर कर देता है, किंतु एक दिन वही बच्चे उसे त्याग देते हैं या उसकी (3)_____ करने लगते हैं। जीवन की इससे बड़ी (4)_____ और क्या हो सकती है। (5)_____ की अंधी दौड़ में हम बेतहाशा भाग रहे हैं।

SubQuestion No : 20

Q.20 रिक्त5 के लिए सबसे उपयुक्त विकल्प का चयन कीजिए।

- Ans
- ✓ 1. सफलता
 - ✗ 2. निवासी
 - ✗ 3. हिस्सा
 - ✗ 4. प्रतिशत

Question ID : 264330189213

Option 1 ID : 264330740599

Option 2 ID : 264330740600

Option 3 ID : 264330740601

Option 4 ID : 264330740598

Status : Answered

Chosen Option : 1