

Multi Tasking Non Technical Staff and Havaladar CBIC and CBN Examination 2024

Exam Date	08/10/2024
Exam Time	4:00 PM - 5:30 PM
Subject	MTS Non Tech Havaladar CBIC and CBN Examination 2024

Section : Numerical and Mathematical Ability

Q.1 The average weight of a family of five members (in kg) whose weights are 40 kg, 49 kg, 56 kg, 65 kg and 38 kg is:
 Ans A). 48.6 B). 49.6 C). 50.6 D). 51.6 **Correct Answer: B**

Q.2 What sum (in ₹) will earn a simple interest of ₹240 in 2 years at 16% per year rate of interest?
 Ans A). 1500 B). 1000 C). 750 D). 375 **Correct Answer: C**

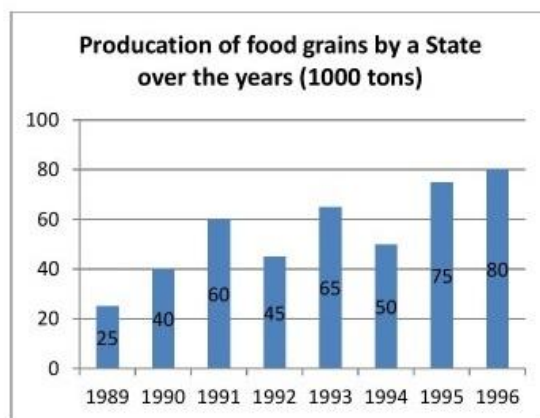
Q.3 Find the simple interest (in ₹) on ₹4000 as a sum borrowed at 3% per year rate of interest for 6 years.
 Ans A). 720 B). 660 C). 760 D). 680 **Correct Answer: A**

Q.4 The average weight of a family of five members (in kg) whose weights are 40 kg, 49 kg, 56 kg, 66 kg and 38 kg is:
 Ans A). 48.8 B). 49.8 C). 50.8 D). 51.8 **Correct Answer: B**

Q.5 A person got an article at 22% discount, if he got no discount, then he had to pay ₹1,760 more. How much did he pay (in ₹) for the article?
 Ans A). 5,120 B). 6,360 C). 5,640 D). 6,240 **Correct Answer: D**

Q.6 A solid spherical item is melted into the shape of a cylinder mounted by a cone having same radius. The diameters of the cylinder and sphere are 21 cm each. What is the height (in cm) of the cone if the height of the cylinder is 7 cm?
 Take $\pi = \frac{22}{7}$
 Ans A). 21 B). 10.5 C). 14 D). 7 **Correct Answer: A**

Q.7 Study the given bar graph carefully and answer the following question.



What was the difference in the production of food grains between 1991 and 1994?
 Ans A). 5000 tons B). 500 tons C). 10000 tons D). 15000 tons **Correct Answer: C**

Q.8 A fast train takes 1 hour less than a slow train for a journey of 96 km. If the speed of the slow train is 8 km/h less than that of the fast train, then find the speeds of the fast train and slow train respectively.
 Ans A). 26 km/h, 34 km/h B). 32 km/h, 24 km/h C). 34 km/h, 28 km/h D). 12 km/h, 14 km/h **Correct Answer: B**

Q.9 By selling 20 cakes, a shopkeeper earns selling price of 4 cakes. Determine the profit percentage.
 Ans A). 10% B). 25% C). 20% D). 4% **Correct Answer: B**

Q.10 The centroid of a ΔXYZ is G. The area of ΔXYZ is 45 cm^2 . The area of ΔGYZ is:
 Ans A). 22.5 cm^2 B). 7.5 cm^2 C). 15 cm^2 D). 30 cm^2 **Correct Answer: C**

Q.11 360 toffees are distributed among Pushkal, Quadir and Rustam in the ratio 2 : 3 : 4. After distribution, Quadir gives 20% of his toffees to Pushkal and Rustam gives 25% of his toffees to Pushkal. What is the new ratio of toffees with Pushkal, Quadir and Rustam?

Ans A). 5 : 4 : 6 B). 7 : 3 : 5 C). 6 : 4 : 5 D). 3 : 5 : 7 **Correct Answer: C**

Q.12 R earns ₹55,000 per month and his annual expenditure is ₹4,50,000. What is his percentage of savings per annum?

Ans A). 31.82% B). 38.12% C). 36.21% D). 32.81% **Correct Answer: A**

Q.13 A car travels 80 km at the speed of 20 km/h and the next 30 km at the speed of 30 km/h. What is its average speed?

Ans A). 20 km/h B). 22 km/h C). 40 km/h D). 30 km/h **Correct Answer: B**

Q.14 The HCF of 513,1134 and 1215 is:

Ans A). 27 B). 19 C). 45 D). 43 **Correct Answer: A**

Q.15 A vessel is in the form of a hollow hemisphere mounted by a hollow cylinder. The diameter of the hemisphere is 28 cm, and the total height of the vessel is 20 cm. Find the inner surface area (in cm²) of the vessel. (Use $\pi = \frac{22}{7}$)

Ans A). 1720 B). 1760 C). 1780 D). 1740 **Correct Answer: B**

Q.16 Reena sells an article at 12% below its cost price. Had she sold it for ₹540 more, she would have gained 15%. At what price should she sell the article to gain 20%?

Ans A). ₹2,004 B). ₹2,040 C). ₹2,400 D). ₹4,200 **Correct Answer: C**

Q.17 The mean of marks secured by 3 students in grade A of class XI is 83, that of 4 students of grade B is 76 and that of 5 students of grade C is 85. What will be the mean of marks of the students of three grades of Class XI?

Ans A). 80.5 B). 81 C). 80 D). 81.5 **Correct Answer: D**

Q.18 There are 40 students in a class. Their average weight is 60 kg. Two students left the class. Then the average weight is reduced by 500 g. Find the weight of the two students who left the class (in kg).

Ans A). 140 B). 130 C). 129 D). 139 **Correct Answer: D**

Q.19 Etika invested some amount at a rate 9% per annum and earns a S.I. of ₹810 after 3 years. If the rate of interest had been 11% then how much more interest (in ₹) would have Etika earned on the same amount in the same time period?

Ans A). 240 B). 405 C). 360 D). 540

Q.20 The table below shows the number of students enrolled in four colleges over the four years.

Colleges	P	Q	R	S
Year				
2019	520	578	298	416
2020	625	603	365	254
2021	715	476	548	325
2022	539	235	258	842

What is the average number of students studying per year in college Q over the given years?

Ans A). 455 B). 473 C). 505 D). 548 **Correct Answer: B**

Section : Reasoning Ability and Problem Solving

Q.1 In a certain code language, 'COPY' is coded as '2846' and 'APES' is coded as '7321'. What is the code for 'P' in that language?

Ans A). 3 B). 4 C). 1 D). 2 **Correct Answer: D**

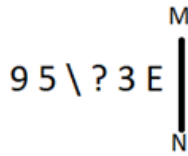
Q.2 What should come in place of the question (?) in the following series?
4, -27, -58, -89, -120, ?

Ans A). 151 B). -131 C). -151 D). -141 **Correct Answer: C**

Q.3 Which two signs should be interchanged to make the following equation mathematically correct?
 $15 \times 14 - 8 + 12 \div 4 = 5$

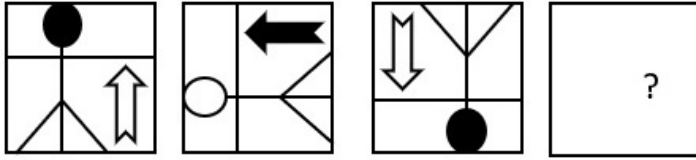
Ans A). \times and $+$ B). \div and $-$ C). \times and $-$ D). $+$ and $+$ **Correct Answer: A**

Q.4 Select the correct mirror image of the given figure when the mirror is placed at MN as shown below.



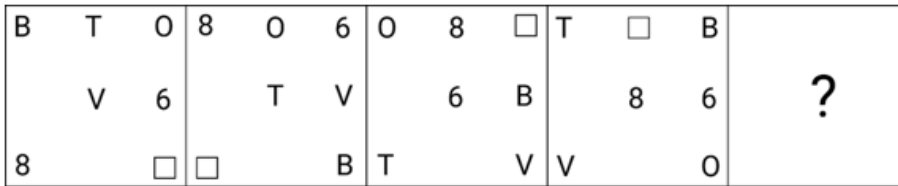
Ans A). 3 E \ ? 3 E B). 3 E \ ? 3 E C). 3 E \ ? 3 E D). 3 E \ ? 3 E Correct Answer: A

Q.5 Select the figure from the options that can replace the question mark (?) and logically complete the series.



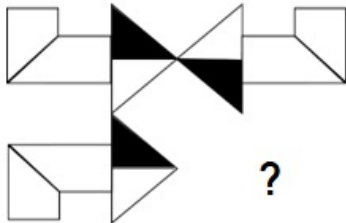
Ans A). B). C). D). Correct Answer: B

Q.6 Select the figure from among the given options that can replace the question mark (?) in the following series and complete the pattern.



Ans A). B). C). D). Correct Answer: B

Q.7 Select the figure from the given options that will replace the question mark (?) in the figure given below to complete the pattern.



Ans A). B). C). D). Correct Answer: C

Q.8 MHPL is related to OJRN in a certain way based on the English alphabetical order. In the same way, PKSO is related to RMUQ. To which of the following is SNVR related following the same logic?

Ans A). PUTX B). UPXT C). PUXT D). UPTX Correct Answer: B

Q.9 What should come in place of the question mark (?) in the given series based on the English alphabetical order?

SXG, QVI, OTK, MRM, ?

Ans A). LPP B). KPO C). KPP D). LPO Correct Answer: B

Q.10 Read the given statements and conclusions carefully. Assuming that the information given in the statements is true, even if it appears to be at variance with commonly known facts, decide which of the given conclusions logically follow(s) from the statements.

Statements:
All leaves are trees.
Some trees are plants.

Conclusions:
(I) Some leaves are plants.
(II) All leaves are trees.

Ans A). Only conclusion II follows B). Both conclusions I and II follow C). Only conclusion I follows D). Neither conclusion I nor II follows

Correct Answer: A

Q.11	'NQR P' is related to 'TWXV' in a certain way based on the English alphabetical order. In the same way, 'FHIG' is related to 'LNOM'. To which of the following is 'LOPN' related following the same logic?	Ans A). QTUS	B). RUVT	C). QSTR	D). RSQT	Correct Answer: B
Q.12	In a certain code language, 'MASTER' is coded as '917032', and 'STREAK' is coded as '372159'. What is the code for 'K' in 'STREAK'?	Ans A). 7	B). 5	C). 3	D). 9	Correct Answer: B
Q.13	L, M, N, O, P, Q and R are sitting around a circular table, facing the centre (but not necessarily in the same order). Only three people are sitting between R and O when counted from the left of R. Only M is sitting between L and N. N is an immediate neighbour of O. P is sitting third to the right of L. Who is sitting second to the left of O?	Ans A). Q	B). L	C). R	D). P	Correct Answer: A
Q.14	What will come in the place of '?' in the following equation, if '+' and '-' are interchanged and 'x' and '-' are interchanged? $48 \times 16 - 20 \div 21 + 7 = ?$	Ans A). 259	B). 269	C). -269	D). -259	Correct Answer: C
Q.15	16 is related to 176 following a certain logic. Following the same logic, 21 is related to 231. To which of the following is 33 related, following the same logic? (NOTE : Operations should be performed on the whole numbers, without breaking down the numbers into its constituent digits. E.g. 13 – Operations on 13 such as adding / subtracting / multiplying, etc., to 13 can be performed. Breaking down 13 into 1 and 3 and then performing mathematical operations on 1 and 3 is not allowed.)	Ans A). 363	B). 361	C). 364	D). 362	Correct Answer: A
Q.16	Read the given statements and conclusions carefully. Assuming that the information given in the statements is true, even if it appears to be at variance with commonly known facts, decide which of the given conclusions logically follow(s) from the statements. Statements: All pencils are remotes. Some pencils are ACs. Conclusions: [1] Some ACs are remotes. [2] All remotes are Acs.	Ans A). Only conclusion [1] follows	B). Neither conclusion [1] nor [2] follows	C). Both conclusions [1] and [2] follow	D). Only conclusion [2] follows	Correct Answer: A
Q.17	In a certain code language, if HOUSE is coded as 67 and GROUND is coded as 83, then how will KITCHEN be coded?	Ans A). 119	B). 110	C). 130	D). 122	Correct Answer: A
Q.18	Select the option in which the numbers share the same relationship as that shared by the given pair of numbers. 48 : 42	Ans A). 63 : 28	B). 65 : 28	C). 69 : 32	D). 48 : 24	Correct Answer: A
Q.19	A, B, C, L, M, Y and X are sitting around a circular table facing the centre (but not necessarily in the same order). Only two people sit between B and L when counted from the right of L. X sits to the immediate left of Y. A sits to the immediate right of M. Y is an immediate neighbour of L. Who sits fourth to the right of C?	Ans A). L	B). M	C). A	D). X	Correct Answer: B
Q.20	In a certain code language, 'he may eat rice' is written as 'ki mi ji li' and 'she will like rice' is written as 'ni qi mi pi'. How is 'rice' written in the given language?	Ans A). qi	B). ni	C). ji	D). mi	Correct Answer: D

Section : General Awareness						
Q.1	Two masses of 1 kg and 2 kg were dropped from a height of 3.2 metres. Their respective velocities just before touching the ground will be: (Assume acceleration due to gravity $g = 10 \text{ m/s}^2$)	Ans A). 8 m/s and 4 m/s	B). 3.2 m/s for both	C). 4 m/s and 8 m/s	D). 8 m/s for both	Correct Answer: D
Q.2	The igneous, sedimentary and metamorphic rocks are interconvertible through a continuous process called:	Ans A). lithification	B). metamorphism	C). rock cycle	D). weathering and erosion	Correct Answer: C
Q.3	'Sange Meel Se Mulaqat' is the documentary of which famous musician?	Ans A). Zakir Hussain	B). Bismillah Khan	C). Hari Prasad Chaurasia	D). MS Gopalakrishnan	Correct Answer: B
Q.4	'The Namesake', 'Unaccustomed Earth' and 'The Lowland' are novels written by who among the following authors?	Ans A). Arundhati Roy	B). Jhumpa Lahiri	C). Aravind Adiga	D). Shobha De	Correct Answer: B
Q.5	Which of the following types of emergencies is declared under Article 360 of the Indian Constitution?	Ans A). State Emergency	B). Financial Emergency	C). National Emergency	D). Constitutional Emergency	Correct Answer: B

Q.6 When is the National Unity Day celebrated in India?
Ans A). 26 January B). 31 October C). 2 October D). 14 November **Correct Answer: B**

Q.7 Which material was largely used to build the stupa at Piprahwa in Uttar Pradesh?
Ans A). Bricks B). Marble C). Sandstone D). Granite Stone **Correct Answer: A**

Q.8 How many components are there in the New India Literacy Program (NILP) scheme launched by the Union Ministry of Education in March 2023?
Ans A). Seven B). Three C). Nine D). Five **Correct Answer: D**

Q.9 In June 2023, which country conferred the 'Order of the Nile' award on Narendra Modi?
Ans A). Lebanon B). Turkey C). Egypt D). Singapore **Correct Answer: C**

Q.10 Who among the following adopted the policy of consolidation in place of expansion by eliminating the rebels?
Ans A). Shamsuddin Iltutmish B). Raziya C). Nasiruddin Mahmud D). Ghiyasuddin Balban **Correct Answer: D**

Q.11 According to National Multidimensional Poverty Index 2023 (A Progress Review), what was the proportion of population in multidimensional poverty (Headcount Ratio) in urban India in 2019-2021?
Ans A). 2.12% B). 11.32% C). 5.27% D). 6.96% **Correct Answer: C**

Q.12 In which of the followings years was the National Population Policy of India released?
Ans A). 1995 B). 2000 C). 2015 D). 1952 **Correct Answer: B**

Q.13 Match the political parties of British India in column A with their respective founders in column B.

Column A (Political Parties)	Column B (Founders)
a. All India Forward Bloc	i. Dayananda Sarasvati
b. Arya Samaj	ii. Jai Prakash Narayan
c. The Congress Socialist Party	iii. Surendra Nath Banerjee
d. The Indian National Liberal Federation	iv. Subhash Chandra Bose

Ans A). a-iv, b-i, c-ii, d-iii B). a-iii, b-iv, c-i, d-ii C). a-ii, b-iii, c-iv, d-i D). a-ii, b-i, c-iv, d-iii **Correct Answer: A**

Q.14 Which of the following statements is/are correct about the Union Government budget in India?
a. The Budget reflects the vision of the government in fulfilling the aspirations of people.
b. The Budget is the summary report of the financial performance of the government in power.
c. The Budget provides details of expenditures meted out by various Union Government ministries.

Ans A). All a, b and c B). Only a and b C). Only c D). Only a **Correct Answer: A**

Q.15 A _____ happens in chess when a player gives up material during the initiation to seek some kind of compensation.

Ans A). Blockade B). Nick C). Gambit D). Castling **Correct Answer: C**

Q.16 Kaal Baisakhi belongs to which state from the following?

Ans A). Punjab B). Rajasthan C). West Bengal D). Bihar **Correct Answer: C**

Q.17 Which of the following statements is NOT true about Plastids?

Ans A). Starch, oils and protein granules are stored in chromoplasts. B). They have their own ribosomes. C). They have their own DNA.
D). Stroma is found in chloroplast. **Correct Answer: A**

Q.18 In the animal kingdom, which of the following phyla includes animals with a segmented body?

Ans A). Chordata B). Arthropoda C). Annelida D). Mollusca **Correct Answer: C**

Q.19 Which of the following is NOT associated with the Iron Age in India?

Ans A). Smelting B). Painted grey ware C). Northern black polished ware D). Mehrauli iron pillar **Correct Answer: D**

Q.20 Which of the following committees was set up to investigate into the infamous Jallianwala Bagh massacre?

Ans A). Sadlar Committee B). Hunter Committee C). Henry Fowler Committee D). Butler Committee **Correct Answer: B**

Q.21 From which of the following countries has the Indian Constitution borrowed the concept of the Concurrent List?

Ans A). Australia B). Russia C). USA D). Ireland **Correct Answer: A**

Q.22 _____ was launched by the Government of India in 2020 to make the country and its citizens independent and self-sufficient in all respects.

Ans A). Smart Cities Mission B). Swachh Bharat Mission C). Digital India Mission D). Atmanirbhar Bharat Abhiyan **Correct Answer: D**

Q.23 Which of the following war dances is performed in Ngada festival and is a performed by the tribes of Nagaland?

Ans A). Jawara B). Dalkhai C). Rengma D). Garadi **Correct Answer: C**

Q.24 Which edition of the Pro Kabaddi League was started in December 2023?

Ans A). 12th B). 11th C). 10th D). 8th **Correct Answer: C**

Q.25 Mallika Sarabhai was honoured with the Padma Bhushan in 2010 for her contribution to which of the following fields?

Ans A). Dance B). Literature C). Painting D). Singing **Correct Answer: A**

Section : English Language and Comprehension

Q.1 Select the most appropriate ANTONYM of the word given in brackets to fill in the blank.
He was able to do _____(tedious) jobs and hence decided to be in the airline service, which demanded 12 long hours of service.

Ans A). irksome B). delightful C). riotous D). timid **Correct Answer: B**

Q.2 Select the most appropriate option that can substitute the underlined segment without changing its meaning in the given sentence.

Family planning programs play a crucial role in promoting reproductive health and empowering individuals to make informed choices, contributing to sustainable population growth and a healthier society.

Ans A). promoting a viable population increase B). discouraging a sustainable population upswing
C). supporting sustainable population explosion D). fostering an unbalanced population growth **Correct Answer: A**

Q.3 Based on the situation in the given sentence, select the most appropriate idiom for the underlined segment.
Having known to the facts, the manager disregarded the arguments of the customer.

Ans A). Turned a deaf ear B). Bite the Bullet C). Turned out D). Turned against **Correct Answer: A**

Q.4 Select the sentence that contains a spelling error.

Ans A). They had been disgrantled with the company due to various reasons.
B). Despite his formidable appearance, he possesses a kind heart. C). We saw a pride of lions nonchalantly roaming in the forest.
D). He has made significant improvement in the last few weeks. **Correct Answer: A**

Q.5 The given sentence is divided into four segments. Select the option that has the segment with a grammatical error.

I left my / coat in the / hospital when I / had visit Alex.

Ans A). I left my B). hospital when I C). coat in the D). had visit Alex. **Correct Answer: D**

Q.6 Select the most appropriate synonym of the given word.
Vigorous

Ans A). Academic B). Energetic C). Guarded D). Furious **Correct Answer: B**

Q.7 Select the most appropriate ANTONYM of the given word.
Contrary

Ans A). Transformational B). Reverse C). Similar D). Forward **Correct Answer: C**

Q.8 Select the most appropriate adjective to fill in the blank.

They needed a _____ answer for every question.

Ans A). precise B). more precise C). most precise D). preciser **Correct Answer: A**

Q.9 Select the most appropriate option to fill in the blank.
The CEO came up with a groundbreaking strategy to _____ new markets and capitalise on emerging trends.

Ans A). break off B). break out C). break down D). break into **Correct Answer: D**

Q.10 Select the correct spelling of the underlined word.

She has a magnificent personality.

Ans A). Megnificent B). Magnificient C). Magnificent D). Megnifecent **Correct Answer: C**

Q.11 Select the most appropriate option that can substitute the underlined words in the given sentence.

The walls of the marriage hall were covered by beautiful purple curtains.

Ans A). covered with B). covered upon C). covered of D). covered on **Correct Answer: A**

Q.12 Select the most appropriate ANTONYM of the given word.

Haste

Ans A). Speed B). Delay C). Twist D). Quick **Correct Answer: B**

Q.13 Select the grammatically correct sentence.

Ans A). The teacher from a South explained the theory in the detailed manner.
B). A teacher from South explained the theory in the detailed manners.
C). The teacher from the South explained the theory in a detailed manner.
D). The teacher from an South explained a theory in a detailed manner. **Correct Answer: C**

Q.14 Select the most appropriate option to fill in the blanks.

If 2023 was ___ year consumers helped stave off a recession with an unexpected surge in spending, many economists _____ 2024 will be the time shoppers finally tighten their belts.

Ans A). an, thought B). a, see C). the, predict D). a, wanted

Correct Answer: C

Q.15 In the following sentence the underlined part contains an error. Alternatives to the underlined part are given as options.

Select the correct alternative.

Playing 'hide-n-seek' is the one of the fond memories of my childhood.

Ans A). most fondest B). fonder C). more fonder D). fondest

Correct Answer: D

Q.16 Select the most appropriate synonym of the word 'Pamper' from the given sentence.

I always feel that nuclear families always mollycoddle their kids without directing them to the correct path or denying their unrealistic demands.

Ans A). Path B). Demands C). Nuclear D). Mollycoddle

Correct Answer: D

Q.17 Select the most appropriate option to fill in the blank.

The old man shared his _____ wisdom with the young generation.

Ans A). trivial B). sagacious C). ephemeral D). frivolous

Correct Answer: B

Q.18 Select the most appropriate meaning of the given idiom.

Clear as mud

Ans A). A dirty surrounding B). Very easy to understand C). A clean surface D). Very difficult to understand

Correct Answer: D

Q.19 Select the option that rectifies the spelling of the underlined word in the given sentence.

The children were excited to ride the carusel.

Ans A). Carousell B). Carousel C). Carrousel D). Karusel

Correct Answer: B

Q.20 Change the following sentence into positive degree.

Yash is not better than Harsh.

Ans A). Yash is best than Harsh. B). Yash is as good as Harsh. C). Yash and Harsh both are good. D). Yash is not good than Harsh.

Correct Answer: B

Comprehension:

In the following passage, some words have been deleted. Read the passage carefully and select the most appropriate option to fill in each blank.

We should remember that all religions (1)_____ good conduct in life, the foundation of which should rest on (2)_____.

Without the basis of morality, philosophy would remain mere polemics, and religion would be (3)_____ and vain. Nobody can say that he is religious unless he is (4)_____ and unselfish. It is realised that by constant endeavour through thought, word and deed, one could (5)_____ absolute peace of mind.

SubQuestion No : 21

Q.21 Select the most appropriate option to fill in blank number 1.

Ans A). abandon B). preach C). refrain D). depart

Correct Answer: B

Comprehension:

In the following passage, some words have been deleted. Read the passage carefully and select the most appropriate option to fill in each blank.

We should remember that all religions (1)_____ good conduct in life, the foundation of which should rest on (2)_____.

Without the basis of morality, philosophy would remain mere polemics, and religion would be (3)_____ and vain. Nobody can say that he is religious unless he is (4)_____ and unselfish. It is realised that by constant endeavour through thought, word and deed, one could (5)_____ absolute peace of mind.

SubQuestion No : 22

Q.22 Select the most appropriate option to fill in blank number 2.

Ans A). evil B). boundaries C). unconscientiousness D). ethics

Correct Answer: D

Comprehension:

In the following passage, some words have been deleted. Read the passage carefully and select the most appropriate option to fill in each blank.

We should remember that all religions (1)_____ good conduct in life, the foundation of which should rest on (2)_____.

Without the basis of morality, philosophy would remain mere polemics, and religion would be (3)_____ and vain. Nobody can say that he is religious unless he is (4)_____ and unselfish. It is realised that by constant endeavour through thought, word and deed, one could (5)_____ absolute peace of mind.

SubQuestion No : 23

Q.23 Select the most appropriate option to fill in blank number 3.

Ans A). useful B). popular C). rational D). meaningless

Correct Answer: D

Comprehension:

In the following passage, some words have been deleted. Read the passage carefully and select the most appropriate option to fill in each blank.

We should remember that all religions (1)_____ good conduct in life, the foundation of which should rest on (2)_____. Without the basis of morality, philosophy would remain mere polemics, and religion would be (3)_____ and vain. Nobody can say that he is religious unless he is (4)_____ and unselfish. It is realised that by constant endeavour through thought, word and deed, one could (5)_____ absolute peace of mind.

SubQuestion No : 24

Q.24 Select the most appropriate option to fill in blank number 4.

Ans A). grotesque B). lethargic C). truthful D). insensitive

Correct Answer: C

Comprehension:

In the following passage, some words have been deleted. Read the passage carefully and select the most appropriate option to fill in each blank.

We should remember that all religions (1)_____ good conduct in life, the foundation of which should rest on (2)_____. Without the basis of morality, philosophy would remain mere polemics, and religion would be (3)_____ and vain. Nobody can say that he is religious unless he is (4)_____ and unselfish. It is realised that by constant endeavour through thought, word and deed, one could (5)_____ absolute peace of mind.

SubQuestion No : 25

Q.25 Select the most appropriate option to fill in blank number 5.

Ans A). scatter B). forfeit C). acquire D). divide

Correct Answer: C