



सत्यमेव जयते

रेल भर्ती बोर्ड / RAILWAY RECRUITMENT BOARDS

सी ई एन ०१/२०१९ - एन टी पी सी - CEN 01/2019 - NTPC



Participant ID	
Participant Name	
Test Center Name	
Test Date	29/12/2020
Test Time	10:30 AM - 12:00 PM
Subject	NTPC

*** Note**

Correct Answer will carry 1 mark per Question.

Incorrect Answer will carry 1/3 Negative mark.

1. Options shown in green color with a tick icon are correct.

2. Chosen option on the right of the question indicates the option selected by the candidate.

Section : NTPC

Q.1 6889 students are sitting in an auditorium in such a manner that there are as many students in a row as there are rows in the auditorium. How many rows are there in the auditorium?

- Ans**
- ☒ 1. 73
 - ☒ 2. 87
 - ☒ 3. 83
 - ☒ 4. 77

Question ID : 948911550

Option 1 ID : 9489112200

Option 2 ID : 9489112197

Option 3 ID : 9489112199

Option 4 ID : 9489112198

Status : Answered

Chosen Option : 3

Q.2 What is the name of the Societal movement launched by the Union Minister for Environment, forest and climate change?

- Ans**
- ☒ 1. Green & Clean Deeds
 - ☒ 2. Great Green Deeds
 - ☒ 3. Green Good Deeds
 - ☒ 4. Great Clean Deeds

Question ID : 948911635

Option 1 ID : 9489112538

Option 2 ID : 9489112537

Option 3 ID : 9489112539

Option 4 ID : 9489112540

Status : Answered

Chosen Option : 1

Q.3 Which country leads in the Human Development Index report, 2019?

- Ans**
- ☒ 1. Norway
 - ☒ 2. Singapore
 - ☒ 3. Switzerland
 - ☒ 4. Australia

Question ID : 948911626

Option 1 ID : 9489112503

Option 2 ID : 9489112504

Option 3 ID : 9489112501

Option 4 ID : 9489112502

Status : Answered

Chosen Option : 1

Q.4 Who is the inspiration behind Saansad Adarsh Gram Yojana?

- Ans**
- ☒ 1. Lal Bahadur Shastri
 - ☒ 2. Jawaharlal Nehru
 - ☒ 3. Sardar Vallabh Bhai Patel
 - ☒ 4. Mahatma Gandhi

Question ID : 948911643

Option 1 ID : 9489112569

Option 2 ID : 9489112570

Option 3 ID : 9489112571

Option 4 ID : 9489112572

Status : Answered

Chosen Option : 1

Q.5 In an election between Rana and Ranvir, Rana got 40% of the votes and was defeated by 60,000 votes. Find the number of votes polled in favour of Ranvir.

- Ans**
- ☒ 1. 1,60,000
 - ☒ 2. 1,20,000
 - ☒ 3. 1,70,000
 - ☒ 4. 1,80,000

Question ID : 948911556
Option 1 ID : 9489112223
Option 2 ID : 9489112222
Option 3 ID : 9489112224
Option 4 ID : 9489112221
Status : Answered
Chosen Option : 4

Q.6 The exile of the ruler of which kingdom was termed as "The life has gone out of the body"?

- Ans**
- ☒ 1. Awadh
 - ☒ 2. Punjab
 - ☒ 3. Maratha lands
 - ☒ 4. Bengal

Question ID : 948911619
Option 1 ID : 9489112476
Option 2 ID : 9489112473
Option 3 ID : 9489112475
Option 4 ID : 9489112474
Status : Answered
Chosen Option : 3

Q.7 Simplify:

$$186 - 7 \times (63 - 39) + 25 \div 5$$

- Ans**
- ☒ 1. 24
 - ☒ 2. 23
 - ☒ 3. 33
 - ☒ 4. 32

Question ID : 948911544
Option 1 ID : 9489112175
Option 2 ID : 9489112174
Option 3 ID : 9489112176
Option 4 ID : 9489112173
Status : Answered
Chosen Option : 2

Q.8 Which of the following is an example of Footloose industry?

- Ans**
- ☒ 1. Jute
 - ☒ 2. Sugar
 - ☒ 3. Computer chip
 - ☒ 4. Tea

Question ID : 948911625

Option 1 ID : 9489112499

Option 2 ID : 9489112497

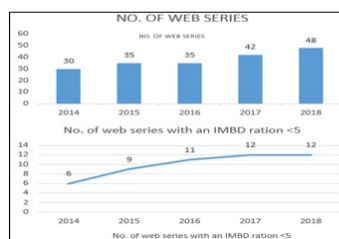
Option 3 ID : 9489112498

Option 4 ID : 9489112500

Status : Answered

Chosen Option : 3

Q.9 The following bar graph shows the number of web series released by a subscription service mobile application in various years from 2014-2018 and the line graph shows the number of web series with a rating of less than 5 stars. Find the approximate total percentage of web series with a rating 5 star and above from 2014 to 2018.



- Ans**
- ☒ 1. 74
 - ☒ 2. 71
 - ☒ 3. 75
 - ☒ 4. 72

Question ID : 9489111592

Option 1 ID : 9489116366

Option 2 ID : 9489116368

Option 3 ID : 9489116367

Option 4 ID : 9489116365

Status : Answered

Chosen Option : 1

Q.10 Which is India's first super computer?

- Ans**
- ☒ 1. Param Biochrome
 - ☒ 2. Param Yuva
 - ☒ 3. Param Padma
 - ☒ 4. Param 8000

Question ID : **948911637**
 Option 1 ID : **9489112548**
 Option 2 ID : **9489112547**
 Option 3 ID : **9489112545**
 Option 4 ID : **9489112546**
 Status : **Answered**
 Chosen Option : **4**

Q.11 Select the option that is related to the fourth term in the same way as the first term is related to the second term.

Sun : Earth : : _____ : Moon

- Ans**
- ☒ 1. Meteoroid
 - ☒ 2. Earth
 - ☒ 3. Comet
 - ☒ 4. Star

Question ID : **9489111577**
 Option 1 ID : **9489116307**
 Option 2 ID : **9489116305**
 Option 3 ID : **9489116308**
 Option 4 ID : **9489116306**
 Status : **Answered**
 Chosen Option : **3**

Q.12 What is the name of the book written by Ernest Mackay about archaeological excavations?

- Ans**
- ☒ 1. Archaeology of Mohenjo-daro
 - ☒ 2. Deeper Excavations at Mohenjo-daro
 - ☒ 3. Early Indus Civilisation
 - ☒ 4. Further Excavations at Mohenjo-daro

Question ID : **948911621**
 Option 1 ID : **9489112481**
 Option 2 ID : **9489112483**
 Option 3 ID : **9489112484**
 Option 4 ID : **9489112482**
 Status : **Answered**
 Chosen Option : **2**

Q.13 Read the given statements and conclusions carefully. Assuming that the information given in the statements is true, even if it appears to be at variance with commonly known facts, decide which of the given conclusions logically follow(s) from the statements.

Statements:

1: All chocolates are candies. 2: All candies are toffees.

Conclusions:

1: All chocolates are toffees. 2: All toffees are chocolates.

- Ans**
- ☒ 1. Only conclusion 1 follows.
 - ☐ 2. Both conclusion 1 and conclusion 2 follow.
 - ☐ 3. Only conclusion 2 follows.
 - ☐ 4. Neither conclusion 1 nor conclusion 2 follows.

Question ID : 9489111582

Option 1 ID : 9489116325

Option 2 ID : 9489116328

Option 3 ID : 9489116326

Option 4 ID : 9489116327

Status : Answered

Chosen Option : 1

Q.14 Robert Hooke discovered _____

- Ans**
- ☐ 1. Protoplasm
 - ☐ 2. Nucleus
 - ☒ 3. Cell
 - ☐ 4. Atom

Question ID : 948911614

Option 1 ID : 9489112456

Option 2 ID : 9489112455

Option 3 ID : 9489112454

Option 4 ID : 9489112453

Status : Answered

Chosen Option : 2

Q.15 If the ratio of mean and median of a certain data is 4 : 5, then find the ratio of its mean and mode.

- Ans**
- ☐ 1. 5 : 4
 - ☐ 2. 5 : 7
 - ☐ 3. 3 : 7
 - ☒ 4. 4 : 7

Question ID : 948911573

Option 1 ID : 9489112291

Option 2 ID : 9489112289

Option 3 ID : 9489112292

Option 4 ID : 9489112290

Status : Answered

Chosen Option : 4

Q.16 People with which of the following blood groups are considered as universal recipient?

- Ans
- ☒ 1. B+
 - ☒ 2. AB+
 - ☒ 3. A+
 - ☒ 4. O+

Question ID : 948911613

Option 1 ID : 9489112451

Option 2 ID : 9489112449

Option 3 ID : 9489112450

Option 4 ID : 9489112452

Status : Answered

Chosen Option : 2

Q.17 Find the sum of all the numbers between 100 and 200 which are divisible by 12.

- Ans
- ☒ 1. 1600
 - ☒ 2. 1400
 - ☒ 3. 1240
 - ☒ 4. 1200

Question ID : 948911552

Option 1 ID : 9489112207

Option 2 ID : 9489112205

Option 3 ID : 9489112208

Option 4 ID : 9489112206

Status : Answered

Chosen Option : 4

Q.18 If $\sqrt{4624} = 68$, then the value of:

$$\sqrt{46.24} + \sqrt{0.4624} + \sqrt{0.004624}$$

- Ans
- ☒ 1. 7.648
 - ☒ 2. 7.548
 - ☒ 3. 7.854
 - ☒ 4. 7.458

Question ID : 948911549

Option 1 ID : 9489112196

Option 2 ID : 9489112195

Option 3 ID : 9489112194

Option 4 ID : 9489112193

Status : Answered

Chosen Option : 2

Q.19 Which of the following Viceroy of India did take the initiative to create elected local government bodies?

- Ans
- ☒ 1. Lord Reading
 - ☒ 2. Lord Wavell
 - ☒ 3. Lord Irwin
 - ☒ 4. Lord Rippon

Question ID : 948911627

Option 1 ID : 9489112508

Option 2 ID : 9489112506

Option 3 ID : 9489112507

Option 4 ID : 9489112505

Status : Answered

Chosen Option : 4

Q.20 The train fare, bus fare and air fare between 2 places are in the ratio 5 : 8 : 12, the number of passengers travelled by them is in the ratio 3 : 4 : 5 and the total fare collected on a particular day for these modes of transportation for a single trip is ₹1,07,000. Find the total fare collected from the air passengers.

- Ans
- ☒ 1. ₹80,000
 - ☒ 2. ₹60,000
 - ☒ 3. ₹70,000
 - ☒ 4. ₹65,000

Question ID : 948911555

Option 1 ID : 9489112219

Option 2 ID : 9489112220

Option 3 ID : 9489112218

Option 4 ID : 9489112217

Status : Answered

Chosen Option : 2

Q.21 Bile is secreted by the _____.

- Ans
- ☒ 1. pancreas
 - ☒ 2. liver
 - ☒ 3. stomach
 - ☒ 4. gall bladder

Question ID : 948911612

Option 1 ID : 9489112447

Option 2 ID : 9489112448

Option 3 ID : 9489112445

Option 4 ID : 9489112446

Status : Answered

Chosen Option : 1

Q.22 Chemical formula for Lime water is _____

- Ans
- ☒ 1. CaCl_2
 - ☒ 2. CaCO_3
 - ☒ 3. Ca(OH)_2
 - ☒ 4. CaOH

Question ID : 948911615

Option 1 ID : 9489112459

Option 2 ID : 9489112457

Option 3 ID : 9489112460

Option 4 ID : 9489112458

Status : Answered

Chosen Option : 2

Q.23 Evaluate:

$$\cos 20^\circ \cos 40^\circ \cos 80^\circ$$

- Ans
- ☒ 1. $\frac{1}{2}$
 - ☒ 2. $\frac{1}{32}$
 - ☒ 3. $\frac{1}{8}$
 - ☒ 4. $\frac{1}{4}$

Question ID : 948911571

Option 1 ID : 9489112283

Option 2 ID : 9489112284

Option 3 ID : 9489112282

Option 4 ID : 9489112281

Status : Answered

Chosen Option : 3

Q.24 On which date is the Constitution Day of India celebrated?

- Ans
- ☐ 1. 14th April
 - ☐ 2. 15th August
 - ☐ 3. 26th January
 - ☒ 4. 26th November

Question ID : 948911628

Option 1 ID : 9489112511

Option 2 ID : 9489112510

Option 3 ID : 9489112509

Option 4 ID : 9489112512

Status : Answered

Chosen Option : 4

Q.25 If $1^2 + 2^2 + 3^2 + \dots + 14^2 = 1015$, then $3^2 + 6^2 + 9^2 + \dots + 42^2$ is equal to:

- Ans
- ☒ 1. 9135
 - ☐ 2. 9325
 - ☐ 3. 9235
 - ☐ 4. 9315

Question ID : 948911553

Option 1 ID : 9489112211

Option 2 ID : 9489112212

Option 3 ID : 9489112210

Option 4 ID : 9489112209

Status : Answered

Chosen Option : 1

Q.26 A, B and C can complete a job in 5 days. B, C and D can complete the same job in 10 days. C, D and A can complete the same job in 15 days and D, A and B can complete the same job in 30 days. How long A, B, C and D together will take to finish the job?

- Ans
- ☐ 1. 8 days
 - ☐ 2. $8\frac{1}{2}$ days
 - ☒ 3. $7\frac{1}{2}$ days
 - ☐ 4. 7 days

Question ID : 948911562

Option 1 ID : 9489112248

Option 2 ID : 9489112247

Option 3 ID : 9489112245

Option 4 ID : 9489112246

Status : Answered

Chosen Option : 3

Q.27 The focus of World Environment Day, 2018 was on _____

- Ans
- ☒ 1. Air Pollution
 - ☒ 2. Plastic pollution
 - ☒ 3. Water pollution
 - ☒ 4. Soil Pollution

Question ID : 948911634
Option 1 ID : 9489112535
Option 2 ID : 9489112534
Option 3 ID : 9489112533
Option 4 ID : 9489112536
Status : Answered
Chosen Option : 2

Q.28 Which African country launched the first Malaria vaccine to immunise children on the occasion of World Malaria Day?

- Ans
- ☒ 1. Kenya
 - ☒ 2. Ghana
 - ☒ 3. Nairobi
 - ☒ 4. Malawi

Question ID : 948911606
Option 1 ID : 9489112422
Option 2 ID : 9489112421
Option 3 ID : 9489112423
Option 4 ID : 9489112424
Status : Answered
Chosen Option : 3

Q.29 Simplify:

$$24 + 7.2 \div 8 - 3 \times 2.3 + 5$$

- Ans
- ☒ 1. 23
 - ☒ 2. 18
 - ☒ 3. 32
 - ☒ 4. 26

Question ID : 948911545
Option 1 ID : 9489112177
Option 2 ID : 9489112179
Option 3 ID : 9489112178
Option 4 ID : 9489112180
Status : Answered
Chosen Option : 1

Q.30 Who formed the Indian National Congress?

- Ans**
- ☒ 1. Dadabhai Naoroji
 - ☐ 2. A.O Hume
 - ☒ 3. Pherozeshah Mehta
 - ☒ 4. W C Banerjee

Question ID : 948911618

Option 1 ID : 9489112471

Option 2 ID : 9489112470

Option 3 ID : 9489112472

Option 4 ID : 9489112469

Status : Answered

Chosen Option : 2

Q.31 From the top of a cliff 25 m high, the angle of elevation of the top of a tower is found to be equal to the angle of depression of the foot of the tower. Find the height of the tower.

- Ans**
- ☒ 1. 40 m
 - ☒ 2. 60 m
 - ☒ 3. 30 m
 - ☐ 4. 50 m

Question ID : 948911570

Option 1 ID : 9489112280

Option 2 ID : 9489112278

Option 3 ID : 9489112277

Option 4 ID : 9489112279

Status : Answered

Chosen Option : 4

Q.32 What is the name of the skill development programme of the Government of India?

- Ans**
- ☒ 1. Atal Kaushal Vikas Yojana
 - ☒ 2. Mahatma Gandhi Kaushal Yojana
 - ☒ 3. National Skill Development Corporation
 - ☐ 4. Pradhan Mantri Kaushal Vikas Yojana

Question ID : 948911640

Option 1 ID : 9489112560

Option 2 ID : 9489112557

Option 3 ID : 9489112558

Option 4 ID : 9489112559

Status : Answered

Chosen Option : 4

Q.33 Who painted "In memorium", a painting dedicated to the British ladies in India during the mutiny of 1857?

- Ans
- ☐ 1. Felice Beato
 - ☐ 2. Thomas Jones Barker
 - ☐ 3. John Tenniel
 - ☒ 4. Joseph Noel Paton

Question ID : 948911620

Option 1 ID : 9489112479

Option 2 ID : 9489112477

Option 3 ID : 9489112480

Option 4 ID : 9489112478

Status : Answered

Chosen Option : 2

Q.34 If $A : B = 15 : 16$, $B : C = 8 : 25$, $C : D = 20 : 9$, then find $A : D$.

- Ans
- ☐ 1. 3 : 2
 - ☐ 2. 4 : 3
 - ☐ 3. 3 : 4
 - ☒ 4. 2 : 3

Question ID : 948911554

Option 1 ID : 9489112213

Option 2 ID : 9489112216

Option 3 ID : 9489112215

Option 4 ID : 9489112214

Status : Answered

Chosen Option : 4

Q.35 If $x^3 + y^3 = 35$, $x + y = 5$, find the value of:

$$x^4 + y^4$$

- Ans
- ☐ 1. 79
 - ☒ 2. 97
 - ☐ 3. 98
 - ☐ 4. 87

Question ID : 948911567

Option 1 ID : 9489112265

Option 2 ID : 9489112266

Option 3 ID : 9489112268

Option 4 ID : 9489112267

Status : Answered

Chosen Option : 2

Q.36 Choose the word-pair that is different from the other three.

- Ans
- ☒ 1. Lethargic : Laid back
 - ☒ 2. Melancholy : Gloomy
 - ☒ 3. Dynamic : Robust
 - ☒ 4. Negligent : Attentive

Question ID : 9489111595

Option 1 ID : 9489116380

Option 2 ID : 9489116377

Option 3 ID : 9489116379

Option 4 ID : 9489116378

Status : Answered

Chosen Option : 3

Q.37 Which of the following is a tiger reserve?

- Ans
- ☒ 1. Jim Corbett National park
 - ☒ 2. Gir Wildlife Sanctuary
 - ☒ 3. Kedarnath Wildlife Sanctuary
 - ☒ 4. Great Himalayan National park

Question ID : 948911611

Option 1 ID : 9489112443

Option 2 ID : 9489112441

Option 3 ID : 9489112444

Option 4 ID : 9489112442

Status : Answered

Chosen Option : 1

Q.38 Which is not a web browser from the following?

- Ans
- ☒ 1. Google
 - ☒ 2. Safari
 - ☒ 3. Mozilla Firefox
 - ☒ 4. Opera

Question ID : 948911638

Option 1 ID : 9489112549

Option 2 ID : 9489112551

Option 3 ID : 9489112550

Option 4 ID : 9489112552

Status : Answered

Chosen Option : 1

Q.39 Excessive curvature of eye lens leads to _____

- Ans
- ☒ 1. hypermetropia
 - ☒ 2. cataract
 - ☒ 3. colour blindness
 - ☒ 4. myopia

Question ID : 948911616

Option 1 ID : 9489112464

Option 2 ID : 9489112461

Option 3 ID : 9489112462

Option 4 ID : 9489112463

Status : Answered

Chosen Option : 1

Q.40 The mean of 150 items was found to be 45. If at the time of calculation, two items were wrongly taken as 83 and 76 instead of 38 and 46, then the correct mean is:

- Ans
- ☒ 1. 44.5
 - ☒ 2. 43.5
 - ☒ 3. 43
 - ☒ 4. 44

Question ID : 948911572

Option 1 ID : 9489112285

Option 2 ID : 9489112287

Option 3 ID : 9489112288

Option 4 ID : 9489112286

Status : Answered

Chosen Option : 1

Q.41 ABCD is a square. X is the mid-point of AB. Y is a point on BC such that $BY = \frac{1}{3}BC$. If the area of ΔBXY is equal to 300 cm^2 , find length of diagonal AC.

- Ans
- ☒ 1. $50\sqrt{2} \text{ cm}$
 - ☒ 2. $60\sqrt{2} \text{ cm}$
 - ☒ 3. 60 cm
 - ☒ 4. 50 cm

Question ID : 948911569

Option 1 ID : 9489112275

Option 2 ID : 9489112276

Option 3 ID : 9489112274

Option 4 ID : 9489112273

Status : Answered

Chosen Option : 2

Q.42 The total cost of flooring a room at ₹12.50 per m² is ₹3,675. If the breadth and length are in the ratio 2 : 3, find its length.

- Ans**
- ☒ 1. 21 m
 - ☐ 2. 15 m
 - ☐ 3. 14 m
 - ☐ 4. 18 m

Question ID : **948911564**
Option 1 ID : **9489112255**
Option 2 ID : **9489112256**
Option 3 ID : **9489112253**
Option 4 ID : **9489112254**
Status : **Answered**
Chosen Option : **1**

Q.43 Select the option that is related to the third term in the same way as the second term is related to the first term.

Cat : Feline :: Dog : ?

- Ans**
- ☐ 1. Bovine
 - ☐ 2. Equine
 - ☒ 3. Canine
 - ☐ 4. Ursine

Question ID : **9489111574**
Option 1 ID : **9489116293**
Option 2 ID : **9489116294**
Option 3 ID : **9489116295**
Option 4 ID : **9489116296**
Status : **Answered**
Chosen Option : **3**

Q.44 Find the sum of the greatest 3-digit number and the smallest 4-digit number that have 24 as their HCF.

- Ans**
- ☐ 1. 1998
 - ☒ 2. 1992
 - ☐ 3. 1996
 - ☐ 4. 1892

Question ID : **948911547**
Option 1 ID : **9489112186**
Option 2 ID : **9489112185**
Option 3 ID : **9489112187**
Option 4 ID : **9489112188**
Status : **Answered**
Chosen Option : **2**

Q.45 Which of the following is the highest peak in India?

- Ans
- ☒ 1. Kamet
 - ☒ 2. Anamudi
 - ☒ 3. Mt. Everest
 - ☒ 4. Kanchanjunga

Question ID : 948911622

Option 1 ID : 9489112486

Option 2 ID : 9489112488

Option 3 ID : 9489112485

Option 4 ID : 9489112487

Status : Answered

Chosen Option : 4

Q.46 Which session of the congress gave a call to the attainment of 'Swaraj'?

- Ans
- ☒ 1. 1904
 - ☒ 2. 1902
 - ☒ 3. 1909
 - ☒ 4. 1906

Question ID : 948911617

Option 1 ID : 9489112466

Option 2 ID : 9489112465

Option 3 ID : 9489112468

Option 4 ID : 9489112467

Status : Answered

Chosen Option : 1

Q.47 Ruhr region is the most important industrial region of _____

- Ans
- ☒ 1. France
 - ☒ 2. Germany
 - ☒ 3. Denmark
 - ☒ 4. Hungary

Question ID : 948911624

Option 1 ID : 9489112494

Option 2 ID : 9489112493

Option 3 ID : 9489112495

Option 4 ID : 9489112496

Status : Answered

Chosen Option : 3

Q.48 Who has been appointed as the Governor of the state of Telangana in Sept, 2019?

- Ans**
- ☒ 1. Tamilisai Soundararajan
 - ☐ 2. Jagdish Mukhi
 - ☐ 3. Lalji Tandon
 - ☐ 4. OP Kohli

Question ID : 948911605

Option 1 ID : 9489112419

Option 2 ID : 9489112418

Option 3 ID : 9489112417

Option 4 ID : 9489112420

Status : **Answered**

Chosen Option : 1

Q.49 Which famous author used the pen name Madhavikutty?

- Ans**
- ☐ 1. Balamani Amma
 - ☐ 2. Toru Dutt
 - ☒ 3. Kamala Das
 - ☐ 4. Nayantara Sehgal

Question ID : 948911610

Option 1 ID : 9489112439

Option 2 ID : 9489112440

Option 3 ID : 9489112437

Option 4 ID : 9489112438

Status : **Answered**

Chosen Option : 4

Q.50 Bella is taller than Shubham. Umesh is taller than Shubham but shorter than Bella. Salman is shorter than Rahul and Shubham. Shubham is taller than Rahul. Who is the shortest in the group?

- Ans**
- ☒ 1. Salman
 - ☐ 2. Umesh
 - ☐ 3. Bella
 - ☐ 4. Rahul

Question ID : 948911601

Option 1 ID : 9489116402

Option 2 ID : 9489116401

Option 3 ID : 9489116403

Option 4 ID : 9489116404

Status : **Answered**

Chosen Option : 1

Q.51 Select the option that will fill in the blank and complete the given series.

ABCD, ACEG, _____, AEIM.

- Ans ☒ 1. ADGJ
☐ 2. AFJN
☐ 3. ADIN
☐ 4. ABEG

Question ID : 9489111584

Option 1 ID : 9489116333

Option 2 ID : 9489116336

Option 3 ID : 9489116334

Option 4 ID : 9489116335

Status : Answered

Chosen Option : 1

Q.52 A, B and C can complete a job in 40 days, 60 days and 80 days respectively. All the three worked together but A left 11 days and B left 8 days before the completion of work. In how many days, the entire work will be completed?

- Ans ☐ 1. 28 days
☐ 2. 24 days
☐ 3. 30 days
☒ 4. 26 days

Question ID : 948911561

Option 1 ID : 9489112241

Option 2 ID : 9489112244

Option 3 ID : 9489112243

Option 4 ID : 9489112242

Status : Answered

Chosen Option : 4

Q.53 As of Nov 2020, who is the Secretary General of the United Nations?

- Ans ☐ 1. Kofi Annan
☐ 2. Maria Fernanda Espinosa Garcez
☐ 3. Ban ki-Moon
☒ 4. Antonio Guterres

Question ID : 948911633

Option 1 ID : 9489112532

Option 2 ID : 9489112529

Option 3 ID : 9489112530

Option 4 ID : 9489112531

Status : Answered

Chosen Option : 4

Q.54 In the Indian Constitution, from which country were the concepts of liberty, equality and fraternity adopted?

- Ans
- ☒ 1. Britain
 - ☒ 2. France
 - ☒ 3. USSR
 - ☒ 4. Japan

Question ID : 948911629

Option 1 ID : 9489112514

Option 2 ID : 9489112515

Option 3 ID : 9489112513

Option 4 ID : 9489112516

Status : Answered

Chosen Option : 2

Q.55 Name India's first Superfast train.

- Ans
- ☒ 1. Deccan Queen
 - ☒ 2. Durgam
 - ☒ 3. Shatabdi
 - ☒ 4. Rajdhani Express

Question ID : 948911641

Option 1 ID : 9489112564

Option 2 ID : 9489112562

Option 3 ID : 9489112561

Option 4 ID : 9489112563

Status : Answered

Chosen Option : 1

Q.56 Simplify:

$$62 \div 5 - \left(\frac{8}{9} \times \frac{18}{7} \right) \times \frac{7}{5} + \frac{5}{4} \times \frac{16}{25}$$

- Ans
- ☒ 1. 12
 - ☒ 2. 15
 - ☒ 3. 5
 - ☒ 4. 10

Question ID : 948911546

Option 1 ID : 9489112181

Option 2 ID : 9489112182

Option 3 ID : 9489112183

Option 4 ID : 9489112184

Status : Answered

Chosen Option : 4

Q.57 There are five people A, B, C, D and E at a party, among whom there are two couples. They are employed as a teacher, a doctor, a lawyer, an accountant and an engineer, though not in the same order. The engineer is married to the teacher and C is the unmarried lawyer. D is an accountant. The teacher B is a female whose female friend is the accountant. Find which of the following could be true.

- Ans**
- ☒ 1. E is a teacher.
 - ☒ 2. A is an engineer.
 - ☒ 3. D is a male.
 - ☒ 4. B is a doctor.

Question ID : 9489111580

Option 1 ID : 9489116320

Option 2 ID : 9489116318

Option 3 ID : 9489116317

Option 4 ID : 9489116319

Status : Answered

Chosen Option : 2

Q.58 With the abdication of the throne by the Japanese Emperor, Akihito, the new Imperial era in Japan is known as _____.

- Ans**
- ☒ 1. Shōwa
 - ☒ 2. Reiwa
 - ☒ 3. Edo
 - ☒ 4. Heisei

Question ID : 948911607

Option 1 ID : 9489112428

Option 2 ID : 9489112426

Option 3 ID : 9489112427

Option 4 ID : 9489112425

Status : Answered

Chosen Option : 4

Q.59 Ram is the brother of Shyam and Mahesh is the father of Ram. Jagat is the brother of Priya and Priya is the daughter of Shyam. How is Mahesh related to Jagat?

- Ans**
- ☒ 1. Uncle
 - ☒ 2. Brother
 - ☒ 3. Father
 - ☒ 4. Grandfather

Question ID : 9489111602

Option 1 ID : 9489116405

Option 2 ID : 9489116408

Option 3 ID : 9489116407

Option 4 ID : 9489116406

Status : Answered

Chosen Option : 4

Q.60 When was the Sanchi Stupa declared a world heritage site by UNESCO?

- Ans**
- ☒ 1. 1990
 - ☒ 2. 1987
 - ☒ 3. 1989
 - ☒ 4. 1988

Question ID : 948911608

Option 1 ID : 9489112432

Option 2 ID : 9489112431

Option 3 ID : 9489112430

Option 4 ID : 9489112429

Status : Answered

Chosen Option : 4

Q.61 In Aug 2020, who was selected as the next Chairman of Steel Authority of India Limited?

- Ans**
- ☒ 1. Saraswati Prasad
 - ☒ 2. Soma Mondal
 - ☒ 3. Dr. G Vishwakarma
 - ☒ 4. Sunil Kumar

Question ID : 948911639

Option 1 ID : 9489112555

Option 2 ID : 9489112553

Option 3 ID : 9489112556

Option 4 ID : 9489112554

Status : Answered

Chosen Option : 4

Q.62 Seven chocolates A, B, C, D, E, F and G are bought at different costs between ₹40 and ₹50 (excluding 40 and 50) but not necessarily in the same order. The cost of chocolate C is five less than that of chocolate E. The cost of the chocolate A is a prime number. The cost of chocolate F is two more than that of chocolate A. The cost of chocolate F is more than that of chocolate E. The cost of chocolate D is an odd number. The cost of chocolate G is three more than the cost of chocolate D. None of the chocolates costs ₹44. The cost of chocolate B is an even number. Which of the following chocolates is costlier than E?

- Ans**
- ☒ 1. C
 - ☒ 2. B
 - ☒ 3. G
 - ☒ 4. D

Question ID : 948911600

Option 1 ID : 9489116397

Option 2 ID : 9489116398

Option 3 ID : 9489116400

Option 4 ID : 9489116399

Status : Answered

Chosen Option : 3

Q.63 If '@' indicates either '+' or '×'; what will be the minimum value of '1@2@3@4@5'?

(Note: We have a choice to replace each of the four @ signs in the expression by either '+' or '×' operation)

- Ans
- ✓ 1. 14
 - ✗ 2. 12
 - ✗ 3. 15
 - ✗ 4. 13

Question ID : 9489111585

Option 1 ID : 9489116338

Option 2 ID : 9489116340

Option 3 ID : 9489116337

Option 4 ID : 9489116339

Status : Answered

Chosen Option : 1

Q.64 If $2x + 5y = 12$, $xy = 2$, find the value of:

$$8x^3 + 125y^3$$

- Ans
- ✗ 1. 1018
 - ✗ 2. 1208
 - ✓ 3. 1008
 - ✗ 4. 1028

Question ID : 948911566

Option 1 ID : 9489112262

Option 2 ID : 9489112264

Option 3 ID : 9489112261

Option 4 ID : 9489112263

Status : Answered

Chosen Option : 3

Q.65 Thumba was chosen as the ideal site for rocket launch due to the presence of _____

- Ans
- ✗ 1. Geomagnetic jets
 - ✓ 2. Equatorial electrojets
 - ✗ 3. Magna jets
 - ✗ 4. Electro magna jets

Question ID : 948911630

Option 1 ID : 9489112517

Option 2 ID : 9489112520

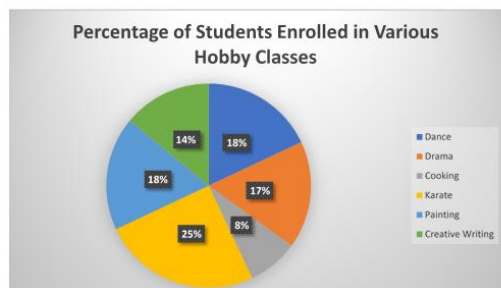
Option 3 ID : 9489112518

Option 4 ID : 9489112519

Status : Answered

Chosen Option : 1

- Q.66** The following pie-chart shows the percentage of students of a metro city enrolled in various hobby classes during summer vacation in 2018. If the total number of students is 3500, find the total number of students enrolled in karate, cooking and creative writing.



- Ans**
- ☒ 1. 1605
 - ☒ 2. 1665
 - ☒ 3. 1650
 - ☒ 4. 1645

Question ID : **9489111591**

Option 1 ID : **9489116361**

Option 2 ID : **9489116362**

Option 3 ID : **9489116364**

Option 4 ID : **9489116363**

Status : **Answered**

Chosen Option : **4**

- Q.67** HTTP stands for _____

- Ans**
- ☒ 1. Hyper Text Transfer Protocol
 - ☒ 2. Hyper Test Transport Protocol
 - ☒ 3. Hyper Text Test Protocol
 - ☒ 4. Hyper Text Tool Protocol

Question ID : **948911636**

Option 1 ID : **9489112541**

Option 2 ID : **9489112544**

Option 3 ID : **9489112543**

Option 4 ID : **9489112542**

Status : **Answered**

Chosen Option : **1**

Q.68 To create Scientific temperament, innovation amongst the Indian students, Central Government started an ATL lab.
What is the full form of ATL?

- Ans
- ☒ 1. Atal Tinkering Lab
 - ☐ 2. Applied Techno Lab
 - ☐ 3. Alternate Technique Lab
 - ☐ 4. Atal Technology Lab

Question ID : **948911631**
Option 1 ID : **9489112523**
Option 2 ID : **9489112524**
Option 3 ID : **9489112522**
Option 4 ID : **9489112521**
Status : **Answered**
Chosen Option : **1**

Q.69 A 2 m deep and 21 m wide river is flowing at the rate of 5 km/h. How many kilolitres of water will fall into the sea in 10 min?

- Ans
- ☒ 1. 35000 kl
 - ☐ 2. 3500 kl
 - ☐ 3. 350 kl
 - ☐ 4. 33000 kl

Question ID : **948911565**
Option 1 ID : **9489112257**
Option 2 ID : **9489112260**
Option 3 ID : **9489112259**
Option 4 ID : **9489112258**
Status : **Answered**
Chosen Option : **1**

Q.70 If 'a*b' means 'a is the brother of b', 'a#b' means 'a is the father of b' and 'aSb' means 'a is the wife of b', then which of the following relationships means 'r is the son of p'?

- Ans
- ☐ 1. p#qSr
 - ☒ 2. pSq#r
 - ☐ 3. p*q*r
 - ☐ 4. p*q#r

Question ID : **9489111576**
Option 1 ID : **9489116302**
Option 2 ID : **9489116301**
Option 3 ID : **9489116304**
Option 4 ID : **9489116303**
Status : **Answered**
Chosen Option : **2**

Q.71 Which country has the most successful cooperative farming?

- Ans
- ☒ 1. Denmark
 - ☐ 2. Norway
 - ☐ 3. Sweden
 - ☐ 4. Finland

Question ID : 948911623

Option 1 ID : 9489112492

Option 2 ID : 9489112490

Option 3 ID : 9489112489

Option 4 ID : 9489112491

Status : Answered

Chosen Option : 2

Q.72 The side of an equilateral triangle ABC is 28 cm. Find the side of another equilateral triangle PQR whose area is 16 times the area of triangle ABC.

- Ans
- ☐ 1. 56 cm
 - ☐ 2. 102 cm
 - ☒ 3. 112 cm
 - ☐ 4. 122 cm

Question ID : 948911568

Option 1 ID : 9489112272

Option 2 ID : 9489112270

Option 3 ID : 9489112269

Option 4 ID : 9489112271

Status : Answered

Chosen Option : 3

Q.73 Find the value of:

$$\sqrt{150} - \sqrt{54} - \sqrt{24}$$

- Ans
- ☐ 1. 1
 - ☐ 2. 72
 - ☒ 3. 0
 - ☐ 4. 75

Question ID : 948911551

Option 1 ID : 9489112203

Option 2 ID : 9489112202

Option 3 ID : 9489112201

Option 4 ID : 9489112204

Status : Answered

Chosen Option : 3

Q.74 Which launch vehicle was used to launch Chandrayaan-2?

- Ans
- ☒ 1. ASLV
 - ☒ 2. PSLV-C46
 - ☒ 3. GSLV MK-II
 - ☒ 4. GSLV MK-III-M1

Question ID : 948911632

Option 1 ID : 9489112527

Option 2 ID : 9489112525

Option 3 ID : 9489112526

Option 4 ID : 9489112528

Status : Answered

Chosen Option : 3

Q.75 The cost price of 8 tables is equal to the selling price of 5 tables. Find the percentage gain.

- Ans
- ☒ 1. 40 %
 - ☒ 2. 45 %
 - ☒ 3. 60 %
 - ☒ 4. 30 %

Question ID : 948911560

Option 1 ID : 9489112238

Option 2 ID : 9489112239

Option 3 ID : 9489112237

Option 4 ID : 9489112240

Status : Answered

Chosen Option : 3

Q.76 A train leaves Bangalore railway station at a speed of 80 km/h for Mumbai. After 1 h another train leaves Bangalore railway station for Mumbai. at a speed of 100 km/h. How many hours, will the second train take to meet the first train?

- Ans
- ☒ 1. 5 h
 - ☒ 2. 3 h
 - ☒ 3. 6 h
 - ☒ 4. 4 h

Question ID : 948911563

Option 1 ID : 9489112251

Option 2 ID : 9489112249

Option 3 ID : 9489112252

Option 4 ID : 9489112250

Status : Answered

Chosen Option : 4

Q.77 The sum of and the difference between the LCM and HCF of two numbers are 369 and 351 respectively. If one number is 72, find the other number.

- Ans**
- ☒ 1. 85
 - ☒ 2. 90
 - ☒ 3. 45
 - ☒ 4. 75

Question ID : 948911548

Option 1 ID : 9489112191

Option 2 ID : 9489112189

Option 3 ID : 9489112190

Option 4 ID : 9489112192

Status : Answered

Chosen Option : 3

Q.78 In an examination, 55% candidates passed in English, 35% candidates passed In mathematics and 20% candidates passed in both the subjects. If the total number of failed candidates in both the subjects is 1200, then find how many candidates took the exam.

- Ans**
- ☒ 1. 2800
 - ☒ 2. 1200
 - ☒ 3. 4000
 - ☒ 4. 3000

Question ID : 948911557

Option 1 ID : 9489112228

Option 2 ID : 9489112225

Option 3 ID : 9489112227

Option 4 ID : 9489112226

Status : Answered

Chosen Option : 3

Q.79 A sum of money amounts to ₹12,100 in 2 years and ₹13,310 in 3 years, when compounded annually. Find the rate of interest.

- Ans**
- ☒ 1. 9%
 - ☒ 2. 12%
 - ☒ 3. 8%
 - ☒ 4. 10%

Question ID : 948911559

Option 1 ID : 9489112234

Option 2 ID : 9489112233

Option 3 ID : 9489112235

Option 4 ID : 9489112236

Status : Answered

Chosen Option : 4

Q.80 What kind of a tax is GST?

- Ans**
- ☒ 1. Indirect Tax
 - ☐ 2. Value Added Tax
 - ☐ 3. Income tax
 - ☐ 4. Direct Tax

Question ID : 948911642

Option 1 ID : 9489112567

Option 2 ID : 9489112565

Option 3 ID : 9489112568

Option 4 ID : 9489112566

Status : Answered

Chosen Option : 2

Q.81 Select the letter-cluster from among the given options that can replace the question mark (?) in the following series.

KABL, MCDN, OEFP, QGHR, ?

- Ans**
- ☐ 1. UQRV
 - ☐ 2. YBAZ
 - ☐ 3. WSTX
 - ☒ 4. SIJT

Question ID : 9489111599

Option 1 ID : 9489116396

Option 2 ID : 9489116393

Option 3 ID : 9489116394

Option 4 ID : 9489116395

Status : Answered

Chosen Option : 4

Q.82 A sum of ₹5,000 was lent partly at 5% simple interest per annum and partly at 10% simple interest per annum. Total interest received after 5 years was ₹1,750. Find the amount of money that was lent out at 10% simple interest per annum.

- Ans**
- ☐ 1. ₹3,000
 - ☐ 2. ₹3,500
 - ☒ 3. ₹2,000
 - ☐ 4. ₹2,500

Question ID : 948911558

Option 1 ID : 9489112230

Option 2 ID : 9489112232

Option 3 ID : 9489112229

Option 4 ID : 9489112231

Status : Answered

Chosen Option : 3

Q.83 Name the female wrestler recommended by Wrestling Federation of India for the prestigious 2020 Rajiv Gandhi Khel Ratna Award.

- Ans**
- ☒ 1. Babita Kumari
 - ☒ 2. Kavita Devi
 - ☒ 3. Sakshi Malik
 - ☒ 4. Vinesh Phogat

Question ID : 948911604

Option 1 ID : 9489112414

Option 2 ID : 9489112416

Option 3 ID : 9489112415

Option 4 ID : 9489112413

Status : Answered

Chosen Option : 4

Q.84 One of the most important teachers of Chishti Silsila, Shaikh Moinuddin Chishti dargah is located at _____.

- Ans**
- ☒ 1. Delhi
 - ☒ 2. Fatehpur Sikri
 - ☒ 3. Kashmir
 - ☒ 4. Ajmer

Question ID : 948911609

Option 1 ID : 9489112433

Option 2 ID : 9489112434

Option 3 ID : 9489112435

Option 4 ID : 9489112436

Status : Answered

Chosen Option : 4

Q.85 Four pairs of numbers have been given, out of which three are alike in some manner and one is different. Select the pair that is different from the rest.

- Ans**
- ☒ 1. 66, 6
 - ☒ 2. 34, 3
 - ☒ 3. 54, 5
 - ☒ 4. 24, 2

Question ID : 9489111594

Option 1 ID : 9489116374

Option 2 ID : 9489116375

Option 3 ID : 9489116373

Option 4 ID : 9489116376

Status : Answered

Chosen Option : 1

Q.86 Read the given statements and conclusions carefully. Assuming that the information given in the statements is true, even if it appears to be at variance with commonly known facts, decide which of the given conclusions logically follow(s) from the statements.

Statements:





1: Some dolls are plants.

2: Some plants are books.

Conclusions:

1: Some dolls are books.

2: No book is a plant.

- Ans**  1. Only conclusion 2 follows.
-  2. Neither conclusion 1 nor conclusion 2 follows.
-  3. Both conclusion 1 and conclusion 2 follow.
-  4. Only conclusion 1 follows.

Question ID : 9489111578

Option 1 ID : 9489116310

Option 2 ID : 9489116312

Option 3 ID : 9489116311

Option 4 ID : 9489116309

Status : Answered

Chosen Option : 2

Q.87 If 'p + q' implies 'p - q', 'p - q' implies 'p × q', 'p × q' implies 'p ÷ q' and 'p ÷ q' implies 'p + q', then find the value of $25 + 48 \times 6 \div 12 - 2$.

- Ans**  1. 41
-  2. 52
-  3. 17
-  4. 39

Question ID : 9489111587

Option 1 ID : 9489116345

Option 2 ID : 9489116346

Option 3 ID : 9489116347

Option 4 ID : 9489116348

Status : Answered

Chosen Option : 1

Q.88 Select the number from among the given options that can replace the question mark (?) in the following series.

48, 32, 16, ?

- Ans**
- ☒ 1. 13
 - ☒ 2. -9
 - ☒ 3. 0
 - ☒ 4. 12

Question ID : **9489111588**

Option 1 ID : **9489116352**

Option 2 ID : **9489116350**

Option 3 ID : **9489116351**

Option 4 ID : **9489116349**

Status : **Answered**

Chosen Option : **3**

Q.89 Select the ordered pair of statements which are logically consistent with the main statement.

Main Statement:

Whenever Sakshi hears it's someone's birthday, she orders a cake.

A. Sakshi heard of someone's birthday.

B. Sakshi did not hear of someone's birthday.

C. Sakshi ordered a cake.

D. Sakshi did not order a cake.

- Ans**
- ☒ 1. AB
 - ☒ 2. DB
 - ☒ 3. CA
 - ☒ 4. BD

Question ID : **9489111597**

Option 1 ID : **9489116388**

Option 2 ID : **9489116386**

Option 3 ID : **9489116385**

Option 4 ID : **9489116387**

Status : **Answered**

Chosen Option : **3**

Q.90 In a certain code language, 'get up and go' is written as 'fa ka la ju', 'jump up and dance' is written as 'lu la hu fa' 'go there jump here' is written as 'na lu fu ka' and 'and there you come' is written as 'na lu ya la'. How will 'get up go there' be written as in that language?

- Ans**
- ☒ 1. fa ju ka na
 - ☐ 2. fa ju la ka
 - ☐ 3. fa ya ka na
 - ☐ 4. fu ya ka na

Question ID : 9489111579

Option 1 ID : 9489116314

Option 2 ID : 9489116313

Option 3 ID : 9489116315

Option 4 ID : 9489116316

Status : Answered

Chosen Option : 1

Q.91 You are given a question and two statements. Identify which of the statements is/are sufficient to answer the question.

Question:

When is Yuvi's wedding anniversary?

Statements:

1: On 7th day of a month.

2: The month has 29 days only in a leap year.

- Ans**
- ☐ 1.
 - Both statement 1 and statement 2 are sufficient independently.
 - ☐ 2.
 - Only statement 1 is sufficient but statement 2 is not sufficient.
 - ☒ 3. Both statement 1 and statement 2 are sufficient together.
 - ☐ 4.
 - Only statement 2 is sufficient but statement 1 is not sufficient

Question ID : 9489111596

Option 1 ID : 9489116383

Option 2 ID : 9489116381

Option 3 ID : 9489116384

Option 4 ID : 9489116382

Status : Answered

Chosen Option : 3

Q.92 Identify the number from among the given options that does NOT belong to the following series.

243, 281, 172, 230, 92, 41, 16

- Ans**
1. 16
 2. 281
 3. 230
 4. 41

Note: For this question, discrepancy is found in question/answer. So, This question is ignored for all candidates.

Question ID : 9489111593

Option 1 ID : 9489116372

Option 2 ID : 9489116369

Option 3 ID : 9489116371

Option 4 ID : 9489116370

Status : Answered

Chosen Option : 2

Q.93 Two college friends A and B who met after a couple of years had a doubt about the birthday of their common friend C.

According to A, C's birthday is after 12th March but before 15th March. But B remembered that C's birthday is after 13th March but before 17th March. Assuming both of them to be correct, on which date is C's birthday?

- Ans**
- ☒ 1. 16th March
 - ☒ 2. 14th March
 - ☒ 3. 13th March
 - ☒ 4. 15th March

Question ID : 9489111603

Option 1 ID : 9489116412

Option 2 ID : 9489116410

Option 3 ID : 9489116409

Option 4 ID : 9489116411

Status : Answered

Chosen Option : 2

Q.94 Out of the four words which are related to books listed below, three are alike in some manner and one is different. Select the odd one.

- Ans**
- ☒ 1. Foreword
 - ☒ 2. Preface
 - ☒ 3. Edition
 - ☒ 4. Index

Question ID : 9489111575

Option 1 ID : 9489116300

Option 2 ID : 9489116299

Option 3 ID : 9489116298

Option 4 ID : 9489116297

Status : Answered

Chosen Option : 4

Q.95 The following table shows the cost price of five different goods and their selling prices by two different shopkeepers. Identify the shopkeeper who made more profit (in total) and his/her percentage profit.

Goods	Cost Price	Selling price by Shopkeeper X	Selling price by Shopkeeper y
A	173	180	175
B	219	220	225
C	350	360	357
D	481	490	500
E	227	250	235

- Ans**
- ✓ 1. Shopkeeper X, 3.45%
 - ✗ 2. Shopkeeper Y, 2.90%
 - ✗ 3. Shopkeeper Y, 3.45%
 - ✗ 4. Shopkeeper X, 2.90%

Question ID : 9489111590

Option 1 ID : 9489116359

Option 2 ID : 9489116358

Option 3 ID : 9489116360

Option 4 ID : 9489116357

Status : Answered

Chosen Option : 1

Q.96 Select the number cluster from among the given options that can replace the question mark (?) in the following series.

2-4-6-8; 3-6-9-12; 4-8-12-16; ?

- Ans**
- ✓ 1. 5-10-15-20
 - ✗ 2. 5-6-7-8
 - ✗ 3. 5-7-9-11
 - ✗ 4. 5-8-11-15

Question ID : 9489111583

Option 1 ID : 9489116332

Option 2 ID : 9489116329

Option 3 ID : 9489116330

Option 4 ID : 9489116331

Status : Answered

Chosen Option : 1

Q.97 Select the number from among the given options that can replace the question mark (?) in the following series.

3, 16, 125, ?

- Ans**
- ✗ 1. 4008
 - ✓ 2. 1296
 - ✗ 3. 1008
 - ✗ 4. 4096

Question ID : 9489111586

Option 1 ID : 9489116342

Option 2 ID : 9489116343

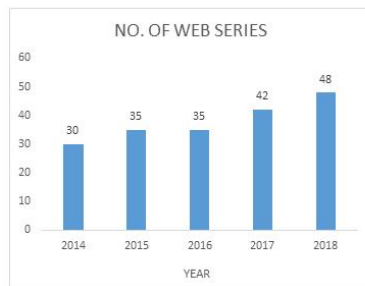
Option 3 ID : 9489116341

Option 4 ID : 9489116344

Status : Answered

Chosen Option : 2

Q.98 The following bar graph shows the number of web series released by a subscription service mobile application in various years from 2014-2018. What is the average number of web series released by the subscription service mobile application from 2015 to 2018?



- Ans**
- ✓ 1. 40
 - ✗ 2. 39
 - ✗ 3. 41
 - ✗ 4. 38

Question ID : 9489111589

Option 1 ID : 9489116354

Option 2 ID : 9489116355

Option 3 ID : 9489116356

Option 4 ID : 9489116353

Status : Answered

Chosen Option : 1

Q.99 You are given 3 sets of arguments, each containing three sentences. Select the set(s) in which the third statement is a logical conclusion of the first two statements.

A. (i) All shops are showrooms.

(ii) No showroom is a mall.

(iii) All shops are not malls.

B. (i) No Japanese can dance.

(ii) All Americans are books.

(iii) Americans and Japanese can dance.

C. (i) No P is Q.

(ii) No Q is R.

(iii) No P is R.

- Ans**
- ✗ 1. Only C
 - ✗ 2. Only B
 - ✓ 3. Only A
 - ✗ 4. Only B and C

Question ID : 9489111598

Option 1 ID : 9489116390

Option 2 ID : 9489116389

Option 3 ID : 9489116392

Option 4 ID : 9489116391

Status : Answered

Chosen Option : 1

Q.100 Read the given statements and conclusions carefully and decide which of the conclusions logically follow(s) from the statements.

Statements:





In a T-20 cricket match, total wickets taken by a team were 9. Out of these, 6 wickets were taken by spinners.

Conclusions:

A: 80% of the bowlers in the team were spinners.

B: The opening bowlers of the team were spinners.

Ans

-  1. Only Conclusion A follows.
-  2. Only Conclusion B follows.
-  3. Both Conclusion A and Conclusion B follow.
-  4. Neither Conclusion A nor Conclusion B follows.

Question ID : **9489111581**

Option 1 ID : **9489116321**

Option 2 ID : **9489116322**

Option 3 ID : **9489116323**

Option 4 ID : **9489116324**

Status : **Answered**

Chosen Option : **4**