

Constable GD in CAPFs and SSF Rifleman GD in AR and Sepoy in NCB Examination 2025

Exam Date	06/02/2025
Exam Time	12:00 PM - 1:00 PM
Subject	Constable GD Examination 2025

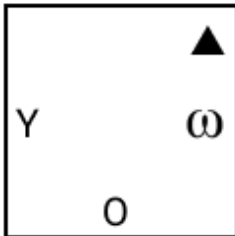
Section : Part-A-General Intelligence and Reasoning

Q.1 Select the figure from among the given options that can replace the question mark (?) in the following series.

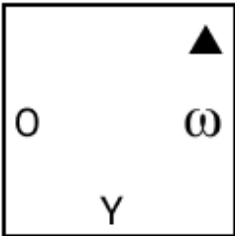
●	▲	■	★	?
○	ω	Y	○	
Y	○	ω	Y	
	Y	○	ω	

Ans

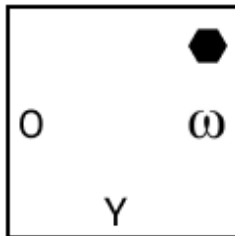
✗ 1.



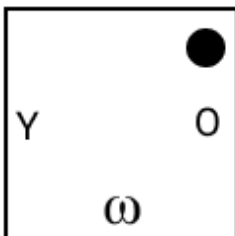
✗ 2.



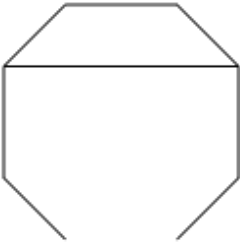
✓ 3.



✗ 4.



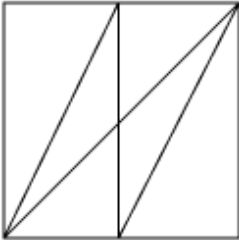
Q.2 Select the option figure in which the given figure (X) is embedded as its part (rotation is NOT allowed).



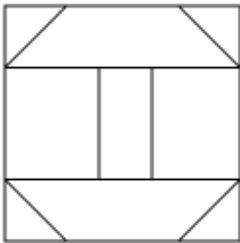
(X)

Ans

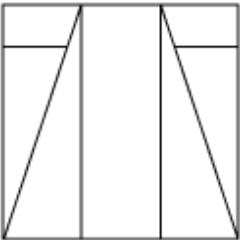
✗ 1.



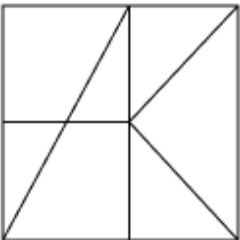
✓ 2.



✗ 3.



✗ 4.



Q.3 Eight people are sitting in two parallel rows containing 4 people each in such a way that there is equal distance between adjacent persons.

In row 1 – L, M, N and O are seated and all of them are facing south.

In row 2 – P, Q, R and S are seated and all of them are facing north.

Thus, each person faces another person from the other row. Only one person sits between N and M. Only one person sits between Q and P. The one facing P sits at the second position from the left of the line. N sits to the immediate left of O and faces S. O does not face P.

Which of the following represents both people facing each other?

Ans ✗ 1. L and S

✓ 2. L and P

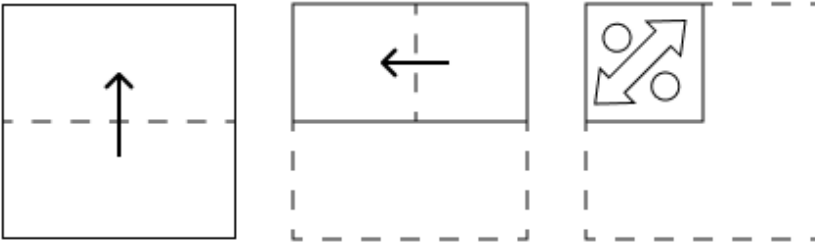
✗ 3. M and S

✗ 4. N and R

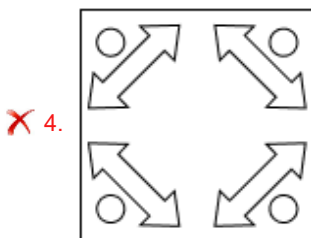
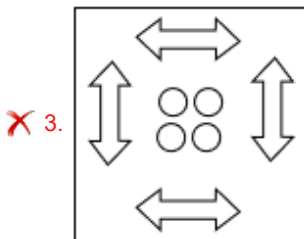
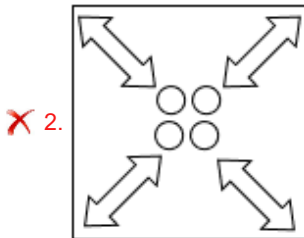
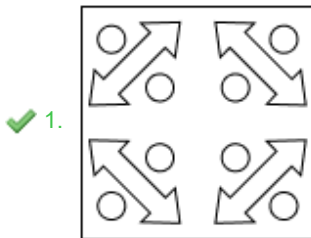
Q.4 Based on the English alphabetical order, three of the following four letter-clusters are alike in a certain way and thus form a group. Which letter-cluster DOES NOT belong to that group? (Note: The odd one out is not based on the number of consonants/vowels or their position in the letter-cluster.)

- Ans**
- 1. EDH
 - 2. TTW
 - 3. QPT
 - 4. ZYC

Q.5 A paper is folded and cut as shown below. How will it appear when unfolded?



Ans



Q.6 What should come in place of the question mark (?) in the given series?

101 111 122 134 147 ?

- Ans**
- 1. 158
 - 2. 161
 - 3. 151
 - 4. 156

Q.7 'NEYG' is related to 'PHBI' in a certain way based on the English alphabetical order. In the same way, 'LAVS' is related to 'NDYU'. To which of the following is 'HCTB' related, following the same logic?

- Ans
- 1. JFWD
 - 2. HEVB
 - 3. GEXD
 - 4. HGVC

Q.8 Find the correct alternative that when filled in the blanks in the same sequence will make the series logically complete.

_DGIK_JLNJ_OQMP_TPS_

- Ans
- 1. HGMRU
 - 2. HFMSU
 - 3. EGNRV
 - 4. EFNSV

Q.9 In a certain code language, 'are you busy' is coded as 'mg rc tp' and 'you need rest' is coded as 'rc as bo'. How is 'you' coded in the given language?

- Ans
- 1. rc
 - 2. as
 - 3. mg
 - 4. bo

Q.10 The position(s) of how many letters will remain unchanged if each of the letters in the word SYMPHONY is arranged in the English alphabetical order?

- Ans
- 1. Four
 - 2. Two
 - 3. Three
 - 4. One

Q.11 What will come in the place of the question mark (?) in the following equation, if '+' and 'x' are interchanged and '-' and '÷' are interchanged?

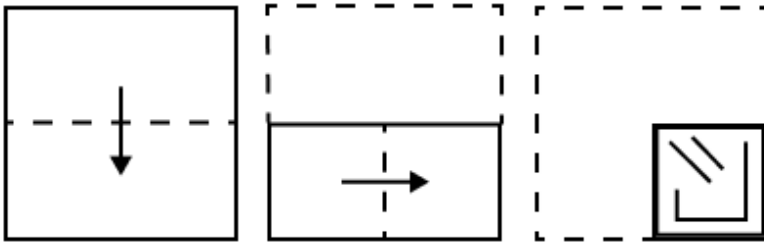
$$18 \div 90 - 5 \times 11 + 2 = ?$$

- Ans
- 1. 18
 - 2. 15
 - 3. 22
 - 4. 27

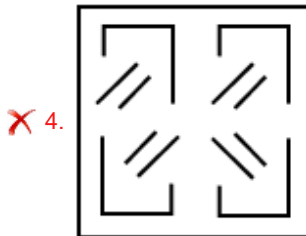
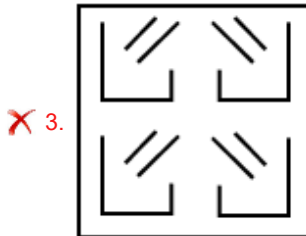
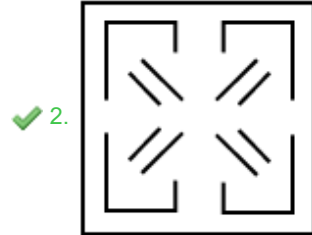
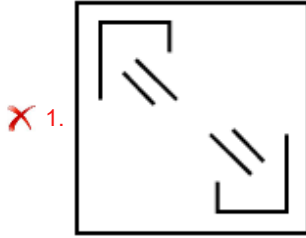
Q.12 In a certain code language, 'get the book' is coded as 'as pg nk' and 'book is good' is coded as 'nk ml bt'. How is 'book' coded in the given language?

- Ans
- 1. pg
 - 2. as
 - 3. bt
 - 4. nk

Q.13 A paper is folded and punched as shown below. How will it appear when unfolded?



Ans



Q.14 What should come in place of the question mark (?) in the given series?

35 43 53 65 79 ?

Ans ✓ 1. 95

✗ 2. 112

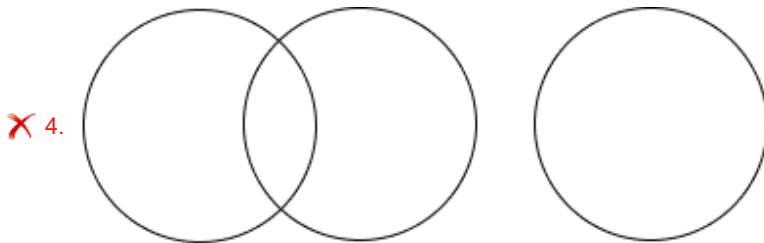
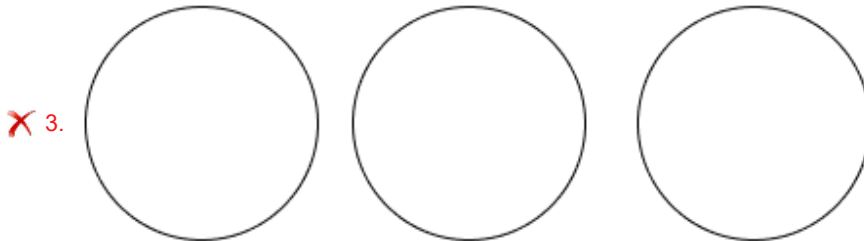
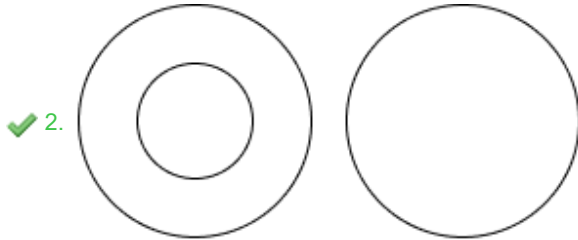
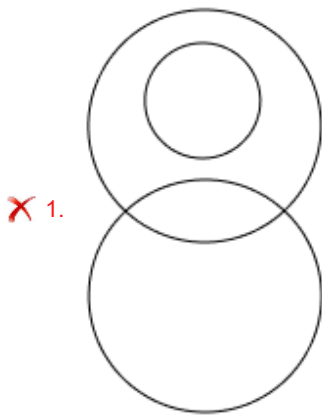
✗ 3. 103

✗ 4. 107

Q.15 Select the Venn diagram that best illustrates the relationship among the following classes.

Mango, Fruit, Cauliflower

Ans



Q.16 Six friends, E, F, G, X, Y and Z, are sitting in a row facing north (but not necessarily in the same order) . No one sits to the left of F. Only four people sit between F and E. Only three people sit to the left of Z. X sits to the immediate left of G. How many people sit between Y and F?

Ans ✓ 1. Three

✗ 2. One

✗ 3. Four

✗ 4. Two

Q.17 In a certain code language,

'A + B' means 'A is the mother of B',
 'A - B' means 'A is the brother of B',
 'A × B' means 'A is the wife of B' and
 'A ÷ B' means 'A is the father of B'.

Based on the above, how is S related to U if 'Q × R - S ÷ T + U'?

Ans ✗ 1. Daughter

✗ 2. Mother's husband

✓ 3. Mother's father

✗ 4. Brother's wife

Q.18 What should come in place of the question mark (?) in the given series based on the English alphabetical order?

DKC ZGY ? RYQ NUM

- Ans
- 1. VCV
 - 2. VDU
 - 3. UDU
 - 4. VCU

Q.19 SBFU is related to VDHX in a certain way based on the English alphabetical order. In the same way, HOXA is related to KQZD. To which of the given options is ZEPI related, following the same logic?

- Ans
- 1. CGRL
 - 2. DHSN
 - 3. DISK
 - 4. BHTM

Q.20 Read the given statements and conclusions carefully. Assuming that the information given in the statements is true, even if it appears to be at variance with commonly known facts, decide which of the given conclusions logically follow(s) from the statements.

Statements:

All balms are ears.

All balms are legs.

Some legs are fingers.

Conclusions:

(I): Some fingers are balms.

(II): Some legs are ears.

- Ans
- 1. Only conclusion (II) follows.
 - 2. Only conclusion (I) follows.
 - 3. Neither conclusion (I) nor (II) follows.
 - 4. Both conclusions (I) and (II) follow.

Section : Part-B-General Knowledge and General awareness

Q.1 Which of the following best describes the term 'Public Debt'?

- Ans
- 1. The total amount of money owed by the citizens of a country
 - 2. The total investments made by the government
 - 3. The total revenue generated by the government
 - 4. The total amount of money owed by the government to its creditors

Q.2 According to the Constitution of India, who is considered as a real executive of a state?

- Ans
- 1. Deputy Chief Minister
 - 2. Chief Minister
 - 3. Speaker
 - 4. Governor

Q.3 Which of the following is a popular dance form of Punjab?

- Ans
- 1. Garba
 - 2. Chhau
 - 3. Ghumar
 - 4. Bhangra

Q.4 The Directive Principles of State Policy are mentioned in Articles ____ of the Constitution.

Ans 1. 36-51

2. 45-55

3. 40-60

4. 35-45

Q.5 Sangeet Natak Akademi, the apex body in the field of performing arts in the country, was set up in which year for the preservation and promotion of various forms of Indian music, dance and drama?

Ans 1. 1961

2. 1963

3. 1949

4. 1953

Q.6 What was the targeted growth rate of the Second Five-Year Plan?

Ans 1. 5.6%

2. 3.6%

3. 4.5%

4. 5.2%

Q.7 Whose name was recorded in the Guinness Book of World Records for recording 28 songs in one day in 1993?

Ans 1. Udit Narayan

2. Krishnakumar Kunnath

3. Sonu Nigam

4. Kumar Sanu

Q.8 According to the National Multidimensional Poverty Index 2023, which union territory has the least percentage of population who are multidimensionally poor?

Ans 1. Delhi

2. Lakshadweep

3. Puducherry

4. Chandigarh

Q.9 K Chandrasekhar Rao, who suffered a significant setback in the Telangana elections in 2023, belongs to which of the following political parties?

Ans 1. Bharatiya Janata Party (BJP)

2. Bharat Rashtra Samithi (BRS)

3. Telugu Desam Party (TDP)

4. Indian National Congress (INC)

Q.10 Who became the highest wicket-taker in the ICC Men's Cricket World Cup 2023 ODI tournament?

Ans 1. Mohammed Siraj

2. Kuldeep Yadav

3. Jasprit Bumrah

4. Mohammed Shami

Q.11 Which movement, led by Swami Dayananda Saraswati, advocated for a return to the teachings of the Vedas?

- Ans
- 1. Prarthana Samaj
 - 2. Arya Samaj
 - 3. Aligarh Movement
 - 4. Brahmo Samaj

Q.12 'Cheiraoba' festival is the New Year festival celebrated in the state of _____.

- Ans
- 1. Karnataka
 - 2. Goa
 - 3. Manipur
 - 4. Uttarakhand

Q.13 What is the chemical name of the substance that forms the tooth enamel in the human body?

- Ans
- 1. Calcium
 - 2. Sodium
 - 3. Calcium hydroxyapatite
 - 4. Hydrochloric acid

Q.14 AAI 50th All India Inter-Institutional Table Tennis Championships 2023 was organised by _____.

- Ans
- 1. Andhra Pradesh state table tennis association
 - 2. Telangana state table tennis association
 - 3. Madhya Pradesh state table tennis association
 - 4. Gujarat state table tennis association

Q.15 Who has the power to appoint the Census Commissioner to estimate the population of the persons belonging to ST communities in the state under the Readjustment of Representation of Scheduled Tribes in Assembly Constituencies of the State of Goa Bill, 2024?

- Ans
- 1. State Government
 - 2. Central Government
 - 3. Supreme Court
 - 4. Union Ministry of Tribal Affairs

Q.16 A body is dropped from a height of 20 metres with zero initial momentum; calculate its mass if it hits the ground with momentum 40 kg. m/s. (Assume the acceleration due to gravity 'g' = 10 m/s²)

- Ans
- 1. 2 kg
 - 2. 4 kg
 - 3. 20 kg
 - 4. 1 kg

Q.17 By which of the following names are the prayers written in Rigveda known?

- Ans
- 1. Kavya
 - 2. Shloka
 - 3. Sukta
 - 4. Richa

Q.18 As per Employment Exchange Statistic 2023, what was the percentage of women jobseekers for Live Register in India in the year 2022?

- Ans
- 1. 35.6%
 - 2. 35.9%
 - 3. 50%
 - 4. 33%

Q.19 Which of the following can help in conservation of water?

- Ans
- 1. Culling animal population
 - 2. Rainwater harvesting
 - 3. Halving the supply of drinking water
 - 4. Setting up water treatment factories

Q.20 What is the title of the comprehensive report submitted by the National Commission on Self-Employed Women and Women in the Informal Sector during the Seventh Five-Year Plan?

- Ans
- 1. Shramshakti
 - 2. Nari Shakti
 - 3. Mahila Vikas
 - 4. Shakti Sahayog

Section : Part-C-Elementary Mathematics

Q.1 The simple interest on a principal amount (in ₹) is ₹378 for a period of 5 years at the rate of 9% per annum. The principal amount (in ₹) is:

- Ans
- 1. 840
 - 2. 844
 - 3. 845
 - 4. 837

Q.2 Two successive discounts of 30% and 20% was offered on food items. A man paid ₹840 for the food item. The bill amount of food item (in ₹) is:

- Ans
- 1. 2,000
 - 2. 1,200
 - 3. 1,800
 - 4. 1,500

Q.3 A train running at 75 km/hr crosses another train running at 30 km/hr in the same direction in 108 seconds. If the length of the fast-moving train is 950 m, then what is the length (in m) of the slow-moving train?

- Ans
- 1. 400
 - 2. 450
 - 3. 350
 - 4. 300

Q.4 Evaluate: $16 + 10 \div 5 - 2 \times 4$

- Ans
- 1. 10
 - 2. 13
 - 3. 9
 - 4. 12

Q.5 Two numbers are x and $4x$, and their mean proportional is 456976. Find x .

- Ans
- 1. 228848
 - 2. 288488
 - 3. 228488
 - 4. 228448

Q.6 The income of Raman is ₹75400. He saves 23% of his income. If his income increases by 27% and expenditure increases by 50%, then his savings will:

- Ans
- 1. decrease by ₹8671
 - 2. increase by ₹8670
 - 3. increase by ₹8667
 - 4. decrease by ₹8666

Q.7 Find the surface area (in cm^2) of a sphere whose diameter is 21 cm.

- Ans
- 1. 1346
 - 2. 1386
 - 3. 1286
 - 4. 1316

Q.8 The average weight of Mahesh, Ram and Anwar is 46 kg. If the average weight of Mahesh and Ram be 39 kg and that of Ram and Anwar be 49 kg, then the weight of Ram (in kg) is:

- Ans
- 1. 53
 - 2. 58
 - 3. 38
 - 4. 48

Q.9 If 2% of $x = 276$, then x is equal to:

- Ans
- 1. 13900
 - 2. 13800
 - 3. 27600
 - 4. 27700

Q.10 Find the value of $\left[(27 \times 3) \times \left\{ 3 \div 3 \times \frac{(19 - 15)}{4} \right\} \right]$

- Ans
- 1. 67
 - 2. 72
 - 3. 81
 - 4. 80

Q.11 Gopal sold 152 chairs and had a gain equal to the selling price of 76 chairs. What is his profit percentage?

- Ans
- 1. 100%
 - 2. 105%
 - 3. 110%
 - 4. 95%

Q.12 The LCM of two numbers is 4158 and their HCF is 54. If one of the numbers is 378, what is the other number?

- Ans
- 1. 495
 - 2. 398
 - 3. 594
 - 4. 459

Q.13 Manoj has ₹1224 with him. He divided it amongst his sons Anand and Anil and asked them to invest it at 4% rate of interest compounded annually. It was seen that Anand and Anil got same amount after 17 and 18 years respectively. How much (in ₹) did Manoj give to Anil?

- Ans
- 1. 724
 - 2. 450
 - 3. 600
 - 4. 624

Q.14 Two trains are moving in opposite directions at speeds of 50 km/h and 110 km/h. The length of one train is 500 m. The time taken by them to cross each other is 12 seconds. The length (in m) of the other train, correct to 2 decimal places, is:

- Ans
- 1. 33.33
 - 2. 34.58
 - 3. 31.44
 - 4. 32.68

Q.15 Find the value of $\left[(63 \div 9) \times \left\{ \frac{96}{8} + \frac{11}{4} \times (9 - 5) \right\} \right]$

- Ans
- 1. 153
 - 2. 165
 - 3. 161
 - 4. 169

Q.16 Ramesh's expenditure in January, February, March and April was ₹28,312, ₹32,252, ₹25,012 and ₹33,500, respectively. What was his average expenditure (in ₹) during these four months?

- Ans
- 1. 28,999
 - 2. 29,769
 - 3. 27,969
 - 4. 30,696

Q.17 A shopkeeper bought an article for ₹500. At what price (in ₹) should he sell the article to make 26% profit?

- Ans
- 1. 618
 - 2. 630
 - 3. 370
 - 4. 642

Q.18 A does half as much work as B in three-fourth of the time. If together they take 66 days to complete the work, how many days shall B alone take to do it?

- Ans
- 1. 55
 - 2. 66
 - 3. 110
 - 4. 90

Q.19 Find the third proportional of 36 and 42.

Ans 1. 49

2. 38

3. 42

4. 56

Q.20 Ashok has ₹1612 with him. He divided it amongst his sons Raj and Varun and asked them to invest it at 8% rate of interest compounded annually. It was seen that Raj and Varun got same amount after 15 and 16 years respectively. How much (in ₹) did Ashok give to Raj?

Ans 1. 687

2. 837

3. 875

4. 775

Section : Part-D-English

Q.1 Select the most appropriate synonym of the underlined word.

She groaned at the memory, suffering all over again the excruciating embarrassment of those moments.

Ans 1. Justified

2. Excited

3. Rational

4. Painful

Q.2 Select the most appropriate ANTONYM of the highlighted word in the given sentence to fill in the blank.

The manager is so stingy that he never appreciates the efforts of the teammates but the chairperson is really very _____ in this matter.

Ans 1. lazy

2. aggressive

3. strict

4. generous

Q.3 Select the INCORRECTLY spelt word.

Ans 1. Astonishingly

2. Appropreately

3. Analytically

4. Apparently

Q.4 The following sentence has been divided into parts. One of them may contain an error. Select the part that contains the error from the given options. If you don't find any error, mark 'No error' as your answer.

At 6 p.m. tomorrow, / I will have been studied / for five hours straight.

Ans 1. No error

2. I will have been studied

3. for five hours straight.

4. At 6 p.m. tomorrow,

Q.5 Select the most appropriate option that can substitute the underlined segment in the given sentence.

A teacher should be assessed on the basis of his ability to interact well with the children and to handle their issues promptly.

- Ans
- 1. solutions nicely
 - 2. chapters slowly
 - 3. queries well
 - 4. parents respectfully

Q.6 Select the most appropriate meaning of the highlighted idiom in the given sentence. Jake and Emily worked together on a project, and it was a piece of cake for them to complete it on time.

- Ans
- 1. An easy task
 - 2. Something annoying
 - 3. Something enjoyable
 - 4. A difficult task

Q.7 Select the correctly spelt sentence.

- Ans
- 1. She was excited to receive a surprise gift from her friend on her birthday.
 - 2. She was excited to recieve a surprize gift from her friend on her birthday.
 - 3. She was excited to recieve a surprize gift from her freind on her birthday.
 - 4. She was excited to recieve a surprise gift from her friend on her birthday.

Q.8 Select the most appropriate synonym of the underlined word in the following sentence to fill in the blank.

Shravan is known for his compliant nature. He is very _____.

- Ans
- 1. complaining
 - 2. yielding
 - 3. difficult
 - 4. adamant

Q.9 Select the correct collocation to fill in the blank.

The CEO has a _____ effect on the future of the company, which includes global expansion.

- Ans
- 1. grand
 - 2. broad
 - 3. far-reaching
 - 4. gorgeous

Q.10 Select the most appropriate ANTONYM of the given word.

Trenchant

- Ans
- 1. Insightful
 - 2. Dull
 - 3. Sharp
 - 4. Acute

Q.11 The given sentence is divided into four segments. Select the option that has the segment with an adverbial usage error.

Michael and Robert / played rapidly / in the park / near the apartment.

- Ans
- 1. near the apartment
 - 2. played rapidly
 - 3. Michael and Robert
 - 4. in the park

Q.12 Select the most appropriate ANTONYM of the given word.

Approbate

- Ans
- 1. Supply
 - 2. Permit
 - 3. Reject
 - 4. Accept

Q.13 Select the most appropriate option to substitute the underlined segment in the given sentence.

The meeting in the conference hall has ended on a temporary agreement.

- Ans
- 1. truce
 - 2. hot war
 - 3. agenda
 - 4. fight

Q.14 Select the most appropriate idiom to substitute the underlined phrase in the given sentence.

Although he was nervous before the presentation, he managed to face the situation with courage and deliver a fantastic speech.

- Ans
- 1. bite the dust
 - 2. bite the pain
 - 3. bite the tongue
 - 4. bite the bullet

Q.15 Select the most appropriate one-word substitute for the underlined segment in the given sentence.

There is a lack of security and stability in his bank balance. This is indicative of a hazardous and perilous situation.

- Ans
- 1. precarious
 - 2. guarded
 - 3. definite
 - 4. reliable

Comprehension:

In the following passage, some words have been deleted. Read the passage carefully and select the most appropriate option to fill in each blank.

Naval architects never claim that a ship is unsinkable, but the sinking of the passenger-and-car ferry Estonia (1) _____ the Baltic surely (2) _____ never have happened. It was well designed and (3) _____ maintained. It carried the proper number of lifeboats. It (4) _____ thoroughly inspected on the day of its fatal voyage. Yet hours later, the Estonia rolled over and (5) _____ in a cold and stormy night.

SubQuestion No : 16

Q.16 Select the most appropriate option to fill in blank no. 1.

- Ans
- 1. over
 - 2. on
 - 3. in
 - 4. up

Comprehension:

In the following passage, some words have been deleted. Read the passage carefully and select the most appropriate option to fill in each blank.

Naval architects never claim that a ship is unsinkable, but the sinking of the passenger-and-car ferry Estonia (1) _____ the Baltic surely (2) _____ never have happened. It was well designed and (3) _____ maintained. It carried the proper number of lifeboats. It (4) _____ thoroughly inspected on the day of its fatal voyage. Yet hours later, the Estonia rolled over and (5) _____ in a cold and stormy night.

SubQuestion No : 17

Q.17 Select the most appropriate option to fill in blank no. 2.

- Ans**
- 1. would
 - 2. could
 - 3. should
 - 4. might

Comprehension:

In the following passage, some words have been deleted. Read the passage carefully and select the most appropriate option to fill in each blank.

Naval architects never claim that a ship is unsinkable, but the sinking of the passenger-and-car ferry Estonia (1) _____ the Baltic surely (2) _____ never have happened. It was well designed and (3) _____ maintained. It carried the proper number of lifeboats. It (4) _____ thoroughly inspected on the day of its fatal voyage. Yet hours later, the Estonia rolled over and (5) _____ in a cold and stormy night.

SubQuestion No : 18

Q.18 Select the most appropriate option to fill in blank no. 3.

- Ans**
- 1. awkwardly
 - 2. carefully
 - 3. carelessly
 - 4. haphazardly

Comprehension:

In the following passage, some words have been deleted. Read the passage carefully and select the most appropriate option to fill in each blank.

Naval architects never claim that a ship is unsinkable, but the sinking of the passenger-and-car ferry Estonia (1) _____ the Baltic surely (2) _____ never have happened. It was well designed and (3) _____ maintained. It carried the proper number of lifeboats. It (4) _____ thoroughly inspected on the day of its fatal voyage. Yet hours later, the Estonia rolled over and (5) _____ in a cold and stormy night.

SubQuestion No : 19

Q.19 Select the most appropriate option to fill in blank no. 4.

- Ans**
- 1. have been
 - 2. was
 - 3. has been
 - 4. was been

Comprehension:

In the following passage, some words have been deleted. Read the passage carefully and select the most appropriate option to fill in each blank.

Naval architects never claim that a ship is unsinkable, but the sinking of the passenger-and-car ferry Estonia (1) _____ the Baltic surely (2) _____ never have happened. It was well designed and (3) _____ maintained. It carried the proper number of lifeboats. It (4) _____ thoroughly inspected on the day of its fatal voyage. Yet hours later, the Estonia rolled over and (5) _____ in a cold and stormy night.

SubQuestion No : 20

Q.20 Select the most appropriate option to fill in blank no. 5.

- Ans**
- 1. sank
 - 2. improved
 - 3. upgraded
 - 4. marched

Q.1 निम्नलिखित वाक्य में अशुद्ध शब्द है-

अच्छे कार्य में अनेकों संकट आते हैं।

- Ans
- 1. अच्छे
 - 2. कार्य
 - 3. अनेकों
 - 4. आते

Q.2 निम्नलिखित वाक्यांश के लिए सार्थक शब्द चुनिए -
जो नष्ट हो जाता हो

- Ans
- 1. निराश्वर
 - 2. अश्वर
 - 3. ईश्वर
 - 4. नश्वर

Q.3 निम्नलिखित मुहावरे के लिए उपयुक्त सार्थक शब्द है-

चाँद पर थूकना

- Ans
- 1. सम्माननीय व्यक्ति का निरादर करना
 - 2. ऊपर नीचे करना
 - 3. साहसी काम करना
 - 4. मनमानी करना

Q.4 निम्नलिखित में से कौन सी अनुस्वारान्त संज्ञा स्त्रीलिंग नहीं है?

- Ans
- 1. खड़ाऊँ
 - 2. जोखों
 - 3. गेहूँ
 - 4. सरसों

Q.5 निम्नलिखित वाक्य के अशुद्ध भाग का चयन करें-
'व्यक्ति को समय का दुरूपयोग नहीं करना चाहिए।'

- Ans
- 1. व्यक्ति को
 - 2. दुरूपयोग नहीं
 - 3. समय का
 - 4. करना चाहिए

Q.6 'दीपावली के अवसर पर बने सारे पकवान खाने में बहुत अच्छे लगते हैं।'

सर्वाधिक उपयुक्त विकल्प चुनकर वाक्य के रेखांकित अंश को बदलें-

- Ans
- 1. बहुत मीठे
 - 2. बहुत गरिष्ठ
 - 3. बहुत सुपाच्य
 - 4. बहुत स्वादिष्ट

Q.7 निम्नलिखित में से 'प्रेम' का विलोम शब्द है -

- Ans
- 1. अनुराग
 - 2. घृणा
 - 3. स्नेह
 - 4. क्रूर

Q.8 निम्नलिखित वाक्य में रेखांकित पद के बदले कौन से विकल्प में सही वाक्य लिखा गया है?

उस भवन में कोई व्यक्ति नहीं था।

- Ans
- 1. वह भवन लोकारण्य था।
 - 2. उसमें जनशून्य था।
 - 3. वह भवन जनशून्य था।
 - 4. उस भवन में कम व्यक्ति थे।

Q.9 निम्न में से किस वाक्य में कारक चिह्न का अशुद्ध प्रयोग हुआ है?

- Ans
- 1. विद्यार्थी के लिए ब्रह्मचर्य का पालन करना उचित है।
 - 2. हमें अपने पड़ोसी से ईर्ष्या नहीं करनी चाहिए।
 - 3. वह अभी तक हैदराबाद द्वारा नहीं लौटा है।
 - 4. गर्मी से उसका चेहरा तमतमाया हुआ था।

Q.10 निम्नलिखित वाक्य को ध्यानपूर्वक पढ़ें और बताएं कि वाक्य में किस प्रकार की त्रुटि है?

हमने यह कार्य जल्दी पूरा करना है।

- Ans
- 1. कारक संबंधी अशुद्धि
 - 2. संज्ञा संबंधी अशुद्धि
 - 3. वचन संबंधी अशुद्धि
 - 4. लिंग संबंधी अशुद्धि

Q.11 घर के चारों ओर धुँआ व्याप्त हो गया। इस वाक्य में धुँआ शब्द का तत्सम रूप प्रयुक्त कर वाक्य पूर्ण कीजिए।

- Ans
- 1. घर के चारों ओर जल व्याप्त हो गया।
 - 2. घर के चारों ओर घटा व्याप्त हो गई।
 - 3. घर के चारों ओर धूम व्याप्त हो गया।
 - 4. घर के चारों ओर कूड़ा व्याप्त हो गया।

Q.12 'खत पढ़ते हुए उसकी _____ लड़खड़ाने लगी थी।' वाक्य के रिक्त स्थान के लिए विदेशी शब्द चुनकर वाक्य पूर्ण कीजिए--

- Ans
- 1. मिजाज
 - 2. आवाज
 - 3. स्वर
 - 4. वाणी

Q.13 दिए गए शब्द का सही पर्यायवाची शब्द पहचानिए -
चंद्रहास

- Ans
- 1. तलवार
 - 2. त्रिशूल
 - 3. खंजर
 - 4. भाला

Q.14 निम्नलिखित में से किस वाक्य में अंतरंग शब्द का सर्वाधिक उपयुक्त विलोम शब्द प्रयुक्त है?

- Ans
- 1. मित्र के बिना जीवन बेरंग है।
 - 2. वह बहुमुखी प्रतिभा का व्यक्ति है।
 - 3. वह बहुत रंगीन मिजाज है।
 - 4. यह अस्पताल बहिरंग रोगियों के लिए है।

Q.15 'अकाल' का पर्याय निम्न में से नहीं है-

- Ans
- 1. सुकाल
 - 2. कुकाल
 - 3. दुर्भिक्ष
 - 4. दुष्काल

Comprehension:

निम्नलिखित गद्यांश में से कुछ शब्द हटा दिए गए हैं। दिए गए विकल्पों की सहायता से रिक्त स्थानों की पूर्ति कीजिए। प्रत्येक संख्या के लिए उपयुक्त विकल्प का चयन कीजिए-

मैं अवाक् 1. _____ ओर देखता रहा। फिर मैंने देखा, पिताजी स्टूल पर से नीचे उतर 2. _____ हैं और घोंसले के तिनकों में से लाठी निकालकर उन्होंने 3. _____ को एक ओर रख दिया है 4. _____ चुपचाप कुर्सी पर आकर बैठ 5. _____ हैं।

SubQuestion No : 16

Q.16 रिक्त स्थान 1 की पूर्ति के लिए सर्वाधिक उपयुक्त विकल्प का चयन कीजिए।

- Ans
- 1. उन तक
 - 2. उनका
 - 3. उनके
 - 4. उनकी

Comprehension:

निम्नलिखित गद्यांश में से कुछ शब्द हटा दिए गए हैं। दिए गए विकल्पों की सहायता से रिक्त स्थानों की पूर्ति कीजिए। प्रत्येक संख्या के लिए उपयुक्त विकल्प का चयन कीजिए-

मैं अवाक् 1. _____ ओर देखता रहा। फिर मैंने देखा, पिताजी स्टूल पर से नीचे उतर 2. _____ हैं और घोंसले के तिनकों में से लाठी निकालकर उन्होंने 3. _____ को एक ओर रख दिया है 4. _____ चुपचाप कुर्सी पर आकर बैठ 5. _____ हैं।

SubQuestion No : 17

Q.17 रिक्त स्थान 2 की पूर्ति के लिए सर्वाधिक उपयुक्त विकल्प का चयन कीजिए।

- Ans
- 1. सके
 - 2. आई
 - 3. सकी
 - 4. आए

Comprehension:

निम्नलिखित गद्यांश में से कुछ शब्द हटा दिए गए हैं। दिए गए विकल्पों की सहायता से रिक्त स्थानों की पूर्ति कीजिए। प्रत्येक संख्या के लिए उपयुक्त विकल्प का चयन कीजिए-

मैं अवाक् 1. _____ ओर देखता रहा। फिर मैंने देखा, पिताजी स्टूल पर से नीचे उतर 2. _____ हैं और घोंसले के तिनकों में से लाठी निकालकर उन्होंने 3. _____ को एक ओर रख दिया है 4. _____ चुपचाप कुर्सी पर आकर बैठ 5. _____ हैं।

SubQuestion No : 18

Q.18 रिक्त स्थान 3 की पूर्ति के लिए सर्वाधिक उपयुक्त विकल्प का चयन कीजिए।

- Ans
- 1. डंडे
 - 2. लाठी
 - 3. लोहे
 - 4. छड़

Comprehension:

निम्नलिखित गद्यांश में से कुछ शब्द हटा दिए गए हैं। दिए गए विकल्पों की सहायता से रिक्त स्थानों की पूर्ति कीजिए। प्रत्येक संख्या के लिए उपयुक्त विकल्प का चयन कीजिए-

मैं अवाक् 1. _____ ओर देखता रहा। फिर मैंने देखा, पिताजी स्टूल पर से नीचे उतर 2. _____ हैं और घोंसले के तिनकों में से लाठी निकालकर उन्होंने 3. _____ को एक ओर रख दिया है 4. _____ चुपचाप कुर्सी पर आकर बैठ 5. _____ हैं।

SubQuestion No : 19

Q.19 रिक्त स्थान 4 की पूर्ति के लिए सर्वाधिक उपयुक्त विकल्प का चयन कीजिए।

- Ans
- 1. किंतु
 - 2. ऊपर
 - 3. साथ
 - 4. और

Comprehension:

निम्नलिखित गद्यांश में से कुछ शब्द हटा दिए गए हैं। दिए गए विकल्पों की सहायता से रिक्त स्थानों की पूर्ति कीजिए। प्रत्येक संख्या के लिए उपयुक्त विकल्प का चयन कीजिए-

मैं अवाक् 1. _____ ओर देखता रहा। फिर मैंने देखा, पिताजी स्टूल पर से नीचे उतर 2. _____ हैं और घोंसले के तिनकों में से लाठी निकालकर उन्होंने 3. _____ को एक ओर रख दिया है 4. _____ चुपचाप कुर्सी पर आकर बैठ 5. _____ हैं।

SubQuestion No : 20

Q.20 रिक्त स्थान 5 की पूर्ति के लिए सर्वाधिक उपयुक्त विकल्प का चयन कीजिए।

Ans 1. सके

2. गए

3. उठे

4. गई