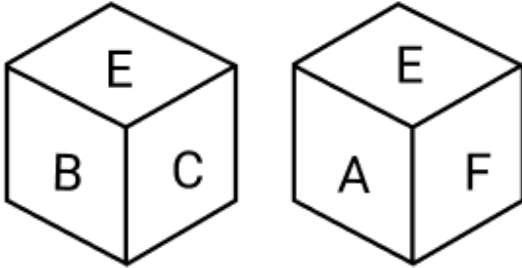


Constable GD in CAPFs and SSF Rifleman GD in AR and Sepoy in NCB Examination 2025

Exam Date	06/02/2025
Exam Time	3:00 PM - 4:00 PM
Subject	Constable GD Examination 2025

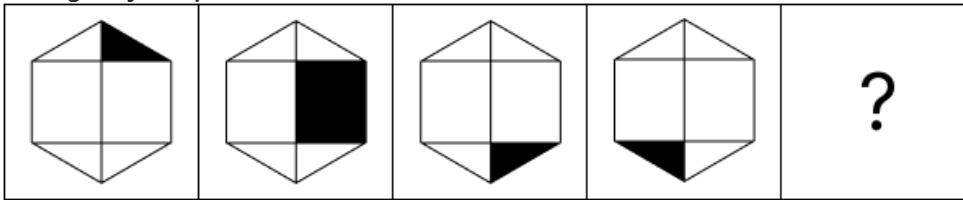
Section : Part-A-General Intelligence and Reasoning

Q.1 A dice has its faces marked by letters A, B, C, D, E and F. Two different positions of the same dice are shown. Select the letter that will be on the face opposite to the one having D?



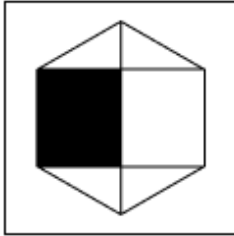
- Ans
- 1. F
 - 2. A
 - 3. B
 - 4. E

Q.2 Identify the figure given in the options which when put in place of the question mark (?) will logically complete the series.

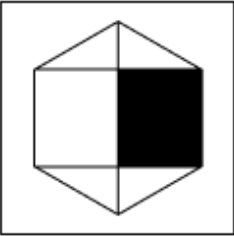


Ans

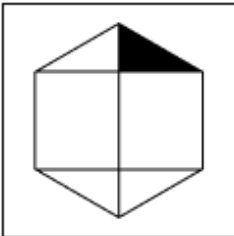
✓ 1.



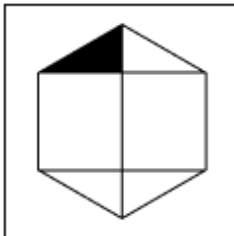
✗ 2.



✗ 3.



✗ 4.



Q.3 D, L, P, Q, and E are sitting in a circular table facing the centre (but not necessarily in the same order). P is an immediate neighbour of both Q and E. L is sitting to the immediate left of E. Q is an immediate neighbour of both P and D. Who are the immediate neighbours of D?

- Ans
- ✗ 1. P and E
 - ✗ 2. E and L
 - ✓ 3. Q and L
 - ✗ 4. Q and P

Q.4 MC 5 is related to PF 10 in a certain way. In the same way, HQ 20 is related to KT 25. To which of the following is JW 30 related, following the same logic?

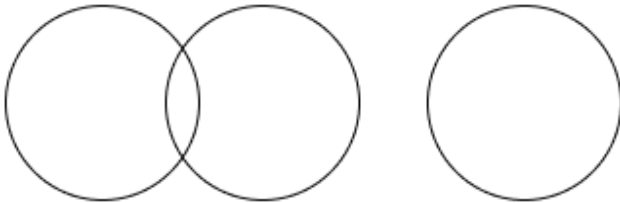
- Ans
- ✗ 1. KX 30
 - ✓ 2. MZ 35
 - ✗ 3. LY 35
 - ✗ 4. MV 35

Q.5 Select the Venn diagram that best illustrates the relationship between the following classes.

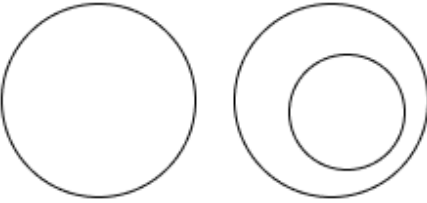
Room, House, Shirt

Ans

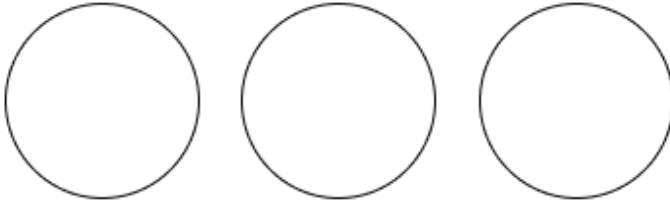
✓ 1.



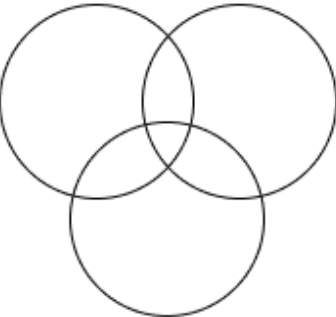
✗ 2.



✗ 3.



✗ 4.



Q.6 Select the option that represents the letters that, when sequentially placed from left to right in the blanks below, will complete the letter series.

V _ _ Y Z V W X _ _ _ X Y Z V _ X _ Z

Ans

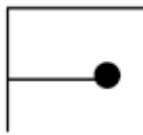
✓ 1. WXYZVWWY

✗ 2. WXZYVWYW

✗ 3. XWYZVWYW

✗ 4. XWZYVWYW

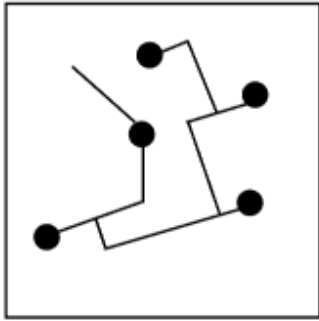
Q.7 Select the option in which the given figure (X) is embedded (rotation is NOT allowed).



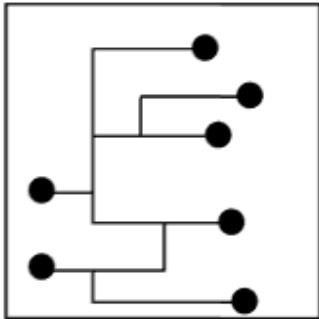
(X)

Ans

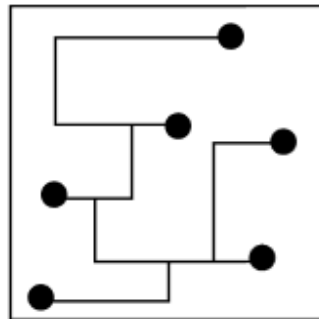
✗ 1.



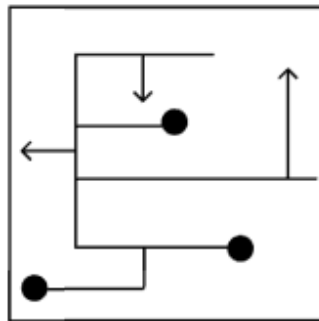
✗ 2.



✗ 3.



✓ 4.



Q.8 Read the given statements and conclusions carefully. Assuming that the information given in the statements is true, even if it appears to be at variance with commonly known facts, decide which of the given conclusions logically follow(s) from the statements.

Statements:

- All colours are reds.
- All colours are blacks.
- All colours are paints.

Conclusions:

- (I) All reds are paints.
- (II) Some paints are blacks.

Ans

- ✓ 1. Only conclusion (II) follows
- ✗ 2. Both conclusions (I) and (II) follow
- ✗ 3. Neither conclusion (I) nor (II) follows
- ✗ 4. Only conclusion (I) follows

Q.9 MQTR is related to SWZX in a certain way based on the English alphabetical order. In the same way, QUXV is related to WADB. To which of the given options is TXAY related, following the same logic?

- Ans
- 1. ZDFE
 - 2. ZEFN
 - 3. ZCFE
 - 4. ZDGE

Q.10 What should come in place of the question mark (?) in the given series based on the English alphabetical order?

DGC HKG LOK PSO ?

- Ans
- 1. YXS
 - 2. TWS
 - 3. ZYS
 - 4. UWS

Q.11 The position(s) of how many letters will remain unchanged if each of the letters in the word ELECTRIC is arranged in reverse English alphabetical order?

- Ans
- 1. Four
 - 2. Three
 - 3. Two
 - 4. One

Q.12 If 'P' stands for 'x', 'Q' stands for '+', 'R' stands for '-' and 'S' stands for '+', what will come in place of the question mark '?' in the following equation?
(35 P 2) Q 5 S (86 Q 2) R (3 P 15) S 90 = ?

- Ans
- 1. 102
 - 2. 126
 - 3. 98
 - 4. 114

Q.13 What should come in place of the question mark (?) in the given series?

22 27 37 52 72 ?

- Ans
- 1. 100
 - 2. 94
 - 3. 98
 - 4. 97

Q.14 In a certain code language, 'GELS' is coded as '9872' and 'SELF' is coded as '8276'. What is the code for 'F' in the given code language?

- Ans
- 1. 8
 - 2. 2
 - 3. 7
 - 4. 6

Q.15 Seven people, E, F, G, H, K, L and N, are sitting in a row facing north (but not necessarily in the same order). Only three people sit between G and K. L sits to the immediate left of K. No one sits to the right of E. Only two people sit between E and L. N sits to the immediate right of H. How many people sit between F and N?

- Ans
- 1. Three
 - 2. One
 - 3. Two
 - 4. Four

Q.16 In a certain code language, 'HALF' is coded as '1059' and 'LATH' is coded as '9750'.
What is the code for 'T' in the given code language?

- Ans**
- 1. 5
 - 2. 7
 - 3. 0
 - 4. 9

Q.17 Based on the English alphabetical order, three of the following four letter-clusters are alike in a certain way and thus form a group. Which letter-cluster DOES NOT belong to that group?
(Note: The odd one out is not based on the number of consonants/vowels or their position in the letter-cluster.)

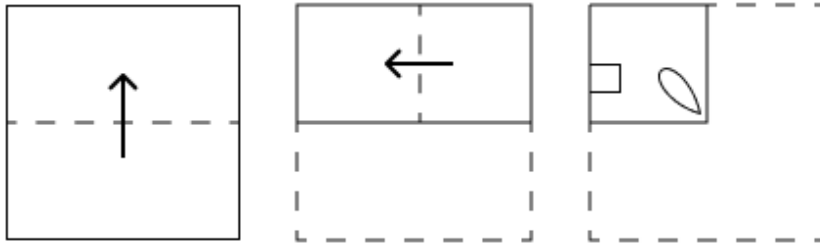
- Ans**
- 1. NRV
 - 2. JNP
 - 3. TXZ
 - 4. HLN

Q.18 What should come in place of the question mark (?) in the given series?

789 790 780 782 772 775 765 ?


- Ans**
- 1. 770
 - 2. 755
 - 3. 769
 - 4. 768

Q.19 The sequence of folding a piece of paper and the manner in which the folded paper is cut is shown in the following figures. How would this paper look when unfolded?




Ans

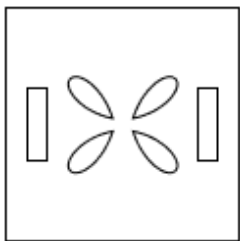
✓ 1.



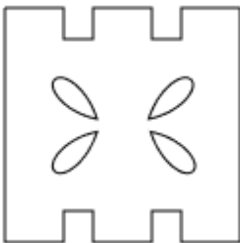
✗ 2.



✗ 3.



✗ 4.



Q.20 In a certain code language,
 'A : B' means 'A is the wife of B',
 'A ! B' means 'A is the brother of B',
 'A < B' means 'A is the son of B' and
 'A / B' means 'A is the father of B'.

How is S related to E if 'S < H : A ! M / E'?

- Ans
- ✗ 1. Father's brother's brother
 - ✗ 2. Father's brother's mother
 - ✗ 3. Father's brother's daughter
 - ✓ 4. Father's brother's son

Section : Part-B-General Knowledge and General awareness

Q.1 The first three digits of the Magnetic Ink Character Recognition number on your cheque specifies the _____ code in which you have the bank account.

- Ans
- ✗ 1. bank
 - ✗ 2. branch
 - ✓ 3. city
 - ✗ 4. country

Q.2 India won the inaugural edition of the SAARC Gold Cup Football held in 1993 in

- Ans
- 1. Colombo, Srilanka
 - 2. Lahore, Pakistan
 - 3. Patiala, India
 - 4. Dhaka, Bangladesh

Q.3 According to the Census 2011, which state among the seven sisters has the highest literacy rate?

- Ans
- 1. Manipur
 - 2. Mizoram
 - 3. Meghalaya
 - 4. Nagaland

Q.4 In the context of ecology, what is symbiosis?

- Ans
- 1. The process of photosynthesis
 - 2. A close and long-term interaction between different species
 - 3. Competition between organisms for resources
 - 4. Random movement of organisms in their habitat

Q.5 According to the census of India 2011, which state from the following has the least population growth?

- Ans
- 1. Bihar
 - 2. Tamil Nadu
 - 3. Haryana
 - 4. Kerala

Q.6 Which two water streams meet at Tandi near Keylong in Himachal Pradesh?

- Ans
- 1. Panzara and Waghur
 - 2. Bindusara and Sabari
 - 3. Chandra and Bhaga
 - 4. Penuganga and Warda

Q.7 Name a crystal-like, white compound with strong pungent aroma and taste, which is purified by the process of sublimation.

- Ans
- 1. Lye
 - 2. Camphor
 - 3. Caustic Potash
 - 4. Soda Ash

Q.8 Who was given the landmark contribution to the development of the second five-year plan?

- Ans
- 1. CD Deshmukh
 - 2. JK Mehta
 - 3. JM Keynes
 - 4. PC Mahalanobis

Q.9 Who among the following singers is the recipient of all the three awards Padma Shri, Padma Bhushan and Padma Vibhushan?

- Ans
- 1. MM Keeravani
 - 2. Hariharan
 - 3. AR Rahman
 - 4. SP Balasubrahmanyam

Q.10 Which of the following is/are other historical names for table tennis?

- a. Gossima
- b. Whiff-whaff
- c. Ping-pong

- Ans**
- 1. All of a, b and c
 - 2. Only b
 - 3. Only a and c
 - 4. Only a

Q.11 Which constitutional amendment of the Constitution of India is related to the establishment of National Commission for Backward Classes in India?

- Ans**
- 1. Constitution (Eighty-sixth Amendment) Act, 2002
 - 2. Constitution (One hundred and fourth Amendment) Act, 2019
 - 3. Constitution (One Hundred and Second Amendment) Act, 2018
 - 4. Constitution (Eighty-fourth Amendment) Act, 2001

Q.12 Shovana Narayan, a Padma Shri recipient, performs which of the following Indian classical dances?

- Ans**
- 1. Bharatanatyam
 - 2. Manipuri
 - 3. Odissi
 - 4. Kathak

Q.13 Which Act, enacted in 1919, introduced the system of dyarchy in the provinces of British India?

- Ans**
- 1. Indian Councils Act
 - 2. Government of India Act
 - 3. Rowlatt Act
 - 4. Vernacular Press Act

Q.14 Who of the following Union Ministers launched the Bhu-Neer portal in September 2024?

- Ans**
- 1. CR Patil
 - 2. V Somanna
 - 3. Pralhad Joshi
 - 4. Raj Bhushan Choudhary

Q.15 In which of the following states is the festival of 'Sanjhi' celebrated?

- Ans**
- 1. Mizoram
 - 2. Tamil Nadu
 - 3. Punjab
 - 4. Gujarat

Q.16 What is the Vedic name of the river Sutlej, which is a part of the Sapta Sindhu rivers mentioned in the Rigveda?

- Ans**
- 1. Askini
 - 2. Shutudri
 - 3. Vitasta
 - 4. Purushini

Q.17 Who among the following was appointed as the Union Minister of Women and Child Development in June 2024?

- Ans** 1. Annpurna Devi
 2. Raksha Nikhil Khadse
 3. Anupriya Patel
 4. Nirmala Sitharaman

Q.18 Which Article of the Indian Constitution requires the State to promote the economic interests of the weaker sections of society?

- Ans** 1. Article 46
 2. Article 47
 3. Article 49
 4. Article 48

Q.19 Arjun Singh Dhurve was awarded the Padma Shri 2022 for his tireless efforts to promote which dance form?

- Ans** 1. Pung Cholom dance
 2. Baiga dance
 3. Mandjas dance
 4. Daph dance

Q.20 What is the role of advertising in trade?

- Ans** 1. To finance businesses
 2. To inform and attract customers
 3. To produce goods
 4. To transport goods

Section : Part-C-Elementary Mathematics

Q.1 The smallest natural number which is divisible by 24, 58, 48 and 12 is:

- Ans** 1. 1465
 2. 1392
 3. 1441
 4. 1312

Q.2 Pravin has ₹1612 with him. He divided it amongst his sons Rishi and Shan and asked them to invest it at 8% rate of interest compounded annually. It was seen that Rishi and Shan got same amount after 17 and 18 years respectively. How much (in ₹) did Pravin give to Rishi?

- Ans** 1. 687
 2. 775
 3. 875
 4. 837

Q.3 A sales man offers the following scheme discount on the sale of pencils in his shop: 'Buy 20 and get 5 free'. What is the percentage of his scheme discount?

- Ans** 1. 15%
 2. 10%
 3. 20%
 4. 25%

Q.4 If 2% of $x = 288$, then x is equal to:

- Ans
- 1. 14400
 - 2. 28800
 - 3. 14500
 - 4. 28900

Q.5 The edge of a cube is 19 cm. What is the total surface area of the cube (in cm^2)?

- Ans
- 1. 2186
 - 2. 2156
 - 3. 2166
 - 4. 2176

Q.6 The cost price of a laptop is ₹78,200. If the loss percentage is 44%, then what is the selling price (in ₹) of the laptop?

- Ans
- 1. 45,362
 - 2. 40,230
 - 3. 43,792
 - 4. 48,200

Q.7 Evaluate: $16 + 12 \div 4 - 3 \times 3$

- Ans
- 1. 9
 - 2. 13
 - 3. 10
 - 4. 12

Q.8 Find the average speed of Sanjay, who covers the first 150 km in 4 hours and the next 250 km in another 4 hours.

- Ans
- 1. 74 km/hr
 - 2. 45 km/hr
 - 3. 50 km/hr
 - 4. 100 km/hr

Q.9 The mean proportional between 36 and 9 is:

- Ans
- 1. 12
 - 2. 18
 - 3. 9
 - 4. 24

Q.10 Mukund invests a sum of ₹5400 and Sachin invests a sum of ₹9400 at the same rate of simple interest per annum. If, at the end of 4 years, Sachin gets ₹960 more interest than Mukund, then find the rate of interest per annum (in percentage).

- Ans
- 1. 5
 - 2. 4
 - 3. 6
 - 4. 8

Q.11 400 pears were bought at ₹1230 per hundred and were sold at a profit of ₹980. Find the selling price (in ₹) per dozen of pears.

- Ans
- 1. 192
 - 2. 187
 - 3. 167
 - 4. 177

Q.12 If at same rate of interest, in 2 years, the simple interest is ₹44 and compound interest is ₹45, then what is the principal (in ₹)?

- Ans
- 1. 488
 - 2. 477
 - 3. 484
 - 4. 479

Q.13 Two trains are moving in opposite directions at speeds of 60 km/h and 50 km/h. The length of one train is 430 m. The time taken by them to cross each other is 44 seconds. The length (in m) of the other train, correct to 2 decimal places, is:

- Ans
- 1. 916.15
 - 2. 914.44
 - 3. 913.17
 - 4. 912.67

Q.14 There are 49 members in group A, 35 members in group B and 31 members in group C. All the members of these groups went to a restaurant. The average amount spent on each member of group A, B and C is ₹106, ₹141 and ₹226, respectively. The total average amount (in ₹) spent per member is:

- Ans
- 1. 146
 - 2. 145
 - 3. 154
 - 4. 149

Q.15 The average weight of 27 students of a class is 53 kg. If the weight of the teacher is included, the average rises by 700 grams. Find the weight (in kg) of the teacher.

- Ans
- 1. 65.5
 - 2. 78.3
 - 3. 62.8
 - 4. 72.6

Q.16 Find the greatest number which on dividing 1657 and 2037, leaves remainders 6 and 5, respectively.

- Ans
- 1. 137
 - 2. 117
 - 3. 112
 - 4. 127

Q.17 Evaluate: $16 + 9 \div 3 - 3 \times 4$

- Ans
- 1. 9
 - 2. 10
 - 3. 7
 - 4. 6

Q.18 X can complete a task in 15 days, and Y can complete the same task in 20 days. If X and Y work on alternate days starting with X, in how many days will the work be completed?

- Ans
- 1. 17
 - 2. 22
 - 3. 15
 - 4. 19

Q.19 Which of the following ratios is the highest?

- Ans
- 1. 12 : 19
 - 2. 15 : 19
 - 3. 21 : 26
 - 4. 19 : 13

Q.20 The price of fuel decreases by 15%, 40% and 60% in three successive months, but increases by 45% in the fourth month. What is the percentage increase/decrease in the price of fuel in the fourth month as compared to its original price?

- Ans
- 1. Increases by 73.26%
 - 2. Increases by 68.39%
 - 3. Decreases by 70.42%
 - 4. Decreases by 76.46%

Section : Part-D-English

Q.1 Select the most appropriate idiom that can substitute the underlined segment in the given sentence.

He's been working late into the night, trying to finish his thesis before the deadline.

- Ans
- 1. burning the candle at both the ends
 - 2. burning bridges
 - 3. burning the ships
 - 4. burning the midnight oil

Q.2 Select the most appropriate meaning of the given word.

Chuckle

- Ans
- 1. Laugh loudly
 - 2. Laugh in a noisy, gleeful way
 - 3. Laugh quietly without opening one's mouth
 - 4. Cry like a donkey

Q.3 Select the INCORRECTLY spelt word.

- Ans
- 1. Resource
 - 2. Apology
 - 3. Lecture
 - 4. Buisness

Q.4 Identify the INCORRECTLY spelt word in the given sentence.

The company's policy on employee benefits is quite comprehensve.

- Ans
- 1. Comprehensve
 - 2. Company's
 - 3. Benefits
 - 4. Policy

Q.5 Select the most appropriate option to fill in the blank.

My heart fills with anger when I see disciples of self-claimed gods _____ before them.

- Ans
- 1. sleeping
 - 2. spitting
 - 3. swinging
 - 4. prostrating

Q.6 The given sentence is divided into four segments. Select the option that has the segment with an adverbial usage error.

David loudly / opened the gift / presented by / his sister.

- Ans**
- 1. David loudly
 - 2. presented by
 - 3. opened the gift
 - 4. his sister

Q.7 Parts of the following sentence have been given as options. Select the option that contains an error.

She been showing off her juggling skills at her friend's party.

- Ans**
- 1. showing off her
 - 2. juggling skills at
 - 3. She been
 - 4. her friend's party

Q.8 Select the most appropriate option that can substitute the underlined segment in the given sentence and rectify it. If no correction is needed, select 'No correction required'.

They are launching the new product last month.

- Ans**
- 1. launched
 - 2. was launching
 - 3. No correction required
 - 4. did launched

Q.9 Select the most appropriate meaning of the given idiom.

Fall between two stools

- Ans**
- 1.
Fail to achieve either of two aims
 - 2.
Confused to select either of two options
 - 3.
Fall upon the hurdles continuously
 - 4.
Succeed to achieve both aims

Q.10 Select the most appropriate option to fill in the blank.

I know we can count ___ Tim to resolve this for us.

- Ans**
- 1. at
 - 2. for
 - 3. on
 - 4. in

Q.11 Fill in the blank with the suitable option.

I drove back to the town and began to retrace the route, taking frequent _____ at the map.

- Ans**
- 1. bounces
 - 2. glances
 - 3. winces
 - 4. fences

Q.12 Select the most appropriate synonym of the given word.
Precise

- Ans**
- 1. Vague
 - 2. Ambiguous
 - 3. Accurate
 - 4. Approximate

Q.13 Select the most appropriate ANTONYM of the word in brackets to fill in the blank.

The new law aims to _____ (Enlarge) the sale of illegal drugs.

- Ans**
- 1. ridicule
 - 2. admire
 - 3. amplify
 - 4. curtail

Q.14 Select the most appropriate ANTONYM of the given word.

Magnanimous

- Ans**
- 1. Splendour
 - 2. Large
 - 3. Degraded
 - 4. Generous

Q.15 Select the most appropriate ANTONYM of the given word.

Distraught

- Ans**
- 1. Curved
 - 2. Sour
 - 3. Happy
 - 4. New

Comprehension:

In the following passage, some words have been deleted. Read the passage carefully and select the most appropriate option to fill in each blank.

Chatbots are computer programs (1) _____ to simulate conversations as if they
(2) _____ another human. For (3) _____ there were more than ten million
Replika users as of 2022. Replika is a chatbot billed as a companion who (4) _____. It acts
like a friend but relationships with the chatbot can become romantic.

In many chatbot applications such as this, there may be no moderation or human checks on inappropriate
(5) _____. So be aware if your child is spending a long time with AI friends.

SubQuestion No : 16

Q.16 Select the most appropriate option to fill in blank no. 1.

- Ans**
- 1. debarred
 - 2. designed
 - 3. destroyed
 - 4. detailed

Comprehension:

In the following passage, some words have been deleted. Read the passage carefully and select the most appropriate option to fill in each blank.

Chatbots are computer programs (1) _____ to simulate conversations as if they (2) _____ another human. For (3) _____ there were more than ten million Replika users as of 2022. Replika is a chatbot billed as a companion who (4) _____. It acts like a friend but relationships with the chatbot can become romantic.

In many chatbot applications such as this, there may be no moderation or human checks on inappropriate (5) _____. So be aware if your child is spending a long time with AI friends.

SubQuestion No : 17

Q.17 Select the most appropriate option to fill in blank no. 2.

- Ans 1.
were
2.
pretend
3.
will
4.
could

Comprehension:

In the following passage, some words have been deleted. Read the passage carefully and select the most appropriate option to fill in each blank.

Chatbots are computer programs (1) _____ to simulate conversations as if they (2) _____ another human. For (3) _____ there were more than ten million Replika users as of 2022. Replika is a chatbot billed as a companion who (4) _____. It acts like a friend but relationships with the chatbot can become romantic.

In many chatbot applications such as this, there may be no moderation or human checks on inappropriate (5) _____. So be aware if your child is spending a long time with AI friends.

SubQuestion No : 18

Q.18 Select the most appropriate option to fill in blank no. 3.

- Ans 1.
example
2.
eligible
3.
entry
4.
exit

Comprehension:

In the following passage, some words have been deleted. Read the passage carefully and select the most appropriate option to fill in each blank.

Chatbots are computer programs (1) _____ to simulate conversations as if they (2) _____ another human. For (3) _____ there were more than ten million Replika users as of 2022. Replika is a chatbot billed as a companion who (4) _____. It acts like a friend but relationships with the chatbot can become romantic.

In many chatbot applications such as this, there may be no moderation or human checks on inappropriate (5) _____. So be aware if your child is spending a long time with AI friends.

SubQuestion No : 19

Q.19 Select the most appropriate option to fill in blank no. 4.

- Ans 1.
cares
2.
blinks
3.
negates
4.
grows

Comprehension:

In the following passage, some words have been deleted. Read the passage carefully and select the most appropriate option to fill in each blank.

Chatbots are computer programs (1) _____ to simulate conversations as if they (2) _____ another human. For (3) _____ there were more than ten million Replika users as of 2022. Replika is a chatbot billed as a companion who (4) _____. It acts like a friend but relationships with the chatbot can become romantic.

In many chatbot applications such as this, there may be no moderation or human checks on inappropriate (5) _____. So be aware if your child is spending a long time with AI friends.

SubQuestion No : 20

Q.20 Select the most appropriate option to fill in blank no. 5.

- Ans**
- 1. console
 - 2. corporate
 - 3. collage
 - 4. content

Section : Part-D-Hindi

Q.1 इनमें से किस वाक्य में त्रुटि नहीं है?

- Ans**
- 1. यहाँ बैठे-बैठे मन ऊब आया है।
 - 2. मैं उनसे यह बात मना लूँगा।
 - 3. कौन-सी किताब पढ़ोगे?
 - 4. कौन किताब को पढ़ोगे।

Q.2 वर्तनी की दृष्टि से दिए गए वाक्य के किस अंश में त्रुटि है?
मनुष्य अपनी इच्छाओं के आधीन होने के कारण ही पतित होता है।

- Ans**
- 1. इच्छाओं के आधीन
 - 2. मनुष्य अपनी
 - 3. पतित होता है।
 - 4. होने के कारण ही

Q.3 निम्नलिखित वाक्यांश को ध्यानपूर्वक पढ़ें और इसके लिए सार्थक शब्द का चयन करें।
बरसात का बिल्कुल न होना

- Ans**
- 1. अनावृष्टि
 - 2. अतिवृष्टि
 - 3. अतीन्द्रिय
 - 4. अल्पवृष्टि

Q.4 'छोटों को बड़ों से _____ ग्रहण करनी चाहिए।' रिक्त स्थान की पूर्ति के लिए उपयुक्त तद्भव है-

- Ans**
- 1. शिक्षा
 - 2. स्नेह
 - 3. सीख
 - 4. नेह

Q.5 रेखांकित शब्द के स्थान पर सर्वोचित विकल्प चुनिए।

इस निबंध में अशुद्धियों की अधिकता है।

- Ans
- 1. बहुलता
 - 2. सूक्ष्मता
 - 3. अभिव्यंजना
 - 4. अल्पता

Q.6 यह पानी अत्यंत ठंडा है।

रेखांकित शब्द के उचित विलोम शब्द का चयन कीजिए।

- Ans
- 1. गर्म
 - 2. बफ़रीला
 - 3. साफ
 - 4. उबला

Q.7 दिए गए शब्द का उचित विलोम शब्द चुनिए-

आत्मा

- Ans
- 1. सुआत्मा
 - 2. परमात्मा
 - 3. अनात्म
 - 4. आत्म

Q.8 निम्नलिखित वाक्य को ध्यानपूर्वक पढ़ें और वाक्य में परिमाणवाचक क्रिया विशेषण संबंधी त्रुटि की पहचान कर शुद्ध वाक्य लिखें।

मुझे पानी दे दो।

- Ans
- 1. मुझे थोड़ा पानी चाहिए।
 - 2. मुझे पानी नहीं चाहिए।
 - 3. मुझे पानी दो।
 - 4. मुझे पानी देना।

Q.9 वाक्य में रेखांकित शब्द के स्थान पर सर्वोचित शब्द का चयन कीजिए।

मुझे खेद है कि मैं आपके दुर्घटने में सम्मिलित न हो सका।

- Ans
- 1. दुःख
 - 2. पीड़ा
 - 3. विरह
 - 4. आनंद

Q.10 'कमरे में बन्दर को देख कर काशू के मुँह पर हवाई किले बन गए।' वाक्य में रेखांकित भाग को उचित विकल्प से बदलें-

- Ans
- 1. की हवा बंध गयी
 - 2. के मुँह पर तोते गिरने लगे
 - 3. की हवाइयाँ छूट गयीं
 - 4. की हवा पलट गयी

Q.11 'मुझे खाने में _____ मत दिया करो, कुछ हल्का-फुल्का नाश्ता ही काफी है।'

उचित सार्थक और निरर्थक शब्द-युग्म वाले विकल्प का चयन करके उपरोक्त वाक्य पूर्ण करें।

- Ans
- 1. सब्जी-रोटी
 - 2. नाश्ता-वाश्ता
 - 3. भारी-खाना
 - 4. पराठा-वराठा

Q.12 निम्नलिखित में से कौन सा शब्द गंगा का पर्यायवाची नहीं है?

- Ans
- 1. सरिता
 - 2. देवापगा
 - 3. सुरसरि
 - 4. ध्रुवनंदा

Q.13 रेखांकित शब्द के विलोम से वाक्य पूर्ण करें-

कोई भी जाँच तटस्थ होकर ही करनी चाहिए _____ बनकर ईमानदारी से कार्य नहीं होता।

- Ans
- 1. सहपक्षी
 - 2. पक्षपाती
 - 3. सहयोगी
 - 4. विपक्षी

Q.14 निम्न वाक्य में रेखांकित पद को संशोधित कीजिए।
यदि उन्हें लकड़ी मिल जाएँ तो वे पोस्टर बनाएँगे।

- Ans
- 1. सीमेंट
 - 2. कागज
 - 3. कलम
 - 4. पत्ते

Q.15 दिए गए वाक्य में त्रुटि पहचानें।
दरवाजे पर सोहन आया है।

- Ans
- 1. आया
 - 2. सोहन
 - 3. दरवाजा
 - 4. पर

Comprehension:

गद्यांश के आधार पर प्रश्न का उत्तर दें।

भारतीय समाज पर वैश्वीकरण का प्रभाव बढ़ा है। फलतः वैश्विक अर्थव्यवस्था का _____(26)_____ पूर्व की अपेक्षा कहीं ज्यादा मजबूत नजर आ रहा है।
वैसे भी यदि परंपरागत भारतीय समाज का _____(27)_____ किया जाए तो यह स्पष्ट नजर आता है कि पारस्परिक लेनदेन और निर्भरता की
अंतःक्रियाएं हमारे समाज में प्राचीन काल से होती रही हैं। समाज की सार्थकता तथा अच्छी सामाजिक व्यवस्था के लिए ये अन्तःक्रियाएं और अंतःसंबंध
_____ (28)_____ भी हैं। सामाजिक उत्कर्ष और पारदर्शी सामाजिक व्यवस्था तभी संभव है जब समाज के लोग सामाजिक _____ (29)_____
के लिए न सिर्फ प्रतिबद्ध रहें बल्कि अपनी सामाजिक जिम्मेदारियों का भली-भांति भी _____ (30)_____ करें

SubQuestion No : 16

Q.16 उचित शब्द चुनकर गद्यांश में रिक्त स्थान (26) की पूर्ति करें-

- Ans
- 1. परिणाम
 - 2. प्रभाव
 - 3. ताना-बाना
 - 4. अस्तित्व

Comprehension:

गद्यांश के आधार पर प्रश्न का उत्तर दें।

भारतीय समाज पर वैश्वीकरण का प्रभाव बढ़ा है। फलतः वैश्विक अर्थव्यवस्था का _____(26)_____ पूर्व की अपेक्षा कहीं ज्यादा मजबूत नजर आ रहा है।
वैसे भी यदि परंपरागत भारतीय समाज का _____(27)_____ किया जाए तो यह स्पष्ट नजर आता है कि पारस्परिक लेनदेन और निर्भरता की
अंतःक्रियाएं हमारे समाज में प्राचीन काल से होती रही हैं। समाज की सार्थकता तथा अच्छी सामाजिक व्यवस्था के लिए ये अन्तःक्रियाएं और अंतःसंबंध
_____ (28) _____ भी हैं। सामाजिक उत्कर्ष और पारदर्शी सामाजिक व्यवस्था तभी संभव है जब समाज के लोग सामाजिक _____ (29) _____
के लिए न सिर्फ प्रतिबद्ध रहें बल्कि अपनी सामाजिक जिम्मेदारियों का भली-भांति भी _____ (30) _____ करें

SubQuestion No : 17

Q.17 उचित शब्द चुनकर गद्यांश में रिक्त स्थान (27) की पूर्ति करें-

- Ans
- 1. दर्शन
 - 2. अवलोकन
 - 3. निरीक्षण
 - 4. शोध

Comprehension:

गद्यांश के आधार पर प्रश्न का उत्तर दें।

भारतीय समाज पर वैश्वीकरण का प्रभाव बढ़ा है। फलतः वैश्विक अर्थव्यवस्था का _____(26)_____ पूर्व की अपेक्षा कहीं ज्यादा मजबूत नजर आ रहा है।
वैसे भी यदि परंपरागत भारतीय समाज का _____(27)_____ किया जाए तो यह स्पष्ट नजर आता है कि पारस्परिक लेनदेन और निर्भरता की
अंतःक्रियाएं हमारे समाज में प्राचीन काल से होती रही हैं। समाज की सार्थकता तथा अच्छी सामाजिक व्यवस्था के लिए ये अन्तःक्रियाएं और अंतःसंबंध
_____ (28) _____ भी हैं। सामाजिक उत्कर्ष और पारदर्शी सामाजिक व्यवस्था तभी संभव है जब समाज के लोग सामाजिक _____ (29) _____
के लिए न सिर्फ प्रतिबद्ध रहें बल्कि अपनी सामाजिक जिम्मेदारियों का भली-भांति भी _____ (30) _____ करें

SubQuestion No : 18

Q.18 उचित शब्द चुनकर गद्यांश में रिक्त स्थान (28) की पूर्ति करें-

- Ans
- 1. प्रासंगिक
 - 2. सार्थक
 - 3. आवश्यक
 - 4. अर्थपूर्ण

Comprehension:

गद्यांश के आधार पर प्रश्न का उत्तर दें।

भारतीय समाज पर वैश्वीकरण का प्रभाव बढ़ा है। फलतः वैश्विक अर्थव्यवस्था का _____(26)_____ पूर्व की अपेक्षा कहीं ज्यादा मजबूत नजर आ रहा है।
वैसे भी यदि परंपरागत भारतीय समाज का _____(27)_____ किया जाए तो यह स्पष्ट नजर आता है कि पारस्परिक लेनदेन और निर्भरता की
अंतःक्रियाएं हमारे समाज में प्राचीन काल से होती रही हैं। समाज की सार्थकता तथा अच्छी सामाजिक व्यवस्था के लिए ये अन्तःक्रियाएं और अंतःसंबंध
_____ (28) _____ भी हैं। सामाजिक उत्कर्ष और पारदर्शी सामाजिक व्यवस्था तभी संभव है जब समाज के लोग सामाजिक _____ (29) _____
के लिए न सिर्फ प्रतिबद्ध रहें बल्कि अपनी सामाजिक जिम्मेदारियों का भली-भांति भी _____ (30) _____ करें

SubQuestion No : 19

Q.19 उचित शब्द चुनकर गद्यांश में रिक्त स्थान (29) की पूर्ति करें-

- Ans
- 1. प्रतिकारों
 - 2. व्यवस्थाओं
 - 3. सरोकारों
 - 4. परम्पराओं

Comprehension:

गद्यांश के आधार पर प्रश्न का उत्तर दें।

भारतीय समाज पर वैश्वीकरण का प्रभाव बढ़ा है। फलतः वैश्विक अर्थव्यवस्था का _____(26)_____ पूर्व की अपेक्षा कहीं ज्यादा मजबूत नजर आ रहा है।
वैसे भी यदि परंपरागत भारतीय समाज का _____(27)_____ किया जाए तो यह स्पष्ट नजर आता है कि पारस्परिक लेनदेन और निर्भरता की
अंतःक्रियाएं हमारे समाज में प्राचीन काल से होती रही हैं। समाज की सार्थकता तथा अच्छी सामाजिक व्यवस्था के लिए ये अन्तःक्रियाएं और अंतःसंबंध
_____ (28) _____ भी हैं। सामाजिक उत्कर्ष और पारदर्शी सामाजिक व्यवस्था तभी संभव है जब समाज के लोग सामाजिक _____ (29) _____
के लिए न सिर्फ प्रतिबद्ध रहें बल्कि अपनी सामाजिक जिम्मेदारियों का भली-भांति भी _____ (30) _____ करें

SubQuestion No : 20

Q.20 उचित शब्द चुनकर गद्यांश में रिक्त स्थान (30) की पूर्ति करें-

- Ans
- 1. अतिक्रमण
 - 2. निर्वहन
 - 3. प्रचार
 - 4. परिवहन