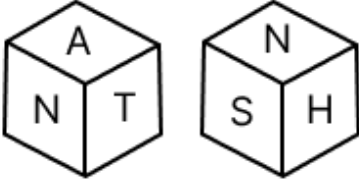


Constable GD in CAPFs and SSF Rifleman GD in AR and Sepoy in NCB Examination 2025

Exam Date	11/02/2025
Exam Time	12:00 PM - 1:00 PM
Subject	Constable GD Examination 2025

Section : Part-A-General Intelligence and Reasoning

Q.1 A dice has its faces marked by letters I, S, H, N, A and T. Two positions of the same dice are given below. Which face is opposite to face I?



- Ans
- 1. S
 - 2. T
 - 3. N
 - 4. A

Q.2 What should come in place of the question mark (?) in the given series based on the English alphabetical order?

ZXV PNL FDB VTR ?

- Ans
- 1. RQP
 - 2. LJH
 - 3. JIG
 - 4. XVW

Q.3 In a certain code language, 'SOUL' is coded as '6415' and 'LOST' is coded as '6548'. How is 'U' coded in the given language?

- Ans
- 1. 5
 - 2. 1
 - 3. 4
 - 4. 8

Q.4 What will come in the place of the question mark '?' in the following equation, if '×' and '÷' are interchanged and '-' and '+' are interchanged?

$$51 \div 30 \times 36 - 6 + 6 = ?$$

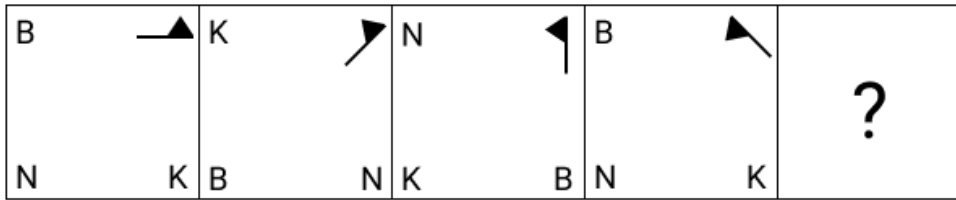
- Ans
- 1. 55
 - 2. 57
 - 3. 56
 - 4. 58

Q.5 Based on the English alphabetical order, three of the following four letter-clusters are alike in a certain way and thus form a group. Which letter-cluster DOES NOT belong to that group?

(Note: The odd one out is not based on the number of consonants/vowels or their position in the letter-cluster.)

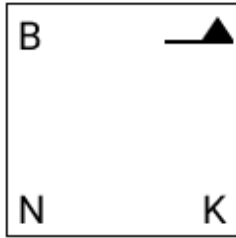
- Ans
- 1. JOD
 - 2. RWD
 - 3. FKR
 - 4. DIP

Q.6 Select the figure from among the given options that can replace the question mark (?) in the following series.

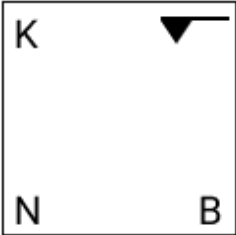


Ans

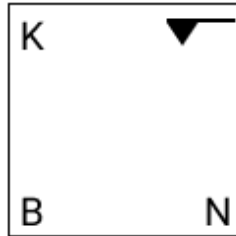
1.



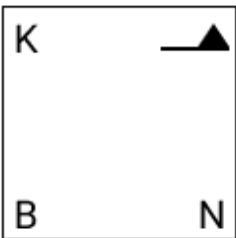
2.



3.



4.



Q.7 Seven people, E, F, G, H, K, L and N, are sitting in a row facing north (but not necessarily in the same order). Only three people sit to the left of L. Only F sits to the right of G. Only three people sit between G and K. N sits at some place to the left of H but at some place to the right of E. How many people sit between E and N?

Ans 1. Three

2. One

3. Two

4. Four

Q.8 What should come in place of the question mark (?) in the given series?

450 460 471 483 496 ?

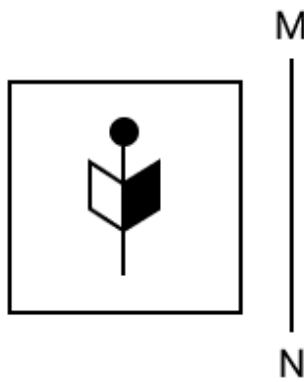
Ans 1. 504

2. 508

3. 510

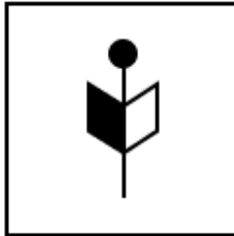
4. 500

Q.9 Select the correct mirror image of the given figure when the mirror is placed at MN as shown below.

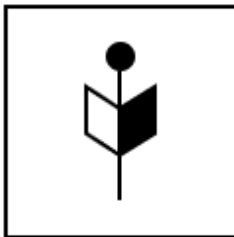


Ans


✓ 1.



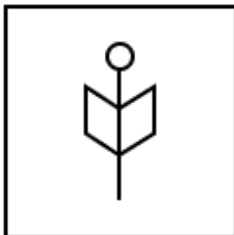
✗ 2.



✗ 3.



✗ 4.



Q.10 Read the given statements and conclusions carefully. Assuming that the information given in the statements is true, even if it appears to be at variance with commonly known facts, decide which of the given conclusions logically follow(s) from the statements.

Statements:

All beats are music.

All music are rhythms.

No rhythm is a tune.

Conclusions:

(I): No beat is a tune.

(II): Some rhythms are beats.

Ans

✓ 1. Both conclusions (I) and (II) follow.

✗ 2. Neither conclusion (I) nor (II) follows.

✗ 3. Only conclusion (I) follows.

✗ 4. Only conclusion (II) follows.

Q.11 Eight people are sitting in two parallel rows containing 4 people each in such a way that there is equal distance between adjacent persons.
 In row 1 – L, M, N and O are seated and all of them are facing south.
 In row 2 – P, Q, R and S are seated and all of them are facing north.
 Thus, each person faces another person from the other row.
 S sits third to the left of R. The one facing M is an immediate neighbour of R. O sits at some place to the right of M and is not facing P. L sits third to the right of N.
 Who among the following faces Q?

- Ans 1. M
 2. N
 3. O
 4. L

Q.12 UMCP is related to ZOEU in a certain way based on the English alphabetical order. In the same way, QBXK is related to VDZP. To which of the given options is EJAH related, following the same logic?

- Ans 1. HMDN
 2. INBK
 3. JLCM
 4. HNCL

Q.13 BYVT is related to PMJH in a certain way based on the English alphabetical order. In the same way, QNKI is related to EBYW. To which of the given options is NKHF related, following the same logic?

- Ans 1. BXUT
 2. BZUY
 3. BYVT
 4. BYUT

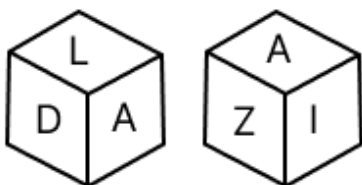
Q.14 In a certain code language, 'BASH' is coded as '5431' and 'HASE' is coded as '1234'. What is the code for 'E' in the given code language?

- Ans 1. 3
 2. 1
 3. 2
 4. 4

Q.15 Select the option that represents the letters that, when sequentially placed from left to right in the blanks below, will complete the letter series.
 s t o l b _ _ _ _ o l b r _ s t _ _ _ r i

- Ans 1. tolrisb
 2. ristioltb
 3. bristol
 4. sirbtol

Q.16 A dice has its faces marked by letters L, Z, I, D, N and A. Two positions of the same dice are given below. Which face is opposite to face N?



- Ans 1. L
 2. Z
 3. A
 4. D

Q.17 What should come in place of the question mark (?) in the given series?

7 17 25 53 61 ?

- Ans
- 1. 152
 - 2. 148
 - 3. 184
 - 4. 125

Q.18 The position(s) of how many letters will remain unchanged if each of the letters in the word LIGHTER is arranged in the English alphabetical order?

- Ans
- 1. One
 - 2. Zero
 - 3. Two
 - 4. Three

Q.19 In a certain code language,
'A + B' means 'A is the brother of B',
'A - B' means 'A is the sister of B',
'A x B' means 'A is the mother of B' and
'A ÷ B' means 'A is the father of B'.





How is M related to P if 'M + N - O x P ÷ Q'?

- Ans
- 1. Brother's daughter
 - 2. Father's mother
 - 3. Sister's daughter
 - 4. Mother's brother

Q.20 Select the Venn diagram that best illustrates the relationship between the following classes.

Female, Doctor, Sister

Ans

- 1. 
- 2. 
- 3. 
- 4. 

Section : Part-B-General Knowledge and General awareness

Q.1 Article 49 of the Constitution of India deals with which of the following Directive Principles of State Policy?

- Ans
- 1. To defend the country and render national service when called upon to do so
 - 2. To organise village Panchayats as units of self government
 - 3. To secure just and humane conditions of work and maternity relief
 - 4. To protect all monuments of historic interest and national importance

Q.2 In geology, Sima (the lower layer of Earth's crust) is made of an assemblage of rocks rich in _____ and magnesium. These two minerals are the most abundance minerals in the oceanic crust.

- Ans**
- 1. sigloite
 - 2. silicate
 - 3. sillimanite
 - 4. silinaite

Q.3 In which of the following states is the 'Thaipusam' festival held?

- Ans**
- 1. Sikkim
 - 2. Tripura
 - 3. Telangana
 - 4. Tamil Nadu

Q.4 Who among the following tendered his resignation as the Chairperson of the Union Public Service Commission (UPSC) in July 2024?

- Ans**
- 1. Saloni Sinha
 - 2. Manoj Soni
 - 3. Manoj Tiwari
 - 4. Preeti Sudan

Q.5 The physiological state which decreases appetite and indicates the feeling of fullness is known as _____.

- Ans**
- 1. defecation
 - 2. chyme
 - 3. satiety
 - 4. ingestion

Q.6 As per Census 2011, which north-eastern state has the highest literacy rate?

- Ans**
- 1. Mizoram
 - 2. Arunachal Pradesh
 - 3. Assam
 - 4. Tripura

Q.7 How did the Second Five Year Plan (1956-1961) differ from the First in terms of its approach to industrialisation?

- Ans**
- 1. Emphasised the development of heavy industries
 - 2. Shifted focus from heavy to light industries
 - 3. Prioritised private sector over public sector
 - 4. Continued the focus solely on agriculture

Q.8 With which game is the Indian player R Vaishali associated?

- Ans**
- 1. Chess
 - 2. Badminton
 - 3. Archery
 - 4. Boxing

Q.9 Which Act, introduced in 1861, established a legal framework for the governance of British India?

- Ans**
- 1. Government of India Act
 - 2. Indian Councils Act
 - 3. Rowlatt Act
 - 4. Indian Independence Act

Q.10 The Sangeet Natak Akademi Award carries a purse money of _____, in addition to a Angavastram and Tamrapatra.

- Ans
- 1. ₹3,00,000
 - 2. ₹2,50,000
 - 3. ₹5,00,000
 - 4. ₹1,00,000

Q.11 What was the targeted growth rate of the Eleventh Five-year Plan (2007–2012)?

- Ans
- 1. 6%
 - 2. 7%
 - 3. 8%
 - 4. 9%

Q.12 Who among the following founded the Mauryan Empire in 322 BCE?

- Ans
- 1. Chandragupta Maurya
 - 2. Dasaratha Maurya
 - 3. Samprati Maurya
 - 4. Shalishuka Maurya

Q.13 When did Hans Christian Oersted discover that the flow of electric current in a wire could deflect a nearby magnetic compass needle?

- Ans
- 1. 1810
 - 2. 1850
 - 3. 1830
 - 4. 1820

Q.14 Bholanath Prasanna was associated with which of the following musical instruments?

- Ans
- 1. Tanpura
 - 2. Jaltarangam
 - 3. Flute
 - 4. Sitar

Q.15 Acting as a 'medium of exchange' is an important function of _____.

- Ans
- 1. commodity
 - 2. metal
 - 3. water
 - 4. money

Q.16 In 1950, besides the chief justice of India, what was the number of other judges in the Supreme Court of India?

- Ans
- 1. Eight
 - 2. Five
 - 3. Seven
 - 4. Six

Q.17 Which of the following is Russia's highest civilian honour given to the Indian Prime Minister Narendra Modi in July 2024?

- Ans
- 1. Order of St. Andrew the Apostle
 - 2. St. Peter the Apostle Award
 - 3. Golden Eagle Award
 - 4. John the Apostle Award

Q.18 Which edition of Kumar Surendra Singh Memorial Shooting Championship 2023 was organised at Bhopal and Trivandrum?

- Ans
- 1. 21st
 - 2. 15th
 - 3. 18th
 - 4. 25th

Q.19 According to Census 2011, what was the percentage of Uttar Pradesh population of the total population of India?

- Ans
- 1. 17.5%
 - 2. 15.5%
 - 3. 16.5%
 - 4. 14.5%

Q.20 The Popir dance is performed by the Galo tribe of which of the following states?

- Ans
- 1. Kerala
 - 2. Goa
 - 3. Uttarakhand
 - 4. Arunachal Pradesh

Section : Part-C-Elementary Mathematics

Q.1 Sanjay and Tannu working separately can do a piece of work in 6 and 20 days, respectively. If they work for an alternate day, Tannu beginning, in how many days will the work be completed?

- Ans
- 1. 9.5
 - 2. 10.5
 - 3. 11.5
 - 4. 8.5

Q.2 Rakesh sold 154 chairs and had a gain equal to the selling price of 66 chairs. What is his profit percentage?

- Ans
- 1. 80%
 - 2. 75%
 - 3. 70%
 - 4. 85%

Q.3 The simple interest on a principal amount (in ₹) is ₹387 for a period of 2 years at the rate of 6% per annum. The principal amount (in ₹) is:

- Ans
- 1. 3234
 - 2. 3225
 - 3. 3221
 - 4. 3228

Q.4 Find the value of $\left[(16 \times 12) \times \left\{ 5 \div 5 \times \frac{(13 - 11)}{2} \right\} \right]$

- Ans
- 1. 192
 - 2. 174
 - 3. 183
 - 4. 177

Q.5 In an English exam of 50 marks of a class, 20 students had an average score of 40 marks, 25 students had an average score of 34 marks and 15 students had an average score of 26 marks. What is the weighted average score of the entire class?

- Ans
- 1. 35
 - 2. 33
 - 3. 34
 - 4. 36

Q.6 A bus goes from city P to Q in 45 minutes, covering a distance of 60 km, and comes back to city P with a speed of 40 km/hr. The average speed of the bus in the journey is _____ km/hr (correct to two decimal places).

- Ans
- 1. 56.67
 - 2. 53.67
 - 3. 56.33
 - 4. 53.33

Q.7 When difference between compound and simple interest for three years is ₹124 at 10% interest per annum, the principal is ₹_____

- Ans
- 1. 4000
 - 2. 4420
 - 3. 5200
 - 4. 3425

Q.8 What is the effective discount per cent (rounded off to 2 decimal places) if a shopkeeper offers a scheme, "buy five and get one free"?

- Ans
- 1. 16.33%
 - 2. 24.67%
 - 3. 24.33%
 - 4. 16.67%

Q.9 Three-fifth of a journey is covered at a speed of 84 km/hr, and the remaining distance is covered at the rate of 56 km/hr. The average speed for the whole journey (in km/hr) is:

- Ans
- 1. 70
 - 2. 55
 - 3. 65
 - 4. 60

Q.10 The volume of a right circular cone is $168\pi \text{ cm}^3$ and its height is 0.12 m. Find its radius.

- Ans
- 1. $\sqrt{41}$ cm
 - 2. $\sqrt{43}$ cm
 - 3. $\sqrt{42}$ cm
 - 4. $\sqrt{47}$ cm

Q.11 Vijay has ₹1218 with him. He divided it amongst his sons Ajay and Prakash and asked them to invest it at 10% rate of interest compounded annually. It was seen that Ajay and Prakash got same amount after 14 and 15 years respectively. How much (in ₹) did Vijay give to Prakash?

- Ans
- 1. 638
 - 2. 580
 - 3. 430
 - 4. 738

Q.12 If the selling price of 30 toys is equal to the cost price of 50 toys, then find the gain percentage (round up to two decimal places).

- Ans
- 1. 33.33%
 - 2. 83.33%
 - 3. 66.67%
 - 4. 25.55%

Q.13 Rupali scored twice as many marks in maths as she did in science. Her total marks in maths, science and computer are 234. If the ratio of her marks in maths and computer is 4 : 3. Find Rupali's marks in maths.

- Ans
- 1. 89
 - 2. 104
 - 3. 68
 - 4. 98

Q.14 Evaluate: $32 \div 8 \times 5 - 2 \times 3$

- Ans
- 1. 17
 - 2. 16
 - 3. 14
 - 4. 13

Q.15 The ages of A and B are in the ratio 4 : 9. If the difference of their ages is 10 years, compare their ages after 4 years from now.

- Ans
- 1. 12 : 19
 - 2. 25 : 29
 - 3. 6 : 11
 - 4. 13 : 23

Q.16 Zakir travels from City A to City B. If Zakir drives his car at $\frac{1}{4}$ of his normal speed, then he reaches City B 45 minutes late. Find the time (in minutes) that Zakir would have taken to travel from City A to City B if he drove at his normal speed.

- Ans
- 1. 12
 - 2. 6
 - 3. 15
 - 4. 16

Q.17 If 2% of $x = 336$, then x is equal to:

- Ans
- 1. 16900
 - 2. 33600
 - 3. 16800
 - 4. 33700

Q.18 The price of fuel decreases by 25%, 10% and 30% in three successive months, but increases by 60% in the fourth month. What is the percentage increase/decrease in the price of fuel in the fourth month as compared to its original price?

- Ans
- 1. Decreases by 30.76%
 - 2. Increases by 23.98%
 - 3. Decreases by 24.4%
 - 4. Increases by 27.32%

Q.19 The product of two numbers 5184 and their HCF is 24. What is their LCM?

- Ans
- 1. 324
 - 2. 125
 - 3. 343
 - 4. 216

Q.20 Find the value of $\left[(65 \div 5) \times \left\{ \frac{16}{8} + \frac{14}{2} \times (6 - 4) \right\} \right]$

- Ans
- 1. 198
 - 2. 208
 - 3. 215
 - 4. 193

Section : Part-D-English

Q.1 Select the most appropriate meaning of the underlined word.

The explorer encountered an ancient artifact in the cave.

- Ans
- 1. A form of currency
 - 2. A type of insect
 - 3. An object made by humans, usually of historical or cultural significance
 - 4. A sudden burst of energy

Q.2 Select the most appropriate ANTONYM of the given word.

Daring

- Ans
- 1. Cheerful
 - 2. Cautious
 - 3. Clean
 - 4. Confident

Q.3 Which of the following collocations given in the option is correct?

The report highlights the _____ significance of education in society.

- Ans
- 1. vastly
 - 2. major
 - 3. critical
 - 4. serious

Q.4 Identify the sentence with the INCORRECT usage of an adverb.

- Ans
- 1. We visit often our grandparents on weekends.
 - 2. Sita often visits her grandparents on weekends.
 - 3. She hardly ever visits her grandparents on weekends.
 - 4. Mihir sometimes visits his grandparents on weekends.

Q.5 Select the INCORRECTLY spelt word.

- Ans
- 1. Company
 - 2. Brellient
 - 3. Institute
 - 4. Request

Q.6 Select the most appropriate option to fill in the blank and complete the given idiom.

The disputed land is the _____ of discord between two families.

- Ans
- 1. mango
 - 2. orange
 - 3. apple
 - 4. grapes

Q.7 Select the most appropriate meaning of the given word.

Reluctant

- Ans
- 1. Confused and unsure
 - 2. Carefree and indifferent
 - 3. Unwilling or hesitant
 - 4. Eager and enthusiastic

Q.8 Select the most appropriate option to fill in the blank.

She has been working here _____ 5 years.

- Ans
- 1. by
 - 2. for
 - 3. in
 - 4. since

Q.9 Select the most appropriate synonym of the underlined word.

The scientist's research was perplexing to many people.

- Ans
- 1. Helpful
 - 2. Exciting
 - 3. Confusing
 - 4. Clear

Q.10 Fill in the blank with the suitable option.

_____ men and women are paid equally in the labour force and there is no division of labour based on gender, women's work in the home will have no value.

- Ans
- 1. Unless
 - 2. Up till
 - 3. Yet
 - 4. Although

Q.11 Select the most appropriate option to fill in the blank.

His _____ of the new policy was based on a careful analysis of its long-term implications.

- Ans
- 1. courtesy
 - 2. shyness
 - 3. assessment
 - 4. timidity

Q.12 Select the INCORRECTLY spelt word.

- Ans
- 1. Phillosophical
 - 2. Demonstrated
 - 3. Students
 - 4. Profound

Q.13 Select the most appropriate option to fill in the blank.

My brother goes for swimming every day _____ summer.

- Ans
- 1. thoroughly
 - 2. during
 - 3. for
 - 4. at

Q.14 Parts of the following sentence have been given as options. Select the option that contains an error.

'The team worked extremely efficient under pressure'.

- Ans
- 1. efficient
 - 2. extremely
 - 3. under pressure.
 - 4. The team worked

Q.15 Select the most appropriate synonym of the given word.

Gigantic

- Ans
- 1. Huge
 - 2. Tiny
 - 3. Fragile
 - 4. Rough

Comprehension:

In the following passage, some words have been deleted. Read the passage carefully and select the most appropriate option to fill in each blank.

In 1981, the US Surgeon General issued a public health warning that alcohol use by women (1) _____ pregnancy was the cause of physical and mental birth (2) _____ in children. This warning came in (3) _____ to growing recognition that a group of (4) _____ physical and mental impairments in children, now commonly known as foetal alcohol syndrome, were correlated with maternal alcohol use during pregnancy. Today, doctors and scientists (5) _____ that as many as 1 in 20 US school children may exhibit some form of foetal alcohol spectrum disorders, many of which cause lifelong challenges for those affected.

SubQuestion No : 16

Q.16 Select the most appropriate option to fill in blank no. 1.

- Ans
- 1. about
 - 2. along
 - 3. during
 - 4. on

Comprehension:

In the following passage, some words have been deleted. Read the passage carefully and select the most appropriate option to fill in each blank.

In 1981, the US Surgeon General issued a public health warning that alcohol use by women (1) pregnancy was the cause of physical and mental birth (2) in children. This warning came in (3) to growing recognition that a group of (4) physical and mental impairments in children, now commonly known as foetal alcohol syndrome, were correlated with maternal alcohol use during pregnancy. Today, doctors and scientists (5) that as many as 1 in 20 US school children may exhibit some form of foetal alcohol spectrum disorders, many of which cause lifelong challenges for those affected.

SubQuestion No : 17

Q.17 Select the most appropriate option to fill in blank no. 2.

Ans  1.
affection

 2.
process

 3.
defects

 4.
collects

Comprehension:

In the following passage, some words have been deleted. Read the passage carefully and select the most appropriate option to fill in each blank.

In 1981, the US Surgeon General issued a public health warning that alcohol use by women (1) pregnancy was the cause of physical and mental birth (2) in children. This warning came in (3) to growing recognition that a group of (4) physical and mental impairments in children, now commonly known as foetal alcohol syndrome, were correlated with maternal alcohol use during pregnancy. Today, doctors and scientists (5) that as many as 1 in 20 US school children may exhibit some form of foetal alcohol spectrum disorders, many of which cause lifelong challenges for those affected.

SubQuestion No : 18

Q.18 Select the most appropriate option to fill in blank no. 3.

Ans  1.
recuse

 2.
repose

 3.
response

 4.
repulse

Comprehension:

In the following passage, some words have been deleted. Read the passage carefully and select the most appropriate option to fill in each blank.

In 1981, the US Surgeon General issued a public health warning that alcohol use by women (1) pregnancy was the cause of physical and mental birth (2) in children. This warning came in (3) to growing recognition that a group of (4) physical and mental impairments in children, now commonly known as foetal alcohol syndrome, were correlated with maternal alcohol use during pregnancy. Today, doctors and scientists (5) that as many as 1 in 20 US school children may exhibit some form of foetal alcohol spectrum disorders, many of which cause lifelong challenges for those affected.

SubQuestion No : 19

Q.19 Select the most appropriate option to fill in blank no. 4.

Ans 1.
pivotal

2.
social

3.
severe

4.
limited

Comprehension:

In the following passage, some words have been deleted. Read the passage carefully and select the most appropriate option to fill in each blank.

In 1981, the US Surgeon General issued a public health warning that alcohol use by women (1) pregnancy was the cause of physical and mental birth (2) in children. This warning came in (3) to growing recognition that a group of (4) physical and mental impairments in children, now commonly known as foetal alcohol syndrome, were correlated with maternal alcohol use during pregnancy. Today, doctors and scientists (5) that as many as 1 in 20 US school children may exhibit some form of foetal alcohol spectrum disorders, many of which cause lifelong challenges for those affected.

SubQuestion No : 20

Q.20 Select the most appropriate option to fill in blank no. 5.

Ans 1.
subsidise

2.
vaporise

3.
normalise

4.
recognise

Section : Part-D-Hindi

Q.1 'छेड़ना' शब्द का निम्न में से किस वाक्य में सही प्रयोग नहीं हुआ है?

Ans 1. उसने ऐसी बात कहकर मेरे दिल को छेड़ दिया।

2. उसने सितार के तार छेड़ दिए।

3. तुमने तो मेरे पुराने घाव छेड़ दिए।

4. चाईना ने युद्ध छेड़ दिया।

Q.2 'गला छुड़ाना' मुहावरे का सही अर्थ इनमें से क्या होगा?

Ans 1. पीछा करना

2. पीछे भागना

3. पीछा छुड़ाना

4. पीछे पड़ना

Q.3 रिक्त स्थान की पूर्ति देशज शब्द से करें-

श्याम के घर का फर्श बहुत ही... है।

- Ans
- 1. मार्बल
 - 2. चिकना
 - 3. स्वर्ण
 - 4. उज्ज्वल

Q.4 निम्नलिखित में से स्त्रीलिंग शब्द की पहचान कीजिये-

- Ans
- 1. वृहस्पति
 - 2. झील
 - 3. तारा
 - 4. झरना

Q.5 निम्नलिखित वाक्य के किस खंड में अशुद्धि है?

ललित ने इस रहशय को अपने भीतर ही रखा।

- Ans
- 1. ललित
 - 2. रहशय
 - 3. भीतर
 - 4. रखा

Q.6 उपयुक्त विदेशज शब्द युक्त विकल्प से वाक्य पूर्ण करें -
'_____ बेटे को तुरंत बुलाओ।'

- Ans
- 1. इस स्त्री के
 - 2. इस सुंदरी के
 - 3. इस महिला के
 - 4. इस औरत के

Q.7 'भगवान शिव ने भाग्रासुर को भस्मिभूत कर दिया और देवताओं को अभय प्रदान किया।' उपरोक्त वाक्य के किस भाग में वर्तनी सम्बन्धी अशुद्धि है?

- Ans
- 1. अभय प्रदान किया
 - 2. और देवताओं को
 - 3. भगवान शिव ने भाग्रासुर को
 - 4. भस्मिभूत कर दिया

Q.8 निम्न वाक्य में रेखांकित पद को संशोधित कीजिए।
अमावस की रातें बड़ी रमणीय होती हैं।

- Ans
- 1. चाँदनी
 - 2. बादलों
 - 3. काली
 - 4. अंधेरी

Q.9 दिए गए वाक्य में शब्द या वाक्य खण्ड को बदलिए।

किसी भी आदमी को तो भेज दो।

- Ans
- 1. किसी आदमी को तो भेज ही दो।
 - 2. किसी आदमी को ही भेज दो।
 - 3. किसी आदमी को भेज दो।
 - 4. किसी आदमी को तो भेज दो।

Q.10 'भयभीत' का विलोम शब्द नीचे दिए विकल्पों में से चुनिए-

- Ans
- 1. मलिन
 - 2. निर्बल
 - 3. सबल
 - 4. निर्भीक

Q.11 तलवार एक _____ का उदाहरण है। उपयुक्त एकार्थी शब्द से रिक्त स्थान की पूर्ति कीजिए -

- Ans
- 1. शस्त्र
 - 2. औजार
 - 3. वीरता
 - 4. अस्त्र

Q.12 रीतिवाचक क्रियाविशेषण का प्रकार नहीं है?

- Ans
- 1. दोपहर
 - 2. ध्यान से
 - 3. सुबह
 - 4. अंदर

Q.13 'इच्छा' का पर्याय निम्न में से नहीं है-

- Ans
- 1. आकांक्षा
 - 2. ईप्सा
 - 3. लोभ
 - 4. कामना

Q.14 निम्नलिखित वाक्यांश के लिए उपयुक्त सार्थक शब्द है:

वह फूल जो खिला न हो

- Ans
- 1. पराग
 - 2. कली
 - 3. फूल केशर
 - 4. फूल

Q.15 'बरसात के मौसम में आसमान में अक्सर सात रंग दिखाई देते हैं।'

सर्वाधिक उपयुक्त विकल्प चुनकर वाक्य के रेखांकित अंश को बदलें-

- Ans
- 1. इंद्रधनुष
 - 2. सप्तवर्ण
 - 3. बदरंग
 - 4. सतरंगी

Comprehension:

निम्नलिखित गद्यांश में से कुछ शब्द हटा दिए गए हैं। दिए गए विकल्पों की सहायता से रिक्त स्थानों की पूर्ति कीजिए। प्रत्येक संख्या के लिए उपयुक्त विकल्प का चयन कीजिए-

मेघाच्छादित आकाश। तेज _____(1) हवाएँ तन, मन और आत्मा तक में सिहरन सी भरती हुई। रह-रहकर होती हुई बारिश। धीमी और निशब्द। गीली हवाएँ छतरी को उलट देने के _____(2) आतुर। डगमगाती हुई दिन की नौका। भारत में चौमास और अगहन-पूस जैसा समय। किंतु यहाँ लंदन में यह मई _____(3) एक दिन है। आकाश की अलगनी में मेघों की भारी और गीली चादरें सूख रही हैं जिन्हें हटाकर सूर्य कभी-कभी नीचे झाँकता है और धूप नीचे धरती में ऐसे उतरती है - घड़ी _____(4) के लिए - जैसे मायावी परी हो और सहसा छप्प (अदृश्य) हो जाती है। धूप यहाँ इतनी दुर्लभ और कीमती है जैसे सोना हो। धूप का सोना तो भारत में बरसता है - बदस्तूर। जब तक अ-भाव का सामना नहीं होता; तब तक भाव की संपदा का अनुभव _____(5) होता।

SubQuestion No : 16

Q.16 उपरोक्त गद्यांश के आधार पर निम्नलिखित रिक्त स्थान की पूर्ति करें।
तेज _____(1) हवाएँ तन, मन और आत्मा तक में सिहरन सी भरती हुई।

- Ans**
- 1. पास
 - 2. खराब
 - 3. बर्फानी
 - 4. दूर

Comprehension:

निम्नलिखित गद्यांश में से कुछ शब्द हटा दिए गए हैं। दिए गए विकल्पों की सहायता से रिक्त स्थानों की पूर्ति कीजिए। प्रत्येक संख्या के लिए उपयुक्त विकल्प का चयन कीजिए-

मेघाच्छादित आकाश। तेज _____(1) हवाएँ तन, मन और आत्मा तक में सिहरन सी भरती हुई। रह-रहकर होती हुई बारिश। धीमी और निशब्द। गीली हवाएँ छतरी को उलट देने के _____(2) आतुर। डगमगाती हुई दिन की नौका। भारत में चौमास और अगहन-पूस जैसा समय। किंतु यहाँ लंदन में यह मई _____(3) एक दिन है। आकाश की अलगनी में मेघों की भारी और गीली चादरें सूख रही हैं जिन्हें हटाकर सूर्य कभी-कभी नीचे झाँकता है और धूप नीचे धरती में ऐसे उतरती है - घड़ी _____(4) के लिए - जैसे मायावी परी हो और सहसा छप्प (अदृश्य) हो जाती है। धूप यहाँ इतनी दुर्लभ और कीमती है जैसे सोना हो। धूप का सोना तो भारत में बरसता है - बदस्तूर। जब तक अ-भाव का सामना नहीं होता; तब तक भाव की संपदा का अनुभव _____(5) होता।

SubQuestion No : 17

Q.17 उपरोक्त गद्यांश के आधार पर निम्नलिखित रिक्त स्थान की पूर्ति करें।
गीली हवाएँ छतरी को उलट देने के _____(2) आतुर

- Ans**
- 1. लिए
 - 2. दिये
 - 3. पर
 - 4. नीचे

Comprehension:

निम्नलिखित गद्यांश में से कुछ शब्द हटा दिए गए हैं। दिए गए विकल्पों की सहायता से रिक्त स्थानों की पूर्ति कीजिए। प्रत्येक संख्या के लिए उपयुक्त विकल्प का चयन कीजिए-

मेघाच्छादित आकाश। तेज _____(1) हवाएँ तन, मन और आत्मा तक में सिहरन सी भरती हुई। रह-रहकर होती हुई बारिश। धीमी और निशब्द। गीली हवाएँ छतरी को उलट देने के _____(2) आतुर। डगमगाती हुई दिन की नौका। भारत में चौमास और अगहन-पूस जैसा समय। किंतु यहाँ लंदन में यह मई _____(3) एक दिन है। आकाश की अलगनी में मेघों की भारी और गीली चादरें सूख रही हैं जिन्हें हटाकर सूर्य कभी-कभी नीचे झाँकता है और धूप नीचे धरती में ऐसे उतरती है - घड़ी _____(4) के लिए - जैसे मायावी परी हो और सहसा छप्प (अदृश्य) हो जाती है। धूप यहाँ इतनी दुर्लभ और कीमती है जैसे सोना हो। धूप का सोना तो भारत में बरसता है - बदस्तूर। जब तक अ-भाव का सामना नहीं होता; तब तक भाव की संपदा का अनुभव _____(5) होता।

SubQuestion No : 18

Q.18 उपरोक्त गद्यांश के आधार पर निम्नलिखित रिक्त स्थान की पूर्ति करें।
किंतु यहाँ लंदन में यह मई _____(3) एक दिन है।

- Ans**
- 1. का
 - 2. की
 - 3. को
 - 4. के

Comprehension:

निम्नलिखित गद्यांश में से कुछ शब्द हटा दिए गए हैं। दिए गए विकल्पों की सहायता से रिक्त स्थानों की पूर्ति कीजिए। प्रत्येक संख्या के लिए उपयुक्त विकल्प का चयन कीजिए-

मेघाच्छादित आकाश। तेज _____(1) हवाएँ तन, मन और आत्मा तक में सिहरन सी भरती हुईं। रह-रहकर होती हुई बारिश। धीमी और निशब्द। गीली हवाएँ छतरी को उलट देने के _____(2) आतुर। डगमगाती हुई दिन की नौका। भारत में चौमास और अगहन-पूस जैसा समय। किंतु यहाँ लंदन में यह मई _____(3) एक दिन है। आकाश की अलगनी में मेघों की भारी और गीली चादरें सूख रही हैं जिन्हें हटाकर सूर्य कभी-कभी नीचे झाँकता है और धूप नीचे धरती में ऐसे उतरती है - घड़ी _____(4) के लिए - जैसे मायावी परी हो और सहसा छप्प (अदृश्य) हो जाती है। धूप यहाँ इतनी दुर्लभ और कीमती है जैसे सोना हो। धूप का सोना तो भारत में बरसता है - बदस्तूर। जब तक अ-भाव का सामना नहीं होता; तब तक भाव की संपदा का अनुभव _____(5) होता।

SubQuestion No : 19

Q.19 उपरोक्त गद्यांश के आधार पर निम्नलिखित रिक्त स्थान की पूर्ति करें।
घड़ी _____(4)के लिए

- Ans**
- 1. जी
 - 2. पर
 - 3. भर
 - 4. के

Comprehension:

निम्नलिखित गद्यांश में से कुछ शब्द हटा दिए गए हैं। दिए गए विकल्पों की सहायता से रिक्त स्थानों की पूर्ति कीजिए। प्रत्येक संख्या के लिए उपयुक्त विकल्प का चयन कीजिए-

मेघाच्छादित आकाश। तेज _____(1) हवाएँ तन, मन और आत्मा तक में सिहरन सी भरती हुईं। रह-रहकर होती हुई बारिश। धीमी और निशब्द। गीली हवाएँ छतरी को उलट देने के _____(2) आतुर। डगमगाती हुई दिन की नौका। भारत में चौमास और अगहन-पूस जैसा समय। किंतु यहाँ लंदन में यह मई _____(3) एक दिन है। आकाश की अलगनी में मेघों की भारी और गीली चादरें सूख रही हैं जिन्हें हटाकर सूर्य कभी-कभी नीचे झाँकता है और धूप नीचे धरती में ऐसे उतरती है - घड़ी _____(4) के लिए - जैसे मायावी परी हो और सहसा छप्प (अदृश्य) हो जाती है। धूप यहाँ इतनी दुर्लभ और कीमती है जैसे सोना हो। धूप का सोना तो भारत में बरसता है - बदस्तूर। जब तक अ-भाव का सामना नहीं होता; तब तक भाव की संपदा का अनुभव _____(5) होता।

SubQuestion No : 20

Q.20 उपरोक्त गद्यांश के आधार पर निम्नलिखित रिक्त स्थान की पूर्ति करें।
जब तक अ-भाव का सामना नहीं होता; तब तक भाव की संपदा का अनुभव _____(5) होता।

- Ans**
- 1. नहीं
 - 2. वही
 - 3. तब
 - 4. जब