

# Constable GD in CAPFs and SSF Rifleman GD in AR and Sepoy in NCB Examination 2025

Exam Date	18/02/2025
Exam Time	9:00 AM - 10:00 AM
Subject	Constable GD Examination 2025

## Section : Part-A-General Intelligence and Reasoning

**Q.1** Seven people, A, B, L, M, N, S and T, are sitting in a row, facing north (but not necessarily in the same order). No one sits to the left of B. Only four people sit between B and N. Only three people sit to the right of L. M sits to the immediate left of S. A is not an immediate neighbour of L. Who sits third to the left of A?

- Ans**
- 1. T
  - 2. S
  - 3. L
  - 4. N

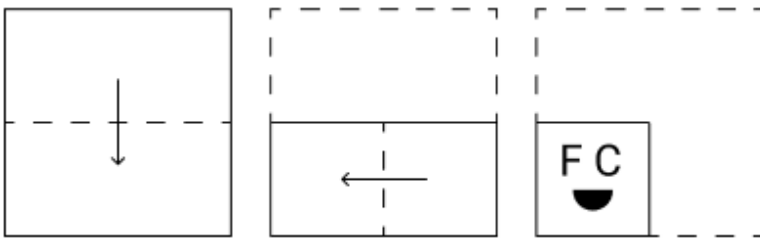
**Q.2** L, M, N, O, P, Q and R are sitting around a circular table facing the centre (but not necessarily in the same order). R is sitting to the immediate left of Q and immediate right of O. M is sitting to the immediate left of O and immediate right of L. P is sitting to the immediate left of L and immediate right of N. Who is the immediate neighbour of both Q and P?

- Ans**
- 1. M
  - 2. L
  - 3. R
  - 4. N

**Q.3** P is the brother of R. R is the mother of Q. S is the wife of Q. T is the daughter of S. How is P related to T?

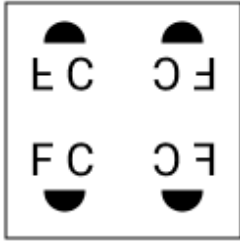
- Ans**
- 1. Mother's brother
  - 2. Father's mother's brother
  - 3. Father's father's brother
  - 4. Father's brother

Q.4 A paper is folded and punched as shown below. How will it appear when unfolded?




Ans

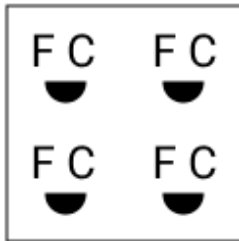
✓ 1.



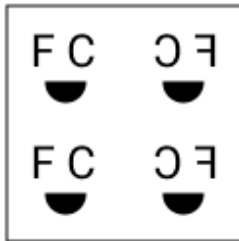
✗ 2.



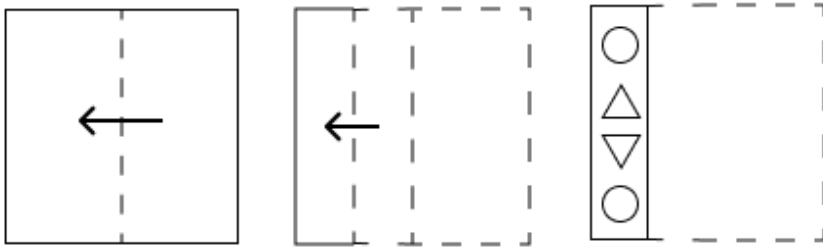
✗ 3.



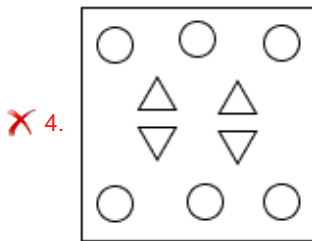
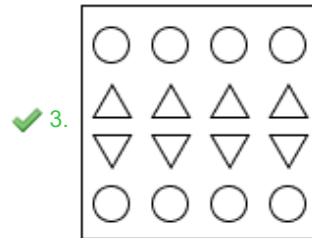
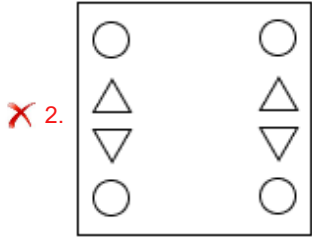
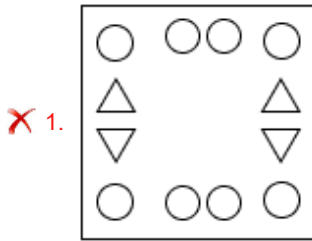
✗ 4.



Q.5 A paper is folded and cut as shown below. How will it appear when unfolded?



Ans



Q.6 The position(s) of how many letters will remain unchanged if each letter in the word HOSTILE is arranged in the English alphabetical order?

- Ans
- ✓ 1. 0
  - ✗ 2. 1
  - ✗ 3. 3
  - ✗ 4. 2

Q.7 What will come in the place of the question mark (?) in the following equation if '+' and '-' are interchanged and 'x' and '÷' are interchanged?

$$97 + 70 - 35 \times 5 \div 4 = ?$$

- Ans
- ✗ 1. 196
  - ✗ 2. 194
  - ✓ 3. 195
  - ✗ 4. 193

Q.8 What should come in place of the question mark (?) in the given series?

201 200 197 192 185 ?

- Ans
- 1. 176
  - 2. 175
  - 3. 177
  - 4. 174

Q.9 Find the correct alternative that when filled in the blanks in the same sequence will make the series logically complete.

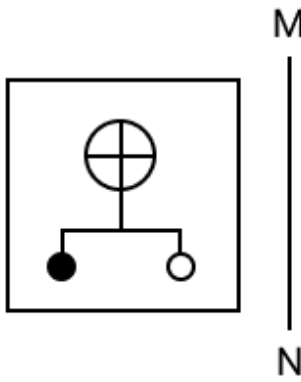
\_DGCE\_JFHJ\_IKMP\_ NPS\_

- Ans
- 1. CGNLP
  - 2. CHNKP
  - 3. BHMKO
  - 4. BGMLO

Q.10 In a certain code language, 'POLE' is coded as '6431' and 'PLOT' is coded as '4635'. How is 'T' coded in the given language?

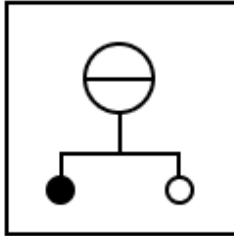
- Ans
- 1. 5
  - 2. 3
  - 3. 1
  - 4. 4

Q.11 Select the correct mirror image of the given figure when the mirror is placed at MN as shown below.

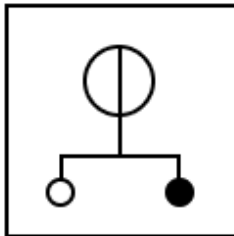


Ans

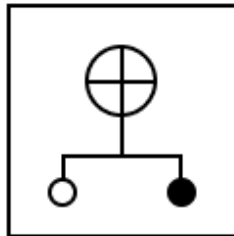
X 1.



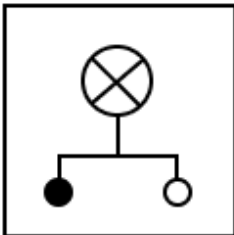
X 2.



✓ 3.



X 4.



Q.12 Based on the English alphabetical order, three of the following four letter-clusters are alike in a certain way and thus form a group. Which letter-cluster DOES NOT belong to that group?

(Note: The odd one out is not based on the number of consonants/vowels or their position in the letter-cluster.)

Ans

X 1. TYV

X 2. RWT

✓ 3. XCA

X 4. LQN

**Q.13** Read the given statements and conclusions carefully. Assuming that the information given in the statements is true, even if it appears to be at variance with commonly known facts, decide which of the given conclusions logically follow(s) from the statements.

**Statements:**

Some saucers are plates.

No plate is a bowl.

No plate is a fork.

**Conclusions:**

(I): No saucer is a bowl.

(II): Some forks are bowls.

**Ans**  1. Only conclusion (II) follows.

2. Neither conclusion (I) nor (II) follows.

3. Only conclusion (I) follows.

4. Both conclusions (I) and (II) follow.

**Q.14** YE 12 is related to WG 3 in a certain way. In the same way, CS 44 is related to AU 11. To which of the following is DH 36 related, following the same logic?

**Ans**  1. BJ 8

2. BH 8

3. BJ 9

4. BH 9

**Q.15** What should come in place of the question mark (?) in the given series based on the English alphabetical order?

ACK DFN GIQ JLT ?

**Ans**  1. MOW

2. KOW

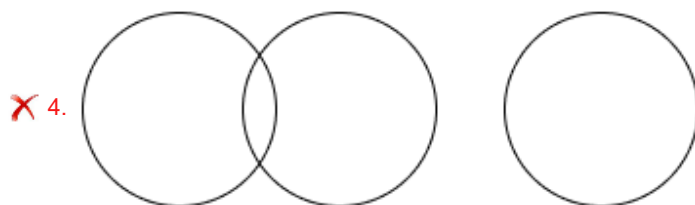

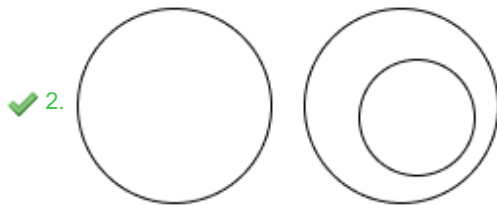
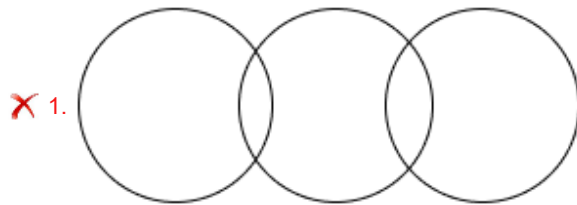
3. KMU

4. MNU

Q.16 Select the Venn diagram that best illustrates the relationship between the following classes.

Cats, Animals, Boxes

Ans



Q.17 What should come in place of the question mark (?) in the given series?

911 921 930 938 945 ?

Ans  1. 950

2. 952

3. 951

4. 953

Q.18 In a coded language 'FLAG' is coded as '1764' and 'GOLF' is coded as '4726'. What is the code for A in the same code language?

Ans  1. 1

2. 7

3. 4

4. 2

Q.19 TFIM is related to VEKL in a certain way based on the English alphabetical order. In the same way, YADS is related to AZFR. To which of the given options is JFQZ related, following the same logic?

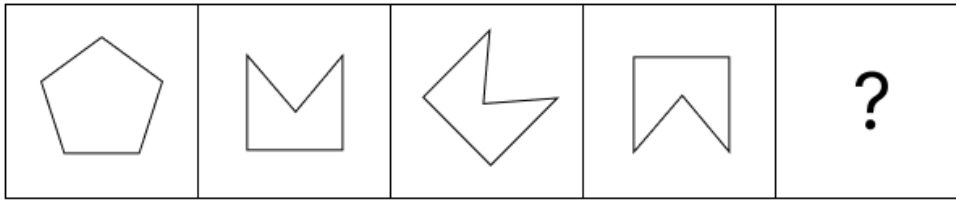
Ans  1. NCTY

2. LESY

3. IEPY

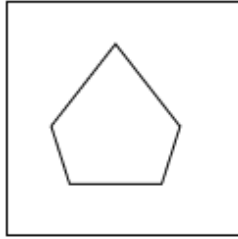
4. MDUX

Q.20 Identify the figure given in the options which when put in place of the question mark (?) will logically complete the series.

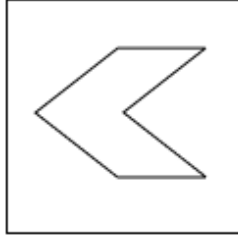


Ans

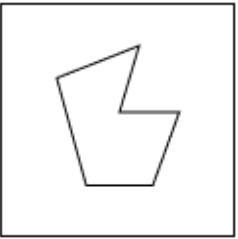
✓ 1.



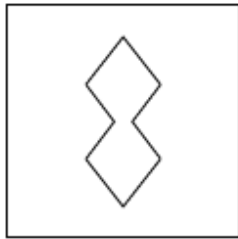
✗ 2.



✗ 3.



✗ 4.



Section : Part-B-General Knowledge and General awareness

Q.1 Delhi signed an MoU with the central government to implement which education scheme in October 2024?

- Ans
- ✗ 1. Sarva Shiksha Abhiyan
  - ✗ 2. Mid-Day Meal Scheme
  - ✓ 3. PM-SHRI Scheme
  - ✗ 4. National Programme for Education of Girls at Elementary Level

Q.2 Which Article of the Constitution provides for the adjudication of interstate water disputes?

- Ans
- ✗ 1. Article 210
  - ✗ 2. Article 258
  - ✗ 3. Article 215
  - ✓ 4. Article 262

Q.3 Which women's organisation was founded by Sarojini Naidu in 1917?

- Ans
- 1. Women's India Association
  - 2. National Federation of Indian Women
  - 3. Bharat Stree Mahamandal
  - 4. All India Women's Conference

Q.4 Which physiographic zone of Uttarakhand is popularly known as Himadri? This zone comprises the Zaskar and sections of the Great Himalayan ranges.

- Ans
- 1. Western
  - 2. Northern
  - 3. Eastern
  - 4. Southern

Q.5 Which industry type is involved in activities like farming, fishing and forestry?

- Ans
- 1. Primary industry
  - 2. Manufacturing industry
  - 3. Service industry
  - 4. Genetic industry

Q.6 Which of the following statements is FALSE about the National Population Policy 2000?

- Ans
- 1. Reducing infant mortality rate to below 15 per 1000 live births
  - 2. Promoting delayed marriage for girls
  - 3. Imparting free and compulsory school education up to 14 years of age
  - 4. Achieving universal immunization of children against all vaccine

Q.7 Which of the following crops saw a significant increase in area and productivity due to the Green Revolution in India?

- Ans
- 1. Rice and cotton
  - 2. Sugarcane and pulses
  - 3. Wheat and rice
  - 4. Tea and coffee

Q.8 Muthuswami Dikshitar belonged to which of the following music genres?

- Ans
- 1. Carnatic music
  - 2. Hindustani music
  - 3. Folk music
  - 4. Qawwali

Q.9 Which element was isolated by Marie Curie in 1898 by extracting the remaining radioactive components of pitchblende after removing Uranium?

- Ans
- 1. Thorium
  - 2. Polonium
  - 3. Strontium
  - 4. Cesium

Q.10 Which is the most attractive and unique festival of Assam, where the barter system comes alive?

- Ans
- 1. Chikalkalo
  - 2. Madai
  - 3. Junbeel Mela
  - 4. Shigmo

Q.11 In which year was veteran actor and Bharatanatyam dancer Vyjayanthimala Bali given the Padma Vibhushan award?

- Ans
- 1. 2019
  - 2. 2022
  - 3. 2024
  - 4. 2015

Q.12 If the government decides to privatise a major public sector industry, what might be an unintended consequence?

- Ans
- 1. Reduction in corruption
  - 2. Immediate increase in public revenue
  - 3. Enhancement of operational efficiency
  - 4. Potential monopolistic practices

Q.13 Garib Kalyan Rojgar Abhiyan was introduced by the Government of India in how many states?

- Ans
- 1. Four
  - 2. Seven
  - 3. Six
  - 4. Five

Q.14 Which of the following players has won the Arjuna Award in Badminton in 2022?

- Ans
- 1. Deep Grace Ekka
  - 2. Lakshya Sen
  - 3. Nikhat Zareen
  - 4. Shushila Devi

Q.15 A player/team needs to win two consecutive points immediately after '\_\_\_\_\_' to win the game as per the International Tennis Federation norms.

- Ans
- 1. advantage
  - 2. set
  - 3. deuce
  - 4. love

Q.16 In which of the following Buddhist texts are the rules mentioned for Buddhist monks and nuns?

- Ans
- 1. Dhammapada
  - 2. Abhidhamma Pitaka
  - 3. Vinaya Pitaka
  - 4. Sutta Pitaka

Q.17 Which Article of the Indian Constitution guarantees equality before the law?

- Ans
- 1. Article 16
  - 2. Article 14
  - 3. Article 15
  - 4. Article 17

Q.18 The combination of high levels of which type of fats with low HDL cholesterol or high LDL cholesterol levels can increase the risk of heart attack and stroke?

- Ans
- 1. Triglycerides
  - 2. Nonglycerides
  - 3. Monoglycerides
  - 4. Diglycerides

Q.19 Who was the founder of the Sattriya dance form of India?

- Ans
- 1. Siddhendra Yogi
  - 2. Bharata
  - 3. Sankardev
  - 4. Janaki Prasad

Q.20 In September 2024, wrestlers Vinesh Phogat and Bajrang Punia joined which political party ahead of the Haryana assembly elections?

- Ans
- 1. Communist Party of India (Marxist) (CPI(M))
  - 2. Bharatiya Janata Party (BJP)
  - 3. Communist Party of India (CPI)
  - 4. Indian National Congress (INC)

Section : Part-C-Elementary Mathematics

Q.1 Two numbers, m and n, are such that the sum of 4% of m and 6% of n is equal to half of the sum of 7% of m and 14% of n. Determine the ratio of m : n.

- Ans
- 1. 1 : 2
  - 2. 2 : 3
  - 3. 2 : 1
  - 4. 3 : 2

Q.2 There are 13 members in group A, 10 members in group B and 45 members in group C. All the members of these groups went to a restaurant. The average amount spent on each member of group A, B and C is ₹367, ₹112 and ₹401, respectively. The total average amount (in ₹) spent per member is:

- Ans
- 1. 350
  - 2. 354
  - 3. 352
  - 4. 355

Q.3 A can complete a task in 16 days, and B can complete the same task in 24 days. If A and B work on alternate days starting with A, in how many days will the task be completed?

- Ans
- 1. 20
  - 2. 17
  - 3. 18
  - 4. 19

Q.4 Two trains having lengths of 240 m and 410 m are running at speeds of 80 km/h and 110 km/h, respectively, in the same direction. The time taken (in minutes) by the faster train, coming from behind, to completely cross the other train is:

- Ans
- 1. 4
  - 2. 1.5
  - 3. 2
  - 4. 1.3

Q.5 Find the simple interest (in ₹) on ₹2000 at 6.75% per annum rate of interest for the period from 3 February 2023 to 17 April 2023.

- Ans
- 1. 25
  - 2. 28
  - 3. 27
  - 4. 26

Q.6 The LCM of 16, 45, 135 and 144 is:

- Ans
- 1. 2132
  - 2. 2080
  - 3. 2160
  - 4. 2191

Q.7 Asha bought a mixer for ₹2,160 and sold it for ₹1,998. Find the loss percentage.

- Ans
- 1. 8.5%
  - 2. 7.5%
  - 3. 8.15%
  - 4. 7.85%

Q.8 The capacity of a cuboidal tank of water is 62000 litres. Find the breadth of the tank, if its length and depth are 2.5 m and 10 m, respectively.

- Ans
- 1. 2.38 m
  - 2. 2.58 m
  - 3. 2.28 m
  - 4. 2.48 m

Q.9 If the numerator of a fraction is decreased by 10% and the denominator is increased by 15%, the value of the new fraction becomes  $\frac{2}{5}$ . What is the original fraction?

- Ans
- 1.  $\frac{21}{41}$
  - 2.  $\frac{23}{45}$
  - 3.  $\frac{17}{27}$
  - 4.  $\frac{32}{55}$

Q.10 The marked price of an electronic watch in a store is ₹25,960, and it is available at a discount of 20%. What is the price (in ₹) that a customer pays if he buys it from the store?

- Ans
- 1. ₹20,876
  - 2. ₹20,867
  - 3. ₹20,768
  - 4. ₹20,786

Q.11 The price (per litre) of petrol increases by 70%. By what percent should its consumption be reduced such that the expenditure on it increases by 19% only?

- Ans
- 1. 65%
  - 2. 30%
  - 3. 36%
  - 4. 70%

Q.12 Four runners started running simultaneously from a point on a circular track. They took 280 seconds, 350 seconds, 420 seconds and 560 seconds, respectively, to complete one round. After how much time (in seconds) do they meet at the starting point for the first time?

- Ans
- 1. 5200
  - 2. 3600
  - 3. 2400
  - 4. 8400

Q.13 In an experiment, the refractive index of water was found to be 1.35, 1.29, 1.32 and 1.36. What is the average refractive index of water?

- Ans
- 1. 1.36
  - 2. 1.33
  - 3. 1.32
  - 4. 1.30

Q.14 Manoj has ₹1230 with him. He divided it amongst his sons Anand and Anil and asked them to invest it at 5% rate of interest compounded annually. It was seen that Anand and Anil got same amount after 12 and 13 years respectively. How much (in ₹) did Manoj give to Anil?

- Ans
- 1. 600
  - 2. 630
  - 3. 730
  - 4. 450

Q.15 LCM and HCF of two numbers are 54 and 9 respectively. If one of the numbers is 18, then find the other number.

- Ans
- 1. 30
  - 2. 24
  - 3. 27
  - 4. 25

Q.16 If at same rate of interest, in 2 years, the simple interest is ₹42 and compound interest is ₹45, then what is the principal (in ₹)?

- Ans
- 1. 147
  - 2. 151
  - 3. 140
  - 4. 142

Q.17 A, B and C are sections of Class X. The ratio of A : B is 9 : 4 and that of A : C is 3 : 2. Find A : B : C.

- Ans
- 1. 12 : 8 : 27
  - 2. 27 : 12 : 8
  - 3. 8 : 12 : 27
  - 4. 8 : 27 : 12

Q.18 400 apples were bought at ₹1240 per hundred and were sold at a profit of ₹840. Find the selling price (in ₹) per dozen of apples.

- Ans
- 1. 184
  - 2. 189
  - 3. 174
  - 4. 164

Q.19 Evaluate:  $(-9) - (-60) \div (-12) + (-4) \times 9$

- Ans
- 1. -49
  - 2. -52
  - 3. -50
  - 4. -53

Q.20

Find the value of  $\left[ (17 \times 10) \times \left\{ 8 \div 8 \times \frac{(19 - 12)}{7} \right\} \right]$

- Ans
- 1. 150
  - 2. 181
  - 3. 152
  - 4. 170

Section : Part-D-English

Q.1 Select the INCORRECTLY spelt word.

- Ans
- 1. Combination
  - 2. Refer
  - 3. Sculptor
  - 4. Believ

Q.2 Fill in the blank with the most suitable collocation.

We were at school together, but our \_\_\_\_\_ after we left school.

- Ans
- 1. friendship developed
  - 2. friends grown
  - 3. friends developed
  - 4. friendship grows

Q.3 Select the most appropriate option that can substitute the underlined words in the given sentence.

He saved money each month in case of afford a new car.

- Ans
- 1. in charge of affording new car
  - 2. in order to afford a new car
  - 3. in the mean time afford new car
  - 4. in addition to afford the new car

Q.4 Select the most appropriate meaning of the given idiom.

Cost an arm and a leg

- Ans
- 1. Inexpensive
  - 2. Very expensive
  - 3. Free of charge
  - 4. Affordable

Q.5 Select the most appropriate ANTONYM of the given word.

Feeble

- Ans
- 1. Sickly
  - 2. Delicate
  - 3. Strong
  - 4. Rare

Q.6 Identify the sentence with the INCORRECT usage of an adverb.

- Ans
- 1. Nila never arrives on time for meetings.
  - 2. Nila hardly ever arrives on time for meetings.
  - 3. Nila arrives always on time for meetings.
  - 4. Nila usually arrives on time for meetings.

Q.7 Select the most appropriate synonym of the given word.

The speaker's monotonous voice lulled the audience to sleep.

- Ans
- 1. Varied
  - 2. Dull
  - 3. Exciting
  - 4. Interesting

Q.8 Select the most appropriate ANTONYM of the given word.

Spurious

- Ans
- 1. Bogus
  - 2. Fake
  - 3. Authentic
  - 4. Counterfeit

Q.9 Select the INCORRECTLY spelt word.

- Ans
- 1. Expllorer
  - 2. Acoustic
  - 3. Curious
  - 4. Selection

Q.10 Select the most appropriate option to fill in the blank.

I can't go out tonight because I have \_\_\_\_\_ homework to do.

- Ans
- 1. few
  - 2. many
  - 3. the little
  - 4. a lot of

Q.11 Select the most appropriate synonym of the given word.

Haughty

- Ans
- 1. Sheepish
  - 2. Modest
  - 3. Bashful
  - 4. Arrogant

Q.12 Select the most appropriate meaning of the underlined phrase/idiom.

Losing my job turned out to be a blessing in disguise, as it pushed me to pursue my passion and start my own successful business.

- Ans
- 1. something which is a hidden danger
  - 2. something which shows compassion
  - 3. something one can gift to others
  - 4. something unfortunate that results in an unforeseen positive outcome

Q.13 Select the most appropriate option to fill in the blank.

My flight got delayed yesterday, so I reached my \_\_\_\_\_ very late.

- Ans
- 1. designation
  - 2. destiny
  - 3. rabble
  - 4. destination

Q.14 Identify the sentence with the INCORRECT usage of adverb.

- Ans
- 1. They were surprisingly quick to understand the complex instructions.
  - 2. Mona spoke softly so that everyone could hear her clearly.
  - 3. The manager was highly pleased with the results.
  - 4. Andrew hardly could believe the news when he heard it.

Q.15 Select the most appropriate option that can substitute the underlined segment in the given sentence.

Black carbon consists of tiny particles that can waft high over the atmosphere and be carried for thousands of kilometres.

- Ans
- 1. high onto the atmosphere
  - 2. high across the atmosphere
  - 3. high above the atmosphere
  - 4. high into the atmosphere

**Comprehension:**

In the following passage, some words have been deleted. Read the passage carefully and select the most appropriate option to fill in each blank.

In today's fast-paced world, stress is (1) \_\_\_\_\_. However, adopting (2) \_\_\_\_\_ mechanisms is crucial for well-being. Engaging in activities like meditation and exercise can (3) \_\_\_\_\_ manage stress levels. While some stress is a natural response, (4) \_\_\_\_\_ stress can negatively impact both physical and mental health. prioritising self-care is essential for a (5) \_\_\_\_\_ and healthy lifestyle.

**SubQuestion No : 16**

Q.16 Select the most appropriate option to fill in blank no. 1.

- Ans
- 1. crucial
  - 2. inevitable
  - 3. unrealistic
  - 4. recurring

**Comprehension:**

In the following passage, some words have been deleted. Read the passage carefully and select the most appropriate option to fill in each blank.

In today's fast-paced world, stress is (1) \_\_\_\_\_. However, adopting (2) \_\_\_\_\_ mechanisms is crucial for well-being. Engaging in activities like meditation and exercise can (3) \_\_\_\_\_ manage stress levels. While some stress is a natural response, (4) \_\_\_\_\_ stress can negatively impact both physical and mental health. prioritising self-care is essential for a (5) \_\_\_\_\_ and healthy lifestyle.

**SubQuestion No : 17**

Q.17 Select the most appropriate option to fill in blank no. 2.

- Ans
- 1. coping
  - 2. obsolete
  - 3. remedial
  - 4. creative

**Comprehension:**

In the following passage, some words have been deleted. Read the passage carefully and select the most appropriate option to fill in each blank.

In today's fast-paced world, stress is (1) \_\_\_\_\_. However, adopting (2) \_\_\_\_\_ mechanisms is crucial for well-being. Engaging in activities like meditation and exercise can (3) \_\_\_\_\_ manage stress levels. While some stress is a natural response, (4) \_\_\_\_\_ stress can negatively impact both physical and mental health. prioritising self-care is essential for a (5) \_\_\_\_\_ and healthy lifestyle.

**SubQuestion No : 18**

Q.18 Select the most appropriate option to fill in blank no. 3.

- Ans
- 1. help
  - 2. adds
  - 3. add
  - 4. helps

**Comprehension:**

In the following passage, some words have been deleted. Read the passage carefully and select the most appropriate option to fill in each blank.

In today's fast-paced world, stress is (1) \_\_\_\_\_. However, adopting (2) \_\_\_\_\_ mechanisms is crucial for well-being. Engaging in activities like meditation and exercise can (3) \_\_\_\_\_ manage stress levels. While some stress is a natural response, (4) \_\_\_\_\_ stress can negatively impact both physical and mental health. prioritising self-care is essential for a (5) \_\_\_\_\_ and healthy lifestyle.

**SubQuestion No : 19**

**Q.19** Select the most appropriate option to fill in blank no. 4.

- Ans**
- 1. occasional
  - 2. cancerous
  - 3. malignant
  - 4. recurring

**Comprehension:**

In the following passage, some words have been deleted. Read the passage carefully and select the most appropriate option to fill in each blank.

In today's fast-paced world, stress is (1) \_\_\_\_\_. However, adopting (2) \_\_\_\_\_ mechanisms is crucial for well-being. Engaging in activities like meditation and exercise can (3) \_\_\_\_\_ manage stress levels. While some stress is a natural response, (4) \_\_\_\_\_ stress can negatively impact both physical and mental health. prioritising self-care is essential for a (5) \_\_\_\_\_ and healthy lifestyle.

**SubQuestion No : 20**

**Q.20** Select the most appropriate option to fill in blank no. 5.

- Ans**
- 1. calming
  - 2. nutritious
  - 3. balanced
  - 4. sober

**Section : Part-D-Hindi**

**Q.1** दिए गए शब्द का उचित विलोम शब्द चुनिए-

स्वाधीन

- Ans**
- 1. पराधीन
  - 2. व्याधीन
  - 3. याचक
  - 4. गुलाम

**Q.2** 'यदि नरेश स्वयं न आया तो अपने पुत्र को भेजेगा।' निम्नलिखित विकल्पों में से इस वाक्य के लिए कौन सा एक उचित संयुक्त वाक्य होगा?

- Ans**
- 1. तोनरेश अपने पुत्र को भेजेगा, स्वयं आएगा।
  - 2. स्वयं आएगा या अपने पुत्र को भेजेगा, नरेश
  - 3. अपने पुत्र को भेजे गातो नरेश स्वयं आएगा ।
  - 4. या तो नरेश स्वयं आएगा या अपने पुत्र को भेजेगा।

**Q.3** उपयुक्त तद्भव शब्द चुनकर निम्न वाक्य पूर्ण करें-  
'कृपया मेरे बेटे को अपना \_\_\_\_\_ दीजिए।'

- Ans**
- 1. आशीस
  - 2. आशीष
  - 3. असीस
  - 4. आषीस

Q.4 निम्नलिखित में से विशेषण की दृष्टि से अशुद्ध वाक्य है-

- Ans
- 1. मनोज ने नीली कमीज पहनी है।
  - 2. यह ताजा पनीर है।
  - 3. शिखा ने नया मकान खरीदा है।
  - 4. यह दूध कितना दुबला है।

Q.5 दिए गए वाक्यांश के लिए एक शब्द होगा—  
जो छेदा न जा सके-

- Ans
- 1. छिद्रित
  - 2. अछेह
  - 3. अछेद्य
  - 4. अछेद

Q.6 निम्नलिखित में से कौनसा वाक्य संज्ञा आश्रित उपवाक्य है? पहचान कीजिए।

- Ans
- 1. हम इसलिए पढ़ते हैं कि हमारे ज्ञान में वृद्धि हो।
  - 2. लू चल रही थी इसलिए घर से बाहर नहीं गया।
  - 3. यदि वह पढ़ता तो फेल नहीं होता।
  - 4. यह वही स्थान है जहाँ बापू की हत्या हुई।

Q.7 निम्नलिखित वाक्यांश के लिए सार्थक शब्द चुनिए -  
कई भाषाएँ बोलने वाला

- Ans
- 1. द्विभाषी
  - 2. बहुभाषाभाषी
  - 3. अल्पभाषी
  - 4. त्रिभाषी

Q.8 'इस प्रश्न का \_\_\_\_\_ उत्तर लिखिए' दिए गए वाक्य के रिक्त स्थान के लिए 'विस्तृत' का विलोम शब्द चुनिए।

- Ans
- 1. सरल
  - 2. संक्षिप्त
  - 3. सूक्ष्म
  - 4. समीक्षात्मक

Q.9 निम्नलिखित विकल्पों में से कौन सा एक वाक्य वर्तनी की दृष्टि से अशुद्ध है?

- Ans
- 1. वह किसी के काम में हस्ताक्षेप नहीं करता है।
  - 2. उसकी दुरवस्था देखकर दया आ गई।
  - 3. वह नूपुर बाँध कर चल पड़ी।
  - 4. सेठ के पास बहुत संपत्ति थी।

Q.10 निम्न रिक्त स्थान की पूर्ति उचित विदेशज शब्द से करें।  
रीमा अपने गाँव में पहली महिला डॉक्टर बनी है। जो सारी लड़कियों के लिए एक \_\_\_\_\_ है।

- Ans
- 1. मिसाल
  - 2. तारीफ
  - 3. कम
  - 4. फसाद

Q.11 निम्नलिखित में से किस शब्द में भाववाचक संज्ञा नहीं है?

- Ans
- 1. ममत्व
  - 2. घबराहट
  - 3. एटलस
  - 4. गर्मी

Q.12 निम्नलिखित वाक्य में प्रयोग किए गए रेखांकित शब्द का सही पर्याय ज्ञात कीजिए-  
दीवाली के दिन दीपक की रोशनी से सभी घर जगमगा उठते हैं।

- Ans
- 1. लालटेन
  - 2. अगरबत्ती
  - 3. मोमबत्ती
  - 4. चिराग

Q.13 निम्नलिखित वाक्य के अशुद्ध भाग का चयन करें-  
'उन्होंने हिमालय की शिखर पर भारत का ध्वज फहराया।'

- Ans
- 1. ध्वज फहराया
  - 2. भारत का
  - 3. शिखर पर
  - 4. उन्होंने हिमालय की

Q.14 निम्न में से 'मेल' का विलोम नहीं है-

- Ans
- 1. अनबन
  - 2. वैमनस्य
  - 3. मैत्री
  - 4. बेमेल

Q.15 निम्नांकित मुहावरे के रिक्त स्थान के लिए सर्वाधिक उपयुक्त शब्द कौन-सा है?

अक्ल पर \_\_\_\_\_ पड़ना।

- Ans
- 1. ओला
  - 2. पत्थर
  - 3. बालू
  - 4. ईंटें

#### Comprehension:

गद्यांश के आधार पर प्रश्न का उत्तर दें

अशोक ने \_\_\_ धर्म स्वीकार किया। अपनी प्रजा का संतान के समान पालन-पोषण किया उनका हृदय \_\_\_ से भर गया था। पशु-पक्षियों के प्रति वह दया का व्यवहार करते थे। बौद्ध धर्म की शिक्षाओं के प्रसार के लिए उन्होंने अनेक \_\_\_ बनवाए। अपने पुत्र महेन्द्र और पुत्री संघमित्रा को बौद्ध धर्म के \_\_\_ के लिए विदेशों में भेजा। बौद्ध धर्म के सिद्धान्तों को शिलाओं, स्तंभों और लाटों पर अंकित करवाया। हमारे राष्ट्रीय ध्वज में अंकित चक्र को \_\_\_ में स्थित अशोक स्तंभ से लिया गया है। अशोक महान के कार्य अपने युग से बढ़ कर थे। उन्हें 'युग पुरुष' कहना सर्वथा उचित ही होगा।

#### SubQuestion No : 16

Q.16 'अशोक ने \_\_\_ धर्म स्वीकार किया।'  
गद्यांश की पंक्ति में रिक्त स्थान की पूर्ति हेतु उपयुक्त शब्द होगा

- Ans
- 1. बौद्ध
  - 2. हिन्दू
  - 3. पारसी
  - 4. जैन

**Comprehension:**

गद्यांश के आधार पर प्रश्न का उत्तर दें

अशोक ने \_\_\_ धर्म स्वीकार किया। अपनी प्रजा का संतान के समान पालन-पोषण किया उनका हृदय \_\_\_ से भर गया था। पशु-पक्षियों के प्रति वह दया का व्यवहार करते थे। बौद्ध धर्म की शिक्षाओं के प्रसार के लिए उन्होंने अनेक \_\_\_ बनवाए। अपने पुत्र महेन्द्र और पुत्री संघमित्रा को बौद्ध धर्म के \_\_\_ के लिए विदेशों में भेजा। बौद्ध धर्म के सिद्धान्तों को शिलाओं, स्तंभों और लाटों पर अंकित करवाया। हमारे राष्ट्रीय ध्वज में अंकित चक्र को \_\_\_ में स्थित अशोक स्तंभ से लिया गया है। अशोक महान के कार्य अपने युग से बढ़ कर थे। उन्हें 'युग पुरुष' कहना सर्वथा उचित ही होगा।

**SubQuestion No : 17**

Q.17 'उनका हृदय \_\_\_ से भर गया था'  
गद्यांश की पंक्ति में रिक्त स्थान की पूर्ति हेतु उपयुक्त शब्द होगा

- Ans
- 1. ईर्ष्या
  - 2. दया
  - 3. क्रोध
  - 4. विद्रोह

**Comprehension:**

गद्यांश के आधार पर प्रश्न का उत्तर दें

अशोक ने \_\_\_ धर्म स्वीकार किया। अपनी प्रजा का संतान के समान पालन-पोषण किया उनका हृदय \_\_\_ से भर गया था। पशु-पक्षियों के प्रति वह दया का व्यवहार करते थे। बौद्ध धर्म की शिक्षाओं के प्रसार के लिए उन्होंने अनेक \_\_\_ बनवाए। अपने पुत्र महेन्द्र और पुत्री संघमित्रा को बौद्ध धर्म के \_\_\_ के लिए विदेशों में भेजा। बौद्ध धर्म के सिद्धान्तों को शिलाओं, स्तंभों और लाटों पर अंकित करवाया। हमारे राष्ट्रीय ध्वज में अंकित चक्र को \_\_\_ में स्थित अशोक स्तंभ से लिया गया है। अशोक महान के कार्य अपने युग से बढ़ कर थे। उन्हें 'युग पुरुष' कहना सर्वथा उचित ही होगा।

**SubQuestion No : 18**

Q.18 'बौद्ध धर्म की शिक्षाओं के प्रसार के लिए उन्होंने अनेक \_\_\_ बनवाए'  
गद्यांश की पंक्ति में रिक्त स्थान की पूर्ति हेतु उपयुक्त शब्द होगा

- Ans
- 1. किले
  - 2. महल
  - 3. सड़क
  - 4. स्तूप

**Comprehension:**

गद्यांश के आधार पर प्रश्न का उत्तर दें

अशोक ने \_\_\_ धर्म स्वीकार किया। अपनी प्रजा का संतान के समान पालन-पोषण किया उनका हृदय \_\_\_ से भर गया था। पशु-पक्षियों के प्रति वह दया का व्यवहार करते थे। बौद्ध धर्म की शिक्षाओं के प्रसार के लिए उन्होंने अनेक \_\_\_ बनवाए। अपने पुत्र महेन्द्र और पुत्री संघमित्रा को बौद्ध धर्म के \_\_\_ के लिए विदेशों में भेजा। बौद्ध धर्म के सिद्धान्तों को शिलाओं, स्तंभों और लाटों पर अंकित करवाया। हमारे राष्ट्रीय ध्वज में अंकित चक्र को \_\_\_ में स्थित अशोक स्तंभ से लिया गया है। अशोक महान के कार्य अपने युग से बढ़ कर थे। उन्हें 'युग पुरुष' कहना सर्वथा उचित ही होगा।

**SubQuestion No : 19**

Q.19 'अपने पुत्र महेन्द्र और पुत्री संघमित्रा को बौद्ध धर्म के \_\_\_ के लिए विदेशों में भेजा'  
गद्यांश की पंक्ति में रिक्त स्थान की पूर्ति हेतु उपयुक्त शब्द होगा-

- Ans
- 1. विध्वंस
  - 2. कल्याण
  - 3. प्रचार
  - 4. निर्वाण

**Comprehension:**

गद्यांश के आधार पर प्रश्न का उत्तर दें

अशोक ने \_\_\_ धर्म स्वीकार किया। अपनी प्रजा का संतान के समान पालन-पोषण किया उनका हृदय \_\_\_ से भर गया था। पशु-पक्षियों के प्रति वह दया का व्यवहार करते थे। बौद्ध धर्म की शिक्षाओं के प्रसार के लिए उन्होंने अनेक \_\_\_ बनवाए। अपने पुत्र महेन्द्र और पुत्री संघमित्रा को बौद्ध धर्म के \_\_\_ के लिए विदेशों में भेजा। बौद्ध धर्म के सिद्धान्तों को शिलाओं, स्तंभों और लाटों पर अंकित करवाया। हमारे राष्ट्रीय ध्वज में अंकित चक्र को \_\_\_ में स्थित अशोक स्तंभ से लिया गया है। अशोक महान के कार्य अपने युग से बढ़ कर थे। उन्हें 'युग पुरुष' कहना सर्वथा उचित ही होगा।

**SubQuestion No : 20**

Q.20 'हमारे राष्ट्रीय ध्वज में अंकित चक्र को \_\_\_ में स्थित अशोक स्तंभ से लिया गया है'  
गद्यांश की पंक्ति में रिक्त स्थान की पूर्ति हेतु उपयुक्त शब्द होगा-

- Ans
- 1. गया
  - 2. पाटलिपुत्र
  - 3. तक्षशिला
  - 4. सारनाथ