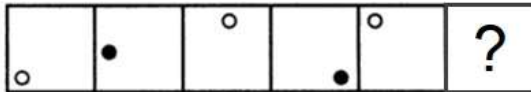


## Constable GD in CAPFs SSF Rifleman GD in Assam Rifles and mination 2022

Roll Number	
Candidate Name	
Venue Name	
Exam Date	01/02/2023
Exam Time	2:30 PM - 3:30 PM
Subject	Constable GD Examination 2022

### Section : Part-A-General Intelligence and Reasoning

**Q.1** Select the figure from among the given options that can replace the question mark (?) in the following series.




Ans

1.



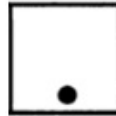
2.



3.



4.



Question ID : 26433080503

Status : Answered

Chosen Option : 4

**Q.2** Which option represents the correct order of the given words as they would appear in the English dictionary?

1 riddle

2 river

3 rightful

4 ring

5 risk

Ans  1. 1,3,4,5,2

2. 1,2,3,4,5

3. 1,3,2,4,5

4. 1,2,4,5,3

Question ID : 26433069325

Status : Answered

Chosen Option : 1

Q.3 In a certain code language, 'EXAM' is written as '625214' and 'TEST' is written as '2162021'. How will 'ASSESSMENT' be written in that language?

- Ans
- 1. 22020620201465121
  - 2. 22020620201461512
  - 3. 22020602201461521
  - 4. 22020620201461521

Question ID : 26433087254  
Status : Answered  
Chosen Option : 4

Q.4 Six family members Viraaj, Deepu, Noor, Prince, Suman and Taran are sitting around a circular table facing the centre. Viraaj is sitting to the immediate right of Noor. Prince is an immediate neighbour of both Viraaj and Deepu. Suman is sitting third to the right of Viraaj. Noor is sitting second to the left of Prince. Who is the immediate neighbour of Deepu and Viraaj?

- Ans
- 1. Suman
  - 2. Prince
  - 3. Taran
  - 4. Noor

Question ID : 26433068866  
Status : Answered  
Chosen Option : 2

Q.5 In a certain code language, FATHER is written as 'IFWMHW', and SISTER is written as 'VNVYHW'. How will 'UNCLE' be written in the same code language?

- Ans
- 1. XSHQI
  - 2. XTGRH
  - 3. XSFQH
  - 4. XSGQH

Question ID : 26433067989  
Status : Answered  
Chosen Option : 4

Q.6 Six students are sitting around a circular table facing the centre. Brianna is sitting second to the right of Mark. Felix is sitting second to the left of Mark. Ann is the immediate neighbour of Brianna and Felix. James is sitting third to the left of Brianna. Afreen is sitting second to the right of James. Who is sitting between Afreen and Ann?

- Ans
- 1. Mark
  - 2. James
  - 3. Brianna
  - 4. Felix

Question ID : 26433081782  
Status : Answered  
Chosen Option : 3

**Q.7** Which two numbers(not digits) should be interchanged in the following equation to make it correct?

$$56 \div 16 \times 8 + 45 \times 13 = 697$$

- Ans**
- 1. 8 and 13
  - 2. 16 and 8
  - 3. 16 and 45
  - 4. 8 and 45

Question ID : 26433090136

Status : Answered

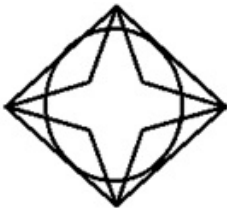
Chosen Option : 2

**Q.8** Select the option figure in which the given figure is embedded as its part (rotation is not allowed).



**Ans**

1.



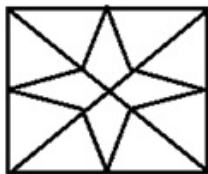
2.



3.



4.



Question ID : 26433069535

Status : Answered

Chosen Option : 2

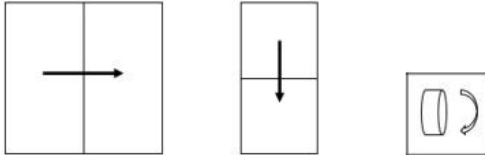
**Q.9** Which two signs should be interchanged to make the below equation mathematically correct?

$$24 - 36 \times 5 + 108 \div 18 = 18$$

- Ans**
- 1. + and -
  - 2. - and +
  - 3. + and ×
  - 4. + and ÷

Question ID : 264330117523  
Status : Answered  
Chosen Option : 3

**Q.10** A paper is folded and cut as shown below. How will it appear when unfolded?



**Ans**

- 1.
- 2.
- 3.
- 4.

Question ID : 26433089787  
Status : Answered  
Chosen Option : 4

**Q.11** Which of the following numbers will replace the question mark and complete the given number series?  
125, 88, 63, 46, ?

- Ans
- 1. 35
  - 2. 33
  - 3. 38
  - 4. 37

Question ID : 26433069595  
Status : Not Answered  
Chosen Option : --

**Q.12** Select the letter-cluster from among the given options that can replace the question mark (?) in the following series.  
GSLC, AMOF, UGRI, ?, IUXO

- Ans
- 1. OULC
  - 2. DPGE
  - 3. DSTN
  - 4. OAUL

Question ID : 26433074751  
Status : Answered  
Chosen Option : 4

**Q.13** Which of the following terms will replace the question mark (?) in the given series?  
?, LSEO, NRDN, PQCM, RPBL

- Ans
- 1. PFJO
  - 2. FPJI
  - 3. TFPJ
  - 4. JTFP

Question ID : 26433068983  
Status : Answered  
Chosen Option : 4

**Q.14** Select the correct mirror image of the given figure when the mirror is placed at MN as shown below.

6 Z k B M V d

M ————— N

- Ans
- 1. e Z K B W Λ q
  - 2. e Σ K B W Λ q
  - 3. q V M B K Σ e
  - 4. e Σ K B W Λ q

Question ID : 26433080798  
Status : Answered  
Chosen Option : 4

Q.15 In a certain code language,  
'A + B' means 'A is the sister of B',  
'A - B' means 'A is the father of B' and  
'A x B' means 'A is the brother of B'.  
How is R related to S if  $Q + R - P \times N - S$ ?

- Ans
- 1. Father
  - 2. Father's father
  - 3. Father's brother
  - 4. Brother

Question ID : 26433070370  
Status : Answered  
Chosen Option : 2

Q.16 In this question, three statements are given, followed by two conclusions numbered I and II. Assuming the statements to be true, even if they seem to be at variance with commonly known facts, decide which of the conclusions logically follows/follow from the statements.

Statements:

All mobiles are computers.  
Some computers are furniture.  
Some furniture are tables.

Conclusions:

I. Some tables are computers.  
II. Some mobiles are furniture.

- Ans
- 1. Both conclusions I and II follow.
  - 2. Only conclusion I follows.
  - 3. Neither conclusion I nor II follows.
  - 4. Only conclusion II follows.

Question ID : 26433070387  
Status : Answered  
Chosen Option : 4

Q.17 Select the option that is related to the fifth letter-cluster in the same way as the second letter-cluster is related to the first letter-cluster and the fourth letter-cluster is related to the third letter-cluster.

TIDE: RRAU :: REST : PVPF :: GAME : ?

- Ans
- 1. EZJU
  - 2. HBNF
  - 3. ICOG
  - 4. TZNN

Question ID : 26433057485  
Status : Answered  
Chosen Option : 1

Q.18 Select the option that is related to the third word in the same way as the second word is related to the first word.

(The words must be considered as meaningful English words and must not be related to each other based on the number of letters/number of consonants/vowels in the word)

Education : Teacher :: Treatment : ?

- Ans
- 1. Hospital
  - 2. Labour
  - 3. Medicine
  - 4. Doctor

Question ID : 26433079472  
Status : Answered  
Chosen Option : 4

Q.19 Which of the following numbers will replace the question mark (?) in the given series?  
5, 31, 161, 811, ?

- Ans
- 1. 4500
  - 2. 4825
  - 3. 4444
  - 4. 4061

Question ID : 26433082010  
Status : Not Answered  
Chosen Option : --

Q.20 Select the set in which the numbers are related in the same way as are the numbers of the following set.

(NOTE : Operations should be performed on the whole numbers, without breaking down the numbers into its constituent digits. E.g. 13 – Operations on 13 such as adding /subtracting/multiplying etc. to 13 can be performed. Breaking down 13 into 1 and 3 and then performing mathematical operations on 1 and 3 is NOT allowed)

(25, 280, 45)  
(18, 192, 30)

- Ans
- 1. (12, 156, 24)
  - 2. (14, 192, 24)
  - 3. (12, 148, 25)
  - 4. (13, 168, 54)

Question ID : 26433076481  
Status : Not Answered  
Chosen Option : --

Section : Part-B-General Knowledge and General awareness

Q.1 "to defend the country and render national service when called upon to do so" is stated under\_\_\_\_\_.

- Ans
- 1. Preamble of the Constitution
  - 2. Directive Principles
  - 3. Fundamental Duties
  - 4. Fundamental Rights

Question ID : 264330115628  
Status : Not Answered  
Chosen Option : --

Q.2 On the banks of which river was the war between Harshavardhana and Pulakeshin II fought?

- Ans
- 1. Narmada
  - 2. Krishna
  - 3. Godavari
  - 4. Ganga

Question ID : 26433089128  
Status : Not Answered  
Chosen Option : --

Q.3 In shot put, the shot which is a metal ball weighs how many kg for men and women?

- Ans
- 1. Men-7.5 kg Women-4.5kg
  - 2. Men-7.3 kg Women-4.5kg
  - 3. Men-7kg Women-4kg
  - 4. Men-7.26 kg Women-4kg

Question ID : 264330115942  
Status : Not Answered  
Chosen Option : --

Q.4 How many pathways are constructed as independently organized conducting tubes in plants?

- Ans
- 1. two
  - 2. four
  - 3. five
  - 4. one

Question ID : 264330115204  
Status : Not Answered  
Chosen Option : --

Q.5 The tenure of the UPSC members is .

- Ans
- 1. 6 years or age of 65 whichever is earlier
  - 2. 6 years or age of 62 years
  - 3. 5 years or age of 65 years
  - 4. 4 years or age of 62 years

Question ID : 26433089963  
Status : Not Answered  
Chosen Option : --

Q.6 The ultimate goal of Mission Indradhanush is to ensure full immunization with all available vaccines for children up to \_\_\_\_\_ years of age.

- Ans
- 1. three
  - 2. two
  - 3. eight
  - 4. five

Question ID : 264330116167  
Status : Not Answered  
Chosen Option : --

Q.7 What was the term of 10th Five Year Plan?

- Ans
- 1. 2002-2007
  - 2. 2007-2012
  - 3. 2005-2010
  - 4. 2004-2009

Question ID : 264330116120  
Status : Answered  
Chosen Option : 1



**Q.8** Who among the following inaugurated 2-day PM Kisan Samman Sammelan of India in October 2022?

- Ans**
- 1. Nirmala Sitharaman
  - 2. Amit Shah
  - 3. Narendra Modi
  - 4. Rajnath Singh

Question ID : 264330114956  
Status : Not Answered  
Chosen Option : --

**Q.9** In India, in relation to Census, what is the full form of NPR?

- Ans**
- 1. National People Register
  - 2. National Population Record
  - 3. National Population Register
  - 4. National People Record

Question ID : 264330116030  
Status : Not Answered  
Chosen Option : --

**Q.10** Which sector runs nearly 60 percent of dispensaries in India?

- Ans**
- 1. Cooperative sector
  - 2. Private Sector
  - 3. Joint Sector
  - 4. Public Sector

Question ID : 264330115557  
Status : Not Answered  
Chosen Option : --

**Q.11** Saga Dawa is primarily celebrated by which of the following communities of India in Sikkim?

- Ans**
- 1. Sikhs
  - 2. Hindus
  - 3. Buddhists
  - 4. Jains

Question ID : 264330105968  
Status : Answered  
Chosen Option : 3

**Q.12** Microfinance is a \_\_\_\_\_ service.

- Ans**
- 1. financial
  - 2. production
  - 3. software production
  - 4. waste management

Question ID : 264330115310  
Status : Not Answered  
Chosen Option : --

Q.13 Bihu is the popular dance form of which of the following states?

- Ans
- 1. Tamil Nadu
  - 2. Telangana
  - 3. Kerala
  - 4. Assam

Question ID : 26433071420  
Status : Answered  
Chosen Option : 4

Q.14 The Hindustan Socialist Republican Association (HSRA) was founded at \_\_\_\_\_ in Delhi.

- Ans
- 1. Ferozeshah Kotla
  - 2. Mughal Garden
  - 3. Red Fort
  - 4. Safdarjung Tomb

Question ID : 26433089888  
Status : Not Answered  
Chosen Option : --

Q.15 Who is the new Managing Director of the National Bank for Financing Infrastructure and Development (NaBFID) effective August 8, 2022?

- Ans
- 1. Sumita Dawra
  - 2. Rajkiran Rai
  - 3. Arun Kumar Singh
  - 4. Pankaj Jain

Question ID : 264330115013  
Status : Not Answered  
Chosen Option : --

Q.16 In India, the Green Revolution increased the production of which of the following?

- Ans
- 1. Eggs
  - 2. Wheat
  - 3. Cotton
  - 4. Coal

Question ID : 264330115418  
Status : Answered  
Chosen Option : 2

Q.17 Which among the following elements behaves like alkali metals as well as halogens in its properties?

- Ans
- 1. Neon
  - 2. Helium
  - 3. Hydrogen
  - 4. Lithium

Question ID : 264330115175  
Status : Not Answered  
Chosen Option : --

Q.18 In which year the Asian Games were held for the second time in India?

- Ans
- 1. 1941
  - 2. 2015
  - 3. 1982
  - 4. 1978

Question ID : 264330116249  
Status : Not Answered  
Chosen Option : --

Q.19 What is used to measure the magnitude of an earthquake?

- Ans
- 1. Anemometer
  - 2. Pressure sensors
  - 3. Gravimeter
  - 4. Richter Scale

Question ID : 264330115993  
Status : Answered  
Chosen Option : 4

Q.20 Who won the Sangeet Natak Akademi Award in Manipuri in 2018?

- Ans
- 1. Radha Sridhar
  - 2. Pasumurthy Ramalinga Sastry
  - 3. Madambi Subramanian Namboodiri
  - 4. Akham Lakshmi Devi

Question ID : 264330115821  
Status : Not Answered  
Chosen Option : --

Section : Part-C-Elementary Mathematics

Q.1 The ratio of two numbers is 4 : 5 and their HCF is 6. Their LCM is:

- Ans
- 1. 120
  - 2. 88
  - 3. 168
  - 4. 72

Question ID : 26433091517  
Status : Answered  
Chosen Option : 1

Q.2 A toy is bought for Rs.950 and sold at Rs.1140. Find the gain percentage.

- Ans
- 1. 16%
  - 2. 21%
  - 3. 20%
  - 4. 19%

Question ID : 26433075144  
Status : Answered  
Chosen Option : 3

Q.3 ₹x were borrowed at the compound interest rate of 5% per annum, 3 years back, where interest were compounding annually. If the present value of the money borrowed is ₹ 18,522, what is the value of x?

- Ans
- ✓ 1. ₹16,000
  - ✗ 2. ₹15,500
  - ✗ 3. ₹15,000
  - ✗ 4. ₹16,500

Question ID : 26433075562  
Status : Not Answered  
Chosen Option : --

Q.4 The total surface area of a hemisphere of diameter 14 cm is (Use  $\pi = \frac{22}{7}$ ):

- Ans
- ✗ 1.  $308 \text{ cm}^2$
  - ✓ 2.  $462 \text{ cm}^2$
  - ✗ 3.  $1232 \text{ cm}^2$
  - ✗ 4.  $2156 \text{ cm}^2$

Question ID : 26433075747  
Status : Answered  
Chosen Option : 2

Q.5 Reeta can do a piece of work in 14 days and Geeta can do the same work in 21 days. How many days Reeta and Geeta take together to complete the same work?

- Ans
- ✓ 1. 8.4
  - ✗ 2. 6.4
  - ✗ 3. 8.8
  - ✗ 4. 6.8

Question ID : 26433075700  
Status : Answered  
Chosen Option : 1

Q.6 Find the greatest number which on dividing 1780 and 2452 leaves the remainder 4 in each case.

- Ans
- ✓ 1. 48
  - ✗ 2. 52
  - ✗ 3. 16
  - ✗ 4. 24

Question ID : 26433081468  
Status : Answered  
Chosen Option : 4

Q.7 The mean proportional between  $4 + 2\sqrt{3}$  and  $6 - 3\sqrt{3}$  is:

- Ans
- 1.  $\sqrt{6}$
  - 2.  $\sqrt{18}$
  - 3.  $\sqrt{12}$
  - 4.  $\sqrt{8}$

Question ID : 26433081026  
Status : Answered  
Chosen Option : 1

Q.8 If the price of petrol is increased by 40%, by what percentage (rounded off to 1 decimal place) should its consumption be decreased so that the expenditure on petrol remains the same?

- Ans
- 1. 25.7%
  - 2. 28.6%
  - 3. 40.5%
  - 4. 35.5%

Question ID : 26433082780  
Status : Not Answered  
Chosen Option : --

Q.9 The total surface area of a cuboid is  $4200 \text{ cm}^2$ . If the length and breadth of the cuboid are 15 cm and 16 cm, then find the height of the cuboid.

- Ans
- 1. 3720 cm
  - 2. 62 cm
  - 3. 60 cm
  - 4. 70 cm

Question ID : 26433085494  
Status : Answered  
Chosen Option : 3

Q.10 Sumati travelled from point A to point B at 475 m/min. The moment that Sumati reached point B, Rachna set off from point B, at a speed 1.6 times the speed at which Sumati travelled and reached point C. If the total distance covered from A to C through B was 45.6 km and the time taken from when Sumati started from point A to when Rachna reached point C was 75 minutes, what is the distance between A and B?

- Ans
- 1. 19 km
  - 2. 20 km
  - 3. 18 km
  - 4. 17 km

Question ID : 26433075295  
Status : Not Answered  
Chosen Option : --

Q.11 Two numbers P and Q are such that the sum of 8% of P and 4% of Q is two-third of the sum of 5% of P and 7% of Q. Find the ratio P : Q.

- Ans
- 1. 7 : 1
  - 2. 2 : 5
  - 3. 1 : 7
  - 4. 4 : 9

Question ID : 26433081573  
Status : Not Answered  
Chosen Option : --

Q.12 In a golf club, 90% of members are men and the remaining are women. The average height of men is 170 cm and the average height of women is 165 cm. Find the average height of the club members.

- Ans
- 1. 168.5
  - 2. 167.5
  - 3. 170.5
  - 4. 169.5

Question ID : 26433075905  
Status : Answered  
Chosen Option : 4

Q.13 A can do a piece of work in 18 days. B can do this work in 24 days. A started the work alone. After how many days should B join him, so that the work is finished in 15 days?

- Ans
- 1. 11 days
  - 2. 19 days
  - 3. 13 days
  - 4. 14 days

Question ID : 264330116851  
Status : Not Answered  
Chosen Option : --

Q.14 Find the distance covered by a car moving at a speed of 48 km/h for 3 hours 15 minutes.

- Ans
- 1. 156 km
  - 2. 165 km
  - 3. 145 km
  - 4. 154 km

Question ID : 26433076199  
Status : Not Answered  
Chosen Option : --

Q.15 Successive discounts of 10%, 15% and 4% on ₹12,500 are equal to:

- Ans
- 1. ₹3,320
  - 2. ₹4,150
  - 3. ₹5,240
  - 4. ₹4,520

Question ID : 26433080221  
Status : Not Answered  
Chosen Option : --

Q.16 After giving a discount of 25 percent, selling price of an article becomes Rs. 9510. What is the marked price of the article?

- Ans
- 1. Rs. 11640
  - 2. Rs. 10200
  - 3. Rs. 12680
  - 4. Rs. 10850

Question ID : 264330116736  
Status : Answered  
Chosen Option : 3

Q.17 By selling a commodity for Rs.15,000, Subir loses Rs.2,000. What is his percentage loss?

- Ans
- 1.  $11\frac{13}{17}\%$
  - 2. 11%
  - 3. 10%
  - 4.  $10\frac{13}{17}\%$

Question ID : 26433080305  
Status : Answered  
Chosen Option : 1

Q.18 The average marks in geography exam of a class of 25 students are 64. If the marks of three students were misread as 44, 46 and 61 in lieu of the actual marks 54, 64 and 67 respectively, then find the correct average.

- Ans
- 1. 65.45
  - 2. 65.36
  - 3. 64.55
  - 4. 64.54

Question ID : 26433076220  
Status : Answered  
Chosen Option : 2

**Q.19** What will be the difference in the compound interest if a sum of Rs.12,000 is compounded annually and half-yearly at an annual rate of 10% for a period of 2 years?  
Note :Round off the decimal to the nearest number.

- Ans**  1. Rs.66  
 2. Rs.196  
 3. Rs.166  
 4. Rs.46

Question ID : 26433075075  
Status : **Not Answered**  
Chosen Option : --

**Q.20** Teena spends 30% of her salary on food, 30% of the rest on fuel and saves the remaining Rs.4,900. What is Teena's salary?

- Ans**  1. Rs.6,000  
 2. Rs.12,000  
 3. Rs.8,000  
 4. Rs.10,000

Question ID : 26433076033  
Status : **Answered**  
Chosen Option : 4

Section : **Part-D-English**

**Q.1** Select the most appropriate ANTONYM of the word given in brackets to fill in the blank.

The company of friends made her feel \_\_\_\_\_ (cranky), as she was all alone in her apartment.

- Ans**  1. awful  
 2. wishful  
 3. cheerful  
 4. fearful

Question ID : 26433089747  
Status : **Not Answered**  
Chosen Option : --

**Q.2** Select the most appropriate synonym of the given word.

**Fascinating**

- Ans**  1. Interesting  
 2. Dominating  
 3. Revolting  
 4. Intimidating

Question ID : 26433073982  
Status : **Not Answered**  
Chosen Option : --



**Q.3** Select the most appropriate **ANTONYM** of the given word.  
**Symbolise**

- Ans**  1. Hide  
 2. Link  
 3. Slide  
 4. Align

Question ID : 26433066088  
Status : **Answered**  
Chosen Option : 1

**Q.4** Select the **INCORRECTLY** spelt word.

- Ans**  1. Coherent  
 2. Frekquent  
 3. Collide  
 4. Ferocious

Question ID : 26433073731  
Status : **Not Answered**  
Chosen Option : --

**Q.5** Select the most appropriate meaning of the given idiom.

**Silver tongue**

- Ans**  1. Speaking to annoy people  
 2. Speaking to bore people  
 3. Speaking with an eloquent expression to convince people  
 4. Speaking to discourage people

Question ID : 26433074442  
Status : **Answered**  
Chosen Option : 3

**Q.6** The given sentence is divided into three segments. Select the option that has the segment with a grammatical error. If there is no error, select 'no error' as your answer.

**She have / left by the time / I reach home.**

- Ans**  1. I reach home  
 2. left by the time  
 3. She have  
 4. No error

Question ID : 26433071860  
Status : **Answered**  
Chosen Option : 3

**Q.7** Select the most appropriate synonym of the given word.

**Splendid**

- Ans**  1. Stationary  
 2. Authentic  
 3. Spectacular  
 4. Enticing

Question ID : 26433087913  
Status : **Not Answered**  
Chosen Option : --

Q.8 Select the INCORRECTLY spelt word.

- Ans  1. Enterprising  
 2. Maticulous  
 3. Erroneous  
 4. Potable

Question ID : 26433073507  
Status : Not Answered  
Chosen Option : --

Q.9 Select the most appropriate meaning of the given idiom.

Public enemy number one

- Ans  1. A person who always smiles  
 2. Someone who is the greatest threat to a group or community  
 3. The opposition party leader  
 4. One who helps the poor

Question ID : 26433072573  
Status : Answered  
Chosen Option : 2

Q.10 Select the word segment that substitutes (replaces) the bracketed word segment correctly and completes the sentence meaningfully:  
Shakespeare was both a dramatist (better than) a poet.

- Ans  1. when not  
 2. as well as  
 3. or  
 4. and

Question ID : 26433088798  
Status : Answered  
Chosen Option : 4

Q.11 Select the most appropriate option that can substitute the underlined segment in the given sentence.

I am been working here for the past ten years.

- Ans  1. have been working here  
 2. is been working here  
 3. was been working here  
 4. having been working here

Question ID : 26433091372  
Status : Answered  
Chosen Option : 1

Q.12 Select the most appropriate ANTONYM of the given word.

Dignify

- Ans  1. Condemn  
 2. Adorn  
 3. Oblige  
 4. Cure

Question ID : 26433090781  
Status : Not Answered  
Chosen Option : --

**Q.13** Select the most appropriate homophone to substitute the underlined word in the given sentence.

These ornaments are coated with gold.

- Ans
- 1. gilled
  - 2. gel
  - 3. gild
  - 4. guild

Question ID : 26433074013  
 Status : Not Answered  
 Chosen Option : --

**Q.14** Select the most appropriate option to substitute the underlined segment in the given sentence to make it a meaningful sentence. If no substitution is required, select 'No substitution'.

One must not only have the ability to read voraciously but have the necessary training in comprehending and remembering all the relevant details.

- Ans
- 1. not only have the ability for read voraciously but also have
  - 2. not only have the ability to read voraciously but also had
  - 3. No substitution
  - 4. not only have the ability to read voraciously but also have

Question ID : 26433092045  
 Status : Answered  
 Chosen Option : 4

**Q.15** Select the most appropriate option to fill in the blank.

Scientists are able to quickly \_\_\_\_\_ the outbreak through a new immunisation.

- Ans
- 1. quench
  - 2. scatter
  - 3. quest
  - 4. quash

Question ID : 26433060336  
 Status : Not Answered  
 Chosen Option : --

### Comprehension:

In the following passage, some words have been deleted. Read the passage carefully and select the most appropriate option to fill in each blank.

The ability to think clearly and calmly while addressing an 1. \_\_\_\_\_ is neither inborn nor difficult to develop. The presence of an audience should act as a stimulus and not as a 2. \_\_\_\_\_ to thought. Audience fright can be overcome through training and practice. Even great speakers 3. \_\_\_\_\_ stage fright and self-consciousness. Every speaker gets worked up and experiences strain, shock, and excitement before he or she begins to talk. But every speaker who is struggling to gain 4. \_\_\_\_\_ should remember that all meritorious public speaking is accompanied by a little 5. \_\_\_\_\_.

SubQuestion No : 16

**Q.16** Select the most appropriate option to fill in blank no. 1.

- Ans
- 1. audience
  - 2. adult
  - 3. accomplice
  - 4. association

Question ID : 26433091359  
 Status : Answered  
 Chosen Option : 1

**Comprehension:**

In the following passage, some words have been deleted. Read the passage carefully and select the most appropriate option to fill in each blank.

The ability to think clearly and calmly while addressing an 1. \_\_\_\_\_ is neither inborn nor difficult to develop. The presence of an audience should act as a stimulus and not as a 2. \_\_\_\_\_ to thought. Audience fright can be overcome through training and practice. Even great speakers 3. \_\_\_\_\_ stage fright and self-consciousness. Every speaker gets worked up and experiences strain, shock, and excitement before he or she begins to talk. But every speaker who is struggling to gain 4. \_\_\_\_\_ should remember that all meritorious public speaking is accompanied by a little 5. \_\_\_\_\_.

**SubQuestion No : 17**

**Q.17** Select the most appropriate option to fill in blank no. 2.

- Ans**  1. hindrance  
 2. briefing  
 3. catch  
 4. choice

Question ID : 26433091360

Status : Answered

Chosen Option : 1

**Comprehension:**

In the following passage, some words have been deleted. Read the passage carefully and select the most appropriate option to fill in each blank.

The ability to think clearly and calmly while addressing an 1. \_\_\_\_\_ is neither inborn nor difficult to develop. The presence of an audience should act as a stimulus and not as a 2. \_\_\_\_\_ to thought. Audience fright can be overcome through training and practice. Even great speakers 3. \_\_\_\_\_ stage fright and self-consciousness. Every speaker gets worked up and experiences strain, shock, and excitement before he or she begins to talk. But every speaker who is struggling to gain 4. \_\_\_\_\_ should remember that all meritorious public speaking is accompanied by a little 5. \_\_\_\_\_.

**SubQuestion No : 18**

**Q.18** Select the most appropriate option to fill in blank no. 3.

- Ans**  1. experience  
 2. accorded  
 3. keened  
 4. saved

Question ID : 26433091361

Status : Answered

Chosen Option : 1

**Comprehension:**

In the following passage, some words have been deleted. Read the passage carefully and select the most appropriate option to fill in each blank.

The ability to think clearly and calmly while addressing an 1. \_\_\_\_\_ is neither inborn nor difficult to develop. The presence of an audience should act as a stimulus and not as a 2. \_\_\_\_\_ to thought. Audience fright can be overcome through training and practice. Even great speakers 3. \_\_\_\_\_ stage fright and self-consciousness. Every speaker gets worked up and experiences strain, shock, and excitement before he or she begins to talk. But every speaker who is struggling to gain 4. \_\_\_\_\_ should remember that all meritorious public speaking is accompanied by a little 5. \_\_\_\_\_.

**SubQuestion No : 19**

**Q.19** Select the most appropriate option to fill in blank no. 4.

- Ans**
- 1. merit
  - 2. profit
  - 3. money
  - 4. confidence

Question ID : 26433091362

Status : Answered

Chosen Option : 4

**Comprehension:**

In the following passage, some words have been deleted. Read the passage carefully and select the most appropriate option to fill in each blank.

The ability to think clearly and calmly while addressing an 1. \_\_\_\_\_ is neither inborn nor difficult to develop. The presence of an audience should act as a stimulus and not as a 2. \_\_\_\_\_ to thought. Audience fright can be overcome through training and practice. Even great speakers 3. \_\_\_\_\_ stage fright and self-consciousness. Every speaker gets worked up and experiences strain, shock, and excitement before he or she begins to talk. But every speaker who is struggling to gain 4. \_\_\_\_\_ should remember that all meritorious public speaking is accompanied by a little 5. \_\_\_\_\_.

**SubQuestion No : 20**

**Q.20** Select the most appropriate option to fill in blank no. 5.

- Ans**
- 1. childishness
  - 2. happiness
  - 3. nervousness
  - 4. trick

Question ID : 26433091363

Status : Not Answered

Chosen Option : --

Section : **Part-D-Hindi**

**Q.1** वर्तनीगत अशुद्धियाँ न रहने वाला वाक्य चुनिए।

- Ans**
- 1. मैंने दस रुपये का दही खरीदा।
  - 2. उस कारखाना में बहुत मजदूर है।
  - 3. धूँआँ का रंग काला है।
  - 4. बच्चों, मेरी बातों सुनों।

Question ID : 26433063065

Status : Not Answered

Chosen Option : --

Q.2 निम्नलिखित में से अशुद्ध वाक्य कौन-सा है?

- Ans  1. मेरे पर कृपा करो।  
 2. वरुण प्रतिदिन घूमने जाता है।  
 3. मनाली अत्यंत सुन्दर शहर है।  
 4. कल मैंने दिनभर पढ़ाई की।

Question ID : 26433085138  
 Status : Not Answered  
 Chosen Option : --

Q.3 निम्नलिखित वाक्यांश के लिए उपयुक्त सार्थक शब्द है-  
 ईश्वर में विश्वास करने वाला

- Ans  1. आस्तिक  
 2. दैवीय  
 3. इन्सान  
 4. भगवान

Question ID : 26433065750  
 Status : Not Answered  
 Chosen Option : --

Q.4 सद कार्यों को हमेशा समर्थन मिलता है और गलत का \_\_\_\_\_ होता है।

समर्थन के विलोम शब्द से वाक्य पूर्ण करें।

- Ans  1. असमर्थ  
 2. असमंजस  
 3. विरोध  
 4. असहयोग

Question ID : 26433080875  
 Status : Not Answered  
 Chosen Option : --

Q.5 निम्नलिखित वाक्य के रिक्त स्थान में सबसे उपयुक्त मुहावरा क्या होगा?  
 नेता बनना हो तो मंत्री जी के साथ \_\_\_\_\_ बन जाओ

- Ans  1. दुश्मन  
 2. पेड़  
 3. दोस्त  
 4. अमरबेल

Question ID : 26433066736  
 Status : Not Answered  
 Chosen Option : --

Q.6 वाक्य में रेखांकित शब्द को दिए गए शब्दों में से उचित शब्द से बदले।

इलाहाबाद के लोगों के आश्वासन पर यमुना नदी पर पुल बना दिया गया।

- Ans  1. विनती  
 2. आग्रह  
 3. प्रार्थना  
 4. आदेश

Question ID : 26433074411  
 Status : Not Answered  
 Chosen Option : --

Q.7 आज क्रिकेट के खेल में साहिल ने \_\_\_\_\_ मार लिया।  
रिक्त स्थान की पूर्ति उचित शब्द द्वारा करके मुहावरे को पूरा कीजिए।

- Ans  1. मन  
 2. इनाम  
 3. मैदान  
 4. मक्खियाँ

Question ID : 26433062612  
Status : Not Answered  
Chosen Option : --

Q.8 'जड़' शब्द के विलोम से दिए गए वाक्य के रिक्त स्थान की पूर्ति कीजिए।  
हमें अपने \_\_\_\_\_ मन से ईश्वर को अनुभव करना चाहिए।

- Ans  1. मूल  
 2. चेतन  
 3. मधुर  
 4. निम्न

Question ID : 26433063088  
Status : Not Answered  
Chosen Option : --

Q.9 निम्नलिखित विकल्पों में से कौन सा एक वाक्य क्रिया-विशेषण से सम्बन्ध रखता है?

- Ans  1. डाकिया आता होगा।  
 2. बुशरा यहाँ आ रही है।  
 3. हो सकता है आँधी आए।  
 4. विश्व का कल्याण हो।

Question ID : 26433062955  
Status : Not Answered  
Chosen Option : --

Q.10 नीचे दिए शब्द के लिए उचित वाक्यांश दिए गए विकल्पों में से चुनिए।  
अलौकिक

- Ans  1. जो इस लोक का हो  
 2. जो इस लोक का न हो  
 3. जिसका अस्तित्व अल्पकाल तक रहे  
 4. जो कम जानता हो

Question ID : 26433062391  
Status : Not Answered  
Chosen Option : --

Q.11 निम्नलिखित वाक्य में रेखांकित शब्द के स्थान पर उपयुक्त पर्यायवाची शब्द कौन-सा होगा?

बारिश के साथ ही दामिनी चमकने लगी।

- Ans  1. आँधी  
 2. तड़ित  
 3. ओला  
 4. बुँदे

Question ID : 26433066901  
Status : Not Answered  
Chosen Option : --

Q.12 'लंबोदर' शब्द के लिए उचित वाक्यांश है-

- Ans
- 1. जिसका उधार लंबा हो
  - 2. जिसका हाथ लंबा हो
  - 3. जिसका उदर लंबा हो
  - 4. जिसकी गर्दन लंबी हो

Question ID : 26433065870  
Status : Not Answered  
Chosen Option : --

Q.13 वाक्य में रेखांकित शब्द के स्थान पर सर्वोचित शब्द का चयन कीजिए।

प्रेम करना तलवार की नोक पर चलना है।

- Ans
- 1. मूठ
  - 2. चपलता
  - 3. म्यान
  - 4. धार

Question ID : 26433065696  
Status : Not Answered  
Chosen Option : --

Q.14 कौन से विकल्प में विशेषण से बने भाववाचक संज्ञा शब्दों में त्रुटि है?

- Ans
- 1. ममत्व, अपनापन, निकटता
  - 2. लड़कपन, मित्रता, बुढ़ापा
  - 3. चतुरा, मीठा, दुर्बला
  - 4. गर्मी, सर्दी, नरमी

Question ID : 26433063030  
Status : Not Answered  
Chosen Option : --

Q.15 श्री कृष्ण ने माँ यशोदा से खेलने के लिए विभाकर को खिलौने के रूप में माँगा।

वाक्य में प्रयुक्त शब्द विभाकर का पर्यायवाची शब्द है-

- Ans
- 1. दानव
  - 2. घोड़ा
  - 3. सिंह
  - 4. चंद्रमा

Question ID : 26433080858  
Status : Not Answered  
Chosen Option : --



**Comprehension:**

निम्नलिखित गद्यांश में से कुछ शब्द हटा दिए गए हैं। दिए गए विकल्पों की सहायता से रिक्त स्थानों की पूर्ति कीजिए। प्रत्येक संख्या के लिए उपयुक्त विकल्प का चयन कीजिए।

दुनिया में अब 1. \_\_\_\_\_ करोड़ों 2. \_\_\_\_\_ छप चुकी हैं। हजारों पुस्तकें रोज़ छपती हैं। तरह-तरह 3. \_\_\_\_\_ अक्षरों में हजारों की तादाद में रोज़ 4. \_\_\_\_\_ समाचार-पत्र छपते रहते हैं। इन सबके मूल में 5. \_\_\_\_\_, अक्षर।

**SubQuestion No : 16**

**Q.16 रिक्त स्थान 1 की पूर्ति के लिए सर्वाधिक उपयुक्त विकल्प का चयन कीजिए।**

**Ans**  1. तक

2. से

3. सब

4. कब

Question ID : 26433079597

Status : Not Answered

Chosen Option : --

**Comprehension:**

निम्नलिखित गद्यांश में से कुछ शब्द हटा दिए गए हैं। दिए गए विकल्पों की सहायता से रिक्त स्थानों की पूर्ति कीजिए। प्रत्येक संख्या के लिए उपयुक्त विकल्प का चयन कीजिए।

दुनिया में अब 1. \_\_\_\_\_ करोड़ों 2. \_\_\_\_\_ छप चुकी हैं। हजारों पुस्तकें रोज़ छपती हैं। तरह-तरह 3. \_\_\_\_\_ अक्षरों में हजारों की तादाद में रोज़ 4. \_\_\_\_\_ समाचार-पत्र छपते रहते हैं। इन सबके मूल में 5. \_\_\_\_\_, अक्षर।

**SubQuestion No : 17**

**Q.17 रिक्त स्थान 2 की पूर्ति के लिए सर्वाधिक उपयुक्त विकल्प का चयन कीजिए।**

**Ans**  1. पाठ

2. परिणाम

3. पुस्तकों

4. पुस्तकें

Question ID : 26433079598

Status : Not Answered

Chosen Option : --

**Comprehension:**

निम्नलिखित गद्यांश में से कुछ शब्द हटा दिए गए हैं। दिए गए विकल्पों की सहायता से रिक्त स्थानों की पूर्ति कीजिए। प्रत्येक संख्या के लिए उपयुक्त विकल्प का चयन कीजिए।

दुनिया में अब 1. \_\_\_\_\_ करोड़ों 2. \_\_\_\_\_ छप चुकी हैं। हजारों पुस्तकें रोज़ छपती हैं। तरह-तरह 3. \_\_\_\_\_ अक्षरों में हजारों की तादाद में रोज़ 4. \_\_\_\_\_ समाचार-पत्र छपते रहते हैं। इन सबके मूल में 5. \_\_\_\_\_, अक्षर।

**SubQuestion No : 18**

**Q.18 रिक्त स्थान 3 की पूर्ति के लिए सर्वाधिक उपयुक्त विकल्प का चयन कीजिए।**

**Ans**  1. का

2. के

3. की

4. में

Question ID : 26433079599

Status : Not Answered

Chosen Option : --

**Comprehension:**

निम्नलिखित गद्यांश में से कुछ शब्द हटा दिए गए हैं। दिए गए विकल्पों की सहायता से रिक्त स्थानों की पूर्ति कीजिए। प्रत्येक संख्या के लिए उपयुक्त विकल्प का चयन कीजिए।

दुनिया में अब 1. \_\_\_\_\_ करोड़ों 2. \_\_\_\_\_ छप चुकी हैं। हजारों पुस्तकें रोज़ छपती हैं। तरह-तरह 3. \_\_\_\_\_ अक्षरों में हजारों की तादाद में रोज़ 4. \_\_\_\_\_ समाचार-पत्र छपते रहते हैं। इन सबके मूल में 5. \_\_\_\_\_, अक्षर।

**SubQuestion No : 19**

**Q.19 रिक्त स्थान 4 की पूर्ति के लिए सर्वाधिक उपयुक्त विकल्प का चयन कीजिए।**

**Ans** ✓ 1. ही

✗ 2. भर

✗ 3. तक

✗ 4. भी

Question ID : 26433079600

Status : Not Answered

Chosen Option : --

**Comprehension:**

निम्नलिखित गद्यांश में से कुछ शब्द हटा दिए गए हैं। दिए गए विकल्पों की सहायता से रिक्त स्थानों की पूर्ति कीजिए। प्रत्येक संख्या के लिए उपयुक्त विकल्प का चयन कीजिए।

दुनिया में अब 1. \_\_\_\_\_ करोड़ों 2. \_\_\_\_\_ छप चुकी हैं। हजारों पुस्तकें रोज़ छपती हैं। तरह-तरह 3. \_\_\_\_\_ अक्षरों में हजारों की तादाद में रोज़ 4. \_\_\_\_\_ समाचार-पत्र छपते रहते हैं। इन सबके मूल में 5. \_\_\_\_\_, अक्षर।

**SubQuestion No : 20**

**Q.20 रिक्त स्थान 5 की पूर्ति के लिए सर्वाधिक उपयुक्त विकल्प का चयन कीजिए।**

**Ans** ✓ 1. हैं

✗ 2. होना

✗ 3. होती

✗ 4. क्योंकि

Question ID : 26433079601

Status : Not Answered

Chosen Option : --