

Constable GD in CAPFs SSF Rifleman GD in Assam Rifles and Sepoy in NCB Examination 2022

Roll Number	
Candidate Name	
Venue Name	Jaipur Engineering College
Exam Date	06/02/2023
Exam Time	2:30 PM - 3:30 PM
Subject	Constable GD Examination 2022

Section : Part-A-General Intelligence and Reasoning

Q.1 Select the option that is related to the third word in the same way as the second word is related to the first word. (The words must be considered as meaningful English words and must not be related to each other based on the number of letters/number of consonants/vowels in the word.)

Painter : Brush :: Doctor : ?

- Ans
- 1. Plant
 - 2. Plastic
 - 3. Stethoscope
 - 4. Coal

Question ID : 26433057693
Status : Answered
Chosen Option : 3

Q.2 Select the option that is related to the fifth letter-cluster in the same way as the second letter-cluster is related to the first letter-cluster and the fourth letter-cluster is related to the third letter-cluster.

CLARITY : DMBSJUZ :: PRICE : QSJDF :: RAINBOW : ?

- Ans
- 1. SBJOCPX
 - 2. SXBJOCP
 - 3. SBCOJPX
 - 4. SJOCPXB

Question ID : 26433070323
Status : Answered
Chosen Option : 1

Q.3 Five people are sitting around a circular table facing outwards- L, M, N, O and P. P is sitting to the immediate right of L. M is sitting second right from P. N is the immediate neighbour of P and M. Who is sitting to the immediate left of L?

- Ans
- 1. P
 - 2. O
 - 3. M
 - 4. N

Question ID : 26433074609
Status : Answered
Chosen Option : 2

Q.4 Which of the following term will replace the question mark (?) in the given series?
XZVU, UYST, ?, OWMR, LVJQ

- Ans
- 1. RYPS
 - 2. RZPS
 - 3. RXPS
 - 4. SXQS

Question ID : 26433068310

Status : Answered

Chosen Option : 3

Q.5 Select the set in which the numbers are related in the same way as are the numbers of the following sets.

(NOTE : Operations should be performed on the whole numbers, without breaking down the numbers into its constituent digits. E.g. 13 – Operations on 13 such as adding/subtracting/multiplying etc. to 13 can be performed. Breaking down 13 into 1 and 3 and then performing mathematical operations on 1 and 3 is not allowed)
(5, 9, 450)
(7, 12, 840)

- Ans
- 1. (8, 12, 930)
 - 2. (7, 11, 760)
 - 3. (10, 13, 1350)
 - 4. (6, 9, 540)

Question ID : 26433076540

Status : Answered

Chosen Option : 4

Q.6 In a code language, 'red ribbon' is coded as 'cu du', 'apple is red' is coded as 'nu mu cu', 'radish is white' is coded as 'mu ku ru', 'eat radish' is coded as 'ru pu'. What is the code for the word 'white'?

- Ans
- 1. ku
 - 2. ru
 - 3. mu
 - 4. pu

Question ID : 26433082270

Status : Answered

Chosen Option : 1

Q.7 K, L, M, N, S, and P are 6 friends sitting around a circular table facing the centre. P is third to the left of S. K is to the immediate left of S. K and L are sitting opposite each other. M is sitting to the immediate right of S. Who is sitting opposite M?

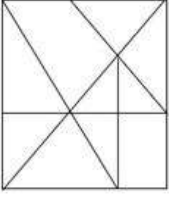
- Ans
- 1. K
 - 2. P
 - 3. N
 - 4. L

Question ID : 26433080432

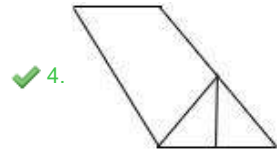
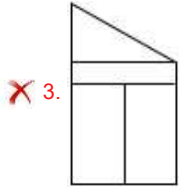
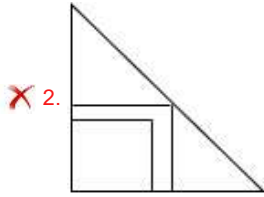
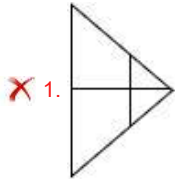
Status : Answered

Chosen Option : 3

Q.8 Select the option figure which is embedded in the given figure. (Rotation is NOT allowed)



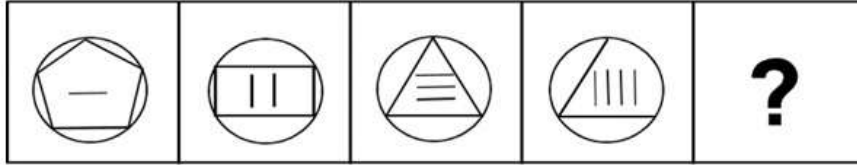
Ans



Prepp
Your Personal Exam Guide

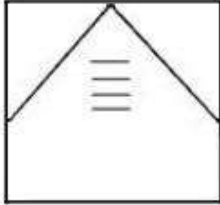
Question ID : 26433069345
Status : Answered
Chosen Option : 4

Q.9 Select the figure from among the given options that can replace the question mark (?) in the following series.

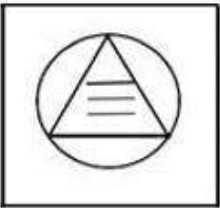


Ans

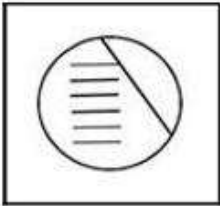
✗ 1.



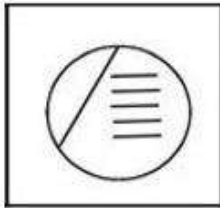
✗ 2.



✗ 3.



✓ 4.



Question ID : 26433080488

Status : Answered

Chosen Option : 4

Q.10 Which letter-cluster will replace the question mark (?) to complete the given series?
USRP, OMLJ, IGFD, CAZX ?

Ans ✗ 1. XUVT

✓ 2. WUTR

✗ 3. WVTS

✗ 4. XVUS

Question ID : 26433068437

Status : Answered

Chosen Option : 2

Q.11 Select the number from among the given options that can replace the question mark (?) in the following series.
77, 77, 79, 237, 241, ?

- Ans
- 1. 1502
 - 2. 1205
 - 3. 1250
 - 4. 1520

Question ID : 26433079005
Status : Answered
Chosen Option : 2

Q.12 In the following equation, which mathematical operations when sequentially placed will make the equation true?
 $20 * 4 * 8 * 10 * 5$

- Ans
- 1. $+ * < * *$
 - 2. $+ + = * *$
 - 3. $+ * > * *$
 - 4. $* + > * *$

Question ID : 26433085657
Status : Answered
Chosen Option : 1

Q.13 Which of the following numbers will replace the question mark (?) in the given series?
45, 76, ?, 168, 229

- Ans
- 1. 217
 - 2. 117
 - 3. 171
 - 4. 107

Question ID : 26433068092
Status : Answered
Chosen Option : 2

Q.14 Select the correct mirror image of the given figure when the mirror is placed at MN as shown below.

T p E J 4 2 d v c

M ————— N

Ans

✓ 1. T b E 1 4 5 q v c

✗ 2. T d E J 4 5 q v c

✗ 3. c v b 5 4 1 E q T

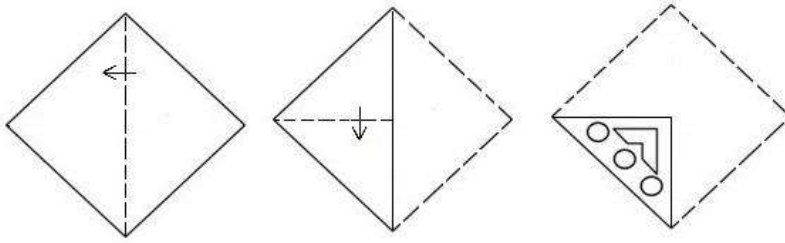
✗ 4. c v b 2 4 1 E q T

Question ID : 26433080815

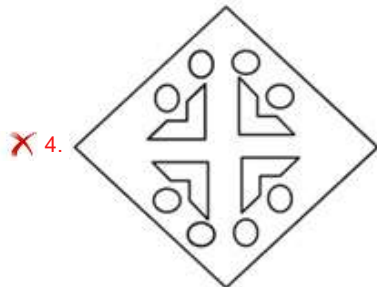
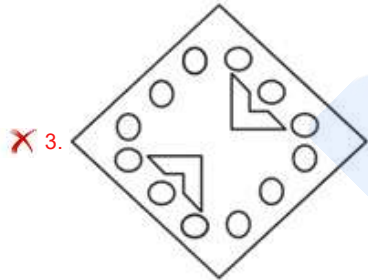
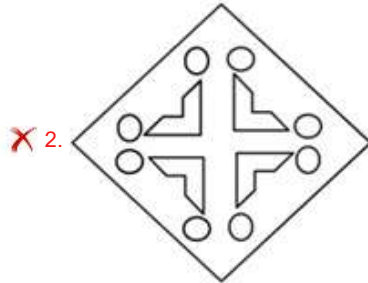
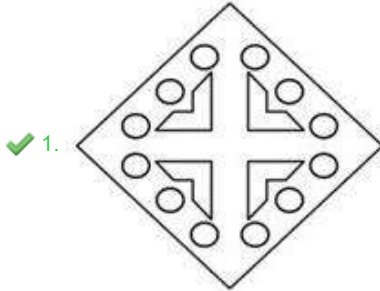
Status : Answered

Chosen Option : 1

Q.15 A paper is folded and cut as shown below. How will it appear when unfolded?



Ans



Question ID : 26433082052
Status : Answered
Chosen Option : 1

Q.16 A @ B means 'A is the sister of B'.
 A & B means 'A is the brother of B'.
 A # B means 'A is the wife of B'.
 A ^ B means 'A is the mother of B'.
 A + B means 'A is the father of B'.
 If A & C + E ^ G # I & K + M @ O, then which of the following statements is NOT correct?

- Ans 1. C is the maternal grandfather of G.
 2. O is the daughter of K.
 3. M is the daughter of K.
 4. K is the father of O.

Question ID : 26433068954

Status : Answered

Chosen Option : 2

Q.17 Which option represents the correct order of the given words as they would appear in the English dictionary?

- 1 heated
 2 healed
 3 heaped
 4 hedge
 5 helmet

- Ans 1. 3,4,1,2,5
 2. 2,3,1,4,5
 3. 2,1,3,4,5
 4. 3,2,1,4,5

Question ID : 26433069311

Status : Answered

Chosen Option : 2

Q.18 In a certain code language, 'HAUNT' is written as 'KVXIW' and 'BURNT' is written as 'EPUIW'. How will 'THROW' be written in the same code language?

- Ans 1. ZDUDZ
 2. WBUAZ
 3. WCUJZ
 4. ZDURW

Question ID : 26433068144

Status : Answered

Chosen Option : 3

Q.19 Which two signs should be interchanged to make the below equation mathematically correct?

$$49 + 16 \div 7 - 36 \times 16 = 92$$

- Ans 1. + and ×
 2. + and -
 3. ÷ and +
 4. × and +

Question ID : 264330117501

Status : Answered

Chosen Option : 4

Q.20 Three Statements are given followed by Three conclusions numbered I, II and III. Assuming the statements to be true, even if they seem to be at variance with commonly known facts, decide which of the conclusions logically follow(s) from the statements.

Statements:

All books are plastic.
Some plastic are cups.
All cups are glass.

Conclusions:

I. Some plastic are books.
II. All plastic are cups.
III. Some cups are glass.

- Ans
- 1. Both conclusions I and II follow.
 - 2. All conclusions follow.
 - 3. Both conclusions II and III follow.
 - 4. Both conclusions I and III follow.

Question ID : 26433074638

Status : Answered

Chosen Option : 4

Section : Part-B-General Knowledge and General awareness

Q.1 The Parliamentary form of government is also referred to as the _____ model.

- Ans
- 1. Theocracy
 - 2. Westminster
 - 3. Plutocracy
 - 4. Communist

Question ID : 26433089177

Status : Answered

Chosen Option : 1

Q.2 Which is the smallest union territory of India area-wise?

- Ans
- 1. Puducherry
 - 2. Lakshwadeep
 - 3. Andaman and Nicobar Island
 - 4. Dadra & Nagar Haveli and Daman and Diu

Question ID : 264330116047

Status : Not Attempted and
Marked For Review

Chosen Option : --

Q.3 Various Industrialists came together in 1944 and drafted a joint proposal for setting up a planned economy in India. It is famously known as the _____ Plan.

- Ans
- 1. Bombay
 - 2. National
 - 3. Five Year
 - 4. Industrial

Question ID : 264330116133

Status : Answered

Chosen Option : 3

Q.4 People involved in _____ sector, process the primary materials and convert them into finished goods.

- Ans
- 1. irrigation
 - 2. education
 - 3. secondary
 - 4. primary

Question ID : 264330115406
Status : Answered
Chosen Option : 3

Q.5 The Pey Jal Survekshan under _____ was launched by Minister of Housing and Urban Affairs in September, 2022.

- Ans
- 1. AMRUT 2.0
 - 2. Namami Gange
 - 3. Atal Jal Purti
 - 4. Jal Shakti

Question ID : 264330116184
Status : Answered
Chosen Option : 1

Q.6 Gangaur Festival is celebrated in honour of the Goddess _____ mostly by the womenfolk of Rajasthan.

- Ans
- 1. Sita
 - 2. Lakshmi
 - 3. Parvati
 - 4. Durga

Question ID : 264330115118
Status : Answered
Chosen Option : 3

Q.7 Nalanda University was established by _____ in the 5th century.

- Ans
- 1. Skandagupta
 - 2. Chandragupta II
 - 3. Kumaragupta
 - 4. Samudragupta

Question ID : 264330115460
Status : Answered
Chosen Option : 3

Q.8 The host and winner state for the Khelo India Youth Games 2020 edition is _____ .

- Ans 1. Maharashtra
 2. Assam and Maharashtra, respectively
 3. Maharashtra and Assam, respectively
 4. Assam

Question ID : 26433089929
Status : Answered
Chosen Option : 1

Q.9 El Nino is a phenomenon in which a warm ocean current that flows past the _____ coast, in place of the cold current, every 2 to 5 years.

- Ans 1. Peruvian
 2. Brazilian
 3. Chilean
 4. Argentinian

Question ID : 264330115990
Status : Not Answered
Chosen Option : --

Q.10 A _____ is a group of people who come together to contest elections and hold power in the government.

- Ans 1. political party
 2. proletariat
 3. municipality
 4. judiciary

Question ID : 264330115665
Status : Answered
Chosen Option : 2

Q.11 The recently released book "Madam Sir" narrates the story of which of the following woman IPS officers?

- Ans 1. Kiran Bedi
 2. Manjari Jaruhar
 3. Sanjukta Parashar
 4. Kanchan Chaudhary Bhattacharya

Question ID : 264330114991
Status : Answered
Chosen Option : 4

Q.12 In India, which programme provides food grains and other essential commodities at subsidised prices in rural and urban areas?

- Ans
- 1. Gramdan
 - 2. Buffer Stock
 - 3. Public Distribution System
 - 4. Bhoodan

Question ID : 264330115535
Status : Answered
Chosen Option : 3

Q.13 As of November 2022, who among the following is the Administrator of Lakshadweep, India?

- Ans
- 1. Devendra Kumar Joshi
 - 2. Manoj Sinha
 - 3. Praful Patel
 - 4. Mamata Banerjee

Question ID : 264330114942
Status : Answered
Chosen Option : 1

Q.14 Loans create _____, as they have to be returned to the lender in a certain period of time.

- Ans
- 1. asset
 - 2. growth
 - 3. equity
 - 4. liability

Question ID : 264330115288
Status : Not Answered
Chosen Option : --

Q.15 Who among the following received the Parishad Samman by the Delhi government?

- Ans
- 1. Anuradha Pandey
 - 2. Shovana Narayan
 - 3. Kelucharan Mohapatra
 - 4. Vempati Chinna Satyam

Question ID : 264330115838
Status : Not Answered
Chosen Option : --

Q.16 Which of the following was the main argument put forward by the British for the partition of Bengal in 1905?

- Ans
- 1. Development of trade
 - 2. Educational reforms
 - 3. Administrative convenience
 - 4. Religious harmony

Question ID : 26433089885
Status : Answered
Chosen Option : 3

Q.17 Which gas is released on burning of natural gas?

- Ans
- 1. Carbon dioxide
 - 2. Hydrogen
 - 3. Hydrogen sulphide
 - 4. Ozone

Question ID : 26433087847
Status : Answered
Chosen Option : 1

Q.18 Janaki Prasad is associated with which Gharana of Kathak?

- Ans
- 1. Lucknow gharana
 - 2. Banaras gharana
 - 3. Jaipur gharana
 - 4. Raigarh gharana

Question ID : 26433072919
Status : Answered
Chosen Option : 4

Q.19 What comes at the top of the food guide pyramid?

- Ans
- 1. cereal grains
 - 2. fats and sugars
 - 3. fruits and vegetables
 - 4. Pulses and legumes

Question ID : 264330115221
Status : Answered
Chosen Option : 1

Q.20 Which of the following is NOT correctly matched?

- Ans 1. 2022 Winter Olympic Games – Beijing
 2. 2010 Winter Olympic Games – London
 3. 2014 Winter Olympic Games – Sochi
 4. 2018 Winter Olympic Games – PyeongChang

Question ID : 26433090752
Status : Not Answered
Chosen Option : --

Section : Part-C-Elementary Mathematics

Q.1 The capacity of a cylindrical tank is $6,160 \text{ m}^3$. Its base diameter is 28 m. The depth of this tank is:

Take $\pi = \frac{22}{7}$

- Ans 1. 10 m
 2. 5 m
 3. 8 m
 4. 15 m

Question ID : 26433076055
Status : Answered
Chosen Option : 1

Q.2 If 17% of 630 = 35% of x, then what is the value of x?

- Ans 1. 356
 2. 310
 3. 306
 4. 308

Question ID : 26433075645
Status : Answered
Chosen Option : 4

Q.3

Find the volume of a cone whose radius is 7 inches and height is 27 inches.

(Use $\pi = \frac{22}{7}$)

- Ans 1. 1420 inches^3
 2. 1386 inches^3
 3. 1523 inches^3
 4. 1618 inches^3

Question ID : 26433080069
Status : Answered
Chosen Option : 2

Q.4 A bought a number of mangoes at 2 for ₹5 and an equal number at 3 for ₹5. To make a profit of 20% she should sell a dozen for:

- Ans
- 1. ₹30
 - 2. ₹25
 - 3. ₹16
 - 4. ₹12

Question ID : 26433076267

Status : Answered

Chosen Option : 1

Q.5 The compound interest on a principal in 3 years is 33.1% of the principal if the interest is compounded annually. Find the rate of interest per annum :

- Ans
- 1. 8%
 - 2. 10%
 - 3. 5%
 - 4. 11%

Question ID : 26433081720

Status : Answered

Chosen Option : 2

Q.6 The ratio of the third proportional of P and Q and the fourth proportional of P, Q and R is 5 : 6, then Q : R is:

- Ans
- 1. 6 : 5
 - 2. 2 : 3
 - 3. 5 : 6
 - 4. 3 : 2

Question ID : 26433074964

Status : Not Attempted and Marked For Review

Chosen Option : --

Q.7 By selling a refrigerator for Rs.28,448, a shopkeeper makes a profit of 12%. If the profit is reduced to 8%, what is the new selling price of the refrigerator?

- Ans
- 1. Rs.24,500
 - 2. Rs.26,342
 - 3. Rs.25,400
 - 4. Rs.27,432

Question ID : 26433080303

Status : Not Attempted and Marked For Review

Chosen Option : --

Q.8 Height of a plant increases at the rate of 2% per annum. If its present height is 1.2 m, then what will be the height of plant after three years ?

- Ans
- 1. 1.254 m
 - 2. 1.253 m
 - 3. 1.263 m
 - 4. 1.273 m

Question ID : 26433090260

Status : Not Answered

Chosen Option : --

Q.9 Two trains start at the same time from Mumbai and Delhi, and proceed towards each other at the speeds of 15 km/h and 26 km/h respectively. When they meet, it is found that one train has travelled 99 km more than the other. The distance between the two stations is:

- Ans
- 1. 570 km
 - 2. 632 km
 - 3. 414 km
 - 4. 369 km

Question ID : 26433080052

Status : Answered

Chosen Option : 4

Q.10 Find the square of Z. Z is the remainder when the smallest 4-digit number exactly divisible by 24 and 36 is divided by 40.

- Ans
- 1. 144
 - 2. 36
 - 3. 100
 - 4. 64

Question ID : 264330116659

Status : Answered

Chosen Option : 4

Q.11 A can complete a work in 15 days. A started the work alone and work for 4 days. B alone complete the remaining work in 18 days. In how many days will A and B together finish the work?

Ans

1. $7\frac{6}{29}$

2. $9\frac{9}{29}$

3. $11\frac{1}{29}$

4. $8\frac{7}{29}$

Question ID : 26433076405

Status : Answered

Chosen Option : 2

Q.12 Two numbers P and Q are such that the sum of 10% of P and 5% of Q is one-fourth of the sum of 15% of P and 25% of Q. Find the ratio of P to Q.

Ans 1. 5 : 2

2. 1 : 5

3. 5 : 1

4. 2 : 5

Question ID : 26433083033

Status : Not Answered

Chosen Option : --

Q.13 Find the third proportional of 5 and 11.

Ans 1. 22.0

2. 22.4

3. 24.2

4. 24.0

Question ID : 26433080326

Status : Answered

Chosen Option : 3

Q.14 A can do a piece of work in 40 days and B can do the same work in 80 days. They work together for 20 days, how much of the work is left to complete?

Ans 1. $1/2$

2. $1/4$

3. $4/5$

4. $3/2$

Question ID : 264330116868

Status : Answered

Chosen Option : 2

Q.15 How many prime numbers exist between 50 and 80?

- Ans 1. 5
 2. 8
 3. 6
 4. 7

Question ID : 26433082608
Status : Answered
Chosen Option : 4

Q.16 In a circular race of 500 m length, A and B start with speeds of 4 m/sec and 5 m/sec, respectively, at the same time from the same point. After how much time will they meet for the first time at the starting point while running in the same direction?

- Ans 1. 450 sec
 2. 500 sec
 3. 400 sec
 4. 550 sec

Question ID : 26433063959
Status : Answered
Chosen Option : 2

Q.17 Find the difference between the average of the cube of first 5 natural numbers and the average of the square of first 5 natural numbers.

- Ans 1. 34
 2. 36
 3. 30
 4. 32

Question ID : 264330116695
Status : Answered
Chosen Option : 1

Q.18 Pawan bought a pair of jeans from the store when they were giving a 20 percent discount. If the regular price of the pair of jeans was Rs. 1800, then how much did Pawan pay with the discount?

- Ans 1. Rs. 1360
 2. Rs. 1590
 3. Rs. 1440
 4. Rs. 1680

Question ID : 264330116753
Status : Answered
Chosen Option : 3

Q.19 Marked price of a table is listed at Rs.1,880. If it's sold at a discount 15%, then what is the selling price of the table?

- Ans
- 1. Rs.1,798
 - 2. Rs.1,498
 - 3. Rs.1,698
 - 4. Rs.1,598

Question ID : 26433075656

Status : Answered

Chosen Option : 4

Q.20 A bike rider covers a fixed distance at a speed of 60 km/h and returns back at a speed of 80 km/h. What is his average speed?

- Ans
- 1. $71\frac{1}{7}$ km/h
 - 2. $68\frac{4}{7}$ km/h
 - 3. $53\frac{3}{7}$ km/h
 - 4. $63\frac{1}{7}$ km/h

Question ID : 26433076396

Status : Answered

Chosen Option : 2

Section : Part-D-English

Q.1 Select the most appropriate ANTONYM of the given word.

Gratitude

- Ans
- 1. Thanklessness
 - 2. Mercy
 - 3. Appreciation
 - 4. Care

Question ID : 26433073799

Status : Answered

Chosen Option : 1

Q.2 Select the most appropriate homophone to fill in the blank.

He is a good soul. Although the _____ of his shoe is worn out, he never asks anyone to help him with money.

- Ans
- 1. soil
 - 2. sole
 - 3. seal
 - 4. sold

Question ID : 26433088795

Status : Answered

Chosen Option : 2

Q.3 Select the most appropriate option that can substitute the underlined segment in the given sentence.

Don't sit on this bench as it is just painted.

- Ans
- 1. it had painted just
 - 2. it was painted just
 - 3. it had been painted just
 - 4. it has just been painted

Question ID : 26433088169
Status : Answered
Chosen Option : 4

Q.4 Select the INCORRECTLY spelt word.

- Ans
- 1. Anticipate
 - 2. Menipulate
 - 3. Calculate
 - 4. Instigate

Question ID : 26433073497
Status : Answered
Chosen Option : 2

Q.5 Select the most appropriate meaning of the given idiom.

Better the devil you know than the devil you don't.

- Ans
- 1. Do not trust unknown and known devils.
 - 2. Being good is better with evil people.
 - 3. Being cruel is better with known people.
 - 4. It is easier to be in a known bad situation than being in an unknown worse situation.

Question ID : 26433073820
Status : Answered
Chosen Option : 1

Q.6 Select the INCORRECTLY spelt word.

- Ans
- 1. Philosophy
 - 2. Passive
 - 3. Horrendous
 - 4. Farmaceutical

Question ID : 26433073732
Status : Answered
Chosen Option : 4

Q.7 Select the most appropriate meaning of the given idiom.

Will-o-the-wisp

- Ans
- 1. Having a strong will
 - 2. A splendid dream
 - 3. Being greedy for money
 - 4. An unrealistic or unattainable goal

Question ID : 26433072436

Status : Marked For Review

Chosen Option : 1

Q.8 Select the most appropriate option to fill in the blank.

As I review the events of my past life, I realise how _____ are the influences that shape our destinies.

- Ans
- 1. artless
 - 2. trumpet
 - 3. crude
 - 4. subtle

Question ID : 26433092833

Status : Answered

Chosen Option : 4

Q.9 Select the most appropriate option to substitute the underlined segment in the given sentence.

The monitor of the class don't know the answer.

- Ans
- 1. the class don't knew
 - 2. the class doesn't knew
 - 3. the class doesn't know
 - 4. the class didn't knew

Question ID : 26433093022

Status : Answered

Chosen Option : 3

Q.10 Select the most appropriate option to fill in the blank.

The operation is to be distinguished from other forms of heart surgery and, in particular, from the repair of openings between the _____.

- Ans
- 1. auricles
 - 2. oracles
 - 3. oculus
 - 4. oracle

Question ID : 26433090387

Status : Answered

Chosen Option : 1

Q.11 Select the most appropriate ANTONYM of the given word.

Presumable

- Ans
- 1. Reasonable
 - 2. Forgetful
 - 3. Improbable
 - 4. Credible

Question ID : 26433072210

Status : **Not Attempted and Marked For Review**

Chosen Option : --

Q.12 Select the most appropriate synonym of the given word.

Confuse

- Ans
- 1. Admit
 - 2. Compose
 - 3. Disunion
 - 4. Puzzle

Question ID : 26433072183

Status : **Answered**

Chosen Option : 4

Q.13 Select the most appropriate synonym of the given word.

Deficient

- Ans
- 1. Insufficient
 - 2. Sufficient
 - 3. Distinct
 - 4. Abundant

Question ID : 26433074045

Status : **Answered**

Chosen Option : 1

Q.14 The sentence below is divided into four segments. Select the option that has an error of tense.

I think India will win the 20-20 cricket match.

- Ans
- 1. India will win
 - 2. the 20-20 cricket match
 - 3. No error
 - 4. I think

Question ID : 26433092944

Status : **Answered**

Chosen Option : 3

Q.15 Select the most appropriate **ANTONYM** of the given word.

Scanty

- Ans 1. Meagre
 2. Abundant
 3. Divine
 4. Buoyant

Question ID : 26433084685
Status : Answered
Chosen Option : 2

Comprehension:

In the following passage, some words have been deleted. Read the passage carefully and select the most appropriate option to fill in each blank.

If you (1) _____ yourself with the good and righteous, they can only (2) _____ you up. If you (3) _____ yourself with the others, they will (4) _____ you down into the doldrums of mediocrity, and they will keep you there, but only as long as you (5) _____ it.

SubQuestion No : 16

Q.16 Select the most appropriate option to fill in blank number 1.

- Ans 1. retreat
 2. ignore
 3. avoid
 4. surround

Question ID : 26433089319
Status : Answered
Chosen Option : 4

Comprehension:

In the following passage, some words have been deleted. Read the passage carefully and select the most appropriate option to fill in each blank.

If you (1) _____ yourself with the good and righteous, they can only (2) _____ you up. If you (3) _____ yourself with the others, they will (4) _____ you down into the doldrums of mediocrity, and they will keep you there, but only as long as you (5) _____ it.

SubQuestion No : 17

Q.17 Select the most appropriate option to fill in blank number 2.

- Ans 1. replace
 2. tarnish
 3. raise
 4. vanish

Question ID : 26433089320
Status : Answered
Chosen Option : 3

Comprehension:

In the following passage, some words have been deleted. Read the passage carefully and select the most appropriate option to fill in each blank.

If you (1) _____ yourself with the good and righteous, they can only (2) _____ you up. If you (3) _____ yourself with the others, they will (4) _____ you down into the doldrums of mediocrity, and they will keep you there, but only as long as you (5) _____ it.

SubQuestion No : 18

Q.18 Select the most appropriate option to fill in blank number 3.

- Ans 1. encircle
 2. clarify
 3. loath
 4. hide

Question ID : 26433089321

Status : Answered

Chosen Option : 1

Comprehension:

In the following passage, some words have been deleted. Read the passage carefully and select the most appropriate option to fill in each blank.

If you (1) _____ yourself with the good and righteous, they can only (2) _____ you up. If you (3) _____ yourself with the others, they will (4) _____ you down into the doldrums of mediocrity, and they will keep you there, but only as long as you (5) _____ it.

SubQuestion No : 19

Q.19 Select the most appropriate option to fill in blank number 4.

- Ans 1. foster
 2. elevate
 3. drag
 4. nurture

Question ID : 26433089322

Status : Answered

Chosen Option : 3

Comprehension:

In the following passage, some words have been deleted. Read the passage carefully and select the most appropriate option to fill in each blank.

If you (1) _____ yourself with the good and righteous, they can only (2) _____ you up. If you (3) _____ yourself with the others, they will (4) _____ you down into the doldrums of mediocrity, and they will keep you there, but only as long as you (5) _____ it.

SubQuestion No : 20

Q.20 Select the most appropriate option to fill in blank number 5.

- Ans 1. permit
 2. disregard
 3. overlook
 4. forget

Question ID : 26433089323

Status : Not Answered

Chosen Option : --

Section : Part-D-Hindi

Q.1 'जो बीत गया है' वाक्यांश के लिए सार्थक शब्द है-

- Ans
- 1. आगामी
 - 2. व्यतीत
 - 3. अतीत
 - 4. वर्तमान

Question ID : 26433065863
 Status : Not Answered
 Chosen Option : --

Q.2 वृक्ष काटना अत्यंत घातक है।

रेखांकित शब्द के उचित पर्यायवाची शब्द का चयन कीजिए।

- Ans
- 1. पेड़
 - 2. अंशु
 - 3. यती
 - 4. वित्त

Question ID : 26433079622
 Status : Not Answered
 Chosen Option : --

Q.3 'आपे से बाहर होना' मुहावरे का सही अर्थ है -

- Ans
- 1. अत्यधिक क्रोधित हो जाना
 - 2. विरोध करना
 - 3. डांटना
 - 4. जल जाना

Question ID : 26433065917
 Status : Not Answered
 Chosen Option : --

Q.4 निम्नलिखित में से अशुद्ध वाक्य कौन-सा है?

- Ans
- 1. अनिल ने कल दो खिलौने खरीदे।
 - 2. लक्ष्य ने शिक्षक से विभा की शिकायत की।
 - 3. एक विद्यार्थी को दो पुस्तक मिलेगी।
 - 4. नव्या की बहन शिमला में पढ़ती है।

Question ID : 26433066988
 Status : Not Answered
 Chosen Option : --

Q.5 निम्नलिखित अकर्मक एवं सकर्मक क्रिया शब्द युग्मों में से किसमें त्रुटि है?

- Ans
- 1. खुलना - खोलना
 - 2. मूड़ना - मोड़ना
 - 3. जुड़ना - जोड़ना
 - 4. दिखना - देखना

Question ID : 26433063040
Status : Not Answered
Chosen Option : --

Q.6 'आकर्षण' शब्द का विलोम क्या होगा?

- Ans
- 1. अनुपम
 - 2. मनोहर
 - 3. विकर्षण
 - 4. आकर्षित

Question ID : 26433067089
Status : Not Answered
Chosen Option : --

Q.7 निम्नलिखित मुहावरों का कौन सा एक विकल्प-युग्म अशुद्ध है?

- Ans
- 1. कान में डाल देना-बता देना
 - 2. खून खौलना-जोश आना
 - 3. कूच कर जाना-चले जाना
 - 4. खून सफेद हो जाना-अपमान करना

Question ID : 26433062558
Status : Not Answered
Chosen Option : --

Q.8 निम्न वाक्य में रेखांकित शब्द को विकल्पों में दिए गए शब्दों में से उचित शब्द से बदलें।
मैंने चित्त में सोचा कि भला ऐसा क्यों होता है!

- Ans
- 1. विचार
 - 2. आत्मा
 - 3. मन
 - 4. व्यवहार

Question ID : 26433062878
Status : Not Answered
Chosen Option : --

Q.9 निम्नलिखित विकल्पों में से दिए गए वाक्यांश के लिए उपयुक्त शब्द चुनें।
वृक्षों और बेलों से घिरा स्थान

- Ans
- 1. क्यारी
 - 2. वन
 - 3. कुंज
 - 4. कल्प

Question ID : 26433069991
Status : Not Answered
Chosen Option : --

Q.10 'पुस्तकालय _____'

उपर्युक्त वाक्य में रिक्त स्थान का उपयुक्त विकल्प निम्न में से क्या होगा?

- Ans
- 1. वह स्थान है, जहाँ बैठकर पढ़ाई मिलती है
 - 2. वह स्थान है, जहाँ बैठकर पढ़ाई की जाती है
 - 3. वह स्थान है, जहाँ बैठकर बातें की जाती हैं
 - 4. वह स्थान है, जहाँ पढ़ाई मिलती है

Question ID : 26433067037
Status : Not Answered
Chosen Option : --

Q.11 निम्नलिखित वाक्य में अशुद्धि पहचानें-
कानून के हाथ लंबे होते हैं।

- Ans
- 1. हाथ
 - 2. होते
 - 3. लंबे
 - 4. कानून

Question ID : 26433066823
Status : Not Answered
Chosen Option : --

Q.12 'कमल' का पर्यायवाची शब्द है-

- Ans
- 1. सुमन
 - 2. पयोद
 - 3. पंकद
 - 4. पंकज

Question ID : 26433062915
Status : Not Answered
Chosen Option : --

Q.13 'कर्मण्य' शब्द का विलोम क्या होगा?

- Ans 1. अकर्मण्य
 2. निकर्मण्य
 3. विकर्मण्य
 4. सकर्मण्य

Question ID : 26433067096

Status : Not Answered

Chosen Option : --

Q.14 रेखांकित शब्द-समूह के लिए सर्वाधिक उपयुक्त विकल्प चुनें।
राज्य के प्रधान शासक द्वारा दिया गया आधिकारिक आदेश पढ़कर मुझे प्रसन्नता हुई।

- Ans 1. आदेश
 2. अधिकादेश
 3. नियमावली
 4. अध्यादेश

Question ID : 26433062283

Status : Not Answered

Chosen Option : --

Q.15 निम्नलिखित विकल्पों में से किस एक वाक्य में गुणवाचक विशेषण का उचित प्रयोग नहीं किया गया है?

- Ans 1. कर्मवीर बौना है।
 2. वह लम्बा है।
 3. शिवशंकर की शर्ट काली है।
 4. सुरेश केरल में पढ़ता है।

Question ID : 26433062971

Status : Not Answered

Chosen Option : --

Comprehension:

नीचे दिए गए गद्यांश से कुछ शब्दों को हटा दिया गया है। गद्यांश के आधार पर पूछे गए प्रश्नों के अनुसार इन रिक्त स्थानों की पूर्ति उपयुक्त शब्दों द्वारा कीजिए।
सिंह की भांति राणा ने उनके बीच में 1. _____ किया। सत्रहों सरदार पृथ्वी पर झुक गए। उनकी तलवारें 2. _____ उठीं और पीठ पर बंधी हुई बड़ी ढालें हिल पड़ीं। सेना ने महाराज को देखते ही वज्रध्वनि से 3. _____ किया। प्रताप ने एक ऊंचे टीले पर खड़े होकर अपने सरदारों और सेना को सम्बोधित करके कहा, "मेरे प्यारे वीरों, वंशधरों! आज हम वह कार्य करने जा रहे हैं जो हमेशा हमारे 4. _____ ने किया है। हम आज मरेंगे अथवा विजय प्राप्त करेंगे। हमारा इस युद्ध में कोई स्वार्थ नहीं है। हम केवल इसलिए युद्ध कर रहे हैं कि हमारी 5. _____ में हस्तक्षेप हो रहा है। क्या यहाँ पर कोई ऐसा राजपूत है जो पराया गुलाम बना रहना पसंद करे? जो ऐसा हो उसे मेरी तरफ से छुट्टी है।"

SubQuestion No : 16

Q.16 रिक्त स्थान 1 के लिए उपयुक्त शब्द का चयन विकल्पों में से कीजिए।

- Ans 1. आक्रमण
 2. तांडव
 3. पदार्पण
 4. पटाक्षेप

Question ID : 26433069925

Status : Not Answered

Chosen Option : --

Comprehension:

नीचे दिए गए गद्यांश से कुछ शब्दों को हटा दिया गया है। गद्यांश के आधार पर पूछे गए प्रश्नों के अनुसार इन रिक्त स्थानों की पूर्ति उपयुक्त शब्दों द्वारा कीजिए।
 सिंह की भांति राणा ने उनके बीच में 1. _____ किया। सत्रहों सरदार पृथ्वी पर झुक गए। उनकी तलवारें 2. _____ उठीं और पीठ पर बंधी हुई बड़ी ढालें हिल पड़ीं। सेना ने महाराज को देखते ही वज्रध्वनि से 3. _____ किया। प्रताप ने एक ऊंचे टीले पर खड़े होकर अपने सरदारों और सेना को सम्बोधित करके कहा, "मेरे प्यारे वीरों, वंशधरों! आज हम वह कार्य करने जा रहे हैं जो हमेशा हमारे 4. _____ ने किया है। हम आज मरेंगे अथवा विजय प्राप्त करेंगे। हमारा इस युद्ध में कोई स्वार्थ नहीं है। हम केवल इसलिए युद्ध कर रहे हैं कि हमारी 5. _____ में हस्तक्षेप हो रहा है। क्या यहाँ पर कोई ऐसा राजपूत है जो पराया गुलाम बना रहना पसंद करे? जो ऐसा हो उसे मेरी तरफ से छुट्टी है।"

SubQuestion No : 17

Q.17 रिक्त स्थान 2 के लिए उपयुक्त शब्द का चयन विकल्पों में से कीजिए।

- Ans**
- 1. भनभना
 - 2. बजबजा
 - 3. खनखना
 - 4. तड़तड़ा

Question ID : 26433069926

Status : Not Answered

Chosen Option : --

Comprehension:

नीचे दिए गए गद्यांश से कुछ शब्दों को हटा दिया गया है। गद्यांश के आधार पर पूछे गए प्रश्नों के अनुसार इन रिक्त स्थानों की पूर्ति उपयुक्त शब्दों द्वारा कीजिए।
 सिंह की भांति राणा ने उनके बीच में 1. _____ किया। सत्रहों सरदार पृथ्वी पर झुक गए। उनकी तलवारें 2. _____ उठीं और पीठ पर बंधी हुई बड़ी ढालें हिल पड़ीं। सेना ने महाराज को देखते ही वज्रध्वनि से 3. _____ किया। प्रताप ने एक ऊंचे टीले पर खड़े होकर अपने सरदारों और सेना को सम्बोधित करके कहा, "मेरे प्यारे वीरों, वंशधरों! आज हम वह कार्य करने जा रहे हैं जो हमेशा हमारे 4. _____ ने किया है। हम आज मरेंगे अथवा विजय प्राप्त करेंगे। हमारा इस युद्ध में कोई स्वार्थ नहीं है। हम केवल इसलिए युद्ध कर रहे हैं कि हमारी 5. _____ में हस्तक्षेप हो रहा है। क्या यहाँ पर कोई ऐसा राजपूत है जो पराया गुलाम बना रहना पसंद करे? जो ऐसा हो उसे मेरी तरफ से छुट्टी है।"

SubQuestion No : 18

Q.18 रिक्त स्थान 3 के लिए उपयुक्त शब्द का चयन विकल्पों में से कीजिए।

- Ans**
- 1. मंगलगान
 - 2. शोकगान
 - 3. अभियान
 - 4. जयघोष

Question ID : 26433069927

Status : Not Answered

Chosen Option : --

Comprehension:

नीचे दिए गए गद्यांश से कुछ शब्दों को हटा दिया गया है। गद्यांश के आधार पर पूछे गए प्रश्नों के अनुसार इन रिक्त स्थानों की पूर्ति उपयुक्त शब्दों द्वारा कीजिए।
 सिंह की भांति राणा ने उनके बीच में 1. _____ किया। सत्रहों सरदार पृथ्वी पर झुक गए। उनकी तलवारें 2. _____ उठीं और पीठ पर बंधी हुई बड़ी ढालें हिल पड़ीं। सेना ने महाराज को देखते ही वज्रध्वनि से 3. _____ किया। प्रताप ने एक ऊंचे टीले पर खड़े होकर अपने सरदारों और सेना को सम्बोधित करके कहा, "मेरे प्यारे वीरों, वंशधरों! आज हम वह कार्य करने जा रहे हैं जो हमेशा हमारे 4. _____ ने किया है। हम आज मरेंगे अथवा विजय प्राप्त करेंगे। हमारा इस युद्ध में कोई स्वार्थ नहीं है। हम केवल इसलिए युद्ध कर रहे हैं कि हमारी 5. _____ में हस्तक्षेप हो रहा है। क्या यहाँ पर कोई ऐसा राजपूत है जो पराया गुलाम बना रहना पसंद करे? जो ऐसा हो उसे मेरी तरफ से छुट्टी है।"

SubQuestion No : 19

Q.19 रिक्त स्थान 4 के लिए उपयुक्त शब्द का चयन विकल्पों में से कीजिए।

- Ans 1. सहयोगियों
 2. शत्रुओं
 3. पूर्वजों
 4. अनुजों

Question ID : 26433069928

Status : Not Answered

Chosen Option : --

Comprehension:

नीचे दिए गए गद्यांश से कुछ शब्दों को हटा दिया गया है। गद्यांश के आधार पर पूछे गए प्रश्नों के अनुसार इन रिक्त स्थानों की पूर्ति उपयुक्त शब्दों द्वारा कीजिए।
 सिंह की भांति राणा ने उनके बीच में 1. _____ किया। सत्रहों सरदार पृथ्वी पर झुक गए। उनकी तलवारें 2. _____ उठीं और पीठ पर बंधी हुई बड़ी ढालें हिल पड़ीं। सेना ने महाराज को देखते ही वज्रध्वनि से 3. _____ किया। प्रताप ने एक ऊंचे टीले पर खड़े होकर अपने सरदारों और सेना को सम्बोधित करके कहा, "मेरे प्यारे वीरों, वंशधरों! आज हम वह कार्य करने जा रहे हैं जो हमेशा हमारे 4. _____ ने किया है। हम आज मरेंगे अथवा विजय प्राप्त करेंगे। हमारा इस युद्ध में कोई स्वार्थ नहीं है। हम केवल इसलिए युद्ध कर रहे हैं कि हमारी 5. _____ में हस्तक्षेप हो रहा है। क्या यहाँ पर कोई ऐसा राजपूत है जो पराया गुलाम बना रहना पसंद करे? जो ऐसा हो उसे मेरी तरफ से छुट्टी है।"

SubQuestion No : 20

Q.20 रिक्त स्थान 5 के लिए उपयुक्त शब्द का चयन विकल्पों में से कीजिए।

- Ans 1. प्रसन्नता
 2. स्वतंत्रता
 3. परतंत्रता
 4. देशभक्ति

Question ID : 26433069929

Status : Not Answered

Chosen Option : --