

SSC MTS 2023 Tier 1 Sept 13 Shift 1 Question Paper with Answers

Roll Number	
Candidate Name	
Exam Date	13/09/2023
Exam Time	9:00 AM - 11:00 AM
Subject	MTS Non Tech Havaladar CBIC and CBN Examination 2023

Section : Numerical and Mathematical Ability

Q.1 By selling a calculator for ₹1,080, there is a loss of 10%, if the article is sold for ₹1,350, the net result in the transaction is:

- Ans
- 1. $12\frac{1}{2}\%$ loss
 - 2. 12% gain
 - 3. $12\frac{1}{2}\%$ gain
 - 4. 12% loss

Question ID : 264330159027

Option 1 ID : 264330623468

Option 2 ID : 264330623469

Option 3 ID : 264330623467

Option 4 ID : 264330623470

Status : Answered

Chosen Option : 3

Q.2 If the $\frac{5}{6}$ of a number is 10 less than the number itself, then $\frac{7}{5}$ of the number is _____.

- Ans
- 1. 72
 - 2. 96
 - 3. 60
 - 4. 84

Question ID : 264330153806

Option 1 ID : 264330602687

Option 2 ID : 264330602690

Option 3 ID : 264330602688

Option 4 ID : 264330602689

Status : Answered

Chosen Option : 4

Q.3 A boat travels upstream from B to A and downstream from A to B in 3 hours. If the speed of the boat in still water is 9 km/h and the speed of the current is 3.5 km/h, the distance between A and B is: (correct up to two decimal places)

- Ans**
- 1. 14.46 km
 - 2. 13.46 km
 - 3. 12.46 km
 - 4. 11.46 km

Question ID : 264330156348
Option 1 ID : 264330612794
Option 2 ID : 264330612792
Option 3 ID : 264330612791
Option 4 ID : 264330612793
Status : Marked For Review
Chosen Option : 4

Q.4 Two trains are travelling in the same direction on parallel tracks. Train A is travelling at 30 km/h and Train B is travelling at 60 km/h. If Train A is 400 m long and it takes Train B two minutes to pass Train A, what is the length of Train B?

- Ans**
- 1. 700 m
 - 2. 500 m
 - 3. 400 m
 - 4. 600 m

Question ID : 264330156275
Option 1 ID : 264330612502
Option 2 ID : 264330612500
Option 3 ID : 264330612499
Option 4 ID : 264330612501
Status : Answered
Chosen Option : 1

Q.5 Some oranges were purchased at ₹150 per hundred and sold at ₹24 per dozen. It gave a gain of ₹1,000. How many oranges were purchased?

- Ans**
- 1. 3000
 - 2. 2500
 - 3. 1500
 - 4. 2000

Question ID : 264330156074
Option 1 ID : 264330611696
Option 2 ID : 264330611698
Option 3 ID : 264330611697
Option 4 ID : 264330611695
Status : Answered
Chosen Option : 2

Q.6 The average weight of 20 students in a class is 55 kg. If the weight of the class teacher is included, the average is increased by 0.5 kg. The weight of the class teacher is:

- Ans**
- 1. 67.2 kg
 - 2. 63.5 kg
 - 3. 65.5 kg
 - 4. 68.4 kg

Question ID : 264330155954
Option 1 ID : 264330611216
Option 2 ID : 264330611217
Option 3 ID : 264330611218
Option 4 ID : 264330611215
Status : Answered
Chosen Option : 3

Q.7 15 kg of ₹25 per kg wheat is mixed with 10 kg of another type of wheat to get a mixture costing ₹30 per kg. Find the price (per kg) of the costlier wheat.

- Ans**
- 1. ₹37.5
 - 2. ₹32.5
 - 3. ₹35.5
 - 4. ₹30.5

Question ID : 264330156213
Option 1 ID : 264330612254
Option 2 ID : 264330612252
Option 3 ID : 264330612253
Option 4 ID : 264330612251
Status : Answered
Chosen Option : 2

Q.8 A and B can do a piece of work in 5 days, while C and D can do the same work in 20 days. In how many days will A, B, C and D do it together?

- Ans**
- 1. 3
 - 2. 4
 - 3. 5
 - 4. 6

Question ID : 264330156116
Option 1 ID : 264330611863
Option 2 ID : 264330611865
Option 3 ID : 264330611864
Option 4 ID : 264330611866
Status : Answered
Chosen Option : 2

Q.9 A milk vendor has 2 vessels of milk and water. The first contains 80% milk and the rest is water. The second contains 50% milk. How much mixture (in L) should he mix from each of the vessels so as to get 9 litres of mixture such that the ratio of water to milk is 1 : 2? (Write your answer in the order of vessel 1 and vessel 2)

- Ans**
- 1. 6, 3
 - 2. 4, 5
 - 3. 3, 6
 - 4. 5, 4

Question ID : 264330153760

Option 1 ID : 264330602503

Option 2 ID : 264330602505

Option 3 ID : 264330602504

Option 4 ID : 264330602506

Status : Answered

Chosen Option : 2

Q.10 On what sum of money will the difference between the simple interest and compound interest (Compounded annually) for 3 years at 5% per annum be ₹15,25?

- Ans**
- 1. ₹2,500
 - 2. ₹1,000
 - 3. ₹4,000
 - 4. ₹2,000

Question ID : 264330156345

Option 1 ID : 264330612782

Option 2 ID : 264330612781

Option 3 ID : 264330612779

Option 4 ID : 264330612780

Status : Answered

Chosen Option : 1

Q.11 Study the given bar-graph and answer the question that follows.

The bar-graph presents the number of books sold by a bookseller during different months of a particular year.



The number of books sold in the month of December is how much less than the average number of books sold per month?

- Ans**
- 1. 120
 - 2. 93
 - 3. 39
 - 4. 95

Question ID : 264330153819

Option 1 ID : 264330602742

Option 2 ID : 264330602739

Option 3 ID : 264330602741

Option 4 ID : 264330602740

Status : Not Attempted and Marked For Review

Chosen Option : --

Q.12 The length of an edge of a cube is 3.5 cm. Find its total surface area.

- Ans 1. 73.5 cm^2
 2. 36 cm^2
 3. 27 cm^2
 4. 154 cm^2

Question ID : 264330156086
Option 1 ID : 264330611743
Option 2 ID : 264330611745
Option 3 ID : 264330611744
Option 4 ID : 264330611746
Status : Answered
Chosen Option : 1

Q.13 Study the given table and answer the question that follows.

The table shows the milk exported from India from 2011 to 2015.

Year	Quantity (in lakh litres)	Value (in ₹ crores)
2011	130	240
2012	115	220
2013	142	420
2014	165	550
2015	195	610

In which year is the value per litre the maximum?

- Ans 1. 2012
 2. 2014
 3. 2015
 4. 2013

Question ID : 264330157334
Option 1 ID : 264330616699
Option 2 ID : 264330616701
Option 3 ID : 264330616702
Option 4 ID : 264330616700
Status : Answered
Chosen Option : 3

Q.14 A family spends 20% of its monthly income on house rent. Out of the remaining amount, the family spends 50% on household expenditure and 20% on children's education. If after doing so, its monthly saving is ₹6,600, then what is the total monthly income of the family?

- Ans**
- 1. ₹25,000
 - 2. ₹27,500
 - 3. ₹30,000
 - 4. ₹28,000

Question ID : 264330154121
Option 1 ID : 264330603947
Option 2 ID : 264330603949
Option 3 ID : 264330603950
Option 4 ID : 264330603948
Status : Answered
Chosen Option : 2

Q.15 If $6\frac{1}{2} \times 2\frac{4}{5} \div x = \frac{7}{10}$, then find x :

- Ans**
- 1. 26
 - 2. 6
 - 3. 32
 - 4. 12

Question ID : 264330153867
Option 1 ID : 264330602932
Option 2 ID : 264330602931
Option 3 ID : 264330602934
Option 4 ID : 264330602933
Status : Answered
Chosen Option : 1

Q.16 Two numbers are in the ratio of 13 : 15. If their HCF is 3, then what is the difference between these two numbers?

- Ans**
- 1. 4
 - 2. 2
 - 3. 8
 - 4. 6

Question ID : 264330155681
Option 1 ID : 264330610128
Option 2 ID : 264330610127
Option 3 ID : 264330610130
Option 4 ID : 264330610129
Status : Answered
Chosen Option : 4

Q.17 A and B can complete a task in 6 and 8 days, respectively. They work on alternate days, with A starting the task on the first day. How many days will it take them to complete the task?

- Ans**
- 1. 6
 - 2. $6\frac{3}{4}$
 - 3. $6\frac{1}{2}$
 - 4. $6\frac{1}{4}$

Question ID : 264330156280

Option 1 ID : 264330612519

Option 2 ID : 264330612522

Option 3 ID : 264330612521

Option 4 ID : 264330612520

Status : Answered

Chosen Option : 4

Q.18 In how many years will ₹2,000 invested at the rate of 11% p.a. simple interest, amount to ₹3,100?

- Ans**
- 1. 3
 - 2. 4
 - 3. 2
 - 4. 5

Question ID : 264330156226

Option 1 ID : 264330612304

Option 2 ID : 264330612305

Option 3 ID : 264330612303

Option 4 ID : 264330612306

Status : Answered

Chosen Option : 1

Q.19 If the diameter of the base of a cone is 70 cm and its curved surface area is 4070 cm^2 , then what will be its volume (in cm^3)? (use $\pi = \frac{22}{7}$)

- Ans**
- 1. 1180
 - 2. 16,300
 - 3. 15,400
 - 4. 17,600

Question ID : 264330156539

Option 1 ID : 264330613543

Option 2 ID : 264330613544

Option 3 ID : 264330613546

Option 4 ID : 264330613545

Status : Answered

Chosen Option : 2

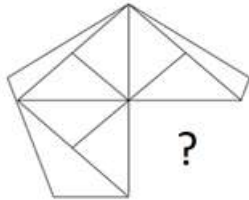
Q.20 The ratio of the number of boys to the number of girls in a school of 1650 students is 6 : 5. If 124 new boys are admitted and few new girls are admitted, the ratio changes to 4 : 3. What is the ratio of the newly admitted girls to the newly admitted boys?

- Ans**
- 1. 3 : 4
 - 2. 62 : 9
 - 3. 4 : 3
 - 4. 9 : 62

Question ID : 264330156307
 Option 1 ID : 264330612628
 Option 2 ID : 264330612629
 Option 3 ID : 264330612627
 Option 4 ID : 264330612630
 Status : Answered
 Chosen Option : 2

Section : Reasoning Ability and Problem Solving

Q.1 Identify the figure that completes the pattern (rotation is NOT allowed).



Ans

- 1.
- 2.
- 3.
- 4.

Question ID : 264330154516
 Option 1 ID : 264330605528
 Option 2 ID : 264330605530
 Option 3 ID : 264330605527
 Option 4 ID : 264330605529
 Status : Answered
 Chosen Option : 3

Q.2 8 is related to 59 following a certain logic. Following the same logic, 9 is related to 76. To which of the following is 25 related to, following the same logic?

- Ans**
- 1. 620
 - 2. 635
 - 3. 630
 - 4. 625

Question ID : 264330151599
Option 1 ID : 264330594023
Option 2 ID : 264330594026
Option 3 ID : 264330594025
Option 4 ID : 264330594024
Status : Answered
Chosen Option : 1

Q.3 What will come in the place of '?' in the following equation, if '+' and '-' are interchanged and '×' and '÷' are interchanged?
 $108 \times 9 + 15 - 17 + 2 = ?$

- Ans**
- 1. 51
 - 2. 21
 - 3. 41
 - 4. 31

Question ID : 264330155665
Option 1 ID : 264330610066
Option 2 ID : 264330610065
Option 3 ID : 264330610063
Option 4 ID : 264330610064
Status : Answered
Chosen Option : 4

Q.4 In a certain code language, 'ENTRUST' is coded as 'FOURVTU' and 'CUSHION' is coded as 'DVTHJPO'. What is the code for 'CLEAVER' in the given code language?

- Ans**
- 1. DMFAWFS
 - 2. DNGBWGT
 - 3. ENGBWT
 - 4. EMFBWGT

Question ID : 264330155826
Option 1 ID : 264330610709
Option 2 ID : 264330610710
Option 3 ID : 264330610708
Option 4 ID : 264330610707
Status : Answered
Chosen Option : 1

Q.5 What should come in place of '?' in the given series?

2 21 97 401 1617 ?

- Ans
- 1. 6481
 - 2. 6507
 - 3. 6235
 - 4. 6493

Question ID : 264330151470
 Option 1 ID : 264330593508
 Option 2 ID : 264330593510
 Option 3 ID : 264330593507
 Option 4 ID : 264330593509

Status : Answered

Chosen Option : 4

Q.6 Read the given statements and conclusions carefully. You have to take the given statements to be true even if they seem to be at variance from commonly known facts. You have to decide which conclusion/s logically follow/s from the given statements.

Statements: All shoes are leather. Some leather are belts. Some belts are gold.

Conclusion I: Some shoes are belts.

Conclusion II: All belts are gold.

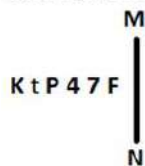
- Ans
- 1. Neither conclusion (I) nor (II) is follow.
 - 2. Only conclusion (I) is follow.
 - 3. Only conclusion (II) is follow.
 - 4. Both conclusions (I) and (II) are follow.

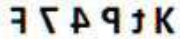
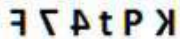
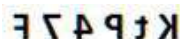

Question ID : 264330155935
 Option 1 ID : 264330611145
 Option 2 ID : 264330611143
 Option 3 ID : 264330611144
 Option 4 ID : 264330611146

Status : Answered

Chosen Option : 1

Q.7 Select the correct mirror image of the given figure when the mirror is placed at MN as shown below.



- Ans
- 1. 
 - 2. 
 - 3. 
 - 4. 

Question ID : 264330151526
 Option 1 ID : 264330593733
 Option 2 ID : 264330593734
 Option 3 ID : 264330593732
 Option 4 ID : 264330593731

Status : Answered

Chosen Option : 3

Q.8 Read the given statements and conclusions carefully. You have to take the given statements to be true even if they seem to be at variance from commonly known facts. You have to decide which conclusion/s logically follow/s from the given statements.

Statements: Some leaves are old. All old are clothes. Some clothes are papers.

Conclusion I: All leaves are old.

Conclusion II: Some old are clothes.

- Ans**
- 1. Only conclusion (I) is follow.
 - 2. Both conclusions (I) and (II) are follow.
 - 3. Only conclusion (II) is follow.
 - 4. Neither conclusion (I) nor (II) is follow.

Question ID : 264330155906
Option 1 ID : 264330611027
Option 2 ID : 264330611030
Option 3 ID : 264330611028
Option 4 ID : 264330611029
Status : Answered
Chosen Option : 3

Q.9 What should come in place of ? in the given series based on the English alphabetical order?

GAR, KEV, OIZ, SMD, ?

- Ans**
- 1. WPH
 - 2. WQH
 - 3. VRF
 - 4. VPG

Question ID : 264330155766
Option 1 ID : 264330610467
Option 2 ID : 264330610470
Option 3 ID : 264330610468
Option 4 ID : 264330610469
Status : Answered
Chosen Option : 2

Q.10 What should come in place of ? in the given series?

710 720 730 740 750 ?

- Ans**
- 1. 770
 - 2. 780
 - 3. 790
 - 4. 760

Question ID : 264330151548
Option 1 ID : 264330593821
Option 2 ID : 264330593822
Option 3 ID : 264330593819
Option 4 ID : 264330593820
Status : Answered
Chosen Option : 4

Q.11 What should come in place of the question mark (?) in the given series based on the English alphabetical order?

AOS, DMV, GKY, JIB, ?

- Ans
- 1. MGE
 - 2. NGF
 - 3. NHF
 - 4. OHE

Question ID : 264330156299
 Option 1 ID : 264330612596
 Option 2 ID : 264330612595
 Option 3 ID : 264330612597
 Option 4 ID : 264330612598
 Status : Answered
 Chosen Option : 1

Q.12 What should come in place of '?' in the given series?

18 32 60 116 228 ?

- Ans
- 1. 452
 - 2. 474
 - 3. 480
 - 4. 468

Question ID : 264330151496
 Option 1 ID : 264330593611
 Option 2 ID : 264330593613
 Option 3 ID : 264330593614
 Option 4 ID : 264330593612
 Status : Answered
 Chosen Option : 1

Q.13 If 'T' stands for '+', 'J' stands for '×', 'K' stands for '÷' and 'L' stands for '-', what will come in place of the question mark (?) in the following equation?
 (48 K 8) J 4 L 15 I (12 J 3) I 20 = ?

- Ans
- 1. 55
 - 2. 65
 - 3. 60
 - 4. 70

Question ID : 264330151789
 Option 1 ID : 264330594783
 Option 2 ID : 264330594785
 Option 3 ID : 264330594784
 Option 4 ID : 264330594786
 Status : Answered
 Chosen Option : 2

Q.14 In a certain code language, 'let it be' is coded as 'sd am ht' and 'be the change' is coded as 'vn sd ek'. How is 'be' coded in the given language?

- Ans**
- 1. sd
 - 2. ht
 - 3. ek
 - 4. vn

Question ID : 264330151709
Option 1 ID : 264330594464
Option 2 ID : 264330594463
Option 3 ID : 264330594465
Option 4 ID : 264330594466
Status : Answered
Chosen Option : 1

Q.15 TDWP is related to RBUN in a certain way based on the English alphabetical order. In the same way, FJMH is related to DHKF. To which of the following is SENP related to, following the same logic?

- Ans**
- 1. PDKN
 - 2. QCLN
 - 3. RCMN
 - 4. QDKO

Question ID : 264330151662
Option 1 ID : 264330594276
Option 2 ID : 264330594278
Option 3 ID : 264330594277
Option 4 ID : 264330594275
Status : Answered
Chosen Option : 2

Q.16 Select the combination of letters that when sequentially placed in the blanks of the given series will make it logically complete.

DZL_G_JD_ZHDM_FDPZ_D

- Ans**
- 1. DNMVH
 - 2. KJBVD
 - 3. NVKDM
 - 4. DZJZD

Question ID : 264330156318
Option 1 ID : 264330612672
Option 2 ID : 264330612674
Option 3 ID : 264330612671
Option 4 ID : 264330612673
Status : Answered
Chosen Option : 4

Q.17 D, E, F, G, H, I, J and K are sitting around a square table facing the center of the table. Some of them are sitting at the corners while some are sitting at the exact center of the sides. K sits third to the right of I. K sits at one of the corners. E sits second to the left of G. G sits at any of the corners. E is an immediate neighbour of I and D. F sits third to the right of J. H is the immediate neighbour of F and K.

How many people sit between I and F, when counted from the left of I?

- Ans**
- 1. Two
 - 2. Four
 - 3. One
 - 4. Three

Question ID : **264330155533**
 Option 1 ID : **264330609536**
 Option 2 ID : **264330609538**
 Option 3 ID : **264330609535**
 Option 4 ID : **264330609537**
 Status : **Answered**
 Chosen Option : **1**

Q.18 Which figure should replace the question mark (?) if the following figure series were to be continued?

D			6			A			T			
A	P	T	D	3	P	L	D	3	A	6	D	?
6			3			A			T			

Ans

1.

3		
6	D	S
T		L

2.

3		
6	D	A
T		L

3.

L		
S	A	6
3		T

4.

L		
D	A	6
3		T

Question ID : **264330154742**
 Option 1 ID : **264330606432**
 Option 2 ID : **264330606433**
 Option 3 ID : **264330606434**
 Option 4 ID : **264330606431**
 Status : **Answered**
 Chosen Option : **3**

Q.19 If 11 December 2009 is a Friday, then what will be the day of the week on 18 December 2014?

- Ans**
- 1. Tuesday
 - 2. Monday
 - 3. Thursday
 - 4. Wednesday

Question ID : 264330154351
Option 1 ID : 264330604868
Option 2 ID : 264330604867
Option 3 ID : 264330604869
Option 4 ID : 264330604870
Status : Answered
Chosen Option : 3

Q.20 8 is related to 88 following a certain logic. Following the same logic, 11 is related to 121. To which of the following is 15 related to, following the same logic?

- Ans**
- 1. 163
 - 2. 165
 - 3. 164
 - 4. 162

Question ID : 264330151589
Option 1 ID : 264330593984
Option 2 ID : 264330593986
Option 3 ID : 264330593985
Option 4 ID : 264330593983
Status : Answered
Chosen Option : 2

Section : General Awareness

Q.1 According to Census of India 2011, what was the total population of India (approx)?

- Ans**
- 1. 131 Crore
 - 2. 121 Crore
 - 3. 111 Crore
 - 4. 101 Crore

Question ID : 264330161549
Option 1 ID : 264330633526
Option 2 ID : 264330633524
Option 3 ID : 264330633523
Option 4 ID : 264330633525
Status : Answered
Chosen Option : 2

Q.2

Chhau is a major dance tradition of India. In which of the following Indian states is the dance form NOT prevalent?

- Ans
- 1. Odisha
 - 2. West Bengal
 - 3. Jharkhand
 - 4. Madhya Pradesh

Question ID : 264330161343

Option 1 ID : 264330632699

Option 2 ID : 264330632702

Option 3 ID : 264330632700

Option 4 ID : 264330632701

Status : Answered

Chosen Option : 4

Q.3 In November 2022, which state became the first North-East state to approve Mental Health and Social Care Policy?

- Ans
- 1. Assam
 - 2. Meghalaya
 - 3. Tripura
 - 4. Arunachal Pradesh

Question ID : 264330158332

Option 1 ID : 264330620689

Option 2 ID : 264330620688

Option 3 ID : 264330620687

Option 4 ID : 264330620690

Status : Answered

Chosen Option : 3

Q.4 In which state is Vishakhapatnam Port located?

- Ans
- 1. Maharashtra
 - 2. Andhra Pradesh
 - 3. Odisha
 - 4. Gujarat

Question ID : 264330160143

Option 1 ID : 264330627911

Option 2 ID : 264330627912

Option 3 ID : 264330627914

Option 4 ID : 264330627913

Status : Answered

Chosen Option : 2

Q.5 Who among the following is the Indian classical dancer who masters both Bharatanatyam and Odissi dancing style?

- Ans
- 1. Shovana Narayan
 - 2. Guru Bipin Singh
 - 3. Padma Subrahmanayam
 - 4. Sonal Mansingh

Question ID : 264330159064
Option 1 ID : 264330623616
Option 2 ID : 264330623615
Option 3 ID : 264330623618
Option 4 ID : 264330623617
Status : Answered
Chosen Option : 2

Q.6 Which bacteria was discovered by Barry Marshall and Robin Warren that colonises the human stomach and causes chronic superficial gastritis ulcers?

- Ans
- 1. Campylobacter jejuni
 - 2. Helicobacter pylori
 - 3. Neisseria gonorrhoeae
 - 4. Entamoeba histolytica

Question ID : 264330161076
Option 1 ID : 264330631637
Option 2 ID : 264330631636
Option 3 ID : 264330631635
Option 4 ID : 264330631638
Status : Answered
Chosen Option : 1

Q.7 Which of the following states witnesses the first onset of the monsoon?

- Ans
- 1. Punjab
 - 2. Haryana
 - 3. Kerala
 - 4. Uttar Pradesh

Question ID : 264330157826
Option 1 ID : 264330618663
Option 2 ID : 264330618666
Option 3 ID : 264330618664
Option 4 ID : 264330618665
Status : Answered
Chosen Option : 3

Q.8 What is a prominent trend in the microfinance sector in India?

- Ans 1. Integration of mobile banking services
 2. Excessive bureaucracy in loan approvals
 3. Decreased reliance on digital technology
 4. Limited focus on women entrepreneurs

Question ID : 264330157293
Option 1 ID : 264330616537
Option 2 ID : 264330616538
Option 3 ID : 264330616535
Option 4 ID : 264330616536
Status : Answered
Chosen Option : 2

Q.9 Ustad Bismillah Khan was associated with which of the following musical instruments?

- Ans 1. Shehnai
 2. Sarod
 3. Sitar
 4. Sarangi

Question ID : 264330155508
Option 1 ID : 264330609437
Option 2 ID : 264330609435
Option 3 ID : 264330609438
Option 4 ID : 264330609436
Status : Answered
Chosen Option : 1

Q.10 The famous coal mining region 'Korba' is located in which state of India?

- Ans 1. Kerala
 2. Tamil Nadu
 3. Chhattisgarh
 4. Himachal Pradesh

Question ID : 264330161525
Option 1 ID : 264330633427
Option 2 ID : 264330633429
Option 3 ID : 264330633428
Option 4 ID : 264330633430
Status : Answered
Chosen Option : 3

Q.11 What do you mean by balanced budget?

- Ans 1. Expenditure not equal to revenue
 2. Expenditure equal to revenue
 3. Expenditure more the revenue
 4. Expenditure is less than revenue

Question ID : 264330161453
Option 1 ID : 264330633141
Option 2 ID : 264330633139
Option 3 ID : 264330633142
Option 4 ID : 264330633140
Status : Answered
Chosen Option : 2

Q.12 Rajgir Mahotsav is a beautiful representation of history, religion, art and culture. It is a three-day celebration in _____.

- Ans
- 1. Madhya Pradesh
 - 2. Uttarakhand
 - 3. Uttar Pradesh
 - 4. Bihar

Question ID : 264330160834
Option 1 ID : 264330630667
Option 2 ID : 264330630670
Option 3 ID : 264330630669
Option 4 ID : 264330630668
Status : Answered
Chosen Option : 4

Q.13 The famous novel 'The God Of Small Things' is written by _____.

- Ans
- 1. Shashi Tharoor
 - 2. Ruskin Bond
 - 3. Vikram Seth
 - 4. Arundhati Roy

Question ID : 264330162284
Option 1 ID : 264330636466
Option 2 ID : 264330636464
Option 3 ID : 264330636465
Option 4 ID : 264330636463
Status : Answered
Chosen Option : 4

Q.14 The Men's Junior Hockey Asia Cup 2023, which was won by India, was held at _____.

- Ans
- 1. Saudi Arabia
 - 2. Oman
 - 3. Dubai
 - 4. Qatar

Question ID : 264330161147
Option 1 ID : 264330631922
Option 2 ID : 264330631919
Option 3 ID : 264330631920
Option 4 ID : 264330631921
Status : Answered
Chosen Option : 2

Q.15 In the context of the Revolt of 1857, Mangal Pandey belonged to which Bengal native Infantry?

- Ans
- 1. 34
 - 2. 52
 - 3. 70
 - 4. 64

Question ID : 264330162328
Option 1 ID : 264330636639
Option 2 ID : 264330636640
Option 3 ID : 264330636642
Option 4 ID : 264330636641
Status : Answered
Chosen Option : 1

Q.16 Which of the following countries did India beat in the final to win the 2021 SAFF Championship?

- Ans 1. Nepal
 2. Lebanon
 3. Maldives
 4. Kuwait

Question ID : 264330161137
Option 1 ID : 264330631882
Option 2 ID : 264330631881
Option 3 ID : 264330631880
Option 4 ID : 264330631879
Status : Answered
Chosen Option : 1

Q.17 Vinesh Phogat became the first Indian woman wrestler to win how many medals at World Championships?

- Ans 1. 6
 2. 5
 3. 2
 4. 3

Question ID : 264330158358
Option 1 ID : 264330620794
Option 2 ID : 264330620793
Option 3 ID : 264330620791
Option 4 ID : 264330620792
Status : Not Answered
Chosen Option : --

Q.18 What is the purpose of the Cultural and Educational Rights?

- Ans 1. To promote a particular religion
 2. To protect the language, culture, and religion of the minority communities
 3. To protect the majority community
 4. To prevent exploitation

Question ID : 264330162250
Option 1 ID : 264330636328
Option 2 ID : 264330636329
Option 3 ID : 264330636327
Option 4 ID : 264330636330
Status : Answered
Chosen Option : 2

Q.19 In optics, which term refers to the opening of the diaphragm of a lens that spatially limits the propagation of light?

- Ans 1. Collimator
 2. Aperture
 3. Apostilb
 4. Meniscus

Question ID : 264330161400
Option 1 ID : 264330632928
Option 2 ID : 264330632930
Option 3 ID : 264330632929
Option 4 ID : 264330632927
Status : Not Answered
Chosen Option : --

Q.20 Lata Mangeshkar was awarded by the India's highest civilian honour 'Bharat Ratna' in the year _____.

- Ans**
- 1. 2015
 - 2. 2019
 - 3. 2001
 - 4. 2009

Question ID : 264330155507
Option 1 ID : 264330609433
Option 2 ID : 264330609434
Option 3 ID : 264330609431
Option 4 ID : 264330609432
Status : Answered
Chosen Option : 3

Q.21 Nirmala Panikar received the Sangeet Natak Akademi Award-2019 (given in February 2023) for her contribution to _____ dance form.

- Ans**
- 1. Mohiniyattam
 - 2. Kuchipudi
 - 3. Kathak
 - 4. Bharatanatyam

Question ID : 264330155523
Option 1 ID : 264330609495
Option 2 ID : 264330609496
Option 3 ID : 264330609498
Option 4 ID : 264330609497
Status : Answered
Chosen Option : 4

Q.22 In which city is the Rajghat memorial situated?

- Ans**
- 1. Ahmedabad
 - 2. Surat
 - 3. Delhi
 - 4. Agra

Question ID : 264330160772
Option 1 ID : 264330630422
Option 2 ID : 264330630419
Option 3 ID : 264330630421
Option 4 ID : 264330630420
Status : Answered
Chosen Option : 3

Q.23 In the 1939 Tripuri Congress Presidential Election, Pattabhi Sitaramayya was defeated by:

- Ans
- 1. Mahatma Gandhi
 - 2. Rajendra Prasad
 - 3. Subhas Chandra Bose
 - 4. Jawaharlal Nehru

Question ID : 264330162323
Option 1 ID : 264330636619
Option 2 ID : 264330636622
Option 3 ID : 264330636621
Option 4 ID : 264330636620
Status : Answered
Chosen Option : 3

Q.24 Whose autobiography is titled 'Waiting for a Visa'?

- Ans
- 1. Dr. Ram Manohar Lohia
 - 2. Dr. Rajendra Prasad
 - 3. Dr. Bhimrao Ambedkar
 - 4. Dr. Kamal Ranadive

Question ID : 264330155449
Option 1 ID : 264330609201
Option 2 ID : 264330609199
Option 3 ID : 264330609202
Option 4 ID : 264330609200
Status : Answered
Chosen Option : 1

Q.25 In which year was the Jammu and Kashmir Reorganization Act passed?

- Ans
- 1. 2019
 - 2. 2009
 - 3. 2015
 - 4. 2017

Question ID : 264330159928
Option 1 ID : 264330627062
Option 2 ID : 264330627061
Option 3 ID : 264330627059
Option 4 ID : 264330627060
Status : Answered
Chosen Option : 1

Q.1 Select the most appropriate option to fill in the blank.
The toddler decided to make a mess because he wanted to _____ the attention of its parents.

- Ans** ✓ 1. seek
✗ 2. elicit
✗ 3. please
✗ 4. extract

Question ID : 264330152637
Option 1 ID : 264330598152
Option 2 ID : 264330598153
Option 3 ID : 264330598154
Option 4 ID : 264330598151
Status : Answered
Chosen Option : 1

Q.2 Select the most appropriate synonym of the given word.
Glimpse

- Ans** ✗ 1. Examine
✓ 2. Glance
✗ 3. Stare
✗ 4. Observe

Question ID : 264330152596
Option 1 ID : 264330597989
Option 2 ID : 264330597987
Option 3 ID : 264330597988
Option 4 ID : 264330597990
Status : Answered
Chosen Option : 2

Q.3 Identify the sentence that contains correct spellings in the given context.

- Ans** ✗ 1. She acid the test despite being sleep-deprived from studying for nearly 24 hours straight.
✗ 2. She acad the test desspite being sleep-deprived from studying for nearly 24 hours straight.
✗ 3. She aced the test daspite being sleep-deprived from studying for nearly 24 hours strait.
✓ 4. She aced the test despite being sleep-deprived from studying for nearly 24 hours straight.

Question ID : 264330153650
Option 1 ID : 264330602067
Option 2 ID : 264330602068
Option 3 ID : 264330602070
Option 4 ID : 264330602069
Status : Answered
Chosen Option : 4

Q.4 Select the most appropriate option to fill in the blank.
The teacher assured: "You have completed your homework, _____?"

- Ans
- 1. had you
 - 2. hadn't you
 - 3. haven't you
 - 4. have you

Question ID : 264330152641
Option 1 ID : 264330598170
Option 2 ID : 264330598169
Option 3 ID : 264330598167
Option 4 ID : 264330598168
Status : Answered
Chosen Option : 3

Q.5 Select the most appropriate ANTONYM of the word given in brackets to fill in the blank.
A _____ (distinct) sense of restlessness was bothering me when I left the cemetery.

- Ans
- 1. terrible
 - 2. critical
 - 3. prior
 - 4. vague

Question ID : 264330152697
Option 1 ID : 264330598393
Option 2 ID : 264330598391
Option 3 ID : 264330598394
Option 4 ID : 264330598392
Status : Answered
Chosen Option : 4

Q.6 The following sentence has been divided into parts. One of them may contain an error. Select the part that contains the error from the given options. If you don't find any error, mark 'No error' as your answer.
With cloud streaming, people can play games from a / internet-connected device, avoiding the need for pricey / dedicated hardware such as a game console.

- Ans
- 1. No error
 - 2. dedicated hardware such as a game console
 - 3. With cloud streaming, people can play games from a
 - 4. internet-connected device, avoiding the need for pricey

Question ID : 264330153196
Option 1 ID : 264330600346
Option 2 ID : 264330600345
Option 3 ID : 264330600343
Option 4 ID : 264330600344
Status : Answered
Chosen Option : 3

Q.7 Select the most appropriate meaning of the given idiom.
Keep someone at arm's length

- Ans
- 1. To ruin someone's plans
 - 2. To avoid becoming too close or friendly with someone
 - 3. Angry about something
 - 4. Having energy again after being tired

Question ID : 264330155283
Option 1 ID : 264330608577
Option 2 ID : 264330608578
Option 3 ID : 264330608575
Option 4 ID : 264330608576
Status : Answered
Chosen Option : 2

Q.8 The following sentence has been divided into four parts. Identify the part that contains an error.

(A) This fridge / (B) comes including / (C) a 5-year / (D) warranty.

- Ans
- 1. B
 - 2. C
 - 3. D
 - 4. A

Question ID : 264330152615
Option 1 ID : 264330598066
Option 2 ID : 264330598065
Option 3 ID : 264330598063
Option 4 ID : 264330598064
Status : Answered
Chosen Option : 1

Q.9 Select the option that can be used as a one-word substitute for the given group of words.

One who looks at the dark side of life

- Ans
- 1. Physicist
 - 2. Optimist
 - 3. Pessimist
 - 4. Idealist

Question ID : 264330153361
Option 1 ID : 264330600996
Option 2 ID : 264330600997
Option 3 ID : 264330600998
Option 4 ID : 264330600995
Status : Answered
Chosen Option : 3

Q.10 Select the most appropriate option that can substitute the underlined segment in the given sentence.

Many a things are used for the show.

- Ans
- 1. a things is
 - 2. a things were
 - 3. a thing is
 - 4. a thing were

Question ID : 264330153350

Option 1 ID : 264330600954

Option 2 ID : 264330600951

Option 3 ID : 264330600953

Option 4 ID : 264330600952

Status : Answered

Chosen Option : 3

Q.11 Select the most appropriate option that can rectify the underlined segment in the given sentence. If there is no need to rectify it, select 'no rectification needed'.

This film is a non-stop riot that many cite as one of the funny films of all time.

- Ans
- 1. no rectification needed
 - 2. funniest
 - 3. more funny
 - 4. funnier

Question ID : 264330153467

Option 1 ID : 264330601386

Option 2 ID : 264330601383

Option 3 ID : 264330601384

Option 4 ID : 264330601385

Status : Answered

Chosen Option : 2

Q.12 Select the INCORRECTLY spelt word.

- Ans
- 1. Essence
 - 2. Aggregate
 - 3. Transmissible
 - 4. Assembly

Question ID : 264330152781

Option 1 ID : 264330598718

Option 2 ID : 264330598717

Option 3 ID : 264330598715

Option 4 ID : 264330598716

Status : Answered

Chosen Option : 3

Q.13 Select the option that can be used as a one-word substitute for the given group of words.

A person who regards the whole world as his country

- Ans
- 1. Cosmopolitan
 - 2. Pacifist
 - 3. Contemporary
 - 4. Celibate

Question ID : 264330153537

Option 1 ID : 264330601653

Option 2 ID : 264330601652

Option 3 ID : 264330601651

Option 4 ID : 264330601654

Status : Answered

Chosen Option : 1

Q.14 The following sentence has been split into four segments. Identify the segment that contains an error.

The team played / really well, but / they lose the game / in the final minutes.

- Ans
- 1. really well, but
 - 2. in the final minutes
 - 3. they lose the game
 - 4. The team played

Question ID : 264330155320

Option 1 ID : 264330608720

Option 2 ID : 264330608722

Option 3 ID : 264330608721

Option 4 ID : 264330608719

Status : Answered

Chosen Option : 3

Q.15 The following sentence has been split into four segments. Identify the segment that contains an error.

The school shall reopened / after summer / vacations of / one month.

- Ans
- 1. one month
 - 2. vacations of
 - 3. The school shall reopened
 - 4. after summer

Question ID : 264330151287

Option 1 ID : 264330592786

Option 2 ID : 264330592785

Option 3 ID : 264330592783

Option 4 ID : 264330592784

Status : Answered

Chosen Option : 3

Q.16 Select the most appropriate ANTONYM of the underlined word.
They waited with anxiety for the final results.

- Ans
- 1. Shrewdness
 - 2. Wilderness
 - 3. Feebleness
 - 4. Calmness

Question ID : 264330151817
Option 1 ID : 264330594896
Option 2 ID : 264330594898
Option 3 ID : 264330594897
Option 4 ID : 264330594895
Status : Answered
Chosen Option : 4

Q.17 Select the most appropriate idiom to fill in the blank.
Jack took on three jobs at once but soon realised he had _____.

- Ans
- 1. cut corners
 - 2. taken it with a grain of salt
 - 3. bitten off more than he could chew
 - 4. played by the ear

Question ID : 264330151883
Option 1 ID : 264330595152
Option 2 ID : 264330595154
Option 3 ID : 264330595151
Option 4 ID : 264330595153
Status : Answered
Chosen Option : 3

Q.18 Select the most appropriate idiom to fill in the blank.
The CEO has _____ than worrying about individual customer complaints.

- Ans
- 1. bigger fish to fry
 - 2. taken a rain check
 - 3. thrown caution to the wind
 - 4. been walking on thin ice

Question ID : 264330151888
Option 1 ID : 264330595172
Option 2 ID : 264330595173
Option 3 ID : 264330595174
Option 4 ID : 264330595171
Status : Answered
Chosen Option : 1

Q.19 Select the INCORRECTLY spelt word.

- Ans
- 1. Perceive
 - 2. Recognition
 - 3. Vaccum
 - 4. Shield

Question ID : 264330152827
Option 1 ID : 264330598902
Option 2 ID : 264330598899
Option 3 ID : 264330598901
Option 4 ID : 264330598900
Status : Answered
Chosen Option : 3

Q.20 Select the most appropriate idiom to fill in the blank.

I know it was wrong to distract his friends, but _____.

- Ans**
- 1. all's fair in love and war
 - 2. all's unfair in the world
 - 3. all's unfair in love and war
 - 4. all's fair in the world

Question ID : 264330153077

Option 1 ID : 264330599873

Option 2 ID : 264330599874

Option 3 ID : 264330599871

Option 4 ID : 264330599872

Status : Answered

Chosen Option : 1

Comprehension:

In the following passage, some words have been deleted. Read the passage carefully and select the most appropriate option to fill in each blank.

(1)___ the breakfast table the next morning, there was no sign of my wife. I (2)___ she was sleeping late, but Gladolia, upon being questioned, only (3)___ her head, (4)___ something, and turned the whites of her eyes up to the ceiling. I was glad when the meal was (5)___ and hurried to the library for another try at that story.

SubQuestion No : 21

Q.21 Select the most appropriate option to fill in blank no. 1.

- Ans**
- 1. On
 - 2. Above
 - 3. Upon
 - 4. At

Question ID : 264330151849

Option 1 ID : 264330595015

Option 2 ID : 264330595018

Option 3 ID : 264330595016

Option 4 ID : 264330595017

Status : Answered

Chosen Option : 4

Comprehension:

In the following passage, some words have been deleted. Read the passage carefully and select the most appropriate option to fill in each blank.

(1)___ the breakfast table the next morning, there was no sign of my wife. I (2)___ she was sleeping late, but Gladolia, upon being questioned, only (3)___ her head, (4)___ something, and turned the whites of her eyes up to the ceiling. I was glad when the meal was (5)___ and hurried to the library for another try at that story.

SubQuestion No : 22

Q.22 Select the most appropriate option to fill in blank no. 2.

- Ans**
- 1. accepted
 - 2. decided
 - 3. examined
 - 4. concluded

Question ID : 264330151850

Option 1 ID : 264330595020

Option 2 ID : 264330595019

Option 3 ID : 264330595021

Option 4 ID : 264330595022

Status : Answered

Chosen Option : 4

Comprehension:

In the following passage, some words have been deleted. Read the passage carefully and select the most appropriate option to fill in each blank.

(1)___ the breakfast table the next morning, there was no sign of my wife. I (2)___ she was sleeping late, but Gladolia, upon being questioned, only (3)___ her head, (4)___ something, and turned the whites of her eyes up to the ceiling. I was glad when the meal was (5)___ and hurried to the library for another try at that story.

SubQuestion No : 23

Q.23 Select the most appropriate option to fill in blank no. 3.

- Ans
- 1. adjusted
 - 2. rotated
 - 3. shook
 - 4. stirred

Question ID : 264330151851

Option 1 ID : 264330595025

Option 2 ID : 264330595026

Option 3 ID : 264330595024

Option 4 ID : 264330595023

Status : Answered

Chosen Option : 3

Comprehension:

In the following passage, some words have been deleted. Read the passage carefully and select the most appropriate option to fill in each blank.

(1)___ the breakfast table the next morning, there was no sign of my wife. I (2)___ she was sleeping late, but Gladolia, upon being questioned, only (3)___ her head, (4)___ something, and turned the whites of her eyes up to the ceiling. I was glad when the meal was (5)___ and hurried to the library for another try at that story.

SubQuestion No : 24

Q.24 Select the most appropriate option to fill in blank no. 4.

- Ans
- 1. mugged
 - 2. muffed
 - 3. mutilated
 - 4. muttered

Question ID : 264330151852

Option 1 ID : 264330595028

Option 2 ID : 264330595029

Option 3 ID : 264330595030

Option 4 ID : 264330595027

Status : Answered

Chosen Option : 4

Comprehension:

In the following passage, some words have been deleted. Read the passage carefully and select the most appropriate option to fill in each blank.

(1)___ the breakfast table the next morning, there was no sign of my wife. I (2)___ she was sleeping late, but Gladolia, upon being questioned, only (3)___ her head, (4)___ something, and turned the whites of her eyes up to the ceiling. I was glad when the meal was (5)___ and hurried to the library for another try at that story.

SubQuestion No : 25

Q.25 Select the most appropriate option to fill in blank no. 5.

Ans 1. removed

2. over

3. through

4. undone

Question ID : **264330151853**

Option 1 ID : **264330595033**

Option 2 ID : **264330595031**

Option 3 ID : **264330595032**

Option 4 ID : **264330595034**

Status : **Answered**

Chosen Option : **2**