

SSC MTS 2023 Tier 1 Sept 8 Shift 3 Question Paper with Answers

Roll Number	
Candidate Name	
Exam Date	08/09/2023
Exam Time	4:00 PM - 6:00 PM
Subject	MTS Non Tech Havaladar CBIC and CBN Examination 2023

Section : Numerical and Mathematical Ability

Q.1 Tea leaves worth ₹108 per kg and ₹120 per kg are mixed with a third variety in the ratio 2 : 3 : 5. If the mixture is worth ₹125 per kg, the price (in ₹, rounded off to the nearest integer) of the third variety of tea leaves per kg will be:

- Ans**
- 1. 130
 - 2. 128
 - 3. 135
 - 4. 133

Question ID : 264330156469
Option 1 ID : 264330613265
Option 2 ID : 264330613264
Option 3 ID : 264330613263
Option 4 ID : 264330613266
Status : Answered
Chosen Option : 3

Q.2 Rima covers a certain distance by car driving at a speed of 59 km/h and she returns to the starting point riding on a bike with a speed of 43 km/h. Find the average speed (in km/h) for the whole journey. (Rounded off to 2 decimal places)

- Ans**
- 1. 52.25
 - 2. 49.75
 - 3. 42.00
 - 4. 45.37

Question ID : 264330155730
Option 1 ID : 264330610323
Option 2 ID : 264330610324
Option 3 ID : 264330610326
Option 4 ID : 264330610325
Status : Answered
Chosen Option : 2

Q.3 If 7 men working 8 hours a day for 5 days can complete a work, then how many men are required to complete the same work if they work 10 hours a day for 7 days?

- Ans**
- 1. 6
 - 2. 4
 - 3. 3
 - 4. 5

Question ID : **264330156535**
Option 1 ID : **264330613529**
Option 2 ID : **264330613528**
Option 3 ID : **264330613530**
Option 4 ID : **264330613527**
Status : **Answered**
Chosen Option : **2**

Q.4 The LCM of $\frac{1}{6}, \frac{5}{27}, \frac{4}{15}, \frac{8}{3}$ is:

- Ans**
- 1. $\frac{40}{3}$
 - 2. $\frac{3}{28}$
 - 3. $\frac{5}{28}$
 - 4. $\frac{40}{5}$

Question ID : **264330156205**
Option 1 ID : **264330612221**
Option 2 ID : **264330612220**
Option 3 ID : **264330612219**
Option 4 ID : **264330612222**
Status : **Answered**
Chosen Option : **1**

Q.5 The mean proportional between 0.8 and 7.2 is:

- Ans**
- 1. 2.4
 - 2. 3.4
 - 3. 4.2
 - 4. 1.2

Question ID : **264330153769**
Option 1 ID : **264330602541**
Option 2 ID : **264330602540**
Option 3 ID : **264330602539**
Option 4 ID : **264330602542**
Status : **Answered**
Chosen Option : **1**

Q.6 The value of $\frac{3 \div 3 \times 2 - 6 \div 3 + 7}{5 \div 5 \times 6 \div 6 + 3 + 3}$ is equal to:

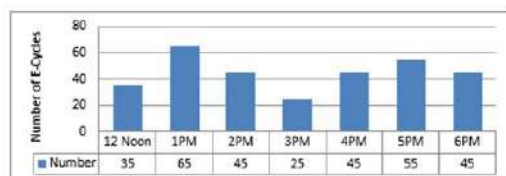
- Ans
- ✓ 1. 1
 - ✗ 2. $\frac{3}{2}$
 - ✗ 3. $1\frac{3}{2}$
 - ✗ 4. 2

Question ID : 264330156502
 Option 1 ID : 264330613397
 Option 2 ID : 264330613395
 Option 3 ID : 264330613396
 Option 4 ID : 264330613398

Status : Answered

Chosen Option : 1

Q.7 The bar diagram represents the number of E- Cycles parking at a metro station from 12:00 P.M. to 6:00 P.M.
 How many times the number of E- Cycles parked is more than average?



- Ans
- ✗ 1. 4
 - ✗ 2. 5
 - ✓ 3. 2
 - ✗ 4. 3

Question ID : 264330154064
 Option 1 ID : 264330603721
 Option 2 ID : 264330603722
 Option 3 ID : 264330603719
 Option 4 ID : 264330603720

Status : Answered

Chosen Option : 3

Q.8 A can do a piece of work in 10 days and B can do it in 15 days. They work together for 2 days and then A leaves.
 How long will B take to finish the remaining work?

- Ans
- ✓ 1. 10 days
 - ✗ 2. 22 days
 - ✗ 3. 12 days
 - ✗ 4. 5 days

Question ID : 264330153885
 Option 1 ID : 264330603004
 Option 2 ID : 264330603003
 Option 3 ID : 264330603006
 Option 4 ID : 264330603005

Status : Answered

Chosen Option : 1

Q.9 A cylinder has a total surface area of 64π square units, where the height of the cylinder is equal to its radius. If the height is doubled and the radius is halved, then the total surface area of the new cylinder is _____ square units.

- Ans**
- 1. 54π
 - 2. 40π
 - 3. 64π
 - 4. 48π

Question ID : 264330153825
Option 1 ID : 264330602763
Option 2 ID : 264330602764
Option 3 ID : 264330602766
Option 4 ID : 264330602765
Status : Answered
Chosen Option : 2

Q.10 A boy covers a certain distance between his house and school on a cycle. Having an average speed of 10 km/h, he is late by 10 min. However, with an average speed of 15 km/h, he reaches the school in 5 min. earlier. Find the distance (in km) between his house and school.

- Ans**
- 1. 8.5
 - 2. 8
 - 3. 7
 - 4. 7.5

Question ID : 264330156272
Option 1 ID : 264330612490
Option 2 ID : 264330612489
Option 3 ID : 264330612487
Option 4 ID : 264330612488
Status : Answered
Chosen Option : 4

Q.11 A motorboat can row 12 km/h in still water. If the speed of the current is 2 km/h, it takes 1.5 hours more in covering some distance upstream than it does downstream for covering the same distance. The one-side distance is:

- Ans**
- 1. 52.5 km
 - 2. 50 km
 - 3. 51.5 km
 - 4. 53 km

Question ID : 264330156286
Option 1 ID : 264330612545
Option 2 ID : 264330612543
Option 3 ID : 264330612544
Option 4 ID : 264330612546
Status : Answered
Chosen Option : 1

Q.12 A and B entered a partnership for 5 years. At the start of the business, they invested ₹36,000 and ₹58,000, respectively. At the end of 5 years, their total profit was ₹94,000. What will be the share of B (in ₹) out of this profit?

- Ans**
- 1. 52,000
 - 2. 46,000
 - 3. 58,000
 - 4. 60,000

Question ID : 264330155742
 Option 1 ID : 264330610372
 Option 2 ID : 264330610371
 Option 3 ID : 264330610373
 Option 4 ID : 264330610374
 Status : Answered
 Chosen Option : 3

Q.13 If the ratio of the principal and the simple interest for 5 years is 10 : 7, then the rate of interest per annum is:

- Ans**
- 1. 18%
 - 2. 16%
 - 3. 12%
 - 4. 14%

Question ID : 264330156523
 Option 1 ID : 264330613481
 Option 2 ID : 264330613482
 Option 3 ID : 264330613479
 Option 4 ID : 264330613480
 Status : Answered
 Chosen Option : 4

Q.14 The table below shows the earning of different schools (in ₹ crores) in different years. Study the table carefully and answer the question that follows.

School/years	2018	2019	2020	2021	2022
P	50	45	49	56	57
Q	46	48	50	55	62
R	70	65	63	68	63
S	38	47	56	60	69
T	48	37	52	69	77

Find the ratio between the total earnings of schools P and R taken together in year 2020 to the total earnings of schools Q, S and T taken together in the year 2022?

- Ans**
- 1. 7 : 13
 - 2. 7 : 19
 - 3. 12 : 7
 - 4. 12 : 13

Question ID : 264330156573
 Option 1 ID : 264330613681
 Option 2 ID : 264330613682
 Option 3 ID : 264330613679
 Option 4 ID : 264330613680
 Status : Answered
 Chosen Option : 1

Q.15 A student's marks were incorrectly entered as 44 instead of 86. Due to this, the average of the class got decreased by $\frac{3}{2}$. What is the number of students in the class?

- Ans
- 1. 24
 - 2. 28
 - 3. 36
 - 4. 30

Question ID : 264330153757
Option 1 ID : 264330602491
Option 2 ID : 264330602494
Option 3 ID : 264330602492
Option 4 ID : 264330602493
Status : Answered
Chosen Option : 2

Q.16 The percentage profit earned by selling an article for ₹955 is equal to the percentage loss incurred by selling the same article for ₹845. At what price should the article be sold to make a 6% profit?

- Ans
- 1. ₹955
 - 2. ₹954
 - 3. ₹925
 - 4. ₹1,014

Question ID : 264330159021
Option 1 ID : 264330623443
Option 2 ID : 264330623446
Option 3 ID : 264330623445
Option 4 ID : 264330623444
Status : Answered
Chosen Option : 2

Q.17 Find the area of a triangle whose base is 7 cm and corresponding height is 82 cm.

- Ans
- 1. 191 cm^2
 - 2. 574 cm^2
 - 3. 143 cm^2
 - 4. 287 cm^2

Question ID : 264330153892
Option 1 ID : 264330603033
Option 2 ID : 264330603031
Option 3 ID : 264330603034
Option 4 ID : 264330603032
Status : Answered
Chosen Option : 4

Q.18 The price of a commodity increased from ₹200 to ₹250. What is the percentage increase in price?

- Ans**
- 1. 27%
 - 2. 20%
 - 3. 25%
 - 4. 22%

Question ID : 264330156260
Option 1 ID : 264330612442
Option 2 ID : 264330612439
Option 3 ID : 264330612441
Option 4 ID : 264330612440
Status : Answered
Chosen Option : 3

Q.19 What will be the compound interest on ₹30,000 at 10% per annum for $1\frac{1}{2}$ years, when interest is compounded half-yearly?

- Ans**
- 1. ₹4,728.75
 - 2. ₹4,800.75
 - 3. ₹5,728.75
 - 4. ₹4,928.75

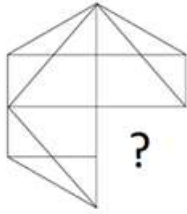
Question ID : 264330154132
Option 1 ID : 264330603993
Option 2 ID : 264330603991
Option 3 ID : 264330603992
Option 4 ID : 264330603994
Status : Answered
Chosen Option : 1

Q.20 Ravi sells a laptop bag to Reeta for ₹1,920 and he sells another similar laptop bag to Vinay for ₹1,280. The percentage profit earned in selling the laptop bag to Reeta is equal to the percentage loss in selling the laptop bag to Vinay. At what price (in ₹) should Ravi sell the laptop bag to make a profit of 25%?

- Ans**
- 1. 1,650
 - 2. 1,600
 - 3. 1,800
 - 4. 2,000

Question ID : 264330155706
Option 1 ID : 264330610228
Option 2 ID : 264330610227
Option 3 ID : 264330610229
Option 4 ID : 264330610230
Status : Answered
Chosen Option : 4

Q.1 Identify the figure that completes the pattern (rotation is NOT allowed).



Ans

✗ 1.



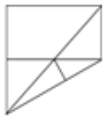
✓ 2.



✗ 3.



✗ 4.



Question ID : 264330154513

Option 1 ID : 264330605515

Option 2 ID : 264330605517

Option 3 ID : 264330605516

Option 4 ID : 264330605518

Status : Answered

Chosen Option : 2

Q.2 What should come in place of ? in the given series based on the English alphabetical order?

HPS, JRU, LTW, NVY, ?

Ans

✓ 1. PXA

✗ 2. MXB

✗ 3. NYB

✗ 4. NZA

Question ID : 264330155765

Option 1 ID : 264330610463

Option 2 ID : 264330610466

Option 3 ID : 264330610464

Option 4 ID : 264330610465

Status : Answered

Chosen Option : 1

Q.3 What will come in place of '?' in the following equation, if '+' and '×' are interchanged and '-' and '+' are interchanged?

$$16 - 4 + 13 \times 5 + 2 = ?$$

- Ans**
- 1. 36
 - 2. 24
 - 3. 48
 - 4. 55

Question ID : 264330154667
Option 1 ID : 264330606134
Option 2 ID : 264330606133
Option 3 ID : 264330606132
Option 4 ID : 264330606131
Status : Answered
Chosen Option : 4

Q.4 In a certain code language, 'PORTAL' is coded as 'RQIVCN' and 'QUIET' is coded as 'SWKGV'. What is the code for 'SIMPLE' in the given code language?

- Ans**
- 1. VKNRMJ
 - 2. UKORNG
 - 3. TJNSMH
 - 4. TNOSMI

Question ID : 264330155813
Option 1 ID : 264330610658
Option 2 ID : 264330610655
Option 3 ID : 264330610656
Option 4 ID : 264330610657
Status : Answered
Chosen Option : 2

Q.5 17 is related to 52 following a certain logic. Following the same logic, 42 is related to 127. To which of the following is 29 related to, following the same logic?

- Ans**
- 1. 84
 - 2. 88
 - 3. 86
 - 4. 82

Question ID : 264330151591
Option 1 ID : 264330593992
Option 2 ID : 264330593994
Option 3 ID : 264330593993
Option 4 ID : 264330593991
Status : Answered
Chosen Option : 2

Q.6 What should come in place of '?' in the given series?

9 26 77 230 689 ?

- Ans**
- 1. 2035
 - 2. 2112
 - 3. 2094
 - 4. 2066

Question ID : 264330151478
 Option 1 ID : 264330593539
 Option 2 ID : 264330593542
 Option 3 ID : 264330593541
 Option 4 ID : 264330593540
 Status : Answered
 Chosen Option : 4

Q.7 Which figure should replace the question mark (?) if the following figure series were to be continued?

R	I	K	2	R	D	7	↑	K	T	7	△	
2	△	D	△	I	T	T	2	△	2	↑	I	?
↑	7	T	K	↑	7	D	R	I	K	D	R	

Ans

- 1.

R	I	K
D	T	7
△	2	↑
- 2.

R	D	K
I	△	2
↑	7	T
- 3.

R	I	K
D	△	7
↑	2	T
- 4.

R	D	K
I	T	2
△	7	↑

Question ID : 264330154737
 Option 1 ID : 264330606411
 Option 2 ID : 264330606412
 Option 3 ID : 264330606413
 Option 4 ID : 264330606414
 Status : Answered
 Chosen Option : 2

Q.8 Read the given statements and conclusions carefully. You have to take the given statements to be true even if they seem to be at variance from commonly known facts. You have to decide which conclusion/s logically follow/s from the given statements.

Statements: All stamps are keys. All keys are black. All black are grey.

Conclusion I: All keys are stamps.

Conclusion II: Some keys are black.

- Ans**
- 1. Both conclusions (I) and (II) are follow.
 - 2. Only conclusion (II) is follow.
 - 3. Only conclusion (I) is follow.
 - 4. Neither conclusion (I) nor (II) is follow.

Question ID : 264330155893
 Option 1 ID : 264330610978
 Option 2 ID : 264330610976
 Option 3 ID : 264330610975
 Option 4 ID : 264330610977
 Status : Answered
 Chosen Option : 4

Q.9 What will come in the place of '?' in the following equation, if '+' and '-' are interchanged and '×' and '÷' are interchanged?

$$17 \div 9 - 39 \div 225 \times 15 = ?$$

- Ans**
- 1. 167
 - 2. 177
 - 3. 157
 - 4. 187

Question ID : 264330155669
 Option 1 ID : 264330610082
 Option 2 ID : 264330610081
 Option 3 ID : 264330610079
 Option 4 ID : 264330610080
 Status : Answered
 Chosen Option : 2

Q.10 What should come in place of '?' in the given series?

1 14 79 404 2029 ?

- Ans**
- 1. 10154
 - 2. 9848
 - 3. 9812
 - 4. 10132

Question ID : 264330151468
 Option 1 ID : 264330593502
 Option 2 ID : 264330593500
 Option 3 ID : 264330593499
 Option 4 ID : 264330593501
 Status : Answered
 Chosen Option : 1

Q.11 In a certain code language, 'do it now' is coded as 'qh tr ce' and 'now or never' is coded as 'lx ulk tr'. How is 'now' coded in the given language?

- Ans**
- 1. ce
 - 2. qh
 - 3. tr
 - 4. lx

Question ID : 264330151686
Option 1 ID : 264330594371
Option 2 ID : 264330594374
Option 3 ID : 264330594372
Option 4 ID : 264330594373
Status : Answered
Chosen Option : 3

Q.12 The position of how many letters will remain unchanged if each of the letter in the word 'ABSOLUTE' is arranged in alphabetical order?

- Ans**
- 1. Five
 - 2. Two
 - 3. Three
 - 4. Four

Question ID : 264330154323
Option 1 ID : 264330604758
Option 2 ID : 264330604755
Option 3 ID : 264330604757
Option 4 ID : 264330604756
Status : Answered
Chosen Option : 3

Q.13 Seven people, B, N, M, O, P, Y and S are sitting in a straight line, facing south. Only two people sit between P and S. N is the immediate neighbour of S and M. Only one person sits to the right of P. N sits second to the left of O. Y is an immediate neighbour of P.

Total how many people sit between P and M?

- Ans**
- 1. Two
 - 2. Four
 - 3. Three
 - 4. One

Question ID : 264330161697
Option 1 ID : 264330634116
Option 2 ID : 264330634118
Option 3 ID : 264330634117
Option 4 ID : 264330634115
Status : Answered
Chosen Option : 2

Q.14 Read the given statements and conclusions carefully. You have to take the given statements to be true even if they seem to be at variance from commonly known facts. You have to decide which conclusion/s logically follow/s from the given statements.

Statements: All threads are soft. Some soft are fruit. All fruit is yellow.

Conclusion I: Some thread is fruit.

Conclusion II: Some fruit is yellow.

- Ans**
- 1. Neither conclusion (I) nor (II) is follow.
 - 2. Both conclusions (I) and (II) are follow.
 - 3. Only conclusion (II) is follow.
 - 4. Only conclusion (I) is follow.

Question ID : 264330155921
 Option 1 ID : 264330611089
 Option 2 ID : 264330611090
 Option 3 ID : 264330611088
 Option 4 ID : 264330611087
 Status : Answered
 Chosen Option : 1

Q.15 What should come in place of ? in the given series?

21 24 29 36 47 ?

- Ans**
- 1. 64
 - 2. 60
 - 3. 56
 - 4. 66

Question ID : 264330151715
 Option 1 ID : 264330594487
 Option 2 ID : 264330594490
 Option 3 ID : 264330594488
 Option 4 ID : 264330594489
 Status : Answered
 Chosen Option : 2

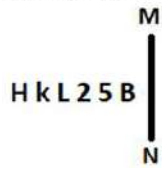
Q.16 Find out the correct alternative that when filled in the blanks in the same sequence will make the series logically complete.





WA_XV_FX_EFXTGF_SI_X

- Ans**
- 1. MNVKD
 - 2. FCUXF
 - 3. FVYNS
 - 4. HKVHU

Question ID : 264330154722
 Option 1 ID : 264330606353
 Option 2 ID : 264330606351
 Option 3 ID : 264330606354
 Option 4 ID : 264330606352
 Status : Answered
 Chosen Option : 2

Q.17 Select the correct mirror image of the given figure when the mirror is placed at MN as shown below.



- Ans
- 1. 
 - 2. 
 - 3. 
 - 4. 

Question ID : 264330151501

Option 1 ID : 264330593633

Option 2 ID : 264330593631

Option 3 ID : 264330593632

Option 4 ID : 264330593634

Status : Answered

Chosen Option : 2

Q.18 Select the set in which the numbers are related in the same way as are the numbers of the following sets.
 (NOTE: Operations should be performed on the whole numbers, without breaking down the numbers into its constituent digits. E.g. 13 – Operations on 13 such as adding / subtracting / multiplying etc. to 13 can be performed. Breaking down 13 into 1 and 3 and then performing mathematical operations on 1 and 3 is not allowed)
 (5, 11, 80)
 (6, 12, 90)

- Ans
- 1. 4, 19, 148
 - 2. 9, 11, 67
 - 3. 7, 17, 120
 - 4. 2, 16, 123

Question ID : 264330151615

Option 1 ID : 264330594089

Option 2 ID : 264330594090

Option 3 ID : 264330594087

Option 4 ID : 264330594088

Status : Answered

Chosen Option : 3

Q.19 Select the word-pair that best represents a similar relationship to the one expressed in the pair of words given below.

(The words must be considered as meaningful English words and must not be related to each other based on the number of letters/number of consonants/vowels in the word)

Scissors : Cloth

- Ans
- 1. Pen : Ink
 - 2. Razor : Beard
 - 3. Nail : Hammer
 - 4. Furnace : Smoke

Question ID : 264330154631

Option 1 ID : 264330605987

Option 2 ID : 264330605990

Option 3 ID : 264330605989

Option 4 ID : 264330605988

Status : Answered

Chosen Option : 2

Q.20 Select the combination of letters that when sequentially placed in the blanks of the given series will make it logically complete.

HLO_ J_OC LL_E _LOG P_OI

- Ans**
- 1. AONEL
 - 2. ALONL
 - 3. BGHPN
 - 4. BLOEN

Question ID : 264330156321
Option 1 ID : 264330612684
Option 2 ID : 264330612683
Option 3 ID : 264330612685
Option 4 ID : 264330612686
Status : Answered
Chosen Option : 2

Section : General Awareness

Q.1 What is the maximum time gap between two sessions of the State Legislature?

- Ans**
- 1. Three months
 - 2. Two months
 - 3. Six months
 - 4. One year

Question ID : 264330159927
Option 1 ID : 264330627056
Option 2 ID : 264330627055
Option 3 ID : 264330627057
Option 4 ID : 264330627058
Status : Answered
Chosen Option : 3

Q.2 In 1951, the first Asian Games was held in which city?

- Ans**
- 1. Jaipur
 - 2. Pune
 - 3. Mumbai
 - 4. New Delhi

Question ID : 264330158228
Option 1 ID : 264330620274
Option 2 ID : 264330620272
Option 3 ID : 264330620273
Option 4 ID : 264330620271
Status : Answered
Chosen Option : 4

Q.3 What is a government budget?

- Ans
- 1. A report on the economic growth of a country.
 - 2. A plan for managing personal finances.
 - 3. A financial statement of a government's expected revenue and expenditure for a specific period.
 - 4. A document outlining foreign policy goals.

Question ID : 264330157270
Option 1 ID : 264330616445
Option 2 ID : 264330616443
Option 3 ID : 264330616444
Option 4 ID : 264330616446
Status : Answered
Chosen Option : 3

Q.4 Who is the author of the novel 'A Suitable Boy'?

- Ans
- 1. Kiran Desai
 - 2. Vikram Seth
 - 3. Chetan Bhagat
 - 4. Anita Desai

Question ID : 264330160967
Option 1 ID : 264330631201
Option 2 ID : 264330631200
Option 3 ID : 264330631199
Option 4 ID : 264330631202
Status : Answered
Chosen Option : 2

Q.5 Which of the following oceans extends into the Mediterranean Sea?

- Ans
- 1. Indian Ocean
 - 2. Pacific Ocean
 - 3. Atlantic Ocean
 - 4. Arctic Ocean

Question ID : 264330157834
Option 1 ID : 264330618695
Option 2 ID : 264330618698
Option 3 ID : 264330618696
Option 4 ID : 264330618697
Status : Answered
Chosen Option : 3

Q.6 What is the meaning of the term 'Collateral' in banking?

- Ans
- 1. An investment portfolio
 - 2. A type of credit card
 - 3. A form of digital payment
 - 4. An asset pledged as security for a loan

Question ID : 264330157306
Option 1 ID : 264330616589
Option 2 ID : 264330616587
Option 3 ID : 264330616588
Option 4 ID : 264330616590
Status : Answered
Chosen Option : 4

Q.7 The word 'kathak' is derived from which of the following words?

- Ans 1. Story
 2. Narrator
 3. Dance steps
 4. Bells

Question ID : 264330160787
Option 1 ID : 264330630479
Option 2 ID : 264330630480
Option 3 ID : 264330630481
Option 4 ID : 264330630482
Status : Answered
Chosen Option : 1

Q.8 Which of the following autobiographies was written by Dr. APJ Abdul Kalam, the former president of India?

- Ans 1. One Life is Not Enough
 2. Waiting for a Visa
 3. Atmakatha
 4. Wings of Fire

Question ID : 264330161755
Option 1 ID : 264330634350
Option 2 ID : 264330634349
Option 3 ID : 264330634348
Option 4 ID : 264330634347
Status : Answered
Chosen Option : 4

Q.9 Which Indian musician got the prestigious Academy Award?

- Ans 1. AR Rahman
 2. Anu Malik
 3. Naushad
 4. Bappi Lahiri

Question ID : 264330162233
Option 1 ID : 264330636262
Option 2 ID : 264330636260
Option 3 ID : 264330636261
Option 4 ID : 264330636259
Status : Answered
Chosen Option : 1

Q.10 In relation to the state of Tamil Nadu, the Constitution (Scheduled Tribes) Order (Second Amendment) Act, 2022 will include the _____ and Kurivikkaran communities in the list of Scheduled Tribes in Tamil Nadu.

- Ans 1. Narikoravan
 2. Irular
 3. Kadar
 4. Kammara

Question ID : 264330161414
Option 1 ID : 264330632983
Option 2 ID : 264330632984
Option 3 ID : 264330632985
Option 4 ID : 264330632986
Status : Answered
Chosen Option : 1

Q.11 Which antibiotic is considered the first miracle drug, used to treat throat infections, meningitis, syphilis and other bacterial infections?

- Ans
- 1. Aciclovir
 - 2. Nifuratel
 - 3. Penicillin
 - 4. Metronidazole

Question ID : 264330161078
Option 1 ID : 264330631644
Option 2 ID : 264330631646
Option 3 ID : 264330631643
Option 4 ID : 264330631645
Status : Not Answered
Chosen Option : --

Q.12 Which of the following is the Fundamental Law of any country which sets out the framework and the principal functions of various organs of the government?

- Ans
- 1. Customs
 - 2. International Law
 - 3. Constitution
 - 4. Ordinance

Question ID : 264330161395
Option 1 ID : 264330632908
Option 2 ID : 264330632910
Option 3 ID : 264330632907
Option 4 ID : 264330632909
Status : Answered
Chosen Option : 3

Q.13 Who was the singer of the famous song 'Mere Desh Ki Dharti Sona Ugle' from the film 'Upkar' (1967)?

- Ans
- 1. KJ Yesudas
 - 2. Suresh Wadkar
 - 3. Manna Dey
 - 4. Mahendra Kapoor

Question ID : 264330155513
Option 1 ID : 264330609457
Option 2 ID : 264330609458
Option 3 ID : 264330609456
Option 4 ID : 264330609455
Status : Answered
Chosen Option : 2

Q.14 Rani Machaiah was awarded with 'Padam Shri' in the year _____ for her contribution to folk dance.

- Ans
- 1. 2015
 - 2. 2018
 - 3. 2012
 - 4. 2023

Question ID : 264330155526
Option 1 ID : 264330609509
Option 2 ID : 264330609508
Option 3 ID : 264330609510
Option 4 ID : 264330609507
Status : Not Answered
Chosen Option : --

Q.15 Jyothi Yarraji created a new national record in 2023 in which of the following sports?

- Ans
- 1. Indoor hurdling
 - 2. High jump
 - 3. Shot put
 - 4. Long jump

Question ID : 264330158373
Option 1 ID : 264330620854
Option 2 ID : 264330620853
Option 3 ID : 264330620852
Option 4 ID : 264330620851
Status : Answered
Chosen Option : 4

Q.16 Which physicist's experiment during a lecture in 1820 showed the connection between electricity and magnetism?

- Ans
- 1. John Cockcroft
 - 2. William Gilbert
 - 3. Heinrich Hertz
 - 4. Hans Christian Oersted

Question ID : 264330161045
Option 1 ID : 264330631512
Option 2 ID : 264330631511
Option 3 ID : 264330631514
Option 4 ID : 264330631513
Status : Answered
Chosen Option : 4

Q.17 In the performance of _____ dance, on one side raasa dances are performed by women, whereas on the opposite side instrumentalist play the pung choloms (drums) and the karataala (cymbals).

- Ans
- 1. Kathakali
 - 2. Yakshagana
 - 3. Odissi
 - 4. Manipuri

Question ID : 264330161342
Option 1 ID : 264330632696
Option 2 ID : 264330632697
Option 3 ID : 264330632695
Option 4 ID : 264330632698
Status : Answered
Chosen Option : 4

Q.18 Who among the following was the founder of the Khudai Khidmatgars, a powerful non-violent movement among the Pathans of North-West Frontier Province?

- Ans
- 1. Khan Abdul Ghaffar Khan
 - 2. Abdul Qayyum Khan Kashmiri
 - 3. Mohammad Ali Jinnah
 - 4. Khan Abdul Jabbar Khan

Question ID : 264330161749
Option 1 ID : 264330634323
Option 2 ID : 264330634326
Option 3 ID : 264330634325
Option 4 ID : 264330634324
Status : Answered
Chosen Option : 1

Q.19 In which year was the Vernacular Press Act passed?

- Ans
- 1. 1757 CE
 - 2. 1878 CE
 - 3. 1888 CE
 - 4. 1600 CE

Question ID : 264330162318
Option 1 ID : 264330636600
Option 2 ID : 264330636602
Option 3 ID : 264330636601
Option 4 ID : 264330636599
Status : Answered
Chosen Option : 2

Q.20 Which state of India is associated with the famous thunderstorms 'Kaal Baisakhi'?

- Ans
- 1. West Bengal
 - 2. Karnataka
 - 3. Gujarat
 - 4. Haryana

Question ID : 264330161519
Option 1 ID : 264330633403
Option 2 ID : 264330633405
Option 3 ID : 264330633406
Option 4 ID : 264330633404
Status : Answered
Chosen Option : 1

Q.21 According to Ministry of Commerce and Industry (2018-19), which state of India is the largest producer of Rubber?

- Ans
- 1. Maharashtra
 - 2. Gujarat
 - 3. Kerala
 - 4. Uttar Pradesh

Question ID : 264330161487
Option 1 ID : 264330633276
Option 2 ID : 264330633278
Option 3 ID : 264330633275
Option 4 ID : 264330633277
Status : Answered
Chosen Option : 3

Q.22 In which year was the first Khelo India Winter Games held?

- Ans
- 1. 2022
 - 2. 2019
 - 3. 2021
 - 4. 2020

Question ID : 264330158238
Option 1 ID : 264330620314
Option 2 ID : 264330620311
Option 3 ID : 264330620313
Option 4 ID : 264330620312
Status : Answered
Chosen Option : 3

Q.23 'Losoong' festival, celebrated by the tribal community in _____, is usually the time when the farmers rejoice and celebrate their harvest.

- Ans
- 1. Sikkim
 - 2. Jharkhand
 - 3. Odisha
 - 4. West Bengal

Question ID : 264330160818
Option 1 ID : 264330630603
Option 2 ID : 264330630606
Option 3 ID : 264330630605
Option 4 ID : 264330630604
Status : Answered
Chosen Option : 1

Q.24 According to the Human Development Index 2021, which group of neighbouring countries has ranked behind India?

- Ans
- 1. Maldives and Bhutan
 - 2. Pakistan and Afghanistan
 - 3. Bangladesh and China
 - 4. Sri Lanka and Bhutan

Question ID : 264330160173
Option 1 ID : 264330628033
Option 2 ID : 264330628032
Option 3 ID : 264330628031
Option 4 ID : 264330628034
Status : Answered
Chosen Option : 2

Q.25 Which of the following statements is true about the Great Bath of the Indus Valley Civilisation?

- Ans
- 1. It was used for grain storage.
 - 2. It was used for farming.
 - 3. It was used as the water tank of the city.
 - 4. It was probably used for religious purpose.

Question ID : 264330160763
Option 1 ID : 264330630385
Option 2 ID : 264330630384
Option 3 ID : 264330630386
Option 4 ID : 264330630383
Status : Answered
Chosen Option : 3

Section : English Language and Comprehension

Q.1 Select the most appropriate option that can substitute the underlined segment in the given sentence.

France is a largest country.

- Ans
- 1. smaller
 - 2. larger
 - 3. smallest
 - 4. large

Question ID : 264330155422
Option 1 ID : 264330609097
Option 2 ID : 264330609096
Option 3 ID : 264330609098
Option 4 ID : 264330609095
Status : Answered
Chosen Option : 4

Q.2 The following sentence has been split into four segments. Identify the segment that contains an error.

Mr Sharma would have left / the station / by this time / tomorrow.

- Ans
- 1. tomorrow
 - 2. by this time
 - 3. the station
 - 4. Mr Sharma would have left

Question ID : 264330143051
Option 1 ID : 264330560482
Option 2 ID : 264330560481
Option 3 ID : 264330560480
Option 4 ID : 264330560479
Status : Answered
Chosen Option : 4

Q.3 Select the most appropriate meaning of the underlined idiom in the following sentence.

“Do not turn a blind eye to all the mischief your child is up to”, the teacher told the young parent.

- Ans
- 1. Close the door
 - 2. Take pride in
 - 3. Give rewards
 - 4. Pretend not to notice

Question ID : 264330153051
Option 1 ID : 264330599772
Option 2 ID : 264330599771
Option 3 ID : 264330599774
Option 4 ID : 264330599773
Status : Answered
Chosen Option : 4

Q.4 Select the most appropriate option to fill in the blank.
The mother _____ the chips because they were soggy.

- Ans
- 1. saved
 - 2. wasted
 - 3. discarded
 - 4. recovered

Question ID : 264330152579
Option 1 ID : 264330597922
Option 2 ID : 264330597920
Option 3 ID : 264330597921
Option 4 ID : 264330597919
Status : Answered
Chosen Option : 3

Q.5 Identify the most appropriate meaning of the given word.
Hope

- Ans
- 1. Caution
 - 2. Realism
 - 3. Cynicism
 - 4. Wish

Question ID : 264330152572
Option 1 ID : 264330597891
Option 2 ID : 264330597893
Option 3 ID : 264330597892
Option 4 ID : 264330597894
Status : Answered
Chosen Option : 4

Q.6 Select the most appropriate meaning of the given idiom.
Have egg on your face

- Ans 1. Defeat someone thoroughly
2. To be made to look foolish or embarrassed
3. Making a choice between two unpleasant choices
4. Reveal a secret

Question ID : 264330155282
Option 1 ID : 264330608571
Option 2 ID : 264330608573
Option 3 ID : 264330608574
Option 4 ID : 264330608572
Status : Answered
Chosen Option : 2

Q.7 The following sentence contains some errors. Select the option that correctly rectifies the error.
The tiger was tranquilized in the morning and kept in a cage to avoid disturbannces by human beings.

- Ans 1. The tiger was tranquilized in the morning and kept in a cage to avoiid disturbaences by human beings.
2. The tiger was tranquilized in the morning and kept in a cage to avoid disturbances by human beings.
3. The tiger was traanquilized in the morning and kept in a cage to avoid disturbances by human beings.
4. The tiger was tranquiliized in the morning and kept in a cage to avoid disturbances by human beings.

Question ID : 264330152692
Option 1 ID : 264330598373
Option 2 ID : 264330598374
Option 3 ID : 264330598372
Option 4 ID : 264330598371
Status : Answered
Chosen Option : 2

Q.8 Select the most appropriate synonym of the bracketed word in the following sentence to fill in the blank.
She's reading a _____ (secrecy) novel and can't wait to find out who the killer is.

- Ans 1. crisis
2. complication
3. difficulty
4. mystery

Question ID : 264330152660
Option 1 ID : 264330598246
Option 2 ID : 264330598245
Option 3 ID : 264330598243
Option 4 ID : 264330598244
Status : Answered
Chosen Option : 4

Q.9 The following sentence has been divided into parts. One of them may contain an error. Select the part that contains the error from the given options. If you don't find any error, mark 'No error' as your answer.

The viable of life / depends on a pair / of conflicting realities.

- Ans
- 1. depends on a pair
 - 2. No error
 - 3. The viable of life
 - 4. of conflicting realities

Question ID : 264330153607
Option 1 ID : 264330601911
Option 2 ID : 264330601914
Option 3 ID : 264330601913
Option 4 ID : 264330601912
Status : Answered
Chosen Option : 1

Q.10 Parts of the following sentence have been given as options. Select the option that contains an error.
I shall be playing for four hours.

- Ans
- 1. four hours
 - 2. I
 - 3. shall be playing
 - 4. for

Question ID : 264330152818
Option 1 ID : 264330598866
Option 2 ID : 264330598863
Option 3 ID : 264330598864
Option 4 ID : 264330598865
Status : Answered
Chosen Option : 3

Q.11 Select the most appropriate meaning of the underlined segment in the given sentence.
Our team is all on the same page when it comes to our goals for the upcoming project.

- Ans
- 1. Be confused
 - 2. Be in agreement
 - 3. Be unsure
 - 4. Be in conflict

Question ID : 264330152927
Option 1 ID : 264330599289
Option 2 ID : 264330599287
Option 3 ID : 264330599290
Option 4 ID : 264330599288
Status : Answered
Chosen Option : 2

Q.12 Select the most appropriate meaning of the given idiom.
Bite the dust

- Ans** 1. To suffer a defeat
 2. To fall from a height
 3. To remain calm
 4. To fall asleep

Question ID : 264330155285
Option 1 ID : 264330608584
Option 2 ID : 264330608583
Option 3 ID : 264330608586
Option 4 ID : 264330608585
Status : Answered
Chosen Option : 1

Q.13 Select the option that can be used as a one-word substitute for the given group of words.

A person who avoids sensory pleasures and physical comforts

- Ans** 1. Frugal
 2. Epicurean
 3. Bohemian
 4. Ascetic

Question ID : 264330151869
Option 1 ID : 264330595097
Option 2 ID : 264330595098
Option 3 ID : 264330595096
Option 4 ID : 264330595095
Status : Answered
Chosen Option : 4

Q.14 Select the INCORRECTLY spelt word.

- Ans** 1. Chivalrous
 2. Expose
 3. Confess
 4. Convict

Question ID : 264330152944
Option 1 ID : 264330599355
Option 2 ID : 264330599356
Option 3 ID : 264330599357
Option 4 ID : 264330599358
Status : Answered
Chosen Option : 3

Q.15 Select the option that can be used as a one-word substitute for the given group of words.

A person living in solitude like a saint for religious practices.

- Ans 1. Hermit
 2. Cretin
 3. Heir
 4. Heretic

Question ID : 264330151812
Option 1 ID : 264330594875
Option 2 ID : 264330594878
Option 3 ID : 264330594877
Option 4 ID : 264330594876
Status : Answered
Chosen Option : 1

Q.16 Select the most appropriate ANTONYM of the given word.
Clumsy

- Ans 1. Jealous
 2. Fierce
 3. Graceful
 4. Nervous

Question ID : 264330151916
Option 1 ID : 264330595279
Option 2 ID : 264330595282
Option 3 ID : 264330595280
Option 4 ID : 264330595281
Status : Answered
Chosen Option : 3

Q.17 Select the most appropriate option that can substitute the underlined segment in the given sentence.

No sooner had the sun risen over the horizon when the birds began to chirp and the squirrels started to scamper around the park.

- Ans 1. when the birds begin
 2. than birds begin
 3. when birds began
 4. than the birds began

Question ID : 264330151857
Option 1 ID : 264330595050
Option 2 ID : 264330595047
Option 3 ID : 264330595048
Option 4 ID : 264330595049
Status : Answered
Chosen Option : 4

Q.18 Select the most appropriate option to fill in the blank.

During the meeting, he went on a long and angry _____ about how the project was being mismanaged.

- Ans
- 1. shout
 - 2. whisper
 - 3. rant
 - 4. mutter

Question ID : 264330151860
Option 1 ID : 264330595062
Option 2 ID : 264330595060
Option 3 ID : 264330595059
Option 4 ID : 264330595061
Status : Answered
Chosen Option : 3

Q.19 The following sentence has been split into four segments. Identify the segment that contains a grammatical error.

I had / a bad habit of / waking up / lately.

- Ans
- 1. lately
 - 2. waking up
 - 3. a bad habit of
 - 4. I had

Question ID : 264330153185
Option 1 ID : 264330600302
Option 2 ID : 264330600301
Option 3 ID : 264330600300
Option 4 ID : 264330600299
Status : Answered
Chosen Option : 1

Q.20 Select the most appropriate option to fill in the blank.

Chaitnya was _____ from the school due to his inappropriate behaviour.

- Ans
- 1. expelled
 - 2. xpelled
 - 3. expeled
 - 4. xpeled

Question ID : 264330153305
Option 1 ID : 264330600777
Option 2 ID : 264330600778
Option 3 ID : 264330600775
Option 4 ID : 264330600776
Status : Answered
Chosen Option : 1

Comprehension:

In the following passage, some words have been deleted. Read the passage carefully and select the most appropriate option to fill in each blank.

Once there was a king named Midas who was granted a (1)_____ by Dionysus, the god of wine. For his wish, Midas asked that whatever he (2)_____ would turn to gold. Despite Dionysus' efforts to prevent it, Midas pleaded that this was a fantastic wish, and so, it was bestowed. Excited about his newly-earned (3)_____, Midas started touching all kinds of things, turning each item into pure gold. But soon, Midas became (4)_____. As he picked up a piece of food, he found he couldn't eat it. It had turned to gold in his hand. Hungry, Midas groaned, "I'll starve! Perhaps this was not such an excellent wish after all!" Seeing his dismay, Midas' (5)_____ daughter threw her arms around him to comfort him, and she, too, turned to gold. "The golden touch is no blessing," Midas cried.

SubQuestion No : 21

Q.21 Select the most appropriate option to fill in blank number 1.

- Ans 1. slavery
 2. wish
 3. employment
 4. job

Question ID : 264330153525

Option 1 ID : 264330601610

Option 2 ID : 264330601609

Option 3 ID : 264330601608

Option 4 ID : 264330601607

Status : Answered

Chosen Option : 2

Comprehension:

In the following passage, some words have been deleted. Read the passage carefully and select the most appropriate option to fill in each blank.

Once there was a king named Midas who was granted a (1)_____ by Dionysus, the god of wine. For his wish, Midas asked that whatever he (2)_____ would turn to gold. Despite Dionysus' efforts to prevent it, Midas pleaded that this was a fantastic wish, and so, it was bestowed. Excited about his newly-earned (3)_____, Midas started touching all kinds of things, turning each item into pure gold. But soon, Midas became (4)_____. As he picked up a piece of food, he found he couldn't eat it. It had turned to gold in his hand. Hungry, Midas groaned, "I'll starve! Perhaps this was not such an excellent wish after all!" Seeing his dismay, Midas' (5)_____ daughter threw her arms around him to comfort him, and she, too, turned to gold. "The golden touch is no blessing," Midas cried.

SubQuestion No : 22

Q.22 Select the most appropriate option to fill in blank number 2.

- Ans 1. next felt
 2. touched
 3. kept
 4. left

Question ID : 264330153526

Option 1 ID : 264330601614

Option 2 ID : 264330601612

Option 3 ID : 264330601611

Option 4 ID : 264330601613

Status : Answered

Chosen Option : 2

Comprehension:

In the following passage, some words have been deleted. Read the passage carefully and select the most appropriate option to fill in each blank.

Once there was a king named Midas who was granted a (1)_____ by Dionysus, the god of wine. For his wish, Midas asked that whatever he (2)_____ would turn to gold. Despite Dionysus' efforts to prevent it, Midas pleaded that this was a fantastic wish, and so, it was bestowed. Excited about his newly-earned (3)_____, Midas started touching all kinds of things, turning each item into pure gold. But soon, Midas became (4)_____. As he picked up a piece of food, he found he couldn't eat it. It had turned to gold in his hand. Hungry, Midas groaned, "I'll starve! Perhaps this was not such an excellent wish after all!" Seeing his dismay, Midas' (5)_____ daughter threw her arms around him to comfort him, and she, too, turned to gold. "The golden touch is no blessing," Midas cried.

SubQuestion No : 23

Q.23 Select the most appropriate option to fill in blank number 3.

- Ans 1. legacies
 2. powers
 3. awards
 4. visuals

Question ID : 264330153527

Option 1 ID : 264330601618

Option 2 ID : 264330601615

Option 3 ID : 264330601617

Option 4 ID : 264330601616

Status : Answered

Chosen Option : 2

Comprehension:

In the following passage, some words have been deleted. Read the passage carefully and select the most appropriate option to fill in each blank.

Once there was a king named Midas who was granted a (1)_____ by Dionysus, the god of wine. For his wish, Midas asked that whatever he (2)_____ would turn to gold. Despite Dionysus' efforts to prevent it, Midas pleaded that this was a fantastic wish, and so, it was bestowed. Excited about his newly-earned (3)_____, Midas started touching all kinds of things, turning each item into pure gold. But soon, Midas became (4)_____. As he picked up a piece of food, he found he couldn't eat it. It had turned to gold in his hand. Hungry, Midas groaned, "I'll starve! Perhaps this was not such an excellent wish after all!" Seeing his dismay, Midas' (5)_____ daughter threw her arms around him to comfort him, and she, too, turned to gold. "The golden touch is no blessing," Midas cried.

SubQuestion No : 24

Q.24 Select the most appropriate option to fill in blank number 4.

- Ans 1. mad
 2. hungry
 3. tired
 4. angry

Question ID : 264330153528

Option 1 ID : 264330601620

Option 2 ID : 264330601622

Option 3 ID : 264330601621

Option 4 ID : 264330601619

Status : Answered

Chosen Option : 3

Comprehension:

In the following passage, some words have been deleted. Read the passage carefully and select the most appropriate option to fill in each blank.

Once there was a king named Midas who was granted a (1)_____ by Dionysus, the god of wine. For his wish, Midas asked that whatever he (2)_____ would turn to gold. Despite Dionysus' efforts to prevent it, Midas pleaded that this was a fantastic wish, and so, it was bestowed. Excited about his newly-earned (3)_____, Midas started touching all kinds of things, turning each item into pure gold. But soon, Midas became (4)_____. As he picked up a piece of food, he found he couldn't eat it. It had turned to gold in his hand. Hungry, Midas groaned, "I'll starve! Perhaps this was not such an excellent wish after all!" Seeing his dismay, Midas' (5)_____ daughter threw her arms around him to comfort him, and she, too, turned to gold. "The golden touch is no blessing," Midas cried.

SubQuestion No : 25

Q.25 Select the most appropriate option to fill in blank number 5.

- Ans 1. estranged
 2. guarded
 3. beloved
 4. hated

Question ID : 264330153529

Option 1 ID : 264330601624

Option 2 ID : 264330601626

Option 3 ID : 264330601623

Option 4 ID : 264330601625

Status : Answered

Chosen Option : 3