

## Multi Tasking Non Technical Staff and Havaladar CBIC and CBN Examination 2022

Roll Number	
Candidate Name	
Venue Name	Dewa Mahila Mahavidyalaya
Exam Date	13/06/2023
Exam Time	12:00 PM - 2:00 PM
Subject	MTS Non Tech Havaladar CBIC and CBN Examination 2022

### Section : Numerical and Mathematical Ability

**Q.1** In what ratio must tea worth of Rs.10 per kg be mixed with tea worth Rs.15 per kg, so that the resultant mixture costs Rs.12 per kg?

- Ans**
- 1. 3 : 5
  - 2. 2 : 3
  - 3. 3 : 2
  - 4. 2 : 5

Question Type : **MCQ**  
Question ID : **264330133584**  
Option 1 ID : **264330523360**  
Option 2 ID : **264330523362**  
Option 3 ID : **264330523359**  
Option 4 ID : **264330523361**  
Status : **Answered**  
Chosen Option : **1**

**Q.2** The ratio of the volume of two cylinders is 13 : 1 and the ratio of their heights is 13 : 9. If the area of the base of the second cylinder is  $154 \text{ cm}^2$ , then what will be the radius of the first cylinder?

- Ans**
- 1. 42 cm
  - 2. 21 cm
  - 3. 28 cm
  - 4. 14 cm

Question Type : **MCQ**  
Question ID : **264330140644**  
Option 1 ID : **264330550926**  
Option 2 ID : **264330550923**  
Option 3 ID : **264330550925**  
Option 4 ID : **264330550924**  
Status : **Answered**  
Chosen Option : **2**

**Q.3** Mohit and Rohit undertook a work for Rs. 2200. Mohit alone can do that work in 10 days and Rohit alone can do the same work in 12 days. If they work together, then what will be the difference in the amount they receive?

- Ans**
- 1. Rs. 500
  - 2. Rs. 200
  - 3. Rs. 600
  - 4. Rs. 400

Question Type : **MCQ**  
Question ID : **264330140153**  
Option 1 ID : **264330548993**  
Option 2 ID : **264330548992**  
Option 3 ID : **264330548994**  
Option 4 ID : **264330548991**  
Status : **Answered**  
Chosen Option : **2**

**Q.4** A man multiplied a number by  $\frac{8}{5}$  instead of  $\frac{5}{8}$ , what is the percentage error in the calculation?

- Ans**
- 1. 124%
  - 2. 162%
  - 3. 156%
  - 4. 100%

Question Type : **MCQ**  
Question ID : **264330139041**  
Option 1 ID : **264330544772**  
Option 2 ID : **264330544774**  
Option 3 ID : **264330544773**  
Option 4 ID : **264330544771**  
Status : **Answered**  
Chosen Option : **3**

**Q.5** 2 years ago, the ratio of X and Y's age was 7 : 5 and after 2 years their age will be in the ratio 9 : 7. What is the present age of Y?

- Ans**
- 1. 18 years
  - 2. 12 years
  - 3. 16 years
  - 4. 14 years

Question Type : **MCQ**  
Question ID : **264330140181**  
Option 1 ID : **264330549106**  
Option 2 ID : **264330549103**  
Option 3 ID : **264330549104**  
Option 4 ID : **264330549105**  
Status : **Answered**  
Chosen Option : **2**

**Q.6** The simple interest received on a sum at the rate of 8 percent per annum is  $\frac{2}{5}$  of the sum. What is the time period?

- Ans**
- 1. 6 years
  - 2. 5 years
  - 3. 4 years
  - 4. 7.5 years

Question Type : **MCQ**  
Question ID : **264330140543**  
Option 1 ID : **264330550528**  
Option 2 ID : **264330550527**  
Option 3 ID : **264330550529**  
Option 4 ID : **264330550530**  
Status : **Answered**  
Chosen Option : **2**

**Q.7** Vikas gave 3 examinations. The respective ratio of marks scored by him in the 3 examinations is 3 : 5 : 6. The respective ratio of maximum marks of the 3 examination is 7 : 11 : 10. If he scored 50 percent marks in total, then in how many examination has he scored marks more than 50 percent?

- Ans**
- 1. None
  - 2. 1
  - 3. 3
  - 4. 2

Question Type : **MCQ**  
Question ID : **264330140248**  
Option 1 ID : **264330549371**  
Option 2 ID : **264330549372**  
Option 3 ID : **264330549374**  
Option 4 ID : **264330549373**  
Status : **Answered**  
Chosen Option : **2**

**Q.8** Selling price of a glass is Rs. 1287 and loss percentage is 22 percent. If selling price is Rs. 1848, then what will be the profit percentage?

- Ans**
- 1. 12 percent
  - 2. 15 percent
  - 3. 10 percent
  - 4. 8 percent

Question Type : **MCQ**  
Question ID : **264330139615**  
Option 1 ID : **264330546876**  
Option 2 ID : **264330546875**  
Option 3 ID : **264330546877**  
Option 4 ID : **264330546878**  
Status : **Answered**  
Chosen Option : **1**

**Q.9** If 2 times of selling price is equal of 3 times of cost price, then what is the profit percentage?

- Ans**
- 1. 4 percent
  - 2. 40 percent
  - 3. 25 percent
  - 4. 50 percent

Question Type : **MCQ**

Question ID : **264330140569**

Option 1 ID : **264330550627**

Option 2 ID : **264330550630**

Option 3 ID : **264330550628**

Option 4 ID : **264330550629**

Status : **Answered**

Chosen Option : **4**

**Q.10** The following table shows the expenditure of a company from the year 2018 to 2022. What is the average amount of tax per year which the company had to pay during this period?

Year	Expenditure(in lakh)				
	Fuel and Transport	Taxes	Bonus	Interest on loans	Salary
2018	98	100	1.5	25.5	325
2019	120	105	2.4	36.6	400
2020	114	102	3.8	42.8	422
2021	128	98	3.0	38.4	425
2022	140	92	4.2	48.5	480

- Ans**
- 1. 90.2 lakh
  - 2. 99.4 lakh
  - 3. 91.4 lakh
  - 4. 92.5 lakh

Question Type : **MCQ**

Question ID : **264330140837**

Option 1 ID : **264330551698**

Option 2 ID : **264330551697**

Option 3 ID : **264330551696**

Option 4 ID : **264330551695**

Status : **Answered**

Chosen Option : **2**

**Q.11** A single discount of 48 percent is given on Rs. 1080. If two successive discounts of 25 percent and 20 percent are given, then what will be the difference between both the selling prices?

- Ans**
- 1. Rs. 72.5
  - 2. Rs. 65.8
  - 3. Rs. 80.8
  - 4. Rs. 86.4

Question Type : **MCQ**

Question ID : **264330140575**

Option 1 ID : **264330550653**

Option 2 ID : **264330550654**

Option 3 ID : **264330550651**

Option 4 ID : **264330550652**

Status : **Answered**

Chosen Option : **4**

**Q.12** If the time period increases by 5 years, then simple interest increases by Rs. 3600 on a sum of Rs. 6000. What is the annual rate of interest?

- Ans
- 1. 15 percent
  - 2. 12 percent
  - 3. 12.5 percent
  - 4. 10 percent

Question Type : **MCQ**  
Question ID : **264330139027**  
Option 1 ID : **264330544717**  
Option 2 ID : **264330544716**  
Option 3 ID : **264330544718**  
Option 4 ID : **264330544715**  
Status : **Answered**  
Chosen Option : **2**

**Q.13** What will be the ratio of the Least Common Multiple and Highest Common Factor of 12, 24 and 36?

- Ans
- 1. 3 : 1
  - 2. 4 : 1
  - 3. 6 : 1
  - 4. 2 : 1

Question Type : **MCQ**  
Question ID : **264330140578**  
Option 1 ID : **264330550663**  
Option 2 ID : **264330550664**  
Option 3 ID : **264330550666**  
Option 4 ID : **264330550665**  
Status : **Answered**  
Chosen Option : **3**

**Q.14** What will be the curved surface area of cone of radius 5 cm and slant height 30 cm? (use  $\pi = 3.14$ )

- Ans
- 1. 234 m<sup>2</sup>
  - 2. 715 m<sup>2</sup>
  - 3. 543 m<sup>2</sup>
  - 4. 471 cm<sup>2</sup>

Question Type : **MCQ**  
Question ID : **264330140795**  
Option 1 ID : **264330551530**  
Option 2 ID : **264330551529**  
Option 3 ID : **264330551528**  
Option 4 ID : **264330551527**  
Status : **Answered**  
Chosen Option : **4**

**Q.15** U, V and W together can complete a work in 10 days. If U can work thrice as faster than V and V can work twice as faster than W, then in how many days W alone can complete the same work?

- Ans**
- 1. 100 days
  - 2. 90 days
  - 3. 63 days
  - 4. 45 days

Question Type : **MCQ**  
Question ID : **264330139892**  
Option 1 ID : **264330547947**  
Option 2 ID : **264330547948**  
Option 3 ID : **264330547949**  
Option 4 ID : **264330547950**  
Status : **Answered**  
Chosen Option : **2**

**Q.16** What is the value of  $49 \div 7 - 343 \div 7 - 243 \div 27 + 729 \div 27 + 152 \div 19$ ?

- Ans**
- 1. -16
  - 2. 32
  - 3. 16
  - 4. -32

Question Type : **MCQ**  
Question ID : **264330139033**  
Option 1 ID : **264330544742**  
Option 2 ID : **264330544741**  
Option 3 ID : **264330544739**  
Option 4 ID : **264330544740**  
Status : **Answered**  
Chosen Option : **1**

**Q.17** A group of students has an average weight of 42 kg. One student of weight 48 kg leaves the group and another student of weight 44 kg joins the group. If the new average weight becomes 41.6 kg, then how many students are there in the group?

- Ans**
- 1. 15
  - 2. 10
  - 3. 8
  - 4. 12

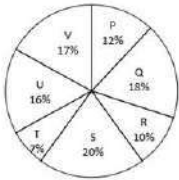
Question Type : **MCQ**  
Question ID : **264330140615**  
Option 1 ID : **264330550810**  
Option 2 ID : **264330550808**  
Option 3 ID : **264330550807**  
Option 4 ID : **264330550809**  
Status : **Answered**  
Chosen Option : **2**

Q.18 What is the value of  $\frac{96 \div 2 + 24 + 92}{10 \times 10 \div 10}$  ?

- Ans
- 1. 1
  - 2. 50
  - 3. 100
  - 4. 10

Question Type : MCQ  
Question ID : 264330140209  
Option 1 ID : 264330549215  
Option 2 ID : 264330549218  
Option 3 ID : 264330549217  
Option 4 ID : 264330549216  
Status : Answered  
Chosen Option : 4

Q.19 The pie chart given below shows the savings of seven companies in a year. The total savings of all these companies are 12000. The saving of a particular company is shown as a percentage of total savings of all these seven companies.



Which of the following statement is correct?

- I. The ratio of saving of Q to the savings of U are 8 : 9.
- II. Central angle formed by sector R is  $36^\circ$ .
- III. The savings of P is 60 percent of the savings of S.

- Ans
- 1. II and III
  - 2. I, II and III
  - 3. I and III
  - 4. I and II

Question Type : MCQ  
Question ID : 264330139910  
Option 1 ID : 264330548020  
Option 2 ID : 264330548022  
Option 3 ID : 264330548021  
Option 4 ID : 264330548019  
Status : Answered  
Chosen Option : 1

**Q.20** A train starts at 3:00 pm from Mumbai and moves towards Ahmedabad at the speed of 20 km/hr. Another train starts from Ahmedabad at 8 pm and moves towards Mumbai at the speed of 60 km/hr. If the distance between Mumbai and Ahmedabad is 600 km, then at what time both the trains will meet?

- Ans**
- 1. 1:30 am
  - 2. 12:30 am
  - 3. 2:00 am
  - 4. 2:15 am

Question Type : **MCQ**  
Question ID : **264330140613**  
Option 1 ID : **264330550800**  
Option 2 ID : **264330550801**  
Option 3 ID : **264330550802**  
Option 4 ID : **264330550799**  
Status : **Answered**  
Chosen Option : **4**

Section : Reasoning Ability and Problem Solving

**Q.1** In a certain code language, 'FOUR' is written as 'ENTQ' and 'LIKE' is written as 'KHJD'. How will 'DOWN' be written in that language?

- Ans**
- 1. CNUM
  - 2. CMVM
  - 3. CNVO
  - 4. CNVM

Question Type : **MCQ**  
Question ID : **264330140037**  
Option 1 ID : **264330548530**  
Option 2 ID : **264330548529**  
Option 3 ID : **264330548528**  
Option 4 ID : **264330548527**  
Status : **Answered**  
Chosen Option : **4**

**Q.2** Six persons Akash, Naman, Divya, Rakesh, Pankaj and Ramesh are sitting in two parallel rows such that three are sitting in each row facing each other. Akash is facing Naman who is to the immediate left of Divya. Divya is sitting opposite of Ramesh who is facing south direction. Pankaj is sitting to immediate left of Ramesh. Who among them is facing north and not sitting in either corner?

- Ans**
- 1. Rakesh
  - 2. Divya
  - 3. Naman
  - 4. Akash

Question Type : **MCQ**  
Question ID : **264330140080**  
Option 1 ID : **264330548700**  
Option 2 ID : **264330548699**  
Option 3 ID : **264330548702**  
Option 4 ID : **264330548701**  
Status : **Answered**  
Chosen Option : **2**



Q.3 Select the correct mirror image of the given figure when the mirror is placed at MN as shown below.

F D 8 P C Q



Ans

- ✓ 1. Q C P 8 D F
- ✗ 2. Q C P 8 D F
- ✗ 3. Q C P 8 D E
- ✗ 4. Q C P 8 D F

Question Type : MCQ

Question ID : 264330140111

Option 1 ID : 264330548826

Option 2 ID : 264330548825

Option 3 ID : 264330548824

Option 4 ID : 264330548823

Status : Answered

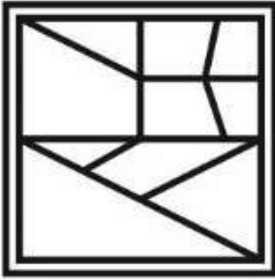
Chosen Option : 1

Q.4 Select the option figure in which the given figure is embedded. (rotation is NOT allowed)



Ans

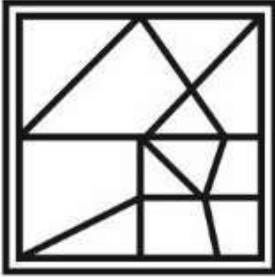
✗ 1.



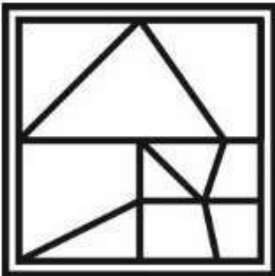
✓ 2.



✗ 3.



✗ 4.



Question Type : MCQ

Question ID : 264330139545

Option 1 ID : 264330546595

Option 2 ID : 264330546597

Option 3 ID : 264330546598

Option 4 ID : 264330546596

Status : Answered

Chosen Option : 2

**Q.5** Select the option that is related to the sixth number in the same way as the first number is related to the second number and third number is related to fourth number.

22 : 484 :: 23 : 529 :: ? : 729

- Ans**
- 1. 31
  - 2. 29
  - 3. 27
  - 4. 26

Question Type : **MCQ**  
Question ID : **264330139984**  
Option 1 ID : **264330548315**  
Option 2 ID : **264330548316**  
Option 3 ID : **264330548318**  
Option 4 ID : **264330548317**  
Status : **Answered**  
Chosen Option : **3**

**Q.6** In the following question, select the missing number of the given series.

300, 271, 242, 213, 184, ?

- Ans**
- 1. 160
  - 2. 155
  - 3. 150
  - 4. 153

Question Type : **MCQ**  
Question ID : **264330140987**  
Option 1 ID : **264330552298**  
Option 2 ID : **264330552295**  
Option 3 ID : **264330552296**  
Option 4 ID : **264330552297**  
Status : **Answered**  
Chosen Option : **2**

**Q.7** In a certain code language, 'DMCGH' is written as 'CKZCC'. How will 'TLFUP' be written in that language?

- Ans**
- 1. SJCQQ
  - 2. SJCKQ
  - 3. SCJQK
  - 4. SJCQK

Question Type : **MCQ**  
Question ID : **264330140078**  
Option 1 ID : **264330548693**  
Option 2 ID : **264330548692**  
Option 3 ID : **264330548691**  
Option 4 ID : **264330548694**  
Status : **Answered**  
Chosen Option : **4**

Q.8 In the following question, select the missing number of the given series.

500, 497, 488, 461, 380, ?

- Ans
- 1. 130
  - 2. 137
  - 3. 140
  - 4. 141

Question Type : MCQ  
Question ID : 264330140968  
Option 1 ID : 264330552219  
Option 2 ID : 264330552220  
Option 3 ID : 264330552221  
Option 4 ID : 264330552222  
Status : Answered  
Chosen Option : 2

Q.9 Which of the mathematical signs should be interchanged in the below equation to make it mathematically correct?  
 $72 \div 4 \times 64 + 8 - 24 = 80$

- Ans
- 1.  $\div$  and  $\times$
  - 2.  $-$  and  $+$
  - 3.  $\div$  and  $+$
  - 4.  $-$  and  $\times$

Question Type : MCQ  
Question ID : 264330140487  
Option 1 ID : 264330550327  
Option 2 ID : 264330550329  
Option 3 ID : 264330550328  
Option 4 ID : 264330550330  
Status : Answered  
Chosen Option : 3

Q.10 Seven girls Mansi, Shweta, Monika, Payal, Aarti, Kajal and Laxmi are sitting around a circular table facing towards the centre (not necessarily in the same order). Payal is to immediate left of Mansi. Mansi is third to the left of Laxmi. Kajal is not an immediate neighbour of Aarti. Shweta is second to the left of Kajal. Who is sitting third to the left of Monika?

- Ans
- 1. Payal
  - 2. Kajal
  - 3. Shweta
  - 4. Aarti

Question Type : MCQ  
Question ID : 264330139554  
Option 1 ID : 264330546633  
Option 2 ID : 264330546631  
Option 3 ID : 264330546634  
Option 4 ID : 264330546632  
Status : Answered  
Chosen Option : 3

**Q.11** Which two signs should be interchanged to make the given equation correct?

$$68 + 2 - 42 + 108 \times 12 = 103$$

- Ans**
- 1. = and -
  - 2. + and -
  - 3. + and  $\times$
  - 4. + and +

Question Type : **MCQ**

Question ID : **264330140007**

Option 1 ID : **264330548408**

Option 2 ID : **264330548410**

Option 3 ID : **264330548407**

Option 4 ID : **264330548409**

Status : **Answered**

Chosen Option : **3**

**Q.12** Two statements are given followed by two conclusions numbered I and II. Assuming the statements to be true, even if they seem to be at variance with commonly known facts, decide which of the conclusions logically follow(s) from the statements.

Statements:

All beds are pillows.

No pillow is a blanket.

Conclusions:

I. Some pillows are beds.

II. No bed is a blanket.

- Ans**
- 1. Neither conclusion I nor II follows
  - 2. Only conclusion II follows
  - 3. Both conclusions I and II follow
  - 4. Only conclusion I follows

Question Type : **MCQ**

Question ID : **264330140021**

Option 1 ID : **264330548466**

Option 2 ID : **264330548464**

Option 3 ID : **264330548465**

Option 4 ID : **264330548463**

Status : **Answered**

Chosen Option : **3**

**Q.13** Select the option that is related to the third letter cluster in the same way as the second letter cluster is related to the first letter cluster.

AP : CN :: RT : ?

- Ans**
- 1. RT
  - 2. TS
  - 3. TR
  - 4. SR

Question Type : **MCQ**

Question ID : **264330138768**

Option 1 ID : **264330543679**

Option 2 ID : **264330543682**

Option 3 ID : **264330543680**

Option 4 ID : **264330543681**

Status : **Answered**

Chosen Option : **3**

**Q.14** Select the set in which the numbers are related in the same way as are the numbers of the following sets.(NOTE : Operations should be performed on the whole numbers, without breaking down the numbers into its constituent digits. E.g 13 – Operations on 13 such as adding / subtracting /multiplying etc. to 13 can be performed. Breaking down 13 into 1 and 3 and then performing mathematical operations on 1 and 3 is not allowed)  
(27, 9, 3)  
(125, 25, 5)

- Ans**  1. (512, 64, 8)  
 2. (243, 49, 7)  
 3. (739, 81, 9)  
 4. (206, 36, 6)

Question Type : **MCQ**  
Question ID : **264330140446**  
Option 1 ID : **264330550166**  
Option 2 ID : **264330550164**  
Option 3 ID : **264330550165**  
Option 4 ID : **264330550163**  
Status : **Answered**  
Chosen Option : **1**

**Q.15** In a certain code language, 'MYNB' is coded as '2468', 'ZNBA' is coded as '5687', 'QRMA' is coded as '1253'. What is the code for 'Z' in that code language?

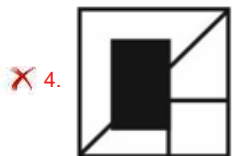
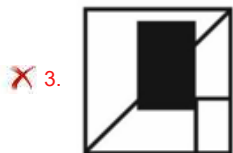
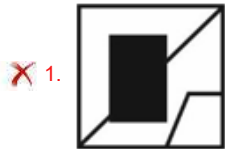
- Ans**  1. 7  
 2. 5  
 3. 6  
 4. 8

Question Type : **MCQ**  
Question ID : **264330140057**  
Option 1 ID : **264330548610**  
Option 2 ID : **264330548608**  
Option 3 ID : **264330548609**  
Option 4 ID : **264330548607**  
Status : **Answered**  
Chosen Option : **1**

Q.16 Which answer figure will complete the pattern in the question figure?



Ans



Question Type : MCQ

Question ID : 264330140995

Option 1 ID : 264330552327

Option 2 ID : 264330552328

Option 3 ID : 264330552329

Option 4 ID : 264330552330

Status : Answered

Chosen Option : 2

Q.17 Which of the following letter cluster will replace the question mark (?) in the given series?

DH, EJ, FL, GN, ?

Ans ✗ 1. PH

✗ 2. HN

✗ 3. GM

✓ 4. HP

Question Type : MCQ

Question ID : 264330140412

Option 1 ID : 264330550029

Option 2 ID : 264330550028

Option 3 ID : 264330550030

Option 4 ID : 264330550027

Status : Answered

Chosen Option : 4

**Q.18** In the following question below are given some statements followed by some conclusions based on those statements. Taking the given statements to be true even if they seem to be at variance from commonly known facts. Read all the conclusions and then decide which of the given conclusion logically follows the given statements.

Statements:

I. Some pencil are paper.

II. No book is paper.

Conclusion:

I. Some pencil are not book.

II. All book are pencil.

III. Some paper are pencil.

- Ans**
- 1. Both conclusions I and III follows
  - 2. Only conclusion II follows
  - 3. All conclusion follows
  - 4. Both conclusions II and III follows

Question Type : **MCQ**

Question ID : **264330139558**

Option 1 ID : **264330546648**

Option 2 ID : **264330546647**

Option 3 ID : **264330546649**

Option 4 ID : **264330546650**

Status : **Answered**

Chosen Option : **1**

**Q.19** Seven students of a school, E, F, G, H, I, J, and K have all obtained different scores. E's score was less than only one student. K scored more than only one person. H's score was more than I's but less than E's. Neither F nor G received the lowest score. I's score was more than K's. Who received the least score?

- Ans**
- 1. F
  - 2. E
  - 3. I
  - 4. J

Question Type : **MCQ**

Question ID : **264330139999**

Option 1 ID : **264330548378**

Option 2 ID : **264330548376**

Option 3 ID : **264330548377**

Option 4 ID : **264330548375**

Status : **Answered**

Chosen Option : **4**



**Q.20** Words given on the left side of (::) are related with each other by some Logic/Rule/Relation. Select the missing word/word pair on the right side of (::) from the given alternatives based on the same Logic/Rule/Relation.

Clerk : Office :: ?

- Ans**
- ✓ 1. Warrior : Battle field
  - ✗ 2. Hospital : Farmer
  - ✗ 3. Shop : Grocer
  - ✗ 4. Garage : Mechanic

Question Type : **MCQ**

Question ID : **264330140958**

Option 1 ID : **264330552179**

Option 2 ID : **264330552182**

Option 3 ID : **264330552180**

Option 4 ID : **264330552181**

Status : **Answered**

Chosen Option : 1

Section : **General Awareness**

**Q.1** The National Literacy Mission (NLM) was set up in \_\_\_\_\_.

- Ans**
- ✗ 1. 1971
  - ✗ 2. 1982
  - ✓ 3. 1988
  - ✗ 4. 1998

Question Type : **MCQ**

Question ID : **264330140917**

Option 1 ID : **264330552016**

Option 2 ID : **264330552015**

Option 3 ID : **264330552017**

Option 4 ID : **264330552018**

Status : **Answered**

Chosen Option : 2

**Q.2** भारत का संविधान अपने \_\_\_\_\_ को वोट डालने का अधिकार देता है।

- Ans**
- ✗ 1. सभी नागरिक और गैर-नागरिकों
  - ✗ 2. सभी करदाताओं
  - ✗ 3. सभी पुरुष नागरिकों
  - ✓ 4. सभी वयस्क नागरिकों

Question Type : **MCQ**

Question ID : **264330140279**

Option 1 ID : **264330549498**

Option 2 ID : **264330549495**

Option 3 ID : **264330549496**

Option 4 ID : **264330549497**

Status : **Answered**

Chosen Option : 4

Q.3 Which Sultan was defeated by Babur in the first battle of Panipat 1526?

- Ans
- 1. Sikandar Lodi
  - 2. Mahmud Lodi
  - 3. Ibrahim Lodi
  - 4. Bahlul Lodi

Question Type : MCQ  
Question ID : 264330138968  
Option 1 ID : 264330544480  
Option 2 ID : 264330544482  
Option 3 ID : 264330544481  
Option 4 ID : 264330544479  
Status : Answered  
Chosen Option : 3

Q.4 Which among the following minerals is essential for the synthesis of thyroid hormones (thyroxine)?

- Ans
- 1. Iron
  - 2. Iodine
  - 3. Selenium
  - 4. Chromium

Question Type : MCQ  
Question ID : 264330140324  
Option 1 ID : 264330549676  
Option 2 ID : 264330549675  
Option 3 ID : 264330549677  
Option 4 ID : 264330549678  
Status : Answered  
Chosen Option : 2

Q.5 Which of the following is an example of joint sector Industry?

- Ans
- 1. Steel Authority of India Limited
  - 2. Hindustan Aeronautics Limited
  - 3. Maruti Udyog Limited
  - 4. Anand Milk Union Limited

Question Type : MCQ  
Question ID : 264330140326  
Option 1 ID : 264330549683  
Option 2 ID : 264330549684  
Option 3 ID : 264330549685  
Option 4 ID : 264330549686  
Status : Answered  
Chosen Option : 2

**Q.6** The reign of Kumaragupta I the son and successor of \_\_\_\_\_ was one of peace and relative inactivity.

- Ans**
- 1. Chandragupta I
  - 2. Skandagupta
  - 3. Chandragupta II
  - 4. Samudragupta

Question Type : **MCQ**  
Question ID : **264330140330**  
Option 1 ID : **264330549699**  
Option 2 ID : **264330549702**  
Option 3 ID : **264330549701**  
Option 4 ID : **264330549700**  
Status : **Answered**  
Chosen Option : **4**

**Q.7** Which Indian ministry introduced the Farm Laws Repeal Bill, 2021?

- Ans**
- 1. Ministry of Agriculture & Farmers Welfare
  - 2. Ministry of Finance
  - 3. Ministry of Rural Development
  - 4. Ministry of Panchayati Raj

Question Type : **MCQ**  
Question ID : **264330140677**  
Option 1 ID : **264330551055**  
Option 2 ID : **264330551056**  
Option 3 ID : **264330551057**  
Option 4 ID : **264330551058**  
Status : **Answered**  
Chosen Option : **1**

**Q.8** Which famous Indian dancer was the founder and director of the Darpana Academy of Performing Arts and received Padma Shri in 1965?

- Ans**
- 1. Rukmini Devi Arundale
  - 2. Mrinalini Sarabhai
  - 3. Prabhu Deva
  - 4. Pandit Birju Maharaj

Question Type : **MCQ**  
Question ID : **264330140770**  
Option 1 ID : **264330551429**  
Option 2 ID : **264330551427**  
Option 3 ID : **264330551428**  
Option 4 ID : **264330551430**  
Status : **Answered**  
Chosen Option : **4**

Q.9 Which is the governing body for Badminton in India?

- Ans
- 1. Indian Badminton Agency
  - 2. Indian Badminton Association
  - 3. Badminton Association of India
  - 4. Badminton Agency of India

Question Type : **MCQ**  
Question ID : **264330138975**  
Option 1 ID : **264330544510**  
Option 2 ID : **264330544509**  
Option 3 ID : **264330544507**  
Option 4 ID : **264330544508**  
Status : **Answered**  
Chosen Option : **3**

Q.10 Which of the following is the instrument of monetary policy used by the RBI?

- Ans
- 1. Base rate
  - 2. Call rate
  - 3. Bank rate
  - 4. Discount rate

Question Type : **MCQ**  
Question ID : **264330141070**  
Option 1 ID : **264330552628**  
Option 2 ID : **264330552629**  
Option 3 ID : **264330552627**  
Option 4 ID : **264330552630**  
Status : **Answered**  
Chosen Option : **4**

Q.11 In which of the following regions, a cyclone is known as "Typhoon"?

- Ans
- 1. India
  - 2. Japan
  - 3. Canada
  - 4. Brazil

Question Type : **MCQ**  
Question ID : **264330139688**  
Option 1 ID : **264330547169**  
Option 2 ID : **264330547170**  
Option 3 ID : **264330547167**  
Option 4 ID : **264330547168**  
Status : **Answered**  
Chosen Option : **2**

Q.12 The Ganesh-rath is one of the finest monolithic temples located in\_\_\_\_\_.

- Ans
- 1. Somnath
  - 2. Mahabalipuram
  - 3. Varanasi
  - 4. Nagpur

Question Type : **MCQ**  
Question ID : **264330140705**  
Option 1 ID : **264330551169**  
Option 2 ID : **264330551167**  
Option 3 ID : **264330551170**  
Option 4 ID : **264330551168**  
Status : **Answered**  
Chosen Option : **2**

Q.13 Which of the following is an example of micronutrient supplied by soil?

- Ans
- 1. Potassium
  - 2. Iron
  - 3. Calcium
  - 4. Sulphur

Question Type : **MCQ**  
Question ID : **264330139686**  
Option 1 ID : **264330547160**  
Option 2 ID : **264330547161**  
Option 3 ID : **264330547159**  
Option 4 ID : **264330547162**  
Status : **Answered**  
Chosen Option : **4**

Q.14 Who is the author of the tragic story, "Othello"?

- Ans
- 1. William Shakespeare
  - 2. William Wordsworth
  - 3. Johannes Gutenberg
  - 4. Charles Dickens

Question Type : **MCQ**  
Question ID : **264330140693**  
Option 1 ID : **264330551120**  
Option 2 ID : **264330551119**  
Option 3 ID : **264330551121**  
Option 4 ID : **264330551122**  
Status : **Answered**  
Chosen Option : **2**

Q.15 The festival of Holika Dahan marks the \_\_\_\_\_.

- Ans
- 1. victory of good over evil
  - 2. beginning of sowing season
  - 3. victory of Durga's over mahishasura
  - 4. beginning of a new year

Question Type : MCQ  
Question ID : 264330140679  
Option 1 ID : 264330551066  
Option 2 ID : 264330551065  
Option 3 ID : 264330551064  
Option 4 ID : 264330551063  
Status : Answered  
Chosen Option : 1

Q.16 India shares its boundary with which of the following countries in the east of West Bengal?

- Ans
- 1. Pakistan
  - 2. Bangladesh
  - 3. China
  - 4. Afghanistan

Question Type : MCQ  
Question ID : 264330141058  
Option 1 ID : 264330552579  
Option 2 ID : 264330552582  
Option 3 ID : 264330552581  
Option 4 ID : 264330552580  
Status : Answered  
Chosen Option : 2

Q.17 Badruddin Tyabji addressed the congress as president in \_\_\_\_\_.

- Ans
- 1. 1887
  - 2. 1888
  - 3. 1885
  - 4. 1886

Question Type : MCQ  
Question ID : 264330139697  
Option 1 ID : 264330547205  
Option 2 ID : 264330547206  
Option 3 ID : 264330547203  
Option 4 ID : 264330547204  
Status : Answered  
Chosen Option : 2

Q.18 When the litmus solution is neither acidic nor basic, its colour is \_\_\_\_\_.

- Ans
- 1. green
  - 2. red
  - 3. purple
  - 4. blue

Question Type : **MCQ**  
Question ID : **264330138962**  
Option 1 ID : **264330544456**  
Option 2 ID : **264330544458**  
Option 3 ID : **264330544457**  
Option 4 ID : **264330544455**  
Status : **Answered**  
Chosen Option : **3**

Q.19 With respect to sports, NADA stands for \_\_\_\_\_.

- Ans
- 1. National Anti-Doping Association
  - 2. National Autonomous Doping Agency
  - 3. National Anti-Doping Agency
  - 4. National Autonomous Doping Association

Question Type : **MCQ**  
Question ID : **264330139726**  
Option 1 ID : **264330547322**  
Option 2 ID : **264330547321**  
Option 3 ID : **264330547320**  
Option 4 ID : **264330547319**  
Status : **Answered**  
Chosen Option : **1**

Q.20 Which ministry is related with “Deep Ocean Mission”?

- Ans
- 1. Ministry of Earth Sciences
  - 2. Ministry of Environment, Forest and Climate change
  - 3. Ministry of Mines
  - 4. Ministry of Defence

Question Type : **MCQ**  
Question ID : **264330138980**  
Option 1 ID : **264330544530**  
Option 2 ID : **264330544529**  
Option 3 ID : **264330544528**  
Option 4 ID : **264330544527**  
Status : **Answered**  
Chosen Option : **2**

Q.21 Ali Akbar Khan is associated with which of these instruments?

- Ans
- 1. Shehnai
  - 2. Sarod
  - 3. Tabla
  - 4. Sitar

Question Type : MCQ

Question ID : 264330139679

Option 1 ID : 264330547133

Option 2 ID : 264330547134

Option 3 ID : 264330547132

Option 4 ID : 264330547131

Status : Answered

Chosen Option : 2

Q.22 What is the meeting point of the Western Ghats and the Eastern Ghats?

- Ans
- 1. Nilgiri Hills
  - 2. Palkonda Hills
  - 3. Cardamom Hills
  - 4. Nallamala Hills

Question Type : MCQ

Question ID : 264330140761

Option 1 ID : 264330551394

Option 2 ID : 264330551392

Option 3 ID : 264330551393

Option 4 ID : 264330551391

Status : Answered

Chosen Option : 1

Q.23 Who has been appointed the Chairman of Staff Selection Commission (SSC) in February 2022?

- Ans
- 1. Rakesh Sharma
  - 2. K.S. Mani
  - 3. Vineet Joshi
  - 4. S. Kishore

Question Type : MCQ

Question ID : 264330139731

Option 1 ID : 264330547341

Option 2 ID : 264330547340

Option 3 ID : 264330547342

Option 4 ID : 264330547339

Status : Answered

Chosen Option : 4



Q.24 \_\_\_\_\_ poses are depicted on the gopurams of the Chidambaram temple (Tamil Nadu).

- Ans
- 1. Bharatnatyam
  - 2. Kathak
  - 3. Kathakali
  - 4. Mohiniyattam

Question Type : MCQ  
Question ID : 264330140933  
Option 1 ID : 264330552079  
Option 2 ID : 264330552080  
Option 3 ID : 264330552081  
Option 4 ID : 264330552082  
Status : Answered  
Chosen Option : 1

Q.25 Which freedom fighter was also the first woman to become the Governor of Uttar Pradesh State?

- Ans
- 1. Rajkumari Amrit Kaur
  - 2. Rani Lakshmi Bai
  - 3. Sarojini Naidu
  - 4. Kasturba Gandhi

Question Type : MCQ  
Question ID : 264330140766  
Option 1 ID : 264330551411  
Option 2 ID : 264330551412  
Option 3 ID : 264330551413  
Option 4 ID : 264330551414  
Status : Answered  
Chosen Option : 1

Section : English Language and Comprehension

Q.1 Improve the underlined part of the sentence. Choose 'No improvement' as an answer if the sentence is grammatically correct.

You have exactly one hour to completes the exam.

- Ans
- 1. No improvement
  - 2. hour to completed
  - 3. hourly to complete
  - 4. hour to complete

Question Type : MCQ  
Question ID : 264330141168  
Option 1 ID : 264330553018  
Option 2 ID : 264330553016  
Option 3 ID : 264330553017  
Option 4 ID : 264330553015  
Status : Answered  
Chosen Option : 4

Q.2 Select the most appropriate meaning of the given idiom.

Ethnic Cleansing

Ans  1.

Worshiping of a certain ethnic or religious group on a massive scale

2.

Killing of a certain ethnic or religious group on a massive scale

3. One who was previously unknown and is now prominent

4. A large number of people either falling ill or dying

Question Type : MCQ

Question ID : 264330135839

Option 1 ID : 264330532225

Option 2 ID : 264330532226

Option 3 ID : 264330532223

Option 4 ID : 264330532224

Status : Answered

Chosen Option : 3

Q.3 Select the word segment that substitutes (replaces) the bracketed word segment correctly and completes the sentence meaningfully. Select the option 'no correction required' if the sentence is correct as given.

They (are waiting) for the bus when the accident happened.

Ans  1. No correction required

2. have waited

3. were waiting

4. have been waiting

Question Type : MCQ

Question ID : 264330136566

Option 1 ID : 264330535002

Option 2 ID : 264330535001

Option 3 ID : 264330535000

Option 4 ID : 264330534999

Status : Answered

Chosen Option : 3

Q.4 Select the most appropriate option to fill in the blank.

After the first defeats he had to \_\_\_\_\_ from France with the empress.

Ans  1. Fleet

2. Fling

3. Flee

4. Flea

Question Type : MCQ

Question ID : 264330141215

Option 1 ID : 264330553196

Option 2 ID : 264330553198

Option 3 ID : 264330553195

Option 4 ID : 264330553197

Status : Answered

Chosen Option : 3

**Q.5** In the following question, out of the given four alternatives, select the alternative which best expresses the meaning of the Idiom/Phrase.

Bite the bullet.

- Ans**
- 1. To bring harm to someone
  - 2. To ruin oneself
  - 3. Peace talking
  - 4. Decide to do something that is difficult

Question Type : **MCQ**  
Question ID : **264330135658**  
Option 1 ID : **264330531529**  
Option 2 ID : **264330531528**  
Option 3 ID : **264330531527**  
Option 4 ID : **264330531530**  
Status : **Answered**  
Chosen Option : **3**

**Q.6** Select the word from the options which is exactly opposite in meaning to the bracketed word given in the sentence below.

Ruffin is seeking that (harmony) of humour in truth-telling amid despair.

- Ans**
- 1. Conformity
  - 2. Discord
  - 3. Sectional
  - 4. Determination

Question Type : **MCQ**  
Question ID : **264330136284**  
Option 1 ID : **264330533915**  
Option 2 ID : **264330533918**  
Option 3 ID : **264330533917**  
Option 4 ID : **264330533916**  
Status : **Answered**  
Chosen Option : **2**

**Q.7** Identify the segment that contains a grammatical error. If there is no error, select 'No error'.

I could not make out what / it is, for the wind was / rustling the corn-shocks.

- Ans**
- 1. I could not make out what
  - 2. No error
  - 3. rustling the corn-shocks.
  - 4. it is, for the wind was

Question Type : **MCQ**  
Question ID : **264330135691**  
Option 1 ID : **264330531655**  
Option 2 ID : **264330531658**  
Option 3 ID : **264330531657**  
Option 4 ID : **264330531656**  
Status : **Answered**  
Chosen Option : **4**

**Q.8** Select the most appropriate option to fill in the blank.

Inclusive of private packs it is difficult to \_\_\_\_\_ more than an overall total of 60 drag and/or bloodhound packs.

- Ans**
- 1. haemorrhage
  - 2. package
  - 3. envisage
  - 4. discourage

Question Type : **MCQ**  
Question ID : **264330136369**  
Option 1 ID : **264330534245**  
Option 2 ID : **264330534243**  
Option 3 ID : **264330534246**  
Option 4 ID : **264330534244**  
Status : **Answered**  
Chosen Option : **3**

**Q.9** Find the part of the given sentence that has an error in it. If there is no error, choose 'No error'.

Humans are drawn to foods that is fatty, sweet, rich and complex.

- Ans**
- 1. No error
  - 2. sweet, rich and complex.
  - 3. Humans are drawn to
  - 4. foods that is fatty,

Question Type : **MCQ**  
Question ID : **264330141211**  
Option 1 ID : **264330553182**  
Option 2 ID : **264330553181**  
Option 3 ID : **264330553179**  
Option 4 ID : **264330553180**  
Status : **Answered**  
Chosen Option : **4**

**Q.10** Select the most appropriate option to fill in the blank.

Someone thinks Charles should \_\_\_\_\_ the British throne and come out here instead.

- Ans**
- 1. reciprocate
  - 2. abdicate
  - 3. decorticate
  - 4. authenticate

Question Type : **MCQ**  
Question ID : **264330135669**  
Option 1 ID : **264330531573**  
Option 2 ID : **264330531572**  
Option 3 ID : **264330531574**  
Option 4 ID : **264330531571**  
Status : **Answered**  
Chosen Option : **2**

**Q.11** Select the most appropriate option to fill in the blank.  
\_\_\_\_\_ in biotechnology and medicine have resulted in higher expectancy rate and lower mortality rate.

- Ans**
- 1. Arrogate
  - 2. Advancements
  - 3. Aversions
  - 4. Saturation

Question Type : **MCQ**  
Question ID : **264330136767**  
Option 1 ID : **264330535771**  
Option 2 ID : **264330535773**  
Option 3 ID : **264330535774**  
Option 4 ID : **264330535772**  
Status : **Answered**  
Chosen Option : **2**

**Q.12** Identify the segment that contains a grammatical error. If there is no error, select 'No error'.  
Far, far at the top of them, / a shower of bright red sparks / had flared among the stars.

- Ans**
- 1. Far, far at the top of them,
  - 2. No error
  - 3. a shower of bright red sparks
  - 4. had flared among the stars.

Question Type : **MCQ**  
Question ID : **264330136109**  
Option 1 ID : **264330533243**  
Option 2 ID : **264330533246**  
Option 3 ID : **264330533244**  
Option 4 ID : **264330533245**  
Status : **Answered**  
Chosen Option : **2**

**Q.13** Select the word segment that substitutes (replaces) the bracketed word segment correctly and completes the sentence meaningfully. Select the option 'no correction required' if the sentence is correct as given.  
Christian turned round and (strided off into) the blackness and I got into my car.

- Ans**
- 1. strode off
  - 2. strode of
  - 3. strided of
  - 4. No correction required

Question Type : **MCQ**  
Question ID : **264330135745**  
Option 1 ID : **264330531865**  
Option 2 ID : **264330531864**  
Option 3 ID : **264330531863**  
Option 4 ID : **264330531866**  
Status : **Answered**  
Chosen Option : **1**

Q.14 Select the most appropriate word for the given group of words.

A person who has money especially invested in business

- Ans
- 1. Industrialist
  - 2. Minimalist
  - 3. Capitalist
  - 4. Leftist

Question Type : **MCQ**  
Question ID : **264330136150**  
Option 1 ID : **264330533402**  
Option 2 ID : **264330533400**  
Option 3 ID : **264330533399**  
Option 4 ID : **264330533401**  
Status : **Answered**  
Chosen Option : **3**

Q.15 Select the most appropriate word for the given group of words.

Ethically good behaviour one has

- Ans
- 1. Belief
  - 2. Virtual
  - 3. Virtue
  - 4. Values

Question Type : **MCQ**  
Question ID : **264330136424**  
Option 1 ID : **264330534458**  
Option 2 ID : **264330534455**  
Option 3 ID : **264330534457**  
Option 4 ID : **264330534456**  
Status : **Answered**  
Chosen Option : **3**

Q.16 Select the most appropriate synonym of the given word.

Contradict

- Ans
- 1. Permit
  - 2. Contravene
  - 3. Verify
  - 4. Vouch

Question Type : **MCQ**  
Question ID : **264330135757**  
Option 1 ID : **264330531907**  
Option 2 ID : **264330531909**  
Option 3 ID : **264330531908**  
Option 4 ID : **264330531910**  
Status : **Answered**  
Chosen Option : **2**

Q.17 Choose the incorrectly spelt word.

- Ans
- 1. Sober
  - 2. Major
  - 3. Graviety
  - 4. Pattern

Question Type : MCQ  
Question ID : 264330135174  
Option 1 ID : 264330529628  
Option 2 ID : 264330529627  
Option 3 ID : 264330529630  
Option 4 ID : 264330529629  
Status : Answered  
Chosen Option : 3

Q.18 Select the most appropriate synonym to substitute the bracketed word in the given sentence.

Unfortunately he is merely the head of a rabble of warlords who are (firmly) rooted in the past.

- Ans
- 1. Feebly
  - 2. Languidly
  - 3. Stiffly
  - 4. Impotently

Question Type : MCQ  
Question ID : 264330136204  
Option 1 ID : 264330533608  
Option 2 ID : 264330533609  
Option 3 ID : 264330533607  
Option 4 ID : 264330533610  
Status : Answered  
Chosen Option : 3

Q.19 Select the wrongly spelt word.

- Ans
- 1. palatial
  - 2. scurvy
  - 3. paneche
  - 4. oblique

Question Type : MCQ  
Question ID : 264330135686  
Option 1 ID : 264330531636  
Option 2 ID : 264330531635  
Option 3 ID : 264330531637  
Option 4 ID : 264330531638  
Status : Answered  
Chosen Option : 3

Q.20 Select the most appropriate antonym of the given word.

Abundant

- Ans
- 1. Unconscious
  - 2. Indefinite
  - 3. Meagre
  - 4. Unreliable

Question Type : MCQ

Question ID : 264330136501

Option 1 ID : 264330534748

Option 2 ID : 264330534750

Option 3 ID : 264330534747

Option 4 ID : 264330534749

Status : Answered

Chosen Option : 3

**Comprehension:**

In the following passage some words have been deleted. Fill in the blanks with the help of the alternatives given. Select the most appropriate option for each number.

I wished I (1) \_\_\_\_\_ teach this to Dhri as well, but I feared it was too (2) \_\_\_\_\_. Already he had started thinking like the men (3) \_\_\_\_\_ him, embracing the world of the court with open arms. And I? Each day I thought less and (4) \_\_\_\_\_ like the women around me. Each day I moved further from them (5) \_\_\_\_\_ a dusky solitude.

SubQuestion No : 21

Q.21 Select the most appropriate option to fill in blank number 1.

- Ans
- 1. could
  - 2. would
  - 3. can
  - 4. may

Question Type : MCQ

Question ID : 264330136170

Option 1 ID : 264330533476

Option 2 ID : 264330533475

Option 3 ID : 264330533477

Option 4 ID : 264330533478

Status : Answered

Chosen Option : 2



**Comprehension:**

In the following passage some words have been deleted. Fill in the blanks with the help of the alternatives given. Select the most appropriate option for each number.

I wished I (1) \_\_\_\_\_ teach this to Dhri as well, but I feared it was too (2) \_\_\_\_\_. Already he had started thinking like the men (3) \_\_\_\_\_ him, embracing the world of the court with open arms. And I? Each day I thought less and (4) \_\_\_\_\_ like the women around me. Each day I moved further from them (5) \_\_\_\_\_ a dusky solitude.

**SubQuestion No : 22**

**Q.22** Select the most appropriate option to fill in blank number 2.

- Ans**
- 1. early
  - 2. last minute
  - 3. late
  - 4. later

Question Type : **MCQ**  
Question ID : **264330136171**  
Option 1 ID : **264330533479**  
Option 2 ID : **264330533481**  
Option 3 ID : **264330533482**  
Option 4 ID : **264330533480**  
Status : **Answered**  
Chosen Option : **1**

**Comprehension:**

In the following passage some words have been deleted. Fill in the blanks with the help of the alternatives given. Select the most appropriate option for each number.

I wished I (1) \_\_\_\_\_ teach this to Dhri as well, but I feared it was too (2) \_\_\_\_\_. Already he had started thinking like the men (3) \_\_\_\_\_ him, embracing the world of the court with open arms. And I? Each day I thought less and (4) \_\_\_\_\_ like the women around me. Each day I moved further from them (5) \_\_\_\_\_ a dusky solitude.

**SubQuestion No : 23**

**Q.23** Select the most appropriate option to fill in blank number 3.

- Ans**
- 1. revolving
  - 2. surmounting
  - 3. around
  - 4. rotating

Question Type : **MCQ**  
Question ID : **264330136172**  
Option 1 ID : **264330533484**  
Option 2 ID : **264330533486**  
Option 3 ID : **264330533483**  
Option 4 ID : **264330533485**  
Status : **Answered**  
Chosen Option : **3**

**Comprehension:**

In the following passage some words have been deleted. Fill in the blanks with the help of the alternatives given. Select the most appropriate option for each number.

I wished I (1) \_\_\_\_\_ teach this to Dhri as well, but I feared it was too (2) \_\_\_\_\_. Already he had started thinking like the men (3) \_\_\_\_\_ him, embracing the world of the court with open arms. And I? Each day I thought less and (4) \_\_\_\_\_ like the women around me. Each day I moved further from them (5) \_\_\_\_\_ a dusky solitude.

**SubQuestion No : 24**

**Q.24** Select the most appropriate option to fill in blank number 4.

- Ans**
- 1. more
  - 2. little
  - 3. less
  - 4. limited

Question Type : **MCQ**

Question ID : **264330136173**

Option 1 ID : **264330533487**

Option 2 ID : **264330533488**

Option 3 ID : **264330533489**

Option 4 ID : **264330533490**

Status : **Answered**

Chosen Option : **4**

**Comprehension:**

In the following passage some words have been deleted. Fill in the blanks with the help of the alternatives given. Select the most appropriate option for each number.

I wished I (1) \_\_\_\_\_ teach this to Dhri as well, but I feared it was too (2) \_\_\_\_\_. Already he had started thinking like the men (3) \_\_\_\_\_ him, embracing the world of the court with open arms. And I? Each day I thought less and (4) \_\_\_\_\_ like the women around me. Each day I moved further from them (5) \_\_\_\_\_ a dusky solitude.

**SubQuestion No : 25**

**Q.25** Select the most appropriate option to fill in blank number 5.

- Ans**
- 1. on to
  - 2. up to
  - 3. inner
  - 4. into

Question Type : **MCQ**

Question ID : **264330136174**

Option 1 ID : **264330533491**

Option 2 ID : **264330533494**

Option 3 ID : **264330533492**

Option 4 ID : **264330533493**

Status : **Answered**

Chosen Option : **2**