

Multi Tasking Non Technical Staff and Havalдар CBIC and CBN Examination 2022

Roll Number	
Candidate Name	
Venue Name	
Exam Date	04/05/2023
Exam Time	12:00 PM - 2:00 PM
Subject	MTS Non Tech Havalдар CBIC and CBN Examination 2022

Section : Numerical and Mathematical Ability

Q.1 The value of $96 \text{ of } 10 - 40 + 19 \div \{[70 + (40 - 22) \div 3] \div 4\}$ is :

- Ans
- 1. 880
 - 2. 900
 - 3. 800
 - 4. 921

Question Type : MCQ

Question ID : 264330135065

Option 1 ID : 264330529195

Option 2 ID : 264330529196

Option 3 ID : 264330529197

Option 4 ID : 264330529198

Status : Answered

Chosen Option : 4

Q.2 At what rate of compound interest per annum, a sum of Rs.20000 becomes Rs.23152.50 in 1 year 6 months compounded half-yearly?

- Ans
- 1. 10% per annum
 - 2. 5% per annum
 - 3. 12% per annum
 - 4. 8% per annum

Question Type : MCQ

Question ID : 264330138101

Option 1 ID : 264330541012

Option 2 ID : 264330541011

Option 3 ID : 264330541014

Option 4 ID : 264330541013

Status : Not Answered

Chosen Option : --

Q.3 If Aman travels with 12.5 percent less speed of his usual speed, then he will reach 9 minutes late. What is the usual time taken by him?

- Ans**
- 1. 63 minutes
 - 2. 70 minutes
 - 3. 56 minutes
 - 4. 49 minutes

Question Type : **MCQ**

Question ID : **264330139058**

Option 1 ID : **264330544841**

Option 2 ID : **264330544842**

Option 3 ID : **264330544840**

Option 4 ID : **264330544839**

Status : **Answered**

Chosen Option : **1**

Q.4 If $(9g + 2h) : (9g - 2h) = 9 : 2$, then what is the value of $g : h$?

- Ans**
- 1. 22 : 63
 - 2. 18 : 35
 - 3. 45 : 19
 - 4. 35 : 24

Question Type : **MCQ**

Question ID : **264330139064**

Option 1 ID : **264330544865**

Option 2 ID : **264330544863**

Option 3 ID : **264330544866**

Option 4 ID : **264330544864**

Status : **Answered**

Chosen Option : **1**

Q.5 A trader sells an article at 20 percent profit. If he buys it at half of the cost price and sells at the same selling price as before, then what will be the profit percentage?

- Ans**
- 1. 50 percent
 - 2. 150 percent
 - 3. 100 percent
 - 4. 140 percent

Question Type : **MCQ**

Question ID : **264330139063**

Option 1 ID : **264330544862**

Option 2 ID : **264330544861**

Option 3 ID : **264330544859**

Option 4 ID : **264330544860**

Status : **Answered**

Chosen Option : **4**

Q.6 Marked price of a computer is Rs. 14000. Selling price of computer is Rs. 9702. If two successive discounts of 23 percent and y percent are given, then what is the value of y?

- Ans**
- 1. 15 percent
 - 2. 10 percent
 - 3. 12 percent
 - 4. 5 percent

Question Type : **MCQ**
Question ID : **264330139068**
Option 1 ID : **264330544881**
Option 2 ID : **264330544880**
Option 3 ID : **264330544882**
Option 4 ID : **264330544879**
Status : **Answered**
Chosen Option : **2**

Q.7 The following table shows the number of Men and Women in five different societies. What is the difference between the total population of Society R and Women in Society P?

Societies	Men	Women
P	440	320
Q	600	550
R	380	120
S	250	400
T	440	300

- Ans**
- 1. 180
 - 2. 300
 - 3. 210
 - 4. 320

Question Type : **MCQ**
Question ID : **264330135081**
Option 1 ID : **264330529260**
Option 2 ID : **264330529259**
Option 3 ID : **264330529262**
Option 4 ID : **264330529261**
Status : **Answered**
Chosen Option : **1**

Q.8 If $p : q$ is $4 : 3$ and $q : r$ is $5 : 2$. Find $p : q : r$.

- Ans**
- 1. 20 : 15 : 6
 - 2. 10 : 4 : 7
 - 3. 15 : 6 : 20
 - 4. 7 : 4 : 10

Question Type : **MCQ**
Question ID : **264330135098**
Option 1 ID : **264330529327**
Option 2 ID : **264330529329**
Option 3 ID : **264330529328**
Option 4 ID : **264330529330**
Status : **Answered**
Chosen Option : **1**

Q.9 The two adjacent sides of a parallelogram are 12 cm and 5 cm respectively. If one of the diagonals is 13 cm long, then what is the area of the parallelogram?

- Ans**
- 1. 60 cm^2
 - 2. 30 cm^2
 - 3. 75 cm^2
 - 4. 25 cm^2

Question Type : **MCQ**
Question ID : **264330137888**
Option 1 ID : **264330540160**
Option 2 ID : **264330540161**
Option 3 ID : **264330540162**
Option 4 ID : **264330540159**
Status : **Not Answered**
Chosen Option : --

Q.10 If LCM of two numbers is 72 and their product is 1728, then what is the HCF of the numbers?

- Ans**
- 1. 1
 - 2. 18
 - 3. 24
 - 4. 12

Question Type : **MCQ**
Question ID : **264330141001**
Option 1 ID : **264330552354**
Option 2 ID : **264330552352**
Option 3 ID : **264330552353**
Option 4 ID : **264330552351**
Status : **Answered**
Chosen Option : 3

Q.11 What will be the ratio of the Least Common Multiple and Highest Common Factor of 13, 26 and 52?

- Ans**
- 1. 5 : 1
 - 2. 13 : 1
 - 3. 6 : 1
 - 4. 4 : 1

Question Type : **MCQ**
Question ID : **264330139071**
Option 1 ID : **264330544892**
Option 2 ID : **264330544894**
Option 3 ID : **264330544891**
Option 4 ID : **264330544893**
Status : **Answered**
Chosen Option : 4

Q.12 A person covers first 25 km in 60 minutes and next 38 km in 30 minutes. What is his average speed for the whole journey?

- Ans**
- 1. 46 km/hr
 - 2. 49 km/hr
 - 3. 42 km/hr
 - 4. 36 km/hr

Question Type : **MCQ**
Question ID : **264330137326**
Option 1 ID : **264330537933**
Option 2 ID : **264330537931**
Option 3 ID : **264330537932**
Option 4 ID : **264330537934**
Status : **Answered**
Chosen Option : **3**

Q.13 What is the average of prime numbers between 12 and 25?

- Ans**
- 1. 20
 - 2. 24
 - 3. 23
 - 4. 18

Question Type : **MCQ**
Question ID : **264330139059**
Option 1 ID : **264330544844**
Option 2 ID : **264330544846**
Option 3 ID : **264330544843**
Option 4 ID : **264330544845**
Status : **Answered**
Chosen Option : **4**

Q.14 Mia and Ria can do a piece of a work alone in 15 days and 10 days respectively. Mia started the work alone and then after 5 days Ria joined her till the completion of the work. How long did the work last?

- Ans**
- 1. 5 days
 - 2. 9 days
 - 3. 12 days
 - 4. 4 days

Question Type : **MCQ**
Question ID : **264330133809**
Option 1 ID : **264330524260**
Option 2 ID : **264330524261**
Option 3 ID : **264330524262**
Option 4 ID : **264330524259**
Status : **Answered**
Chosen Option : **2**

Q.15 What is the area of a circle with diameter 12 mm?

- Ans
- 1. $12\pi \text{ mm}^2$
 - 2. $24\pi \text{ mm}^2$
 - 3. $36\pi \text{ mm}^2$
 - 4. $48\pi \text{ mm}^2$

Question Type : MCQ

Question ID : 264330133814

Option 1 ID : 264330524281

Option 2 ID : 264330524280

Option 3 ID : 264330524279

Option 4 ID : 264330524282

Status : Answered

Chosen Option : 3

Q.16 There are 300 men in a group. They have food for 30 days. After 10 days, 100 more men join the group. Remaining food will last for how many days?

- Ans
- 1. 20 days
 - 2. 10 days
 - 3. 15 days
 - 4. 12 days

Question Type : MCQ

Question ID : 264330137875

Option 1 ID : 264330540109

Option 2 ID : 264330540108

Option 3 ID : 264330540110

Option 4 ID : 264330540107

Status : Answered

Chosen Option : 3

Q.17 The price of rice increased by 10%. By how much should we reduce the consumption, so that the expenditure does not increase on rice?

- Ans
- 1. 100/11%
 - 2. 300/7%
 - 3. 50/3%
 - 4. 51/7%

Question Type : MCQ

Question ID : 264330138094

Option 1 ID : 264330540984

Option 2 ID : 264330540985

Option 3 ID : 264330540983

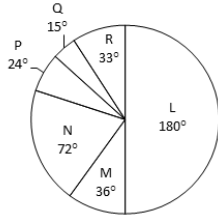
Option 4 ID : 264330540986

Status : Not Answered

Chosen Option : --

Q.18

The pie chart given below shows the number of trucks manufactured by Six companies in a year. Total trucks manufactured by all these Six companies are 2160. Number of trucks manufactured by a particular company is shown in terms of degree with respect to the total number of trucks manufactured by all these Six companies.



Total number of trucks manufactured by L, N and Q is how much percent more than the total number of trucks manufacture by M and R?

- Ans**
- ✓ 1. 286.95 percent
 - ✗ 2. 274.56 percent
 - ✗ 3. 188.24 percent
 - ✗ 4. 192.85 percent

Question Type : **MCQ**

Question ID : **264330139075**

Option 1 ID : **264330544908**

Option 2 ID : **264330544907**

Option 3 ID : **264330544910**

Option 4 ID : **264330544909**

Status : **Answered**

Chosen Option : **1**

Q.19 If $J/4 = K/5 = L/3$, then what is the value of $(L + J)^2 : (J + K)^2 : (K + L)^2$?

- Ans**
- ✗ 1. 25 : 16 : 9
 - ✗ 2. 64 : 25 : 81
 - ✗ 3. 49 : 81 : 62
 - ✓ 4. 49 : 81 : 64

Question Type : **MCQ**

Question ID : **264330139065**

Option 1 ID : **264330544869**

Option 2 ID : **264330544868**

Option 3 ID : **264330544870**

Option 4 ID : **264330544867**

Status : **Answered**

Chosen Option : **4**

Q.20 Rajiv sells a book to Mohan at a profit of 9% and Mohan sells it to Gopal at a profit of 13%. If Gopal pays Rs. 12,317 for it. Find the cost price for Rajiv.

- Ans**
- 1. Rs. 15,000
 - 2. Rs. 11,000
 - 3. Rs. 16,000
 - 4. Rs. 10,000

Question Type : **MCQ**

Question ID : **264330141038**

Option 1 ID : **264330552500**

Option 2 ID : **264330552501**

Option 3 ID : **264330552502**

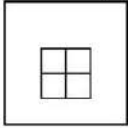
Option 4 ID : **264330552499**

Status : **Answered**

Chosen Option : **4**

Section : Reasoning Ability and Problem Solving


Q.1 Select the option figure in which the given figure (X) is embedded as its part (rotation is NOT allowed).




(X)

Ans

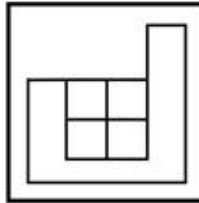
✗ 1.




✗ 2.



✓ 3.



✗ 4.



Question Type : **MCQ**

Question ID : **264330134973**

Option 1 ID : **264330528827**

Option 2 ID : **264330528829**

Option 3 ID : **264330528830**

Option 4 ID : **264330528828**

Status : **Answered**

Chosen Option : **3**

Q.2 Six boys Ram, Sumit, Sunil, Rahul, Raj and Aman are sitting around a circular table facing towards the centre (not necessarily in the same order). Sunil is not the immediate neighbour of Aman. Aman is second to right of Ram. Rahul is second to the right of Sumit. Raj is to immediate left of Ram. Who is second to the right of Rahul?

Ans ✗ 1. Sumit

✗ 2. Aman

✓ 3. Raj

✗ 4. Sunil

Question Type : **MCQ**

Question ID : **264330138836**

Option 1 ID : **264330543954**

Option 2 ID : **264330543953**

Option 3 ID : **264330543952**

Option 4 ID : **264330543951**

Status : **Answered**

Chosen Option : **3**

Q.3 Select the option in which the numbers shares the same relationship in set as that shared by the numbers in the given set.
(NOTE: Operations should be performed on the whole numbers, without breaking down the numbers into its constituent digits. E.g.13 – Operations on 13 such as adding /subtracting /multiplying etc. to 13 can be performed. Breaking down 13 into 1 and 3 and then performing mathematical operations on 1 and 3 is not allowed)

(125, 2, 3)

(512, 5, 3)

- Ans**
- 1. (1782, 8, 6)
 - 2. (1000, 7, 3)
 - 3. (343, 5, 3)
 - 4. (216, 4, 3)

Question Type : **MCQ**
Question ID : **264330138844**
Option 1 ID : **264330543986**
Option 2 ID : **264330543983**
Option 3 ID : **264330543985**
Option 4 ID : **264330543984**
Status : **Answered**
Chosen Option : **2**

Q.4 Which two signs should be interchanged to make the given equation correct?

$$11 - 2 \times 16 + 19 = 25$$

- Ans**
- 1. - and +
 - 2. = and +
 - 3. - and \times
 - 4. \times and +

Question Type : **MCQ**
Question ID : **264330134994**
Option 1 ID : **264330528913**
Option 2 ID : **264330528914**
Option 3 ID : **264330528911**
Option 4 ID : **264330528912**
Status : **Answered**
Chosen Option : **3**

Q.5 A series is given with one term missing. Select the correct alternative from the given ones that will complete the series.

ANTQ, YMRP, ?, UKNN, SJLM

- Ans**
- 1. WLPO
 - 2. WLQO
 - 3. XLPO
 - 4. WLPQ

Question Type : **MCQ**
Question ID : **264330138829**
Option 1 ID : **264330543926**
Option 2 ID : **264330543924**
Option 3 ID : **264330543925**
Option 4 ID : **264330543923**
Status : **Answered**
Chosen Option : **1**

Q.6 In a certain code language, 'HANG' is coded as 'LSFM'. What is the code for 'GRAW' in that code language?

- Ans**
- 1. BGXX
 - 2. CGXL
 - 3. BFVL
 - 4. BFWL

Question Type : **MCQ**

Question ID : **264330138504**

Option 1 ID : **264330542624**

Option 2 ID : **264330542623**

Option 3 ID : **264330542625**

Option 4 ID : **264330542626**

Status : **Not Answered**

Chosen Option : --

Q.7 Eight boys Anil, Kamal, Ram, Sanjay, Aakash, Vivek, Rahul and Ramu are sitting around a circular table facing towards the centre (not necessarily in the same order). Vivek is third to the right of Kamal. Kamal is second to the right of Sanjay. Ram is second to the right of Anil. Anil is second to the right of Vivek. Rahul is third to the right of Aakash. Who is second to the right of Kamal?

- Ans**
- 1. Ramu
 - 2. Sanjay
 - 3. Vivek
 - 4. Aakash

Question Type : **MCQ**

Question ID : **264330138837**

Option 1 ID : **264330543956**

Option 2 ID : **264330543955**

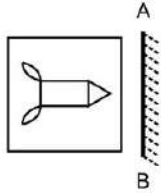
Option 3 ID : **264330543958**

Option 4 ID : **264330543957**

Status : **Answered**

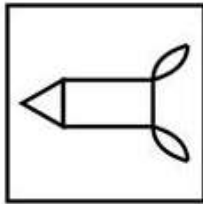
Chosen Option : **1**

Q.8 Select the correct mirror image of the given figure when the mirror AB is placed to the right side of the figure.




Ans

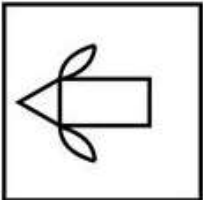
✓ 1.



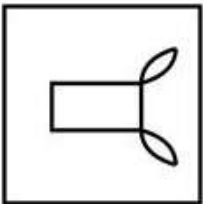
✗ 2.



✗ 3.



✗ 4.



Question Type : MCQ

Question ID : 264330134974

Option 1 ID : 264330528831

Option 2 ID : 264330528833

Option 3 ID : 264330528834

Option 4 ID : 264330528832

Status : Answered

Chosen Option : 1

Q.9 Words given on the left side of (::) are related with each other by some Logic/Rule/Relation. Select the missing word/word pair on the right side of (::) from the given alternatives based on the same Logic/Rule/Relation.

Newspaper : Editor :: Design : ?

Ans ✗ 1. Teacher

✓ 2. Architect

✗ 3. Dramatist

✗ 4. Doctor

Question Type : MCQ

Question ID : 264330138831

Option 1 ID : 264330543934

Option 2 ID : 264330543931

Option 3 ID : 264330543933

Option 4 ID : 264330543932

Status : Answered

Chosen Option : 2

Q.10 By interchanging which two numbers the equation will be correct?

$$9 \times 3 \div 6 + 4 - 8 = 1$$

- Ans
- 1. 8 and 9
 - 2. 3 and 6
 - 3. 3 and 4
 - 4. 6 and 8

Question Type : MCQ

Question ID : 264330138845

Option 1 ID : 264330543989

Option 2 ID : 264330543987

Option 3 ID : 264330543988

Option 4 ID : 264330543990

Status : Answered

Chosen Option : 3

Q.11 Which of the following numbers will replace the question mark (?) in the given series?

46, 63, 80, 97, 114, ?

- Ans
- 1. 126
 - 2. 131
 - 3. 113
 - 4. 128

Question Type : MCQ

Question ID : 264330137865

Option 1 ID : 264330540070

Option 2 ID : 264330540068

Option 3 ID : 264330540067

Option 4 ID : 264330540069

Status : Answered

Chosen Option : 2

Q.12 In a certain code language, 'PHONES' is coded as 'NFMLCQ'. What is the code for 'REALLY' in that code language?

- Ans
- 1. PCYKKW
 - 2. PCYJJY
 - 3. PCYJJV
 - 4. PCYJJW

Question Type : MCQ

Question ID : 264330138565

Option 1 ID : 264330542870

Option 2 ID : 264330542869

Option 3 ID : 264330542867

Option 4 ID : 264330542868

Status : Answered

Chosen Option : 4

Q.13 In the following question below are given some statements followed by some conclusions based on those statements. Taking the given statements to be true even if they seem to be at variance from commonly known facts. Read all the conclusions and then decide which of the given conclusion logically follows the given statements.

Statements:

I. All U are M.

II. All G are M.

Conclusion:

I. Some G are U.

II. Some G are M.

- Ans**
- 1. Only conclusion I follows
 - 2. Both conclusions I and II follows
 - 3. Only conclusion II follows
 - 4. Neither conclusion follows

Question Type : **MCQ**

Question ID : **264330138839**

Option 1 ID : **264330543963**

Option 2 ID : **264330543965**

Option 3 ID : **264330543964**

Option 4 ID : **264330543966**

Status : **Answered**

Chosen Option : **3**

Q.14 Capacities of six tanks A, B, C, D, E and F are compared. No two tanks have same capacity. Capacity of D is more than F and C. Capacity of A is less than only B. Which of the following sequence about their capacities can be correct?

I. $A > D > E$

II. $C > F > E$

- Ans**
- 1. Neither I nor II
 - 2. Only I
 - 3. Only II
 - 4. Both I and II

Question Type : **MCQ**

Question ID : **264330138838**

Option 1 ID : **264330543962**

Option 2 ID : **264330543959**

Option 3 ID : **264330543960**

Option 4 ID : **264330543961**

Status : **Answered**

Chosen Option : **1**

Q.15 In the following question below are given some statements followed by some conclusions based on those statements. Taking the given statements to be true even if they seem to be at variance from commonly known facts. Read all the conclusions and then decide which of the given conclusion logically follows the given statements.

Statements:

I. All P are G.

II. Some F are P.

Conclusion:

I. All G are P.

II. All P are F.

III. Some F are not G.

- Ans**
- 1. Only conclusion III follows
 - 2. Both conclusions II and III follows
 - 3. All conclusion follows
 - 4. Neither conclusion follows

Question Type : **MCQ**

Question ID : **264330138840**

Option 1 ID : **264330543967**

Option 2 ID : **264330543970**

Option 3 ID : **264330543969**

Option 4 ID : **264330543968**

Status : **Answered**

Chosen Option : **4**

Q.16 Select the option that is related to the third number in the same way as the second number is related to the first number.
169 : 12 :: 81 : ?

- Ans**
- 1. 9
 - 2. 7
 - 3. 6
 - 4. 8

Question Type : **MCQ**

Question ID : **264330137867**

Option 1 ID : **264330540077**

Option 2 ID : **264330540076**

Option 3 ID : **264330540075**

Option 4 ID : **264330540078**

Status : **Answered**

Chosen Option : **4**

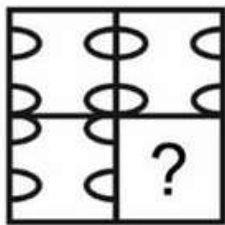
Q.17 Words given on the left side of (::) are related with each other by some Logic/Rule/Relation. Select the missing word/word pair on the right side of (::) from the given alternatives based on the same Logic/Rule/Relation.

Sword : Warrior :: ?

- Ans**
- 1. Mason : Plumblin
 - 2. Scalpel : Sculptor
 - 3. Axe : Woodcutter
 - 4. Tailor : Needle

Question Type : **MCQ**
Question ID : **264330138832**
Option 1 ID : **264330543937**
Option 2 ID : **264330543936**
Option 3 ID : **264330543935**
Option 4 ID : **264330543938**
Status : **Answered**
Chosen Option : **3**

Q.18 Which answer figure will complete the pattern in the question figure?



Ans

- 1.
- 2.
- 3.
- 4.

Question Type : **MCQ**
Question ID : **264330138849**
Option 1 ID : **264330544004**
Option 2 ID : **264330544003**
Option 3 ID : **264330544006**
Option 4 ID : **264330544005**
Status : **Answered**
Chosen Option : **4**

Q.19 In a certain code language, 'TAKES' is coded as '51', 'LEAVE' is coded as '40'. What is the code for 'TEAM' in that code language?

- Ans** 1. 49
 2. 34
 3. 36
 4. 39

Question Type : **MCQ**
Question ID : **264330137113**
Option 1 ID : **264330537096**
Option 2 ID : **264330537098**
Option 3 ID : **264330537097**
Option 4 ID : **264330537095**
Status : **Answered**
Chosen Option : **2**

Q.20 In the following question, select the missing number of the given series.

2, 6, 14, 30, 62, ?

- Ans** 1. 130
 2. 126
 3. 128
 4. 131

Question Type : **MCQ**
Question ID : **264330138842**
Option 1 ID : **264330543977**
Option 2 ID : **264330543976**
Option 3 ID : **264330543975**
Option 4 ID : **264330543978**
Status : **Answered**
Chosen Option : **2**

Section : **General Awareness**

Q.1 How many countries share the international land border with India, as of 2022?

- Ans** 1. 5
 2. 7
 3. 8
 4. 6

Question Type : **MCQ**
Question ID : **264330133968**
Option 1 ID : **264330524895**
Option 2 ID : **264330524897**
Option 3 ID : **264330524898**
Option 4 ID : **264330524896**
Status : **Answered**
Chosen Option : **2**

Q.2 Which folk dance of Rajasthan is also known as 'Sapera dance'?

- Ans
- 1. Gair
 - 2. Kalbelia
 - 3. Chari
 - 4. Ghoomar

Question Type : **MCQ**
Question ID : **264330138896**
Option 1 ID : **264330544194**
Option 2 ID : **264330544193**
Option 3 ID : **264330544191**
Option 4 ID : **264330544192**
Status : **Not Answered**
Chosen Option : --

Q.3 Which among the following planets does not have any satellite?

- Ans
- 1. Jupiter
 - 2. Venus
 - 3. Saturn
 - 4. Uranus

Question Type : **MCQ**
Question ID : **264330137977**
Option 1 ID : **264330540517**
Option 2 ID : **264330540516**
Option 3 ID : **264330540515**
Option 4 ID : **264330540518**
Status : **Answered**
Chosen Option : 2

Q.4 Materials that do not allow electric current to pass through them are called _____.

- Ans
- 1. conductors
 - 2. insulators
 - 3. capacitors
 - 4. inductor

Question Type : **MCQ**
Question ID : **264330134635**
Option 1 ID : **264330527495**
Option 2 ID : **264330527496**
Option 3 ID : **264330527497**
Option 4 ID : **264330527498**
Status : **Answered**
Chosen Option : 2

Q.5 Who among the following was revered as the 'Queen of Thumri'?

- Ans
- 1. Naina Devi
 - 2. Siddheshwari Devi
 - 3. Girija Devi
 - 4. Annapurna Devi

Question Type : MCQ
Question ID : 264330138902
Option 1 ID : 264330544218
Option 2 ID : 264330544217
Option 3 ID : 264330544215
Option 4 ID : 264330544216
Status : Not Answered
Chosen Option : --

Q.6 Plants with green and tender stems are called _____.

- Ans
- 1. shrubs
 - 2. trees
 - 3. canopy
 - 4. herbs

Question Type : MCQ
Question ID : 264330134632
Option 1 ID : 264330527484
Option 2 ID : 264330527485
Option 3 ID : 264330527486
Option 4 ID : 264330527483
Status : Answered
Chosen Option : 1

Q.7 Sex ratio in India is defined as the number of females per _____.

- Ans
- 1. 100 males in the population
 - 2. 1000 males in the population
 - 3. 500 males in the population
 - 4. 100 children in the population

Question Type : MCQ
Question ID : 264330138940
Option 1 ID : 264330544367
Option 2 ID : 264330544368
Option 3 ID : 264330544370
Option 4 ID : 264330544369
Status : Answered
Chosen Option : 2

Q.8 The Ravan Phadi cave in _____ is an example of the early Chalukya style architecture which is known for its distinct sculptural style.

- Ans**
- 1. Tamil Nadu
 - 2. Kerala
 - 3. Andhra Pradesh
 - 4. Karnataka

Question Type : **MCQ**
Question ID : **264330134648**
Option 1 ID : **264330527549**
Option 2 ID : **264330527548**
Option 3 ID : **264330527547**
Option 4 ID : **264330527550**
Status : **Answered**
Chosen Option : 1

Q.9 The 36th meeting of 'Parliamentary committee on official language' was chaired by _____.

- Ans**
- 1. Amit Shah
 - 2. Piyush Goyal
 - 3. Narendra Modi
 - 4. Rajnath Singh

Question Type : **MCQ**
Question ID : **264330138904**
Option 1 ID : **264330544224**
Option 2 ID : **264330544226**
Option 3 ID : **264330544223**
Option 4 ID : **264330544225**
Status : **Answered**
Chosen Option : 1

Q.10 The Prohibition of Child Marriage (Amendment) Bill, 2021 seeks to increase the marriage age of women to _____ years.

- Ans**
- 1. 21
 - 2. 18
 - 3. 25
 - 4. 22

Question Type : **MCQ**
Question ID : **264330134645**
Option 1 ID : **264330527536**
Option 2 ID : **264330527535**
Option 3 ID : **264330527537**
Option 4 ID : **264330527538**
Status : **Answered**
Chosen Option : 1

Q.11 Malgudi Days is a collection of short stories by _____.

- Ans
- 1. Jhumpa Lahiri
 - 2. R.K. Narayana
 - 3. Chetan Bhagat
 - 4. Amish Tripathi

Question Type : **MCQ**
Question ID : **264330138276**
Option 1 ID : **264330541714**
Option 2 ID : **264330541713**
Option 3 ID : **264330541711**
Option 4 ID : **264330541712**
Status : **Answered**
Chosen Option : **2**

Q.12 Who won India's first badminton medal in Olympics games?

- Ans
- 1. P.V.Sindhu
 - 2. Prakash Padukone
 - 3. Saina Nehwal
 - 4. Pullela Gopichand

Question Type : **MCQ**
Question ID : **264330138899**
Option 1 ID : **264330544203**
Option 2 ID : **264330544206**
Option 3 ID : **264330544204**
Option 4 ID : **264330544205**
Status : **Answered**
Chosen Option : **3**

Q.13 The period of life, when the body undergoes changes leading to reproductive maturity is called _____.

- Ans
- 1. maturity
 - 2. adolescence
 - 3. cloning
 - 4. budding

Question Type : **MCQ**
Question ID : **264330138909**
Option 1 ID : **264330544246**
Option 2 ID : **264330544243**
Option 3 ID : **264330544244**
Option 4 ID : **264330544245**
Status : **Answered**
Chosen Option : **2**

Q.14 Corbillon Cup is associated with which of the following sports?

- Ans
- 1. Golf
 - 2. Hockey
 - 3. Table Tennis
 - 4. Badminton

Question Type : **MCQ**
Question ID : **264330137992**
Option 1 ID : **264330540575**
Option 2 ID : **264330540578**
Option 3 ID : **264330540576**
Option 4 ID : **264330540577**
Status : **Not Answered**
Chosen Option : --

Q.15 Which country is the host of “Vostok-2022” military exercise?

- Ans
- 1. UAE
 - 2. Russia
 - 3. India
 - 4. USA

Question Type : **MCQ**
Question ID : **264330138905**
Option 1 ID : **264330544228**
Option 2 ID : **264330544230**
Option 3 ID : **264330544229**
Option 4 ID : **264330544227**
Status : **Answered**
Chosen Option : **2**

Q.16 Cultivation of rice needs high rainfall with _____.

- Ans
- 1. Low temperature and low humidity
 - 2. High temperature and low humidity
 - 3. High temperature and high humidity
 - 4. Low temperature and high humidity

Question Type : **MCQ**
Question ID : **264330138288**
Option 1 ID : **264330541761**
Option 2 ID : **264330541759**
Option 3 ID : **264330541762**
Option 4 ID : **264330541760**
Status : **Answered**
Chosen Option : **3**

Q.17 Which among the following gases is used as an anaesthetic in dental surgery?

- Ans 1. Nitrous Oxide
 2. Radon
 3. Argon
 4. Helium

Question Type : MCQ
Question ID : 264330137974
Option 1 ID : 264330540505
Option 2 ID : 264330540503
Option 3 ID : 264330540506
Option 4 ID : 264330540504
Status : Answered
Chosen Option : 2

Q.18 Who among the following succeeded the throne of the Mughal Dynasty in India after Akbar?

- Ans 1. Shah Jahan
 2. Sher Shah Suri
 3. Aurangzeb
 4. Jahangir

Question Type : MCQ
Question ID : 264330137983
Option 1 ID : 264330540541
Option 2 ID : 264330540539
Option 3 ID : 264330540540
Option 4 ID : 264330540542
Status : Answered
Chosen Option : 4

Q.19 Who among the following Governor Generals of Bengal outlawed the practice of Sati?

- Ans 1. Charles Canning
 2. Charles Cornwallis
 3. Warren Hastings
 4. William Bentinck

Question Type : MCQ
Question ID : 264330134659
Option 1 ID : 264330527594
Option 2 ID : 264330527593
Option 3 ID : 264330527592
Option 4 ID : 264330527591
Status : Answered
Chosen Option : 4

Q.20 Padma Subrahmanyam received Padma Bhushan Award for her contribution to Indian Classical dance form in _____.

- Ans**
- 1. 1998
 - 2. 2003
 - 3. 2001
 - 4. 2010

Question Type : **MCQ**
Question ID : **264330138278**
Option 1 ID : **264330541719**
Option 2 ID : **264330541721**
Option 3 ID : **264330541720**
Option 4 ID : **264330541722**
Status : **Not Answered**
Chosen Option : --

Q.21 In India, Gir forest is the last remaining habitat of which animal?

- Ans**
- 1. Asiatic Lion
 - 2. Snow leopard
 - 3. Black Panther
 - 4. Asian Cheetah

Question Type : **MCQ**
Question ID : **264330138914**
Option 1 ID : **264330544263**
Option 2 ID : **264330544266**
Option 3 ID : **264330544265**
Option 4 ID : **264330544264**
Status : **Answered**
Chosen Option : 1

Q.22 In the product method for measurement of national income, we need to deduct the value of intermediate goods to _____.

- Ans**
- 1. analyse factors of production
 - 2. avoid over consumption
 - 3. avoid double counting
 - 4. estimate aggregate value of expenditure

Question Type : **MCQ**
Question ID : **264330138281**
Option 1 ID : **264330541734**
Option 2 ID : **264330541732**
Option 3 ID : **264330541731**
Option 4 ID : **264330541733**
Status : **Answered**
Chosen Option : 3

Q.23 Article 43B of the Indian constitution provide for _____.

- Ans
- 1. Organisation of village panchayats
 - 2. Right to work
 - 3. Separation of Judiciary from Executive
 - 4. Promotion of cooperative societies

Question Type : MCQ

Question ID : 264330138908

Option 1 ID : 264330544239

Option 2 ID : 264330544240

Option 3 ID : 264330544242

Option 4 ID : 264330544241

Status : Answered

Chosen Option : 4

Q.24 What is the chemical name of Vinegar?

- Ans
- 1. Lauric Acid
 - 2. Acetic Acid
 - 3. Malic Acid
 - 4. Oxalic Acid

Question Type : MCQ

Question ID : 264330137976

Option 1 ID : 264330540513

Option 2 ID : 264330540511

Option 3 ID : 264330540512

Option 4 ID : 264330540514

Status : Answered

Chosen Option : 2

Q.25 Simone Biles is associated with which sports?

- Ans
- 1. Swimming
 - 2. Badminton
 - 3. Gymnastics
 - 4. Table tennis

Question Type : MCQ

Question ID : 264330134622

Option 1 ID : 264330527444

Option 2 ID : 264330527446

Option 3 ID : 264330527443

Option 4 ID : 264330527445

Status : Answered

Chosen Option : 3

Q.1 A sentence has been given with a blank to be filled with an appropriate option. Choose the correct alternative.

Snow _____ lightly as everyone was leaving church.

- Ans**
- 1. falling
 - 2. is falling
 - 3. was falling
 - 4. fallen

Question Type : **MCQ**
Question ID : **264330134778**
Option 1 ID : **264330528060**
Option 2 ID : **264330528062**
Option 3 ID : **264330528059**
Option 4 ID : **264330528061**
Status : **Answered**
Chosen Option : **4**

Q.2 A sentence has been given with a blank to be filled with an appropriate option. Choose the correct alternative.

Satya Nadella completed his primary education _____ Hyderabad Public School, Begumpet.

- Ans**
- 1. by
 - 2. from
 - 3. over
 - 4. onto

Question Type : **MCQ**
Question ID : **264330136853**
Option 1 ID : **264330536104**
Option 2 ID : **264330536105**
Option 3 ID : **264330536103**
Option 4 ID : **264330536106**
Status : **Answered**
Chosen Option : **2**

Q.3 Select the appropriate synonym for the underlined word.

In the absence of miracles, my frustration spikes.

- Ans**
- 1. Digs
 - 2. Falls
 - 3. Losses
 - 4. Increases

Question Type : **MCQ**
Question ID : **264330136863**
Option 1 ID : **264330536142**
Option 2 ID : **264330536139**
Option 3 ID : **264330536140**
Option 4 ID : **264330536141**
Status : **Answered**
Chosen Option : **4**

Q.4 In the following question, out of the given four alternatives, select the alternative which best expresses the meaning of the Idiom/Phrase.

A blast from the past

Ans 1.

A competition where the outcome is difficult to judge or predict

2. Punishment for the crime committed in the past

3. Something powerfully nostalgic

4. An unresolved argument

Question Type : **MCQ**

Question ID : **264330136868**

Option 1 ID : **264330536162**

Option 2 ID : **264330536161**

Option 3 ID : **264330536159**

Option 4 ID : **264330536160**

Status : **Answered**

Chosen Option : **4**

Q.5 Choose the word that is opposite in meaning to the given word.

Abolish

Ans 1. Efface

2. Deface

3. Jettison

4. Formalize

Question Type : **MCQ**

Question ID : **264330134789**

Option 1 ID : **264330528099**

Option 2 ID : **264330528101**

Option 3 ID : **264330528102**

Option 4 ID : **264330528100**

Status : **Answered**

Chosen Option : **4**

Q.6 Choose the sentence with no spelling error.

Ans 1. His grip tightend a fractoin on her arm.

2. His grip tightened a fraction on her arm.

3. His grip tightned a fraction on her arm.

4. His gripe tightened a fracton on her arm.

Question Type : **MCQ**

Question ID : **264330134768**

Option 1 ID : **264330528022**

Option 2 ID : **264330528021**

Option 3 ID : **264330528019**

Option 4 ID : **264330528020**

Status : **Answered**

Chosen Option : **2**

Q.7 Choose the incorrectly spelt word.

- Ans
- 1. Drape
 - 2. Neweset
 - 3. Vibe
 - 4. Surround

Question Type : **MCQ**
Question ID : **264330136869**
Option 1 ID : **264330536166**
Option 2 ID : **264330536163**
Option 3 ID : **264330536165**
Option 4 ID : **264330536164**
Status : **Answered**
Chosen Option : **2**

Q.8 Select the most appropriate option to fill in the blank.

She was moving slowly and _____ yesterday when she fell.

- Ans
- 1. shakily
 - 2. firmly
 - 3. vaguely
 - 4. strongly

Question Type : **MCQ**
Question ID : **264330136872**
Option 1 ID : **264330536178**
Option 2 ID : **264330536175**
Option 3 ID : **264330536176**
Option 4 ID : **264330536177**
Status : **Answered**
Chosen Option : **1**

Q.9 Select the appropriate antonym for the underlined word.

They must have been more than just suspicious of you.

- Ans
- 1. Ambiguous
 - 2. Definitive
 - 3. Doubtful
 - 4. Queer

Question Type : **MCQ**
Question ID : **264330136866**
Option 1 ID : **264330536152**
Option 2 ID : **264330536153**
Option 3 ID : **264330536151**
Option 4 ID : **264330536154**
Status : **Answered**
Chosen Option : **2**

Q.10 Find the part of the given sentence that has an error in it. If there is no error, choose 'No error'.

To treat nightmare disorder, there is a number of medications and therapies.

- Ans**
- 1. there is a number
 - 2. of medications and therapies.
 - 3. No error
 - 4. To treat nightmare disorder,

Question Type : **MCQ**
Question ID : **264330136849**
Option 1 ID : **264330536088**
Option 2 ID : **264330536089**
Option 3 ID : **264330536090**
Option 4 ID : **264330536087**
Status : **Answered**
Chosen Option : **1**

Q.11 Select the most appropriate option to fill in the blank.

What to do in the event of a gas _____.

- Ans**
- 1. lead
 - 2. leek
 - 3. leer
 - 4. leak

Question Type : **MCQ**
Question ID : **264330134769**
Option 1 ID : **264330528025**
Option 2 ID : **264330528024**
Option 3 ID : **264330528026**
Option 4 ID : **264330528023**
Status : **Answered**
Chosen Option : **4**

Q.12 Improve the underlined part of the sentence. Choose 'No improvement' as an answer if the sentence is grammatically correct.

MLA is a representative electing by the voters of a constituency to the legislature.

- Ans**
- 1. elects by a
 - 2. elected by a
 - 3. No improvement
 - 4. elected by the

Question Type : **MCQ**
Question ID : **264330136878**
Option 1 ID : **264330536201**
Option 2 ID : **264330536200**
Option 3 ID : **264330536202**
Option 4 ID : **264330536199**
Status : **Answered**
Chosen Option : **4**

Q.13 Choose the word that means the same as the given word.

Confirm

- Ans
- 1. Corrosion
 - 2. Collision
 - 3. Corroborate
 - 4. Collaborate

Question Type : MCQ
Question ID : 264330134788
Option 1 ID : 264330528097
Option 2 ID : 264330528098
Option 3 ID : 264330528096
Option 4 ID : 264330528095
Status : Answered
Chosen Option : 1

Q.14 Find the part of the given sentence that has an error in it. If there is no error, choose 'No error'.

I particular like that kitten because it has white feet.

- Ans
- 1. I particular like
 - 2. that kitten because it
 - 3. No error
 - 4. has white feet

Question Type : MCQ
Question ID : 264330134450
Option 1 ID : 264330526771
Option 2 ID : 264330526772
Option 3 ID : 264330526774
Option 4 ID : 264330526773
Status : Answered
Chosen Option : 1

Q.15 Select the most appropriate word for the given group of words.

Extreme physical or mental sufferings

- Ans
- 1. Agony
 - 2. Autonomy
 - 3. Aviary
 - 4. Autocracy

Question Type : MCQ
Question ID : 264330136523
Option 1 ID : 264330534831
Option 2 ID : 264330534832
Option 3 ID : 264330534834
Option 4 ID : 264330534833
Status : Answered
Chosen Option : 1

Q.16 Find the part of the given sentence that has an error in it. If there is no error, choose 'No error'.

There is no big deal if she didn't came to the party.

- Ans**
- 1. There is no big
 - 2. No error
 - 3. came to the party.
 - 4. deal if she didn't

Question Type : **MCQ**
Question ID : **264330136873**
Option 1 ID : **264330536179**
Option 2 ID : **264330536182**
Option 3 ID : **264330536181**
Option 4 ID : **264330536180**
Status : **Answered**
Chosen Option : **3**

Q.17 Improve the underlined part of the sentence. Choose 'No improvement' as an answer if the sentence is grammatically correct.

The day are warm, so the students ate their lunch outside.

- Ans**
- 1. was warming
 - 2. is warm
 - 3. No improvement
 - 4. was warm

Question Type : **MCQ**
Question ID : **264330136876**
Option 1 ID : **264330536192**
Option 2 ID : **264330536191**
Option 3 ID : **264330536194**
Option 4 ID : **264330536193**
Status : **Answered**
Chosen Option : **4**

Q.18 Select the most appropriate meaning of the given idiom.

Against the clock

- Ans**
- 1. To take on a task that is a way to big
 - 2. On the point of achievement
 - 3. To avoid talking
 - 4. Rushed and short on time

Question Type : **MCQ**
Question ID : **264330136529**
Option 1 ID : **264330534857**
Option 2 ID : **264330534856**
Option 3 ID : **264330534858**
Option 4 ID : **264330534855**
Status : **Answered**
Chosen Option : **4**

Q.19 Improve the underlined part of the sentence. Choose 'No improvement' as an answer if the sentence is grammatically correct.

Don't try to force the window open, or you might broken it.

- Ans**
- 1. you might breaks
 - 2. you have break
 - 3. you might break
 - 4. No improvement

Question Type : **MCQ**
Question ID : **264330135312**
Option 1 ID : **264330530159**
Option 2 ID : **264330530161**
Option 3 ID : **264330530160**
Option 4 ID : **264330530162**
Status : **Answered**
Chosen Option : **3**

Q.20 Choose the word that can substitute the given group of words.

Beginning to exist; recently formed or developed

- Ans**
- 1. Herald
 - 2. Blasphemy
 - 3. Knave
 - 4. Nascent

Question Type : **MCQ**
Question ID : **264330136862**
Option 1 ID : **264330536138**
Option 2 ID : **264330536136**
Option 3 ID : **264330536135**
Option 4 ID : **264330536137**
Status : **Not Answered**
Chosen Option : **--**

Comprehension:

In the following passage some of the words have been deleted. Read the passage carefully and select the correct answer for the given blank out of the four alternatives.

"I am proud to (1) _____ to a religion which has taught the world both tolerance (2) _____ universal acceptance," he declared (3) _____ September 11, 1893. "We believe not only in universal toleration, (4) _____ we accept all religions as true. I am proud to belong to a nation which has sheltered the persecuted and the (5) _____ of all religions and all nations of the earth."

SubQuestion No : 21

Q.21 Select the most appropriate option to fill in blank number 1.

- Ans**
- ✓ 1. belong
 - ✗ 2. live
 - ✗ 3. behest
 - ✗ 4. gain

Question Type : **MCQ**
Question ID : **264330134780**
Option 1 ID : **264330528064**
Option 2 ID : **264330528066**
Option 3 ID : **264330528065**
Option 4 ID : **264330528063**
Status : **Answered**
Chosen Option : **1**

Comprehension:

In the following passage some of the words have been deleted. Read the passage carefully and select the correct answer for the given blank out of the four alternatives.

"I am proud to (1) _____ to a religion which has taught the world both tolerance (2) _____ universal acceptance," he declared (3) _____ September 11, 1893. "We believe not only in universal toleration, (4) _____ we accept all religions as true. I am proud to belong to a nation which has sheltered the persecuted and the (5) _____ of all religions and all nations of the earth."

SubQuestion No : 22

Q.22 Select the most appropriate option to fill in blank number 2.

- Ans**
- ✓ 1. and
 - ✗ 2. as well as
 - ✗ 3. or
 - ✗ 4. also

Question Type : **MCQ**
Question ID : **264330134781**
Option 1 ID : **264330528068**
Option 2 ID : **264330528070**
Option 3 ID : **264330528069**
Option 4 ID : **264330528067**
Status : **Answered**
Chosen Option : **1**

Comprehension:

In the following passage some of the words have been deleted. Read the passage carefully and select the correct answer for the given blank out of the four alternatives.

"I am proud to (1) _____ to a religion which has taught the world both tolerance (2) _____ universal acceptance," he declared (3) _____ September 11, 1893. "We believe not only in universal toleration, (4) _____ we accept all religions as true. I am proud to belong to a nation which has sheltered the persecuted and the (5) _____ of all religions and all nations of the earth."

SubQuestion No : 23

Q.23 Select the most appropriate option to fill in blank number 3.

- Ans
- 1. upon
 - 2. in
 - 3. on
 - 4. at

Question Type : **MCQ**
Question ID : **264330134782**
Option 1 ID : **264330528072**
Option 2 ID : **264330528074**
Option 3 ID : **264330528073**
Option 4 ID : **264330528071**
Status : **Answered**
Chosen Option : **3**

Comprehension:

In the following passage some of the words have been deleted. Read the passage carefully and select the correct answer for the given blank out of the four alternatives.

"I am proud to (1) _____ to a religion which has taught the world both tolerance (2) _____ universal acceptance," he declared (3) _____ September 11, 1893. "We believe not only in universal toleration, (4) _____ we accept all religions as true. I am proud to belong to a nation which has sheltered the persecuted and the (5) _____ of all religions and all nations of the earth."

SubQuestion No : 24

Q.24 Select the most appropriate option to fill in blank number 4.

- Ans
- 1. yet
 - 2. though
 - 3. and
 - 4. but

Question Type : **MCQ**
Question ID : **264330134783**
Option 1 ID : **264330528077**
Option 2 ID : **264330528075**
Option 3 ID : **264330528078**
Option 4 ID : **264330528076**
Status : **Answered**
Chosen Option : **4**

Comprehension:

In the following passage some of the words have been deleted. Read the passage carefully and select the correct answer for the given blank out of the four alternatives.

"I am proud to (1) _____ to a religion which has taught the world both tolerance (2) _____ universal acceptance," he declared (3) _____ September 11, 1893. "We believe not only in universal toleration, (4) _____ we accept all religions as true. I am proud to belong to a nation which has sheltered the persecuted and the (5) _____ of all religions and all nations of the earth."

SubQuestion No : 25

Q.25 Select the most appropriate option to fill in blank number 5.

- Ans**
- 1. toilers
 - 2. refugees
 - 3. workers
 - 4. peons

Question Type : **MCQ**

Question ID : **264330134784**

Option 1 ID : **264330528082**

Option 2 ID : **264330528081**

Option 3 ID : **264330528079**

Option 4 ID : **264330528080**

Status : **Answered**

Chosen Option : **2**