

Multi Tasking Non Technical Staff and Havaladar CBIC and CBN Examination 2022

Roll Number	
Candidate Name	
Venue Name	
Exam Date	08/05/2023
Exam Time	9:00 AM - 10:30 AM
Subject	MTS Non Tech Havaladar CBIC and CBN Examination 2022

Section : Numerical and Mathematical Ability

Q.1 The average runs of a cricket player of 10 innings were 40. How many runs must she make in her next inning so as to increase her average of runs by 3?

- Ans**
- 1. 43
 - 2. 53
 - 3. 73
 - 4. 63

Question Type : **MCQ**
Question ID : **264330138038**
Option 1 ID : **264330540760**
Option 2 ID : **264330540762**
Option 3 ID : **264330540759**
Option 4 ID : **264330540761**
Status : **Answered**
Chosen Option : **1**

Q.2 Anil is 12.5 percent more efficient than Sachin. If Sachin alone can finish a work in 10 days, then in how many days will Anil alone finish the same work?

- Ans**
- 1. (80/7) days
 - 2. (70/9) days
 - 3. (80/9) days
 - 4. (70/11) days

Question Type : **MCQ**
Question ID : **264330139057**
Option 1 ID : **264330544835**
Option 2 ID : **264330544836**
Option 3 ID : **264330544837**
Option 4 ID : **264330544838**
Status : **Answered**
Chosen Option : **3**

Q.3 What is the single equivalent price increase for two successive price increase of 5% and 8% on an item?

- Ans** 1. 13.4%
 2. 12.5%
 3. 14.2%
 4. 15.5%

Question Type : **MCQ**

Question ID : **264330133677**

Option 1 ID : **264330523732**

Option 2 ID : **264330523731**

Option 3 ID : **264330523734**

Option 4 ID : **264330523733**

Status : **Answered**

Chosen Option : **1**

Q.4 X, Y and Z enter into a partnership. X invests some money at the beginning. Y invests thrice the amount of X after 4 months and Z invest double the amount of Y after 9 months from the beginning. If the annual gain be Rs. 450000, then what is the share of Y?

- Ans** 1. Rs. 200000
 2. Rs. 150000
 3. Rs. 100000
 4. Rs. 300000

Question Type : **MCQ**

Question ID : **264330138043**

Option 1 ID : **264330540780**

Option 2 ID : **264330540781**

Option 3 ID : **264330540779**

Option 4 ID : **264330540782**

Status : **Answered**

Chosen Option : **2**

Q.5 A cuboid whose sides are 8 cm, 27 cm and 64 cm is melted to form a new cube. What is the respective ratio of the total surface area of the cuboid and cube?

- Ans** 1. 307 : 216
 2. 291 : 203
 3. 349 : 248
 4. 329 : 237

Question Type : **MCQ**

Question ID : **264330137167**

Option 1 ID : **264330537314**

Option 2 ID : **264330537312**

Option 3 ID : **264330537313**

Option 4 ID : **264330537311**

Status : **Answered**

Chosen Option : **4**

Q.6 Rohan alone can do a work in 10 days and Mohan alone can do the same work in 15 days. In how many days will they together complete the same work?

- Ans**
- 1. 6 days
 - 2. 5 days
 - 3. 4 days
 - 4. 7 days

Question Type : **MCQ**

Question ID : **264330137152**

Option 1 ID : **264330537252**

Option 2 ID : **264330537251**

Option 3 ID : **264330537253**

Option 4 ID : **264330537254**

Status : **Answered**

Chosen Option : **1**

Q.7 A mixture contains milk and water in the ratio 5:2. If 4 liters of water is added to the mixture, the ratio becomes 5:4. What is the quantity of milk in the given mixture?

- Ans**
- 1. 2 litres
 - 2. 8 litres
 - 3. 5 litres
 - 4. 10 liters

Question Type : **MCQ**

Question ID : **264330138046**

Option 1 ID : **264330540793**

Option 2 ID : **264330540791**

Option 3 ID : **264330540792**

Option 4 ID : **264330540794**

Status : **Answered**

Chosen Option : **4**

Q.8 The table given below shows the expenditure on six articles by two families A and B.

Articles	A	B
P	40	120
Q	60	70
R	80	90
S	100	50
T	110	40
U	90	80

Which of the following statement is NOT correct?

- I. The expenditure on article R by A is 28.56 percent more than the expenditure on Q by B.
II. The difference between average expenditure on article P and Q by A and the average expenditure on R and S by B is 20.

- Ans**
- 1. Only II
 - 2. Both I and II
 - 3. Only I
 - 4. Neither I nor II

Question Type : **MCQ**
Question ID : **264330138033**
Option 1 ID : **264330540740**
Option 2 ID : **264330540741**
Option 3 ID : **264330540739**
Option 4 ID : **264330540742**
Status : **Answered**
Chosen Option : 1

Q.9 A person walks 10 km at a speed of 2.5 km per hour, then runs 10 km at a speed of 5 km per hour and then goes 30 km by bus at the speed of 30 km per hour. What is the average speed of the man?

- Ans**
- 1. 9 kmph
 - 2. 8.25 kmph
 - 3. 7.14 kmph
 - 4. 7 kmph

Question Type : **MCQ**
Question ID : **264330138049**
Option 1 ID : **264330540803**
Option 2 ID : **264330540805**
Option 3 ID : **264330540804**
Option 4 ID : **264330540806**
Status : **Answered**
Chosen Option : 4

Q.10 A person can walk at a speed of 0.5 meters/second. How far will he walk in 8 minutes?

- Ans**
- 1. 250 m
 - 2. 240 m
 - 3. 200 m
 - 4. 120 m

Question Type : **MCQ**
Question ID : **264330138750**
Option 1 ID : **264330543607**
Option 2 ID : **264330543608**
Option 3 ID : **264330543610**
Option 4 ID : **264330543609**
Status : **Answered**
Chosen Option : **2**

Q.11 What is the effective annual rate of interest corresponding to a nominal rate of 10% per annum payable half-yearly?

- Ans**
- 1. 10.25%
 - 2. 12.75%
 - 3. 9.25%
 - 4. 11.50%

Question Type : **MCQ**
Question ID : **264330133684**
Option 1 ID : **264330523761**
Option 2 ID : **264330523760**
Option 3 ID : **264330523762**
Option 4 ID : **264330523759**
Status : **Answered**
Chosen Option : **3**

Q.12 A wire is in the form of square with side 44 cm. It is bent to form a circle. What is the radius of the circle?

- Ans**
- 1. 28 cm
 - 2. 21 cm
 - 3. 16 cm
 - 4. 32 cm

Question Type : **MCQ**
Question ID : **264330139070**
Option 1 ID : **264330544890**
Option 2 ID : **264330544888**
Option 3 ID : **264330544887**
Option 4 ID : **264330544889**
Status : **Answered**
Chosen Option : **1**

Q.13 A person bought some pens at the rate of 30 for a rupee and sold them at the rate of 20 for a rupee. What is the profit percentage?

- Ans**
- 1. 50 percent
 - 2. 66.66 percent
 - 3. 75 percent
 - 4. 33.33 percent

Question Type : **MCQ**
Question ID : **264330139002**
Option 1 ID : **264330544615**
Option 2 ID : **264330544616**
Option 3 ID : **264330544618**
Option 4 ID : **264330544617**
Status : **Answered**
Chosen Option : **4**

Q.14 What is the value of $0.8 \times 0.8 \times 0.8 + 0.7 \times 0.7 \times 0.7 + 2.52$?

- Ans**
- 1. 2.125
 - 2. 5.165
 - 3. 4.275
 - 4. 3.375

Question Type : **MCQ**
Question ID : **264330138032**
Option 1 ID : **264330540737**
Option 2 ID : **264330540735**
Option 3 ID : **264330540736**
Option 4 ID : **264330540738**
Status : **Answered**
Chosen Option : **4**

Q.15 The third proportional to 4 and 6 is:

- Ans**
- 1. 9
 - 2. 16
 - 3. 6
 - 4. 36

Question Type : **MCQ**
Question ID : **264330138045**
Option 1 ID : **264330540788**
Option 2 ID : **264330540790**
Option 3 ID : **264330540787**
Option 4 ID : **264330540789**
Status : **Answered**
Chosen Option : **4**

Q.16 The difference between the compound interest (compounding annually) and simple interest on a sum at the rate of 30 percent per annum for 2 years is Rs. 3600. What is the sum?

- Ans**
- 1. Rs. 75000
 - 2. Rs. 40000
 - 3. Rs. 50000
 - 4. Rs. 60000

Question Type : **MCQ**
Question ID : **264330139007**
Option 1 ID : **264330544637**
Option 2 ID : **264330544635**
Option 3 ID : **264330544638**
Option 4 ID : **264330544636**
Status : **Answered**
Chosen Option : **1**

Q.17 A water purifier is on sale for 10% discount on the original price. A store-wide sale results in an additional discount of 15%. What is the total discount on the original price?

- Ans**
- 1. 18.50%
 - 2. 19.50%
 - 3. 22.50%
 - 4. 23.50%

Question Type : **MCQ**
Question ID : **264330138044**
Option 1 ID : **264330540786**
Option 2 ID : **264330540785**
Option 3 ID : **264330540784**
Option 4 ID : **264330540783**
Status : **Answered**
Chosen Option : **4**

Q.18 The value of $8000 \div 10 \times \{(8 - 4) + (36 - 24)\}$ is:

- Ans**
- 1. 800
 - 2. 12800
 - 3. 6400
 - 4. 50

Question Type : **MCQ**
Question ID : **264330138035**
Option 1 ID : **264330540748**
Option 2 ID : **264330540750**
Option 3 ID : **264330540749**
Option 4 ID : **264330540747**
Status : **Answered**
Chosen Option : **2**

Q.19 What is the value of $\frac{66 - 55 + 44 - 33 + 22}{13 \times 3 + 2 \times 3 - 1}$?

- Ans
- ✓ 1. 1
 - ✗ 2. 4
 - ✗ 3. 11
 - ✗ 4. 44

Question Type : MCQ

Question ID : 264330137339

Option 1 ID : 264330537983

Option 2 ID : 264330537984

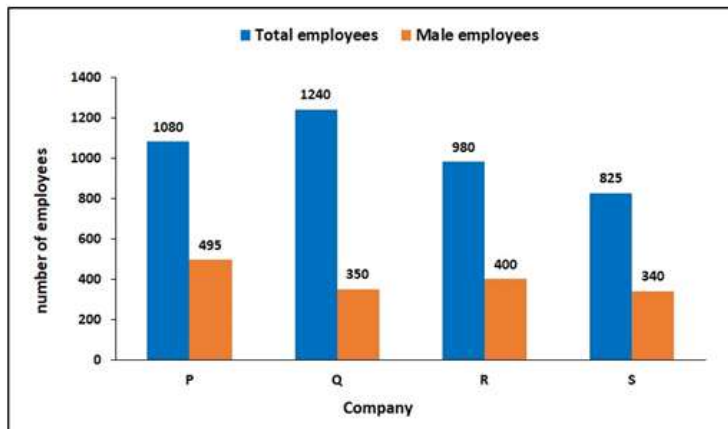
Option 3 ID : 264330537986

Option 4 ID : 264330537985

Status : Answered

Chosen Option : 4

Q.20 The following bar graph shows the total number of employees in 4 different companies.
What is the sum of female employees of company Q and company S?



- Ans
- ✗ 1. 485
 - ✗ 2. 890
 - ✗ 3. 1240
 - ✓ 4. 1375

Question Type : MCQ

Question ID : 264330138053

Option 1 ID : 264330540820

Option 2 ID : 264330540819

Option 3 ID : 264330540822

Option 4 ID : 264330540821

Status : Answered

Chosen Option : 4

Q.1 Two statements are given followed by two conclusions numbered I and II. Assuming the statements to be true, even if they seem to be at variance with commonly known facts, decide which of the conclusions logically follow(s) from the statements.

Statements:

Some milk are curd.

Some curd are butter.

Conclusions:

I. Some milk are butter.

II. Some butter are curd.

- Ans**
- 1. Both conclusions I and II follow
 - 2. Neither conclusion I nor II follows
 - 3. Only conclusion II follows
 - 4. Only conclusion I follows

Question Type : **MCQ**

Question ID : **264330137841**

Option 1 ID : **264330539973**

Option 2 ID : **264330539974**

Option 3 ID : **264330539972**

Option 4 ID : **264330539971**

Status : **Answered**

Chosen Option : **1**

Q.2 In a certain code language, 'WORLD' is coded as '5', 'UPDATE' is coded as '6'. What is the code for 'GLOBALLY' in that code language?

- Ans**
- 1. 8
 - 2. 19
 - 3. 7
 - 4. 9

Question Type : **MCQ**

Question ID : **264330137370**

Option 1 ID : **264330538107**

Option 2 ID : **264330538110**

Option 3 ID : **264330538109**

Option 4 ID : **264330538108**

Status : **Answered**

Chosen Option : **1**

Q.3 Six sisters Anu, Ankita, Asha, Amy, Anveshi and Aisha are sitting around a circular table facing each other. Anu sits to the immediate left of Ankita. Amy sits exactly between Asha and Aisha. Aisha does not sit adjacent to Anveshi who sits second to the right of Anu. Who sits to the immediate right of Ankita?

- Ans**
- 1. Amy
 - 2. Asha
 - 3. Aisha
 - 4. Anveshi

Question Type : **MCQ**

Question ID : **264330137839**

Option 1 ID : **264330539965**

Option 2 ID : **264330539963**

Option 3 ID : **264330539966**

Option 4 ID : **264330539964**

Status : **Answered**

Chosen Option : **3**

Q.4 In a certain code language, 'WODMF' is written as 'ZRDKD'. How will 'EIDMC' be written in that language?

- Ans**
- 1. HLDKA
 - 2. HDLKA
 - 3. HALDA
 - 4. HDLAK

Question Type : **MCQ**
Question ID : **264330134960**
Option 1 ID : **264330528776**
Option 2 ID : **264330528775**
Option 3 ID : **264330528777**
Option 4 ID : **264330528778**
Status : **Answered**
Chosen Option : **1**

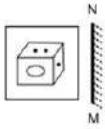
Q.5 Which two numbers should be interchanged to make the given equation correct?

$$4 \times 8 - 12 + 5 = 16$$

- Ans**
- 1. 4 and 5
 - 2. 8 and 5
 - 3. 16 and 8
 - 4. 12 and 16

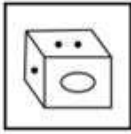
Question Type : **MCQ**
Question ID : **264330137847**
Option 1 ID : **264330539997**
Option 2 ID : **264330539998**
Option 3 ID : **264330539995**
Option 4 ID : **264330539996**
Status : **Answered**
Chosen Option : **2**

Q.6 Select the correct mirror image of the given figure when the mirror MN is placed to the right side of the figure.

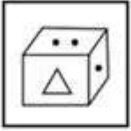


Ans

✓ 1.



✗ 2.



✗ 3.



✗ 4.



Question Type : **MCQ**

Question ID : **264330137828**

Option 1 ID : **264330539921**

Option 2 ID : **264330539920**

Option 3 ID : **264330539922**

Option 4 ID : **264330539919**

Status : **Answered**

Chosen Option : **1**

Q.7 Which of the following numbers will replace the question mark (?) in the given series?

13, 9, 5, 1, -3, -7, -11, ?

Ans

✗ 1. -13

✓ 2. -15

✗ 3. -14

✗ 4. -16

Question Type : **MCQ**

Question ID : **264330137844**

Option 1 ID : **264330539984**

Option 2 ID : **264330539986**

Option 3 ID : **264330539985**

Option 4 ID : **264330539983**

Status : **Answered**

Chosen Option : **1**

Q.8 Which of the following letter will replace the question mark (?) in the given series?

D, H, L, P, T, ?

- Ans**
- 1. M
 - 2. P
 - 3. X
 - 4. R

Question Type : **MCQ**

Question ID : **264330137830**

Option 1 ID : **264330539930**

Option 2 ID : **264330539927**

Option 3 ID : **264330539928**

Option 4 ID : **264330539929**

Status : **Answered**

Chosen Option : **3**

Q.9 Five brothers Drake, David, Dany, Derk, and Dim are sitting on a bench facing north. Derk is sitting to the immediate right of Dany. Dim is sitting exactly in between Drake and David. No one sits to the left of Drake. Who sits to the immediate left of Dany?

- Ans**
- 1. Derk
 - 2. David
 - 3. Drake
 - 4. Dim

Question Type : **MCQ**

Question ID : **264330137838**

Option 1 ID : **264330539959**

Option 2 ID : **264330539960**

Option 3 ID : **264330539962**

Option 4 ID : **264330539961**

Status : **Answered**

Chosen Option : **3**

Q.10 Which of the following numbers will replace the question mark (?) in the given series?

75, 76, 78, 79, 81, 82, 84, 85, 87, ?

- Ans**
- 1. 96
 - 2. 88
 - 3. 90
 - 4. 80

Question Type : **MCQ**

Question ID : **264330133397**

Option 1 ID : **264330522620**

Option 2 ID : **264330522621**

Option 3 ID : **264330522619**

Option 4 ID : **264330522622**

Status : **Answered**

Chosen Option : **2**

Q.11 Select the option that is related to the third letter cluster in the same way as the second letter cluster is related to the first letter cluster.

DMK : ENJ :: QOC : ?

- Ans**
- 1. BRP
 - 2. RBP
 - 3. PRM
 - 4. RPB

Question Type : **MCQ**
Question ID : **264330137833**
Option 1 ID : **264330539940**
Option 2 ID : **264330539941**
Option 3 ID : **264330539942**
Option 4 ID : **264330539939**
Status : **Answered**
Chosen Option : **4**

Q.12 In a certain code language, 'BONE' is written as 'F15R5'. How will 'NOSE' be written in that language?

- Ans**
- 1. R15W5
 - 2. R61W5
 - 3. R51W5
 - 4. R5W51

Question Type : **MCQ**
Question ID : **264330135024**
Option 1 ID : **264330529032**
Option 2 ID : **264330529034**
Option 3 ID : **264330529031**
Option 4 ID : **264330529033**
Status : **Answered**
Chosen Option : **1**

Q.13 Select the option that is related to the third word in the same way as the second word is related to the first word.

Butterfly : Caterpillar :: Sheep : ?

- Ans**
- 1. Cat
 - 2. Pigeon
 - 3. Lamb
 - 4. Kitty

Question Type : **MCQ**
Question ID : **264330137832**
Option 1 ID : **264330539935**
Option 2 ID : **264330539938**
Option 3 ID : **264330539937**
Option 4 ID : **264330539936**
Status : **Answered**
Chosen Option : **4**

Q.14 Three statements are given followed by two conclusions numbered I and II. Assuming the statements to be true, even if they seem to be at variance with commonly known facts, decide which of the conclusions logically follow(s) from the statements.

Statements:

All birds are crows.

Some crows are parrots.

No crow is a pigeon.

Conclusions:

I. No parrot is a pigeon.

II. Some birds are parrots.

- Ans**
- 1. Only conclusion I follows
 - 2. Both conclusions I and II follow
 - 3. Neither conclusion I nor II follows
 - 4. Only conclusion II follows

Question Type : **MCQ**

Question ID : **264330137842**

Option 1 ID : **264330539975**

Option 2 ID : **264330539977**

Option 3 ID : **264330539978**

Option 4 ID : **264330539976**

Status : **Answered**

Chosen Option : **1**

Q.15 If A denotes 'addition', B denotes 'multiplication', C denotes 'subtraction', and D denotes 'division', then what will be the value of the following equation?

$6A(9D3)C4=?$

- Ans**
- 1. 8
 - 2. 5
 - 3. 12
 - 4. 7

Question Type : **MCQ**

Question ID : **264330138825**

Option 1 ID : **264330543910**

Option 2 ID : **264330543907**

Option 3 ID : **264330543909**

Option 4 ID : **264330543908**

Status : **Answered**

Chosen Option : **2**

Q.16 Select the option that is related to the third number in the same way as the second number is related to the first number.

$13 : 182 :: 17 : ?$

- Ans**
- 1. 440
 - 2. 306
 - 3. 280
 - 4. 360

Question Type : **MCQ**

Question ID : **264330133399**

Option 1 ID : **264330522629**

Option 2 ID : **264330522627**

Option 3 ID : **264330522630**

Option 4 ID : **264330522628**

Status : **Answered**

Chosen Option : **2**

Q.17 Study the given pattern carefully and select the number that can replace the question mark (?) in it.

First row- 64, 69, 74

Second row- 26, 31, 36

Third row- 49, 54, ?

Ans 1. 65

2. 59

3. 37

4. 53

Question Type : **MCQ**

Question ID : **264330137846**

Option 1 ID : **264330539992**

Option 2 ID : **264330539991**

Option 3 ID : **264330539993**

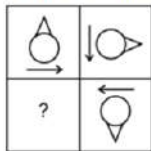
Option 4 ID : **264330539994**

Status : **Answered**

Chosen Option : **2**

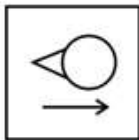
Q.18 Select the option figure that will replace the question mark (?) in the figure given below to complete the pattern.

(rotation is not allowed)



Ans

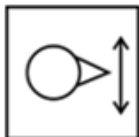
1.



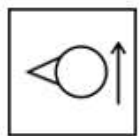
2.



3.



4.



Question Type : **MCQ**

Question ID : **264330137851**

Option 1 ID : **264330540013**

Option 2 ID : **264330540012**

Option 3 ID : **264330540014**

Option 4 ID : **264330540011**

Status : **Answered**

Chosen Option : **4**

Q.19 Select the option figure in which the given figure is embedded. (rotation is NOT allowed)



Ans

1.



2.



3.



4.



Question Type : **MCQ**

Question ID : **264330137827**

Option 1 ID : **264330539915**

Option 2 ID : **264330539917**

Option 3 ID : **264330539918**

Option 4 ID : **264330539916**

Status : **Answered**

Chosen Option : **2**

Q.20 Seven friends M, N, O, P, Q, R, and S having different heights are standing in ascending order of their heights. The tallest person stands on the right and the shortest on the left. Only three friends are taller than O. R is shorter than only Q. N is taller than both P and M but shorter than S. Who is the third tallest?

Ans 1. P

2. N

3. S

4. O

Question Type : **MCQ**

Question ID : **264330137840**

Option 1 ID : **264330539967**

Option 2 ID : **264330539968**

Option 3 ID : **264330539970**

Option 4 ID : **264330539969**

Status : **Answered**

Chosen Option : **4**

Section : **General Awareness**

Q.1 Which device is used to either break electric circuit or to complete it?

- Ans
- 1. Insulators
 - 2. Wires
 - 3. Switch
 - 4. Bulb

Question Type : **MCQ**
Question ID : **264330133897**
Option 1 ID : **264330524614**
Option 2 ID : **264330524613**
Option 3 ID : **264330524612**
Option 4 ID : **264330524611**
Status : **Answered**
Chosen Option : **3**

Q.2 When was the Tattvabodhini Sabha founded by Debendra Nath Tagore?

- Ans
- 1. 1845
 - 2. 1839
 - 3. 1854
 - 4. 1832

Question Type : **MCQ**
Question ID : **264330137935**
Option 1 ID : **264330540348**
Option 2 ID : **264330540350**
Option 3 ID : **264330540347**
Option 4 ID : **264330540349**
Status : **Answered**
Chosen Option : **1**

Q.3 The Board of Control for Cricket in India (BCCI) was established in _____.

- Ans
- 1. 1928
 - 2. 1924
 - 3. 1922
 - 4. 1926

Question Type : **MCQ**
Question ID : **264330133885**
Option 1 ID : **264330524566**
Option 2 ID : **264330524564**
Option 3 ID : **264330524563**
Option 4 ID : **264330524565**
Status : **Answered**
Chosen Option : **4**

Q.4 Ustaaad Allauddin Khan, a famous Indian musician is associated with _____ musical instrument.

- Ans**
- 1. Surbahar
 - 2. Santoor
 - 3. Sarod
 - 4. Sitar

Question Type : **MCQ**
Question ID : **264330137962**
Option 1 ID : **264330540456**
Option 2 ID : **264330540458**
Option 3 ID : **264330540457**
Option 4 ID : **264330540455**
Status : **Answered**
Chosen Option : **3**

Q.5 Generally, in India population census is conducted after how many years?

- Ans**
- 1. 20
 - 2. 15
 - 3. 10
 - 4. 5

Question Type : **MCQ**
Question ID : **264330138341**
Option 1 ID : **264330541974**
Option 2 ID : **264330541973**
Option 3 ID : **264330541972**
Option 4 ID : **264330541971**
Status : **Answered**
Chosen Option : **3**

Q.6 Rani – Ki – Vav (the Queen’s stepwell) is situated on the banks of which river?

- Ans**
- 1. Ganga
 - 2. Yamuna
 - 3. Krishna
 - 4. Saraswati

Question Type : **MCQ**
Question ID : **264330138873**
Option 1 ID : **264330544099**
Option 2 ID : **264330544100**
Option 3 ID : **264330544102**
Option 4 ID : **264330544101**
Status : **Answered**
Chosen Option : **2**

Q.7 'I2U2' initiative is also referred as _____.

- Ans
- 1. East European Quad
 - 2. West European Quad
 - 3. West Asian Quad
 - 4. East Asian Quad

Question Type : MCQ

Question ID : 264330134628

Option 1 ID : 264330527470

Option 2 ID : 264330527469

Option 3 ID : 264330527467

Option 4 ID : 264330527468

Status : Answered

Chosen Option : 3

Q.8 What is the jelly like substance between the nucleus and the cell membrane called?

- Ans
- 1. plasma
 - 2. cell wall
 - 3. plasma membrane
 - 4. cytoplasm

Question Type : MCQ

Question ID : 264330133895

Option 1 ID : 264330524605

Option 2 ID : 264330524603

Option 3 ID : 264330524606

Option 4 ID : 264330524604

Status : Answered

Chosen Option : 2

Q.9 In November 2022, Pradhan Mantri National Apprenticeship Mela held in _____.

- Ans
- 1. 152 districts
 - 2. 120 districts
 - 3. 199 districts
 - 4. 182 districts

Question Type : MCQ

Question ID : 264330137944

Option 1 ID : 264330540383

Option 2 ID : 264330540384

Option 3 ID : 264330540385

Option 4 ID : 264330540386

Status : Not Answered

Chosen Option : --

Q.10 Navreh is the lunar new year that is celebrated in which of the following states/union territories?

- Ans**
- 1. Sikkim
 - 2. Assam
 - 3. Manipur
 - 4. Jammu and Kashmir

Question Type : **MCQ**
Question ID : **264330137922**
Option 1 ID : **264330540296**
Option 2 ID : **264330540295**
Option 3 ID : **264330540298**
Option 4 ID : **264330540297**
Status : **Answered**
Chosen Option : **3**

Q.11 Which article of the Indian constitution talks about Oath or affirmation by the President?

- Ans**
- 1. Article 72
 - 2. Article 60
 - 3. Article 45
 - 4. Article 56

Question Type : **MCQ**
Question ID : **264330137965**
Option 1 ID : **264330540470**
Option 2 ID : **264330540468**
Option 3 ID : **264330540467**
Option 4 ID : **264330540469**
Status : **Answered**
Chosen Option : **1**

Q.12 Which of the following will NOT participate in the election of president?

- Ans**
- 1. Elected Lok Sabha Members
 - 2. Elected members of state legislative assemblies
 - 3. Elected members of state legislative council
 - 4. Elected Rajya Sabha Members

Question Type : **MCQ**
Question ID : **264330138882**
Option 1 ID : **264330544135**
Option 2 ID : **264330544137**
Option 3 ID : **264330544138**
Option 4 ID : **264330544136**
Status : **Answered**
Chosen Option : **2**

Q.13 Andaman Islands and Nicobar islands are separated by a water body which is called the _____ .

- Ans**
- 1. Conolly Canal
 - 2. Palk Strait
 - 3. Ten Degree Channel
 - 4. Gulf of Mannar

Question Type : **MCQ**
Question ID : **264330137954**
Option 1 ID : **264330540426**
Option 2 ID : **264330540423**
Option 3 ID : **264330540425**
Option 4 ID : **264330540424**
Status : **Answered**
Chosen Option : **3**

Q.14 Which component of the cell organelles principally performs the function of packaging materials, to be delivered either to the intra-cellular targets or secreted outside the cell?

- Ans**
- 1. Chloroplast
 - 2. Mitochondria
 - 3. Golgi Apparatus
 - 4. Chromosomes

Question Type : **MCQ**
Question ID : **264330137950**
Option 1 ID : **264330540407**
Option 2 ID : **264330540409**
Option 3 ID : **264330540410**
Option 4 ID : **264330540408**
Status : **Answered**
Chosen Option : **2**

Q.15 As per Schedule 8 of the Indian Constitution, how many official languages are there in India?

- Ans**
- 1. 22
 - 2. 12
 - 3. 42
 - 4. 32

Question Type : **MCQ**
Question ID : **264330137964**
Option 1 ID : **264330540464**
Option 2 ID : **264330540463**
Option 3 ID : **264330540466**
Option 4 ID : **264330540465**
Status : **Answered**
Chosen Option : **1**

Q.16 Roger Federer is a famous player of _____ sport.

- Ans
- 1. Rugby
 - 2. Lawn Bowls
 - 3. Football
 - 4. Lawn Tennis

Question Type : MCQ

Question ID : 264330137966

Option 1 ID : 264330540473

Option 2 ID : 264330540471

Option 3 ID : 264330540474

Option 4 ID : 264330540472

Status : Answered

Chosen Option : 4

Q.17 In the early 18th century, Rajput Ruler Sawai Raja Jai Singh founded his new capital at _____.

- Ans
- 1. Ajmer
 - 2. Jodhpur
 - 3. Jaipur
 - 4. Udaipur

Question Type : MCQ

Question ID : 264330133903

Option 1 ID : 264330524635

Option 2 ID : 264330524636

Option 3 ID : 264330524637

Option 4 ID : 264330524638

Status : Not Answered

Chosen Option : --

Q.18 Cultivation of wheat thrives best in which type of soil?

- Ans
- 1. Yellow soil
 - 2. Red soil
 - 3. Black soil
 - 4. Well drained loamy soil

Question Type : MCQ

Question ID : 264330134636

Option 1 ID : 264330527502

Option 2 ID : 264330527499

Option 3 ID : 264330527500

Option 4 ID : 264330527501

Status : Answered

Chosen Option : 3

Q.19 According to census 2011, which is the second largest religious minority of India?

- Ans 1. Christians
 2. Buddhist
 3. Sikhs
 4. Muslim

Question Type : MCQ

Question ID : 264330134638

Option 1 ID : 264330527509

Option 2 ID : 264330527510

Option 3 ID : 264330527508

Option 4 ID : 264330527507

Status : Answered

Chosen Option : 3

Q.20 Raut Nacha is a famous folk dance form of _____ state of India.

- Ans 1. Chhattisgarh
 2. Sikkim
 3. Punjab
 4. Karnataka

Question Type : MCQ

Question ID : 264330137946

Option 1 ID : 264330540392

Option 2 ID : 264330540394

Option 3 ID : 264330540391

Option 4 ID : 264330540393

Status : Answered

Chosen Option : 1

Q.21 During the reign of which of the following Pallavas, Hiuen Tsang visited the Pallava capital Kanchi?

- Ans 1. Narasimhavarman I
 2. Narasimhavarman II
 3. Mahendravarman II
 4. Mahendravarman I

Question Type : MCQ

Question ID : 264330137932

Option 1 ID : 264330540336

Option 2 ID : 264330540337

Option 3 ID : 264330540338

Option 4 ID : 264330540335

Status : Answered

Chosen Option : 2

Q.22 Which organisation is associated with the estimation of poverty line in India?

- Ans**
- 1. NITI Aayog
 - 2. Reserve Bank of India
 - 3. Indian Council of Agricultural Research
 - 4. National Sample Survey Organisation

Question Type : **MCQ**
Question ID : **264330134681**
Option 1 ID : **264330527681**
Option 2 ID : **264330527682**
Option 3 ID : **264330527680**
Option 4 ID : **264330527679**
Status : **Answered**
Chosen Option : **4**

Q.23 The result of English Education Act of 1835 was to make _____ as a medium of instruction for _____ education.

- Ans**
- 1. vernacular, higher
 - 2. English, primary
 - 3. English, higher
 - 4. vernacular, primary

Question Type : **MCQ**
Question ID : **264330138894**
Option 1 ID : **264330544186**
Option 2 ID : **264330544183**
Option 3 ID : **264330544184**
Option 4 ID : **264330544185**
Status : **Answered**
Chosen Option : **1**

Q.24 What is the official reason given by Britishers after partition of Bengal in 1905?

- Ans**
- 1. Easy Movement of army
 - 2. To check on Extremist activities
 - 3. Economic Progress
 - 4. Administrative Convenience

Question Type : **MCQ**
Question ID : **264330134643**
Option 1 ID : **264330527529**
Option 2 ID : **264330527530**
Option 3 ID : **264330527528**
Option 4 ID : **264330527527**
Status : **Answered**
Chosen Option : **2**

Q.25 The main minerals constituents of the continental mass are _____ and _____.

- Ans
- 1. silica, magnesium
 - 2. silica, alumina
 - 3. oxygen, carbon
 - 4. alumina, magnesium

Question Type : **MCQ**
Question ID : **264330133896**
Option 1 ID : **264330524608**
Option 2 ID : **264330524610**
Option 3 ID : **264330524607**
Option 4 ID : **264330524609**
Status : **Answered**
Chosen Option : **4**

Section : English Language and Comprehension

Q.1 Choose the word that can substitute the given group of words.
A person who leaves his native country to settle in another

- Ans
- 1. Emigrant
 - 2. Nomad
 - 3. Itinerant
 - 4. Domicile

Question Type : **MCQ**
Question ID : **264330134360**
Option 1 ID : **264330526426**
Option 2 ID : **264330526425**
Option 3 ID : **264330526423**
Option 4 ID : **264330526424**
Status : **Answered**
Chosen Option : **1**

Q.2 Choose the word that is opposite in meaning to the given word.

Absence

- Ans
- 1. Privation
 - 2. Vanity
 - 3. Surfeit
 - 4. Dearth

Question Type : **MCQ**
Question ID : **264330136839**
Option 1 ID : **264330536049**
Option 2 ID : **264330536047**
Option 3 ID : **264330536048**
Option 4 ID : **264330536050**
Status : **Not Answered**
Chosen Option : **--**

Q.3 The statement below has been given with bracketed text. Select the option with correct idiom for the bracketed text.

His mother and I (share the same opinion) about his decision to drop out of college.

- Ans**
- 1. see eye to eye
 - 2. feel blue
 - 3. leave no stone unturned
 - 4. paint the town red

Question Type : **MCQ**
Question ID : **264330136405**
Option 1 ID : **264330534383**
Option 2 ID : **264330534385**
Option 3 ID : **264330534384**
Option 4 ID : **264330534386**
Status : **Answered**
Chosen Option : **1**

Q.4 Select the word from the options which is exactly opposite in meaning to the bracketed word given in the sentence below.

She must have an (affinity) for women with dark hair.

- Ans**
- 1. Tendency
 - 2. Stand
 - 3. Dodge
 - 4. Dislike

Question Type : **MCQ**
Question ID : **264330136403**
Option 1 ID : **264330534377**
Option 2 ID : **264330534376**
Option 3 ID : **264330534375**
Option 4 ID : **264330534378**
Status : **Not Answered**
Chosen Option : **--**

Q.5 Fill in the blank with the most appropriate option.

Every story in this collection is unique, inspirational, and _____.

- Ans**
- 1. relatable
 - 2. sustainable
 - 3. culpable
 - 4. apprehensive

Question Type : **MCQ**
Question ID : **264330136409**
Option 1 ID : **264330534400**
Option 2 ID : **264330534401**
Option 3 ID : **264330534402**
Option 4 ID : **264330534399**
Status : **Answered**
Chosen Option : **1**

Q.6 Select the most appropriate option to fill in the blank.

Very special care should be taken to proportion the sand so as to make a perfectly _____ mixture.

- Ans**
- 1. envious
 - 2. obvious
 - 3. devious
 - 4. impervious

Question Type : **MCQ**
Question ID : **264330136315**
Option 1 ID : **264330534038**
Option 2 ID : **264330534036**
Option 3 ID : **264330534037**
Option 4 ID : **264330534035**
Status : **Answered**
Chosen Option : **4**

Q.7 Fill in the blank with the most appropriate option.

Towel off and _____ your moisturizer immediately.

- Ans**
- 1. refer
 - 2. touch
 - 3. surrender
 - 4. apply

Question Type : **MCQ**
Question ID : **264330136390**
Option 1 ID : **264330534330**
Option 2 ID : **264330534329**
Option 3 ID : **264330534327**
Option 4 ID : **264330534328**
Status : **Answered**
Chosen Option : **4**

Q.8 Select the most appropriate word for the given group of words.

Abundant garbage kept at one place.

- Ans**
- 1. Mound of garbage
 - 2. Hill of garbage
 - 3. Lot of garbage
 - 4. Heap of garbage

Question Type : **MCQ**
Question ID : **264330136399**
Option 1 ID : **264330534361**
Option 2 ID : **264330534359**
Option 3 ID : **264330534362**
Option 4 ID : **264330534360**
Status : **Answered**
Chosen Option : **1**

Q.9 Identify the segment that contains a grammatical error. If there is no error, select 'No error'.
Your ears are itching / because you are having an / allergic reaction.

- Ans**
- 1. because you are having an
 - 2. Your ears are itching
 - 3. allergic reaction.
 - 4. No error

Question Type : **MCQ**
Question ID : **264330136692**
Option 1 ID : **264330535484**
Option 2 ID : **264330535483**
Option 3 ID : **264330535485**
Option 4 ID : **264330535486**
Status : **Answered**
Chosen Option : 1

Q.10 Four words are given, out of which only one word is spelt correctly. Choose the correctly spelt word.

- Ans**
- 1. RHYTHM
 - 2. SIEZE
 - 3. FLOWWER
 - 4. RECOMEND

Question Type : **MCQ**
Question ID : **264330136406**
Option 1 ID : **264330534388**
Option 2 ID : **264330534387**
Option 3 ID : **264330534390**
Option 4 ID : **264330534389**
Status : **Answered**
Chosen Option : 2

Q.11 Select the wrongly spelt word.

- Ans**
- 1. Perfidious
 - 2. Circuitous
 - 3. Adulation
 - 4. Anonyomus

Question Type : **MCQ**
Question ID : **264330136314**
Option 1 ID : **264330534032**
Option 2 ID : **264330534031**
Option 3 ID : **264330534033**
Option 4 ID : **264330534034**
Status : **Answered**
Chosen Option : 4

Q.12 Select the word from the options which is similar in meaning to the bracketed word given in the sentence below.

The sky was alight from (top) to horizon.

- Ans**
- 1. summit
 - 2. start
 - 3. zenith
 - 4. base

Question Type : **MCQ**
Question ID : **264330136401**
Option 1 ID : **264330534370**
Option 2 ID : **264330534367**
Option 3 ID : **264330534368**
Option 4 ID : **264330534369**
Status : **Answered**
Chosen Option : **3**

Q.13 Improve the underlined part of the sentence. Choose 'No improvement' as an answer if the sentence is grammatically correct.

Watch your step—the third stair have a broken tread.

- Ans**
- 1. has a break
 - 2. No improvement
 - 3. has a broken
 - 4. has a broke

Question Type : **MCQ**
Question ID : **264330134826**
Option 1 ID : **264330528244**
Option 2 ID : **264330528246**
Option 3 ID : **264330528245**
Option 4 ID : **264330528243**
Status : **Answered**
Chosen Option : **3**

Q.14 Find the part of the given sentence that has an error in it. If there is no error, choose 'No error'.

The political economy of reforms teaches us one major lesson loud and clearer.

- Ans**
- 1. teaches us one major
 - 2. The political economy of reforms
 - 3. No error
 - 4. lesson loud and clearer.

Question Type : **MCQ**
Question ID : **264330135308**
Option 1 ID : **264330530144**
Option 2 ID : **264330530143**
Option 3 ID : **264330530146**
Option 4 ID : **264330530145**
Status : **Answered**
Chosen Option : **4**

Q.15 Identify the segment that contains a grammatical error. If there is no error, select 'No error'.

'Don't you get / involve!' Sandhya / whispered urgently to him.

- Ans**
- 1. whispered urgently to him.
 - 2. involve!" Sandhya
 - 3. Don't you get
 - 4. No error

Question Type : **MCQ**
Question ID : **264330136386**
Option 1 ID : **264330534313**
Option 2 ID : **264330534312**
Option 3 ID : **264330534311**
Option 4 ID : **264330534314**
Status : **Answered**
Chosen Option : **4**

Q.16 Select the most appropriate option to fill in the blank.

And his _____ manner should not be mistaken for a lack of energy.

- Ans**
- 1. daunt
 - 2. deem
 - 3. diffident
 - 4. debase

Question Type : **MCQ**
Question ID : **264330136516**
Option 1 ID : **264330534809**
Option 2 ID : **264330534810**
Option 3 ID : **264330534807**
Option 4 ID : **264330534808**
Status : **Not Answered**
Chosen Option : **--**

Q.17 In the following question, out of the given four alternatives, select the alternative which best expresses the meaning of the Idiom/Phrase.
Born with silver spoon in one's mouth

- Ans**
- 1. To accomplish two tasks in one attempt
 - 2. A work which needs tremendous energy
 - 3. Useful for one's purpose
 - 4. Born in a very rich family

Question Type : **MCQ**
Question ID : **264330134366**
Option 1 ID : **264330526449**
Option 2 ID : **264330526447**
Option 3 ID : **264330526450**
Option 4 ID : **264330526448**
Status : **Answered**
Chosen Option : **1**

Q.18 Select the most appropriate synonym of the given word.

Withdraw

- Ans**
- 1. Engage
 - 2. Combine
 - 3. Retreat
 - 4. Persevere

Question Type : **MCQ**
Question ID : **264330136400**
Option 1 ID : **264330534364**
Option 2 ID : **264330534365**
Option 3 ID : **264330534366**
Option 4 ID : **264330534363**
Status : **Answered**
Chosen Option : **2**

Q.19 Select the word segment that substitutes (replaces) the bracketed word segment correctly and completes the sentence meaningfully. Select the option 'no correction required' if the sentence is correct as given.
There were creatures (stood between) the carriage shafts.

- Ans**
- 1. No correction required
 - 2. stands among
 - 3. standing between
 - 4. stood among

Question Type : **MCQ**
Question ID : **264330136695**
Option 1 ID : **264330535498**
Option 2 ID : **264330535496**
Option 3 ID : **264330535495**
Option 4 ID : **264330535497**
Status : **Answered**
Chosen Option : **2**

Q.20 Select the most appropriate option to substitute the bracketed segment in the given sentence. If there is no need to substitute it, select 'no substitution required'.

When it comes to face masks, the (market are flooded with choices).

- Ans**
- 1. No substitution required
 - 2. market is flooded with choices
 - 3. market are flooded off choices
 - 4. markets is flooded with choices

Question Type : **MCQ**
Question ID : **264330136514**
Option 1 ID : **264330534802**
Option 2 ID : **264330534799**
Option 3 ID : **264330534801**
Option 4 ID : **264330534800**
Status : **Answered**
Chosen Option : **1**

Comprehension:

In the following passage some of the words have been deleted. Read the passage carefully and select the correct answer for the given blank out of the four alternatives.

The study, published today in a magazine, finds that kids (1) _____ played only individual sports, like tennis or gymnastics, tended to (2) _____ more mental health difficulties. As a researcher, Hoffmann has long been interested in how sports (3) _____ the psychological health of young people, partly because studies have (4) _____ both positive and negative associations between mental health and sports (5) _____ in children and adolescents.

SubQuestion No : 21

Q.21 Select the most appropriate option to fill in the blank No. 1.

- Ans**
- 1. whose
 - 2. that
 - 3. which
 - 4. who

Question Type : **MCQ**
Question ID : **264330136830**
Option 1 ID : **264330536011**
Option 2 ID : **264330536014**
Option 3 ID : **264330536013**
Option 4 ID : **264330536012**
Status : **Answered**
Chosen Option : **4**

Comprehension:

In the following passage some of the words have been deleted. Read the passage carefully and select the correct answer for the given blank out of the four alternatives.

The study, published today in a magazine, finds that kids (1) _____ played only individual sports, like tennis or gymnastics, tended to (2) _____ more mental health difficulties. As a researcher, Hoffmann has long been interested in how sports (3) _____ the psychological health of young people, partly because studies have (4) _____ both positive and negative associations between mental health and sports (5) _____ in children and adolescents.

SubQuestion No : 22

Q.22 Select the most appropriate option to fill in the blank No. 2.

- Ans**
- 1. breathe
 - 2. claim
 - 3. absorb
 - 4. face

Question Type : **MCQ**
Question ID : **264330136831**
Option 1 ID : **264330536018**
Option 2 ID : **264330536016**
Option 3 ID : **264330536015**
Option 4 ID : **264330536017**
Status : **Answered**
Chosen Option : **4**

Comprehension:

In the following passage some of the words have been deleted. Read the passage carefully and select the correct answer for the given blank out of the four alternatives.

The study, published today in a magazine, finds that kids (1) _____ played only individual sports, like tennis or gymnastics, tended to (2) _____ more mental health difficulties. As a researcher, Hoffmann has long been interested in how sports (3) _____ the psychological health of young people, partly because studies have (4) _____ both positive and negative associations between mental health and sports (5) _____ in children and adolescents.

SubQuestion No : 23

Q.23 Select the most appropriate option to fill in the blank No. 3.

- Ans
- 1. thrash
 - 2. impact
 - 3. torment
 - 4. request

Question Type : **MCQ**
Question ID : **264330136832**
Option 1 ID : **264330536020**
Option 2 ID : **264330536022**
Option 3 ID : **264330536019**
Option 4 ID : **264330536021**
Status : **Answered**
Chosen Option : **2**

Comprehension:

In the following passage some of the words have been deleted. Read the passage carefully and select the correct answer for the given blank out of the four alternatives.

The study, published today in a magazine, finds that kids (1) _____ played only individual sports, like tennis or gymnastics, tended to (2) _____ more mental health difficulties. As a researcher, Hoffmann has long been interested in how sports (3) _____ the psychological health of young people, partly because studies have (4) _____ both positive and negative associations between mental health and sports (5) _____ in children and adolescents.

SubQuestion No : 24

Q.24 Select the most appropriate option to fill in the blank No. 4.

- Ans
- 1. founded
 - 2. founds
 - 3. find
 - 4. found

Question Type : **MCQ**
Question ID : **264330136833**
Option 1 ID : **264330536024**
Option 2 ID : **264330536023**
Option 3 ID : **264330536025**
Option 4 ID : **264330536026**
Status : **Answered**
Chosen Option : **4**

Comprehension:

In the following passage some of the words have been deleted. Read the passage carefully and select the correct answer for the given blank out of the four alternatives.

The study, published today in a magazine, finds that kids (1) _____ played only individual sports, like tennis or gymnastics, tended to (2) _____ more mental health difficulties. As a researcher, Hoffmann has long been interested in how sports (3) _____ the psychological health of young people, partly because studies have (4) _____ both positive and negative associations between mental health and sports (5) _____ in children and adolescents.

SubQuestion No : 25

Q.25 Select the most appropriate option to fill in the blank No. 5.

- Ans**
- 1. establishment
 - 2. remuneration
 - 3. participation
 - 4. celebration

Question Type : **MCQ**

Question ID : **264330136834**

Option 1 ID : **264330536029**

Option 2 ID : **264330536030**

Option 3 ID : **264330536027**

Option 4 ID : **264330536028**

Status : **Answered**

Chosen Option : **4**