

## 150 Questions

---

**Que. 1** मच्छरों के प्रकोप के सम्बन्ध में शिकायत पत्र लिखना हो तो किसे लिखेंगे?

1. माननीय स्वास्थ्य अधिकारी को
2. प्रधानमंत्री जी को
3. मा. प्रधानाध्यापक जी को
4. मा. शिक्षाधिकारी को

Correct Option - 1

---

**Que. 2** जिनका उच्चारण स्वतंत्रता से होता है और जो व्यंजन के उच्चारण में सहायक होते हैं उसे कहते हैं :

1. संज्ञा
2. स्वर
3. व्यंजन
4. विसर्ग

Correct Option - 2

---

**Que. 3** इ, ई, च, छ, ज, झ, ञ आदि का उच्चारण किससे होता है?

1. कंठ्य से
2. मूर्धन्य से
3. तालव्य से
4. ओष्ठ से

Correct Option - 3

---

**Que. 4** एक से अधिक वर्णों के मेल को कहते हैं :

1. अक्षर
2. स्वर
3. व्यंजन
4. अनुस्वार

Correct Option - 3

---

**Que. 5** निम्नलिखित शब्दों में से स्वर संधि को पहचानिए :

1. पुस्तकालय
2. सद्गति

3. दिग्दर्शन
4. उज्ज्वल

Correct Option - 1

---

**Que. 6** मुंबई में गगनचुम्बी इमारतें बहुत हैं।  
रेखांकित शब्द में कौन सा समास समाहित है?

1. तत्पुरुष समास
2. कर्मधारय समास
3. द्विगु समास
4. अव्ययीभाव समास

Correct Option - 1

---

**Que. 7** हमें अपशब्द नहीं बोलना चाहिए।  
व्याकरण की दृष्टि से रेखांकित शब्द क्या है?

1. विशेषण
2. संज्ञा
3. उपसर्ग
4. अव्यय

Correct Option - 3

---

**Que. 8** अफसोस! मैं नहीं जा सका।  
रेखांकित शब्द के अव्यय का प्रकार बताइए:

1. सम्बोधनसूचक अव्यय
2. शोकसूचक अव्यय
3. आश्चर्यसूचक अव्यय
4. हर्षसूचक अव्यय

Correct Option - 2

---

**Que. 9** निम्नलिखित शब्दों में तत्सम शब्द को पहचानिए:

1. कोयल
2. कुक्कुर
3. लाख
4. भीतर

Correct Option - 2

**Que. 10** निम्नलिखित शब्दों में से तद्भव शब्द को पहचानिए?

1. आलस
2. कुष्ठ
3. अंधकार
4. उल्लास

Correct Option - 1

**Que. 11** निम्नलिखित शब्दों में से अर्ध-तत्सम शब्द को पहचानिए:

1. रात्रि
2. दर्ई
3. बच्चा
4. कान

Correct Option - 2

**Que. 12** निम्नलिखित शब्दों में से विदेशी शब्द को पहचानिए:

1. ग्लास
2. अचल
3. आश्चर्य
4. छाता

Correct Option - 1

**Que. 13** निम्नलिखित विशेषणों में से संज्ञा को पहचानिए:

1. आसमानी
2. नियमित
3. पाश्चात्य
4. अनुशासन

Correct Option - 4

**Que. 14** आप की सब राह देख रहे हैं।

रेखांकित शब्द कौन सा सर्वनाम है ?

1. प्रश्नवाचक सर्वनाम
2. सम्बन्धवाचक सर्वनाम

3. निश्चयवाचक सर्वनाम
4. निजवाचक सर्वनाम

Correct Option - 4

---

**Que. 15** निम्नलिखित शब्दों में से विशेषण को पहचानिए:

1. मजहब
2. नैतिक
3. पीड़ा
4. अज्ञान

Correct Option - 2

---

**Que. 16** उसे धीरे-धीरे लिखने की आदत है।  
रेखांकित शब्द क्या है?

1. क्रिया विशेषण
2. क्रिया
3. सर्वनाम
4. संज्ञा

Correct Option - 1

---

**Que. 17** वह पढ़ता है लेकिन बात भी बहुत करता है।  
व्याकरण की दृष्टि से रेखांकित शब्द को पहचानिए :

1. क्रिया विशेषण
2. अव्यय
3. सर्वनाम
4. संज्ञा

Correct Option - 2

---

**Que. 18** रविवार है, वह घर पर ही रहेगा।  
रेखांकित शब्द को पहचानिए :

1. सर्वनाम
2. प्रत्यय
3. निपात
4. उपसर्ग

Correct Option - 3

**Que. 19** आकाश में चन्द्रमा चमक रहा है।

रेखांकित शब्द का पर्यायवाची नहीं है:

1. व्योम
2. गगन
3. रसाल
4. नभ

Correct Option - 3

**Que. 20** सन्तोष महाधन हैं।

रेखांकित शब्द का सटीक विलोम होगा :

1. असंतोष
2. अस्वीकार
3. असहयोग
4. असार

Correct Option - 1

**Que. 21** युग्म शब्द की कौन सी जोड़ी सही है?

1. न्याय-अन्याय
2. धरा-पृथ्वी
3. अचल-अचला
4. मान-अपमान

Correct Option - 3

**Que. 22** दूसरों की बातों में दखल देना - के लिए एक शब्द क्या होगा?

1. हस्तक्षेप
2. आक्षेप
3. दूरदर्शी
4. उपकारी

Correct Option - 1

**Que. 23** मुंबई के निकट पूना है।

रेखांकित शब्द क्या है?

1. समुच्चयबोधक शब्द
2. सम्बन्धसूचक शब्द
3. सर्वनाम
4. संज्ञा

Correct Option - 2

---

**Que. 24** माता- पिता अपने बच्चों के लिए कड़ी मेहनत हैं।  
रेखांकित शब्द का क्या है?

1. विशेषण
2. परसर्ग
3. सर्वनाम
4. संज्ञा

Correct Option - 2

---

**Que. 25** वचन की दृष्टि से कौन-सा जोड़ा सही नहीं है?

1. लता - लताएँ
2. घोड़ा - घोड़े
3. किताब - किताबें
4. सखी - सखीयाँ

Correct Option - 4

---

**Que. 26** जिस वाक्य में कर्म के अनुसार क्रिया में परिवर्तन होता है, उस वाक्य को कहते हैं :

1. कर्तृवाच्य
2. कर्मवाच्य
3. भाववाच्य
4. संयुक्तवाच्य

Correct Option - 2

---

**Que. 27** निम्नलिखित वाक्यों में से भविष्यत काल को पहचानिए:

1. गाय घास चरती है।
2. रोहन मुंबई गया था।
3. मैं कल घूमने जाऊँगी।
4. माँ बच्चों को पढ़ा रही है।

Correct Option - 3

---

**Que. 28** मध्यम पुरूष 'तू' का सही बहुवचन होगा :

1. आप लोग
2. तुम लोग
3. हम
4. ये लोग

Correct Option - 2

---

**Que. 29** जिस वाक्य में इसलिए, और, क्योंकि, लेकिन, परन्तु आदि समुच्चयबोधक शब्द जुड़ते हैं।

1. संयुक्त वाक्य
2. मिश्र वाक्य
3. सरल वाक्य
4. विधान वाक्य

Correct Option - 1

---

**Que. 30** बच्चे खेल रहे हैं।

अर्थ के आधार पर वाक्य का प्रकार बताइए:

1. प्रश्नवाचक
2. विधानवाक्य
3. निषेधात्मक वाक्य
4. आज्ञावाचक वाक्य

Correct Option - 2

---

**Que. 31** तुमको मुझे पढ़ाना है।

अशुद्ध अंश को पहचानिए:

1. तुमको
2. मुझे
3. पढ़ाना
4. है।

Correct Option - 1

---

**Que. 32** मुझे बाहर जाना है।

रेखांकित चिह्न को पहचानिए :

1. पूर्ण विराम
2. प्रश्नवाचक चिह्न
3. अल्प विराम
4. लाघव चिह्न

Correct Option - 1

---

**Que. 33** किसी पद, उपवाक्य आदि की विशेषता दिखाने के लिए शब्द के नीचे एक रेखा खींचते हैं उसे कहते हैं:

1. प्रश्नवाचक चिह्न
2. अधोरेख चिह्न
3. कोष्ठक चिह्न
4. तिर्यक चिह्न

Correct Option - 2

---

**Que. 34** उसने तो मेरी आँखें खोल दी।

रेखांकित मुहावरे का अर्थ होगा:

1. भ्रम को दूर करना ।
2. किसी बात पर ध्यान न देना ।
3. स्वागत के लिए राह देखना ।
4. अंधकार दूर करना ।

Correct Option - 1

---

**Que. 35** आग लगने पर कुआँ खोदना - लोकोक्ति का सही अर्थ होगा:

1. जल्दी से कार्य करना
2. संकट के समय बचाव के लिए सोचना
3. मुसीबत आने से घबरा जाना
4. कुआँ खोदकर पुण्य कमाना

Correct Option - 2

---

**Que. 36** पृथ्वी, ग्रहों, तारों आदि का स्थान - वाक्यांश के लिए उचित शब्द होगा?

1. समंदर
2. अन्तरिक्ष
3. धरती
4. विश्व



Correct Option - 2

**Que. 37** निम्नलिखित में से समानार्थी जोड़ी को स्पष्ट कीजिए:

1. पार्वती - महेश्वरी
2. व्यावहारिक - अव्यावहारिक
3. शेर - शेरनी
4. लड़का - लड़के

Correct Option - 1

**Que. 38** पूर्वी हिन्दी क्षेत्र में कौन-सी बोली नहीं बोली जाती?

1. अवधी
2. छत्तीसगढ़ी
3. जयपुरी
4. बघेली

Correct Option - 3

**Que. 39** हिन्दी भाषी राज्य के अंतर्गत कौन-सा राज्य नहीं है ?

1. उत्तर प्रदेश
2. बिहार
3. झारखण्ड
4. महाराष्ट्र

Correct Option - 4

**Que. 40** रामचरितमानस के रचयिता कौन हैं?

1. गोस्वामी तुलसीदासजी
2. सूरदास
3. मीराबाई
4. संत तुकाराम

Correct Option - 1

**Que. 41** अंग्रेजी का हिन्दी अनुवाद लिखिए सही अनुवाद स्पष्ट कीजिए:

Disaster problem. to Environment is the biggest

1. प्रदूषण से बचना चाहिए।
2. पर्यावरण को हानि पहुँचाना आज की बड़ी समस्या है।

3. ध्वनि प्रदूषण हमारी समस्या है।
4. प्रदूषण एक समस्या है।

Correct Option - 2

**Que. 42** शिक्षा मनुष्य जीवन की नींव है - सही अनुवाद लिखिए:

1. Education is our life.
2. Education is the foundation of our life.
3. Education leads the better nation.
4. Primary education must be free for all.

Correct Option - 2

**Que. 43** निम्नलिखित गद्यांश को पढ़कर पूछे गए प्रश्नों का उत्तर लिखिए:

हिन्दी साहित्य इतिहास को चार भागों में बाँटा गया है।

1. आदिकाल
2. भक्तिकाल
3. रीतिकाल
4. आधुनिक काल

भक्तिकाल के संत कवि सूरदास जी को कौन नहीं जानता?

भक्तिकाल के कृष्णोपासक सूरदासजी ने सूरसागर, सूरसारावली, साहित्य लहरी, आदि का अनमोल खजाना हिन्दी साहित्य को दिया है। उनके पदों में वात्सल्य, श्रृंगार एवं शांत रस के भाव प्राप्त होते हैं। उनके लिए कहा गया है कि 'सूर सूर तुलसी ससी उडगन केशवदास' वे अष्टछाप के सर्वश्रेष्ठ कवि हैं। उनके काव्य की विशेषता यह है वे गेय पद हैं। उनकी अधिकतर रचना, ब्रजभाषा में पायी जाती है कहीं-कहीं पर संस्कृत व फारसी भाषा के शब्द भी पाये जाते हैं। उनकी रचनाओं में अनुप्रास, यमक, श्लेष, उपमा, उत्प्रेक्षा आदि सभी अलंकार पाये जाते हैं। वे जन्मांध थे लेकिन उनके पदों में जो वर्णन पाया जाता है वह सजीव है। ऐसा लगता ही नहीं है कि वे जन्मांध थे। उनकी मृत्यु 1580 ईसवी में हुई थी। हिन्दी साहित्य जगत में वे सदैव अमर हैं।

हिन्दी साहित्य के इतिहास को कितने भागों में बाँटा गया है?

1. एक
2. चार
3. तीन
4. दो

Correct Option - 2

**Que. 44** सूरदास जी कौन-से काल के संतकवि हैं?

1. भक्तिकाल
2. आदिकाल
3. आधुनिक काल

4. रीतिकाल

Correct Option - 1

---

**Que. 45** निम्नलिखित रचनाओं में से कौन सी रचना सूरदास जी की नहीं है?

1. रमैनी
2. सूरसारावली
3. सूरसागर
4. साहित्य लहरी

Correct Option - 1

---

**Que. 46** सूरदास के पदों में कौन-सा रस नहीं पाया जाता?

1. श्रृंगार रस
2. वात्सल्य रस
3. शांत रस
4. भयानक रस

Correct Option - 4

---

**Que. 47** 'आधे-अधूरे' किस विधा की रचना है?

1. कविता
2. कहानी
3. नाटक
4. उपन्यास

Correct Option - 3

---

**Que. 48** 'जयद्रथ वध' किस की रचना है?

1. जयशंकर प्रसाद
2. सूर्यकांत त्रिपाठी निराला
3. मैथिलीशरण गुप्त
4. महादेवी

Correct Option - 3

---

**Que. 49** निम्नलिखित में से छायावादी रचनाकार कौन है?

1. नागार्जुन
2. मुक्तिबोध

3. सुमित्रानन्दन पंत
4. त्रिलोचन शास्त्रि

Correct Option - 3

**Que. 50** हिन्दी साहित्य को कितने काल-खंडो में विभक्त किया गया है?

1. दो
2. चार
3. पाँच
4. तीन

Correct Option - 2

**Que. 51** The following table gives the sales of LCDs manufactured by a company over they years since its inception.

Number of Different Sizes of LCDs Sold by a Company Over the Years (Numbers in Thousands)

Year	Size of LCDs in Inches						
	40"	50"	55"	60"	65"	70"	75"
2013	43	35	34	38	13	11	6
2014	54	46	46	47	11	12	8
2015	45	53	51	39	21	18	11
2016	56	42	49	42	24	14	14
2017	47	38	54	55	31	21	16

In which year was the maximum number of LCDs sold?

1. 2013
2. 2014
3. 2017
4. 2016

Correct Option - 3

**Que. 52** The total sales of all the six years are maximum for which size LCD?

1. 60"
2. 50"
3. 40"
4. 55"

Correct Option - 3

The percentage of 55" LCDs sold of the total number of LCDs sold was maximum in the year:

**Que. 53**

- 1. 2016
- 2. 2015
- 3. 2017
- 4. 2014

Correct Option - 2

**Que. 54**

Read the question below followed by two statements. Decide which statement ( s) is / are sufficient to answer the question.

**Question:** In which year was Vijay born?

**Statements:**

- I. Vijay, at present, is 24 years younger to his mother.
- II. Vijay's brother, who was born in 2000, is 30 years younger to his mother.

- 1. Statement I alone is sufficient while II alone is not sufficient
- 2. Statement II alone is sufficient while I alone is not sufficient
- 3. Neither statement I nor II is sufficient
- 4. Both statements I and II are sufficient

Correct Option - 4

**Que. 55**

Read the question below followed by two statements. Decide which statement(s) is/are sufficient to answer the question.

**Question:** What will be the total cost of 18 pens, if each of them costs the same?

**Statements:**

- I. One-fourth of the cost of each pen is ₹50.
- II. The total cost of three pens is ₹ 200 more than the total cost of two pens.

- 1. Statement I alone is sufficient while II alone is not sufficient
- 2. Statement II alone is sufficient while I alone is not sufficient.
- 3. Either Statement I or II is sufficient
- 4. Both statements I and II sufficient.

Correct Option - 3

**Que. 56**

Read the question below followed by two statements. Decide which statement ( s) is / are sufficient to answer the question.

**Question:** How is 'GOOD' coded in the code language?

**Statements:**

- I. 'He Li Be B C' means 'He is a good singer' and 'Be N O F Ne' means 'She will sing good songs'.
- II. 'He Li Be B C' means 'He is a good singer' and 'Be N C F Ne' means 'He will sing good songs'.

- 1. Statement I alone is sufficient while II alone is not sufficient
- 2. Statement II alone is sufficient while I alone is not sufficient

- 3. Either Statement I or Statement II is sufficient
- 4. Neither Statement I nor II is sufficient

Correct Option - 1

**Que. 57** If  $\times$  stands for 'addition',  $\div$  stands for 'subtraction',  $+$  stands for 'multiplication' and  $-$  stands for 'division', then

$20 \times 16 - 4 + 2 \div 8 = ?$

- 1. 24
- 2. 20
- 3. 36
- 4. 25

Correct Option - 2

**Que. 58** In a group, there are as many hens as sheep. The men are twice as goats and goats are twice as sheep. If the total leg count is 44, how many four-legged animals are there in the group?

- 1. 14
- 2. 12
- 3. 6
- 4. 8

Correct Option - 3

**Que. 59** Read the statement below followed by two conclusions and decide which of the assumptions is implicit from the statement.

**Statement:**

Only dead fish go with the flow.

**Assumptions:**

- I. Fish cannot swim with the flow.
- II. One must have individuality in thinking and making decisions.

- 1. Only assumption I is implicit
- 2. Only assumption II is implicit.
- 3. Either assumption I or II is implicit
- 4. Neither assumption I nor II is implicit

Correct Option - 2

**Que. 60** Read the statement below followed by the two conclusions and decide which of the assumptions is implicit from the statement.

**Statement:**

Better an "oops" than a "what if".

**Assumptions:**

- I. You must try before giving up by seeing the problems.
- II. Even if you fail, you will learn how to not tackle the problem.

- 1. Only assumption I is implicit
- 2. Only assumption II is implicit.
- 3. Either assumption I or II is implicit
- 4. both assumptions I and II are implicit

Correct Option - 4

**Que. 61** Which alphabet is 8<sup>th</sup> to the right of the 12<sup>th</sup> letter from the left in a reverse alphabet series?

- 1. U
- 2. R
- 3. T
- 4. G

Correct Option - 4

**Que. 62** If the English alphabet is divided into 4 parts (excluding the first and last letters) and each part is reversed, what will be the 18th letter from the left ?

- 1. N
- 2. O
- 3. P
- 4. R

Correct Option - 1

**Que. 63** Find the analogous pair.  
fetter : liberate

- 1. shackle loose
- 2. common : ghostly
- 3. routine : novel
- 4. secular : clerical

Correct Option - 1

**Que. 64** If in a coded language, COIN is coded as 8574 and UNTIL is coded as 94371, then COCONUT will be:

- 1. 9393596
- 2. 8585493
- 3. 8585321
- 4. 9393593

Correct Option - 2

**Que. 65** In a running race, Rekha came ahead of Mala by a 10-second margin; Inika came ahead of Aarushi by 12 seconds; and Vasantha came ahead of Gauri by 18 seconds. Mala came just a second after Vasantha, and Inika came 2 seconds after Gauri. Who among the given friends came third in the race?

- 1. Inika
- 2. Rekha
- 3. Mala
- 4. Gauri

Correct Option - 3

**Que. 66** Read the statement below followed by two conclusions and decide which conclusion(s) follow(s) from the statement.

**Statements:**

- Some stones are gems.
- Some gems are pearls.
- Some pearls are molluscs.

**Conclusions:**

- 1. Some stones are pearls.
  - 2. Some gems are molluscs.
  - 3. Some molluscs are pearls.
  - 4. Some molluscs are gems.
- 
- 1. Only conclusion (1) follows
  - 2. Only conclusion (2) follows
  - 3. Only conclusion (3) follows
  - 4. Only conclusion (4) follows

Correct Option - 3

**Que. 67** Suppose A is the daughter of B, B is the daughter of C, C is the brother of D, and D is the mother of E. If E is female, how is A related to E?

- 1. Nephew
- 2. Niece
- 3. Brother
- 4. Sister

Correct Option - 2

**Que. 68** Read the following information and then answer the question based on it:

- 1. 'A + B' means 'A is the mother of B'.
- 2. 'A – B' means 'A is the Sister of B'.



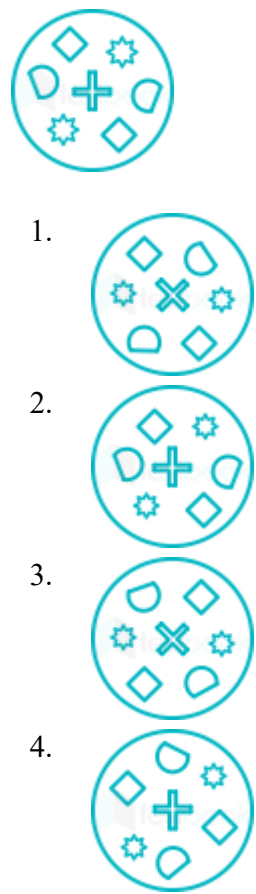
- 3. 'A \* B' means 'A is the father of B'.
- 4. 'A β B' means 'A is the brother of B'.

Which of the following means that D is the great-grandfather of A?

- 1. D \* C + B + A
- 2. D \* C β B - A
- 3. D \* C + B - A
- 4. D \* C β B + A

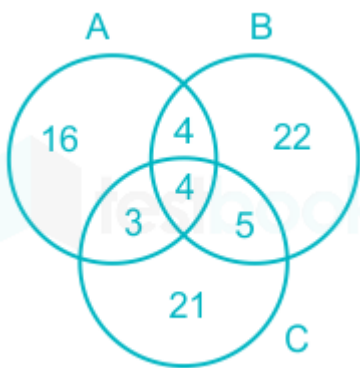
Correct Option - 1

**Que. 69** If the given image is rotated 90° counter- clockwise and its mirror image is taken, with the mirror placed at the base of the image, the resultant structure will be:



Correct Option - 4

**Que. 70** In an institute of 400 students, the pass percentage in 3 subjects A, B and C is as follows:



How many students passed both B and C?

- 1. 49
- 2. 27
- 3. 41
- 4. 36

Correct Option - 4

**Que. 71** How many students did NOT pass at least 1 exam?

- 1. 100
- 2. 196
- 3. 204
- 4. 147

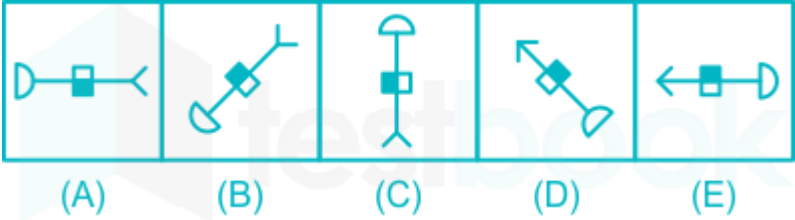
Correct Option - 1

**Que. 72** How many students passed A or B but NOT C?

- 1. 126
- 2. 186
- 3. 168
- 4. 147

Correct Option - 3

**Que. 73** Choose the figure which is different from the rest.



- 1. C
- 2. B

3. A
4. E

Correct Option - 2

**Que. 74** Choose the figure which is the different from the rest.



1. C
2. B
3. A
4. E

Correct Option - 2

**Que. 75** Pick the odd one out:

1. u a i e o
2. c g k o s
3. e i m q u
4. h i p t x

Correct Option - 1

**Que. 76** The following table gives the sales of LCDs manufactured by a company over they years since its inception.

Number of Different Sizes of LCDs Sold by a Company Over the Years (Numbers in Thousands)

Year	Size of LCDs in Inches						
	40"	50"	55"	60"	65"	70"	75"
2012	32	24	11	26	11	8	7
2013	43	35	34	38	13	11	6
2014	54	46	46	47	11	12	8
2015	45	53	51	39	21	18	11
2016	56	42	49	42	24	14	14
2017	47	38	54	55	31	21	16

The total sales of all the six years are the minimum for which size LCD TV?

1. 70"
2. 50"

3. 65"
4. 75"

Correct Option - 4

**Que. 77** The following table gives the sales of LCDs manufactured by a company over they years since its inception.

Number of Different Sizes of LCDs Sold by a Company Over the Years (Numbers in Thousands)

Year	Size of LCDs in Inches						
	40"	50"	55"	60"	65"	70"	75"
2012	32	24	11	26	11	8	7
2013	43	35	34	38	13	11	6
2014	54	46	46	47	11	12	8
2015	45	53	51	39	21	18	11
2016	56	42	49	42	24	14	14
2017	47	38	54	55	31	21	16

In which year was the percentage of 60" LCD TVs sold of the total number of LCD TVs sold maximum?

1. 2016
2. 2015
3. 2012
4. 2014

Correct Option - 3

**Que. 78** Read the question below followed by two statements and decide which statement(s) is/are sufficient to answer the question.

**Question:**

In which year was Ranjith born?

**Statements:**

- I. At present, Ranjith is 24 years younger to his mother.
- II. Ranjith's brother, who was born in 2001, is 31 years younger to this mother.

1. State I alone is sufficient while statement II alone is not sufficient
2. Statement II alone is sufficient while statement I alone is not sufficient
3. Neither statement I nor II is sufficient
4. Both statements I and II are sufficient

Correct Option - 4

**Que. 79** Read the question below followed by two statements and decide which statement(s) is/are sufficient to answer the question.

**Question:**

What will be the total cost of 28 bags if each of them costs the same?

**Statements:**

- I. One-fifth of the cost of each bag is ₹50.
- II. The total cost of three bags is ₹250 more than the total cost of two bags.
1. Statement I alone is sufficient while statement II alone is not sufficient
2. Statement II alone is sufficient while statement I alone is not sufficient
3. Either statement I or II is sufficient
4. Both statements I and II are sufficient

Correct Option - 3

Que. 80

Read the question below followed by two statements and decide which statement(s) is/are sufficient to answer the question.

**Question:**

How is 'MARBLES' coded in the code language?

**Statements:**

- I. 'Na Mg Al Si' means 'Some stones are marbles' and 'Si P CI' means 'Marbles don't break'.
- II. 'Na Mg Al Si' means 'Some stones are marbles' and 'Si Al Ar' means 'Marbles are strong'.
1. Statement I alone is sufficient while statement II alone is not sufficient
2. Statement II alone is sufficient while statement I alone is not sufficient
3. Either statement I or II is sufficient
4. Neither statements I nor II is sufficient

Correct Option - 1

Que. 81

Read the question below followed by two statements and decide which statement(s) is/are sufficient to answer the question.

**Question:**

Which code word stands for 'well' in the coded sentence 'sin lo bye' which means 'He is well'?"

**Statements:**

- I. In the same code language, 'lo mot det' means 'They are well'.
- II. In the same code language, 'sin mic bye' means 'He is strong'.
1. Statement I alone is sufficient while statement II alone is not sufficient
2. Statement II alone is sufficient while statement I alone is not sufficient
3. Either statement I or II is sufficient
4. Both statements I and II are sufficient

Correct Option - 3

Que. 82

If × stands for 'addition', ÷ stands for 'subtraction', + stands for 'multiplication' and - stands for 'division', then

$20 \times 16 - 2 + 2 \div 8 = ?$

- 1. 28
- 2. 30
- 3. 36
- 4. 25

Correct Option - 1

**Que. 83** On a farm, there are as many hens as sheep. There are twice as many men as there are goats and twice as many goats as there are sheep. If the total leg count is 44, how many men are on the farm?

- 1. 14
- 2. 12
- 3. 16
- 4. 8

Correct Option - 4

**Que. 84** Read the statement below followed by two conclusions and decide which conclusion(s) follow(s) from the statement.

**Statement:**

Ram and Shyam always get first and second ranks in class.

**Conclusions:**

- I. Ram always gets the first rank while Shyam gets the second rank.
- II. The competition between Ram and Shyam is as tough as nails.

- 1. Only conclusion I follows
- 2. Only conclusion II follows
- 3. Either conclusion I or II follows
- 4. Neither conclusion I nor II follows

Correct Option - 4

**Que. 85** Read the statement below followed by two conclusions and decide which of the assumptions is implicit from the statement.

**Statement:**

Only dead fish go with the flow.

**Assumptions:**

- I. Fish that are alive will never go with the flow
- II. One must have individuality in thinking and making decisions.

- 1. Only assumption I is implicit
- 2. Only assumption II is implicit
- 3. Either assumption I or II is implicit
- 4. Neither assumption I nor II is implicit

Correct Option - 2

**Que. 86** Read the statement below followed by two conclusions and decide which of the assumptions is implicit from the statement.

**Statement:**

Aim for the stars, you will at least land on the moon.

**Assumptions:**

- I. People aim for the stars because they are bigger than the moon.
- II. Astronomers aim for stars and land on the moon.

- 1. Only assumption I is implicit
- 2. Only assumption II is implicit
- 3. Either assumption I or II is implicit
- 4. Neither assumption I nor II is implicit

Correct Option - 4

**Que. 87** Which letter of the alphabet is 7th to the left of the 18th letter from the left in a forward alphabet series?

- 1. J
- 2. G
- 3. T
- 4. K

Correct Option - 4

**Que. 88** In a certain coded language if "MONSOON" is coded as "PMQQPMO", and "WINTERS" is coded as "UPGRPGY" then how is "SUMMERS" coded ?

- 1. TVNNFST
- 2. QWKOCTS
- 3. TCQKWOS
- 4. UPGKOSU

Correct Option - 4

**Que. 89** Find the odd figure out.



- 1. A
- 2. B
- 3. C

4. D

Correct Option - 3

**Que. 90** If in a coded language, JOIN is coded as 8574 and POKER is coded as 95321, then JOKER will be coded as:

- 1. 93596
- 2. 83593
- 3. 85321
- 4. 93593

Correct Option - 3

**Que. 91** Read the statement below followed by two conclusions and decide which conclusion(s) follow(s) from the statement.

**Statements:**

Some pencils are sticks.  
All sticks are trees.

**Conclusions:**

- 1. All sticks are pencils.
- 2. All pencils are trees.
- 1. Only conclusion (1) follows
- 2. Only conclusion (2) follows
- 3. Either conclusion (1) or (2) follows
- 4. Neither conclusion (1) nor (2) follows

Correct Option - 4

**Que. 92** Thomas goes from church to the library after dropping his brother home. First, he goes 4 km to the West; the, turns left and goes for 3 km to reach home. From there, he truns right and goes for a distance of 1 km to reach the library. What is the shortest distance between home and the church?

- 1. 5 km
- 2. 4 km
- 3. 2 km
- 4. 1 km

Correct Option - 1

**Que. 93** In a certain language, C is 5 and CEAT is written as 37. Then JAPAN is:

- 1. 56
- 2. 47
- 3. 52



4. 42

Correct Option - 3

**Que. 94** Suppose A is the daughter of B, B is the daughter of C, C is the brother of D, and D is the mother of E. If E is male, how is A related to E?

- 1. Nephew
- 2. Niece
- 3. Brother
- 4. Sister

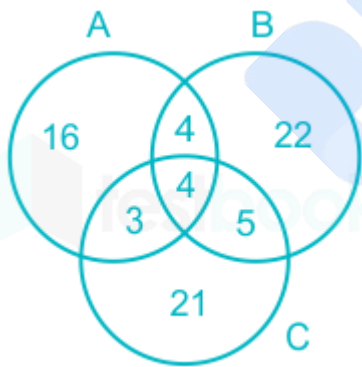
Correct Option - 2

**Que. 95** In a faulty compass, East is marked as North, West as East, North as South and South as West. A group of people, by following the Southeast of this compass, will actually travel in which direction ?

- 1. North east
- 2. North west
- 3. South east
- 4. South west

Correct Option - 2

**Que. 96** Three newspaper A, B and C are bought by 300 families in a gated to community each day.



How many families buy both B and C?

- 1. 49
- 2. 27
- 3. 41
- 4. 32

Correct Option - 2

**Que. 97** How many families buy at least two newspapers?

- 1. 48
- 2. 27
- 3. 41
- 4. 32

Correct Option - 1

**Que. 98** How many families do NOT buy any newspaper?

- 1. 75
- 2. 186
- 3. 109
- 4. 147

Correct Option - 1

**Que. 99** How many families prefer A or B but NOT C?

- 1. 126
- 2. 186
- 3. 109
- 4. 147

Correct Option - 1

**Que. 100** Pick the odd one out:

- 1. Spring
- 2. Autumn
- 3. Windy
- 4. Summer

Correct Option - 3

**Que. 101** After attaining enlightenment, Gautama came to be known as the:

- 1. Jina
- 2. Buddha
- 3. Gyana
- 4. Bodhi

Correct Option - 2

**Que. 102** Which Ashokan Rock Edict mentions Ashoka's triumph in Kalinga ?

- 1. First
- 2. Fourth

3. Tenth
4. Thirteenth

Correct Option - 4

---

**Que. 103** Who discovered the excavated site of Lothal, a part of the Harappan Civilisation?

1. Daya Ram Sahani
2. Rakhal Das Bannerji
3. SR Rao
4. RS Bist

Correct Option - 3

---

**Que. 104** How long was the Battle of Kurukshetra, mentioned in the Mahabharata, fought for?

1. 16 days
2. 18 days
3. 20 days
4. 24 days

Correct Option - 2

---

**Que. 105** Which famous Ayurveda scholar lived during the regime of Kanishka I?

1. Parashara
2. Sushruta
3. Charaka
4. Dhanvantari

Correct Option - 3

---

**Que. 106** \_\_\_\_\_ is the author of 'Tarikh-e-Firozshahi'

1. Ziauddin Barni
2. Hasan Nizami
3. Isaami
4. Ibn Battuta

Correct Option - 1

---

**Que. 107** Who among the following has NOT called the Revolt of 1857 a 'Sepoy Mutiny'?

1. John Lawrence
2. Karl Marx
3. RC Majumdar
4. Syed Ahmad Khan

Correct Option - 2

**Que. 108** The demand for Pakistan was made in \_\_\_\_\_ the Lahore Session of the Muslim League.

- 1. 1932
- 2. 1936
- 3. 1940
- 4. 1942

Correct Option - 3

**Que. 109** Who founded the journal 'Vande Mataram' in India?

- 1. Ganesh Shankar Vidyarthi
- 2. Ramanand Chatterji
- 3. Aurobindo Ghosh
- 4. Bipin Chandra Pal

Correct Option - 4

**Que. 110** Tatya Tope (Tantia Tope), one of the famous leaders of the 'Revolt of 1857', was hanged by the British in 1859 at \_\_\_\_\_.

- 1. Jhansi
- 2. Shivpuri
- 3. Kanpur
- 4. Sagar

Correct Option - 2

**Que. 111** The size of the moon is approximately of the size of the earth.

- 1.  $\frac{1}{3}$ rd
- 2.  $\frac{1}{4}$ th
- 3.  $\frac{1}{5}$ th
- 4.  $\frac{1}{6}$ th

Correct Option - 2

**Que. 112** Which according to NASA is the closest star to the earth after the sun?

- 1. Alpha Centauri
- 2. Barnard's Star
- 3. Proxima Centauri
- 4. Sirius

Correct Option - 3

**Que. 113** The Rohtang Pass is located in which state of India?

- 1. Himachal Pradesh
- 2. Jammu and Kashmir
- 3. Uttarakhand
- 4. Sikkim

Correct Option - 1

**Que. 114** Which waterbody divides the Andaman Islands from the Nicobar Islands?

- 1. 6° channel
- 2. 8° channel
- 3. 9° channel
- 4. 10° channel

Correct Option - 4

**Que. 115** 'Pataca' is the currency of which country?

- 1. panama
- 2. Laos
- 3. Macau
- 4. Mexico

Correct Option - 3

**Que. 116** India contains about \_\_\_\_\_ of the total population of the world.

- 1. 12%
- 2. 14%
- 3. 15%
- 4. 17 %

Correct Option - 4

**Que. 117** Which is the highest mountain peak that lies entirely in India?

- 1. Kanchenjunga
- 2. Nanda Devi
- 3. K2 (Godwin Austen)
- 4. Kamet

Correct Option - 2

---

**Que. 118** Neelam Sanjiva Reddy was the \_\_\_\_\_ President of India.

1. 5<sup>th</sup>
2. 6<sup>th</sup>
3. 7<sup>th</sup>
4. 8<sup>th</sup>

Correct Option - 2

---

**Que. 119** 'Reducing the amount of sentence WITHOUT changing its character' (Article 72), by the President of India is called \_\_\_\_\_.

1. respite
2. reprieve
3. remission
4. commutation

Correct Option - 3

---

**Que. 120** Under which article of the Indian Constitution is the election of the Vice-President held?

1. Article 54
2. Article 63
3. Article 66
4. Article 74

Correct Option - 3

---

**Que. 121** Part II of the Indian Constitution is related to what?

1. Citizenship
2. Fundamental Rights
3. Directive Principles of State Policy
4. The Union

Correct Option - 1

---

**Que. 122** Provisions are made for 'Administration and Control of Scheduled Areas and Scheduled Tribes' under which schedule ?

1. 4th Schedule
2. 5th Schedule
3. 8th Schedule
4. 9th Schedule

Correct Option - 2

---

**Que. 123** Panchayati Raj was first introduced in the district of \_\_\_\_\_ on 2nd October 1959.

- 1. Beed
- 2. Shadnagar
- 3. Nagaur
- 4. Nanded

Correct Option - 3

---

**Que. 124** Which among the following is NOT a web browser?

- 1. Google
- 2. Firefox Mozilla
- 3. Microsoft Edge
- 4. Netscape Navigator :

Correct Option - 1

---

**Que. 125** Which among the following is known as temporary memory or volatile memory?

- 1. RAM
- 2. ROM
- 3. Blu-ray
- 4. Hard disk

Correct Option - 1

---

**Que. 126** 1 gigabyte is equal to how many megabytes in binary?

- 1. 1024
- 2. 1002
- 3. 3004
- 4. 2015

Correct Option - 1

---

**Que. 127** In Microsoft Word, the \_\_\_\_ tab contains the most-used features, such as tools for changing fonts and font attributes, customising paragraphs, using styles, and finding and replacing text.

- 1. HOME
- 2. DESIGN
- 3. REVIEW
- 4. INSERT

Correct Option - 1

---

**Que. 128** What was the first computer with NO mechanical parts created by JW Mauchly and J Presper Eckert in 1943 called?

1. ENIAC
2. Mark I
3. Mark II
4. EDVAC

Correct Option - 1

---

**Que. 129** Which city in Uttar Pradesh is known as the 'Leather City'?

1. Agra
2. Kanpur
3. Etawah
4. Sitapur

Correct Option - 2

---

**Que. 130** Which dance is performed by the Ahir community of Bundelkhand during Diwali?

1. Chhapeli
2. Pai Danda
3. Bhagoria
4. Natwari

Correct Option - 2

---

**Que. 131** The famous embroidery done on fabric using white thread is called:

1. Chikankari
2. Gota
3. Zardozi
4. Zari

Correct Option - 1

---

**Que. 132** Select the INCORRECT district-headquarters pair from the given options:

1. Amethi - Gauriganj
2. Sonbhadra - Robertsganj
3. Kushinagar - Padrauna
4. Kaushambi - Vaishali

Correct Option - 4

---

**Que. 133** Which district of Uttar Pradesh does NOT share a boundary with Madhya Pradesh?



- 1. Allahabad
- 2. Mirzapur
- 3. Etawah
- 4. Aligarh

Correct Option - 4

**Que. 134** How many districts from Uttar Pradesh have been identified as 'aspirational' in the ranking mechanism launched by the NITI Aayog?

- 1. 8
- 2. 5
- 3. 12
- 4. 10

Correct Option - 1

**Que. 135** What was the theme of the 22nd National Youth Festival held at the Gautam Buddha University, Noida in January 2018?

- 1. 'Sankalp Se Siddhi
- 2. 'Rashtra Hit Ke Liye Yuva'
- 3. 'Yuva Ka Vikas, Desh Ka Vikas'
- 4. 'Yuva Shakti, Rashtra Shakti'

Correct Option - 1

**Que. 136** The Dastak campaign, launched by the Government of Uttar Pradesh, is related to:

- 1. the eradication of Japanese encephalitis
- 2. the eradication of polio
- 3. making every village 'open defecation free
- 4. knocking every home in the state to verify if it has a toilet

Correct Option - 1

**Que. 137** Which option matches the cities in Uttar Pradesh with the rivers on whose banks they are located?

Sr. No.	River	Sr. No.	City
(A)	Ganga	(1)	Jaunpur
(B)	Rapti	(2)	Bithoor
(C)	Gomti	(3)	Pratapgarh
(D)	Sai	(4)	Gorakhpur

- 1. A - 4, B - 3, C - 2, D - 1

2. A - 2, B - 4, C - 1, D - 3
3. A - 3, B - 4, C - 1, D - 2
4. A - 2, B - 1, C - 4, D - 3

Correct Option - 2

---

**Que. 138** The longest elevated road in Uttar Pradesh, as of July 2018, stretches from:

1. Jewar to Greater Noida
2. UP Gate to Rajnagar Extension in Ghaziabad
3. Saifai to Etah
4. Noida Extension to Botanical Garden Station in Noida

Correct Option - 2

---

**Que. 139** The \_\_\_\_\_ has the sole right to mint coins in India.

1. State Bank of India
2. Reserve Bank of India
3. Government of India
4. Security Printing and Minting Corporation of India Limited

Correct Option - 3

---

**Que. 140** According to Census 2011, which is the third most populous state of India?

1. Maharashtra
2. Madhya Pradesh
3. West Bengal
4. Bihar

Correct Option - 4

---

**Que. 141** Which statement about the Banking Ombudsman in India is correct?

1. The Banking Ombudsman is a senior official appointed by the Reserve Bank of India to redress customer complaints.
2. Only Public Sector Banks are covered under the Banking Ombudsman Scheme.
3. It is binding on the complainant to accept the award in full.
4. The Banking Ombudsman charges a nominal fee for filling and resolving customers' complaints.

Correct Option - 1

---

**Que. 142** Who headed the India-Oman Joint Business Council's 8th session on 16th - 17th July 2018 in Muscat, Oman?

1. Suresh Prabhu

- 2. Dr Virendra Kumar
- 3. Maneka Sanjay Gandhi
- 4. Rajnath Singh

Correct Option - 1

---

**Que. 143** What is the name of the scheme which aims to provide LED bulbs to domestic consumers with a target to replace 770 million incandescent bulbs with LED bulbs by March 2019?

- 1. 'Ujala Scheme'
- 2. 'Roshan Scheme'
- 3. 'Bulb Scheme'
- 4. 'Har Ghar Bijli Scheme'

Correct Option - 1

---

**Que. 144** Who won the women's singles Wimbledon (Tennis) title 2018?

- 1. Angelique Kerber
- 2. Serena Williams
- 3. Simona Halep
- 4. Maria Sharapova

Correct Option - 1

---

**Que. 145** Who won the Thailand Open World Tour Super 500 Badminton Tournament (Women's Singles) in Bangkok held in July 2018?

- 1. Nozomi Okuhara
- 2. PV Sindhu
- 3. Saina Nehwal
- 4. Zhang Beiwen

Correct Option - 1

---

**Que. 146** \_\_\_\_\_ became the third person to win the World Cup as Player and manager after France won FIFA 2018 in Russia.

- 1. Zinedine Zidane
- 2. Hugo Lloris
- 3. Didier Deschamps
- 4. Franz Beckenbauer

Correct Option - 3

---

**Que. 147** Which state is the largest producer of mangoes in India?

1. Bihar
2. Gujarat
3. Maharashtra
4. Uttar Pradesh

Correct Option - 4

---

**Que. 148** What does APEDA stand for?

1. Association of Producers and Exporters of Dairy and Allied Products
2. Agricultural Products Export Development Authority
3. Association of Processed Food Exporters
4. Agricultural and Processed Food Products Export Development Authority

Correct Option - 4

---

**Que. 149** Which of the following was set up with the purpose of promoting co-operative marketing of agricultural produce to benefit the farmers?

1. NAFED
2. FCI
3. NABARD
4. NAVDANYA

Correct Option - 1

---

**Que. 150** \_\_\_\_\_ is a greenghouse method of agriculture where commercially viable crops are cultivated inside multi-storeyed buildings in cities using advanced greenhouse technology such as hydroponics and aeroponics.

1. Vertical farming
2. Hydroculture
3. Organic farming
4. Roboculture

Correct Option - 1