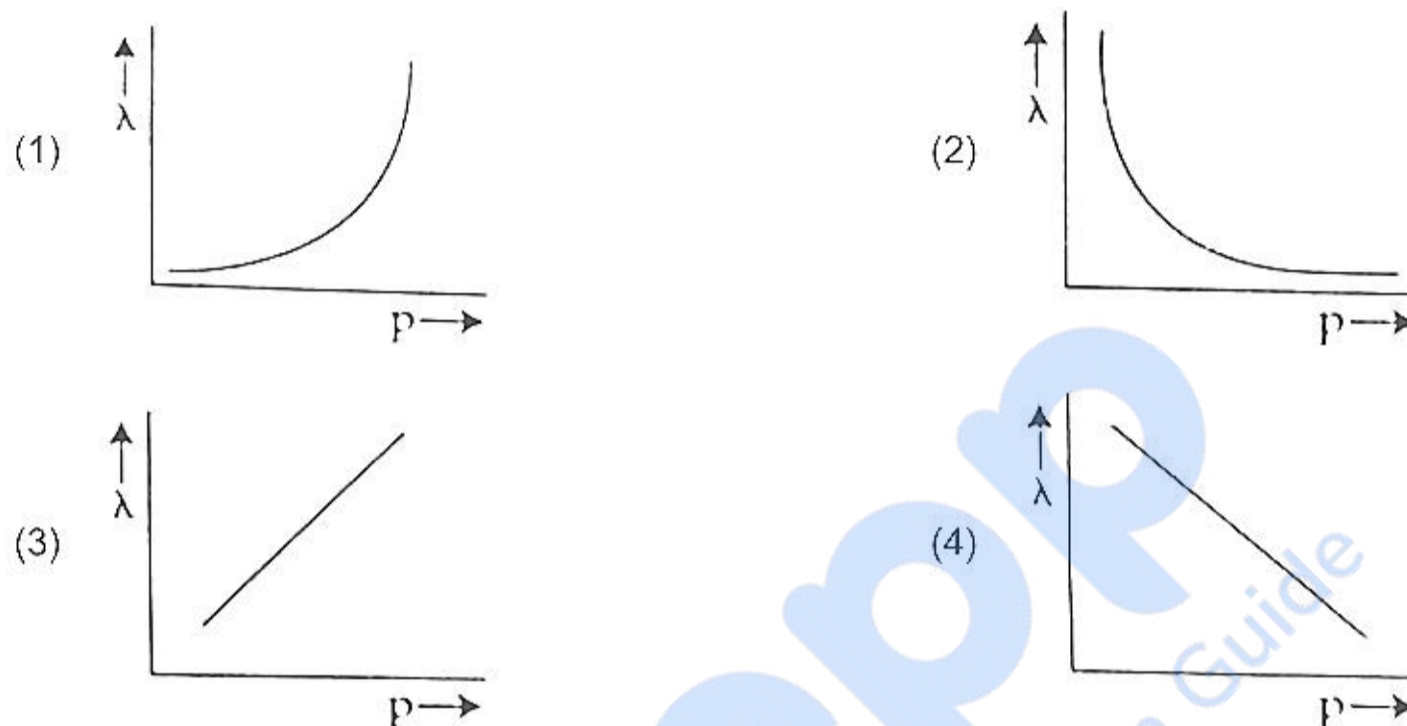


7. A square loop of side 1 m and resistance 1Ω is placed in a magnetic field of 0.5 T. If the plane of loop is perpendicular to the direction of magnetic field, the magnetic flux through the loop is

- (1) 1 weber (2) Zero weber
(3) 2 weber (4) 0.5 weber

Answer (4)

8. The graph which shows the variation of the de Broglie wavelength (λ) of a particle and its associated momentum (p) is



Answer (2)

9. If the initial tension on a stretched string is doubled, then the ratio of the initial and final speeds of a transverse wave along the string is

- (1) $1:\sqrt{2}$ (2) $1:2$
(3) $1:1$ (4) $\sqrt{2}:1$

Answer (1)

10. When light propagates through a material medium of relative permittivity ϵ_r and relative permeability μ_r , the velocity of light, v is given by (c -velocity of light in vacuum)

- (1) $v = \frac{c}{\sqrt{\epsilon_r \mu_r}}$ (2) $v = \frac{c}{\sqrt{\epsilon_r \mu_r}}$
(3) $v = c$ (4) $v = \sqrt{\frac{\mu_r}{\epsilon_r}}$

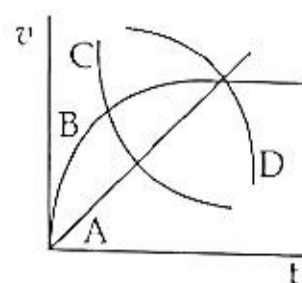
Answer (2)

11. A copper wire of length 10 m and radius $\left(\frac{10^{-2}}{\sqrt{\pi}}\right)$ m has electrical resistance of 10Ω . The current density in the wire for an electric field strength of 10 (V/m) is

- (1) 10^{-5} A/m^2 (2) 10^5 A/m^2
(3) 10^4 A/m^2 (4) 10^6 A/m^2

Answer (2)

12. A spherical ball is dropped in a long column of a highly viscous liquid. The curve in the graph shown, which represents the speed of the ball (v) as a function of time (t) is



- (1) C (2) D
(3) A (4) B

Answer (4)

13. A long solenoid of radius 1 mm has 100 turns per mm. If 1 A current flows in the solenoid, the magnetic field strength at the centre of the solenoid is

- (1) 12.56×10^{-4} T (2) 6.28×10^{-4} T
(3) 6.28×10^{-2} T (4) 12.56×10^{-2} T

Answer (4)

14. The energy that will be ideally radiated by a 100 kW transmitter in 1 hour is

- (1) 36×10^5 J (2) 1×10^5 J
(3) 36×10^7 J (4) 36×10^4 J

Answer (3)

15. A biconvex lens has radii of curvature, 20 cm each. If the refractive index of the material of the lens is 1.5, the power of the lens is

- (1) +5 D (2) Infinity
(3) +2 D (4) +20 D

Answer (1)

16. An electric lift with a maximum load of 2000 kg (lift + passengers) is moving up with a constant speed of 1.5 ms^{-1} . The frictional force opposing the motion is 3000 N. The minimum power delivered by the motor to the lift in watts is : ($g = 10 \text{ m s}^{-2}$)

- (1) 34500 (2) 23500
(3) 23000 (4) 20000

Answer (1)

17. A body of mass 60 g experiences a gravitational force of 3.0 N, when placed at a particular point. The magnitude of the gravitational field intensity at that point is

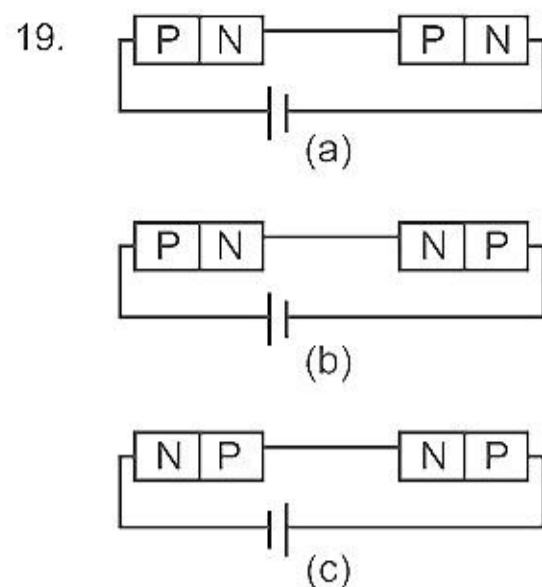
- (1) 20 N/kg (2) 180 N/kg
(3) 0.05 N/kg (4) 50 N/kg

Answer (4)

18. Plane angle and solid angle have

- (1) No units and no dimensions (2) Both units and dimensions
(3) Units but no dimensions (4) Dimensions but no units

Answer (3)



In the given circuits (a), (b) and (c), the potential drop across the two p - n junctions are equal in

- (1) Circuit (c) only
 (2) Both circuits (a) and (c)
 (3) Circuit (a) only
 (4) Circuit (b) only

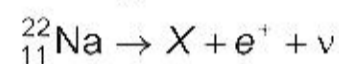
Answer (2)

20. In half wave rectification, if the input frequency is 60 Hz, then the output frequency would be

- (1) 60 Hz
 (2) 120 Hz
 (3) Zero
 (4) 30 Hz

Answer (1)

21. In the given nuclear reaction, the element X is



- (1) ${}_{10}^{22}\text{Ne}$
 (2) ${}_{12}^{22}\text{Mg}$
 (3) ${}_{11}^{23}\text{Na}$
 (4) ${}_{10}^{23}\text{Ne}$

Answer (1)

22. The peak voltage of the ac source is equal to

- (1) $\sqrt{2}$ times the rms value of the ac source
 (2) $1/\sqrt{2}$ times the rms value of the ac source
 (3) The value of voltage supplied to the circuit
 (4) The rms value of the ac source

Answer (1)

23. The dimensions $[\text{MLT}^{-2}\text{A}^{-2}]$ belong to the

- (1) Magnetic permeability
 (2) Electric permittivity
 (3) Magnetic flux
 (4) Self inductance

Answer (1)

24. Match List-I with List-II

| | List-I (Electromagnetic waves) | | List-II (Wavelength) |
|-----|-----------------------------------|-------|-------------------------|
| (a) | AM radio waves | (i) | 10^{-10} m |
| (b) | Microwaves | (ii) | 10^2 m |
| (c) | Infrared radiations | (iii) | 10^{-2} m |
| (d) | X-rays | (iv) | 10^{-4} m |

Choose the correct answer from the options given below

- (1) (a) - (iii), (b) - (iv), (c) - (ii), (d) - (i)
 (2) (a) - (ii), (b) - (iii), (c) - (iv), (d) - (i)
 (3) (a) - (iv), (b) - (iii), (c) - (ii), (d) - (i)
 (4) (a) - (iii), (b) - (ii), (c) - (i), (d) - (iv)

Answer (2)

25. The angular speed of a fly wheel moving with uniform angular acceleration changes from 1200 rpm to 3120 rpm in 16 seconds. The angular acceleration in rad/s^2 is
- (1) 12π (2) 104π
 (3) 2π (4) 4π

Answer (4)

26. Two resistors of resistance, $100\ \Omega$ and $200\ \Omega$ are connected in parallel in an electrical circuit. The ratio of the thermal energy developed in $100\ \Omega$ to that in $200\ \Omega$ in a given time is
- (1) 1 : 4 (2) 4 : 1
 (3) 1 : 2 (4) 2 : 1

Answer (4)

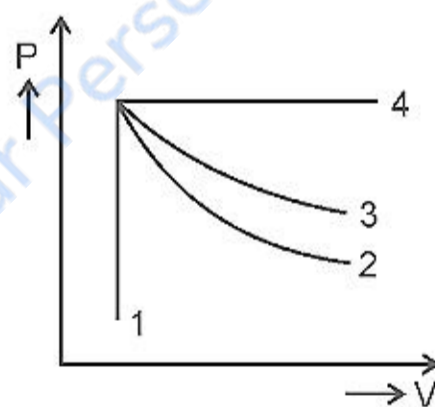
27. Let T_1 and T_2 be the energy of an electron in the first and second excited states of hydrogen atom, respectively. According to the Bohr's model of an atom, the ratio $T_1 : T_2$ is
- (1) 4 : 9 (2) 9 : 4
 (3) 1 : 4 (4) 4 : 1

Answer (2)

28. The ratio of the distances travelled by a freely falling body in the 1st, 2nd, 3rd and 4th second
- (1) 1 : 3 : 5 : 7 (2) 1 : 1 : 1 : 1
 (3) 1 : 2 : 3 : 4 (4) 1 : 4 : 9 : 16

Answer (1)

29. An ideal gas undergoes four different processes from the same initial state as shown in the figure below. Those processes are adiabatic, isothermal, isobaric and isochoric. The curve which represents the adiabatic process among 1, 2, 3 and 4 is



- (1) 3 (2) 4
 (3) 1 (4) 2

Answer (4)

30. When two monochromatic lights of frequency, ν and $\frac{\nu}{2}$ are incident on a photoelectric metal, their stopping potential becomes $\frac{V_s}{2}$ and V_s respectively. The threshold frequency for this metal is

- (1) $\frac{2}{3}\nu$ (2) $\frac{3}{2}\nu$
 (3) 2ν (4) 3ν

Answer (2*)

31. Given below are two statements

Statement I : Biot-Savart's law gives us the expression for the magnetic field strength of an infinitesimal current element (Idl) of a current carrying conductor only.

Statement II : Biot-Savart's law is analogous to Coulomb's inverse square law of charge q , with the former being related to the field produced by a scalar source, Idl while the latter being produced by a vector source, q .

In light of above statements choose the most appropriate answer from the options given below

- (1) Statement I is correct and Statement II is incorrect
- (2) Statement I is incorrect and Statement II is correct
- (3) Both Statement I and Statement II are correct
- (4) Both Statement I and Statement II are incorrect

Answer (1)

32. A shell of mass m is at rest initially. It explodes into three fragments having mass in the ratio 2 : 2 : 1. If the fragments having equal mass fly off along mutually perpendicular directions with speed v , the speed of the third (lighter) fragment is

- (1) $2\sqrt{2}v$
- (2) $3\sqrt{2}v$
- (3) v
- (4) $\sqrt{2}v$

Answer (1)

33. As the temperature increases, the electrical resistance

- (1) Increases for conductors but decreases for semiconductors
- (2) Decreases for conductors but increases for semiconductors
- (3) Increases for both conductors and semiconductors
- (4) Decreases for both conductors and semiconductors

Answer (1)

34. Two hollow conducting spheres of radii R_1 and R_2 ($R_1 \gg R_2$) have equal charges. The potential would be

- (1) Equal on both the spheres
- (2) Dependent on the material property of the sphere
- (3) More on bigger sphere
- (4) More on smaller sphere

Answer (4)

35. A light ray falls on a glass surface of refractive index $\sqrt{3}$, at an angle 60° . The angle between the refracted and reflected rays would be

- (1) 90°
- (2) 120°
- (3) 30°
- (4) 60°

Answer (1)

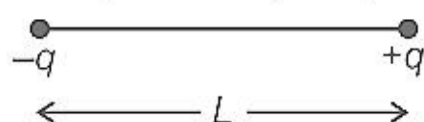
SECTION-B

36. Two transparent media A and B are separated by a plane boundary. The speed of light in those media are 1.5×10^8 m/s and 2.0×10^8 m/s, respectively. The critical angle for a ray of light for these two media is

- (1) $\tan^{-1}(0.500)$
- (2) $\tan^{-1}(0.750)$
- (3) $\sin^{-1}(0.500)$
- (4) $\sin^{-1}(0.750)$

Answer (4)

41. Two point charges $-q$ and $+q$ are placed at a distance of L , as shown in the figure.



The magnitude of electric field intensity at a distance R ($R \gg L$) varies as:

- (1) $\frac{1}{R^4}$ (2) $\frac{1}{R^6}$
 (3) $\frac{1}{R^2}$ (4) $\frac{1}{R^3}$

Answer (4)

42. A ball is projected with a velocity, 10 ms^{-1} , at an angle of 60° with the vertical direction. Its speed at the highest point of its trajectory will be

- (1) 5 ms^{-1} (2) 10 ms^{-1}
 (3) Zero (4) $5\sqrt{3} \text{ ms}^{-1}$

Answer (4)

43. A series LCR circuit with inductance 10 H , capacitance $10 \mu\text{F}$, resistance 50Ω is connected to an ac source of voltage, $V = 200\sin(100t)$ volt. If the resonant frequency of the LCR circuit is ν_0 and the frequency of the ac source is ν , then

- (1) $\nu_0 = \frac{50}{\pi} \text{ Hz}$, $\nu = 50 \text{ Hz}$ (2) $\nu = 100 \text{ Hz}$; $\nu_0 = \frac{100}{\pi} \text{ Hz}$
 (3) $\nu_0 = \nu = 50 \text{ Hz}$ (4) $\nu_0 = \nu = \frac{50}{\pi} \text{ Hz}$

Answer (4)

44. The area of a rectangular field (in m^2) of length 55.3 m and breadth 25 m after rounding off the value for correct significant digits is

- (1) 1382.5 (2) 14×10^2
 (3) 138×10^1 (4) 1382

Answer (2)

45. The volume occupied by the molecules contained in 4.5 kg water at STP, if the intermolecular forces vanish away is

- (1) $5.6 \times 10^{-3} \text{ m}^3$ (2) 5.6 m^3
 (3) $5.6 \times 10^6 \text{ m}^3$ (4) $5.6 \times 10^3 \text{ m}^3$

Answer (2)

46. Two pendulums of length 121 cm and 100 cm start vibrating in phase. At some instant, the two are at their mean position in the same phase. The minimum number of vibrations of the shorter pendulum after which the two are again in phase at the mean position is:

- (1) 10 (2) 8
 (3) 11 (4) 9

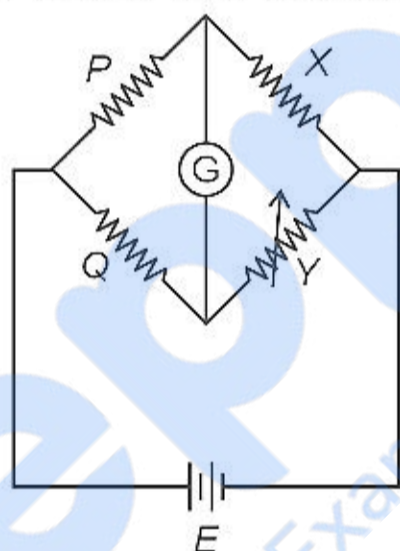
Answer (3)

47. Match List-I with List-II

| | List-I | | List-II |
|-----|--------------------------------|-------|---------------------|
| (a) | Gravitational constant (G) | (i) | $[L^2T^{-2}]$ |
| (b) | Gravitational potential energy | (ii) | $[M^{-1}L^3T^{-2}]$ |
| (c) | Gravitational potential | (iii) | $[LT^{-2}]$ |
| (d) | Gravitational intensity | (iv) | $[ML^2T^{-2}]$ |

Choose the correct answer from the options given below

- (1) (a) - (ii), (b) - (iv), (c) - (iii), (d) - (i) (2) (a) - (iv), (b) - (ii), (c) - (i), (d) - (iii)
 (3) (a) - (ii), (b) - (i), (c) - (iv), (d) - (iii) (4) (a) - (ii), (b) - (iv), (c) - (i), (d) - (iii)

Answer (4)48. A wheatstone bridge is used to determine the value of unknown resistance X by adjusting the variable resistance Y as shown in the figure. For the most precise measurement of X , the resistances P and Q 

- (1) Should be very large and unequal (2) Do not play any significant role
 (3) Should be approximately equal to $2X$ (4) Should be approximately equal and are small

Answer (4)49. A big circular coil of 1000 turns and average radius 10 m is rotating about its horizontal diameter at 2 rad s^{-1} . If the vertical component of earth's magnetic field at that place is $2 \times 10^{-5} \text{ T}$ and electrical resistance of the coil is 12.56Ω , then the maximum induced current in the coil will be

- (1) 1 A (2) 2 A
 (3) 0.25 A (4) 1.5 A

Answer (1)

50. From Ampere's circuital law for a long straight wire of circular cross-section carrying a steady current, the variation of magnetic field in the inside and outside region of the wire is

- (1) A linearly increasing function of distance r upto the boundary of the wire and then decreasing one with $\frac{1}{r}$ dependence for the outside region.
 (2) A linearly decreasing function of distance upto the boundary of the wire and then a linearly increasing one for the outside region.
 (3) Uniform and remains constant for both the regions.
 (4) A linearly increasing function of distance upto the boundary of the wire and then linearly decreasing for the outside region.

Answer (1)

CHEMISTRY

SECTION-A

51. Given below are two statements

Statement I:

In the coagulation of a negative sol, the flocculating power of the three given ions is in the order $\text{Al}^{3+} > \text{Ba}^{2+} > \text{Na}^+$

Statement II:

In the coagulation of a positive sol, the flocculating power of the three given salts is in the order $\text{NaCl} > \text{Na}_2\text{SO}_4 > \text{Na}_3\text{PO}_4$

In the light of the above statements, choose the most **appropriate** answer from the options given below

- (1) Statement I is correct but Statement II is incorrect.
- (2) Statement I is incorrect but Statement II is correct.
- (3) Both Statement I and Statement II are correct.
- (4) Both Statement I and Statement II are incorrect.

Answer (1)

52. Which one is not correct mathematical equation for Dalton's Law of partial pressure? Here p = total pressure of gaseous mixture

- (1) $p_i = \chi_i p$,
where p_i = partial pressure of i^{th} gas
 χ_i = mole fraction of i^{th} gas in gaseous mixture
- (2) $p_i = \chi_i p_i^\circ$,
where χ_i = mole fraction of i^{th} gas in gaseous mixture
 p_i° = pressure of i^{th} gas in pure state
- (3) $p = p_1 + p_2 + p_3$
- (4) $p = n_1 \frac{RT}{V} + n_2 \frac{RT}{V} + n_3 \frac{RT}{V}$

Answer (2)

53. Which statement regarding polymers is **not correct**?

- (1) Thermoplastic polymers are capable of repeatedly softening and hardening on heating and cooling respectively
- (2) Thermosetting polymers are reusable
- (3) Elastomers have polymer chains held together by weak intermolecular forces
- (4) Fibers possess high tensile strength

Answer (2)

54. Amongst the following which one will have maximum 'lone pair - lone pair' electron repulsions?

- | | |
|--------------------|--------------------|
| (1) SF_4 | (2) XeF_2 |
| (3) ClF_3 | (4) IF_5 |

Answer (2)

55. Identify the incorrect statement from the following
- (1) Ionisation enthalpy of alkali metals decreases from top to bottom in the group.
 - (2) Lithium is the strongest reducing agent among the alkali metals.
 - (3) Alkali metals react with water to form their hydroxides.
 - (4) The oxidation number of K in KO_2 is +4.

Answer (4)

56. Given below are two statements

Statement I

The boiling points of the following hydrides of group 16 elements increases in the order –
 $\text{H}_2\text{O} < \text{H}_2\text{S} < \text{H}_2\text{Se} < \text{H}_2\text{Te}$

Statement II

The boiling points of these hydrides increase with increase in molar mass.

In the light of the above statements, choose the most appropriate answer from the options given below :

- (1) **Statement I** is correct but **Statement II** is incorrect
- (2) **Statement I** is incorrect but **Statement II** is correct
- (3) Both **Statement I** and **Statement II** are correct
- (4) Both **Statement I** and **Statement II** are incorrect

Answer (4)

57. The IUPAC name of an element with atomic number 119 is

- | | |
|----------------|-----------------|
| (1) unununnium | (2) ununoctium |
| (3) ununennium | (4) unnilennium |

Answer (3)

58. Given below are two statements

Statement I:

The acidic strength of monosubstituted nitrophenol is higher than phenol because of electron withdrawing nitro group.

Statement II:

o-nitrophenol, *m*-nitrophenol and *p*-nitrophenol will have same acidic strength as they have one nitro group attached to the phenolic ring.

In the light of the above statements, choose the **most appropriate** answer from the options given below:

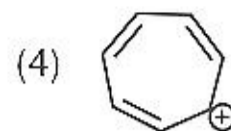
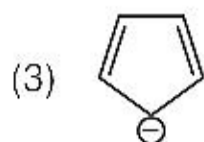
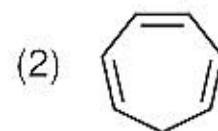
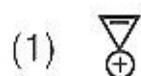
- (1) **Statement I** is correct but **Statement II** is incorrect.
- (2) **Statement I** is incorrect but **Statement II** is correct.
- (3) Both **Statement I** and **Statement II** are correct.
- (4) Both **Statement I** and **Statement II** are incorrect.

59. Which amongst the following is **incorrect** statement?

- (1) H_2^+ ion has one electron
- (2) O_2^- ion is diamagnetic
- (3) The bond orders of O_2^+ , O_2 , O_2^- and O_2^{2-} are 2.5, 2, 1.5 and 1, respectively
- (4) C_2 molecule has four electrons in its two degenerate π molecular orbitals

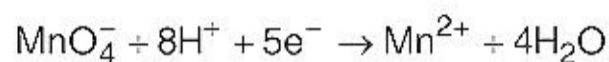
Answer (2)

60. Which compound amongst the following is **not** an aromatic compound?

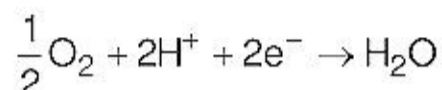


Answer (2)

61. Given below are half cell reactions:



$$E_{\text{Mn}^{2+}/\text{MnO}_4^-}^\ominus = -1.510 \text{ V}$$



$$E_{\text{O}_2/\text{H}_2\text{O}}^\ominus = +1.223 \text{ V}$$

Will the permanganate ion, MnO_4^- liberate O_2 from water in the presence of an acid?

(1) Yes, because $E_{\text{cell}}^\ominus = + 2.733 \text{ V}$

(2) No, because $E_{\text{cell}}^\ominus = - 2.733 \text{ V}$

(3) Yes, because $E_{\text{cell}}^\ominus = + 0.287 \text{ V}$

(4) No, because $E_{\text{cell}}^\ominus = - 0.287 \text{ V}$

Answer (3)

62. The IUPAC name of the complex-

$[\text{Ag}(\text{H}_2\text{O})_2][\text{Ag}(\text{CN})_2]$ is:

(1) dicyanosilver(I) diaquaargentate(I)

(2) diaquasilver(I) dicyanoargentate(I)

(3) dicyanosilver(II) diaquaargentate(II)

(4) diaquasilver(II) dicyanoargentate(II)

Answer (2)

63. Given below are two statements

Statement I:

Primary aliphatic amines react with HNO_2 to give unstable diazonium salts.

Statement II:

Primary aromatic amines react with HNO_2 to form diazonium salts which are stable even above 300 K. In the light of the above statements, choose the **most appropriate** answer from the options given below

(1) Statement I is correct but Statement II is incorrect.

(2) Statement I is incorrect but Statement II is correct.

(3) Both Statement I and Statement II are correct.

(4) Both Statement I and Statement II are incorrect.

Answer (1)

64. Which of the following statement is not correct about diborane?

(1) The four terminal Hydrogen atoms and the two Boron atoms lie in one plane.

(2) Both the Boron atoms are sp^2 hybridised.

(3) There are two 3-centre-2-electron bonds.

(4) The four terminal B-H bonds are two centre two electron bonds.

Answer (2)

65. Match List-I with List-II.

| List – I (Products formed) | List – II (Reaction of carbonyl compound with) |
|-------------------------------|---|
| (a) Cyanohydrin | (i) NH_2OH |
| (b) Acetal | (ii) RNH_2 |
| (c) Schiff's base | (iii) alcohol |
| (d) Oxime | (iv) HCN |

Choose the correct answer from the options given below

- | | |
|--|--|
| (1) (a) – (i), (b) – (iii), (c) – (ii), (d) – (iv) | (2) (a) – (iv), (b) – (iii), (c) – (ii), (d) – (i) |
| (3) (a) – (iii), (b) – (iv), (c) – (ii), (d) – (i) | (4) (a) – (ii), (b) – (iii), (c) – (iv), (d) – (i) |

Answer (2)

66. Choose the correct statement:

- (1) Diamond is sp^3 hybridised and graphite is sp^2 hybridized.
- (2) Both diamond and graphite are used as dry lubricants.
- (3) Diamond and graphite have two dimensional network.
- (4) Diamond is covalent and graphite is ionic.

Answer (1)

67. The pH of the solution containing 50 mL each of 0.10 M sodium acetate and 0.01 M acetic acid is

[Given pK_a of $\text{CH}_3\text{COOH} = 4.57$]

- | | |
|----------|----------|
| (1) 4.57 | (2) 2.57 |
| (3) 5.57 | (4) 3.57 |

Answer (3)

68. Gadolinium has a low value of third ionisation enthalpy because of

- | | |
|----------------------------|----------------------------|
| (1) high electronegativity | (2) high basic character |
| (3) small size | (4) high exchange enthalpy |

Answer (4)

69. In one molal solution that contains 0.5 mole of a solute, there is

- | | |
|-----------------------|-----------------------|
| (1) 100 mL of solvent | (2) 1000 g of solvent |
| (3) 500 mL of solvent | (4) 500 g of solvent |

Answer (4)

70. Given below are two statements :

Statement I : The boiling points of aldehydes and ketones are higher than hydrocarbons of comparable molecular masses because of weak molecular association in aldehydes and ketones due to dipole - dipole interactions.

Statement II : The boiling points of aldehydes and ketones are lower than the alcohols of similar molecular masses due to the absence of H-bonding.

In the light of the above statements, choose the **most appropriate** answer from the given below

- (1) **Statement I** is correct but **Statement II** is incorrect
 (2) **Statement I** is incorrect but **Statement II** is correct
 (3) Both **Statement I** and **Statement II** are correct
 (4) Both **Statement I** and **Statement II** are incorrect

Answer (3)

71. At 298 K, the standard electrode potentials of $\text{Cu}^{2+} / \text{Cu}$, $\text{Zn}^{2+} / \text{Zn}$, $\text{Fe}^{2+} / \text{Fe}$ and Ag^+ / Ag are 0.34 V, -0.76 V, -0.44 V and 0.80 V, respectively.

On the basis of standard electrode potential, predict which of the following reaction cannot occur?

- (1) $\text{FeSO}_4(\text{aq}) + \text{Zn}(\text{s}) \rightarrow \text{ZnSO}_4(\text{aq}) + \text{Fe}(\text{s})$ (2) $2\text{CuSO}_4(\text{aq}) + 2\text{Ag}(\text{s}) \rightarrow 2\text{Cu}(\text{s}) + \text{Ag}_2\text{SO}_4(\text{aq})$
 (3) $\text{CuSO}_4(\text{aq}) + \text{Zn}(\text{s}) \rightarrow \text{ZnSO}_4(\text{aq}) + \text{Cu}(\text{s})$ (4) $\text{CuSO}_4(\text{aq}) + \text{Fe}(\text{s}) \rightarrow \text{FeSO}_4(\text{aq}) + \text{Cu}(\text{s})$

Answer (2)

72. Match **List-I** with **List-II**

List-I

- (a) Li
 (b) Na
 (c) KOH
 (d) Cs

List-II

- (i) absorbent for carbon dioxide
 (ii) electrochemical cells
 (iii) coolant in fast breeder reactors
 (iv) photoelectric cell

Choose the correct answer from the options given below :

- (1) (a) - (i), (b) - (iii), (c) - (iv), (d) - (ii) (2) (a) - (ii), (b) - (iii), (c) - (i), (d) - (iv)
 (3) (a) - (iv), (b) - (i), (c) - (iii), (d) - (ii) (4) (a) - (iii), (b) - (iv), (c) - (ii), (d) - (i)

Answer (2)

73. Match **List-I** with **List-II**.

List-I

(Drug class)

- (a) Antacids
 (b) Antihistamines
 (c) Analgesics
 (d) Antimicrobials

List-II

(Drug molecule)

- (i) Salvarsan
 (ii) Morphine
 (iii) Cimetidine
 (iv) Seldane

Choose the correct answer from the options given below :

- (1) (a) - (i), (b) - (iv), (c) - (ii), (d) - (iii) (2) (a) - (iv), (b) - (iii), (c) - (i), (d) - (ii)
 (3) (a) - (iii), (b) - (ii), (c) - (iv), (d) - (i) (4) (a) - (iii), (b) - (iv), (c) - (ii), (d) - (i)

Answer (4)

74. $\text{RMgX} + \text{CO}_2 \xrightarrow[\text{ether}]{\text{dry}} \text{Y} \xrightarrow{\text{H}_3\text{O}^+} \text{RCOOH}$

What is Y in the above reaction?

- (1) RCOO^-X^+ (2) $(\text{RCOO})_2\text{Mg}$
 (3) $\text{RCOO}^-\text{Mg}^+\text{X}$ (4) $\text{R}_3\text{CO}^-\text{Mg}^+\text{X}$

Answer (3)

75. Given below are two statements: one is labelled as **Assertion (A)** and the other is labelled as **Reason (R)**.

Assertion (A): ICl is more reactive than I₂.

Reason (R): I-Cl bond is weaker than I-I bond.

In the light of the above statements, choose the most **appropriate** answer from the options given below:

- (1) (A) is correct but (R) is not correct
- (2) (A) is not correct but (R) is correct
- (3) Both (A) and (R) are correct and (R) is the correct explanation of (A).
- (4) Both (A) and (R) are correct but (R) is not the correct explanation of (A).

Answer (3)

76. The **incorrect** statement regarding chirality is

- (1) Enantiomers are superimposable mirror images on each other
- (2) A racemic mixture shows zero optical rotation
- (3) S_N1 reaction yields 1 : 1 mixture of both enantiomers
- (4) The product obtained by S_N2 reaction of haloalkane having chirality at the reactive site shows inversion of configuration

Answer (1)

77. Match List-I with List-II.

List – I

(Hydrides)

- (a) MgH₂
- (b) GeH₄
- (c) B₂H₆
- (d) HF

List – II

(Nature)

- (i) Electron precise
- (ii) Electron deficient
- (iii) Electron rich
- (iv) Ionic

Choose the correct answer from the options given below

- (1) (a) – (i), (b) – (ii), (c) – (iv), (d) – (iii)
- (2) (a) – (ii), (b) – (iii), (c) – (iv), (d) – (i)
- (3) (a) – (iv), (b) – (i), (c) – (ii), (d) – (iii)
- (4) (a) – (iii), (b) – (i), (c) – (ii), (d) – (iv)

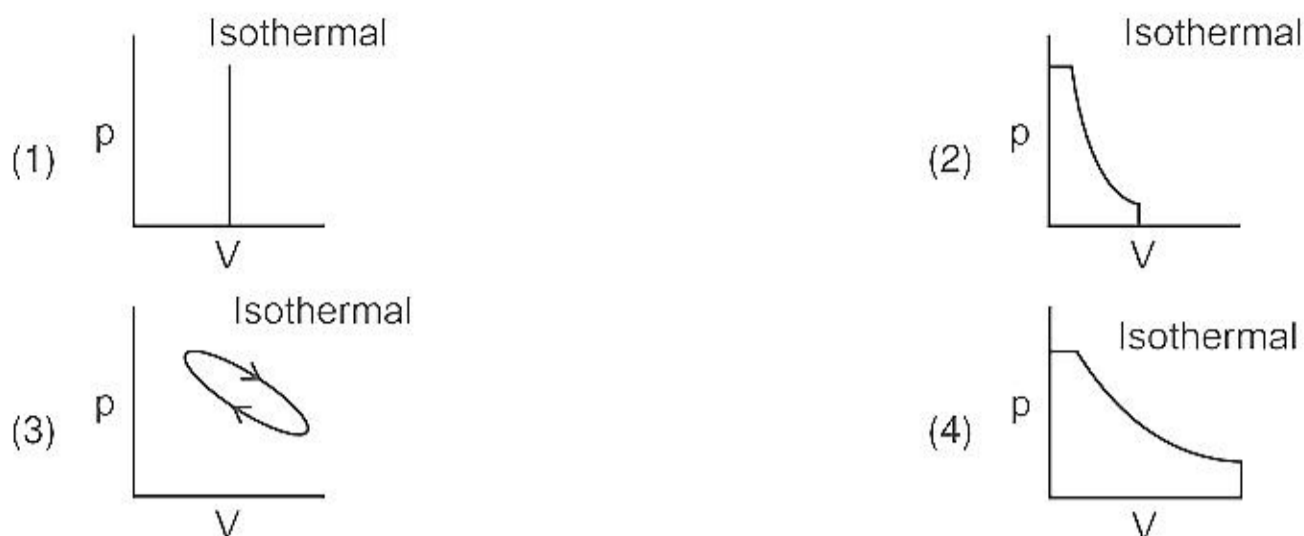
Answer (3)

78. The **incorrect** statement regarding enzymes is

- (1) Enzymes are polysaccharides.
- (2) Enzymes are very specific for a particular reaction and substrate.
- (3) Enzymes are biocatalysts.
- (4) Like chemical catalysts enzymes reduce the activation energy of bio processes.

Answer (1)

79. Which of the following p-V curve represents maximum work done?



Answer (4)

80. Given below are two statements: one is labelled as **Assertion (A)** and the other is labelled as **Reason (R)**.

Assertion (A):

In a particular point defect, an ionic solid is electrically neutral, even if few of its cations are missing from its unit cells.

Reason (R):

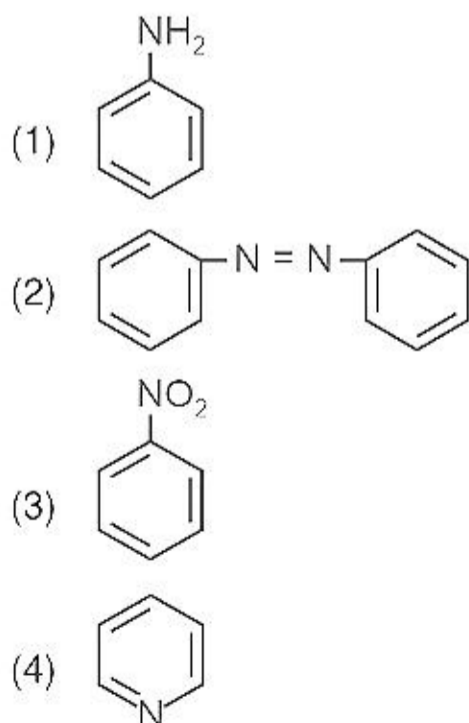
In an ionic solid, Frenkel defect arises due to dislocation of cation from its lattice site to interstitial site, maintaining overall electrical neutrality.

In the light of the above statements, choose the most appropriate answer from the options given below:

- (1) (A) is correct but (R) is not correct
- (2) (A) is not correct but (R) is correct
- (3) Both (A) and (R) are correct and (R) is the correct explanation of (A)
- (4) Both (A) and (R) are correct but (R) is not the correct explanation of (A)

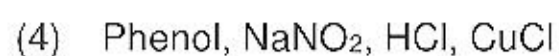
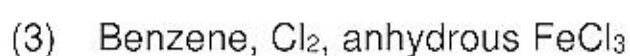
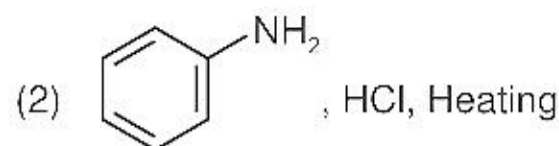
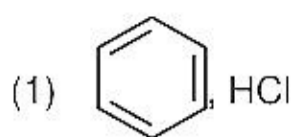
Answer (4)

81. The Kjeldahl's method for the estimation of nitrogen can be used to estimate the amount of nitrogen in which one of the following compounds?



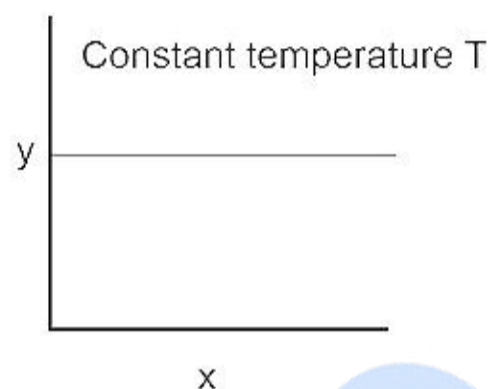
Answer (1)

82. Which of the following sequence of reactions is suitable to synthesize chlorobenzene?



Answer (3)

83. The given graph is a representation of kinetics of a reaction.



The y and x axes for zero and first order reactions, respectively are

- (1) zero order ($y = \text{rate}$ and $x = \text{concentration}$), first order ($y = t_{1/2}$ and $x = \text{concentration}$)
- (2) zero order ($y = \text{rate}$ and $x = \text{concentration}$), first order ($y = \text{rate}$ and $x = t_{1/2}$)
- (3) zero order ($y = \text{concentration}$ and $x = \text{time}$), first order ($y = t_{1/2}$ and $x = \text{concentration}$)
- (4) zero order ($y = \text{concentration}$ and $x = \text{time}$), first order ($y = \text{rate constant}$ and $x = \text{concentration}$)

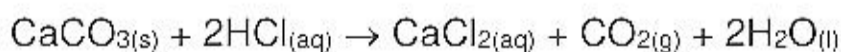
Answer (1)

84. Identify the **incorrect** statement from the following.

- (1) In an atom, all the five $3d$ orbitals are equal in energy in free state.
- (2) The shapes of d_{xy} , d_{yz} and d_{zx} orbitals are similar to each other; and $d_{x^2-y^2}$ and d_{z^2} are similar to each other.
- (3) All the five $5d$ orbitals are different in size when compared to the respective $4d$ orbitals.
- (4) All the five $4d$ orbitals have shapes similar to the respective $3d$ orbitals.

Answer (2)

85. What mass of 95% pure CaCO_3 will be required to neutralise 50 mL of 0.5 M HCl solution according to the following reaction?

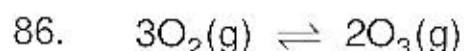


[Calculate upto second place of decimal point]

- (1) 3.65 g
- (2) 9.50 g
- (3) 1.25 g
- (4) 1.32 g

Answer (4)

SECTION-B



for the above reaction at 298 K, K_c is found to be 3.0×10^{-59} . If the concentration of O_2 at equilibrium is 0.040 M then concentration of O_3 in M is

- (1) 2.4×10^{31} (2) 1.2×10^{21}
 (3) 4.38×10^{-32} (4) 1.9×10^{-63}

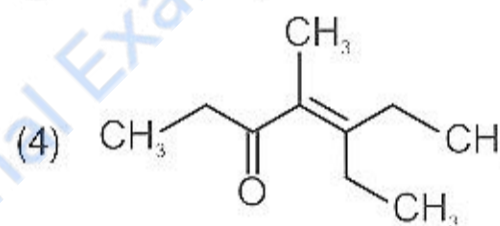
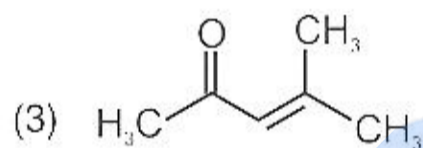
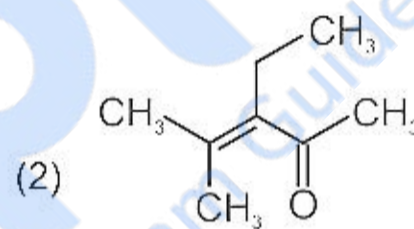
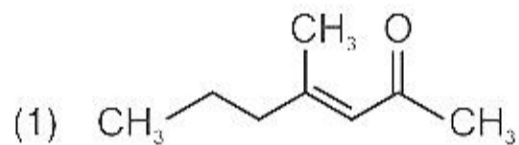
Answer (3)

87. Compound X on reaction with O_3 followed by $\text{Zn}/\text{H}_2\text{O}$ gives formaldehyde and 2-methyl propanal as products. The compound X is

- (1) 2-Methylbut-2-ene (2) Pent-2-ene
 (3) 3-Methylbut-1-ene (4) 2-Methylbut-1-ene

Answer (3)

88. Which one of the following is not formed when acetone reacts with 2-pentanone in the presence of dilute NaOH followed by heating?

**Answer (4)**

89. For a first order reaction $\text{A} \rightarrow \text{Products}$, initial concentration of A is 0.1 M, which becomes 0.001 M after 5 minutes. Rate constant for the reaction in min^{-1} is

- (1) 0.4606 (2) 0.2303
 (3) 1.3818 (4) 0.9212

Answer (4)

90. Given below are two statements:

Statement I:

In Lucas test, primary, secondary and tertiary alcohols are distinguished on the basis of their reactivity with conc. $\text{HCl} + \text{ZnCl}_2$, known as Lucas Reagent.

Statement II:

Primary alcohols are most reactive and immediately produce turbidity at room temperature on reaction with Lucas Reagent.

In the light of the above statements, choose the most appropriate answer from the options given below:

- (1) Statement I is correct but Statement II is incorrect

- (2) Statement I is incorrect but Statement II is correct
 (3) Both Statement I and Statement II are correct
 (4) Both Statement I and Statement II are incorrect

Answer (1)

91. Match List-I with List-II.

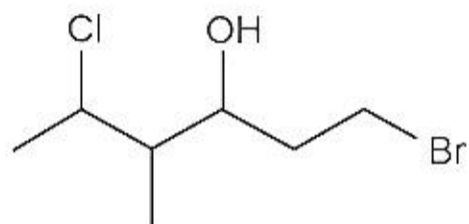
| List-I (Ores) | List-II (Composition) |
|------------------|--|
| (a) Haematite | (i) Fe_3O_4 |
| (b) Magnetite | (ii) ZnCO_3 |
| (c) Calamine | (iii) Fe_2O_3 |
| (d) Kaolinite | (iv) $[\text{Al}_2(\text{OH})_4\text{Si}_2\text{O}_5]$ |

Choose the correct answer from the options given below:

- (1) (a)-(iii), (b)-(i), (c)-(iv), (d)-(ii) (2) (a)-(i), (b)-(iii), (c)-(ii), (d)-(iv)
 (3) (a)-(i), (b)-(ii), (c)-(iii), (d)-(iv) (4) (a)-(iii), (b)-(i), (c)-(ii), (d)-(iv)

Answer (4)

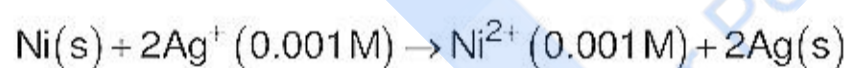
92. The correct IUPAC name of the following compound is



- (1) 1-bromo-4-methyl-5-chlorohexan-3-ol (2) 6-bromo-4-methyl-2-chlorohexan-4-ol
 (3) 1-bromo-5-chloro-4-methylhexan-3-ol (4) 6-bromo-2-chloro-4-methylhexan-4-ol

Answer (3)

93. Find the emf of the cell in which the following reaction takes place at 298 K



$$\left(\text{Given that } E_{\text{cell}}^{\circ} = 10.5 \text{ V, } \frac{2.303 RT}{F} = 0.059 \text{ at } 298 \text{ K} \right)$$

- (1) 0.9615 V (2) 1.05 V
 (3) 1.0385 V (4) 1.385 V

Answer (NA)

94. The order of energy absorbed which is responsible for the color of complexes

- (A) $[\text{Ni}(\text{H}_2\text{O})_2(\text{en})_2]^{2+}$
 (B) $[\text{Ni}(\text{H}_2\text{O})_4(\text{en})]^{2+}$ and
 (C) $[\text{Ni}(\text{en})_3]^{2+}$

is

- (1) (C) > (A) > (B) (2) (B) > (A) > (C)
 (3) (A) > (B) > (C) (4) (C) > (B) > (A)

Answer (1)

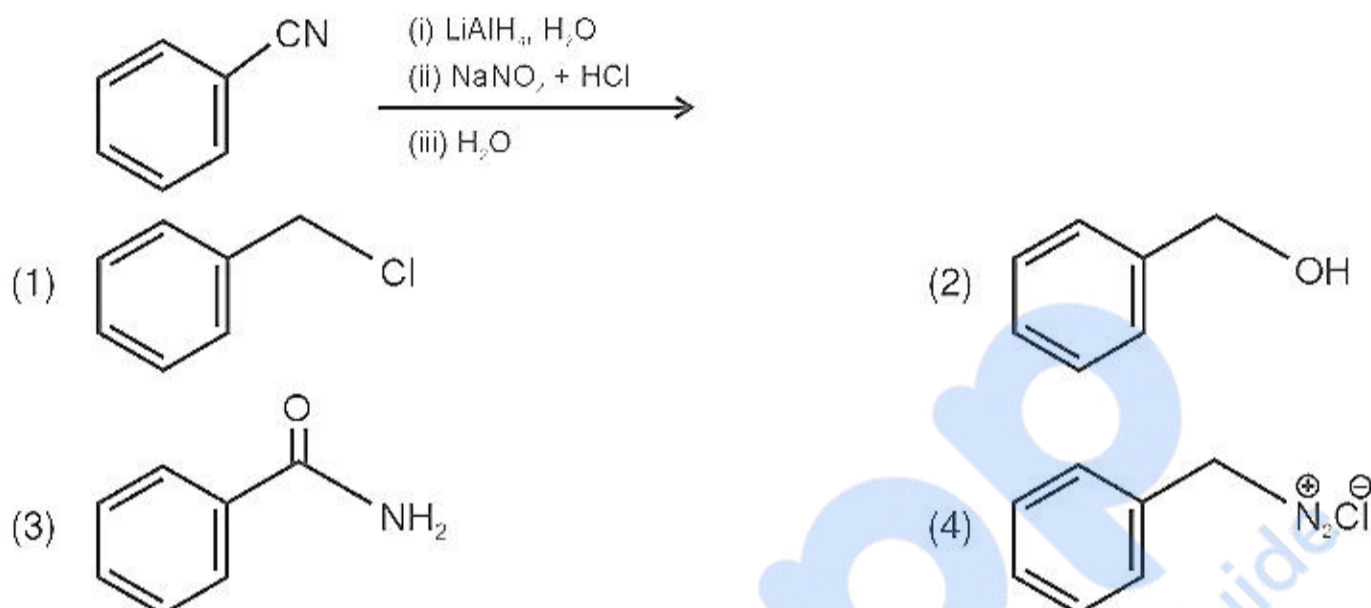
95. The pollution due to oxides of sulphur gets enhanced due to the presence of:
- (a) particulate matter (b) ozone
(c) hydrocarbons (d) hydrogen peroxide

Choose the most appropriate answer from the options given below:

- (1) (b), (c), (d) only (2) (a), (c), (d) only
(3) (a), (d) only (4) (a), (b), (d) only

Answer (4)

96. The product formed from the following reaction sequence is



Answer (2)

97. If radius of second Bohr orbit of the He^+ ion is 105.8 pm, what is the radius of third Bohr orbit of Li^{2+} ion?
- (1) 1.587 pm (2) 158.7 Å
(3) 158.7 pm (4) 15.87 pm

Answer (3)

98. In the neutral or faintly alkaline medium, KMnO_4 oxidises iodide into iodate. The change in oxidation state of manganese in this reaction is from
- (1) +7 to +3 (2) +6 to +5
(3) +7 to +4 (4) +6 to +4

Answer (3)

99. Copper crystallises in fcc unit cell with cell edge length of 3.608×10^{-8} cm. The density of copper is 8.92 g cm^{-3} . Calculate the atomic mass of copper.
- (1) 60 u (2) 65 u
(3) 63.1 u (4) 31.55 u

Answer (3)

100. A 10.0 L flask contains 64 g of oxygen at 27°C . (Assume O_2 gas is behaving ideally). The pressure inside the flask in bar is (Given $R = 0.0831 \text{ L bar K}^{-1} \text{ mol}^{-1}$)
- (1) 49.8 (2) 4.9
(3) 2.5 (4) 498.6

Answer (2)

BOTANY

SECTION-A

101. "Girdling Experiment" was performed by Plant Physiologists to identify the plant tissue through which:
- | | |
|--|-------------------------|
| (1) for both water and food transportation | (2) osmosis is observed |
| (3) water is transported | (4) food is transported |

Answer (4)

102. What is the net gain of ATP when each molecule of glucose is converted to two molecules of pyruvic acid?
- | | |
|----------|-----------|
| (1) Two | (2) Eight |
| (3) Four | (4) Six |

Answer (1)

103. What amount of energy is released from glucose during lactic acid fermentation?
- | | |
|-----------------------|-------------------|
| (1) About 10% | (2) Less than 7% |
| (3) Approximately 15% | (4) More than 18% |

Answer (2)

104. XO type of sex determination can be found in :
- | | |
|-----------------------|-------------|
| (1) Grasshoppers | (2) Monkeys |
| (3) <i>Drosophila</i> | (4) Birds |

Answer (1)

105. Which of the following is **incorrectly** matched?
- | | |
|--|--------------------------------|
| (1) <i>Porphyra</i> – Floridian Starch | (2) <i>Volvox</i> – Starch |
| (3) <i>Ectocarpus</i> – Fucoxanthin | (4) <i>Ulothrix</i> – Mannitol |

Answer (4)

106. Identify the **incorrect** statement related to Pollination :
- (1) Flowers produce foul odours to attract flies and beetles to get pollinated
 - (2) Moths and butterflies are the most dominant pollinating agents among insects
 - (3) Pollination by water is quite rare in flowering plants
 - (4) Pollination by wind is more common amongst abiotic pollination

Answer (2)

107. Given below are two statements :

Statement I :

Mendel studied seven pairs of contrasting traits in pea plants and proposed the Laws of Inheritance.

Statement II :

Seven characters examined by Mendel in his experiment on pea plants were seed shape and colour, flower colour, pod shape and colour, flower position and stem height.

In the light of the above statements, choose the correct answer from the options given below :

- (1) **Statement I** is correct but **Statement II** is incorrect
- (2) **Statement I** is incorrect but **Statement II** is correct
- (3) Both **Statement I** and **Statement II** are correct
- (4) Both **Statement I** and **Statement II** are incorrect

Answer (3)

108. Which one of the following plants does **not** show plasticity?

- | | |
|---------------|---------------|
| (1) Buttercup | (2) Maize |
| (3) Cotton | (4) Coriander |

Answer (2)

109. Exoskeleton of arthropods is composed of :

- | | |
|------------|-----------------|
| (1) Chitin | (2) Glucosamine |
| (3) Cutin | (4) Cellulose |

Answer (1)

110. Given below are two statements:

Statement I: Decomposition is a process in which the detritus is degraded into simpler substances by microbes.

Statement II: Decomposition is faster if the detritus is rich in lignin and chitin.

In the light of the above statements, choose the **correct** answer from the options given below:

- (1) **Statement I** is correct but **Statement II** is incorrect
- (2) **Statement I** is incorrect but **Statement II** is correct
- (3) Both **Statement I** and **Statement II** are correct
- (4) Both **Statement I** and **Statement II** are incorrect

Answer (1)

111. Habitat loss and fragmentation, over exploitation, alien species invasion and co-extinction are causes for:

- | | |
|--------------------------|-----------------|
| (1) Biodiversity loss | (2) Natality |
| (3) Population explosion | (4) Competition |

Answer (1)

112. Which one of the following is **not** true regarding the release of energy during ATP synthesis through chemiosmosis? It involves:

- (1) Movement of protons across the membrane to the stroma
- (2) Reduction of NADP to NADPH₂ on the stroma side of the membrane
- (3) Breakdown of proton gradient
- (4) Breakdown of electron gradient

Answer (4)

113. Which one of the following produces nitrogen fixing nodules on the roots of *Alnus*?

- | | |
|---------------------------|-------------------------|
| (1) <i>Rhodospirillum</i> | (2) <i>Beijerinckia</i> |
| (3) <i>Rhizobium</i> | (4) <i>Frankia</i> |

Answer (4)

114. Identify the **correct** set of statements :

- (a) The leaflets are modified into pointed hard thorns in *Citrus* and *Bougainvillea*
- (b) Axillary buds form slender and spirally coiled tendrils in cucumber and pumpkin
- (c) Stem is flattened and fleshy in *Opuntia* and modified to perform the function of leaves
- (d) *Rhizophora* shows vertically upward growing roots that help to get oxygen for respiration
- (e) Subaerially growing stems in grasses and strawberry help in vegetative propagation

Choose the **correct answer** from the options given below :

- | | |
|--------------------------------|--------------------------------|
| (1) (b), (c), (d) and (e) Only | (2) (a), (b), (d) and (e) Only |
| (3) (b) and (c) Only | (4) (a) and (d) Only |

Answer (1)

115. Which one of the following statement is **not true** regarding gel electrophoresis technique?
- (1) The presence of chromogenic substrate gives blue coloured DNA bands on the gel.
 - (2) Bright orange coloured bands of DNA can be observed in the gel when exposed to UV light.
 - (3) The process of extraction of separated DNA strands from gel is called elution.
 - (4) The separated DNA fragments are stained by using ethidium bromide.

Answer (1)

116. Which one of the following never occurs during mitotic cell division?
- (1) Pairing of homologous chromosomes
 - (2) Coiling and condensation of the chromatids
 - (3) Spindle fibres attach to kinetochores of chromosomes
 - (4) Movement of centrioles towards opposite poles

Answer (1)

117. Which of the following is **not** a method of *ex situ* conservation?
- | | |
|-----------------------------------|----------------------|
| (1) Micropropagation | (2) Cryopreservation |
| (3) <i>In vitro</i> fertilization | (4) National Parks |

Answer (4)

118. The gaseous plant growth regulator is used in plants to :
- (1) help overcome apical dominance
 - (2) kill dicotyledonous weeds in the fields
 - (3) speed up the malting process
 - (4) promote root growth and roothair formation to increase the absorption surface

Answer (4)

119. The appearance of recombination nodules on homologous chromosomes during meiosis characterizes :
- | | |
|---|---------------------|
| (1) Sites at which crossing over occurs | (2) Terminalization |
| (3) Synaptonemal complex | (4) Bivalent |

Answer (1)

120. Production of Cucumber has increased manifold in recent years. Application of which of the following phytohormones has resulted in this increased yield as the hormone is known to produce female flowers in the plants :
- | | |
|--------------|-----------------|
| (1) Ethylene | (2) Cytokinin |
| (3) ABA | (4) Gibberellin |

Answer (1)

121. Given below are two statements :

Statement I :

Cleistogamous flowers are invariably autogamous

Statement II :

Cleistogamy is disadvantageous as there is no chance for cross pollination

In the light of the above statements, choose the **correct** answer from the options given below :

- (1) **Statement I** is correct but **Statement II** is incorrect
- (2) **Statement I** is incorrect but **Statement II** is correct
- (3) Both **Statement I** and **Statement II** are correct
- (4) Both **Statement I** and **Statement II** are incorrect

Answer (3)

122. Read the following statements about the vascular bundles :
- In roots, xylem and phloem in a vascular bundle are arranged in an alternate manner along the different radii.
 - Conjoint closed vascular bundles do not possess cambium
 - In open vascular bundles, cambium is present in between xylem and phloem
 - The vascular bundles of dicotyledonous stem possess endarch protoxylem
 - In monocotyledonous root, usually there are more than six xylem bundles present

Choose the **correct answer** from the options given below :

- | | |
|--------------------------------|--------------------------------|
| (1) (a), (b), (c) and (d) Only | (2) (a), (c), (d) and (e) Only |
| (3) (a), (b) and (d) Only | (4) (b), (c), (d) and (e) Only |

Answer (NA) No option is correct

123. In old trees the greater part of secondary xylem is dark brown and resistant to insect attack due to :
- secretion of secondary metabolites and their deposition in the lumen of vessels.
 - deposition of organic compounds like tannins and resins in the central layers of stem.
 - deposition of suberin and aromatic substances in the outer layer of stem.
 - deposition of tannins, gum, resin and aromatic substances in the peripheral layers of stem.
 - presence of parenchyma cells, functionally active xylem elements and essential oils.

Choose the **correct answer** from the options given below:

- | | |
|----------------------|----------------------|
| (1) (d) and (e) Only | (2) (b) and (d) Only |
| (3) (a) and (b) Only | (4) (c) and (d) Only |

Answer (3)

124. Hydrocolloid carrageen is obtained from:

- | | |
|------------------------------------|-----------------------------------|
| (1) Rhodophyceae only | (2) Phaeophyceae only |
| (3) Chlorophyceae and Phaeophyceae | (4) Phaeophyceae and Rhodophyceae |

Answer (1)

125. Which one of the following statements cannot be connected to Predation?

- Both the interacting species are negatively impacted
- It is necessitated by nature to maintain the ecological balance
- It helps in maintaining species diversity in a community
- It might lead to extinction of a species

Answer (1)

126. DNA polymorphism forms the basis of :

- | | |
|--|-------------------------|
| (1) Both genetic mapping and DNA finger printing | (2) Translation |
| (3) Genetic mapping | (4) DNA finger printing |

Answer (1)

127. The flowers are Zygomorphic in:

- Mustard
- Gulmohar
- Cassia*
- Datura*
- Chilly

Choose the **correct answer** from the options given below:

- | | |
|------------------------|------------------------|
| (1) (d), (e) Only | (2) (c), (d), (e) Only |
| (3) (a), (b), (c) Only | (4) (b), (c) Only |

Answer (4)

128. The process of translation of mRNA to proteins begins as soon as :
- (1) Both the subunits join together to bind with mRNA
 - (2) The tRNA is activated and the larger subunit of ribosome encounters mRNA
 - (3) The small subunit of ribosome encounters mRNA
 - (4) The larger subunit of ribosome encounters mRNA

Answer (3)

129. Which of the following is **not** observed during apoplastic pathway ?
- (1) The movement is aided by cytoplasmic streaming
 - (2) Apoplast is continuous and does not provide any barrier to water movement
 - (3) Movement of water occurs through intercellular spaces and wall of the cells
 - (4) The movement does not involve crossing of cell membrane

Answer (1)

130. Given below are two statements :

Statement I :

The primary CO₂ acceptor in C₄ plants is phosphoenolpyruvate and is found in the mesophyll cells.

Statement II :

Mesophyll cells of C₄ plants lack RuBisCo enzyme. In the light of the above statements, choose the **correct** answer from the options given below:

- (1) **Statement I** is correct but **Statement II** is incorrect
- (2) **Statement I** is incorrect but **Statement II** is correct
- (3) Both **Statement I** and **Statement II** are correct
- (4) Both **Statement I** and **Statement II** are incorrect

Answer (3)

131. Read the following statements and choose the set of **correct** statements :

- (a) Euchromatin is loosely packed chromatin
- (b) Heterochromatin is transcriptionally active
- (c) Histone octamer is wrapped by negatively charged DNA in nucleosome
- (d) Histones are rich in lysine and arginine
- (e) A typical nucleosome contains 400 bp of DNA helix

Choose the correct answer from the options given below :

- | | |
|------------------------|------------------------|
| (1) (b), (e) Only | (2) (a), (c), (e) Only |
| (3) (b), (d), (e) Only | (4) (a), (c), (d) Only |

Answer (4)

132. Match **List-I** with **List-II**

| | List-I | | List-II |
|-----|-----------|-------|---|
| (a) | Manganese | (i) | Activates the enzyme catalase |
| (b) | Magnesium | (ii) | Required for pollen germination |
| (c) | Boron | (iii) | Activates enzymes of respiration |
| (d) | Iron | (iv) | Functions in splitting of water during photosynthesis |

Choose the **correct answer** from the options given below :

- | | |
|--|--|
| (1) (a)-(iv), (b)-(i), (c)-(ii), (d)-(iii) | (2) (a)-(iii), (b)-(i), (c)-(ii), (d)-(iv) |
| (3) (a)-(iii), (b)-(iv), (c)-(i), (d)-(ii) | (4) (a)-(iv), (b)-(iii), (c)-(ii), (d)-(i) |

Answer (4)

133. The device which can remove particulate matter present in the exhaust from a thermal power plant is :
- (1) Electrostatic Precipitator (2) Catalytic Converter
 (3) STP (4) Incinerator

Answer (1)

134. Given below are two statements : one is labelled as **Assertion (A)** and the other is labelled as **Reason (R)**.

Assertion (A) :

Polymerase chain reaction is used in DNA amplification.

Reason (R) :

The ampicillin resistant gene is used as a selectable marker to check transformation

In the light of the above statements, choose the **correct** answer from the options given below :

- (1) **(A)** is correct but **(R)** is not correct
 (2) **(A)** is not correct but **(R)** is correct
 (3) Both **(A)** and **(R)** are correct and **(R)** is the correct explanation of **(A)**
 (4) Both **(A)** and **(R)** are correct but **(R)** is not the correct explanation of **(A)**

Answer (4)

135. Which one of the following plants shows vexillary aestivation and diadelphous stamens?
- (1) *Allium cepa* (2) *Solanum nigrum*
 (3) *Colchicum autumnale* (4) *Pisum sativum*

Answer (4)

SECTION-B

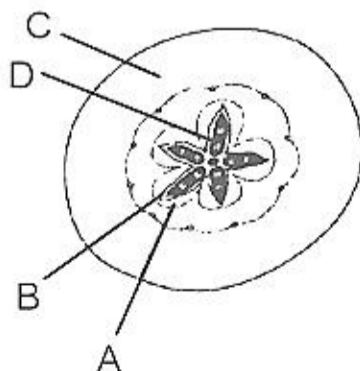
136. In the following palindromic base sequences of DNA, which one can be cut easily by particular restriction enzyme?
- (1) 5'CTCAGT3'; 3'GAGTCA5' (2) 5'GTATTC3'; 3'CATAAG5'
 (3) 5'GATACT3'; 3'CTATGA5' (4) 5'GAATTC3'; 3'CTTAAG5'

Answer (4)

137. The entire fleet of buses in Delhi were converted to CNG from diesel. In reference to this, which one of the following statements is false?
- (1) It is cheaper than diesel
 (2) It cannot be adulterated like diesel
 (3) CNG burns more efficiently than diesel
 (4) The same diesel engine is used in CNG buses making the cost of conversion low

Answer (4)

138. Which part of the fruit, labelled in the given figure makes it a false fruit?



- (1) C → Thalamus (2) D → Seed
 (3) A → Mesocarp (4) B → Endocarp

Answer (1)

139. Addition of more solutes in a given solution will :
- (1) make its water potential zero (2) not affect the water potential at all
 (3) raise its water potential (4) lower its water potential

Answer (4)

140. Match the plant with the kind of life cycle it exhibits:

| | List-I | | List-II |
|-----|------------------|-------|--|
| (a) | <i>Spirogyra</i> | (i) | Dominant diploid sporophyte vascular plant, with highly reduced male or female gametophyte |
| (b) | Fern | (ii) | Dominant haploid free-living gametophyte |
| (c) | <i>Funaria</i> | (iii) | Dominant diploid sporophyte alternating with reduced gametophyte called prothallus |
| (d) | <i>Cycas</i> | (iv) | Dominant haploid leafy gametophyte alternating with partially dependent multicellular sporophyte |

Choose the **correct answer** from the options given below :

- (1) (a)-(iii), (b)-(iv), (c)-(i), (d)-(ii)
 (2) (a)-(ii), (b)-(iv), (c)-(i), (d)-(iii)
 (3) (a)-(iv), (b)-(i), (c)-(ii), (d)-(iii)
 (4) (a)-(ii), (b)-(iii), (c)-(iv), (d)-(i)

Answer (4)

141. While explaining interspecific interaction of population, (+) sign is assigned for beneficial interaction, (–) sign is assigned for detrimental interaction and (0) for neutral interaction. Which of the following interactions can be assigned (+) for one species and (–) for another species involved in the interaction ?

- (1) Commensalism (2) Competition
 (3) Predation (4) Amensalism

Answer (3)

142. The anatomy of springwood shows some peculiar features. Identify the **correct** set of statements about springwood.

- (a) It is also called as the earlywood
 (b) In spring season cambium produces xylem elements with narrow vessels
 (c) It is lighter in colour
 (d) The springwood along with autumnwood shows alternate concentric rings forming annual rings
 (e) It has lower density

Choose the correct answer from the options given below :

- (1) (a), (b) and (d) Only (2) (c), (d) and (e) Only
 (3) (a), (b), (d) and (e) Only (4) (a), (c), (d) and (e) Only

Answer (4)

143. Read the following statements on lipids and find out correct set of statements:

- (a) Lecithin found in the plasma membrane is a glycolipid
 (b) Saturated fatty acids possess one or more C = C bonds
 (c) Gingly oil has lower melting point, hence remains as oil in winter
 (d) Lipids are generally insoluble in water but soluble in some organic solvents
 (e) When fatty acid is esterified with glycerol, monoglycerides are formed

Choose the correct answer from the option given below:

- (1) (c), (d) and (e) only (2) (a), (b) and (d) only
 (3) (a), (b) and (c) only (4) (a), (d) and (e) only

Answer (1)

144. Given below are two statements : one is labelled as **Assertion (A)** and the other is labelled as **Reason (R)**.
Assertion (A) : Mendel's law of Independent assortment does not hold good for the genes that are located closely on the same chromosome.
Reason (R) : Closely located genes assort independently.
 In the light of the above statements, choose the **correct** answer from the options given below:
- (1) (A) is correct but (R) is not correct
 - (2) (A) is not correct but (R) is correct
 - (3) Both (A) and (R) are correct and (R) is the correct explanation of (A)
 - (4) Both (A) and (R) are correct but (R) is not the correct explanation of (A)

Answer (1)

145. If a geneticist uses the blind approach for sequencing the whole genome of an organism, followed by assignment of function to different segments, the methodology adopted by him is called as :
- (1) Expressed sequence tags
 - (2) Bioinformatics
 - (3) Sequence annotation
 - (4) Gene mapping

Answer (3)

146. Which one of the following will accelerate phosphorus cycle?
- (1) Weathering of rocks
 - (2) Rain fall and storms
 - (3) Burning of fossil fuels
 - (4) Volcanic activity

Answer (1)

147. Transposons can be used during which one of the following ?
- (1) Autoradiography
 - (2) Gene sequencing
 - (3) Polymerase Chain Reaction
 - (4) Gene Silencing

Answer (4)

148. What is the role of large bundle sheath cells found around the vascular bundles in C₄ plants?
- (1) To enable the plant to tolerate high temperature
 - (2) To protect the vascular tissue from high light intensity
 - (3) To provide the site for photorespiratory pathway
 - (4) To increase the number of chloroplast for the operation of Calvin cycle

Answer (4)

149. Which of the following occurs due to the presence of autosome linked dominant trait ?
- (1) Haemophilia
 - (2) Thalessemia
 - (3) Sickle cell anaemia
 - (4) Myotonic dystrophy

Answer (4)

150. Match List-I with List-II.

| | List-I | | List-II |
|-----|------------------------|-------|---|
| (a) | Metacentric chromosome | (i) | Centromere situated close to the end forming one extremely short and one very long arms |
| (b) | Acrocentric chromosome | (ii) | Centromere at the terminal end |
| (c) | Submetacentric | (iii) | Centromere in the middle forming two equal arms of chromosomes |
| (d) | Telocentric chromosome | (iv) | Centromere slightly away from the middle forming one shorter arm and one longer arm |

Choose the **correct answer** from the options given below :

- (1) (a)-(ii), (b)-(iii), (c)-(iv), (d)-(i)
- (2) (a)-(i), (b)-(ii), (c)-(iii), (d)-(iv)
- (3) (a)-(iii), (b)-(i), (c)-(iv), (d)-(ii)
- (4) (a)-(i), (b)-(iii), (c)-(ii), (d)-(iv)

Answer (3)

ZOOLOGY

SECTION-A

151. Select the **incorrect** statement with reference to mitosis:

- (1) Chromosomes decondense at telophase
- (2) Splitting of centromere occurs at anaphase
- (3) All the chromosomes lie at the equator at metaphase
- (4) Spindle fibres attach to centromere of chromosomes

Answer (4)

152. Given below are two statements : one is labelled as **Assertion (A)** and the other is labelled as **Reason (R)**.

Assertion (A):

Osteoporosis is characterised by decreased bone mass and increased chance of fractures.

Reason (R):

Common cause of osteoporosis is increased levels of estrogen.

In the light of the above statements, choose the **most appropriate** answer from the options given below.

- (1) **(A)** is correct but **(R)** is not correct
- (2) **(A)** is not correct but **(R)** is correct
- (3) Both **(A)** and **(R)** are correct and **(R)** is the correct explanation of **(A)**
- (4) Both **(A)** and **(R)** are correct but **(R)** is not the correct explanation of **(A)**

Answer (1)

153. A dehydration reaction links two glucose molecules to product maltose. If the formula for glucose is $C_6H_{12}O_6$ then what is the formula for maltose?

- | | |
|--------------------------|--------------------------|
| (1) $C_{12}H_{22}O_{11}$ | (2) $C_{12}H_{24}O_{11}$ |
| (3) $C_{12}H_{20}O_{10}$ | (4) $C_{12}H_{24}O_{12}$ |

Answer (1)

154. Which of the following statements are true for spermatogenesis but do not hold true for Oogenesis?

- (a) It results in the formation of haploid gametes
- (b) Differentiation of gamete occurs after the completion of meiosis
- (c) Meiosis occurs continuously in a mitotically dividing stem cell population
- (d) It is controlled by the Luteinising hormone (LH) and Follicle Stimulating Hormone (FSH) secreted by the anterior pituitary
- (e) It is initiated at puberty

Choose the most appropriate answer from the options given below:

- | | |
|---------------------------|---------------------------|
| (1) (b), (d) and (e) only | (2) (b), (c) and (e) only |
| (3) (c) and (e) only | (4) (b) and (c) only |

Answer (2)

155. In which of the following animals, digestive tract has additional chambers like crop and gizzard?
- | | |
|---------------------------------------|---|
| (1) <i>Catla, Columba, Crocodilus</i> | (2) <i>Pavo, Psittacula, Corvus</i> |
| (3) <i>Corvus, Columba, Chameleon</i> | (4) <i>Bufo, Balaenoptera, Bangarus</i> |

Answer (2)

156. Regarding Meiosis, which of the statements is **incorrect**?
- (1) Pairing of homologous chromosomes and recombination occurs in Meiosis-I
 - (2) Four haploid cells are formed at the end of Meiosis-II
 - (3) There are two stages in Meiosis, Meiosis-I and II
 - (4) DNA replication occurs in S phase of Meiosis-II

Answer (4)

157. Which of the following is present between the adjacent bones of the vertebral column?
- | | |
|------------------------|-------------------|
| (1) Areolar tissue | (2) Smooth muscle |
| (3) Intercalated discs | (4) Cartilage |

Answer (4)

158. Nitrogenous waste is excreted in the form of pellet or paste by :
- | | |
|----------------------------|-----------------------|
| (1) <i>Hippocampus</i> | (2) <i>Pavo</i> |
| (3) <i>Ornithorhynchus</i> | (4) <i>Salamandra</i> |

Answer (2)

159. Identify the microorganism which is responsible for the production of an immunosuppressive molecule cyclosporin A :
- | | |
|-----------------------------------|-------------------------------------|
| (1) <i>Aspergillus niger</i> | (2) <i>Streptococcus cerevisiae</i> |
| (3) <i>Trichoderma polysporum</i> | (4) <i>Clostridium butylicum</i> |

Answer (3)

160. Given below are two statements : one is labelled as Assertion (A) and the other is labelled as Reason (R).

Assertion (A) : All vertebrates are chordates but all chordates are not vertebrates.

Reason (R) : Notochord is replaced by vertebral column in the adult vertebrates.

In the light of the above statements, choose the **most appropriate** answer from the option given below :

- (1) **(A)** is correct but **(R)** is not correct
- (2) **(A)** is not correct but **(R)** is correct
- (3) Both **(A)** and **(R)** are correct and **(R)** is the correct explanation of **(A)**
- (4) Both **(A)** and **(R)** are correct but **(R)** is not the correct explanation of **(A)**

Answer (3)

161. Identify the asexual reproductive structure associated with *Penicillium* :

- | | |
|---------------|-------------|
| (1) Gemmules | (2) Buds |
| (3) Zoospores | (4) Conidia |

Answer (4)

162. Given below are two statements:

Statement I:

Autoimmune disorder is a condition where body defense mechanism recognizes its own cells as foreign bodies.

Statement II:

Rheumatoid arthritis is a condition where body does not attack self cells.

In the light of the above statements, choose the **most appropriate** answer from the options given below:

- (1) **Statement I** is correct but **Statement II** is incorrect
- (2) **Statement I** is incorrect but **Statement II** is correct
- (3) Both **Statement I** and **Statement II** are correct
- (4) Both **Statement I** and **Statement II** are incorrect

Answer (1)

163. If the length of a DNA molecule is 1.1 metres, what will be the approximate number of base pairs?

- (1) 3.3×10^6 bp
- (2) 6.6×10^6 bp
- (3) 3.3×10^9 bp
- (4) 6.6×10^9 bp

Answer (3)

164. Which of the following is a correct match for disease and its symptoms?

- (1) Myasthenia gravis – Genetic disorder resulting in weakening and paralysis of skeletal muscle
- (2) Muscular dystrophy – An auto immune disorder causing progressive degeneration of skeletal muscle
- (3) Arthritis – Inflamed joints
- (4) Tetany – High Ca^{2+} level causing rapid spasms.

Answer (3)

165. *In-situ* conservation refers to:

- (1) Conserve only endangered species
- (2) Conserve only extinct species
- (3) Protect and conserve the whole ecosystem
- (4) Conserve only high-risk species

Answer (3)

166. Given below are two statements:

Statement I :

The release of sperms into the seminiferous tubules is called spermiation.

Statement II :

Spermiogenesis is the process of formation of sperms from spermatogonia.

In the light of the above statements, choose the **most appropriate** answer from the options given below :

- (1) **Statement I** is correct but **Statement II** is incorrect
- (2) **Statement I** is incorrect but **Statement II** is correct
- (3) Both **Statement I** and **Statement II** are correct
- (4) Both **Statement I** and **Statement II** are incorrect

Answer (1)

167. If '8' *Drosophila* in a laboratory population of '80' died during a week, the death rate in the population is _____ individuals per *Drosophila* per week.

- (1) 1.0 (2) zero
 (3) 0.1 (4) 10

Answer (3)

168. Given below are two statements:

Statement I:

Restriction endonucleases recognise specific sequence to cut DNA known as palindromic nucleotide sequence.

Statement II:

Restriction endonucleases cut the DNA strand a little away from the centre of the palindromic site.

In the light of the above statements, choose the **most appropriate** answer from the options given below:

- (1) **Statement I** is correct but **Statement II** is incorrect
 (2) **Statement I** is incorrect but **Statement II** is correct
 (3) Both **Statement I** and **Statement II** are correct
 (4) Both **Statement I** and **Statement II** are incorrect

Answer (3)

169. Which of the following is not the function of conducting part of respiratory system?

- (1) Temperature of inhaled air is brought to body temperature
 (2) Provides surface for diffusion of O₂ and CO₂
 (3) It clears inhaled air from foreign particles
 (4) Inhaled air is humidified

Answer (2)

170. Given below are two statements :

Statement I : Mycoplasma can pass through less than 1 micron filter size.

Statement II : Mycoplasma are bacteria with cell wall.

In the light of the above statements, choose the most appropriate answer from the options given below

- (1) Statement I is correct but Statement II is incorrect
 (2) Statement I is incorrect but Statement II is correct
 (3) Both Statement I and Statement II are correct
 (4) Both Statement I and Statement II are incorrect

Answer (1)

171. Under normal physiological conditions in human being every 100 ml of oxygenated blood can deliver _____ ml of O₂ to the tissues.

- (1) 4 ml (2) 10 ml
 (3) 2 ml (4) 5 ml

Answer (4)

172. At which stage of life the oogenesis process is initiated?
- (1) Birth (2) Adult
 (3) Puberty (4) Embryonic development stage

Answer (4)

173. Tegmina in cockroach, arises from
- (1) Metathorax (2) Prothorax and Mesothorax
 (3) Prothorax (4) Mesothorax

Answer (4)

174. Given below are two statements :

Statement I :

Fatty acids and glycerols cannot be absorbed into the blood.

Statement II :

Specialized lymphatic capillaries called lacteals carry chylomicrons into lymphatic vessels and ultimately into the blood.

In the light of the above statements, choose the **most appropriate** answer from the options given below:

- (1) **Statement I** is correct but **Statement II** is incorrect
 (2) **Statement I** is incorrect but **Statement II** is correct
 (3) Both **Statement I** and **Statement II** are correct
 (4) Both **Statement I** and **Statement II** are incorrect

Answer (3)

175. Which of the following functions is **not** performed by secretions from salivary glands?
- (1) Lubrication of oral cavity (2) Digestion of disaccharides
 (3) Control bacterial population in mouth (4) Digestion of complex carbohydrates

Answer (2)

176. Natural selection where more individuals acquire specific character value other than the mean character value, leads to
- (1) Disruptive change (2) Random change
 (3) Stabilising change (4) Directional change

Answer (4)

177. In an *E. Coli* strain *i* gene gets mutated and its product can not bind the inducer molecule. If growth medium is provided with lactose, what will be the outcome?
- (1) *z*, *y*, *a* genes will not be translated
 (2) RNA polymerase will bind the promoter region
 (3) Only *z* gene will get transcribed
 (4) *z*, *y*, *a* genes will be transcribed

Answer (1)

178. In gene therapy of Adenosine Deaminase (ADA) deficiency, the patient requires periodic infusion of genetically engineered lymphocytes because :
- (1) Lymphocytes from patient's blood are grown in culture, outside the body.
 - (2) Genetically engineered lymphocytes are not immortal cells.
 - (3) Retroviral vector is introduced into these lymphocytes.
 - (4) Gene isolated from marrow cells producing ADA is introduced into cells at embryonic stages

Answer (2)

179. Which of the following is **not** a connective tissue?

- | | |
|---------------|--------------------|
| (1) Cartilage | (2) Neuroglia |
| (3) Blood | (4) Adipose tissue |

Answer (2)

180. Breeding crops with higher levels of vitamins and minerals or higher proteins and healthier fats is called :

- | | |
|-----------------------|----------------------|
| (1) Bio-fortification | (2) Bio-accumulation |
| (3) Bio-magnification | (4) Bio-remediation |

Answer (1)

181. Which of the following statements with respect to Endoplasmic Reticulum is incorrect?

- (1) In prokaryotes only RER are present
- (2) SER are the sites for lipid synthesis
- (3) RER has ribosomes attached to ER
- (4) SER is devoid of ribosomes

Answer (1)

182. Given below are two statements :

Statement I :

The coagulum is formed of network of threads called thrombins.

Statement II :

Spleen is the graveyard of erythrocytes.

In the light of the above statements, choose the **most appropriate** answer from the options given below :

- (1) **Statement I** is correct but **Statement II** is incorrect
- (2) **Statement I** is incorrect but **Statement II** is correct
- (3) Both **Statement I** and **Statement II** are correct
- (4) Both **Statement I** and **Statement II** are incorrect

Answer (2)

183. Lippe's loop is a type of contraceptive used as:

- | | |
|-----------------------|--------------------------|
| (1) Non-Medicated IUD | (2) Copper releasing IUD |
| (3) Cervical barrier | (4) Vault barrier |

Answer (1)

184. In the taxonomic categories which hierarchical arrangement in ascending order is **correct** in case of animals?
- (1) Kingdom, Order, Class, Phylum, Family, Genus, Species
 - (2) Kingdom, Order, Phylum, Class, Family, Genus, Species
 - (3) Kingdom, Phylum, Class, Order, Family, Genus, Species
 - (4) Kingdom, Class, Phylum, Family, Order, Genus, Species

Answer (3*)

185. Detritivores breakdown detritus into smaller particles. This process is called:
- (1) Humification
 - (2) Decomposition
 - (3) Catabolism
 - (4) Fragmentation

Answer (4)

SECTION-B

186. Select the **incorrect** statement regarding synapses :
- (1) Chemical synapses use neurotransmitters
 - (2) Impulse transmission across a chemical synapse is always faster than that across an electrical synapse.
 - (3) The membranes of presynaptic and postsynaptic neurons are in close proximity in an electrical synapse.
 - (4) Electrical current can flow directly from one neuron into the other across the electrical synapse.

Answer (2)

187. Match **List-I** with **List-II** with respect to methods of Contraception and their respective actions.

| | List-I | | List-II |
|-----|------------------------|-------|--|
| (a) | Diaphragms | (i) | Inhibit ovulation and Implantation |
| (b) | Contraceptive Pills | (ii) | Increase phagocytosis of sperm within Uterus |
| (c) | Intra Uterine Devices | (iii) | Absence of Menstrual cycle and ovulation following parturition |
| (d) | Lactational Amenorrhea | (iv) | They cover the cervix blocking the entry of sperms |

Choose the **correct answer** from the options given below:

- (1) (a) - (ii), (b) - (iv), (c) - (i), (d) - (iii)
- (2) (a) - (iii), (b) - (ii), (c) - (i), (d) - (iv)
- (3) (a) - (iv), (b) - (i), (c) - (iii), (d) - (ii)
- (4) (a) - (iv), (b) - (i), (c) - (ii), (d) - (iii)

Answer (4)

188. Select the **incorrect** statement with respect to acquired immunity.
- (1) Anamnestic response is due to memory of first encounter.
 - (2) Acquired immunity is non-specific type of defense present at the time of birth.
 - (3) Primary response is produced when our body encounters a pathogen for the first time.
 - (4) Anamnestic response is elicited on subsequent encounters with the same pathogen.

Answer (2)

189. If a colour blind female marries a man whose mother was also colour blind, what are the chances of her progeny having colour blindness?

- | | |
|---------|----------|
| (1) 75% | (2) 100% |
| (3) 25% | (4) 50% |

Answer (2)

190. Which of the following are **not** the effects of Parathyroid hormone?

- (a) Stimulates the process of bone resorption
- (b) Decreases Ca^{2+} level in blood
- (c) Reabsorption of Ca^{2+} by renal tubules
- (d) Decreases the absorption of Ca^{2+} from digested food
- (e) Increases metabolism of carbohydrates

Choose the **most appropriate** answer from the options given below:

- (1) (a) and (e) only
- (2) (b) and (c) only
- (3) (a) and (c) only
- (4) (b), (d) and (e) only

Answer (4)

191. Statements related to human Insulin are given below.

Which statement(s) is/are **correct** about genetically engineered Insulin?

- (a) Pro-hormone insulin contain extra stretch of C-peptide
- (b) A-peptide and B-peptide chains of insulin were produced separately in *E.coli*, extracted and combined by creating disulphide bond between them.
- (c) Insulin used for treating Diabetes was extracted from Cattles and Pigs.
- (d) Pro-hormone Insulin needs to be processed for converting into a mature and functional hormone.
- (e) Some patients develop allergic reactions to the foreign insulin.

Choose the **most appropriate** answer from the options given below:

- | | |
|---------------------------|---------------------------|
| (1) (c) and (d) only | (2) (c), (d) and (e) only |
| (3) (a), (b) and (d) only | (4) (b) only |

Answer (4)

192. Which of the following statements **is not** true?
- (1) Homology indicates common ancestry
 - (2) Flippers of penguins and dolphins are a pair of homologous organs
 - (3) Analogous structures are a result of convergent evolution
 - (4) Sweet potato and potato is an example of analogy

Answer (2)

193. Which one of the following statements is **correct**?
- (1) Blood moves freely from atrium to the ventricle during joint diastole.
 - (2) Increased ventricular pressure causes closing of the semilunar valves.
 - (3) The atrio-ventricular node (AVN) generates an action potential to stimulate atrial contraction
 - (4) The tricuspid and the bicuspid valves open due to the pressure exerted by the simultaneous contraction of the atria

Answer (1)

194. Which of the following is **not** a desirable feature of a cloning vector?
- (1) Presence of single restriction enzyme site
 - (2) Presence of two or more recognition sites
 - (3) Presence of origin of replication
 - (4) Presence of a marker gene

Answer (2)

195. The recombination frequency between the genes a & c is 5%, b & c is 15%, b & d is 9%, a & b is 20%, c & d is 24% and a & d is 29%. What will be the sequence of these genes on a linear chromosome?
- (1) a, b, c, d
 - (2) a, c, b, d
 - (3) a, d, b, c
 - (4) d, b, a, c

Answer (2)

196. Match **List-I** with **List-II**

| | List-I (Biological Molecules) | | List-II (Biological functions) |
|-----|--|-------|---|
| (a) | Glycogen | (i) | Hormone |
| (b) | Globulin | (ii) | Biocatalyst |
| (c) | Steroids | (iii) | Antibody |
| (d) | Thrombin | (iv) | Storage product |

Choose the **correct answer** from the options given below:

- (1) (a) - (ii), (b) - (iv), (c) - (iii), (d) - (i)
- (2) (a) - (iv), (b) - (iii), (c) - (i), (d) - (ii)
- (3) (a) - (iii), (b) - (ii), (c) - (iv), (d) - (i)
- (4) (a) - (iv), (b) - (ii), (c) - (i), (d) - (iii)

Answer (2)

197. Match **List-I** with **List-II**

| | List-I | | List-II |
|-----|----------------|-------|---------------------------------|
| (a) | Bronchioles | (i) | Dense Regular Connective Tissue |
| (b) | Goblet Cell | (ii) | Loose Connective Tissue |
| (c) | Tendons | (iii) | Glandular Tissue |
| (d) | Adipose Tissue | (iv) | Ciliated Epithelium |

Choose the **correct answer** from the options given below:

- (1) (a) - (ii), (b) - (i), (c) - (iv), (d) - (iii)
- (2) (a) - (iii), (b) - (iv), (c) - (ii), (d) - (i)
- (3) (a) - (iv), (b) - (iii), (c) - (i), (d) - (ii)
- (4) (a) - (i), (b) - (ii), (c) - (iii), (d) - (iv)

Answer (3)

198. Which of the following is a **correct** statement?

- (1) Slime moulds are saprophytic organisms classified under Kingdom Monera.
- (2) Mycoplasma have DNA, ribosome and cell wall.
- (3) Cyanobacteria are a group of autotrophic organisms classified under kingdom Monera.
- (4) Bacteria are exclusively heterotrophic organisms.

Answer (3)

199. Given below are two statements:

Statements I :

In a scrubber the exhaust from the thermal plant is passed through the electric wires to charge the dust particles.

Statement II :

Particulate matter (PM 2.5) cannot be removed by scrubber but can be removed by an electrostatic precipitator.

In the light of the above statements, choose the **most appropriate** answer from the options given below :

- (1) **Statement I** is correct but **Statement II** is incorrect
- (2) **Statement I** is incorrect but **Statement II** is correct
- (3) Both **Statement I** and **Statement II** are correct
- (4) Both **Statement I** and **Statement II** are incorrect

Answer (2)

200. Ten *E.coli* cells with ^{15}N - dsDNA are incubated in medium containing ^{14}N nucleotide. After 60 minutes, how many *E.coli* cells will have DNA totally free from ^{15}N ?

- | | |
|--------------|--------------|
| (1) 60 cells | (2) 80 cells |
| (3) 20 cells | (4) 40 cells |

Answer (1)

