

NEET-UG S1 2024 Question Paper with Solution

Time Allowed :200 Minutes	Maximum Marks :720	Total Questions :200
---------------------------	--------------------	----------------------

General Instructions

Read the following instructions very carefully and strictly follow them:

1. The test is of 3 hours 20 minutes duration and the Test Booklet contains 200 multiple-choice questions (four options with a single correct answer) from Physics, Chemistry and Biology (Botany and Zoology). 50 questions in each subject are divided into two Sections (A and B) as per details given below:

(a) **Section-A** shall consist of 35 (Thirty-five) Questions in each subject (Question Nos-1 to 35, 51 to 85, 101 to 135 and 151 to 185). All Questions are compulsory.

(b) **Section-B** shall consist of 15 (Fifteen) questions in each subject (Question Nos- 36 to 50, 86 to 100, 136 to 150 and 186 to 200). In Section B, a candidate needs to attempt any 10 (Ten) questions out of 15 (Fifteen) in each subject.

2. Candidates are advised to read all 15 questions in each subject of Section B before they start attempting the question paper. In the event of a candidate attempting more than ten questions, the first ten questions answered by the candidate shall be evaluated.

3. Each question carries 4 marks. For each correct response, the candidate will get 4 marks. For each incorrect response, one mark will be deducted from the total scores. The maximum marks are 720.

Physics

Section A

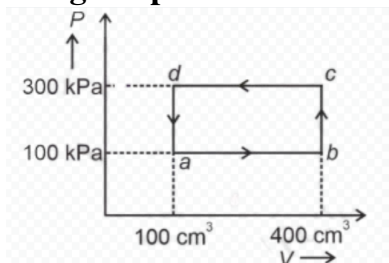
1. A bob is whirled in a horizontal plane by means of a string with an initial speed of ω rpm. The tension in the string is T . If speed becomes 2ω while keeping the same radius, the tension in the string becomes:

- (1) $\sqrt{2}T$
- (2) T
- (3) $4T$
- (4) $\frac{T}{4}$

2. A wire of length l and resistance 100Ω is divided into 10 equal parts. The first 5 parts are connected in series while the next 5 parts are connected in parallel. The two combinations are again connected in series. The resistance of this final combination is:

- (1) 60Ω
- (2) 26Ω
- (3) 52Ω
- (4) 55Ω

3. A thermodynamic system is taken through the cycle $abcd$. The work done by the gas along the path bc is:



- (1) $-60J$
- (2) 0
- (3) $30J$
- (4) $-90J$


4. A logic circuit provides the output Y as per the following truth table:

A	B	Y
0	0	1
0	1	0
1	0	1
1	1	0

The expression for the output Y is:

- (1) $A\bar{B} + A$
- (2) $A\bar{B}$
- (3) $B\bar{A}$
- (4) B

5. The graph which shows the variation of $\frac{1}{\lambda^2}$ and its kinetic energy E (where λ is de Broglie wavelength of a free particle):



6. If the velocity of light in free space, the correct statements about photon among the

following are:

- A. The energy of a photon is $E = h\nu$.
- B. The velocity of a photon is c .
- C. The momentum of a photon, $p = \frac{h\nu}{c}$.
- D. In a photon-electron collision, both total energy and total momentum are conserved.
- E. Photons possess positive charge.

Choose the correct answer from the options given below:

- (1) A and B only
 - (2) A, B, and C only
 - (3) A, B, C, and D only
 - (4) A, C, and D only
-

7. The mass of a planet is $\frac{1}{10}$ th that of the earth and its diameter is half that of the earth. The acceleration due to gravity of that planet is:

- (1) 39.2 m/s^2
 - (2) 19.6 m/s^2
 - (3) 9.8 m/s^2
 - (4) 4.9 m/s^2
-

8. In a vernier calipers, $(N + 1)$ divisions of vernier scale coincide with N divisions of main scale. If 1 MSD represents 0.1 cm, the vernier constant (in cm) is:

- (1) $10N + 1$
 - (2) $\frac{1}{10N}$
 - (3) $\frac{1}{100(N+1)}$
 - (4) $100N$
-

9. In an ideal transformer, the turns ratio is $\frac{N_P}{N_S} = \frac{1}{2}$. The ratio $V_S : V_P$ is equal to (the symbols carry their usual meaning):

- (1) 1 : 4
 - (2) 1 : 2
 - (3) 2 : 1
 - (4) 1 : 1
-

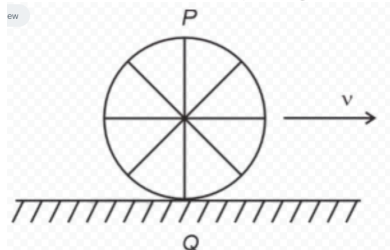
10. At any instant of time t , the displacement of any particle is given by $2t - 1$ (SI unit) under the influence of force of 5 N. The value of instantaneous power is (in SI unit):

- (1) 6
 - (2) 10
 - (3) 5
 - (4) 7
-

11. A thin flat circular disc of radius 4.5 cm is placed gently over the surface of water. If surface tension of water is 0.07 N/m, then the excess force required to take it away from the surface is:

- (1) 99 N
- (2) 19.8 N
- (3) 198 N
- (4) 19.8 mN

12. A wheel of a bullock cart is rolling on a level road as shown in the figure below. If its linear speed is v in the direction shown, which one of the following options is correct (P and Q are any highest and lowest points on the wheel, respectively)?



- (1) Point P has zero speed
- (2) Point P moves slower than point Q
- (3) Point P moves faster than point Q
- (4) Both the points P and Q move with equal speed

13. Given below are two statements: one is labelled as Assertion A, and the other is labelled as Reason R.

Assertion A: The potential V at any axial point, at 2 m distance (r) from the centre of the dipole of dipole moment vector P of magnitude 4×10^{-6} C·m is 1.8×10^3 V.

Reason R: $V = \frac{2P}{4\pi\epsilon_0 r^2}$, where r is the distance of any axial point, situated at 2 m from the centre of the dipole.

Choose the correct answer from the options given below:

- (1) A is false but R is true.
- (2) Both A and R are true, and R is the correct explanation of A.
- (3) Both A and R are true, but R is NOT the correct explanation of A.
- (4) A is true, but R is false.

14. If $x = 5 \sin(\pi t + \frac{\pi}{3})$ represents the motion of a particle executing simple harmonic motion, the amplitude and time period of motion, respectively, are:

- (1) 5 m, 1 s
- (2) 5 cm, 2 s
- (3) 5 m, 2 s
- (4) 5 cm, 1 s

15. An unpolarized light beam strikes a glass surface at Brewster's angle. Then:

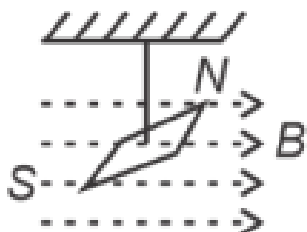
- (1) The reflected light will be completely polarized, but the refracted light will be partially polarized.
- (2) The reflected light will be partially polarized.
- (3) The refracted light will be completely polarized.

(4) Both the reflected and refracted light will be completely polarized.

16. The quantities which have the same dimensions as those of solid angle are:

- (1) Angular speed and stress
- (2) Strain and angle
- (3) Strain and stress
- (4) Angle and stress

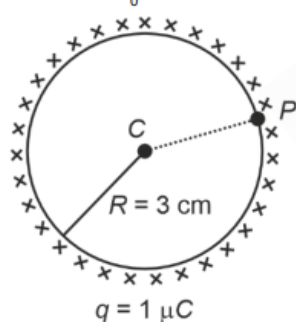
17. In a uniform magnetic field of 0.049 T, a magnetized needle performs 20 complete oscillations in 5 seconds as shown. The moment of inertia of the needle is $9.8 \times 10^{-6} \text{ kg}\cdot\text{m}^2$. If the magnitude of magnetic moment of the needle is $x \times 10^{-4} \text{ Am}^2$, then the value of x is:



- (1) $128\pi^2$
- (2) 128π
- (3) $64\pi^2$
- (4) $50\pi^2$

18. A thin spherical shell is charged by some source. The potential difference between the two points C and P (in V) shown in the figure is:

(Take $\frac{1}{4\pi\epsilon_0} = 9 \times 10^9 \text{ SI units}$)



- (1) Zero
- (2) 3×10^5
- (3) 1×10^5
- (4) 0.5×10^5

19. The moment of inertia of a thin rod about an axis passing through its mid-point and perpendicular to the rod is $240 \text{ gm}\cdot\text{cm}^2$. Then the length of the 400 g rod is nearly:

- (1) 17.2 cm
- (2) 8.5 cm

- (3) 22.0 cm
 (4) 24.7 cm

20.

Given below are two statements:

Statement I: Atoms are electrically neutral as they contain equal number of positive and negative charges.

Statement II: Atoms of each element are stable and emit their characteristic spectrum.

In the light of the above statements, choose the *most appropriate* answer from the options given below:

- (1) Statement I is incorrect but Statement II is correct
 (2) Both Statement I and Statement II are correct
 (3) Both Statement I and Statement II are incorrect
 (4) Statement I is correct but Statement II is incorrect

21. Match List I with List II.

List I (Spectral Lines of Hydrogen for transitions from)	List II (Wavelengths in nm)
A. $n = 3$ to $n = 2$	I. 410.2
B. $n = 4$ to $n = 2$	II. 434.1
C. $n = 5$ to $n = 2$	III. 656.3
D. $n = 6$ to $n = 2$	IV. 486.1

- (1) A-II, B-III, C-IV, D-I
 (2) A-III, B-II, C-I, D-IV
 (3) A-II, B-IV, C-I, D-III
 (4) A-IV, B-II, C-III, D-I

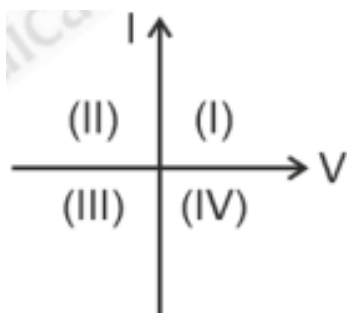
22. Match List I with List II.

List-I (Material)		List-II (Susceptibility (χ))	
A	Diamagnetic	I	$\chi = 0$
B	Ferromagnetic	II	$0 > \chi \geq -1$
C	Paramagnetic	III	$\chi \gg 1$
D	Non-magnetic	IV	$0 < \chi < \epsilon$ (a small positive number)

Choose the correct answer from the options given below:

- (1) A-IV, B-III, C-II, D-I
 (2) A-II, B-III, C-IV, D-I
 (3) A-II, B-I, C-III, D-IV
 (4) A-III, B-II, C-I, D-IV

23. Consider the following statements A and B and identify the correct answer:

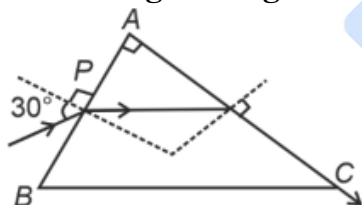


- A. For a solar cell, the I-V characteristics lies in the IV quadrant of the graph.
 B. In a reverse biased p-n junction diode, the current measured in μA is due to majority charge carriers.
- (1) Both A and B are incorrect
 - (2) A is correct but B is incorrect
 - (3) Both A and B are correct
 - (4) A is incorrect but B is correct

24. If the monochromatic source in Young's double-slit experiment is replaced by white light, then:

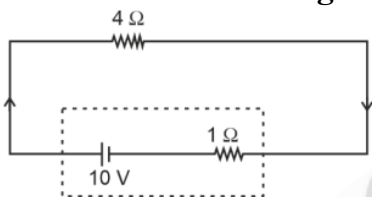
- (1) All bright fringes will be of equal width
- (2) The interference pattern will disappear
- (3) There will be a central dark fringe surrounded by a few colored fringes
- (4) There will be a central bright white fringe surrounded by a few colored fringes

25. A light ray enters through a right-angle prism at point P with the angle of incidence 30° as shown in the figure. It travels through the prism parallel to its base BC and emerges along the face AC. The refractive index of the prism is:



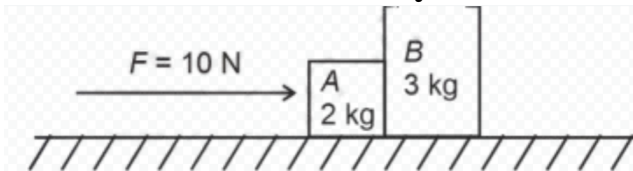
- (1) $\frac{\sqrt{2}}{2}$
- (2) $\frac{\sqrt{5}}{2}$
- (3) $\sqrt{5}$
- (4) $\frac{\sqrt{3}}{2}$

26. The terminal voltage of the battery, whose emf is 10 V and internal resistance 1Ω , when connected through an external resistance of 4Ω as shown in the figure is:



- (1) $10V$
- (2) $4V$
- (3) $6V$
- (4) $8V$

27. A horizontal force 10 N is applied to a block A as shown in the figure. The masses of blocks A and B are 2 kg and 3 kg respectively. The blocks slide over a frictionless surface. The force exerted by block A on block B is:

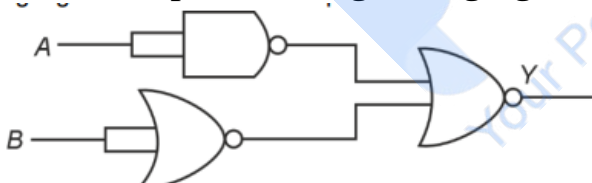


- (1) $10N$
- (2) $4N$
- (3) $6N$
- (4) 0

28. Two bodies A and B of same mass undergo completely inelastic one-dimensional collision. The body A moves with velocity v , while body B is at rest before collision. The velocity of the system after collision is v' . The ratio $v : v'$ is:

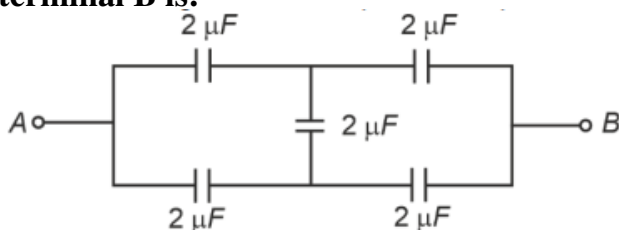
- (1) $1 : 4$
- (2) $1 : 2$
- (3) $2 : 1$
- (4) $4 : 1$

29. The output Y of the given logic gate is similar to the output of an/a:



- (1) AND gate
- (2) NAND gate
- (3) NOR gate
- (4) OR gate

30. In the following circuit, the equivalent capacitance between terminal A and terminal B is:



- (1) $4\mu F$
- (2) $2\mu F$
- (3) $1\mu F$
- (4) $0.5\mu F$

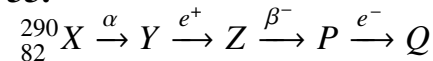
31. A particle moving with uniform speed in a circular path maintains:

- (1) Varying velocity and varying acceleration
- (2) Constant velocity and varying acceleration
- (3) Constant acceleration
- (4) Constant velocity but varying acceleration

32. The maximum elongation of a steel wire of length 1 m if the elastic limit of steel and its Young's modulus, respectively, are $8 \times 10^8 \text{ N/m}^2$ and $2 \times 10^{11} \text{ N/m}^2$ is:

- (1) 2 mm
- (2) 4 mm
- (3) 8 mm
- (4) 44 mm

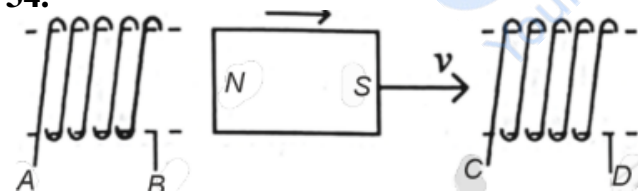
33.



In the nuclear emission stated above, the mass number and atomic number of the product (Q), respectively, are:

- (1) 286, 81
- (2) 280, 81
- (3) 286, 80
- (4) 288, 82

34.



In the above diagram, a strong bar magnet is moving towards solenoid-2 from solenoid-1. The direction of induced current in solenoid-1 and in solenoid-2, respectively, are through the directions:

- (1) BA and DC
- (2) AB and DC
- (3) BA and CD
- (4) AB and CD

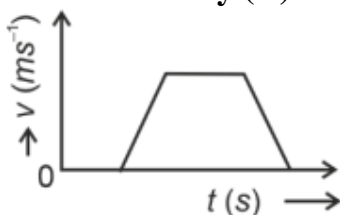
35. A long wire of 100 turns coil of radius 10 cm carries a current of 7 A. The magnitude of the magnetic field at the center of the coil is (Take permeability of free space as $4\pi \times 10^{-7}$ SI units):

- (1) 44 mT
- (2) 40 mT
- (3) 47 mT
- (4) 44.7 mT

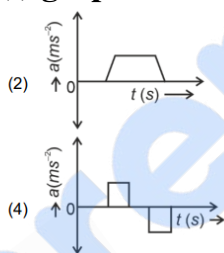
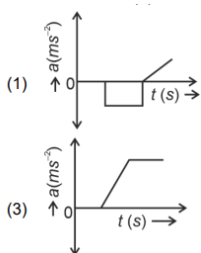
36. The property which is not of an electromagnetic wave traveling in free space is that:

- (1) They originate from charges moving with uniform speed
- (2) They are transverse in nature
- (3) The energy density in electric field is equal to energy density in magnetic field
- (4) They travel with a speed equal to $\frac{1}{\sqrt{\mu_0\epsilon_0}}$

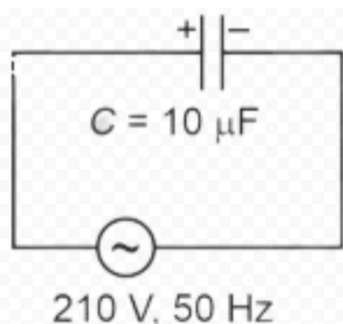
37. The velocity (V) – time (t) plot of the motion of a body is shown below:



The acceleration (a) – time (t) graph that best suits this motion is:



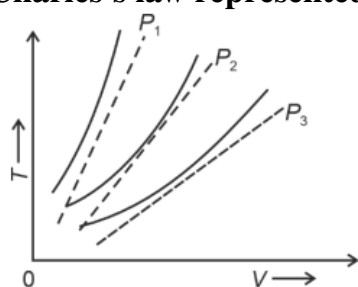
38. A $10\mu F$ capacitor is connected to a $210V, 50Hz$ source as shown in the figure. The peak current in the circuit is nearly ($\pi = 3.14$):



- (1) 0.35A
- (2) 0.58A
- (3) 0.93A
- (4) 1.20A

39. The following graph represents the T - V curves of an ideal gas (where T is the temperature and V the volume) at three pressures P_1, P_2 and P_3 compared with those of

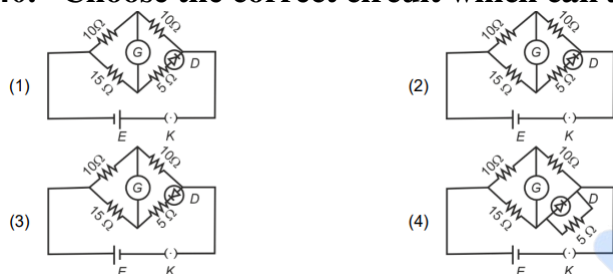
Charles's law represented as dotted lines.



Then the correct relation is:

- (1) $P_1 > P_2 > P_3$
- (2) $P_3 > P_2 > P_1$
- (3) $P_1 > P_3 > P_2$
- (4) $P_2 > P_1 > P_3$

40. Choose the correct circuit which can achieve the bridge balance.



41. Two heaters A and B have power ratings of 1 kW and 2 kW, respectively. These two are first connected in series and then in parallel to a fixed power source. The ratio of power outputs for these two cases is:

- (1) 2 : 3
- (2) 1 : 1
- (3) 2 : 9
- (4) 1 : 2

42. If the plates of a parallel plate capacitor connected to a battery are moved close to each other, then:

- A. The charge stored in it increases.
- B. The energy stored in it decreases.
- C. Its capacitance increases.
- D. The ratio of charge to its potential remains the same.
- E. The product of charge and voltage increases.

Choose the most appropriate answer from the options given below:

- (1) A, B, and C only
- (2) A, B, and E only
- (3) A, C, and E only

(4) B, D, and E only

43. A force defined by $F = \alpha t + \beta t$ acts on a particle at a given time t . The factor which is dimensionless, if α and β are constants, is:

- (1) $\frac{\alpha\beta}{t}$
 - (2) $\frac{\beta t}{\alpha}$
 - (3) $\frac{\alpha}{\beta}$
 - (4) $\alpha\beta t$
-

44. The minimum energy required to launch a satellite of mass m from the surface of Earth (mass M , radius R) into a circular orbit at an altitude of $2R$ from the surface of the Earth is:

- (1) $\frac{GmM}{3R}$
 - (2) $\frac{5GmM}{6R}$
 - (3) $\frac{2GmM}{3R}$
 - (4) $\frac{GmM}{2R}$
-

45. A metallic bar of Young's modulus, $0.5 \times 10^{11} \text{ N/m}^2$ and coefficient of linear thermal expansion $10^{-5} \text{ }^\circ\text{C}^{-1}$, length 1 m and area of cross-section 10^{-3} m^2 is heated from 0°C to 100°C without expansion or bending. The compressive force developed in it is:

- (1) $2 \times 10^3 \text{ N}$
 - (2) $5 \times 10^3 \text{ N}$
 - (3) $50 \times 10^3 \text{ N}$
 - (4) $100 \times 10^3 \text{ N}$
-

46. A parallel plate capacitor is charged by connecting it to a battery through a resistor. If I is the current in the circuit, then the gap between the plates:

- (1) Displacement current of magnitude greater than I flows but can be in any direction
 - (2) There is no displacement current
 - (3) Displacement current of magnitude equal to I flows in the same direction as I
 - (4) Displacement current of magnitude equal to I flows in a direction opposite to that of I
-

47. A sheet is placed on a horizontal surface in front of a strong magnetic pole. A force is needed to:

- **A.** Hold the sheet there if it is magnetic.
- **B.** Hold the sheet there if it is non-magnetic.
- **C.** Move the sheet away from the pole with uniform velocity if it is conducting.
- **D.** Move the sheet away from the pole with uniform velocity if it is both, non-conducting and non-polar.

Choose the correct statement(s) from the options given below:

- (1) C only
 (2) B and D only
 (3) A and C only
 (4) A, C, and D only

48. If the mass of the bob in a simple pendulum is increased to three times its original mass and its length is made half its original length, then the new time period of oscillation is x times its original time period. The value of x is:

- (1) 4
 (2) $\sqrt{3}$
 (3) $\sqrt{2}$
 (4) $\frac{2}{\sqrt{3}}$

49. An iron bar of length L has magnetic moment M . It is bent at the middle of its length such that the two arms make an angle 60° with each other. The magnetic moment of this new magnet is:

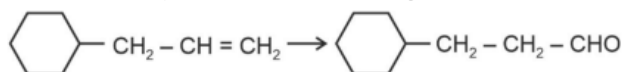
- (1) $\frac{M}{\sqrt{3}}$
 (2) M
 (3) $\frac{M}{2}$
 (4) $2M$

50. A small telescope has an objective of focal length 140 cm and an eye piece of focal length 5.0 cm. The magnifying power of the telescope for viewing a distant object is:

- (1) 32
 (2) 34
 (3) 28
 (4) 17

CHEMISTRY - SECTION A

51. Identify the correct reagents that would bring about the following transformation:



- (1) (i) H_3O^+
 (ii) PCC
 (2) (i) H_3O^+
 (ii) CrO_3
 (3) (i) Br_2
 (ii) $\text{H}_2\text{O}_2/\text{OH}^-$
 (4) (i) $\text{H}_2\text{O}_2/\text{OH}^-$
 (ii) alk. KMnO_4

52. The compound that will undergo S_N1 reaction with the fastest rate is:



53. Match List I with List II.

List I (Molecule)		List II (Number and types of bond/s between two carbon at
A.	Ethane	I.
B.	Ethene	II.
C.	Carbon molecule, C_2	III.
D.	Ethyne	IV.

Choose the correct answer from the options given below:

- (1) A-III, B-V, C-II, D-I
- (2) A-I, B-IV, C-II, D-III
- (3) A-IV, B-III, C-II, D-I
- (4) A-III, B-IV, C-II, D-I

54. Given below are two statements:

Statement I: Both $[Co(NH_3)_6]^{3+}$ and $[CoF_6]^{3-}$ complexes are octahedral but differ in their magnetic behavior.

Statement II: $[Co(NH_3)_6]^{3+}$ is diamagnetic whereas $[CoF_6]^{3-}$ is paramagnetic.

Choose the correct answer from the options given below:

- (1) Statement I is false but Statement II is true
- (2) Both Statement I and Statement II are true
- (3) Both Statement I and Statement II are false
- (4) Statement I is true but Statement II is false

55. Match List I with List II.

List I (Compound)		List II (Shape/geometry)	
A.	NH_3	I.	Trigonal Pyramidal
B.	BrF_5	II.	Square Planar
C.	XeF_4	III.	Octahedral
D.	SF_6	IV.	Square Pyramidal

Choose the correct answer from the options given below:

- (1) A-II, B-III, C-V, D-I
- (2) A-I, B-V, C-II, D-III
- (3) A-II, B-IV, C-III, D-I
- (4) A-III, B-IV, C-I, D-II

56. Arrange the following elements in increasing order of first ionization enthalpy:

Li, Be, B, C, N

- (1) $\text{Li} < \text{Be} < \text{N} < \text{B} < \text{C}$
- (2) $\text{Li} < \text{Be} < \text{B} < \text{C} < \text{N}$
- (3) $\text{Li} < \text{B} < \text{Be} < \text{C} < \text{N}$
- (4) $\text{Li} < \text{Be} < \text{C} < \text{B} < \text{N}$

57. The reagents with which glucose does not react to give the corresponding tests/products are:

- A. Tollen's reagent
- B. Schiff's reagent
- C. HCN
- D. NH_2OH
- E. NaHSO_3

Choose the correct options from the given below:

- (1) E and C
- (2) B and C
- (3) A and D
- (4) B and E

58. Match List I with List II.

List I (Quantum Number)		List II (Information provided)	
A.	m_l	I.	Shape of orbital
B.	m_s	II.	Size of orbital
C.	l	III.	Orientation of orbital
D.	n	IV.	Orientation of spin of electron

Choose the correct answer from the options given below:

- (1) A-II, B-I, C-IV, D-III
- (2) A-I, B-III, C-II, D-IV
- (3) A-III, B-IV, C-I, D-II
- (4) A-III, B-IV, C-I, D-I

59. The highest number of helium atoms is in:

- (1) 2.271098 L of helium at STP
- (2) 4 mol of helium
- (3) 4 u of helium

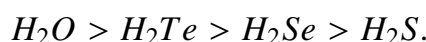
(4) 4 g of helium

60. Which reaction is NOT a redox reaction?

- (1) $\text{BaCl}_2 + \text{Na}_2\text{SO}_4 \rightarrow \text{BaSO}_4 + 2\text{NaCl}$
- (2) $\text{Zn} + \text{CuSO}_4 \rightarrow \text{ZnSO}_4 + \text{Cu}$
- (3) $2\text{KClO}_3 \rightarrow 2\text{KCl} + 3\text{O}_2$
- (4) $\text{H}_2 + \text{Cl}_2 \rightarrow 2\text{HCl}$

61. Given below are two statements:

Statement I: The boiling point of hydrides of Group 16 elements follows the order



Statement II: On the basis of molecular mass, H_2O is expected to have a lower boiling point than the other members of the group, but due to the presence of extensive **hydrogen bonding** in H_2O , it has a **higher boiling point**.

Choose the correct answer from the options given below:

- (1) Statement I is false but Statement II is true
- (2) Both Statement I and Statement II are true
- (3) Both Statement I and Statement II are false
- (4) Statement I is true but Statement II is false

62. Arrange the following elements in increasing order of electronegativity:

N, O, F, C, Si

- (1) $F < O < N < C < Si$
- (2) $Si < C < N < O < F$
- (3) $Si < C < O < N < F$
- (4) $O < F < N < C < Si$

63.

Match List I with List II.

List I (Process)		List II (Conditions)	
A.	Isothermal process	II.	Carried out at constant temperature
B.	Isochoric process	III.	Carried out at constant volume
C.	Isobaric process	IV.	Carried out at constant pressure
D.	Adiabatic process	I.	No heat exchange

Choose the correct answer from the options given below:

- (1) A-II, B-III, C-IV, D-I
- (2) A-IV, B-III, C-II, D-I
- (3) A-IV, B-II, C-III, D-I
- (4) A-I, B-II, C-III, D-IV

64.

The energy of an electron in the ground state ($n = 1$) for He^+ ion is $-x$ J, then that for an electron in the ground state for Be^{3+} ion in J is

- (1) $\frac{4}{9}x$
 - (2) $-4x$
 - (3) $\frac{x}{9}$
 - (4) $-x$
-

64.

The energy of an electron in the ground state ($n = 1$) for He^+ ion is $-x$ J, then that for an electron in the ground state for Be^{3+} ion in J is

- (1) $\frac{4}{9}x$
 - (2) $-4x$
 - (3) $\frac{x}{9}$
 - (4) $-x$
-

65.

Match List I with List II.

List I (Conversion)		List II (Number of Faraday required)	
A.	1 mol of H_2O to O_2	II.	2F
B.	1 mol of MnO_4^- to Mn^{2+}	IV.	5F
C.	1.5 mol of Ca from molten CaCl_2	III.	1F
D.	1 mol of FeO to Fe_2O_3	I.	3F

Choose the correct answer from the options given below:

- (1) A-III, B-IV, C-II, D-I
 - (2) A-II, B-IV, C-I, D-III
 - (3) A-III, B-V, C-I, D-IV
 - (4) A-II, B-III, C-I, D-IV
-

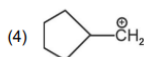
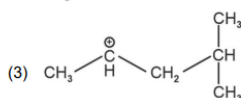
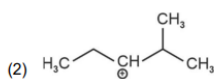
66.

1 gram of sodium hydroxide was treated with 25 mL of 0.75 M HCl solution, the mass of sodium hydroxide left unreacted is equal to

- (1) 200 mg
 - (2) 750 mg
 - (3) 250 mg
 - (4) Zero mg
-

67.

The most stable carbocation among the following is:



68.

In which of the following equilibria, K_p and K_c are NOT equal?

- (1) $2\text{BrCl}(g) \rightleftharpoons \text{Br}_2(g) + \text{Cl}_2(g)$
- (2) $\text{PCl}_5(g) \rightleftharpoons \text{PCl}_3(g) + \text{Cl}_2(g)$
- (3) $\text{H}_2(g) + \text{I}_2(g) \rightleftharpoons 2\text{HI}(g)$
- (4) $\text{CO}(g) + \text{H}_2\text{O}(g) \rightleftharpoons \text{CO}_2(g) + \text{H}_2(g)$

69.

The E° value for the Mn^3/Mn^2 couple is more positive than that of Cr^3/Cr^2 or Fe^3/Fe^2 due to change of

- (1) d^3 to d configuration
- (2) d to d configuration
- (3) d to d^2 configuration
- (4) d to d configuration

70.

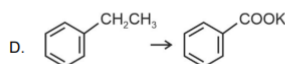
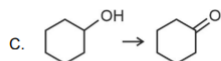
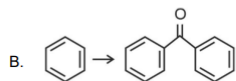
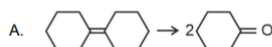
Fehling's solution 'A' is

- (1) aqueous sodium citrate
- (2) aqueous copper sulphate
- (3) alkaline copper sulphate
- (4) alkaline solution of sodium potassium tartrate (Rochelle's salt)

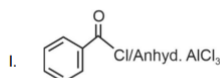
71.

Match List I with List II.

List I
(Reaction)



List II
(Reagents/Condition)



II. CrO_3

III. $\text{KMnO}_4/\text{KOH}, \Delta$

IV. (i) O_3

(ii) $\text{Zn-H}_2\text{O}$

Choose the correct answer from the options given below:

- (1) A-I, B-IV, C-II, D-III
- (2) A-IV, B-I, C-III, D-II
- (3) A-III, B-I, C-II, D-IV
- (4) A-IV, B-I, C-II, D-III

72.

In which of the following processes entropy increases?

- A. A liquid evaporates to vapour.
- B. Temperature of a crystalline solid lowered from 130 K to 0 K.
- C. $2\text{NaHCO}(\text{s}) \rightarrow \text{Na}_2\text{CO}_3(\text{s}) + \text{CO}(\text{g}) + \text{H}_2\text{O}(\text{g})$
- D. $\text{Cl}_2(\text{g}) \rightarrow 2\text{Cl}(\text{g})$

- (1) C and D
 - (2) A and C
 - (3) A, B and D
 - (4) A, C and D
-

73.

A compound with a molecular formula of C_6H_{14} has two tertiary carbons. Its IUPAC name is:

- (1) 2,2-dimethylbutane
 - (2) n-hexane
 - (3) 2-methylpentane
 - (4) 2,3-dimethylbutane
-

74.

$$[\text{A}] = [\text{B}] = [\text{C}] = 2 \times 10^{-3} \text{ M}$$

Then, which of the following is correct? **For the reaction $2\text{A} \rightleftharpoons \text{B} + \text{C}$, $K_c = 4 \times 10^{-3}$. At a given time, the composition of reaction mixture is:**

$$[\text{A}] = [\text{B}] = [\text{C}] = 2 \times 10^{-3} \text{ M}$$

Then, which of the following is correct?

- (1) Reaction has gone to completion in forward direction.
 - (2) Reaction is at equilibrium.
 - (3) Reaction has a tendency to go in forward direction.
 - (4) Reaction has a tendency to go in backward direction.
-

75.

Given below are two statements: Statement I: The boiling point of three isomeric pentanes follows the order n-pentane > isopentane > neopentane

Statement II: When branching increases, the molecule attains a shape of sphere. This results in smaller surface area for contact, due to which the intermolecular forces between the spherical molecules are weak, thereby lowering the boiling point.

In the light of the above statements, choose the most appropriate answer from the options given below:

- (1) Statement I is incorrect but Statement II is correct

- (2) Both Statement I and Statement II are correct
 (3) Both Statement I and Statement II are incorrect
 (4) Statement I is correct but Statement II is incorrect

76.

Which one of the following alcohols reacts instantaneously with Lucas reagent?

- (1) $\begin{array}{c} \text{CH}_3 \\ | \\ \text{CH}_3 - \text{C} - \text{OH} \\ | \\ \text{CH}_3 \end{array}$ (2) $\text{CH}_3 - \text{CH}_2 - \text{CH}_2 - \text{CH}_2\text{OH}$
- (3) $\begin{array}{c} \text{CH}_3 - \text{CH}_2 - \text{CH} - \text{OH} \\ | \\ \text{CH}_3 \end{array}$ (4) $\begin{array}{c} \text{CH}_3 - \text{CH} - \text{CH}_2\text{OH} \\ | \\ \text{CH}_3 \end{array}$

77.

The Henry's law constant (KH) values of three gases (A, B, C) in water are $145, 2 \times 10^{-5}$, and 35 kbar , respectively. The solubility of these gases in water follow the order :

- A ; B ; C
 B ; A ; C
 B ; C ; A
 A ; C ; B

78.

On heating, some solid substances change from solid to vapour state without passing through liquid state. The technique used for the purification of such solid substances based on the above principle is known as

- (A) Chromatography (B) Crystallization (C) Sublimation (D) Distillation

79.

Match List I with List II.

List I (Complex)		List II (Type of isomerism)	
A.	$[\text{Co}(\text{NH}_3)_5(\text{NO}_2)]\text{Cl}_2$	I.	Solvate isomerism
B.	$[\text{Co}(\text{NH}_3)_5(\text{SO}_4)]\text{Br}$	II.	Linkage isomerism
C.	$[\text{Co}(\text{NH}_3)_6][\text{Cr}(\text{CN})_6]$	III.	Ionization isomerism
D.	$[\text{Co}(\text{H}_2\text{O})_6]\text{Cl}_3$	IV.	Coordination isomerism

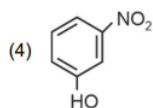
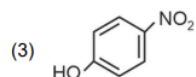
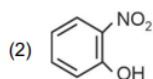
Choose the correct answer from the options given below:

- (A) A-II, B-III, C-IV, D-I (B) A-III, B-II, C-I, D-IV (C) A-II, B-III, C-I, D-IV (D) A-III, B-II, C-IV

80.

Intramolecular hydrogen bonding is present in

(1) HF



81.

Given below are two statements:

Statement I: Aniline does not undergo Friedel-Crafts alkylation reaction.

Statement II: Aniline cannot be prepared through Gabriel synthesis.

In the light of the above statements, choose the correct answer from the options given below:

- (1) Statement I is incorrect but Statement II is true
- (2) Both Statement I and Statement II are true
- (3) Both Statement I and Statement II are false
- (4) Statement I is correct but Statement II is false

82.

Among Group 16 elements, which one does NOT show -2 oxidation state?

- (1) Po
- (2) O
- (3) Se
- (4) Te

83.

Activation energy of any chemical reaction can be calculated if one knows the value of

- (1) rate constant at two different temperatures
- (2) rate constant at standard temperature
- (3) probability of collision
- (4) orientation of reactant molecules during collision

84.

'Spin only' magnetic moment is same for which of the following ions?

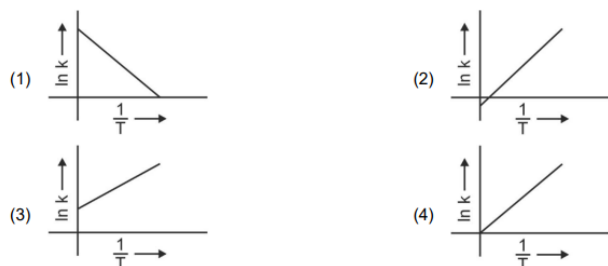
- A. Ti^3
- B. Cr^2
- C. Mn^2
- D. Fe^2
- E. Sc^3

Choose the most appropriate answer from the options given below.

- (1) A and D only
- (2) B and D only
- (3) A and E only
- (4) B and C only

85.

Which plot of $\ln k$ vs $1/T$ is consistent with Arrhenius equation?



86.

Given below are certain cations. Using inorganic qualitative analysis, arrange them in increasing group number from 0 to VI.

- A. Al^{3+}
- B. Cu^{2+}
- C. Ba^{2+}
- D. Co^{2+}
- E. Mg^{2+}

Choose the correct answer from the options given below.

- (1) E, A, B, C, D
- (2) B, A, D, C, E
- (3) B, C, A, D, E
- (4) E, C, D, B, A

87.

The plot of osmotic pressure (Π) vs concentration (mol L^{-1}) for a solution gives a straight line with slope $25.73 \text{ L bar mol}^{-1}$. The temperature at which the osmotic pressure measurement is done is

(Use $R = 0.083 \text{ L bar mol}^{-1} \text{ K}^{-1}$)

- (1) 12.05°C
- (2) 37°C
- (3) 310°C
- (4) 25.73°C

88.

Identify the correct answer.

- (1) Three canonical forms can be drawn for CO_2^{2-} ion
- (2) Three resonance structures can be drawn for ozone
- (3) BF_3 has non-zero dipole moment
- (4) Dipole moment of NF_3 is greater than that of NH_3

89.

A compound X contains 32% of A, 20% of B and the remaining percentage of C. Then,

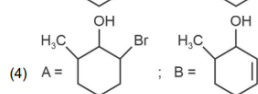
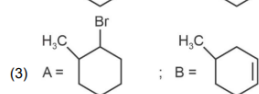
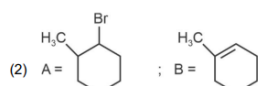
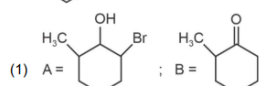
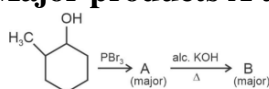
the empirical formula of X is:

(Given atomic masses of A = 64; B = 40; C = 32)

- (1) ABC_4
- (2) A_2BC_2
- (3) ABC_3
- (4) AB_2C_2

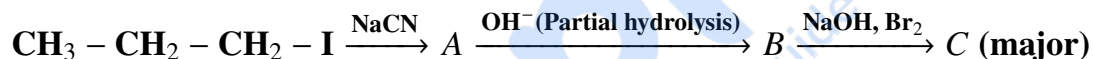
90.

Major products A and B formed in the following reaction sequence, are:



91.

Identify the major product C formed in the following reaction sequence:



- (1) α -bromobutanoic acid
- (2) propylamine
- (3) butylamine
- (4) butanamide

92.

Consider the following reaction in a sealed vessel with concentrations of

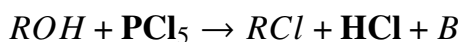
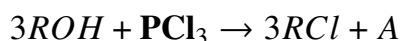
$$N_2 = 3.0 \times 10^{-3} \text{ M}, \quad \text{NO} = 4.2 \times 10^{-3} \text{ M}, \quad N_2O = 2.8 \times 10^{-3} \text{ M}$$

If 1 mol L^{-1} of NO_2 is taken in a closed vessel, what will the degree of dissociation (α) of NO at equilibrium?

- (1) 0.717
- (2) 0.00889
- (3) 0.0889
- (4) 0.8889

93.

The products A and B obtained in the following reactions, respectively, are:



- (1) H_3PO_3 and PCl_3
- (2) PCl_3 and H_3PO_3
- (3) PCl_3 and H_3PO_4
- (4) H_3PO_4 and PCl_3

94.

The pair of lanthanoid ions which are diamagnetic is

- (1) Pm^{3+} and Sm^{3+}
- (2) Ce^{4+} and Yb^{2+}
- (3) Ce^{3+} and Eu^{2+}
- (4) Gd^{3+} and Eu^{3+}

95.

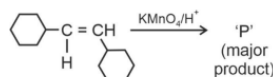
The rate of a reaction quadruples when temperature changes from 27°C to 57°C . Calculate the energy of activation.

(Given $R = 8.314 \text{ J K}^{-1} \text{ mol}^{-1}$, $\log_4 = 0.6021$)

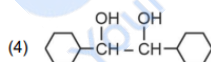
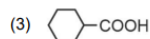
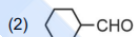
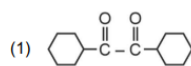
- (1) 3804 kJ/mol
- (2) 38.04 kJ/mol
- (3) 380.4 kJ/mol
- (4) 3.80 kJ/mol

96.

For the given reaction:



'P' is



97.

During the preparation of Mohr's salt solution (Ferrous ammonium sulphate), which of the following acid is added to prevent hydrolysis of Fe^{2+} ion?

- (1) dilute sulphuric acid
- (2) dilute hydrochloric acid
- (3) concentrated sulphuric acid
- (4) dilute nitric acid

98.

The work done during reversible isothermal expansion of one mole of hydrogen gas at 25°C from pressure of 20 atmosphere to 10 atmosphere is

(Given $R = 2.0 \text{ cal mol}^{-1} \text{ K}^{-1}$)

- (1) 100 calories
 - (2) 0 calorie
 - (3) -413.14 calories
 - (4) 413.14 calories
-

99.

Given below are two statements:

Statement I: $[\text{Co}(\text{NH}_3)_6]^{3+}$ is a homoleptic complex whereas $[\text{Co}(\text{NH}_3)_5\text{Cl}]^{2+}$ is a heteroleptic complex.

Statement II: Complex $[\text{Co}(\text{NH}_3)_6]^{3+}$ has only one kind of ligands but $[\text{Co}(\text{NH}_3)_5\text{Cl}]^{2+}$ has more than one kind of ligands.

In the light of the above statements, choose the correct answer from the options given below:

- (1) Statement I is false but Statement II is true
 - (2) Both Statement I and Statement II are true
 - (3) Both Statement I and Statement II are false
 - (4) Statement I is true but Statement II is false
-

100.

Mass in grams of copper deposited by passing 9.6487 A current through a voltmeter containing copper sulphate solution for 100 seconds is (Given: Molar mass of Cu = 63 g/mol, $F = 96487 \text{ C}$):

- (1) 0.0315 g
 - (2) 3.15 g
 - (3) 0.315 g
 - (4) 31.5 g
-

101.

Lecithin, a small molecular weight organic compound found in living tissues, is an example of:

- (1) Carbohydrates
 - (2) Amino acids
 - (3) Phospholipids
 - (4) Glycerides
-

102.

These are regarded as major causes of biodiversity loss:

(E) [A.] Over exploitation (F) [B.] Co-extinction (G) [C.] Mutation (H) [D.] Habitat loss and fragmentation (I) [E.] Migration

Choose the correct option:

- (1) A, B and D only
 - (2) A, C and D only
 - (3) A, B, C and D only
 - (4) A, B and E only
-

103.

In a plant, black seed color (BB/Bb) is dominant over white seed color (bb). In order to find out the genotype of the black seed plant, with which of the following genotype will you cross it?

- (1) BB/Bb
 - (2) BB
 - (3) bb
 - (4) Bb
-

104.

A transcription unit in DNA is defined primarily by the three regions in DNA and these are with respect to upstream and downstream end:

- (1) Promoter, Structural gene, Terminator
 - (2) Repressor, Operator gene, Structural gene
 - (3) Structural gene, Transposons, Operator gene
 - (4) Inducer, Repressor, Structural gene
-

105.

Identify the set of correct statements:

(M) The flowers of *Vallisneria* are colourful and produce nectar. (N) The flowers of water lily are not pollinated by water. (O) In most of water-pollinated species, the pollen grains are protected from wetting. (P) Pollen grains of some hydrophytes are long and ribbon-like. (Q) In some hydrophytes, the pollen grains are carried passively inside water. Choose the correct answer from the options given below:

- (1) B, C, D and E only
 - (2) C, D and E only
 - (3) A, B, C and D only
 - (4) A, C, D and E only
-

106.

Bulliform cells are responsible for

- (1) Providing large spaces for storage of sugars.
 - (2) Inward curling of leaves in monocots.
 - (3) Protecting the plant from salt stress.
 - (4) Increased photosynthesis in monocots.
-

107.

Match List I with List II

List-I	Fungus	List-II	Type
A.	<i>Rhizopus</i>	I.	Mushroom
B.	<i>Ustilago</i>	II.	Smut fungus
C.	<i>Puccinia</i>	III.	Breadmould
D.	<i>Agaricus</i>	IV.	Rust fungus

Choose the correct answer from the options given below:

- (1) A – IV, B – III, C – II, D – I
- (2) A – III, B – II, C – IV, D – I
- (3) A – I, B – III, C – II, D – IV
- (4) A – III, B – II, C – I, D – IV

108.

Given below are two statements:

Statement I: Chromosomes become gradually visible under light microscope during leptotene stage.

Statement II: The beginning of diplotene stage is recognized by dissolution of synaptonemal complex.

In the light of the above statements, choose the correct answer from the options given below:

- (1) Statement I is false but Statement II is true
- (2) Both Statement I and Statement II are true
- (3) Both Statement I and Statement II are false
- (4) Statement I is true but Statement II is false

109.

Match List I with List II.

List I (Microorganism)		List II (Product)	
A.	<i>Clostridium butylicum</i>	I.	Ethanol
B.	<i>Saccharomyces cerevisiae</i>	II.	Streptokinase
C.	<i>Trichoderma polysporum</i>	III.	Butyric acid
D.	<i>Streptococcus sp.</i>	IV.	Cyclosporin – A

Choose the correct answer from the options given below:

- (1) A – IV, B – I, C – III, D – II
- (2) A – III, B – I, C – II, D – IV
- (3) A – II, B – IV, C – III, D – I
- (4) A – III, B – I, C – IV, D – II

110.

The cofactor of the enzyme carboxypeptidase is:

- (1) Haem
- (2) Zinc
- (3) Niacin
- (4) Flavin

111.

Given below are two statements:

Statement I: Parenchyma is living but collenchyma is dead tissue.

Statement II: Gymnosperms lack xylem vessels but presence of xylem vessels is the characteristic of angiosperms.

In the light of the above statements, choose the correct answer from the options given below:

- (1) Statement I is false but Statement II is true
- (2) Both Statement I and Statement II are true
- (3) Both Statement I and Statement II are false
- (4) Statement I is true but Statement II is false

112.

Identify the type of flowers based on the position of calyx, corolla, and androecium with respect to the ovary from the given figures (a) and (b).



- (1) (a)Perigynous; (b)Perigynous
- (2) (a)Epigynous; (b)Hypogynous
- (3) (a)Hypogynous; (b)Epigynous
- (4) (a)Perigynous; (b)Epigynous

113.

The equation of Verhulst-Pearl logistic growth is:

$$\frac{dN}{dt} = rN \left[\frac{K - N}{K} \right].$$

From this equation, K indicates:

- (1) **Population density**
 - (2) **Intrinsic rate of natural increase**
 - (3) **Biotic potential**
 - (4) **Carrying capacity**
-

114.

How many molecules of ATP and NADPH are required for every molecule of CO₂ fixed in the Calvin cycle?

- (1) **3 molecules of ATP and 2 molecules of NADPH**
 - (2) **2 molecules of ATP and 3 molecules of NADPH**
 - (3) **2 molecules of ATP and 2 molecules of NADPH**
 - (4) **3 molecules of ATP and 3 molecules of NADPH**
-

115.

Which of the following are required for the dark reaction of photosynthesis?

- A. Light**
- B. Chlorophyll**
- C. CO₂**
- D. ATP**
- E. NADPH**

Choose the correct answer from the options given below:

- (1) **D and E only**
 - (2) **A, B and C only**
 - (3) **B, C and D only**
 - (4) **C, D and E only**
-

116.

What is the fate of a piece of DNA carrying only gene of interest which is transferred into an alien organism?

- A. The piece of DNA would be able to multiply itself independently in the progeny cells of the recipient.**
- B. It may get integrated into the genome of the recipient.**
- C. It may multiply and be inherited along with the host DNA.**
- D. The alien piece of DNA is not an integral part of chromosome.**
- E. It shows ability to replicate.**

Choose the correct answer from the options given below:

- (1) **A and E only**
- (2) **A and B only**
- (3) **D and E only**
- (4) **B and C only**

117.

Formation of interfascicular cambium from fully developed parenchyma cells is an example for:

- (1) **Maturation**
 - (2) **Differentiation**
 - (3) **Redifferentiation**
 - (4) **Dedifferentiation**
-

118.

The type of conservation in which the threatened species are taken out from their natural habitat and placed in a special setting where they can be protected and given special care is called:

- (1) **Sustainable development**
 - (2) ***in-situ* conservation**
 - (3) **Biodiversity conservation**
 - (4) **Semi-conservative method**
-

119.

Which of the following is an example of an actinomorphic flower?

- (1) ***Sesbania***
 - (2) ***Datura***
 - (3) ***Cassia***
 - (4) ***Pisum***
-

120.

The capacity to generate a whole plant from any cell of the plant is called:

- (1) **Somatic hybridization**
 - (2) **Totipotency**
 - (3) **Micropropagation**
 - (4) **Differentiation**
-

121.

Which one of the following can be explained on the basis of Mendel's Law of Dominance?

- A. Out of one pair of factors one is dominant and the other is recessive.
- B. Alleles do not show any expression and both the characters appear as such in F_2 generation.
- C. Factors occur in pairs in normal diploid plants.
- D. The discrete unit controlling a particular character is called factor.
- E. The expression of only one of the parental characters is found in a monohybrid cross.

- (1) A, B, C, D and E
 - (2) A, B and C only
 - (3) A, C, D and E only
 - (4) B, C and D only
-

122.

Spindle fibers attach to kinetochores of chromosomes during

- (1) Telophase
 - (2) Prophase
 - (3) Metaphase
 - (4) Anaphase
-

123.

Inhibition of Succinic dehydrogenase enzyme by malonate is a classical example of:

- (1) Enzyme activation
 - (2) Cofactor inhibition
 - (3) Feedback inhibition
 - (4) Competitive inhibition
-

124.

Hind II always cuts DNA molecules at a particular point called recognition sequence and it consists of:

- (1) 10 bp
 - (2) 8 bp
 - (3) 6 bp
 - (4) 4 bp
-

125.

Given below are two statements:

Statement I: Bt toxins are insect group specific and coded by a gene *cry IAc*.

Statement II: Bt toxin exists as inactive protoxin in *B. thuringiensis*. However, after ingestion by the insect the inactive protoxin gets converted into active form due to acidic pH of the insect gut.

In the light of the above statements, choose the correct answer from the options given below:

- (1) Statement I is false but Statement II is true
- (2) Both Statement I and Statement II are true
- (3) Both Statement I and Statement II are false
- (4) Statement I is true but Statement II is false

126.

Match List I with List II.

List-I		List-II	
A.	Nucleolus	I.	Site of formation of glycolipid
B.	Centriole	II.	Organization like the cartwheel
C.	Leucoplasts	III.	Site for active ribosomal RNA synthesis
D.	Golgi apparatus	IV.	For storing nutrients

Choose the correct answer from the options given below:

- (1) A-I, B-II, C-III, D-IV
- (2) A-III, B-II, C-IV, D-I
- (3) A-II, B-I, C-III, D-IV
- (4) A-III, B-IV, C-II, D-I

127.

A pink flowered Snapdragon plant was crossed with a red flowered Snapdragon plant. What type of phenotype/s is/are expected in the progeny?

- (1) Red, Pink as well as white flowered plants
- (2) Only red flowered plants
- (3) Red flowered as well as pink flowered plants
- (4) Only pink flowered plants

128.

List of endangered species was released by

- (1) IUCN
- (2) GEAC
- (3) WWF
- (4) FOAM

129.

Tropical regions show greatest level of species richness because

- A. Tropical latitudes have remained relatively undisturbed for millions of years, hence more time was available for species diversification.

- B. Tropical environments are more seasonal.**
- C. More solar energy is available in tropics.**
- D. Constant environments promote niche specialization.**
- E. Tropical environments are constant and predictable.**

Choose the correct answer from the options given below:

- (1) **A, B and D only**
- (2) **A, C, D and E only**
- (3) **A and B only**
- (4) **A, B and E only**

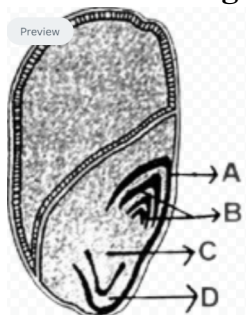
130.

Which one of the following is not a criterion for classification of fungi?

- (1) **Fruiting body**
- (2) **Morphology of mycelium**
- (3) **Mode of nutrition**
- (4) **Mode of spore formation**

131.

Identify the part of the seed from the given figure which is destined to form root when the seed germinates.



- (1) **D**
- (2) **A**
- (3) **B**
- (4) **C**

132.

The lactose present in the growth medium of bacteria is transported to the cell by the action of:

- (1) **Polymerase**
- (2) **Beta-galactosidase**
- (3) **Acetylase**
- (4) **Permease**

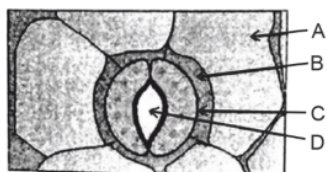
133.

Auxin is used by gardeners to prepare weed-free lawns. But no damage is caused to grass as auxin:

- (1) can help in cell division in grasses, to produce growth.
- (2) promotes apical dominance.
- (3) promotes abscission of mature leaves only.
- (4) does not affect mature monocotyledonous plants.

134.

In the given figure, which component has thin outer walls and highly thickened inner walls?



- (1) B
- (2) C
- (3) D
- (4) A

135.

Match List I with List II.

List I		List II	
A.	Two or more alternative forms of a gene	I.	Back cross
B.	Cross of F ₁ progeny with homozygous recessive parent	II.	Ploidy
C.	Cross of F ₁ progeny with any of the parents	III.	Allele
D.	Number of chromosome sets in plant	IV.	Test cross

- (1) A – IV, B – III, C – II, D – I
- (2) A – I, B – II, C – III, D – IV
- (3) A – II, B – I, C – III, D – IV
- (4) A – III, B – IV, C – I, D – II

136.

Match List I with List II.

List I		List II	
A.	Rose	I.	Twisted aestivation
B.	Pea	II.	Perigynous flower
C.	Cotton	III.	Drupe
D.	Mango	IV.	Marginal placentation

- (1) A – II, B – III, C – IV, D – I
 - (2) A – II, B – IV, C – I, D – III
 - (3) A – I, B – II, C – III, D – IV
 - (4) A – IV, B – III, C – II, D – I
-

137.

Given below are two statements:

Statement I: In C_3 plants, some O_2 binds to RuBisCO, hence CO_2 fixation is decreased.

Statement II: In C_4 plants, mesophyll cells show very little photorespiration while bundle sheath cells do not show photorespiration.

In the light of the above statements, choose the correct answer from the options given below:

- (1) Statement I is false but Statement II is true
 - (2) Both Statement I and Statement II are true
 - (3) Both Statement I and Statement II are false
 - (4) Statement I is true but Statement II is false
-

138.

Identify the correct description about the given figure:



- (1) Compact inflorescence showing complete autogamy.
 - (2) Wind pollinated plant inflorescence showing flowers with well exposed stamens.
 - (3) Water pollinated flowers showing stamens with mucilaginous covering.
 - (4) Cleistogamous flowers showing autogamy.
-

139.

Read the following statements and choose the set of correct statements:

In the members of Phaeophyceae,

- (A) Asexual reproduction occurs usually by biflagellate zoospores.
 (B) Sexual reproduction is by oogamous method only.
 (C) Stored food is in the form of carbohydrates which is either mannitol or laminarin.
 (D) The major pigments found are chlorophyll a, c and carotenoids and xanthophyll.
 (E) Vegetative cells have a cellulosic wall, usually covered on the outside by gelatinous coating of algin.
- (1) A, B, C and E only
 (2) A, B, C and D only
 (3) B, C, D and E only
 (4) A, C, D and E only

140.

Identify the step in tricarboxylic acid cycle, which does not involve oxidation of substrate.

- (1) Isocitrate \rightarrow α -ketoglutaric acid
 (2) Malic acid \rightarrow Oxaloacetic acid
 (3) Succinic acid \rightarrow Malic acid
 (4) Succinyl-CoA \rightarrow Succinic acid

141.

Match List I with List II

List I	Scientist	List II	Concept
A	Robert May	III	Global species diversity at about 7 million
B	Alexander von Humboldt	I	Species-Area relationship
C	Paul Ehrlich	IV	Rivet popper hypothesis
D	David Tilman	II	Long term ecosystem experiment using outdoor p

142.

Match List I with List II

List I	Scientist	List II	Discovery/Concept
A	Frederick Griffith	III	Transformation
B	Francois Jacob & Jacque Monod	IV	Lac operon
C	Har Gobind Khorana	I	Genetic code
D	Meselson & Stahl	II	Semi-conservative mode of DNA replication

143.

Which of the following are fused in somatic hybridization involving two varieties of plants?

- (1) Pollens
- (2) Callus
- (3) Somatic embryos
- (4) Protoplasts

144.

The DNA present in chloroplast is:

- (1) Circular, single stranded
- (2) Linear, double stranded
- (3) Circular, double stranded
- (4) Linear, single stranded

145.

Match List I with List II

List I (Types of Stamens)		List II (Example)	
A.	<i>Monoadelphous</i>	I.	<i>Citrus</i>
B.	<i>Diadelphous</i>	II.	<i>Pea</i>
C.	<i>Polyadelphous</i>	III.	<i>Lily</i>
D.	<i>Epiphyllous</i>	IV.	<i>China – rose</i>

- (1) A-III, B-I, C-IV, D-II
- (2) A-IV, B-II, C-I, D-III
- (3) A-IV, B-I, C-II, D-III
- (4) A-I, B-II, C-IV, D-III

146.

Which of the following statement is correct regarding the process of replication in *E.coli*?

- (1) The DNA dependent DNA polymerase catalyses polymerization in 5' → 3' direction

(2)

The DNA dependent DNA polymerase catalyses polymerization in one direction that is $3' \rightarrow 5'$

(3)

The DNA dependent RNA polymerase catalyses polymerization in one direction, that is $5' \rightarrow 3'$

(4) The DNA dependent DNA polymerase catalyses polymerization in $5' \rightarrow 3'$ as well as $3' \rightarrow 5'$ direction

147.

In an ecosystem, if the Net Primary Productivity (NPP) of the first trophic level is $100x$ ($\text{kcal m}^{-2} \text{yr}^{-1}$), what would be the GPP (Gross Primary Productivity) of the third trophic level of the same ecosystem?

(1) $100x \frac{\text{kcal m}^{-2} \text{yr}^{-1}}{3x}$ (2) $x \frac{\text{kcal m}^{-2} \text{yr}^{-1}}{10}$ (3) $x \text{ (kcal m}^{-2} \text{yr}^{-1})$ (4) $10x \text{ (kcal m}^{-2} \text{yr}^{-1})$

148.

Match List-I with List-II

List-I	Description	List-II	Description
A	GLUT - 4	IV	Enablesglucosetransportintocells
B	Insulin	I	Hormone
C	Trypsin	II	Enzyme
D	Collagen	III	Intercellulargroundsubstance

149.

Match List-I with List-II

List-I	Description	List-II	Location
A	Citricacidcycle	II	Mitochondrialmatrix
B	Glycolysis	I	Cytoplasm
C	Electrontransportsystem	IV	Innermitochondrialmembrane
D	Protongradient	III	Intermembranespaceofmitochondria

150.

Spraying sugarcane crop with which of the following plant growth regulators, increases the length of stem, thus, increasing the yield?

(1) Abscisic acid

- (2) Auxin
 - (3) Gibberellin
 - (4) Cytokinin
-

151.

Which of the following factors are favourable for the formation of oxyhaemoglobin in alveoli?

- (1) Low pCO_2 and High temperature
 - (2) High pO_2 and High pCO_2
 - (3) High pO_2 and Lesser H^+ concentration
 - (4) Low pCO_2 and High H^+ concentration
-

152.

Following are the stages of cell division:

- A. Gap 2 phase
- B. Cytokinesis
- C. Synthesis phase
- D. Karyokinesis
- E. Gap 1 phase

Choose the correct sequence of stages from the options given below:

- (1) E - C - A - D - B
 - (2) C - E - D - A - B
 - (3) E - B - D - A - C
 - (4) B - D - E - A - C
-

153. In both sexes of cockroach, a pair of jointed filamentous structures called anal cerci are present on

- (1) 11th segment
 - (2) 5th segment
 - (3) 10th segment
 - (4) 8th and 9th segment
-

154. Match List I with List II:

	List I		List II
A.	Pleurobrachia	I.	Mollusca
B.	Radula	II.	Ctenophora
C.	Stomochord	III.	Osteichthyes
D.	Air bladder	IV.	Hemichordata

Choose the correct answer from the options given below:

- (1) A-IV, B-III, C-II, D-I

- (2) A-IV, B-III, C-III, D-I
 (3) A-II, B-I, C-IV, D-III
 (4) A-II, B-IV, C-I, D-III

155. Match List I with List II:

	List I		List II
A.	Typhoid	I.	Fungus
B.	Leishmaniasis	II.	Nematode
C.	Ringworm	III.	Protozoa
D.	Filariasis	IV.	Bacteria

Choose the correct answer from the options given below:

- (1) A-II, B-IV, C-III, D-I
 (2) A-I, B-III, C-II, D-IV
 (3) A-IV, B-III, C-I, D-II
 (4) A-III, B-I, C-IV, D-II

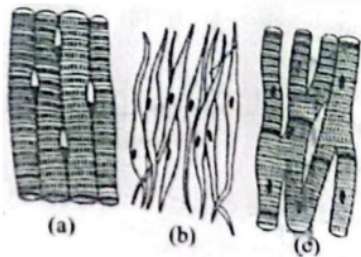
156. Match List I with List II:

List I		List II
A. Cocaine	→	III. <i>Erythroxylum</i>
B. Heroin	→	IV. <i>Papaver somniferum</i>
C. Morphine	→	I. Effective sedative in surgery
D. Marijuana	→	II. <i>Cannabis sativa</i>

Choose the correct answer from the options given below:

- (1) A-III, B-IV, C-I, D-II
 (2) A-IV, B-III, C-I, D-II
 (3) A-I, B-III, C-II, D-IV
 (4) A-II, B-I, C-III, D-IV

157. Three types of muscles are given as (a), (b), and (c). Identify the correct matching pair along with their location in the human body:



Name of muscle/location:

- (1)
 (a) Involuntary – Nose tip

(b) Skeletal – Bone

(c) Cardiac – Heart

(2)

(a) Smooth - Toes

(b) Skeletal – Legs

(c) Cardiac – Heart

(3)

(a) Skeletal - Triceps

(b) Smooth – Stomach

(c) Smooth – Heart

(4)

(a) Skeletal - Biceps

(b) Involuntary – Intestine

(c) Cardiac – Heart

158. Match List I with List II:

	List I		List II
A.	Pons	I.	Provides additional space for Neurons, regulates posture and balance.
B.	Hypothalamus	II.	Controls respiration and gastric secretions.
C.	Medulla	III.	Connects different regions of the brain.
D.	Cerebellum	IV.	Neuro secretory cells

Choose the correct answer from the options given below:

(1) A-II, B-I, C-III, D-IV

(2) A-II, B-III, C-I, D-IV

(3) A-III, B-IV, C-II, D-I

(4) A-I, B-III, C-II, D-IV

159. Match List I with List II:

List I	List II
A. $\alpha - 1$ antitrypsin	III. Emphysema
B. Cry IAb	IV. Corn borer
C. Cry IAc	I. Cotton bollworm
D. Enzyme replacement therapy	II. ADA deficiency

Choose the correct answer from the options given below:

(1) A-II, B-IV, C-I, D-III

(2) A-II, B-I, C-IV, D-III

(3) A-III, B-I, C-II, D-IV

(4) A-III, B-IV, C-I, D-II

160. Given below are some stages of human evolution. Arrange them in correct sequence. (Past to Recent)

1. A. *Homo habilis*
2. B. *Homo sapiens*
3. C. *Homo neanderthalensis*
4. D. *Homo erectus*

Choose the correct sequence of human evolution from the options given below:

- (1) A-D-C-B
- (2) D-A-C-B
- (3) B-A-D-C
- (4) C-B-D-A

161. Which of the following is not a component of Fallopian tube?

- (A) Ampulla (B) Uterine fundus (C) Isthmus (D) Infundibulum

162. Match List I with List II:

	List I		List II
A.	Non-medicated IUD	I.	Multiload 375
B.	Copper releasing IUD	II.	Progestogens
C.	Hormone releasing IUD	III.	Lippes loop
D.	Implants	IV.	LNG-20

Choose the correct answer from the options given below:

- (A) A-III, B-I, C-IV, D-II (B) A-III, B-I, C-II, D-IV (C) A-I, B-III, C-IV, D-II (D) A-IV, B-I, C-II, D-III

163. Which of the following is not a natural/traditional contraceptive method?

- (A) Vaults (B) Coitus interruptus (C) Periodic abstinence (D) Lactational amenorrhea

164. Match List I with List II:

List I		List II	
A.	<i>Pterophyllum</i>	I.	Hag fish
B.	<i>Myxine</i>	II.	Saw fish
C.	<i>Pristis</i>	III.	Angel fish
D.	<i>Exocoetus</i>	IV.	Flying fish

Choose the correct answer from the options given below:

- (A) A-III, B-II, C-I, D-IV (B) A-II, B-I, C-III, D-IV (C) A-III, B-I, C-II, D-IV (D) A-IV, B-I, C-II, D-III

165. The flippers of the Penguins and Dolphins are the example of:

(A) Divergent evolution (B) Adaptive radiation (C) Natural selection (D) Convergent evolution

166. Which of the following is not a steroid hormone?

(A) Glucagon (B) Cortisol (C) Testosterone (D) Progesterone

167. Match List I with List II:

List I		List II	
A.	Down's syndrome	I.	11 th chromosome
B.	α -Thalassemia	II.	'X' chromosome
C.	β -Thalassemia	III.	21 st chromosome
D.	Klinefelter's syndrome	IV.	16 th chromosome

Choose the correct answer from the options given below:

(A) A-IV, B-I, C-II, D-III (B) A-I, B-II, C-III, D-IV (C) A-II, B-III, C-IV, D-I (D) A-III, B-IV, C-I, D-II

168. Given below are two statements: One is labelled as Assertion A and the other is labelled as Reason R:

Assertion A: Breast-feeding during the initial period of infant growth is recommended by doctors for bringing a healthy baby.

Reason R: Colostrum contains several antibodies absolutely essential to develop resistance for the newborn baby.

In light of the above statements, choose the most appropriate answer from the options given below:

(A) A is not correct but R is correct. (B) Both A and R are correct and R is the correct explanation of A. (C) Both A and R are correct but R is NOT the correct explanation of A. (D) A is correct but R is not correct.

169. Match List I with List II:

	List I		List II
A.	Expiratory capacity	I.	Expiratory reserve volume + Tidal volume + Inspiratory reserve volume
B.	Functional residual capacity	II.	Tidal volume + Expiratory reserve volume
C.	Vital capacity	III.	Tidal volume + Inspiratory reserve volume
D.	Inspiratory capacity	IV.	Expiratory reserve volume + Residual volume

Choose the correct answer from the options given below:

(A) A-I, B-III, C-II, D-IV (B) A-II, B-IV, C-I, D-III (C) A-III, B-II, C-IV, D-I (D) A-II, B-I, C-IV, D-III

170. Match List I with List II:

List I	(Sub Phases of Prophase I)	List II	(Specific Characters)
A.	Diakinesis	I.	Synaptonemal complex formation
B.	Pachytene	II.	Completion of terminalisation of chiasmata
C.	Zygotene	III.	Chromosomes look like thin threads
D.	Leptotene	IV.	Appearance of recombination nodules

Choose the correct answer from the options given below:

(A) A-IV, B-III, C-II, D-I (B) A-IV, B-II, C-III, D-I (C) A-I, B-II, C-IV, D-III (D) A-II, B-IV, C-I, D-III

171. Given below are two statements: One is labelled as Assertion A and the other is labelled as Reason R:

Assertion A: FSH acts upon ovarian follicles in female and Leydig cells in male.

Reason R: Growing ovarian follicles secrete estrogen in female while interstitial cells secrete androgen in male human being.

In the light of the above statements, choose the correct answer from the options given below:

(A) A is false but R is true (B) Both A and R are true and R is the correct explanation of A (C) Both A and R are true but R is NOT the correct explanation of A (D) A is true but R is false

172. Given below are two statements:

Statement I: The presence or absence of hymen is not a reliable indicator of virginity.

Statement II: The hymen is torn during the first coitus only.

In the light of the above statements, choose the correct answer from the options given below:

(A) Statement I is false but Statement II is true (B) Both Statement I and Statement II are true (C) Both Statement I and Statement II are false (D) Statement I is true but Statement II is false

173. Which of the following are Autoimmune disorders?

A. Myasthenia gravis

- B. Rheumatoid arthritis
- C. Gout
- D. Muscular dystrophy
- E. Systemic Lupus Erythematosus (SLE)

Choose the most appropriate answer from the options given below:

- (A) C, D & E only (B) A, B & D only (C) A, B & E only (D) B, C & E only
-

174. Consider the following statements:

- (A) Annelids are true coelomates (B) Poriferans are pseudocoelomates (C) Aschelminthes are acoelomates (D) Platyhelminthes are pseudocoelomates

Choose the correct answer from the options given below:

- (A) D only (B) B only (C) A only (D) C only
-

175. Which one is the correct product of DNA-dependent RNA polymerase to the given template?

3' TACATGGCAAATATCCATTCA 5'

Choose the correct answer from the options given below:

- (A) 5' ATGTACCGTTTATAGGTAAGT 3' (B) 5' AUGUACCGUUUAAGGUAAGU 3'
(C) 5' AUGUAAAGUUUAAGGUAAGU 3' (D) 5' AUGUACCGUUUAAGGGAAGU 3'
-

176. Which one of the following factors will not affect the Hardy-Weinberg equilibrium?

Choose the correct answer from the options given below:

- (A) Constant gene pool (B) Genetic recombination (C) Genetic drift (D) Gene migration
-

177. The "Ti plasmid" of *Agrobacterium tumefaciens* stands for

- (A) Temperature independent plasmid (B) Tumour inhibiting plasmid (C) Tumor independent plasmid (D) Tumor inducing plasmid
-

178. Given below are two statements:

Statement I: In the nephron, the descending limb of loop of Henle is impermeable to water and permeable to electrolytes.

Statement II: The proximal convoluted tubule is lined by simple columnar brush border epithelium and increases the surface area for reabsorption.

In the light of the above statements, choose the correct answer from the option given below:

- (A) Statement I is false but Statement II is true (B) Both Statement I and Statement II are true (C) Both Statement I and Statement II are false (D) Statement I is true but Statement II is false

179. Match List I with List II:

List-I	Enzyme	List-II	Bond Type
A.	Lipase	I.	Peptide bond
B.	Nuclease	II.	Ester bond
C.	Protease	III.	Glycosidic bond
D.	Amylase	IV.	Phosphodiester bond

Choose the correct answer from the options given below:

(A) A-IV, B-I, C-III, D-II (B) A-IV, B-II, C-III, D-I (C) A-III, B-II, C-I, D-IV (D) A-II, B-IV, C-I, D-III

180. Match List I with List II:

List-I	Joint Type	List-II	Function/Location
A.	Fibrous joints	I.	Adjacent vertebrae, limited movement
B.	Cartilaginous joints	II.	Humerus and Pectoral girdle, rotational movement
C.	Hinge joints	III.	Skull, don't allow any movement
D.	Ball and socket joints	IV.	Knee, help in locomotion

Choose the correct answer from the options given below:

(A) A-III, B-I, C-IV, D-II (B) A-IV, B-II, C-III, D-I (C) A-I, B-III, C-II, D-IV (D) A-II, B-III, C-I, D-IV

181. Following are the stages of pathway for conduction of an action potential through the heart:

(A) [A.] AV bundle (B) [B.] Purkinje fibres (C) [C.] AV node (D) [D.] Bundle branches (E) [E.] SA node

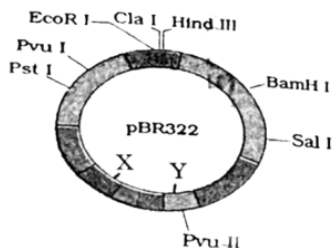
Choose the correct sequence of pathway from the options given below:

(A) E-A-D-B-C (B) E-C-A-D-B (C) A-E-C-B-D (D) B-D-E-C-A

182. Which of the following statements is incorrect?

(A) Bio-reactors have an agitator system, an oxygen delivery system and foam control system. (B) A bio-reactor provides optimal growth conditions for achieving the desired product. (C) Most commonly used bio-reactors are of stirring type. (D) Bio-reactors are used to produce small scale bacterial cultures.

183. The following diagram shows restriction sites in *E. coli* cloning vector pBR322. Find the role of 'X' and 'Y' genes:



(A) Gene 'X' is responsible for recognition sites and 'Y' is responsible for antibiotic resistance. (B) The gene 'X' is responsible for resistance to antibiotics and 'Y' for protein involved in the replication of plasmid. (C) The gene 'X' is responsible for controlling the copy number of the linked DNA and 'Y' for protein involved in the replication of plasmid. (D) The gene 'X' is for protein involved in replication of plasmid and 'Y' for resistance to antibiotics.

184. Match List I with List II:

List I		List II	
A.	Common cold	I.	<i>Plasmodium</i>
B.	Haemozoin	II.	Typhoid
C.	Widal test	III.	Rhinoviruses
D.	Allergy	IV.	Dust mites

Choose the correct answer from the options given below:

(A) A-IV, B-II, C-III, D-I (B) A-II, B-IV, C-III, D-I (C) A-I, B-III, C-II, D-IV (D) A-III, B-I, C-II, D-IV

185. Match List I with List II:

List I		List II	
A.	Axoneme	I.	Centriole
B.	Cartwheel pattern	II.	Cilia and flagella
C.	Crista	III.	Chromosome
D.	Satellite	IV.	Mitochondria

Choose the correct answer from the options given below:

(A) A-II, B-I, C-IV, D-III (B) A-IV, B-III, C-II, D-I (C) A-IV, B-II, C-III, D-I (D) A-II, B-IV, C-I, D-III

186. The following are the statements about non-chordates:

- A. Pharynx is perforated by gill slits.
- B. Notochord is absent.
- C. Central nervous system is dorsal.
- D. Heart is dorsal if present.
- E. Post anal tail is absent.

Choose the most appropriate answer from the options given below:

- (A) B, C & D only (B) A & C only (C) A, B & D only (D) B, D & E only

187. As per ABO blood grouping system, the blood group of father is B⁺, mother is A⁺ and child is O⁺. Their respective genotype can be

- A. $I^B i / I^A i i$
- B. $I^B I^B / I^A i i$
- C. $I^A I^B / I^A I^B$
- D. $I^A i / I^B i / I^A i$
- E. $i i / I^B I^A / I^A I^B$

Choose the most appropriate answer from the options given below:

- (A) D & E only (B) A only (C) B only (D) C & B only

188. Match List I with List II:

	List I		List II
A.	Mesozoic Era	I.	Lower invertebrates
B.	Proterozoic Era	II.	Fish & Amphibia
C.	Cenozoic Era	III.	Birds & Reptiles
D.	Paleozoic Era	IV.	Mammals

Choose the correct answer from the options given below:

- (A) A-III, B-I, C-IV, D-II (B) A-II, B-I, C-III, D-IV (C) A-III, B-I, C-II, D-IV (D) A-I, B-II, C-IV, D-III

189. Match List I with List II:

List I		List II	
A.	P wave	I.	Heart muscles are electrically silent.
B.	QRS complex	II.	Depolarisation of ventricles.
C.	T wave	III.	Depolarisation of atria.
D.	T-P gap	IV.	Repolarisation of ventricles.

Choose the correct answer from the options given below:

(A) A-IV, B-II, C-I, D-III (B) A-I, B-III, C-IV, D-II (C) A-III, B-II, C-IV, D-I (D) A-II, B-III, C-I, D-IV

190. Match List I with List II:

List I		List II	
A.	Exophthalmic goiter	III.	Hyper secretion of thyroid hormone & protruding eye balls.
B.	Acromegaly	IV.	Excessive secretion of growth hormone.
C.	Cushing's syndrome	I.	Excess secretion of cortisol, moon face & hyperglycemia.
D.	Cretinism	II.	Hypo-secretion of thyroid hormone and stunted growth.

Choose the correct answer from the options given below:

(A) A-III, B-IV, C-I, D-II (B) A-I, B-III, C-II, D-IV (C) A-IV, B-II, C-I, D-III (D) A-III, B-IV, C-II, D-I

191. Given below are two statements:

Statement I: Mitochondria and chloroplasts both are double membrane-bound organelles.

Statement II: Inner membrane of mitochondria is relatively less permeable, as compared to chloroplast.

In the light of the above statements, choose the most appropriate answer from the options given below:

(A) Statement I is incorrect but Statement II is correct. (B) Both Statement I and Statement II are correct. (C) Both Statement I and Statement II are incorrect. (D) Statement I is correct but Statement II is incorrect.

192. Regarding catalytic cycle of an enzyme action, select the correct sequential steps:

(A) Substrate enzyme complex formation. (B) Free enzyme ready to bind with another substrate. (C) Release of products. (D) Chemical bonds of the substrate broken. (E) Substrate binding to active site.

Choose the correct answer from the options given below:

[(1)] (A) E, D, C, B, A (B) E, A, D, C, B (C) A, E, B, D, C (D) B, A, C, D, E

193. Match List I with List II:

List I		List II	
A.	Unicellular glandular epithelium	I.	Salivary glands
B.	Compound epithelium	II.	Pancreas
C.	Multicellular glandular epithelium	III.	Goblet cells of alimentary canal
D.	Endocrine glandular epithelium	IV.	Moist surface of buccal cavity

Choose the correct answer from the options given below:

(A) A-II, B-I, C-IV, D-III (B) A-II, B-I, C-III, D-IV (C) A-IV, B-III, C-I, D-II (D) A-III, B-IV, C-I, D-II

194. Choose the correct statement given below regarding juxta medullary nephron.

(A) Juxta medullary nephrons outnumber the cortical nephrons. (B) Juxta medullary nephrons are located in the columns of Bertini. (C) Renal corpuscle of juxta medullary nephron lies in the outer portion of the renal medulla. (D) Loop of Henle of juxta medullary nephron runs deep into medulla.

195. Given below are two statements:

Statement I: Bone marrow is the main lymphoid organ where all blood cells including lymphocytes are produced.

Statement II: Both bone marrow and thymus provide micro environments for the development and maturation of T-lymphocytes.

In the light of the above statements, choose the most appropriate answer from the options given below:

(A) Statement I is incorrect but Statement II is correct. (B) Both Statement I and Statement II are correct. (C) Both Statement I and Statement II are incorrect. (D) Statement I is correct but Statement II is incorrect.

196. Match List I with List II related to the digestive system of cockroach:

List I		List II	
A.	The structures used for storing of food	I.	Gizzard
B.	Ring of 6-8 blind tubules at junction of foregut and midgut.	II.	Gastric Caeca
C.	Ring of 100-150 yellow coloured thin filaments at junction of midgut and hindgut.	III.	Malpighian tubules
D.	The structures used for grinding the food.	IV.	Crop

Choose the correct answer from the options given below:

(A) A-III, B-II, C-IV, D-I (B) A-IV, B-II, C-III, D-I (C) A-I, B-II, C-III, D-IV (D) A-IV, B-III, C-II, D-I

197. Given below are two statements:

Statement I: The cerebral hemispheres are connected by a nerve tract known as corpus callosum.

Statement II: The brain stem consists of the medulla oblongata, pons, and cerebrum.

In the light of the above statements, choose the most appropriate answer from the options given below:

(A) Statement I is incorrect but Statement II is correct. (B) Both Statement I and Statement II are correct. (C) Both Statement I and Statement II are incorrect. (D) Statement I is correct but Statement II is incorrect.

198. Given below are two statements:

Statement I: Gause's competitive exclusion principle states that two closely related species competing for different resources cannot exist indefinitely.

Statement II: According to Gause's principle, during competition, the inferior will be eliminated. This may be true if resources are limiting.

In the light of the above statements, choose the correct answer from the options given below:

[(A) Statement I is false but Statement II is true. (B) Both Statement I and Statement II are true. (C) Both Statement I and Statement II are false. (D) Statement I is true but Statement II is false.

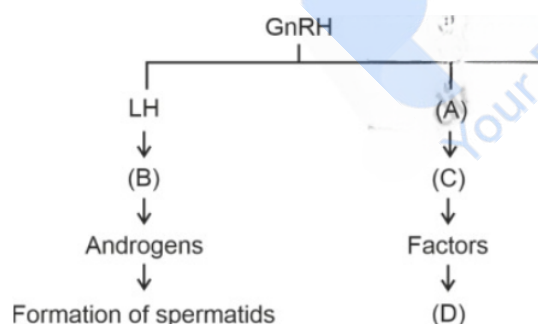
199. Match List I with List II:

List I		List II	
A.	RNA polymerase III	I.	snRNPs
B.	Termination of transcription	II.	Promotor
C.	Splicing of Exons	III.	Rho factor
D.	TATA box	IV.	SnRNAs, tRNA

Choose the correct answer from the options given below:

(A) A-IV, B-III, C-I, D-II (B) A-II, B-IV, C-I, D-III (C) A-III, B-II, C-IV, D-I (D) A-III, B-IV, C-I, D-II

200. Identify the correct option (A), (B), (C), (D) with respect to spermatogenesis.



Choose the correct answer from the options given below:

(A) ICSH, Leydig cells, Sertoli cells, spermatogenesis. (B) FSH, Leydig cells, Sertoli cells, spermiogenesis. (C) ICSH, Interstitial cells, Leydig cells, spermiogenesis. (D) FSH, Sertoli cells, Leydig cells, spermatogenesis.